



GOVT. OF NCT OF DELHI
Delhi Subordinate Services Selection Board
FC-18, Institutional Area, Karkardooma, Delhi – 110092.
www.dsssb.delhigovt.nic.in

Participant ID	
Participant Name	
Test Center Name	iON Digital Zone iDZ 1 Mathura Road
Test Date	18/08/2019
Test Time	8:30 AM - 10:30 AM
Subject	LOWER DIVISION CLERK

Section : Mental Ability1

Q.1 In a certain code language, 'BABY' is called as 'BLACK', 'BLACK' is called as 'RED', 'RED' is called as 'CAKE', 'CAKE' is called as 'TABLE', 'TABLE' is called as 'EYES'. What do we eat?

- Ans
- ☒ 1. RED
 - ☒ 2. EYES
 - ☒ 3. CAKE
 - ☒ 4. TABLE

Question ID : 5459276474

Q.2 A series is given with one term wrong. Select that wrong term from the given alternatives.

MHCW, PEFT, RBIQ, VYLN

- Ans
- ☒ 1. PEFT
 - ☒ 2. RBIQ
 - ☒ 3. VYLW
 - ☒ 4. MHCW

Question ID : 5459276467

Q.3 S1, S2, S3, S4, S5, S6 and S7 are seven students. S6 is taller than S5 but shorter than S4. S3 and S2 are shorter than S1. S5 is shorter than S3 but taller than S2. S2 is the shortest among them. S7 is shorter than S5. How many students are taller than S5?

- Ans
- ☒ 1. 2
 - ☒ 2. 5
 - ☒ 3. 4
 - ☒ 4. 3

Question ID : 5459276481

Q.4 In the following question, select the odd letter/letters from the given alternatives.

- Ans
- ☒ 1. GDB
 - ☒ 2. RPN

 3. WUS

 4. MKI

Question ID : 5459276468

Q.5 In a certain code language, 'TABLES' is written as 'SELBAT'. What is the code for 'CHAIRS' in that code language?

Ans  1. SCHAIR

 2. SRIHAC

 3. SRIAHC

 4. SRICHA

Question ID : 5459276476

Q.6 Six persons P, Q, R, S, T and U are sitting around a circular table facing towards the centre. P is third from U. Only U is between S and Q. R is to the immediate left of Q. Which of the following statement(s) is/are correct?

I. T is sitting to the immediate left of S.

II. Q is not sitting to the immediate left of U.

III. R is sitting to the immediate left of P.

IV. P is not sitting to the immediate left of T.

Ans  1. III and IV

 2. Only III

 3. I and II

 4. Only IV

Question ID : 5459276480

Q.7 In a certain code language, 'CAKE' is written as '100', 'GLOW' is written as '285'. What is the code for 'BACK' in that code language?

Ans  1. 105

 2. 95

 3. 75

 4. 85

Question ID : 5459276475

Q.8 In the following question, four letter pairs are given. The letters on left side of (–) is related to the letters on the right side of (–) with some Logic/Rule/Relation. Three are similar on basis of same Logic/Rule/Relation. Select the odd one out from the given alternatives.

Ans  1. ABCD – FGHI

 2. IJKL – NOPQ

 3. NPRT – SUVY

 4. RSTU – WXYZ

Question ID : 5459276470

Q.9 Six persons A, B, C, D, E and F are sitting around a circle facing towards the center. Only F is between B and D, Only E is between C and A. C is to the immediate right of B. Who is the neighbour of both A and F?

Ans  1. E

✓ 2. D

✗ 3. B

✗ 4. C

Question ID : 5459276477

Q.10 In the following question, select the odd word from the given alternatives.

Ans ✓ 1. Chess

✗ 2. Football

✗ 3. Cricket

✗ 4. Hockey

Question ID : 5459276469

Q.11 In the following question, select the related words from the given alternatives.

Clock : Time :: Thermometer : ?

Ans ✓ 1. Temperature

✗ 2. Energy

✗ 3. Radiation

✗ 4. Heat

Question ID : 5459276472

Q.12 If 'A' means '÷', 'B' means '×', 'C' means '+' and 'D' means '-', then 12 A 4 B 8 D 2 B 27 A 9 = ?

Ans ✓ 1. 18

✗ 2. 16

✗ 3. 12

✗ 4. 24

Question ID : 5459276484

Q.13 In the following question below are given some statements followed by some conclusions based on those statements. Taking the given statements to be true even if they seem to be at variance from commonly known facts. Read all the conclusions and then decide which of the given conclusion logically follows the given statements.

Statements:

I. All chairs are pens.

II. Some pens are cups.

III. All cups are pencils.

Conclusions:

I. Some pencils are pens.

II. All pencils are chairs.

III. All chairs are cups.

Ans ✗ 1. Both conclusion II and III follow

✓ 2. Only conclusion I follow

✗ 3. Both conclusion I and II follow

✗ 4. Only conclusion II follow

Question ID : 5459276483

Q.14 In the following question, select the related word pair from the given alternatives.

Erase : Rubber :: ?

- Ans
- ☒ 1. Clock : Time
 - ☒ 2. Pen : Write
 - ☒ 3. Cut : Pencil
 - ☒ 4. Eat : Spoon

Question ID : 5459276471

Q.15 A series is given with one term missing. Select the correct alternative from the given ones that will complete the series.

ABC, EFG, IJK, ?, QRS

- Ans
- ☒ 1. KLM
 - ☒ 2. MNP
 - ☒ 3. MNO
 - ☒ 4. LMN

Question ID : 5459276466

Q.16 In a group of five girls, Komal is the shortest while Lisa is the tallest. Rohini is taller than Komal but shorter than Veena. Priya is second shortest person girl in the group. Who is the second tallest girl of the group?

- Ans
- ☒ 1. Veena
 - ☒ 2. Lisa
 - ☒ 3. Rohini
 - ☒ 4. Priya

Question ID : 5459276479

Q.17 P, Q, R, S, T, U and V are seven boys. Height of U and V are equal. P is shorter than Q but taller than R. S is shorter than P but taller than R. T is shorter than Q but taller than P. U is taller than Q. How many boys are taller than P?

- Ans
- ☒ 1. 5
 - ☒ 2. 3
 - ☒ 3. 4
 - ☒ 4. 2

Question ID : 5459276478

Q.18 In the following question below are given some statements followed by some conclusions based on those statements. Taking the given statements to be true even if they seem to be at variance from commonly known facts. Read all the conclusions and then decide which of the given conclusion logically follows the given statements.

Statements:

- I. Some pens are tables.
- II. Some tables are chairs.

Conclusions:

- I. All tables are pens.
- II. Some pens are chairs.

- Ans
- ☒ 1. Neither conclusion follow

- ☒ 2. Only conclusion I follow
- ☒ 3. Both conclusion I and II follow
- ☒ 4. Only conclusion II follow

Question ID : 5459276482

Q.19 Arrange the given words in the sequence in which they occur in the dictionary.

- 1. Demanding
- 2. Democracy
- 3. Demystify
- 4. Demarcate
- 5. Decorate

- Ans
- ☒ 1. 52341
 - ☒ 2. 52314
 - ☒ 3. 51423
 - ☒ 4. 54123

Question ID : 5459276465

Q.20 In the following question, select the related letters from the given alternatives.

KPVA : PUAF :: BGLQ : ?

- Ans
- ☒ 1. BGLQ
 - ☒ 2. MRWC
 - ☒ 3. GLQV
 - ☒ 4. LGVQ

Question ID : 5459276473

Section : Mental Ability2

Q.1 In the following question, four number pairs are given. The number on left side of (–) is related to the number of the right side of (–) with some Logic/Rule/Relation. Three are similar on basis of same Logic/Rule/Relation. Select the odd one out from the given alternatives.

- Ans
- ☒ 1. 64 – 4097
 - ☒ 2. 38 – 1445
 - ☒ 3. 26 – 677
 - ☒ 4. 52 – 2707

Question ID : 5459276485

Q.2 In the following question, select the missing number from the given series.

2, 8, 18, 32, 50, ?

- Ans
- ☒ 1. 78
 - ☒ 2. 84
 - ☒ 3. 68
 - ☒ 4. 72

Q.3 Identify the diagram that best represents the relationship among the given classes.

Body, Eye, Retina

Ans



Question ID : 5459276494

Q.4 If $A * B = (A + B)(A - B)$, then $(12 * 7) * (11 * 8) = ?$

Ans

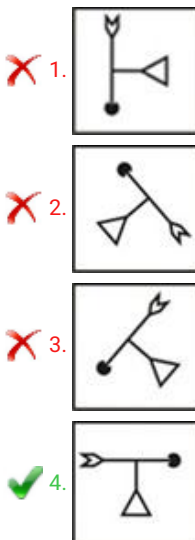
- ✗ 1. 5876
- ✓ 2. 5776
- ✗ 3. 4376
- ✗ 4. 3989

Question ID : 5459276493

Q.5 In the following question, select the wrong figure from the given series.

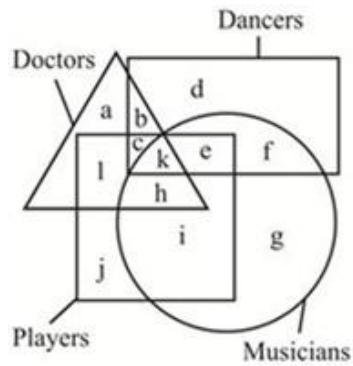


Ans



Question ID : 5459276500

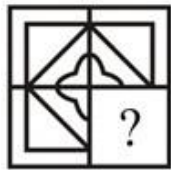
Q.6 In the given figure, Doctors who are musician and players but not dancers are indicated by which letter.



- Ans
- ☒ 1. i
 - ☒ 2. h
 - ☒ 3. l
 - ☒ 4. j

Question ID : 5459276495

Q.7 Which answer figure will complete the pattern in the question figure?



- Ans
- ☒ 1.
 - ☒ 2.
 - ☒ 3.
 - ☒ 4.

Question ID : 5459276502

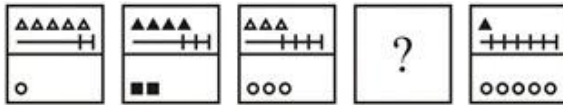
Q.8 In the following question, select the related number from the given alternatives.

134 : 512 :: 247 : ?

- Ans
- ☒ 1. 2197
 - ☒ 2. 1593
 - ☒ 3. 2395
 - ☒ 4. 1479

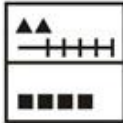
Question ID : 5459276487

Q.9 In the following question, select the figure which can be placed at the sign of question mark (?) from the given alternatives.



Ans

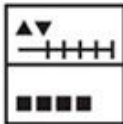
✓ 1.



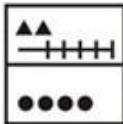
✗ 2.



✗ 3.



✗ 4.



Question ID : 5459276499

Q.10 In the following question, select the number which can be placed at the sign of question mark (?) from the given alternatives.

10	4
8	120

6	25
16	246

15	40
12	?

Ans

✗ 1. 860

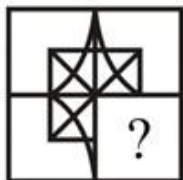
✗ 2. 420

✓ 3. 780

✗ 4. 360

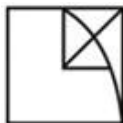
Question ID : 5459276490

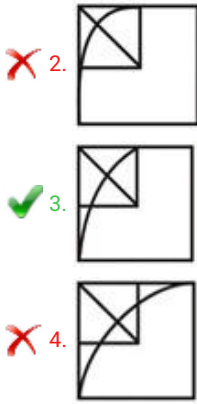
Q.11 Which answer figure will complete the pattern in the question figure?



Ans

✗ 1.





Question ID : 5459276501

Q.12 In the following question, four number pairs are given. The number on left side of (–) is related to the number of the right side of (–) with some Logic/Rule/Relation. Three are similar on basis of same Logic/Rule/Relation. Select the odd one out from the given alternatives.

- Ans
- ☒ 1. 12 – 1728
 - ☒ 2. 36 – 46656
 - ☒ 3. 21 – 9461
 - ☒ 4. 27 – 19683

Question ID : 5459276492

Q.13 If 'P' means '+', 'Q' means '–', 'R' means 'X' and 'S' means '÷', then 17 Q 3 R 48 S 16 P 12 Q 18 = ?

- Ans
- ☒ 1. 8
 - ☒ 2. 12
 - ☒ 3. 2
 - ☒ 4. 1

Question ID : 5459276489

Q.14 In the following question, select the missing number from the given series.

4, 10, 33, 136, ?

- Ans
- ☒ 1. 578
 - ☒ 2. 475
 - ☒ 3. 332
 - ☒ 4. 685

Question ID : 5459276488

Q.15 From the given answer figures, select the one in which the question figure is hidden/embedded.

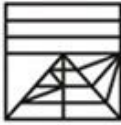


Ans

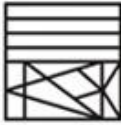
☒ 1.



☒ 2.



☒ 3.



☒ 4.



Question ID : 5459276504

Q.16 Sunil goes 12 km towards east and then he goes 10 km towards north. He again goes 12 km towards east. What is the straight line distance between final point and initial point?

Ans

☒ 1. 24 km

☒ 2. 28 km

☒ 3. 20 km

☒ 4. 26 km

Question ID : 5459276496

Q.17 Shashwat goes 15 metres towards south from a point P and then after turning to left he goes 8 metres. He again turns left and goes 30 metres. How far and in which direction is he now from his starting point?

Ans

☒ 1. 15 metres, South-east

☒ 2. 15 metres, North-east

☒ 3. 17 metres, North-west

☒ 4. 17 metres, North-east

Question ID : 5459276497

Q.18 In the following question, select the related number from the given alternatives.

426 : 576 :: 378 : ?

Ans

☒ 1. 2996


☒ 2. 3024

☒ 3. 632

☒ 4. 778

Question ID : 5459276491

Q.19 In the following question, select the figure which can be placed at the sign of question mark (?) from the given alternatives.



Ans

- ☒ 1.
- ☒ 2.
- ☒ 3.
- ☒ 4.

Question ID : 5459276498

Q.20 From the given answer figures, select the one in which the question figure is hidden/embedded.



Ans

- ☒ 1.
- ☒ 2.
- ☒ 3.
- ☒ 4.

Question ID : 5459276503

Section : General Awareness1

Q.1 Unit is _____.

- Ans
- ☒ 1. method of measurement
 - ☒ 2. the unknown quantity with respect to which something is measured

- ☒ 3. amount of measurement
- ☒ 4. the unknown quantity which is measured

Question ID : 5459276514

Q.2 Which of the following pair of Musician – Instrument is NOT correct?

- Ans ☒ 1. Shiv Kumar Sharma – Bansuri
- ☒ 2. Bismillah Khan – Shehnai
 - ☒ 3. Zakir Hussain – Tabla
 - ☒ 4. Ravi Shankar – Sitar

Question ID : 5459276508

Q.3 कुल _____ होने पर राजकोषीय नीति एक अधिशेष बनाती है।

- Ans ☒ 1. व्यय और कुल प्राप्तियाँ समान
- ☒ 2. प्राप्तियाँ व्यय से अधिक
 - ☒ 3. व्यय प्राप्तियों से अधिक
 - ☒ 4. प्राप्तियाँ और कुल व्यय बहुत कम

Question ID : 5459276511

Q.4 _____ is the rate of interest commercial banks have to pay to RBI if they borrow money from it in case of shortage of reserves.

- Ans ☒ 1. Statutory Liquidity Ratio
- ☒ 2. Cash Reserve Ratio
 - ☒ 3. Bank Rate
 - ☒ 4. Money Rate

Question ID : 5459276509

Q.5 निम्नलिखित में से किस जीव में प्रोकेरियोटिक कोशिका होती है?

- Ans ☒ 1. एककोशी (प्रोटोजोआ)
- ☒ 2. राईज़ोपस
 - ☒ 3. विषाणु
 - ☒ 4. नीले – हरे शैवाल

Question ID : 5459276517

Q.6 निम्नलिखित में से कौन सा अवशिष्ट पर्वत नहीं है?

- Ans ☒ 1. नीलगिरी पहाड़ियाँ
- ☒ 2. हिमालय
 - ☒ 3. अरावली
 - ☒ 4. राजमहल पहाड़ियाँ

Question ID : 5459276523

Q.7 मिट्टी की एक परत जो लगभग सतह के समानांतर होती है और इसमें मृदा के विशिष्ट गुण होते हैं उसे _____ के

नाम से जाना जाता है।

- Ans
- ☐ 1. ह्यूमस
 - ☐ 2. बेडरॉक
 - ☐ 3. अपशल्कन
 - ☒ 4. मृदा संस्तर

Question ID : 5459276522

Q.8 Endocrine glands are _____.

- I. Duct glands
II. Ductless glands

- Ans
- ☐ 1. Both I and II
 - ☐ 2. Only I
 - ☐ 3. Neither I nor II
 - ☒ 4. Only II

Question ID : 5459276519

Q.9 हिल पैलेस संग्रहालय _____ में स्थित है।

- Ans
- ☐ 1. उत्तराखंड
 - ☒ 2. केरल
 - ☐ 3. महाराष्ट्र
 - ☐ 4. हिमाचल प्रदेश

Question ID : 5459276506

Q.10 Which of the following state shares border with Nepal?

- Ans
- ☐ 1. Gujarat
 - ☐ 2. Tripura
 - ☒ 3. Uttar Pradesh
 - ☐ 4. Telangana

Question ID : 5459276524

Q.11 Choose the correct statement.

- I. Rayon is also known as Artificial silk.
II. Rayon and silk are natural fibres.
III. Rayon and Nylon are man – made fibres.
IV. Nylon is a man – made fibre.

- Ans
- ☐ 1. Only IV
 - ☒ 2. I, III and IV
 - ☐ 3. I and III
 - ☐ 4. I and II

Question ID : 5459276513

Q.12 Orange juice contains _____ acid due to which it tastes sour.

Ans

- ☒ 1. citric
- ☐ 2. oxalic
- ☐ 3. formic
- ☐ 4. acetic

Question ID : 5459276512

Q.13 Which of the following is formed by mixing iron with carbon, nickel and zinc?

- Ans
- ☐ 1. Steel
 - ☐ 2. German silver
 - ☒ 3. Stainless steel
 - ☐ 4. Bronze

Question ID : 5459276515

Q.14 An _____ is a solution in which the suspended particles are liquid droplets and the continuous phase is also a liquid. (The two phases are immiscible)

- Ans
- ☒ 1. Emulsion
 - ☐ 2. Agglomerate
 - ☐ 3. Gel
 - ☐ 4. Aerosol

Question ID : 5459276516

Q.15 Migrants who move into a new place are called _____.

- Ans
- ☐ 1. Sheltered
 - ☐ 2. Displaced
 - ☒ 3. Immigrants
 - ☐ 4. Emigrants

Question ID : 5459276521

Q.16 Ambubachi mela is a festival of which state?

- Ans
- ☒ 1. Assam
 - ☐ 2. Mizoram
 - ☐ 3. Sikkim
 - ☐ 4. Gujarat

Question ID : 5459276507

Q.17 Bryophyllum, reproduces by _____.

- Ans
- ☒ 1. vegetative propagation
 - ☐ 2. fragmentation
 - ☐ 3. budding
 - ☐ 4. spore formation

Question ID : 5459276518

Q.18 Jawara dance is related to _____ state.

- Ans
- ☐ 1. Karnataka
 - ☐ 2. Maharashtra
 - ☒ 3. Madhya Pradesh
 - ☐ 4. Andhra Pradesh

Question ID : 5459276505

Q.19 In Union Budget 2019, the government eased _____ to encourage start-ups in the country.

- Ans
- ☐ 1. Entertainment tax
 - ☐ 2. Corporate tax
 - ☒ 3. Angel Tax
 - ☐ 4. Luxury tax

Question ID : 5459276510

Q.20 Which of the following is also called 'Slash and Burn' agriculture?

- Ans
- ☐ 1. Plantation Agriculture
 - ☐ 2. Intensive Subsistence Agriculture
 - ☒ 3. Shifting Cultivation
 - ☐ 4. Primitive Subsistence Agriculture

Question ID : 5459276520

Section : General Awareness2

Q.1 National Doctor's day is observed every year on _____.

- Ans
- ☒ 1. 1st July
 - ☐ 2. 27th June
 - ☐ 3. 27th July
 - ☐ 4. 2nd July

Question ID : 5459276532

Q.2 "Lessons Life Taught Me Unknowingly" is an autobiography of which actor?

- Ans
- ☒ 1. Anupam Kher
 - ☐ 2. Boney Kapoor
 - ☐ 3. Rakesh Roshan
 - ☐ 4. Rishi Kapoor

Question ID : 5459276534

Q.3 The First Battle of Tarain was fought between Mohammad Ghori and _____.

- Ans
- ☐ 1. Rana Pratap Singh

- ☒ 2. Prithviraj Chauhan
- ☐ 3. Maharaja Hari Singh
- ☐ 4. Jai Singh

Question ID : 5459276531

Q.4 Who was appointed as president of World Bank in April, 2019?

- Ans
- ☐ 1. Ivanka Trump
 - ☒ 2. David Malpass
 - ☐ 3. Jim Yong Kim
 - ☐ 4. Anshula Kant

Question ID : 5459276533

Q.5 भारतीय संविधान की किस अनुसूची में राज्यों की परिषद में स्थानों के आवंटन का उल्लेख है?

- Ans
- ☐ 1. दसवीं अनुसूची
 - ☐ 2. दूसरी अनुसूची
 - ☐ 3. नवीं अनुसूची
 - ☒ 4. चौथी अनुसूची

Question ID : 5459276538

Q.6 How many medals did India win in the 2018 Commonwealth Games?

- Ans
- ☐ 1. 73
 - ☒ 2. 66
 - ☐ 3. 60
 - ☐ 4. 52

Question ID : 5459276542

Q.7 Emergency Provisions are contained in which Part of the Constitution of India?

- Ans
- ☐ 1. Part X
 - ☐ 2. Part I
 - ☐ 3. Part XX
 - ☒ 4. Part XVIII

Question ID : 5459276539

Q.8 Which of the following material was used during Harappan Civilization?

- I. Plastic
- II. Teracotta
- III. Rubber

- Ans
- ☐ 1. I and II
 - ☐ 2. II and III
 - ☐ 3. Only III
 - ☒ 4. Only II

Question ID : 5459276528

Q.9 What does Article 42 of the Indian Constitution deals with?

- Ans**
- ☒ 1. Provisions for just and humane conditions of work and maternity relief.
 - ☐ 2. Protection of life and personal liberty.
 - ☐ 3. Fundamental rights
 - ☐ 4. Uniform civil code for the citizen.

Question ID : 5459276541

Q.10 Which of the following pair of player – game is not correct?

- Ans**
- ☐ 1. Saina Nehwal – Badminton
 - ☐ 2. Vikas Krishan – Boxing
 - ☒ 3. Hussamuddin Mohammed – Hockey
 - ☐ 4. Sharath Kamal – Tennis

Question ID : 5459276543

Q.11 Russia honored _____ in 2019 with 'Order of St Andrew the Apostle'.

- Ans**
- ☐ 1. Piyush Goyal
 - ☒ 2. Narendra Modi
 - ☐ 3. Raj Nath Kovind
 - ☐ 4. Venkaiah Naidu

Question ID : 5459276535

Q.12 The Hoysala dynasty was associated with which state?

- Ans**
- ☒ 1. Karnataka
 - ☐ 2. Gujarat
 - ☐ 3. Tamil Nadu
 - ☐ 4. Madhya Pradesh

Question ID : 5459276530

Q.13 The novel "Milkman" is written by _____.

- Ans**
- ☐ 1. Arundhati Roy
 - ☐ 2. Salman Rushdie
 - ☒ 3. Anna Burns
 - ☐ 4. Kiran Desai

Question ID : 5459276537

Q.14 Who gave the slogan of 'Do or Die'?

- Ans**
- ☒ 1. Mahatma Gandhi
 - ☐ 2. Bal Gangadhar Tilak
 - ☐ 3. Bhagat Singh

 4. Subhash Chandra Bose





Question ID : 5459276527

Q.15 अप्रैल 1916 में होम रूल लीग की स्थापना किसने की थी?

- Ans  1. सावित्रीबाई फुले
 2. एनी बेसेंट
 3. लक्ष्मी सहगल
 4. सरोजिनी नायडू

Question ID : 5459276529

Q.16 'Harmika', a balcony-like structure that represented the abode of God was part of which architecture?

- Ans  1. Buddhist
 2. Mauryan
 3. Mughal
 4. Jainism

Question ID : 5459276526

Q.17 Which actor was awarded the Dadasaheb Phalke Award 2018?

- Ans  1. Amitabh Bachchan
 2. Vinod Khanna
 3. Sanjay Dutt
 4. Anupam Kher

Question ID : 5459276536

Q.18 2022 Commonwealth Games will be held in which country?

- Ans  1. Australia
 2. India
 3. Indonesia
 4. England

Question ID : 5459276544

Q.19 Through which amendment act municipalities were introduced in India?

- Ans  1. 53rd Amendment Act, 1986
 2. 74th Amendment Act, 1992
 3. 70th Amendment Act, 1992
 4. 52nd Amendment Act, 1985

Question ID : 5459276540

Q.20 भारत में स्थानांतरण (प्रवास) के मुख्य कारक क्या हैं?

I. गरीबी

II. स्वास्थ्य सेवा

III. शिक्षा

- Ans
- ☒ 1. I तथा III
 - ☒ 2. II तथा III
 - ☒ 3. I, II तथा III
 - ☒ 4. I तथा II

Question ID : 5459276525

Section : Arithmetic Ability1

Q.1 Which of the following statement(s) is/are correct?

I. $(3/11) > 0.3$

II. $(7/8) > 0.86$

- Ans
- ☒ 1. Both I and II
 - ☒ 2. Neither I nor II
 - ☒ 3. Only II
 - ☒ 4. Only I

Question ID : 5459276552

Q.2

$$\text{If } X = \frac{1}{3} + \frac{1}{15} + \frac{1}{35} + \frac{1}{63} \text{ and } Y = \frac{1}{2} + \frac{1}{6} + \frac{1}{12} + \frac{1}{20}$$

- Ans
- ☒ 1. 36/45
 - ☒ 2. 31/45
 - ☒ 3. 32/45
 - ☒ 4. 4/45

Question ID : 5459276554

Q.3 Number J is firstly increased by 40% and then it is decreased by 30%. Final value of J is what percentage of initial value of J?

- Ans
- ☒ 1. 104 percent
 - ☒ 2. 102 percent
 - ☒ 3. 82 percent
 - ☒ 4. 98 percent

Question ID : 5459276559

Q.4




$$(4.7 + 2.1)^2 - (4.7 - 2.1)^2$$

- Ans
- ☒ 1. 37.18
 - ☒ 2. 39.48
 - ☒ 3. 42.18

 4. 36.48

Question ID : 5459276546

Q.5 If B1 is 75% of B2, then B2 is what percentage of B1?

- Ans  1. 130%
 2. 125%
 3. 133.33%
 4. 116.67%

Question ID : 5459276558

Q.6 How many numbers are there from 32 to 333 which are divisible by both 3 and 4 but not by 5?

- Ans  1. 18
 2. 19
 3. 21
 4. 20

Question ID : 5459276548

Q.7

$$\frac{(5.17 - 2.19)^2 - (5.17 + 2.19)^2}{11.3223}$$

- Ans  1. $-1/4$
 2. -4
 3. 4
 4. $1/4$

Question ID : 5459276553

Q.8




$$\frac{\sqrt{81} + \sqrt[3]{0.027} + \sqrt[4]{0.0081}}{\sqrt{9} + \sqrt[3]{0.729} + \sqrt[4]{0.6561}}$$

- Ans  1. 2
 2. 1
 3. $1/2$
 4. 4

Question ID : 5459276547

Q.9

If $A = (3.1)^2 - (2.2)^2$ and $B = (2.2)^2 - (3.1)^2$

- Ans  1. 9.54
 2. 3.27
 3. 6.32

 4.0


Question ID : 5459276551

Q.10 M1 is 30% more than M2. M2 is 50% more than M3. M3 is 40% less than M4. M1 is what percentage of M4?

- Ans  1. 87 percent
 2. 94 percent
 3. 130 percent
 4. 117 percent

Question ID : 5459276560

Q.11
$$\frac{(0.73)^3 + (0.31)^3}{(0.73)^2 - 0.73 \times 0.31 + (0.31)^2}$$

- Ans  1. 1.04
 2. 2.14
 3. 1.01
 4. 1.08

Question ID : 5459276545

Q.12 Anil sells a pen at a loss of 35%. If he had sold the pen for Rs 240 more, then he would have a loss of 20%. To gain profit of 40%, what should be the selling price of the pen?

- Ans  1. Rs 3240
 2. Rs 2240
 3. Rs 2460
 4. Rs 2340




Question ID : 5459276563

Q.13 What is the sum of the average of first 19 natural numbers and the average of first 6 positive odd numbers?

- Ans  1. 17
 2. 19
 3. 18
 4. 16

Question ID : 5459276557

Q.14 If $A = \frac{1}{30} + \frac{1}{20} + \frac{1}{42}$ and $B = \frac{1}{56} + \frac{1}{72} + \frac{1}{90}$

- Ans  1. 21/140
 2. 21/160
 3. 23/150

✗ 4. 23/140

Question ID : 5459276549

Q.15 The cost price of a bat is $\frac{5}{6}$ of the marked price. What will be the gain/loss percentage after allowing a discount of 30% on the marked price?

- Ans
- ✗ 1. 24% profit
 - ✗ 2. 24% loss
 - ✗ 3. 16% profit
 - ✓ 4. 16% loss

Question ID : 5459276556

Q.16 The ratio of marked price to the selling price of a article is 5 : 2. What is the discount percentage?

- Ans
- ✗ 1. 40 percent
 - ✗ 2. 30 percent
 - ✓ 3. 60 percent
 - ✗ 4. 50 percent

Question ID : 5459276555

Q.17 The selling price of an article is Rs 960 and profit earned on it is 50%. If the new profit percentage is 30%, then what will be the selling price of the article?

- Ans
- ✓ 1. Rs 832
 - ✗ 2. Rs 844
 - ✗ 3. Rs 736
 - ✗ 4. Rs 748

Question ID : 5459276562

Q.18 The ratio of age of two person A and B is 3 : 4. If the sum of their ages is 56, then what is the age of B?

- Ans
- ✗ 1. 24 years
 - ✓ 2. 32 years
 - ✗ 3. 22 years
 - ✗ 4. 36 years

Question ID : 5459276564

Q.19 Ram sold a table at Rs 960. On selling this table, he earned a profit of Rs 160. What is the profit percentage?

- Ans
- ✓ 1. 20 percent
 - ✗ 2. 25 percent
 - ✗ 3. 33.33 percent
 - ✗ 4. 16.66 percent

Question ID : 5459276561

Q.20 If $A = 5\frac{1}{2} + 7\frac{3}{4} - 2\frac{1}{4}$ and $B = 11\frac{1}{4} - 3\frac{1}{2} - 5\frac{3}{4}$, then what is the value of $A^2 + B^2$?

- Ans
- ☒ 1. 145
 - ☒ 2. 150
 - ☒ 3. 125
 - ☒ 4. 130

Question ID : 5459276550

Section : Arithmetic Ability2

Q.1 Rs 6000 becomes Rs 8340 in K years at simple interest. If rate of interest is 13% per annum, then what is the value of K?

- Ans
- ☒ 1. 2
 - ☒ 2. 4
 - ☒ 3. 3
 - ☒ 4. 5

Question ID : 5459276567

Q.2 The pie chart given below shows the number of movies released on different weekends of a month. The number is shown as a percentage of total movies released in the month.



If the total number of movies released in the month are 200, then the number of movies released in W4 is how much more than the movies released in W1?

- Ans
- ☒ 1. 16
 - ☒ 2. 12
 - ☒ 3. 8
 - ☒ 4. 20

Question ID : 5459276579

Q.3 A car has to travel 250 km in 30 hours. It covers $\frac{1}{5}$ part of the journey in $\frac{1}{6}$ time. What should be its speed for the remaining journey to reach on time?

- Ans
- ☒ 1. 10 km/hr
 - ☒ 2. 8 km/hr
 - ☒ 3. 12 km/hr
 - ☒ 4. 15 km/hr

Question ID : 5459276572

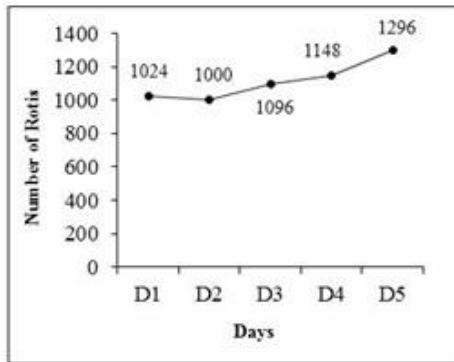
Q.4 Two cubes each of edge 24 cm are combined to form a single cuboid. What is the volume of the new cuboid?

Ans

- ☐ 1. 17688 cm²
- ☒ 2. 27648 cm²
- ☐ 3. 25678 cm²
- ☐ 4. 13824 cm²

Question ID : 5459276577

Q.5 The line graph given below shows the number of rotis made by a rotimaker in a hotel on different days.



The rotis made on D5 is what percent more than the rotis made on D1?

Ans

- ☒ 1. 0.2656
- ☐ 2. 0.2456
- ☐ 3. 0.2256
- ☐ 4. 0.1856

Question ID : 5459276584

Q.6 A sum of money becomes Rs 39930 in 3 years and Rs 36300 in 2 years when kept at compound interest (compounding annually). What is the sum?

Ans

- ☐ 1. Rs 34000
- ☐ 2. Rs 28000
- ☐ 3. Rs 32000
- ☒ 4. Rs 30000

Question ID : 5459276569

Q.7 A can complete a work alone in 8 days. B can complete the same work alone in 12 days. C alone complete the same work in 16 days. They complete the work in 3 days with the help of D. If they get Rs 12000 for the work, then how much money does the D get?

Ans

- ☐ 1. Rs 2500
- ☐ 2. Rs 2750
- ☒ 3. Rs 2250
- ☐ 4. Rs 3000

Question ID : 5459276575

Q.8 The table given below shows the number of questions in different sets.

Set	Number of questions
S1	54
S2	56
S3	60
S4	62
S5	66
S6	72

The number of questions in set 1 is how much percent less than the number of questions in set 4?

- Ans
- ☒ 1. 14.9 percent
 - ☒ 2. 10.9 percent
 - ☒ 3. 0.169
 - ☒ 4. 12.9 percent

Question ID : 5459276581

Q.9 100 men can make 60 chairs in 4 days working 2 hours a day. How many men are required to make 120 chairs in 10 days working 4 hours a day?

- Ans
- ☒ 1. 34 men
 - ☒ 2. 40 men
 - ☒ 3. 30 men
 - ☒ 4. 28 men

Question ID : 5459276574

Q.10 The length, breadth and height of a cuboid is 12 cm, 9 cm and 8 cm respectively. What is the length of the longest diagonal of the cuboid?

- Ans
- ☒ 1. 16 cm
 - ☒ 2. 13 cm
 - ☒ 3. 17 cm
 - ☒ 4. 14.5 cm

Question ID : 5459276576

Q.11 Rs 20000 are kept at simple interest in 2 parts. One part is kept at a rate of 8% per annum and the other part is kept at a rate of 15% per annum. If the total interest for 3 years is Rs 6480, then what is the value of the 2 parts?

- Ans
- ☒ 1. Rs 12000, Rs 8000
 - ☒ 2. Rs 16000, Rs 5000
 - ☒ 3. Rs 10000, Rs 10000
 - ☒ 4. Rs 14000, Rs 6000

Question ID : 5459276568

Q.12 The salaries of P, Q and R are in the ratio 3 : 5 : 8. If their salaries are increased by 20%, 20% and 5% respectively, then what will be the ratio of their increased salaries?

- Ans
- ☒ 1. 3 : 6 : 8

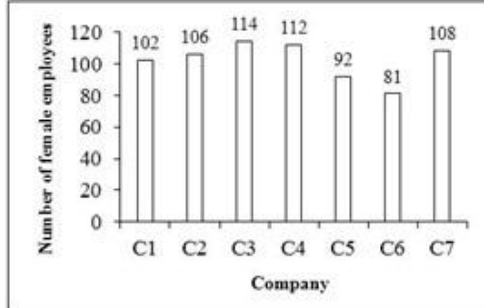
☐ 2. 1 : 4 : 7

☒ 3. 3 : 5 : 7

☐ 4. 1 : 2 : 4

Question ID : 5459276565

Q.13 The bar graph given below shows the number of female employees in different companies.



The number of female employees in C7 is how much percent more than the female employees in C5?

Ans ☐ 1. 0.2639

☒ 2. 0.1739

☐ 3. 0.2039

☐ 4. 0.2339

Question ID : 5459276583

Q.14 Vikram's efficiency is 300% of Kushal's efficiency. If Vikram can complete a piece of work in 100 hours, then how much time will they take working together to complete the same work?

Ans ☒ 1. 75 hours

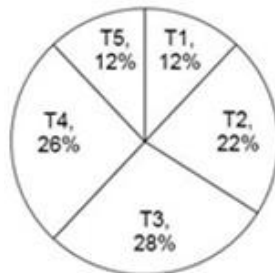
☐ 2. 45 hours

☐ 3. 50 hours

☐ 4. 60 hours

Question ID : 5459276573

Q.15 The pie chart given below shows the expenses of family on different things. The expenses are shown as a percentage of total expenses of the family.



What is the difference in central angle made by sector for T1 and T3?

Ans ☐ 1. 77.6°

☒ 2. 57.6°

☐ 3. 87.6°

✗ 4. 67.6°

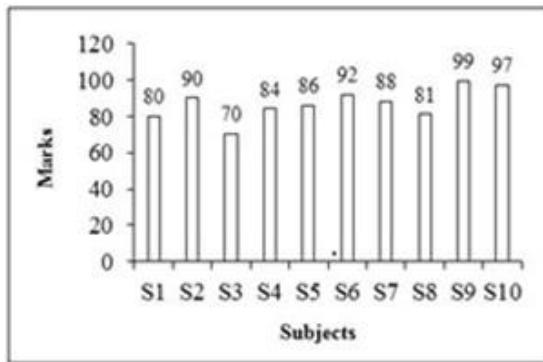
Question ID : 5459276580

Q.16 The speed of a boat in still water is 18 km/hr. If the speed of stream is 4 km/hr, then how much time will it take to cover a distance of 44 km in downstream?

- Ans
- ✗ 1. 4 hours
 - ✗ 2. 5 hours
 - ✗ 3. 3 hours
 - ✓ 4. 2 hours

Question ID : 5459276570

Q.17 The bar graph given below shows the marks obtained by a student in different subjects.

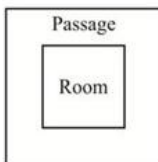


What are the average marks obtained by student per subject?

- Ans
- ✗ 1. 82.7
 - ✓ 2. 86.7
 - ✗ 3. 87.7
 - ✗ 4. 84.7

Question ID : 5459276582

Q.18 A square room is surrounded by a passage of width 4 metres as shown in the figure. If the area of the passage is 128 m^2 , then what is the area of the room?



- Ans
- ✗ 1. 64 m^2
 - ✗ 2. 36 m^2
 - ✗ 3. 24 m^2
 - ✓ 4. 16 m^2

Question ID : 5459276578

Q.19 A bag contains Rs 420 in the form of 5 rupee, 2 rupee and 1 rupee coins. The number of

coins of 5 rupee, 2 rupee and 1 rupee are in the ratio of 2 : 3 : 5. What is the total number of coins in the bag?

- Ans
- ☐ 1. 240
 - ☐ 2. 260
 - ☐ 3. 250
 - ☒ 4. 200

Question ID : 5459276566

Q.20 A bus is travelling at the speed of 81 km/hr. How much time will the bus take to cover a distance of $9\frac{1}{2}$ km?

- Ans
- ☐ 1. 240 seconds
 - ☐ 2. 270 seconds
 - ☐ 3. 180 seconds
 - ☒ 4. 200 seconds

Question ID : 5459276571

Section : General English1

Q.1 Find the part of the given sentence that has an error in it. If there is no error, choose 'No error'.

I told the boys (1) / that they should (2) / do ours duty (3) / No error (4)

- Ans
- ☒ 1. 3
 - ☐ 2. 4
 - ☐ 3. 2
 - ☐ 4. 1

Question ID : 5459276587

Q.2 A sentence has been given with a blank to be filled with an appropriate word. Choose the correct alternative.

I hate _____ things.

- Ans
- ☒ 1. such
 - ☐ 2. each
 - ☐ 3. all
 - ☐ 4. every

Question ID : 5459276599

Q.3 Find the part of the given sentence that has an error in it. If there is no error, choose 'No error'.

She did not (1) / tell me what (2) / her plans are (3) / . No error (4)

- Ans
- ☒ 1. 3
 - ☐ 2. 4
 - ☐ 3. 1
 - ☐ 4. 2

Question ID : 5459276588

Q.4 A sentence has been given with a blank to be filled with an appropriate word. Choose the correct alternative.

He did not eat ____ rice.

- Ans
- ☐ 1. several
 - ☐ 2. must
 - ☒ 3. any
 - ☐ 4. no

Question ID : 5459276602

Q.5 The question below consists of a set of labeled sentences. Out of the four options given, select the most logical order of the sentences to form a coherent paragraph.

P: said that more things

Q: therefore it is rightly

R: the world of dreams

S: are wrought by prayer than

- Ans
- ☐ 1. PQRS
 - ☒ 2. QPSR
 - ☐ 3. SRQP
 - ☐ 4. QRSP

Question ID : 5459276604

Q.6 You are abstained (to speak) ill of others.

- Ans
- ☐ 1. of speak
 - ☒ 2. from speaking
 - ☐ 3. to speaking
 - ☐ 4. No Improvement

Question ID : 5459276593

Q.7 A sentence has been given with a blank to be filled with an appropriate word. Choose the correct alternative.

He comes here ____ day.

- Ans
- ☐ 1. few
 - ☐ 2. all
 - ☐ 3. much
 - ☒ 4. every

Question ID : 5459276596

Q.8 Improve the bracketed part of the sentence.

He (works hard) succeeds.

- Ans
- ☐ 1. No Improvement
 - ☒ 2. who works hard

☒ 3. work hard

☒ 4. who will work hard

Question ID : 5459276594

Q.9 Find the part of the given sentence that has an error in it. If there is no error, choose 'No error'.

The master taught (1) the boys that (2) / honesty was the best policy (3) /. No error (4)

Ans ☒ 1. 4

☒ 2. 2

☒ 3. 1

☒ 4. 3

Question ID : 5459276589

Q.10 A sentence has been given with a blank to be filled with an appropriate word. Choose the correct alternative.

The child fell _____ from a great height.

Ans ☒ 1. under

☒ 2. over

☒ 3. up

☒ 4. down

Question ID : 5459276597

Q.11 A sentence has been given with a blank to be filled with an appropriate word. Choose the correct alternative.

This boy is stronger _____ Harsh.

Ans ☒ 1. than

☒ 2. then

☒ 3. that

☒ 4. this

Question ID : 5459276595

Q.12 A sentence has been given with a blank to be filled with an appropriate word. Choose the correct alternative.

The father showed _____ patience.

Ans ☒ 1. any

☒ 2. whole

☒ 3. few

☒ 4. much

Question ID : 5459276601

Q.13 Find the part of the given sentence that has an error in it. If there is no error, choose 'No error'.

The teacher (1) / said that he (2) / was busy then (3) /. No error (4)

- Ans  1. 1
 2. 3
 3. 4
 4. 2

Question ID : 5459276585

Q.14 The question below consists of a set of labeled sentences. Out of the four options given, select the most logical order of the sentences to form a coherent paragraph.





P: the journey towards
 Q: landing on the moon
 R: the moon was more
 S: thrilling than the

- Ans  1. SRQP
 2. PRSQ
 3. PQRS
 4. SQRP

Question ID : 5459276603

Q.15 Improve the bracketed part of the sentence.

The stranger asked the little girl (what her name was).

- Ans  1. No Improvement
 2. what her name is
 3. what is her name
 4. what was her name

Question ID : 5459276592

Q.16 Find the part of the given sentence that has an error in it. If there is no error, choose 'No error'.

Rama told the (1) / girl that he know (2) / her and her aunt (3) /. No error (4)

- Ans  1. 3
 2. 2
 3. 1
 4. 4

Question ID : 5459276586

Q.17 Improve the bracketed part of the sentence.

(Their) shoes are mine.

- Ans  1. Them
 2. Those
 3. No Improvement
 4. That

Question ID : 5459276591

Q.18 A sentence has been given with a blank to be filled with an appropriate word. Choose the correct alternative.

Every man has _____ duties.

- Ans
- ☒ 1. her
 - ☒ 2. him
 - ☒ 3. his
 - ☒ 4. himself

Question ID : 5459276598

Q.19 A sentence has been given with a blank to be filled with an appropriate word. Choose the correct alternative.

You _____ no sense.

- Ans
- ☒ 1. are
 - ☒ 2. were
 - ☒ 3. has
 - ☒ 4. have

Question ID : 5459276600

Q.20 Improve the bracketed part of the sentence.

Bonded labour (has been) now almost a thing of the past.

- Ans
- ☒ 1. was
 - ☒ 2. is
 - ☒ 3. No Improvement
 - ☒ 4. had been

Question ID : 5459276590

Section : General English2

Q.1 In the following question, out of the given four alternatives, select the alternative which best expresses the meaning of the Idiom/Phrase.

In the prime of life

- Ans
- ☒ 1. In the best period of life
 - ☒ 2. At open enmity
 - ☒ 3. In writing
 - ☒ 4. Blood relations

Question ID : 5459276616

Q.2 The question below consists of a set of labeled sentences. Out of the four options given, select the most logical order of the sentences to form a coherent paragraph.

P: human life is a tale of errors and follies.

Q: we all commit errors and mistakes out of ignorance or inexperience

R: nobody is infallible.





S: in the process of acquiring experience, man often stumbles and falls down.

- Ans  1. PRQS
 2. PSQR
 3. RSPQ
 4. PQRS

Question ID : 5459276605

Q.3 In the following question, out of the given four alternatives, select the alternative which best expresses the meaning of the Idiom/Phrase.

In a fix

- Ans  1. In a difficult position
 2. Definitely
 3. With all one's energy
 4. In an indirect way

Question ID : 5459276615

Q.4 Choose the word that is opposite in meaning to the given word.





Persist

- Ans  1. Cease
 2. Demur
 3. Falter
 4. Dismantle

Question ID : 5459276607

Q.5 In the following question, out of the given four alternatives, select the alternative which best expresses the meaning of the Idiom/Phrase.




In no time

- Ans  1. Tasteless
 2. Very soon
 3. Dominating
 4. In search of

Question ID : 5459276614

Q.6 Choose the word that can substitute the given sentence.

Release someone from duty or obligation

- Ans  1. Promotion
 2. Appointment
 3. Exonerate
 4. Joining

Question ID : 5459276617

Q.7 Choose the word that can substitute the given sentence.

Certain to happen

- Ans ☒ 1. Inevitable
☐ 2. Distant
☐ 3. Infallible
☐ 4. Indelible

Question ID : 5459276619

Q.8 Choose the word that can substitute the given sentence.

The arrangement of events in order of their occurrence

- Ans ☐ 1. Randomly
☐ 2. Anecdote
☒ 3. Chronology
☐ 4. Blasphemy

Question ID : 5459276618

Q.9 Choose the word that means the same as the given word.

Abnormal

- Ans ☐ 1. Typical
☐ 2. Normal
☒ 3. Strange
☐ 4. Conforming

Question ID : 5459276606

Q.10 In the given question, four words are given out of which one word is correctly spelt. Choose the correctly spelt word.

- Ans ☐ 1. Exhilerate
☐ 2. Axhilerate
☐ 3. Exhelerate
☒ 4. Exhilarate

Question ID : 5459276613

Q.11 Choose the word that means the same as the given word.

Appetizing

- Ans ☒ 1. Pleasing
☐ 2. Tedious
☐ 3. Melting
☐ 4. Repulsive

Question ID : 5459276609

Q.12 In the given question, four words are given out of which one word is correctly spelt. Choose the correctly spelt word.

- Ans ☒ 1. Conscience

- ☒ 2. Concinse
- ☒ 3. Concinse
- ☒ 4. Caunscience

Question ID : 5459276611

Q.13 Choose the word that means the same as the given word.

Feud

- Ans**
- ☒ 1. Harmony
 - ☒ 2. Calmness
 - ☒ 3. Strife
 - ☒ 4. Peace

Question ID : 5459276608

Q.14 Choose the word that is opposite in meaning to the given word.

Deceit

- Ans**
- ☒ 1. Hatred
 - ☒ 2. Treachery
 - ☒ 3. Fraud
 - ☒ 4. Honesty

Question ID : 5459276610

Q.15 In the given question, four words are given out of which one word is correctly spelt. Choose the correctly spelt word.

- Ans**
- ☒ 1. Definitaly
 - ☒ 2. Definatly
 - ☒ 3. Definitly
 - ☒ 4. Definately

Question ID : 5459276612

Comprehension:

Read the following information carefully and answer the given questions.

There are two main approaches to the understanding of the new ethnic phenomenon. The pre-mordialist approach to ethnicity and ethnic identities considers common descent activated more easily than rational principles and organization founded upon them. The other approach is variously known as situational, subjectivist, or instrumental. Its main emphasis is on group members perceptions of being different from others and on the implications of this for that group's present status or predicament and for its prospects for the future.

These contending approaches are an aid to an explication of issues and to the undertaking of contemporary reality but they do not offer any final answers. They are often no more than exercises in the reconstruction of the past; the definition and redefinition of the situations to explain the present and stratagems and strategies for achieving the desired future. Ethnicity transcends the known boundaries of state, religion, sect, and class. It seeks to fragment established nationalities and communities and create a new one using ethnic indicators. It involves symbols -old as well as newly created- and their manipulation by competing elites. The symbolic and cultural aspects of ethnicity are important in themselves; and they often get politicized because, in the final analysis, most ethnic conflicts are demands for a larger share of economic resources and products, and for a greater part in decision-making processes. Given identities can be questioned by individuals and groups, and their actions can result in the formation of new identities and symbol systems associated with the articulation of new

interests. Ethnicity may thus lead to the redefinition of Social and cultural boundaries. Ethnic aspirations and urges have a quick silver quality, they need to be consistent and firm. This is explained by the quality of leadership of several ethnic movements. A section of the established elite may be behind them, but the elite can be pushed aside and the leadership taken over by arms wielding elements of diverse origins.

SubQuestion No : 16

Q.16 Why ethnicity needs a quality leadership?

- Ans
- ☒ 1. No option is correct
 - ☒ 2. Both a and b
 - ☒ 3. Leadership does not have any role in ethnic movement
 - ☒ 4. A quality leadership can check the arms rebellion within

Question ID : 5459276625

Comprehension:

Read the following information carefully and answer the given questions.

There are two main approaches to the understanding of the new ethnic phenomenon. The primordialist approach to ethnicity and ethnic identities considers common descent activated more easily than rational principles and organization founded upon them. The other approach is variously known as situational, subjectivist, or instrumental. Its main emphasis is on group members perceptions of being different from others and on the implications of this for that group's present status or predicament and for its prospects for the future. These contending approaches are an aid to an explication of issues and to the undertaking of contemporary reality but they do not offer any final answers. They are often no more than exercises in the reconstruction of the past; the definition and redefinition of the situations to explain the present and stratagems and strategies for achieving the desired future. Ethnicity transcends the known boundaries of state, religion, sect, and class. It seeks to fragment established nationalities and communities and create a new one using ethnic indicators. It involves symbols -old as well as newly created- and their manipulation by competing elites. The symbolic and cultural aspects of ethnicity are important in themselves; and they often get politicized because, in the final analysis, most ethnic conflicts are demands for a larger share of economic resources and products, and for a greater part in decision-making processes. Given identities can be questioned by individuals and groups, and their actions can result in the formation of new identities and symbol systems associated with the articulation of new interests. Ethnicity may thus lead to the redefinition of Social and cultural boundaries. Ethnic aspirations and urges have a quick silver quality, they need to be consistent and firm. This is explained by the quality of leadership of several ethnic movements. A section of the established elite may be behind them, but the elite can be pushed aside and the leadership taken over by arms wielding elements of diverse origins.

SubQuestion No : 17

Q.17 The author shows how ethnicity transcends known boundaries and fragments nationalities by:

- Ans
- ☒ 1. No option is correct
 - ☒ 2. The formation of new identities and symbols which help in the articulation of new interests
 - ☒ 3. By clinging to old ethnic indicators only
 - ☒ 4. Taking a consistent and firm stand on ethnic issues

Question ID : 5459276624

Comprehension:





Read the following information carefully and answer the given questions.

There are two main approaches to the understanding of the new ethnic phenomenon. The primordialist approach to ethnicity and ethnic identities considers common descent activated more easily than rational principles and organization founded upon them. The other approach is variously known as situational, subjectivist, or instrumental. Its main emphasis is on group members perceptions of being different from others and on the implications of this for that group's present status or predicament and for its prospects for the future. These contending approaches are an aid to an explication of issues and to the undertaking of contemporary reality but they do not offer any final answers. They are often no more than exercises in the reconstruction of the past; the definition and redefinition of the situations to

explain the present and stratagems and strategies for achieving the desired future. Ethnicity transcends the known boundaries of state, religion, sect, and class. It seeks to fragment established nationalities and communities and create a new one using ethnic indicators. It involves symbols -old as well as newly created- and their manipulation by competing elites. The symbolic and cultural aspects of ethnicity are important in themselves; and they often get politicized because, in the final analysis, most ethnic conflicts are demands for a larger share of economic resources and products, and for a greater part in decision-making processes. Given identities can be questioned by individuals and groups, and their actions can result in the formation of new identities and symbol systems associated with the articulation of new interests. Ethnicity may thus lead to the redefinition of Social and cultural boundaries. Ethnic aspirations and urges have a quick silver quality, they need to be consistent and firm. This is explained by the quality of leadership of several ethnic movements. A section of the established elite may be behind them, but the elite can be pushed aside and the leadership taken over by arms wielding elements of diverse origins.

SubQuestion No : 18

Q.18 Which of the following approaches provide an understanding of the new ethnic phenomena?

- Ans  1. No option is correct
-  2. The primordial approach to ethnicity and ethnic-identities
-  3. Both a and b
-  4. The situational, subjectivist or instrumental that is based on member's perception of being different from others

Question ID : 5459276623





Comprehension:

Read the following information carefully and answer the given questions.

There are two main approaches to the understanding of the new ethnic phenomenon. The primordialist approach to ethnicity and ethnic identities considers common descent activated more easily than rational principles and organization founded upon them. The other approach is variously known as situational, subjectivist, or instrumental. Its main emphasis is on group members perceptions of being different from others and on the implications of this for that group's present status or predicament and for its prospects for the future. These contending approaches are an aid to an explication of issues and to the undertaking of contemporary reality but they do not offer any final answers. They are often no more than exercises in the reconstruction of the past; the definition and redefinition of the situations to explain the present and stratagems and strategies for achieving the desired future. Ethnicity transcends the known boundaries of state, religion, sect, and class. It seeks to fragment established nationalities and communities and create a new one using ethnic indicators. It involves symbols -old as well as newly created- and their manipulation by competing elites. The symbolic and cultural aspects of ethnicity are important in themselves; and they often get politicized because, in the final analysis, most ethnic conflicts are demands for a larger share of economic resources and products, and for a greater part in decision-making processes. Given identities can be questioned by individuals and groups, and their actions can result in the formation of new identities and symbol systems associated with the articulation of new interests. Ethnicity may thus lead to the redefinition of Social and cultural boundaries. Ethnic aspirations and urges have a quick silver quality, they need to be consistent and firm. This is explained by the quality of leadership of several ethnic movements. A section of the established elite may be behind them, but the elite can be pushed aside and the leadership taken over by arms wielding elements of diverse origins.

SubQuestion No : 19

Q.19 How do ethnic ideologies help in the propagation of inequalities?

- Ans  1. Both a and b
-  2. No option is correct
-  3. Agreeing to make compromises over the contested territory
-  4. Through the condemnation of cleansing programmes

Question ID : 5459276621

Comprehension:

Read the following information carefully and answer the given questions.

There are two main approaches to the understanding of the new ethnic phenomenon. The pre-

mordialist approach to ethnicity and ethnic identities considers common descent activated more easily than rational principles and organization founded upon them. The other approach is variously known as situational, subjectivist, or instrumental. Its main emphasis is on group members perceptions of being different from others and on the implications of this for that group's present status or predicament and for its prospects for the future.

These contending approaches are an aid to an explication of issues and to the undertaking of contemporary reality but they do not offer any final answers. They are often no more than exercises in the reconstruction of the past; the definition and redefinition of the situations to explain the present and stratagems and strategies for achieving the desired future. Ethnicity transcends the known boundaries of state, religion, sect, and class. It seeks to fragment established nationalities and communities and create a new one using ethnic indicators. It involves symbols -old as well as newly created- and their manipulation by competing elites. The symbolic and cultural aspects of ethnicity are important in themselves; and they often get politicized because, in the final analysis, most ethnic conflicts are demands for a larger share of economic resources and products, and for a greater part in decision-making processes. Given identities can be questioned by individuals and groups, and their actions can result in the formation of new identities and symbol systems associated with the articulation of new interests. Ethnicity may thus lead to the redefinition of Social and cultural boundaries. Ethnic aspirations and urges have a quick silver quality, they need to be consistent and firm. This is explained by the quality of leadership of several ethnic movements. A section of the established elite may be behind them, but the elite can be pushed aside and the leadership taken over by arms wielding elements of diverse origins.

SubQuestion No : 20

Q.20 The problems posed by the phenomenon of ethnicity can be solved by:

- Ans
- ☒ 1. Identifying with assimilation and homogenisation of diverse groups
 - ☒ 2. Isolating ethnic group within a wide cultural spectrum
 - ☒ 3. Propagating nationalism which seeks to absorb sub-nationalism and micro-nationalism
 - ☒ 4. Advocating cultural pluralism which stabilizes the prevailing cultural situation

Question ID : 5459276622

Section : General Hindi1

Q.1 निम्नलिखित में से कौन सी भाववाचक संज्ञा सर्वनाम से बनी है?

- Ans
- ☒ 1. एकता
 - ☒ 2. ताज़गी
 - ☒ 3. दासता
 - ☒ 4. चुनाव

Question ID : 5459276629

Q.2 दिए गए वाक्य का काल ज्ञात कीजिए।

यदि वह पढ़ता, तो परीक्षा में उत्तीर्ण हो जाता।

- Ans
- ☒ 1. आसन्न भूत
 - ☒ 2. हेतुहेतुमद् भूत
 - ☒ 3. संदिग्ध भूत
 - ☒ 4. पूर्ण भूत

Question ID : 5459276645

Q.3 निम्नलिखित में से विभक्ति तथा कारक का कौन सा युग्म सही नहीं है?

- Ans
- ☒ 1. में, पर – सम्बन्ध
 - ☒ 2. को – कर्य

- ☒ 3. से - करण
☒ 4. से - अपादान

Question ID : 5459276643

Q.4 निम्नलिखित में से पुल्लिंग शब्द कौन सा है?

- Ans ☒ 1. जड़ता
☒ 2. घटना
☒ 3. बुढ़ापा
☒ 4. दया

Question ID : 5459276641

Q.5 निम्नलिखित में से कौन सा शब्द वर्तनी की दृष्टि से शुद्ध है?

- Ans ☒ 1. अभिमान
☒ 2. अम्रत
☒ 3. अटारी
☒ 4. अन्तसिरी

Question ID : 5459276640

Q.6 दिए गए वाक्यांश के लिए उचित शब्द का चयन कीजिए।

जिसका निर्णय न हो सका हो

- Ans ☒ 1. निर्णयहीन
☒ 2. अनिर्णीत
☒ 3. विनिर्णय
☒ 4. अनिर्णय

Question ID : 5459276638

Q.7 दिए गए शब्द का पर्यायवाची ज्ञात कीजिए।

तोता

- Ans ☒ 1. रोल
☒ 2. सुग्गा
☒ 3. बाजुरा
☒ 4. अन्न

Question ID : 5459276639

Q.8 निम्नलिखित में से कौन सा शब्द युग्म छंदबद्ध का है?

- Ans ☒ 1. टार - पार
☒ 2. जैसे - तेसे
☒ 3. थोड़ा - बहुत
☒ 4. यहाँ - वहाँ

Question ID : 5459276631

Q.9 दिए शब्द में प्रत्यय ज्ञात कीजिए।

बुराई

- Ans  1. ई
-  2. राई
-  3. बु
-  4. आई

Question ID : 5459276627

Q.10 निम्नलिखित में से किस वाक्य में कर्तृवाच्य का प्रयोग हुआ है?

- Ans  1. बैठा नहीं जाता।
-  2. रमेश पुस्तक लाओ।
-  3. मीनू स्कूल जाती है।
-  4. शायद वह गोपाल का भाई है।

Question ID : 5459276644

Q.11 निम्नलिखित में से कौन सा शब्द युग्म तत्सम – तद्भव का नहीं है?

- Ans  1. कंकण – कंगन
-  2. नासिका – नसें
-  3. लक्ष – लाख
-  4. कर्ण – कान

Question ID : 5459276628

Q.12 निम्नलिखित में से शुद्ध आत्मा का मनुष्य क्या कहलाता है?

- Ans  1. शुद्धात्मा
-  2. शुद्धआत्मा
-  3. शुद्धत्मा
-  4. शुद्धोधन

Question ID : 5459276633

Q.13 दिए गए शब्द युग्म का अर्थ ज्ञात कीजिए।

कर्म – क्रम

- Ans  1. काम – किनारा
-  2. काम – क्रिया
-  3. काम – धाम
-  4. काम – सिलसिला

Question ID : 5459276632

Q.14 दिए गए वाक्य में रिक्त स्थान की पूर्ति कीजिए।

ईश्वर _____ विद्यमान है।

- Ans
- ☒ 1. सर्वत्र
 - ☐ 2. थोड़ा
 - ☐ 3. जितना
 - ☐ 4. बहुत

Question ID : 5459276637

Q.15 निम्नलिखित में से किस वाक्य में वचन का सही प्रयोग हुआ है?

- Ans
- ☐ 1. मेरी होश उड़ गई।
 - ☒ 2. मेरे होश उड़ गए।
 - ☐ 3. हमारे होश उड़ गई।
 - ☐ 4. मैं होश उड़ गयी।

Question ID : 5459276642

Q.16 दिए गए शब्द में संधि के रूप की पहचान कीजिए।

मध्यावधि

- Ans
- ☐ 1. गुण संधि
 - ☐ 2. विसर्ग संधि
 - ☐ 3. अयादि संधि
 - ☒ 4. दीर्घ संधि

Question ID : 5459276626

Q.17 दिए गए शब्द किसके उदाहरण है ज्ञात कीजिए।

अंदर, अन्यत्र, आगे, ऊपर

- Ans
- ☐ 1. कालवाचक क्रिया विशेषण
 - ☐ 2. परिमाणवाचक क्रिया विशेषण
 - ☒ 3. स्थानवाचक क्रिया विशेषण
 - ☐ 4. रीतिवाचक क्रिया विशेषण

Question ID : 5459276630

Q.18 दिए गए शब्द का पर्यायवाची ज्ञात कीजिए।

संज्ञाहीन

- Ans
- ☐ 1. संज्ञासहित
 - ☒ 2. बेसुध
 - ☐ 3. संज्ञासंघ
 - ☐ 4. संज्ञाविहिन

Question ID : 5459276634

Q.19 निम्नलिखित में से शुद्ध वर्तनी का चयन कीजिए।

- Ans
- ☐ 1. महतवपूर्ण

- ☒ 2. परिक्षा
☒ 3. दीवार
☒ 4. श्रेह

Question ID : 5459276635

Q.20 दिए गए शब्द का विलोम शब्द ज्ञात कीजिए।

ह्रस्व

- Ans ☒ 1. लघु
☒ 2. छोटा
☒ 3. लम्बा
☒ 4. दीर्घ

Question ID : 5459276636

Section : General Hindi2

Q.1 दिए गए विराम चिह्न के रूप की पहचान कीजिए।

(?)

- Ans ☒ 1. लाघव
☒ 2. प्रश्नवाचक
☒ 3. पूर्ण विराम
☒ 4. अर्द्धविराम

Question ID : 5459276657

Q.2 दिए गए वाक्य के लिए सही लोकोक्ति का चयन कीजिए।

बहुत ज्यादा उत्तेजित होना।

- Ans ☒ 1. अगिया बेताल होना।
☒ 2. अटारी पर चढ़ना।
☒ 3. आँखों के आगे अँधकार होना।
☒ 4. बबूल का पेड़ बनना।

Question ID : 5459276659

Q.3 यदि किसी पद या वाक्यांश के अर्थ का ज्ञान कराना हो तो किस विराम चिह्न का प्रयोग किया जाता है?

- Ans ☒ 1. संयोजक
☒ 2. निर्देशक
☒ 3. अवतरण
☒ 4. कोष्ठक

Question ID : 5459276656

Q.4 दिए गए वाक्य के लिए सही लोकोक्ति का चयन कीजिए।

जोखिम मोल लेना।

- Ans
- ☒ 1. ईंट जवाब का पत्थर से देना।
 - ☒ 2. ओखलि में सिर देना।
 - ☒ 3. एडियाँ रगड़ना।
 - ☒ 4. एक आँख से देखना।

Question ID : 5459276660

Q.5 दिए गए वाक्य में पुरुष ज्ञात कीजिए।

तुम मुझे पसंद हो।

- Ans
- ☒ 1. उत्तम
 - ☒ 2. प्रथम
 - ☒ 3. मध्यम
 - ☒ 4. अन्य

Question ID : 5459276649

Q.6 दिए गए वाक्य के लिए सही लोकोक्ति का चयन कीजिए।

दोगुना लाभ होना।

- Ans
- ☒ 1. अंधे के हाथ बटेर।
 - ☒ 2. अपने बेरों को कोई खट्टा नहीं बताता।
 - ☒ 3. आम के आम गुठलियों के दाम।
 - ☒ 4. आस पराई जो तके जीवित ही मर जाए।

Question ID : 5459276655

Q.7 निम्नलिखित प्रश्न में, दिए गए चार विकल्पों में से, उस विकल्प का चयन करें जो दिए गए मुहावरे के अर्थ को सर्वश्रेष्ठ रूप से व्यक्त करता है।

निरंतर कठोर परिश्रम करना।

- Ans
- ☒ 1. दिन – रात एक करना।
 - ☒ 2. मजदूर का काम करना।
 - ☒ 3. लुहार बन जाना।
 - ☒ 4. एक पंथ दो काज

Question ID : 5459276654

Q.8 दिए गए वाक्यों में से शुद्ध वाक्य का चयन कीजिए।

- Ans
- ☒ 1. सुबह सबको दो गिलास गुनगुना गर्म पानी पीना चाहिए।
 - ☒ 2. सुबह उठकर सबको दो गिलास गर्म पानी पीना चाहिए।
 - ☒ 3. सुबह उठकर सबको दो गिलास गुनुगुना गर्म पानी पीना चाहिए।
 - ☒ 4. सुबह उठकर सबको दो – दो गिलास गुनगुना गर्म पानी पीना चाहिए।

Question ID : 5459276648

Q.9 दिए गए शब्द का लाघव रूप ज्ञात कीजिए।

प्रोफ़ेसर

Ans

- ☒ 1. फ़ो०
- ☒ 2. प्रो०
- ☒ 3. सर०
- ☒ 4. प्रोफ़े०

Question ID : 5459276658

Q.10 निम्नलिखित प्रश्न में, दिए गए चार विकल्पों में से, उस विकल्प का चयन करें जो दिए गए मुहावरे के अर्थ को सर्वश्रेष्ठ रूप से व्यक्त करता है।

कलम तोड़ना।

Ans

- ☒ 1. अधिक लिखना।
- ☒ 2. बहुत खराब लिखना।
- ☒ 3. पेन तोड़ देना।
- ☒ 4. बहुत अच्छा लिखना।

Question ID : 5459276653

Q.11 निम्नलिखित प्रश्न में, दिए गए चार विकल्पों में से, उस विकल्प का चयन करें जो दिए गए मुहावरे के अर्थ को सर्वश्रेष्ठ रूप से व्यक्त करता है।

गांठ का पक्का होना।

Ans

- ☒ 1. कपड़े संभाल कर रखना।
- ☒ 2. पक्की गांठ लगाना।
- ☒ 3. गांठ बाँधना।
- ☒ 4. धन संभाल कर रखना।

Question ID : 5459276652

Q.12 दिए गए वाक्य में पक्ष के रूप की पहचान कीजिए।

बच्चे मैदान में खेलते हैं।

Ans

- ☒ 1. नित्य पक्ष
- ☒ 2. सातत्य पक्ष
- ☒ 3. पूर्ण पक्ष
- ☒ 4. स्थित्यामक पक्ष

Question ID : 5459276646

Q.13 निम्नलिखित प्रश्न में, दिए गए चार विकल्पों में से, उस विकल्प का चयन करें जो दिए गए मुहावरे के अर्थ को सर्वश्रेष्ठ रूप से व्यक्त करता है।

गिन – गिन कर पैर रखना।

Ans

- ☒ 1. बहुत घबरा जाना।
- ☒ 2. अत्याधिक सावधानी बरतना।
- ☒ 3. गिन – गिन कर नाचना।
- ☒ 4. पैर गिन कर रखना।

Question ID : 5459276651

Q.14 दिए गए वाक्य में वृत्ति के रूप की पहचान कीजिए।

वह कभी भी आ सकता है।

- Ans
- ☒ 1. संकेतार्थक
 - ☒ 2. संभावनार्थक
 - ☒ 3. निश्चियार्थक
 - ☒ 4. आज्ञार्थक

Question ID : 5459276647

Q.15 दिए गए वाक्य के रूप की पहचान कीजिए।

साहसी व्यक्ति उन्नति करते हैं।

- Ans
- ☒ 1. संयुक्त
 - ☒ 2. मिश्र
 - ☒ 3. सरल
 - ☒ 4. निषेधात्मक

Question ID : 5459276650

Comprehension:

एक गद्यांश दिया गया है। गद्यांश के आधार पर पाँच प्रश्न दिए गए हैं। गद्यांश को ध्यानपूर्वक पढ़ें तथा प्रत्येक प्रश्न में चार विकल्पों में से सही विकल्प चुने।

रात्रि के अंधकार को चीरकर सूर्य पूर्व दिशा से उदय होकर चारों ओर प्रकाश फैला देता है। सूर्य की किरणें वृक्षों की हरियाली को ताजगी प्रदान करती हैं। पुष्पों को खिलाकर चारों ओर सुगंध फैला देती है। अंधकार में डूबे नीले आकाश को रंगों से भर देती है। सूर्य जब पूर्व दिशा में क्षितिज से ऊपर उठता है तो लगता है लाल रंग की बड़ी सी गेंद आकाश में उठती चली आ रही है। सारा आकाश लाल, पीले, सफेद रंग से नहा जाता है। नीले आकाश पर रंगों की बौछार-सी हो जाती है। सारी प्रकृति नए रूप में सज जाती है। पक्षी चहचहाने लगते हैं। तितलियां पुष्पों पर मंडराने लगती हैं। भौरों की गूंज से उपवन संगीतमय हो जाते हैं। सभी अपने-अपने कार्य में निमग्न हो जाते हैं। रात्रि लोरियों से सबको मीठी नींद में सुला देती है। सूर्य उदय होकर सब को उनके कर्तव्यों का बोध कराता है। प्रातः कालीन दृश्य आलौकिक लगता है। सूर्य का कोमल शांत रूप हृदयों में नई ऊर्जा जागृत कर देता है।

SubQuestion No : 16

Q.16 सूर्य उदय होकर सब को क्या याद दिलाता है?

- Ans
- ☒ 1. माँ का कर्ज
 - ☒ 2. राजा का कर्तव्य
 - ☒ 3. पुत्र का कर्तव्य
 - ☒ 4. कर्तव्य का बोध

Question ID : 5459276665

Comprehension:

एक गद्यांश दिया गया है। गद्यांश के आधार पर पाँच प्रश्न दिए गए हैं। गद्यांश को ध्यानपूर्वक पढ़ें तथा प्रत्येक प्रश्न में चार विकल्पों में से सही विकल्प चुने।

रात्रि के अंधकार को चीरकर सूर्य पूर्व दिशा से उदय होकर चारों ओर प्रकाश फैला देता है। सूर्य की किरणें वृक्षों की हरियाली को ताजगी प्रदान करती हैं। पुष्पों को खिलाकर चारों ओर सुगंध फैला देती है। अंधकार में डूबे नीले आकाश को रंगों से भर देती है। सूर्य जब पूर्व दिशा में क्षितिज से ऊपर उठता है तो लगता है लाल रंग की बड़ी सी गेंद आकाश में उठती चली आ रही है। सारा आकाश लाल, पीले, सफेद रंग से नहा जाता है। नीले आकाश पर रंगों की बौछार-सी हो जाती है। सारी प्रकृति नए रूप में सज जाती है। पक्षी चहचहाने लगते हैं। तितलियां पुष्पों पर मंडराने लगती हैं। भौरों की गूंज से उपवन संगीतमय हो जाते हैं। सभी अपने-अपने कार्य में निमग्न हो जाते हैं। रात्रि लोरियों से सबको मीठी नींद में सुला देती है। सूर्य उदय होकर सब को उनके कर्तव्यों का बोध कराता है। प्रातः कालीन दृश्य आलौकिक लगता है। सूर्य का कोमल शांत रूप हृदयों में नई ऊर्जा जागृत कर देता है।

SubQuestion No : 17

Q.17 किसकी गूंज से उपवन संगीतमय हो जाते हैं?

- Ans
- ☒ 1. मक्खी
 - ☒ 2. भौंरा
 - ☐ 3. चिड़िया
 - ☐ 4. हाथी

Question ID : 5459276663

Comprehension:

एक गद्यांश दिया गया है। गद्यांश के आधार पर पाँच प्रश्न दिए गए हैं। गद्यांश को ध्यानपूर्वक पढ़ें तथा प्रत्येक प्रश्न में चार विकल्पों में से सही विकल्प चुने।

रात्रि के अंधकार को चीरकर सूर्य पूर्व दिशा से उदय होकर चारों ओर प्रकाश फैला देता है। सूर्य की किरणें वृक्षों की हरियाली को ताजगी प्रदान करती हैं। पुष्पों को खिलाकर चारों ओर सुगंध फैला देती है। अंधकार में डूबे नीले आकाश को रंगों से भर देती है। सूर्य जब पूर्व दिशा में क्षितिज से ऊपर उठता है तो लगता है लाल रंग की बड़ी सी गेंद आकाश में उठती चली आ रही है। सारा आकाश लाल, पीले, सफेद रंग से नहा जाता है। नीले आकाश पर रंगों की बौछार-सी हो जाती है। सारी प्रकृति नए रूप में सज जाती है। पक्षी चहचहाने लगते हैं। तितलियां पुष्पों पर मंडराने लगती हैं। भौरों की गूंज से उपवन संगीतमय हो जाते हैं। सभी अपने-अपने कार्य में निमग्न हो जाते हैं। रात्रि लोरियों से सबको मीठी नींद में सुला देती है। सूर्य उदय होकर सब को उनके कर्तव्यों का बोध कराता है। प्रातः कालीन दृश्य आलौकिक लगता है। सूर्य का कोमल शांत रूप हृदयों में नई ऊर्जा जागृत कर देता है।

SubQuestion No : 18

Q.18 सूर्य की किरणें आकाश में क्या भर देती हैं?

- Ans
- ☒ 1. रंग
 - ☐ 2. नक्षत्र
 - ☐ 3. तारे
 - ☐ 4. चाँद

Question ID : 5459276664

Comprehension:

एक गद्यांश दिया गया है। गद्यांश के आधार पर पाँच प्रश्न दिए गए हैं। गद्यांश को ध्यानपूर्वक पढ़ें तथा प्रत्येक प्रश्न में चार विकल्पों में से सही विकल्प चुने।

रात्रि के अंधकार को चीरकर सूर्य पूर्व दिशा से उदय होकर चारों ओर प्रकाश फैला देता है। सूर्य की किरणें वृक्षों की हरियाली को ताजगी प्रदान करती हैं। पुष्पों को खिलाकर चारों ओर सुगंध फैला देती है। अंधकार में डूबे नीले आकाश को रंगों से भर देती है। सूर्य जब पूर्व दिशा में क्षितिज से ऊपर उठता है तो लगता है लाल रंग की बड़ी सी गेंद आकाश में उठती चली आ रही है। सारा आकाश लाल, पीले, सफेद रंग से नहा जाता है। नीले आकाश पर रंगों की बौछार-सी हो जाती है। सारी प्रकृति नए रूप में सज जाती है। पक्षी चहचहाने लगते हैं। तितलियां पुष्पों पर मंडराने लगती हैं। भौरों की गूंज से उपवन संगीतमय हो जाते हैं। सभी अपने-अपने कार्य में निमग्न हो जाते हैं। रात्रि लोरियों से सबको मीठी नींद में सुला देती है। सूर्य उदय होकर सब को उनके कर्तव्यों का बोध कराता है। प्रातः कालीन दृश्य आलौकिक लगता है। सूर्य का कोमल शांत रूप हृदयों में नई ऊर्जा जागृत कर देता है।

SubQuestion No : 19

Q.19 उपर्युक्त गद्यांश का शीर्षक क्या है?

- Ans
- ☒ 1. सूर्योदय का दृश्य
 - ☐ 2. कर्तव्यबोधक
 - ☐ 3. प्रातःकालीन
 - ☐ 4. ऊर्जा जागरण

Question ID : 5459276662

Comprehension:

एक गद्यांश दिया गया है। गद्यांश के आधार पर पाँच प्रश्न दिए गए हैं। गद्यांश को ध्यानपूर्वक पढ़ें तथा प्रत्येक प्रश्न में चार

विकल्पो में से सही विकल्प चुने।

रात्रि के अंधकार को चीरकर सूर्य पूर्व दिशा से उदय होकर चारों ओर प्रकाश फैला देता है। सूर्य की किरणें वृक्षों की हरियाली को ताजगी प्रदान करती हैं। पुष्पों को खिलाकर चारों ओर सुगंध फैला देती है। अंधकार में डूबे नीले आकाश को रंगों से भर देती है। सूर्य जब पूर्व दिशा में क्षितिज से ऊपर उठता है तो लगता है लाल रंग की बड़ी सी गेंद आकाश में उठती चली आ रही है। सारा आकाश लाल, पीले, सफेद रंग से नहा जाता है। नीले आकाश पर रंगों की बौछार-सी हो जाती है। सारी प्रकृति नए रूप में सज जाती है। पक्षी चहचहाने लगते हैं। तितलियां पुष्पों पर मंडराने लगती हैं। भौरों की गूंज से उपवन संगीतमय हो जाते हैं। सभी अपने-अपने कार्य में निमग्न हो जाते हैं। रात्रि लोरियों से सबको मीठी नींद में सुला देती है। सूर्य उदय होकर सब को उनके कर्तव्यों का बोध कराता है। प्रातः कालीन दृश्य आलौकिक लगता है। सूर्य का कोमल शांत रूप हृदयों में नई ऊर्जा जागृत कर देता है।

SubQuestion No : 20

Q.20 सूर्य के शांत रूप से क्या मिलता है?

Ans

-  1. गरमाहट
-  2. नई ऊर्जा
-  3. रोशनी
-  4. घबराहट

Question ID : 5459276666