



GOVT. OF NCT OF DELHI
Delhi Subordinate Services Selection Board
FC-18, Institutional Area, Karkardooma, Delhi – 110092.
www.dsssb.delhigovt.nic.in

Participant ID	
Participant Name	
Test Center Name	iON Digital Zone iDZ 2 GT Karnal Road
Test Date	18/08/2019
Test Time	4:30 PM - 6:30 PM
Subject	LOWER DIVISION CLERK

Section : Mental Ability1

Q.1 In a certain code language, 'MILK' is called as 'PURE', 'PURE' is called as 'BLOOD', 'BLOOD' is called as 'RED', 'RED' is called as 'BIRD', 'BIRD' is called as 'DRY'. Which colour is used to show danger?

- Ans
- 1. BLOOD
 - 2. MILK
 - 3. RED
 - 4. BIRD

Question ID : 5459276878

Q.2 In the following question, select the related word from the given alternatives.

Five : Pentagon :: Three : ?

- Ans
- 1. Rectangle
 - 2. Square
 - 3. Rhombus
 - 4. Triangle

Question ID : 5459276876

Q.3 In the following question, four number pairs are given. The number on left side of (-) is related to the number of the right side of (-) with some Logic/Rule/Relation. Three are similar on basis of same Logic/Rule/Relation. Select the odd one out from the given alternatives.

- Ans
- 1. 2517 – 425
 - 2. 3226 – 832
 - 3. 2114 – 294
 - 4. 4619 – 854

Question ID : 5459276888

Q.4 In the following question, select the odd letter/letters from the given alternatives.

- Ans
- 1. FHJ

2. OPR

3. BDF

4. ACE

Question ID : 5459276873

Q.5 A series is given with one term missing. Select the correct alternative from the given ones that will complete the series.

UV5, XZ10, AD17, ?, GL37

Ans 1. DI26

2. DI27

3. DH27

4. DH26

Question ID : 5459276870

Q.6 A series is given with one term wrong. Select that wrong term from the given alternatives.

F4, H9, J15, L25, N36

Ans 1. F4

2. L25

3. J15

4. N36

Question ID : 5459276871

Q.7 A team of five persons is to be selected from amongst five girls A, B, C, D and E and four boys P, Q, R and S. Some criteria for selection are: E and P have to be together. S and Q cannot be together. B and R cannot be together. C and A have to be together. Q and D cannot be together. If Q is one of the selected members, then who can be the other members of the team?

Ans 1. P, S, C, A

2. R, S, C, A

3. S, R, D, C

4. E, P, B, R

Question ID : 5459276883

Q.8 Riya is younger than Ram. Kishan is younger than Ram but elder than Riya. Sandhya is elder than Sheetal and Ram both. Ram is younger than Sheetal. Among these five, who is the third youngest?

Ans 1. Riya

2. Ram

3. Sheetal

4. Kishan

Question ID : 5459276881

Q.9 In the following question, select the odd word pair from the given alternatives.

Ans 1. Cup : Crockery

2. Stationery : Pen

3. Lizard : Reptile

4. Ostrich : Bird

Question ID : 5459276874

Q.10 A, B, C, D and E are five members of a family. In this family there is a doctor, a teacher, a professor, a inspector and a businessman. A is the son of a professor. D is an unmarried lady. In the family there is a married couple in which B is the husband. E is the brother of C and he is neither a teacher nor a businessman. Son of the married couple is not the teacher. There is no lady doctor in the family. The teacher is not married. Who is the teacher?

Ans 1. B

2. D

3. A

4. C

Question ID : 5459276885

Q.11 In the following question, select the related letter pair from the given alternatives.

GHLP : IKPU :: ?

Ans 1. CGKO : EJOT

2. FGHI : HJMN

3. PSTW : WYZA

4. ACDH : CFOR

Question ID : 5459276877

Q.12 फोटो में एक महिला की ओर संकेत करते हुए, केशव ने कहा कि "यह मेरी माता के इकलौते पुत्र के पिता की छोटी बहन की फोटो है।" फोटो में जो व्यक्ति है उसका केशव के साथ क्या संबंध है?

Ans 1. पत्नी

2. बुआ

3. बहन

4. माँ

Question ID : 5459276884

Q.13 In the following question, select the related word pair from the given alternatives.

Young : Old :: ?

Ans 1. Junior : Senior

2. Black : Colour

3. Work : Joule

4. Work : Hard

Question ID : 5459276875

Q.14 A, B, C, D, E, F and G are seven coaches. Each one among them is a coach of a different game. The games are Hockey, Cricket, Badminton, Tennis, Volleyball, Basketball and Football (not necessarily in the same order). Each of them trains on one of the seven days of the week from Monday to Sunday (not necessarily in the same order). No two coaches train on the same day of a week. C trains Badminton on Friday. B teaches Volleyball on the

previous day of the day on which a coach trains Hockey. G trains on Sunday but does not train Cricket or Tennis. D trains Basketball on the previous day of the day on which F trains. A trains Football on Tuesday. E does not train Tennis. On which day does F train?

- Ans
- 1. Wednesday
 - 2. Friday
 - 3. Monday
 - 4. Thursday

Question ID : 5459276882

Q.15 Arrange the given words in the sequence in which they occur in the dictionary.

- 1. Quarantine
- 2. Quadrangle
- 3. Quantifier
- 4. Quadruple
- 5. Quadriceps

- Ans
- 1. 51234
 - 2. 25413
 - 3. 52134
 - 4. 25431

Question ID : 5459276869

Q.16 In a certain code language, 'BULB' is written as '190', 'CALM' is written as '150'. What is the code for 'DOES' in that code language?

- Ans
- 1. 180
 - 2. 220
 - 3. 210
 - 4. 160

Question ID : 5459276879

Q.17 In the following question below are given some statements followed by some conclusions based on those statements. Taking the given statements to be true even if they seem to be at variance from commonly known facts. Read all the conclusions and then decide which of the given conclusion logically follows the given statements.

Statements:

- I. Some chairs are pens.
- II. Some pens are cups.
- III. All cups are tables.

Conclusions:

- I. Some tables are chairs.
- II. Some cups are pens.
- III. All tables are pens.

- Ans
- 1. Only conclusion II follow
 - 2. Only conclusion I follow
 - 3. Neither conclusion follow
 - 4. Only conclusion III follow

Question ID : 5459276887

Q.18 In the following question below are given some statements followed by some conclusions based on those statements. Taking the given statements to be true even if they seem to be

at variance from commonly known facts. Read all the conclusions and then decide which of the given conclusion logically follows the given statements.

Statements:

- I. All books are tables.
- II. All chairs are books.

Conclusions:

- I. Some tables are books.
- II. All books are chairs.

- Ans
- 1. Only conclusion II follow
 - 2. Only conclusion I follow
 - 3. Both conclusion I and II follow
 - 4. Neither conclusion follow

Question ID : 5459276886

Q.19 In the following question, select the odd word from the given alternatives.

- Ans
- 1. Fox
 - 2. Lion
 - 3. Tiger
 - 4. Eagle

Question ID : 5459276872

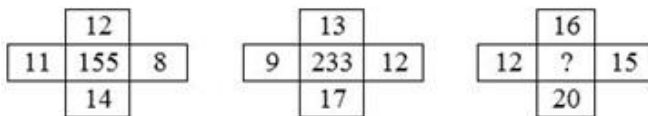
Q.20 In a certain code language, 'ENSOUL' is written as 'IJWKYH'. What is the code for 'CHEWED' in that code language?

- Ans
- 1. GDHSHZ
 - 2. GCDSCZ
 - 3. GDCSCZ
 - 4. GDISIZ

Question ID : 5459276880

Section : Mental Ability2

Q.1 In the following question, select the number which can be placed at the sign of question mark (?) from the given alternatives.



- Ans
- 1. 397
 - 2. 287
 - 3. 256
 - 4. 307

Question ID : 5459276892

Q.2 In the following question, select the missing number from the given series.

2, 6, 30, 60, 130, ?

- Ans
- 1. 210
 - 2. 260
 - 3. 384
 - 4. 216

Question ID : 5459276896

Q.3 In the following question, four number pairs are given. The number on left side of (-) is related to the number of the right side of (-) with some Logic/Rule/Relation. Three are similar on basis of same Logic/Rule/Relation. Select the odd one out from the given alternatives.

- Ans
- 1. 256 - 60
 - 2. 321 - 23
 - 3. 137 - 21
 - 4. 472 - 56

Question ID : 5459276889

Q.4 In the following question, select the missing number from the given series.

2, 8, 14, 20, 26, ?

- Ans
- 1. 32
 - 2. 30
 - 3. 42
 - 4. 36

Question ID : 5459276897

Q.5 Two figures given on the left side of (::) are related with some logic/rule/relation. Select the missing figure on the right of (::) from the given alternatives based on the same logic/rule/relation.



- Ans
- 1.
 - 2.
 - 3.
 - 4.


Question ID : 5459276904

Q.6 Identify the diagram that best represents the relationship among the given classes.


Sun, Moon, Earth

Ans

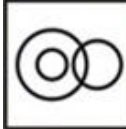
✓ 1.



✗ 2.



✗ 3.



✗ 4.



Question ID : 5459276898

Q.7 In the following question, select the number which can be placed at the sign of question mark (?) from the given alternatives.

12	8	15	21
13	9	16	22
14	10	17	23
117	45	?	396

Ans ✗ 1. 252

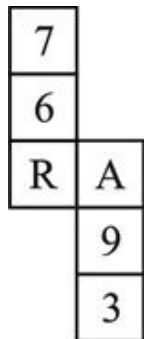
✗ 2. 162

✓ 3. 192

✗ 4. 178

Question ID : 5459276893

Q.8 By folding the given paper, which of the following cube cannot be made?



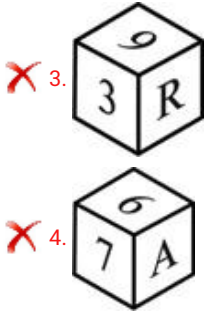
Ans

✓ 1.



✗ 2.



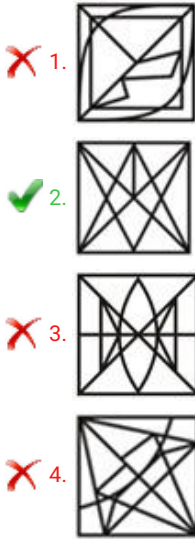


Question ID : 5459276908

Q.9 From the given answer figures, select the one in which the question figure is hidden/embedded.



Ans



Question ID : 5459276907

Q.10 Rohan walks 10 km towards north from a point A. Then he turns right and walks 6 km. Then, he again turns right and walks 10 km. In which direction is he now from the starting point?

- Ans 1. North
- 2. North - east
- 3. East
- 4. South - east

Question ID : 5459276900

Q.11 Tejas walked 10 metre towards north. Then, he turned left and walked 10 metre. He turned right and walked 6 metre. At last he turned right and walked 10 metre. How far and in which direction is he now from his starting point?

- Ans 1. 26 metre, North
- 2. 16 metre, North
- 3. 20 metre, North
- 4. 16 metre, South

Question ID : 5459276901

Q.12 In the following question, select the related number from the given alternatives.

298 : 149 :: 473 : ?

- Ans
- 1. 132
 - 2. 86
 - 3. 74
 - 4. 68

Question ID : 5459276891

Q.13 In the following question, select the related number from the given alternatives.


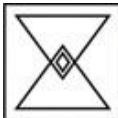
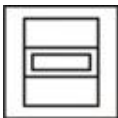

28 : 784 :: 56 : ?

- Ans
- 1. 3136
 - 2. 4242
 - 3. 3436
 - 4. 2996

Question ID : 5459276890

Q.14 In the following question, select the odd figure from the given alternatives.

Ans

- 1. 
- 2. 
- 3. 
- 4. 

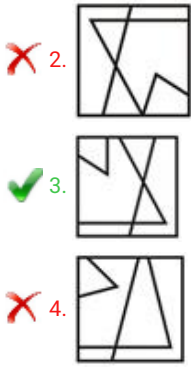
Question ID : 5459276902

Q.15 Which answer figure will complete the pattern in the question figure?



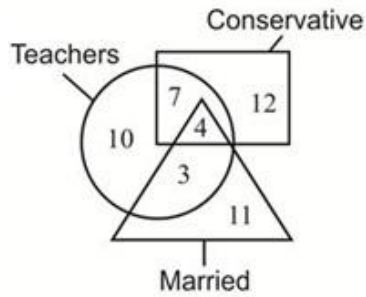
Ans

- 1. 



Question ID : 5459276906

Q.16 In the given figure, how many teachers are neither married nor conservative?



- Ans
- 1. 7
 - 2. 12
 - 3. 10
 - 4. 11

Question ID : 5459276899

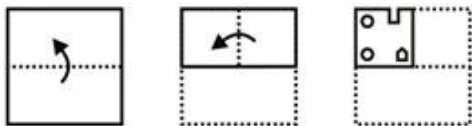
Q.17 In the following question, select the missing number from the given series.

1, 2, 6, 24, 120, ?

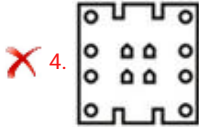
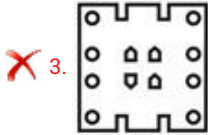
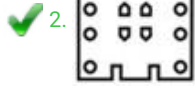
- Ans
- 1. 240
 - 2. 360
 - 3. 680
 - 4. 720

Question ID : 5459276895

Q.18 A piece of paper is folded and punched as shown below in the question figures. From the given answer figures, indicate how it will appear when opened?



- Ans
- 1.



Question ID : 5459276905

Q.19 If 'W' means '÷', 'X' means '×', 'Y' means '+' and 'Z' means '-', then 2 Y 448 W 112 X 4 X 2 Y 8 Z 15 = ?

- Ans
- ✓ 1. 27
 - ✗ 2. 37
 - ✗ 3. 36
 - ✗ 4. 25

Question ID : 5459276894

Q.20 In the following question, select the wrong figure from the given series.



- Ans
- ✗ 1.
 - ✗ 2.
 - ✗ 3.
 - ✓ 4.

Question ID : 5459276903

Section : General Awareness1

Q.1 Which of the following does NOT affect soil formation?

- Ans
- ✗ 1. Climate
 - ✗ 2. Parent Material

3. Landslides

4. Topography

Question ID : 5459276926

Q.2 Outer membrane of Mitochondria is _____.

Ans 1. deeply folded

2. folded

3. porous

4. non-porous

Question ID : 5459276923

Q.3 In which of the following state the Kamakhya temple is situated?

Ans 1. Assam

2. Madhya Pradesh

3. Uttar Pradesh

4. Manipur

Question ID : 5459276910

Q.4 Which of the following statement(s) is/are true about suspension?

(I) Particles do not scatter beam of light passing through it.

(II) It's a heterogeneous mixture.

(III) It's a homogenous mixture.

(IV) Particles can be seen by naked eye.

Ans 1. Only III

2. II and IV

3. I and II

4. Only II

Question ID : 5459276917

Q.5 What is the full form of NPA in context of Banking System?

Ans 1. National Productivity Authority

2. National Productivity Association

3. Non-Paying Assets

4. Non-Performing Assets

Question ID : 5459276914

Q.6 Which of the following river does NOT flow into the Bay of Bengal?

Ans 1. Krishna

2. Mahanadi

3. Brahmaputra

4. Tapi

Question ID : 5459276924

Q.7 The purpose of having standard units is _____.

- Ans
- 1. measurement of small quantities
 - 2. measurement of large quantities
 - 3. easier measurements
 - 4. uniformity in measurements

Question ID : 5459276919

Q.8 Which of the following is an agricultural bank?

- Ans
- 1. SIDBI
 - 2. Reserve Bank of India
 - 3. NABARD
 - 4. State Bank of India

Question ID : 5459276915

Q.9 Which of the following parts of a flower forms part of stamen?

- Ans
- 1. Style
 - 2. Anther
 - 3. Stigma
 - 4. Sepal

Question ID : 5459276922

Q.10 Which of the following is NOT a component of Government Budget?

- Ans
- 1. Gender Budget
 - 2. Capital Expenditure
 - 3. Revenue Expenditure
 - 4. Capital Receipts

Question ID : 5459276913

Q.11 Which of the following state - folk dance pair is NOT correct?

- Ans
- 1. Gujarat - Dandiya Raas
 - 2. Rajasthan - Jhumar
 - 3. Punjab - Bhangra
 - 4. Maharashtra - Lavani

Question ID : 5459276909

Q.12 _____ terminal of a cell must be joined with the _____ terminal of another cell to form a battery.

- I. Negative ,positive
- II. Negative , Negative
- III. Positive , Positive

- Ans
- 1. I and III

- 2. I
- 3. II
- 4. II and III

Question ID : 5459276920

Q.13 At puberty testosterone in human beings is released by _____.

- Ans
- 1. Testes
 - 2. Pituitary Gland
 - 3. Adrenal Gland
 - 4. Ovaries

Question ID : 5459276921

Q.14 In which month the Pongal festival is celebrated?

- Ans
- 1. March
 - 2. August
 - 3. May
 - 4. January

Question ID : 5459276912

Q.15 Hindon is the tributary of which of the following river?

- Ans
- 1. Ganga
 - 2. Kaveri
 - 3. Krishna
 - 4. Yamuna

Question ID : 5459276927

Q.16 For separation of different gases from air, which process is used?

- Ans
- 1. Vaporization
 - 2. Distillation
 - 3. Fractional Distillation
 - 4. Condensation

Question ID : 5459276918

Q.17 Who among the following is a Sitar player?

- Ans
- 1. Zakir Hussain
 - 2. Daya Shankar
 - 3. Anant Lal
 - 4. Smita Nagdev

Question ID : 5459276911

Q.18 India's only active volcano is found on a Barren Island which is located in _____.

- Ans 1. Andaman and Nicobar Islands
 2. Lakshadweep Islands
 3. Malabar Coast
 4. Himalayas

Question ID : 5459276925

Q.19 _____ is the study of soils.

- Ans 1. Paleontology
 2. Pedology
 3. Ecology
 4. Geology

Question ID : 5459276928

Q.20 Substances used to test the acidity and basicity of a solution are known as _____.

- Ans 1. Bases
 2. Salt
 3. trainers
 4. Indicator

Question ID : 5459276916

Section : General Awareness2

Q.1 _____ was called 'Indraprastha' during the rule of Pandavas.

- Ans 1. Delhi
 2. Agra
 3. Calcutta
 4. Jaipur

Question ID : 5459276933

Q.2 Who wrote the book 'Poverty and the Un-British Rule in India'?

- Ans 1. Dadabhai Naoroji
 2. Gopal Krishna Gokhale
 3. Bal Gangadhar Tilak
 4. M.G. Ranade

Question ID : 5459276934

Q.3 _____ advocated remarriage of widows in 19th century.

- Ans 1. E.V. Ramaswamy Naicker
 2. Jyotiba Phule
 3. Ishwar Chandra Vidyasagar

4. Swami Vivekananda

Question ID : 5459276930

Q.4 Which river is also known as 'Sorrow of Bihar'?

- Ans
- 1. Gomati
 - 2. Yamuna
 - 3. Chambal
 - 4. Kosi

Question ID : 5459276929

Q.5 Uniform Civil Code is mentioned in which Part of the Indian Constitution?

- Ans
- 1. Part IV
 - 2. Part III
 - 3. Part V
 - 4. Part II

Question ID : 5459276945

Q.6 Which country will launch the world's first man-made moon by 2020?

- Ans
- 1. China
 - 2. Japan
 - 3. India
 - 4. Afghanistan

Question ID : 5459276940

Q.7 Which novel has won the Man Booker International Prize 2019?

- Ans
- 1. The Vegetarian
 - 2. Sea of Strangers
 - 3. Celestial Bodies
 - 4. Heartland

Question ID : 5459276939

Q.8 Which of the following was a Pallava ruler?

- Ans
- 1. Rajashekhara Verma
 - 2. Mahendravarman
 - 3. Rajaraja I
 - 4. Kumaragupta

Question ID : 5459276935

Q.9 Which is the third-highest civilian honor in India?

- Ans
- 1. Padma Vibhushan
 - 2. Dadasaheb Phalke Award

- 3. Arjuna Award
- 4. Padma Bhushan

Question ID : 5459276936

Q.10 _____ was the eldest son of Babur.

- Ans
- 1. Shah Jahan
 - 2. Humayun
 - 3. Akbar
 - 4. Changez Khan

Question ID : 5459276932

Q.11 Who introduced 'Objective Resolution' in the Constituent Assembly?

- Ans
- 1. Mahatma Gandhi
 - 2. Jawaharlal Nehru
 - 3. B.R Ambedkar
 - 4. Rajendra Prasad

Question ID : 5459276942

Q.12 Hima Das is associated with which sport?

- Ans
- 1. Athletics
 - 2. Chess
 - 3. Boxing
 - 4. Swimming

Question ID : 5459276947

Q.13 Which male singer won the Filmfare Award 2019 for Best Playback Singer?

- Ans
- 1. Sonu Nigam
 - 2. Arijit Singh
 - 3. Abhay Jodhpurkar
 - 4. Shankar Mahadevan

Question ID : 5459276937

Q.14 _____ was the revenue administration and civil justice system in Bengal under the Mughals.

- Ans
- 1. Amir
 - 2. Nizamat
 - 3. Diwani
 - 4. Mansab

Question ID : 5459276931

Q.15 Article 19 of the Indian Constitution includes which of the following right?

- Ans
- 1. Right to Constitutional Remedies

- 2. Right against exploitation
- 3. Right to freedom of speech and expression
- 4. Right to freedom of Religion

Question ID : 5459276944

Q.16 Chandrayaan-2 will be launched from which state by ISRO?

- Ans
- 1. Maharashtra
 - 2. Rajasthan
 - 3. Kerala.
 - 4. Andhra Pradesh

Question ID : 5459276941

Q.17 Article 17 of the Indian Constitution deals with which of the following?

- Ans
- 1. Protection of interests of minorities
 - 2. Abolition of Untouchability
 - 3. Continuance of rights of citizenship
 - 4. Equality of opportunity in matters of public employment

Question ID : 5459276943

Q.18 Which actor has been honored with the Padma Shri 2019 in the art-acting-film category?

- Ans
- 1. Nawazuddin Siddiqui
 - 2. Shakti Kapoor
 - 3. Manoj Bajpayee
 - 4. Rajkumar Rao

Question ID : 5459276938

Q.19 In 2019, the International Olympic Committee (IOC) has formally opened its new headquarters in ____.

- Ans
- 1. France
 - 2. Singapore
 - 3. Belgium
 - 4. Switzerland

Question ID : 5459276948

Q.20 2018 Men's Hockey World Cup was held in ____.

- Ans
- 1. Japan
 - 2. Australia
 - 3. India
 - 4. Germany

Question ID : 5459276946

Section : Arithmetic Ability1

Q.1 If $A = \frac{3}{7} \times \frac{9}{28} \div \frac{81}{343}$ and $B = \frac{4}{5} \div \frac{16}{25} + \frac{3}{7} \times \frac{28}{27}$, then what is the value of B/A?

- Ans
- 1. 1301/661
 - 2. 1211/371
 - 3. 1291/441
 - 4. 1281/441

Question ID : 5459276952

Q.2 The average age of 20 girls is 25 years. The average age of another 30 girls is K years. If the average age of all 50 girls is 34 years, then what is the value of K?

- Ans
- 1. 40
 - 2. 35
 - 3. 25
 - 4. 30

Question ID : 5459276960

Q.3 If $P/Q = 8/9$ and $Q - P = 12$, then what is the value of P?

- Ans
- 1. 84
 - 2. 108
 - 3. 112
 - 4. 96

Question ID : 5459276968

Q.4 What is the value of $(4 + 18 \times 9 \div 6 - 12) / (18 \times 15 \div 6 + 23 - 11)$?

- Ans
- 1. 1/5
 - 2. 26/77
 - 3. 23/66
 - 4. 1/3

Question ID : 5459276955

Q.5 If 7248X is divisible by 16, then what is the value of X?

- Ans
- 1. 0
 - 2. 8
 - 3. 2
 - 4. 4

Question ID : 5459276950

Q.6 416X92Y is divisible by 88. What can be the value of $(X + Y) / (Y - X)$?

- Ans
- 1. 5/3

2. $\frac{4}{3}$

3. $\frac{7}{6}$

4. $\frac{10}{3}$

Question ID : 5459276956

Q.7 If x and y are even numbers, then which of the following is correct?

Ans 1. x + y is even

2. x + y + 2 is odd

3. x + y + 3 is even

4. x + y + 1 is even

Question ID : 5459276949

Q.8 By selling an article for Rs 156 more, Rajat earned a profit of 4 percent instead of a loss of 8 percent. What is the cost price of the article?

Ans 1. Rs 1196

2. Rs 1352

3. Rs 1300

4. Rs 1400

Question ID : 5459276966

Q.9 The selling price of a product is 75 percent of the cost price. What is the loss percentage?

Ans 1. 16.67 percent

2. 33.33 percent

3. 20 percent

4. 25 percent

Question ID : 5459276965

Q.10 What is the value of $\frac{7}{2} \div \frac{21}{16} + \frac{4}{7} \times \frac{3}{4} \div \frac{9}{16} + \frac{4}{21} \times \frac{7}{2} + \frac{2}{3}$?

Ans 1. $\frac{75}{13}$

2. $\frac{100}{31}$

3. $\frac{100}{21}$

4. $\frac{50}{11}$

Question ID : 5459276951

Q.11 P is 4 times of Q. Q is how much percent less than P?

Ans 1. 25 percent

2. 75 percent

3. 60 percent

4. 80 percent

Question ID : 5459276962

Q.12 L is 20 percent less than T but T is 30 percent more than R. J is 30 percent of W and W is 10 percent of T. J is what percentage of R?

- Ans
- 1. 6.1 percent
 - 2. 8.4 percent
 - 3. 4.3 percent
 - 4. 3.9 percent

Question ID : 5459276964

Q.13 The marked price of a table is Rs 3500 and its selling price is Rs 2275. What is the percentage discount?

- Ans
- 1. 45 percent
 - 2. 55 percent
 - 3. 35 percent
 - 4. 65 percent

Question ID : 5459276959

Q.14 What is the value of $9 + 9 \div 18 \times 27 + 36 \div 9 \times 18 + 54 \div 9 \times 18$?

- Ans
- 1. 405/2
 - 2. 417/2
 - 3. 401/2
 - 4. 397/2

Question ID : 5459276958

Q.15 A trader incurs a loss of 50 percent after allowing a discount of 40 percent. If 20 percent discount is given, then what will be the profit/loss percentage?

- Ans
- 1. 33.33 percent, loss
 - 2. 25 percent, loss
 - 3. 25 percent, profit
 - 4. 33.33 percent, profit

Question ID : 5459276961

Q.16 There are 3 types of rice. The amount of the rice are 703 kg, 851 kg and 333 kg respectively. The rice are packed such that no two types of rice are mixed. If the size of packet is largest and all packets have same size, then what is the number of packets?

- Ans
- 1. 51
 - 2. 37
 - 3. 39
 - 4. 43

Question ID : 5459276953

Q.17 J sells an article to K at a loss of 30 percent, K sells the same article to L at a profit of 40 percent. If L pays Rs 490, then what is the selling price of the article for J?

- Ans
- 1. Rs 425
 - 2. Rs 350
 - 3. Rs 375
 - 4. Rs 500

Question ID : 5459276967

Q.18 What is the value of $(0.5)^2 \div (0.125) + (0.12)^2 \div (0.02) + (0.18)^2 \div (0.04) + (0.22)^2 \div (0.02)^2 + (0.9)^3 \div (0.03)^2$?

- Ans
- 1. 861.21
 - 2. 1011.42
 - 3. 934.53
 - 4. 918.47

Question ID : 5459276957

Q.19 K when divided by 5, 6 and 3 leaves remainder 1 in each case. What can be the value of K?

- Ans
- 1. 2521 and 2601
 - 2. 1671 and 3151
 - 3. 1951 and 1561
 - 4. 571 and 1451

Question ID : 5459276954

Q.20 The population of a town increases by 60 percent every year. If after 2 years from present the population is 87040, then what is the present population?

- Ans
- 1. 36000
 - 2. 34000
 - 3. 38000
 - 4. 32000

Question ID : 5459276963

Section : Arithmetic Ability2

Q.1 Rs 7000 becomes Rs 10360 in 6 years at simple interest. What is the per annum rate of interest?

- Ans
- 1. 10 percent
 - 2. 9 percent
 - 3. 11 percent
 - 4. 8 percent

Question ID : 5459276971

Q.2 A copper sphere of diameter 24 cm is drawn into a wire of diameter 8 mm. What is the length of the wire?

- Ans
- 1. 1600 cm

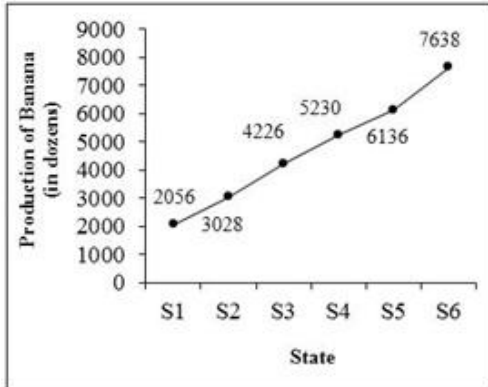
2. 1240 cm

3. 1400 cm

4. 1440 cm

Question ID : 5459276981

Q.3 The line graph given below shows the number of bananas (in dozens) produced in different states of a country.

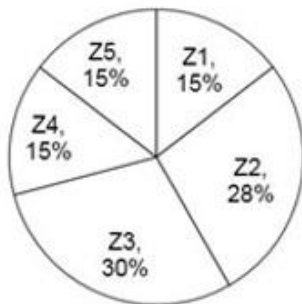


The production of bananas in S6 is how much percent more than S1?

- Ans
- 1. 312.62 percent
 - 2. 271.49 percent
 - 3. 248.44 percent
 - 4. 208.12 percent

Question ID : 5459276988

Q.4 The pie chart given below shows the number of tigers in different zoos. The number of tigers in a particular zoo are shown as a percentage of total number of tiger in all the zoos together.



What is the difference in central angle of the sectors for Z1 and Z3?

- Ans
- 1. 18°
 - 2. 72°
 - 3. 36°
 - 4. 54°

Question ID : 5459276984

Q.5 A sum of money becomes Rs 32490 in 2 years when kept at compound interest (compounding annually). If rate of interest is 14 percent per annum, then what is the sum of money?

- Ans
- 1. Rs 27000
 - 2. Rs 28000
 - 3. Rs 24000
 - 4. Rs 25000

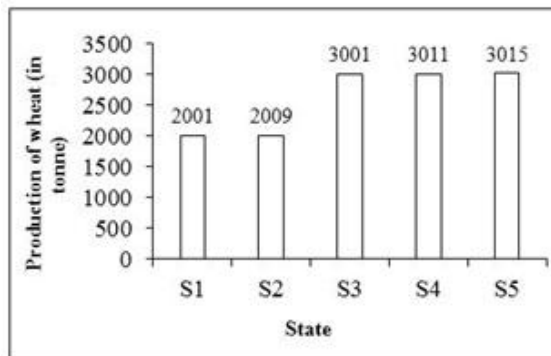
Question ID : 5459276972

Q.6 The length and breadth of a room is 16 metres and 12 metres respectively. If the total area of the four walls of the room is 784 metres², then what is the height of the room?

- Ans
- 1. 13 metre
 - 2. 14 metre
 - 3. 12 metre
 - 4. 16 metre

Question ID : 5459276980

Q.7 The bar graph given below shows the production of wheat (in tonnes) in different states.



The production of wheat in S2 is how much less than the average production of wheat (in tonnes) per state?

- Ans
- 1. 798.4 tonne
 - 2. 698.4 tonne
 - 3. 598.4 tonne
 - 4. 898.4 tonne

Question ID : 5459276987

Q.8 Raju and Shyam can complete a work in 20 days and 30 days respectively. They began the work, but Raju left the work after some days and Shyam completed the remaining work in 10 days. After How many days from the beginning Raju left the work?

- Ans
- 1. 8 days
 - 2. 10 days
 - 3. 9 days
 - 4. 7 days

Question ID : 5459276979

Q.9 Speed of a boat in upstream is 30 km/hr. If the speed of stream is 5 km/hr, then how much distance will it cover in 2 hours in downstream?

- Ans
- 1. 70 km

- 2. 60 km
- 3. 80 km
- 4. 82 km

Question ID : 5459276974

Q.10 The height of a solid cone is 40 cm and the radius of its base is 30 cm. What is the cost of painting the total surface area of the cone at the rate of Rs 7 per cm²?

- Ans**
- 1. Rs 48,800
 - 2. Rs 56,800
 - 3. Rs 62,800
 - 4. Rs 52,800

Question ID : 5459276982

Q.11 If $P : Q = 3 : 4$ and $Q : R = 5 : 3$, then what is the value of $4P : Q : 5R$?

- Ans**
- 1. 3 : 3 : 5
 - 2. 3 : 1 : 3
 - 3. 2 : 1 : 2
 - 4. 4 : 1 : 5

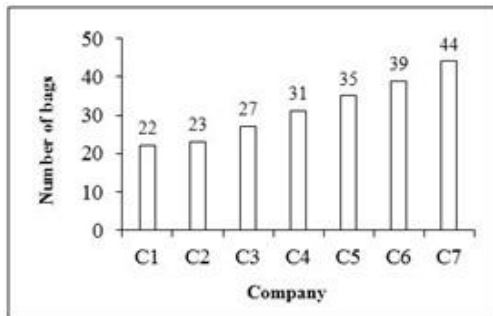
Question ID : 5459276969

Q.12 A train of length 600 meters passes another train of length 1000 meters in 96 seconds. If the speed of both the trains is same, then what is the speed of each train?

- Ans**
- 1. 21 km/hr
 - 2. 30 km/hr
 - 3. 18 km/hr
 - 4. 24 km/hr

Question ID : 5459276975

Q.13 The bar graph given below shows the number of bags of different companies in a shop.



What is the total number of bags in the shop?

- Ans**
- 1. 232
 - 2. 223
 - 3. 230
 - 4. 221

Question ID : 5459276986

Q.14 The table given below shows the number of shirts of different companies in a shop.

Company	Number of shirts
C1	27
C2	33
C3	26
C4	23
C5	43
C6	41

What is the ratio of number of shirts of company C1 to the total number of shirts of company C2 and C3?

- Ans
- 1. 27 : 61
 - 2. 61 : 27
 - 3. 59 : 27
 - 4. 27 : 59

Question ID : 5459276983

Q.15 The ratio of three numbers is 2 : 3 : 4. The sum of these numbers is 108. What is the largest number?

- Ans
- 1. 48
 - 2. 46
 - 3. 56
 - 4. 42

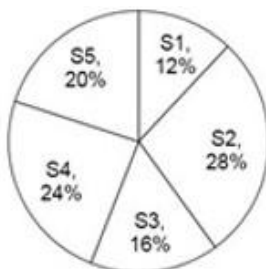
Question ID : 5459276970

Q.16 Two taps T1 and T2 can fill a tank in 2 hours and 3 hours respectively. If an outlet tap T3 is opened, then all three can together fill the tank in 6 hours. How much time will tap T3 take to empty the completely filled tank?

- Ans
- 1. 3 hours
 - 2. $3/2$ hours
 - 3. 4 hours
 - 4. 2 hours

Question ID : 5459276977

Q.17 The pie chart given below shows the number of female students in different subjects. The number of female students in a particular subject are shown as a percentage of total number of female students in all the subjects together.



If the total number of female students are 3600, then what is the difference in number of female students in subjects S1 and S4?

- Ans
- 1. 412
 - 2. 400
 - 3. 432
 - 4. 456

Question ID : 5459276985

Q.18 Compound interest on a certain sum of money for 2 years at a rate of 'r' percent per annum (compounding annually) is Rs. 8385. Simple interest on the same sum at the same rate for 2 years is Rs 7800. What is the value of r?

- Ans
- 1. 15 percent
 - 2. 12 percent
 - 3. 18 percent
 - 4. 16 percent

Question ID : 5459276973

Q.19 Vijay alone can do $\frac{3}{4}$ of a job in 12 days. Ajay is twice as efficient as Vijay. How many days will Ajay take to finish the same job alone?

- Ans
- 1. 12 days
 - 2. 16 days
 - 3. 6 days
 - 4. 8 days

Question ID : 5459276978

Q.20 A boat covers 20 km upstream and 60 km downstream in 5 hours. Boat covers 30 km upstream and 80 km downstream in 7 hours. What is the speed of boat in still water?

- Ans
- 1. 15 km/hr
 - 2. 20 km/hr
 - 3. 14 km/hr
 - 4. 12 km/hr

Question ID : 5459276976

Section : General English1

Q.1 Improve the bracketed part of the sentence.

We will start (on) 5 O' clock in the morning.

- Ans
- 1. to
 - 2. No Improvement
 - 3. by
 - 4. at

Question ID : 5459276998

Q.2 Find the part of the given sentence that has an error in it. If there is no error, choose 'No error'.

There is a (1) / great different between (2) / the two statements (3) / . No error (4)

- Ans
- 1. 1
 - 2. 2
 - 3. 3
 - 4. 4

Question ID : 5459276993

Q.3 A sentence has been given with a blank to be filled with an appropriate word. Choose the correct alternative.

His father arrived soon _____.

- Ans
- 1. before
 - 2. early
 - 3. after
 - 4. ago

Question ID : 5459277006

Q.4 A sentence has been given with a blank to be filled with an appropriate word. Choose the correct alternative.

He rules _____ a vast empire.

- Ans
- 1. on
 - 2. upon
 - 3. over
 - 4. at

Question ID : 5459277005

Q.5 A sentence has been given with a blank to be filled with an appropriate word. Choose the correct alternative.

You _____ improve your spellings.

- Ans
- 1. had
 - 2. have
 - 3. ought
 - 4. must

Question ID : 5459276999

Q.6 Improve the bracketed part of the sentence.

One of (my teachers) has received an award.

- Ans
- 1. teacher
 - 2. my teacher
 - 3. No Improvement
 - 4. the teacher

Question ID : 5459276994

Q.7 The question below consists of a set of labeled sentences. Out of the four options given, select the most logical order of the sentences to form a coherent paragraph.

P: to encourage the development of
Q: collage industries in the village
R: an exhibition was organized
S: by the district authorities

- Ans
- 1. RQSP
 - 2. PQRS
 - 3. RSPQ
 - 4. QRPS

Question ID : 5459277007

Q.8 Find the part of the given sentence that has an error in it. If there is no error, choose 'No error'.

His actions (1) / call for (2) an explanation (3) / . No error (4)

- Ans
- 1. 3
 - 2. 1
 - 3. 4
 - 4. 2

Question ID : 5459276989

Q.9 Improve the bracketed part of the sentence.

(A power failure) are common nowadays.

- Ans
- 1. No Improvement
 - 2. Power failures
 - 3. The power failure
 - 4. Power failure

Question ID : 5459276996

Q.10 A sentence has been given with a blank to be filled with an appropriate word. Choose the correct alternative.

He is good _____ for my purpose.

- Ans
- 1. fully
 - 2. enough
 - 3. partly
 - 4. any

Question ID : 5459277002

Q.11 Find the part of the given sentence that has an error in it. If there is no error, choose 'No error'.

A herd of grapes (1) / is kept (2) / on the table (3) / . No error (4)

- Ans
- 1. 3

2.4

3.1

4.2

Question ID : 5459276992

Q.12 A sentence has been given with a blank to be filled with an appropriate word. Choose the correct alternative.

One _____ to be careful

Ans 1. needs

2. need

3. might

4. can

Question ID : 5459277001

Q.13 Improve the bracketed part of the sentence.

In 1947, when the Declaration of Independence (signed), India became a new country.

Ans 1. was signed

2. sign

3. No Improvement

4. that signed

Question ID : 5459276995

Q.14 A sentence has been given with a blank to be filled with an appropriate word. Choose the correct alternative.

He sat _____ a stool.

Ans 1. above

2. in

3. at

4. on

Question ID : 5459277004

Q.15 Find the part of the given sentence that has an error in it. If there is no error, choose 'No error'.

She bring up (1) / the orphan (2) / as her own child (3) /. No error (4)

Ans 1.4

2.1

3.2

4.3

Question ID : 5459276990

Q.16 A sentence has been given with a blank to be filled with an appropriate word. Choose the correct alternative.

Prices _____ to come down soon.

- Ans
- 1. shall
 - 2. ought
 - 3. must
 - 4. might

Question ID : 5459277000

Q.17 Find the part of the given sentence that has an error in it. If there is no error, choose 'No error'.

They discussed (1) / the matter (2) / farther (3) / . No error (4)

- Ans
- 1. 1
 - 2. 3
 - 3. 4
 - 4. 2

Question ID : 5459276991

Q.18 The question below consists of a set of labeled sentences. Out of the four options given, select the most logical order of the sentences to form a coherent paragraph.

P: the achievements of
Q: peace are far more
R: lasting and renowned
S: than those of war

- Ans
- 1. SRQP
 - 2. PRQS
 - 3. PQRS
 - 4. QSRP

Question ID : 5459277008

Q.19 A sentence has been given with a blank to be filled with an appropriate word. Choose the correct alternative.

I _____ my knee yesterday.

- Ans
- 1. hurt
 - 2. hurts
 - 3. am hurt
 - 4. has hurt

Question ID : 5459277003

Q.20 Improve the bracketed part of the sentence.

His life is hanging (by) a thread.

- Ans
- 1. at
 - 2. to
 - 3. No Improvement
 - 4. with

Question ID : 5459276997

Section : General English2

Q.1 The question below consists of a set of labeled sentences. Out of the four options given, select the most logical order of the sentences to form a coherent paragraph.

P: future is always shrouded in a thick veil of mystery.
Q: yet if we closely understand and analyze the present,
R: man cannot know what is going to happen in future.
S: we can form some ideas as to what the future is going to be.

- Ans
- 1. QSRP
 - 2. RPQS
 - 3. PRQS
 - 4. PQRS

Question ID : 5459277009

Q.2 In the following question, out of the given four alternatives, select the alternative which best expresses the meaning of the Idiom/Phrase.

The ball is in your court

- Ans
- 1. Fearful
 - 2. Confess to the act
 - 3. The next action is from your side
 - 4. A bad person

Question ID : 5459277018

Q.3 In the given question, four words are given out of which one word is correctly spelt. Choose the correctly spelt word.

- Ans
- 1. Leisur
 - 2. Liesure
 - 3. Leisure
 - 4. Leissure

Question ID : 5459277016

Q.4 Choose the word that means the same as the given word.

Lavish

- Ans
- 1. Scarce
 - 2. Grand
 - 3. Less
 - 4. Scanty

Question ID : 5459277011

Q.5 Choose the word that can substitute the given sentence.

An annual calendar with positions of stars

- Ans
- 1. Scheduler
 - 2. Almanac
 - 3. Diary
 - 4. Planner

Question ID : 5459277021

Q.6 Choose the word that means the same as the given word.

Compliant

- Ans
- 1. Stubborn
 - 2. Wild
 - 3. Meek
 - 4. Untamable

Question ID : 5459277013

Q.7 In the given question, four words are given out of which one word is correctly spelt. Choose the correctly spelt word.

- Ans
- 1. Greteful
 - 2. Grateful
 - 3. Gretful
 - 4. Gratefull

Question ID : 5459277015

Q.8 In the following question, out of the given four alternatives, select the alternative which best expresses the meaning of the Idiom/Phrase.

To add fuel to the fire

- Ans
- 1. In disorder
 - 2. To be confuse
 - 3. Pure water
 - 4. To aggravate some matter

Question ID : 5459277019

Q.9 In the given question, four words are given out of which one word is correctly spelt. Choose the correctly spelt word.

- Ans
- 1. Heirarchy
 - 2. Hierarchy
 - 3. Hierarkey
 - 4. Hiererchy

Question ID : 5459277017

Q.10 Choose the word that can substitute the given sentence.

Soldiers who fight on horse back

- Ans
- 1. Captain

- 2. Pilot
- 3. Major
- 4. Cavalry

Question ID : 5459277022

Q.11 Choose the word that means the same as the given word.

Timid

- Ans
- 1. Intrepid
 - 2. Brave
 - 3. Bold
 - 4. Coward

Question ID : 5459277012

Q.12 Choose the word that means the same as the given word.

Humble

- Ans
- 1. Proud
 - 2. Sweet
 - 3. Bold
 - 4. Modest

Question ID : 5459277010

Q.13 In the following question, out of the given four alternatives, select the alternative which best expresses the meaning of the Idiom/Phrase.

Bag and baggage

- Ans
- 1. Very dear
 - 2. Intimate friend
 - 3. At one's command
 - 4. With full luggage

Question ID : 5459277020

Q.14 Choose the word that can substitute the given sentence.

A poem of lamentation

- Ans
- 1. Sonnet
 - 2. Hymn
 - 3. Epitaph
 - 4. Elegy

Question ID : 5459277023

Q.15 Choose the word that is opposite in meaning to the given word.

Elegant

- Ans
- 1. Uncouth

2. Shimmery

3. Gorgeous

4. Awkward

Question ID : 5459277014

Comprehension:

Read the following information carefully and answer the given questions.

The worldwide notice in power issues triggered off by the jagged increases in oil cost in 1973 and 1979 has since Waned. With the dramatic fall in oil prices in the late 1980, there is a euphoric emotion the world over that power is no longer a difficulty. Dynamic policy institute in the 1970 to include the development of energy command have been terminating in many countries. In common, the approach is one of trade as natural. India is no omission. There is no proof of approval at the rule level of the fact that for India the power future is probable to be bleak, and that ensuring sufficient energy accessibility to maintain even an unassuming rate of financial development will be the main test. Energy consumption is not an end in itself. Its importance lies in the fact that it is an essential overhead for economic development. Energy plays a dual role. It is an input towards the productive sectors of the economy, namely agricultural and industry and the supporting infrastructure of transport. It is also a consumer good, energy consumed in a household has a direct impact on the quality of life. It is not surprising therefore those studies of energy consumption patterns across countries and over periods of time clearly establish a correlation between per capita energy consumption and per capita income. Even within a country, the affluent sections of society consume larger amounts of energy per capita than the poorer sections. The extent of access to energy at affordable prices has distributive implications.

The equity aspect must Fundamental features of India's power circumstances are well recognized and do not need amplification. Per capita expenditure of power is low, about one-fourth of the world standard and about one-twenty-fifth that of the USA and imitate the gathering scarcity still ubiquitous in the country. Long established fuels like fuelwood, animal dung, and crop remains account, even row for as much as 35 percent to 40 percent of the total energy consumption in the country.

SubQuestion No : 16

Q.16 What does 'energy consumption has a direct impact on the quality of life' means?

- Ans
- 1. Quality of life can be improved by more energy consumption
 - 2. No option is correct
 - 3. Both quality of life can be improved by more energy consumption and poor people have to consume less energy due to high cost involved
 - 4. Poor people have to consume less energy due to high cost involved

Question ID : 5459277026

Comprehension:

Read the following information carefully and answer the given questions.

The worldwide notice in power issues triggered off by the jagged increases in oil cost in 1973 and 1979 has since Waned. With the dramatic fall in oil prices in the late 1980, there is a euphoric emotion the world over that power is no longer a difficulty. Dynamic policy institute in the 1970 to include the development of energy command have been terminating in many countries. In common, the approach is one of trade as natural. India is no omission. There is no proof of approval at the rule level of the fact that for India the power future is probable to be bleak, and that ensuring sufficient energy accessibility to maintain even an unassuming rate of financial development will be the main test. Energy consumption is not an end in itself. Its importance lies in the fact that it is an essential overhead for economic development. Energy plays a dual role. It is an input towards the productive sectors of the economy, namely agricultural and industry and the supporting infrastructure of transport. It is also a consumer good, energy consumed in a household has a direct impact on the quality of life. It is not surprising therefore those studies of energy consumption patterns across countries and over periods of time clearly establish a correlation between per capita energy consumption and per capita income. Even within a country, the affluent sections of society consume larger amounts of energy per capita than the poorer sections. The extent of access to energy at affordable prices has distributive implications.

The equity aspect must Fundamental features of India's power circumstances are well recognized and do not need amplification. Per capita expenditure of power is low, about one-fourth of the world standard and about one-twenty-fifth that of the USA and imitate the

gathering scarcity still ubiquitous in the country. Long established fuels like fuelwood, animal dung, and crop remains account, even row for as much as 35 percent to 40 percent of the total energy consumption in the country.

SubQuestion No : 17

Q.17 In which pair of aspects does energy play a dual role?

- Ans
- 1. Political, economic and social development
 - 2. Agricultural and industrial production
 - 3. Agricultural, industrial production, transport and consumers goods
 - 4. Industrial and household consumption

Question ID : 5459277029

Comprehension:

Read the following information carefully and answer the given questions.

The worldwide notice in power issues triggered off by the jagged increases in oil cost in 1973 and 1979 has since Waned. With the dramatic fall in oil prices in the late 1980, there is a euphoric emotion the world over that power is no longer a difficulty. Dynamic policy institute in the 1970 to include the development of energy command have been terminating in many countries. In common, the approach is one of trade as natural. India is no omission. There is no proof of approval at the rule level of the fact that for India the power future is probable to be bleak, and that ensuring sufficient energy accessibility to maintain even an unassuming rate of financial development will be the main test. Energy consumption is not an end in itself. Its importance lies in the fact that it is an essential overhead for economic development. Energy plays a dual role. It is an input towards the productive sectors of the economy, namely agricultural and industry and the supporting infrastructure of transport. It is also a consumer good, energy consumed in a household has a direct impact on the quality of life. It is not surprising therefore those studies of energy consumption patterns across countries and over periods of time clearly establish a correlation between per capita energy consumption and per capita income. Even within a country, the affluent sections of society consume larger amounts of energy per capita than the poorer sections. The extent of access to energy at affordable prices has distributive implications.

The equity aspect must Fundamental features of India's power circumstances are well recognized and do not need amplification. Per capita expenditure of power is low, about one-fourth of the world standard and about one-twenty-fifth that of the USA and imitate the gathering scarcity still ubiquitous in the country. Long established fuels like fuelwood, animal dung, and crop remains account, even row for as much as 35 percent to 40 percent of the total energy consumption in the country.

SubQuestion No : 18

Q.18 Which of the following is opposite in meaning to affluent?

- Ans
- 1. Loaded
 - 2. Moneyed
 - 3. Failing
 - 4. Opulent

Question ID : 5459277025

Comprehension:

Read the following information carefully and answer the given questions.

The worldwide notice in power issues triggered off by the jagged increases in oil cost in 1973 and 1979 has since Waned. With the dramatic fall in oil prices in the late 1980, there is a euphoric emotion the world over that power is no longer a difficulty. Dynamic policy institute in the 1970 to include the development of energy command have been terminating in many countries. In common, the approach is one of trade as natural. India is no omission. There is no proof of approval at the rule level of the fact that for India the power future is probable to be bleak, and that ensuring sufficient energy accessibility to maintain even an unassuming rate of financial development will be the main test. Energy consumption is not an end in itself. Its importance lies in the fact that it is an essential overhead for economic development. Energy plays a dual role. It is an input towards the productive sectors of the economy, namely agricultural and industry and the supporting infrastructure of transport. It is also a consumer good, energy consumed in a household has a direct impact on the quality of life. It is not surprising therefore those studies of energy consumption patterns across countries and over

periods of time clearly establish a correlation between per capita energy consumption and per capita income. Even within a country, the affluent sections of society consume larger amounts of energy per capita than the poorer sections. The extent of access to energy at affordable prices has distributive implications.

The equity aspect must Fundamental features of India's power circumstances are well recognized and do not need amplification. Per capita expenditure of power is low, about one-fourth of the world standard and about one-twenty-fifth that of the USA and imitate the gathering scarcity still ubiquitous in the country. Long established fuels like fuelwood, animal dung, and crop remains account, even row for as much as 35 percent to 40 percent of the total energy consumption in the country.

SubQuestion No : 19

Q.19 The energy policy makers, should take due attention of the fact that:

- Ans
- 1. Access to energy and availability, therefore are in proportion to financial status
 - 2. India's energy situation is sound and there will be no shortage in the next future
 - 3. The energy requirement of the rich in India is does not differ from that of the poor
 - 4. India's energy requirement is far less than that of the Americans

Question ID : 5459277027

Comprehension:

Read the following information carefully and answer the given questions.

The worldwide notice in power issues triggered off by the jagged increases in oil cost in 1973 and 1979 has since Waned. With the dramatic fall in oil prices in the late 1980, there is a euphoric emotion the world over that power is no longer a difficulty. Dynamic policy institute in the 1970 to include the development of energy command have been terminating in many countries. In common, the approach is one of trade as natural. India is no omission. There is no proof of approval at the rule level of the fact that for India the power future is probable to be bleak, and that ensuring sufficient energy accessibility to maintain even an unassuming rate of financial development will be the main test. Energy consumption is not an end in itself. Its importance lies in the fact that it is an essential overhead for economic development. Energy plays a dual role. It is an input towards the productive sectors of the economy, namely agricultural and industry and the supporting infrastructure of transport. It is also a consumer good, energy consumed in a household has a direct impact on the quality of life. It is not surprising therefore those studies of energy consumption patterns across countries and over periods of time clearly establish a correlation between per capita energy consumption and per capita income. Even within a country, the affluent sections of society consume larger amounts of energy per capita than the poorer sections. The extent of access to energy at affordable prices has distributive implications.

The equity aspect must Fundamental features of India's power circumstances are well recognized and do not need amplification. Per capita expenditure of power is low, about one-fourth of the world standard and about one-twenty-fifth that of the USA and imitate the gathering scarcity still ubiquitous in the country. Long established fuels like fuelwood, animal dung, and crop remains account, even row for as much as 35 percent to 40 percent of the total energy consumption in the country.

SubQuestion No : 20

Q.20 The author is of the view that the policy makers in India

- Ans
- 1. No option is correct
 - 2. Are showing challenge of energy shortage probable challenge of energy shortage
 - 3. Are duly aware of the probable energy crises in near future
 - 4. Both a and b

Question ID : 5459277028

Section : General Hindi1

Q.1 दिए गए वाक्य में रिक्त स्थान की पूर्ति कीजिए।

यात्री पेड़ के _____ सो रहा है।

Ans

- 1. नीचे
- 2. तुलना में
- 3. बीच में
- 4. अतिरिक्त

Question ID : 5459277041

Q.2 निम्नलिखित शब्दों में से कौन सा बहुवचन का रूप नहीं है?

- Ans
- 1. कलियाँ
 - 2. डिबियाँ
 - 3. बुढ़ियाँ
 - 4. चुहिया

Question ID : 5459277048

Q.3 दिए गए शब्द का विलोम शब्द ज्ञात कीजिए।

रुग्ण

- Ans
- 1. नमन
 - 2. नाराज
 - 3. स्वस्थ
 - 4. खुश

Question ID : 5459277039

Q.4 दिए गए शब्द युग्म का अर्थ ज्ञात कीजिए।

अंब - अंबु

- Ans
- 1. देवी - फल
 - 2. माता - जल
 - 3. अम्बा - देवी
 - 4. जल - माता

Question ID : 5459277035

Q.5 दिए गए वाक्य के लिए सही वाक्य का चयन कीजिए।

गाय का दूध ताकत होता है।

- Ans
- 1. गाय का दूध ताकत से होता है।
 - 2. गाय का दूध ताकतवर होता है।
 - 3. गाय का दूध से ताकती होते हैं।
 - 4. गाय का दूध ताकत से निकलता है।

Question ID : 5459277045

Q.6 दिए गए शब्द का पर्यायवाची ज्ञात कीजिए।

पड़ित

- Ans
- 1. विलक्षण

- 2. क्षण प्रभा
- 3. आलय
- 4. विसिख

Question ID : 5459277042

Q.7 दिए गए वाक्यांश के लिए उचित शब्द का चयन कीजिए।

जिसके पास कुछ न हो।

- Ans
- 1. अपास
 - 2. अकुछ
 - 3. अकिंचन
 - 4. निकुछ

Question ID : 5459277036

Q.8 दिए गए शब्द में प्रत्यय ज्ञात कीजिए।

उठंती

- Ans
- 1. ठती
 - 2. उ
 - 3. न्ती
 - 4. ती

Question ID : 5459277030

Q.9 निम्नलिखित में से कौन सा शब्द युग्म स्त्रीलिंग - पुल्लिंग का नहीं है?

- Ans
- 1. रानी - राजा
 - 2. लड़की - लड़का
 - 3. पण्डितानी - पण्डित
 - 4. घोड़ी - अश्विनी

Question ID : 5459277047

Q.10 दिए गए वाक्यांश के लिए उचित शब्द का चयन कीजिए।

अपनी विवाहित स्त्री

- Ans
- 1. स्त्री
 - 2. अबला
 - 3. पत्नी
 - 4. महिला

Question ID : 5459277044

Q.11 दिए गए शब्दों का पर्यायवाची ज्ञात कीजिए।

सुस्त, ढीला तथा धीमा

- Ans
- 1. शीथिल
 - 2. शिथिल

- 3. शीथील
- 4. पीथिल

Question ID : 5459277038

Q.12 निम्नलिखित शब्दों में से वर्तनी की दृष्टि से कौन सा शब्द शुद्ध है?

- Ans
- 1. आतार
 - 2. कारवाही
 - 3. कुटम्ब
 - 4. इतिहास

Question ID : 5459277043

Q.13 दिए गए शब्द की उत्तमावस्था ज्ञात कीजिए।

महान

- Ans
- 1. महानत्व
 - 2. महानत्तर
 - 3. महानता
 - 4. महत्तम

Question ID : 5459277032

Q.14 दिए गए वाक्य का काल ज्ञात कीजिए।

प्रशांत खेल रहा है।

- Ans
- 1. अपूर्ण वर्तमान काल
 - 2. संभाव्य वर्तमान काल
 - 3. सामान्य वर्तमान काल
 - 4. संदिग्ध वर्तमान काल

Question ID : 5459277046

Q.15 निम्नलिखित में से किसी सभा का प्रधान क्या कहलाता है?

- Ans
- 1. सभापति
 - 2. सभाप्रधान
 - 3. सभाप्रद
 - 4. सभाराजा

Question ID : 5459277037

Q.16 दिए गए शब्दों में से शुद्ध वर्तनी का चयन कीजिए।

- Ans
- 1. पयोनिधि
 - 2. पयोनीधि
 - 3. पएनिधि
 - 4. पयनिधि

Question ID : 5459277040

Q.17 दिए गए वाक्य में रेखांकित भाग किस प्रकार का क्रिया विशेषण है ज्ञात कीजिए।

दादी कल उपहार लाएँगी।

- Ans
- 1. स्थानवाचक
 - 2. परिमाणवाचक
 - 3. रीतिवाचक
 - 4. कालवाचक

Question ID : 5459277034

Q.18 दिए गए शब्द का संधि विच्छेद कीजिए।

अन्वेषण

- Ans
- 1. अनु + एषण
 - 2. अनु + वेषण
 - 3. अन + वएषण
 - 4. अन + वेषण

Question ID : 5459277031

Q.19 दिए गए वाक्य में रेखांकित भाग किस प्रकार कारक की विभक्ति है ज्ञात कीजिए।

छत पर बंदर बैठा है।

- Ans
- 1. संबंध
 - 2. करण
 - 3. अधिकरण
 - 4. संबोधन

Question ID : 5459277049

Q.20 दिए गए वाक्य में उचित संज्ञा का उपयोग करके रिक्त स्थान की पूर्ति कीजिए।

कभी - कभी लोग क्रोध में अपना _____ खो बैठते थे।

- Ans
- 1. पागलपन
 - 2. आपा
 - 3. दिमाग
 - 4. अपनापन

Question ID : 5459277033

Section : General Hindi2

Q.1 दिए गए वाक्य में पक्ष के रूप की पहचान कीजिए।

मैं खाना खाता हूँ।

- Ans
- 1. सातत्यबोधक पक्ष
 - 2. अपूर्ण पक्ष

3. नित्य पक्ष

4. पूर्ण पक्ष

Question ID : 5459277052

Q.2 'वह देखने में मूर्ख लगता है लेकिन है नहीं' में कौन सा विराम चिह्न है?

Ans 1. ;, !

2. ;, |

3. ,, !

4. ;, ?

Question ID : 5459277064

Q.3 निम्नलिखित प्रश्न में, दिए गए चार विकल्पों में से, उस विकल्प का चयन करें जो दिए गए मुहावरे के अर्थ को सर्वश्रेष्ठ रूप से व्यक्त करता है।

अक्षर से भेंट न होना।

Ans 1. किसी का भी बंधन न होना।

2. अनपढ़ होना।

3. बेमेल चीजों का सम्मिश्रण होना।

4. झूठ - मूठ का सत्कार करना।

Question ID : 5459277059

Q.4 दिए गए वाक्य का शुद्ध रूप ज्ञात कीजिए।

रानी लक्ष्मीबाई एक महान वीर थी।

Ans 1. रानी लक्ष्मीबाई एक वीर थी।

2. रानी लक्ष्मीबाई वीर थी।

3. रानी लक्ष्मीबाई एक महान वीरांगना थी।

4. रानी लक्ष्मीबाई एक महान थी।

Question ID : 5459277055

Q.5 निम्नलिखित प्रश्न में, दिए गए चार विकल्पों में से, उस विकल्प का चयन करें जो दिए गए मुहावरे के अर्थ को सर्वश्रेष्ठ रूप से व्यक्त करता है।

वश में करना।

Ans 1. आँखों से अंगारे उगलना

2. आँखे चार करना

3. उँगली पर नचाना

4. आँखों का काटा

Question ID : 5459277061

Q.6 निम्नलिखित प्रश्न में, दिए गए चार विकल्पों में से, उस विकल्प का चयन करें जो दिए गए मुहावरे के अर्थ को सर्वश्रेष्ठ रूप से व्यक्त करता है।

ठेस लगे बुद्धि बढ़े।

Ans 1. बिना बात मुसीबत मोल लेना।

- 2. अधिक लालच करने से हानि ही होती है।
- 3. बिना बात का झगड़ा करना।
- 4. हानि सहकर मनुष्य बुद्धिमान होता है।

Question ID : 5459277058

Q.7 निम्नलिखित प्रश्न में, दिए गए चार विकल्पों में से, उस विकल्प का चयन करें जो दिए गए मुहावरे के अर्थ को सर्वश्रेष्ठ रूप से व्यक्त करता है।

अंधे के आगे रोये, अपनी आँखें खोये।

- Ans
- 1. बदनाम करना।
 - 2. हर हालात में एक जैसा ही रहना।
 - 3. अनहोनी बात।
 - 4. मूर्ख को ज्ञान देना बेकार है।

Question ID : 5459277057

Q.8 दिए गए विराम चिह्न के रूप की पहचान कीजिए।

(.)

- Ans
- 1. पूर्णविराम
 - 2. प्रश्नवाचक
 - 3. अल्पविराम
 - 4. अर्द्धविराम

Question ID : 5459277063

Q.9 दिए गए वाक्य में वृत्ति के रूप की पहचान कीजिए।

संभवतः कल बाढ़ आ सकती है।

- Ans
- 1. संभावार्थक
 - 2. संदेहार्थक
 - 3. निश्चयार्थक
 - 4. आज्ञार्थक

Question ID : 5459277050

Q.10 दिए गए वाक्य के लिए सही लोकोक्ति का चयन कीजिए।

गुण कम, दिखावा अधिक।

- Ans
- 1. आज का बनिया कल का सेठ।
 - 2. आगे नाथ न पीछे पगहा।
 - 3. थो था चना बाजे घना।
 - 4. आग खाएगा तो अंगारे उगलेगा।

Question ID : 5459277060

Q.11 दिए गए वाक्य में रेखांकित भाग किस प्रकार का पुरुष है ज्ञात कीजिए।

मोहन बहुत खाना खाता है।

- Ans
- 1. मध्यम
 - 2. उत्तम
 - 3. प्रथम
 - 4. अन्य

Question ID : 5459277053

Q.12 दिए गए वाक्य के रूप की पहचान कीजिए।

शिक्षक ने कहा कि सभी को गृहकार्य स्वयं करना है।

- Ans
- 1. निषेधार्थक
 - 2. संयुक्त
 - 3. सरल
 - 4. मिश्र

Question ID : 5459277054

Q.13 दिए गए वाच्य के रूप की पहचान कीजिए।

पक्षी आकाश में उड़ रहे हैं।

- Ans
- 1. द्रव्यवाच्य
 - 2. भाववाच्य
 - 3. कर्तृवाच्य
 - 4. कर्मवाच्य

Question ID : 5459277051

Q.14 निम्नलिखित में से कौन वाक्य संयुक्त वाक्य है?

- Ans
- 1. कुत्ता भौंक रहा है।
 - 2. सूर्य चमक रहा है।
 - 3. वह बैठा था परंतु मैं जा रहा था।
 - 4. हमारे घर से निकलते ही वर्षा होगी।

Question ID : 5459277056

Q.15 समास से बने शब्दों के बीच किस विराम चिह्न का प्रयोग किया जाता है?

- Ans
- 1. संयोजक
 - 2. निर्देशक
 - 3. लाघव
 - 4. कोष्ठक

Question ID : 5459277062

Comprehension:

एक गद्यांश दिया गया है। गद्यांश के आधार पर पाँच प्रश्न दिए गए हैं। गद्यांश को ध्यानपूर्वक पढ़ें तथा प्रत्येक प्रश्न में चार विकल्पों में से सही विकल्प चुनें।

हरिद्वार प्रसिद्ध तीर्थ-स्थान है। गंगा के कारण इसका महत्व है। यह प्राचीन और ऐतिहासिक नगर है। यहाँ पर हर की पौड़ी पर गंगा का स्नान करने का महत्व है। ऐसा माना जाता है कि यहां स्नान करने से व्यक्तियों को पापों से मुक्ति मिल जाती है।

हर की पौड़ी पर सदा भीड़ रहती है। दुनिया के कोने-कोने से यात्री यहां गंगा के दर्शन करने और स्नान करने आते हैं और मन्त्रत मांगते हैं। प्रातः 4:00 बजे ही लोग गंगा स्नान करने पहुंच जाते हैं। गंगा को मां मानकर 'गंगा मैया की जय' का उद्घोष करते हैं। लोग हर की पौड़ी पर बने मंदिरों में जाते हैं। किनारे पर बने बाजार में जाकर प्रसाद, माला आदी खरीदते हैं। शाम को गंगा की आरती का भव्य दृश्य देखकर मन भक्ति भाव से ओतप्रोत हो जाता है। आरती के समय लोग गंगा किनारे खड़े हो जाते हैं। चारों ओर शंख और घंटियों की आवाजों के बीच गंगा की स्तुति की जाती है। प्रत्येक व्यक्ति को एक बार हर की पौड़ी पर जाकर गंगा स्नान अवश्य करना चाहिए और शाम की आरती में शामिल होना चाहिए।

SubQuestion No : 16

Q.16 भक्ति भाव से ओतप्रोत हो जाना का क्या अर्थ है?

- Ans
- 1. पेट भर कर खाना
 - 2. शक्ति में भक्ति का होना
 - 3. भक्ति भाव से भर जाना
 - 4. भक्ति में रोना

Question ID : 5459277069

Comprehension:

एक गद्यांश दिया गया है। गद्यांश के आधार पर पाँच प्रश्न दिए गए हैं। गद्यांश को ध्यानपूर्वक पढ़ें तथा प्रत्येक प्रश्न में चार विकल्पों में से सही विकल्प चुने।

हरिद्वार प्रसिद्ध तीर्थ-स्थान है। गंगा के कारण इसका महत्व है। यह प्राचीन और ऐतिहासिक नगर है। यहाँ पर हर की पौड़ी पर गंगा का स्नान करने का महत्व है। ऐसा माना जाता है कि यहां स्नान करने से व्यक्तियों को पापों से मुक्ति मिल जाती है। हर की पौड़ी पर सदा भीड़ रहती है। दुनिया के कोने-कोने से यात्री यहां गंगा के दर्शन करने और स्नान करने आते हैं और मन्त्रत मांगते हैं। प्रातः 4:00 बजे ही लोग गंगा स्नान करने पहुंच जाते हैं। गंगा को मां मानकर 'गंगा मैया की जय' का उद्घोष करते हैं। लोग हर की पौड़ी पर बने मंदिरों में जाते हैं। किनारे पर बने बाजार में जाकर प्रसाद, माला आदी खरीदते हैं। शाम को गंगा की आरती का भव्य दृश्य देखकर मन भक्ति भाव से ओतप्रोत हो जाता है। आरती के समय लोग गंगा किनारे खड़े हो जाते हैं। चारों ओर शंख और घंटियों की आवाजों के बीच गंगा की स्तुति की जाती है। प्रत्येक व्यक्ति को एक बार हर की पौड़ी पर जाकर गंगा स्नान अवश्य करना चाहिए और शाम की आरती में शामिल होना चाहिए।

SubQuestion No : 17

Q.17 उपर्युक्त गद्यांश का शीर्षक क्या है?

- Ans
- 1. तीर्थ - स्थान मोक्ष द्वार
 - 2. तीर्थ स्थान हरिद्वार
 - 3. हर की पौड़ी - तीर्थ स्थान
 - 4. तीर्थ - स्थान गंगा तट

Question ID : 5459277068

Comprehension:

एक गद्यांश दिया गया है। गद्यांश के आधार पर पाँच प्रश्न दिए गए हैं। गद्यांश को ध्यानपूर्वक पढ़ें तथा प्रत्येक प्रश्न में चार विकल्पों में से सही विकल्प चुने।

हरिद्वार प्रसिद्ध तीर्थ-स्थान है। गंगा के कारण इसका महत्व है। यह प्राचीन और ऐतिहासिक नगर है। यहाँ पर हर की पौड़ी पर गंगा का स्नान करने का महत्व है। ऐसा माना जाता है कि यहां स्नान करने से व्यक्तियों को पापों से मुक्ति मिल जाती है। हर की पौड़ी पर सदा भीड़ रहती है। दुनिया के कोने-कोने से यात्री यहां गंगा के दर्शन करने और स्नान करने आते हैं और मन्त्रत मांगते हैं। प्रातः 4:00 बजे ही लोग गंगा स्नान करने पहुंच जाते हैं। गंगा को मां मानकर 'गंगा मैया की जय' का उद्घोष करते हैं। लोग हर की पौड़ी पर बने मंदिरों में जाते हैं। किनारे पर बने बाजार में जाकर प्रसाद, माला आदी खरीदते हैं। शाम को गंगा की आरती का भव्य दृश्य देखकर मन भक्ति भाव से ओतप्रोत हो जाता है। आरती के समय लोग गंगा किनारे खड़े हो जाते हैं। चारों ओर शंख और घंटियों की आवाजों के बीच गंगा की स्तुति की जाती है। प्रत्येक व्यक्ति को एक बार हर की पौड़ी पर जाकर गंगा स्नान अवश्य करना चाहिए और शाम की आरती में शामिल होना चाहिए।

SubQuestion No : 18

Q.18 गंगा में स्नान करने वालों को क्या मिलती है?

- Ans
- 1. मेल से मुक्ति
 - 2. पुण्य से मुक्ति
 - 3. जीवन से मुक्ति
 - 4. पापों से मुक्ति

Comprehension:

एक गद्यांश दिया गया है। गद्यांश के आधार पर पाँच प्रश्न दिए गए हैं। गद्यांश को ध्यानपूर्वक पढ़ें तथा प्रत्येक प्रश्न में चार विकल्पों में से सही विकल्प चुने।

हरिद्वार प्रसिद्ध तीर्थ-स्थान है। गंगा के कारण इसका महत्व है। यह प्राचीन और ऐतिहासिक नगर है। यहाँ पर हर की पौड़ी पर गंगा का स्नान करने का महत्व है। ऐसा माना जाता है कि यहां स्नान करने से व्यक्तियों को पापों से मुक्ति मिल जाती है। हर की पौड़ी पर सदा भीड़ रहती है। दुनिया के कोने-कोने से यात्री यहां गंगा के दर्शन करने और स्नान करने आते हैं और मन्त्रत मांगते हैं। प्रातः 4:00 बजे ही लोग गंगा स्नान करने पहुंच जाते हैं। गंगा को मां मानकर 'गंगा मैया की जय' का उद्घोष करते हैं। लोग हर की पौड़ी पर बने मंदिरों में जाते हैं। किनारे पर बने बाजार में जाकर प्रसाद, माला आदी खरीदते हैं। शाम को गंगा की आरती का भव्य दृश्य देखकर मन भक्ति भाव से ओतप्रोत हो जाता है। आरती के समय लोग गंगा किनारे खड़े हो जाते हैं। चारों ओर शंख और घंटियों की आवाजों के बीच गंगा की स्तुति की जाती है। प्रत्येक व्यक्ति को एक बार हर की पौड़ी पर जाकर गंगा स्नान अवश्य करना चाहिए और शाम की आरती में शामिल होना चाहिए।

SubQuestion No : 19

Q.19 प्रत्येक व्यक्ति को एक बार जरूर क्या करना चाहिए?

- Ans
- 1. गंगा किनारे खड़ा होना चाहिए।
 - 2. एक बार गंगा स्नान करना चाहिए।
 - 3. बाजार से माला खरीदनी चाहिए।
 - 4. आरती में शामिल होना चाहिए।

Comprehension:

एक गद्यांश दिया गया है। गद्यांश के आधार पर पाँच प्रश्न दिए गए हैं। गद्यांश को ध्यानपूर्वक पढ़ें तथा प्रत्येक प्रश्न में चार विकल्पों में से सही विकल्प चुने।

हरिद्वार प्रसिद्ध तीर्थ-स्थान है। गंगा के कारण इसका महत्व है। यह प्राचीन और ऐतिहासिक नगर है। यहाँ पर हर की पौड़ी पर गंगा का स्नान करने का महत्व है। ऐसा माना जाता है कि यहां स्नान करने से व्यक्तियों को पापों से मुक्ति मिल जाती है। हर की पौड़ी पर सदा भीड़ रहती है। दुनिया के कोने-कोने से यात्री यहां गंगा के दर्शन करने और स्नान करने आते हैं और मन्त्रत मांगते हैं। प्रातः 4:00 बजे ही लोग गंगा स्नान करने पहुंच जाते हैं। गंगा को मां मानकर 'गंगा मैया की जय' का उद्घोष करते हैं। लोग हर की पौड़ी पर बने मंदिरों में जाते हैं। किनारे पर बने बाजार में जाकर प्रसाद, माला आदी खरीदते हैं। शाम को गंगा की आरती का भव्य दृश्य देखकर मन भक्ति भाव से ओतप्रोत हो जाता है। आरती के समय लोग गंगा किनारे खड़े हो जाते हैं। चारों ओर शंख और घंटियों की आवाजों के बीच गंगा की स्तुति की जाती है। प्रत्येक व्यक्ति को एक बार हर की पौड़ी पर जाकर गंगा स्नान अवश्य करना चाहिए और शाम की आरती में शामिल होना चाहिए।

SubQuestion No : 20

Q.20 प्रसिद्ध तीर्थ स्थान कौन सा है?

- Ans
- 1. मुंबई
 - 2. शिमला
 - 3. कलकत्ता
 - 4. हरिद्वार