

Constable (GD) in CAPFs, NIA, SSF and Rifleman (GD) in Assam Rifles Examination, 2018

| | |
|------------------|--------------------|
| Roll No. : | |
| Registration No. | |
| Name : | |
| Exam Venue : | |
| Exam Time : | 9:00 AM - 10:30 AM |
| Exam Date : | 01/03/2019 |

Section : General Section

Q.1 Select the option that is related to the third number in the same way as the second number is related to the first number.

9 : 100 :: 13 : _____

- Ans** ☒ 1. 196
☒ 2. 130
☒ 3. 169
☒ 4. 144

Question ID : 9895808154
Chosen Option : 1

Q.2 If D = 3, G = 6, and FUN = 38, then PRESIDENT = _____.

- Ans** ☒ 1. 100
☒ 2. 110
☒ 3. 119
☒ 4. 101

Question ID : 9895808145
Chosen Option : 4

Q.3 Select the number-pair that is different from the rest.

- Ans** ☒ 1. 7 – 345
☒ 2. 5 – 125
☒ 3. 3 – 27
☒ 4. 9 – 729

Question ID : 9895808155
Chosen Option : 1

Q.4 U, V, W, X, Y and Z are seated in a circle facing the centre such that each one is facing another one. X is between Z and V. U is second to the left of X and second to the right of Y. Who is facing X?

- Ans** ☒ 1. Y
☒ 2. Z
☒ 3. W
☒ 4. U

Question ID : 9895808147
Chosen Option : 3

Q.5 Diya have five subjects in her academics namely A, B, C, D and E. She studies them from Monday to Friday of a week. On each day, only one subject will be studied. D or E should not be either the first or last to be studied. E should be immediately followed by C. B should be studied immediately after D. One subject will be studied between A and B.

Then which subject she immediately reads after Monday?

- Ans**
- ☒ 1. A
 - ☒ 2. D
 - ☒ 3. E
 - ☒ 4. B

Question ID : **9895808149**
Chosen Option : **4**

Q.6 Select the option that is related to the third term in the same way as the second term is related to the first term.

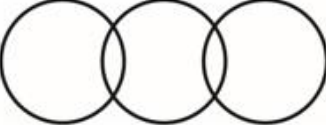

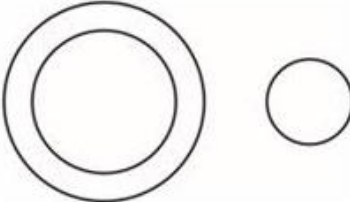

Where : Place :: When : _____

- Ans**
- ☒ 1. Time
 - ☒ 2. Then
 - ☒ 3. There
 - ☒ 4. Why

Question ID : **9895808144**
Chosen Option : **1**

Q.7 Select the Venn diagram that best illustrates the relationship between the three given classes.

Flowers, Red, Clothes

- Ans**
- ☒ 1. 
 - ☒ 2. 
 - ☒ 3. 
 - ☒ 4. 

Question ID : **9895808163**
Chosen Option : **1**

Q.8

The statements below are followed by three conclusions labeled I, II and III. Assuming that the information in the statements is true, even if it appears to be at variance with generally established facts, decide which conclusion(s) logically and definitely follow(s) from the information given in the statements.

Statements:

All balls are boats.

All boats are cars.

Conclusions:

- I. Some cars are balls.
- II. All balls are cars.
- III. All cars are balls.

- Ans
- ☒ 1. Only conclusion III follows.
 - ☒ 2. All the conclusions follow.
 - ☒ 3. Only conclusions I and II follow.
 - ☒ 4. Only conclusions II and III follow.

Question ID : 9895808150
Chosen Option : 3

Q.9 Four pairs of words have been given, out of which three are alike in some manner, while one is different. Choose out the odd one.

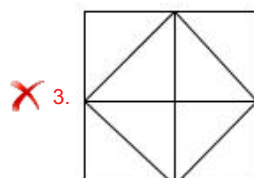
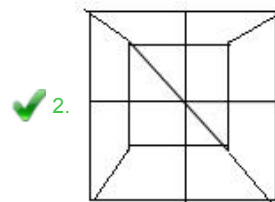
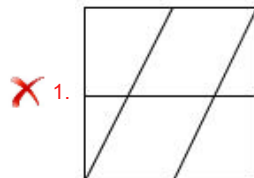
- Ans
- ☒ 1. Cock : Hen
 - ☒ 2. Brother : Sister
 - ☒ 3. Bear : Cub
 - ☒ 4. Lion : Lioness

Question ID : 9895808142
Chosen Option : 3

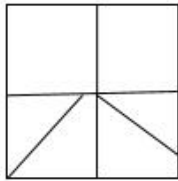
Q.1 Select the option in which the given figure is embedded.



Ans



X 4.



Question ID : 9895808159
Chosen Option : 2

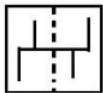
Q.1 Select the number that DOES NOT belong to the following group.

3, 6, 9, 12, 15, 18, 21, 24, 28, 30

- Ans
- X 1. 30
 - ✓ 2. 28
 - X 3. 18
 - X 4. 15

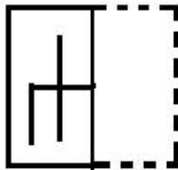
Question ID : 9895808153
Chosen Option : 2

Q.1 A square transparent sheet with a pattern is given. Select from among the four alternatives how the pattern would appear when the transparent sheet is folded at the dotted line.

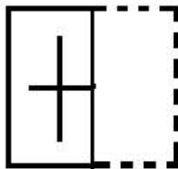


Ans

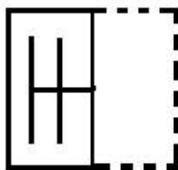
X 1.



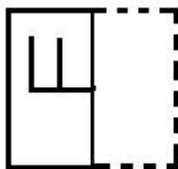
X 2.



✓ 3.



X 4.



Question ID : 9895808162
Chosen Option : 1

Q.1 If SQUARE is coded as TSXEWK, then TRIANGLE will be coded as _____.

- Ans
- X 1. UTLESMSN
 - X 2. UTLFSMSM
 - ✓ 3. UTLESMSM

✗ 4. UTLESNSM

Question ID : 9895808146
Chosen Option : 3

Q.1 Identify the odd one from the following.

- Ans ✓ 1. CFG
✗ 2. PRT
✗ 3. VXZ
✗ 4. HJL

Question ID : 9895808140
Chosen Option : 1

Q.1 In the following number series, two numbers have been put within brackets. Study the series carefully and select the correct alternative with respect to the series.

1, 1, 2, 6, 24, (121), 720, (5040), 40320

Ans ✗ 1. Both the bracketed numbers are correct.

✓ 2.

The first bracketed number (from the left) is incorrect and the second is correct.

✗ 3.

The first bracketed number (from the left) is correct and the second is incorrect.

✗ 4. Both the bracketed numbers are incorrect.

Question ID : 9895808157
Chosen Option : 2

Q.1 Read the given statements and conclusion carefully and decide which of the following options is true with respect to the given conclusion.

Statements:

The Gateway of India is in Mumbai.

Mumbai is in India.

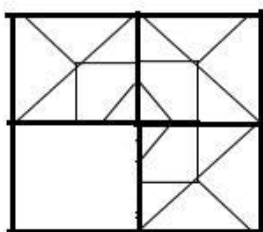
Conclusion:

The Gateway of India is in India.

- Ans ✓ 1. True
✗ 2. Probably false
✗ 3. Probably true
✗ 4. False

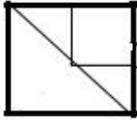
Question ID : 9895808151
Chosen Option : 1

Q.1 Select the correct option to complete the following pattern.

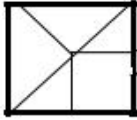


Ans

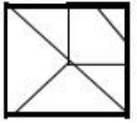
X 1.



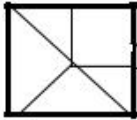
X 2.



✓ 3.



X 4.



Question ID : 9895808160
Chosen Option : 3

Q.1 Choose the option that most closely resembles the mirror image of the given word when mirror is placed at right side.

8

AIM

- Ans X 1. AIW
X 2. AIM
✓ 3. MIA
X 4. WIA

Question ID : 9895808161
Chosen Option : 3

Q.1 Select the term that will come in the following series.

9

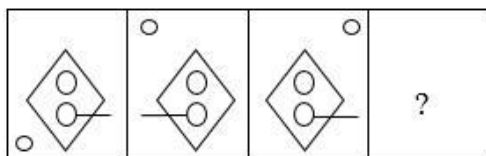
PC, RF, TI, VL, XO, _____.

- Ans X 1. YR
X 2. YQ
✓ 3. ZR
X 4. ZQ

Question ID : 9895808139
Chosen Option : 3

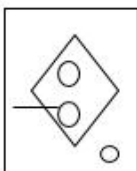
Q.2 Select the figure that will come next in the following series.

0

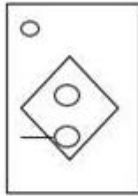


Ans

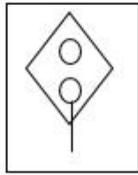
✓ 1.



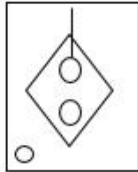
✗ 2.



✗ 3.



✗ 4.



Question ID : 9895808158
Chosen Option : 1

Q.2 Four words have been given out of which three are alike in some manner, while one is different. Choose the odd one.
1

- Ans ✗ 1. Volume
✓ 2. Volt
✗ 3. Force
✗ 4. Power

Question ID : 9895808141
Chosen Option : 1

Q.2 Select the word-pair that is analogous to the given word-pair.
2

France : Paris

- Ans ✗ 1. India : Mumbai
✗ 2. Iran : Rial
✗ 3. China : Yuan
✓ 4. Cuba : Havana

Question ID : 9895808143
Chosen Option : 3

Q.2 Select the fraction that will next in the following series.
3

$\frac{2}{3}, \frac{4}{5}, \frac{6}{7}, \frac{8}{9}, \frac{10}{11}, \frac{12}{13}, \text{---}$

- Ans ✗ 1. $\frac{14}{16}$
✗ 2. $\frac{13}{15}$
✗ 3. $\frac{13}{14}$
✓ 4. $\frac{14}{15}$

Question ID : 9895808152
Chosen Option : 4

Q.2 Six friends, P, Q, R, S, T and U, are sitting in a closed circle facing the centre such that each one is facing another one. P is facing S. R is between P and Q. U is between P and T who is sitting right of S. Who is sitting to the immediate right of R?

- Ans
- ☒ 1. Q
 - ☐ 2. T
 - ☐ 3. S
 - ☐ 4. P

Question ID : 9895808148
Chosen Option : 3

Q.2 Which two signs need to be interchanged to make the given equation correct?

$$100 \div 10 \times 100 - 10 + 100 = 910$$

- Ans
- ☐ 1. \times and $-$
 - ☐ 2. $+$ and \div
 - ☐ 3. \div and \times
 - ☒ 4. $+$ and $-$

Question ID : 9895808156
Chosen Option : 2

Q.2 Which among the following is the longest river in South India?

- Ans
- ☒ 1. Godavari
 - ☐ 2. Krishna
 - ☐ 3. Narmada
 - ☐ 4. Tungabhadra

Question ID : 9895807222
Chosen Option : 1

Q.2 The Consumer Protection Bill, 2018 has replaced the Consumer Protection Act of which of the given years?

- Ans
- ☐ 1. 1978
 - ☒ 2. 1986
 - ☐ 3. 1981
 - ☐ 4. 1991

Question ID : 9895807215
Chosen Option : 2

Q.2 The movement of a horse drawn carriage is an example of which principle of physics?

- Ans
- ☐ 1. Archimedes principle
 - ☐ 2. Avogadro's law
 - ☒ 3. Newton's third law of motion
 - ☐ 4. Ohm's law

Question ID : 9895807217
Chosen Option : 2

Q.2
9 Which mountain pass in the world has the highest motorable road in the world?

- Ans
- ☒ 1. Jelep-La
 - ☒ 2. Nathu-La
 - ☒ 3. Dhungria-La
 - ☒ 4. Shipki-La

Question ID : 9895807223
Chosen Option : 2

Q.3
0 In which layer of the earth's atmosphere is the ozone layer found?

- Ans
- ☒ 1. Mesosphere
 - ☒ 2. Troposphere
 - ☒ 3. Stratosphere
 - ☒ 4. Exosphere

Question ID : 9895807220
Chosen Option : 2

Q.3
1 Which famous Indian personality is the founder of 'Paani Foundation'?

- Ans
- ☒ 1. Amir Khan
 - ☒ 2. Ranveer Singh
 - ☒ 3. Shah Rukh Khan
 - ☒ 4. Salman Khan

Question ID : 9895807210
Chosen Option : 3

Q.3
2 'Vijay Amritraj' was a legendary Indian player associated with which of the following sports?

- Ans
- ☒ 1. Swimming
 - ☒ 2. Badminton
 - ☒ 3. Rifle shooting
 - ☒ 4. Lawn tennis

Question ID : 9895807206
Chosen Option : 2

Q.3
3 Which city will host the upcoming Winter Olympic Games scheduled in 2022?

- Ans
- ☒ 1. Beijing
 - ☒ 2. Paris
 - ☒ 3. Los Angeles
 - ☒ 4. Tokyo

Question ID : 9895807207
Chosen Option : 4

Q.3
4 What was the capital of the French colony in India?

- Ans ☒ 1. Pondicherry
☐ 2. Cochin
☐ 3. Calicut
☐ 4. Goa

Question ID : 9895807227

Chosen Option : 2

Q.3
5 Who is the cofounder of IndiGo Airlines?

- Ans ☐ 1. Y C Deveshwar
☐ 2. Kiran Majumdar Shaw
☒ 3. Rahul Bhatia
☐ 4. Pawan Munjal

Question ID : 9895807208

Chosen Option : 2

Q.3
6 'Talatal Ghar' is a historical monument situated in which of the following Indian states?

- Ans ☐ 1. Sikkim
☐ 2. Odisha
☐ 3. West Bengal
☒ 4. Assam

Question ID : 9895807205

Chosen Option : 1

Q.3
7 The National Food Security Act was passed in which of the following years?

- Ans ☒ 1. 2013
☐ 2. 2014
☐ 3. 2011
☐ 4. 2012

Question ID : 9895807213

Chosen Option : 3

Q.3
8 What is India's rank in the World Bank's Human Capital Index (HCI) rankings as of Feb 2019?

- Ans ☐ 1. 126
☐ 2. 104
☐ 3. 124
☒ 4. 115

Question ID : 9895807224

Chosen Option : 2

Q.3
9 As of January 2019, what is the number of articles in the Indian constitution?

- Ans ☐ 1. 402

- ☒ 2. 395
☒ 3. 431
☒ 4. 448

Question ID : 9895807214
Chosen Option : 4

Q.4
0 Riboflavin present in fish is also known as:

- Ans ☒ 1. Vitamin B2
☒ 2. Vitamin K
☒ 3. Vitamin B12
☒ 4. Vitamin C

Question ID : 9895807218
Chosen Option : 3

Q.4
1 With the commencement of the 7th century, who ascended the throne of Thaneshwar and Kannauj?

- Ans ☒ 1. ChandraGupta II
☒ 2. Harshavardhana
☒ 3. Krishnadeva
☒ 4. Rajendra Chola I

Question ID : 9895807225
Chosen Option : 2

Q.4
2 As on 2018, which is the world's largest political party in terms of primary membership?

- Ans ☒ 1. The Democratic Party of the US
☒ 2. National republican Party US
☒ 3. The Bharatiya Janta Party
☒ 4. The Conservative Party of UK

Question ID : 9895807216
Chosen Option : 3

Q.4
3 The production of a commodity through natural process is an activity associated to which sector of the Indian Economy?

- Ans ☒ 1. Quaternary
☒ 2. Tertiary
☒ 3. Primary
☒ 4. Secondary

Question ID : 9895807212
Chosen Option : 1

Q.4
4 'Azadirachta indica' is the botanical name of which evergreen tree found in the Indian sub-continent?

- Ans ☒ 1. Pine tree
☒ 2. Curry tree

- ☒ 3. Hibiscus tree
- ☒ 4. Margosa tree

Question ID : 9895807219
Chosen Option : 3

Q.4 5 'Tulsidas', a poet who lived during the medieval times of Indian history, wrote 'Ramcharitmanas' in which of the following languages?

- Ans ☒ 1. Sanskrit
- ☒ 2. Prakrit
- ☒ 3. Pali
- ☒ 4. Awadhi

Question ID : 9895807226
Chosen Option : 1

Q.4 6 Fiscal policy is based on the economic theory given by which of the following economist?

- Ans ☒ 1. John Nash
- ☒ 2. John Maynard Keynes
- ☒ 3. Milton Friedman
- ☒ 4. Adam Smith

Question ID : 9895807211
Chosen Option : 2

Q.4 7 Which disease among the given options spreads via pigs?

- Ans ☒ 1. Zika
- ☒ 2. Nipah
- ☒ 3. Swine flu
- ☒ 4. Plague

Question ID : 9895807221
Chosen Option : 3

Q.4 8 The festival of 'Hareli' is celebrated in which of the following Indian states?

- Ans ☒ 1. Punjab
- ☒ 2. Chhattisgarh
- ☒ 3. Madhya Pradesh
- ☒ 4. Odisha

Question ID : 9895807204
Chosen Option : 1

Q.4 9 'The Legend of Laxmi Prasad' was the title of a book written by which one of the following authors?

- Ans ☒ 1. Shobha De
- ☒ 2. Jhumpa Lahiri
- ☒ 3. Twinkle Khanna
- ☒ 4. Arundhati Roy

Question ID : 9895807209
Chosen Option : 2

Q.5
0 'Theyyam' is a popular dance form of which of the following states?

- Ans
- ☒ 1. Manipur
 - ☒ 2. Kerala
 - ☒ 3. Karnataka
 - ☒ 4. Gujarat

Question ID : 9895807203
Chosen Option : 3

Q.5
1 'A' pipe can empty a tank in 20 minutes. The second pipe 'B' has a diameter twice as that of 'A'. If both A & B pipe are attached to the tank how much time will be required to empty the tank?

- Ans
- ☒ 1. $6\frac{2}{3}$ minutes
 - ☒ 2. 15 minutes
 - ☒ 3. 25 minutes
 - ☒ 4. $10\frac{1}{2}$ minutes

Question ID : 9895807539
Chosen Option : 1

Q.5
2 The distance between two stations is 500 km. A train starts from station 'A' at 9 am and travels towards station 'B' at 60 km/hrs. Another train starts from station 'B' at 10 am and travels towards 'A' at 40 km/hrs. At what time both the train meet to each other.

- Ans
- ☒ 1. 2.24 PM
 - ☒ 2. 1.36 PM
 - ☒ 3. 3.36 PM
 - ☒ 4. 12.45 PM

Question ID : 9895807542
Chosen Option : 2

Q.5
3 The compound interest on an amount for 2 years at 5% per annum compounded annually is ₹205. The simple interest is:

- Ans
- ☒ 1. ₹210
 - ☒ 2. ₹220
 - ☒ 3. ₹200
 - ☒ 4. ₹250

Question ID : 9895807538
Chosen Option : 4

Q.5
4

Study the Table Properly and answer by interpreting the data

The table shows the percentage population of five districts in a state below poverty line and the proportion of males and females.

| District | Percentage of population below poverty line | Proportion of Male and Female | |
|----------|---|-------------------------------|--------------------------|
| | | Below poverty line (M:F) | Above poverty line (M:F) |
| D1 | 15 | 2:3 | 3:2 |
| D2 | 18 | 3:4 | 7:5 |
| D3 | 20 | 2:5 | 3:4 |
| D4 | 25 | 5:2 | 4:3 |
| D5 | 12 | 3:7 | 2:7 |

If the total population in the district D_3 is 40,000, then what is the population of below poverty line in the district D_3 ?

- Ans
- ☒ 1. 12,000
 - ☒ 2. 5,000
 - ☒ 3. 10,000
 - ☒ 4. 8,000

Question ID : 9895807551
Chosen Option : 4

Q.5 The areas of two squares are 16:9. The ratio of their perimeter is:

- Ans
- ☒ 1. 9:16
 - ☒ 2. 12:16
 - ☒ 3. 9:12
 - ☒ 4. 16:12

Question ID : 9895807545
Chosen Option : 1

Q.5 In how many years, a sum will be thrice of it at the rate of interest 5% per annum?

- Ans
- ☒ 1. 25 years
 - ☒ 2. 30 years
 - ☒ 3. 20 years
 - ☒ 4. 40 years

Question ID : 9895807537
Chosen Option : 4

Q.5 The value of $25 \text{ of } 4 - 30 + (2^2 + 18)$ is:

- Ans
- ☒ 1. 37
 - ☒ 2. 92
 - ☒ 3. 84
 - ☒ 4. 23

Question ID : 9895807530
Chosen Option : 2

Q.5 In a university, the number of students studying science, mathematics and language are in the ratio of 2:4:9. If the number of students in Science, Mathematics and Language be increased 10%, 20% and 40% respectively. What will be the new ratio?

Ans

- ☐ 1. 24:11:63
- ☐ 2. 63:11:24
- ☐ 3. 12:23:63
- ☒ 4. 11:24:63

Question ID : 9895807546
Chosen Option : 2

Q.5 Study the Table Properly and answer by interpreting the data

9 The table shows the percentage population of five districts in a state below poverty line and the proportion of males and females.

| District | Percentage of population below poverty line | Proportion of Male and Female | |
|----------|---|-------------------------------|--------------------------|
| | | Below poverty line (M:F) | Above poverty line (M:F) |
| D1 | 15 | 2:3 | 3:2 |
| D2 | 18 | 3:4 | 7:5 |
| D3 | 20 | 2:5 | 3:4 |
| D4 | 25 | 5:2 | 4:3 |
| D5 | 12 | 3:7 | 2:7 |

The total population in D₁ is 30,000. The number of female under below poverty line in the district D₁ is:

- Ans** ☐ 1. 2500
- ☐ 2. 3500
- ☒ 3. 2700
- ☐ 4. 1800

Question ID : 9895807552
Chosen Option : 3

Q.6 Two numbers are 20% and 40% more than the third number respectively. The ratio of the first and second number is:

0

- Ans** ☐ 1. 5:7
- ☐ 2. 7:5
- ☒ 3. 6:7
- ☐ 4. 7:6

Question ID : 9895807547
Chosen Option : 3

Q.6 The HCF and LCM of two numbers are 12 and 240 respectively. If one of the number is 24, what is the another number

1

- Ans** ☐ 1. 144
- ☒ 2. 120
- ☐ 3. 228
- ☐ 4. 264

Question ID : 9895807528
Chosen Option : 2

Q.6 The Area of a rectangle is 27 m² and its length is 3 times of its breadth. The perimeter of the rectangle is:

2

- Ans** ☐ 1. 28cm
- ☐ 2. 12cm
- ☒ 3. 24cm
- ☐ 4. 42cm

Question ID : 9895807544
Chosen Option : 3

Q.6 Rama and Hari can together finish a piece of work in 15 day. Rama works twice as fast as Hari, then Hari alone can finish work in :

- Ans
- ☒ 1. 30 days
 - ☒ 2. 45 days
 - ☒ 3. 20 days
 - ☒ 4. 25 days

Question ID : 9895807540
Chosen Option : 1

Q.6 By Selling a TV for ₹8500 a person loses 15%. In order to gain of 5%, Selling price of TV should be:

- Ans
- ☒ 1. ₹10,000
 - ☒ 2. ₹10,500
 - ☒ 3. ₹9,000
 - ☒ 4. ₹9,500

Question ID : 9895807534
Chosen Option : 2

Q.6 A trader allows two successive discounts of 5% each on the marked price of a sofa set for ₹24,500. The selling price of sofa set is :

- Ans
- ☒ 1. ₹1,163.75
 - ☒ 2. ₹23,274.75
 - ☒ 3. ₹23,275
 - ☒ 4. ₹22,111.25

Question ID : 9895807535
Chosen Option : 3

Q.6 A train is moving at 72 km/hrs. The distance covers in 15 minutes by the train is:

- Ans
- ☒ 1. 28 km
 - ☒ 2. 36 km
 - ☒ 3. 18 km
 - ☒ 4. 27 km

Question ID : 9895807541
Chosen Option : 2

Q.6 The difference between upper limit and lower limit of the class interval is called as:

- Ans
- ☒ 1. Frequency distribution
 - ☒ 2. Range
 - ☒ 3. Mode
 - ☒ 4. Class size

Question ID : 9895807549
Chosen Option : 1

Q.6
8 A wheel makes 4000 revolution is covering a distance of 60km. The radius of the wheel is:

- Ans ☒ 1. 4.68m
☒ 2. 2.39 m
☒ 3. 8m
☒ 4. 8.25m

Question ID : 9895807543
Chosen Option : 4

Q.6
9 In class IX, the average of marks in science for six students was 48. After result declared, it was found in case of one student, the marks 45 were misread as 54. The correct average is :

- Ans ☒ 1. 64.39
☒ 2. 76.50
☒ 3. 46.40
☒ 4. 46.50

Question ID : 9895807532
Chosen Option : 3

Q.7
0 If $(x+y):(x-y)=3:2$ then $(x^2+y^2):(x^2-y^2)$ is in the ratio of :

- Ans ☒ 1. 24:5
☒ 2. 5:12
☒ 3. 13:12
☒ 4. 12:13

Question ID : 9895807548
Chosen Option : 3

Q.7
1 Shopkeeper selling on article for ₹46 loses 8%. In order to gain of 6%, what should be the selling price of the article?

- Ans ☒ 1. ₹85
☒ 2. ₹53
☒ 3. ₹65
☒ 4. ₹56

Question ID : 9895807533
Chosen Option : 2

Q.7
2 The value of $30 \div 6 \times 5$ of $(2 + 3) - 12 (3 \times 2)$ is equal to:

- Ans ☒ 1. 53
☒ 2. 82
☒ 3. 28
☒ 4. 35

Question ID : 9895807529
Chosen Option : 1

Q.7

3 Two numbers are less than a third number by 25 and 36 respectively. The percentage of first number less than second number is:

- Ans
- ☒ 1. 18%
 - ☒ 2. 11%
 - ☒ 3. 52%
 - ☒ 4. 61%

Question ID : 9895807536
Chosen Option : 2

Q.7 In a class, the average age of 40 students is 12 years when teacher's age is included to it, the average increases by 1. The age of teacher is :

- Ans
- ☒ 1. 53 years
 - ☒ 2. 48 years
 - ☒ 3. 51 years
 - ☒ 4. 68 years

Question ID : 9895807531
Chosen Option : 1

Q.7 Study the Table Properly and answer by interpreting the data

5 The table shows the percentage population of five districts in a state below poverty line and the proportion of males and females.

| District | Percentage of population below poverty line | Proportion of Male and Female | |
|----------|---|-------------------------------|--------------------------|
| | | Below poverty line (M:F) | Above poverty line (M:F) |
| D1 | 15 | 2:3 | 3:2 |
| D2 | 18 | 3:4 | 7:5 |
| D3 | 20 | 2:5 | 3:4 |
| D4 | 25 | 5:2 | 4:3 |
| D5 | 12 | 3:7 | 2:7 |

If the total population of district D₄ is 35000, then what is the number of females above the poverty line in the district D₄?

- Ans
- ☒ 1. 11,250
 - ☒ 2. 14,240
 - ☒ 3. 10,500
 - ☒ 4. 12,450

Question ID : 9895807550
Chosen Option : 4

Section : English Language

Q.1 Select the most appropriate option to substitute the underlined segment in the given sentence. If there is no need to substitute it, select No improvement.

On the academic front you are likely to outshine others and take up a better career.

- Ans
- ☒ 1. you are likely for outshine other
 - ☒ 2. you should likely to outshine others
 - ☒ 3. No improvement
 - ☒ 4. you were likely to outshine others

Question ID : 9895807857

Chosen Option : 2

Q.2 Select the synonym of the given word.

AFFINITY

- Ans
- ☒ 1. Monotony
 - ☒ 2. Empathy
 - ☒ 3. Beauty
 - ☒ 4. Decency

Question ID : 9895807867
Chosen Option : 1

Q.3 Select the most appropriate option to substitute the underlined segment in the given sentence. If there is no need to substitute it, select No improvement.

Those who are travelling today by train may have delayed in reaching their destinations.

- Ans
- ☒ 1. No improvement
 - ☒ 2. travelling today in train may get delayed
 - ☒ 3. travelling today by train may get delayed
 - ☒ 4. travel today by train may get delayed

Question ID : 9895807858
Chosen Option : 3

Q.4 Select the word which means the same as the group of words given.

One who does a thing for pleasure and not as a profession

- Ans
- ☒ 1. Volunteer
 - ☒ 2. Amateur
 - ☒ 3. Athlete
 - ☒ 4. Sportsperson

Question ID : 9895807873
Chosen Option : 3

Q.5 From the given options, identify the segment in the sentence which contains the grammatical error.

In India, the various practices and norms from bank's transactions are laid down by the RBI only.

- Ans
- ☒ 1. the various practices
 - ☒ 2. norms from bank's transactions
 - ☒ 3. are laid down
 - ☒ 4. by the RBI only

Question ID : 9895807855
Chosen Option : 3

Q.6





Select the antonym of the given word.

CONVENE

- Ans  1. Gather
 2. Disperse
 3. Request
 4. Summon

Question ID : 9895807869
Chosen Option : 2





Q.7 Select the correctly spelt word.

- Ans  1. Suplementary
 2. Suppllementary
 3. Supplementery
 4. Supplementary

Question ID : 9895807875
Chosen Option : 1

Q.8 Select the most appropriate option to substitute the underlined segment in the given sentence. If there is no need to substitute it, select No improvement.


Statistical measure which track the money-saving behaviour haven't improved much.

- Ans  1. measures which track the money-saving behaviour
 2. measure which tracks money-saving behaviours
 3. No improvement
 4. measures what track the money-saving behaviour

Question ID : 9895807856
Chosen Option : 2

Q.9 Select the synonym of the given word.


CUMBERSOME

- Ans  1. Heavy
 2. Graceful
 3. Virtuous
 4. Wonderful

Question ID : 9895807868
Chosen Option : 4

Q.10 Select the antonym of the given word.

CONCUR

- Ans  1. Distribute

- ☒ 2. Lead
- ☒ 3. Disagree
- ☒ 4. Contribute

Question ID : 9895807870
Chosen Option : 2

Q.1
1 Select the most appropriate word to fill in the blank.

Your parents may get _____ with your lifestyle and demand a change in it.

- Ans ☒ 1. fulfilled
- ☒ 2. satisfied
- ☒ 3. annoyed
- ☒ 4. pleased

Question ID : 9895807878
Chosen Option : 2

Comprehension:

In the following passage some words have been deleted. Fill in the blanks with the help of the alternatives given.

"Success begins in the mind." This is a wonderful quote to explain the power of having (1) _____ in yourself. Since (2) _____ wants success, they all try their best. Sometimes they will (3) _____ failure, but that's what life is. Ups and downs are a part of it. All you need is to take that failure in your (4) _____ learn from it and never forget it. It doesn't matter how or where you come from, success happens to those who (5) _____ hands with difficulties.

SubQuestion No : 12

Q.1
2 Select the most appropriate option that will fill in the blank number 1.

- Ans ☒ 1. discard
- ☒ 2. disgust
- ☒ 3. faith
- ☒ 4. doubt

Question ID : 9895807862
Chosen Option : 2





Comprehension:

In the following passage some words have been deleted. Fill in the blanks with the help of the alternatives given.

"Success begins in the mind." This is a wonderful quote to explain the power of having (1) _____ in yourself. Since (2) _____ wants success, they all try their best. Sometimes they will (3) _____ failure, but that's what life is. Ups and downs are a part of it. All you need is to take that failure in your (4) _____ learn from it and never forget it. It doesn't matter how or where you come from, success happens to those who (5) _____ hands with difficulties.

SubQuestion No : 13

Q.1
3 Select the most appropriate option that will fill in the blank number 2.

- Ans  1. everyone
 2. anyone
 3. someone
 4. each

Question ID : 9895807863
Chosen Option : 3

Comprehension:

In the following passage some words have been deleted. Fill in the blanks with the help of the alternatives given.

"Success begins in the mind." This is a wonderful quote to explain the power of having (1) _____ in yourself. Since (2) _____ wants success, they all try their best. Sometimes they will (3) _____ failure, but that's what life is. Ups and downs are a part of it. All you need is to take that failure in your (4) _____ learn from it and never forget it. It doesn't matter how or where you come from, success happens to those who (5) _____ hands with difficulties.

SubQuestion No : 14

Q.1
4

Select the most appropriate option that will fill in the blank number 3.

- Ans
- ☒ 1. oppose
 - ☒ 2. see
 - ☒ 3. clash
 - ☒ 4. encounter

Question ID : 9895807864
Chosen Option : 3

Comprehension:

In the following passage some words have been deleted. Fill in the blanks with the help of the alternatives given.

"Success begins in the mind." This is a wonderful quote to explain the power of having (1) _____ in yourself. Since (2) _____ wants success, they all try their best. Sometimes they will (3) _____ failure, but that's what life is. Ups and downs are a part of it. All you need is to take that failure in your (4) _____ learn from it and never forget it. It doesn't matter how or where you come from, success happens to those who (5) _____ hands with difficulties.

SubQuestion No : 15

Q.1
5 Select the most appropriate option that will fill in the blank number 4.

- Ans
- ☒ 1. run
 - ☒ 2. walk
 - ☒ 3. wing
 - ☒ 4. stride

Question ID : 9895807865
Chosen Option : 3

Comprehension:

In the following passage some words have been deleted. Fill in the blanks with the help of the alternatives given.

"Success begins in the mind." This is a wonderful quote to explain the power of having (1) _____ in yourself. Since (2) _____ wants success, they all try their best. Sometimes they will (3) _____ failure, but that's what life is. Ups and downs are a part of it. All you need is to take that failure in your (4) _____ learn from it and never forget it. It doesn't matter how or where you come from, success happens to those who (5) _____ hands with difficulties.

SubQuestion No : 16

Q.1
6 Select the most appropriate option that will fill in the blank number 5.

- Ans
- ☒ 1. move
 - ☒ 2. see
 - ☒ 3. avoid
 - ☒ 4. shake

Question ID : 9895807866
Chosen Option : 3

Q.1
7 From the given options, identify the segment in the sentence which contains the grammatical error.

While we would like all Indian children to go to school, we need to ponder why they does not.

- Ans
- ☒ 1. While we would like
 - ☒ 2. Indian children to go to school
 - ☒ 3. we need to ponder
 - ☒ 4. why they does not

Question ID : 9895807854
Chosen Option : 3

Q.1
8 Select the most appropriate word to fill in the blank.

You can master anything by the usual process of learning and practicing it _____.

- Ans
- ☒ 1. regularly
 - ☒ 2. temporarily
 - ☒ 3. occasionally
 - ☒ 4. annually

Question ID : 9895807877

Chosen Option : 3

Q.1
9 Select the word which means the same as the group of words given.

A person who is indifferent to the pains and pleasures of life.

- Ans
- ☒ 1. Solitary
 - ☒ 2. Introvert
 - ☒ 3. Stoic
 - ☒ 4. Social

Question ID : 9895807874
Chosen Option : 2

Q.2
0 Select the option that means the same as the given idiom.

Call it a day

- Ans
- ☒ 1. Disagreeing on everything someone is saying
 - ☒ 2. Decide or agree to stop doing something
 - ☒ 3. Agreeing to reveal some secret information
 - ☒ 4. Attempting to do an impossible task

Question ID : 9895807871
Chosen Option : 3

Q.2
1 Select the option that means the same as the given idiom.

To hang together

- Ans
- ☒ 1. To be connected with each other
 - ☒ 2. to take a swing in a garden
 - ☒ 3. To keep holding on to something
 - ☒ 4. To be over telephone with a friend

Question ID : 9895807872
Chosen Option : 2

Q.2
2 Select the correctly spelt word.

- Ans
- ☒ 1. Budget
 - ☒ 2. Bugett
 - ☒ 3. Budjet
 - ☒ 4. Badjet

Question ID : 9895807876
Chosen Option : 1

Q.2
3

Select the most appropriate option to fill in the blank.

Whenever he refers to his friends he is pleased but when he talks of his foes he is _____.

- Ans
- ☒ 1. interested
 - ☒ 2. possessed
 - ☒ 3. unhappy
 - ☒ 4. serene

Question ID : 9895807860
Chosen Option : 3

Q.2 From the given options, identify the segment in the sentence which contains the grammatical error.

You are invite to build a better community by planting a seed of peace within and a tree outside.

- Ans
- ☒ 1. build a better community
 - ☒ 2. by planting a seed of peace
 - ☒ 3. within and a tree outside
 - ☒ 4. You are invite to

Question ID : 9895807853
Chosen Option : 3

Q.2 Select the most appropriate option to fill in the blank.

My forefinger is still _____ where I caught it in the door this morning.

- Ans
- ☒ 1. bruised
 - ☒ 2. burnt
 - ☒ 3. scorched
 - ☒ 4. damaged

Question ID : 9895807859
Chosen Option : 3

Section : Hindi Language

Q.1 सही वर्तनी वाले शब्द का चयन करें।

- Ans
- ☒ 1. वीध्वांस
 - ☒ 2. विध्वंस
 - ☒ 3. विध्वांस
 - ☒ 4. विध्वंस

Question ID : 9895806655
Chosen Option : --

Q.2 दिए गए वाक्य का वह भाग ज्ञात करें जिसमें कोई त्रुटि है।

पहले दो दिन तो सुधा ने कृष्णा को सामने से गुजरते देखा था लेकिन वह तो तड़के ही निकल जाता था।

- Ans
- ☒ 1. पहले दो दिन तो सुधा ने

- ✗ 2. कृष्णा को सामने से गुजरते देखा था
- ✗ 3. लेकिन वह तो तड़के ही
- ✗ 4. निकल जाता था।

Question ID : 9895806631
Chosen Option : --

Q.3 दिए गए वाक्य में रेखांकित खंड को प्रतिस्थापित करने के लिए उपयुक्त विकल्प का चयन करें।

सचिव ने अध्यक्ष के गले में फूलों की एक माला डाली।

- Ans
- ✗ 1. मंत्री
- ✗ 2. समन्वयक
- ✗ 3. निर्देशक
- ✓ 4. सभापति

Question ID : 9895806634
Chosen Option : --

Q.4 दिए गए शब्द का विलोम चुनें।

सामान्य

- Ans
- ✓ 1. आम
- ✗ 2. विशेष
- ✗ 3. सामने
- ✗ 4. अन्य

Question ID : 9895806648
Chosen Option : --

Q.5 दिये गये वाक्यांश के लिए एक शब्द दीजिये।

जिसे भुलाया न जा सके

- Ans
- ✓ 1. अविस्मरणीय
- ✗ 2. विस्मरणीय
- ✗ 3. भूलनीय
- ✗ 4. अज्ञेय

Question ID : 9895806653
Chosen Option : --

Comprehension:

निम्नलिखित गद्यांश के रिक्त स्थानों की पूर्ति गद्यांश के नीचे दिए गए प्रश्नों के अनुसार कीजिए -

नैतिक मूल्यों के माध्यम से राष्ट्र निर्माण की शिक्षा देना शिक्षा व्यवस्था का प्रथम एवं महत्वपूर्ण _____(1) है। निर्माण शब्द का शाब्दिक अर्थ है किसी रचना को बनाने के लिए एक खाका तैयार करना, आवश्यक _____(2) जुटाना और कठिन परिश्रम के साथ खाके के अनुसार संरचना तैयार करना। इसी प्रक्रिया में समय लगता है, धैर्य, प्रतीक्षा और _____(3) की आवश्यकता होती है। शिक्षा राष्ट्र निर्माण का एक उपक्रम है, जिसके माध्यम से हम अधिकतम _____(4) तक निर्माण कर सकते हैं, बशर्ते कि इसके लिए हमारे प्रयास और _____(5) मजबूत हों। दूरदृष्टि और नियोजन के बिना रचनात्मक युवा मस्तिष्कों में राष्ट्रनिर्माण का बीज नहीं डाला जा सकता।

SubQuestion No : 6

Q.6 गद्यांश में संकेतित रिक्त स्थान (1) के लिए उपयुक्त शब्द होगा

- Ans
- ☒ 1. दायित्व
 - ☐ 2. साहस
 - ☐ 3. उपदेश
 - ☐ 4. कदम

Question ID : 9895806642
Chosen Option : --

Comprehension:

निम्नलिखित गद्यांश के रिक्त स्थानों की पूर्ति गद्यांश के नीचे दिए गए प्रश्नों के अनुसार कीजिए -

नैतिक मूल्यों के माध्यम से राष्ट्र निर्माण की शिक्षा देना शिक्षा व्यवस्था का प्रथम एवं महत्वपूर्ण _____(1) है। निर्माण शब्द का शाब्दिक अर्थ है किसी रचना को बनाने के लिए एक खाका तैयार करना, आवश्यक _____(2) जुटाना और कठिन परिश्रम के साथ खाके के अनुसार संरचना तैयार करना। इसी प्रक्रिया में समय लगता है, धैर्य, प्रतीक्षा और _____(3) की आवश्यकता होती है। शिक्षा राष्ट्र निर्माण का एक उपक्रम है, जिसके माध्यम से हम अधिकतम _____(4) तक निर्माण कर सकते हैं, बशर्ते कि इसके लिए हमारे प्रयास और _____(5) मजबूत हों। दूरदृष्टि और नियोजन के बिना रचनात्मक युवा मस्तिष्कों में राष्ट्रनिर्माण का बीज नहीं डाला जा सकता।

SubQuestion No : 7

Q.7 गद्यांश में संकेतित रिक्त स्थान (2) के लिए उपयुक्त शब्द होगा

- Ans ☒ 1. मनुष्य
☒ 2. संसाधक
☒ 3. संसाधन
☒ 4. भीड़

Question ID : 9895806643
 Chosen Option : --

Comprehension:

निम्नलिखित गद्यांश के रिक्त स्थानों की पूर्ति गद्यांश के नीचे दिए गए प्रश्नों के अनुसार कीजिए -

नैतिक मूल्यों के माध्यम से राष्ट्र निर्माण की शिक्षा देना शिक्षा व्यवस्था का प्रथम एवं महत्वपूर्ण _____(1) है। निर्माण शब्द का शाब्दिक अर्थ है किसी रचना को बनाने के लिए एक खाका तैयार करना, आवश्यक _____(2) जुटाना और कठिन परिश्रम के साथ खाके के अनुसार संरचना तैयार करना। इसी प्रक्रिया में समय लगता है, धैर्य, प्रतीक्षा और _____(3) की आवश्यकता होती है। शिक्षा राष्ट्र निर्माण का एक उपक्रम है, जिसके माध्यम से हम अधिकतम _____(4) तक निर्माण कर सकते हैं, बशर्ते कि इसके लिए हमारे प्रयास और _____(5) मजबूत हों। दूरदृष्टि और नियोजन के बिना रचनात्मक युवा मस्तिष्कों में राष्ट्रनिर्माण का बीज नहीं डाला जा सकता।

SubQuestion No : 8

Q.8 गद्यांश में संकेतित रिक्त स्थान (3) के लिए उपयुक्त शब्द होगा

- Ans ☒ 1. काल
☒ 2. सामग्री
☒ 3. परिश्रम
☒ 4. समय

Question ID : 9895806644
 Chosen Option : --

Comprehension:

निम्नलिखित गद्यांश के रिक्त स्थानों की पूर्ति गद्यांश के नीचे दिए गए प्रश्नों के अनुसार कीजिए -

नैतिक मूल्यों के माध्यम से राष्ट्र निर्माण की शिक्षा देना शिक्षा व्यवस्था का प्रथम एवं महत्वपूर्ण _____(1) है। निर्माण शब्द का शाब्दिक अर्थ है किसी रचना को बनाने के लिए एक खाका तैयार करना, आवश्यक _____(2) जुटाना और कठिन परिश्रम के साथ खाके के अनुसार संरचना तैयार करना। इसी प्रक्रिया में समय लगता है, धैर्य, प्रतीक्षा और _____(3) की आवश्यकता होती है। शिक्षा राष्ट्र निर्माण का एक उपक्रम है, जिसके माध्यम से हम अधिकतम _____(4) तक निर्माण कर सकते हैं, बशर्ते कि इसके लिए हमारे प्रयास और _____(5) मजबूत हों। दूरदृष्टि और नियोजन के बिना रचनात्मक युवा मस्तिष्कों में राष्ट्रनिर्माण का बीज नहीं डाला जा सकता।

SubQuestion No : 9

Q.9 गद्यांश में संकेतित रिक्त स्थान (4) के लिए उपयुक्त शब्द होगा

- Ans
- ☒ 1. भावना
 - ☒ 2. सामर्थ्य
 - ☒ 3. बुद्धि
 - ☒ 4. बल

Question ID : 9895806645
Chosen Option : --

Comprehension:

निम्नलिखित गद्यांश के रिक्त स्थानों की पूर्ति गद्यांश के नीचे दिए गए प्रश्नों के अनुसार कीजिए -

नैतिक मूल्यों के माध्यम से राष्ट्र निर्माण की शिक्षा देना शिक्षा व्यवस्था का प्रथम एवं महत्वपूर्ण _____(1) है। निर्माण शब्द का शाब्दिक अर्थ है किसी रचना को बनाने के लिए एक खाका तैयार करना, आवश्यक _____(2) जुटाना और कठिन परिश्रम के साथ खाके के अनुसार संरचना तैयार करना। इसी प्रक्रिया में समय लगता है, धैर्य, प्रतीक्षा और _____(3) की आवश्यकता होती है। शिक्षा राष्ट्र निर्माण का एक उपक्रम है, जिसके माध्यम से हम अधिकतम _____(4) तक निर्माण कर सकते हैं, बशर्ते कि इसके लिए हमारे प्रयास और _____(5) मजबूत हों। दूरदृष्टि और नियोजन के बिना रचनात्मक युवा मस्तिष्कों में राष्ट्रनिर्माण का बीज नहीं डाला जा सकता।

SubQuestion No : 10

Q.1
0 गद्यांश में संकेतित रिक्त स्थान (5) के लिए उपयुक्त शब्द होगा

- Ans ☒ 1. कपलना
☒ 2. सपना
☒ 3. महत्वाकांक्षा
☒ 4. इच्छाशक्ति

Question ID : 9895806646
 Chosen Option : --

Q.1
1 दिए गए वाक्य में रेखांकित खंड को प्रतिस्थापित करने के लिए उपयुक्त विकल्प का चयन करें।
 तुम्हारी बातों का कोई प्रमाण नहीं है।

- Ans ☒ 1. साक्ष्य
☒ 2. तर्क
☒ 3. सत्य
☒ 4. उदाहरण

Question ID : 9895806636
 Chosen Option : --

Q.1
2 सही वर्तनी वाले शब्द का चयन करें।

- Ans ☒ 1. श्रद्धालु
☒ 2. श्रद्धलु
☒ 3. शर्धालू
☒ 4. श्रद्धालू

Question ID : 9895806656
 Chosen Option : --

Q.1
3 दिए गए शब्द के पर्यायवाची शब्द का चयन करें।

स्वर्ण

- Ans ☒ 1. करी
☒ 2. सुमन
☒ 3. कंचन
☒ 4. नीरद

Question ID : 9895806650
 Chosen Option : --

Q.1
4 रिक्त स्थान को भरने के लिए उपयुक्त शब्द का चयन करें।

_____ विद्यार्थियों को पढ़ाता है।

Ans

- ☒ 1. वकील
☒ 2. अभियंता
☒ 3. अध्यापक
☒ 4. बागवान

Question ID : 9895806640
Chosen Option : --

Q.1 5 दिए गए वाक्य में रेखांकित खंड को प्रतिस्थापित करने के लिए उपयुक्त विकल्प का चयन करें।

सीता के लव और कुश दो बेटे थे।

- Ans
- ☒ 1. प्यारे
☒ 2. तनय
☒ 3. तनया
☒ 4. वत्सला

Question ID : 9895806635
Chosen Option : --

Q.1 6 दिए गए शब्द का विलोम चुनें।

व्योम

- Ans
- ☒ 1. राजा
☒ 2. पक्षी
☒ 3. आकाश
☒ 4. धरा

Question ID : 9895806647
Chosen Option : --

Q.1 7 दिए गए वाक्य का वह भाग ज्ञात करें जिसमें कोई त्रुटि है।
आप सायं मेरे घर अवश्य आएँ मैं तुम लोगों को कुछ कीमती पुस्तकें भेंट करूँगा।

- Ans
- ☒ 1. मेरे घर अवश्य आएँ
☒ 2. कुछ कीमती पुस्तकें भेंट करूँगा।
☒ 3. आप सायं
☒ 4. मैं तुम लोगों को

Question ID : 9895806633
Chosen Option : --

Q.1 8 दिए गए वाक्य का वह भाग ज्ञात करें जिसमें कोई त्रुटि है।

मैंने राम को सभी महत्वपूर्ण प्रश्नों के उत्तर बताए परन्तु उसे कुछ समझ मैं न आया।

- Ans
- ☒ 1. सभी महत्वपूर्ण प्रश्नों के
☒ 2. उत्तर बताए परन्तु
☒ 3. उसे कुछ समझ मैं न आया।

✓ 4. मैंने राम को

Question ID : 9895806632

Chosen Option : --

Q.1 निम्नलिखित में से उस विकल्प का चयन करें जो 'जान हथेली पर रखना' मुहावरे का अर्थ व्यक्त करता है।

Ans

- ✗ 1. जीवन को संकट में डालना
- ✓ 2. जान को हथेली के उपर रखना
- ✗ 3. जान कीमती होना
- ✗ 4. सुविधाजनक कार्य करना

Question ID : 9895806652

Chosen Option : --

Q.2 रिक्त स्थान को भरने के लिए उपयुक्त शब्द का चयन करें।

चोर के पीछे पुलिस भागी _____ उसे पकड़ नहीं पाई।

Ans

- ✗ 1. या
- ✓ 2. अभी
- ✗ 3. परंतु
- ✗ 4. अन्यथा

Question ID : 9895806639

Chosen Option : --

Q.2 दिए गए शब्द के पर्यायवाची शब्द का चयन करें।

महादेव

Ans

- ✗ 1. ब्रह्मा
- ✓ 2. विष्णु
- ✗ 3. शंकर
- ✗ 4. कृष्ण

Question ID : 9895806649

Chosen Option : --

Q.2 दिये गये वाक्यांश के लिए एक शब्द दीजिये।

जिसे जीता न जा सके

Ans

- ✗ 1. अविस्मरणीय
- ✓ 2. अजेय
- ✗ 3. अजर
- ✗ 4. अनंत

Question ID : 9895806654

Chosen Option : --

Q.2 निम्नलिखित में से उस विकल्प का चयन करें जो 'फूँक-फूँक कर कदम रखना' मुहावरे का अर्थ व्यक्त करता है।

Ans

- ✓ 1. फूँक मार कर कदम बढ़ाना
✗ 2. तनिक भी अच्छा न लगना
✗ 3. सोच समझ कर काम करना
✗ 4. आवेग में काम करना

Question ID : 9895806651

Chosen Option : --

Q.2 रिक्त स्थान को भरने के लिए उपयुक्त शब्द का चयन करें।

किसी ने दरवाजा _____ है।

Ans

- ✗ 1. बिलबिलाया
✗ 2. हनहनाया
✓ 3. खटखटाया
✗ 4. फड़फड़ाया

Question ID : 9895806638

Chosen Option : --

Q.2 रिक्त स्थान को भरने के लिए उपयुक्त शब्द का चयन करें।

माँ ने डाँटकर मुझसे _____।

Ans

- ✗ 1. नाचा
✓ 2. पूछा
✗ 3. खाया
✗ 4. भागा

Question ID : 9895806637

Chosen Option : --

Constable (GD) in CAPFs, NIA, SSF and Rifleman (GD) in Assam Rifles Examination, 2018

| | |
|------------------|--------------------|
| Roll No. : | |
| Registration No. | |
| Name : | |
| Exam Venue : | |
| Exam Time : | 9:00 AM - 10:30 AM |
| Exam Date : | 05/03/2019 |

Section : General Section

Q.1 Select the correct option that will fill in the blank and complete the series.

145, 290, 580, 1160, ?

- Ans  1. 2320
 2. 2310
 3. 2215
 4. 2420

Question ID : 9895808377
Chosen Option : 1

Q.2 The statements below are followed by four conclusions labeled I, II, III and IV. Assuming that the information in the statements is true, even if it appears to be at variance with generally established facts, decide which conclusion(s) logically and definitely follow(s) from the information given in the statements.

Statements:





All Inductors are Capacitors.

Some Resistors are Inductors.

All Atomic Numbers are Resistors.

Conclusions:

- I. All Atomic Numbers are Capacitors.
 II. Some Atomic Numbers are Capacitors.
 III. Some Capacitors are Resistors.
 IV. All Resistors are Capacitors.

- Ans  1. Only I and III follow
 2. Only III follows
 3. Only II follows
 4. Only I follows

Question ID : 9895808375
Chosen Option : 2

Q.3 Seven models A, B, C, D, E, F and G – are facing a photographer for a photography session. D is standing to the immediate right of G. B is standing between D and F. A is standing to the immediate right of C. E is standing between G and A.

Who is standing at the center?

- Ans  1. A
 2. G

☒ 3. E

☒ 4. D

Question ID : 9895808372
Chosen Option : 2

Q.4 The statements below are followed by two conclusions labeled I and II. Assuming that the information in the statements is true, even if it appears to be at variance with generally established facts, decide which conclusion(s) logically and definitely follow(s) from the information given in the statements.

Statements:

I. Some pens are books.

II. All books are temples.

Conclusions:

I. All temples are pens.

II. Some pens are temples.

Ans ☒ 1. Only II follows

☒ 2. None follows

☒ 3. Only I follows

☒ 4. Both I and II follow

Question ID : 9895808376
Chosen Option : 1

Q.5 Select the option that is related to the third term in the same way as the second term is related to the first term.

AC : CF :: MO : ?

Ans ☒ 1. PQ

☒ 2. OQ

☒ 3. OR

☒ 4. QR

Question ID : 9895808369
Chosen Option : 3

Q.6 Choose the option figure in which the problem figure is hidden/embedded.

Questions Figure:



Ans

☒ 1.

☒ 2.

☒ 3.

☒ 4.

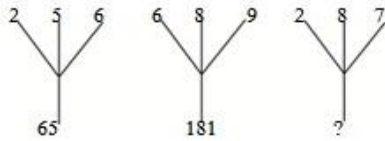
Question ID : 9895808385
Chosen Option : 3

Q.7 There are five books A, B, C, D and E. Book C lies above book D, book E is below A, D is above A, B is below E. Which is at the bottom?

- Ans
- ☒ 1. A
 - ☒ 2. D
 - ☒ 3. B
 - ☒ 4. C

Question ID : 9895808374
Chosen Option : 4

Q.8 Find the missing number from the below options.



- Ans
- ☒ 1. 108
 - ☒ 2. 78
 - ☒ 3. 117
 - ☒ 4. 110

Question ID : 9895808381
Chosen Option : 3

Q.9 Select the correct option that will fill in the blank and complete the series.

YEB, XFD, WGF, ?

- Ans
- ☒ 1. UEG
 - ☒ 2. VHH
 - ☒ 3. DHV
 - ☒ 4. VHD

Question ID : 9895808364
Chosen Option : 2

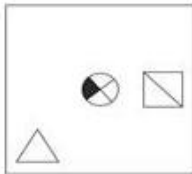
Q.1 Which option has the figure which completes the figure series given in the question?



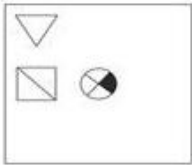
Ans



✗ 3.



✗ 4.



Question ID : 9895808383
Chosen Option : 1

Q.1 If a mirror is placed on the northern side then which of the answer figures is the right image of the given question figure.

1



Ans

✓ 1.



✗ 2.



✗ 3.



✗ 4.



Question ID : 9895808386
Chosen Option : 1

Q.1 If PANT is coded as 51, then what will be the code for DOGS?

2

Ans ✓ 1. 45

✗ 2. 52

✗ 3. 49

✗ 4. 44

Question ID : 9895808371
Chosen Option : 1

Q.1 Four options have been given out of which three are alike in some manner, while one is different. Choose the odd one.

3

Ans ✓ 1. 16,21

✗ 2. 10,15

✗ 3. 18,27

✗ 4. 22,33

Question ID : 9895808380

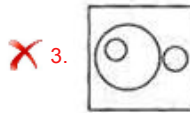
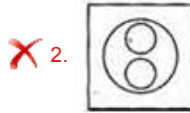
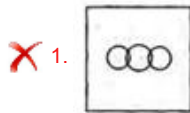
Chosen Option : 1

Q.1 Select the Venn diagram that best illustrates the relationship between the three given classes.

4

Males, Fathers, Brothers

Ans



Question ID : 9895808388

Chosen Option : 4

Q.1 Select the option that is related to the third term in the same way as the second term is related to the first term.

5

412 : 49 :: 361 : ?

Ans

☒ 1. 82

☒ 2. 100

☒ 3. 120

☒ 4. 144

Question ID : 9895808379

Chosen Option : 1

Q.1 Select the option that is related to the third term in the same way as the first term is related to the second term.

6

Car : Garage :: Aeroplane : ?

Ans

☒ 1. Landing

☒ 2. Hangar

☒ 3. Airhostess

☒ 4. Flying

Question ID : 9895808367

Chosen Option : 3

Q.1 A is more intelligent than B. C is not as intelligent as B. D is more intelligent than E but not as good as A. Who is the most intelligent of all?

7

Ans

☒ 1. D

☒ 2. A

☒ 3. B

☒ 4. E

Question ID : 9895808373

Chosen Option : 2

Q.1
8 Select the correct option that will fill in the blank and complete the series.

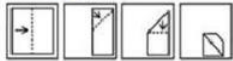
2, 2, 3, 6, 15, ?

- Ans
- ☒ 1. 25
 - ☒ 2. 35
 - ☒ 3. 45
 - ☒ 4. 30

Question ID : 9895808378
Chosen Option : 2

Q.1
9 A piece of paper is folded and cut as shown below in the question figures, indicate how it will appear when opened.

Questions Figure:



- Ans
- ☒ 1.
 - ☒ 2.
 - ☒ 3.
 - ☒ 4.

Question ID : 9895808387
Chosen Option : 4

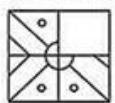
Q.2
0 Four letter clusters have been given out of which three are alike in some manner, while one is different. Choose the odd one.

- Ans
- ☒ 1. CDE
 - ☒ 2. DEF
 - ☒ 3. EFG
 - ☒ 4. HIK

Question ID : 9895808365
Chosen Option : 4

Q.2
1 Which of the following answer figure will complete the given figure?

Questions Figure:



- Ans
- ☒ 1.
 - ☒ 2.



Question ID : 9895808384
Chosen Option : 2

Q.2 Four words have been given out of which three are alike in some manner, while one is different. Choose the odd one.
2

- Ans ✗ 1. SALES
✗ 2. COMIC
✓ 3. TOUCH
✗ 4. SHOES

Question ID : 9895808366
Chosen Option : 1

Q.2 Select the option that is related to the third term in the same way as the first term is related to the second term.

3
Goose : Cackle : : Birds : ?

- Ans ✗ 1. Drone
✗ 2. Quack
✓ 3. Chirp
✗ 4. Scream

Question ID : 9895808368
Chosen Option : 2

Q.2 If '+' means 'divided by', '-' means 'added to', '×' means 'subtracted from' and '÷' means 'multiplied by' then,

4
 $20 \times 12 + 4 - 8 \div 4 = ?$

- Ans ✗ 1. 39
✗ 2. 41
✓ 3. 49
✗ 4. 38

Question ID : 9895808382
Chosen Option : 3

Q.2 If in a certain code language, CAGE is written as BDFG and NORMAL is written as MOXQDF, how is GENERAL written in that code?

- 5
Ans ✓ 1. FGMGXDF
✗ 2. MGGFFDX
✗ 3. FGDFXMG
✗ 4. BGIKLMK

Question ID : 9895808370
Chosen Option : 1

Q.2 Name the founder of the Chola empire who captured Tanjore and who was succeeded by Aditya I.
6

Ans

- ☒ 1. Uttama
☒ 2. Rajadhiraja
☒ 3. Vijayalaya
☒ 4. Gandaraditya

Question ID : 9895807450
Chosen Option : 2

Q.2 7 Which unusual festival/event held in between October and November in Tamil Nadu, has a fire walking ceremony?

- Ans ☒ 1. Thimithi
☒ 2. Minjar
☒ 3. Puli Kali
☒ 4. Madai

Question ID : 9895807429
Chosen Option : 2

Q.2 8 Which of the following dances is a dance form from Maharashtra?

- Ans ☒ 1. Macha
☒ 2. Lezim
☒ 3. Chiraw
☒ 4. Ottam Thullal

Question ID : 9895807430
Chosen Option : 3

Q.2 9 Which Act also called the East India Company Act, 1784 was passed by the British Parliament to correct the defects of the Regulating Act of 1773?

- Ans ☒ 1. Regulating Act 1773
☒ 2. Government of India Act of 1858
☒ 3. Indian Councils Act of 1861
☒ 4. Pitt's India Act

Question ID : 9895807441
Chosen Option : 4

Q.3 0 Which Bharat Ratna recipient's birthday is celebrated as National Doctor's Day?

- Ans ☒ 1. C N R Rao
☒ 2. Bidhan Chandra Roy
☒ 3. Purushottam Das Tandon
☒ 4. Abdul Kalam Azad

Question ID : 9895807433
Chosen Option : 1

Q.3 1 Government of India Act, 1919 came into effect on 23 December 1919. This act embodied the reforms recommended in the _____ Report.

- Ans ☒ 1. Montague-Chelmsford
☒ 2. Curzon

☒ 3. National Planning

☒ 4. Morley-Minto

Question ID : 9895807451

Chosen Option : 1

Q.3
2 _____ alloy consists of bismuth, lead and tin.

Ans ☒ 1. Bell Metal

☒ 2. German silver

☒ 3. Solder

☒ 4. Rose Metal

Question ID : 9895807445

Chosen Option : 2

Q.3
3 Who became the first Indian contestant to win the title of Miss Asia Pacific in 1970?

Ans ☒ 1. Reita Faria

☒ 2. Tara Fonseca

☒ 3. Diana Hayden

☒ 4. Zeenat Aman

Question ID : 9895807435

Chosen Option : 2

Q.3
4 Name the highest peak in the Andaman Nicobar islands.

Ans ☒ 1. Saddle Peak

☒ 2. Karoh Peak

☒ 3. Sonsogor

☒ 4. Kodachadri

Question ID : 9895807448

Chosen Option : 2

Q.3
5 The formula of Chloroform is _____.

Ans ☒ 1. CHCl_3

☒ 2. CF_2Cl_2

☒ 3. CCl_4

☒ 4. CH_3Cl

Question ID : 9895807444

Chosen Option : 2

Q.3
6 In the battle of Amroha (1305) the Delhi Sultanate won a victory over the _____.

Ans ☒ 1. Mongol army

☒ 2. Bijapur Sultanate

☒ 3. East India Company

☒ 4. Portuguese Empire

Question ID : 9895807452
Chosen Option : 2

Q.3
7 Minimum Support Price for 2018-19 for Bajra is set at _____.

- Ans
- ☒ 1. ₹2,430 per quintal
 - ☒ 2. ₹1,750 per quintal
 - ☒ 3. ₹1,950 per quintal
 - ☒ 4. ₹5,150 per quintal

Question ID : 9895807438
Chosen Option : 2

Q.3
8 The Union Budget 2018 allocated a total corpus of _____ for setting up of a Fishery and Aquaculture fund and an Animal Husbandry fund.

- Ans
- ☒ 1. ₹10,000 crore
 - ☒ 2. ₹1,000 crore
 - ☒ 3. ₹500 crore
 - ☒ 4. ₹5,000 crore

Question ID : 9895807437
Chosen Option : 4

Q.3
9 Which part of the constitution of India consists of Articles on Elections?

- Ans
- ☒ 1. Part XV
 - ☒ 2. Part V
 - ☒ 3. Part XX
 - ☒ 4. Part X

Question ID : 9895807440
Chosen Option : 3

Q.4
0 The tibia is part of the _____.

- Ans
- ☒ 1. skull
 - ☒ 2. leg
 - ☒ 3. hand
 - ☒ 4. arm

Question ID : 9895807446
Chosen Option : 1

Q.4
1 The Black Forest is a large forested mountain range which is found in _____.

- Ans
- ☒ 1. Belgium
 - ☒ 2. Germany
 - ☒ 3. Brazil
 - ☒ 4. South Africa

Question ID : 9895807449
Chosen Option : 3

Q.4
2 Siemens is the unit of _____.

- Ans
- ☒ 1. magnetic flux
 - ☐ 2. electric conductance
 - ☒ 3. capacitance
 - ☒ 4. magnetic flux density

Question ID : 9895807443
Chosen Option : 3

Q.4
3 Writs and Bicameralism in the Indian constitution are influenced by the constitution of _____.

- Ans
- ☒ 1. Australia
 - ☒ 2. Ireland
 - ☒ 3. United States
 - ☐ 4. United Kingdom

Question ID : 9895807439
Chosen Option : 3

Q.4
4 Ludhiana's _____ in May 2018, became the first Indian chess player ever to win the FIDE World Amateur Championship in the under-2300 category.

- Ans
- ☒ 1. Krishnan Sasikiran
 - ☒ 2. Pentala Harikrishna
 - ☒ 3. Baskaran Adhiban
 - ☐ 4. Arvinder Preet

Question ID : 9895807432
Chosen Option : 3

Q.4
5 Which of the following options is one of the most popular music forms of Jharkhand?

- Ans
- ☐ 1. Dhamsa
 - ☒ 2. Khubakeshei
 - ☒ 3. Mando
 - ☒ 4. Maand

Question ID : 9895807428
Chosen Option : 1

Q.4
6 The Economic Survey report 2017-18 stated that the Industry growth for FY18 was likely to be _____.

- Ans
- ☒ 1. 4.90%
 - ☐ 2. 4.40%
 - ☒ 3. 5.90%
 - ☒ 4. 5.40%

Question ID : 9895807436
Chosen Option : 2

Q.4
7 Which team won in the 2018-19 Pro Kabaddi League finals?

- Ans ☒ 1. Bengaluru Bulls
☒ 2. Bengal Warriors
☒ 3. Jaipur Pink Panthers
☒ 4. Dabang Delhi KC

Question ID : 9895807431

Chosen Option : 1

Q.4
8 Which of the following is an autobiography by former prime minister I K Gujral?

- Ans ☒ 1. Filling the Gap
☒ 2. Matters of Discretion
☒ 3. The Autobiography of an Unknown Indian
☒ 4. Dreams from my Father

Question ID : 9895807434

Chosen Option : 2

Q.4
9 Aurangabad is situated on the banks of which river?

- Ans ☒ 1. Musi
☒ 2. Godavari
☒ 3. Kaum
☒ 4. Mahanadi

Question ID : 9895807447

Chosen Option : 2

Q.5
0 The relation between power 'p', current 'I' and resistance 'R' is _____.

- Ans ☒ 1. $P = I^2/R$
☒ 2. $P = I/R^2$
☒ 3. $P = IR^2$
☒ 4. $P = I^2R$

Question ID : 9895807442

Chosen Option : 4

Q.5
1 In a library, the ratio of number of story books to that of non-story books was 4:5 and total number of story books was 900. When some more story books were bought, the ratio became 8:9. Find the number of story books bought.

- Ans ☒ 1. 130
☒ 2. 140
☒ 3. 120
☒ 4. 100

Question ID : 9895807763

Chosen Option : 2

Q.5
2 A family consists of two grandparents, four parents and six grandchildren. The average age of the grandparents is 70 years, that of the parents is 40 years and that of the grandchildren is 12 years. What is the average age of the family?

- Ans ☒ 1. 32 years
☒ 2. 30 years
☒ 3. 35 years
☒ 4. 31 years

Question ID : 9895807756
 Chosen Option : 4

Q.5 On selling 18 balls at ₹900, there is a loss equal to the cost price of 6 balls. The cost price of a ball is:
 3

- Ans ☒ 1. ₹70
☒ 2. ₹75
☒ 3. ₹80
☒ 4. ₹50

Question ID : 9895807762
 Chosen Option : 4

Q.5 Simplify:
 4

$$17 - 4.5 \div 9 + 1.3 \times 0.6 + 0.4$$

- Ans ☒ 1. 17.68
☒ 2. 16.78
☒ 3. 17.86
☒ 4. 16.68

Question ID : 9895807755
 Chosen Option : 1

Q.5 The average monthly income of P and Q is ₹8,500. The average monthly income of Q and R is ₹6,450 and the average
 5 monthly income of P and R is ₹7,300. The monthly income of Q is _____.

- Ans ☒ 1. ₹ 7,650
☒ 2. ₹ 7,600
☒ 3. ₹ 8,650
☒ 4. ₹ 7,000

Question ID : 9895807757
 Chosen Option : 2

Q.5 A student multiplied a number by $\frac{4}{5}$ instead of $\frac{5}{4}$, What is the percentage error in the calculation?
 6

- Ans ☒ 1. 44%
☒ 2. 36%
☒ 3. 54%
☒ 4. 72%

Question ID : 9895807760
 Chosen Option : 1

Q.5 If 15 workers can earn ₹1800 in 10 days. Find the earning of 5 workers in 8 days.
 7

Ans

- ☐ 1. ₹540
- ☐ 2. ₹360
- ☐ 3. ₹400
- ☒ 4. ₹480

Question ID : 9895807768
Chosen Option : 4

Q.5 The following line graph gives the ratio of the amounts of imports by a company to the amount of exports from that company over the period from 1995 to 2001.

Ratio of Value of Imports to Exports by a Company Over the Years.



If the imports of the company in 1995 was ₹247 crores, the exports from the company in 1995 was?

- Ans** ☐ 1. ₹275 crores
- ☒ 2. ₹380 crores
- ☐ 3. ₹370 crores
- ☐ 4. ₹280 crores

Question ID : 9895807776
Chosen Option : 2

Q.5 Paper charge is ₹55 per kg. How much expenditure would be there to cover a cube of edge 8 m with a paper, if one kg of paper covers 192 sq.m area ?

- Ans** ☐ 1. ₹192
- ☒ 2. ₹110
- ☐ 3. ₹55
- ☐ 4. ₹165

Question ID : 9895807774
Chosen Option : 1

Q.6 A vendor bought 10 toffees for a rupee. How many for a rupee must he sell to gain 25%?

- Ans** ☐ 1. 7
- ☒ 2. 8
- ☐ 3. 6
- ☐ 4. 5

Question ID : 9895807761
Chosen Option : 2

Q.6 Three numbers are in the ratio of 3:4:5 and their L.C.M. is 4200. Their H.C.F. is:

- Ans** ☐ 1. 15

- ☐ 2. 20
☐ 3. 60
☒ 4. 70

Question ID : 9895807753
Chosen Option : 4

Q.6 There was 25% off on handbags. Madhu bought a handbag. She also got a 10% discount for paying cash. She paid
2 ₹540. What was the price tag on the handbag?

- Ans ☐ 1. ₹500
☒ 2. ₹800
☐ 3. ₹450
☐ 4. ₹600

Question ID : 9895807758
Chosen Option : 4

Q.6 The value of a flat worth ₹7,000,000 is depreciating at the rate of 20% p.a. Then in how many years will the value be
3 reduced to ₹35,84,000.

- Ans ☐ 1. 5 years
☐ 2. 4 years
☐ 3. 2 years
☒ 4. 3 years

Question ID : 9895807767
Chosen Option : 2

Q.6 Simplify:
4

$$5.7 - 0.4 \text{ of } (7.4 - 2.6) + 5.7 \times 3.01 + 10$$

- Ans ☐ 1. 30.497
☐ 2. 30.397
☒ 3. 30.937
☐ 4. 30.947

Question ID : 9895807754
Chosen Option : 3

Q.6
5

The following line graph gives the ratio of the amounts of imports by a company to the amount of exports from that company over the period from 1995 to 2001.

Ratio of Value of Imports to Exports by a Company Over the Years.



The imports were maximum proportionate to the exports of the company in the year?

- Ans
- ☒ 1. 1996
 - ☒ 2. 2000
 - ☒ 3. 1998
 - ☒ 4. 2001

Question ID : 9895807775
Chosen Option : 3

Q.6 The following line graph gives the ratio of the amounts of imports by a company to the amount of exports from that company over the period from 1995 to 2001.

Ratio of Value of Imports to Exports by a Company Over the Years.



In how many of the given years were the exports less than the imports?

- Ans
- ☒ 1. 1
 - ☒ 2. 4
 - ☒ 3. 3
 - ☒ 4. 2

Question ID : 9895807777
Chosen Option : 1

Q.6 The mean of a set of seven numbers is 81. If one of the numbers is discarded, the mean of the remaining numbers is 78. The value of discarded number is ____.

- Ans
- ☒ 1. 99
 - ☒ 2. 98
 - ☒ 3. 101
 - ☒ 4. 100

Question ID : 9895807759
Chosen Option : 3

Q.6 It was intended that ₹780 be divided among P, Q and R in the ratio of 1: 2: 3, but by mistake the distribution was made
8 in the proportion of $\frac{1}{2} : \frac{1}{3} : \frac{1}{4}$. How much does 'Q' lose by the error?

- Ans
- ☒ 1. ₹40
 - ☒ 2. ₹10
 - ☒ 3. ₹30
 - ☒ 4. ₹20

Question ID : 9895807765
Chosen Option : 3

Q.6 The area of the base of a right circular cone is $\frac{1408}{7} \text{ cm}^2$ and its height is 6 cm. Taking $\pi = \frac{22}{7}$, the curved surface area
9 of the cone is _____

- Ans
- ☒ 1. $\frac{7160}{7} \text{ cm}^2$
 - ☒ 2. $\frac{1670}{7} \text{ cm}^2$
 - ☒ 3. $\frac{1760}{7} \text{ cm}^2$
 - ☒ 4. $\frac{1067}{7} \text{ cm}^2$

Question ID : 9895807773
Chosen Option : 3

Q.7 Raman paid ₹ 13,300 as interest after 9 years. He had borrowed some money at rate of 6% for first two years, 9% for
0 next three years and 14% for rest of the period. How much money did he borrow?

- Ans
- ☒ 1. ₹ 12,000
 - ☒ 2. ₹ 10,000
 - ☒ 3. ₹ 14,000
 - ☒ 4. ₹ 12,500

Question ID : 9895807766
Chosen Option : 4

Q.7 Train A takes 6 hours more than train B to cover a distance of 800 km. If the speed of train A is doubled it takes 2 hours
1 less than train B. What is the speed of train B?

- Ans
- ☒ 1. 75 km/h
 - ☒ 2. 50 km/h
 - ☒ 3. 80 km/h
 - ☒ 4. 60 km/h

Question ID : 9895807771
Chosen Option : 3

Q.7 If 10 men working 6 hours a day can do work in 90 days than 6 men working 15 hours a day can do it in how many
2 days?

- Ans
- ☒ 1. 60 days
 - ☒ 2. 30 days
 - ☒ 3. 40 days

☒ 4. 20 days

Question ID : 9895807769
Chosen Option : 1

Q.7 400 m long train crosses a 300 m long bridge in 70 seconds. Then the speed of the train is _____.
3

- Ans ☒ 1. 72 km/h
☒ 2. 36 km/h
☒ 3. 18 km/h
☒ 4. 54 km/h

Question ID : 9895807770
Chosen Option : 2

Q.7 A circle with radius 8 cm which has the area equal to the area of triangle with base 8 cm. Then the length of the
4 corresponding altitude of triangle is _____.

- Ans ☒ 1. 38π cm
☒ 2. 18π cm
☒ 3. 8π cm
☒ 4. 16π cm

Question ID : 9895807772
Chosen Option : 3

Q.7 Price of each article of type P, Q, and R is ₹200, ₹300 and ₹400 respectively. Suresh buys articles of each type in the
5 ratio 1:2:3 in ₹2000. How many articles of type Q did he purchase?

- Ans ☒ 1. 4
☒ 2. 2
☒ 3. 3
☒ 4. 5

Question ID : 9895807764
Chosen Option : 3

Section : English Language

Q.1 Select the most appropriate option to substitute the underlined segment in the given sentence. If there is no need to substitute it, select No improvement.

More than one traveller were injured in the derailling of the train last night.

- Ans ☒ 1. has injured
☒ 2. are injured
☒ 3. was injured
☒ 4. No improvement

Question ID : 9895808090
Chosen Option : --

Q.2 From the given options, identify the segment in the sentence which contains the grammatical error.

Most major holidays has some connection to the change of seasons everywhere.

- Ans ☒ 1. seasons everywhere
☒ 2. has some connection

☒ 3. Most major holidays

☒ 4. to the change of

Question ID : 9895808089

Chosen Option : 2

Q.3 Select the most appropriate option to substitute the underlined segment in the given sentence. If there is no need to substitute it, select No improvement.

Some programs make a general purpose computer behave like a virtual terminal.

Ans ☒ 1. makes a general purpose computers

☒ 2. No improvement

☒ 3. makes general purpose computer

☒ 4. makes a general purpose computer

Question ID : 9895808092

Chosen Option : 2

Q.4 Select the option that means the same as the given idiom.

To judge a book by its cover.

Ans ☒ 1. To go with popular opinions

☒ 2. To read the outer cover only

☒ 3. To buy books after seeing the colourful cover

☒ 4. To rely on outward appearance

Question ID : 9895808105

Chosen Option : 1

Q.5 Select the most appropriate option to fill in the blank.

A Vision is a _____ oriented statement of where you want to be.

Ans ☒ 1. future

☒ 2. current

☒ 3. present

☒ 4. trade

Question ID : 9895808093

Chosen Option : 2

Q.6 Select the correctly spelt word.

Ans ☒ 1. Dissappointment

☒ 2. Disappointment

☒ 3. Disappiontment

☒ 4. Disapointment

Question ID : 9895808110

Chosen Option : 1

Q.7 Select the most appropriate option to fill in the blank.

Fathers have typically been _____ by how well they support their families financially.

- Ans
- ☒ 1. judge
 - ☒ 2. judges
 - ☒ 3. judged
 - ☒ 4. judging

Question ID : 9895808094
Chosen Option : 4

Q.8 Select the word which means the same as the group of words given.

Government not connected with religious or spiritual matters.

- Ans
- ☒ 1. Theocratic
 - ☒ 2. Secular
 - ☒ 3. Democratic
 - ☒ 4. Monarchic

Question ID : 9895808107
Chosen Option : 2

Comprehension:

In the following passage some words have been deleted. Fill in the blanks with the help of the alternatives given.

It is very important to realise that an important factor in getting appreciation is often not (1) _____ by the success in academic examinations but your behaviour (2) _____ others. Simplicity and truthfulness play a very important role in social (3) _____. One should always be compassionate and should make an (4) _____ to understand the problems of companions and try to find solutions. We should always be flexible in our (5) _____.

SubQuestion No : 9

Q.9 Select the most appropriate option that will fill in the blank number 1.

- Ans
- ☒ 1. spoken
 - ☒ 2. driven
 - ☒ 3. intended
 - ☒ 4. talked

Question ID : 9895808096
Chosen Option : 1





Comprehension:

In the following passage some words have been deleted. Fill in the blanks with the help of the alternatives given.

It is very important to realise that an important factor in getting appreciation is often not (1) _____ by the success in academic examinations but your behaviour (2) _____ others. Simplicity and truthfulness play a very important role in social (3) _____. One should always be compassionate and should make an (4) _____ to understand the problems of companions and try to find solutions. We should always be flexible in our (5) _____.

SubQuestion No : 10

Q.1
0 Select the most appropriate option that will fill in the blank number 2.

- Ans  1. towards
 2. about
 3. on
 4. for

Question ID : 9895808097
Chosen Option : 4





Comprehension:

In the following passage some words have been deleted. Fill in the blanks with the help of the alternatives given.

It is very important to realise that an important factor in getting appreciation is often not (1) _____ by the success in academic examinations but your behaviour (2) _____ others. Simplicity and truthfulness play a very important role in social (3) _____. One should always be compassionate and should make an (4) _____ to understand the problems of companions and try to find solutions. We should always be flexible in our (5) _____.

SubQuestion No : 11

Q.1
1 Select the most appropriate option that will fill in the blank number 3.

- Ans  1. rejection
 2. approval
 3. denial
 4. perception

Question ID : 9895808098
Chosen Option : 4

Comprehension:

In the following passage some words have been deleted. Fill in the blanks with the help of the alternatives given.

It is very important to realise that an important factor in getting appreciation is often not (1) _____ by the success in academic examinations but your behaviour (2) _____ others. Simplicity and truthfulness play a very important role in social (3) _____. One should always be compassionate and should make an (4) _____ to understand the problems of companions and try to find solutions. We should always be flexible in our (5) _____.

SubQuestion No : 12

Q.1
2 Select the most appropriate option that will fill in the blank number 4.

- Ans
- ☒ 1. enquiry
 - ☒ 2. attempt
 - ☒ 3. association
 - ☒ 4. experiment

Question ID : 9895808099
Chosen Option : 1

Comprehension:

In the following passage some words have been deleted. Fill in the blanks with the help of the alternatives given.

It is very important to realise that an important factor in getting appreciation is often not (1) _____ by the success in academic examinations but your behaviour (2) _____ others. Simplicity and truthfulness play a very important role in social (3) _____. One should always be compassionate and should make an (4) _____ to understand the problems of companions and try to find solutions. We should always be flexible in our (5) _____.

SubQuestion No : 13

Q.1
3 Select the most appropriate option that will fill in the blank number 5.

- Ans
- ☒ 1. role
 - ☒ 2. attitude
 - ☒ 3. ambition
 - ☒ 4. goal

Question ID : 9895808100
Chosen Option : 2

Q.1
4 From the given options, identify the segment in the sentence which contains the grammatical error.

Ajay says he understood French but cannot speak it as fluently as his parents and grandparents do.

- Ans
- ☒ 1. parents and grandparents do
 - ☒ 2. he understood French
 - ☒ 3. but cannot speak
 - ☒ 4. as fluently as

Question ID : 9895808087
Chosen Option : 1

Q.1 5 Select the most appropriate option to substitute the underlined segment in the given sentence. If there is no need to substitute it, select No improvement.

She stayed in Mumbai for two weeks over a project by an NGO working for the welfare of street - children.

- Ans
- ☒ 1. No improvement
 - ☒ 2. in a project
 - ☒ 3. to a project
 - ☒ 4. for a project

Question ID : 9895808091
Chosen Option : 1

Q.1 6 Select the antonym of the given word.

SHALLOW

- Ans
- ☒ 1. Primary
 - ☒ 2. Deep
 - ☒ 3. Superficial
 - ☒ 4. External

Question ID : 9895808104
Chosen Option : 4

Q.1 7 From the given options, identify the segment in the sentence which contains the grammatical error.

Information suitable for communication, interpretation or processing by a computer are called as Data.

- Ans
- ☒ 1. interpretation or processing
 - ☒ 2. suitable for communication
 - ☒ 3. Information
 - ☒ 4. are called as Data

Question ID : 9895808088
Chosen Option : 1

Q.1 8 Select the most appropriate word to fill in the blank.

The year 2018 remained as the best year of _____ and celebrations for him.

- Ans
- ☒ 1. provisions
 - ☒ 2. milestones
 - ☒ 3. symbols
 - ☒ 4. mechanisms

Question ID : 9895808111
Chosen Option : 1

Q.1 9 Select the synonym of the given word.

PATRON

Ans

- ☒ 1. Beneficiary
☒ 2. Owner
☒ 3. Sponsor
☒ 4. Comrade

Question ID : 9895808101
Chosen Option : 4

Q.2
0 Select the word which means the same as the group of words given.

A sound that cannot be heard.

- Ans ☒ 1. unrevealed
☒ 2. invisible
☒ 3. inaudible
☒ 4. impalpable

Question ID : 9895808108
Chosen Option : 1

Q.2
1 Select the option that means the same as the given idiom.

To take a stock of.

- Ans ☒ 1. To go to a stock - room and survey it
☒ 2. To save a large quantity of stock
☒ 3. To assess and evaluate before taking a decision
☒ 4. To collect goods after an inventory

Question ID : 9895808106
Chosen Option : 1

Q.2
2 Select the most appropriate word to fill in the blank.

Social media algorithms can be _____ used in teaching - learning process.

- Ans ☒ 1. momentarily
☒ 2. easily
☒ 3. barely
☒ 4. briefly

Question ID : 9895808112
Chosen Option : 1

Q.2
3 Select the correctly spelt word.

- Ans ☒ 1. Constitution
☒ 2. Consitution
☒ 3. Constitutoin
☒ 4. Constitution

Question ID : 9895808109

Chosen Option : 4

Q.2 Select the synonym of the given word.

EXHAUSTIVE

- Ans ☒ 1. Complete
- ☐ 2. Temporary
- ☐ 3. Transitory
- ☐ 4. Permanent

Question ID : 9895808102

Chosen Option : 2

Q.2 Select the antonym of the given word.

COLOSSAL

- Ans ☐ 1. Vast
- ☒ 2. Minimal
- ☐ 3. Countable
- ☐ 4. Considerable

Question ID : 9895808103

Chosen Option : 4

Section : Hindi Language

Q.1 निम्नलिखित में से उस विकल्प का चयन करें जो 'मक्खन लगाना' मुहावरे का अर्थ व्यक्त करता है।

- Ans ☐ 1. बेकार बैठना
- ☐ 2. चापलूसी करना
- ☒ 3. मक्खन लगाकर खाना
- ☐ 4. कंजूसी करना

Question ID : 9895806885

Chosen Option : --

Q.2 दिए गए वाक्य में रेखांकित खंड को प्रतिस्थापित करने के लिए उपयुक्त विकल्प का चयन करें।

अच्छे कर्म नष्ट नहीं होते हैं-

- Ans ☐ 1. नश्वर
- ☐ 2. अजर
- ☒ 3. अनश्वर
- ☐ 4. परस्पर

Question ID : 9895806870

Chosen Option : --

Q.3 दिये गये वाक्यांश के लिए एक शब्द दीजिये।

जिसकी बुद्धि कम हो

Ans

- ☒ 1. दुष्टबुद्धि
- ☒ 2. मृदुबुद्धि
- ☒ 3. सुबुद्धि
- ☒ 4. मंदबुद्धि

Question ID : 9895806888

Chosen Option : --

Q.4 रिक्त स्थान को भरने के लिए उपयुक्त शब्द का चयन करें।

मोहन _____ अर्पिता हँस रहे हैं।

Ans

- ☒ 1. और
- ☒ 2. मानो
- ☒ 3. मगर
- ☒ 4. से

Question ID : 9895806872

Chosen Option : --

Comprehension:

निम्नलिखित गद्यांश के रिक्त स्थानों की पूर्ति गद्यांश के नीचे दिए गए प्रश्नों के अनुसार कीजिए-

दीपावली भारत में _____ (1) जाने वाला सबसे बड़ा त्योहार है। हर साल इस पर्व को कार्तिक _____ (2) में बड़ी धूम-धाम से मनाया जाता है। इस त्योहार के आने के _____ (3) दिन पहले ही इसकी तैयारी आरंभ हो जाती है लोग अपने घरों में साफ़-सफाई और रंग-रोगन का काम _____ (4) कर देते हैं। इस दिन घरों और बाजारों को _____ (5) सजाया जाता है।

SubQuestion No : 5

Q.5 गद्यांश में संकेतित रिक्त स्थान (1) के लिए उपयुक्त शब्द होगा।

Ans

- ☒ 1. मनाया
- ☒ 2. रचाया
- ☒ 3. बनाया
- ☒ 4. मनायी

Question ID : 9895806876

Chosen Option : --

Comprehension:

निम्नलिखित गद्यांश के रिक्त स्थानों की पूर्ति गद्यांश के नीचे दिए गए प्रश्नों के अनुसार कीजिए-

दीपावली भारत में _____ (1) जाने वाला सबसे बड़ा त्योहार है। हर साल इस पर्व को कार्तिक _____ (2) में बड़ी धूम-धाम से मनाया जाता है। इस त्योहार के आने के _____ (3) दिन पहले ही इसकी तैयारी आरंभ हो जाती है लोग अपने घरों में साफ़-सफाई और रंग-रोगन का काम _____ (4) कर देते हैं। इस दिन घरों और बाजारों को _____ (5) सजाया जाता है।

SubQuestion No : 6

Q.6 गद्यांश में संकेतित रिक्त स्थान (2) के लिए उपयुक्त शब्द होगा।

- Ans ☒ 1. माह
☒ 2. सप्ताह
☒ 3. दिन
☒ 4. वर्ष

Question ID : 9895806877
 Chosen Option : --

Comprehension:

निम्नलिखित गद्यांश के रिक्त स्थानों की पूर्ति गद्यांश के नीचे दिए गए प्रश्नों के अनुसार कीजिए-

दीपावली भारत में _____ (1) जाने वाला सबसे बड़ा त्योहार है। हर साल इस पर्व को कार्तिक _____ (2) में बड़ी धूम-धाम से मनाया जाता है। इस त्योहार के आने के _____ (3) दिन पहले ही इसकी तैयारी आरंभ हो जाती है लोग अपने घरों में साफ़-सफाई और रंग-रोगन का काम _____ (4) कर देते हैं। इस दिन घरों और बाजारों को _____ (5) सजाया जाता है।

SubQuestion No : 7

Q.7 गद्यांश में संकेतित रिक्त स्थान (3) के लिए उपयुक्त शब्द होगा।

- Ans ☒ 1. कुछ
☒ 2. एक
☒ 3. सब
☒ 4. हर

Question ID : 9895806878
 Chosen Option : --

Comprehension:

निम्नलिखित गद्यांश के रिक्त स्थानों की पूर्ति गद्यांश के नीचे दिए गए प्रश्नों के अनुसार कीजिए-

दीपावली भारत में _____ (1) जाने वाला सबसे बड़ा त्योहार है। हर साल इस पर्व को कार्तिक _____ (2) में बड़ी धूम-धाम से मनाया जाता है। इस त्योहार के आने के _____ (3) दिन पहले ही इसकी तैयारी आरंभ हो जाती है लोग अपने घरों में साफ़-सफाई और रंग-रोगन का काम _____ (4) कर देते हैं। इस दिन घरों और बाजारों को _____ (5) सजाया जाता है।

SubQuestion No : 8

Q.8 गद्यांश में संकेतित रिक्त स्थान (4) के लिए उपयुक्त शब्द होगा।

- Ans ☒ 1. खराब
☒ 2. समाप्त
☒ 3. अच्छा
☒ 4. आरंभ

Question ID : 9895806879
 Chosen Option : --

Comprehension:

निम्नलिखित गद्यांश के रिक्त स्थानों की पूर्ति गद्यांश के नीचे दिए गए प्रश्नों के अनुसार कीजिए-

दीपावली भारत में _____ (1) जाने वाला सबसे बड़ा त्योहार है। हर साल इस पर्व को कार्तिक _____ (2) में बड़ी धूम-धाम से मनाया जाता है। इस त्योहार के आने के _____ (3) दिन पहले ही इसकी तैयारी आरंभ हो जाती है लोग अपने घरों में साफ़-सफाई और रंग-रोगन का काम _____ (4) कर देते हैं। इस दिन घरों और बाजारों को _____ (5) सजाया जाता है।

SubQuestion No : 9

Q.9 गद्यांश में संकेतित रिक्त स्थान (5) के लिए उपयुक्त शब्द होगा।

- Ans ☒ 1. खराब
☒ 2. कम
☒ 3. खूब
☒ 4. गन्दा

Question ID : 9895806880
 Chosen Option : --

Q.10 रिक्त स्थान को भरने के लिए उपयुक्त शब्द का चयन करें।

भूखे को खाने के लिए _____ दो।

- Ans ☒ 1. पानी

✗ 2. कपड़ा

✗ 3. भोजन

✗ 4. सोना

Question ID : 9895806874

Chosen Option : --

Q.1
1 दिए गए वाक्य का वह भाग ज्ञात करें जिसमें कोई त्रुटि है।

किसी ने ठीक ही कहा है कि जो सोता है वह खोती है।

Ans

✗ 1. जो सोता है

✓ 2. किसी ने

✗ 3. वह खोती है।

✗ 4. ठीक ही कहा है कि

Question ID : 9895806866

Chosen Option : --

Q.1
2 दिए गए शब्द का विलोम चुनें।

प्रहार

Ans

✗ 1. हमला

✓ 2. रक्षा

✗ 3. विहार

✗ 4. प्रतिरक्षा

Question ID : 9895806881

Chosen Option : --

Q.1
3 दिए गए वाक्य का वह भाग ज्ञात करें जिसमें कोई त्रुटि है।

कुबेर बड़ी ही मतलबी इन्सान है, उसका दिमाग सातवें आसमान पर रहता है।

Ans

✓ 1. कुबेर बड़ी ही

✗ 2. सातवें आसमान पर रहता है।

✗ 3. उसका दिमाग

✗ 4. मतलबी इन्सान है,

Question ID : 9895806867

Chosen Option : --

Q.1
4 दिए गए शब्द के पर्यायवाची शब्द का चयन करें।

इंद्र

Ans

✗ 1. निशाचर

- ☒ 2. सुरपति
- ☒ 3. भागीरथी
- ☒ 4. सुधाकर

Question ID : 9895806884
Chosen Option : --

Q.1
5 रिक्त स्थान को भरने के लिए उपयुक्त शब्द का चयन करें।

गाय पेड़ _____ बँधी है।

- Ans ☒ 1. पर
- ☒ 2. के
- ☒ 3. में
- ☒ 4. से

Question ID : 9895806871
Chosen Option : --

Q.1
6 दिए गए वाक्य का वह भाग ज्ञात करें जिसमें कोई त्रुटि है।

शीर्षक का चयन करते समय अनुच्छेदों का निहित भागों और विचारों की परख कर लेनी चाहिए।

- Ans ☒ 1. अनुच्छेदों का निहित भागों
- ☒ 2. शीर्षक का चयन करते समय
- ☒ 3. परख कर लेनी चाहिए।
- ☒ 4. और विचारों की

Question ID : 9895806865
Chosen Option : --

Q.1
7 दिए गए शब्द का विलोम चुनें।

सदाचार

- Ans ☒ 1. सुविचार
- ☒ 2. दुराचार
- ☒ 3. विचार
- ☒ 4. कुविचार

Question ID : 9895806882
Chosen Option : --

Q.1
8 दिए गए शब्द के पर्यायवाची शब्द का चयन करें।

सतर्कता

- Ans ☒ 1. असावधानी
- ☒ 2. असतर्कता

- ✓ 3. तसल्ली
- ✗ 4. सावधानी

Question ID : 9895806883
Chosen Option : --

Q.1
9 सही वर्तनी वाले शब्द का चयन करें।

- Ans ✗ 1. अध्ययन
- ✗ 2. आध्ययन
- ✗ 3. अधय्यन
- ✓ 4. अधय्यन

Question ID : 9895806890
Chosen Option : --

Q.2
0 दिये गये वाक्यांश के लिए एक शब्द दीजिये।

जिसमें सहनशक्ति हो

- Ans ✗ 1. सहनकारी
- ✗ 2. सहनीय
- ✗ 3. सहिष्णु
- ✓ 4. सहनशीलता

Question ID : 9895806887
Chosen Option : --

Q.2
1 रिक्त स्थान को भरने के लिए उपयुक्त शब्द का चयन करें।

_____ कितना सुंदर दृश्य है।

- Ans ✓ 1. वाह!
- ✗ 2. सावधान!
- ✗ 3. नहीं!
- ✗ 4. छिः!

Question ID : 9895806873
Chosen Option : --

Q.2
2 दिए गए वाक्य में रेखांकित खंड को प्रतिस्थापित करने के लिए उपयुक्त विकल्प का चयन करें।

सूरदास जी जन्म से अंधे थे।

- Ans ✓ 1. जन्मांध
- ✗ 2. मदान्ध
- ✗ 3. धर्मान्ध
- ✗ 4. कर्मान्ध

Question ID : 9895806869
Chosen Option : --

Q.2
3 सही वर्तनी वाले शब्द का चयन करें।

- Ans
- ☒ 1. वीशेषण
 - ☒ 2. विशेषण
 - ☒ 3. विशेषण
 - ☒ 4. विसेशण

Question ID : 9895806889

Chosen Option : --

Q.2
4 निम्नलिखित में से उस विकल्प का चयन करें जो 'भैंस के आगे बीन बजाना' मुहावरे का अर्थ व्यक्त करता है।

- Ans
- ☒ 1. भैंस के सामने संगीत गाना
 - ☒ 2. समझदार के सामने मूर्खता की बातें करना
 - ☒ 3. मूर्ख के सामने ज्ञान की बातें करना
 - ☒ 4. भैंस को बीन पर नचाना

Question ID : 9895806886

Chosen Option : --

Q.2
5 दिए गए वाक्य में रेखांकित खंड को प्रतिस्थापित करने के लिए उपयुक्त विकल्प का चयन करें।

राम शक्ति के उपासक थे।

- Ans
- ☒ 1. शैव
 - ☒ 2. शाक्त
 - ☒ 3. सदाचारी
 - ☒ 4. वैष्णव

Question ID : 9895806868

Chosen Option : --

Constable (GD) in CAPFs, NIA, SSF and Rifleman (GD) in Assam Rifles Examination, 2018

| | |
|------------------|--------------------|
| Roll No. : | |
| Registration No. | |
| Name : | |
| Exam Venue : | |
| Exam Time : | 12:30 PM - 2:00 PM |
| Exam Date : | 05/03/2019 |

Section : General Section

Q.1 Four words have been given out of which three are alike in some manner, while one is different. Choose the odd one.

- Ans
- ☒ 1. Truck
 - ☒ 2. Trolley
 - ☒ 3. Tempo
 - ☒ 4. Cargo

Question ID : 9895808391

Chosen Option : 3

Q.2 Choose the option figure in which the problem figure is hidden/embedded.

Questions Figure:



Ans

- ☒ 1.
- ☒ 2.
- ☒ 3.
- ☒ 4.

Question ID : 9895808410

Chosen Option : --

Q.3 In a queue, Lily is eighteenth from the front while Mini is sixteenth from the back. If Nisha is twenty- fifth from the front and is exactly in the middle of Lily and Mini, then how many persons are there in the queue?

- Ans
- ☒ 1. 46
 - ☒ 2. 48

 3. 45

 4. 47

Question ID : 9895808399

Chosen Option : --

Q.4 Find the missing number from the below options.

| | |
|----|----|
| 72 | 18 |
| | 49 |
| 24 | 17 |

| | |
|----|----|
| 42 | 36 |
| | ? |
| 29 | 31 |

Ans  1. 20

 2. 24

 3. 18

 4. 36

Question ID : 9895808406


Chosen Option : 4

Q.5 Select the correct option that will fill in the blank and complete the series.

Mhz, Ngy, Ofx, Pew, _____

Ans  1. Qrm

 2. Rrn


 3. Qqn


 4. Qdv


Question ID : 9895808389


Chosen Option : 4

Q.6 In a certain code ROHIT is written as "TQJKV", how will COUNTRY be coded?

Ans  1. EQWPVTA

 2. EQWVPTE

 3. EQWPUTA

 4. EQWVPAT

Question ID : 9895808395

Chosen Option : 1

Q.7 Dates of birth of some persons are given below. Find out the date of birth of the oldest person:

A. 12.08.1989

B. 13.09.1991

C. 19.06.1991

D. 20.02.1989

E. 22.03.1991

F. 20.01.1991

G. 20.12.1989

- Ans
- ☒ 1. B
 - ☒ 2. D
 - ☒ 3. C
 - ☒ 4. G

Question ID : 9895808398
Chosen Option : 2

Q.8 Select the option that is related to the third term in the same way as the second term is related to the first term.


pRSq : tVWu :: iKLj : ?

- Ans
- ☒ 1. MopN
 - ☒ 2. mRSq
 - ☒ 3. MrsQ
 - ☒ 4. mOPn

Question ID : 9895808394
Chosen Option : 1

Q.9 Which of the following answer figure will complete the given figure?

Question figure:

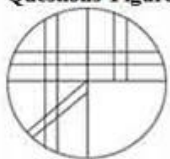


- Ans
- ☒ 1.
 - ☒ 2.
 - ☒ 3.
 - ☒ 4.

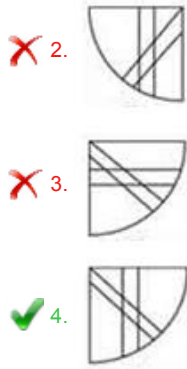
Question ID : 9895808408
Chosen Option : 3

Q.10 Which of the following answer figure will complete the given figure?

Questions Figure:



- Ans
- ☒ 1.



Question ID : 9895808409
Chosen Option : 4

Q.1 If 'q' stands for '+', 'y' stands for '-', 'z' stands for '÷' and 'p' stands for 'x', then the value of :

1

20 p 2 q 6 y 5

- Ans
1. 45
2. 35
3. 41
4. 31

Question ID : 9895808407
Chosen Option : 3

Q.1 The statements below are followed by four conclusions labeled I, II, III and IV. Assuming that the information in the statements is true, even if it appears to be at variance with generally established facts, decide which conclusion(s) logically and definitely follow(s) from the information given in the statements.

2

Statements:

Some Linear Equations are Quadratic Equations.

All Quadratic Equations are Algebraic Equations.

Conclusions:

I. All Linear Equations are Algebraic Equations.

II. Some Algebraic Equations are Linear Equations.

III. Some Algebraic Equations are Quadratic Equations.

IV. All Quadratic Equations are Linear Equations.

- Ans
1. Only I and II follows.
2. Only II and III follow.
3. Only III follows.
4. Only I follows.

Question ID : 9895808400
Chosen Option : --

Q.1 Choose the odd one out from the given alternatives.

3

- Ans
1. 78 : 4
2. 56 : 4
3. 72 : 6
4. 39 : 3

Question ID : 9895808405
Chosen Option : 1

Q.1
4 If UPSIDE is coded as 74, then SHARKS will be coded as:

- Ans
- ☒ 1. 68
 - ☒ 2. 72
 - ☒ 3. 76
 - ☒ 4. 77

Question ID : 9895808396

Chosen Option : 3

Q.1
5 Find the related numbers-pair from the given alternatives.

12 : 156 :: ?

- Ans
- ☒ 1. 15 : 340
 - ☒ 2. 7 : 50
 - ☒ 3. 10 : 101
 - ☒ 4. 10 : 110

Question ID : 9895808404

Chosen Option : 4

Q.1
6 If a mirror is placed on MN line, then which of the answer figures will be the right image of the given figure?

Questions Figure:



Ans

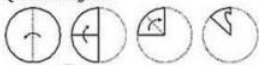
- ☒ 1.
- ☒ 2.
- ☒ 3.
- ☒ 4.

Question ID : 9895808411

Chosen Option : --

Q.1
7 A piece of paper is folded and cut as shown below in the question figures from the given answer figures, indicate the pattern that it will appear when it is opened?

Questions Figure:



Ans

- ☒ 1.
- ☒ 2.



Question ID : 9895808412
Chosen Option : 4

Q.1 Select the option that is related to the third term in the same way as the second term is related to the first term.
8

Lion : Roar :: Elephant : ?

Ans ☒ 1. Trumpet

☒ 2. Bray

☒ 3. Bark

☒ 4. Grunt

Question ID : 9895808392
Chosen Option : 3

Q.1 Select the option that is related to the third term in the same way as the second term is related to the first term.
9

Bees : Hum :: Snakes : ?

Ans ☒ 1. Hiss

☒ 2. Hoot

☒ 3. Roar

☒ 4. Talk

Question ID : 9895808393
Chosen Option : 1

Q.2 A, B, C, D, E, F, G and H are sitting around a circle facing at the centre. E, is second to the left of F and third to the right of A. B is third to the right of G who is not an immediate neighbour of E or F. C is second to the right of B. D is to the immediate left of A and third to the left of H.

Who is the fifth to the right of C?

Ans ☒ 1. H

☒ 2. B

☒ 3. E

☒ 4. G

Question ID : 9895808397
Chosen Option : --

Q.2 Select the correct option that will fill in the blank and complete the series.
1

1331, 121, 2197, 169, 3375, _____

Ans ☒ 1. 225

☒ 2. 205

☒ 3. 216

☒ 4. 215

Question ID : **9895808402**
Chosen Option : **4**


Q.2 Select the Venn diagram that best illustrates the relationship between the three given classes.

2

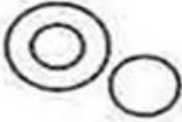
Girls, Healthy, Trains

Ans

✓ 1.



✗ 2.



✗ 3.



✗ 4.



Question ID : **9895808413**
Chosen Option : **2**

Q.2 Four letter clusters have been given out of which three are alike in some manner, while one is different. Choose the odd one.

3

Ans

✓ 1.

CFJ

✗ 2.

DGJ

✗ 3.

TWZ

✗ 4.

GJM

Question ID : **9895808390**
Chosen Option : **1**

Q.2 Select the correct option that will fill in the blank and complete the series.

4

37, 26, 39, 24, 41, _____

Ans

✓ 1.

22

✗ 2.

25

✗ 3.

23

✗ 4.

26

Question ID : **9895808403**
Chosen Option : **1**

Q.2
5

The statements below are followed by two conclusions labeled I and II. Assuming that the information in the statements is true, even if it appears to be at variance with generally established facts, decide which conclusion(s) logically and definitely follow(s) from the information given in the statements.

Statements:

All rivers are mountains.

All forests are mountains.

Conclusion:

I. Some forests are river.

II. No forest is a river.

- Ans
- ☒ 1. Only conclusion I follows
 - ☒ 2. Neither conclusion I nor II follows
 - ☒ 3. Only conclusion II follows
 - ☒ 4. Either conclusion I or II follows

Question ID : 9895808401

Chosen Option : 2

Q.2
6 The Maithon Dam is in which state?

- Ans
- ☒ 1. Chhattisgarh
 - ☒ 2. Madhya Pradesh
 - ☒ 3. Odisha
 - ☒ 4. Jharkhand

Question ID : 9895807472

Chosen Option : 4

Q.2
7 Name the class of folk songs of Goa, usually sung to mourn the death of the loved ones.

- Ans
- ☒ 1. Gha To Kito
 - ☒ 2. Khubakeshei
 - ☒ 3. Banvarh
 - ☒ 4. Sumangali

Question ID : 9895807453

Chosen Option : 2

Q.2
8 _____ alloy consists of copper and tin.

- Ans
- ☒ 1. German silver
 - ☒ 2. Bell Metal
 - ☒ 3. Solder
 - ☒ 4. Rose Metal

Question ID : 9895807470

Chosen Option : 2

Q.2
9 Parliamentary form of government as laid down in the Indian Constitution is influenced by the constitution of _____.

- Ans
- ☒ 1. United States
 - ☒ 2. United Kingdom
 - ☒ 3. Australia

☒ 4. Ireland

Question ID : 9895807464
Chosen Option : 3

Q.3
0 Which amendment to the constitution introduced the Goods and Services Tax (GST)?

- Ans
- ☒ 1. 103rd Constitution Amendment Act, 2018
 - ☒ 2. 73rd Constitution Amendment Act of 2003
 - ☒ 3. 92nd Constitution Amendment Act of 2003
 - ☒ 4. 101st Constitution Amendment Act, 2016

Question ID : 9895807465
Chosen Option : 1

Q.3
1 Chandragupta I was succeeded by his son _____.

- Ans
- ☒ 1. Purugupta
 - ☒ 2. Bhanugupta
 - ☒ 3. Skandagupta
 - ☒ 4. Samudragupta

Question ID : 9895807475
Chosen Option : 4

Q.3
2 Farad is the unit of _____.

- Ans
- ☒ 1. electric conductance
 - ☒ 2. magnetic flux density
 - ☒ 3. capacitance
 - ☒ 4. magnetic flux

Question ID : 9895807468
Chosen Option : 3

Q.3
3 Which Indian was crowned Miss World Continental Queen of Beauty—Asia & Oceania in 1999?

- Ans
- ☒ 1. Reita Faria
 - ☒ 2. Dia Mirza
 - ☒ 3. Yukta Mookhey
 - ☒ 4. Priyanka Chopra

Question ID : 9895807460
Chosen Option : 4

Q.3
4 The Charter Act of 1833 made the Governor-General of _____ as the Governor-General of India and vested in him all civil and military powers.

- Ans
- ☒ 1. Berar Province
 - ☒ 2. United Provinces
 - ☒ 3. Oudh State
 - ☒ 4. Bengal

Question ID : 9895807466
Chosen Option : 4

Q.3
5 The formula of Cyanogen is _____.

- Ans
- ☒ 1. CH_3CN
 - ☒ 2. CH_2CHCN
 - ☒ 3. CH_3OCN
 - ☒ 4. C_2N_2

Question ID : 9895807469
Chosen Option : 3

Q.3
6 It was stated in the Union Budget 2018, that the Ujjwala Yojana, the free LPG connection scheme would be expanded to _____ crore women.

- Ans
- ☒ 1. eight
 - ☒ 2. two
 - ☒ 3. four
 - ☒ 4. six

Question ID : 9895807462
Chosen Option : 3

Q.3
7 The origin of the sun was approximately how many years before the present age?

- Ans
- ☒ 1. 1.5 billion years
 - ☒ 2. 2.4 billion years
 - ☒ 3. 10.6 billion years
 - ☒ 4. 4.6 billion years

Question ID : 9895807474
Chosen Option : 3

Q.3
8 Which of the following is an autobiography by former Minister in charge of External Affairs, Kunwar Natwar Singh?

- Ans
- ☒ 1. Where Have I Been?
 - ☒ 2. Ace Against Odds
 - ☒ 3. Courage and Conviction
 - ☒ 4. One Life is not Enough

Question ID : 9895807459
Chosen Option : 3

Q.3
9 Which team won in the 2018 Pro Wrestling League finals?

- Ans
- ☒ 1. Punjab Royals
 - ☒ 2. Delhi Sultans
 - ☒ 3. Haryana Hammers
 - ☒ 4. Veer Marathas

Question ID : 9895807456

Chosen Option : 3

Q.4 In Battle of Khatoli (1517) Rana Sanga of Mewar defeated Sultan of Delhi, _____ Lodhi and imprisoned him and then released him after collecting ransom.

- Ans
- ☒ 1. Qutb-ud-din
 - ☒ 2. Sikandar
 - ☒ 3. Ibrahim
 - ☒ 4. Bahlul Khan

Question ID : 9895807477
Chosen Option : 3

Q.4 The Economic Survey report 2017-18 stated that the Services sector growth for FY18 was likely to be at _____.

- Ans
- ☒ 1. 8.30%
 - ☒ 2. 6.50%
 - ☒ 3. 9.60%
 - ☒ 4. 7.10%

Question ID : 9895807461
Chosen Option : 1

Q.4 Which of the following dances is a dance form from Chhattisgarh?

- Ans
- ☒ 1. Macha
 - ☒ 2. Raut Nacha
 - ☒ 3. Chiraw
 - ☒ 4. Ottam Thullal

Question ID : 9895807455
Chosen Option : 3

Q.4 Which British retired Civil Service Officer took the initiative to convene the first meeting of the Indian National Union?

- Ans
- ☒ 1. John Morley
 - ☒ 2. Gilbert Elliot
 - ☒ 3. Allan Octavian Hume
 - ☒ 4. Edwin Montagu

Question ID : 9895807476
Chosen Option : 2

Q.4 The coccyx is part of the _____.

- Ans
- ☒ 1. shoulder girdle
 - ☒ 2. spine
 - ☒ 3. arm
 - ☒ 4. leg

Question ID : 9895807471
Chosen Option : 1

Q.4

5 Minimum Support Price for 2018-19 for Maize is set at _____.

- Ans
- ☒ 1. ₹ 1,950 per quintal
 - ☒ 2. ₹ 2,430 per quintal
 - ☒ 3. ₹ 1,700 per quintal
 - ☒ 4. ₹ 5,150 per quintal

Question ID : 9895807463

Chosen Option : 4

Q.4 The Kila Raipur Rural Olympics is held annually in between January and February near _____.

6

- Ans
- ☒ 1. Gwalior
 - ☒ 2. Ludhiana
 - ☒ 3. Aizwal
 - ☒ 4. Vadodara

Question ID : 9895807454

Chosen Option : 3

Q.4 Name the Sanskrit scholar who was awarded the Bharat Ratna?

7

- Ans
- ☒ 1. Madan Mohan Malaviya
 - ☒ 2. Pandurang Vaman Kane
 - ☒ 3. Bidhan Chandra Roy
 - ☒ 4. Purushottam Das Tandon

Question ID : 9895807458

Chosen Option : 4

Q.4 India defeated which team to win the Nidahas Trophy 2018 cricket Tri-Series Final played in March 2018?

8

- Ans
- ☒ 1. South Africa
 - ☒ 2. England
 - ☒ 3. Bangladesh
 - ☒ 4. West Indies

Question ID : 9895807457

Chosen Option : 3

Q.4 Name the highest peak of the Satpura range.

9

- Ans
- ☒ 1. Anamudi
 - ☒ 2. Kalsubai
 - ☒ 3. Doddabetta
 - ☒ 4. Dhupgarh

Question ID : 9895807473

Chosen Option : 1

Q.5 Moment of inertia of a thin rod of mass 'M' and length 'L' about the axis perpendicular to the rod and passing through its

0

centre is _____.

- Ans ☒ 1. $ML^2/6$
- ☒ 2. $ML^2/4$
- ☒ 3. $ML^2/12$
- ☒ 4. $ML^2/2$

Question ID : 9895807467
Chosen Option : 4

Q.5 Find the average of $(5 + 5 + \dots \text{upto } 200 \text{ times})$ and $(8 + 8 + \dots \text{upto } 100 \text{ times})$.

- Ans ☒ 1. 6.5
- ☒ 2. 6
- ☒ 3. 75
- ☒ 4. 7

Question ID : 9895807782
Chosen Option : --

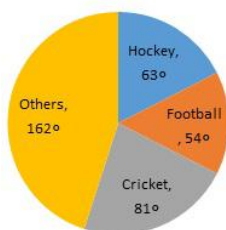
Q.5 What should come in place of the question mark (?) in the following question?

$$6 \div 6 \times 9 + 6 - 9 \times 6 - 6 + 6 \times 9 = ?$$

- Ans ☒ 1. 8
- ☒ 2. 7
- ☒ 3. 9
- ☒ 4. 10

Question ID : 9895807780
Chosen Option : --

Q.5 The pie chart given here shows the spendings of a country on various sports during a particular year. Study the chart carefully and answer the questions given below:



What percent of the total spendings is spent on others?

- Ans ☒ 1. 25%
- ☒ 2. 45%
- ☒ 3. 22.5%
- ☒ 4. 12.5%

Question ID : 9895807800
Chosen Option : --

Q.5 A certain sum is divided among p, q and r in a manner that for every rupee that p gets, q gets 75 paise and for every rupee that q gets, r gets 50 paise. If r's share in the total sum is ₹ 36, then find the share of p.

- Ans ☒ 1. ₹ 60

☒ 2. ₹ 54

☒ 3. ₹ 96

☒ 4. ₹ 72

Question ID : 9895807790
Chosen Option : 2

Q.5 The ratio of length of two trains is 6 : 5 and the ratio of their speed is 3 : 2 The ratio of time taken by them to cross a pole is:

Ans ☒ 1. 5 : 6

☒ 2. 5 : 8

☒ 3. 4 : 5

☒ 4. 3 : 5

Question ID : 9895807795
Chosen Option : 3

Q.5 The mode of the data
26, 32, 26, 28, 26, 24, 31, 24 is:

Ans ☒ 1. 26

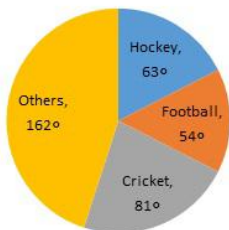
☒ 2. 24

☒ 3. 28

☒ 4. 31

Question ID : 9895807784
Chosen Option : 1

Q.5 The pie chart given here shows the spendings of a country on various sports during a particular year. Study the chart carefully and answer the questions given below it.



How much percent less is spent on Football than that on Cricket?

Ans ☒ 1. $12\frac{1}{2}\%$

☒ 2. $20\frac{1}{2}\%$

☒ 3. $33\frac{1}{3}\%$

☒ 4. 25%

Question ID : 9895807801
Chosen Option : 1

Q.5 An inlet pipe takes 8 hours to fill a tank. An outlet pipe takes 12 hours to empty it. If both pipes are opened simultaneously, in how many hours will the tank be filled?

Ans ☒ 1. 12

☒ 2. 24

☒ 3. 36

☒ 4. 8

Question ID : 9895807794
Chosen Option : 1

Q.5 9 Ajay can row his boat in still water, at a speed of 6 kmph. If the speed of the stream is 4 kmph, how long will he take to a distance of 30 km downstream?

Ans ☒ 1. 4 hours

☒ 2. 3 hours

☒ 3. 2 hours

☒ 4. 5 hours

Question ID : 9895807796
Chosen Option : 2

Q.6 0 In a class there are a total of 60 boys and girls. Which of the following can't represent the ratio of the number of boys and girls in the class?

Ans ☒ 1. 1 : 6

☒ 2. 2 : 3

☒ 3. 1 : 3

☒ 4. 3 : 7

Question ID : 9895807788
Chosen Option : 1

Q.6 1 If the HCF of two numbers is 6 and their LCM is 120, one such pair of numbers is:

Ans ☒ 1. 12, 40

☒ 2. 18, 40

☒ 3. 12, 60

☒ 4. 24, 30

Question ID : 9895807778
Chosen Option : 1

Q.6 2 A sum borrowed under compound interest doubles itself in 10 years. When will it become fourfold of itself at the same rate of interest?

Ans ☒ 1. 40 years

☒ 2. 15 years

☒ 3. 24 years

☒ 4. 20 years

Question ID : 9895807792
Chosen Option : 4

Q.6 3 If the profit made by a merchant on selling 45 m of cloth is equal to the selling price of 5m of cloth, then his profit percentage is:

Ans ☒ 1. 9.09%

☒ 2. 11.11%

☒ 3. 12.5%

☒ 4. 10%

Question ID : 9895807786
Chosen Option : 1

Q.6 The average marks of 42 students in an examination, was 64. Later it was found that the marks of three students were misread as 72, 58 and 44 instead of the actual marks 64, 42 and 26 respectively. What is the correct average marks?

- Ans ☒ 1. 63
☐ 2. 62
☐ 3. 60
☐ 4. 61

Question ID : 9895807781
Chosen Option : 3

Q.6 Which of the following is the greatest among all?

- Ans ☒ 1. 7% discount on marked price ₹500
☐ 2. 10% discount on marked price ₹320
☐ 3. 12% discount on marked price ₹240
☐ 4. 8% discount on marked price ₹400

Question ID : 9895807783
Chosen Option : 1

Q.6 Rajaram purchased a certain amount of wheat. If he sold one-fourth of the wheat at a profit of 12%, then the profit percent he needs to make on the remaining wheat to make an overall profit of 15% is:

- Ans ☐ 1. 20%
☒ 2. 16%
☐ 3. 18%
☐ 4. 15%

Question ID : 9895807787
Chosen Option : 3

Q.6 Two parallelogram stand on equal bases and between the same parallel. The ratio of their areas is:

- Ans ☐ 1. 1 : 3
☐ 2. 2 : 1
☒ 3. 1 : 1
☐ 4. 1 : 2

Question ID : 9895807798
Chosen Option : 2

Q.6 If 30 men can do a job in 30 days, find what part of the job can be completed by 1 man in 1 day.

- Ans ☐ 1. $\frac{1}{90}$
☐ 2. $\frac{1}{60}$
☐ 3. $\frac{1}{30}$

✓ 4. $\frac{1}{900}$

Question ID : 9895807793
Chosen Option : 3

Q.6 Five years ago, the ratio of the ages of a father and his son was 5 : 3. Which of the following cannot be the ratio of their ages 10 years from now?

- Ans
- ✗ 1. 6 : 5
 - ✗ 2. 8 : 7
 - ✓ 3. 7 : 3
 - ✗ 4. 3 : 2

Question ID : 9895807789
Chosen Option : 4

Q.7 In what time does money becomes double at simple interest rate of 12% per annum?

- Ans
- ✗ 1. $6\frac{2}{3}$ Years
 - ✗ 2. $6\frac{1}{3}$ Years
 - ✓ 3. $8\frac{1}{3}$ Years
 - ✗ 4. $8\frac{2}{3}$ Years

Question ID : 9895807791
Chosen Option : 3

Q.7 If the surface area of two spheres is in the ratio 49 : 25, then the ratio of their volumes will be:

- Ans
- ✓ 1. 343 : 125
 - ✗ 2. 64 : 27
 - ✗ 3. 25 : 49
 - ✗ 4. 343 : 64

Question ID : 9895807797
Chosen Option : 3

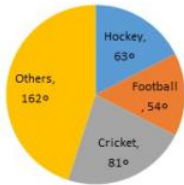
Q.7 If the area of the base of a cone is increased then it becomes 1.96 times of original area. If the volume is increased by:

- Ans
- ✗ 1. 40%
 - ✓ 2. 96%
 - ✗ 3. 141%
 - ✗ 4. 100%

Question ID : 9895807799
Chosen Option : 4

Q.7
3

The pie chart given here shows the spendings of a country on various sports during a particular year. Study the graph carefully and answer the questions given below it.



If the total amount spent on sports during the year be ₹18000, the amount spent on Cricket exceeds that on football by (in ₹) :

- Ans
- ☒ 1. 2800
 - ☒ 2. 3000
 - ☒ 3. 2550
 - ☒ 4. 1350

Question ID : 9895807802
Chosen Option : 4

Q.7 What should come in place of the question mark (?) in the following question?

$$[(16 \div 4) \times 4] \div 4 = ?$$

- Ans
- ☒ 1. 5
 - ☒ 2. 2
 - ☒ 3. 4
 - ☒ 4. 3

Question ID : 9895807779
Chosen Option : 3

Q.7 Sanjay scored 75 out of 150 marks in his mid-term exam and 105 out of 150 in his annual exam. The percentage increase in his marks is:

- Ans
- ☒ 1. 40%
 - ☒ 2. 45%
 - ☒ 3. 30%
 - ☒ 4. 50%

Question ID : 9895807785
Chosen Option : 3

Section : English Language

Q.1 Select the wrongly spelt word.

- Ans
- ☒ 1. Ambition
 - ☒ 2. Auditorum
 - ☒ 3. Absolute
 - ☒ 4. Analysis

Question ID : 9895808135
Chosen Option : 2

Q.2

Select the most appropriate option to substitute the underlined segment in the given sentence. If there is no need to substitute it, select No substitution required.

Modern farming practices is involving the use of fertilizers and pesticides.

Ans

- ☒ 1. involve the use of
- ☐ 2. No substitution required
- ☐ 3. involved the using of
- ☐ 4. has involved the use in

Question ID : 9895808118
Chosen Option : 1

Q.3 Select the most appropriate word to fill in the blank.

Minerals are _____ occurring substances which have certain physical properties.

Ans

- ☒ 1. naturally
- ☐ 2. falsely
- ☐ 3. fictitiously
- ☐ 4. thoroughly

Question ID : 9895808138
Chosen Option : 1

Q.4 Select the meaning of the given idiom.

A piece of cake

Ans

- ☐ 1. A small quantity
- ☒ 2. A very easy task
- ☐ 3. Very tasty
- ☐ 4. Unrealistic hope

Question ID : 9895808131
Chosen Option : 3

Q.5 Select the most appropriate word to fill in the blank.

Biosphere is a narrow zone of the earth where land, water and air _____ with each other to support life.

Ans

- ☒ 1. interact
- ☐ 2. collapse
- ☐ 3. impose
- ☐ 4. surround

Question ID : 9895808137
Chosen Option : 4

Q.6 Select the word which means the same as the group of words given.

That which can be heard

Ans

- ☐ 1. Legible

☒ 2. Tangible

☒ 3. Edible

☒ 4. Audible

Question ID : 9895808134

Chosen Option : 4

Q.7 Identify the segment in the sentence which contains the grammatical error from the given options.

If you plant a seed, you will be noticed that it takes some time to grow.

Ans ☒ 1. will be noticed

☒ 2. takes some

☒ 3. to grow

☒ 4. If you

Question ID : 9895808113

Chosen Option : 1

Comprehension:

In the following passage some words have been deleted. Fill in the blanks with the help of the alternatives given. Select the most appropriate option for each number.

On the morning of 14 July 1789, (1) _____ city of Paris was in a state of (2) _____. The king had (3) _____ troops to move into the city. Rumors spread that he would soon order the army to (4) _____ fire upon the citizens. Some 7,000 men and women gathered (5) _____ the town hall.

SubQuestion No : 8

Q.8 Select the most appropriate option that will fill in the blank number 1.

Ans ☒ 1. the

☒ 2. No article needed

☒ 3. a

☒ 4. an

Question ID : 9895808122

Chosen Option : 1

Comprehension:

In the following passage some words have been deleted. Fill in the blanks with the help of the alternatives given. Select the most appropriate option for each number.

On the morning of 14 July 1789, (1) _____ city of Paris was in a state of (2) _____. The king had (3) _____ troops to move into the city. Rumors spread that he would soon order the army to (4) _____ fire upon the citizens. Some 7,000 men and women gathered (5) _____ the town hall.

SubQuestion No : 9

Q.9

Select the most appropriate option that will fill in the blank number 2.

- Ans
- ☒ 1. peace
 - ☒ 2. disagreement
 - ☒ 3. ease
 - ☒ 4. alarm

Question ID : 9895808123
Chosen Option : 1

Comprehension:

In the following passage some words have been deleted. Fill in the blanks with the help of the alternatives given. Select the most appropriate option for each number.

On the morning of 14 July 1789, (1) _____ city of Paris was in a state of (2) _____. The king had (3) _____ troops to move into the city. Rumors spread that he would soon order the army to (4) _____ fire upon the citizens. Some 7,000 men and women gathered (5) _____ the town hall.

SubQuestion No : 10

Q.1
0 Select the most appropriate option that will fill in the blank number 3.

- Ans
- ☒ 1. expected
 - ☒ 2. urged
 - ☒ 3. announced
 - ☒ 4. commanded

Question ID : 9895808124
Chosen Option : 3

Comprehension:

In the following passage some words have been deleted. Fill in the blanks with the help of the alternatives given. Select the most appropriate option for each number.

On the morning of 14 July 1789, (1) _____ city of Paris was in a state of (2) _____. The king had (3) _____ troops to move into the city. Rumors spread that he would soon order the army to (4) _____ fire upon the citizens. Some 7,000 men and women gathered (5) _____ the town hall.

SubQuestion No : 11

Q.1
1 Select the most appropriate option that will fill in the blank number 4.

- Ans
- ☒ 1. extinguish
 - ☒ 2. Spread fire
 - ☒ 3. cross
 - ☒ 4. open

Question ID : 9895808125

Chosen Option : 4

Comprehension:

In the following passage some words have been deleted. Fill in the blanks with the help of the alternatives given. Select the most appropriate option for each number.

On the morning of 14 July 1789, (1) _____ city of Paris was in a state of (2) _____. The king had (3) _____ troops to move into the city. Rumors spread that he would soon order the army to (4) _____ fire upon the citizens. Some 7,000 men and women gathered (5) _____ the town hall.

SubQuestion No : 12

Q.1
2 Select the most appropriate option that will fill in the blank number 5.

- Ans
- ☒ 1. across
 - ☒ 2. besides
 - ☒ 3. on top of
 - ☒ 4. in front of

Question ID : 9895808126
Chosen Option : 2

Q.1
3 Identify the segment in the sentence which contains the grammatical error from the given options.

Raw materials are substances that are either found naturally or produce by farmers.

- Ans
- ☒ 1. found naturally
 - ☒ 2. produce by
 - ☒ 3. substances
 - ☒ 4. Raw materials

Question ID : 9895808115
Chosen Option : 2

Q.1
4 Select the antonym of the given word.

Rational

- Ans
- ☒ 1. Impatient
 - ☒ 2. Illogical
 - ☒ 3. Conscious
 - ☒ 4. Polite

Question ID : 9895808129
Chosen Option : 4

Q.1
5 Select the most appropriate word to fill in the blank.

Most workers _____ as laborers in factories where their wages were fixed.

- Ans
- ☒ 1. were employed
 - ☒ 2. was employ

- ☒ 3. is employed
- ☒ 4. has employed

Question ID : 9895808120
Chosen Option : 4

Q.1
6 Select the meaning of the given idiom.

Fish out of water

- Ans ☒ 1. In a new job
- ☒ 2. To be uncomfortable
- ☒ 3. To shift to a new place
- ☒ 4. To be depressed

Question ID : 9895808132
Chosen Option : 4

Q.1
7 Select the synonym of the given word.

Incredible

- Ans ☒ 1. Unspectacular
- ☒ 2. Ordinary
- ☒ 3. Impossible
- ☒ 4. Unbelievable

Question ID : 9895808128
Chosen Option : 3

Q.1
8 Select the synonym of the given word.

Delight.

- Ans ☒ 1. Dread
- ☒ 2. Grief
- ☒ 3. Excitement
- ☒ 4. Joy

Question ID : 9895808127
Chosen Option : 4

Q.1
9 Select the wrongly spelt word.

- Ans ☒ 1. Bileive
- ☒ 2. Biannual
- ☒ 3. Bracelet
- ☒ 4. Brochure

Question ID : 9895808136
Chosen Option : 1

Q.2

0 Identify the segment in the sentence which contains the grammatical error from the given options.

Scholars have studied the lives of present-day farmer's who practice agriculture.

Ans

- ☒ 1. farmer's
☐ 2. the lives of
☐ 3. practice agriculture
☐ 4. Scholars have

Question ID : 9895808114
Chosen Option : 2

Q.2
1 Select the most appropriate word to fill in the blank.

The French Revolution _____ to the end of monarchy in France.

Ans

- ☒ 1. led
☐ 2. is leading
☐ 3. was led
☐ 4. were leading

Question ID : 9895808119
Chosen Option : 1

Q.2
2 Select the antonym of the given word.

Genuine

Ans

- ☒ 1. Fake
☐ 2. Thankful
☐ 3. Original
☐ 4. Unhealthy

Question ID : 9895808130
Chosen Option : 4

Q.2
3 Select the most appropriate option to substitute the underlined segment in the given sentence. If there is no need to substitute it, select No substitution required.

Tissue is a group of cells that are similar to structure and are organised together.

Ans

- ☒ 1. that are similar in
☐ 2. No substitution required
☐ 3. that is similarly to
☐ 4. that were similarly in

Question ID : 9895808116
Chosen Option : 2

Q.2
4 Select the word which means the same as the group of words given.

Existing, happening, or operating in the air

Ans

- ☐ 1. Aquatic

- ☒ 2. Terrestrial
- ☒ 3. Arboreal
- ☒ 4. Aerial

Question ID : 9895808133
Chosen Option : --

Q.2 Select the most appropriate option to substitute the underlined segment in the given sentence. If there is no need to substitute it, select No substitution required.

5

The aquatic animals can breathe under water due to dissolved oxygen.

Ans

- ☒ 1. can be breathing in water
- ☒ 2. could have breathed under water
- ☒ 3. can breathe under water
- ☒ 4. No substitution required

Question ID : 9895808117
Chosen Option : --

Section : Hindi Language

Q.1 सही वर्तनी वाले शब्द का चयन करें।

Ans

- ☒ 1. तोपची
- ☒ 2. तौपची
- ☒ 3. तोपचि
- ☒ 4. तौपचि

Question ID : 9895806916
Chosen Option : --

Q.2 दिए गए शब्द का विलोम चुनें।

आधार

Ans

- ☒ 1. निरपराध
- ☒ 2. मूसलाधार
- ☒ 3. निराधार
- ☒ 4. सूत्रधार

Question ID : 9895806907
Chosen Option : --

Q.3 दिए गए वाक्य का वह भाग ज्ञात करें जिसमें कोई त्रुटि है।

यह मेरा सौभाग्य है कि आप मेरे घर पधारे और आपका दर्शन हुआ।

Ans

- ☒ 1. आप मेरे घर पधारे
- ☒ 2. सौभाग्य है कि
- ☒ 3. और आपका दर्शन हुआ।

✓ 4. यह मेरा

Question ID : 9895806893

Chosen Option : --

Q.4 दिए गए शब्द के पर्यायवाची शब्द का चयन करें।

न्यून

Ans

✗ 1. पर्याप्त

✗ 2. कोण

✗ 3. अधिक

✓ 4. कम

Question ID : 9895806909

Chosen Option : --

Q.5 दिए गए वाक्य का वह भाग ज्ञात करें जिसमें कोई त्रुटि है।

ग्रीष्म ऋतु आते ही अनाज खरीदने की व्यवस्था किया जाता है।

Ans

✗ 1. की व्यवस्था

✗ 2. किया जाता है।

✓ 3. ग्रीष्म ऋतु आते ही

✗ 4. अनाज खरीदने

Question ID : 9895806892

Chosen Option : --

Q.6 दिए गए वाक्य में रेखांकित खंड को प्रतिस्थापित करने के लिए उपयुक्त विकल्प का चयन करें।

विजय ने अजय का बहुत तिरस्कार किया।

Ans

✗ 1. विश्वास

✓ 2. अपमान

✗ 3. सम्मान

✗ 4. विरोध

Question ID : 9895806895

Chosen Option : --

Q.7 दिये गये वाक्यांश के लिए एक शब्द दीजिये।

दोपहर से पहले का समय

Ans

✗ 1. पूर्वाह्न

✗ 2. सायंकाल

✗ 3. मध्याह्न

✓ 4. अपराह्न

Question ID : 9895806914
Chosen Option : --

Q.8 रिक्त स्थान को भरने के लिए उपयुक्त शब्द का चयन करें।

सफेद रंग _____ का प्रतीक है।

Ans

- ☒ 1. आतंकवाद
- ☒ 2. असत्य
- ☒ 3. हिंसा
- ☒ 4. शांति

Question ID : 9895806998
Chosen Option : --

Q.9 सही वर्तनी वाले शब्द का चयन करें।

Ans

- ☒ 1. नाशमझी
- ☒ 2. नासमजी
- ☒ 3. नासमझी
- ☒ 4. नसमझी

Question ID : 9895806915
Chosen Option : --

Q.1 दिए गए वाक्य में रेखांकित खंड को प्रतिस्थापित करने के लिए उपयुक्त विकल्प का चयन करें।

0

लक्ष्मण, राम को अपना भ्राता मानता है।

Ans

- ☒ 1. शत्रु
- ☒ 2. आदर्श
- ☒ 3. मित्र
- ☒ 4. भाई

Question ID : 9895806896
Chosen Option : --

Q.1 दिए गए वाक्य में रेखांकित खंड को प्रतिस्थापित करने के लिए उपयुक्त विकल्प का चयन करें।

1

तालिका में उनके प्रकार के फूलों का वर्णन किया गया है।

Ans

- ☒ 1. चित्र
- ☒ 2. पंक्ति
- ☒ 3. पत्र
- ☒ 4. सारणी

Question ID : 9895806894
Chosen Option : --

Q.1 निम्नलिखित में से उस विकल्प का चयन करें जो 'मक्खियाँ मारना' मुहावरे का अर्थ व्यक्त करता है।

2

Ans

- ☒ 1. मक्खियों को तंग करना

- ☒ 2. काम में लगे रहना
- ☒ 3. बेकार बैठना
- ☒ 4. मक्खियों को मारना

Question ID : 9895806911
Chosen Option : --

Q.1
3 दिये गये वाक्यांश के लिए एक शब्द दीजिये।

विज्ञान से संबंध रखने वाला

- Ans ☒ 1. ज्ञानी
- ☒ 2. अल्पज्ञानी
- ☒ 3. वैज्ञानिक
- ☒ 4. आविष्कार

Question ID : 9895806913
Chosen Option : --

Comprehension:

निम्नलिखित गद्यांश के रिक्त स्थानों की पूर्ति गद्यांश के नीचे दिए गए प्रश्नों के अनुसार कीजिए-

डिजिटल इंडिया एक ऐसा प्रोजेक्ट है जिसका _____ (1) भारत को एक बेहतर राष्ट्र बनाना है। ये _____ (2) देश के जाने माने उद्योगपतियों की मौजूदगी में 1 जुलाई 2015 को इंदिरा गाँधी इंडोर स्टेडियम में शुरू किया गया। 2019 तक इसके पूरा होने की _____ (3) है। डिजिटल इंडिया का विज़न तीन प्रमुख क्षेत्रों पर _____ (4) है। ये हैं- डिजिटल ढांचा, मांग पर संचालन एवं सेवाएं और _____ (5) का डिजिटल सशक्तीकरण।

SubQuestion No : 14

Q.1
4 गद्यांश में संकेतित रिक्त स्थान (1) के लिए उपयुक्त शब्द होगा।

- Ans ☒ 1. साधन
- ☒ 2. इच्छा
- ☒ 3. लक्ष्य
- ☒ 4. अभिलाषा

Question ID : 9895806902
Chosen Option : --

Comprehension:

निम्नलिखित गद्यांश के रिक्त स्थानों की पूर्ति गद्यांश के नीचे दिए गए प्रश्नों के अनुसार कीजिए-

डिजिटल इंडिया एक ऐसा प्रोजेक्ट है जिसका _____ (1) भारत को एक बेहतर राष्ट्र बनाना है। ये _____ (2) देश के जाने माने उद्योगपतियों की मौजूदगी में 1 जुलाई 2015 को इंदिरा गाँधी इंडोर स्टेडियम में शुरू किया गया। 2019 तक इसके पूरा होने की _____ (3) है। डिजिटल इंडिया का विज़न तीन प्रमुख क्षेत्रों पर _____ (4) है। ये हैं- डिजिटल ढांचा, मांग पर संचालन एवं सेवाएं और _____ (5) का डिजिटल सशक्तीकरण।

SubQuestion No : 15

Q.1
5 गद्यांश में संकेतित रिक्त स्थान (2) के लिए उपयुक्त शब्द होगा।

- Ans
- ☒ 1. महायान
 - ☒ 2. अभियान
 - ☒ 3. वायुयान
 - ☒ 4. हीनयान

Question ID : 9895806903

Chosen Option : --

Comprehension:

निम्नलिखित गद्यांश के रिक्त स्थानों की पूर्ति गद्यांश के नीचे दिए गए प्रश्नों के अनुसार कीजिए-

डिजिटल इंडिया एक ऐसा प्रोजेक्ट है जिसका _____ (1) भारत को एक बेहतर राष्ट्र बनाना है। ये _____ (2) देश के जाने माने उद्योगपतियों की मौजूदगी में 1 जुलाई 2015 को इंदिरा गाँधी इंडोर स्टेडियम में शुरू किया गया। 2019 तक इसके पूरा होने की _____ (3) है। डिजिटल इंडिया का विज़न तीन प्रमुख क्षेत्रों पर _____ (4) है। ये हैं- डिजिटल ढांचा, मांग पर संचालन एवं सेवाएं और _____ (5) का डिजिटल सशक्तीकरण।

SubQuestion No : 16

Q.1
6 गद्यांश में संकेतित रिक्त स्थान (3) के लिए उपयुक्त शब्द होगा।

- Ans
- ☒ 1. निर्देश
 - ☒ 2. उम्मीद
 - ☒ 3. निवेदन
 - ☒ 4. आदेश

Question ID : 9895806904

Chosen Option : --

Comprehension:

निम्नलिखित गद्यांश के रिक्त स्थानों की पूर्ति गद्यांश के नीचे दिए गए प्रश्नों के अनुसार कीजिए-

डिजिटल इंडिया एक ऐसा प्रोजेक्ट है जिसका _____ (1) भारत को एक बेहतर राष्ट्र बनाना है। ये _____ (2) देश के जाने माने उद्योगपतियों की मौजूदगी में 1 जुलाई 2015 को इंदिरा गाँधी इंडोर स्टेडियम में शुरू किया गया। 2019 तक इसके पूरा होने की _____ (3) है। डिजिटल इंडिया का विज़न तीन प्रमुख क्षेत्रों पर _____ (4) है। ये हैं- डिजिटल ढांचा, मांग पर संचालन एवं सेवाएं और _____ (5) का डिजिटल सशक्तीकरण।

SubQuestion No : 17

Q.1
7 गद्यांश में संकेतित रिक्त स्थान (4) के लिए उपयुक्त शब्द होगा।

- Ans
- ☒ 1. लिखित
 - ☒ 2. पठित
 - ☒ 3. सूचित
 - ☒ 4. केन्द्रित

Question ID : 9895806905

Chosen Option : --

Comprehension:

निम्नलिखित गद्यांश के रिक्त स्थानों की पूर्ति गद्यांश के नीचे दिए गए प्रश्नों के अनुसार कीजिए-

डिजिटल इंडिया एक ऐसा प्रोजेक्ट है जिसका _____ (1) भारत को एक बेहतर राष्ट्र बनाना है। ये _____ (2) देश के जाने माने उद्योगपतियों की मौजूदगी में 1 जुलाई 2015 को इंदिरा गाँधी इंडोर स्टेडियम में शुरू किया गया। 2019 तक इसके पूरा होने की _____ (3) है। डिजिटल इंडिया का विज़न तीन प्रमुख क्षेत्रों पर _____ (4) है। ये हैं- डिजिटल ढांचा, मांग पर संचालन एवं सेवाएं और _____ (5) का डिजिटल सशक्तीकरण।

SubQuestion No : 18

Q.1
8 गद्यांश में संकेतित रिक्त स्थान (5) के लिए उपयुक्त शब्द होगा।

- Ans
- ☒ 1. सामान्य वस्तु
 - ☒ 2. कलकारखानों
 - ☒ 3. नागरिकों
 - ☒ 4. लघु उद्योग

Question ID : 9895806906

Chosen Option : --

Q.1

9 निम्नलिखित में से उस विकल्प का चयन करें जो 'गंगा नहाना' मुहावरे का अर्थ व्यक्त करता है।

Ans

- ☒ 1. धार्मिक हो जाना
- ☒ 2. तीर्थ यात्रा करना
- ☒ 3. खूब मेहनत करना
- ☒ 4. कठिन कार्य पूरा होना

Question ID : 9895806912
Chosen Option : --

Q.2
0 रिक्त स्थान को भरने के लिए उपयुक्त शब्द का चयन करें।

राम आजकल घर _____ से आता है।

Ans

- ☒ 1. जोर
- ☒ 2. दौड़
- ☒ 3. तेज
- ☒ 4. देर

Question ID : 9895806900
Chosen Option : --

Q.2
1 रिक्त स्थान को भरने के लिए उपयुक्त शब्द का चयन करें।

अतिथि का फूलों की _____ से स्वागत किया गया।

Ans

- ☒ 1. माला
- ☒ 2. गड़ड़ी
- ☒ 3. टुकड़ी
- ☒ 4. गुच्छा

Question ID : 9895806897
Chosen Option : --

Q.2
2 दिए गए वाक्य का वह भाग ज्ञात करें जिसमें कोई त्रुटि है।

सूरजकुंड से प्रतिवर्ष बड़ा मेला लगता है।

Ans

- ☒ 1. लगता है।
- ☒ 2. सूरजकुंड से
- ☒ 3. बड़ा मेला
- ☒ 4. प्रतिवर्ष

Question ID : 9895806891
Chosen Option : --

Q.2
3

दिए गए शब्द का विलोम चुनें।

साध्य

Ans

- ☒ 1. असाध्य
☐ 2. रोगी
☐ 3. संध्या
☐ 4. वैद्य

Question ID : 9895806908

Chosen Option : --

Q.2
4 रिक्त स्थान को भरने के लिए उपयुक्त शब्द का चयन करें।

वह खाना _____ चुका है।

Ans

- ☐ 1. कर
☒ 2. ठूँस
☐ 3. खा
☐ 4. चुग

Question ID : 9895806899

Chosen Option : --

Q.2
5 दिए गए शब्द के पर्यायवाची शब्द का चयन करें।

पार्वती

Ans

- ☐ 1. प्रभा
☒ 2. आभा
☐ 3. विभा
☐ 4. गौरी

Question ID : 9895806910

Chosen Option : --

Constable (GD) in CAPFs, NIA, SSF and Rifleman (GD) in Assam Rifles Examination, 2018

| | |
|------------------|-------------------|
| Roll No. : | |
| Registration No. | |
| Name : | |
| Exam Venue : | |
| Exam Time : | 4:00 PM - 5:30 PM |
| Exam Date : | 05/03/2019 |

Section : General Section

Q.1 Raman earns more than Fakir but not as much as Zaheer. Kisan earns less than Zaheer but not as less as Raman. Lokesh earns more than Fakir but not as much as Raman. Who amongst them will be in the middle if they are ranked based on their earnings?

- Ans
- ☒ 1. Kisan
 - ☒ 2. Fakir
 - ☒ 3. Lokesh
 - ☒ 4. Raman

Question ID : 9895808424
Chosen Option : 4

Q.2 Select the correct option that will fill in the blank and complete the series.

41, 46, 56, 73, 99, 136, _____

- Ans
- ☒ 1. 186
 - ☒ 2. 176
 - ☒ 3. 177
 - ☒ 4. 166

Question ID : 9895808428
Chosen Option : 1

Q.3 Four boys A, B, C, D and four girls P, Q, R, S are playing merry go round in such a way that they face the centre and form a circle. No two girls or no two boys are next to each other. A is to the immediate left of R, who is opposite to Q. P and Q have only C between them. P is opposite to S, who is to the immediate right of B.

Which of the following is an acceptable arrangement of the players in clockwise direction?

- Ans
- ☒ 1. Q, C, P, D, R, A, S, B
 - ☒ 2. A, R, D, P, C, Q, B, S
 - ☒ 3. D, R, A, S, B, Q, P, C
 - ☒ 4. C, Q, P, D, S, B, A, R





Question ID : 9895808423
Chosen Option : 2

Q.4 Choose the option that most closely resembles the mirror image of the given figure when mirror is placed at right side.

Question figure:







Ans

-  1. .D.T.
-  2. T..D
-  3. .D.T.
-  4. .T.D

Question ID : 9895808436

Chosen Option : 4

Q.5 In a certain code, BIRLA is coded as DLVQG, then how is TECH coded in the same way?

- Ans  1. VGHM
-  2. VHGM
-  3. HVMG
-  4. VHMGM

Question ID : 9895808420

Chosen Option : 2

Q.6 Four letter clusters have been given out of which three are alike in some manner, while one is different. Choose the odd one.

- Ans  1. IoKmLp
-  2. vQuRtS
-  3. tOsPrQ
-  4. hCgDfE

Question ID : 9895808415

Chosen Option : 1

Q.7 Select the option that is related to the third term in the same way as the second term is related to the first term.

4 : 8 :: 6 : ?

- Ans  1. 22
-  2. 18
-  3. 24
-  4. 16

Question ID : 9895808429

Chosen Option : 4

Q.8 The statements below are followed by three conclusions labeled I, II and III. Assuming that the information in the statements is true, even if it appears to be at variance with generally established facts, decide which conclusion(s) logically and definitely follow(s) from the information given in the statements.

Statements:

No train is star.

Some stars are men.

Conclusions:

I. Some men are trains.

II. No man is train.

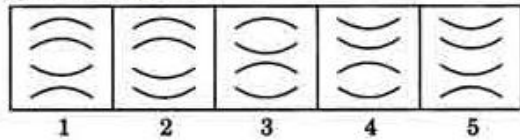
III. All men are stars.

- Ans
- ☒ 1. Only I follows
 - ☒ 2. Either II or III follows
 - ☒ 3. Only III follows
 - ☒ 4. Either I or II follows

Question ID : 9895808425
Chosen Option : 2

Q.9 Choose the option which completes the given figure series

Question Figures:



- Ans
- ☒ 1.
 - ☒ 2.
 - ☒ 3.
 - ☒ 4.

Question ID : 9895808433
Chosen Option : 1

Q.10 Select the related word pair from the given alternatives.

slither : snake :: _____ : _____

- Ans
- ☒ 1. Sloths : Swim
 - ☒ 2. Crawl : Rabbit
 - ☒ 3. Fly : Bird
 - ☒ 4. Diving : Fishes

Question ID : 9895808418
Chosen Option : 3

Q.11 Select the correct option that will fill in the blank and complete the series.

EEVV, AHZS, WKDP, _____

- Ans
- ☒ 1. SNHM
 - ☒ 2. SNIM
 - ☒ 3. RUIE

☒ 4. SMHN

Question ID : 9895808414
Chosen Option : 1

Q.1 The statements below are followed by two conclusions labeled I and II. Assuming that the information in the statements is true, even if it appears to be at variance with generally established facts, decide which conclusion(s) logically and definitely follow(s) from the information given in the statements.

Statements:

Some clocks are tiles

Some tiles are walls.

Conclusions:

I. Some walls are tiles.

II. Some clocks are walls.

- Ans**
- ☒ 1. Only conclusion II follows
- ☒ 2. Either I or II follows
- ☒ 3. Only conclusion I follows
- ☒ 4. Neither I nor II follows

Question ID : 9895808426
Chosen Option : 1

Q.1 Choose the option figure in which the problem figure is hidden/embedded.

Question Figures:

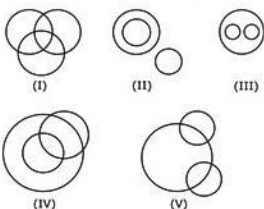


- Ans**
- ☒ 1.
- ☒ 2.
- ☒ 3.
- ☒ 4.

Question ID : 9895808435
Chosen Option : 4

Q.1 Select the Venn diagram that best illustrates the relationship between the three given classes.

Bricks, House, Bridge



Ans

- ☒ 1. (I)
☒ 2. (V)
☒ 3. (III)
☒ 4. (II) & (IV) both

Question ID : 9895808438
 Chosen Option : 1

Q.1 Select the correct combination of mathematical signs to replace '*' signs and to balance the given equation:
 5

$$240 * 40 * 8 * 60 * 185$$

Ans

- ☒ 1. $\div \times + =$
☒ 2. $+ \div - =$
☒ 3. $+ + \times =$
☒ 4. $- + \div =$

Question ID : 9895808432
 Chosen Option : 2

Q.1 Select the correct option that will fill in the blank and complete the series.
 6

21, 57, 32, 48, 39, _____

Ans

- ☒ 1. 55
☒ 2. 43
☒ 3. 45
☒ 4. 54

Question ID : 9895808427
 Chosen Option : 4

Q.1 Select the option that is related to the third term in the same way as the second term is related to the first term.
 7

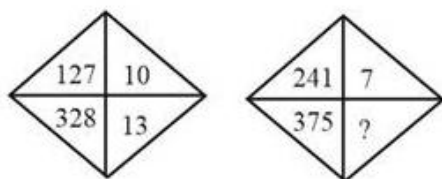
BVWKS : 72 :: PKOM : ?

Ans

- ☒ 1. 16
☒ 2. 46
☒ 3. 23
☒ 4. 51

Question ID : 9895808419
 Chosen Option : 2

Q.1 Find the missing number from the below options.
 8



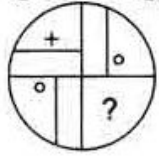
Ans

- ☒ 1. 16
☒ 2. 15
☒ 3. 11
☒ 4. 14

Question ID : 9895808431
Chosen Option : 3

Q.1
9 Which of the following answer figure will complete the given figure?

Question Figures:



Ans

- ✓ 1.
- ✗ 2.
- ✗ 3.
- ✗ 4.

Question ID : 9895808434
Chosen Option : 1

Q.2
0 Select the related word pair from the given alternatives.

Protector : Angle :: _____ : _____

Ans

- ✓ 1. Scale : Length
- ✗ 2. radius : square
- ✗ 3. Compass : temperature
- ✗ 4. Map : Weather

Question ID : 9895808417
Chosen Option : 1

Q.2
1 A, M, P, D, Q, R, W and B are sitting around a circle facing at the centre. D is fourth to the left of A who is third to the right of M. P is third to the left of Q who is third to the left of M. R is third to the right of W who is second to the right of B.

Who is second to the left of D?

Ans

- ✗ 1. W
- ✗ 2. B
- ✗ 3. Data inadequate
- ✓ 4. Q

Question ID : 9895808422
Chosen Option : 2

Q.2
2

A square transparent sheet with a pattern is given. Find out amongst the four alternatives as to how the pattern will appear when the transparent sheet is folded at the dotted line.

Question Figures:



Ans

✗ 1.



✗ 2.



✓ 3.



✗ 4.



Question ID : 9895808437
Chosen Option : 3

Q.2 In a certain code, CORRUPT is coded as 7033146, And CHAMP as 75284, then how is PRMUTR coded in the same way?

3

Ans

✓ 1. 438163

✗ 2. 438363

✗ 3. 438631

✗ 4. 438136

Question ID : 9895808421
Chosen Option : 1

Q.2 Four words have been given out of which three are alike in some manner, while one is different. Choose the odd one.

4

Ans

✗ 1. Subtraction

✗ 2. Addition

✓ 3. Profit

✗ 4. Multiplication

Question ID : 9895808416
Chosen Option : 3

Q.2 Four options have been given out of which three are alike in some manner, while one is different. Choose the odd one.

5

Ans

✓ 1. 57

✗ 2. 47

✗ 3. 79

✗ 4. 59

Question ID : 9895808430
Chosen Option : 3

Q.2 Dwarf planet _____ is the largest object in the asteroid belt.

6

Ans

✓ 1. Ceres

- ☒ 2. Europa
- ☒ 3. Triton
- ☒ 4. Titan

Question ID : 9895807499
Chosen Option : 4

Q.2 Finance Minister Arun Jaitley announced in the 2018 Budget that the Public Sector Banks are to raise _____ by issuing
7 bonds, which are part of the ₹ 2.11 lakh crore package.

- Ans ☒ 1. ₹ 60,000 crore
- ☒ 2. ₹ 20,000 crore
- ☒ 3. ₹ 80,000 crore
- ☒ 4. ₹ 40,000 crore

Question ID : 9895807487
Chosen Option : 1

Q.2 Which element is placed in the 6th Period and IIA Group of the periodic table?
8

- Ans ☒ 1. Barium (At no 56)
- ☒ 2. Lead (At no 82)
- ☒ 3. Strontium (At no 38)
- ☒ 4. Tellurium (At no 52)

Question ID : 9895807494
Chosen Option : 2

Q.2 The prefix '_____' is equal to a factor of 10^{-15} .
9

- Ans ☒ 1. atto
- ☒ 2. femto
- ☒ 3. peta
- ☒ 4. exa

Question ID : 9895807493
Chosen Option : 3

Q.3 Rhombic sulphur is crystalline in nature and is _____ in shape.
0

- Ans ☒ 1. tetrahedron
- ☒ 2. dodecahedron
- ☒ 3. square pyramid
- ☒ 4. octahedron

Question ID : 9895807495
Chosen Option : 2

Q.3 The Constitution (Eighty-sixth Amendment) Act, 2002 inserted Article 21-A in the Constitution of India _____.
1

- Ans ☒ 1. To reduce the voting age from 21 years to 18 years.
- ☒ 2.
To provide Free and compulsory education to children between 6 and 14 years.

- ☒ 3. For the introduction of Panchayati Raj
- ☒ 4. For the introduction of Nagarpalikas and Municipalities.

Question ID : 9895807490
Chosen Option : 1

Q.3 Name the Adilshahi general who was killed by Shivaji and his soldiers after their meeting at the foot of the Pratapgad fort?

- Ans ☒ 1. Afzal Khan
- ☒ 2. Dilir Khan
- ☒ 3. Adham Khan
- ☒ 4. Kartalab Khan

Question ID : 9895807502
Chosen Option : 4

Q.3 India was defeated by the cricket team from which country in the final of the 2018 Women's Twenty 20 Asia Cup?

- Ans ☒ 1. England
- ☒ 2. Australia
- ☒ 3. Bangladesh
- ☒ 4. Pakistan

Question ID : 9895807482
Chosen Option : 1

Q.3 Who wrote the book "Small is Beautiful"?

- Ans ☒ 1. Margaret Atwood
- ☒ 2. Stephen King
- ☒ 3. J.R.R Tolkien
- ☒ 4. E. F. Schumacher

Question ID : 9895807485
Chosen Option : 3

Q.3 Minimum Support Price for 2018-19 season (to be marketed in 2019-20) for _____ is set at ₹ 1,840 per quintal.

- Ans ☒ 1. Gram
- ☒ 2. Masur (Lentil)
- ☒ 3. Barley
- ☒ 4. Wheat

Question ID : 9895807488
Chosen Option : 3

Q.3 Which of the following is NOT a bridge across the Brahmaputra?

- Ans ☒ 1. Kolia Bhomura Setu
- ☒ 2. Naranarayan Setu
- ☒ 3. Bogibeel

✓ 4. Mahatma Gandhi Setu

Question ID : 9895807497
Chosen Option : 3

Q.3 The _____ muscle runs from the lower leg bones (the tibia and fibula) to the heel (the calcaneus).
7

- Ans
- ✗ 1. Masseter
 - ✗ 2. Pectoralis major
 - ✓ 3. Soleus
 - ✗ 4. Achilles tendon

Question ID : 9895807496
Chosen Option : 2

Q.3 Gangaur is an important festival of which state?
8

- Ans
- ✗ 1. Sikkim
 - ✗ 2. Madhya Pradesh
 - ✗ 3. Punjab
 - ✓ 4. Rajasthan

Question ID : 9895807480
Chosen Option : 3

Q.3 Name the Dadasaheb Phalke Award recipient who was better known by her stage name Sulochana.
9

- Ans
- ✗ 1. Anne Bancroft
 - ✓ 2. Ruby Myers
 - ✗ 3. Bette Davis
 - ✗ 4. Anna Magnani

Question ID : 9895807483
Chosen Option : 4

Q.4 After the reduction of GST on some items effective from 1 January 2019, which item is still in the 28% slab?
0

- Ans
- ✗ 1. digital cameras
 - ✗ 2. video game consoles
 - ✗ 3. TVs smaller than 32 inches
 - ✓ 4. Cement

Question ID : 9895807486
Chosen Option : 2

Q.4 The relation between the Energy 'E' stored in a capacitor of capacitance 'C' and 'V' the potential difference across the capacitor is _____.
1

- Ans
- ✗ 1. $E/2=VC^2$
 - ✓ 2. $2E=CV^2$
 - ✗ 3. $E/2=CV^2$
 - ✗ 4. $2E=VC^2$

Question ID : 9895807492
Chosen Option : 1

Q.4 Name the harvesting festival in Mizoram that is held in between August and September, after the harvest of maize.

2

- Ans
- ☐ 1. Sume-Gelirak
 - ☐ 2. Bija Pandu
 - ☐ 3. Sekrenyi
 - ☒ 4. Mim Kut

Question ID : 9895807479
Chosen Option : 4

Q.4 Name the only river in the Thar desert.

3

- Ans
- ☐ 1. Gomai
 - ☒ 2. Luni
 - ☐ 3. Nira
 - ☐ 4. Varada

Question ID : 9895807498
Chosen Option : 1

Q.4 Monr is another name for which Indian language?

4

- Ans
- ☐ 1. Kui
 - ☐ 2. Korku
 - ☒ 3. Angami
 - ☐ 4. Halabi

Question ID : 9895807478
Chosen Option : 3

Q.4 Bhagat Singh was hanged for which revolutionary act?

5

- Ans
- ☒ 1. For throwing a bomb in the Delhi Central Assembly house
 - ☐ 2. For raiding the Chittagong Armoury
 - ☐ 3. For the shooting of British officer Jackson
 - ☐ 4. For the Kakori Train robbery

Question ID : 9895807501
Chosen Option : 1

Q.4 Who is the author of the, 'Sacred Games'?

6

- Ans
- ☐ 1. Nirad C Chaudhuri
 - ☐ 2. Arvind Adiga
 - ☐ 3. Amish Tripathi
 - ☒ 4. Vikram Chandra

Question ID : 9895807484
Chosen Option : 4

Q.4 The _____ introduced for the first time Indian representation in the institutions like Viceroy's executive and the legislative council.

- Ans
- ☒ 1. Government of India Act of 1858
 - ☒ 2. Pitt's India Act
 - ☒ 3. Indian Councils Act of 1861
 - ☒ 4. Regulating Act 1773

Question ID : 9895807491
Chosen Option : 2

Q.4 Which Indian won the Gold in Men's shot put at the 2018 Asian Games?

- Ans
- ☒ 1. Tajinderpal Singh Toor
 - ☒ 2. Sharath Kamal Achanta
 - ☒ 3. Jitu Rai
 - ☒ 4. Ragala Venkat Rahul

Question ID : 9895807481
Chosen Option : 1

Q.4 The emergency provision under article 356 of India's Constitution is influenced by the Weimar Constitution of _____.

- Ans
- ☒ 1. France
 - ☒ 2. United States
 - ☒ 3. Germany
 - ☒ 4. United Kingdom

Question ID : 9895807489
Chosen Option : 4

Q.5 Chandragupta's son _____ extended the Mauryan empire over the entire sub-continent of India.

- Ans
- ☒ 1. Dantidurga
 - ☒ 2. Skandagupta
 - ☒ 3. Harihara I
 - ☒ 4. Bindusara

Question ID : 9895807500
Chosen Option : 3

Q.5
1

DIRECTIONS: Study the following table carefully to answer these question.

| Populations (in thousands) of Five States over the years | | | | | |
|--|-------|-----|-----|-----|-----|
| Years | STATE | | | | |
| | A | B | C | D | E |
| 2003 | 125 | 210 | 85 | 150 | 98 |
| 2006 | 135 | 225 | 89 | 170 | 110 |
| 2009 | 142 | 240 | 93 | 180 | 130 |
| 2012 | 148 | 250 | 99 | 215 | 140 |
| 2015 | 155 | 270 | 105 | 230 | 145 |
| 2018 | 160 | 290 | 110 | 240 | 160 |

Which state had the highest per cent rise in population from 2006 to 2009?

- Ans  1. E
 2. C
 3. D
 4. A




Question ID : 9895807826
Chosen Option : 1

Q.5
2 The value of $[1 \div \{1 + 1 \div (1 + 1 \div 2)\}] = ?$

- Ans  1. 2
 2. $\frac{1}{2}$
 3. 1
 4. $\frac{3}{5}$

Question ID : 9895807804
Chosen Option : 1

Q.5
3 A train 175 m long travels at a speed of 36 kmph. The time it would take to cross a platform 125 m long is:

- Ans  1. 30 seconds
 2. 15 seconds
 3. 25 seconds
 4. 10 seconds

Question ID : 9895807820
Chosen Option : 2

Q.5
4 A sum of money doubles itself in 12 years, if invested at simple interest.

What is the rate of interest allowed on the investment?

Ans

☒ 1. $11\frac{1}{8}\%$

☒ 2. $7\frac{1}{2}\%$

☒ 3. $8\frac{1}{3}\%$

☒ 4. $9\frac{1}{9}\%$

Question ID : 9895807816

Chosen Option : 1

Q.5 What the largest number which divides 34, 58 and 94 leaving the same remainder in each case?
5

Ans ☒ 1. 6

☒ 2. 9

☒ 3. 12

☒ 4. 8

Question ID : 9895807803

Chosen Option : 3

Q.5 The capacity of a cylindrical tank is 246.4 litres. If the height is 4 metres, what is the diameter of the base? (Use $\pi \frac{22}{7}$)
6

Ans ☒ 1. 0.14 metres

☒ 2. 2.8 metres

☒ 3. 0.28 metres

☒ 4. 1.4 metres

Question ID : 9895807824

Chosen Option : 1

Q.5 In a village, 30% of the population is minors, 60% of the minors population are educated, 40% of the majors population are uneducated. The total educated population is 6000. What is the population of the town?
7

Ans ☒ 1. 8000

☒ 2. 10000

☒ 3. 12000

☒ 4. 9000

Question ID : 9895807810

Chosen Option : 3

Q.5 The ratio of the present age of a man and his wife is 4 : 3. After 4 years, this ratio will be 9 : 7. If at the time of the marriage, the ratio was 5 : 3, then how many years ago they were married?
8

Ans ☒ 1. 10 years

☒ 2. 8 years

☒ 3. 12 years

☒ 4. 15 years

Question ID : 9895807814

Chosen Option : 1

Q.5
9

DIRECTIONS: Study the following table carefully to answer these question.

| Populations (in thousands) of Five States over the years | | | | | |
|--|-------|-----|-----|-----|-----|
| Years | STATE | | | | |
| | A | B | C | D | E |
| 2003 | 125 | 210 | 85 | 150 | 98 |
| 2006 | 135 | 225 | 89 | 170 | 110 |
| 2009 | 142 | 240 | 93 | 180 | 130 |
| 2012 | 148 | 250 | 99 | 215 | 140 |
| 2015 | 155 | 270 | 105 | 230 | 145 |
| 2018 | 160 | 290 | 110 | 240 | 160 |

What was the average population of all the states together in 2009?

- Ans
- ☒ 1. 1,57,200
 - ☒ 2. 1,75,000
 - ☒ 3. 1,57,000
 - ☒ 4. 1,72,500

Question ID : 9895807825
Chosen Option : 3

Q.6 The probability that a leap year selected at random contains 53 Sundays is:

- Ans
- ☒ 1. $\frac{2}{7}$
 - ☒ 2. $\frac{1}{53}$
 - ☒ 3. $\frac{3}{7}$
 - ☒ 4. $\frac{1}{7}$

Question ID : 9895807809
Chosen Option : 3

Q.6 By selling an item at $\frac{3}{5}$ of the actual selling price, a trader makes a profit of 20%. If he sells the product at the actual selling price, then what will be the profit percentage?

- Ans
- ☒ 1. 75%
 - ☒ 2. 100%
 - ☒ 3. 80%
 - ☒ 4. 50%

Question ID : 9895807812
Chosen Option : 1

Q.6
2 A person distributes his pens among four friends A, B, C and D in the ratio of $\frac{1}{3} : \frac{1}{4} : \frac{1}{5} : \frac{1}{6}$. What is the minimum number of pens that the person should have?

- Ans
- ☒ 1. 66
 - ☒ 2. 61
 - ☒ 3. 70
 - ☒ 4. 57

Question ID : 9895807815
Chosen Option : 1

Q.6
3 The diagonal of a square A is $(a + b)$. The diagonal of a square whose area is twice the area of square A is

- Ans
- ☒ 1. $2(a + b)$
 - ☒ 2. $\sqrt{2}(a - b)$
 - ☒ 3. $\sqrt{2}(a + b)$
 - ☒ 4. $2(a + b)^2$

Question ID : 9895807822
Chosen Option : 4

Q.6
4 **DIRECTIONS:** Study the following table carefully to answer these question.

| Populations (in thousands) of Five States over the years | | | | | |
|--|-------|-----|-----|-----|-----|
| Years | STATE | | | | |
| | A | B | C | D | E |
| 2003 | 125 | 210 | 85 | 150 | 98 |
| 2006 | 135 | 225 | 89 | 170 | 110 |
| 2009 | 142 | 240 | 93 | 180 | 130 |
| 2012 | 148 | 250 | 99 | 215 | 140 |
| 2015 | 155 | 270 | 105 | 230 | 145 |
| 2018 | 160 | 290 | 110 | 240 | 160 |

What is approximate percent rise in population of state C in 2018 from 2003?

- Ans
- ☒ 1. 28
 - ☒ 2. 29
 - ☒ 3. 32
 - ☒ 4. 24

Question ID : 9895807827
Chosen Option : 4

Q.6
5 A and B can finish a job in 15 days, while A, B and C can finish it in 10 days. C alone will finish the job in how many days?

- Ans
- ☒ 1. 14 days

☒ 2. 16 days☒ 3. 20 days☒ 4. 30 days

Question ID : 9895807818

Chosen Option : 1

Q.6 What should come in place of the question mark (?) in the following question?

6

$$7 \times 8 + 8 \div 2 - 32 \times \left(\frac{1}{8}\right) - 6 \times 8 = ?$$

Ans ☒ 1. 8☒ 2. 10☒ 3. 9☒ 4. 7

Question ID : 9895807805

Chosen Option : 1

Q.6 The average age of a class of 20 students is 20 years. If a new student, whose age is 20 years, joins the class, then the new average age of the class (in years) will be:

7

Ans ☒ 1. 23☒ 2. 22☒ 3. 21☒ 4. 20

Question ID : 9895807806

Chosen Option : 3

Q.6 Fifteen persons can complete a piece of work in 8 days. How many more persons are needed to complete twice the work in 12 days?

8

Ans ☒ 1. 3☒ 2. 5☒ 3. 4☒ 4. 2

Question ID : 9895807819

Chosen Option : 3

Q.6 The ratio of the present ages of A and B is 11 : 4. 15 years ago, the ratio of their ages was 8 : 1. Five years ago the ratio of the ages of B and C was 3 : 2. What is C's present age?

9

Ans ☒ 1. 25 years☒ 2. 15 years☒ 3. 10 years☒ 4. 22 years

Question ID : 9895807813

Chosen Option : 2

Q.7 T1 and T2 are 400 km apart. At 8:00 a.m., buses A and B left T1 and T2 simultaneously for T2 and T1 respectively. If the speeds of A and B are 30 kmph and 70 kmph respectively, at what time will they meet?

0

Ans ☒ 1. 11:30 a.m.

- ☒ 2. 10 : 30 a.m.
- ☒ 3. 12 noon
- ☒ 4. 11:00 a.m.

Question ID : 9895807821
Chosen Option : 2

Q.7
1 In what time will ₹ 1000 amount to ₹ 1331 at 20% per annum, compounded half yearly?

- Ans ☒ 1. 1 year
- ☒ 2. $2\frac{1}{2}$ years
- ☒ 3. 2 years
- ☒ 4. $1\frac{1}{2}$ years

Question ID : 9895807817
Chosen Option : 2

Q.7
2 The circumference of a given circle is 176 cm. What is the approximate diagonal of a square whose side is half of the radius of a given circle?

- Ans ☒ 1. 15 cm
- ☒ 2. 24 cm
- ☒ 3. 12 cm
- ☒ 4. 20 cm

Question ID : 9895807823
Chosen Option : 4

Q.7
3 Kovind marked an article 30% above its cost price and allowed a discount of 10%. Find his profit percentage?

- Ans ☒ 1. 15%
- ☒ 2. 20%
- ☒ 3. 17%
- ☒ 4. 12%

Question ID : 9895807808
Chosen Option : 4

Q.7
4 The average weights of the boys and the girls in a class are 70 kg and 60 kg respectively. Then the average weight of all the students in the class (in kg) is:

- Ans ☒ 1. Cannot be determined
- ☒ 2. 65
- ☒ 3. 67
- ☒ 4. 66

Question ID : 9895807807
Chosen Option : 2

Q.7
5 If an equipment sold at 22% profit instead of 9% profit, then the profit would be ₹ 91 more. What is the cost price of equipment?

- Ans ☒ 1. ₹ 700

☒ 2. ₹ 720

☒ 3. ₹ 500

☒ 4. ₹ 600

Question ID : 9895807811
Chosen Option : 1

Section : English Language

Q.1 Select the word which means the same as the group of words given.

The assembled spectators or listeners at a public event

Ans ☒ 1. Admirers

☒ 2. Audience

☒ 3. Witnesses

☒ 4. Gallery

Question ID : 9895808460
Chosen Option : 2

Q.2 Identify the segment in the sentence which contains the grammatical error from the given options.

One of the most important task in agriculture is to turn the soil and loosen it.

Ans ☒ 1. turn the soil

☒ 2. important task

☒ 3. loosen it

☒ 4. One of the

Question ID : 9895808439
Chosen Option : 3

Q.3 Select the most appropriate word to fill in the blank.

Though Sam _____ French for seven years, he did not know many words of French.

Ans ☒ 1. had studied

☒ 2. was study

☒ 3. have been studying

☒ 4. has studied

Question ID : 9895808446
Chosen Option : 3

Comprehension:

In the following passage some words have been deleted. Fill in the blanks with the help of the alternatives given. Select the most appropriate option for each number.

India is one of the (1) _____ civilizations in the world. It (2) _____ achieved multi-faceted socioeconomic progress (3) _____ the last five decades. It has moved (4) _____ displaying remarkable (5) _____ in the field of agriculture.

SubQuestion No : 4

Q.4 Select the most appropriate option that will fill in the blank number 1.

- Ans
- ☒ 1. older
 - ☒ 2. aged
 - ☒ 3. ancient
 - ☒ 4. elder

Question ID : 9895808448
Chosen Option : 3

Comprehension:

In the following passage some words have been deleted. Fill in the blanks with the help of the alternatives given. Select the most appropriate option for each number.

India is one of the (1) _____ civilizations in the world. It (2) _____ achieved multi-faceted socioeconomic progress (3) _____ the last five decades. It has moved (4) _____ displaying remarkable (5) _____ in the field of agriculture.

SubQuestion No : 5

Q.5 Select the most appropriate option that will fill in the blank number 2.

- Ans
- ☒ 1. have
 - ☒ 2. were been
 - ☒ 3. was being
 - ☒ 4. has

Question ID : 9895808449
Chosen Option : 4

Comprehension:

In the following passage some words have been deleted. Fill in the blanks with the help of the alternatives given. Select the most appropriate option for each number.

India is one of the (1) _____ civilizations in the world. It (2) _____ achieved multi-faceted socioeconomic progress (3) _____ the last five decades. It has moved (4) _____ displaying remarkable (5) _____ in the field of agriculture.

SubQuestion No : 6

Q.6 Select the most appropriate option that will fill in the blank number 3.

- Ans
- ☒ 1. above
 - ☒ 2. during
 - ☒ 3. across
 - ☒ 4. between

Question ID : 9895808450
Chosen Option : 2

Comprehension:

In the following passage some words have been deleted. Fill in the blanks with the help of the alternatives given. Select the most appropriate option for each number.

India is one of the (1) _____ civilizations in the world. It (2) _____ achieved multi-faceted socioeconomic progress (3) _____ the last five decades. It has moved (4) _____ displaying remarkable (5) _____ in the field of agriculture.

SubQuestion No : 7

Q.7 Select the most appropriate option that will fill in the blank number 4.

- Ans
- ☒ 1. front
 - ☒ 2. away
 - ☒ 3. in
 - ☒ 4. forward

Question ID : 9895808451
Chosen Option : 4

Comprehension:

In the following passage some words have been deleted. Fill in the blanks with the help of the alternatives given. Select the most appropriate option for each number.

India is one of the (1) _____ civilizations in the world. It (2) _____ achieved multi-faceted socioeconomic progress (3) _____ the last five decades. It has moved (4) _____ displaying remarkable (5) _____ in the field of agriculture.

SubQuestion No : 8

Q.8 Select the most appropriate option that will fill in the blank number 5.

- Ans
- ☒ 1. march
 - ☒ 2. motion
 - ☒ 3. course
 - ☒ 4. progress

Question ID : 9895808452
Chosen Option : 4

Q.9 Select the most appropriate option to substitute the underlined segment in the given sentence. If there is no need to substitute it, select No substitution required.

The Government of India launched the Swachh Bharat Mission on 2 October 2014 to promote cleanliness.

- Ans
- ☒ 1. Government to India launch
 - ☒ 2. No substitution required
 - ☒ 3. Government of India launching
 - ☒ 4. Government for India launched

Question ID : 9895808444
Chosen Option : 2

Q.1
0 Select the synonym of the given word.

Aloof

- Ans ☒ 1. Withdrawn
☒ 2. Jovial
☒ 3. Informal
☒ 4. Social

Question ID : 9895808454
Chosen Option : 3

Q.1
1 Select the antonym of the given word.

Encourage

- Ans ☒ 1. Conquer
☒ 2. Advance
☒ 3. Frustrate
☒ 4. Establish

Question ID : 9895808455
Chosen Option : 3

Q.1
2 Identify the segment in the sentence which contains the grammatical error from the given options.

Metals like iron get rusted when left exposing to moisture and air.

- Ans ☒ 1. Metals like iron
☒ 2. exposing to
☒ 3. get rusted
☒ 4. when left

Question ID : 9895808441
Chosen Option : 1

Q.1
3 Select the most appropriate option to substitute the underlined segment in the given sentence. If there is no need to substitute it, select No substitution required.

India's diversity have always been recognize as a source of its strength.

- Ans ☒ 1. have always being recognize
☒ 2. No substitution required
☒ 3. has always been recognized
☒ 4. have always been recognize

Question ID : 9895808443
Chosen Option : 3

Q.1
4 Select the synonym of the given word.

Interfere

- Ans ☒ 1. Meddle
☒ 2. Activate

☒ 3. Hasten

☒ 4. Delay

Question ID : 9895808453

Chosen Option : 1

Q.1
5 Select the wrongly spelt word.

Ans ☒ 1. Befriend

☒ 2. Attention

☒ 3. Exhibetion

☒ 4. Contribute

Question ID : 9895808462

Chosen Option : 3

Q.1
6 Select the meaning of the given idiom.

Skate on thin ice

Ans ☒ 1. to be adventurous

☒ 2. to have a specific skill

☒ 3. to be careless

☒ 4. to be in a risky situation

Question ID : 9895808458

Chosen Option : 1

Q.1
7 Identify the segment in the sentence which contains the grammatical error from the given options.

We are all aware that our environment is not what it use to be.

Ans ☒ 1. aware that

☒ 2. is not

☒ 3. use to

☒ 4. We are

Question ID : 9895808440

Chosen Option : 3

Q.1
8 Select the wrongly spelt word.

Ans ☒ 1. Ascend

☒ 2. Bouquet

☒ 3. Defination

☒ 4. Compact

Question ID : 9895808461

Chosen Option : 3

Q.1
9 Select the meaning of the given idiom.

Butterflies in the stomach

- Ans
- ☒ 1. An impractical idea
 - ☒ 2. Sense of danger
 - ☒ 3. A feeling of nervousness
 - ☒ 4. To be ill

Question ID : 9895808457
Chosen Option : 2

Q.2
0 Select the word which means the same as the group of words given.

An account of someone's life written by someone else

- Ans
- ☒ 1. Autobiography
 - ☒ 2. Calligraphy
 - ☒ 3. Narration
 - ☒ 4. Biography

Question ID : 9895808459
Chosen Option : 4

Q.2
1 Select the most appropriate word to fill in the blank.

We have had our time of peace and _____, a time I will treasure as long as I live.

- Ans
- ☒ 1. unrest
 - ☒ 2. anxiety
 - ☒ 3. prosperity
 - ☒ 4. confusion

Question ID : 9895808463
Chosen Option : 3

Q.2
2 Select the most appropriate word to fill in the blank.

An old villager looked _____ him when his mother was away.

- Ans
- ☒ 1. to
 - ☒ 2. on
 - ☒ 3. after
 - ☒ 4. in

Question ID : 9895808445
Chosen Option : 3

Q.2
3 Select the most appropriate word to fill in the blank.

Some experts believe that animals' _____ sense of hearing helps them to hear or feel the earth's vibration.

- Ans
- ☒ 1. insensitive
 - ☒ 2. blunt
 - ☒ 3. demanding
 - ☒ 4. acute

Question ID : 9895808464

Chosen Option : 1

Q.2 Select the antonym of the given word.

Preserve

- Ans
- ☒ 1. Safeguard
 - ☒ 2. Destroy
 - ☒ 3. Descend
 - ☒ 4. Treasure

Question ID : 9895808456

Chosen Option : 2

Q.2 Select the most appropriate option to substitute the underlined segment in the given sentence. If there is no need to substitute it, select No substitution required.

People feel happy when it read a good and fascinating story.

- Ans
- ☒ 1. when they read
 - ☒ 2. No substitution required
 - ☒ 3. when they reading
 - ☒ 4. as it reads

Question ID : 9895808442

Chosen Option : 1

Section : Hindi Language

Q.1 रिक्त स्थान को भरने के लिए उपयुक्त शब्द का चयन करें।

जो कुछ लिखा जाये वह साफ और _____ हो ।

- Ans
- ☒ 1. स्पष्ट
 - ☒ 2. कठिन
 - ☒ 3. धुँधला
 - ☒ 4. मलिन

Question ID : 9895806926

Chosen Option : --

Q.2 रिक्त स्थान को भरने के लिए उपयुक्त शब्द का चयन करें।

मैंने _____ सारा कूड़ा साफ किया है।

- Ans
- ☒ 1. अपनी
 - ☒ 2. स्वयं
 - ☒ 3. अपने
 - ☒ 4. हमारा

Question ID : 9895806924

Chosen Option : --

Q.3 दिए गए शब्द के पर्यायवाची शब्द का चयन करें।

आकुल

- Ans
- ☒ 1. हताश
 - ☒ 2. गोकुल
 - ☒ 3. बेचैन
 - ☒ 4. चैन

Question ID : 9895806935
Chosen Option : --

Q.4 दिए गए वाक्य का वह भाग ज्ञात करें जिसमें कोई त्रुटि है।

व्यंग्य का चोट तो सुनार की तरह धीमी है लेकिन मार लुहार की चोट से भी अधिक करती है।

- Ans
- ☒ 1. व्यंग्य का चोट
 - ☒ 2. लेकिन मार लुहार की चोट से भी
 - ☒ 3. अधिक करती है।
 - ☒ 4. तो सुनार की तरह धीमी है

Question ID : 9895806918
Chosen Option : --

Q.5 दिए गए शब्द का विलोम चुनें।

एकल

- Ans
- ☒ 1. सामूहिक
 - ☒ 2. विरल
 - ☒ 3. विफल
 - ☒ 4. सरल

Question ID : 9895806933
Chosen Option : --

Q.6 दिये गये वाक्यांश के लिए एक शब्द दीजिये।

रास्ता दिखाने वाला

- Ans
- ☒ 1. मार्गदर्शक
 - ☒ 2. समदर्शी
 - ☒ 3. राहपथिक
 - ☒ 4. दूरदर्शी

Question ID : 9895806939
Chosen Option : --

Q.7

निम्नलिखित में से उस विकल्प का चयन करें जो 'कदम उखाड़ना' मुहावरे का अर्थ व्यक्त करता है।

Ans

- ☒ 1. तैयार होना
- ☒ 2. खुश हो जाना
- ☒ 3. भाग खड़े होना
- ☒ 4. झगड़ा होना

Question ID : 9895806937
Chosen Option : --

Q.8 दिए गए शब्द का विलोम चुनें।

मांसाहारी

Ans

- ☒ 1. बलिहारी
- ☒ 2. निराहार
- ☒ 3. शाकाहारी
- ☒ 4. निरंकारी

Question ID : 9895806934
Chosen Option : --

Q.9 दिये गये वाक्यांश के लिए एक शब्द दीजिये।

तीव्र बुद्धि वाला

Ans

- ☒ 1. मंदबुद्धि
- ☒ 2. कुशाग्रबुद्धि
- ☒ 3. दुर्बुद्धि
- ☒ 4. अल्पबुद्धि

Question ID : 9895806940
Chosen Option : --

Q.1 रिक्त स्थान को भरने के लिए उपयुक्त शब्द का चयन करें।

सोहन सब के _____ रहता है।

Ans

- ☒ 1. अंदर
- ☒ 2. अलग
- ☒ 3. साथ
- ☒ 4. दूर

Question ID : 9895806923
Chosen Option : --

Q.1
1

दिए गए वाक्य का वह भाग ज्ञात करें जिसमें कोई त्रुटि है।

अभिभावक ने विनम्रतापूर्वक कहा कि कृपया आप ही कृपा करके बताएँ कि वह कहाँ है?

Ans

- ☒ 1. कृपया आप ही कृपा करके बताएँ
- ☒ 2. कि वह कहाँ है?
- ☒ 3. विनम्रतापूर्वक कहा कि
- ☒ 4. अभिभावक ने

Question ID : 9895806917
Chosen Option : --

Q.1 2 दिए गए वाक्य में रेखांकित खंड को प्रतिस्थापित करने के लिए उपयुक्त विकल्प का चयन करें।

बहुत से उद्योगपतियों ने बैंक का ऋण वापस नहीं लौटाया।

Ans

- ☒ 1. रुपये
- ☒ 2. पासबुक
- ☒ 3. राशि
- ☒ 4. कर्ज

Question ID : 9895806920
Chosen Option : --

Q.1 3 दिए गए वाक्य में रेखांकित खंड को प्रतिस्थापित करने के लिए उपयुक्त विकल्प का चयन करें।

जीवन में नियति का महत्वपूर्ण स्थान होता है।

Ans

- ☒ 1. कर्म
- ☒ 2. चरित्र
- ☒ 3. स्वभाव
- ☒ 4. भाग्य

Question ID : 9895806922
Chosen Option : --

Q.1 4 दिए गए शब्द के पर्यायवाची शब्द का चयन करें।

कृषक

Ans

- ☒ 1. फसल
- ☒ 2. मज़दूर
- ☒ 3. खेती
- ☒ 4. किसान

Question ID : 9895806936
Chosen Option : --

Q.1 5 दिए गए वाक्य का वह भाग ज्ञात करें जिसमें कोई त्रुटि है।

उनका गाँव के भीतर दो कुएँ हैं किन्तु एक सूखा हुआ है।

Ans

- ☒ 1. दो कुएँ हैं
- ☒ 2. उनका गाँव के भीतर
- ☒ 3. किन्तु एक
- ☒ 4. सूखा हुआ है।

Question ID : 9895806919
Chosen Option : --

Q.1 निम्नलिखित में से उस विकल्प का चयन करें जो 'आपे से बाहर होना' मुहावरे का अर्थ व्यक्त करता है।

Ans

- ☒ 1. बेमेल काम करना
- ☒ 2. बहुत पछताना
- ☒ 3. क्रोध से अपने वश में न रहना
- ☒ 4. घर से निकल जाना

Question ID : 9895806938
Chosen Option : --

Comprehension:

निम्नलिखित गद्यांश के रिक्त स्थानों की पूर्ति गद्यांश के नीचे दिए गए प्रश्नों के अनुसार कीजिए-

स्वस्थ जीवन जीने के लिए शुद्ध और शांतिपूर्ण पर्यावरण _____ (1) होता है। पर्यावरण वह है जो प्राकृतिक रूप से हमारे चारों तरफ है और पृथ्वी पर हमारे दैनिक जीवन को _____ (2) करता है। जो हवा हम हर पल साँस के रूप में _____ (3) हैं, पानी जो हम अपनी दिनचर्या में इस्तेमाल करते हैं, पौधे, जानवर आदि पर्यावरण के तहत आते हैं। अगर _____ (4) के संतुलन में किसी भी प्रकार की _____ (5) आती है तो इसका हमारे पर्यावरण पर गलत असर पड़ता है।

SubQuestion No : 17

Q.1 गद्यांश में संकेतित रिक्त स्थान (1) के लिए उपयुक्त शब्द होगा।

Ans

- ☒ 1. आवश्यक
- ☒ 2. संभव
- ☒ 3. अनावश्यक
- ☒ 4. असंभव

Question ID : 9895806928
Chosen Option : --

Comprehension:

निम्नलिखित गद्यांश के रिक्त स्थानों की पूर्ति गद्यांश के नीचे दिए गए प्रश्नों के अनुसार कीजिए-

स्वस्थ जीवन जीने के लिए शुद्ध और शांतिपूर्ण पर्यावरण _____ (1) होता है। पर्यावरण वह है जो प्राकृतिक रूप से हमारे चारों तरफ है और पृथ्वी पर हमारे दैनिक जीवन को _____ (2) करता है। जो हवा हम हर पल साँस के रूप में _____ (3) हैं, पानी जो हम अपनी दिनचर्या में इस्तेमाल करते हैं, पौधे, जानवर आदि पर्यावरण के तहत आते हैं। अगर _____ (4) के संतुलन में किसी भी प्रकार की _____ (5) आती है तो इसका हमारे पर्यावरण पर गलत असर पड़ता है।

SubQuestion No : 18

Q.1
8 गद्यांश में संकेतित रिक्त स्थान (2) के लिए उपयुक्त शब्द होगा।

- Ans
- ☒ 1. सीमित
 - ☒ 2. प्रभावित
 - ☒ 3. प्रताड़ित
 - ☒ 4. प्रकाशित

Question ID : 9895806929
Chosen Option : --

Comprehension:

निम्नलिखित गद्यांश के रिक्त स्थानों की पूर्ति गद्यांश के नीचे दिए गए प्रश्नों के अनुसार कीजिए-

स्वस्थ जीवन जीने के लिए शुद्ध और शांतिपूर्ण पर्यावरण _____ (1) होता है। पर्यावरण वह है जो प्राकृतिक रूप से हमारे चारों तरफ है और पृथ्वी पर हमारे दैनिक जीवन को _____ (2) करता है। जो हवा हम हर पल साँस के रूप में _____ (3) हैं, पानी जो हम अपनी दिनचर्या में इस्तेमाल करते हैं, पौधे, जानवर आदि पर्यावरण के तहत आते हैं। अगर _____ (4) के संतुलन में किसी भी प्रकार की _____ (5) आती है तो इसका हमारे पर्यावरण पर गलत असर पड़ता है।

SubQuestion No : 19

Q.1
9 गद्यांश में संकेतित रिक्त स्थान (3) के लिए उपयुक्त शब्द होगा।

- Ans
- ☒ 1. लेते
 - ☒ 2. बहते
 - ☒ 3. चलते
 - ☒ 4. उड़ते

Question ID : 9895806930
Chosen Option : --

Comprehension:

निम्नलिखित गद्यांश के रिक्त स्थानों की पूर्ति गद्यांश के नीचे दिए गए प्रश्नों के अनुसार कीजिए-

स्वस्थ जीवन जीने के लिए शुद्ध और शांतिपूर्ण पर्यावरण _____ (1) होता है। पर्यावरण वह है जो प्राकृतिक रूप से हमारे चारों तरफ है और पृथ्वी पर हमारे दैनिक जीवन को _____ (2) करता है। जो हवा हम हर पल साँस के रूप में _____ (3) हैं, पानी जो हम अपनी दिनचर्या में इस्तेमाल करते हैं, पौधे, जानवर आदि पर्यावरण के तहत आते हैं। अगर _____ (4) के संतुलन में किसी भी प्रकार की _____ (5) आती है तो इसका हमारे पर्यावरण पर गलत असर पड़ता है।

SubQuestion No : 20

Q.2
0 गद्यांश में संकेतित रिक्त स्थान (4) के लिए उपयुक्त शब्द होगा।

- Ans
- ☒ 1. आकृति
 - ☒ 2. विकृति
 - ☒ 3. अनुकृति
 - ☒ 4. प्रकृति

Question ID : 9895806931
Chosen Option : --

Comprehension:

निम्नलिखित गद्यांश के रिक्त स्थानों की पूर्ति गद्यांश के नीचे दिए गए प्रश्नों के अनुसार कीजिए-

स्वस्थ जीवन जीने के लिए शुद्ध और शांतिपूर्ण पर्यावरण _____ (1) होता है। पर्यावरण वह है जो प्राकृतिक रूप से हमारे चारों तरफ है और पृथ्वी पर हमारे दैनिक जीवन को _____ (2) करता है। जो हवा हम हर पल साँस के रूप में _____ (3) हैं, पानी जो हम अपनी दिनचर्या में इस्तेमाल करते हैं, पौधे, जानवर आदि पर्यावरण के तहत आते हैं। अगर _____ (4) के संतुलन में किसी भी प्रकार की _____ (5) आती है तो इसका हमारे पर्यावरण पर गलत असर पड़ता है।

SubQuestion No : 21

Q.2
1 गद्यांश में संकेतित रिक्त स्थान (5) के लिए उपयुक्त शब्द होगा।

- Ans
- ☒ 1. अमावट
 - ☒ 2. सजावट
 - ☒ 3. बनावट
 - ☒ 4. रुकावट

Question ID : 9895806932

Chosen Option : --

Q.2
2 सही वर्तनी वाले शब्द का चयन करें।

- Ans ☒ 1. साक्षर
☒ 2. शाक्षर
☒ 3. सक्षर
☒ 4. साक्षार

Question ID : 9895806941

Chosen Option : --

Q.2
3 सही वर्तनी वाले शब्द का चयन करें।

- Ans ☒ 1. दीवस
☒ 2. दिवश
☒ 3. दीवास
☒ 4. दिवस

Question ID : 9895806942

Chosen Option : --

Q.2
4 दिए गए वाक्य में रेखांकित खंड को प्रतिस्थापित करने के लिए उपयुक्त विकल्प का चयन करें।

ईश्वर मानव का सृजन करके वन्दनीय हो गया।

- Ans ☒ 1. उत्पत्ति
☒ 2. पैदावार
☒ 3. जन्म
☒ 4. निर्माण

Question ID : 9895806921

Chosen Option : --

Q.2
5 रिक्त स्थान को भरने के लिए उपयुक्त शब्द का चयन करें।

उन्हीं शब्दों का प्रयोग करना चाहिए _____ प्रासंगिक महत्व है।

- Ans ☒ 1. उनका
☒ 2. जिनका
☒ 3. किनका
☒ 4. जिसका

Question ID : 9895806925

Chosen Option : --

Constable (GD) in CAPFs, NIA, SSF and Rifleman (GD) in Assam Rifles Examination, 2018

| | |
|------------------|--------------------|
| Roll No. : | |
| Registration No. | |
| Name : | |
| Exam Venue : | |
| Exam Time : | 9:00 AM - 10:30 AM |
| Exam Date : | 06/03/2019 |

Section : General Section

Q.1 Which of the following answer figure will complete the given figure?

Question figure:



Ans

☒ 1.



☒ 2.



☒ 3.



☒ 4.



Question ID : 9895808610
Chosen Option : 2

Q.2 Four brothers P, Q, R and S go to a hotel. They book four hotel rooms numbered 301, 302, 303 and 304. Sum of room numbers of P and R is 603 and the sum of room numbers of R and S is 604. What is the sum of room numbers of P, Q and R?

Ans

☒ 1. 907

☒ 2. 904

☒ 3. 903

☒ 4. 905

Question ID : 9895808600
Chosen Option : 1

Q.3 Four words have been given out of which three are alike in some manner, while one is different. Choose the odd one.

Ans

☒ 1. Bhagavad Gita

☒ 2. Bible

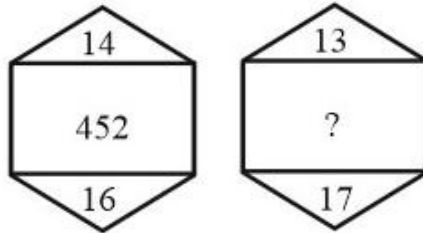
☒ 3. Quran

☒ 4. Jewish

Question ID : 9895808592

Chosen Option : 4

Q.4 Find the missing number from the below options.



Ans ☒ 1. 400

☒ 2. 458

☒ 3. 456

☒ 4. 440

Question ID : 9895808607

Chosen Option : 2

Q.5 Select the related word pair from the given alternatives.

Teeth : Cut :: _____ : _____

Ans ☒ 1. Legs : Walk

☒ 2. Broom : Fly

☒ 3. Tubelight : Heat

☒ 4. Food : Smell

Question ID : 9895808593

Chosen Option : 1

Q.6 In a certain code, TIM is coded as RGK, then how is PAINE coded in the same way?

Ans ☒ 1. NGYCL

☒ 2. NGYLC

☒ 3. NYGCL

☒ 4. NYGLC

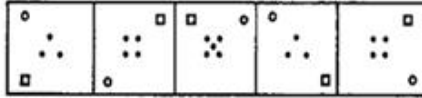
Question ID : 9895808596

Chosen Option : 2

Q.7

Choose the option which completes the given figure series.

Question Figure



Ans

- ☒ 1.
- ☒ 2.
- ☒ 3.
- ☒ 4.

Question ID : 9895808609
Chosen Option : 2

Q.8 Select the correct option that will fill in the blank and complete the series.

AB, BA, ABC, CBA, ABCD, _____.

Ans

- ☒ 1. DCBA
- ☒ 2. CABD
- ☒ 3. ACBD
- ☒ 4. BACD

Question ID : 9895808590
Chosen Option : 1

Q.9 Select the correct option that will fill in the blank and complete the series.

2, 7, 5, 10, 8, 13, _____

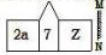
Ans

- ☒ 1. 15
- ☒ 2. 11
- ☒ 3. 38
- ☒ 4. 9

Question ID : 9895808603
Chosen Option : 2

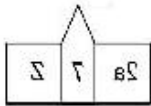
Choose the option that most closely resembles the mirror image of the given figure when mirror is placed at right side.

Question Figure:

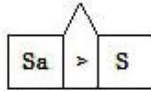


Ans

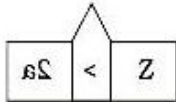
✓ 1.



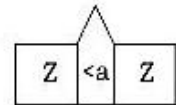
✗ 2.



✗ 3.



✗ 4.



Question ID : 9895808612
Chosen Option : 1

Q.1
1 Select the related word pair from the given alternatives.

Celsius : Temperature :: _____ : _____

Ans

✓ 1.

Kilometer : Distance

✗ 2.

Bank note : Office

✗ 3.

Meter : Water

✗ 4.

Bulb : Electric current

Question ID : 9895808594
Chosen Option : 1

Q.1
2 Select the option that is related to the third term in the same way as the second term is related to the first term.

ROSEBERRY : SEBERRYRO :: BEAUTIFUL : ?

Ans

✗ 1.

TIFULBEAU

✗ 2.

EAUTIFULB

✓ 3.

AUTIFULBE

✗ 4.

UTIFULBEA

Question ID : 9895808595
Chosen Option : 3

Q.1
3 Four letter clusters have been given out of which three are alike in some manner, while one is different. Choose the odd one.

Ans

✗ 1.


STaY

✗ 2.

TRaY

✓ 3.

AWaY

 4. CLaY

Question ID : 9895808591
Chosen Option : 4

Q.1 A piece of paper is folded and cut as shown below in the question figures. From the given answer figures, indicate how
4 it will appear when opened.

Question Figure:



Ans

 1.



 2.



 3.



 4.




Question ID : 9895808613
Chosen Option : 3


Q.1 Select the correct option that will fill in the blank and complete the series.
5

0.3, 0.8, 2.3, 4.8, _____

Ans

 1. 7.5

 2. 7.3

 3. 6.5

 4. 8.3

Question ID : 9895808604
Chosen Option : 4

Q.1
6

The statements below are followed by conclusions labeled I, II, III and IV. Assuming that the information in the statements is true, even if it appears to be at variance with generally established facts, decide which conclusion(s) logically and definitely follow(s) from the information given in the statements.

Statements:





All Iris are Cornea.

Some Cornea are Lens.

All Lens are Retina.

Conclusions:

- I. Some Retina are Cornea
- II. Some Retina are Iris
- III. Some Lens are Iris
- IV. Some Cornea are Retina

- Ans  1. Only I and IV follow
-  2. Only I and II follow
-  3. None follows
-  4. Only III and IV follow

Question ID : 9895808601
Chosen Option : 1

Q.1 The statements below are followed by two conclusions labeled I and II. Assuming that the information in the statements is true, even if it appears to be at variance with generally established facts, decide which conclusion(s) logically and definitely follow(s) from the information given in the statements.





Statements:

Some shirts are socks.

No sock is red.

Conclusion:

- I. Some socks are shirts.
- II. No shirt is red.

- Ans  1. Only conclusion II follows
-  2. Only conclusion I follows
-  3. Either conclusion I or II follows
-  4. Neither conclusion I nor II follows

Question ID : 9895808602
Chosen Option : 2

Q.1 If PT is written as 8-10, how will NLR be written?

- Ans  1. 7-6-12
-  2. 8-6-11
-  3. 7-6-8
-  4. 7-6-9

Question ID : 9895808597

Chosen Option : 4

Q.1 Select the option that is related to the Third term in the same way as the second term is related to the first term.

9

10 : 30 :: 68 : ?

- Ans
- ☐ 1. 120
 - ☐ 2. 100
 - ☐ 3. 112
 - ☒ 4. 130

Question ID : 9895808605

Chosen Option : 3

Q.2 Four options have been given out of which three are alike in some manner, while one is different. Choose the odd one.

0

- Ans
- ☐ 1. 6388
 - ☐ 2. 3568
 - ☒ 3. 1238
 - ☐ 4. 2348

Question ID : 9895808606

Chosen Option : 3

Q.2 A, M, P, D, Q, R, W and B are sitting around a circle facing at the centre. D is fourth to the left of A who is third to the right of M. P is third to the left of Q who is third to the left of M. R is third to the right of W who is second to the right of B.

1

In which of the following pairs is the second person sitting to the immediate right of the first person?

- Ans
- ☒ 1. AB
 - ☐ 2. QB
 - ☐ 3. RM
 - ☐ 4. MD

Question ID : 9895808598

Chosen Option : 2

Q.2 Four boys A, B, C, D and four girls P, Q, R, S are playing merry go round in such a way that they face the centre and form a circle. No two girls or no two boys are next to each other. A is to the immediate left of R, who is opposite to Q. P and Q have only C between them. P is opposite to S, who is to the immediate right of B.

2

If B is the only person between R and S, then who is opposite B?

- Ans
- ☐ 1. A
 - ☐ 2. Q
 - ☒ 3. C
 - ☐ 4. D

Question ID : 9895808599

Chosen Option : 3

Q.2
3

Choose the option figure in which the problem figure is hidden/embedded.

Question figure



Ans

✓ 1.



✗ 2.



✗ 3.



✗ 4.



Question ID : 9895808611
Chosen Option : 1

Q.2 Select the correct combination of mathematical signs to replace '**' signs and to balance the given equation:

4

$$530 * 2 * 3 * 5 * 800$$

Ans

✗ 1. $\div + - =$

✗ 2. $\div - - =$

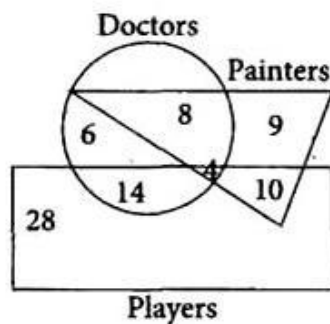
✓ 3. $\div \times + =$

✗ 4. $+ + \times =$

Question ID : 9895808608
Chosen Option : 3

Q.2 Study the diagram carefully and answer the given questions.

5



How many painters are neither doctors nor players?

Ans

✗ 1. 6

✓ 2. 9

✗ 3. 10

✗ 4. 8

Question ID : 9895808614

Chosen Option : 2

Q.2
6 Minimum Support Price for 2018-19 for Cotton of the Medium Staple variety is set at _____.

- Ans
- ☒ 1. ₹ 2,897 per quintal
 - ☒ 2. ₹ 1,950 per quintal
 - ☒ 3. ₹ 5,150 per quintal
 - ☒ 4. ₹ 2,430 per quintal

Question ID : 9895807513
Chosen Option : 4

Q.2
7 Who is the author of the, 'Byomkesh Bakshi Stories'?

- Ans
- ☒ 1. Sharadindu Bandyopadhyay
 - ☒ 2. Ritwik Ghatak
 - ☒ 3. Satyajit Ray
 - ☒ 4. David Davidar

Question ID : 9895807509
Chosen Option : 1

Q.2
8 India defeated the team from which country in the final to win the under 19 Cricket World Cup, 2018?

- Ans
- ☒ 1. England
 - ☒ 2. Australia
 - ☒ 3. South Africa
 - ☒ 4. Pakistan

Question ID : 9895807507
Chosen Option : 2

Q.2
9 Which freedom fighters were hanged for the Kakori conspiracy case?

- Ans
- ☒ 1. Chittaranjan Das and Vasudev Balwant Phadke
 - ☒ 2. Krishnaji Gopal Karve and Bagha Jatin
 - ☒ 3. Ram Prasad Bismil and Ashfaqulla Khan
 - ☒ 4. Khudiram Bose and Chandra Shekhar Azad

Question ID : 9895807526
Chosen Option : 3

Q.3
0 The relation between the period of a simple pendulum 'T' and its length 'L' is _____. ('g' is acceleration due to gravity)

- Ans
- ☒ 1. $T=2\pi \sqrt{L/g}$
 - ☒ 2. $T=4\pi \sqrt{g/L}$

☐ 3. $T=4\pi \sqrt{L/g}$

☐ 4. $T=2\pi \sqrt{g/L}$

Question ID : 9895807517

Chosen Option : 4

Q.3
1 The best examples of which script are found in the rock-cut edicts of Asoka?

- Ans
- ☐ 1. Grantha
 - ☒ 2. Brahmi
 - ☐ 3. Kadamba
 - ☐ 4. Sharada

Question ID : 9895807503

Chosen Option : 1

Q.3
2 Which tribal festival in Chhattisgarh is dedicated to goddess Kesharpal Kesharpalin Devi, one of the tribal deities?

- Ans
- ☐ 1. Sarhul
 - ☒ 2. Madai
 - ☐ 3. Puli Kali
 - ☐ 4. Minjar

Question ID : 9895807504

Chosen Option : 2

Q.3
3 The atmosphere of Mars is mostly composed of _____.

- Ans
- ☐ 1. Ammonia
 - ☒ 2. Carbon dioxide
 - ☐ 3. Oxygen
 - ☐ 4. Hydrogen

Question ID : 9895807524

Chosen Option : 1

Q.3
4 Who was the first and the most important king of the Rashtrakuta dynasty of Karnataka who defeated the Chalukyas of Badami?

- Ans
- ☒ 1. Dantidurga
 - ☐ 2. Harihara I
 - ☐ 3. Uttama
 - ☐ 4. Bindusara

Question ID : 9895807525

Chosen Option : 4

Q.3
5

In which amendment to the constitution were the Bodo, Dogri, Santhali and Maithli added to the list of recognised languages?

- Ans
- ☒ 1. 73rd Constitution Amendment Act of 2003
 - ☒ 2. 92nd Constitution Amendment Act of 2003
 - ☒ 3. 103rd Constitution Amendment Act, 2018
 - ☒ 4. 101st Constitution Amendment Act, 2016

Question ID : 9895807515
Chosen Option : 2

Q.3
6 Which element is placed in the 5th Period and IIA Group of the periodic table?

- Ans
- ☒ 1. Lead (At no 82)
 - ☒ 2. Tellurium (At no 52)
 - ☒ 3. Barium (At no 56)
 - ☒ 4. Strontium (At no 38)

Question ID : 9895807519
Chosen Option : 3

Q.3
7 Which of the following rivers is NOT a tributary of the Krishna?

- Ans
- ☒ 1. Venna
 - ☒ 2. Betwa
 - ☒ 3. Bhima
 - ☒ 4. Koyna

Question ID : 9895807522
Chosen Option : 3

Q.3
8 Which Maratha warrior died in the successful defence of the Sinhagad fort fighting against the Mughal army?

- Ans
- ☒ 1. Chimaji Appa
 - ☒ 2. Baji Prabhu Deshpande
 - ☒ 3. Tanaji Malusare
 - ☒ 4. Baji Pasalkar

Question ID : 9895807527
Chosen Option : 2

Q.3
9 The prefix '_____' is equal to a factor of 10^{15} .

- Ans
- ☒ 1. atto
 - ☒ 2. peta
 - ☒ 3. femto
 - ☒ 4. exa

Question ID : 9895807518
Chosen Option : 2

Q.4
0 The concept of the Freedom of trade in India's Constitution is adopted from the Constitution of which country?

- Ans
- ☐ 1. United Kingdom
 - ☐ 2. United States
 - ☒ 3. Australia
 - ☐ 4. Ireland

Question ID : 9895807514
Chosen Option : 4

Q.4
1 Mutual Funds asset base in India stood at _____ at end of November 2018.

- Ans
- ☐ 1. ₹ 31 lakh crore
 - ☐ 2. ₹ 47 lakh crore
 - ☒ 3. ₹ 24 lakh crore
 - ☐ 4. ₹ 19 lakh crore

Question ID : 9895807511
Chosen Option : 4

Q.4
2 The _____ are the triangular muscles of the shoulder.

- Ans
- ☐ 1. Masseter
 - ☐ 2. Achilles tendon
 - ☒ 3. Deltoids
 - ☐ 4. Sartorius

Question ID : 9895807521
Chosen Option : 3

Q.4
3 The Elephant is a symbol of which Indian political party?

- Ans
- ☐ 1. National Congress Party
 - ☐ 2. Communist Party of India
 - ☒ 3. Bahujan Samaj Party
 - ☐ 4. Rashtriya Janata Dal

Question ID : 9895807516
Chosen Option : 3

Q.4
4 Who won the Miss World title in 1997?

- Ans
- ☐ 1. Reita Faria
 - ☒ 2. Diana Hayden

☒ 3. Tara Anne Fonseca

☒ 4. Zeenat Aman

Question ID : 9895807510
Chosen Option : 1

Q.4
5 Which Indian won the Gold in Women's freestyle wrestling, 50 kg, at the 2018 Asian Games?

Ans ☒ 1. Vinesh Phogat

☒ 2. Babita Kumari

☒ 3. Sakshi Malik

☒ 4. Kavita Devi

Question ID : 9895807506
Chosen Option : 2

Q.4
6 The Bhangra dance form is popular in which state?

Ans ☒ 1. Puducherry

☒ 2. Maharashtra

☒ 3. Punjab

☒ 4. Rajasthan

Question ID : 9895807505
Chosen Option : 3

Q.4
7 _____ alloy consists of nickel, copper and zinc.

Ans ☒ 1. Solder

☒ 2. German silver

☒ 3. Bell Metal

☒ 4. Rose Metal

Question ID : 9895807520
Chosen Option : 2

Q.4
8 All of the following siblings have won the Dadasaheb Phalke Award, EXCEPT _____.

Ans ☒ 1. Lata Mangeshkar and Asha Bhosle

☒ 2. B R Chopra and Yash Chopra

☒ 3. Raj Kapoor and Shashi Kapoor

☒ 4. Mahesh Bhatt and Vikram Bhatt

Question ID : 9895807508
Chosen Option : 3

Q.4
9 The Zoji La Pass is in which mountain range?

- Ans ☒ 1. Zaskar Range
☐ 2. Ladakh Range
☐ 3. East Karakoram Range
☐ 4. Dhauladhar Range

Question ID : 9895807523
Chosen Option : 4

Q.5
0 The Union Budget 2018 allocated ₹ 5,750 crore to _____.

- Ans ☐ 1. Operation Green
☐ 2. the Ujjwala Yojana
☐ 3. the Saubhagya Yojna
☒ 4. the National Livelihood Mission

Question ID : 9895807512
Chosen Option : 3

Q.5
1 Study the following table carefully to answer the questions given below.

| Marks obtained by three students A,B and C in three subjects out of 100 | | | |
|--|----------|-----|-----|
| Student | Subjects | | |
| | Math | Sci | Eng |
| A | 88 | 86 | 66 |
| B | 65 | 74 | 78 |
| C | 72 | 68 | 84 |

The total marks obtained by 'A' in all the subjects together is:

- Ans ☐ 1. 260
☒ 2. 240
☐ 3. 228
☐ 4. 242

Question ID : 9895807851
Chosen Option : 2

Q.5
2

Study the following table carefully to answer the questions given below.

| Marks obtained by three students A,B and C in three subjects out of 100 | | | |
|--|----------|-----|-----|
| Student | Subjects | | |
| | Math | Sci | Eng |
| A | 88 | 86 | 66 |
| B | 65 | 74 | 78 |
| C | 72 | 68 | 84 |

What is the difference between A's and C's total marks in the exam?

- Ans
- ☐ 1. 15
 - ☐ 2. 13
 - ☒ 3. 16
 - ☐ 4. 22

Question ID : 9895807852
Chosen Option : 3

Q.5
3 If a man cuts the grass of a lawn in T minutes, what part of the lawn can he cut in 30 minutes?

- Ans
- ☐ 1. $T/30$
 - ☐ 2. $T-30$
 - ☐ 3. $30-T$
 - ☒ 4. $30/T$

Question ID : 9895807844
Chosen Option : 4

Q.5
4 The base area of a cuboid is 34 sq cm. and height is 3.5 cm. What is the volume of cuboid?

- Ans
- ☐ 1. 125 cm^3
 - ☐ 2. 97 cm^3
 - ☒ 3. 119 cm^3
 - ☐ 4. 108 cm^3

Question ID : 9895807848
Chosen Option : 3

Q.5
5 The value of $\frac{1}{3} + \frac{6}{7} \div \frac{6}{3} + \frac{8}{9} - \frac{2}{3} \times \frac{4}{3}$ is:

- Ans
- ☒ 1. $\frac{16}{21}$
 - ☐ 2. $\frac{17}{21}$

☒ 3. $\frac{15}{21}$

☒ 4. $\frac{9}{21}$

Question ID : 9895807829
Chosen Option : 2

Q.5
6 Sixty percent of the rats included in a particular experiment were female rats. If some of the rats died during the experiment and 30% of rats died were male, what was the ratio of the death rate among the male rats to the death rate among the female rats?

- Ans ☒ 1. 3 : 4
- ☒ 2. 9 : 14
- ☒ 3. 9 : 16
- ☒ 4. 6 : 7

Question ID : 9895807835
Chosen Option : 2

Q.5
7 What should come in place of question mark (?) in the following questions?

$$(140 + 80 \times 2 - 24) \div (80 + 20 \times 3 - 40) = ?$$

- Ans ☒ 1. 276
- ☒ 2. -27.6
- ☒ 3. 2.76
- ☒ 4. 0.276

Question ID : 9895807830
Chosen Option : 3

Q.5
8 What is the fourth proportional to 3, 7 and 15?

- Ans ☒ 1. 30
- ☒ 2. 45
- ☒ 3. 35
- ☒ 4. 25

Question ID : 9895807839
Chosen Option : 3

Q.5
9 A sum of ₹ 5000 is invested for two years under compound interest at 10% p.a, interest being compounded annually. The interest earned (in ₹) is:

- Ans ☒ 1. 2100
- ☒ 2. 1000
- ☒ 3. 1050
- ☒ 4. 500

Question ID : 9895807842

Chosen Option : 3

Q.6
0 A train passes the platform in 18 seconds and a man standing on the platform in 8 seconds. If the length of the train is 100 metres, the length of the platform is:

- Ans
- ☒ 1. 125 m
 - ☐ 2. 140 m
 - ☐ 3. 150 m
 - ☐ 4. 130 m

Question ID : 9895807845

Chosen Option : 1

Q.6
1 John travels $\frac{2}{3}$ rd of a distance by bike and remaining 6 km on foot. How many km does he travels in the whole journey?

- Ans
- ☐ 1. 28 km
 - ☒ 2. 18 km
 - ☐ 3. 26 km
 - ☐ 4. 14 km

Question ID : 9895807846

Chosen Option : 2

Q.6
2 Virat kohli has certain batting average of 9 innings. In the tenth innings he scored 106 runs thereby increasing his average by 6 runs. His new batting average is:

- Ans
- ☐ 1. 48
 - ☐ 2. 56
 - ☒ 3. 52
 - ☐ 4. 46

Question ID : 9895807831

Chosen Option : 3

Q.6
3 Study the following table carefully to answer the questions given below.

| Marks obtained by three students A,B and C in three subjects out of 100 | | | |
|---|----------|-----|-----|
| Student | Subjects | | |
| | Math | Sci | Eng |
| A | 88 | 86 | 66 |
| B | 65 | 74 | 78 |
| C | 72 | 68 | 84 |

The average marks obtained by all the students in Maths is:

- Ans
- ☐ 1. 79
 - ☐ 2. 87

☒ 3. 81

☒ 4. 75

Question ID : 9895807850
Chosen Option : 4

Q.6
4 If the length of a rectangle is increased in the ratio 4 : 5 and its breadth is decreased in the ratio 3 : 2, then its area will be decreased in the ratio _____

Ans ☒ 1. 2 : 1

☒ 2. 4 : 3

☒ 3. 10 : 3

☒ 4. 6 : 5

Question ID : 9895807849
Chosen Option : 4

Q.6
5 If $\frac{a}{b} = \frac{2}{3}$, then the value of $(5a^3 - 2a^2b) : (3ab^2 - b^3)$ is :

Ans ☒ 1. 16 : 27

☒ 2. 32 : 29

☒ 3. 34 : 19

☒ 4. 27 : 16

Question ID : 9895807840
Chosen Option : 1

Q.6
6 In what proportion must a grocer mix one kind of bajra at ₹ 45 per kg with another at ₹ 32 per kg in order that by selling the mixture at ₹ 48 per kg he may make a profit of 20%?

Ans ☒ 1. 4 : 1

☒ 2. 8 : 5

☒ 3. 7 : 5

☒ 4. 9 : 5

Question ID : 9895807838
Chosen Option : 2

Q.6
7 A sum of ₹ 10000 is lent partly at 8% and remaining at 10% per annum. If the yearly interest on the average is 9.2%, then both parts are respectively.

Ans ☒ 1. ₹ 5500 and ₹ 4500

☒ 2. ₹ 4500 and ₹ 5500

☒ 3. ₹ 5000 and ₹ 5000

☒ 4. ₹ 4000 and ₹ 6000

Question ID : 9895807841
Chosen Option : 4

Q.6

8 The marked price of a bike is ₹ 33,600. The retailer announced a discount of 16% on the occasion of Holi. What amount a customer will have to pay for the bike?

- Ans
- ☒ 1. ₹ 28224
 - ☐ 2. ₹ 5376
 - ☐ 3. ₹ 5976
 - ☐ 4. ₹ 20224

Question ID : 9895807833
Chosen Option : 1

Q.6
9 What is the L.C.M. of $\frac{10}{21}$, $\frac{20}{63}$, $\frac{55}{56}$?

- Ans
- ☐ 1. $\frac{5}{7}$
 - ☒ 2. $\frac{220}{7}$
 - ☐ 3. $\frac{220}{504}$
 - ☐ 4. $\frac{5}{504}$

Question ID : 9895807828
Chosen Option : 3

Q.7
0 The speed of train in going from Bhopal to Varanasi is 100 kmph while when coming back from Varanasi to Bhopal, its speed is 80 kmph. What is the average speed during the whole journey? (correct to two decimal places)

- Ans
- ☐ 1. 78.56 kmph
 - ☒ 2. 88.89 kmph
 - ☐ 3. 86.53 kmph
 - ☐ 4. 90.52 kmph

Question ID : 9895807832
Chosen Option : 1

Q.7
1 By selling 20 metres of cloth, a man gains the selling price of 4 metres of cloth. The gain percent is:

- Ans
- ☐ 1. 15 %
 - ☐ 2. 20 %
 - ☐ 3. 22 %
 - ☒ 4. 25 %

Question ID : 9895807837
Chosen Option : 2

Q.7 A person purchases a silk cloth of length 50 m and width 1 m at the rate of ₹ 250 per sq m and a cotton cloth of length 40 m and width 2m at the rate of ₹ 200 per sq m. What is the difference between the prices of two cloths?

- Ans
- ☐ 1. ₹ 4100
 - ☐ 2. ₹ 3200
 - ☐ 3. ₹ 3950
 - ☒ 4. ₹ 3500

Question ID : 9895807847
Chosen Option : 4

Q.7 A dice is rolled two times. Find the probability of getting a composite number on first roll and a prime number on second roll?

- Ans
- ☐ 1. $\frac{1}{2}$
 - ☒ 2. $\frac{1}{6}$
 - ☐ 3. $\frac{1}{9}$
 - ☐ 4. $\frac{1}{4}$

Question ID : 9895807834
Chosen Option : 2

Q.7 A pipe can fill a cistern in 20 minutes whereas the cistern when full can be emptied by a leak in 28 minutes. When both are opened, the time taken to fill the cistern is:

- Ans
- ☐ 1. 48 min
 - ☒ 2. 70 min
 - ☐ 3. 80 min
 - ☐ 4. 60 min

Question ID : 9895807843
Chosen Option : 2

Q.7 Ram buys articles at 70 for ₹ 890 and sold at 60 for ₹ 890. What is his gain percent?

- Ans
- ☐ 1. $17\frac{1}{3}\%$
 - ☐ 2. 25%
 - ☐ 3. 20%
 - ☒ 4. $16\frac{2}{3}\%$

Question ID : 9895807836
Chosen Option : 1

Section : English Language

Q.1 Select the wrongly spelt word.

- Ans
- ☒ 1. Committee
 - ☒ 2. Corruption
 - ☒ 3. Concious
 - ☒ 4. Completely

Question ID : 9895808738
Chosen Option : 4

Q.2 Select the meaning of the given idiom.

Bring to one's knees

- Ans
- ☒ 1. to force to submit
 - ☒ 2. to trouble someone
 - ☒ 3. to request to bend
 - ☒ 4. to support someone

Question ID : 9895808734
Chosen Option : 1

Q.3 Select the word which means the same as the group of words given.

A person who is recovering after an illness or medical treatment

- Ans
- ☒ 1. Athlete
 - ☒ 2. Convalescent
 - ☒ 3. Healthy
 - ☒ 4. Altruist

Question ID : 9895808736
Chosen Option : 3

Q.4 Select the antonym of the given word.

RELUCTANT

- Ans
- ☒ 1. Unenthusiastic
 - ☒ 2. Opposed
 - ☒ 3. Unwilling
 - ☒ 4. Willing

Question ID : 9895808732
Chosen Option : 4

Q.5 Select the most appropriate option to substitute the underlined segment in the given sentence. If there is no need to substitute it, select No substitution required.

The two sisters look quite different in each other.

- Ans
- ☒ 1. different as each other
 - ☒ 2. No substitution required
 - ☒ 3. different with one another
 - ☒ 4. different from each other

Question ID : 9895808719
Chosen Option : 3

Q.6 Select the most appropriate option to substitute the underlined segment in the given sentence. If there is no need to substitute it, select No substitution required.

Our meals usually have at least one item make of some kinds of grain.

- Ans
- ☒ 1. No substitution required
 - ☒ 2. making of any kinds
 - ☒ 3. made of some kind
 - ☒ 4. makes of kind

Question ID : 9895808718
Chosen Option : 1

Q.7 Select the meaning of the given idiom.

Cool as Cucumber

- Ans
- ☒ 1. to be smart
 - ☒ 2. to be aggressive
 - ☒ 3. to be calm
 - ☒ 4. to be clever

Question ID : 9895808733
Chosen Option : 4

Q.8 Select the synonym of the given word.

MADNESS

- Ans
- ☒ 1. Wisdom
 - ☒ 2. Stability
 - ☒ 3. Insanity
 - ☒ 4. Balance

Question ID : 9895808730
Chosen Option : 1

Q.9

Select the antonym of the given word.

LAMENT

- Ans ☒ 1. Regret
☒ 2. Rejoice
☒ 3. Grieve
☒ 4. Mourn

Question ID : 9895808731
Chosen Option : 3

Q.1 Identify the segment in the sentence which contains the grammatical error from the given options.
0

The thin wire that giving off light is called the filament.

- Ans ☒ 1. light is called
☒ 2. The thin wire
☒ 3. giving off
☒ 4. the filament

Question ID : 9895808716
Chosen Option : 4

Q.1 Identify the segment in the sentence which contains the grammatical error from the given options.
1

The jute plant is normal harvested when it is at flowering stage.

- Ans ☒ 1. The jute plant
☒ 2. when it is
☒ 3. flowering
☒ 4. is normal

Question ID : 9895808717
Chosen Option : 2

Comprehension:

In the following passage some words have been deleted. Fill in the blanks with the help of the alternatives given. Select the most appropriate option for each number.

Those of us who live in (1) _____ covered with forests and surrounded (2) _____ hills may find it difficult to (3) _____ what a desert is really like. The (4) _____ belief is that it is (5) _____ endless stretch of sand where no rain falls and, therefore, no vegetation grows.

SubQuestion No : 12

Q.1 Select the most appropriate option that will fill in
2 the blank number 1.

- Ans
- ☒ 1. quarters
 - ☒ 2. territory
 - ☒ 3. regions
 - ☒ 4. cities

Question ID : 9895808724
Chosen Option : 4

Comprehension:

In the following passage some words have been deleted. Fill in the blanks with the help of the alternatives given. Select the most appropriate option for each number.

Those of us who live in (1) _____ covered with forests and surrounded (2) _____ hills may find it difficult to (3) _____ what a desert is really like. The (4) _____ belief is that it is (5) _____ endless stretch of sand where no rain falls and, therefore, no vegetation grows.

SubQuestion No : 13

- Q.1
3 Select the most appropriate option that will fill in the blank number 2.

- Ans
- ☒ 1. by
 - ☒ 2. for
 - ☒ 3. from
 - ☒ 4. with

Question ID : 9895808725
Chosen Option : 1

Comprehension:


In the following passage some words have been deleted. Fill in the blanks with the help of the alternatives given. Select the most appropriate option for each number.

Those of us who live in (1) _____ covered with forests and surrounded (2) _____ hills may find it difficult to (3) _____ what a desert is really like. The (4) _____ belief is that it is (5) _____ endless stretch of sand where no rain falls and, therefore, no vegetation grows.

SubQuestion No : 14

- Q.1
4 Select the most appropriate option that will fill in the blank number 3.

- Ans
- ☒ 1. feel
 - ☒ 2. imagine
 - ☒ 3. look

 4. calculate

Question ID : 9895808726
Chosen Option : 1





Comprehension:

In the following passage some words have been deleted. Fill in the blanks with the help of the alternatives given. Select the most appropriate option for each number.

Those of us who live in (1) _____ covered with forests and surrounded (2) _____ hills may find it difficult to (3) _____ what a desert is really like. The (4) _____ belief is that it is (5) _____ endless stretch of sand where no rain falls and, therefore, no vegetation grows.

SubQuestion No : 15

Q.1
5 Select the most appropriate option that will fill in the blank number 4.

- Ans  1. popular
 2. fake
 3. attractive
 4. noted

Question ID : 9895808727
Chosen Option : 2





Comprehension:

In the following passage some words have been deleted. Fill in the blanks with the help of the alternatives given. Select the most appropriate option for each number.

Those of us who live in (1) _____ covered with forests and surrounded (2) _____ hills may find it difficult to (3) _____ what a desert is really like. The (4) _____ belief is that it is (5) _____ endless stretch of sand where no rain falls and, therefore, no vegetation grows.

SubQuestion No : 16

Q.1
6 Select the most appropriate option that will fill in the blank number 5.

- Ans  1. the
 2. a
 3. no article needed
 4. an

Question ID : 9895808728
Chosen Option : 1

Q.1 Identify the segment in the sentence which contains the grammatical error from the given options.

7

Seeds of mustard plants give us oil and the leave are used as a vegetable.

Ans

- ☒ 1. Seeds of
- ☒ 2. give us oil
- ☒ 3. leave are used
- ☒ 4. as a vegetable

Question ID : 9895808715

Chosen Option : 3

Q.1 Select the word which means the same as the group of words given.

8

Someone who wishes to destroy the existing government and laws

Ans

- ☒ 1. Anarchist
- ☒ 2. Pacifist
- ☒ 3. Patriot
- ☒ 4. Hermit

Question ID : 9895808735

Chosen Option : 2

Q.1 Select the most appropriate option to substitute the underlined segment in the given sentence. If there is no need to substitute it, select No substitution required.

9

Tea leaves is separate from the liquid with a strainer, while preparing tea.

Ans

- ☒ 1. are separated from
- ☒ 2. No substitution required
- ☒ 3. was separate to
- ☒ 4. were separating to

Question ID : 9895808720

Chosen Option : 1

Q.2 Select the most appropriate word to fill in the blank.

0

Among the _____ kinds, the most common ant is black or red.

Ans

- ☒ 1. separate
- ☒ 2. much
- ☒ 3. lots of
- ☒ 4. various

Question ID : 9895808721

Chosen Option : 4

Q.2
1 Select the most appropriate word to fill in the blank.

I was astounded at his _____ knowledge about the continent of Africa.

- Ans
- ☐ 1. Colossal
 - ☐ 2. Grave
 - ☐ 3. Massive
 - ☒ 4. Vast

Question ID : 9895808739
Chosen Option : 3

Q.2
2 Select the most appropriate word to fill in the blank.

The _____ of the minister's statement cannot be verified by people who have no access to official records.

- Ans
- ☒ 1. validity
 - ☐ 2. rejection
 - ☐ 3. approval
 - ☐ 4. ambiguity

Question ID : 9895808740
Chosen Option : 3

Q.2
3 Select the most appropriate word to fill in the blank.

This seems to be a _____ rifle.

- Ans
- ☐ 1. soldier'
 - ☐ 2. soldiers
 - ☐ 3. soldier
 - ☒ 4. soldier's

Question ID : 9895808722
Chosen Option : 4

Q.2
4 Select the synonym of the given word.

LUCID

- Ans
- ☐ 1. Ambiguous
 - ☐ 2. Confusing
 - ☒ 3. Clear
 - ☐ 4. Unclear

Question ID : 9895808729
Chosen Option : 4

Q.2
5 Select the wrongly spelt word.

- Ans
- ☒ 1. Secretary
 - ☒ 2. Scenary
 - ☒ 3. Surely
 - ☒ 4. Sergeant

Question ID : 9895808737
Chosen Option : 4

Section : Hindi Language

Q.1 रिक्त स्थान को भरने के लिए उपयुक्त शब्द का चयन करें।

लगता है आज _____ होगी।

- Ans
- ☒ 1. दिन
 - ☒ 2. वर्षा
 - ☒ 3. बादल
 - ☒ 4. सूर्य

Question ID : 9895806952
Chosen Option : --

Q.2 'डकार जाना' मुहावरे का अर्थ है-

- Ans
- ☒ 1. कठिन काम
 - ☒ 2. हानि उठाना
 - ☒ 3. हड़प लेना
 - ☒ 4. खुलेआम कहना

Question ID : 9895806964
Chosen Option : --

Q.3 रिक्त स्थान को भरने के लिए उपयुक्त शब्द का चयन करें।

आजकल चोरों _____ गिरा सक्रिय है।

- Ans
- ☒ 1. को
 - ☒ 2. से
 - ☒ 3. पर
 - ☒ 4. का

Question ID : 9895806949
Chosen Option : --

Q.4

दिए गए शब्द के पर्यायवाची शब्द का चयन करें।

खग

Ans

- ✓ 1. पशु
- ✗ 2. कबूतर
- ✗ 3. तोता
- ✗ 4. पक्षी

Question ID : 9895806961

Chosen Option : --

Q.5 दिए गए वाक्य में रेखांकित खंड को प्रतिस्थापित करने के लिए उपयुक्त विकल्प का चयन करें।

उसकी शिकायत पूर्णतया सही थी।

Ans

- ✓ 1. प्रतिशब्द
- ✗ 2. अधिकतम
- ✗ 3. अक्षरशः
- ✗ 4. लगभग

Question ID : 9895806947

Chosen Option : --

Q.6 दिए गए वाक्य का वह भाग ज्ञात करें जिसमें कोई त्रुटि है।

श्याम की खराब स्थिति को देखकर मुझे दुःख और क्षोभ हुए।

Ans

- ✗ 1. मुझे दुःख
- ✗ 2. खराब स्थिति को देखकर
- ✗ 3. और क्षोभ हुए।
- ✓ 4. श्याम की

Question ID : 9895806944

Chosen Option : --

Q.7 रिक्त स्थान को भरने के लिए उपयुक्त शब्द का चयन करें।

एक विद्वान ने परीक्षा की _____ आग से की है।

Ans

- ✓ 1. तुल्य
- ✗ 2. अपेक्षा
- ✗ 3. उपेक्षा
- ✗ 4. तुलना

Question ID : 9895806950
Chosen Option : --

Q.8 दिए गए शब्द के पर्यायवाची शब्द का चयन करें।

विपत्ति

- Ans
- ☒ 1. मुसीबत
 - ☒ 2. जटा
 - ☒ 3. कष्ट
 - ☒ 4. जटिल

Question ID : 9895806962
Chosen Option : --

Q.9 दिए गए वाक्य का वह भाग ज्ञात करें जिसमें कोई त्रुटि है।

कक्षा के सभी छात्र गुरु जी की आदर करते हैं।

- Ans
- ☒ 1. कक्षा के
 - ☒ 2. गुरु जी की आदर
 - ☒ 3. सभी छात्र
 - ☒ 4. करते हैं।

Question ID : 9895806943
Chosen Option : --

Q.10 दिए गए वाक्य में रेखांकित खंड को प्रतिस्थापित करने के लिए उपयुक्त विकल्प का चयन करें।

जीवन में उन्नति चाहते हो तो परिश्रम करो।

- Ans
- ☒ 1. अग्रसर
 - ☒ 2. उच्चता
 - ☒ 3. विकास
 - ☒ 4. अग्रगण्य

Question ID : 9895806946
Chosen Option : --

Q.11 दिये गये वाक्यांश के लिए एक शब्द दीजिये।

रास्ता दिखाने वाला

- Ans
- ☒ 1. राहपथिक
 - ☒ 2. मार्गदर्शक
 - ☒ 3. दूरदर्शी

✓ 4. समदर्शी

Question ID : 9895806965
Chosen Option : --

Q.1
2 दिए गए वाक्य का वह भाग ज्ञात करें जिसमें कोई त्रुटि है।

यदि आप अपनी और अपनी परिवार की भलाई चाहते हो तो यहाँ से चले जाओ।

- Ans
- ✗ 1. तो यहाँ से चले जाओ।
 - ✗ 2. और अपनी परिवार की
 - ✗ 3. भलाई चाहते हो
 - ✓ 4. यदि आप अपनी

Question ID : 9895806945
Chosen Option : --

Q.1
3 'अठखेलियाँ सूझना' मुहावरे का अर्थ है-

- Ans
- ✗ 1. व्यंग्य करना
 - ✓ 2. दिल्लगी करना
 - ✗ 3. मजाक उड़ाना
 - ✗ 4. ईर्ष्या करना

Question ID : 9895806963
Chosen Option : --

Q.1
4 दिए गए शब्द का विलोम चुनें।

मांसाहारी

- Ans
- ✓ 1. बलिहारी
 - ✗ 2. शाकाहारी
 - ✗ 3. निरंकारी
 - ✗ 4. निराहार

Question ID : 9895806960
Chosen Option : --

Q.1
5 सही वर्तनी वाले शब्द का चयन करें।

- Ans
- ✗ 1. साक्षार
 - ✗ 2. शाक्षर
 - ✓ 3. साक्षर

✗ 4. सक्षर

Question ID : 9895806967
Chosen Option : --

Q.1
6 दिये गये वाक्यांश के लिए एक शब्द दीजिये।

तीव्र बुद्धि वाला

Ans

✗ 1. अल्पबुद्धि

✗ 2. दुर्बुद्धि

✗ 3. मंदबुद्धि

✓ 4. कुशाग्रबुद्धि

Question ID : 9895806966
Chosen Option : --

Q.1
7 'शाश्वत' का विलोम शब्द है-

Ans

✗ 1. क्षणिक

✗ 2. स्वस्थ

✓ 3. चिरंतन

✗ 4. अस्थायी

Question ID : 9895806959
Chosen Option : --

Q.1
8 रिक्त स्थान को भरने के लिए उपयुक्त शब्द का चयन करें।

मैं पौधे _____ रहा हूँ।

Ans

✗ 1. खा

✗ 2. जगा

✓ 3. लगा

✗ 4. भगा

Question ID : 9895806951
Chosen Option : --

Q.1
9 दिए गए वाक्य में रेखांकित खंड को प्रतिस्थापित करने के लिए उपयुक्त विकल्प का चयन करें।

जिसने मन रूपी मृतवाले हाथी को वश में कर लिया वही सच्चा शूरवीर है।

Ans

✗ 1. उद्विग्न

✗ 2. व्याकुल

✓ 3. मदमस्त

✗ 4. आकुल

Question ID : 9895806948
Chosen Option : --

Comprehension:

निम्नलिखित गद्यांश के रिक्त स्थानों की पूर्ति गद्यांश के नीचे दिए गए प्रश्नों के अनुसार कीजिए-

किताबें हमारी सबसे अच्छी _____ (1) हैं। किताबें आत्मा और मन के लिए भोजन हैं। पुस्तकें हमारे दुखों में हमें _____ (2) दे सकती हैं और जीवन की चिंताओं को भूलने में मदद कर सकती हैं। ये जीवन में _____ (3) का रहस्य सिखाती हैं। ये जीवन के अंधेरे में _____ (4) दिखाती हैं। ये हमें सिखाती हैं कि बुराई पर अच्छाई की _____ (5) होती है।

SubQuestion No : 20

Q.2
0 गद्यांश में संकेतित रिक्त स्थान (1) के लिए उपयुक्त शब्द होगा।

Ans ✗ 1. सहकर्मी

✓ 2. दुश्मन

✗ 3. सहपाठी

✗ 4. दोस्त

Question ID : 9895806954
Chosen Option : --

Comprehension:

निम्नलिखित गद्यांश के रिक्त स्थानों की पूर्ति गद्यांश के नीचे दिए गए प्रश्नों के अनुसार कीजिए-

किताबें हमारी सबसे अच्छी _____ (1) हैं। किताबें आत्मा और मन के लिए भोजन हैं। पुस्तकें हमारे दुखों में हमें _____ (2) दे सकती हैं और जीवन की चिंताओं को भूलने में मदद कर सकती हैं। ये जीवन में _____ (3) का रहस्य सिखाती हैं। ये जीवन के अंधेरे में _____ (4) दिखाती हैं। ये हमें सिखाती हैं कि बुराई पर अच्छाई की _____ (5) होती है।

SubQuestion No : 21

Q.2
1 गद्यांश में संकेतित रिक्त स्थान (2) के लिए उपयुक्त शब्द होगा।

Ans

- ☒ 1. वेदना
☒ 2. अशांति
☒ 3. सात्वना
☒ 4. तकलीफ

Question ID : 9895806955
Chosen Option : --

Comprehension:

निम्नलिखित गद्यांश के रिक्त स्थानों की पूर्ति गद्यांश के नीचे दिए गए प्रश्नों के अनुसार कीजिए-

किताबें हमारी सबसे अच्छी _____ (1) हैं। किताबें आत्मा और मन के लिए भोजन हैं। पुस्तकें हमारे दुखों में हमें _____ (2) दे सकती हैं और जीवन की चिंताओं को भूलने में मदद कर सकती हैं। ये जीवन में _____ (3) का रहस्य सिखाती हैं। ये जीवन के अंधेरे में _____ (4) दिखाती हैं। ये हमें सिखाती हैं कि बुराई पर अच्छाई की _____ (5) होती है।

SubQuestion No : 22

Q.2
2 गद्यांश में संकेतित रिक्त स्थान (3) के लिए उपयुक्त शब्द होगा।

- Ans ☒ 1. दरिद्रता
☒ 2. विफलता
☒ 3. निष्फलता
☒ 4. सफलता

Question ID : 9895806956
Chosen Option : --

Comprehension:

निम्नलिखित गद्यांश के रिक्त स्थानों की पूर्ति गद्यांश के नीचे दिए गए प्रश्नों के अनुसार कीजिए-

किताबें हमारी सबसे अच्छी _____ (1) हैं। किताबें आत्मा और मन के लिए भोजन हैं। पुस्तकें हमारे दुखों में हमें _____ (2) दे सकती हैं और जीवन की चिंताओं को भूलने में मदद कर सकती हैं। ये जीवन में _____ (3) का रहस्य सिखाती हैं। ये जीवन के अंधेरे में _____ (4) दिखाती हैं। ये हमें सिखाती हैं कि बुराई पर अच्छाई की _____ (5) होती है।

SubQuestion No : 23

Q.2
3

गद्यांश में संकेतित रिक्त स्थान (4) के लिए उपयुक्त शब्द होगा।

- Ans
- ☒ 1. रोशनी
 - ☒ 2. भ्रम
 - ☒ 3. भय
 - ☒ 4. आशंका

Question ID : 9895806957
Chosen Option : --

Comprehension:

निम्नलिखित गद्यांश के रिक्त स्थानों की पूर्ति गद्यांश के नीचे दिए गए प्रश्नों के अनुसार कीजिए-

किताबें हमारी सबसे अच्छी _____ (1) हैं। किताबें आत्मा और मन के लिए भोजन हैं। पुस्तकें हमारे दुखों में हमें _____ (2) दे सकती हैं और जीवन की चिंताओं को भूलने में मदद कर सकती हैं। ये जीवन में _____ (3) का रहस्य सिखाती हैं। ये जीवन के अंधेरे में _____ (4) दिखाती हैं। ये हमें सिखाती हैं कि बुराई पर अच्छाई की _____ (5) होती है।

SubQuestion No : 24

Q.2
4 गद्यांश में संकेतित रिक्त स्थान (5) के लिए उपयुक्त शब्द होगा।

- Ans
- ☒ 1. विजय
 - ☒ 2. विजेता
 - ☒ 3. अजय
 - ☒ 4. पराजय

Question ID : 9895806958
Chosen Option : --

Q.2
5 सही वर्तनी वाले शब्द का चयन करें।

- Ans
- ☒ 1. दीवास
 - ☒ 2. दिवश
 - ☒ 3. दीवस
 - ☒ 4. दिवस

Question ID : 9895806968
Chosen Option : --

Constable (GD) in CAPFs, NIA, SSF and Rifleman (GD) in Assam Rifles Examination, 2018

| | |
|------------------|--------------------|
| Roll No. : | |
| Registration No. | |
| Name : | |
| Exam Venue : | |
| Exam Time : | 12:30 PM - 2:00 PM |
| Exam Date : | 06/03/2019 |

Section : **General Section**

Q.1 Six kids are sitting in two rows facing north. Their names are Fuji, Ukain, Yam and Krish, Charlie, Mac. Fuji and Mac are sitting diagonally opposite. Ukain is in the top row and to the immediate right of Fuji. Krish is second to the left of Mac while Yam and Krish are not in the same row.

Who is sitting opposite to Charlie?

- Ans**
- ☒ 1. Yam
 - ☒ 2. Fuji
 - ☒ 3. Ukain
 - ☒ 4. Krish

Question ID : **9895808624**
Chosen Option : **4**

Q.2 Choose the option that most closely resembles the mirror image of the given figure when mirror is placed at right side.

Question Figure:



- Ans**
- ☒ 1.
 - ☒ 2.
 - ☒ 3.
 - ☒ 4.

Question ID : **9895808637**
Chosen Option : **4**

Q.3 Select the option that is related to the third term in the same way as the second term is related to the first term.

MATE : NATE :: FATE : ?

- Ans**
- ☒ 1. CATE
 - ☒ 2. LATE
 - ☒ 3. JATE
 - ☒ 4. UATE

Question ID : 9895808620
Chosen Option : 2

Q.4 Select the option that is related to the third term in the same way as the second term is related to the first term.

Day : Night :: Morning : _____

- Ans ☒ 1. Evening
☒ 2. Air
☒ 3. Planet
☒ 4. Star

Question ID : 9895808619
Chosen Option : 1

Q.5 M, N, O and P are playing cards sitting opposite each other. M is on the right of N and P is on the left of O. Then which of the following are partners?

- Ans ☒ 1. N and P
☒ 2. M and P
☒ 3. M and N
☒ 4. P and O

Question ID : 9895808625
Chosen Option : 1

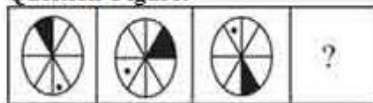
Q.6 Four words have been given out of which three are alike in some manner, while one is different. Choose the odd one.

- Ans ☒ 1. Bag
☒ 2. Wheelbarrow
☒ 3. Basket
☒ 4. Bowl

Question ID : 9895808617
Chosen Option : 1

Q.7 Choose the option which completes the given figure series.

Question Figure:

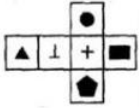


- Ans ☒ 1.
☒ 2.
☒ 3.
☒ 4.

Question ID : 9895808634

Chosen Option : 1

Q.8 The following figure is folded to form a box. Which symbol will appear on the opposite side of ▲ ?



- Ans
- ☒ 1. ⊥
 - ☒ 2. ■
 - ☒ 3. +
 - ☒ 4. ●

Question ID : 9895808638
Chosen Option : 1

Q.9 Eight people A, B, C, D, E, F, G and H are sitting around a circular table. A and B are facing towards the centre while the other six people are facing opposite the centre. A is sitting second to the right of H. B sits third to the left of A. D sits second to the right of G. G is neither immediate neighbor of B nor A. E and F are immediate neighbors and are facing outside.

Who is sitting second to the left of G?

- Ans
- ☒ 1. F
 - ☒ 2. D
 - ☒ 3. B
 - ☒ 4. C

Question ID : 9895808623
Chosen Option : 1

Q.1 In a certain code, SACK is coded as RZBJ, then how is AMOUNT coded in the same way?

- Ans
- ☒ 1. ZLNTMS
 - ☒ 2. ZLNSMT
 - ☒ 3. ZLTNMS
 - ☒ 4. ZLNMTS

Question ID : 9895808621
Chosen Option : 1

Q.1 If B is coded as 2, F is coded as 8, C is coded as 4, G is coded as 3, H is coded as 0, A is coded as 1, and N is coded as 7, then what is the coded form of HNCGB?

- Ans
- ☒ 1. 07243
 - ☒ 2. 07423
 - ☒ 3. 07432
 - ☒ 4. 04237

Question ID : 9895808622
Chosen Option : 3

Q.1
2

Find the missing number from the below options.

| | |
|----|----|
| 72 | 18 |
| 54 | |
| 64 | ? |
| 38 | |

- Ans
- ☒ 1. 24
- ☒ 2. 26
- ☒ 3. 18
- ☒ 4. 22

Question ID : 9895808632
Chosen Option : 2

Q.1 The statements below are followed by two conclusions labeled I and II. Assuming that the information in the statements is true, even if it appears to be at variance with generally established facts, decide which conclusion(s) logically and definitely follow(s) from the information given in the statements.

Statements:

All Strong are animals.
Some animals are Tigers.
All Tigers are Sharp.

Conclusions:

I. Some Strong are Sharp.
II. No Strong is Sharp.

- Ans
- ☒ 1. Only conclusion II follows
- ☒ 2. Either conclusion I or II follows
- ☒ 3. Only conclusion I follows
- ☒ 4. Neither conclusion I nor II follows

Question ID : 9895808627
Chosen Option : 4

Q.1 Select the option that is related to the Third term in the same way as the second term is related to the first term.

4

13 : 196 :: 9 : ?

- Ans
- ☒ 1. 121
- ☒ 2. 100
- ☒ 3. 131
- ☒ 4. 111

Question ID : 9895808630
Chosen Option : 2

Q.1 Select the correct option that will fill in the blank and complete the series.

5

18, 36, 108, 432, 2160, _____

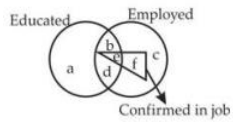
- Ans
- ☒ 1. 15200
- ☒ 2. 14200
- ☒ 3. 12960
- ☒ 4. 12690

Question ID : 9895808628

Chosen Option : 3

Q.1 Read the given figure and find the region representing persons who are educated and employed but not confirmed in job.

6



Ans

1. ac
2. abc
3. bd
4. adc

Question ID : 9895808639

Chosen Option : 3

Q.1 Select the option that is related to the third term in the same way as the second term is related to the first term.

7

India : Country :: Delhi : _____

Ans

1. Continent
2. District
3. Capital
4. Red Fort

Question ID : 9895808618

Chosen Option : 3

Q.1 Four options have been given out of which three are alike in some manner, while one is different. Choose the odd one.

8

Ans

1. 36-59
2. 61-34
3. 51-24
4. 32-41

Question ID : 9895808631

Chosen Option : 4

Q.1 Choose the option figure in which the problem figure is hidden/embedded.

9

Question Figure:



Ans

- 1.
- 2.
- 3.
- 4.

Question ID : 9895808636
Chosen Option : 3

Q.2 Select the correct option that will fill in the blank and complete the series.

52, 56, 65, 81, 106, _____

- Ans
- ☒ 1. 122
 - ☒ 2. 142
 - ☒ 3. 132
 - ☒ 4. 140

Question ID : 9895808629
Chosen Option : 2

Q.2 Select the correct option that will fill in the blank and complete the series.

T, R, P, N, L, _____, _____

- Ans
- ☒ 1. K, H
 - ☒ 2. K, I
 - ☒ 3. J, G
 - ☒ 4. J, H

Question ID : 9895808615
Chosen Option : 4

Q.2 Which of the following answer figure will complete the given figure?

Question Figure:



- Ans
- ☒ 1.
 - ☒ 2.
 - ☒ 3.
 - ☒ 4.

Question ID : 9895808635
Chosen Option : 1

Q.2 Four letter clusters have been given out of which three are alike in some manner, while one is different. Choose the odd one.

- Ans
- ☒ 1. MPQS
 - ☒ 2. RUVX

☒ 3. FIJL

☒ 4. GHJK

Question ID : 9895808616

Chosen Option : 4

Q.2 Select the correct combination of mathematical signs to replace** signs and to balance the given equation.

4

$$32 * 8 * 14 * 7 * 16$$

Ans ☒ 1. $\times - + =$

☒ 2. $+ = \div \times$

☒ 3. $- \times \div =$

☒ 4. $\div \times - =$

Question ID : 9895808633

Chosen Option : 3

Q.2 The statements below are followed by conclusions labeled I, II and III. Assuming that the information in the statements is true, even if it appears to be at variance with generally established facts, decide which conclusion(s) logically and definitely follow(s) from the information given in the statements.

5

Statements:

All twenty are thirty.

All thirty are forty.

All forty are sixty.

All sixty are seventy.

Conclusions:

I. Some forty are thirty.

II. Some seventy are sixty.

III. No thirty is twenty.

Ans ☒ 1. Only II and III follow

☒ 2. Only I and III follow

☒ 3. Only I and II follow

☒ 4. All, I, II and III follow

Question ID : 9895808626

Chosen Option : 3

Q.2 What is deposited on iron in the process of Galvanization?

6

Ans ☒ 1. aluminium

☒ 2. tin

☒ 3. zinc

☒ 4. copper

Question ID : 9895808480

Chosen Option : 3

Q.2 Which of the following options is a martial arts form associated with Tamil Nadu?

7

Ans ☒ 1. Kalari Payattu

☒ 2. Thoda

- ☒ 3. Thang-ta
- ☒ 4. Silambam

Question ID : 9895808468
Chosen Option : 1

Q.2
8 What is grown as a kharif crop in the northern and rabi crop in the southern part of India?

- Ans ☒ 1. Mustard
- ☒ 2. Sesamum
- ☒ 3. Linseed
- ☒ 4. Groundnut

Question ID : 9895808485
Chosen Option : 4

Q.2
9 Which element is used for making solar cells?

- Ans ☒ 1. Silicon
- ☒ 2. Sulphur
- ☒ 3. Sodium
- ☒ 4. Silver

Question ID : 9895808483
Chosen Option : 4

Q.3
0 Which event is marked as an Intangible Cultural Heritage of Humanity by UNESCO?

- Ans ☒ 1. Suraj Kund Mela
- ☒ 2. Tarnetar Mela
- ☒ 3. Kumbh Mela
- ☒ 4. Pushkar Mela

Question ID : 9895808465
Chosen Option : 3

Q.3
1 The soil ideal for growing cotton is:

- Ans ☒ 1. arid soil
- ☒ 2. laterite soil
- ☒ 3. alluvial soil
- ☒ 4. black soil

Question ID : 9895808484
Chosen Option : 3

Q.3
2 Who is the founder of Grameen Bank?

- Ans ☒ 1. Abdullah Abu Sayed
- ☒ 2. Anu Muhammad
- ☒ 3. Muhammad Yunus
- ☒ 4. Atiur Rahman

Question ID : 9895808473
Chosen Option : 3

Q.3
3 Which gas shields the surface of the earth from ultraviolet radiation from the sun?

- Ans
- ☒ 1. Oxygen
 - ☒ 2. Carbon dioxide
 - ☒ 3. Ozone
 - ☒ 4. Nitrogen

Question ID : 9895808482
Chosen Option : 3

Q.3
4 Which organization is under the Ministry of Statistics, Planning and Programme Implementation?

- Ans
- ☒ 1. Central Survey Organisation
 - ☒ 2. National Sample Survey Organisation
 - ☒ 3. Central Sample Survey Organisation
 - ☒ 4. National Survey Organisation

Question ID : 9895808475
Chosen Option : 3

Q.3
5 Who directed the film 'Bhuvan Shome'?

- Ans
- ☒ 1. Satyajit Ray
 - ☒ 2. Ritwik Ghatak
 - ☒ 3. Mrinal Sen
 - ☒ 4. Buddhadeb Dasgupta

Question ID : 9895808472
Chosen Option : 2

Q.3
6 Tooth decay starts when the pH of our mouth is:

- Ans
- ☒ 1. higher than 7.5
 - ☒ 2. higher than 5.5
 - ☒ 3. higher than 6.5
 - ☒ 4. lower than 5.5

Question ID : 9895808479
Chosen Option : 1

Q.3
7 In which state is Vishwa Mitra Ka Tila situated?

- Ans
- ☒ 1. Haryana
 - ☒ 2. Punjab
 - ☒ 3. Uttaranchal
 - ☒ 4. Rajasthan

Question ID : 9895808466

Chosen Option : 2

Q.3
8 Any section of citizens with a distinct language or culture have a right to _____ it.

- Ans
- ☒ 1. Annhilate
 - ☒ 2. Squander
 - ☒ 3. Conserve
 - ☒ 4. Uproot

Question ID : 9895808478
Chosen Option : 2

Q.3
9 The Imperial Forest Research Institute was set up in 1906 in:

- Ans
- ☒ 1. Bangalore
 - ☒ 2. Dehradun
 - ☒ 3. Almora
 - ☒ 4. Bhopal

Question ID : 9895808488
Chosen Option : 2

Q.4
0 On which river is the Hirakud Dam situated?

- Ans
- ☒ 1. Kaveri
 - ☒ 2. Mahanadi
 - ☒ 3. Sutlej
 - ☒ 4. Bhagirathi

Question ID : 9895808486
Chosen Option : 3

Q.4
1 Who was the world's first woman amputee to climb Mount Vinson?

- Ans
- ☒ 1. Arunima Sinha
 - ☒ 2. Santosh Yadav
 - ☒ 3. Premlata Agarwal
 - ☒ 4. Bachendri Pal

Question ID : 9895808469
Chosen Option : 4

Q.4
2 The magazine in which Mahatma Gandhi mentioned what he wanted the Constitution to do is:

- Ans
- ☒ 1. Young India
 - ☒ 2. Oriental Magazine
 - ☒ 3. Navajivan
 - ☒ 4. Harijan

Question ID : 9895808477
Chosen Option : 2

Q.4
3 Which award is given for contribution towards national integration?

- Ans ☒ 1. Sardar Patel Award
☐ 2. Tilak Award
☐ 3. Gita Chopra Award
☐ 4. Rajiv Gandhi Award

Question ID : 9895808470
Chosen Option : 1

Q.4
4 A _____ is a formal document containing an order of the court to the Government issued only by the High Court or the Supreme Court of India.

- Ans ☒ 1. Writ
☐ 2. Covenant
☐ 3. Claim
☐ 4. Summon

Question ID : 9895808476
Chosen Option : 4

Q.4
5 Who has been conferred with the rank of the Commander of the Order of the British Empire in 2018?

- Ans ☐ 1. Rajinder Rai
☒ 2. Nitin Sawhney
☐ 3. Talvin Singh
☐ 4. Tjinder Singh

Question ID : 9895808467
Chosen Option : 3

Q.4
6 Who was the first one to use a glass prism to obtain the spectrum of sunlight?

- Ans ☐ 1. Albert Einstein
☐ 2. James Clerk Maxwell
☒ 3. Isaac Newton
☐ 4. Hans Christian Oersted

Question ID : 9895808481
Chosen Option : 3

Q.4
7 When goods are produced by exploiting natural resources, it is an activity associated with:

- Ans ☒ 1. primary sector
☐ 2. service sector
☐ 3. secondary sector
☐ 4. tertiary sector

Question ID : 9895808474
Chosen Option : 3

Q.4
8 A system in which local farmers were allowed to cultivate temporarily within a plantation is known as:

Ans

- ☐ 1. intensive cultivation
- ☒ 2. taungya cultivation
- ☐ 3. shifting cultivation
- ☐ 4. extensive cultivation

Question ID : 9895808489
Chosen Option : 1

Q.4
9 The book "In my mother's house" is written by _____.

- Ans ☐ 1. Nihal De Silva
- ☐ 2. Rajiva Wijesinha
- ☒ 3. Sharika Thiranagama
- ☐ 4. Shyam Selvadurai

Question ID : 9895808471
Chosen Option : 4

Q.5
0 Which goods from India dominated the international textile markets before the age of mechanised industries?

- Ans ☐ 1. Woollen goods
- ☒ 2. Silk and cotton goods
- ☐ 3. Silk goods
- ☐ 4. Cotton goods

Question ID : 9895808487
Chosen Option : 4

Q.5
1 The length and breadth of a painting is 15 cm and 10 cm respectively. A 1 cm wide boarder is made around the painting.
What is the area of boarder?

- Ans ☐ 1. 45 sq cm.
- ☐ 2. 60 sq cm.
- ☒ 3. 54 sq cm.
- ☐ 4. 16 sq cm.

Question ID : 9895808685
Chosen Option : 3

Q.5
2 A student gets 60% of the maximum marks. If he gets 50% more than the passing mark, then the passing mark is-what percentage of the maximum marks?

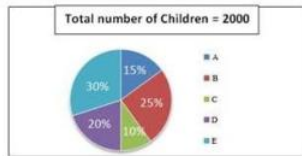
- Ans ☐ 1. 37.5%
- ☐ 2. 50%
- ☒ 3. 40%
- ☐ 4. 75%

Question ID : 9895808672
Chosen Option : 1

Q.5
3

Study the following pie-charts carefully to answer the questions.

Percentage break-up of number of children in five different villages



If 70 percent children from village D go to school then what is the number of children attending school from village D ?

- Ans
- ☒ 1. 360
 - ☒ 2. 400
 - ☒ 3. 320
 - ☒ 4. 280

Question ID : 9895808688

Chosen Option : 4

Q.5 A frog was, at the bottom of a 80 m deep well. It attempted to come out of it by jumping. In each jump it covered 1.15 m but slipped down by 0.75 m. The number of jumps after which it would out of the well is:

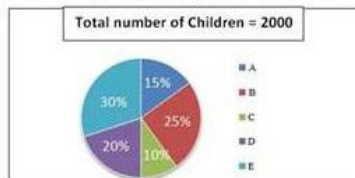
- Ans
- ☒ 1. 199
 - ☒ 2. 200
 - ☒ 3. 198
 - ☒ 4. 201

Question ID : 9895808680

Chosen Option : 2

Q.5 Study the following pie-charts carefully to answer the questions.

Percentage break-up of number of children in five different villages



What is the respective ratio of total number of children from village A to village C ?

- Ans
- ☒ 1. 3:5
 - ☒ 2. 2:3
 - ☒ 3. 1:3
 - ☒ 4. 3:2

Question ID : 9895808687

Chosen Option : 1

Q.5 Two bottles A and B contain diluted acid. In bottle A, the amount of water is double the amount of acid while in bottle B, the amount of acid is 3 times that of water. How much mixture (in litres) should be taken from each bottle A and B respectively in order to prepare 5 liters diluted acid containing equal amount of acid and water?

- Ans
- ☒ 1. 1,4
 - ☒ 2. 4,1
 - ☒ 3. 3,2
 - ☒ 4. 2,3

Question ID : 9895808676
Chosen Option : 3

Q.5 Which of the following schemes of computing interest yields the maximum interest for a year?

7

Ans ☒ 1. Interest compounded monthly at 2% per month.

☐ 2.

Interest compounded every six months at 12% for every-6 months

☐ 3. Interest compounded per quarter 6% per quarter.

☐ 4. Interest compounded every year at 24%.p.a.

Question ID : 9895808679
Chosen Option : 2

Q.5 In how many years will a sum of money become sixteen times itself at 30% p.a. simple interest?

8

Ans ☐ 1. 30

☒ 2. 50

☐ 3. 40

☐ 4. 25

Question ID : 9895808678
Chosen Option : 2

Q.5 The average of 50 number is 36. If two numbers, namely 63 and 65 are discarded, the average of the remaining numbers is (Correct to two decimal places)

9

Ans ☐ 1. 32.50

☐ 2. 36.50

☐ 3. 33.75

☒ 4. 34.83

Question ID : 9895808668
Chosen Option : 2

Q.6 What should come in place of question mark (?) in the following questions?

0

$$383 \div 25 \times 2.5 + 12 = ?$$

Ans ☐ 1. 124.24

☐ 2. 68.30

☒ 3. 50.30

☐ 4. 222.14

Question ID : 9895808666
Chosen Option : 4

Q.6 Two trains running in opposite directions cross a man standing on the platform in 25 seconds and 32 seconds respectively and they cross each other in 30 seconds. The ratio of their speed is:

1

Ans ☐ 1. 5 : 6

☐ 2. 1 : 3

☐ 3. 4 : 3

✓ 4. 2 : 5

Question ID : 9895808682
Chosen Option : 1

Q.6
2 The smallest perfect square number divisible by each of 6 and 12 is:

- Ans
- ✗ 1. 144
 - ✗ 2. 196
 - ✓ 3. 36
 - ✗ 4. 108

Question ID : 9895808665
Chosen Option : 2

Q.6
3 The numbers of visitors every hour in a shop from 1 p.m. to 8 p.m. on Monday were recorded as 7, 10, 15, 22, 6, 4 and 13. The arithmetic mean of visitors is:

- Ans
- ✗ 1. 13
 - ✓ 2. 11
 - ✗ 3. 10
 - ✗ 4. 9

Question ID : 9895808671
Chosen Option : 2

Q.6
4 What is the perpendicular distance (in cm) between the parallel sides of a trapezium whose area is 108 sq cm. and the lengths of the parallel sides are 9 cm and 36 cm?

- Ans
- ✗ 1. 7 cm
 - ✗ 2. 3.6 cm
 - ✗ 3. 6 cm
 - ✓ 4. 4.8 cm

Question ID : 9895808684
Chosen Option : 3

Q.6
5 A dealer allows his customers a discount of 25% and still gains 25%. If an article costs ₹1600 to the dealer, then its marked price (nearest to one rupee) is:

- Ans
- ✗ 1. ₹2000
 - ✓ 2. ₹2667
 - ✗ 3. ₹2050
 - ✗ 4. ₹2600

Question ID : 9895808670
Chosen Option : 1

Q.6
6 The average age of Indian cricket team playing in the Capetown test match is 28 years. If the average age of 10 player besides the captain is 27.8 years, then the age of the Captain is:

- Ans
- ✗ 1. 31 Years
 - ✓ 2. 30 Years
 - ✗ 3. 26 Years
 - ✗ 4. 25 Years

Question ID : 9895808669
Chosen Option : 1

Q.6
7 Rohit and Dinesh are 64 km apart. Rohit can walk at a speed of 15 km/hr and Dinesh at the speed of 17 km/hr. In how many hours will they meet if they are travelling towards each other?

- Ans
- ☒ 1. 1.5 hour
 - ☒ 2. 2.5 hour
 - ☒ 3. 3 hour
 - ☒ 4. 2 hour

Question ID : 9895808683
Chosen Option : 2

Q.6
8 What should come in place of question mark (?) in the following questions?

$$1.5 \times 78 \div 0.5 = ?$$

- Ans
- ☒ 1. 234
 - ☒ 2. 238
 - ☒ 3. 216
 - ☒ 4. 243

Question ID : 9895808667
Chosen Option : 1

Q.6
9 A can do a certain job in 12 days. B is 60% more efficient than A. To do the same job B alone would take?

- Ans
- ☒ 1. 7 days
 - ☒ 2. $7\frac{1}{2}$ days
 - ☒ 3. 10 days
 - ☒ 4. 8 days

Question ID : 9895808681
Chosen Option : 4

Q.7
0 Oranges are purchased at the rate of 7 oranges for ₹3. At what price one hundred oranges should be sold so that the profit is 33%?

- Ans
- ☒ 1. ₹58
 - ☒ 2. ₹60
 - ☒ 3. ₹56
 - ☒ 4. ₹57

Question ID : 9895808674
Chosen Option : 2

Q.7
1 The third proportional to 9 and 15 is:

- Ans
- ☒ 1. 27
 - ☒ 2. 25

- ☒ 3. 36
- ☒ 4. 18

Question ID : 9895808675
Chosen Option : 3

Q.7
2 Yashwant buys candies at 15 for ₹40 and sells them at 30 for ₹50. What is his gain or loss percent?

- Ans ☒ 1. 37.5% Loss
- ☒ 2. 37.5% Profit
- ☒ 3. 36 % Profit
- ☒ 4. 40 % Loss

Question ID : 9895808673
Chosen Option : 3

Q.7
3 Find the total surface area of a cube whose volume is 64 cm^3 .

- Ans ☒ 1. 84 cm^2
- ☒ 2. 64 cm^2
- ☒ 3. 16 cm^2
- ☒ 4. 96 cm^2

Question ID : 9895808686
Chosen Option : 3

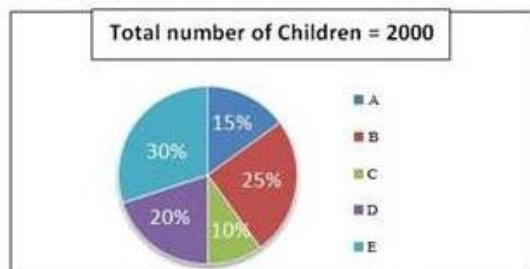
Q.7
4 If $\frac{a}{b} = \frac{7}{9}$, $\frac{b}{c} = \frac{3}{5}$ then the value of a : b : c is

- Ans ☒ 1. 7:3:15
- ☒ 2. 21:27:42
- ☒ 3. 7:9:5
- ☒ 4. 7:9:15

Question ID : 9895808677
Chosen Option : 3

Q.7
5 Study the following pie-charts carefully to answer the questions.

Percentage break-up of number of children in five different villages



What is the total number of children in villages B and E ?

- Ans ☒ 1. 1100
- ☒ 2. 1400

☒ 3. 1200

☒ 4. 1145

Question ID : 9895808689
Chosen Option : 1

Section : English Language

Q.1 Select the most appropriate word to fill in the blank.

Some tribes have rich and unique cultural traditions, _____ their own language.

- Ans
- ☒ 1. including
 - ☒ 2. inclusive
 - ☒ 3. include
 - ☒ 4. included

Question ID : 9895808747
Chosen Option : --

Q.2 Select the antonym of the given word.

FACILITATE

- Ans
- ☒ 1. Aid
 - ☒ 2. Hinder
 - ☒ 3. Comfort
 - ☒ 4. Ease

Question ID : 9895808758
Chosen Option : --

Q.3 Identify the segment in the sentence which contains the grammatical error from the given options.

People's demand are ever growing but the availability of land is limited.

- Ans
- ☒ 1. ever growing
 - ☒ 2. is limited
 - ☒ 3. People's demand
 - ☒ 4. availability of

Question ID : 9895808742
Chosen Option : --

Q.4 Select the most appropriate word to fill in the blank.

The unemployment problem, as _____ by people, is not severe among the educated women.

- Ans
- ☒ 1. solved
 - ☒ 2. demanded
 - ☒ 3. decided
 - ☒ 4. perceived

Question ID : 9895808765
Chosen Option : --

Q.5 Select the meaning of the given idiom.

Call it a day

- Ans
- ☒ 1. a nightmare
 - ☒ 2. an unending dream
 - ☒ 3. name a day
 - ☒ 4. time to quit

Question ID : 9895808759
Chosen Option : --

Q.6 Select the synonym of the given word.

Valiant

- Ans
- ☒ 1. Frightened
 - ☒ 2. Enthusiastic
 - ☒ 3. Scared
 - ☒ 4. Courageous

Question ID : 9895808756
Chosen Option : --

Q.7 Select the word which means the same as the group of words given.

One who can easily be deceived/cheated

- Ans
- ☒ 1. Modest
 - ☒ 2. Veteran
 - ☒ 3. Gullible
 - ☒ 4. Prudent

Question ID : 9895808762
Chosen Option : --

Q.8 Select the most appropriate option to substitute the underlined segment in the given sentence. If there is no need to substitute it, select No substitution required.

Amoeba is a microscopic single-celled organism found in pond water.

- Ans
- ☒ 1. organism found with
 - ☒ 2. organisms finds in
 - ☒ 3. No substitution required
 - ☒ 4. organisms find in

Question ID : 9895808746
Chosen Option : --

Q.9 Identify the segment in the sentence which contains the grammatical error from the given options.

It was in the oceans that life begins almost 3.5 billion years ago.

- Ans
- ☒ 1. years ago

- ☒ 2. It was
- ☐ 3. life begins
- ☐ 4. in the oceans

Question ID : 9895808743
Chosen Option : --

Q.1 Select the most appropriate option to substitute the underlined segment in the given sentence. If there is no need to substitute it, select No substitution required.

Water and minerals presented to the soil are absorbed by the roots.

- Ans ☐ 1. No substitution required
- ☐ 2. present for the soil
- ☐ 3. presented at the soil
- ☒ 4. present in the soil

Question ID : 9895808744
Chosen Option : --

Comprehension:

In the following passage some words have been deleted. Fill in the blanks with the help of the alternatives given. Select the most appropriate option for each number.

Advertisements (1) _____ our attention to various products and describe (2) _____ positively so that we become (3) _____ in buying them. Advertising is all (4) _____ building brands. At a very basic level, 'branding' means (5) _____ a product with a particular name or sign.

SubQuestion No : 11

Q.1 Select the most appropriate option that will fill in the blank number 1.

- Ans ☐ 1. pull
- ☐ 2. turn
- ☐ 3. draw
- ☒ 4. hook

Question ID : 9895808750
Chosen Option : --

Comprehension:

In the following passage some words have been deleted. Fill in the blanks with the help of the alternatives given. Select the most appropriate option for each number.

Advertisements (1) _____ our attention to various products and describe (2) _____ positively so that we become (3) _____ in buying them. Advertising is all (4) _____ building brands. At a very basic level, 'branding' means (5) _____ a product with a particular name or sign.

SubQuestion No : 12

Q.1
2

Select the most appropriate option that will fill in the blank number 2.

- Ans
- ☒ 1. themselves
 - ☒ 2. them
 - ☒ 3. they
 - ☒ 4. it

Question ID : 9895808751

Chosen Option : --

Comprehension:

In the following passage some words have been deleted. Fill in the blanks with the help of the alternatives given. Select the most appropriate option for each number.

Advertisements (1) _____ our attention to various products and describe (2) _____ positively so that we become (3) _____ in buying them. Advertising is all (4) _____ building brands. At a very basic level, 'branding' means (5) _____ a product with a particular name or sign.

SubQuestion No : 13

- Q.1
3 Select the most appropriate option that will fill in the blank number 3.

- Ans
- ☒ 1. biased
 - ☒ 2. touched
 - ☒ 3. partial
 - ☒ 4. interested

Question ID : 9895808752

Chosen Option : --

Comprehension:

In the following passage some words have been deleted. Fill in the blanks with the help of the alternatives given. Select the most appropriate option for each number.

Advertisements (1) _____ our attention to various products and describe (2) _____ positively so that we become (3) _____ in buying them. Advertising is all (4) _____ building brands. At a very basic level, 'branding' means (5) _____ a product with a particular name or sign.

SubQuestion No : 14

- Q.1
4 Select the most appropriate option that will fill in the blank number 4.

- Ans
- ☒ 1. in
 - ☒ 2. across
 - ☒ 3. for
 - ☒ 4. about

Question ID : 9895808753

Chosen Option : --

Comprehension:

In the following passage some words have been deleted. Fill in the blanks with the help of the alternatives given. Select the most appropriate option for each number.

Advertisements (1) _____ our attention to various products and describe (2) _____ positively so that we become (3) _____ in buying them. Advertising is all (4) _____ building brands. At a very basic level, 'branding' means (5) _____ a product with a particular name or sign.

SubQuestion No : 15

Q.1
5 Select the most appropriate option that will fill in the blank number 5.

- Ans
- ☒ 1. sticking
 - ☒ 2. stamping
 - ☒ 3. posing
 - ☒ 4. molding

Question ID : 9895808754
Chosen Option : --

Q.1
6 Select the wrongly spelt word.

- Ans
- ☒ 1. Neccessary
 - ☒ 2. Discipline
 - ☒ 3. Consensus
 - ☒ 4. Occasion

Question ID : 9895808763
Chosen Option : --

Q.1
7 Select the most appropriate word to fill in the blank.

_____ many people lived in the cities, others living in the countryside grew crops.

- Ans
- ☒ 1. Among
 - ☒ 2. About
 - ☒ 3. While
 - ☒ 4. Whether

Question ID : 9895808748
Chosen Option : --

Q.1
8 Select the meaning of the given idiom.

Piping hot

- Ans
- ☒ 1. Lukewarm
 - ☒ 2. Extremely angry
 - ☒ 3. Steaming hot
 - ☒ 4. Not too hot

Question ID : 9895808760
Chosen Option : --

Q.1
9 Select the wrongly spelt word.

- Ans
- ☒ 1. Miniscule
 - ☒ 2. Milenium
 - ☒ 3. Mischievous
 - ☒ 4. Minimum

Question ID : 9895808764
Chosen Option : --

Q.2
0 Select the most appropriate option to substitute the underlined segment in the given sentence. If there is no need to substitute it, select No substitution required.

Normally bacteria are present in our mouth but it is not harmful to us.

- Ans
- ☒ 1. No substitution required
 - ☒ 2. and it is not
 - ☒ 3. but they are not
 - ☒ 4. so they are not

Question ID : 9895808745
Chosen Option : --

Q.2
1 Identify the segment in the sentence which contains the grammatical error from the given options.

Time and technology are two important factors that which change substances into resources.

- Ans
- ☒ 1. Time and technology
 - ☒ 2. into resources
 - ☒ 3. two important factors
 - ☒ 4. that which change

Question ID : 9895808741
Chosen Option : --

Q.2
2 Select the most appropriate word to fill in the blank.

In his address to the villagers the minister _____ certain measures being taken for improving their quality of life.

- Ans
- ☒ 1. learnt
 - ☒ 2. highlighted
 - ☒ 3. staged
 - ☒ 4. stepped

Question ID : 9895808766
Chosen Option : --

Q.2
3 Select the word which means the same as the group of words given.

One who knows everything

- Ans
- ☒ 1. Omnipresent

- ✓ 2. Omniscient
✗ 3. Incredible
✗ 4. Omnipotent

Question ID : 9895808761
Chosen Option : --

Q.2
4 Select the antonym of the given word.

CRITICIZE

- Ans ✗ 1. Respect
✗ 2. Censure
✗ 3. Condemn
✓ 4. Commend

Question ID : 9895808757
Chosen Option : --

Q.2
5 Select the synonym of the given word.

REMORSE

- Ans ✓ 1. Regret
✗ 2. Delight
✗ 3. Joy
✗ 4. Solace

Question ID : 9895808755
Chosen Option : --

Section : Hindi Language

Q.1 दिए गए वाक्य में रेखांकित खंड को प्रतिस्थापित करने के लिए उपयुक्त विकल्प का चयन करें।

प्राचार्य महोदय ने उसे घर जाने की अनुमति प्रदान कर दी।

- Ans ✗ 1. अनुज्ञा
✗ 2. प्रज्ञा
✓ 3. आज्ञा
✗ 4. अवज्ञा

Question ID : 9895806973
Chosen Option : 3

Q.2 दिए गए वाक्य में रेखांकित खंड को प्रतिस्थापित करने के लिए उपयुक्त विकल्प का चयन करें।

विष्णु के अनेक अभिधान हैं।

- Ans ✓ 1. नाम
✗ 2. धाम
✗ 3. रूप
✗ 4. लीला

Question ID : 9895806972

Chosen Option : 1

Q.3 दिए गए शब्द का विलोम चुनें।

अल्पायु

- Ans
- ☒ 1. अजर
 - ☒ 2. दयालु
 - ☒ 3. दीर्घायु
 - ☒ 4. घायल

Question ID : 9895806986

Chosen Option : 3

Q.4 रिक्त स्थान को भरने के लिए उपयुक्त शब्द का चयन करें।

26 जनवरी का दिन हमारे देशवासियों के लिए _____ पर्व है।

- Ans
- ☒ 1. आध्यात्मिक
 - ☒ 2. धार्मिक
 - ☒ 3. राष्ट्रीय
 - ☒ 4. सामाजिक

Question ID : 9895806977

Chosen Option : 3

Q.5 दिए गए वाक्य का वह भाग ज्ञात करें जिसमें कोई त्रुटि है।

मनुष्य का आवश्यकताओं के लिए तो बहुत कुछ है परंतु उसके लोभ के लिए कुछ भी नहीं है।

- Ans
- ☒ 1. तो बहुत कुछ है
 - ☒ 2. कुछ भी नहीं है।
 - ☒ 3. परंतु उसके लोभ के लिए
 - ☒ 4. मनुष्य का आवश्यकताओं के लिए

Question ID : 9895806970

Chosen Option : 4

Q.6 सही वर्तनी वाले शब्द का चयन करें।

- Ans
- ☒ 1. अभियस्थ
 - ☒ 2. अभ्यस्त
 - ☒ 3. अभयस्थ
 - ☒ 4. अभयस्थ

Question ID : 9895806994

Chosen Option : 2

Q.7

दिये गये वाक्यांश के लिए एक शब्द दीजिये।

व्याकरण जानने वाला

Ans

- ✓ 1. वैयाकरण
 ✗ 2. दार्शनिक
 ✗ 3. आचार्य
 ✗ 4. काव्यशास्त्री

Question ID : 9895806991
 Chosen Option : 1

Q.8 'कमल' का पर्यायवाची शब्द है-

Ans

- ✓ 1. जलज
 ✗ 2. फूल
 ✗ 3. सुरभि
 ✗ 4. कनक

Question ID : 9895806988
 Chosen Option : 2

Q.9 रिक्त स्थान को भरने के लिए उपयुक्त शब्द का चयन करें।

बड़े दुख की बात है _____ आप जैसे स्नेही मित्र के घर भी मैं विवाह के अवसर पर न आ सका।

Ans

- ✗ 1. हम
 ✗ 2. मैं
 ✗ 3. आत्मीय
 ✓ 4. कि

Question ID : 9895806975
 Chosen Option : 4

Q.10 दिए गए शब्द का विलोम चुनें।

आत्मघात

Ans

- ✓ 1. आत्मरक्षा
 ✗ 2. आत्मज्ञान
 ✗ 3. आत्मबल
 ✗ 4. आत्मविश्वास

Question ID : 9895806985
 Chosen Option : 4

Comprehension:

निम्नलिखित गद्यांश के रिक्त स्थानों की पूर्ति गद्यांश के नीचे दिए गए प्रश्नों के अनुसार कीजिए-

विश्व पर्यावरण दिवस हर साल 5 जून को पूरे विश्व में पर्यावरण सुरक्षा हेतु जनता में _____ (1) का प्रसार करने के लिए मनाया जाता है। भारत सरकार पर्यावरण को सुधारने के लिए काफी अभियान _____ (2) है। हाल ही में स्वच्छ भारत _____ (3) शुरू किया गया है। सरकार के साथ साथ _____ (4) आदमी को भी प्रण लेना चाहिए की वो वातावरण को साफ़ रखे। छोटी सी _____ (5) से हम अपने और अपने आस-पास के वातावरण को साफ़ रख सकते हैं।

SubQuestion No : 11

Q.1
1 गद्यांश में संकेतित रिक्त स्थान (1) के लिए उपयुक्त शब्द होगा।

- Ans ☒ 1. जागरूकता
☒ 2. स्वाधीनता
☒ 3. समानता
☒ 4. अज्ञानता

Question ID : 9895806980
Chosen Option : 1

Comprehension:

निम्नलिखित गद्यांश के रिक्त स्थानों की पूर्ति गद्यांश के नीचे दिए गए प्रश्नों के अनुसार कीजिए-

विश्व पर्यावरण दिवस हर साल 5 जून को पूरे विश्व में पर्यावरण सुरक्षा हेतु जनता में _____ (1) का प्रसार करने के लिए मनाया जाता है। भारत सरकार पर्यावरण को सुधारने के लिए काफी अभियान _____ (2) है। हाल ही में स्वच्छ भारत _____ (3) शुरू किया गया है। सरकार के साथ साथ _____ (4) आदमी को भी प्रण लेना चाहिए की वो वातावरण को साफ़ रखे। छोटी सी _____ (5) से हम अपने और अपने आस-पास के वातावरण को साफ़ रख सकते हैं।

SubQuestion No : 12

Q.1
2 गद्यांश में संकेतित रिक्त स्थान (2) के लिए उपयुक्त शब्द होगा।

- Ans ☒ 1. चलाती
☒ 2. मनाती
☒ 3. बताती
☒ 4. सजाती

Question ID : 9895806981
Chosen Option : 1

Comprehension:

निम्नलिखित गद्यांश के रिक्त स्थानों की पूर्ति गद्यांश के नीचे दिए गए प्रश्नों के अनुसार कीजिए-

विश्व पर्यावरण दिवस हर साल 5 जून को पूरे विश्व में पर्यावरण सुरक्षा हेतु जनता में _____ (1) का प्रसार करने के लिए मनाया जाता है। भारत सरकार पर्यावरण को सुधारने के लिए काफी अभियान _____ (2) है। हाल ही में स्वच्छ भारत _____ (3) शुरू किया गया है। सरकार के साथ साथ _____ (4) आदमी को भी प्रण लेना चाहिए की वो वातावरण को साफ़ रखे। छोटी सी _____ (5) से हम अपने और अपने आस-पास के वातावरण को साफ़ रख सकते हैं।

SubQuestion No : 13

Q.1
3 गद्यांश में संकेतित रिक्त स्थान (3) के लिए उपयुक्त शब्द होगा।

- Ans
- ☒ 1. उत्सव
 - ☒ 2. अभिमान
 - ☒ 3. मनोरंजन
 - ☒ 4. अभियान

Question ID : 9895806982
Chosen Option : 4

Comprehension:

निम्नलिखित गद्यांश के रिक्त स्थानों की पूर्ति गद्यांश के नीचे दिए गए प्रश्नों के अनुसार कीजिए-

विश्व पर्यावरण दिवस हर साल 5 जून को पूरे विश्व में पर्यावरण सुरक्षा हेतु जनता में _____ (1) का प्रसार करने के लिए मनाया जाता है। भारत सरकार पर्यावरण को सुधारने के लिए काफी अभियान _____ (2) है। हाल ही में स्वच्छ भारत _____ (3) शुरू किया गया है। सरकार के साथ साथ _____ (4) आदमी को भी प्रण लेना चाहिए की वो वातावरण को साफ़ रखे। छोटी सी _____ (5) से हम अपने और अपने आस-पास के वातावरण को साफ़ रख सकते हैं।

SubQuestion No : 14

Q.1
4 गद्यांश में संकेतित रिक्त स्थान (4) के लिए उपयुक्त शब्द होगा।

- Ans
- ☒ 1. आम
 - ☒ 2. गरीब
 - ☒ 3. अमीर
 - ☒ 4. खास

Question ID : 9895806983
Chosen Option : 4

Comprehension:

निम्नलिखित गद्यांश के रिक्त स्थानों की पूर्ति गद्यांश के नीचे दिए गए प्रश्नों के अनुसार कीजिए-

विश्व पर्यावरण दिवस हर साल 5 जून को पूरे विश्व में पर्यावरण सुरक्षा हेतु जनता में _____ (1) का प्रसार करने के लिए मनाया जाता है। भारत सरकार पर्यावरण को सुधारने के लिए काफी अभियान _____ (2) है। हाल ही में स्वच्छ भारत _____ (3) शुरू किया गया है। सरकार के साथ साथ _____ (4) आदमी को भी प्रण लेना चाहिए की वो वातावरण को साफ़ रखे। छोटी सी _____ (5) से हम अपने और अपने आस-पास के वातावरण को साफ़ रख सकते हैं।

SubQuestion No : 15

Q.1 5 गद्यांश में संकेतित रिक्त स्थान (5) के लिए उपयुक्त शब्द होगा।

- Ans
- ☒ 1. चहल
 - ☒ 2. पहल
 - ☒ 3. टहल
 - ☒ 4. प्रयास

Question ID : 9895806984
Chosen Option : 4

Q.1 6 दिए गए वाक्य का वह भाग ज्ञात करें जिसमें कोई त्रुटि है।
मैं आवश्यक परिस्थितियों की उत्पन्न हो जाने के कारण बैठक में उपस्थित नहीं हो सकता।

- Ans
- ☒ 1. परिस्थितियों की उत्पन्न हो जाने के कारण
 - ☒ 2. बैठक में
 - ☒ 3. उपस्थित नहीं हो सकता।
 - ☒ 4. मैं आवश्यक

Question ID : 9895806969
Chosen Option : 3

Q.1 7 दिए गए शब्द के पर्यायवाची शब्द का चयन करें।

मृग

- Ans
- ☒ 1. हिरण
 - ☒ 2. पवन
 - ☒ 3. बादल
 - ☒ 4. हाथी

Question ID : 9895806987
Chosen Option : 3

Q.1 8 'मैदान मारना' मुहावरे का अर्थ है-

- Ans
- ☒ 1. संघर्ष करना
 - ☒ 2. भाग जाना
 - ☒ 3. जमीन नापना
 - ☒ 4. लड़ाई जीतना

Question ID : 9895806990
Chosen Option : 4

Q.1
9 'बट्टा लगाना' मुहावरे का अर्थ है-

- Ans
- ☒ 1. सम्मान होना
 - ☒ 2. झूठ बोलना
 - ☒ 3. अपमान होना
 - ☒ 4. कलंक लगाना

Question ID : 9895806989
Chosen Option : 4

Q.2
0 रिक्त स्थान को भरने के लिए उपयुक्त शब्द का चयन करें।

अध्ययन से ज्ञान बढ़ता है, आर्थिक शक्ति मजबूत होती है _____ यश प्राप्त होता है।

- Ans
- ☒ 1. बहुत
 - ☒ 2. और
 - ☒ 3. पर्याप्त
 - ☒ 4. ढेर-सा

Question ID : 9895806976
Chosen Option : 2

Q.2
1 रिक्त स्थान को भरने के लिए उपयुक्त शब्द का चयन करें।

गोपाल आजकल चित्रकला का _____ कर रहा है।

- Ans
- ☒ 1. प्रयास
 - ☒ 2. व्यायाम
 - ☒ 3. अभ्यास
 - ☒ 4. आयास

Question ID : 9895806978
Chosen Option : 3

Q.2
2 दिए गए वाक्य में रेखांकित खंड को प्रतिस्थापित करने के लिए उपयुक्त विकल्प का चयन करें।

जीने का कुछ तो उद्देश्य होना चाहिए।

- Ans
- ☒ 1. प्रबोधन
 - ☒ 2. साधन
 - ☒ 3. प्रयोजन
 - ☒ 4. प्रवर्तन

Question ID : 9895806974
Chosen Option : 2

Q.2
3 'एक उदर से जन्म' लेने वालों के लिए एक शब्द प्रयुक्त होता है-

- Ans
- ☒ 1. समान
 - ☒ 2. उत्तम
 - ☒ 3. सहोदर
 - ☒ 4. पेट

Question ID : 9895806992
Chosen Option : 3

Q.2
4 दिए गए वाक्य का वह भाग ज्ञात करें जिसमें कोई त्रुटि है।

तुष्टीकरण की नीति अपनाकर न व्यक्ति आगे बढ़ सकती है और न राष्ट्र।

- Ans
- ☒ 1. अपनाकर
 - ☒ 2. तुष्टीकरण की नीति
 - ☒ 3. और न राष्ट्र।
 - ☒ 4. न व्यक्ति आगे बढ़ सकती है

Question ID : 9895806971
Chosen Option : 4

Q.2
5 सही वर्तनी वाले शब्द का चयन करें।

- Ans
- ☒ 1. सैनीक
 - ☒ 2. सेनिक
 - ☒ 3. सैनिक
 - ☒ 4. सेनीक

Question ID : 9895806993
Chosen Option : 3

Constable (GD) in CAPFs, NIA, SSF and Rifleman (GD) in Assam Rifles Examination, 2018

| | |
|------------------|--------------------|
| Roll No. : | |
| Registration No. | |
| Name : | |
| Exam Venue : | |
| Exam Time : | 12:30 PM - 2:00 PM |
| Exam Date : | 08/03/2019 |

Section : General Section

Q.1 The statements below are followed by two conclusions labeled I and II. Assuming that the information in the statements is true, even if it appears to be at variance with generally established facts, decide which conclusion(s) logically and definitely follow(s) from the information given in the statements.

Statements:

- I. All cars are tigers.
- II. Some children are tigers.

Conclusions:

- I. Some cars are children.
- II. Some children are cars.

- Ans**
- ☒ 1. Only conclusion I follows
 - ☒ 2. Neither I nor II follows
 - ☒ 3. Either I or II follows
 - ☒ 4. Only conclusion II follows

Question ID : 9895808880
Chosen Option : 2

Q.2 Select the correct option that will fill in the blank and complete the series.

RQS, SOQ, TMO, _____

- Ans**
- ☒ 1. XCV
 - ☒ 2. SMN
 - ☒ 3. UKM
 - ☒ 4. ULP

Question ID : 9895808868
Chosen Option : --

Q.3 Select the correct option that will fill in the blank and complete the series.

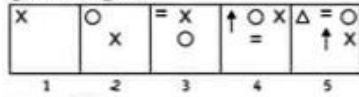
35, 42, 33, 40, 31, 38, _____

- Ans**
- ☒ 1. 31
 - ☒ 2. 33
 - ☒ 3. 29
 - ☒ 4. 35

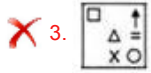
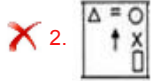
Question ID : 9895808881
Chosen Option : 3

Q.4 Choose the option which completes the given figure series.

Question Figures:

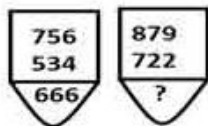


Ans



Question ID : 9895808887
Chosen Option : 4

Q.5 Find the missing number from the below options.



Ans

✗ 1. 482

✗ 2. 571

✗ 3. 562

✓ 4. 471

Question ID : 9895808885
Chosen Option : 1

Q.6 Select the option that is related to the third term in the same way as the second term is related to the first term.

RA : IZ :: SQ : ?

Ans

✗ 1. OT

✓ 2. HJ

✗ 3. RS

✗ 4. XC

Question ID : 9895808873
Chosen Option : 1

Q.7 Four options have been given out of which three are alike in some manner, while one is different. Choose the odd one.

Ans

✗ 1. 10 - 33

✓ 2. 8 - 19

✗ 3. 9 - 30

✗ 4. 7 - 24

Question ID : 9895808884
Chosen Option : 4

Q.8

Seven children A, B, C, D, E, F and G are standing in a row. G is to the right of D and to the left of B. A is on the right of C. A and D have one child between them. F is second to the right of G. D and F have two children between them.

Who is on the extreme right?

Ans

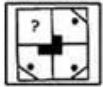
- ☒ 1. G
- ☒ 2. F
- ☒ 3. E
- ☒ 4. B

Question ID : 9895808877

Chosen Option : 4

Q.9 Which of the following answer figure will complete the given figure?

Question Figure:



Ans

- ☒ 1.
- ☒ 2.
- ☒ 3.
- ☒ 4.

Question ID : 9895808888

Chosen Option : 4

Q.1 A piece of paper is folded and cut as shown below in the question figure. From the given answer figures, indicate how it will appear when opened?

Question figures:



Ans

- ☒ 1.
- ☒ 2.
- ☒ 3.
- ☒ 4.

Question ID : 9895808891

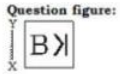
Chosen Option : 3

Q.1 In a certain code, SAMOA is coded as QZMPC, then how is GAMER coded in the same way?

- Ans**
- ☒ 1. EZMFU
 - ☒ 2. EZMTF
 - ☒ 3. EZTMF
 - ☒ 4. EZMFT

Question ID : 9895808874
Chosen Option : 4

Q.1 Choose the option that most closely resembles the mirror image of the given figure when mirror is placed at left side.



- Ans**
- ☒ 1. KB
 - ☒ 2. KB
 - ☒ 3. KB
 - ☒ 4. KB

Question ID : 9895808890
Chosen Option : 2

Q.1 The statements below are followed by two conclusions labeled I and II. Assuming that the information in the statements is true, even if it appears to be at variance with generally established facts, decide which conclusion(s) logically and definitely follow(s) from the information given in the statements.

Statements:

- I. All Stems are flowers.
- II. Some flowers are trees.
- III. Some trees are leaves.

Conclusions:

- I. Some stems are trees.
- II. Some flowers are leaves

- Ans**
- ☒ 1. Neither I nor II follows
 - ☒ 2. Only II follows
 - ☒ 3. Only I follows
 - ☒ 4. Both I and II follow

Question ID : 9895808879
Chosen Option : 4

Q.1 Four words have been given out of which three are alike in some manner, while one is different. Choose the odd one.

- Ans**
- ☒ 1. Kilometer
 - ☒ 2. Millimeter
 - ☒ 3. Ammeter
 - ☒ 4. Decimeter

Question ID : 9895808870

Chosen Option : 3

Q.1 5 If 'U' means '-', 'W' means '÷', 'T' means '+', and 'V' means '×', then:

$$33 \text{ T } 77 \text{ U } 11 \text{ T } 1 = ?$$

Ans ☒ 1. 100

☐ 2. 101

☐ 3. 110

☐ 4. 200

Question ID : 9895808886

Chosen Option : 1

Q.1 6 Select the option that is related to the third term in the same way as the second term is related to the first term.

Wood : Carpenter :: Iron : _____

Ans ☐ 1. Goldsmith

☐ 2. Tailor

☐ 3. Farmer

☒ 4. Blacksmith

Question ID : 9895808871

Chosen Option : 1

Q.1 7 Four letter clusters have been given out of which three are alike in some manner, while one is different. Choose the odd one.

Ans ☒ 1. LJKK

☐ 2. KLOI

☐ 3. STUO

☐ 4. BCIE

Question ID : 9895808869

Chosen Option : 1

Q.1 8 In a car exhibition, seven cars of seven different companies viz. Car01, Car02, Car03, Car04, Car05, Car06 and Car07 were displayed in a row, facing north such that:

- I. Car01 was to the immediate right of Car07.
- II. Car07 was fourth to the right of Car03.
- III. Car04 was between Car02 and Car06.
- IV. Car03, which was third to the left of Car02, was at one of the ends.

Which of the following was the correct position of the Car05?

Ans ☐ 1. Between Car06 and Car07

☒ 2. Immediate right of Car01

☐ 3. Between Car02 and Car07

☐ 4. Immediate left of Car06

Question ID : 9895808876

Chosen Option : 3

Q.1 9 Select the option that is related to the Third term in the same way as the second term is related to the first term.

57 : 6 :: 97 : ?

Ans ☐ 1. 5

☐ 2. 7

✗ 3. 9

✓ 4. 8

Question ID : 9895808883
Chosen Option : 4

Q.2
0 In a row of men, Manish is 30th from the right and Kavita is 20th from the left. When they interchange their position, Manish becomes 35th from the right. What is the total number of men in the row?

Ans ✗ 1. 44

✓ 2. 54

✗ 3. 34

✗ 4. 45

Question ID : 9895808878
Chosen Option : 4

Q.2
1 Select the correct option that will fill in the blank and complete the series.

12, 26, 54, 110, 222, _____

Ans ✗ 1. 444

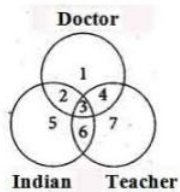
✓ 2. 446

✗ 3. 423

✗ 4. 452

Question ID : 9895808882
Chosen Option : 2

Q.2
2 In the following diagram, there are three circles. Study the diagram carefully and answer the given questions.



Find out those teachers who are doctors but not Indians.

Ans ✗ 1. 2

✗ 2. 5

✓ 3. 4

✗ 4. 7

Question ID : 9895808892
Chosen Option : 3

Q.2
3 Select the related word pair from the given alternatives.

Novel : Novelist : _____ : _____

Ans ✗ 1. Television : Journalist

✗ 2. Music : Dancing

✓ 3. Book : Author

✗ 4. Publications : Columnist

Question ID : 9895808872
Chosen Option : 3


Q.2 Choose the option figure in which the problem figure is hidden / embedded.

4

Question figure:



Ans



Question ID : 9895808889
Chosen Option : 3

Q.2 If SMILEY is written as 41.5 and CRY as 23, how will LAPPY be written?

5

Ans ✗ 1. 42

✗ 2. 30

✗ 3. 32

✓ 4. 35

Question ID : 9895808875
Chosen Option : 4

Q.2 What will happen when an egg is placed in a vinegar solution for 20-24 hours?

6

Ans ✓ 1. The egg shell will dissolve.

✗ 2. The egg shell will break.

✗ 3. The egg shell will shrink in size.

✗ 4. The egg shell will increase in size.

Question ID : 9895808935
Chosen Option : 1

Q.2 Who is the Chairman of the Rajya Sabha?

7

Ans ✗ 1. Leader of the Opposition

✗ 2. President

✗ 3. Prime Minister

✓ 4. Vice President

Question ID : 9895808929
Chosen Option : 2

Q.2 _____ is a dance performed in West Bengal for the Durga Puja at the time of Dussehra.

8

- Ans ☒ 1. Kikkli
☒ 2. Tera Tali
☒ 3. Dhunachi
☒ 4. Kolattam

Question ID : 9895808919
Chosen Option : 1

Q.2
9 Which of the following is a correct food chain?

- Ans ☒ 1. Grass-deer-snake-lion
☒ 2. Grass-mouse-snake-hawk
☒ 3. Grass-rabbit-snake-lion
☒ 4. Grass-rabbit-snake-hawk-lion

Question ID : 9895808936
Chosen Option : 1

Q.3
0 Which of the following is NOT a Kharif crop?

- Ans ☒ 1. Barley
☒ 2. Jowar
☒ 3. Maize
☒ 4. Bajra

Question ID : 9895808937
Chosen Option : 1

Q.3
1 Which among the following countries is the largest producer of tea?

- Ans ☒ 1. China
☒ 2. Turkey
☒ 3. India
☒ 4. Brazil

Question ID : 9895808938
Chosen Option : 4

Q.3
2 Who wrote the famous epic poem Padmavat?

- Ans ☒ 1. Amir Khusrow
☒ 2. Khwaja Moinuddin Chisti
☒ 3. Abul Fazal
☒ 4. Malik Muhammad Jayasi

Question ID : 9895808925
Chosen Option : 2

Q.3
3 Which of the following is the deepest landlocked port in India?

- Ans ☒ 1. Kandla
☒ 2. Vishakhapatnam

- ☒ 3. Mormugao
- ☒ 4. Thoothukudi

Question ID : 9895808939
Chosen Option : 2

Q.3
4 Mayur Nritya or Peacock dance is a folk dance from the Braj region of _____.

- Ans ☒ 1. Andhra Pradesh
- ☒ 2. Uttar Pradesh
- ☒ 3. Odisha
- ☒ 4. Bihar

Question ID : 9895808918
Chosen Option : 1

Q.3
5 The Constitution of India contained how many articles at the time of commencement?

- Ans ☒ 1. 393
- ☒ 2. 394
- ☒ 3. 395
- ☒ 4. 392

Question ID : 9895808930
Chosen Option : 3

Q.3
6 The world's first underground railway system was started in _____.

- Ans ☒ 1. London
- ☒ 2. Moscow
- ☒ 3. Washington
- ☒ 4. Paris

Question ID : 9895808942
Chosen Option : 3

Q.3
7 Spinach contains unusually high percentage of _____ acid as a natural product.

- Ans ☒ 1. Tartaric Acid
- ☒ 2. Lactic Acid
- ☒ 3. Citric Acid
- ☒ 4. Oxalic Acid

Question ID : 9895808932
Chosen Option : 2

Q.3
8 India's longest elevated road is situated in _____.

- Ans ☒ 1. Ghaziabad
- ☒ 2. Agra
- ☒ 3. Lucknow
- ☒ 4. Varanasi

Question ID : 9895808924
Chosen Option : 1

Q.3
9 Which of the following countries has a better Gross National Income (GNI) than India?

- Ans
- ☒ 1. Sri Lanka
 - ☐ 2. Nepal
 - ☐ 3. Bangladesh
 - ☐ 4. Pakistan

Question ID : 9895808928
Chosen Option : 4

Q.4
0 NSSO stands for:

- Ans
- ☐ 1. National Social Service Organisation
 - ☐ 2. National Statistical Survey Organisation
 - ☐ 3. National Sale Service Organisation
 - ☒ 4. National Sample Survey Organisation

Question ID : 9895808926
Chosen Option : 4

Q.4
1 What is the main purpose of water harvesting?

- Ans
- ☐ 1. hold water on the surface of the earth
 - ☒ 2. recharge ground water
 - ☐ 3. make dams
 - ☐ 4. reduce soil erosion

Question ID : 9895808933
Chosen Option : 3

Q.4
2 The Buland Darwaza at Fatehpur Sikri was constructed by _____.

- Ans
- ☐ 1. Shahjahan
 - ☐ 2. Humayun
 - ☒ 3. Akbar
 - ☐ 4. Jahangir

Question ID : 9895808940
Chosen Option : 1

Q.4
3 22nd December is celebrated as _____.

- Ans
- ☐ 1. National Science Day
 - ☒ 2. National Mathematics Day
 - ☐ 3. National Technology Day
 - ☐ 4. National Literacy Day

Question ID : 9895808923

Chosen Option : 1

Q.4
4 Bleeding in dengue is due to a decrease in number of _____.

- Ans
- ☒ 1. red blood cells
 - ☒ 2. white blood cells
 - ☒ 3. plasma
 - ☒ 4. platelets

Question ID : 9895808934

Chosen Option : 4

Q.4
5 The Second Round Table Conference was held in _____.

- Ans
- ☒ 1. December 1932
 - ☒ 2. December 1929
 - ☒ 3. December 1930
 - ☒ 4. December 1931

Question ID : 9895808941

Chosen Option : 2

Q.4
6 Which fort in the Jaipur area of Rajasthan is known for its artistic Hindu style elements and is also a World Heritage site?

- Ans
- ☒ 1. Mehrangarh Fort
 - ☒ 2. Chittorgarh Fort
 - ☒ 3. Amber Fort
 - ☒ 4. Gwalior Fort

Question ID : 9895808920

Chosen Option : 1

Q.4
7 The Twelfth Five-Year Plan of India was from _____.

- Ans
- ☒ 1. 2011 to 2016
 - ☒ 2. 2010 to 2015
 - ☒ 3. 2012 to 2017
 - ☒ 4. 2013 to 2018

Question ID : 9895808927

Chosen Option : 1

Q.4
8 Article 21A deals with the:

- Ans
- ☒ 1. Right to Constitutional Remedies
 - ☒ 2. Right to Free and compulsory education to all children of the age of six to fourteen years
 - ☒ 3. Right against Exploitation
 - ☒ 4. Right to Freedom and Religion

Question ID : 9895808931

Chosen Option : 4

Q.4 Who holds the current World Chess Championship title 2018?

- Ans
- ☒ 1. Viswanathan Anand
 - ☒ 2. Magnus Carlsen
 - ☒ 3. Sergey Karjakin
 - ☒ 4. Fabino Caruana

Question ID : 9895808921
Chosen Option : 2

Q.5 As of November 2018, Mary Kom is the first woman boxer to win _____ world championship gold medals.

- Ans
- ☒ 1. 7
 - ☒ 2. 9
 - ☒ 3. 6
 - ☒ 4. 8

Question ID : 9895808922
Chosen Option : 1

Q.5 If A can complete a work in 30 days and B can complete the same work in 20 days, then in how many days will A and B together complete the same work?

- Ans
- ☒ 1. 12 days
 - ☒ 2. 15 days
 - ☒ 3. 20 days
 - ☒ 4. 18 days

Question ID : 9895809058
Chosen Option : 1

Q.5 The ratio of the number of boys and girls in a school of 468 students is 5 : 4. How many new girls should join the school so that the ratio of boys and girls becomes 1 : 1?

- Ans
- ☒ 1. 52
 - ☒ 2. 48
 - ☒ 3. 50
 - ☒ 4. 56

Question ID : 9895809053
Chosen Option : 1

Q.5 A trader sells his goods at 10% discount on the marked price. How much should he keep the marked price of item to get a profit of 10%, when cost price is ₹ 900?

- Ans
- ☒ 1. ₹ 1175
 - ☒ 2. ₹ 1100
 - ☒ 3. ₹ 1250
 - ☒ 4. ₹ 1275

Question ID : 9895809048
Chosen Option : 1

Q.5
4 Area of a rhombus is 175 cm^2 . Length of one diagonal is 25 cm. What is the length of other diagonal?

- Ans
- ☒ 1. 12 cm
 - ☒ 2. 14 cm
 - ☒ 3. 10 cm
 - ☒ 4. 15 cm

Question ID : 9895809063
Chosen Option : 1

Q.5
5 The difference between the compound interest and simple interest on a certain sum at 10% per annum for 2 years is ₹ 42 when the interest is compounded yearly. What is the sum?

- Ans
- ☒ 1. ₹ 8400
 - ☒ 2. ₹ 2100
 - ☒ 3. ₹ 4200
 - ☒ 4. ₹ 5200

Question ID : 9895809057
Chosen Option : 1

Q.5
6 A person gets a profit of 20% by selling an object on certain price. If he sells it on double of the price, then what will be percentage profit on old selling price?

- Ans
- ☒ 1. $66\frac{2}{3}\%$
 - ☒ 2. 120%
 - ☒ 3. 100%
 - ☒ 4. 40%

Question ID : 9895809051
Chosen Option : 1

Q.5
7 There is a loss of 10% after selling an item for ₹ 72. What should be its selling price to get a profit of 5%?

- Ans
- ☒ 1. ₹ 85
 - ☒ 2. ₹ 80
 - ☒ 3. ₹ 87
 - ☒ 4. ₹ 84

Question ID : 9895809052
Chosen Option : 1

Q.5
8 The average of marks scored by 40 students was 160. Later on it was discovered that one mark 165 was wrongly copied as 125. The correct average is:

- Ans
- ☒ 1. 162
 - ☒ 2. 160
 - ☒ 3. 161
 - ☒ 4. 163

Question ID : 9895809047
Chosen Option : 1

Q.5
9 A train passes a station platform in 36 seconds and a man standing on the platform in 20 seconds. If the speed of the train is 72 km/ph. what is the length of the train?

- Ans
- ☒ 1. 120 metres
 - ☒ 2. 320 metres
 - ☒ 3. 360 metres
 - ☒ 4. 240 metres

Question ID : 9895809061
Chosen Option : 1

Q.6
0 The range of 11, 9, 18, 35, 42, 26, 4, 19, and 31 is:

- Ans
- ☒ 1. 38
 - ☒ 2. 26
 - ☒ 3. 42
 - ☒ 4. 4

Question ID : 9895809049
Chosen Option : 4

Q.6
1 If a boy walks from his house to school at 8 km/hr then he is late by 30 minutes and if he walks at 12 km/hr then he reached on time. The distance of his school from his house is:

- Ans
- ☒ 1. 10 km
 - ☒ 2. 18 km
 - ☒ 3. 15 km
 - ☒ 4. 12 km

Question ID : 9895809060
Chosen Option : 1

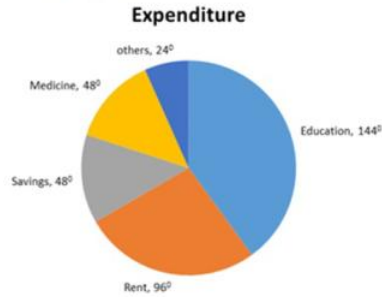
Q.6
2 A rectangular field has length of 1200 m and breadth of 500 m. A road has to be made along its diagonal at the rate of ₹ 25 per m. What is the cost of making road?

- Ans
- ☒ 1. ₹ 25600
 - ☒ 2. ₹ 32500
 - ☒ 3. ₹ 35000
 - ☒ 4. ₹ 28400

Question ID : 9895809062
Chosen Option : 1

Q.6
3

DIRECTIONS: These questions are based on the given pie chart. The pie chart shows the monthly expenditure of Mr. Sachin on various items. Study the chart and answer the given questions.



Expenditure on medicine is approximately how much percent of total expenditure?

- Ans
- ✓ 1. 13.33%
 - ✗ 2. 12.5%
 - ✗ 3. 14%
 - ✗ 4. 36%

Question ID : 9895809067
Chosen Option : 1

Q.6
4 What is the least perfect cube which is divisible by 5, 10 and 15?

- Ans
- ✗ 1. 24000
 - ✗ 2. 21000
 - ✗ 3. 64000
 - ✓ 4. 27000

Question ID : 9895809043
Chosen Option : 1

Q.6
5 Simplify:

$$999 + 111 \times 0.5 = ?$$

- Ans
- ✗ 1. 500
 - ✗ 2. 555
 - ✗ 3. 1110.5
 - ✓ 4. 1054.5

Question ID : 9895809044
Chosen Option : 4

Q.6
6 The ratio of the boys and girls at a school's annual function was 1 : 2 but when 10 boys and 10 girls left, the ratio became 2 : 5. How many students were at the annual function originally?

- Ans
- ✗ 1. 102
 - ✗ 2. 84
 - ✗ 3. 96
 - ✓ 4. 90

Question ID : 9895809054
Chosen Option : 1

Q.6
7 Simplify:

$$4 \times 12 + 699 = ?$$

- Ans
- ☐ 1. 630
 - ☐ 2. 670
 - ☐ 3. 655
 - ☒ 4. 747

Question ID : 9895809045
Chosen Option : 4

Q.6
8 60 boys working 7 hours a day can do a work in 18 days. In how many days will 28 boys working 9 hours a day do the same work?

- Ans
- ☐ 1. 25 days
 - ☒ 2. 30 days
 - ☐ 3. 20 days
 - ☐ 4. 40 days

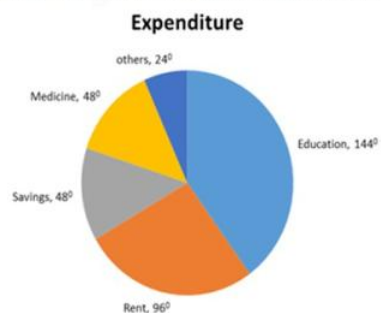
Question ID : 9895809059
Chosen Option : 1

Q.6
9 40% of a number 147.2. 25% of the same number is:

- Ans
- ☐ 1. 58
 - ☐ 2. 62
 - ☐ 3. 61
 - ☒ 4. 92

Question ID : 9895809050
Chosen Option : 1

Q.7
0 DIRECTIONS: These questions are based on the given pie chart. The pie chart shows the monthly expenditure of Mr. Sachin on various items. Study the chart and answer the given questions.



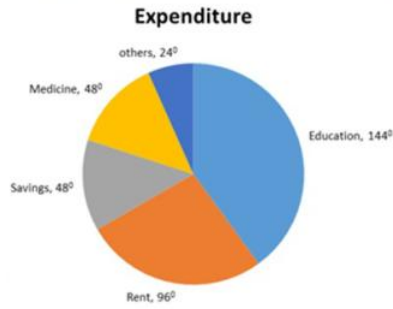
The ratio of saving and education is:

- Ans
- ☐ 1. 3 : 4
 - ☒ 2. 1 : 3
 - ☐ 3. 1 : 1
 - ☐ 4. 2 : 3

Question ID : 9895809066

Chosen Option : 1

Q.7 DIRECTIONS: These questions are based on the given pie chart. The pie chart shows the monthly expenditure of Mr. Sachin on various items. Study the chart and answer the given questions.



If the monthly income of Mr. Sachin is ₹ 48000 then his expenditure on rent in two years are:

- Ans**
- ☒ 1. ₹ 308200
 - ☒ 2. ₹ 148000
 - ☒ 3. ₹ 307200
 - ☒ 4. ₹ 153600

Question ID : 9895809065

Chosen Option : 1

Q.7 2 The average of even number from 10 to 20 is:

- Ans**
- ☒ 1. 12
 - ☒ 2. 14
 - ☒ 3. 16
 - ☒ 4. 15

Question ID : 9895809046

Chosen Option : 1

Q.7 3 The volume of a frustum of a cone with radii 8 cm and 10 cm and height is 21 cm is: (Take: $\pi = \frac{22}{7}$)

- Ans**
- ☒ 1. 5368 cm³
 - ☒ 2. 4328 cm³
 - ☒ 3. 6112 cm³
 - ☒ 4. 4816 cm³

Question ID : 9895809064

Chosen Option : 1

Q.7 4 A sum of money is divided among A, B, C and D in the ratio of 3 : 4 : 9 : 10 respectively. If the share of D is ₹ 3612 more than the share of A, then what is the total amount of money received by A and D together ?

- Ans**
- ☒ 1. ₹ 6568
 - ☒ 2. ₹ 6708
 - ☒ 3. ₹ 6228
 - ☒ 4. ₹ 6028

Question ID : 9895809055
Chosen Option : 1

Q.7 What sum of money will produce ₹ 120 interest in 10 years at 5 % per annum simple interest(in ₹)?

- Ans
- ☒ 1. ₹ 350
 - ☒ 2. ₹ 280
 - ☒ 3. ₹ 360
 - ☒ 4. ₹ 240

Question ID : 9895809056
Chosen Option : 1

Section : English Language

Q.1 Select the word which means the same as the group of words given.

An animal that lives by killing and eating other animals

- Ans
- ☒ 1. Predator
 - ☒ 2. Amphibian
 - ☒ 3. Biped
 - ☒ 4. Quadruped

Question ID : 9895809192
Chosen Option : 1

Q.2 Select the word which means the same as the group of words given.

Not connected with religious or spiritual matters.

- Ans
- ☒ 1. Atheist
 - ☒ 2. Communal
 - ☒ 3. Secular
 - ☒ 4. Veteran

Question ID : 9895809193
Chosen Option : 1

Q.3 Identify the segment in the sentence which contains the grammatical error from the given options.

Some people lose their eyesights because of a disease or injury.

- Ans
- ☒ 1. their eyesights
 - ☒ 2. Some people
 - ☒ 3. disease or injury
 - ☒ 4. because of

Question ID : 9895809173
Chosen Option : 1

Q.4 Identify the segment in the sentence which contains the grammatical error from the given options.

The sense of sight is one of the most important senses gift to us.

Ans

- ☒ 1. The sense
- ☒ 2. is one of the
- ☒ 3. gift to us
- ☒ 4. most important

Question ID : 9895809172
Chosen Option : 1

Q.5 Select the most appropriate word to fill in the blank.

A major earthquake _____ in India on 8 October 2005 in Uri.

Ans

- ☒ 1. has been occurring
- ☒ 2. occurred
- ☒ 3. occurs
- ☒ 4. is occurring

Question ID : 9895809178
Chosen Option : 2

Q.6 Select the synonym of the given word.

PRECISE

Ans

- ☒ 1. Erroneous
- ☒ 2. Ambiguous
- ☒ 3. Inaccurate
- ☒ 4. Accurate

Question ID : 9895809187
Chosen Option : 4

Comprehension:

In the following passage some words have been deleted. Fill in the blanks with the help of the alternatives given. Select the most appropriate option for each number.

Life of the people of the Amazon basin is slowly (1) _____. In the older days the (2) _____ of the forest could be reached only by (3) _____ the river. In 1970 the Trans Amazon highway (4) _____ all parts of the rainforest (5) _____.

SubQuestion No : 7

Q.7 Select the most appropriate option that will fill in the blank
number 1

Ans

- ☒ 1. simplifying

- ☒ 2. steadying
- ☒ 3. changing
- ☒ 4. modifying

Question ID : 9895809181
Chosen Option : 3

Comprehension:

In the following passage some words have been deleted. Fill in the blanks with the help of the alternatives given. Select the most appropriate option for each number.

Life of the people of the Amazon basin is slowly (1) _____. In the older days the (2) _____ of the forest could be reached only by (3) _____ the river. In 1970 the Trans Amazon highway (4) _____ all parts of the rainforest (5) _____.

SubQuestion No : 8

Q.8 Select the most appropriate option that will fill in the blank number 2

- Ans ☒ 1. heart
- ☒ 2. core
- ☒ 3. thick
- ☒ 4. deep

Question ID : 9895809182
Chosen Option : 2

Comprehension:

In the following passage some words have been deleted. Fill in the blanks with the help of the alternatives given. Select the most appropriate option for each number.

Life of the people of the Amazon basin is slowly (1) _____. In the older days the (2) _____ of the forest could be reached only by (3) _____ the river. In 1970 the Trans Amazon highway (4) _____ all parts of the rainforest (5) _____.

SubQuestion No : 9

Q.9 Select the most appropriate option that will fill in the blank number 3

- Ans ☒ 1. boating
- ☒ 2. navigating
- ☒ 3. journeying
- ☒ 4. swimming

Question ID : 9895809183
Chosen Option : 4

Comprehension:

In the following passage some words have been deleted. Fill in the blanks with the help of the alternatives given. Select the most appropriate option for each number.

Life of the people of the Amazon basin is slowly (1) _____. In the older days the (2) _____ of the forest could be reached only by (3) _____ the river. In 1970 the Trans Amazon highway (4) _____ all parts of the rainforest (5) _____.

SubQuestion No : 10

Q.1
0 Select the most appropriate option that will fill in the blank number 4

- Ans
- ☒ 1. is making
 - ☒ 2. was making
 - ☒ 3. made
 - ☒ 4. make

Question ID : 9895809184
Chosen Option : 2

Comprehension:

In the following passage some words have been deleted. Fill in the blanks with the help of the alternatives given. Select the most appropriate option for each number.

Life of the people of the Amazon basin is slowly (1) _____. In the older days the (2) _____ of the forest could be reached only by (3) _____ the river. In 1970 the Trans Amazon highway (4) _____ all parts of the rainforest (5) _____.

SubQuestion No : 11

Q.1
1 Select the most appropriate option that will fill in the blank number 5


- Ans
- ☒ 1. operative
 - ☒ 2. restricted
 - ☒ 3. accessible
 - ☒ 4. possible

Question ID : 9895809185
Chosen Option : 1

Q.1
2 Select the most appropriate word to fill in the blank.

The great advantage of early rising is the good _____ it gives us to our day.

- Ans
- ☒ 1. start
 - ☒ 2. humour
 - ☒ 3. sense

 4. kick

Question ID : 9895809197
Chosen Option : 1

Q.1
3 Select the antonym of the given word.





REVEAL

- Ans  1. Disclose
 2. Hide
 3. Show
 4. Praise

Question ID : 9895809189
Chosen Option : 2

Q.1
4 Select the most appropriate option to substitute the underlined segment in the given sentence. If there is no need to substitute it, select No substitution required.





When a plastic comb is rubbed with dry hair, they acquired a static charge.

- Ans  1. it acquires a
 2. they acquire an
 3. it acquired
 4. No substitution required

Question ID : 9895809176
Chosen Option : 1

Q.1
5 Select the most appropriate word to fill in the blank.





Tin cans, used for storing food, are made _____ electroplating tin onto iron.

- Ans  1. with
 2. by
 3. to
 4. of

Question ID : 9895809179
Chosen Option : 2

Q.1
6 Select the synonym of the given word.

VAGUE

- Ans  1. Definite
 2. Incomplete
 3. Precise
 4. Unclear

Question ID : 9895809186
Chosen Option : 3

Q.1 Select the most appropriate option to substitute the underlined segment in the given sentence. If there is no need to substitute it, select No substitution required.

Carrying an umbrella is not at all a good idea during thunderstorms.

Ans

- ☒ 1. No substitution required
- ☐ 2. Carrying a umbrella
- ☐ 3. To carry the umbrella
- ☐ 4. Carry umbrella

Question ID : 9895809177
Chosen Option : 1

Q.1 Select the most appropriate option to substitute the underlined segment in the given sentence. If there is no need to substitute it, select No substitution required.

Scientific discoveries is often result of hard work by many people.

Ans

- ☐ 1. is result
- ☒ 2. are often a result
- ☐ 3. No substitution required
- ☐ 4. are resulted

Question ID : 9895809175
Chosen Option : 1

Q.1 Select the meaning of the given idiom.

A man of spirit is

Ans

- ☐ 1. A spiritual person
- ☐ 2. A unique person
- ☒ 3. A very courageous man
- ☐ 4. A very talented man

Question ID : 9895809191
Chosen Option : 4

Q.2 Select the wrongly spelt word.

Ans


- ☐ 1. Recommend
- ☐ 2. Representative
- ☐ 3. Reception
- ☒ 4. Ridicullous

Question ID : 9895809195
Chosen Option : 1

Q.2 Select the wrongly spelt word.

Ans

- ☒ 1. Suspicious
- ☐ 2. Schedule
- ☐ 3. Sustain

 4. Secretary

Question ID : 9895809194
Chosen Option : 1

Q.2
2 Select the antonym of the given word.





TREACHEROUS

- Ans  1. Deceitful
 2. Faithful
 3. Disloyal
 4. Unfaithful

Question ID : 9895809188
Chosen Option : 1

Q.2
3 Select the most appropriate word to fill in the blank.





The new textile policy lays great emphasis on stabilizing cotton prices to _____ the interest of cotton growers.

- Ans  1. protect
 2. improve
 3. raise
 4. diversify

Question ID : 9895809196
Chosen Option : 1

Q.2
4 Select the meaning of the given idiom.





Fool's paradise

- Ans  1. imaginary idea
 2. foolish idea
 3. deceptive happiness
 4. unexpected gain

Question ID : 9895809190
Chosen Option : 4

Q.2
5 Identify the segment in the sentence which contains the grammatical error from the given options.

Many Indian languages can be reading using the Braille system.

- Ans  1. using
 2. can be reading
 3. Many Indian
 4. the Braille

Question ID : 9895809174
Chosen Option : --

Section : Hindi Language

Q.1 'उचित' का विलोम शब्द है -

- Ans ☒ 1. गलत
☒ 2. सूचित
☒ 3. अनुचित
☒ 4. अच्छा

Question ID : 9895807142
Chosen Option : --

Q.2 सही वर्तनी वाले शब्द का चयन करें।

- Ans ☒ 1. हस्ताक्षर
☒ 2. हस्ताक्षार
☒ 3. हस्तक्षर
☒ 4. हास्तक्षर

Question ID : 9895807150
Chosen Option : --

Q.3 रिक्त स्थान को भरने के लिए उपयुक्त शब्द का चयन करें।

वह _____ चालाक है।

- Ans ☒ 1. मंद
☒ 2. ठोस
☒ 3. बहुत
☒ 4. दृढ़

Question ID : 9895807132
Chosen Option : --

Q.4 रिक्त स्थान को भरने के लिए उपयुक्त शब्द का चयन करें।

तालाब _____ पानी भरा है।

- Ans ☒ 1. को
☒ 2. के
☒ 3. में
☒ 4. पर

Question ID : 9895807133
Chosen Option : --

Q.5 'पहाड़' का पर्यायवाची शब्द है-

- Ans ☒ 1. भूधर
☒ 2. भास्कर

✗ 3. जलधर

✗ 4. सरित

Question ID : 9895807143

Chosen Option : --

Comprehension:

निम्नलिखित गद्यांश के रिक्त स्थानों की पूर्ति गद्यांश के नीचे दिए गए प्रश्नों के अनुसार कीजिए-

जनता को राजनीतिक विषयों की शिक्षा तभी _____ (1) रूप से प्राप्त हो सकती है जबकि उसे विभिन्न प्रकार की विचारधाराओं को भली-भाँति समझने और उनमें _____ (2) करने का अवसर मिले। राज्य का कर्तव्य है कि वह जनता को ऐसी मौलिक शिक्षा प्रदान करे जिससे उसमें _____ (3) की क्षमता आ सके। इसमें _____ (4) शिक्षा का सबसे महत्वपूर्ण स्थान है। अगर हम साहस के साथ _____ (5) होकर अपने कर्तव्य का पालन करेंगे तो निःसन्देह हमारा भविष्य उज्ज्वल है।

SubQuestion No : 6

Q.6 गद्यांश में संकेतित रिक्त स्थान (1) के लिए उपयुक्त शब्द होगा।

Ans ✗ 1. अनुचित

✗ 2. समुचित

✗ 3. सीमित

✓ 4. विस्तृत

Question ID : 9895807136

Chosen Option : --

Comprehension:

निम्नलिखित गद्यांश के रिक्त स्थानों की पूर्ति गद्यांश के नीचे दिए गए प्रश्नों के अनुसार कीजिए-

जनता को राजनीतिक विषयों की शिक्षा तभी _____ (1) रूप से प्राप्त हो सकती है जबकि उसे विभिन्न प्रकार की विचारधाराओं को भली-भाँति समझने और उनमें _____ (2) करने का अवसर मिले। राज्य का कर्तव्य है कि वह जनता को ऐसी मौलिक शिक्षा प्रदान करे जिससे उसमें _____ (3) की क्षमता आ सके। इसमें _____ (4) शिक्षा का सबसे महत्वपूर्ण स्थान है। अगर हम साहस के साथ _____ (5) होकर अपने कर्तव्य का पालन करेंगे तो निःसन्देह हमारा भविष्य उज्ज्वल है।

SubQuestion No : 7

Q.7

गद्यांश में संकेतित रिक्त स्थान (2) के लिए
उपयुक्त शब्द होगा।

Ans

- ☒ 1. गर्जना
☒ 2. गुंजार
☒ 3. प्रलाप
☒ 4. निर्णय

Question ID : 9895807137
Chosen Option : --

Comprehension:

निम्नलिखित गद्यांश के रिक्त स्थानों की पूर्ति गद्यांश के नीचे दिए गए प्रश्नों के अनुसार कीजिए-

जनता को राजनीतिक विषयों की शिक्षा तभी _____ (1) रूप से प्राप्त हो सकती है जबकि उसे विभिन्न प्रकार की विचारधाराओं को भली-भाँति समझने और उनमें _____ (2) करने का अवसर मिले। राज्य का कर्तव्य है कि वह जनता को ऐसी मौलिक शिक्षा प्रदान करे जिससे उसमें _____ (3) की क्षमता आ सके। इसमें _____ (4) शिक्षा का सबसे महत्वपूर्ण स्थान है। अगर हम साहस के साथ _____ (5) होकर अपने कर्तव्य का पालन करेंगे तो निःसन्देह हमारा भविष्य उज्ज्वल है।

SubQuestion No : 8

Q.8

गद्यांश में संकेतित रिक्त स्थान (3) के लिए
उपयुक्त शब्द होगा।

Ans

- ☒ 1. आत्मनिर्माण
☒ 2. पतन
☒ 3. दुःसाहस
☒ 4. विस्मरण

Question ID : 9895807138
Chosen Option : --

Comprehension:

निम्नलिखित गद्यांश के रिक्त स्थानों की पूर्ति गद्यांश के नीचे दिए गए प्रश्नों के अनुसार कीजिए-

जनता को राजनीतिक विषयों की शिक्षा तभी _____ (1) रूप से प्राप्त हो सकती है जबकि उसे विभिन्न प्रकार की विचारधाराओं को भली-भाँति समझने और उनमें _____ (2) करने का अवसर मिले। राज्य का कर्तव्य है कि वह जनता को ऐसी मौलिक शिक्षा प्रदान करे जिससे उसमें _____ (3) की क्षमता आ सके। इसमें _____ (4) शिक्षा का सबसे महत्वपूर्ण स्थान है। अगर हम साहस के साथ _____ (5) होकर अपने कर्तव्य का पालन करेंगे तो निःसन्देह हमारा भविष्य उज्ज्वल है।

SubQuestion No : 9

Q.9 गद्यांश में संकेतित रिक्त स्थान (4) के लिए उपयुक्त शब्द होगा।

- Ans
- ☒ 1. नारी
 - ☒ 2. धार्मिक
 - ☒ 3. पारंपरिक
 - ☒ 4. नागरिक

Question ID : 9895807139

Chosen Option : --

Comprehension:

निम्नलिखित गद्यांश के रिक्त स्थानों की पूर्ति गद्यांश के नीचे दिए गए प्रश्नों के अनुसार कीजिए-

जनता को राजनीतिक विषयों की शिक्षा तभी _____ (1) रूप से प्राप्त हो सकती है जबकि उसे विभिन्न प्रकार की विचारधाराओं को भली-भाँति समझने और उनमें _____ (2) करने का अवसर मिले। राज्य का कर्तव्य है कि वह जनता को ऐसी मौलिक शिक्षा प्रदान करे जिससे उसमें _____ (3) की क्षमता आ सके। इसमें _____ (4) शिक्षा का सबसे महत्वपूर्ण स्थान है। अगर हम साहस के साथ _____ (5) होकर अपने कर्तव्य का पालन करेंगे तो निःसन्देह हमारा भविष्य उज्ज्वल है।

SubQuestion No : 10

Q.10 गद्यांश में संकेतित रिक्त स्थान (5) के लिए उपयुक्त शब्द होगा।

- Ans
- ☒ 1. संचित
 - ☒ 2. अचेत
 - ☒ 3. शक्तिशाली
 - ☒ 4. सचेत

Question ID : 9895807140
Chosen Option : --

Q.1
1 'मुँह की खाना' मुहावरे का अर्थ है -

Ans

- ☒ 1. बुरी तरह हारना
- ☐ 2. नष्ट करना
- ☐ 3. उदास होना
- ☐ 4. पराजित करना

Question ID : 9895807146
Chosen Option : --

Q.1
2 'निर्गुण' का विलोम शब्द चयन करें।

Ans

- ☐ 1. सगुण
- ☐ 2. निराकार
- ☐ 3. दुर्गुण
- ☒ 4. निपुण

Question ID : 9895807141
Chosen Option : --

Q.1
3 दिए गए वाक्य का वह भाग ज्ञात करें जिसमें कोई त्रुटि है।

सिपाहियों ने अपराधी को कुत्तों का तरह घसीटा।

Ans

- ☐ 1. अपराधी को
- ☒ 2. सिपाहियों ने
- ☐ 3. घसीटा।
- ☐ 4. कुत्तों का तरह

Question ID : 9895807125
Chosen Option : --

Q.1
4 "जिसका कोई शत्रु न हो" के लिए एक शब्द है-

Ans

- ☐ 1. अल्पशत्रु
- ☒ 2. अज्ञातशत्रु
- ☐ 3. अजातशत्रु
- ☐ 4. बहुशत्रु

Question ID : 9895807147
Chosen Option : --

Q.1
5 सही वर्तनी वाले शब्द का चयन करें।

- Ans
- ☒ 1. अशिवाद
 - ☒ 2. आशिवाद
 - ☒ 3. आशीवाद
 - ☒ 4. अर्शिवाद

Question ID : 9895807149
Chosen Option : --

Q.1
6 दिए गए वाक्य का वह भाग ज्ञात करें जिसमें कोई त्रुटि है।

पिछले डेढ़ दशक के दौरान बैंकिंग जगत में तेजी परिवर्तन हुए हैं।

- Ans
- ☒ 1. बैंकिंग जगत में
 - ☒ 2. के दौरान
 - ☒ 3. तेजी परिवर्तन हुए हैं।
 - ☒ 4. पिछले डेढ़ दशक

Question ID : 9895807126
Chosen Option : --

Q.1
7 दिए गए वाक्य में रेखांकित खंड को प्रतिस्थापित करने के लिए उपयुक्त विकल्प का चयन करें।
गर्मियों में सूर्य तपता है।

- Ans
- ☒ 1. पद्माकर
 - ☒ 2. रत्नाकर
 - ☒ 3. सुधाकर
 - ☒ 4. दिवाकर

Question ID : 9895807129
Chosen Option : --

Q.1
8 रिक्त स्थान को भरने के लिए उपयुक्त शब्द का चयन करें।

दुर्जन दूसरों के दुख का _____ नहीं समझ सकता।

- Ans
- ☒ 1. करुणा
 - ☒ 2. मर्म
 - ☒ 3. कर्म
 - ☒ 4. उद्देश्य

Question ID : 9895807131
Chosen Option : --

Q.1
9 दिए गए वाक्य का वह भाग ज्ञात करें जिसमें कोई त्रुटि है।

मैंने श्री रामलाल जी के सहयोग के लिए उनका अत्यंत आभारी हूँ।

- Ans
- ☒ 1. उनका अत्यंत

✗ 2. आभारी हूँ

✓ 3. मैंने श्री रामलाल जी के

✗ 4. सहयोग के लिए

Question ID : 9895807127

Chosen Option : --

Q.2
0 'जो स्मरण रखने योग्य हो' के लिए एक शब्द है-

Ans ✗ 1. स्मरण

✗ 2. स्मरणीय

✗ 3. याददाश्त

✓ 4. स्मृति

Question ID : 9895807148

Chosen Option : --

Q.2
1 'लाल-पीला होना' मुहावरे का अर्थ है -

Ans ✗ 1. बहुत गुस्सा करना

✗ 2. विरोध करना

✓ 3. झूठ बोलना

✗ 4. प्रसन्न होना

Question ID : 9895807145

Chosen Option : --

Q.2
2 दिए गए वाक्य में रेखांकित खंड को प्रतिस्थापित करने के लिए उपयुक्त विकल्प का चयन करें।

उसके दाँत मोती की तरह चमकते हैं ।

Ans ✗ 1. हीरे

✗ 2. मूँगे

✗ 3. माणिक

✓ 4. मुक्ता

Question ID : 9895807130

Chosen Option : --

Q.2
3 रिक्त स्थान को भरने के लिए उपयुक्त शब्द का चयन करें।

जिस वाक्य में एक उद्देश्य _____ समीपिका क्रिया होती है उसे सरल वाक्य कहा जाता है।

Ans ✗ 1. इसलिए

✗ 2. क्योंकि

✓ 3. और

✗ 4. यद्यपि

Question ID : 9895807134

Chosen Option : --

Q.2
4 'आम' का पर्यायवाची शब्द है-

- Ans
- ☒ 1. रसाल
 - ☐ 2. फल
 - ☐ 3. पिक
 - ☐ 4. अम्बर

Question ID : 9895807144

Chosen Option : --

Q.2
5 दिए गए वाक्य में रेखांकित खंड को प्रतिस्थापित करने के लिए उपयुक्त विकल्प का चयन करें।

वह अपने कार्य में समर्थ है।

- Ans
- ☐ 1. अक्षम
 - ☐ 2. सक्षम
 - ☒ 3. चालाक
 - ☐ 4. परायण

Question ID : 9895807128

Chosen Option : --

Constable (GD) in CAPFs, NIA, SSF and Rifleman (GD) in Assam Rifles Examination, 2018

| | |
|------------------|--------------------|
| Roll No. : | |
| Registration No. | |
| Name : | |
| Exam Venue : | |
| Exam Time : | 12:30 PM - 2:00 PM |
| Exam Date : | 11/02/2019 |

Section : General Section

Q.1 Identify the correct option to complete the following series.

5, 8, 13, 20, 29, _____, 53, 68, 85

- Ans ☒ 1. 40
☒ 2. 39
☒ 3. 35
☒ 4. 36

Question ID : 9895802463
Chosen Option : 1

Q.2 Identify the number that is different from the rest.

- Ans ☒ 1. 625
☒ 2. 115
☒ 3. 125
☒ 4. 25

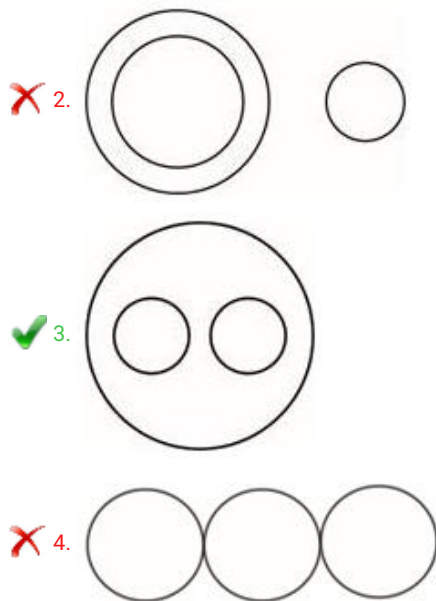
Question ID : 9895802465
Chosen Option : 2

Q.3 Select the Venn diagram that best illustrates the relationship between the three given classes.

Languages, Hindi, Malayalam

Ans





Question ID : 9895802473
Chosen Option : 3

Q.4 A medical representative plans to visit each of six hospitals — A, B, C, D, E and F — exactly once during the course of one day. He is setting up his schedule for the day according to the following conditions:

- i. He must visit A before B and E.
- ii. He must visit B before D.
- iii. The third hospital he visits must be C.

Which of the following could be the order in which the medical representative visits the six hospitals?

- Ans**
- ☒ 1. A, F, C, D, E, B
 - ☒ 2. C, E, A, B, D, F
 - ☒ 3. C, F, A, E, D, B
 - ☒ 4. A, B, C, D, E, F

Question ID : 9895802458
Chosen Option : 2

Q.5 Read the given statements and conclusions carefully. Assuming that the information given in the statements is true, even if they appear to be at variance with commonly known facts, decide which of the conclusions logically follow(s) from the statements beyond reasonable doubt.

Statements:

- No cat is a monkey.
- No monkey is a cow.

Conclusions:

- I. No cat is a cow.
- II. Some cows are monkeys.

- Ans**
- ☒ 1. Only conclusion I follows.

- ☒ 2. Only conclusion II follows.
- ☒ 3. Neither conclusion I nor conclusion II follows.
- ☒ 4. Both conclusions I and II follow.

Question ID : 9895802460
Chosen Option : 2

Q.6 Select the option that is related to the third term in the same way as the second term is related to the first term.

ACE : EIM :: DFH : ?

- Ans ☒ 1. PLH
- ☒ 2. HPL
- ☒ 3. PHL
- ☒ 4. HLP

Question ID : 9895802453
Chosen Option : 4

Q.7 Select the option in which the given figure is embedded.



- Ans ☒ 1.
- ☒ 2.
- ☒ 3.
- ☒ 4.

Question ID : 9895802469
Chosen Option : 1

Q.8

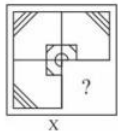
Identify the correct option to complete the following series.

50, 49, 47, 44, 40, 35, _____, 22

- Ans
- ☒ 1. 30
 - ☒ 2. 27
 - ☒ 3. 29
 - ☒ 4. 25

Question ID : 9895802462
Chosen Option : 3

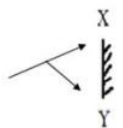
Q.9 Select a figure from amongst the four alternatives, that when placed in the blank space (?) of figure X will complete the pattern. (Rotation is not allowed).



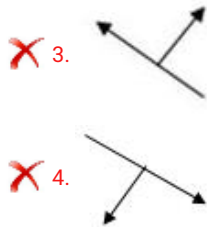
- Ans
- ☒ 1.
 - ☒ 2.
 - ☒ 3.
 - ☒ 4.

Question ID : 9895802470
Chosen Option : 2

Q.1 Choose the alternative which most closely resembles the mirror image of the given figure when mirror is placed at right side.



- Ans
- ☒ 1.
 - ☒ 2.



Question ID : 9895802471
Chosen Option : 1

Q.1
1 If KITCHEN is coded as LKWGMKU, then SHAMPOO will be coded as _____.

- Ans ✓ 1. TJDQUUV
- ✗ 2. TJDQTUU
- ✗ 3. TJDQTUV
- ✗ 4. TJEQUUV

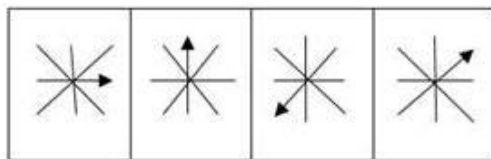
Question ID : 9895802456
Chosen Option : 3

Q.1
2 Identify the odd pair from the following.

- Ans ✓ 1. Eagle : Swoop
- ✗ 2. Pig : Sty
- ✗ 3. King : Palace
- ✗ 4. Bird : Nest

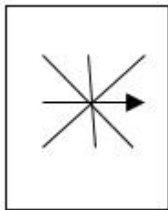
Question ID : 9895802452
Chosen Option : 2

Q.1
3 Select the figure that will come next in the following series.

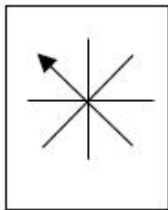


- Ans ✓ 1.

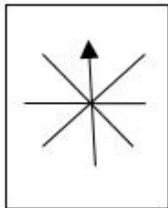
☒ 2.



☒ 3.



☒ 4.



Question ID : 9895802468
Chosen Option : 1

Q.1 In the following number series, two numbers have been put within brackets. Study the series carefully and select the correct alternative with respect to the series.
4

3, 9, (27), 81, (243), 729, 2187

Ans ☒ 1.

The first bracketed number (from the left) is correct and the second is incorrect.

- ☒ 2. Both the bracketed numbers are correct.
☒ 3. Both the bracketed numbers are incorrect.
☒ 4.

The first bracketed number (from the left) is incorrect and the second is correct.

Question ID : 9895802467
Chosen Option : 1

Q.1 'Athletics' is related to 'Stadium' in the same way as 'Skating' is related to '_____'.
5

- Ans ☒ 1. Ground
☒ 2. Track
☒ 3. Rink
☒ 4. Court

Question ID : 9895802454
Chosen Option : 3

Q.1 Seven employees, T, U, V, W, X, Y and Z, reach their factory in a particular sequence. Y reaches immediately before T but does not immediately follow W. V is the last one to reach. X immediately follows T and is subsequently followed by Z. W reaches before T. Who is the second to reach the factory?
6

Ans ☒ 1. U

- ☒ 2. X
- ☒ 3. W
- ☒ 4. Z

Question ID : 9895802459
Chosen Option : 2

Q.1
7 If B = 3 and H = 9, then SCHOOL = _____.

- Ans
- ☒ 1. 78
 - ☒ 2. 76
 - ☒ 3. 69
 - ☒ 4. 96

Question ID : 9895802455
Chosen Option : 3

Q.1
8 Identify the odd one from the following.

- Ans
- ☒ 1. Volume
 - ☒ 2. Small
 - ☒ 3. Height
 - ☒ 4. Weight

Question ID : 9895802450
Chosen Option : 1

Q.1
9 A square transparent sheet with a pattern is given. How will the pattern appear when the transparent sheet is folded along the dotted line?



Ans

- ☒ 1.
- ☒ 2.
- ☒ 3.
- ☒ 4.

Question ID : 9895802472
Chosen Option : 2

Q.2
0 Identify the odd one from the following.

- Ans
- ☒ 1. EV
 - ☒ 2. KP
 - ☒ 3. DX
 - ☒ 4. HS

Question ID : 9895802451
Chosen Option : 2

Q.2
1 Six students are sitting in a row. Akbar is to the left of the person sitting in the middle, but to the right of Sekar. Prakash is to the right of Deva, and Ram is to the right of Prakash. Ram is second from the person sitting in the middle. Who is the person sitting in the middle?

- Ans
- ☒ 1. Sekar
 - ☒ 2. Akbar
 - ☒ 3. Deva
 - ☒ 4. Ram

Question ID : 9895802457
Chosen Option : 3

Q.2
2 The statements below are followed by two conclusions labeled I and II. Assuming that the information in the statements is true, even if it appears at variance with generally established facts, decide which conclusion(s) logically and definitely follow(s) from the information given in the statements.

Statements:

All papers are books.

All books are papaya.

Conclusion

- I. All papers are papaya.
- II. Some papayas are papers.

- Ans
- ☒ 1. Only conclusion I follows.
 - ☒ 2. Neither conclusion I nor conclusion II follows.
 - ☒ 3. Only conclusion II follows.
 - ☒ 4. Both conclusions I and II follow.

Question ID : 9895802461
Chosen Option : 4

Q.2
3 Which two signs need to be interchanged to make the given equation correct?

$$20 \div 20 + 20 - 20 \times 20 = 20$$

- Ans
- ☒ 1. + and \div
 - ☒ 2. + and -
 - ☒ 3. \div and \times
 - ☒ 4. + and \times

Question ID : 9895802466
Chosen Option : 3

Q.2
4 Select the term that will come next in the following series.

a, cd, fgh, jklm, opqrs, _____

- Ans
- ☒ 1. uvwxyz
 - ☒ 2. vwxyza
 - ☒ 3. uvwxy
 - ☒ 4. tuvwxxy

Question ID : 9895802449
Chosen Option : 4

Q.2
5 Select the option that is related to the third term in the same way as the second term is related to the first term.

$\frac{15}{6} : 121 :: \frac{8}{9} : \underline{\hspace{2cm}}$

- Ans
- ☒ 1. 145
 - ☒ 2. 300
 - ☒ 3. 289
 - ☒ 4. 356

Question ID : 9895802464
Chosen Option : 4

Q.2
6 The directional growth movement in plants due to touch is called _____.

- Ans
- ☒ 1. thigmonasty
 - ☒ 2. geotropism
 - ☒ 3. phototropism
 - ☒ 4. chemotropism

Question ID : 9895803027
Chosen Option : 2

Q.2
7 The deltas of the Mahanadi and the Godavari are rich in _____ soil.

- Ans
- ☒ 1. black
 - ☒ 2. arid
 - ☒ 3. forest

✓ 4. alluvial

Question ID : 9895803009
Chosen Option : 4

Q.2
8 A person with the blood group _____ is considered to be a universal donor.

- Ans
- ✓ 1. O negative
 - ✗ 2. AB positive
 - ✗ 3. AB negative
 - ✗ 4. O positive

Question ID : 9895803024
Chosen Option : 4

Q.2
9 When was the Planning Commission set up?

- Ans
- ✗ 1. 2019
 - ✗ 2. 2000
 - ✗ 3. 1947
 - ✓ 4. 1950

Question ID : 9895803013
Chosen Option : 4

Q.3
0 The three-tier system of local government does NOT include the _____.

- Ans
- ✗ 1. Panchayat Samiti
 - ✓ 2. Village Committee
 - ✗ 3. Gram Panchayat
 - ✗ 4. Zila Parishad

Question ID : 9895803017
Chosen Option : 3

Q.3
1 The United States of America adopted a democratic constitution in _____.

- Ans
- ✗ 1. 1932
 - ✓ 2. 1787
 - ✗ 3. 1877
 - ✗ 4. 2000

Question ID : 9895803016
Chosen Option : 1

Q.3
2 In which battle Napoleon was defeated?

- Ans
- ✗ 1. Ligny

- ☒ 2. Jena
☒ 3. Waterloo
☒ 4. Arcole

Question ID : 9895803003
Chosen Option : 3

Q.3
3 Which of the following is the hardest substance?

- Ans ☒ 1. Coal
☒ 2. Diamond
☒ 3. Silver
☒ 4. Iron

Question ID : 9895803010
Chosen Option : 2

Q.3
4 The Statue of Unity in India is the world's tallest statue of _____.

- Ans ☒ 1. M.K Gandhi
☒ 2. Sardar Vallabhbhai Patel
☒ 3. Vinoba Bhave
☒ 4. Dr B.R Ambedkar

Question ID : 9895803019
Chosen Option : 2

Q.3
5 Begum Hazrat Mahal is associated to which of the following revolts of India?

- Ans ☒ 1. Moplah Revolt 1921
☒ 2. Paik Revolt 1817
☒ 3. Gond Revolt 1941
☒ 4. Sepoy Mutiny 1857

Question ID : 9895803004
Chosen Option : 3

Q.3
6 The National Rural Employment Guarantee Act was passed in _____.

- Ans ☒ 1. 2005
☒ 2. 1900
☒ 3. 2019
☒ 4. 2000

Question ID : 9895803012
Chosen Option : 1

Q.3
7 Name the famous Indian cricketer who wrote the book 'A Century Is Not Enough'.

- Ans
- ☒ 1. Virender Sehwag
 - ☒ 2. Virat Kohli
 - ☒ 3. Sachin Tendulkar
 - ☒ 4. Sourav Ganguly

Question ID : 9895803006
Chosen Option : 4

Q.3
8 _____ won the Miss World 2017 pageant.

- Ans
- ☒ 1. Lara Dutta
 - ☒ 2. Anukreethy
 - ☒ 3. Manushi Chillar
 - ☒ 4. Yukta Mukhi

Question ID : 9895803023
Chosen Option : 3

Q.3
9 _____ is a dance form which represents a unique synthesis of Hindu and Muslim genius in art.

- Ans
- ☒ 1. Kathak
 - ☒ 2. Manipuri
 - ☒ 3. Odissi
 - ☒ 4. Kathkali

Question ID : 9895803018
Chosen Option : 2

Q.4
0 The smallest living bird is the _____.

- Ans
- ☒ 1. hummingbird
 - ☒ 2. canary
 - ☒ 3. house sparrow
 - ☒ 4. dove

Question ID : 9895803025
Chosen Option : 1

Q.4
1 The largest backwater lake in Odisha is _____.

- Ans
- ☒ 1. Dal lake
 - ☒ 2. Wular lake
 - ☒ 3. Chilika lake
 - ☒ 4. Pulicat lake

Question ID : 9895803011
Chosen Option : 3

Q.4
2 In India, currency notes of ₹ 500 and ₹ 1,000 were declared invalid in the year?

- Ans
- ☒ 1. 1998
 - ☒ 2. 2019
 - ☒ 3. 2016
 - ☒ 4. 2001

Question ID : 9895803014
Chosen Option : 3

Q.4
3 The first lady Indian Air Force officer to fly MIG 21 is _____.

- Ans
- ☒ 1. Khusboo Mehta
 - ☒ 2. Bhavna Sharma
 - ☒ 3. Anjali Gupta
 - ☒ 4. Avani Chaturvedi

Question ID : 9895803022
Chosen Option : 3

Q.4
4 Which of the following is NOT a multicellular animal?

- Ans
- ☒ 1. Amoeba
 - ☒ 2. Cat
 - ☒ 3. Human
 - ☒ 4. Horse

Question ID : 9895803026
Chosen Option : 1

Q.4
5 Prithvi Raj Chauhan was defeated at the hands of _____, in the battle of Tarain, 1192.

- Ans
- ☒ 1. Mohammad Ghori
 - ☒ 2. Harun Al Rashid
 - ☒ 3. Abu Bakr
 - ☒ 4. Umar II

Question ID : 9895803005
Chosen Option : 1

Q.4
6 Which state has the largest coast line?

- Ans
- ☒ 1. Karnataka
 - ☒ 2. Kerala
 - ☒ 3. Tamil Nadu
 - ☒ 4. Gujarat

Question ID : 9895803008

Chosen Option : 4

Q.4 The All-India War Memorial, built in the memory of the Indian soldiers who laid down their lives in the First World War, is known today as ____.

- Ans
- ☐ 1. Char Minar
 - ☐ 2. Lal Qila
 - ☐ 3. Jama Masjid
 - ☒ 4. India Gate

Question ID : 9895803020
Chosen Option : 4

Q.4 Which Hindi movie is based on the Indian hockey team on their first Olympic gold since India became independent?

- Ans
- ☐ 1. Lagaan
 - ☐ 2. MS Dhoni
 - ☒ 3. Gold
 - ☐ 4. Chak De

Question ID : 9895803007
Chosen Option : 4

Q.4 Identify the author of the book "Straight from the heart"

- Ans
- ☐ 1. Sachin Tendulkar
 - ☒ 2. Kapil Dev
 - ☐ 3. M.S. Dhoni
 - ☐ 4. Saurav Ganguly

Question ID : 9895803021
Chosen Option : 2

Q.5 Which country gave universal suffrage since the 19th century?

- Ans
- ☐ 1. Sri Lanka
 - ☐ 2. India
 - ☐ 3. Pakistan
 - ☒ 4. New Zealand

Question ID : 9895803015
Chosen Option : 2

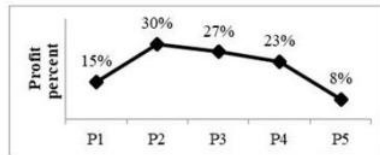
Q.5 A person purchased 12 bags of sugar at the rate of ₹ 1200 per bag, 8 bags at the rate of ₹ 1500 per bag and 10 bags at the rate of ₹ 2100 per bags. What will be the average cost of all the bags together?

- Ans
- ☐ 1. ₹ 1420
 - ☐ 2. ₹ 1680
 - ☒ 3. ₹ 1580

☒ 4. ₹ 1640

Question ID : 9895804134
Chosen Option : 3

Q.5 The line chart given below shows the profit percentage of a company on 5 different products P1, P2, P3, P4 and P5.
2



The expenditure of product P5 is ₹ 46000. What is revenue of product P5?

- Ans ☒ 1. ₹ 52780
☒ 2. ₹ 9680
☒ 3. ₹ 47360
☒ 4. ₹ 4600

Question ID : 9895804153
Chosen Option : 4

Q.5 A bowler has taken 0, 3, 2, 1, 5, 3, 4, 5, 5, 2, 2, 0, 0, 1 and 2 wickets in 15 consecutive matches.
3

What is the median of the given data?

- Ans ☒ 1. 1
☒ 2. 3
☒ 3. 0
☒ 4. 2

Question ID : 9895804137
Chosen Option : 3

Q.5 A sum of ₹ 9800 gives simple interest of ₹ 4704 in 6 years. What will be the rate of interest per annum?
4

- Ans ☒ 1. 9%
☒ 2. 8.5%
☒ 3. 8%
☒ 4. 7.5%

Question ID : 9895804144
Chosen Option : 4

Q.5 What is the value of $7\frac{1}{4} + [6 + (5 - 8 \div 4) - 1]$?
5

- Ans ☒ 1. $\frac{61}{4}$
☒ 2. $\frac{29}{2}$

☒ 3. $\frac{23}{2}$

☒ 4. $\frac{57}{4}$

Question ID : 9895804133
Chosen Option : 2

Q.5 If Rohit can cover a distance of 1188 km in 22 hours, then what is the speed of Rohit?
6

- Ans ☒ 1. 54 m/s
☒ 2. 25 m/s
☒ 3. 15 m/s
☒ 4. 48 m/s

Question ID : 9895804149
Chosen Option : 1

Q.5 The average weight of a group of 24 students increases by 2 kg when the weight of teacher is also included. If the initial
7 average weight of the group of 24 students was 30 kg, then what is the weight of teacher?

- Ans ☒ 1. 32 kg
☒ 2. 82 kg
☒ 3. 80 kg
☒ 4. 92 kg

Question ID : 9895804135
Chosen Option : 1

Q.5 Selling price and cost price of an article are ₹ 1333 and ₹ 2150. What will be the loss percentage?
8

- Ans ☒ 1. 38%
☒ 2. 61.30%
☒ 3. 48%
☒ 4. 54.4%

Question ID : 9895804139
Chosen Option : 1

Q.5 If the diameter of a circle increases by 15%, then what will be the percentage increase in its area?
9

- Ans ☒ 1. 35.75%
☒ 2. 30.3%
☒ 3. 25%
☒ 4. 32.25%

Question ID : 9895804151
Chosen Option : 1

Q.6 Mohit goes to his office at the speed of 10 m/s and returns to his home at the speed of x km/hr. If average speed of
0 Mohit for the whole journey is 12 m/s, then what is the value of x ?

- Ans
- ☒ 1. 25 km/hr
 - ☒ 2. 15 km/hr
 - ☒ 3. 36 km/hr
 - ☒ 4. 54 km/hr

Question ID : 9895804148
Chosen Option : 3

Q.6 If $A : B = 7 : 8$ and $B : C = 7 : 9$, then what is the ratio of $A : B : C$?
1

- Ans
- ☒ 1. 56 : 49 : 72
 - ☒ 2. 49 : 56 : 72
 - ☒ 3. 56 : 72 : 49
 - ☒ 4. 72 : 56 : 49

Question ID : 9895804142
Chosen Option : 1

Q.6 Rohit multiplies a number by 2 instead of dividing the number by 2. Resultant number is what percentage of the correct
2 value?

- Ans
- ☒ 1. 200%
 - ☒ 2. 300%
 - ☒ 3. 50%
 - ☒ 4. 400%

Question ID : 9895804138
Chosen Option : 4

Q.6 The perimeter of a square and a circle are same. If the area of the circle is 1386 cm^2 , then what will be the area of the
3 square?

- Ans
- ☒ 1. 1089 cm^2
 - ☒ 2. 841 cm^2
 - ☒ 3. 1024 cm^2
 - ☒ 4. 1225 cm^2

Question ID : 9895804150
Chosen Option : 2

Q.6 Rohan purchased tables at the rate of ₹ 275 per table. If he sells 16 tables for ₹ 5060, then what will be the profit
4 percentage?

- Ans
- ☒ 1. 13.04%
 - ☒ 2. 16%
 - ☒ 3. 15%
 - ☒ 4. 12.5%

Question ID : 9895804140
Chosen Option : 3

Q.6 If Highest common Factor of two numbers is 8, then which of the following cannot be their Least Common Multiple?
5

- Ans
- ☒ 1. 72
 - ☒ 2. 24
 - ☒ 3. 68
 - ☒ 4. 48

Question ID : 9895804131
Chosen Option : 4

Q.6 P and Q together can complete a work in 105 days, Q and R together can complete the same work in 90 days, P and R together can complete the same work in 126 days. In how many days P, Q and R together can complete the same work?
6

- Ans
- ☒ 1. 70 days
 - ☒ 2. 74 days
 - ☒ 3. 76 days
 - ☒ 4. 72 days

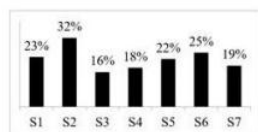
Question ID : 9895804146
Chosen Option : 2

Q.6 A alone can complete a work in 14 days and B alone can complete the same work in 21 days. A and B start the work together but A leaves the work after 4 days of the starting of work. In how many days B will complete the remaining work?
7

- Ans
- ☒ 1. 9 days
 - ☒ 2. 16 days
 - ☒ 3. 12 days
 - ☒ 4. 11 days

Question ID : 9895804147
Chosen Option : 1

Q.6 The bar chart given below shows the amount of sugar used in making 7 different varieties of sweets S1, S2, S3, S4, S5, S6 and S7 has been shown as a percentage of total weight of the sweet.
8



The combined weight of sweet S5 and S3 is 300 kg. What is the total amount of sugar used in these two sweets together?

- Ans
- ☒ 1. Cannot be determined
 - ☒ 2. 54 kg
 - ☒ 3. 57 kg
 - ☒ 4. 60 kg

Question ID : 9895804154

Chosen Option : 4

Q.6 The marked price of a chair and a table are in the ratio 2:3 respectively. The shopkeeper gives 20% discount on the chair. If the combined discount on both the chair and the table is 26%, then what will be the discount given on the table?

- Ans
- ☒ 1. 34%
 - ☒ 2. 32%
 - ☒ 3. 30%
 - ☒ 4. 28%

Question ID : 9895804136

Chosen Option : 3

Q.7 In a Company, number of engineers doubles itself in every 2 years. In how much time will the number of engineers become 1024 times of its original number?

- Ans
- ☒ 1. 12 years
 - ☒ 2. 20 years
 - ☒ 3. 15 years
 - ☒ 4. 24 years

Question ID : 9895804145

Chosen Option : 2

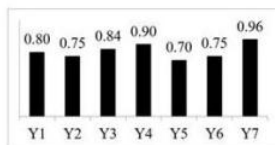
Q.7 $A : B = 5 : 8$ and $B : C = 11 : 13$. If $A = 110$, then what is the value of C ?

- Ans
- ☒ 1. 176
 - ☒ 2. 104
 - ☒ 3. 208
 - ☒ 4. 88

Question ID : 9895804143

Chosen Option : 2

Q.7 The bar chart given below shows the ratio of expenditure to revenue for seven consecutive years Y1, Y2, Y3, Y4, Y5, Y6 and Y7.



In which year is the profit highest?

- Ans
- ☒ 1. Y5
 - ☒ 2. Y6
 - ☒ 3. Cannot be determined
 - ☒ 4. Y2

Question ID : 9895804155

Chosen Option : 2

Q.7
3 If the side of a square increases by 20%, then what will be percent increase in its perimeter?

- Ans
- ☐ 1. 44%
 - ☒ 2. 20%
 - ☐ 3. 80%
 - ☐ 4. 40%

Question ID : 9895804152
Chosen Option : 4

Q.7
4 If $P : Q : R = 5 : 3 : 6$, then what will be the ratio of $(P/Q) : (Q/R) : (R/P)$?

- Ans
- ☒ 1. 50 : 15 : 36
 - ☐ 2. 50 : 45 : 36
 - ☐ 3. 75 : 15 : 36
 - ☐ 4. 40 : 12 : 27

Question ID : 9895804141
Chosen Option : 3

Q.7
5 What is the value of $\left(\frac{5}{2} \text{ of } 5 \div 4 - 2 \text{ of } \frac{1}{7} \div \frac{1}{7}\right)$?

- Ans
- ☐ 1. $\frac{13}{8}$
 - ☐ 2. $\frac{23}{18}$
 - ☐ 3. $\frac{17}{16}$
 - ☒ 4. $\frac{9}{8}$

Question ID : 9895804132
Chosen Option : 3

Section : English Language

Q.1 Select the word which means the same as the group of words given.

A disease that is prevalent in a particular area

- Ans
- ☐ 1. Genetic
 - ☐ 2. Contagious
 - ☒ 3. Endemic
 - ☐ 4. Viral

Question ID : 9895803694
Chosen Option : 4

Q.2 Select the correctly spelt word.

- Ans
- ☒ 1. Changeble
 - ☒ 2. Changable
 - ☒ 3. Chageable
 - ☒ 4. Changeable

Question ID : 9895803697
Chosen Option : 2

Q.3 Select the word which means the same as the group of words given.

One who studies and cares about environment

- Ans
- ☒ 1. Archeologist
 - ☒ 2. Ecologist
 - ☒ 3. Anthropologist
 - ☒ 4. Biologist

Question ID : 9895803695
Chosen Option : 2

Q.4 Select the most appropriate word to fill in the blank.

The Prime Minister was as good as his _____.

- Ans
- ☒ 1. word
 - ☒ 2. office
 - ☒ 3. sword
 - ☒ 4. dress

Question ID : 9895803680
Chosen Option : 2

Q.5 Select the most appropriate word to fill in the blank.

While in Rome we must do as Romans _____.

- Ans
- ☒ 1. is doing
 - ☒ 2. was doing
 - ☒ 3. had done
 - ☒ 4. do

Question ID : 9895803678
Chosen Option : 2

Q.6

Select the most appropriate word to fill in the blank.

They never _____ those who have done wrong.

- Ans
- ☒ 1. condemn
 - ☒ 2. outcast
 - ☒ 3. blame
 - ☒ 4. forgive

Question ID : 9895803681
Chosen Option : 4

Comprehension:

In the following passage some words have been deleted. Fill in the blanks with the help of the alternatives given.

Every day for a whole year, all kinds of holy men, hermits, scholars and nobles came, and related to the priests their deeds of __ (1) _____, and the priests in solemn council heard their claims. At last, they decided that the one who seemed to be the greatest lover of (2) _____ was a rich man who had that very year given all his (3) _____ to the poor. So they gave him the plate of gold, but when he took it in his hand, it turned into (4) _____ lead; though, when he dropped it on the floor, to his (5) _____, it became gold again.

SubQuestion No : 7

- Q.7 Select the most appropriate option that will fill in the blank number 1.

- Ans
- ☒ 1. charity
 - ☒ 2. kindness
 - ☒ 3. happiness
 - ☒ 4. sympathy

Question ID : 9895803683
Chosen Option : 3

Comprehension:

In the following passage some words have been deleted. Fill in the blanks with the help of the alternatives given.

Every day for a whole year, all kinds of holy men, hermits, scholars and nobles came, and related to the priests their deeds of __ (1) ____, and the priests in solemn council heard their claims. At last, they decided that the one who seemed to be the greatest lover of (2) ____ was a rich man who had that very year given all his (3) ____ to the poor. So they gave him the plate of gold, but when he took it in his hand, it turned into (4) ____ lead; though, when he dropped it on the floor, to his (5) ____, it became gold again.

SubQuestion No : 8

Q.8 Select the most appropriate option that will fill in the blank number 2.

- Ans
- ☒ 1. destitute
 - ☒ 2. moneyless
 - ☒ 3. mankind
 - ☒ 4. women

Question ID : 9895803684
Chosen Option : 3

Comprehension:

In the following passage some words have been deleted. Fill in the blanks with the help of the alternatives given.

Every day for a whole year, all kinds of holy men, hermits, scholars and nobles came, and related to the priests their deeds of __ (1) ____, and the priests in solemn council heard their claims. At last, they decided that the one who seemed to be the greatest lover of (2) ____ was a rich man who had that very year given all his (3) ____ to the poor. So they gave him the plate of gold, but when he took it in his hand, it turned into (4) ____ lead; though, when he dropped it on the floor, to his (5) ____, it became gold again.

SubQuestion No : 9

Q.9 Select the most appropriate option that will fill in the blank number 3.

- Ans
- ☒ 1. wealth
 - ☒ 2. energy
 - ☒ 3. time
 - ☒ 4. life

Question ID : 9895803685
Chosen Option : 3

Comprehension:

In the following passage some words have been deleted. Fill in the blanks with the help of the alternatives given.

Every day for a whole year, all kinds of holy men, hermits, scholars and nobles came, and related to the priests their deeds of __ (1) _____, and the priests in solemn council heard their claims. At last, they decided that the one who seemed to be the greatest lover of (2) _____ was a rich man who had that very year given all his (3) _____ to the poor. So they gave him the plate of gold, but when he took it in his hand, it turned into (4) _____ lead; though, when he dropped it on the floor, to his (5) _____, it became gold again.

SubQuestion No : 10

Q.1
0 Select the most appropriate option that will fill in the blank number 4.

- Ans
- ☒ 1. gold
 - ☒ 2. worthy
 - ☒ 3. worthless
 - ☒ 4. valuable

Question ID : 9895803686

Chosen Option : 2

Comprehension:

In the following passage some words have been deleted. Fill in the blanks with the help of the alternatives given.

Every day for a whole year, all kinds of holy men, hermits, scholars and nobles came, and related to the priests their deeds of __ (1) _____, and the priests in solemn council heard their claims. At last, they decided that the one who seemed to be the greatest lover of (2) _____ was a rich man who had that very year given all his (3) _____ to the poor. So they gave him the plate of gold, but when he took it in his hand, it turned into (4) _____ lead; though, when he dropped it on the floor, to his (5) _____, it became gold again.

SubQuestion No : 11

Q.1
1 Select the most appropriate option that will fill in the blank number 5.

- Ans
- ☒ 1. confusion
 - ☒ 2. happiness
 - ☒ 3. admiration
 - ☒ 4. amazement

Question ID : 9895803687

Chosen Option : 2

Q.1
2 Select the antonym of the given word.

HORIZONTAL

- Ans
- ☒ 1. Parallel
 - ☒ 2. Financial
 - ☒ 3. Official
 - ☒ 4. Vertical

Question ID : 9895803689

Chosen Option : 1

Q.1
3 From the given options, identify the segment in the sentence which contains the grammatical error.

Does he like to go for sightseeing when he is in holiday?

- Ans
- ☒ 1. when he is
 - ☒ 2. Does he like
 - ☒ 3. in holiday?
 - ☒ 4. to go for sightseeing

Question ID : 9895803672

Chosen Option : 3

Q.1
4 Select the option that means the same as the given idiom.

In a nutshell

- Ans
- ☒ 1. In discussion
 - ☒ 2. In writing
 - ☒ 3. In detail
 - ☒ 4. In brief

Question ID : 9895803692

Chosen Option : 2

Q.1
5 Select the most appropriate word to fill in the blank.

I make friends _____ I go.

- Ans
- ☒ 1. moreover
 - ☒ 2. wherever
 - ☒ 3. however
 - ☒ 4. whenever

Question ID : 9895803679

Chosen Option : 4

Q.1
6 Select the synonym of the given word.

APPARENT

- Ans
- ☒ 1. Considerable
 - ☒ 2. Doubtful
 - ☒ 3. Obvious
 - ☒ 4. Questionable

Question ID : 9895803690
Chosen Option : 1

Q.1
7 From the given options, identify the segment in the sentence which contains the grammatical error.

She was known for her skills in dance and music; she is equal proficient in the allied art of painting.

- Ans
- ☒ 1. skills in dance
 - ☒ 2. allied art of painting
 - ☒ 3. was known
 - ☒ 4. is equal proficient

Question ID : 9895803673
Chosen Option : 2

Q.1
8 Select the antonym of the given word.

ABOLISH

- Ans
- ☒ 1. Build
 - ☒ 2. Affirm
 - ☒ 3. Cancel
 - ☒ 4. Finish

Question ID : 9895803688
Chosen Option : 1

Q.1
9 From the given options, identify the segment in the sentence which contains the grammatical error.

The population of Sri Lanka are less than that of India.

- Ans
- ☒ 1. than that
 - ☒ 2. Sri Lanka are
 - ☒ 3. of India
 - ☒ 4. The population

Question ID : 9895803674
Chosen Option : 2

Q.2
0 Select the correctly spelt word.

- Ans
- ☒ 1. Millennium

- ☐ 2. Millenium
- ☐ 3. Millenniummm
- ☒ 4. Millennium

Question ID : 9895803696
Chosen Option : 3

Q.2 Select the most appropriate option to substitute the underlined segment in the given sentence. If there is no need to substitute it, select No Improvement.

The football coach urged the team were give its best to the final match.

- Ans
- ☐ 1. No Improvement.
 - ☐ 2. That it give its best
 - ☐ 3. Try to give it best
 - ☒ 4. To give its best

Question ID : 9895803676
Chosen Option : 2

Q.2 Select the synonym of the given word.

CURATIVE

- Ans
- ☐ 1. Trembling
 - ☐ 2. Damaging
 - ☐ 3. Feeding
 - ☒ 4. Healing

Question ID : 9895803691
Chosen Option : 3

Q.2 Select the most appropriate option to substitute the underlined segment in the given sentence. If there is no need to substitute it, select No Improvement.

She give me everything I asked for.

- Ans
- ☐ 1. Is giving me everything
 - ☒ 2. gave me everything
 - ☐ 3. No Improvement
 - ☐ 4. gave myself everything

Question ID : 9895803677
Chosen Option : 1

Q.2 Select the most appropriate option to substitute the underlined segment in the given sentence. If there is no need to substitute it, select No Improvement.

A Study has shown that the use of mobile data in India have increased 50 times over the last three years

- Ans
- ☐ 1. No improvement
 - ☒ 2. has increased 50 times

- ☒ 3. Has been increased to 50 times
☒ 4. Is increasing 50 times

Question ID : 9895803675
Chosen Option : 3

Q.2 Select the option that means the same as the given idiom.

To keep an eye on

- Ans ☒ 1. To keep a watch
☒ 2. To be cautious
☒ 3. To follow
☒ 4. To stare

Question ID : 9895803693
Chosen Option : 2

Section : Hindi Language

Q.1 दिए गए शब्द का विलोम चुनें।

उत्थान

- Ans ☒ 1. गमन
☒ 2. जड़
☒ 3. चलन
☒ 4. पतन

Question ID : 9895803456
Chosen Option : --

Q.2 दिये गये वाक्यांश के लिए एक शब्द चुनिए।

रात में घूमने वाला

- Ans ☒ 1. दिनचर
☒ 2. निशाचर
☒ 3. शनिचर
☒ 4. खगचर

Question ID : 9895803463
Chosen Option : --

Q.3 सही वर्तनी वाले शब्द का चयन करें।

Ans

- ☒ 1. सर्वभक्षी
- ☒ 2. सरवभक्षी
- ☒ 3. सरवभक्षी
- ☒ 4. सर्वभक्षी

Question ID : 9895803464
Chosen Option : --

Q.4 दिए गए वाक्य का वह भाग ज्ञात करें जिसमें कोई त्रुटि है।

आत्मसम्माननी व्यक्ति का हृदय में लोभ का भाव नहीं होता।

- Ans
- ☒ 1. नहीं होता।
 - ☒ 2. आत्मसम्माननी व्यक्ति का
 - ☒ 3. हृदय में
 - ☒ 4. लोभ का भाव

Question ID : 9895803441
Chosen Option : --

Q.5 रिक्त स्थान को भरने के लिए सबसे उपयुक्त शब्द का चयन करें।

सूर्य उदय के _____ में भी जाग जाता हूँ।

- Ans
- ☒ 1. अंदर बाहर
 - ☒ 2. आगे पीछे
 - ☒ 3. ऊपर नीचे
 - ☒ 4. साथ

Question ID : 9895803446
Chosen Option : --

Comprehension:

दिए गए अनुच्छेद में कुछ शब्द हटा दिए गए हैं। दिए गए विकल्पों की सहायता से रिक्त स्थान भरें। प्रत्येक संख्या के लिए सबसे उपयुक्त विकल्प का चयन करें।

भाग्य परिवर्तन के लिए _____(1) ही एकमात्र सहारा है। केवल इच्छाओं द्वारा वांछित फल की _____(2) असंभव है। यदि व्यक्ति दिन में सपने देखता रहे, समुद्र के किनारे _____(3) धरकर बैठा रहे तो कोई लाभ न होगा। परिश्रमी व्यक्ति ही गोता लगाकर अतुल संपत्ति पा सकता है। परिश्रम ही _____(4) की कुंजी है। यह मनुष्य को स्वावलंबी व _____(5) बनाती है।

SubQuestion No : 6

Q.6 गद्यांश में संकेतित रिक्त स्थान (1) के लिए उपयुक्त शब्द होगा -

- Ans
- ☒ 1. परिश्रम
 - ☒ 2. आलस
 - ☒ 3. नींद
 - ☒ 4. खाना

Question ID : 9895803451

Chosen Option : --

Comprehension:

दिए गए अनुच्छेद में कुछ शब्द हटा दिए गए हैं। दिए गए विकल्पों की सहायता से रिक्त स्थान भरें। प्रत्येक संख्या के लिए सबसे उपयुक्त विकल्प का चयन करें।

भाग्य परिवर्तन के लिए _____(1) ही एकमात्र सहारा है। केवल इच्छाओं द्वारा वांछित फल की _____(2) असंभव है। यदि व्यक्ति दिन में सपने देखता रहे, समुद्र के किनारे _____(3) धरकर बैठा रहे तो कोई लाभ न होगा। परिश्रमी व्यक्ति ही गोता लगाकर अतुल संपत्ति पा सकता है। परिश्रम ही _____(4) की कुंजी है। यह मनुष्य को स्वावलंबी व _____(5) बनाती है।

SubQuestion No : 7

Q.7 गद्यांश में संकेतित रिक्त स्थान (2) के लिए उपयुक्त शब्द होगा -

- Ans
- ☒ 1. लेख
 - ☒ 2. प्राप्ति
 - ☒ 3. मौका
 - ☒ 4. गति

Question ID : 9895803452

Comprehension:

दिए गए अनुच्छेद में कुछ शब्द हटा दिए गए हैं। दिए गए विकल्पों की सहायता से रिक्त स्थान भरें। प्रत्येक संख्या के लिए सबसे उपयुक्त विकल्प का चयन करें।

भाग्य परिवर्तन के लिए _____(1) ही एकमात्र सहारा है। केवल इच्छाओं द्वारा वांछित फल की _____(2) असंभव है। यदि व्यक्ति दिन में सपने देखता रहे, समुद्र के किनारे _____(3) धरकर बैठा रहे तो कोई लाभ न होगा। परिश्रमी व्यक्ति ही गोता लगाकर अतुल संपत्ति पा सकता है। परिश्रम ही _____(4) की कुंजी है। यह मनुष्य को स्वावलंबी व _____(5) बनाती है।

SubQuestion No : 8

Q.8 गद्यांश में संकेतित रिक्त स्थान (3) के लिए उपयुक्त शब्द होगा -

- Ans
- ☒ 1. पैर पर पैर
 - ☒ 2. हाथ पर हाथ
 - ☒ 3. मुँह पर मुँह
 - ☒ 4. आँख पर आँख

Question ID : 9895803453

Chosen Option : --

Comprehension:

दिए गए अनुच्छेद में कुछ शब्द हटा दिए गए हैं। दिए गए विकल्पों की सहायता से रिक्त स्थान भरें। प्रत्येक संख्या के लिए सबसे उपयुक्त विकल्प का चयन करें।

भाग्य परिवर्तन के लिए _____(1) ही एकमात्र सहारा है। केवल इच्छाओं द्वारा वांछित फल की _____(2) असंभव है। यदि व्यक्ति दिन में सपने देखता रहे, समुद्र के किनारे _____(3) धरकर बैठा रहे तो कोई लाभ न होगा। परिश्रमी व्यक्ति ही गोता लगाकर अतुल संपत्ति पा सकता है। परिश्रम ही _____(4) की कुंजी है। यह मनुष्य को स्वावलंबी व _____(5) बनाती है।

SubQuestion No : 9

Q.9 गद्यांश में संकेतित रिक्त स्थान (4) के लिए उपयुक्त शब्द होगा -

- Ans
- ☒ 1. विफलता
 - ☒ 2. प्रसन्नता
 - ☒ 3. भाग्य

✗ 4. सफलता

Question ID : 9895803454
Chosen Option : --

Comprehension:

दिए गए अनुच्छेद में कुछ शब्द हटा दिए गए हैं। दिए गए विकल्पों की सहायता से रिक्त स्थान भरें। प्रत्येक संख्या के लिए सबसे उपयुक्त विकल्प का चयन करें।

भाग्य परिवर्तन के लिए _____(1) ही एकमात्र सहारा है। केवल इच्छाओं द्वारा वांछित फल की _____(2) असंभव है। यदि व्यक्ति दिन में सपने देखता रहे, समुद्र के किनारे _____(3) धरकर बैठा रहे तो कोई लाभ न होगा। परिश्रमी व्यक्ति ही गोता लगाकर अतुल संपत्ति पा सकता है। परिश्रम ही _____(4) की कुंजी है। यह मनुष्य को स्वावलंबी व _____(5) बनाती है।

SubQuestion No : 10

Q.1
0 गद्यांश में संकेतित रिक्त स्थान (5) के लिए उपयुक्त शब्द होगा -

- Ans
- ✗ 1. सुस्त
 - ✓ 2. उपेक्षित
 - ✗ 3. आलसी
 - ✗ 4. स्वाभिमानि

Question ID : 9895803455
Chosen Option : --

Q.1
1 दिए गए शब्द के पर्यायवाची शब्द का चयन करें।

आगतुक

- Ans
- ✓ 1. अतिथि
 - ✗ 2. अनोखा
 - ✗ 3. अनुचर
 - ✗ 4. आत्मज

Question ID : 9895803459
Chosen Option : --

Q.1
2

रिक्त स्थान को भरने के लिए सबसे उपयुक्त शब्द का चयन करें।

घोड़ा _____ रहा है।

- Ans
- ☒ 1. हिनहिना
 - ☒ 2. कूक
 - ☒ 3. मिमिया
 - ☒ 4. भौंक

Question ID : 9895803449

Chosen Option : --

Q.1
3 दिए गए शब्द का विलोम चुनें।

निर्माण

- Ans
- ☒ 1. अहित
 - ☒ 2. कोमल
 - ☒ 3. निश्चित
 - ☒ 4. ध्वंस

Question ID : 9895803457

Chosen Option : --

Q.1
4 दिए गए शब्द के पर्यायवाची शब्द का चयन करें।

बिजली

- Ans
- ☒ 1. वात
 - ☒ 2. दामिनी
 - ☒ 3. रिपु
 - ☒ 4. व्याध्र

Question ID : 9895803458

Chosen Option : --

Q.1
5 दिए गए वाक्य में रेखांकित खंड को प्रतिस्थापित करने के लिए सबसे उपयुक्त विकल्प का चयन करें।

यात्रा का प्रबन्ध शीघ्रता में हुआ था, अतः न तो उनके पास पर्याप्त वस्त्र थी और न ही धन का पूरा प्रबन्ध।

- Ans
- ☒ 1.

न तो उनके पास पर्याप्त वस्त्र थी और न ही धन को पूरा प्रबंध।

✗ 2.

न तो उनके पास पर्याप्त वस्त्र थे, और न ही धन का पूरा प्रबंध।

✗ 3.

न तो उनके पास पर्याप्त वस्त्र थे, और न ही धन की पूरा प्रबंध।

✗ 4.

न तो उनके पास पर्याप्त वस्त्र थे, और नही धन को पूरा प्रबंध।

Question ID : 9895803444

Chosen Option : --

Q.1 निम्नलिखित में से उस विकल्प का चयन करें जो 'अँगूठा दिखाना' मुहावरे का अर्थ व्यक्त करता है।

Ans

✗ 1. मौके पर मना कर देना

✗ 2. हँसना

✗ 3. चिढ़ाना

✓ 4. अँगूठा दिखाकर हँसी उड़ाना

Question ID : 9895803460

Chosen Option : --

Q.1 दिए गए वाक्य में रेखांकित खंड को प्रतिस्थापित करने के लिए सबसे उपयुक्त विकल्प का चयन करें।

छात्र जब परिश्रम के मार्ग पर चलता है, तो उसे सफलता व संतुष्टि का फल मिलती है।

Ans

✗ 1. फलों मिलना है।

✗ 2. फल मिलती हैं।

✗ 3. फल मिलता है।

✓ 4. फल मिलते हैं।

Question ID : 9895803443

Chosen Option : --

Q.1 दिए गए वाक्य का वह भाग ज्ञात करें जिसमें कोई त्रुटि है।

इतने वर्षों की उपरांत मिलने पर हम बहुत खुश हुए।

Ans

✗ 1. हम बहुत

✗ 2. खुश हुए।

✓ 3. इतने वर्षों की उपरांत

✗ 4. मिलने पर

Question ID : 9895803442

Chosen Option : --

Q.1
9 रिक्त स्थान को भरने के लिए सबसे उपयुक्त शब्द का चयन करें।

_____ बारिश हो रही है।

Ans

✗ 1. रिमझिम

✓ 2. सिमसिम

✗ 3. खड़खड़

✗ 4. कलकल

Question ID : 9895803447

Chosen Option : --

Q.2
0 निम्नलिखित में से उस विकल्प का चयन करें जो 'अपने मुँह मियाँ मिट्टू बनना' मुहावरे का अर्थ व्यक्त करता है।

Ans

✗ 1. अपनी प्रशंसा स्वयं करना

✓ 2. अपने मुँह से मिट्टू पकड़ना

✗ 3. दूसरों की प्रशंसा करना

✗ 4. अपनी प्रशंसा दूसरों से सुनना

Question ID : 9895803461

Chosen Option : --

Q.2
1 सही वर्तनी वाले शब्द का चयन करें।

Ans

✗ 1. आजनम

✓ 2. अजम्ना

✗ 3. अजनम

✗ 4. अजन्मा

Question ID : 9895803465

Chosen Option : --

Q.2
2 दिए गए वाक्य का वह भाग ज्ञात करें जिसमें कोई त्रुटि है।

युवक ही किसी देश को शक्ति का आधार होते हैं।

- Ans
- ☒ 1. आधार होते हैं।
 - ☒ 2. शक्ति का
 - ☒ 3. युवक ही
 - ☒ 4. किसी देश को

Question ID : 9895803440

Chosen Option : --

Q.2
3 दिए गए वाक्य में रेखांकित खंड को प्रतिस्थापित करने के लिए सबसे उपयुक्त विकल्प का चयन करें।

आज सुबह से बारिश हो रही है और बच्चा बारिश में नहा रहा है।

- Ans
- ☒ 1. बच्चा बारिश में नहा रहा है।
 - ☒ 2. बच्चों बारिश में नहा रही है।
 - ☒ 3. बच्चे बारिशों में नहा रहा है।
 - ☒ 4. बच्चा बारिश में नहा रही है।

Question ID : 9895803445

Chosen Option : --

Q.2
4 रिक्त स्थान को भरने के लिए सबसे उपयुक्त शब्द का चयन करें।

आज प्रत्येक गाँव में _____ खोले जा रहे हैं।

- Ans
- ☒ 1. बंदरगाह
 - ☒ 2. विश्वविद्यालय
 - ☒ 3. हवाई अड्डे
 - ☒ 4. विद्यालय

Question ID : 9895803448

Chosen Option : --

Q.2
5 दिये गये वाक्यांश के लिए एक शब्द चुनिए।

जो देखने योग्य हो

- Ans
- ☒ 1. दर्शनीय
 - ☒ 2. शोभनीय

✓ 3. प्रशंसनीय

✗ 4. रमणीय

Question ID : 9895803462
Chosen Option : --

Constable (GD) in CAPFs, NIA, SSF and Rifleman (GD) in Assam Rifles Examination, 2018

| | |
|------------------|-------------------|
| Roll No. : | |
| Registration No. | |
| Name : | |
| Exam Venue : | |
| Exam Time : | 4:00 PM - 5:30 PM |
| Exam Date : | 12/02/2019 |

Section : **General Section**

Q.1 Select the option that is related to the third term in the same way as the second term is related to the first term.

Myanmar : Kyat :: Pakistan : ?

- Ans ☒ 1. Dirham
☒ 2. Rial
☒ 3. Rupee
☒ 4. Dinar

Question ID : **9895804695**
 Chosen Option : **3**

Q.2 Select the option that is related to the third number in the same way as the second number is related to the first number.

22 : 625 :: 13 : ?

- Ans ☒ 1. 221
☒ 2. 169
☒ 3. 256
☒ 4. 144

Question ID : **9895804707**
 Chosen Option : **3**

Q.3 Eight friends A, B, C, D, E, F, G and H are sitting around a circular table facing each other for a lunch. A is opposite F and third to the right of B. G is between F and D. H is to the left of D. E is between C and A. Who is sitting third to the right of C?

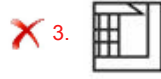
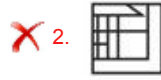
- Ans ☒ 1. G
☒ 2. A
☒ 3. H
☒ 4. D

Question ID : **9895804701**
 Chosen Option : **3**

Q.4 Select a figure from amongst the four alternatives that when placed in the blank space (?) of figure X will complete the pattern. (Rotation is NOT allowed).



Ans



Question ID : 9895804712
Chosen Option : 4

Q.5 Select the correct option that will fill in the blank and complete the series.

NIX, LKV, JMT, HOR, ____

- Ans
- ✗ 1. FQQ
 - ✗ 2. FOP
 - ✗ 3. FQO
 - ✓ 4. FQP

Question ID : 9895804692
Chosen Option : 4

Q.6 A square transparent sheet with a pattern is given. How will the pattern appear when the transparent sheet is folded along the dotted line?



- Ans
- ✗ 1.
 - ✗ 2.
 - ✗ 3.
 - ✓ 4.

Question ID : 9895804715
Chosen Option : 4

Q.7

Which number will follow next in the given number series?

8, 9, 17, 44, ?

- Ans
- ☒ 1. 105
 - ☒ 2. 100
 - ☒ 3. 108
 - ☒ 4. 103

Question ID : 9895804706
Chosen Option : 3

Q.8 Choose the odd number out of the given options.

- Ans
- ☒ 1. 718
 - ☒ 2. 415
 - ☒ 3. 545
 - ☒ 4. 314

Question ID : 9895804708
Chosen Option : 3

Q.9 Select the option that is related to the third term in the same way as the second term is related to the first term.

Larva : Insect :: Lamb : ?

- Ans
- ☒ 1. Deer
 - ☒ 2. Child
 - ☒ 3. Lion
 - ☒ 4. Sheep

Question ID : 9895804696
Chosen Option : 4

Q.1 The statements below are followed by two conclusions labeled I and II. Assuming that the information in the statements is true, even if it appears to be at variance with generally established facts, decide which conclusion(s) logically and definitely follow(s) from the information given in the statements.

Statements:

- 1.) All pupils are crows.
- 2.) All cats are crows.

Conclusion

- I. Some cats are pupils.
- II. No cat is pupil.

- Ans
- ☒ 1. Both conclusions follow.
 - ☒ 2. Only conclusion I follows.
 - ☒ 3. Either conclusion I or conclusion II follows.
 - ☒ 4. Only conclusion II follows.

Question ID : **9895804703**
Chosen Option : **3**

Q.1 J, K, L, M, N and O are six teachers. Each one teaches a different subject out of Hindi, English, Math, Science, Social Science and Arts, NOT necessarily in the same order. Each of them teaches on only one day, from Monday to Saturday, NOT necessarily in the same order. J teaches Arts on Saturday. L teaches neither English nor Social Science, but he teaches on Thursday. Wednesday is reserved for Maths taught by K. O teaches Science a day before N. Social Science is taught a day before Arts. Who teaches Social Science?

- Ans** ☒ 1. M
☒ 2. O
☒ 3. N
☒ 4. J

Question ID : **9895804702**
Chosen Option : **1**

Q.1 Choose the option in which the figure marked 'X' is embedded.



X

- Ans** ☒ 1.
☒ 2.
☒ 3.
☒ 4.

Question ID : **9895804713**
Chosen Option : **1**

Q.1 In a certain code, SPADE is written as 45. How will ABODE be written in that code?

- Ans** ☒ 1. 29
☒ 2. 59
☒ 3. 27
☒ 4. 39

Question ID : **9895804699**
Chosen Option : **3**

Q.1
4

The statements below are followed by two conclusions labeled I and II. Assuming that the information in the statements is true, even if it appears at variance with generally established facts, decide which conclusion(s) logically and definitely follow(s) from the information given in the statements.

Statements:

- 1.) Some guns are spiders.
- 2.) Some spiders are peasants.

Conclusion

- I. Some guns are peasants.
- II. Some peasants are guns.

- Ans ☒ 1. Both conclusions follow.
- ☒ 2. Neither conclusion I nor conclusion II follows.
- ☒ 3. Only conclusion II follows.
- ☒ 4. Only conclusion I follows.

Question ID : 9895804704
Chosen Option : 2

Q.1 Select the option that will correctly replace the question mark (?) in the given pattern.

| | | |
|----|-----|----|
| 5 | 15 | 6 |
| 7 | 5 | ? |
| 32 | 230 | 42 |


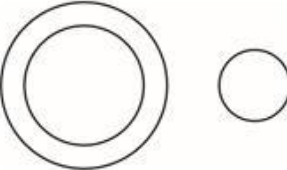
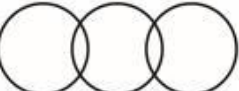
- Ans ☒ 1. 6
- ☒ 2. 13
- ☒ 3. 9
- ☒ 4. 11

Question ID : 9895804709
Chosen Option : 1

Q.1 Select the Venn diagram that best represents the given set of classes.

Nepal, Asia, Kathmandu

Ans

- ☒ 1. 
- ☒ 2. 
- ☒ 3. 

X 4.



Question ID : 9895804716

Chosen Option : 1

Q.1 Seven friends O, P, Q, R, S, T and U are watching a movie sitting in a row. S is sitting at one extreme end. Q is sitting second to the right of S. P is sitting between O and Q. U is NOT sitting at any extreme end. R is sitting to the left of T. Who is sitting at the extreme left end?

- Ans
- X 1. Q
 - X 2. R
 - X 3. P
 - ✓ 4. S

Question ID : 9895804700

Chosen Option : 4

Q.1 In a certain code, UNHAPPY is written as PPYAHNU. How will FALLACY be written in that code?

- Ans
- X 1. ACYLALF
 - ✓ 2. ACYLLAF
 - X 3. YCALLAF
 - X 4. ACYLA AF

Question ID : 9895804698

Chosen Option : 2

Q.1 Which number will follow next in the given number series?

3, 16, 29, 42, ?

- Ans
- X 1. 61
 - X 2. 57
 - ✓ 3. 55
 - X 4. 54

Question ID : 9895804705

Chosen Option : 3

Q.2 Choose the odd one out of the given options.

- Ans
- X 1. DEP
 - X 2. BFQ
 - ✓ 3. JPC
 - X 4. LHE

Question ID : 9895804693

Chosen Option : 3

Q.2

1 Find out the two signs to be interchanged to make the following equation correct.

$$22 + 11 \times 22 - 2 \div 3 = 45$$

- Ans
- ☒ 1. \times and \div
 - ☒ 2. $-$ and \times
 - ☒ 3. $-$ and \div
 - ☒ 4. $+$ and \div

Question ID : 9895804710
Chosen Option : 4

Q.2 Choose the option that most closely resembles the mirror image of the given word when mirror is placed at right side.

2
SEQUEL

- Ans
- ☒ 1. SEQUEL
 - ☒ 2. SEQUEL
 - ☒ 3. SEQUEL
 - ☒ 4. SEQUEL

Question ID : 9895804714
Chosen Option : 1

Q.2 Choose the odd one out of the given options.

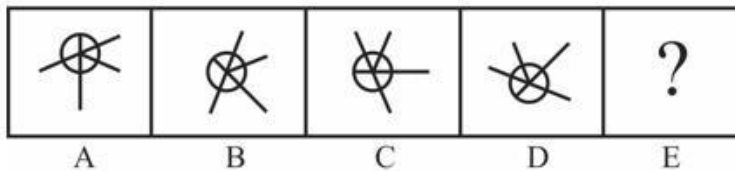
3

- Ans
- ☒ 1. Eagle
 - ☒ 2. Crow
 - ☒ 3. Owl
 - ☒ 4. Ostrich

Question ID : 9895804694
Chosen Option : 4

Q.2 Choose the option that would follow next in the given figure series.

4



Ans

- ☒ 1.
- ☒ 2.

✗ 3.



✓ 4.



Question ID : 9895804711
Chosen Option : 4

Q.2 5 Select the option that is related to the third term in the same way as the second term is related to the first term.

ACG : DFD :: CIU : ?

Ans

- ✓ 1. FLR
- ✗ 2. RLL
- ✗ 3. LFR
- ✗ 4. EGF

Question ID : 9895804697
Chosen Option : 1

Q.2 6 What does PMGY stands for?

Ans

- ✓ 1. Pradhan Mantri Gramodaya Yojana
- ✗ 2. Pradhan Mantri Gram Yojana
- ✗ 3. Pradhan Mantri Gareeb Yojana
- ✗ 4. Pradhan Mantri Gurukul Yojana

Question ID : 9895802508
Chosen Option : 1

Q.2 7 _____ is the highest military decoration awarded for displaying distinguished acts of valour during war.

Ans

- ✗ 1. Mahavir Chakra
- ✓ 2. Param Vir Chakra
- ✗ 3. Sena Medal
- ✗ 4. Shaurya Chakra

Question ID : 9895802516
Chosen Option : 2

Q.2 8 'Deuce' is a term associated with _____.

Ans

- ✗ 1. baseball
- ✗ 2. cricket
- ✗ 3. hockey
- ✓ 4. lawn tennis

Question ID : 9895802502
Chosen Option : 1

Q.2
9 Garba is a folk dance which originated in _____.

- Ans
- ☐ 1. Rajasthan
 - ☐ 2. Maharashtra
 - ☐ 3. Bihar
 - ☒ 4. Gujarat

Question ID : 9895802513
Chosen Option : 4

Q.3
0 After Independence, _____ became India's first Deputy Prime Minister.

- Ans
- ☐ 1. Morarji Desai
 - ☒ 2. Sardar Vallabhai Patel
 - ☐ 3. Jagjivan Ram
 - ☐ 4. Charan Singh

Question ID : 9895802500
Chosen Option : 2

Q.3
1 Zamindari System was introduced by _____ in 1793.

- Ans
- ☐ 1. Curzon
 - ☒ 2. Cornwallis
 - ☐ 3. Clint
 - ☐ 4. Clive

Question ID : 9895802499
Chosen Option : 2

Q.3
2 Among the following options, _____ is the highest mountain peak of the Himalayas in India.

- Ans
- ☒ 1. Kanchenjunga
 - ☐ 2. Namcha Barwa
 - ☐ 3. Nanda Devi
 - ☐ 4. Mount Everest

Question ID : 9895802506
Chosen Option : 1

Q.3
3 Which of the following are NOT Trade Barriers?

- Ans
- ☐ 1. Embargo
 - ☐ 2. Subsidies
 - ☒ 3. Export Security
 - ☐ 4. Tariff Barriers

Question ID : 9895802509
Chosen Option : 2

Q.3
4 The vast meadows in the high elevation ranges of the Himalayas are called _____.

- Ans ☒ 1. Green meadows
☒ 2. Bhabar
☒ 3. Bugyal
☒ 4. Maru

Question ID : 9895802501
Chosen Option : 1

Q.3
5 _____ is the harvest festival of Kerala.

- Ans ☒ 1. Pongal
☒ 2. Lohri
☒ 3. Baisakhi
☒ 4. Onam

Question ID : 9895802515
Chosen Option : 4

Q.3
6 Who was the only Pakistani national who was awarded the Bharat Ratna?

- Ans ☒ 1. Khan Abdul Ghaffar Khan
☒ 2. Benazir Bhutto
☒ 3. Nawaz Sharif
☒ 4. Imran Khan

Question ID : 9895802517
Chosen Option : 1

Q.3
7 The river _____ is the only natural water source that drains inside a lake in the desert.

- Ans ☒ 1. Ganga
☒ 2. Luni
☒ 3. Teesta
☒ 4. Kali

Question ID : 9895802504
Chosen Option : 2

Q.3
8 _____ is the largest democracy the world.

- Ans ☒ 1. Sweden
☒ 2. Norway
☒ 3. India
☒ 4. Iceland

Question ID : 9895802510
Chosen Option : 3

Q.3
9 Saikhom Mirabai Chanu received the Padma Shri award in 2018, for _____.

- Ans ☒ 1. wrestling
☒ 2. weight lifting

☒ 3. athletics

☒ 4. cricket

Question ID : 9895802503

Chosen Option : 1

Q.4
0 The swampy belt of the northern Indian plains is known as _____.

Ans ☒ 1. Bhangra

☒ 2. Terai

☒ 3. Doab

☒ 4. Khadar

Question ID : 9895802505

Chosen Option : 2

Q.4
1 The green revolution did NOT include:

Ans ☒ 1. use of advanced technology in farming.

☒ 2. upgradation of the roads of the village.

☒ 3. use of well-developed system of irrigation.

☒ 4. high yielding varieties of seeds.

Question ID : 9895802507

Chosen Option : 2

Q.4
2 What is the name of the first mammal clone (sheep)?

Ans ☒ 1. Dolly

☒ 2. Sheep

☒ 3. Polly

☒ 4. Shan

Question ID : 9895802519

Chosen Option : 1

Q.4
3 The Bharatiya Janata Party's (BJP) origins lie in the Bharatiya Jana Sangh, founded by _____.

Ans ☒ 1. Syama Prasad Mukherjee

☒ 2. Atal Bihari Vajpayee

☒ 3. Lal Krishna Advani

☒ 4. Murli Manohar Joshi

Question ID : 9895802511

Chosen Option : 1

Q.4
4 Which of the following is NOT a classical dance form?

Ans ☒ 1. Kathakali

☒ 2. Odissi

☒ 3. Kathak

✓ 4. Kalbeliya

Question ID : 9895802514
Chosen Option : 4

Q.4
5 In India, states with _____ of population get more representatives.

- Ans
- ✗ 1. Higher Income
 - ✓ 2. Larger size
 - ✗ 3. Lower Income
 - ✗ 4. Small Size

Question ID : 9895802512
Chosen Option : 2

Q.4
6 The pen name of Sampooran Singh Kalra, an Indian poet, lyricist and film director is _____.

- Ans
- ✗ 1. Taalib
 - ✗ 2. Daagh
 - ✓ 3. Gulzar
 - ✗ 4. Arzu

Question ID : 9895802518
Chosen Option : 3

Q.4
7 The brain is a part of the _____ system.

- Ans
- ✗ 1. circulatory
 - ✓ 2. nervous
 - ✗ 3. endocrine
 - ✗ 4. digestive

Question ID : 9895802521
Chosen Option : 2

Q.4
8 _____ is called 'the power house of the cell'.

- Ans
- ✗ 1. Nucleus
 - ✓ 2. Mitochondria
 - ✗ 3. Cell membrane
 - ✗ 4. Golgi bodies

Question ID : 9895802523
Chosen Option : 2

Q.4
9 _____ is responsible for oxygen transportation in humans.

- Ans
- ✓ 1. Haemoglobin
 - ✗ 2. Mucus
 - ✗ 3. Melanin
 - ✗ 4. Lymph

Question ID : 9895802522
Chosen Option : 1

Q.5 _____ is the best conductor of heat.

- Ans
- ☒ 1. Stainless steel
 - ☒ 2. Silver
 - ☒ 3. Mercury
 - ☒ 4. Lead

Question ID : 9895802520
Chosen Option : 3

Q.5 The average daily rainfall of town A is 105 for first 2 days of the week, 84 for next 3 days and 49 for the last 2 days of the week. The total weekly rainfall for town B is 455. What will be the average daily rainfall of both the towns together?

- Ans
- ☒ 1. 145
 - ☒ 2. 138
 - ☒ 3. 159
 - ☒ 4. 152

Question ID : 9895804313
Chosen Option : 1

Q.5 A train is moving with a uniform speed. Train crosses a bridge of length 340 meters in 35 seconds and a bridge of length 460 meters in 38 seconds. What is the speed of the train?

- Ans
- ☒ 1. 144 km/hr
 - ☒ 2. 72 km/hr
 - ☒ 3. 40 km/hr
 - ☒ 4. 80 km/hr

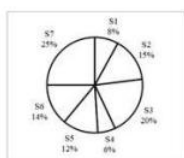
Question ID : 9895804326
Chosen Option : 1

Q.5 If cost price of 80 articles is equal to the selling price of 50 articles, then what will be the profit percentage?

- Ans
- ☒ 1. 37.5%
 - ☒ 2. 25%
 - ☒ 3. 60%
 - ☒ 4. 40%

Question ID : 9895804317
Chosen Option : 3

Q.5 The pie chart given below shows the annual snowfall received by 7 states of a country. The snowfall is shown as a percentage of total annual snowfall of the country.



If the annual snowfall received by the country is 700 cm, then what is the monthly snowfall received by S5?

- Ans
- ☒ 1. 12 cm
 - ☒ 2. 21 cm

- ☒ 3. 5 cm
- ☒ 4. 7 cm

Question ID : 9895804333
Chosen Option : 4

Q.5 If Rohit alone can complete one-fourth of a work in 32 days, then in how many days Rohit alone can complete the whole work?

- Ans** ☒ 1. 96 days
- ☒ 2. 64 days
- ☒ 3. 118 days
- ☒ 4. 128 days

Question ID : 9895804325
Chosen Option : 4

Q.5 If X is 30% less than Y and Z is 50% less than X , then Z is how much percentage less than Y ?

- Ans** ☒ 1. 75%
- ☒ 2. 65%
- ☒ 3. 80%
- ☒ 4. 95%

Question ID : 9895804316
Chosen Option : 2

Q.5 The average of numbers N_1 and N_2 is 17. The average of numbers N_2 and N_3 is 44. What is the difference between N_3 and N_1 ?

- Ans** ☒ 1. 27
- ☒ 2. 54
- ☒ 3. 36
- ☒ 4. 35

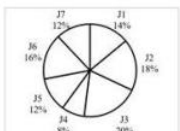
Question ID : 9895804312
Chosen Option : 2

Q.5 The sides of a triangle are in the ratio 5 : 2 : 1. If the perimeter of the triangle is 88 cm, then what will be the length of the largest side?

- Ans** ☒ 1. 38 cm
- ☒ 2. 40 cm
- ☒ 3. 55 cm
- ☒ 4. 44 cm

Question ID : 9895804328
Chosen Option : 3

Q.5 The pie chart given below shows the time taken in 7 different procedures J1, J2, J3, J4, J5, J6 and J7 in making a car as a percentage of total time taken. The total time taken in making one car is 1200 hours.



What is the average time taken in procedures J3, J6 and J7?

- Ans  1. 180 hours
 2. 192 hours
 3. 168 hours
 4. 204 hours

Question ID : 9895804332
Chosen Option : 2

Q.6 A sum of ₹ 12500 gives interest of ₹ 5625 in T years at simple interest. If the rate of interest is 7.5%, then what will be the value of T ?

- Ans  1. 8 years
 2. 5 years
 3. 6 years
 4. 7 years


Question ID : 9895804322
Chosen Option : 3

Q.6 16 workers working 8 hours per day can demolish a building in 32 days. In how many days 24 workers working 12 hours per day can demolish the same building?

- Ans  1. 128/9 days
 2. 128/3 days
 3. 56/3 days
 4. 56/9 days

Question ID : 9895804324
Chosen Option : 1

Q.6 Speed of Deepak and Vinod are in the ratio of 19 : 12 respectively. If speed of Vinod is 84 km/hr, then what will be the speed of Deepak?

- Ans  1. 133 km/hr
 2. 126 km/hr
 3. 114 km/hr
 4. 117 km/hr

Question ID : 9895804320
Chosen Option : 1

Q.6 The data below shows the number of students in class A having secured different marks.

| Marks | Students in class A |
|---------|---------------------|
| 0 - 2 | 3 |
| 2 - 4 | 4 |
| 4 - 6 | 1 |
| 6 - 8 | 1 |
| 8 - 10 | 1 |
| 10 - 12 | 0 |

What is the mean marks of class A?

- Ans  1. 3.8
 2. 1.6
 3. 2.8
 4. 2

Question ID : 9895804315
Chosen Option : 4

Q.6 Height of a right circular cone is 28 cm. If diameter of its base is 42 cm, then what will be the curved surface area of the cone?

- Ans
- ☒ 1. 4620 cm²
 - ☒ 2. 170 cm²
 - ☒ 3. 2310 cm²
 - ☒ 4. 1540 cm²

Question ID : 9895804329
Chosen Option : 3

Q.6 What is the value of $(5 \div \frac{1}{5} \text{ of } \frac{25}{4} + \frac{20}{3} \div \frac{100}{9})$?

- Ans
- ☒ 1. 27/5
 - ☒ 2. 23/5
 - ☒ 3. 18/5
 - ☒ 4. 31/5

Question ID : 9895804310
Chosen Option : 2

Q.6 If Dheeraj can cross a 100 metres wide road in 25 seconds, then what is the speed of Dheeraj?

- Ans
- ☒ 1. 14 m/s
 - ☒ 2. 4 m/s
 - ☒ 3. 12 m/s
 - ☒ 4. 6 m/s

Question ID : 9895804327
Chosen Option : 2

Q.6 An article is sold for ₹ 5845 after giving discount of 12.5%. What is the marked price of article?

- Ans
- ☒ 1. ₹ 6680
 - ☒ 2. ₹ 6700
 - ☒ 3. ₹ 6800
 - ☒ 4. ₹ 6600

Question ID : 9895804314
Chosen Option : 1

Q.6 If cost price of an article is ₹ 1240 and loss is 32%, then what will be the selling price of the article?

- Ans
- ☒ 1. ₹ 780.72
 - ☒ 2. ₹ 759.60
 - ☒ 3. ₹ 820.62
 - ☒ 4. ₹ 843.20

Question ID : 9895804318
Chosen Option : 4

Q.6
9 What is the value of $\left[\frac{4}{5} \div \frac{5}{8} - \frac{7}{5} + \frac{2}{15} \text{ of } \left(\frac{3}{2} \div \frac{4}{5}\right)\right]$?

- Ans ☒ 1. 17/80
☒ 2. 21/100
☒ 3. 15/29
☒ 4. 13/100

Question ID : 9895804311
 Chosen Option : 4

Q.7
0 If $2A = 3B = 7C$, then what is the ratio of $A : B : C$?

- Ans ☒ 1. 2 : 3 : 7
☒ 2. 21 : 14 : 6
☒ 3. 21 : 10 : 6
☒ 4. 14 : 10 : 21

Question ID : 9895804319
 Chosen Option : 2

Q.7
1 The Least Common Multiple and Highest Common Factor of two numbers are 75 and 5 respectively. If their difference is 10, then what will be the sum of these two numbers?

- Ans ☒ 1. 30
☒ 2. 40
☒ 3. 20
☒ 4. 25

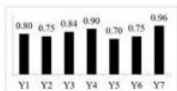
Question ID : 9895804309
 Chosen Option : 2

Q.7
2 A sum becomes 8 times of itself in 7 years at the rate of compound interest (interest is compounded annually). In how many years will the sum becomes 4096 times of itself?

- Ans ☒ 1. 56
☒ 2. 28
☒ 3. 24
☒ 4. 16

Question ID : 9895804323
 Chosen Option : 2

Q.7
3 The bar chart given below shows the ratio of expenditure to revenue for seven consecutive years Y1, Y2, Y3, Y4, Y5, Y6 and Y7.



Revenue for year Y4 is ₹ 22500. What is the profit for year Y4?

- Ans ☒ 1. ₹ 2500
☒ 2. ₹ 2750
☒ 3. ₹ 2250
☒ 4. Cannot be determined

Question ID : 9895804331
 Chosen Option : 3

Q.7 The volume of a right circular cone is equal to the volume of that right circular cylinder whose height is 48 cm and diameter of its base is 20 cm. If the height of the cone is 16 cm, then what will be the diameter of its base?

- Ans
- ☒ 1. 45 cm
 - ☒ 2. 130 cm
 - ☒ 3. 25 cm
 - ☒ 4. 60 cm

Question ID : 9895804330
Chosen Option : 4

Q.7 If $s : u : v : w = 2 : 9 : 6 : 7$ and $s + u + v + w = 864$, then what is the value of $s + u + w$?

- Ans
- ☒ 1. 734
 - ☒ 2. 722
 - ☒ 3. 612
 - ☒ 4. 648

Question ID : 9895804321
Chosen Option : 4

Section : English Language

Q.1 Select the most appropriate ANTONYM of the given word.

SEMBLANCE

- Ans
- ☒ 1. Difference
 - ☒ 2. Guise
 - ☒ 3. Simile
 - ☒ 4. A likeness

Question ID : 9895804184
Chosen Option : --

Q.2 Fill in the blank with the most appropriate word.

Miserly people find it difficult to part _____ any of their money for charitable purposes.

- Ans
- ☒ 1. for
 - ☒ 2. from
 - ☒ 3. with
 - ☒ 4. about

Question ID : 9895804200
Chosen Option : --

Q.3 Select the most appropriate option to substitute the underlined segment in the given sentence. If there is no need to substitute it, select No Improvement.

Subhash Palekar a farmer received the Padma Shri award this year in his campaign for zero budget natural farming.

- Ans
- ☒ 1. at his campaign with zero budget
 - ☒ 2. No Improvement
 - ☒ 3. for his campaign for zero budget
 - ☒ 4. for his campaign to zero budget

Question ID : 9895804199
Chosen Option : --

Q.4 Select the synonym of the given word.

FAÇADE

- Ans
- ☒ 1. Elevation
 - ☒ 2. Ceiling
 - ☐ 3. Interior
 - ☐ 4. Frontage

Question ID : 9895804183
Chosen Option : --

Q.5 Select the most appropriate word to fill in the blank.

I would rather serve _____.

- Ans
- ☒ 1. than beg
 - ☐ 2. than to beg
 - ☐ 3. but to beg
 - ☐ 4. but beg

Question ID : 9895804201
Chosen Option : --

Q.6 Select the correctly spe

- Ans
- ☐ 1. Discrepancy
 - ☐ 2. Descrepancy
 - ☒ 3. Discrepency
 - ☐ 4. Discripancy

Question ID : 9895804189
Chosen Option : --

Q.7 Select the synonym of the given word.

IMITATION

- Ans
- ☒ 1. Artificial
 - ☐ 2. Genuine
 - ☐ 3. Different
 - ☐ 4. Real

Question ID : 9895804182
Chosen Option : --

Q.8 Select the correctly spelt word.

- Ans
- ☐ 1. Liesure
 - ☐ 2. Lisure

☒ 3. Leisure

☐ 4. Leisour

Question ID : 9895804188

Chosen Option : --

Q.9 Select the most appropriate word to fill in the blank.

A house to house survey was _____ conducted to register more than seventeen crore voters.

Ans ☐ 1. meticulously

☐ 2. firmly

☒ 3. punctually

☐ 4. wearily

Question ID : 9895804193

Chosen Option : --

Q.10 Select the most appropriate meaning of the given idiom.

Storm in a teacup

Ans ☐ 1. A stormy tea party

☐ 2. A big fuss over a small issue

☐ 3. A grand get-together

☒ 4. A highly risky business

Question ID : 9895804186

Chosen Option : --

Q.11 Select the word which means the same as the group of words given.

Something never done or known before

Ans ☐ 1. Unanimous

☒ 2. Unconditioned

☐ 3. Uncanny

☐ 4. Unprecedented

Question ID : 9895804191

Chosen Option : --

Q.12 Identify the segment in the sentence which contains the grammatical error from the given options.

When he returned to the dining-room the guests left and the servants were clearing the tables.

Ans ☐ 1. to the dining-room

☒ 2. When he

☐ 3. the guests left

☐ 4. were clearing

Question ID : 9895804195

Chosen Option : --

Q.1
3 Select the word which means the same as the group of words given.

The life history of a person written by himself

- Ans
- ☒ 1. Novel
 - ☒ 2. Fiction
 - ☒ 3. Autobiography
 - ☒ 4. Biography

Question ID : 9895804190
Chosen Option : --

Q.1
4 Select the most appropriate ANTONYM of the given word.

RAMBLING

- Ans
- ☒ 1. Deceptive
 - ☒ 2. Confused
 - ☒ 3. Irregular
 - ☒ 4. Coherent

Question ID : 9895804185
Chosen Option : --

Q.1
5 Fill in the blank with the most appropriate word.

Reason is the highest faculty _____ on man by his creator.

- Ans
- ☒ 1. given
 - ☒ 2. donated
 - ☒ 3. endowed
 - ☒ 4. bestowed

Question ID : 9895804192
Chosen Option : --

Q.1
6 Identify the segment in the sentence which contains the grammatical error from the given options.

He was deprived from the benefits of college education owing to the death of his father.

- Ans
- ☒ 1. owing to
 - ☒ 2. the benefits of
 - ☒ 3. college education
 - ☒ 4. He was deprived from

Question ID : 9895804194
Chosen Option : --

Q.1
7 Select the most appropriate option to substitute the underlined segment in the given sentence. If there is no need to substitute it, select No Improvement.

He spent all which he has in order to perfect his invention.

- Ans
- ☒ 1. that he had
 - ☒ 2. what he is having

☒ 3. No Improvement

☒ 4. which he has

Question ID : 9895804198

Chosen Option : --

Q.1
8 Select the most appropriate meaning of the idiom.

To burn all bridges

Ans ☒ 1. To destroy all relations

☒ 2. To light a fire

☒ 3. To chase all enemies

☒ 4. To damage a path

Question ID : 9895804187

Chosen Option : --

Q.1
9 Identify the segment in the sentence which contains the grammatical error from the given options.

This bottle must not be make to stand close to the fire.

Ans ☒ 1. close to the fire

☒ 2. This bottle

☒ 3. make to stand

☒ 4. must not be

Question ID : 9895804196

Chosen Option : --

Comprehension:

In the following passage some words have been deleted. Fill in the blanks with the help of the alternatives given.

Science has made an (1) _____ contribution to the relief of human suffering, and humanity (2) _____ a deep (3) _____ of gratitude to scientists whose (4) _____ and sacrifices have led to many (5) _____ discoveries and inventions.

SubQuestion No : 20

Q.2
0 Fill in the blank (1) with the most appropriate option.

Ans ☒ 1. enormous

☒ 2. intensive

☒ 3. excessive

☒ 4. enterprising

Question ID : 9895804203

Chosen Option : --

Comprehension:

In the following passage some words have been deleted. Fill in the blanks with the help of the alternatives given.

Science has made an (1) _____ contribution to the relief of human suffering, and humanity (2) _____ a deep (3) _____ of gratitude to scientists whose (4) _____ and sacrifices have led to many (5) _____ discoveries and inventions.

SubQuestion No : 21

Q.2
1 Fill in the blank (2) with the most appropriate option.

Ans ☒ 1. thinks

☒ 2. offers

- ☒ 3. feels
☐ 4. owes

Question ID : 9895804204
Chosen Option : --

Comprehension:

In the following passage some words have been deleted. Fill in the blanks with the help of the alternatives given.
Science has made an (1) _____ contribution to the relief of human suffering, and humanity (2) _____ a deep (3) _____ of gratitude to scientists whose (4) _____ and sacrifices have led to many (5) _____ discoveries and inventions.

SubQuestion No : 22

Q.2
2 Fill in the blank (3) with the most appropriate option.

- Ans ☐ 1. feeling
☐ 2. sense
☐ 3. fund
☒ 4. amount

Question ID : 9895804205
Chosen Option : --

Comprehension:

In the following passage some words have been deleted. Fill in the blanks with the help of the alternatives given.
Science has made an (1) _____ contribution to the relief of human suffering, and humanity (2) _____ a deep (3) _____ of gratitude to scientists whose (4) _____ and sacrifices have led to many (5) _____ discoveries and inventions.

SubQuestion No : 23

Q.2
3 Fill in the blank (4) with the most appropriate option.

- Ans ☒ 1. labour
☐ 2. achievements
☐ 3. success
☐ 4. discoveries

Question ID : 9895804206
Chosen Option : --

Comprehension:

In the following passage some words have been deleted. Fill in the blanks with the help of the alternatives given.
Science has made an (1) _____ contribution to the relief of human suffering, and humanity (2) _____ a deep (3) _____ of gratitude to scientists whose (4) _____ and sacrifices have led to many (5) _____ discoveries and inventions.

SubQuestion No : 24

Q.2
4 Fill in the blank (5) with the most appropriate option.

- Ans ☒ 1. curious
☐ 2. unusual
☐ 3. dynamic
☐ 4. useful

Question ID : 9895804207
Chosen Option : --

Q.2
5 Select the most appropriate option to substitute the underlined segment in the given sentence. If there is no need to substitute it, select No Improvement

The Finance Minister has announce big schemes for farmers, women and unorganized workers in his Budget speech.

Ans

- ✗ 1. have announced
 ✓ 2. has announced
 ✗ 3. has been announcing
 ✗ 4. No Improvement

Question ID : 9895804197
 Chosen Option : --

Section : Hindi Language

Q.1 दिए गए वाक्य का वह भाग ज्ञात करें जिसमें कोई त्रुटि है।

सामान्य जनता को जागृत करने के लिए पुस्तकें प्रकाशित किये जा रहे हैं।

- Ans ✗ 1. सामान्य जनता को
 ✗ 2. जागृत करने के लिए
 ✓ 3. किये जा रहे हैं।
 ✗ 4. पुस्तकें प्रकाशित

Question ID : 9895803572
 Chosen Option : 3

Comprehension:

दिए गए अनुच्छेद में कुछ शब्द हटा दिए गए हैं। दिए गए विकल्पों की सहायता से रिक्त स्थान भरें। प्रत्येक संख्या के लिए सबसे उपयुक्त विकल्प का चयन करें।

समझने वाली एक महत्वपूर्ण बात यह भी है कि सारी _____ (1) हमारे अकेले की नहीं होती। सारे _____ (2) हमारे चढ़ने के लिए नहीं होते। कुछ चढ़ाइयाँ ऐसी भी होती हैं जो पूरे _____ (3) को एक साथ चढ़नी होती है और यह बात पूरे समाज को समझाना भी अपने आप में पहाड़ होता है। मगर इस पर _____ (4) का दायित्व भी उन _____ (5) की होती है जिन्हें यह पहाड़ दिखाई देता है।

SubQuestion No : 2

Q.2 गद्यांश में संकेतित रिक्त स्थान (1) के लिए उपयुक्त शब्द होगा -

- Ans ✗ 1. नदियाँ
 ✗ 2. निर्णय
 ✗ 3. जवाब
 ✓ 4. लड़ाइयाँ

Question ID : 9895803581
 Chosen Option : 4

Comprehension:

दिए गए अनुच्छेद में कुछ शब्द हटा दिए गए हैं। दिए गए विकल्पों की सहायता से रिक्त स्थान भरें। प्रत्येक संख्या के लिए सबसे उपयुक्त विकल्प का चयन करें।

समझने वाली एक महत्वपूर्ण बात यह भी है कि सारी _____(1) हमारे अकेले की नहीं होती। सारे _____(2) हमारे चढ़ने के लिए नहीं होते। कुछ चढ़ाइयाँ ऐसी भी होती हैं जो पूरे _____(3) को एक साथ चढ़नी होती है और यह बात पूरे समाज को समझाना भी अपने आप में पहाड़ होता है। मगर इस पर _____(4) का दायित्व भी उन _____(5) की होती है जिन्हें यह पहाड़ दिखाई देता है।

SubQuestion No : 3

Q.3 गद्यांश में संकेतित रिक्त स्थान (2) के लिए उपयुक्त शब्द होगा -

- Ans
- ☒ 1. किताब
 - ☒ 2. सागर
 - ☒ 3. पहाड़
 - ☒ 4. सोच

Question ID : 9895803582
Chosen Option : 3

Comprehension:

दिए गए अनुच्छेद में कुछ शब्द हटा दिए गए हैं। दिए गए विकल्पों की सहायता से रिक्त स्थान भरें। प्रत्येक संख्या के लिए सबसे उपयुक्त विकल्प का चयन करें।

समझने वाली एक महत्वपूर्ण बात यह भी है कि सारी _____(1) हमारे अकेले की नहीं होती। सारे _____(2) हमारे चढ़ने के लिए नहीं होते। कुछ चढ़ाइयाँ ऐसी भी होती हैं जो पूरे _____(3) को एक साथ चढ़नी होती है और यह बात पूरे समाज को समझाना भी अपने आप में पहाड़ होता है। मगर इस पर _____(4) का दायित्व भी उन _____(5) की होती है जिन्हें यह पहाड़ दिखाई देता है।

SubQuestion No : 4

Q.4 गद्यांश में संकेतित रिक्त स्थान (3) के लिए उपयुक्त शब्द होगा -

- Ans
- ☒ 1. समाज
 - ☒ 2. धूप
 - ☒ 3. स्थान
 - ☒ 4. चुनाव

Question ID : 9895803583
Chosen Option : 1

Comprehension:

दिए गए अनुच्छेद में कुछ शब्द हटा दिए गए हैं। दिए गए विकल्पों की सहायता से रिक्त स्थान भरें। प्रत्येक संख्या के लिए सबसे उपयुक्त विकल्प का चयन करें।

समझने वाली एक महत्वपूर्ण बात यह भी है कि सारी _____(1) हमारे अकेले की नहीं होती। सारे _____(2) हमारे चढ़ने के लिए नहीं होते। कुछ चढ़ाइयाँ ऐसी भी होती हैं जो पूरे _____(3) को एक साथ चढ़नी होती है और यह बात पूरे समाज को समझाना भी अपने आप में पहाड़ होता है। मगर इस पर _____(4) का दायित्व भी उन _____(5) की होती है जिन्हें यह पहाड़ दिखाई देता है।

SubQuestion No : 5

Q.5 गद्यांश में संकेतित रिक्त स्थान (4) के लिए उपयुक्त शब्द होगा -

- Ans
- ☒ 1. सोने
 - ☒ 2. खाने
 - ☒ 3. चढ़ने
 - ☒ 4. हँसने

Question ID : 9895803584
Chosen Option : 3

Comprehension:

दिए गए अनुच्छेद में कुछ शब्द हटा दिए गए हैं। दिए गए विकल्पों की सहायता से रिक्त स्थान भरें। प्रत्येक संख्या के लिए सबसे उपयुक्त विकल्प का चयन करें।

समझने वाली एक महत्वपूर्ण बात यह भी है कि सारी _____(1) हमारे अकेले की नहीं होती। सारे _____(2) हमारे चढ़ने के लिए नहीं होते। कुछ चढ़ाइयाँ ऐसी भी होती हैं जो पूरे _____(3) को एक साथ चढ़नी होती है और यह बात पूरे समाज को समझाना भी अपने आप में पहाड़ होता है। मगर इस पर _____(4) का दायित्व भी उन _____(5) की होती है जिन्हें यह पहाड़ दिखाई देता है।

SubQuestion No : 6

Q.6 गद्यांश में संकेतित रिक्त स्थान (5) के लिए उपयुक्त शब्द होगा -

- Ans
- ☒ 1. सुखों
 - ☒ 2. रोजे
 - ☒ 3. दुखों
 - ☒ 4. व्यक्तियों

Question ID : 9895803585
Chosen Option : 4

Q.7

दिए गए वाक्य में रेखांकित खंड को प्रतिस्थापित करने के लिए उपयुक्त विकल्प का चयन करें।

बादल फटने से डेढ़ सौ व्यक्तियों का मृत्यु हो गई।

Ans

- ☒ 1. डेढ़ सौ व्यक्तियों से मृत्यु हो गई।
- ☒ 2. डेढ़ सौ व्यक्तियों के मृत्यु हो गई।
- ☒ 3. डेढ़ सौ व्यक्तियों को मृत्यु हो गई।
- ☒ 4. डेढ़ सौ व्यक्तियों की मृत्यु हो गई।

Question ID : 9895803575
Chosen Option : 4

Q.8 दिए गए वाक्य में रेखांकित खंड को प्रतिस्थापित करने के लिए उपयुक्त विकल्प का चयन करें।

सेठजी मंदिर में गए, उन्होंने यहाँ आकर गरीबों को कंबल बाँटे।

Ans

- ☒ 1. उन्होंने वहाँ आकर
- ☒ 2. उन्होंने वहाँ जाकर
- ☒ 3. उन्होंने यहाँ जाकर
- ☒ 4. उन्होंने यहाँ हटकर

Question ID : 9895803574
Chosen Option : 2

Q.9 दिए गए शब्द का विलोम चुनें।

शुद्ध

Ans

- ☒ 1. अशुद्ध
- ☒ 2. गलत
- ☒ 3. पवित्र
- ☒ 4. विरुद्ध

Question ID : 9895803586
Chosen Option : 1

Q.10 सही वर्तनी वाले शब्द का चयन करें।

Ans

- ☒ 1. आकर्शक
- ☒ 2. आकर्षक
- ☒ 3. आक्रषक
- ☒ 4. अकार्षक

Question ID : 9895803594
Chosen Option : 2

Q.1 रिक्त स्थान को भरने के लिए सबसे उपयुक्त शब्द का चयन करें।

हमें पेड़-पौधों की _____ करनी चाहिए।

Ans

- ☒ 1. कटाई
- ☒ 2. उपेक्षा
- ☒ 3. देखभाल
- ☒ 4. पिटाई

Question ID : 9895803576
Chosen Option : 3

Q.1
2 रिक्त स्थान को भरने के लिए सबसे उपयुक्त शब्द का चयन करें।

मैं उसकी _____ को देखकर मुग्ध हो गया।

Ans

- ☒ 1. सुन्दरता
- ☒ 2. विफलता
- ☒ 3. क्रोध
- ☒ 4. बेबसी

Question ID : 9895803577
Chosen Option : 1

Q.1
3 दिये गये वाक्यांश के लिए एक शब्द दीजिये।

जो भूमि उपजाऊ हो

Ans

- ☒ 1. बेजान
- ☒ 2. उर्वर
- ☒ 3. बंजर
- ☒ 4. कँटीली

Question ID : 9895803593
Chosen Option : 2

Q.1
4 निम्नलिखित में से उस विकल्प का चयन करें जो ' आग में घी डालना ' मुहावरे का अर्थ व्यक्त करता है।

Ans

- ☒ 1. बहुत अधिक क्रोध करना
- ☒ 2. आग में घी डालकर हवन करना
- ☒ 3. आग जलाना
- ☒ 4. क्रोध को और भड़काना

Question ID : 9895803590
Chosen Option : 4

Q.1
5 रिक्त स्थान को भरने के लिए सबसे उपयुक्त शब्द का चयन करें।

तुम्हारा पत्र पढ़कर _____ प्रसन्नता हुई।

Ans

- ☒ 1. भयानक

- ✓ 2. अत्यंत
 ✗ 3. अभिन्न
 ✗ 4. उन्नत

Question ID : 9895803578
 Chosen Option : 2

Q.1
 6 दिए गए शब्द के पर्यायवाची शब्द का चयन करें।

कुंतल

- Ans ✗ 1. बाघ
 ✓ 2. केश
 ✗ 3. बाण
 ✗ 4. बालू

Question ID : 9895803589
 Chosen Option : 1

Q.1
 7 सही वर्तनी वाले शब्द का चयन करें।

- Ans ✗ 1. प्रकृतिक
 ✗ 2. प्राकृत्रिक
 ✓ 3. प्राकृतिक
 ✗ 4. पारकृतिक

Question ID : 9895803595
 Chosen Option : 3

Q.1
 8 दिए गए शब्द के पर्यायवाची शब्द का चयन करें।

हिम

- Ans ✗ 1. जल
 ✗ 2. अग्नि
 ✓ 3. बर्फ
 ✗ 4. वायु

Question ID : 9895803588
 Chosen Option : 3

Q.1
 9 दिए गए शब्द का विलोम चुनें।

क्रय

- Ans ✗ 1. अहित
 ✗ 2. बंधन
 ✗ 3. निर्यात

✓ 4. विक्रय

Question ID : 9895803587

Chosen Option : 4

Q.2
0 दिए गए वाक्य का वह भाग ज्ञात करें जिसमें कोई त्रुटि है।

मन की शक्ति वैसे तो प्रकृति की देन है, फिर भी इसकी आंशिक निर्माण माता-पिता पर निर्भर करता है।

Ans

- ✓ 1. फिर भी इसकी आंशिक निर्माण
- ✗ 2. वैसे तो प्रकृति की देन है,
- ✗ 3. मन की शक्ति
- ✗ 4. माता-पिता पर निर्भर करता है।

Question ID : 9895803570

Chosen Option : 1

Q.2
1 रिक्त स्थान को भरने के लिए सबसे उपयुक्त शब्द का चयन करें।

गौरव सौरभ की _____ अधिक मोटा है।

Ans

- ✗ 1. तुलना
- ✗ 2. उपेक्षा
- ✗ 3. ज्यादा
- ✓ 4. अपेक्षा

Question ID : 9895803579

Chosen Option : 4

Q.2
2 निम्नलिखित में से उस विकल्प का चयन करें जो 'आटे दाल का भाव मालूम होना' मुहावरे का अर्थ व्यक्त करता है।

Ans

- ✓ 1. कठिनाई का ज्ञान होना
- ✗ 2. महंगाई का बढ़ना
- ✗ 3. परिस्थिति से भागना
- ✗ 4. आटे और दाल का भाव बताना

Question ID : 9895803591

Chosen Option : 1

Q.2
3 दिये गये वाक्यांश के लिए एक शब्द दीजिये।

कम खाने वाला

Ans

- ✗ 1. शाकाहारी
- ✗ 2. मांसाहारी
- ✗ 3. सर्वाहारी
- ✓ 4. अल्पाहारी

Question ID : 9895803592

Chosen Option : 4

Q.2
4 दिए गए वाक्य का वह भाग ज्ञात करें जिसमें कोई त्रुटि है।

अतीत की घटनाओं से ही व्यक्ति सीखना सकता है और प्रगति के पथ पर जा सकता है।

Ans

- ☒ 1. और प्रगति के पथ पर
☒ 2. अतीत की घटनाओं से ही
☒ 3. जा सकता है।
☒ 4. व्यक्ति सीखना सकता है

Question ID : 9895803571

Chosen Option : 4

Q.2
5 दिए गए वाक्य में रेखांकित खंड को प्रतिस्थापित करने के लिए उपयुक्त विकल्प का चयन करें।

ऋतु परिवर्तन के कारण मनाए जाने वाले त्योहार हमें प्रकृति से निकट ले जाते हैं।

Ans

- ☒ 1. प्रकृति के लिए निकट ले जाते हैं।
☒ 2. प्रकृति को निकट ले जाते हैं।
☒ 3. प्रकृति की निकट ले जाते हैं।
☒ 4. प्रकृति के निकट ले जाते हैं।

Question ID : 9895803573

Chosen Option : 4

Constable (GD) in CAPFs, NIA, SSF and Rifleman (GD) in Assam Rifles Examination, 2018

| | |
|------------------|--------------------|
| Roll No. : | |
| Registration No. | |
| Name : | |
| Exam Venue : | |
| Exam Time : | 9:00 AM - 10:30 AM |
| Exam Date : | 13/02/2019 |

Section : General Section

Q.1 Select the option that is related to the third term in the same way as the second term is related to the first term.

Mouse : Rodent :: Bee : ?

- Ans ☒ 1. Drone
☒ 2. Insect
☒ 3. Reptile
☒ 4. Bird

Question ID : 9895802702
Chosen Option : 1

Q.2 Seven friends O, P, Q, R, S, T and U are watching a movie sitting in a row. S is sitting at one extreme end. Q is sitting second to the right of S. P is sitting between O and Q. U is not sitting at any extreme end. R is sitting to the left of T. Who is sitting in the middle?

- Ans ☒ 1. R
☒ 2. Q
☒ 3. P
☒ 4. U

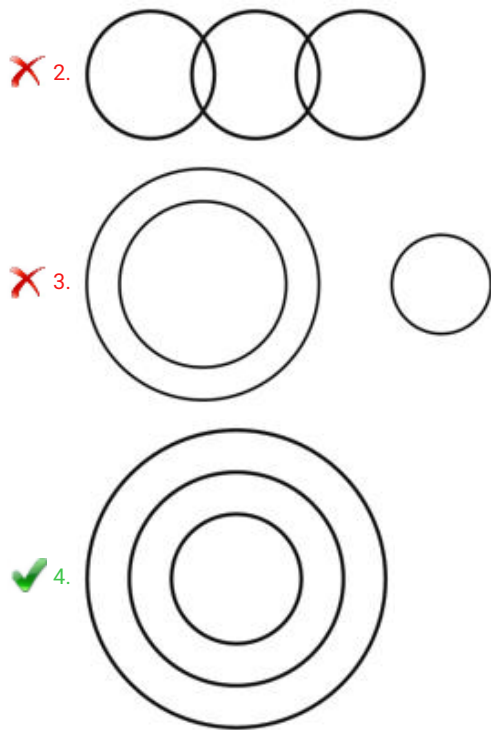
Question ID : 9895802707
Chosen Option : 3

Q.3 Select the Venn diagram that best represents the given set of classes:

Udaipur, Rajasthan, India

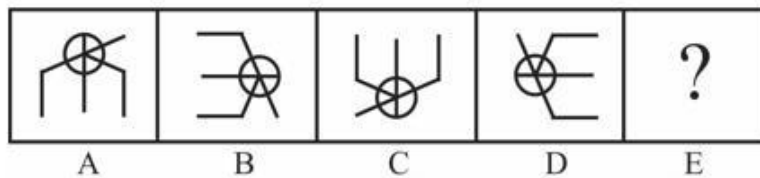
Ans



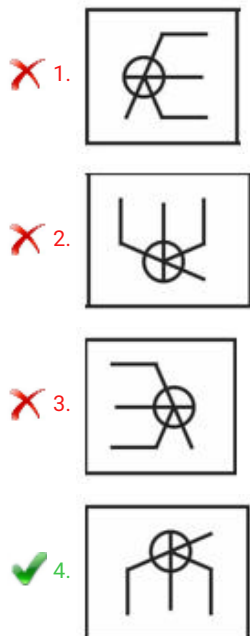


Question ID : 9895802723
Chosen Option : 4

Q.4 Choose the option that would follow next in the given figure series.



Ans



Question ID : 9895802718
Chosen Option : 4

Q.5 Select the option that will correctly replace the question mark (?) in the series.

4, 16, 28, 40, ?

Ans ☒ 1. 69

☒ 2. 52

☒ 3. 51

☒ 4. 56

Question ID : 9895802712

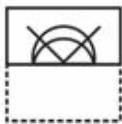
Chosen Option : 2

Q.6 A square transparent sheet with a pattern is given. How will the pattern appear when the transparent sheet is folded along the dotted line?

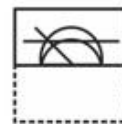


Ans

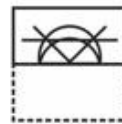
☒ 1.



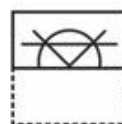
☒ 2.



☒ 3.



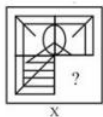
☒ 4.



Question ID : 9895802722

Chosen Option : 4

Q.7 Select a figure from amongst the four alternatives that when placed in the blank space (?) of figure X will complete the pattern. (Rotation is not allowed).



Ans

☒ 1.




☒ 2.



☒ 3.





Question ID : 9895802719
Chosen Option : 2

Q.8 Select the option that is related to the third number in the same way as the second number is related to the first number.

11: 225 :: 14: ?

- Ans
- ☒ 1. 169
 - ☒ 2. 324
 - ☒ 3. 144
 - ☒ 4. 225

Question ID : 9895802714
Chosen Option : 4

Q.9 Choose the option in which the figure marked 'X' is embedded. (Rotation is not allowed)



Ans



- ☒ 1.
- ☒ 2.
- ☒ 3.
- ☒ 4.

Question ID : 9895802720
Chosen Option : 4

Q.1 Select the option that is related to the third term in the same way as the second term is related to the first term.
0

Unhappy : Sad :: Speak : ?

- Ans
- ☒ 1. Shout
 - ☒ 2. Desire

-  3. Ask
 4. Listen

Question ID : 9895802703
Chosen Option : 1





Q.1 The statements below are followed by two conclusions labeled I and II. Assuming that the information in the statements is true, even if it appears at variance with generally established facts, decide which conclusion (s) logically and definitely follow (s) from the information given in the statements.

Statements:

- 1) All hens are lions.
2) All lions are cats.





Conclusion

- I. All cats are hens.
II. Some cats are hens.

- Ans**  1. Only conclusion I follows.
 2. Only conclusion II follows.
 3. Either conclusion I or conclusion II follows.
 4. Both conclusions follow.

Question ID : 9895802710
Chosen Option : 2





Q.1 In a certain code, SCIENTIST is written as TSITNEISC. How will GOLDSMITH be written in that code?
2

- Ans**  1. HTIMSDLOG
 2. HTISMDLGO
 3. HTIMSDLGO
 4. HITMSDLOG

Question ID : 9895802705
Chosen Option : 1

Q.1 Choose the option that most closely resembles the mirror image of the given word when mirror is placed at right side.
3

CAPSIZE

- Ans**  1. CAPSIZE
 2. CPISZE
 3. CAPSIZE
 4. EZISZAC

Question ID : 9895802721
Chosen Option : 3

Q.1
4 Select the option that will correctly replace the question mark (?) in the given pattern.

| | | |
|-----|----|-----|
| 13 | 22 | 12 |
| 117 | ? | 132 |
| 9 | 7 | 11 |

- Ans
- ☒ 1. 117
 - ☒ 2. 154
 - ☒ 3. 165
 - ☒ 4. 119

Question ID : 9895802716
Chosen Option : 2

Q.1
5 Select the option that will correctly replace the question mark (?) in the series.

OJY, MLW, KNU, IPS, ?

- Ans
- ☒ 1. GRQ
 - ☒ 2. GRP
 - ☒ 3. GPO
 - ☒ 4. GRR

Question ID : 9895802699
Chosen Option : 1

Q.1
6 Eight friends A, B, C, D, E, F, G and H are sitting around a circular table facing each other for a lunch. A is opposite F and third to the right of B. G is between F and D. H is to the left of D. E is between C and A. Who is sitting opposite C?

- Ans
- ☒ 1. D
 - ☒ 2. F
 - ☒ 3. B
 - ☒ 4. A

Question ID : 9895802708
Chosen Option : 1

Q.1
7 Choose the odd one out of the given options.

- Ans
- ☒ 1. MIF
 - ☒ 2. RGC
 - ☒ 3. DPR
 - ☒ 4. EFQ

Question ID : 9895802700
Chosen Option : 3

Q.1 J, K, L, M, N and O are six teachers. Each one teaches a different subject out of Hindi, English, Math, Science, Social Science and Arts, not necessarily in the same order. Each of them teaches on only one day, from Monday to Saturday, not necessarily in the same order. J teaches Arts on Saturday. L teaches neither English nor Social Science, but he teaches on Thursday. Wednesday is reserved for Maths taught by K. O teaches Science a day before N. Social Science is taught a day before Arts. Which subject is taught by N?

- Ans
- ☒ 1. Arts
 - ☒ 2. Hindi
 - ☒ 3. English
 - ☒ 4. Science

Question ID : 9895802709
Chosen Option : 3

Q.1 Select the option that will correctly replace the question mark (?) in the series.

9, 10, 18, 45, ?

- Ans
- ☒ 1. 107
 - ☒ 2. 111
 - ☒ 3. 109
 - ☒ 4. 110

Question ID : 9895802713
Chosen Option : 3

Q.2 Find out the two signs to be interchanged to make the following equation correct.

$$13 + 26 \times 2 - 5 \div 3 = 11$$

- Ans
- ☒ 1. - and \div
 - ☒ 2. \times and \div
 - ☒ 3. + and -
 - ☒ 4. - and \times

Question ID : 9895802717
Chosen Option : 2

Q.2 दिए गए विकल्पों में से असंगत का चयन करें।

- Ans
- ☒ 1. लहसुन
 - ☒ 2. अदरक
 - ☒ 3. आलू
 - ☒ 4. टमाटर

Question ID : 9895802701
Chosen Option : 4





Q.2 The statements below are followed by two conclusions labeled I and II. Assuming that the information in the statements is true, even if it appears at variance with generally established facts, decide which conclusion(s) logically and definitely follow(s) from the information given in the statements.

Statements:

- 1) Some men are insects.
- 2) Some larvae are insects.

Conclusion





- I. Some insects are larvae.
- II. Some insects are men.

Ans  1. Only conclusion I follows.
 2. Both conclusions follow.
 3. Only conclusion II follows.
 4. Neither conclusion I nor conclusion II follows.

Question ID : **9895802711**
Chosen Option : **2**

Q.2 Select the option that is related to the third term in the same way as the second term is related to the first term.
3

BAC: GFH :: LKM : ?

Ans  1. QRP
 2. QPR
 3. QOP
 4. QPO

Question ID : **9895802704**
Chosen Option : **2**

Q.2 Choose the odd number out of the given options.
4

Ans  1. 109
 2. 561
 3. 127
 4. 307

Question ID : **9895802715**
Chosen Option : **2**

Q.2 In a certain code, REFUSE is written as 74. How will KIDNAP be written in that code?
5

Ans  1. 59
 2. 55
 3. 54
 4. 57

Question ID : 9895802706
Chosen Option : 2

Q.2
6 Which of the following festivals is associated with the 'Vaman' incarnation of Vishnu?

- Ans
- ☒ 1. Kumbha
 - ☒ 2. Bihu
 - ☒ 3. Onam
 - ☒ 4. Janmashtami

Question ID : 9895802551
Chosen Option : 4

Q.2
7 As of February 2019, who is the current Vice-Chairman of Niti Aayog?

- Ans
- ☒ 1. Shaktikanta Das
 - ☒ 2. Rajiv Kumar
 - ☒ 3. Shakti Sinha
 - ☒ 4. Urjit Patel

Question ID : 9895802554
Chosen Option : 2

Q.2
8 The Indian constitution declares India as:

- Ans
- ☒ 1. a Federation of States
 - ☒ 2. a Confederation of States
 - ☒ 3. a Union of States
 - ☒ 4. a Association of States

Question ID : 9895802560
Chosen Option : 3

Q.2
9 Which of the following is NOT a determinant of the patterns of drainage system?

- Ans
- ☒ 1. Climatic conditions of the area
 - ☒ 2. Source of the drainage system
 - ☒ 3. Underlying rock structure
 - ☒ 4. Slope of the land

Question ID : 9895802570
Chosen Option : 2

Q.3
0 In the context of Sufi tradition, the term 'khanqah' stood for:

- Ans
- ☒ 1. the Hell
 - ☒ 2. a graveyard

- ☒ 3. a hospice
☐ 4. the Heaven

Question ID : 9895802572
Chosen Option : 3

Q.3
1 Which of the following is NOT true about nuclear fusion?

Ans ☐ 1. It produces much more energy than nuclear fission.

☒ 2. The process is used for making nuclear bomb.

☐ 3.

Electricity production through this process is commercially less viable than nuclear fission.

☐ 4. It is the source of energy in the stars.

Question ID : 9895802565
Chosen Option : 3

Q.3
2 Which of the following pair is NOT correctly matched?

Ans ☒ 1. Magnesium hydroxide – MgOH_2

☐ 2. Sulphuric acid – H_2SO_4

☐ 3. Ammonium hydroxide – NH_4OH

☐ 4. Nitric acid – HNO_3

Question ID : 9895802567
Chosen Option : 3

Q.3
3 Which of the following money transfer systems allows 24×7×365 transfer of money?

Ans ☒ 1. IMPS

☐ 2. Cheque

☐ 3. NEFT

☐ 4. RTGS

Question ID : 9895802558
Chosen Option : 1

Q.3
4 Which of the following is NOT an artificial ecosystem?

Ans ☐ 1. Reservoir of a dam

☐ 2. Paddy-field

☒ 3. Forest

☐ 4. Garden

Question ID : 9895802564
Chosen Option : 3

Q.3
5 Which of the followings has been dubbed as 'India's maiden human spaceflight programme'?

- Ans
- ☒ 1. Mangalyaan – II
 - ☒ 2. Gaganyaan
 - ☒ 3. Chandrayaan – II
 - ☒ 4. Aditya L – 1

Question ID : 9895802555
Chosen Option : 4

Q.3
6 Which of the followings was NOT a Harappan city?

- Ans
- ☒ 1. Lothal
 - ☒ 2. Dholavira
 - ☒ 3. Mehrgarh
 - ☒ 4. Sotkakoh

Question ID : 9895802573
Chosen Option : 1

Q.3
7 _____ was awarded the Noble Peace Prize 2018.

- Ans
- ☒ 1. Nadia Murad
 - ☒ 2. Kazuo Ishiguro
 - ☒ 3. James P. Allison
 - ☒ 4. Donna Strickland

Question ID : 9895802556
Chosen Option : 1

Q.3
8 Which Indian cricketer topped the MRF Tyres ICC Test Player Rankings at the year-end after 2018?

- Ans
- ☒ 1. Virat Kohli
 - ☒ 2. Ajinkya Rahane
 - ☒ 3. Cheteshwar Pujara
 - ☒ 4. Ravindra Jadeja

Question ID : 9895802553
Chosen Option : 1

Q.3
9 Which of the following turns Blue litmus Red?

- Ans
- ☒ 1. Vinegar
 - ☒ 2. Lime Water
 - ☒ 3. Baking Soda
 - ☒ 4. Milk

Question ID : 9895802566
Chosen Option : 4

Q.4
0 Bhimbetka, a world heritage site, is known for:

- Ans
- ☐ 1. Ashokan Pillar
 - ☒ 2. prehistoric rock shelters
 - ☐ 3. monolithic temples
 - ☐ 4. Buddhist stupas

Question ID : 9895802549
Chosen Option : 3

Q.4
1 Which of the following statements is NOT correct about myopia?

- Ans
- ☐ 1. The vision may be corrected with the help of concave lens.
 - ☐ 2. It is also known as near sightedness.
 - ☒ 3.

In the affected eye, the image of a distant object is formed beyond the retina.

- ☐ 4. The person affected by it cannot see beyond few metres.

Question ID : 9895802563
Chosen Option : 3

Q.4
2 What is 'Bringa' in Orissa?

- Ans
- ☐ 1. A village known for diamond mines
 - ☐ 2. A stone weapon used by the aboriginals
 - ☐ 3. An edible oil used by the aboriginals
 - ☒ 4. A local name of 'slash and burn' agriculture

Question ID : 9895802568
Chosen Option : 4

Q.4
3 Which of the following options is also termed as the third-tier of democracy in India?

- Ans
- ☐ 1. State government
 - ☐ 2. Union Territory governments
 - ☒ 3. Local-self government
 - ☐ 4. Supreme Court

Question ID : 9895802561
Chosen Option : 3

Q.4
4 Which of the following rulers built the mosque called 'Adhai-din-ka-Jhonpra'?

Ans

- ☐ 1. Balban
- ☐ 2. Abraham Lodi
- ☐ 3. Iltutmish
- ☒ 4. Qutub-ud-Din-Aibak

Question ID : 9895802550
Chosen Option : 4

Q.4
5 Which of the following constitutional amendments provided for the Right to Education?

- Ans
- ☐ 1. 88th amendment
 - ☐ 2. 89th amendment
 - ☐ 3. 87th amendment
 - ☒ 4. 86th amendment

Question ID : 9895802562
Chosen Option : 4

Q.4
6 Which of the following institutions is responsible for regulating the formal sources of credit in India?

- Ans
- ☒ 1. RBI
 - ☐ 2. TRAI
 - ☐ 3. NABARD
 - ☐ 4. IRDA

Question ID : 9895802559
Chosen Option : 1

Q.4
7 Which of the following organizations received the Maulana Abul Kalam Azad (MAKA) Trophy 2017-18?

- Ans
- ☐ 1. JSW Sports
 - ☐ 2. Isha Outreach
 - ☐ 3. Rashtriya Ispat Nigam Limited
 - ☒ 4. Guru Nanak Dev University

Question ID : 9895802552
Chosen Option : 1

Q.4
8 The Economic Survey of India is published by:

- Ans
- ☐ 1. Department of Financial Services
 - ☒ 2. Department of Economic Affairs
 - ☐ 3. Department of Revenue
 - ☐ 4. Department of Public Expenditure

Question ID : 9895802557

Chosen Option : 2

Q.4 During British rule in India, 'gomastha' was:

Ans ☒ 1.

a paid servant to supervise weavers, collect supplies, and examine the quality of cloth

☒ 2. an Indian soldier appointed as the in-charge of a cavalry

☒ 3. a village-level official in the revenue-department

☒ 4. an Indian official in the intelligence department

Question ID : 9895802571

Chosen Option : 3

Q.5 Which of the following rivers forms the famous Dhuadhar falls?

Ans ☒ 1. Narmada

☒ 2. Kali Sind

☒ 3. Chambal

☒ 4. Tapi

Question ID : 9895802569

Chosen Option : 3

Q.5 A sum of ₹ 8250 gives simple interest of ₹ 2475 in 5 years. What will be the rate of interest per annum?

Ans ☒ 1. 7.5%

☒ 2. 8%


☒ 3. 6%

☒ 4. 10%

Question ID : 9895804347

Chosen Option : 3

Q.5 The bar chart given below shows the total exports (in ₹ 1000 crores) of a country for 7 consecutive years Y1, Y2, Y3, Y4, Y5, Y6 and Y7.



What is the average exports from years Y1 to Y7?

Ans ☒ 1. 931.45

☒ 2. 886.19

☒ 3. 964.28

☒ 4. 847.87

Question ID : 9895804357

Chosen Option : 3

Q.5 The volume of a right circular cone is equal to the volume of that right circular cylinder whose height is 27 cm and diameter of its base is 30 cm. If the height of the cone is 25 cm, then what will be the diameter of its base?

Ans ☒ 1. 24 cm

- ☒ 2. 54 cm
☐ 3. 27 cm
☐ 4. 35 cm

Question ID : 9895804353
Chosen Option : 3

Q.5 Out of 100 articles, 25 articles were sold at 25% profit and the remaining articles were sold at 25% loss. What will be the total loss percentage?

- Ans ☐ 1. 15
☒ 2. 12.5
☐ 3. 20
☐ 4. 10

Question ID : 9895804343
Chosen Option : 2

Q.5 40 mechanics can repair a bike in 56 days. In how many days 32 mechanics will do the same work?

- Ans ☐ 1. 60 days
☐ 2. 56 days
☐ 3. 80 days
☒ 4. 70 days

Question ID : 9895804350
Chosen Option : 4

Q.5 The average of 23, 27, 29, 36, 47 and x is 35. What is the value of x?

- Ans ☐ 1. 45
☐ 2. 52
☒ 3. 48
☐ 4. 39

Question ID : 9895804338
Chosen Option : 3

Q.5 Tap K can fill a tank in 8 hours and tap L can fill the same tank in 20 hours. In how many hours both tap K and L together can fill the same tank?

- Ans ☐ 1. 20/3 hours
☐ 2. 60/11 hours
☐ 3. 18/5 hours
☒ 4. 40/7 hours

Question ID : 9895804349
Chosen Option : 4

- 8 Selling price of first article is ₹ 960 and cost price of second article is ₹ 960. If there is a profit of 20% on first article and loss of 20% on second article, then, what will be the total loss?

Ans ☒ 1. ₹ 36
☒ 2. ₹ 24
☒ 3. ₹ 20
☒ 4. ₹ 32

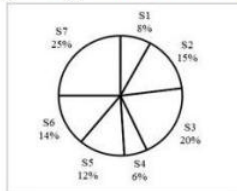
Question ID : 9895804342
Chosen Option : 4

- Q.5 Neeraj covers two distances of 10 km and 20 km in 1 hour and 5 hours respectively. What will be the average speed of Neeraj for the whole journey?

Ans ☒ 1. 4 km/hr
☒ 2. 7 km/hr
☒ 3. 5 km/hr
☒ 4. 6 km/hr

Question ID : 9895804351
Chosen Option : 2

- Q.6 The pie chart given below shows the annual snowfall received by 7 states of a country. The snowfall is shown as a percentage of total annual snowfall of the country.



If the annual snowfall received by the country is 700 cm. What is the difference in the annual snowfalls of S3 and S2?

Ans ☒ 1. 42 cm
☒ 2. 7 cm
☒ 3. Cannot be determined
☒ 4. 35 cm

Question ID : 9895804356
Chosen Option : 4

- Q.6 What is the value of $\left(2000 \div \frac{1}{2} \text{ of } \frac{25}{2} \times \frac{5}{2} \text{ of } \frac{4}{25} - 5\right)$?

Ans ☒ 1. 121
☒ 2. 123
☒ 3. 122
☒ 4. 126

Question ID : 9895804335
Chosen Option : 4

- Q.6 A motorcycle is moving at the speed of 25 km/hr and its speed is increased by 7 km/hr at the end of each hour. How much time it will take to cover a distance of 225 km?

- Ans ☒ 1. 11/2 hr
☒ 2. 7 hr
☒ 3. 13/2 hr
☒ 4. 6 hr

Question ID : 9895804352
Chosen Option : 1

Q.6
3 What is the mode of the given data?
21, 22, 23, 23, 24, 21, 22, 23, 21, 23, 24, 23, 21, 23

- Ans ☒ 1. 23
☒ 2. 21
☒ 3. 22
☒ 4. 24

Question ID : 9895804340
Chosen Option : 2

Q.6
4 A sum of ₹ 10500 becomes ₹ 17745 in 2 years at the rate of compound interest. If the interest is compounded annually, then what will be the rate of interest?

- Ans ☒ 1. 40%
☒ 2. 30%
☒ 3. 25%
☒ 4. 20%

Question ID : 9895804348
Chosen Option : 2

Q.6
5 The average monthly salary of 30 employees and 5 managers is ₹ 80000. One manager with salary ₹ 180000 is replaced by a new manager. If the average monthly salary now becomes ₹ 78500, then what is the monthly salary of the new manager?

- Ans ☒ 1. ₹ 142500
☒ 2. ₹ 132000
☒ 3. ₹ 127500
☒ 4. ₹ 154500

Question ID : 9895804337
Chosen Option : 1

Q.6
6 Height of a right circular cone is 8 cm. If diameter of its base is 12 cm, then what will be the curved surface area of the cone?

- Ans ☒ 1. $1056/7 \text{ cm}^2$
☒ 2. $1320/7 \text{ cm}^2$
☒ 3. $1440/7 \text{ cm}^2$
☒ 4. $2112/7 \text{ cm}^2$

Question ID : 9895804354
Chosen Option : 2

Q.6 The ratio of the areas of two triangles is 1 : 2 and the ratio of their bases is 3 : 4. What will be the ratio of their height?
7

- Ans
- ☒ 1. 1 : 3
 - ☒ 2. 4 : 3
 - ☒ 3. 2 : 1
 - ☒ 4. 2 : 3

Question ID : 9895804355
Chosen Option : 4

Q.6 A bag has ₹ 840 in the denomination of ₹ 1, ₹ 2 and ₹ 5 coins. ₹ 1, ₹ 2 and ₹ 5 coins are in the ratio of 8 : 1 : 5. How
8 many coins of ₹ 5 are in the bag?

- Ans
- ☒ 1. 60
 - ☒ 2. 24
 - ☒ 3. 600
 - ☒ 4. 120

Question ID : 9895804345
Chosen Option : 4

Q.6 What is the value of $\left(11 \div 4 - \frac{2}{3} \text{ of } \frac{9}{8} + 11\right)$?
9

- Ans
- ☒ 1. 13
 - ☒ 2. 11
 - ☒ 3. 15
 - ☒ 4. 17

Question ID : 9895804336
Chosen Option : 1

Q.7 The Least Common Multiple and Highest common Factor of two numbers are 30 and 5 respectively. If their sum is 25,
0 then what will be the difference of these two numbers?

- Ans
- ☒ 1. 15
 - ☒ 2. 10
 - ☒ 3. 25
 - ☒ 4. 5

Question ID : 9895804334
Chosen Option : 4


Q.7 A shopkeeper sells a cooler at a discount of 15%. If he gives a discount of 19%, then he earns ₹ 332 less. What will be
1 the marked price of the cooler?

- Ans
- ☒ 1. ₹ 8100
 - ☒ 2. ₹ 8300
 - ☒ 3. ₹ 8700

☒ 4. ₹ 8200

Question ID : 9895804339
Chosen Option : 2

Q.7 The bar chart given below shows the total exports (in ₹ 1000 crores) of a country for 7 consecutive years Y1, Y2, Y3, Y4, Y5, Y6 and Y7.



What is the ratio of the exports of year with lowest exports and the year with second highest exports?

- Ans ☒ 1. 9 : 12
☒ 2. 5 : 12
☒ 3. 9 : 13
☒ 4. 5 : 11

Question ID : 9895804358
Chosen Option : 2

Q.7 If X is 80% more than Y , then Y is how much percentage less than X ?

- Ans ☒ 1. 61.33%
☒ 2. 80%
☒ 3. 33.33%
☒ 4. 44.44%

Question ID : 9895804341
Chosen Option : 4

Q.7 P, Q and R invest sum in the ratio of 7 : 4 : 9 respectively. If they earned total profit of ₹ 6680 at the end of year, then what is the total share of P and Q together?

- Ans ☒ 1. ₹ 4868
☒ 2. ₹ 4254
☒ 3. ₹ 4124
☒ 4. ₹ 3674

Question ID : 9895804346
Chosen Option : 4

Q.7 K, L and M invest sum in the ratio of 15 : 20 : 27 respectively. If they earned total profit of ₹ 10230 at the end of year, then what is the difference between share of K and L?

- Ans ☒ 1. ₹ 1155
☒ 2. ₹ 1275
☒ 3. ₹ 1980
☒ 4. ₹ 825

Question ID : 9895804344
Chosen Option : 4

Section : English Language

Q.1 Select the most appropriate meaning of the underlined idiom in the given sentence.

My views are totally in harmony with my brother's views.

- Ans
- ☒ 1. according to
 - ☒ 2. in favor of
 - ☒ 3. different from
 - ☒ 4. in agreement with

Question ID : 9895804238
Chosen Option : 4

Q.2 Select the most appropriate ANTONYM of the given word.

ATTRACTED

- Ans
- ☒ 1. Repelled
 - ☒ 2. Enchanted
 - ☒ 3. Transformed
 - ☒ 4. Disturbed

Question ID : 9895804236
Chosen Option : 1

Q.3 Select the most appropriate word to fill in the blank.

My sister _____ a cat and brought it home.

- Ans
- ☒ 1. assumed
 - ☒ 2. adapted
 - ☒ 3. adopted
 - ☒ 4. approved

Question ID : 9895804244
Chosen Option : 3

Q.4 Select the most appropriate option to substitute the underlined segment in the given sentence. If there is no need to substitute it, select No improvement.

The sound of the sea waves became gradually weaker over the time.

- Ans
- ☒ 1. sounds of the sea wave
 - ☒ 2. sound from sea waves
 - ☒ 3. No improvement
 - ☒ 4. sound with the sea waves

Question ID : 9895804252
Chosen Option : 3

Q.5 Select the most appropriate option to substitute the underlined segment in the given sentence. If there is no need to substitute it, select No improvement.

Sivagami longed to touch the chisel but her grandfather chase her away.

- Ans
- ☒ 1. chased it away
 - ☒ 2. chased her away
 - ☒ 3. No improvement
 - ☒ 4. had chased them away

Question ID : 9895804251
Chosen Option : 2

Q.6 Identify the segment in the sentence which contains the grammatical error from the given options.

I'm sorry, but I don't agree with which you just said.

- Ans
- ☒ 1. I'm sorry
 - ☒ 2. with which
 - ☒ 3. just said
 - ☒ 4. don't agree

Question ID : 9895804247
Chosen Option : 2

Q.7 Select the most appropriate synonym of the given word.

THRIVE

- Ans
- ☒ 1. Prosper
 - ☒ 2. Promote
 - ☒ 3. Foster
 - ☒ 4. Progress

Question ID : 9895804233
Chosen Option : 3

Q.8 Select the word which means the same as the group of words given.

An act that makes you feel morally bad or ashamed.

- Ans
- ☒ 1. Displeased
 - ☒ 2. Irrational
 - ☒ 3. Disgraceful
 - ☒ 4. Ignorant

Question ID : 9895804242
Chosen Option : 3

Q.9

Select the most appropriate meaning of the given idiom.

Bone of contention

- Ans
- ☒ 1. A cause of failure
 - ☒ 2. A matter of contentment
 - ☒ 3. A highly irritable person
 - ☒ 4. A subject of dispute

Question ID : 9895804237
Chosen Option : 4

Q.1
0 Fill in the blanks with the most appropriate words.

Once the mother duck jumped _____ the pond, the ducklings followed suit.

- Ans
- ☒ 1. over
 - ☒ 2. in
 - ☒ 3. under
 - ☒ 4. into

Question ID : 9895804248
Chosen Option : 4

Q.1
1 Select the correctly spelt word.

- Ans
- ☒ 1. Thoroughfare
 - ☒ 2. Thoroughfair
 - ☒ 3. Thorowfare
 - ☒ 4. Throughfare

Question ID : 9895804240
Chosen Option : 4

Q.1
2 Select the most appropriate option to substitute the underlined segment in the given sentence. If there is no need to substitute it, select No improvement.

The ticking of the clock was the only sound to hear.

- Ans
- ☒ 1. in hearing
 - ☒ 2. No improvement
 - ☒ 3. to hear with
 - ☒ 4. to be heard

Question ID : 9895804250
Chosen Option : 4

Comprehension:

In the following passage some words have been deleted. Fill in the blanks with the help of the alternatives given. Select the most appropriate option for each number.

The trees had lost most of their leaves and their (1) _____ figures were clear against the grey sky. Bella looked up at them and could see birds (2) _____ with difficulty, (3) _____ to keep themselves in place while the wind tried to blow them (4) _____. She was walking against the wind and trying hard to push herself ahead. She resisted and strode (5) _____

SubQuestion No : 13

Q.1
3 Fill in blank (1) with the most appropriate option.

- Ans
- ☒ 1. bared
 - ☐ 2. dreary
 - ☐ 3. parched
 - ☐ 4. dried

Question ID : 9895804254
Chosen Option : 4

Comprehension:

In the following passage some words have been deleted. Fill in the blanks with the help of the alternatives given. Select the most appropriate option for each number.

The trees had lost most of their leaves and their (1) _____ figures were clear against the grey sky. Bella looked up at them and could see birds (2) _____ with difficulty, (3) _____ to keep themselves in place while the wind tried to blow them (4) _____. She was walking against the wind and trying hard to push herself ahead. She resisted and strode (5) _____

SubQuestion No : 14

Q.1
4 Fill in blank (2) with the most appropriate option.

- Ans
- ☒ 1. perching
 - ☐ 2. punching
 - ☐ 3. pouncing
 - ☐ 4. parching

Question ID : 9895804255
Chosen Option : 4

Comprehension:

In the following passage some words have been deleted. Fill in the blanks with the help of the alternatives given. Select the most appropriate option for each number.

The trees had lost most of their leaves and their (1) _____ figures were clear against the grey sky. Bella looked up at them and could see birds (2) _____ with difficulty, (3) _____ to keep themselves in place while the wind tried to blow them (4) _____. She was walking against the wind and trying hard to push herself ahead. She resisted and strode (5) _____

SubQuestion No : 15

Q.1
5 Fill in blank (3) with the most appropriate option.

- Ans
- ☒ 1. struggling
 - ☐ 2. sleeping
 - ☐ 3. sliding
 - ☐ 4. surviving

Question ID : 9895804256
Chosen Option : 1

Comprehension:

In the following passage some words have been deleted. Fill in the blanks with the help of the alternatives given. Select the most appropriate option for each number.

The trees had lost most of their leaves and their (1) _____ figures were clear against the grey sky. Bella looked up at them and could see birds (2) _____ with difficulty, (3) _____ to keep themselves in place while the wind tried to blow them (4) _____. She was walking against the wind and trying hard to push herself ahead. She resisted and strode (5) _____

SubQuestion No : 16

Q.1
6 Fill in blank (4) with the most appropriate option.

- Ans
- ☐ 1. out
 - ☒ 2. away
 - ☐ 3. up
 - ☐ 4. aside

Question ID : 9895804257
Chosen Option : 2

Comprehension:

In the following passage some words have been deleted. Fill in the blanks with the help of the alternatives given. Select the most appropriate option for each number.

The trees had lost most of their leaves and their (1) _____ figures were clear against the grey sky. Bella looked up at them and could see birds (2) _____ with difficulty, (3) _____ to keep themselves in place while the wind tried to blow them (4) _____. She was walking against the wind and trying hard to push herself ahead. She resisted and strode (5) _____

SubQuestion No : 17

Q.1
7 Fill in blank (5) with the most appropriate option.

- Ans ☒ 1. on
☒ 2. by
☒ 3. up
☒ 4. in

Question ID : 9895804258
Chosen Option : 2

Q.1
8 Identify the segment in the sentence which contains the grammatical error from the given options.

As far the eye could reach, nothing could be seen except the ruined columns of an old building.

- Ans ☒ 1. could reach
☒ 2. As far the eye
☒ 3. except the
☒ 4. nothing could be

Question ID : 9895804246
Chosen Option : 1

Q.1
9 Select the word which means the same as the group of words given.

That which cannot be wrong

- Ans ☒ 1. Irrefutable
☒ 2. Inaccurate
☒ 3. Infallible
☒ 4. Inevitable

Question ID : 9895804241
Chosen Option : 3

Q.2
0 Select the most appropriate antonym of the given word.

BENEVOLENT

Ans

- ☒ 1. Dull
- ☒ 2. Merciless
- ☒ 3. Friendly
- ☒ 4. Injurious

Question ID : 9895804235
Chosen Option : 2

Q.2
1 Select the most appropriate word to fill in the blank.

His success in the competitive examination gave him a major _____ in his career.

- Ans
- ☒ 1. break out
 - ☒ 2. breakthrough
 - ☒ 3. break up
 - ☒ 4. breakdown

Question ID : 9895804243
Chosen Option : 2

Q.2
2 Identify the segment in the sentence which contains the grammatical error from the given options.

She always gets the better in quarrels whether it is with girls or boys.

- Ans
- ☒ 1. better in
 - ☒ 2. gets the
 - ☒ 3. it is with
 - ☒ 4. She always

Question ID : 9895804245
Chosen Option : 2

Q.2
3 Select the correctly spelt word.

- Ans
- ☒ 1. Kindergarden
 - ☒ 2. Kindergarten
 - ☒ 3. Kindargarten
 - ☒ 4. Kindergardan

Question ID : 9895804239
Chosen Option : 1

Q.2
4 Fill in the blank with the most appropriate option.

_____ in the first attempt, he did not try again.

- Ans
- ☒ 1. Being failing
 - ☒ 2. Having failed

☒ 3. Being failed

☒ 4. Having fail

Question ID : 9895804249
Chosen Option : 2

Q.2
5 Select the most appropriate synonym of the given word.

MORALE

Ans ☒ 1. Appearance

☒ 2. Attitude

☒ 3. Self-confidence

☒ 4. Reputation

Question ID : 9895804234
Chosen Option : 4

Section : Hindi Language

Q.1 रिक्त स्थान को भरने के लिए उपयुक्त शब्द का चयन करें।

ज्वर के कारण मुझे चलने पर _____ हो रही है।

Ans ☒ 1. थकावट

☒ 2. हँसी

☒ 3. खुशी

☒ 4. दुखी

Question ID : 9895803652
Chosen Option : --

Q.2 दिये गये वाक्यांश के लिए एक शब्द चुनिए।

जिसका कोई नाथ न हो

Ans ☒ 1. कुनाथ

☒ 2. अनाथ

☒ 3. हजारीनाथ

☒ 4. सनाथ

Question ID : 9895803669
Chosen Option : --

Q.3 सही वर्तनी वाले शब्द का चयन करें।

Ans

- ☒ 1. हिंदुत्व
☒ 2. हिंदूत्व
☒ 3. हिन्दुत्व
☒ 4. हीन्दूत्व

Question ID : 9895803671
Chosen Option : --

Q.4 रिक्त स्थान को भरने के लिए उपयुक्त शब्द का चयन करें।

दादा जी को बागवानी में _____ है।

- Ans ☒ 1. शोक
☒ 2. प्रश्न
☒ 3. रुचि
☒ 4. नियम

Question ID : 9895803655
Chosen Option : --

Q.5 दिए गए वाक्य में रेखांकित खंड को प्रतिस्थापित करने के लिए

उपयुक्त विकल्प का चयन करें।

मेरी पेंटिंग दस हजारों में बिक गई।

- Ans ☒ 1. दसों हजारों में बिक गई।
☒ 2. दस हजार में बिक गई।
☒ 3. दस हजार में बिक गए।
☒ 4. दसों हजार में बिक गई।

Question ID : 9895803650
Chosen Option : --

Q.6 दिए गए शब्द के पर्यायवाची शब्द का चयन करें।

समुद्र

- Ans ☒ 1. मेघ
☒ 2. परिधि
☒ 3. नीरधि
☒ 4. परिमाण

Question ID : 9895803664

Chosen Option : --

Q.7 निम्नलिखित में से उस विकल्प का चयन करें जो 'कुँएँ' का 'मैंढक' मुहावरे का अर्थ व्यक्त करता है।

Ans

- ☒ 1. कुँएँ के अंदर रहने वाला मैंढक
- ☒ 2. मूख
- ☒ 3. जानी
- ☒ 4. सीमित ज्ञान वाला

Question ID : 9895803666

Chosen Option : --

Q.8 दिये गये वाक्यांश के लिए एक शब्द चुनिए।

जिसे जाना न जा सके

Ans

- ☒ 1. ज्ञानशील
- ☒ 2. ज्ञानोदय
- ☒ 3. अज्ञेय
- ☒ 4. जिज्ञासु

Question ID : 9895803668

Chosen Option : --

Q.9 दिए गए शब्द का विलोम चुनें।

उदय

Ans

- ☒ 1. उत्तर
- ☒ 2. वाचाल
- ☒ 3. अस्त
- ☒ 4. निरस्त

Question ID : 9895803663

Chosen Option : --

Comprehension:

दिए गए अनुच्छेद में कुछ शब्द हटा दिए गए हैं। दिए गए विकल्पों की सहायता से रिक्त स्थान भरें। प्रत्येक संख्या के लिए उपयुक्त विकल्प का चयन करें।

सत्य भाषण से मनुष्य की आत्मा _____ (1) होती है। उसके मन को सुख और _____ (2) प्राप्त होती है। सत्यवादी को कभी यह भय नहीं रहता कि यदि उसकी _____ (3) खुल गई तो क्या होगा ? उसे मानसिक शांति रहती है। इसके विपरीत झूठ बोलने वाले व्यक्ति की समाज में _____ (4) होती रहती है। असत्यवादी व्यक्ति अपने स्वभाव के कारण कभी _____ (5) नहीं बोल पाता।

SubQuestion No : 10

Q.1
0 गद्यांश में संकेतित रिक्त स्थान (1) के लिए उपयुक्त शब्द होगा -

- Ans ☒ 1. बलवान
☒ 2. दुर्बल
☒ 3. समाज
☒ 4. निन्दा

Question ID : 9895803657
Chosen Option : --

Comprehension:

दिए गए अनुच्छेद में कुछ शब्द हटा दिए गए हैं। दिए गए विकल्पों की सहायता से रिक्त स्थान भरें। प्रत्येक संख्या के लिए उपयुक्त विकल्प का चयन करें।

सत्य भाषण से मनुष्य की आत्मा _____ (1) होती है। उसके मन को सुख और _____ (2) प्राप्त होती है। सत्यवादी को कभी यह भय नहीं रहता कि यदि उसकी _____ (3) खुल गई तो क्या होगा ? उसे मानसिक शांति रहती है। इसके विपरीत झूठ बोलने वाले व्यक्ति की समाज में _____ (4) होती रहती है। असत्यवादी व्यक्ति अपने स्वभाव के कारण कभी _____ (5) नहीं बोल पाता।

SubQuestion No : 11

Q.1
1 गद्यांश में संकेतित रिक्त स्थान (2) के लिए उपयुक्त शब्द होगा -

- Ans ☒ 1. बड़ाई
☒ 2. शांति
☒ 3. कमी
☒ 4. अशांति

Question ID : 9895803658





Comprehension:

दिए गए अनुच्छेद में कुछ शब्द हटा दिए गए हैं। दिए गए विकल्पों की सहायता से रिक्त स्थान भरें। प्रत्येक संख्या के लिए उपयुक्त विकल्प का चयन करें।

सत्य भाषण से मनुष्य की आत्मा _____ (1) होती है। उसके मन को सुख और _____ (2) प्राप्त होती है। सत्यवादी को कभी यह भय नहीं रहता कि यदि उसकी _____ (3) खुल गई तो क्या होगा ? उसे मानसिक शांति रहती है। इसके विपरीत झूठ बोलने वाले व्यक्ति की समाज में _____ (4) होती रहती है। असत्यवादी व्यक्ति अपने स्वभाव के कारण कभी _____ (5) नहीं बोल पाता।

SubQuestion No : 12

Q.1
2 गद्यांश में संकेतित रिक्त स्थान (3) के लिए उपयुक्त शब्द होगा -

- Ans  1. गठरी
-  2. लकड़ी
-  3. पोल
-  4. बरतन

Question ID : 9895803659

Chosen Option : --




Comprehension:

दिए गए अनुच्छेद में कुछ शब्द हटा दिए गए हैं। दिए गए विकल्पों की सहायता से रिक्त स्थान भरें। प्रत्येक संख्या के लिए उपयुक्त विकल्प का चयन करें।

सत्य भाषण से मनुष्य की आत्मा _____ (1) होती है। उसके मन को सुख और _____ (2) प्राप्त होती है। सत्यवादी को कभी यह भय नहीं रहता कि यदि उसकी _____ (3) खुल गई तो क्या होगा ? उसे मानसिक शांति रहती है। इसके विपरीत झूठ बोलने वाले व्यक्ति की समाज में _____ (4) होती रहती है। असत्यवादी व्यक्ति अपने स्वभाव के कारण कभी _____ (5) नहीं बोल पाता।

SubQuestion No : 13

Q.1
3 गद्यांश में संकेतित रिक्त स्थान (4) के लिए उपयुक्त शब्द होगा -

- Ans  1. पूजा
-  2. प्रशंसा
-  3. मजाक

✓ 4. निन्दा

Question ID : 9895803660
Chosen Option : --

Comprehension:

दिए गए अनुच्छेद में कुछ शब्द हटा दिए गए हैं। दिए गए विकल्पों की सहायता से रिक्त स्थान भरें। प्रत्येक संख्या के लिए उपयुक्त विकल्प का चयन करें।

सत्य भाषण से मनुष्य की आत्मा _____ (1) होती है। उसके मन को सुख और _____ (2) प्राप्त होती है। सत्यवादी को कभी यह भय नहीं रहता कि यदि उसकी _____ (3) खुल गई तो क्या होगा ? उसे मानसिक शांति रहती है। इसके विपरीत झूठ बोलने वाले व्यक्ति की समाज में _____ (4) होती रहती है। असत्यवादी व्यक्ति अपने स्वभाव के कारण कभी _____ (5) नहीं बोल पाता।

SubQuestion No : 14

Q.1
4 गद्यांश में संकेतित रिक्त स्थान (5) के लिए उपयुक्त शब्द होगा -

- Ans
- ✗ 1. घटिया
 - ✓ 2. सत्य
 - ✗ 3. नीचा
 - ✗ 4. बढ़िया

Question ID : 9895803661
Chosen Option : --

Q.1
5 रिक्त स्थान को भरने के लिए उपयुक्त शब्द का चयन करें।

_____ चैन से रहना चाहता हूँ।

- Ans
- ✗ 1. मैं
 - ✗ 2. वह
 - ✓ 3. आप
 - ✗ 4. तुम

Question ID : 9895803653
Chosen Option : --

Q.1
6 रिक्त स्थान को भरने के लिए उपयुक्त शब्द का चयन करें।

_____ ने अपना घोंसला बनाया।

- Ans
- ✗ 1. चीता

- ☒ 2. शेर
☐ 3. कबूतर
☐ 4. हाथी

Question ID : 9895803654
Chosen Option : --

Q.1
7 निम्नलिखित में से उस विकल्प का चयन करें जो ' तलवार सिर पर लटकी रहना ' मुहाबरे का अर्थ व्यक्त करता है।

- Ans ☒ 1. भयंकर खतरा बने रहना
☐ 2. तलवार से खतरा हटाना
☐ 3. तलवार साथ लेकर चलना
☐ 4. सिर के ऊपर तलवार लटकाकर घूमना

Question ID : 9895803667
Chosen Option : --

Q.1
8 दिए गए वाक्य का वह भाग ज्ञात करें जिसमें कोई त्रुटि है।

वास्तव में ईश्वर ने सभी को स्वतन्त्रा उत्पन्न किया है।

- Ans ☐ 1. ईश्वर ने
☐ 2. स्वतन्त्रा उत्पन्न किया है।
☐ 3. सभी को
☒ 4. वास्तव में

Question ID : 9895803646
Chosen Option : --

Q.1
9 दिए गए वाक्य का वह भाग ज्ञात करें जिसमें कोई त्रुटि है।

वृक्ष पूजन का हमारे जीवन का विशेष स्थान नहीं रहा।

- Ans ☐ 1. हमारे जीवन का
☐ 2. नहीं रहा।
☒ 3. वृक्ष पूजन का
☐ 4. विशेष स्थान

Question ID : 9895803647
Chosen Option : --

Q.2
0

दिए गए वाक्य में रेखांकित खंड को प्रतिस्थापित करने के लिए

उपयुक्त विकल्प का चयन करें।

कई लोग उसके पीट रहे थे, वह अपना बचाव नहीं कर पा रहा था।

- Ans
- ☒ 1. उसपर पीट रहे थे,
 - ☒ 2. उसे पीट रहे थे,
 - ☒ 3. उसे पीट रहा था,
 - ☒ 4. उससे पीट रहे थे,

Question ID : 9895803651
Chosen Option : --

Q.2
1 दिए गए शब्द का विलोम चुनें।

परोक्ष

- Ans
- ☒ 1. नवागत
 - ☒ 2. पाक्षिक
 - ☒ 3. जिज्ञासु
 - ☒ 4. प्रत्यक्ष

Question ID : 9895803662
Chosen Option : --

Q.2
2 सही वर्तनी वाले शब्द का चयन करें।

- Ans
- ☒ 1. संसकार
 - ☒ 2. संस्कार
 - ☒ 3. संशकार
 - ☒ 4. संष्कार

Question ID : 9895803670
Chosen Option : --

Q.2
3 दिए गए शब्द के पर्यायवाची शब्द का चयन करें।

बादल

- Ans
- ☒ 1. घन
 - ☒ 2. घर
 - ☒ 3. आकाश
 - ☒ 4. घट

Question ID : 9895803665
Chosen Option : --

Q.2
4 दिए गए वाक्य का वह भाग ज्ञात करें जिसमें कोई त्रुटि है।

लिखित और मौखिक भाषा में सबसे बड़ा अंतर यह है कि लिखित भाषा अनुशासन की माँग करता है।

Ans

- ☒ 1. यह है कि
- ☒ 2. सबसे बड़ा अंतर
- ☒ 3. लिखित और मौखिक भाषा में
- ☒ 4. लिखित भाषा अनुशासन की माँग करता है।

Question ID : 9895803648
Chosen Option : --

Q.2
5 दिए गए वाक्य में रेखांकित खंड को प्रतिस्थापित करने के लिए उपयुक्त विकल्प का चयन करें।

चाँदी की हथकड़ी काला पड़ जाती है।

Ans

- ☒ 1. हथकड़ी कालियाँ पड़ जाती है।
- ☒ 2. हथकड़ी काली पड़ जाता है।
- ☒ 3. हथकड़ी काला पड़ जाता है।
- ☒ 4. हथकड़ी काली पड़ जाती है।

Question ID : 9895803649
Chosen Option : --

Constable (GD) in CAPFs, NIA, SSF and Rifleman (GD) in Assam Rifles Examination, 2018

| | |
|------------------|--------------------|
| Roll No. : | |
| Registration No. | |
| Name : | |
| Exam Venue : | |
| Exam Time : | 9:00 AM - 10:30 AM |
| Exam Date : | 15/02/2019 |

Section : General Section

Q.1 Eight friends A, B, C, D, E, F, G and H are sitting around a circular table facing each other for a lunch. A is opposite D and third to the right of B. G is between A and F. H is to the right of A. E is between C and D. Who is sitting third to the right of H?

- Ans
- ☒ 1. F
 - ☒ 2. B
 - ☒ 3. D
 - ☒ 4. G

Question ID : 9895803398
Chosen Option : 2

Q.2 The statements below are followed by two conclusions labeled I and II. Assuming that the information in the statements is true, even if it appears at variance with generally established facts, decide which conclusion(s) logically and definitely follow(s) from the information given in the statements.

Statements:

- 1) Some rubies are garments.
- 2) Some garments are garnets.

Conclusion:

- I. Some rubies are garnets.
- II. No ruby is a garnet.

- Ans
- ☒ 1. Only conclusion II follows.
 - ☒ 2. Only conclusion I follows.
 - ☒ 3. Both conclusions follow.
 - ☒ 4. Either conclusion I or conclusion II follows.

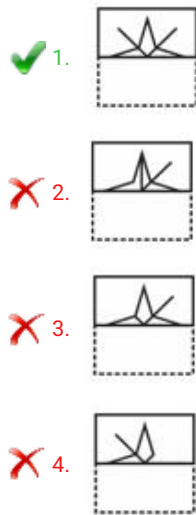
Question ID : 9895803401
Chosen Option : 3

Q.3 A square transparent sheet with a pattern is given. How will the pattern appear when the transparent sheet is folded along the dotted line?



x

Ans

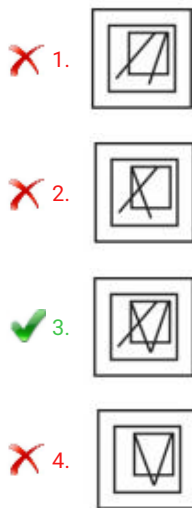


Question ID : 9895803412
Chosen Option : 2

Q.4 Choose the option in which the figure marked 'X' is embedded. (Rotation is not allowed)



Ans



Question ID : 9895803410
Chosen Option : 2

Q.5 J, K, L, M, N and O are six teachers. Each one teaches a different subject out of Hindi, English, Math, Science, Social Science and Arts, not necessarily in the same order. Each of them teaches on only one day, from Monday to Saturday, not necessarily in the same order.

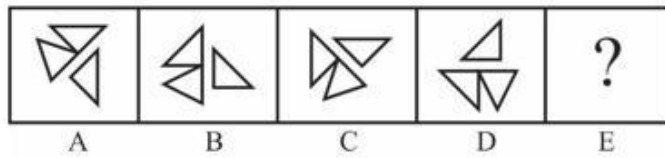
J teaches Science on Wednesday. O teaches Math second day after J. K teaches on the first day of the week, but teaches neither Hindi nor English. M teaches English before N and L teaches Arts before J. Which subject is taught between Thursday and Saturday?

Ans

- ✗ 1. English
- ✓ 2. Math
- ✗ 3. Social Science
- ✗ 4. Science

Q.6 Choose the option that would follow next in the given figure series.

Problem Fig.



Ans

- ✓ 1.
- ✗ 2.
- ✗ 3.
- ✗ 4.

Q.7 Select the option that will correctly replace the question mark (?) in the series.

100, 96, 80, 44, ?

- Ans ✗ 1. 64
- ✗ 2. 20
- ✓ 3. -20
- ✗ 4. 16

Q.8 Select the option that is related to the third term in the same way as the second term is related to the first term.

Artificial: Natural :: Answer: ?

- Ans ✓ 1. Question
- ✗ 2. Reply
- ✗ 3. Problem
- ✗ 4. Solution

Question ID : 9895803392

Chosen Option : 4

Q.9 Choose the odd number out of the given options.

- Ans
- ☒ 1. 21
 - ☒ 2. 63
 - ☒ 3. 49
 - ☒ 4. 37

Question ID : 9895803405

Chosen Option : 3

Q.1 Choose the odd one out of the given options.

- Ans
- ☒ 1. Kidney
 - ☒ 2. Nose
 - ☒ 3. Liver
 - ☒ 4. Lungs

Question ID : 9895803391

Chosen Option : 2

Q.1 Seven friends O, P, Q, R, S, T and U are watching a movie sitting in a row. P is sitting at one extreme end. Q is sitting to the immediate left of S. P is sitting second to the right of T. U is not sitting at any extreme end. O is sitting between R and T. Who is sitting at the extreme right end?

- Ans
- ☒ 1. R
 - ☒ 2. Q
 - ☒ 3. T
 - ☒ 4. P

Question ID : 9895803397

Chosen Option : 3

Q.1 Select the option that is related to the third number in the same way as the second number is related to the first number.

2
45 : 405 :: 49 : ?

- Ans
- ☒ 1. 169
 - ☒ 2. 637
 - ☒ 3. 144
 - ☒ 4. 525

Question ID : 9895803404

Chosen Option : 2

Q.1 Choose the odd one out of the given options.

- Ans
- ☒ 1. PQH
 - ☒ 2. HJL

☒ 3. GJM

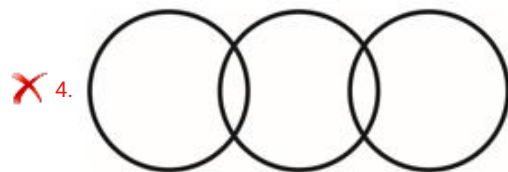
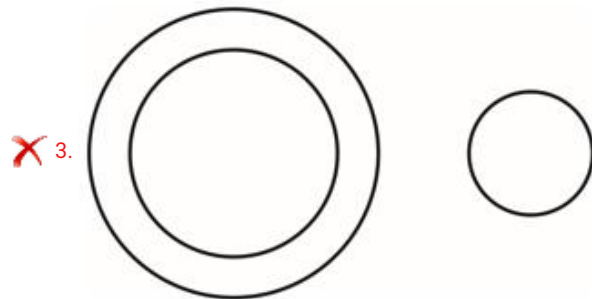
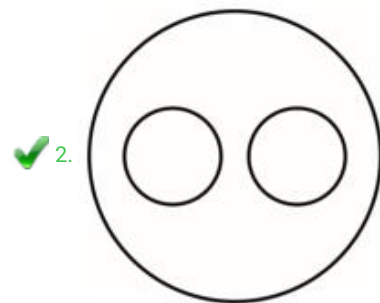
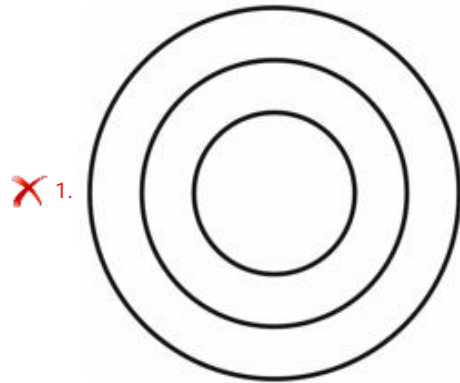
☒ 4. ELM

Question ID : 9895803390
Chosen Option : 1

Q.1
4 Select the Venn diagram that best represents the given set of classes.

Words, Synonyms, Antonymous

Ans



Question ID : 9895803413
Chosen Option : 2

Q.1
5 In a certain code, STEERING is written as HGVVIRMT. How will QUESTION be written in that code?

Ans ☒ 1. JFVHGILM

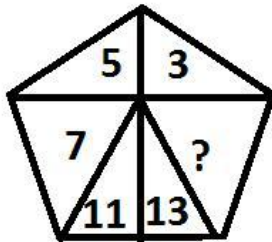
☒ 2. JFVHGRLM

☒ 3. JEVHGRLM

✗ 4. JFVHGRIM

Question ID : 9895803395
Chosen Option : 2

Q.1
6 Select the option that will correctly replace the question mark (?) in the given pattern.



- Ans
- ✗ 1. 16
 - ✗ 2. 19
 - ✗ 3. 9
 - ✓ 4. 11

Question ID : 9895803406
Chosen Option : 4

Q.1
7 Select the option that is related to the third term in the same way as the second term is related to the first term.

Famous : Renowned : : Fierce : ?

- Ans
- ✗ 1. Will
 - ✗ 2. Fear
 - ✗ 3. Desire
 - ✓ 4. Violent

Question ID : 9895803393
Chosen Option : 3

Q.1
8 Select the option that will correctly replace the question mark (?) in the series.

3, 15, 32, 59, ?

- Ans
- ✗ 1. 125
 - ✗ 2. 105
 - ✓ 3. 101
 - ✗ 4. 115

Question ID : 9895803403
Chosen Option : 3

Q.1
9

The statements below are followed by two conclusions labeled I and II. Assuming that the information in the statements is true, even if it appears at variance with generally established facts, decide which conclusion(s) logically and definitely follow(s) from the information given in the statements.

Statements:

- 1) All mustards are corns.
- 2) All corns are olives.

Conclusion:

- I. All mustards are olives.
- II. Some olives are mustards.

- Ans**
- ☒ 1. Only conclusion I follows.
 - ☒ 2. Both conclusions follow.
 - ☒ 3. Only conclusion II follows.
 - ☒ 4. Either conclusion I or conclusion II follows.

Question ID : 9895803400
Chosen Option : 3

Q.2 Select the option that will correctly replace the question mark (?) in the series.

PEL, NGK, LIJ, JKI, ?

- Ans**
- ☒ 1. HMH
 - ☒ 2. HHM
 - ☒ 3. MHH
 - ☒ 4. MMH

Question ID : 9895803389
Chosen Option : 2

Q.2 Select the option that is related to the third term in the same way as the second term is related to the first term.

AC: BF :: JK: ?

- Ans**
- ☒ 1. LM
 - ☒ 2. UT
 - ☒ 3. TU
 - ☒ 4. TV

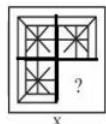
Question ID : 9895803394
Chosen Option : 1

Q.2 Find out the two signs to be interchanged to make the following equation correct.
 $25 + 5 \times 7 - 12 \div 3 = 26$

- Ans**
- ☒ 1. + and ÷
 - ☒ 2. + and ×
 - ☒ 3. - and ÷
 - ☒ 4. + and -

Question ID : 9895803407
Chosen Option : 2

Q.2 Select a figure from amongst the four alternatives that when placed in the blank space (?) of figure X will complete the pattern. (Rotation is not allowed).



Ans

☒ 1.



☒ 2.



☒ 3.



☒ 4.



Question ID : 9895803409
Chosen Option : 1

Q.2 Choose the option that most closely resembles the mirror image of the given figure when mirror is placed at right side.



Ans

☒ 1.



☒ 2.



☒ 3.



☒ 4.



Question ID : 9895803411
Chosen Option : 2

Q.2 In a certain code, UP is written as 336. How will ATE be written in that code?

Ans ☒ 1. 20

✓ 2. 100

✗ 3. 80

✗ 4. 60

Question ID : 9895803396

Chosen Option : 3

Q.2
6 The tomb of Sher Shah Suri is situated in:

Ans ✗ 1. Sikandara

✗ 2. Burhanpur

✗ 3. Jabalpur

✓ 4. Sasaram

Question ID : 9895804953

Chosen Option : 1

Q.2
7 Which of the following cities is associated with the Kumbh Mela?

Ans ✗ 1. Meerut

✓ 2. Ujjain

✗ 3. Mathura

✗ 4. Varanasi

Question ID : 9895804954

Chosen Option : 4

Q.2
8 Which of the following Hindu shrines is recently declared as a National Heritage by the Government of Pakistan?

Ans ✗ 1. Katas Raj

✓ 2. Panj Tirath

✗ 3. Varun dev temple

✗ 4. Hinglaj Mata temple

Question ID : 9895804976

Chosen Option : 4

Q.2
9 Who is the winner of the Women's Singles Indonesian Masters Badminton tournament 2019?

Ans ✗ 1. Arundhati Pantawane

✗ 2. Shivani Gadde

✓ 3. Saina Nehwal

✗ 4. P. V. Sindhu

Question ID : 9895804965

Chosen Option : 3

Q.3

0 Choose the correct group of diseases that are spread by air:

- Ans
- ☒ 1. Cholera, Typhoid, Tuberculosis
 - ☒ 2. Tuberculosis, Pneumonia, Influenza
 - ☒ 3. Warts, common cold, cough
 - ☒ 4. AIDS, Typhoid, Pneumonia

Question ID : 9895804970
Chosen Option : 2

Q.3 Under which land revenue system, the zamindars were given the rights to transfer their properties subject to the payment of a fixed amount to the Government?

- Ans
- ☒ 1. Permanent Settlement
 - ☒ 2. Jagirdari Settlement
 - ☒ 3. Ryotwari Settlement
 - ☒ 4. Mahalwari Settlement

Question ID : 9895804958
Chosen Option : 2

Q.3 Which of the following features of the Organised sector is NOT correct?

- Ans
- ☒ 1. The enterprises under this sector are registered with the Government.
 - ☒ 2. Workers get paid leaves during the holidays.
 - ☒ 3. Workers under this sector enjoy security and employment.
 - ☒ 4. The employers are bound to provide leave travel concession to its workers.

Question ID : 9895804968
Chosen Option : 2

Q.3 In the context of temple architecture, the most important part of the temple is:

- Ans
- ☒ 1. Gopuram
 - ☒ 2. Mandapam
 - ☒ 3. Pradakshina Patha
 - ☒ 4. Garbhagriha

Question ID : 9895804957
Chosen Option : 1

Q.3 In which of the following protected areas in India the human interference is prohibited?

- Ans
- ☒ 1. National Parks
 - ☒ 2. Wetlands

- ☒ 3. Wildlife sanctuaries
- ☒ 4. Biosphere Reserves

Question ID : 9895804964
Chosen Option : 4

Q.3
5 The Zaskar, the Hunza and the Nubra are the tributaries of:

- Ans ☒ 1. Indus
- ☒ 2. Tapi
 - ☒ 3. Brahmaputra
 - ☒ 4. Godavari

Question ID : 9895804962
Chosen Option : 1

Q.3
6 Which of the following statements is NOT correct about the culture of Maharashtra?

- Ans ☒ 1. Its popular dance is called 'Gotipua'.
- ☒ 2. Ganesh Chaturthi is its main festival.
 - ☒ 3. Its folk theatre is called Tamasha.
 - ☒ 4. Its traditional saree is called Paithani.

Question ID : 9895804955
Chosen Option : 3

Q.3
7 Who among the following is invited as the chief guest at the 2019 Republic Day of India?

- Ans ☒ 1. President of South Africa
- ☒ 2. President of Sri Lanka
 - ☒ 3. Prime Minister of Japan
 - ☒ 4. President of Nepal

Question ID : 9895804975
Chosen Option : 1

Q.3
8 The plastics which get deformed easily on heating are known as:

- Ans ☒ 1. Thermosetting Plastics
- ☒ 2. Thermo Plastics
 - ☒ 3. Thermo resistant Plastics
 - ☒ 4. Thermodynamic Plastics

Question ID : 9895804971
Chosen Option : 3

Q.3
9 With reference to the climatic conditions of the Prairies, which of the following statements is correct?

- Ans ☒ 1. The local wind "Loo" blows here.
☒ 2. The annual rainfall is very heavy.
☒ 3. There is a North South wind barrier.
☒ 4.

It has the continental type of climate with extreme temperatures.

Question ID : 9895804963

Chosen Option : 4

Q.4
0 The dispute between two states can be resolved by the Supreme Court of India under its:

- Ans ☒ 1. Appellate Jurisdiction
☒ 2. Advisory Jurisdiction
☒ 3. Supervisory Jurisdiction
☒ 4. Original Jurisdiction

Question ID : 9895804959

Chosen Option : 1

Q.4
1 What will happen to the boiling point and freezing point of water when some common salt is added in it?

- Ans ☒ 1. Boiling point elevation, freezing point depression
☒ 2. No change
☒ 3. Only boiling point increases or decreases
☒ 4. Boiling point depression, freezing point elevation

Question ID : 9895804974

Chosen Option : 1

Q.4
2 Special Economic Zones are being set up by the Government in order to attract:

- Ans ☒ 1. Traditional artisans
☒ 2. Cooperative companies
☒ 3. Foreign companies
☒ 4. Local companies

Question ID : 9895804969

Chosen Option : 4

Q.4
3 The B.P. Mandal commission was set up to study the reasons of backwardness of the:

- Ans ☒ 1. scheduled tribes
☒ 2. scheduled castes
☒ 3. rural women and children
☒ 4. socially and economically backward classes

Question ID : 9895804961
Chosen Option : 4

Q.4
4 Which of the lenses used to cure Myopia?

- Ans
- ☒ 1. convex
 - ☐ 2. concave
 - ☐ 3. parabolic
 - ☐ 4. cylindrical

Question ID : 9895804973
Chosen Option : 4

Q.4
5 Who among the following rulers is related to “market regulatory measures” in medieval India?

- Ans
- ☒ 1. Alauddin Khilji
 - ☐ 2. Sher Shah Suri
 - ☐ 3. Muhammed Bin Tughlaq
 - ☐ 4. Jahangir

Question ID : 9895804956
Chosen Option : 1

Q.4
6 The other name of Per Capita Income is:

- Ans
- ☐ 1. National Income
 - ☐ 2. Total Income
 - ☐ 3. Intermediate Income
 - ☒ 4. Average Income

Question ID : 9895804967
Chosen Option : 4

Q.4
7 Under which of the following acts the system of Dyarchy was introduced in India?

- Ans
- ☐ 1. Government of Indian Act 1935
 - ☐ 2. Government of Indian Act 1909
 - ☐ 3. Government of Indian Act 1947
 - ☒ 4. Government of Indian Act 1919

Question ID : 9895804960
Chosen Option : 4

Q.4
8 In 2016 Rio Olympics, Indian gymnast Dipa Karmakar attempted the most dangerous vault known as:

- Ans
- ☐ 1. Yurchenko
 - ☐ 2. Rudi

- ☐ 3. Tsukahara
☒ 4. Produnova

Question ID : 9895804966
Chosen Option : 4

Q.4
9 Napthaline ball disappears after some days due to the process of:

- Ans ☒ 1. sublimation
☐ 2. melting and evaporation
☐ 3. melting
☐ 4. evaporation

Question ID : 9895804972
Chosen Option : 2

Q.5
0 The recent largest ever coastal defence exercise is conducted by the Indian Navy is named as:

- Ans ☐ 1. SEA SERPENT
☐ 2. SEA HAWK
☐ 3. SEA SEIZURE
☒ 4. SEA VIGIL

Question ID : 9895804977
Chosen Option : 1

Q.5
1 A sum of ₹10000 is lent on simple interest at the rate of 15% per annum. What is the difference between Simple interest for 6 years and the simple interest for 2 years?

- Ans ☐ 1. ₹4000
☐ 2. ₹8000
☒ 3. ₹6000
☐ 4. ₹4500

Question ID : 9895805066
Chosen Option : 4

Q.5
2 What is the mean of the given data?

2, 3, 4, 5, 6, 7, 8, 9

- Ans ☐ 1. 4
☐ 2. 4.5
☒ 3. 5.5
☐ 4. 5

Question ID : 9895805059
Chosen Option : 2

Q.5

- 3 A train is moving with a uniform speed. Train crosses a bridge of length 243 meters in 30 seconds and a bridge of length 343 meters in 36 seconds. What is the speed of the train?

Ans ☒ 1. 60 km/hr
☐ 2. 72 km/hr
☐ 3. 64 km/hr
☐ 4. 65 km/hr

Question ID : 9895805070
Chosen Option : 2

- Q.5 The area of a square and a rectangle are equal. The length of the rectangle is greater than the side of square by 9 cm and its breadth is less than the side of square by 6 cm. What will be the perimeter of the rectangle?

Ans ☐ 1. 84 cm
☐ 2. 74 cm
☒ 3. 78 cm
☐ 4. 76 cm

Question ID : 9895805073
Chosen Option : 2

- Q.5 A car covers a certain distance at a speed of 54 km/hr in 7 hours. What should be the speed of car to cover the same distance in 6 hours?

Ans ☐ 1. 72 km/hr
☐ 2. 56 km/hr
☒ 3. 63 km/hr
☐ 4. 54 km/hr

Question ID : 9895805071
Chosen Option : 3

- Q.5 The curved surface area of a cone is 550 cm^2 . If the area of its base is 154 cm^2 , then what will be the volume of the cone?

Ans ☐ 1. 2464 cm^3
☐ 2. 1836 cm^3
☒ 3. 1232 cm^3
☐ 4. 1472 cm^3


Question ID : 9895805074
Chosen Option : 3


- Q.5 The table given below shows the marks obtained by 4 students in 5 subjects. The maximum marks of each subject is 100.


| Subjects | Students | | | |
|----------|----------|-----|----|----|
| | P1 | P2 | P3 | P4 |
| S1 | 89 | 100 | 92 | 91 |
| S2 | 62 | 52 | 72 | 37 |
| S3 | 57 | 55 | 70 | 65 |
| S4 | 76 | 85 | 76 | 58 |
| S5 | 85 | 70 | 66 | 62 |

What is the total percent marks of P4?

Ans ☐ 1. 67.2%

 2. 59.5%


 3. 62.6%


 4. 65.8%

Question ID : 9895805075
Chosen Option : 1

Q.5
8 What is the value of $(14 \div 49 - 3 \div \frac{7}{2} \text{ of } 5)$?

Ans  1. 17/35

 2. 4/35

 3. 6/35

 4. 7/35

Question ID : 9895805055
Chosen Option : 3

Q.5
9 The product of two numbers is 720. If their Least Common Multiple is 360, then what will be the Highest common Factor of these two numbers?

Ans  1. 60

 2. 20


 3. 120


 4. 2

Question ID : 9895805053
Chosen Option : 1

Q.6
0 A person buys 25 kg of rice for ₹600 and sells them at a loss equal to the selling price of 5 kg rice. What will be the loss percentage?

Ans  1. 14.28%


 2. 16.66%


 3. 25%


 4. 20%


Question ID : 9895805062
Chosen Option : 3

Q.6
1 Height of a right circular cylinder is 12 cm. If the radius is its base 21 cm, then what will be the curved surface area of the cylinder?

Ans  1. 1544 cm²

 2. 1584 cm²

 3. 1456 cm²

 4. 1632 cm²

Question ID : 9895805072
Chosen Option : 3

Q.6
2 What is the value of $24 - [48 \div \{48 \times (48 \div (24 \times 24))\}]$?

- Ans
- ☐ 1. 16
 - ☒ 2. 12
 - ☐ 3. 18
 - ☐ 4. 20

Question ID : 9895805054
Chosen Option : 2

Q.6
3 If $X/3 = Y/5 = Z/9$, then what is the ratio of $X : Y : Z$?

- Ans
- ☐ 1. 9 : 5 : 6
 - ☐ 2. 3 : 5 : 6
 - ☐ 3. 15 : 9 : 5
 - ☒ 4. 3 : 5 : 9

Question ID : 9895805065
Chosen Option : 4

Q.6
4 Pipe X can fill a tank in 12 hours and pipe Y can fill the same tank in 36 hours. In how many hours both pipe X and pipe Y together can fill one-third part of the tank?

- Ans
- ☐ 1. 9 hours
 - ☒ 2. 3 hours
 - ☐ 3. 15 hours
 - ☐ 4. 27 hours

Question ID : 9895805068
Chosen Option : 3

Q.6
5 Average marks of 15 students of class first is 160. Average marks of 10 students of class second is 120. Average marks of 15 students of class third is 180. What will be the average marks of students of all the classes together?

- Ans
- ☒ 1. 157.5
 - ☐ 2. 162.5
 - ☐ 3. 155.5
 - ☐ 4. 167.5


Question ID : 9895805057
Chosen Option : 2

Q.6
6 A person purchases 36 articles for ₹360. How many articles must he sold for ₹360, so that the profit is 50%?

- Ans
- ☐ 1. 18
 - ☐ 2. 36
 - ☒ 3. 24
 - ☐ 4. 32




Question ID : 9895805061
Chosen Option : 2

Q.6 *A, B and C invest ₹14000, ₹18000 and ₹24000 respectively to start a business. If the profit at the end of the year is ₹25480, then what is total share of A and B?*

- Ans  1. ₹6370
 2. ₹14560
 3. ₹17290
 4. ₹19110

Question ID : 9895805064
Chosen Option : 3

Q.6 *If S is 160% of T, then T will be what percent of S?*





- Ans  1. 85%
 2. 62.50%
 3. 65.20%
 4. 70%

Question ID : 9895805060
Chosen Option : 1

Q.6 *The table given below shows the production of rice and the area under rice cultivation of a country for 5 consecutive years Y1, Y2, Y3, Y4 and Y5.*

| Year | Rice Production (in 1000 kg) | Area Under Rice Cultivation (in 100 square meter) |
|------|------------------------------|---|
| Y1 | 520 | 130 |
| Y2 | 570 | 190 |
| Y3 | 680 | 150 |
| Y4 | 720 | 180 |
| Y5 | 850 | 170 |

What is the percentage change in the yield per square meter of Y5 as compared to Y1?




- Ans  1. 33.33%
 2. 25%
 3. 20%
 4. 37.5%

Question ID : 9895805077
Chosen Option : 2

Q.7 *The table given below shows the production of rice and the area under rice cultivation of a country for 5 consecutive years Y1, Y2, Y3, Y4 and Y5.*

| Year | Rice Production (in 1000 kg) |
|------|------------------------------|
| Y1 | 520 |
| Y2 | 570 |
| Y3 | 680 |
| Y4 | 720 |
| Y5 | 850 |

What is the per year average production of rice?

- Ans  1. 702000 kg
 2. 644000 kg
 3. 686000 kg
 4. 668000 kg

Question ID : 9895805076

Chosen Option : 2

Q.7 The ratio of two numbers is 14 : 25. If the difference between them is 264, then which is the smaller of the two numbers?

- Ans
- ☒ 1. 316
 - ☒ 2. 294
 - ☒ 3. 336
 - ☒ 4. 282

Question ID : 9895805063
Chosen Option : 3

Q.7 What will be the average of 16, 17, 18, upto fifteen terms?

- Ans
- ☒ 1. 23.5
 - ☒ 2. 23
 - ☒ 3. 26
 - ☒ 4. 24

Question ID : 9895805056
Chosen Option : 1

Q.7 40 persons can repair a bridge in 12 days. If 8 more persons join them, then in how many days bridge can be repaired?

- Ans
- ☒ 1. 11 days
 - ☒ 2. 10 days
 - ☒ 3. 9 days
 - ☒ 4. 8 days

Question ID : 9895805069
Chosen Option : 3

Q.7 A sum of ₹14000 is lent at compound interest (interest is compounded annually) for 3 years. If the rate of interest is 10%, then what will be the compound interest?

- Ans
- ☒ 1. ₹4,634
 - ☒ 2. ₹4,645
 - ☒ 3. ₹4,364
 - ☒ 4. ₹4,643

Question ID : 9895805067
Chosen Option : 2

Q.7 The ratio of the marked price and the cost price of a pen is 3 : 2 while the ratio of marked price and selling price is 5 : 4. What is the profit percentage?

- Ans
- ☒ 1. 20%
 - ☒ 2. 24%
 - ☒ 3. 25%

✗ 4. 16%

Question ID : 9895805058
Chosen Option : 4

Section : English Language

Q.1 Select the option that means the same as the given idiom.

To keep someone at arm's length.

- Ans
- ✓ 1. To avoid someone
 - ✗ 2. To be near someone
 - ✗ 3. To disturb someone
 - ✗ 4. To love someone

Question ID : 9895804533
Chosen Option : 4

Q.2 Select the most appropriate word to fill in the blank.

You must _____ hard to get the best deal.

- Ans
- ✗ 1. navigate
 - ✗ 2. neglect
 - ✗ 3. negate
 - ✓ 4. negotiate

Question ID : 9895804539
Chosen Option : 1

Q.3 Select the most appropriate option to substitute the underlined segment in the given sentence. If there is no need to substitute it, select No Improvement.

The work on two projects are already going on which will connect Leh-Ladakh by railway line and air.

- Ans
- ✗ 1. No improvement.
 - ✓ 2. is already going on
 - ✗ 3. is already go on
 - ✗ 4. is already going up

Question ID : 9895804518
Chosen Option : 3

Q.4

Select the word which means the same as the group of words given.

One who feeds on human flesh

- Ans ☒ 1. Cannibal
☐ 2. Omnivorous
☐ 3. Vegan
☐ 4. Carnivorous

Question ID : 9895804535
Chosen Option : 4

Q.5 Select the correctly spelt word.

- Ans ☐ 1. Apelling
☐ 2. Appeeling
☐ 3. Appeling
☒ 4. Appealing

Question ID : 9895804536
Chosen Option : 3

Q.6 Select the word which means the same as the group of words given.

One who makes an official examination of accounts

- Ans ☐ 1. Controller
☐ 2. Supervisor
☒ 3. Auditor
☐ 4. Officer

Question ID : 9895804873
Chosen Option : 3

Q.7 Select the synonym of the given word.

Forsake

- Ans ☐ 1. Accept
☐ 2. Adopt
☐ 3. Adapt
☒ 4. Abandon

Question ID : 9895804528
Chosen Option : 1

Q.8 From the given options, identify the segment in the sentence which contains the grammatical error.

I would rather to go home than go to a restaurant for dinner.

- Ans
- ☒ 1. than go to
 - ☒ 2. I would
 - ☒ 3. for dinner.
 - ☒ 4. rather to go

Question ID : 9895804516
Chosen Option : 4

Q.9 Select the most appropriate word to fill in the blank.

The adventurer in him cannot _____ the call of the mountains.

- Ans
- ☒ 1. respond
 - ☒ 2. resist
 - ☒ 3. restrain
 - ☒ 4. restore

Question ID : 9895804538
Chosen Option : 4

Q.10 From the given options, identify the segment in the sentence which contains the grammatical error.

It is a fact that you are known by me.

- Ans
- ☒ 1. by me.
 - ☒ 2. you are known
 - ☒ 3. a fact
 - ☒ 4. It is

Question ID : 9895804515
Chosen Option : 3

Q.11 Select the synonym of the given word.

Favoured

- Ans
- ☒ 1. Rejected
 - ☒ 2. Preferred
 - ☒ 3. Neglected
 - ☒ 4. Trusted

Question ID : 9895804529

Chosen Option : 3

Q.1 Select the most appropriate option to substitute the underlined segment in the given sentence. If there is no need to substitute it, select No improvement.

Even children shrink away from food thinking that they should become overweight.

- Ans
- ☒ 1. No improvement.
 - ☒ 2. are become
 - ☒ 3. were become
 - ☒ 4. might become

Question ID : 9895804519

Chosen Option : 2

Q.1 Select the most appropriate option to fill in the blank.

_____ many cooks spoil the broth.

- Ans
- ☒ 1. So
 - ☒ 2. A few
 - ☒ 3. Too
 - ☒ 4. Few

Question ID : 9895804520

Chosen Option : 1

Q.1 Select the correctly spelt word.

- Ans
- ☒ 1. Mischeivous
 - ☒ 2. Mischieveous
 - ☒ 3. Mischievious
 - ☒ 4. Mischievous

Question ID : 9895804537

Chosen Option : 3

Q.1 Select the most appropriate option to substitute the underlined segment in the given sentence. If there is no need to substitute it, select No improvement.

You will be needing to complete all the pending work before it becomes unmanageable.

- Ans
- ☒ 1. No improvement.
 - ☒ 2. would be needing
 - ☒ 3. will be needed
 - ☒ 4. will need

Question ID : 9895804517

Chosen Option : 3

Q.1
6 Select the antonym of the given word.

Peculiar

- Ans ☒ 1. Usual
☒ 2. Quiet
☒ 3. Strange
☒ 4. Sacred

Question ID : 9895804531
Chosen Option : 2

Q.1
7 Select the option that means the same as the given idiom.

To be at home.

- Ans ☒ 1. To be at ease
☒ 2. To be casual
☒ 3. To be formal
☒ 4. To be perplexed

Question ID : 9895804532
Chosen Option : 4

Q.1
8 From the given options, identify the segment in the sentence which contains the grammatical error.

Ritesh is best than many other boys in his class.

- Ans ☒ 1. than many
☒ 2. in the class.
☒ 3. other boys
☒ 4. Ritesh is best

Question ID : 9895804514
Chosen Option : 2

Comprehension:

In the following passage some words have been deleted. Fill in the blanks with the help of the alternatives given.

The last one in this long procession of silent men and women was a thin old man. Even (1) _____ carried a load of two baskets, slung on a pole on his (2) _____. In one basket there were (3) _____ pots. The other basket it seemed there was a quilt, extremely (4) _____ and patched, but clean still. (5) _____ the load was light, it was too much for the old man.

SubQuestion No : 19

Q.1
9 Select the most appropriate option that will fill in the blank number 1.

- Ans
- ☒ 1. they
 - ☒ 2. it
 - ☒ 3. he
 - ☒ 4. she

Question ID : 9895804523
Chosen Option : 1

Comprehension:

In the following passage some words have been deleted. Fill in the blanks with the help of the alternatives given.

The last one in this long procession of silent men and women was a thin old man. Even (1) _____ carried a load of two baskets, slung on a pole on his (2) _____. In one basket there were (3) _____ pots. The other basket it seemed there was a quilt, extremely (4) _____ and patched, but clean still. (5) _____ the load was light, it was too much for the old man.

SubQuestion No : 20

Q.2
0 Select the most appropriate option that will fill in the blank number 2.

- Ans
- ☒ 1. head
 - ☒ 2. neck
 - ☒ 3. hand
 - ☒ 4. shoulder

Question ID : 9895804524
Chosen Option : 3

Comprehension:

In the following passage some words have been deleted. Fill in the blanks with the help of the alternatives given.

The last one in this long procession of silent men and women was a thin old man. Even (1) _____ carried a load of two baskets, slung on a pole on his (2) _____. In one basket there were (3) _____ pots. The other basket it seemed there was a quilt, extremely (4) _____ and patched, but clean still. (5) _____ the load was light, it was too much for the old man.

SubQuestion No : 21

Q.2
1 Select the most appropriate option that will fill in the blank number 3.

- Ans ☒ 1. one
☒ 2. some
☒ 3. any
☒ 4. none

Question ID : 9895804525
Chosen Option : 1

Comprehension:

In the following passage some words have been deleted. Fill in the blanks with the help of the alternatives given.

The last one in this long procession of silent men and women was a thin old man. Even (1) _____ carried a load of two baskets, slung on a pole on his (2) _____. In one basket there were (3) _____ pots. The other basket it seemed there was a quilt, extremely (4) _____ and patched, but clean still. (5) _____ the load was light, it was too much for the old man.

SubQuestion No : 22

- Q.2
2 Select the most appropriate option that will fill in the blank number 4.

- Ans ☒ 1. ragged
☒ 2. beautiful
☒ 3. shining
☒ 4. new

Question ID : 9895804526
Chosen Option : 1

Comprehension:

In the following passage some words have been deleted. Fill in the blanks with the help of the alternatives given.

The last one in this long procession of silent men and women was a thin old man. Even (1) _____ carried a load of two baskets, slung on a pole on his (2) _____. In one basket there were (3) _____ pots. The other basket it seemed there was a quilt, extremely (4) _____ and patched, but clean still. (5) _____ the load was light, it was too much for the old man.

SubQuestion No : 23

- Q.2
3 Select the most appropriate option that will fill in the blank number 5.

- Ans ☒ 1. Although
☒ 2. Because
☒ 3. Since

✗ 4. But

Question ID : 9895804527
Chosen Option : 4

Q.2
4 Select the antonym of the given word.

Ruthless

- Ans
- ✗ 1. Humble
 - ✗ 2. Merciless
 - ✗ 3. Careful
 - ✓ 4. Kind

Question ID : 9895804530
Chosen Option : 1

Q.2
5 Select the most appropriate option to fill in the blank.

All good things _____ come to an end

- Ans
- ✓ 1. must
 - ✗ 2. ought
 - ✗ 3. shall not
 - ✗ 4. have not

Question ID : 9895804521
Chosen Option : 1

Section : Hindi Language

Q.1 दिए गए वाक्य में रेखांकित खंड को प्रतिस्थापित करने के लिए उपयुक्त विकल्प का चयन करें।

लड़का अपने गाँव गया और वहाँ आकर अपने मित्रों से मिला।

- Ans
- ✗ 1. वहाँ जाकर अपने मित्रों से
 - ✗ 2. वहाँ जाकर अपना मित्रों से
 - ✗ 3. यहाँ जाकर अपने मित्रों से
 - ✓ 4. यहाँ आकर अपने मित्रों से

Question ID : 9895804082
Chosen Option : --

Q.2 दिए गए वाक्य का वह भाग ज्ञात करें जिसमें कोई त्रुटि है।

संगीत मंडली मिलकर मंच में गीत गा रही है।

- Ans
- ☒ 1. मिलकर
 - ☒ 2. संगीत मंडली
 - ☒ 3. मंच में
 - ☒ 4. गीत गा रही है।

Question ID : 9895804079
Chosen Option : --

Q.3 दिए गए शब्द के पर्यायवाची शब्द का चयन करें।

अनुचर

- Ans
- ☒ 1. सेवक
 - ☒ 2. रुचिर
 - ☒ 3. मालिक
 - ☒ 4. भास्कर

Question ID : 9895804098
Chosen Option : --

Q.4 दिये गये वाक्यांश के लिए एक शब्द दीजिये।

साथ पढ़ने वाला

- Ans
- ☒ 1. साथी
 - ☒ 2. सहपढ़
 - ☒ 3. सहपाठी
 - ☒ 4. सहयोगी

Question ID : 9895804101
Chosen Option : --

Q.5 दिए गए शब्द के पर्यायवाची शब्द का चयन करें।

स्नेह

- Ans
- ☒ 1. घृणा
 - ☒ 2. प्रेम

- ☒ 3. लता
☒ 4. व्यथा

Question ID : 9895804097
Chosen Option : --

Q.6 निम्नलिखित में से उस विकल्प का चयन करें जो 'चादर देखकर पाँव फैलाना' मुहावरे का अर्थ व्यक्त करता है।

- Ans ☒ 1. व्यय अधिक आय कम होना
☒ 2. चादर पर पैर फैलाकर सोना
☒ 3. आय के अनुसार व्यय करना
☒ 4. चादर देखकर सो जाना

Question ID : 9895804099
Chosen Option : --

Q.7 दिए गए वाक्य का वह भाग ज्ञात करें जिसमें कोई त्रुटि है।

विद्यालयों में भी सूचना हेतु एक विशेष स्थानों होता है।

- Ans ☒ 1. एक विशेष
☒ 2. विद्यालयों में भी
☒ 3. स्थानों होता है।
☒ 4. सूचना हेतु

Question ID : 9895804080
Chosen Option : --

Q.8 दिए गए वाक्य में रेखांकित खंड को प्रतिस्थापित करने के लिए सबसे उपयुक्त विकल्प का चयन करें।

भोजन की थाली पकवानों से सजा होती है तभी खाने में आनंद आता है।

- Ans ☒ 1. पकवानों से सजी होती है
☒ 2. पकवानों से सजी होते हैं
☒ 3. पकवानों से सजा होता है
☒ 4. पकवानों से सजी होता है

Question ID : 9895804083
Chosen Option : --

Q.9

दिए गए वाक्य का वह भाग ज्ञात करें जिसमें कोई त्रुटि है।

पारिवारिक अदालतों के निर्णय टूटते हुए परिवार का शांति को नया जीवन प्रदान कर सकते हैं।

Ans

- ☒ 1. प्रदान कर सकते हैं।
- ☒ 2. पारिवारिक अदालतों के निर्णय
- ☒ 3. शांति को नया जीवन
- ☒ 4. टूटते हुए परिवार का

Question ID : 9895804081

Chosen Option : --

Q.1
0 रिक्त स्थान को भरने के लिए उपयुक्त शब्द का चयन करें।

आजकल परिवार में _____ बढ़ रही है।

Ans

- ☒ 1. चरित्र
- ☒ 2. धन
- ☒ 3. प्रेम
- ☒ 4. दूरियाँ

Question ID : 9895804085

Chosen Option : --

Q.1
1 रिक्त स्थान को भरने के लिए उपयुक्त शब्द का चयन करें।

मैं अवधी भाषा _____ सकता हूँ।

Ans

- ☒ 1. खरीद
- ☒ 2. समझ
- ☒ 3. देख
- ☒ 4. छू

Question ID : 9895804088

Chosen Option : --

Q.1
2 सही वर्तनी वाले शब्द का चयन करें।

Ans

- ☒ 1. अधीर
- ☒ 2. आधीर

✓ 3. अधिर

✗ 4. आधिर

Question ID : 9895804104

Chosen Option : --

Q.1
3 दिए गए शब्द का विलोम चुनें।

मोक्ष

Ans ✗ 1. छुटकारा

✗ 2. स्वर्ग

✓ 3. बंधन

✗ 4. दुतकार

Question ID : 9895804095

Chosen Option : --

Q.1
4 रिक्त स्थान को भरने के लिए उपयुक्त शब्द का चयन करें।

प्रतिदिन आपराधिक _____ बढ़ते जा रहे हैं।

Ans ✗ 1. पक्षी

✓ 2. कर्म

✗ 3. खाद्य

✗ 4. गान

Question ID : 9895804087

Chosen Option : --

Q.1
5 दिए गए शब्द का विलोम चुनें।

गद्य

Ans ✗ 1. नाटक

✓ 2. अंक

✗ 3. एंकाकी

✗ 4. पद्य

Question ID : 9895804096

Chosen Option : --

Q.1
6

दिये गये वाक्यांश के लिए एक शब्द दीजिये।

जो भविष्य में आने वाला हो

- Ans
- ☒ 1. आगामी
 - ☒ 2. भूतकाल
 - ☒ 3. अकाल
 - ☒ 4. परागामी

Question ID : 9895804102
Chosen Option : --

Q.1
7 रिक्त स्थान को भरने के लिए उपयुक्त शब्द का चयन करें।

दाना चुगकर पक्षी ने _____ उड़ान भरी।

- Ans
- ☒ 1. लंबी
 - ☒ 2. छोटा
 - ☒ 3. गहरी
 - ☒ 4. लंबा

Question ID : 9895804086
Chosen Option : --

Q.1
8 दिए गए वाक्य में रेखांकित खंड को प्रतिस्थापित करने के लिए सबसे उपयुक्त विकल्प का चयन करें।

हिरण्यकश्यप अत्यंत अभिमानी था और वह स्वयं से भगवान मानता था।

- Ans
- ☒ 1. वह स्वयं में भगवान मानता था।
 - ☒ 2. वह स्वयं पर भगवान मानता था।
 - ☒ 3. वह स्वयं को भगवान मानता था।
 - ☒ 4. वह स्वयं ने भगवान मानता था।

Question ID : 9895804084
Chosen Option : --

Q.1
9 निम्नलिखित में से उस विकल्प का चयन करें जो 'चुल्लू भर पानी में डूब मरना' मुहावरे का अर्थ व्यक्त करता है।

- Ans
- ☒ 1. कायर बनना
 - ☒ 2. चुल्लू में पानी भरकर डूब जाना
 - ☒ 3. बेशर्म होना

✗ 4. शर्मिदा होना

Question ID : 9895804100
Chosen Option : --

Comprehension:

दिए गए अनुच्छेद में कुछ शब्द हटा दिए गए हैं। दिए गए विकल्पों की सहायता से रिक्त स्थान भरें। प्रत्येक संख्या के लिए उपयुक्त विकल्प का चयन करें।

भाग्य और पुरुषार्थ एक ही _____(1) के दो पहलू हैं। मनुष्य पुरुषार्थी है तो वह _____(2) होगा। जब हम इस संसार में आए हैं तो _____(3) करना ही पड़ेगा। संसार की बाधाओं एवं समस्याओं से _____(4) करके अपना _____(5) खोजना होगा तभी विजयश्री हमारे हिस्से में आएगी।

SubQuestion No : 20

Q.2
0 गद्यांश में संकेतित रिक्त स्थान (1) के लिए उपयुक्त शब्द होगा

- Ans
- ✗ 1. शीशे
 - ✓ 2. सिक्के
 - ✗ 3. बरतन
 - ✗ 4. कपड़े

Question ID : 9895804090
Chosen Option : --

Comprehension:

दिए गए अनुच्छेद में कुछ शब्द हटा दिए गए हैं। दिए गए विकल्पों की सहायता से रिक्त स्थान भरें। प्रत्येक संख्या के लिए उपयुक्त विकल्प का चयन करें।

भाग्य और पुरुषार्थ एक ही _____(1) के दो पहलू हैं। मनुष्य पुरुषार्थी है तो वह _____(2) होगा। जब हम इस संसार में आए हैं तो _____(3) करना ही पड़ेगा। संसार की बाधाओं एवं समस्याओं से _____(4) करके अपना _____(5) खोजना होगा तभी विजयश्री हमारे हिस्से में आएगी।

SubQuestion No : 21

Q.2
1 गद्यांश में संकेतित रिक्त स्थान (2) के लिए उपयुक्त शब्द होगा

- Ans
- ✗ 1. भाग्यशाली
 - ✗ 2. दुखी

✓ 3. भाग्यहीन

✗ 4. आलसी

Question ID : 9895804091
Chosen Option : --

Comprehension:

दिए गए अनुच्छेद में कुछ शब्द हटा दिए गए हैं। दिए गए विकल्पों की सहायता से रिक्त स्थान भरें। प्रत्येक संख्या के लिए उपयुक्त विकल्प का चयन करें।

भाग्य और पुरुषार्थ एक ही _____(1) के दो पहलू हैं। मनुष्य पुरुषार्थी है तो वह _____(2) होगा। जब हम इस संसार में आए हैं तो _____(3) करना ही पड़ेगा। संसार की बाधाओं एवं समस्याओं से _____(4) करके अपना _____(5) खोजना होगा तभी विजयश्री हमारे हिस्से में आएगी।

SubQuestion No : 22

Q.2
2 गद्यांश में संकेतित रिक्त स्थान (3) के लिए उपयुक्त शब्द होगा

- Ans
- ✗ 1. कर्म
 - ✗ 2. सोना
 - ✓ 3. घूमना
 - ✗ 4. भागना

Question ID : 9895804092
Chosen Option : --

Comprehension:

दिए गए अनुच्छेद में कुछ शब्द हटा दिए गए हैं। दिए गए विकल्पों की सहायता से रिक्त स्थान भरें। प्रत्येक संख्या के लिए उपयुक्त विकल्प का चयन करें।

भाग्य और पुरुषार्थ एक ही _____(1) के दो पहलू हैं। मनुष्य पुरुषार्थी है तो वह _____(2) होगा। जब हम इस संसार में आए हैं तो _____(3) करना ही पड़ेगा। संसार की बाधाओं एवं समस्याओं से _____(4) करके अपना _____(5) खोजना होगा तभी विजयश्री हमारे हिस्से में आएगी।

SubQuestion No : 23

Q.2
3 गद्यांश में संकेतित रिक्त स्थान (4) के लिए उपयुक्त शब्द होगा

- Ans
- ✗ 1. संघर्ष
 - ✗ 2. नौकरी

✓ 3. भाग्य

✗ 4. दुनिया

Question ID : 9895804093

Chosen Option : --

Comprehension:

दिए गए अनुच्छेद में कुछ शब्द हटा दिए गए हैं। दिए गए विकल्पों की सहायता से रिक्त स्थान भरें। प्रत्येक संख्या के लिए उपयुक्त विकल्प का चयन करें।

भाग्य और पुरुषार्थ एक ही _____ (1) के दो पहलू हैं। मनुष्य पुरुषार्थी है तो वह _____ (2) होगा। जब हम इस संसार में आए हैं तो _____ (3) करना ही पड़ेगा। संसार की बाधाओं एवं समस्याओं से _____ (4) करके अपना _____ (5) खोजना होगा तभी विजयश्री हमारे हिस्से में आएगी।

SubQuestion No : 24

Q.2
4 गद्यांश में संकेतित रिक्त स्थान (5) के लिए उपयुक्त शब्द होगा

Ans ✗ 1. खेलने

✓ 2. रास्ता

✗ 3. जानकारी

✗ 4. विद्या

Question ID : 9895804094

Chosen Option : --

Q.2
5 सही वर्तनी वाले शब्द का चयन करें।

Ans ✗ 1. मीतभाषी

✗ 2. मीतभाशी

✓ 3. मितभाषी

✗ 4. मितभाशी

Question ID : 9895804103

Chosen Option : --