



GOVT. OF NCT OF DELHI  
Delhi Subordinate Services Selection Board  
FC-18, Institutional Area, Karkardooma, Delhi – 110092.  
[www.dsssb.delhigovt.nic.in](http://www.dsssb.delhigovt.nic.in)

Participant ID:	www.HaryanaJobs.in
Participant Name:	
Test Center Name:	
Test Date:	19/04/2021
Test Time:	8:30 AM - 10:30 AM
Subject:	Junior Stenographer (English)

Section : General intelligence and reasoning Ability1

Q.1 In the following question, select the related letters from the given alternatives.

KIM : PRN :: TOR : ?

- Ans
- ☒ 1. GOM
  - ☒ 2. GLI
  - ☒ 3. GHL
  - ☒ 4. GLF

Join Telegram Group

Question ID : 59445932423

Q.2 The statements given below are followed by two conclusions labeled I and II. Assuming that the information in the statement is true, even if it appears to be at variance with generally established facts, decide which conclusion(s) logically and definitely follow(s) from the information given in the statements.

Statements:

No Boat is Ship.

All Ship are Stream.

Conclusions:

I. No Stream is Boat.

II. Some Stream are Boat.

- Ans
- ☒ 1. Only conclusion II follows.
  - ☒ 2. None of the conclusions follow.
  - ☒ 3. Only conclusion I follows.
  - ☒ 4. Either conclusion I or II follow.

Question ID : 59445932434

Q.3 In a certain code language, "FRAK" is written as "35" and "MALT" is written as "45". How is "TRIM" written in that code language?

- Ans
- ☒ 1. 61
  - ☒ 2. 58
  - ☒ 3. 60
  - ☒ 4. 59

Question ID : 59445932426

**Q.4** There is a group of 6 people: A, B, C, D, E and F (not necessarily in the same order). D is taller than A and E. F is taller than B and C. E is taller than F. A is taller than F. Which of the following can be the shortest person?

- Ans**
- ☒ 1. C, or F
  - ☒ 2. B, or C
  - ☒ 3. A, or C
  - ☒ 4. B, or E

Question ID : 59445932429

**Q.5** In the following question, select the related letters from the given alternatives.

FL : BH :: GM : ?

- Ans**
- ☒ 1. QS
  - ☒ 2. LP
  - ☒ 3. DJ
  - ☒ 4. CI

Question ID : 59445932424

**Q.6** If C is daughter of A but A is not the father of C, E is Niece of C. E is daughter of F where F is husband of D and F has no siblings. How is C related to D?

- Ans**
- ☒ 1. Aunty
  - ☒ 2. Sister
  - ☒ 3. Father
  - ☒ 4. Brother

Question ID : 59445932433

**Q.7** In the question, below are three statements followed by two conclusions numbered I and II. You have to consider the statements to be true even if it seems to be at variance from commonly known facts. You have to decide which of the given conclusions, if any, follows from the given statements.

**Statements:**

Some cups are not bolts.

All dusters are balls.

All cups are balls.

**Conclusions:**

I. All bolts are cups.

II. Some dusters are cups is a possibility.

- Ans**
- ☒ 1. If both conclusion I and II follow.
  - ☒ 2. If only conclusion I follows.
  - ☒ 3. If either conclusion I or II follows.
  - ☒ 4. If only conclusions II follows.

Question ID : 59445932436

**Q.8** In a row of 28 students Jamuna was 12th from the left end and Ganga was 19th from the right end. If Sarasvati was seated exactly in between them then what was Sarasvati's position from the right end? Assume students were seated facing the North.

- Ans
- ☒ 1. 17th
  - ☒ 2. 20th
  - ☒ 3. 16th
  - ☒ 4. 18th

Question ID : 59445932432

**Q.9** Six people P, Q, R, S, T and U sit in a row, not necessarily in the same order. If two persons sit in between P and Q, and two persons sit in between T and U, then how many persons sit in between R and S?

- Ans
- ☒ 1. Two
  - ☒ 2. Three
  - ☒ 3. One
  - ☒ 4. Four

Question ID : 59445932430

**Q.10** In each question below are given three statements followed by two conclusions numbered I and II. You have to take the two/three given statements to be true even if they seem to be at variance from commonly known facts and then decide which of the given conclusions logically follows from the given statements disregarding commonly known facts.

Statement:

Some mobiles are laptops.

No laptop is computer.

All phones are computer.

Conclusion:

I. At least some mobiles are computer.

II. At least some phone are laptops.

- Ans
- ☒ 1. If either conclusion I or II follows.
  - ☒ 2. If both conclusion I and II follow.
  - ☒ 3. If neither conclusion I nor II follows.
  - ☒ 4. If only conclusion I follows.

Question ID : 59445932435

**Q.11** In a certain code language, 1875 means 'wound the round watch', 6143 means 'a cake is round' and 7321 means 'watch a round wheel'. Find the code for 'watch' ?

- Ans
- ☒ 1. 8
  - ☒ 2. 7
  - ☒ 3. 5
  - ☒ 4. 1

Question ID : 59445932427

Q.12 Find the wrong term in the following series.

CWHK, FULL, ISPM, LQTN, OOOO

- Ans
- ☒ 1. FULL
  - ☒ 2. OOOO
  - ☒ 3. LQTN
  - ☒ 4. ISPM

Question ID : 59445932419

Q.13 If TEACHER is coded as CAHEETR and STUDENT is coded as DUETNST, then what is the code for SUCCESS?

- Ans
- ☒ 1. UCSECS
  - ☒ 2. SCUSCES
  - ☒ 3. CCEUSS
  - ☒ 4. CECSUSS

Question ID : 59445932428

Q.14 Select the option that is related to the third term in the same way as the second term is related to the first term.

Google : Sundar Pichai : : Microsoft : ?

- Ans
- ☒ 1. Tim Cook
  - ☒ 2. Mark Zuckerberg
  - ☒ 3. Shantanu Narayen
  - ☒ 4. Satya Narayana Nadella

Question ID : 59445932421

Q.15 Seven persons – A through G sit around a circular table such that B sits to the right of E, who sits two places away from A. D sits adjacent to B and G. A sits to the right of C. Who sits to the left of F?

- Ans
- ☒ 1. C
  - ☒ 2. E
  - ☒ 3. A
  - ☒ 4. G

Question ID : 59445932431

Q.16 In a certain code language, NOIDA is coded as STNIF. What will be the code for MEERUT?

- Ans
- ☒ 1. WZYRJJ
  - ☒ 2. RJJWZY
  - ☒ 3. SJJWZZ
  - ☒ 4. SJJVZY

Question ID : 59445932425

Q.17 Select the term that will come next in the following series.

A - 10, E - 15, I - 20, M - 25, \_\_\_\_

- Ans
- ☒ 1. Q - 5
  - ☒ 2. R - 30
  - ☒ 3. Q - 30
  - ☒ 4. P - 30

Question ID : 59445932417

Q.18 Select the term that will come next in the following series.

A, G, L, P, S, ?

- Ans
- ☒ 1. W
  - ☒ 2. V
  - ☒ 3. Y
  - ☒ 4. U

Question ID : 59445932420

Q.19 'Marie Curie' is related to 'Science' in the same way as 'Leonardo Da Vinci' is related to \_\_\_\_\_.

- Ans
- ☒ 1. Sculpting
  - ☒ 2. Polity
  - ☒ 3. Philosophy
  - ☒ 4. Painting

Question ID : 59445932422

Q.20 Select the term that will come next in the following series.

FIN, NQV, VYD, ?, LOT

- Ans
- ☒ 1. GLH
  - ☒ 2. DGL
  - ☒ 3. HGP
  - ☒ 4. HLS

Question ID : 59445932418

**Q.1** B is to the north of Z and is to the west of K, who is to the south of C and to the west of L.  
What is the position of Z with respect to L?

- Ans**
- ☒ 1. West
  - ☒ 2. South-east
  - ☒ 3. South-west
  - ☒ 4. South

Question ID : 59445932449

**Q.2** A statement is followed by two Conclusions I and II. You have to consider the statement to be true, even if it seems to be at variance from commonly known facts. You are to decide which of the given conclusions can definitely be drawn from the given statements and indicate your answer accordingly.

**Statements:**

India is a country of multiple languages.

**Conclusions:**

I. All Indians should learn multiple languages.

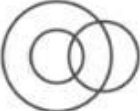
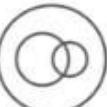


II. Every country has multiple languages.

- Ans**
- ☒ 1. Only conclusion II follows.
  - ☒ 2. Neither conclusion I nor conclusion II follows.
  - ☒ 3. Only conclusion I follows.
  - ☒ 4. Both the conclusions follow.

Question ID : 59445932437

**Q.3** Which of the following Venn diagrams correctly represents the following classes:

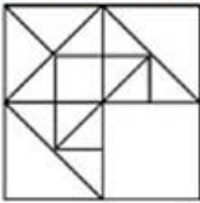
Men, Father, Doctor

- Ans**
- ☒ 1. 
  - ☒ 2. 
  - ☒ 3. 
  - ☒ 4. 

Question ID : 59445932444

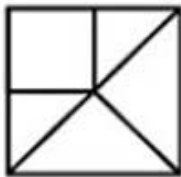
Q.4 Select the correct option to complete the following pattern.

**Question Figure:**



Ans

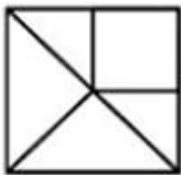
✓ 1.



✗ 2.



✗ 3.

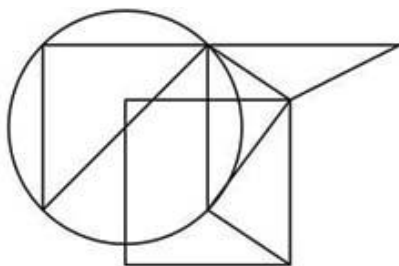


✗ 4.



Question ID : 59445932455

Q.5 How many triangles are present in the given figure?



Ans

✓ 1. 9

✗ 2. 10

✗ 3. 11

✗ 4. 7

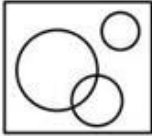
Question ID : 59445932453

Q.6 Identify the diagram that best represents the relationship among the given classes.

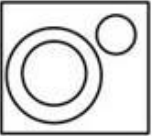
India, New Delhi, Australia

Ans

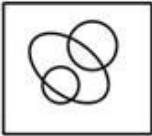
✗ 1.



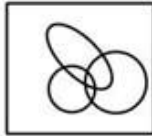
✓ 2.



✗ 3.



✗ 4.



Question ID : 59445932446

Q.7 In the following questions a relationship between different elements is shown in the statements. The statements are followed by 2 conclusions, give answer.

Statement:

$X_2 \geq X_6$ ,  $X_4 \leq X_1 \leq X_5$ ,  $X_3 = X_2$ ,  $X_5 > X_3$

Conclusion:

1.  $X_3 > X_6$

2.  $X_3 = X_6$

Ans

✗ 1. If neither conclusion 1 nor conclusion 2 is false.

✗ 2. If only conclusion 2 is false.

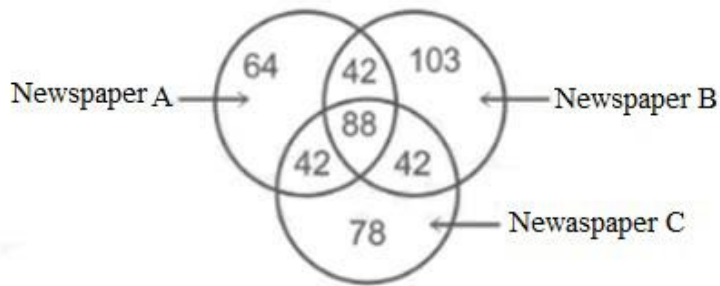
✗ 3. If only conclusion 1 is false.

✓ 4. If either conclusion 1 or conclusion 2 is false

Question ID : 59445932443



Q.8 In the figure, how many people read Newspaper A?



- Ans ☒ 1. 236  
☒ 2. 172  
☒ 3. 88  
☒ 4. 64

Question ID : 59445932445

Q.9 In the question below, a statement is followed by two assumptions numbered I and II. An assumption is something supposed or taken for granted. You have to consider the statement and the following assumptions and decide which of the assumptions is implicit in the statement.

Statement: The patient's condition would improve after operation.

Assumption I: The patient can be operated upon in this condition.

Assumption II: The patient cannot be operated upon in this condition.

- Ans ☒ 1. If both I and II assumptions are implicit.  
☒ 2. If only assumption II is implicit.  
☒ 3. If only assumption I is implicit.  
☒ 4. If neither I nor II assumption is implicit.

Question ID : 59445932438

Q.10 Identify the diagram that best represents the relationship among the given classes.

Pets, Dogs, animals

- Ans ☒ 1.  
☒ 2.  
☒ 3.  
☒ 4.

Question ID : 59445932447

Q.11 Select the figure that will come next in the following series.

- Ans ☒ 1.  
☒ 2.  
☒ 3.  
☒ 4.

Question ID : 59445932450

Q.12 If '+' means 'x', '-' means '÷', 'x' means '-' and '÷' means '+', then what will be the value of  $46 \div 12 + 8 \times 363 - 33$ ?

- Ans
- ☒ 1. 130
  - ☒ 2. 131
  - ☒ 3. 133
  - ☒ 4. 121

Question ID : 59445932440

Q.13 In the Following figure, pentagon represents Reality shows, parallelogram represents Movie channels, triangle represents Fashion shows and rhombus represents News channels. This information is about the people who like different types of shows.

The people who like only News, Movie and Fashion shows are represented by the letter

- \_\_\_\_\_.
- Ans
- ☒ 1. d
  - ☒ 2. a
  - ☒ 3. c
  - ☒ 4. b

Question ID : 59445932448

Q.14 In each of the following questions, choose the correct mirror image of the figure, from amongst the four alternatives.

- Ans
- ☒ 1.
  - ☒ 2.
  - ☒ 3.
  - ☒ 4.

Question ID : 59445932454

Q.15 Select the odd figure out of the given series.

- Ans
- ☒ 1. 2
  - ☒ 2. 5
  - ☒ 3. 4
  - ☒ 4. 3

Question ID : 59445932452

Q.16 In the following question select the related number from the given alternatives.

643 : 9 :: 441 : 7 :: 324 : ?

- Ans ☒ 1. 6  
☒ 2. 3  
☒ 3. 9  
☒ 4. 2

Question ID : 59445932442

Q.17 If  $17 \$ 22 = 4$  and  $56 \$ 13 = 7$ , then find the value of  $71 \$ 25 = ?$

- Ans ☒ 1. 1  
☒ 2. 56  
☒ 3. 8  
☒ 4. 96

Question ID : 59445932441

Q.18 Select the option that is related to the third figure in the same way as the second figure is related to the first figure.

- Ans ☒ 1.  
☒ 2.  
☒ 3.  
☒ 4.

Question ID : 59445932451

Q.19 Select the missing number from the given responses.

14, 44, 135, 409, 1232, ?

- Ans ☒ 1. 3702  
☒ 2. 3406  
☒ 3. 2962  
☒ 4. 3340

Question ID : 59445932439

Q.20 Which of the following cube in the answer figure cannot be made based on the unfolded cube in the question figure.

- Ans ☒ 1.  
☒ 2.  
☒ 3.  
☒ 4.

Question ID : 59445932456

Section : General Awareness1

**Q.1** What amount of fund allocation has been announced in the Union Budget 2020-21 for education sector?

- Ans
- ☒ 1. Rs. 90,200 crore
  - ☒ 2. Rs. 95,600 crore
  - ☒ 3. Rs. 99,300 crore
  - ☒ 4. Rs. 110,800 crore

Question ID : 59445932465

**Q.2** In which year's session of the Indian National Congress was Vande Mataram sang for the first time?

- Ans
- ☒ 1. 1896
  - ☒ 2. 1899
  - ☒ 3. 1898
  - ☒ 4. 1897

Question ID : 59445932476

**Q.3** Which of the following rivers has the longest length?

- Ans
- ☒ 1. Godavari
  - ☒ 2. Narmada
  - ☒ 3. Krishna
  - ☒ 4. Kaveri

Question ID : 59445932473

**Q.4** What is the population density of India as per the Census 2011 (in per square km)?

- Ans
- ☒ 1. 382
  - ☒ 2. 415
  - ☒ 3. 402
  - ☒ 4. 395

Question ID : 59445932472

**Q.5** What is the absorption of water by plant roots an example of?

- Ans
- ☒ 1. Photosynthesis
  - ☒ 2. Endocytosis
  - ☒ 3. Osmosis
  - ☒ 4. Transplantation

Question ID : 59445932471

**Q.6 Which of the following is present in chalk?**

- Ans
- ☐ 1. Sodium Hydroxide
  - ☐ 2. Potassium Nitrate
  - ☐ 3. Sodium Chloride
  - ☒ 4. Calcium Carbonate

Question ID : 59445932468

**Q.7 How many distinct floristic-regions can India be divided into?**

- Ans
- ☐ 1. 7
  - ☒ 2. 8
  - ☐ 3. 6
  - ☐ 4. 5

Question ID : 59445932474

**Q.8 Which of the following committee's recommendations led to the formation of NABARD?**

- Ans
- ☐ 1. Shri Homi Sethna Committee
  - ☐ 2. Shri Naresh Chandra Committee
  - ☐ 3. Shri Dharma Vira Committee
  - ☒ 4. Shri B. Sivaraman Committee

Question ID : 59445932464

**Q.9 For which of the following dance-forms is Shovana Narayana very renowned?**

- Ans
- ☐ 1. Bharatnatyam
  - ☒ 2. Kathak
  - ☐ 3. Lavani
  - ☐ 4. Odissi

Question ID : 59445932458

**Q.10 Which of the following organism-classification does Anabaena belong to?**

- Ans
- ☒ 1. Monera
  - ☐ 2. Protista
  - ☐ 3. Plantae
  - ☐ 4. Fungi

Question ID : 59445932470

Q.11 Which of the following foods has the highest percentage of proteins per unit mass?

- Ans
- ☒ 1. Egg
  - ☒ 2. Meat
  - ☒ 3. Cow-milk
  - ☒ 4. Fish

Question ID : 59445932469

Q.12 In which of the following states is the Bihula festival very popular?

- Ans
- ☒ 1. Bihar
  - ☒ 2. Madhya Pradesh
  - ☒ 3. Odisha
  - ☒ 4. Gujarat

Question ID : 59445932461

Q.13 Which of the following elements has zero valency?

- Ans
- ☒ 1. Lithium
  - ☒ 2. Beryllium
  - ☒ 3. Helium
  - ☒ 4. Fluorine

Question ID : 59445932467

Q.14 What was the duration of the Second Five Year Plan?

- Ans
- ☒ 1. 1957-62
  - ☒ 2. 1958-63
  - ☒ 3. 1955-60
  - ☒ 4. 1956-61

Question ID : 59445932463

Q.15 How many more airports will be developed by 2024 for the Udaan scheme as per the Union Budget 2020-21?

- Ans
- ☒ 1. 100
  - ☒ 2. 75
  - ☒ 3. 50
  - ☒ 4. 120

Question ID : 59445932466

Q.16 In which of the following states is the Chandragad fort situated?

- Ans
- ☐ 1. Karnataka
  - ☐ 2. Andhra Pradesh
  - ☒ 3. Maharashtra
  - ☐ 4. Gujarat

Question ID : 59445932457

Q.17 In which year was the Mehrangarh Fort established?

- Ans
- ☒ 1. 1459
  - ☐ 2. 1458
  - ☐ 3. 1456
  - ☐ 4. 1457

Question ID : 59445932459

Q.18 Till which year was India in the first stage of demographic transition?

- Ans
- ☐ 1. 1931
  - ☐ 2. 1901
  - ☐ 3. 1911
  - ☒ 4. 1921

Question ID : 59445932462

Q.19 Which of the following is Goan mud musical instrument?

- Ans
- ☐ 1. Kondo
  - ☐ 2. Gwandab
  - ☒ 3. Ghumot
  - ☐ 4. Bandna

Question ID : 59445932460

Q.20 Which of the following is also known as the winter-monsoon?

- Ans
- ☐ 1. South-west monsoon
  - ☐ 2. North-west monsoon
  - ☐ 3. South-east monsoon
  - ☒ 4. North-east monsoon

Question ID : 59445932475

**Q.1 Who is the CEO of Twitter?**

- Ans
- ☐ 1. Evan Williams
  - ☐ 2. Paul Singer
  - ☐ 3. Noah Glass
  - ☒ 4. Jack Dorsey

Question ID : 59445932483

**Q.2 Which of the following teams did Pele play for?**

- Ans
- ☐ 1. Argentina
  - ☒ 2. Brazil
  - ☐ 3. Spain
  - ☐ 4. Portugal

Question ID : 59445932496

**Q.3 Which of the following state governments had launched the "Assess Karo Na" app for fighting COVID-19?**

- Ans
- ☒ 1. Delhi
  - ☐ 2. Gujarat
  - ☐ 3. Maharashtra
  - ☐ 4. Rajasthan

Question ID : 59445932488

**Q.4 Who out of the following doesn't feature among the Wisden Five Cricketers of the Year by the 2020 edition of the Wisden Almanack?**

- Ans
- ☐ 1. Pat Cummins
  - ☒ 2. Rohit Sharma
  - ☐ 3. Jofra Archer
  - ☐ 4. Marnus Labschagne

Question ID : 59445932495

**Q.5 In which year did Timur captured Delhi?**

- Ans
- ☐ 1. 1405
  - ☐ 2. 1409
  - ☒ 3. 1398
  - ☐ 4. 1414

Question ID : 59445932479



**Q.6 In which year was the Fazl Ali Commission appointed?**

- Ans
- ☐ 1. 1952
  - ☒ 2. 1953
  - ☐ 3. 1954
  - ☐ 4. 1951

Question ID : 59445932490

**Q.7 Which of the following states has become the first to geotag community kitchens?**

- Ans
- ☐ 1. Gujarat
  - ☒ 2. Uttar Pradesh
  - ☐ 3. Madhya Pradesh
  - ☐ 4. Maharashtra

Question ID : 59445932486

**Q.8 Who out of the following had served as the first Indian Commander-in-Chief of the Indian Army?**

- Ans
- ☐ 1. General Sam Manekshaw
  - ☐ 2. General Arjan Singh
  - ☒ 3. General K.M. Cariappa
  - ☐ 4. General Maharaj Rajendra Sinhji

Question ID : 59445932481

**Q.9 With which of the following games was Prakash Amritraj associated?**

- Ans
- ☐ 1. Badminton
  - ☒ 2. Tennis
  - ☐ 3. Football
  - ☐ 4. Golf

Question ID : 59445932494

**Q.10 Who is the author of the book "The God of Small Things"?**

- Ans
- ☐ 1. Jhumpa Lahiri
  - ☐ 2. Arvind Adiga
  - ☐ 3. Karan Thapar
  - ☒ 4. Arundhati Roy

Question ID : 59445932482

Q.11 In which of the following cities was the Sangam assemblies held?

- Ans
- ☐ 1. Nagapattinam
  - ☐ 2. Thiruvarur
  - ☐ 3. Thiruvallur
  - ☒ 4. Madurai

Question ID : 59445932477

Q.12 On which of the following days is the Padma Awards announced?

- Ans
- ☐ 1. On Shaheed Diwas
  - ☒ 2. On the eve of the Republic Day
  - ☐ 3. On the Independence Day
  - ☐ 4. On the eve of the Independence Day

Question ID : 59445932480

Q.13 Which of the following days was observed as the Women's Day in 2020?

- Ans
- ☒ 1. March 8th
  - ☐ 2. March 5th
  - ☐ 3. March 6th
  - ☐ 4. March 7th

Question ID : 59445932485

Q.14 Which of the following articles of the Indian Constitution empowers each House of the Parliament to make rules for regulations, subject to the provisions of this Constitution, its procedure and the conduct of its business?

- Ans
- ☒ 1. Article 118(1)
  - ☐ 2. Article 118(2)
  - ☐ 3. Article 118(4)
  - ☐ 4. Article 118(3)

Question ID : 59445932489

Q.15 In which of the following languages were the Mangalkavyas written?

- Ans
- ☐ 1. Braj
  - ☐ 2. Pali
  - ☒ 3. Bengali
  - ☐ 4. Hindi

Question ID : 59445932478

Q.16 Which of the following teams has won the Pro Kabaddi League 2019?

- Ans ☒ 1. Bengal Warriors  
☐ 2. Dabang Delhi K. C.  
☐ 3. Bengaluru Bulls  
☐ 4. U Mumba

Question ID : 59445932493

Q.17 Which of the following constitutional amendment had replaced the Collegium System of appointing judges to the Supreme Court and High Courts with the National Judicial Appointments Commission (NJAC)?

- Ans ☐ 1. 97th  
☐ 2. 98th  
☐ 3. 96th  
☒ 4. 99th

Question ID : 59445932492

Q.18 Which of the following space agencies are involved in the Crew Demo-2 mission?

- Ans ☐ 1. SpaceX and ESA  
☐ 2. NASA and ESA  
☒ 3. NASA and SpaceX  
☐ 4. JAXA and NASA

Question ID : 59445932487

Q.19 In which of the following countries did the concept of Public Interest Litigation originate?

- Ans ☒ 1. USA  
☐ 2. Ireland  
☐ 3. Russia  
☐ 4. Canada

Question ID : 59445932491

Q.20 What is Mukesh Ambani's rank in the latest world billionaires list by Forbes?

- Ans ☒ 1. 17  
☐ 2. 16  
☐ 3. 18  
☐ 4. 15

Question ID : 59445932484

**Q.1** The marked price of an article is 40 percent more than its cost price. The shopkeeper gives a discount of 28.57 percent on marked price. On request, he gives another discount that was equal to 12.5 percent of the cost price. What was the approximate loss percent of shopkeeper?

- Ans
- ☐ 1. 15 percent
  - ☐ 2. 10.5 percent
  - ☐ 3. 8 percent
  - ☒ 4. 12.5 percent

Question ID : 59445932510

**Q.2** In an election between two candidates A and B, A won by a majority of 4000 votes in 2002. In 2005 the number of voters increased by 25 percent, votes for B increased by 50 percent over that in 2002 and thus B won by a majority of 15000 votes. Find the votes polled for B in 2002.

- Ans
- ☐ 1. 32000
  - ☐ 2. 44000
  - ☐ 3. 38500
  - ☒ 4. 40000

Question ID : 59445932507

**Q.3** In an election only two candidates contested, 20 percent of the voters did not cast their vote and 120 votes were declared invalid. The winner got 200 votes more than his opponent which he secured was 41 percent of the total votes on the voter list. Percentage of the votes of the defeated candidate out of the total votes cast is:

- Ans
- ☒ 1. 45 percent
  - ☐ 2. 36 percent
  - ☐ 3. 38 percent
  - ☐ 4. 37.5 percent

Question ID : 59445932509

**Q.4**

- Ans
- ☒ 1. 25
  - ☐ 2. 1
  - ☐ 3. 5
  - ☐ 4. 125

Question ID : 59445932501

**Q.5** David, John and Johny start at the same time in the same direction to run around a circular stadium. David completes a round in 126 seconds, John in 154 seconds and Johny in 198 seconds, all starting at the same point. After how much time will they again at the starting point?

- Ans**
- ☒ 1. 19 minutes 22 seconds
  - ☒ 2. 23 minutes 6 seconds
  - ☒ 3. 27 minutes 8 seconds
  - ☒ 4. 20 minutes 16 seconds

Question ID : 59445932497

**Q.6** Simplify the following expression by using BODMAS.

$$17 + [2 - \{(-8) + 3 + (18 \times 3 + 1 - 13 \times 3)\}]$$

- Ans**
- ☒ 1. 16
  - ☒ 2. 8
  - ☒ 3. -8
  - ☒ 4. -16

Question ID : 59445932498

**Q.7** A fruit seller sold 200 apples on some day and he made a profit equal to the selling price of 40 apples while on the next day, he sold 200 apples and suffered a loss equal to selling price of 40 apples. Find the difference between percent profit and percent loss made in two situations.

- Ans**
- ☒ 1.
  - ☒ 2.
  - ☒ 3.
  - ☒ 4.

Question ID : 59445932513

**Q.8** In a milk and water solution, the ratio of milk to water is 1 : 4. M litres of milk is added in it and ratio become 1 : 3. Again N litres of water is added in it and ratio become 2 : 7. If N – M = 4, then what is the initial quantity of solution?

- Ans**
- ☒ 1. 45 litres.
  - ☒ 2. 50 litres.
  - ☒ 3. 80 litres.
  - ☒ 4. 60 litres.

Question ID : 59445932515

**Q.9** Find the smallest fraction from the following.

- Ans**
- ☒ 1.
  - ☒ 2.
  - ☒ 3.
  - ☒ 4.

Question ID : 59445932499

**Q.10** There are 48 workers and 2 managers in a company. The salary of one worker of them is twice the salary of another worker. If these 2 workers are replaced by 2 managers whose salaries are Rs. 32000 and Rs. 22000, the average salary of workers increases by Rs. 500. Find the total salary of replaced two workers.

- Ans
- ☒ 1. Rs. 25000
  - ☒ 2. Rs. 32000
  - ☒ 3. Rs. 30000
  - ☒ 4. Rs. 24000

Question ID : 59445932505

**Q.11** A school has 630 students. The ratio of the number of boys to the number of girls is 3 : 2. This ratio changes to 7 : 5 after the admission of 90 new students. Find the number of newly admitted boys.

- Ans
- ☒ 1. 28
  - ☒ 2. 35
  - ☒ 3. 42
  - ☒ 4. 49

Question ID : 59445932514

**Q.12** The average age of 11 players of a cricket team is decreased by 2 months when two of them aged 17 years and 20 years are replaced by two new players. What is the average age of two new players?

- Ans
- ☒ 1. 17 years 1 month
  - ☒ 2. 17 years 7 months
  - ☒ 3. 18 years 3 months
  - ☒ 4. 17 years 11 months

Question ID : 59445932502

**Q.13** The marked price of a mobile is Rs. 180. A person buy it in Rs. 137.7 after two successive discounts in which one is 10 percent, then find the other discount rate?

- Ans
- ☒ 1. 20 percent
  - ☒ 2. 15 percent
  - ☒ 3. 12 percent
  - ☒ 4. 12.5 percent

Question ID : 59445932503

**Q.14** The average marks of 12 students in a paper are 46. If the marks of two new students are consider, the average marks increases by 4. What are the average marks of two new students?

- Ans
- ☒ 1. 78
  - ☒ 2. 66
  - ☒ 3. 74
  - ☒ 4. 70

Question ID : 59445932504

Q.15 In a state X, income tax of 8 percent is levied on annual income in excess of Rs. 5 lakh and 10 percent of annual income in excess of Rs. 10 lakh. If a person pays a total tax of Rs. 120000, then find his annual income.

- Ans
- ☐ 1. Rs. 17 lakh
  - ☐ 2. Rs. 19 lakh
  - ☐ 3. Rs. 16 lakh
  - ☒ 4. Rs. 18 lakh

Question ID : 59445932508

Q.16 If a carton containing a dozen mirrors is dropped, which of the following cannot be the ratio of broken mirror to unbroken mirrors?

- Ans
- ☐ 1. 7 : 5
  - ☐ 2. 3 : 1
  - ☒ 3. 2 : 3
  - ☐ 4. 1 : 2

Question ID : 59445932516

Q.17 57984372 is exactly divisible by which of the following?

- Ans
- ☐ 1. 24
  - ☐ 2. 14
  - ☒ 3. 18
  - ☐ 4. 7

Question ID : 59445932500

Q.18 A manufacturer sells all its items at Rs. 60 each. The materials cost is Rs. 40 for each item and he has overhead expenses of Rs. 3000 per week in order to operate that plant. What is the number of units he should produce and sell in order to make a profit of Rs. 1000 per week?

- Ans
- ☐ 1. 300
  - ☒ 2. 200
  - ☐ 3. 250
  - ☐ 4. 400

Question ID : 59445932511

Q.19 Nine persons went to watching a movie. Eight of them spent Rs. 72 each for their tickets and the ninth spent Rs. 8 more than the average expenditure of all the nine. What was the total money spent by all of them?

- Ans
- ☐ 1. Rs. 712
  - ☒ 2. Rs. 657
  - ☐ 3. Rs. 804
  - ☐ 4. Rs. 613

Question ID : 59445932506

**Q.20** After selling a watch, Pankaj found that he had made a loss of 20 percent. He also found that had he sold it for Rs. 27 more, he would have made a profit of 10 percent. The actual initial loss was what percentage of the profit earned, had he sold for a 10 percent profit?

- Ans
- ☐ 1. 100 percent
  - ☐ 2. 150 percent
  - ☒ 3. 200 percent
  - ☐ 4. 123 percent

Question ID : 59445932512

Section : Arithmetical and Numerical ability2

**Q.1** A vessel is in the form of a hollow hemisphere mounted by a hollow cylinder. The diameter of the hemisphere is 14 cm and the total height of the vessel is 12 cm. What is the inner surface area of the vessel?

- Ans
- ☐ 1. 612 sq. cm
  - ☐ 2. 578 sq. cm
  - ☒ 3. 528 sq. cm
  - ☐ 4. 476 sq cm

Question ID : 59445932530

**Q.2** The ratio between the length and the breadth of a rectangular park is 3:2. If a person walks along the boundary of the park at the speed of 10 km/hr completes one round in 12 minutes, then what is the area of the park?

- Ans
- ☐ 1. 180000 sq. m
  - ☒ 2. 240000 sq. m
  - ☐ 3. 302000 sq. m
  - ☐ 4. 300000 sq. m

Question ID : 59445932529

**Q.3** At a certain rate of compound interest a certain sum amounts to Rs. 64800 in 4 years and Rs. 93312 in 6 years. What is the compound interest earned in fifth year?

- Ans
- ☐ 1. Rs. 10240
  - ☐ 2. Rs. 11600
  - ☒ 3. Rs. 12960
  - ☐ 4. Rs. 14425

Question ID : 59445932519



**Q.4** Twenty five workers were employed to complete a wall in 12 days. Five workers left the work after working of 5 days. By what percent of each of remaining 20 workers should increase their efficiencies to complete the work in given time?

- Ans
- ☒ 1. 20 percent
  - ☒ 2. 30 percent
  - ☒ 3. 25 percent
  - ☒ 4. 18 percent

Question ID : 59445932525

**Q.5** A pipe can fill a tank in 4 hours, while a leak which is at one-fourth of the height of the tank from bottom can empty upto that part in 2 hours. If both are operated simultaneously and initially the tank is full, then when it will be one-fourth full?

- Ans
- ☒ 1. 5 hours
  - ☒ 2. 6 hours
  - ☒ 3. 7.5 hours
  - ☒ 4. 8 hours

Question ID : 59445932527

**Q.6** Study the table given below and answer the question based on it.

Percentage of Total Population for 2011 under Different Age Groups

Age Group	Percent
Up to 15	30
16-30	22
31-45	18
46-60	16
61-75	09
75 and above	05

There are 45 lakh people above 45 years, then how many persons are there in the age group 16-30 years.

- Ans
- ☒ 1. 27 Lakh
  - ☒ 2. 33 Lakh
  - ☒ 3. 36 Lakh
  - ☒ 4. 25 Lakh

Question ID : 59445932534

Q.7 I walk a certain distance and ride back taking a total time of 37 minutes. I could walk both ways in 55 minutes. How long would it take me to ride both ways ?

- Ans
- ☒ 1. 38
  - ☒ 2. 19
  - ☒ 3. 9.5
  - ☒ 4. 46

Question ID : 59445932522

Q.8 If the total surface area of a solid hemisphere is  $108\pi$  sq cm. What will be the volume of the hemisphere?

- Ans
- ☒ 1.  $72\pi \text{ cm}^3$
  - ☒ 2.  $54\sqrt{6} \text{ cm}^3$
  - ☒ 3.  $144\pi \text{ cm}^3$
  - ☒ 4.  $108\sqrt{6} \text{ cm}^3$

Question ID : 59445932528

Q.9 The sum of areas of two circles A and B is equal to the area of a third circle C whose diameter is 30 cm. If the diameter of circle A is 18 cm, then the radius of circle B is:

- Ans
- ☒ 1. 15 cm
  - ☒ 2. 10 cm
  - ☒ 3. 18 cm
  - ☒ 4. 12 cm

Question ID : 59445932531

Q.10 The work done by  $(x-2)$  men in  $(4x+1)$  days and the work done by  $(4x+1)$  men in  $(2x-3)$  days are in the ratio 2:5. In how many days  $(x+4)$  men do  $(12x^2+15)$  work?

- Ans
- ☒ 1.  $21\frac{5}{8}$
  - ☒ 2.  $30\frac{3}{8}$
  - ☒ 3.  $27\frac{7}{8}$
  - ☒ 4.  $25\frac{7}{8}$

Question ID : 59445932526

Q.11 The S.I. on a certain sum of money for 4 years at 4 percent per annum exceeds the C.I. on the same sum for 3 years at 5 percent per annum by Rs. 57. Find the approximate sum.

- Ans
- ☒ 1. Rs. 30000
  - ☒ 2. Rs. 16000
  - ☒ 3. Rs. 20000
  - ☒ 4. Rs. 24000

Question ID : 59445932520

Q.12 Two persons Amar and Baala lent out Rs. 15000 each at simple interest for 5 years. The difference between the simple interest received by them is Rs. 3000. If the sum of the annual rates of interest is 11 percent per annum and Amar received more interest than Baala, then what is the interest received by Amar?

- Ans
- ☒ 1. Rs. 5875
  - ☒ 2. Rs. 6250
  - ☒ 3. Rs. 5625
  - ☒ 4. Rs. 6500

Question ID : 59445932518

Q.13 Study the table given below and answer the questions based on it.

Percentage of Total Population for 2011 under Different Age Groups

Age Group	Percent
Up to 15	30
16-30	22
31-45	18
46-60	16
61-75	09
75 and above	05

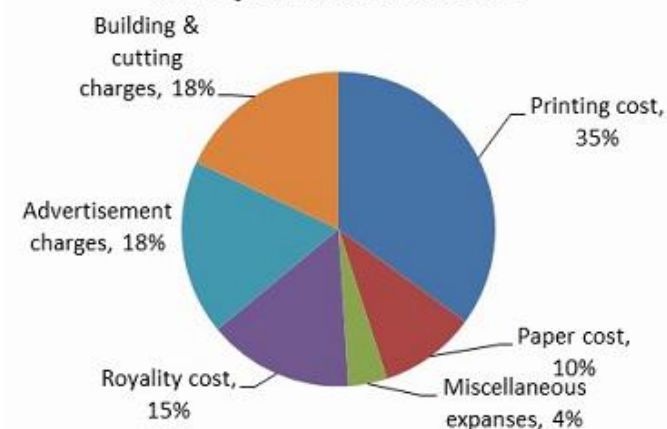
If there are 13.5 Lakh people in the age group 61-75, then what is the difference between the population in the age group 16- 30 and 46-60?

- Ans
- ☒ 1. 9 Lakh
  - ☒ 2. 6 Lakh
  - ☒ 3. 11 Lakh
  - ☒ 4. 712 Lakh

Question ID : 59445932535

Q.14 Study the following pie chart carefully to answer the question given below.

**Percentage expenses on various items during book production and sale**



What is central angle corresponding to "Advertisement charges"?

- Ans
- ☒ 1.  $50.2^\circ$
  - ☒ 2.  $64.8^\circ$
  - ☒ 3.  $60^\circ$
  - ☒ 4.  $70.2^\circ$

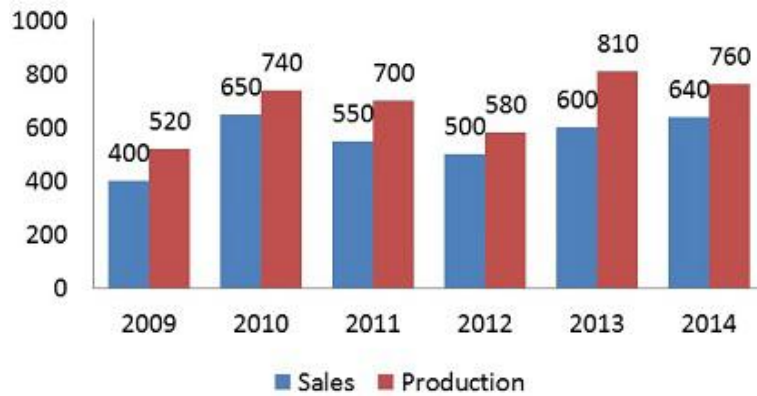
Question ID : 59445932532

Q.15 Rs. 6120 is divided among A, B & C such that A gets  $\frac{2}{3}$  of what B gets and B gets  $\frac{1}{4}$  of what C gets. What is the share of B (in Rs.)?

- Ans
- ☒ 1. 720
  - ☒ 2. 540
  - ☒ 3. 1440
  - ☒ 4. 1080

Question ID : 59445932517

Q.16 The bar graph given below represents the production (in tonnes) and sales (in tonnes) of steel in India from 2009-2014.



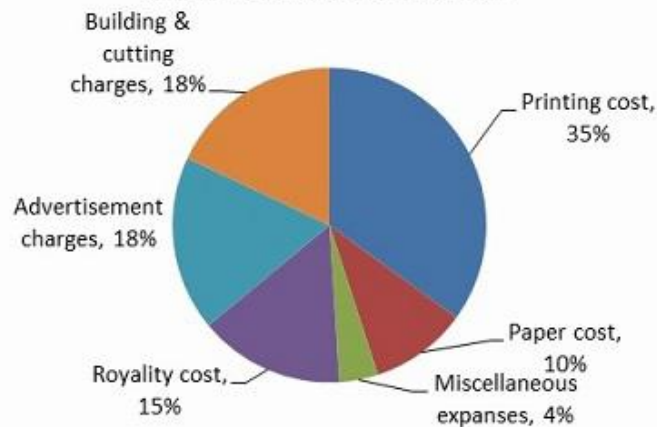
What is the difference (in tonnes) in the average sale from 2012 to 2014 and the average production from 2009 to 2014?

- Ans
- ☒ 1. 105
  - ☐ 2. 145
  - ☐ 3. 160
  - ☐ 4. 85

Question ID : 59445932536

Q.17 Study the following pie chart carefully to answer the question given below.

### Percentage expenses on various items during book production and sale



If the "Miscellaneous expenses" are Rs. 6000, how much more are "Binding and cutting charges" than "Miscellaneous"?

- Ans
- ☐ 1. Rs. 16000
  - ☐ 2. Rs. 15500
  - ☒ 3. Rs. 21000
  - ☐ 4. Rs. 24000

Question ID : 59445932533

**Q.18** Karan had covered two third of a certain distance when his car had a breakdown. He parked it and covered the remaining distance on foot. His time of travel on foot was 9 times his time of travel on car. What is the ratio of his walking speed with respect to his car's speed?

- Ans ☒ 1. 1 : 18  
☒ 2. 1 : 20  
☒ 3. 1 : 36  
☒ 4. 1 : 24

Question ID : 59445932524

**Q.19** An express train travelled at an average speed of 100 km/hr, stopping for 3 minutes after every 75 km. How long it take to reach its destination 600 km from the starting point?

- Ans ☒ 1. 6 hr 27 min  
☒ 2. 6 hr  
☒ 3. 6 hr 24 min  
☒ 4. 6 hr 21 min

Question ID : 59445932523

**Q.20** The simple and compound interest that can be earned in two years at the same rate on a certain sum is Rs. 1,000 and Rs. 1,040 respectively. What is the rate (percent per annum) of interest?

- Ans ☒ 1. 11  
☒ 2. 8  
☒ 3. 10  
☒ 4. 9

Question ID : 59445932521

Section : English Language & Comprehension1

**Q.1** Select the correct pair of homophones to fill in the blanks.





Since the stock market started to falter, more and more people have been having a go at becoming property \_\_\_\_\_.

An elephant, tired after searching for water, lies in writhing pain on a \_\_\_\_\_ land.

- Ans ☒ 1. baron; barren  
☒ 2. barren, baron  
☒ 3. baron; baron  
☒ 4. barren; barren

Question ID : 59445932556

**Q.2** In the following question, four sentences are given out of which three sentences are grammatically correct while one is incorrect. Find out which sentence is grammatically incorrect and select the appropriate option.

- Ans  1. The significant response of corporations in the 1970's is likely to be sustained and conceivably be increased throughout the 1980's.
-  2. As the nature of the work environment continues to change, new trends have emerged in corporations.
-  3. Although corporation are eager to cooperate with minority-owned businesses, a shortage of capital in the 1970's made substantial response impossible.
-  4. The enormous corporate response has all but eliminated the dangers of over-expansion that used to plague small minority-owned businesses.

Question ID : 59445932541





**Q.3** Parts of a sentence have been jumbled up. Arrange these parts in a meaningful order.

- A. to their suppliers which is likely to ripple out  
B. news emerging from industry suggests that  
C. and put more stress on jobs  
D. some manufacturers have begun to hold back payments

- Ans  1. BDCA
-  2. BCAD
-  3. BADC
-  4. BDAC

Question ID : 59445932551


**Q.4** In the following question, four sentences are given out of which three sentences are grammatically correct while one is incorrect. Find out which sentence is grammatically incorrect and select the appropriate option.

- Ans  1. Numerous studies have shown how a variety of new technologies have altered the way work was performed.
-  2. Technological change affects more than just productivity, employment, and income inequality.
-  3. It also creates opportunities for changes in the nature of work itself.
-  4. The workforce is now more demographically diverse than ever.

Question ID : 59445932540

**Q.5** Arrange the jumbled sentences to make a meaningful paragraph.

- A. When you look at the behaviour, do your emotions get filled with anger, criticism or confusion?  
B. Their actions may be wrong, but we decide that they are bad persons.  
C. Hence we are quick to judge them, based on one or two of their behaviours.  
D. Almost every day, we see people behaving in ways that go against our beliefs.

- Ans  1. DABC
-  2. DCBA
-  3. DBCA
-  4. DCAB

Question ID : 59445932553

Q.6 Select the correct pair of homophones to fill in the blanks.

The pastor called those needing prayer to come to kneel at the church's \_\_\_\_\_.

The man who is constantly making decisions and being compelled to \_\_\_\_\_ those gets nowhere.

- Ans
- ☒ 1. altar; altar
  - ☒ 2. altar; alter
  - ☒ 3. alter; alter
  - ☒ 4. alter, altar

Question ID : 59445932554

Q.7 In the following question, some parts of the sentence may have errors. Find out which part of the sentence has an error and select the appropriate option. If a sentence is free from error, select No Error.

The controversial issue was almost settled and it was my brother's insincerity which upset the whole thing and disappointed us.

- Ans
- ☒ 1. upset the whole thing and disappointed us.
  - ☒ 2. and it was my brother's insincerity which
  - ☒ 3. The controversial issue was almost settled
  - ☒ 4. No Error

Question ID : 59445932538

Q.8 In the following question, some parts of the sentence may have errors. Find out which part of the sentence has an error and select the appropriate option. If a sentence is free from error, select No Error.

I cannot allow you go out of the examination hall until the invigilator comes and provides me some guidelines.

- Ans
- ☒ 1. No Error
  - ☒ 2. hall until the invigilator comes and
  - ☒ 3. I cannot allow you go out of the examination
  - ☒ 4. provides me some guidelines.

Question ID : 59445932537

Q.9 Select the most appropriate option to fill in the blank.

By the time that ward round was finished, I had \_\_\_\_\_ two more things that were important.

- Ans
- ☒ 1. learnt
  - ☒ 2. learned
  - ☒ 3. learn
  - ☒ 4. learns

Question ID : 59445932548



Q.10 Select the most appropriate option to substitute the underlined segment in the given sentence. If there is no need to substitute it, select 'No improvement'.

He sold all his possessions to fund the trip and says he has no plans to returning home.

- Ans
- ☐ 1. to returned home
  - ☐ 2. No improvement
  - ☐ 3. to returns home
  - ☒ 4. to return home

Question ID : 59445932543

Q.11 Parts of a sentence have been jumbled up. Arrange these parts in a meaningful order.

- A. Business information company CMIE's monthly jobs data showed
- B. the highest on record since it began its survey
- C. that unemployment rate was already a worrying 8.7% in March,
- D. over three years ago

- Ans
- ☐ 1. ACDB
  - ☐ 2. ADCB
  - ☒ 3. ACBD
  - ☐ 4. ABCD

Question ID : 59445932550

Q.12 Select the most appropriate option to substitute the underlined segment in the given sentence. If there is no need to substitute it, select 'No improvement'.

In the past, promises have been made, kept and broken, and they are being make yet again.

- Ans
- ☒ 1. they are being made
  - ☐ 2. No improvement
  - ☐ 3. they are been make
  - ☐ 4. it is being made

Question ID : 59445932544

Q.13 Select the most appropriate option to substitute the underlined segment in the given sentence. If there is no need to substitute it, select 'No improvement'.

September is one of the busiest months of the year, with a range of different tasks at hand.

- Ans
- ☐ 1. one's of the busiest month
  - ☐ 2. one of the busy month
  - ☐ 3. one of the more busier months
  - ☒ 4. No improvement

Question ID : 59445932545

**Q.14** Select the most appropriate option to substitute the underlined segment in the given sentence. If there is no need to substitute it, select 'No improvement'.

Most parents today would say that their kids have great opportunity then they did.

- Ans ☒ 1. greater opportunities than  
☒ 2. great opportunity then  
☒ 3. No improvement  
☒ 4. greatest opportunity than

Question ID : 59445932542

**Q.15** Select the most appropriate option to fill in the blank.

I recognise people may have different points of view and are free to have \_\_\_\_\_ own opinion.

- Ans ☒ 1. there  
☒ 2. your  
☒ 3. their  
☒ 4. his

Question ID : 59445932547

**Q.16** Arrange the jumbled sentences to make a meaningful paragraph.

- A. The measure was taken after only three new cases of Covid-19 were reported in the city.  
 B. It also means there is hope for other countries trying to control the pandemic through their own curbs.  
 C. The city of Wuhan where the coronavirus first emerged ended its 76 day lockdown yesterday.  
 D. The end of Wuhan's lockdown means the Chinese authorities' strict imposition of restrictions is paying off.

- Ans ☒ 1. CBAD  
☒ 2. CDBA  
☒ 3. CADB  
☒ 4. CABD

Question ID : 59445932552

**Q.17** Select the correct pair of homophones to fill in the blanks.

The sound track gives us the \_\_\_\_\_ before the visual cue; it is as if the thunder arrives before the lightning.

It focuses on \_\_\_\_\_ communication rather than written communication, which is vital in communities where there are many people who are not literate.

- Ans ☒ 1. oral; oral  
☒ 2. oral; aural  
☒ 3. aural; aural  
☒ 4. aural; oral

Question ID : 59445932555

**Q.18** In the following question, some parts of the sentence may have errors. Find out which part of the sentence has an error and select the appropriate option. If a sentence is free from error, select No Error.

Kavita was so strong that she had not worried by their decision to suspend her.

- Ans
- ☒ 1. had not worried by their
  - ☐ 2. No Error
  - ☐ 3. decision to suspend her.
  - ☐ 4. Kavita was so strong that she

Question ID : 59445932539

**Q.19** Select the most appropriate option to fill in the blank.

My advice is never download any program from the internet \_\_\_\_\_ you know exactly what it is.

- Ans
- ☐ 1. if
  - ☐ 2. since
  - ☐ 3. yet
  - ☒ 4. unless

Question ID : 59445932549

**Q.20** Select the most appropriate option to fill in the blank.

We are getting better \_\_\_\_\_ being variety conscious, and supermarkets must display the variety at point of sale.

- Ans
- ☒ 1. at
  - ☐ 2. of
  - ☐ 3. in
  - ☐ 4. on

Question ID : 59445932546

Section : English Language & Comprehension2

**Q.1** Select the word which means the same as the group of words given.

A large group of people or things of a particular kind.

- Ans
- ☐ 1. Troupe
  - ☒ 2. Bevy
  - ☐ 3. Archery
  - ☐ 4. Flight

Question ID : 59445932569

**Q.2 Select the most appropriate meaning of the given idiom.**

**Raise one's hackles**

- Ans ☒ 1. To greatly irritate  
☐ 2. To be promoted  
☐ 3. To raise one's concern  
☐ 4. To be moody

Question ID : 59445932567

**Q.3 Select the most appropriate antonym of the given word.**

**Frigid**

- Ans ☐ 1. Hawkish  
☐ 2. Dwindle  
☐ 3. Subside  
☒ 4. Tropical

Question ID : 59445932557

**Q.4 Select the incorrectly spelt word.**

- Ans ☐ 1. Significance  
☐ 2. Demonstrate  
☐ 3. Remarkable  
☒ 4. Recruitmant

Question ID : 59445932559

**Q.5 Select the most appropriate antonym of the given word.**

**Constrict**

- Ans ☐ 1. Diminish  
☒ 2. Dilate  
☐ 3. Downsize  
☐ 4. Downturn

Question ID : 59445932558

**Q.6 Select the word which means the same as the group of words given.**

**Having or showing too great a readiness to believe things.**

- Ans ☐ 1. Greenhorn  
☐ 2. Skeptical  
☐ 3. Susceptible  
☒ 4. Credulous

Question ID : 59445932570

Q.7 Select the most appropriate meaning of the underlined idiom in the given sentence.

I avoid the hustle and bustle of malls and shopping centers whenever I can.

- Ans
- ☒ 1. Being spacious and comfortable
  - ☒ 2. Busy and excited activity
  - ☒ 3. Need for being fashionable
  - ☒ 4. Quick and happening

Question ID : 59445932564

Q.8 Select the incorrectly spelt word.

- Ans
- ☒ 1. Monumental
  - ☒ 2. Sagacious
  - ☒ 3. Chronicles
  - ☒ 4. Abbreviate

Question ID : 59445932561

Q.9 Select the word which means the same as the group of words given.

A written statement confirmed by oath or affirmation, for use as evidence in court.

- Ans
- ☒ 1. Doctrine
  - ☒ 2. Sermon
  - ☒ 3. Discourse
  - ☒ 4. Affidavit

Question ID : 59445932568

Q.10 Select the incorrectly spelt word.

- Ans
- ☒ 1. Computation
  - ☒ 2. Synchronize
  - ☒ 3. Ennumerate
  - ☒ 4. Characterize

Question ID : 59445932562

Q.11 Select the word which means the same as the group of words given.

The study of statistics such as births, deaths, income, or the incidence of disease, which illustrate the changing structure of human populations.

- Ans
- ☒ 1. Demonology
  - ☒ 2. Demography
  - ☒ 3. Etymology
  - ☒ 4. Anthropology

Question ID : 59445932571

Q.12 Select the most appropriate meaning of the underlined idiom in the given sentence.

Let's form an ad hoc committee to make some recommendations to the board.

- Ans
- ☒ 1. Prepared in advance
  - ☒ 2. Decided by the members
  - ☒ 3. Without due consideration
  - ☒ 4. For the special purpose

Question ID : 59445932563

Q.13 Select the most appropriate meaning of the underlined idiom in the given sentence.

Can we stop for a minute? I need to catch my breath—I can't run as fast as you guys!

- Ans
- ☒ 1. To slow down
  - ☒ 2. To rest for sometime
  - ☒ 3. To cough irregularly
  - ☒ 4. To resume breathing normally

Question ID : 59445932565

Q.14 Select the most appropriate meaning of the given idiom.

Like a cat on hot bricks

- Ans
- ☒ 1. To walk slowly
  - ☒ 2. Looking for food
  - ☒ 3. To be secretive
  - ☒ 4. To be anxious

Question ID : 59445932566

Q.15 Select the incorrectly spelt word.

- Ans
- ☒ 1. Harmonious
  - ☒ 2. Supernatural
  - ☒ 3. Hereditary
  - ☒ 4. Revolution

Question ID : 59445932560

**Comprehension:**

Read the passage carefully and select the best answer to each question out of the given four alternatives.

The Silk Road was a network of trade routes which connected the East and West, and was central to the economic, cultural, political, and religious interactions between these regions from the 2nd century BCE to the 18th century. The Silk Road primarily refers to the land routes connecting East Asia and Southeast Asia with South Asia, Persia, the Arabian Peninsula, East Africa and Southern Europe. The Silk Road derives its name from the lucrative trade in silk carried out along its length, beginning in the Han dynasty in China.

The Silk Road trade played a significant role in the development of the civilizations of China, Korea, Japan, the Indian subcontinent, Iran, Europe, the Horn of Africa and Arabia, opening long-distance political and economic relations between the civilizations. Though silk was the major trade item exported from China, many other goods and ideas were exchanged, including religions (especially Buddhism), syncretic philosophies, sciences, and technologies like paper and gunpowder. So, in addition to economic trade, the Silk Road was a route for cultural trade among the civilizations along its network. Diseases, most notably plague, also spread along the Silk Road.

Some remnants of what was probably Chinese silk dating from 1070 BCE have been found in Ancient Egypt. The Great Oasis cities of Central Asia played a crucial role in the effective functioning of the Silk Road trade. The originating source seems sufficiently reliable, but silk degrades very rapidly, so it cannot be verified whether it was cultivated silk (which almost certainly came from China) or a type of wild silk, which might have come from the Mediterranean or Middle East. Archeological sites such as the Berel burial ground in Kazakhstan, confirmed that the nomadic Arimaspians were not only breeding horses for trade but also great craftsmen able to propagate exquisite art pieces along the Silk Road.

**SubQuestion No : 16**

**Q.16** The passage talks about wild silk. Where did it come from according to the passage?

- Ans
-  1. Southern Europe
  -  2. Horn of Africa
  -  3. Ancient Egypt
  -  4. Middle East

Question ID : 59445932574

**Comprehension:**

Read the passage carefully and select the best answer to each question out of the given four alternatives.

The Silk Road was a network of trade routes which connected the East and West, and was central to the economic, cultural, political, and religious interactions between these regions from the 2nd century BCE to the 18th century. The Silk Road primarily refers to the land routes connecting East Asia and Southeast Asia with South Asia, Persia, the Arabian Peninsula, East Africa and Southern Europe. The Silk Road derives its name from the lucrative trade in silk carried out along its length, beginning in the Han dynasty in China.





The Silk Road trade played a significant role in the development of the civilizations of China, Korea, Japan, the Indian subcontinent, Iran, Europe, the Horn of Africa and Arabia, opening long-distance political and economic relations between the civilizations. Though silk was the major trade item exported from China, many other goods and ideas were exchanged, including religions (especially Buddhism), syncretic philosophies, sciences, and technologies like paper and gunpowder. So, in addition to economic trade, the Silk Road was a route for cultural trade among the civilizations along its network. Diseases, most notably plague, also spread along the Silk Road.

Some remnants of what was probably Chinese silk dating from 1070 BCE have been found in Ancient Egypt. The Great Oasis cities of Central Asia played a crucial role in the effective functioning of the Silk Road trade. The originating source seems sufficiently reliable, but silk degrades very rapidly, so it cannot be verified whether it was cultivated silk (which almost certainly came from China) or a type of wild silk, which might have come from the Mediterranean or Middle East. Archeological sites such as the Berel burial ground in Kazakhstan, confirmed that the nomadic Arimaspians were not only breeding horses for trade but also great craftsmen able to propagate exquisite art pieces along the Silk Road.

**SubQuestion No : 17**

**Q.17 Many things were exported and exchanged in the regions through the Silk Road. Which of the following is true?**

**Ans**

-  1. Only goods and trades not ideas
-  2. Religion, gunpowder, paper
-  3. Sciences and philosophies, diseases
-  4. Religion, gunpowder,paper and Sciences and philosophies,diseases.

Question ID : 59445932573



**Comprehension:**

Read the passage carefully and select the best answer to each question out of the given four alternatives.

The Silk Road was a network of trade routes which connected the East and West, and was central to the economic, cultural, political, and religious interactions between these regions from the 2nd century BCE to the 18th century. The Silk Road primarily refers to the land routes connecting East Asia and Southeast Asia with South Asia, Persia, the Arabian Peninsula, East Africa and Southern Europe. The Silk Road derives its name from the lucrative trade in silk carried out along its length, beginning in the Han dynasty in China.

The Silk Road trade played a significant role in the development of the civilizations of China, Korea, Japan, the Indian subcontinent, Iran, Europe, the Horn of Africa and Arabia, opening long-distance political and economic relations between the civilizations. Though silk was the major trade item exported from China, many other goods and ideas were exchanged, including religions (especially Buddhism), syncretic philosophies, sciences, and technologies like paper and gunpowder. So, in addition to economic trade, the Silk Road was a route for cultural trade among the civilizations along its network. Diseases, most notably plague, also spread along the Silk Road.

Some remnants of what was probably Chinese silk dating from 1070 BCE have been found in Ancient Egypt. The Great Oasis cities of Central Asia played a crucial role in the effective functioning of the Silk Road trade. The originating source seems sufficiently reliable, but silk degrades very rapidly, so it cannot be verified whether it was cultivated silk (which almost certainly came from China) or a type of wild silk, which might have come from the Mediterranean or Middle East. Archeological sites such as the Berel burial ground in Kazakhstan, confirmed that the nomadic Arimaspians were not only breeding horses for trade but also great craftsmen able to propagate exquisite art pieces along the Silk Road.

**SubQuestion No : 18**

**Q.18 The Great Oasis cities played a crucial role in the effective functioning of the Silk Road trade. Where did these cities lie?**

- Ans
-  1. East Africa
  -  2. Central Asia
  -  3. Central Europe
  -  4. Southern Europe

Question ID : 59445932575

**Comprehension:**

Read the passage carefully and select the best answer to each question out of the given four alternatives.





The Silk Road was a network of trade routes which connected the East and West, and was central to the economic, cultural, political, and religious interactions between these regions from the 2nd century BCE to the 18th century. The Silk Road primarily refers to the land routes connecting East Asia and Southeast Asia with South Asia, Persia, the Arabian Peninsula, East Africa and Southern Europe. The Silk Road derives its name from the lucrative trade in silk carried out along its length, beginning in the Han dynasty in China.

The Silk Road trade played a significant role in the development of the civilizations of China, Korea, Japan, the Indian subcontinent, Iran, Europe, the Horn of Africa and Arabia, opening long-distance political and economic relations between the civilizations. Though silk was the major trade item exported from China, many other goods and ideas were exchanged, including religions (especially Buddhism), syncretic philosophies, sciences, and technologies like paper and gunpowder. So, in addition to economic trade, the Silk Road was a route for cultural trade among the civilizations along its network. Diseases, most notably plague, also spread along the Silk Road.

Some remnants of what was probably Chinese silk dating from 1070 BCE have been found in Ancient Egypt. The Great Oasis cities of Central Asia played a crucial role in the effective functioning of the Silk Road trade. The originating source seems sufficiently reliable, but silk degrades very rapidly, so it cannot be verified whether it was cultivated silk (which almost certainly came from China) or a type of wild silk, which might have come from the Mediterranean or Middle East. Archeological sites such as the Berel burial ground in Kazakhstan, confirmed that the nomadic Arimaspians were not only breeding horses for trade but also great craftsmen able to propagate exquisite art pieces along the Silk Road.

**SubQuestion No : 19**

**Q.19 According to the passage, The Silk Road primarily refers to the land routes connecting to one another. Which routes were not linked by it?**

- Ans
-  1. East Asia with Southern Europe
  -  2. East Asia with South Asia
  -  3. South America and South Africa
  -  4. East Asia with Persia

Question ID : 59445932577

**Comprehension:**

Read the passage carefully and select the best answer to each question out of the given four alternatives.

The Silk Road was a network of trade routes which connected the East and West, and was central to the economic, cultural, political, and religious interactions between these regions from the 2nd century BCE to the 18th century. The Silk Road primarily refers to the land routes connecting East Asia and Southeast Asia with South Asia, Persia, the Arabian Peninsula, East Africa and Southern Europe. The Silk Road derives its name from the lucrative trade in silk carried out along its length, beginning in the Han dynasty in China.

The Silk Road trade played a significant role in the development of the civilizations of China, Korea, Japan, the Indian subcontinent, Iran, Europe, the Horn of Africa and Arabia, opening long-distance political and economic relations between the civilizations. Though silk was the major trade item exported from China, many other goods and ideas were exchanged, including religions (especially Buddhism), syncretic philosophies, sciences, and technologies like paper and gunpowder. So, in addition to economic trade, the Silk Road was a route for cultural trade among the civilizations along its network. Diseases, most notably plague, also spread along the Silk Road.

Some remnants of what was probably Chinese silk dating from 1070 BCE have been found in Ancient Egypt. The Great Oasis cities of Central Asia played a crucial role in the effective functioning of the Silk Road trade. The originating source seems sufficiently reliable, but silk degrades very rapidly, so it cannot be verified whether it was cultivated silk (which almost certainly came from China) or a type of wild silk, which might have come from the Mediterranean or Middle East. Archeological sites such as the Berel burial ground in Kazakhstan, confirmed that the nomadic Arimaspians were not only breeding horses for trade but also great craftsmen able to propagate exquisite art pieces along the Silk Road.

**SubQuestion No : 20**

**Q.20 The Silk Road played a significant role in the development of some countries or regions. Which country or region was not involved in that development?**

- Ans**
- ☒ 1. Japan
  - ☒ 2. Korea
  - ☒ 3. Colombia
  - ☒ 4. Iran

Question ID : 59445932576

**Section : Hindi Language & Comprehension1**

**Q.1 निम्नलिखित में से "जागृति" का विलोम शब्द कौन-सा है?**

- Ans**
- ☒ 1. निर्वचन
  - ☒ 2. जंगम
  - ☒ 3. सुषुप्ति
  - ☒ 4. अज्ञेय

Question ID : 59445932588

Q.2 निम्नलिखित में से उपर्युक्त विकल्प का चयन कीजिए-

किसी कार्य का करने या होने का बोध कराने वाले शब्द \_\_\_\_\_ कहलाते हैं।

- Ans
- ☒ 1. विशेषण
  - ☒ 2. संख्या
  - ☒ 3. क्रिया
  - ☒ 4. काल

Question ID : 59445932582

Q.3 निम्नलिखित में से शब्द के शुद्ध रूप का चयन कीजिए-

- Ans
- ☒ 1. जीजिविषा
  - ☒ 2. जीजीविषा
  - ☒ 3. जीजीविषा
  - ☒ 4. जिजिविषा

Question ID : 59445932585

Q.4 निम्नलिखित में से नीचे दिए गए वाक्य के लिए एक शब्द का चयन कीजिए-

ऐसी चन्द्रिका (या शोभा) जिसे देखने या समझने वाला कोई न हो।

- Ans
- ☒ 1. अरण्य-चंद्रिका
  - ☒ 2. अरम्ब चंद्रीका
  - ☒ 3. चंद्रीका
  - ☒ 4. अनुमोदनीय चंद्रण

Question ID : 59445932593

Q.5 "वकील" निम्नलिखित में से किस भाषा का शब्द है?

- Ans
- ☒ 1. अरबी
  - ☒ 2. तुर्की
  - ☒ 3. अंग्रेजी
  - ☒ 4. फारसी

Question ID : 59445932580

Q.6 निम्नलिखित में से किस विकल्प में अपादान कारक की विभक्ति का प्रयोग किया गया है?

- Ans
- ☒ 1. रीता फल खाती है।
  - ☒ 2. बलराम पेड़ से गिरा।
  - ☒ 3. राधिका सितार बजा रही है।
  - ☒ 4. गोपाल ने राधा को बुलाया।

Question ID : 59445932594

Q.7 निम्नलिखित में से दिए गए शब्द-युग्म के सही अर्थ-भेद का चयन कीजिए-

अभिहित - अविहित

- Ans
- ☒ 1. अनुचित - आस्तिक
  - ☒ 2. अनुचित - कहा हुआ
  - ☒ 3. कहा हुआ - अनुचित
  - ☒ 4. आकार - खान

Question ID : 59445932587

Q.8 निम्नलिखित में से कौन-सा शब्द "तरी" का पर्यायवाची नहीं है?

- Ans
- ☒ 1. नाव
  - ☒ 2. पोत
  - ☒ 3. रति
  - ☒ 4. डोंगी

Question ID : 59445932591

Q.9 निम्नलिखित में से शुद्ध वर्तनी वाले शब्द का चयन कीजिए-

- Ans
- ☒ 1. गृहणी
  - ☒ 2. ग्रहिणी
  - ☒ 3. ग्रहणी
  - ☒ 4. गृहिणी

Question ID : 59445932586

Q.10 निम्नलिखित में से किस शब्द में उपसर्ग का प्रयोग किया गया है?

- Ans
- ☒ 1. अपनापन
  - ☒ 2. बुढ़ापा
  - ☒ 3. सुंदरता
  - ☒ 4. उपकार

Question ID : 59445932578

Q.11 निम्नलिखित में से वाक्य के प्रकार का चयन कीजिए-

वह इसीलिए बाजार गया क्योंकि उसे फल खरीदने थे।

- Ans
- ☒ 1. मिश्र वाक्य
  - ☒ 2. सरल वाक्य
  - ☒ 3. संयुक्त वाक्य
  - ☒ 4. विधिवचक वाक्य

Question ID : 59445932597

Q.12 निम्नलिखित में से दिए गए वाक्य के लिए एक शब्द का चयन कीजिए-

अन्न को पचाने वाली अग्नि\_\_\_\_\_

- Ans
- ☒ 1. धात्वाग्नि
  - ☒ 2. दावानल
  - ☒ 3. बड़वाग्नि
  - ☒ 4. जठराग्नि

Question ID : 59445932590

Q.13 हिन्दी साहित्य का \_\_\_\_\_ 'स्वर्ण युग' के नाम से जाना जाता है।

- Ans
- ☒ 1. भक्तिकाल
  - ☒ 2. छायावाद
  - ☒ 3. रीतिकाल
  - ☒ 4. आदिकाल

Question ID : 59445932595

Q.14 निम्नलिखित में से दिए गए शब्द के प्रकार का चयन कीजिए-

"सुवरन"

- Ans
- ☒ 1. तत्सम
  - ☒ 2. तद्भव
  - ☒ 3. विदेशज
  - ☒ 4. अर्धतत्सम

Question ID : 59445932579

Q.15 निम्नलिखित में से अशुद्ध वर्तनी वाले शब्द का चयन कीजिए-

- Ans
- ☒ 1. अंत्येष्टि
  - ☒ 2. अष्टांगयोग
  - ☒ 3. अनभिज्ञ
  - ☒ 4. अवाम

Question ID : 59445932592

Q.16 निम्नलिखित में से पुल्लिंग शब्द का चयन कीजिए-

- Ans
- ☒ 1. खुशक्रिस्मती
  - ☒ 2. खबर
  - ☒ 3. खुशी
  - ☒ 4. सौभाग्य

Question ID : 59445932596

Q.17 निम्नलिखित में से "आमरण" शब्द में कौन-सा समास है?

- Ans
- ☒ 1. द्वंद्व समास
  - ☒ 2. अव्ययीभाव समास
  - ☒ 3. तत्पुरुष समास
  - ☒ 4. द्विगु समास

Question ID : 59445932581

Q.18 निम्नलिखित में से कौन-सा शब्द विशेषण नहीं है?

- Ans
- ☒ 1. तुम
  - ☒ 2. काला
  - ☒ 3. शांत
  - ☒ 4. आगामी

Question ID : 59445932584

Q.19 निम्नलिखित में से "दिग्गज" शब्द में कौन-सी संधि है?

- Ans
- ☒ 1. व्यंजन संधि
  - ☒ 2. विसर्ग संधि
  - ☒ 3. अयादि संधि
  - ☒ 4. यण संधि

Question ID : 59445932583

Q.20 निम्नलिखित में से असंगत/बेमेल शब्द का चयन कीजिए-

- Ans
- ☒ 1. श्लेष अलंकार
  - ☒ 2. यमक अलंकार
  - ☒ 3. अर्थालंकार
  - ☒ 4. अनुप्रास अलंकार

Question ID : 59445932589

Section : Hindi Language & Comprehension2

Q.1 निम्नलिखित में से किस लोकोक्ति का अर्थ "अच्छी वस्तु कम होने पर भी मूल्यवान होती है, जबकि मामूली चीज अधिक होने पर भी कोई कीमत नहीं रखती" है?

- Ans
- ☒ 1. योगी था सो उठ गया आसन रहा भभूत
  - ☒ 2. चंदन की चुटकी भरी, गाड़ी भरा न काठ
  - ☒ 3. चोर लाठी दो जने और हम बाप पूत अकेले
  - ☒ 4. घर का जोगी जोगड़ा, आन गाँव का सिद्ध

Question ID : 59445932608

Q.2 निम्नलिखित में से लोकोक्ति का प्रचलित रूप कौन-सा है?

- Ans
- ☐ 1. कोयल खोय न खुजली, सौ मन साबुन लाई
  - ☐ 2. कोयल होय न सौ मन साबुन लाई उजली
  - ☐ 3. साबुन होय न उजली, सौ मन कोयल लाई
  - ☒ 4. कोयल होय न उजली, सौ मन साबुन लाई

Question ID : 59445932609

Q.3 निम्नलिखित में से नीचे दिए गए वाक्य के प्रकार का चयन कीजिए-

बाहर जाना मना है।

- Ans
- ☐ 1. विधानवाचक वाक्य
  - ☐ 2. संदेहवाचक वाक्य
  - ☒ 3. निषेधवाचक वाक्य
  - ☐ 4. आज्ञावाचक वाक्य

Question ID : 59445932599

Q.4 निम्नलिखित में से किस वाक्य में दीर्घ उच्चारण चिह्न का प्रयोग किया गया है?

- Ans
- ☒ 1. 16 मात्राएँ, । को एक मात्रा तथा S को 2 मात्रा माना जाता है।
  - ☐ 2. श्री राम ने कहा — सत्य के मार्ग पर चलना चाहिए।
  - ☐ 3. वचन के दो भेद हैं:-
  - ☐ 4. गाँधीजी ने कहा, "परीक्षा की घड़ी आ गई है .... हम करेंगे या मरेंगे" ।

Question ID : 59445932611

Q.5 निम्नलिखित में से बहुवचन शब्द का चयन कीजिए-

- Ans
- ☐ 1. गमला
  - ☐ 2. केला
  - ☒ 3. दर्शन
  - ☐ 4. तोता

Question ID : 59445932598

Q.6 निम्नलिखित में से मुहावरा "चिकने घड़े पर पानी पड़ना" का क्या अर्थ है?

- Ans
- ☐ 1. अनुनय-विनय करना
  - ☐ 2. बेमेल चीजों का योग
  - ☐ 3. मदांध होना
  - ☒ 4. उपदेश का कोई प्रभाव न पड़ना

Question ID : 59445932603



Q.7 निम्नलिखित में से दिए गए वाक्य में किस चिन्ह का प्रयोग किया गया है?

रात-दिन परिश्रम करने पर ही सफलता मिलती है।

Ans

- ☒ 1. योजक चिन्ह एवं पूर्णविराम चिन्ह
- ☐ 2. अर्द्धविराम चिन्ह एवं पूर्णविराम चिन्ह
- ☐ 3. उपविराम चिन्ह एवं अल्पविराम चिन्ह
- ☐ 4. योजक चिन्ह एवं उपविराम चिन्ह

Question ID : 59445932612

Q.8 निम्नलिखित में से मुहावरा "जीती मक्खी निगलना" का क्या अर्थ है?

Ans

- ☐ 1. वीरता दिखाना
- ☒ 2. जान-बूझकर गलत काम करना
- ☐ 3. साहसी आदमी
- ☐ 4. जितना जी चाहे खाना

Question ID : 59445932605

Q.9 रचना के आधार पर वाक्य के तीन भेद होते हैं, निम्नलिखित में से उस विकल्प का चयन कीजिए, जो रचना के आधार पर वाक्य का भेद नहीं है?

Ans

- ☐ 1. सरल वाक्य
- ☐ 2. मिश्र वाक्य
- ☒ 3. विस्मयादिवाचक वाक्य
- ☐ 4. संयुक्त वाक्य

Question ID : 59445932601

Q.10 निम्नलिखित में से किस लोकोक्ति का अर्थ "नुकसान होते समय जो बच जाए वही लाभ है" है?

Ans

- ☒ 1. आग लागते झोपड़ा, जो निकले सो लाभ
- ☐ 2. अकेला चना भाड़ नहीं फोड़ सकता
- ☐ 3. होनहार बिरवान के होत चीकने पात
- ☐ 4. पानी में रहकर मगरमच्छ से बैर

Question ID : 59445932606

Q.11 निम्नलिखित में से शुद्ध वर्तनी वाले वाक्य का चयन कीजिए-

Ans

- ☐ 1. मेरे बगीचे में एक सुन्दर चिड़िया आया है।
- ☐ 2. इस सलवार कमीज़ के साथ नीली दुपटा अच्छा लगेगा।
- ☐ 3. जब उसको होश आई तो उसने अपने माता- पिता से बात करी।
- ☒ 4. थोड़ी और चेष्टा करो।

Question ID : 59445932602

Q.12 निम्नलिखित में से किस मुहावरे का अर्थ "अनायास लाभ होना" है?

- Ans
- ☒ 1. छाती दूनी होना
  - ☒ 2. छींका टूटना
  - ☒ 3. जमीन आसमान एक करना
  - ☒ 4. छः पाँच करना

Question ID : 59445932604

Q.13 निम्नलिखित में से नीचे दिए गए वाक्य के वाच्य प्रकार का चयन कीजिए-

आरती ने पत्र लिखा।

- Ans
- ☒ 1. कर्मवाच्य
  - ☒ 2. क्रियावाच्य
  - ☒ 3. भाववाच्य
  - ☒ 4. कर्तृवाच्य

Question ID : 59445932600

Q.14 निम्नलिखित में से दिए गए वाक्य में किस चिन्ह का प्रयोग नहीं किया गया है?

तुलसीदास ने सत्य कहा है, "पराधीन सपनेहु सुख नहीं।"

- Ans
- ☒ 1. अर्द्धविराम चिन्ह
  - ☒ 2. पूर्ण विराम चिन्ह
  - ☒ 3. अवतरण चिन्ह
  - ☒ 4. अल्पविराम चिन्ह

Question ID : 59445932610

Q.15 निम्नलिखित में से लोकोक्ति "चील के घोंसले में माँस कहाँ" का क्या अर्थ है?

- Ans
- ☒ 1. ताकतवर आदमी से दो लोग भी हार जाते हैं
  - ☒ 2. किसी तरह की जिम्मेदारी न होना
  - ☒ 3. जहाँ कुछ भी बचने की संभावना न हो
  - ☒ 4. बहुत कम अंतर होना।

Question ID : 59445932607

**Comprehension:**

निम्नलिखित गद्यांश का ध्यानपूर्वक अध्ययन कर प्रश्नों के उत्तर दीजिए-

तुलसी जैसा कवि काव्य की विशुद्ध, मनोमयी, कल्पना-प्रवण तथा श्रृंगारात्मक भावभूमियों के प्रति उत्साही नहीं हो सकता। उनका संत-हृदय परम कारुणिक राम के प्रति ही उन्मुख हो सकता है, जो जीवन के धर्ममय सौंदर्य, मर्यादापूर्ण शील और आत्मिक शौर्य के प्रतीक हैं।

विजय-रथ के रूपक में उन्होंने संत जीवन की रूपरेखा उभारी है और अपनी रामकथा को इसी संतत्व की चरितार्थता बना दिया है। उनका काव्य भारतीय जीवन की सबसे बड़ी आकांक्षा मर्यादित जीवन-चर्या अथवा 'संत-रहनि' को वाणी देता है। धर्ममय जीवन की आकांक्षा भारतीय संस्कृति का वैशिष्ट्य है। तुलसी के काव्य में धर्म का अनाविल, अनावरित और अक्षुण्ण रूप ही प्रकट हुआ है। तुलसी के काव्य में धर्म अपने पंकरहित, निष्कलंकित, खुले रूप में, अक्षुण्ण या अपने संपूर्ण रूप में प्रकट हुआ है। काव्य में धर्म का जो रूप है, उसके मूल में लोक-कल्याण की भावना भी समाहित किए हुए है।

मध्ययुग की आध्यात्मिकता का प्रतिनिधित्व करते हुए भी उनका काव्य भारतीय आत्मा के चिरंतन सौंदर्य का प्रतिनिधि है, जो सत्य, तप, करुणा और मैत्री में ही आरोहण के देवधर्मी मूल्यों को अनावृत करता है। उनके काव्य में हमें श्रेष्ठ कवित्व ही नहीं मिलता, उसके आधार पर हम संत-कवित्व की रूपरेखा भी निर्धारित कर सकते हैं। भक्ति उनके संतत्व की आंतरिक भाव-साधना है। इस भाव-साधना की वाणी की अप्रतिम क्षमता देकर उन्होंने निष्कंप दीपशिखा की भाँति अपनी काव्य-कला को निःसंग और निवैयक्तिक दीप्ति से भरा है।

तुलसी के काव्य में आध्यात्मिकता का प्रतिनिधित्व है, जिसमें भारतीय काव्य-आत्मा के चिरंतन सौंदर्य के दर्शन होते हैं। तुलसी के काव्य में उनके संतत्व और भक्ति-साधना का मणिकांचन योग है। इसी भक्ति-साधना की वाणी को अद्वितीय क्षमता से युक्त करके तुलसी ने उसे उस दीपशिखा के समान प्रज्वलित कर दिया है, जिसकी लौ युगों-युगों तक प्रकाश रहेगी।

**SubQuestion No : 16**

**Q.16 उपरोक्त गद्यांश में तुलसी के संदर्भ में निम्नलिखित में से कौन-सा विकल्प सही है?**

**Ans**

- ☒ 1. विजय-रथ के रूपक में तुलसी ने संत जीवन की रूपरेखा उभारी है और अपनी रामकथा को इसी संतत्व की चरितार्थता बना दिया है।
- ☐ 2. भक्ति-साधना की रचना को द्वितीय क्षमता से युक्त करके राम ने उसे उस दीपशिखा के समान प्रज्वलित कर दिया है।
- ☐ 3. भाव-साधना की वाणी की प्रतिम क्षमता लेकर उन्होंने निष्कंप दीपशिखा की भाँति अपनी काव्य-कला को निःसंग और निवैयक्तिक दीप्ति से अपूर्ण किया है।
- ☐ 4. भक्ति तुलसी के संतत्व की आंतरिक भाव-साधना नहीं है।

Question ID : 59445932616

**Comprehension:**

निम्नलिखित गद्यांश का ध्यानपूर्वक अध्ययन कर प्रश्नों के उत्तर दीजिए-

तुलसी जैसा कवि काव्य की विशुद्ध, मनोमयी, कल्पना-प्रवण तथा श्रृंगारात्मक भावभूमियों के प्रति उत्साही नहीं हो सकता। उनका संत-हृदय परम कारुणिक राम के प्रति ही उन्मुख हो सकता है, जो जीवन के धर्ममय सौंदर्य, मर्यादापूर्ण शील और आत्मिक शौर्य के प्रतीक हैं।

विजय-रथ के रूपक में उन्होंने संत जीवन की रूपरेखा उभारी है और अपनी रामकथा को इसी संतत्व की चरितार्थता बना दिया है। उनका काव्य भारतीय जीवन की सबसे बड़ी आकांक्षा मर्यादित जीवन-चर्या अथवा 'संत-रहनि' को वाणी देता है। धर्ममय जीवन की आकांक्षा भारतीय संस्कृति का वैशिष्ट्य है। तुलसी के काव्य में धर्म का अनाविल, अनावरित और अक्षुण्ण रूप ही प्रकट हुआ है। तुलसी के काव्य में धर्म अपने पंकरहित, निष्कलंकित, खुले रूप में, अक्षुण्ण या अपने संपूर्ण रूप में प्रकट हुआ है। काव्य में धर्म का जो रूप है, उसके मूल में लोक-कल्याण की भावना भी समाहित किए हुए है।

मध्ययुग की आध्यात्मिकता का प्रतिनिधित्व करते हुए भी उनका काव्य भारतीय आत्मा के चिरंतन सौंदर्य का प्रतिनिधि है, जो सत्य, तप, करुणा और मैत्री में ही आरोहण के देवधर्मी मूल्यों को अनावृत करता है। उनके काव्य में हमें श्रेष्ठ कवित्व ही नहीं मिलता, उसके आधार पर हम संत-कवित्व की रूपरेखा भी निर्धारित कर सकते हैं। भक्ति उनके संतत्व की आंतरिक भाव-साधना है। इस भाव-साधना की वाणी की अप्रतिम क्षमता देकर उन्होंने निष्कंप दीपशिखा की भाँति अपनी काव्य-कला को निःसंग और निवैयक्तिक दीप्ति से भरा है।

तुलसी के काव्य में आध्यात्मिकता का प्रतिनिधित्व है, जिसमें भारतीय काव्य-आत्मा के चिरंतन सौंदर्य के दर्शन होते हैं।

तुलसी के काव्य में उनके संतत्व और भक्ति-साधना का मणिकांचन योग है। इसी भक्ति-साधना की वाणी को अद्वितीय क्षमता से युक्त करके तुलसी ने उसे उस दीपशिखा के समान प्रज्वलित कर दिया है, जिसकी लौ युगों-युगों तक प्रकाश रहेगी।

**SubQuestion No : 17**

**Q.17 निम्नलिखित में से कौन-सा शब्द "अवधूत" का पर्यायवाची नहीं है?**

Ans

- ☒ 1. मुनि
- ☒ 2. महात्मा
- ☒ 3. साधु
- ☒ 4. असाधु

Question ID : 59445932614

**Comprehension:**

निम्नलिखित गद्यांश का ध्यानपूर्वक अध्ययन कर प्रश्नों के उत्तर दीजिए-

तुलसी जैसा कवि काव्य की विशुद्ध, मनोमयी, कल्पना-प्रवण तथा श्रृंगारात्मक भावभूमियों के प्रति उत्साही नहीं हो सकता। उनका संत-हृदय परम कारुणिक राम के प्रति ही उन्मुख हो सकता है, जो जीवन के धर्ममय सौंदर्य, मर्यादापूर्ण शील और आत्मिक शौर्य के प्रतीक हैं।

विजय-रथ के रूपक में उन्होंने संत जीवन की रूपरेखा उभारी है और अपनी रामकथा को इसी संतत्व की चरितार्थता बना दिया है। उनका काव्य भारतीय जीवन की सबसे बड़ी आकांक्षा मर्यादित जीवन-चर्या अथवा 'संत-रहनि' को वाणी देता है। धर्ममय जीवन की आकांक्षा भारतीय संस्कृति का वैशिष्ट्य है। तुलसी के काव्य में धर्म का अनाविल, अनावरित और अक्षुण्ण रूप ही प्रकट हुआ है। तुलसी के काव्य में धर्म अपने पंकरहित, निष्कलंकित, खुले रूप में, अक्षुण्ण या अपने संपूर्ण रूप में प्रकट हुआ है। काव्य में धर्म का जो रूप है, उसके मूल में लोक-कल्याण की भावना भी समाहित किए हुए है।

मध्ययुग की आध्यात्मिकता का प्रतिनिधित्व करते हुए भी उनका काव्य भारतीय आत्मा के चिरंतन सौंदर्य का प्रतिनिधि है, जो सत्य, तप, करुणा और मैत्री में ही आरोहण के देवधर्मी मूल्यों को अनावृत करता है। उनके काव्य में हमें श्रेष्ठ कवित्व ही नहीं मिलता, उसके आधार पर हम संत-कवित्व की रूपरेखा भी निर्धारित कर सकते हैं। भक्ति उनके संतत्व की आंतरिक भाव-साधना है। इस भाव-साधना की वाणी की अप्रतिम क्षमता देकर उन्होंने निष्कंप दीपशिखा की भाँति अपनी काव्य-कला को निःसंग और निवैयक्तिक दीप्ति से भरा है।

तुलसी के काव्य में आध्यात्मिकता का प्रतिनिधित्व है, जिसमें भारतीय काव्य-आत्मा के चिरंतन सौंदर्य के दर्शन होते हैं।

तुलसी के काव्य में उनके संतत्व और भक्ति-साधना का मणिकांचन योग है। इसी भक्ति-साधना की वाणी को अद्वितीय क्षमता से युक्त करके तुलसी ने उसे उस दीपशिखा के समान प्रज्वलित कर दिया है, जिसकी लौ युगों-युगों तक प्रकाश रहेगी।

**SubQuestion No : 18**

**Q.18 निम्नलिखित में से उपरोक्त गद्यांश का उचित शीर्षक बताइये-**

Ans

- ☒ 1. काव्य की विशुद्धताएं।
- ☒ 2. संत कवि तुलसीदास का काव्य के प्रति प्रेम।
- ☒ 3. संत कवि तुलसीदास की रचनाएं।
- ☒ 4. जीवन के धर्ममय सौंदर्य।

Question ID : 59445932618

**Comprehension:**

निम्नलिखित गद्यांश का ध्यानपूर्वक अध्ययन कर प्रश्नों के उत्तर दीजिए-

तुलसी जैसा कवि काव्य की विशुद्ध, मनोमयी, कल्पना-प्रवण तथा श्रृंगारात्मक भावभूमियों के प्रति उत्साही नहीं हो सकता। उनका संत-हृदय परम कारुणिक राम के प्रति ही उन्मुख हो सकता है, जो जीवन के धर्ममय सौंदर्य, मर्यादापूर्ण शील और आत्मिक शौर्य के प्रतीक हैं।

विजय-रथ के रूपक में उन्होंने संत जीवन की रूपरेखा उभारी है और अपनी रामकथा को इसी संतत्व की चरितार्थता बना दिया है। उनका काव्य भारतीय जीवन की सबसे बड़ी आकांक्षा मर्यादित जीवन-चर्या अथवा 'संत-रहनि' को वाणी देता है। धर्ममय जीवन की आकांक्षा भारतीय संस्कृति का वैशिष्ट्य है। तुलसी के काव्य में धर्म का अनाविल, अनावरित और अक्षुण्ण रूप ही प्रकट हुआ है। तुलसी के काव्य में धर्म अपने पंकरहित, निष्कलंकित, खुले रूप में, अक्षुण्ण या अपने संपूर्ण रूप में प्रकट हुआ है। काव्य में धर्म का जो रूप है, उसके मूल में लोक-कल्याण की भावना भी समाहित किए हुए है।

मध्ययुग की आध्यात्मिकता का प्रतिनिधित्व करते हुए भी उनका काव्य भारतीय आत्मा के चिरंतन सौंदर्य का प्रतिनिधि है, जो सत्य, तप, करुणा और मैत्री में ही आरोहण के देवधर्मी मूल्यों को अनावृत करता है। उनके काव्य में हमें श्रेष्ठ कवित्व ही नहीं मिलता, उसके आधार पर हम संत-कवित्व की रूपरेखा भी निर्धारित कर सकते हैं। भक्ति उनके संतत्व की आंतरिक भाव-साधना है। इस भाव-साधना की वाणी की अप्रतिम क्षमता देकर उन्होंने निष्कंप दीपशिखा की भाँति अपनी काव्य-कला को निःसंग और निवैयक्तिक दीप्ति से भरा है।

तुलसी के काव्य में आध्यात्मिकता का प्रतिनिधित्व है, जिसमें भारतीय काव्य-आत्मा के चिरंतन सौंदर्य के दर्शन होते हैं।

तुलसी के काव्य में उनके संतत्व और भक्ति-साधना का मणिकांचन योग है। इसी भक्ति-साधना की वाणी को अद्वितीय क्षमता से युक्त करके तुलसी ने उसे उस दीपशिखा के समान प्रज्वलित कर दिया है, जिसकी लौ युगों-युगों तक प्रकाश रहेगी।

**SubQuestion No : 19**

**Q.19 उपरोक्त गद्यांश के अनुसार तुलसी के काव्य में धर्म निम्नलिखित में से किस रूप में प्रकट हुआ है?**

Ans



1. निष्कलंकित रूप में प्रकट हुआ है।



2. निष्कलंकित, खुले रूप में, अक्षुण्ण या अपने संपूर्ण रूप में प्रकट हुआ है।



3. खुले रूप में प्रकट हुआ है।



4. अक्षुण्ण या अपने संपूर्ण रूप में प्रकट हुआ है।

Question ID : 59445932617

**Comprehension:**

निम्नलिखित गद्यांश का ध्यानपूर्वक अध्ययन कर प्रश्नों के उत्तर दीजिए-

तुलसी जैसा कवि काव्य की विशुद्ध, मनोमयी, कल्पना-प्रवण तथा श्रृंगारात्मक भावभूमियों के प्रति उत्साही नहीं हो सकता। उनका संत-हृदय परम कारुणिक राम के प्रति ही उन्मुख हो सकता है, जो जीवन के धर्ममय सौंदर्य, मर्यादापूर्ण शील और आत्मिक शौर्य के प्रतीक हैं।

विजय-रथ के रूपक में उन्होंने संत जीवन की रूपरेखा उभारी है और अपनी रामकथा को इसी संतत्व की चरितार्थता बना दिया है। उनका काव्य भारतीय जीवन की सबसे बड़ी आकांक्षा मर्यादित जीवन-चर्या अथवा 'संत-रहनि' को वाणी देता है। धर्ममय जीवन की आकांक्षा भारतीय संस्कृति का वैशिष्ट्य है। तुलसी के काव्य में धर्म का अनाविल, अनावरित और अक्षुण्ण रूप ही प्रकट हुआ है। तुलसी के काव्य में धर्म अपने पंकरहित, निष्कलंकित, खुले रूप में, अक्षुण्ण या अपने संपूर्ण रूप में प्रकट हुआ है। काव्य में धर्म का जो रूप है, उसके मूल में लोक-कल्याण की भावना भी समाहित किए हुए है।

मध्ययुग की आध्यात्मिकता का प्रतिनिधित्व करते हुए भी उनका काव्य भारतीय आत्मा के चिरंतन सौंदर्य का प्रतिनिधि है, जो सत्य, तप, करुणा और मैत्री में ही आरोहण के देवधर्मी मूल्यों को अनावृत करता है। उनके काव्य में हमें श्रेष्ठ कवित्व ही नहीं मिलता, उसके आधार पर हम संत-कवित्व की रूपरेखा भी निर्धारित कर सकते हैं। भक्ति उनके संतत्व की आंतरिक भाव-साधना है। इस भाव-साधना की वाणी की अप्रतिम क्षमता देकर उन्होंने निष्कंप दीपशिखा की भाँति अपनी काव्य-कला को निःसंग और निवैयक्तिक दीप्ति से भरा है।

तुलसी के काव्य में आध्यात्मिकता का प्रतिनिधित्व है, जिसमें भारतीय काव्य-आत्मा के चिरंतन सौंदर्य के दर्शन होते हैं।

तुलसी के काव्य में उनके संतत्व और भक्ति-साधना का मणिकांचन योग है। इसी भक्ति-साधना की वाणी को अद्वितीय क्षमता से युक्त करके तुलसी ने उसे उस दीपशिखा के समान प्रज्वलित कर दिया है, जिसकी लौ युगों-युगों तक प्रकाश रहेगी।

**SubQuestion No : 20**

**Q.20 उपरोक्त गद्यांश के अनुसार \_\_\_\_\_ का संत-हृदय, परम कारुणिक राम के प्रति ही उन्मुख हो सकता है, जो जीवन के धर्ममय सौंदर्य, मर्यादापूर्ण शील और आत्मिक शौर्य के प्रतीक हैं।**

Ans



1. धर्म



2. तुलसी



3. राम



4. काव्यक

Question ID : 59445932615

