

Catalog (English PDF)

| | |
|---|-----|
| DSSSB Junior Assistant Question Paper 21.8.2021 2nd Shift in English..... | 1 |
| DSSSB Junior Assistant Question Paper 31.8.2021 1st Shift in English..... | 59 |
| DSSSB Junior Assistant Question Paper 31.8.2021 2nd Shift in English..... | 107 |
| DSSSB Junior Assistant Question Paper 31.8.2021 3rd Shift in English..... | 156 |

DSSSB Junior Assistant Question Paper 2021

| | |
|------------------|--------------------------------------|
| Participant ID | Join Telegram Group "HaryanaJobs.in" |
| Participant Name | |
| Test Center Name | |
| Test Date | 21/08/2021 |
| Test Time | 12:30 PM - 2:30 PM |
| Subject | Junior Assistant |

Section : General Ability1

Q.1 If BRAIN is coded as 4-20-3-11-16, then what is the code for CLERK?

- Ans
- ☐ A. 3-12-5-18-11
 - ☐ B. 4-13-6-19-12
 - ☐ C. 6-15-8-21-14
 - ☒ D. 5-14-7-20-13

Question ID : 2752285642

Q.2 Select the option that is related to the third term on the same basis as the second term is related to the first term.

Cricket : 11 :: Football : ?

- Ans
- ☒ A. 11
 - ☐ B. 12
 - ☐ C. 10
 - ☐ D. 14

Question ID : 2752285638

Q.3 If A @ B means A is the father of B, A + B means A is the wife of B and A - B means A is the mother of B, then what does P + Q @ R - S mean?

- Ans
- ☐ A. P is the wife of S
 - ☒ B. P is the grandmother of S
 - ☐ C. P is the sister of S
 - ☐ D. P is the mother of S

Question ID : 2752285646

Q.4 Out of the given options, three are similar in a certain manner. However, one option is NOT like the other three. Select the option which is different from the rest.

- Ans
- ☒ A. VSY
 - ☒ B. KHN
 - ☒ C. PMS
 - ☒ D. UVE

Question ID : 2752285637

Q.5 In a certain code language,
bi zi si mi means let's wait for her,
fi li zi means come wait here,
mi di bi ti means let's play with her,
what is the code for 'for'?

- Ans
- ☒ A. bi
 - ☒ B. zi
 - ☒ C. mi
 - ☒ D. si

Question ID : 2752285645

Q.6 Find the missing term in the following series:

RPT, _____, ZXB, DBF, HFJ

- Ans
- ☒ A. USY
 - ☒ B. VSZ
 - ☒ C. VTX
 - ☒ D. URP

Question ID : 2752285632

Q.7 Select the pair that is related on the same basis to the pair given in the question.

PDN : SAQ :: ?

- Ans
- ☒ A. SHB : VEE
 - ☒ B. TPA : VNB
 - ☒ C. KMC : MJE
 - ☒ D. LSR : OQW

Question ID : 2752285640

Q.8 उस जोड़ी का चयन करें जो प्रश्न में दी गई जोड़ी से समान प्रकार से संबंधित है।

स्टीयरिंग : कार :: ?

- Ans
- ☐ A. पंखा : छत
 - ☐ B. दिवार : घड़ी
 - ☐ C. फर्नीचर : बढ़ई
 - ☒ D. पहिया : गाड़ी

Question ID : 2752285641

Q.9 Arrange the given words in the sequence in which they occur in the dictionary.

1. HACKLED
2. HACKER
3. HABITAT
4. HALOGEN
5. HALFWAY

- Ans
- ☐ A. 3, 1, 2, 4, 5
 - ☐ B. 2, 1, 3, 4, 5
 - ☐ C. 1, 2, 4, 5, 3
 - ☒ D. 3, 2, 1, 5, 4

Question ID : 2752285631

Q.10 Select the option that is related to the third term on the same basis as the second term is related to the first term.

OVY : SZC :: FRW : ?

- Ans
- ☒ A. JVA
 - ☐ B. GUZ
 - ☐ C. KVV
 - ☐ D. HVY

Question ID : 2752285639

Q.11 Manisha and Sanjana are good in Geography and Hindi. Akansha and Manisha are good in Hindi and Chemistry. Akansha, Preksha and Naman are good in Chemistry and English. Naman and Akansha are good in Chemistry and Maths. Preksha and Sanjana are good in English and Geography. Who among the following is good in Chemistry, English and Maths but not in Hindi?

- Ans
- ☐ A. Manisha
 - ☐ B. Akansha
 - ☒ C. Naman
 - ☐ D. Preksha

Question ID : 2752285649

Q.12 दिए गए विकल्पों में से, तीन एक निश्चित तरीके से समान हैं। हालाँकि, एक विकल्प अन्य तीन की तरह नहीं है। उस विकल्प का चयन करें जो अन्य से अलग है।

- Ans
- ☐ A. खरहा : बिल
 - ☐ B. पागल : पागलखाना
 - ☐ C. मकड़ी : जाल
 - ☒ D. घोड़ा : बीजाश्च

Question ID : 2752285636

Q.13 Out of the given options, three are similar in a certain manner. However, one option is NOT like the other three. Select the option which is different from the rest.

- Ans
- ☐ A. ND : RB
 - ☒ B. WH : ZE
 - ☐ C. PS : TQ
 - ☐ D. FN : JL

Question ID : 2752285635

Q.14 Choose the wrong term in the following series:

CEZ, DGY, EIX, FKW, GNV

- Ans
- ☒ A. GNV
 - ☐ B. DGY
 - ☐ C. CEZ
 - ☐ D. FKW

Question ID : 2752285633

Q.15 If MEAN = 32, FLAKE = 50, ANIMAL = 72, then what is the code for SCENARIO?

- Ans
- ☐ A. 72
 - ☐ B. 64
 - ☒ C. 128
 - ☐ D. 112

Question ID : 2752285643

Q.16 दिए गए विकल्पों में से, तीन एक निश्चित तरीके से समान हैं। हालाँकि, एक विकल्प अन्य तीन की तरह नहीं है। उस विकल्प का चयन करें जो अन्य से अलग है।

- Ans
- ☐ A. कबूतर
 - ☐ B. कौआ
 - ☐ C. गौरैया
 - ☒ D. शतुरमुर्ग

Question ID : 2752285634

Q.17 Find the wrong term in the following series:

SO, GK, BF, WA

- Ans ☒ A. SO
☐ B. WA
☐ C. BF
☐ D. GK

Question ID : 2752285630

Q.18 In a queue, Manish is 5th from the left and Sachin is 7th from the right. Both of them interchange their positions and now Manish becomes 12th from the left. How many people were there in the queue?

- Ans ☐ A. 16
☐ B. 19
☒ C. 18
☐ D. 24

Question ID : 2752285648

Q.19 Lalita is shorter than Gagan but taller than Prerna. Binita is taller than Gagan but shorter than Danish. Who is the shortest of all?

- Ans ☐ A. Danish
☐ B. Lalita
☒ C. Prerna
☐ D. Gagan

Question ID : 2752285647

Q.20 If DRONE is coded as FUSSK, then what is the code for FLASH?

- Ans ☐ A. HNCUJ
☐ B. HODYM
☒ C. HOEXN
☐ D. HPDY0

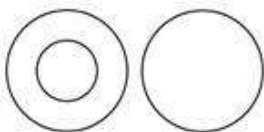
Question ID : 2752285644

Section : General Ability2

Q.1 Which of the following Venn diagrams best represents the relationship between reptile, snake and rat ?

Ans


✓ A.



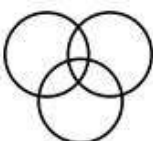
✗ B.



✗ C.



✗ D.



Question ID : 2752285660

Q.2 Which two numbers should be interchanged to make the below equation mathematically correct?

$$62 + 6 \times 105 \div 3 - 25 = 247$$

Ans

✗ A. 62, 25

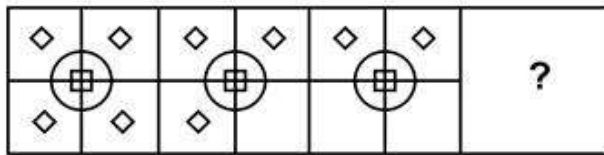
✗ B. 62, 6

✓ C. 6, 105

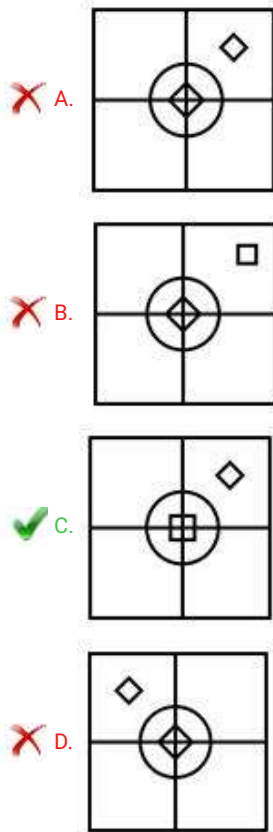
✗ D. 6, 25

Question ID : 2752285654

Q.3 Which of the following answer figure completes the series of the question figure?



Ans



www.HaryanaJobs.in

Question ID : 2752285664

Q.4 In the question a statement is given, followed by two arguments, I and II. You have to consider the statements to be true even if it seems to be at variance from commonly known facts. You have to decide which of the given conclusions, if any, follows from the given statement.

Statement: Should India support all the decisions and policies made by Pakistan.

Arguments:

I. Yes, as this is the only way to maintain peace among both the nations.

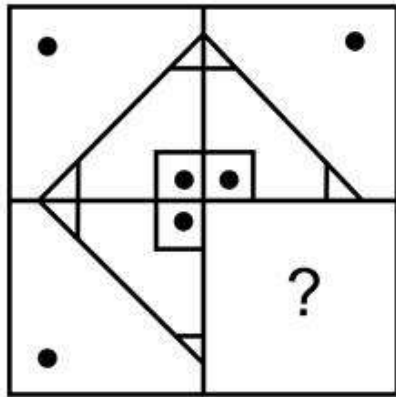
II. No, as India should have it's own opinion on the decisions and policies made by Pakistan as some may be correct and some may be incorrect.

Ans

- ☒ A. Either argument I or argument II is strong
- ☒ B. Only argument II is strong
- ☒ C. Only argument I is strong
- ☒ D. Neither argument I nor argument II is strong

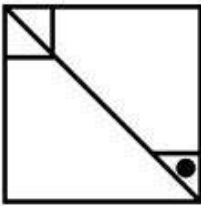
Question ID : 2752285650

Q.5 Which of the following answer figure patterns can be combined to make the question figure?

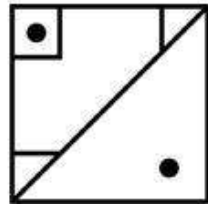


Ans

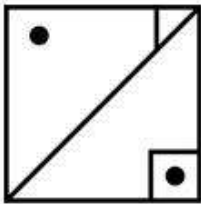
☒ A.



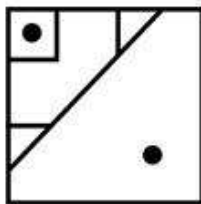
☒ B.



☒ C.



☒ D.



www.HaryanaJobs.in

Q.6 In the question two statements are given, followed by two conclusions, I and II. You have to consider the statements to be true even if it seems to be at variance from commonly known facts. You have to decide which of the given conclusions, if any, follows from the given statements.

Statement 1 : Some schools are colleges.

Statement 2 : Some colleges are universities.

Conclusion I : Some schools are universities.

Conclusion II : No university is school.

Ans



A. Either conclusion I or II follows



B. Only conclusion II follows



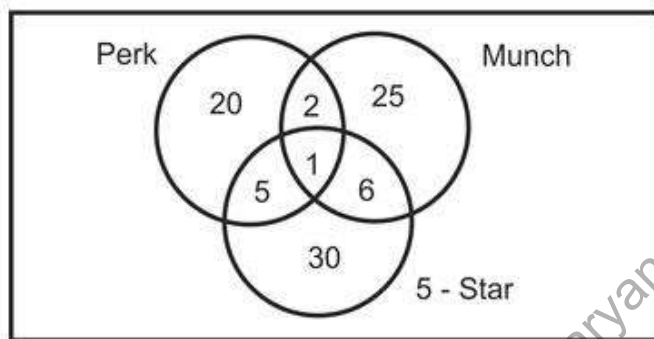
C. Only conclusion I follows



D. Both conclusions I and II follows

Question ID : 2752285651

Q.7 The given Venn diagram shows the number of students in a class who likes 5 star, Perk and Munch. There are 100 students in the class. How many of these students do not like any of them?



Ans



A. 10



B. 11



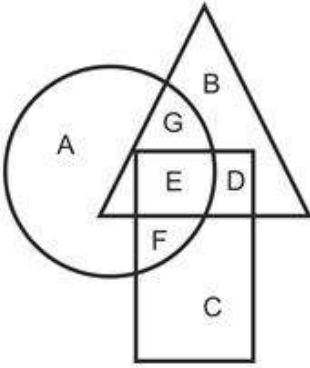
C. 12



D. 5

Question ID : 2752285661

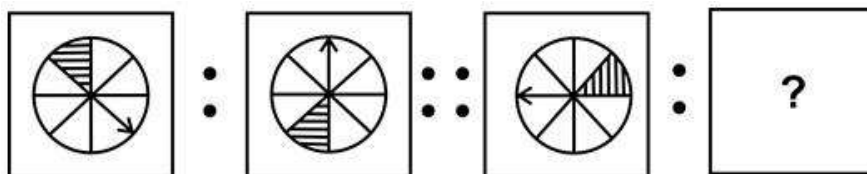
Q.8 In the following figure, triangle represents animals, rectangle represents four legged, circle represents herbivorous. Which area represents four legged animals who are herbivorous?



- Ans
- ☒ A. F
 - ☒ B. E
 - ☒ C. G
 - ☒ D. D

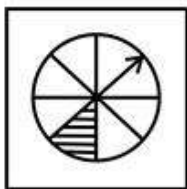
Question ID : 2752285659

Q.9 Select the option that is related to the third image on the same basis as the second image is related to the first image.

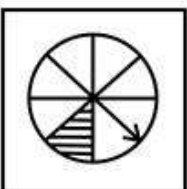


Ans

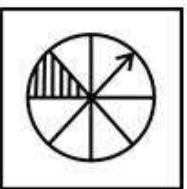
☒ A.



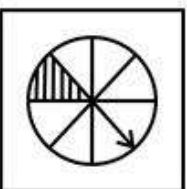
☒ B.



☒ C.



☒ D.



www.HaryanaJobs.in

Question ID : 2752285663

Q.10 Find the wrong number in the following number series:

0.0384, 0.192, 0.96, 4.6, 24

Ans

☒ A. 4.6

☒ B. 0.96

☒ C. 0.192

☒ D. 0.0384

Question ID : 2752285657

Q.11 In the question one statement is given, followed by two reasons, I and II. You have to consider the statements to be true even if it seems to be at variance from commonly known facts. You have to decide which of the given reasons, if any, follows from the given statement.

Statement : The prices of food grains in the last quarter have increased substantially.

Reason I : There was a shortage of supply because of poor rainfall during the last quarter.

Reason II : Farmers have become greedy and they want more money.

Ans ☒ A. Both conclusions I and II follows

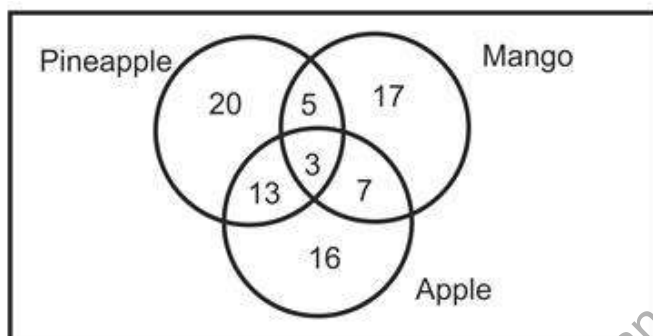
☒ B. Only reason I follows

☒ C. Neither conclusion I nor II follows

☒ D. Only reason II follows

Question ID : 2752285653

Q.12 The given Venn diagram shows the number of children who love Pineapple, Apple and Mango. How many of these children only like any one fruit?



Ans ☒ A. 37

☒ B. 25

☒ C. 28

☒ D. 53

Question ID : 2752285658

Q.13 If $16\$8 = 36$; $17\$3 = 30$; $22\$4 = 39$; then find the value of $32\$6 = ?$

Ans ☒ A. 57

☒ B. 54

☒ C. 76

☒ D. 38

Question ID : 2752285655

Q.14 In the question one statement is given, followed by two conclusions, I and II. You have to consider the statements to be true even if it seems to be at variance from commonly known facts. You have to decide which of the given conclusions, if any, follows from the given statement.

Statement : Aman is shortlisted for the interview process based on his application for the post of Investment Analyst at BCD Firm.

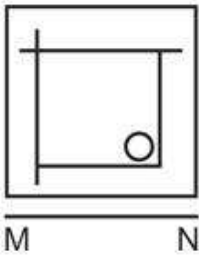
Conclusion I : Aman will be selected as the Investment Analyst at BCD Firm.

Conclusion II : Aman will not be selected as the Investment Analyst at BCD Firm.

- Ans
- ☒ A. Only conclusion II follows
 - ☒ B. Either conclusion I or II follows
 - ☒ C. Only conclusion I follows
 - ☒ D. Neither conclusion I nor II follows

Question ID : 2752285652

Q.15 If a mirror is placed on the line MN, then which of the answer figures is the right image of the given figure?



Ans

- ☒ A.
- ☒ B.
- ☒ C.
- ☒ D.

Question ID : 2752285668

Q.16 Out of the given options, three are similar in a certain manner. However, one option is NOT like the other three. Select the option which is different from the rest.

Ans ☒ A. 14-182

☐ B. 16-272

☐ C. 22-506

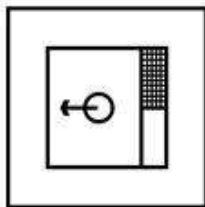
☐ D. 18-342

Question ID : 2752285656

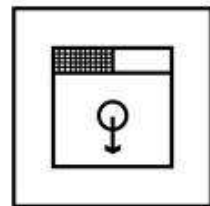
Q.17 Out of the given options, three are similar in a certain manner. However, one option is NOT like the other three. Select the option which is different from the rest.

Ans

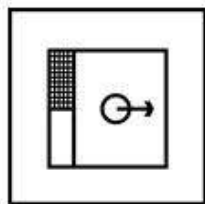
☐ A.



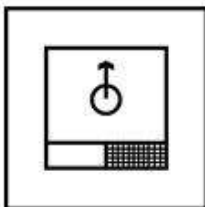
☐ B.



☒ C.



☐ D.



Question ID : 2752285665


Q.18 Find the missing figure in the following matrix.

| | | |
|----|----|----|
| 17 | 19 | 23 |
| 24 | 36 | 48 |
| 25 | ? | 39 |

- Ans
- ☒ A. 17
 - ☒ B. 37
 - ☒ C. 31
 - ☒ D. 55

Question ID : 2752285662

Q.19 Which of the following cube in the answer figure can be made based on the unfolded cube in the question figure?

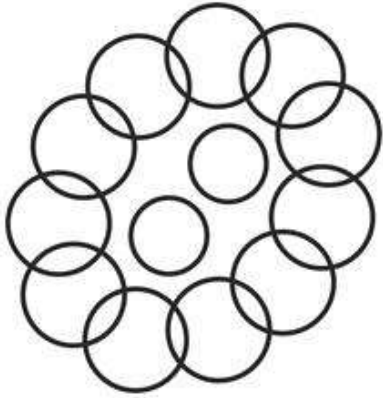


Ans

- ☒ A.
- ☒ B.
- ☒ C.
- ☒ D.

Question ID : 2752285666

Q.20 How many circles are there in the given question figure?



- Ans
- ☒ A. 19
 - ☒ B. 15
 - ☒ C. 11
 - ☒ D. 13

Question ID : 2752285669

Section : General Awareness1

Q.1 Which among the following components is added to the Gross Domestic Product to arrive at the Net National Product?

- Ans
- ☒ A. Tax payments
 - ☒ B. Depreciation
 - ☒ C. Income from Abroad
 - ☒ D. Transfer payments

Question ID : 2752285675

Q.2 Ferns belongs to which of the following divisions of the plant kingdom?

- Ans
- ☒ A. Gymnosperms
 - ☒ B. Thallophyta
 - ☒ C. Angiosperms
 - ☒ D. Pteridophyta

Question ID : 2752285681

Q.3 The Indian Ocean is bounded by _____ in the east.

- Ans
- ☒ A. Antarctica
 - ☒ B. Australia
 - ☒ C. Africa
 - ☒ D. Iran

Question ID : 2752285685

Q.4 Nepal shares its borders with which of the following Indian states?

- Ans ☒ A. West Bengal
☐ B. Punjab
☐ C. Rajasthan
☐ D. Mizoram

Question ID : 2752285684

Q.5 The Marfa music is associated with which of the following cities?

- Ans ☐ A. Kolkata
☐ B. Nagpur
☐ C. Bangalore
☒ D. Hyderabad

Question ID : 2752285671

Q.6 Which among the following banks is not a public sector bank?

- Ans ☐ A. United Bank of India
☐ B. Syndicate Bank
☐ C. Central Bank of India
☒ D. Lakshmi Vilas Bank

Question ID : 2752285674

Q.7 As announced in the Budget 2020, Jan Aushadhi Kendra Scheme has been introduced to offer 2000 medicines and 300 surgicals in all districts by the year _____.

- Ans ☐ A. 2023
☐ B. 2025
☐ C. 2022
☒ D. 2024

Question ID : 2752285678

Q.8 निम्नलिखित में से कौन दोहरी श्रेणी 1 उत्तोलक का उदाहरण है?

- Ans ☒ A. कैची
☐ B. एकपहिया ठेला
☐ C. झाड़ू
☐ D. सरौता

Question ID : 2752285680

Q.9 Who among the following was the founder of the Kalachuri Dynasty?

- Ans
- ☐ A. Ashoka
 - ☒ B. Kokalla I
 - ☐ C. Gangeyadeva
 - ☐ D. Kokalla II

Question ID : 2752285688

Q.10 Eravimala, which is the highest peak located in the Anamalai Hills in the Western Ghats, is located in which of the following states?

- Ans
- ☐ A. Karnataka
 - ☐ B. Tamil Nadu
 - ☒ C. Kerala
 - ☐ D. Maharashtra

Question ID : 2752285687

Q.11 When was the Sadharan Brahmo Samaj of Calcutta founded?

- Ans
- ☐ A. 1884
 - ☒ B. 1878
 - ☐ C. 1892
 - ☐ D. 1866

Question ID : 2752285689

Q.12 When was the Small Industries Development Bank of India established?

- Ans
- ☐ A. 1984
 - ☒ B. 1990
 - ☐ C. 1995
 - ☐ D. 1998

Question ID : 2752285676

Q.13 Which among the following rivers is also known as 'Gorakhpur's Sorrow'?

- Ans
- ☐ A. West Kosi
 - ☐ B. West Jhelum
 - ☐ C. West Gandak
 - ☒ D. West Rapti

Question ID : 2752285686

Q.14 Which among the following laws states that the current passing through a conductor between two points is directly proportional to the potential difference across the two points provided the physical state and temperature etc. of the conductor does not change?

- Ans
- ☐ A. Coulomb's Law
 - ☐ B. Pascal's Law
 - ☒ C. Ohm's Law
 - ☐ D. Avogadro's Law

Question ID : 2752285682

Q.15 Dhol Cholom, a drum dance, is one of the dances performed during which of the following festivals in Manipur?

- Ans
- ☐ A. Navratri
 - ☒ B. Holi
 - ☐ C. Ganesh Chaturthi
 - ☐ D. Diwali

Question ID : 2752285673

Q.16 The Shalimar Garden of Jammu and Kashmir was built by which of the following Mughal emperor?

- Ans
- ☐ A. Aurangzeb
 - ☐ B. Babur
 - ☒ C. Jahangir
 - ☐ D. Shah Jahan

Question ID : 2752285670

Q.17 Which among the following is not an exhaustible resource?

- Ans
- ☐ A. Petroleum
 - ☐ B. Natural gas
 - ☐ C. Coal
 - ☒ D. Biogas

Question ID : 2752285679

Q.18 As announced in the Budget 2020, basic customs duty on imports of news print and light-weight coated paper has been reduced from 10 percent to ____.

- Ans
- ☐ A. 6 percent
 - ☐ B. 4 percent
 - ☐ C. 7 percent
 - ☒ D. 5 percent

Question ID : 2752285677

Q.19 Karma is a harvest festival which is held on the 11th day of a Purnima of the Hindu month of _____.

- Ans
- ☒ A. Bhado
 - ☐ B. Chaith
 - ☐ C. Phagun
 - ☐ D. Kartik

Question ID : 2752285672

Q.20 Swachh Vidyalaya is the national campaign driving _____.

- Ans
- ☐ A. Ek kadam Swachh Vidyalaya ki aur
 - ☐ B. Clean Schools - The Future of India
 - ☒ C. Clean India: Clean Schools
 - ☐ D. Schools and Cleanliness

Question ID : 2752285683

Section : General Awareness2

Q.1 Apart from India, which of the following countries is unlikely to be hit by the global recession as analysed by the United Nations in March 2020?

- Ans
- ☐ A. United Kingdom
 - ☐ B. United States
 - ☐ C. France
 - ☒ D. China

Question ID : 2752285700

Q.2 The Under-17 Women's World Cup which was scheduled to be played in _____ 2020, has been postponed by the Federation Internationale de Football Association (FIFA) or the International Federation of Association Football .

- Ans
- ☒ A. November
 - ☐ B. October
 - ☐ C. December
 - ☐ D. September

Question ID : 2752285708

Q.3 Who among the following was known as the "Young Turk"?

- Ans
- ☒ A. Chandra Shekhar
 - ☐ B. Ashutosh Mukherji
 - ☐ C. Jawaharlal Nehru
 - ☐ D. Bal Gangadhar Tilak

Question ID : 2752285694

Q.4 The 2021 World Games that was scheduled to be held in Birmingham, Alabama is postponed to _____.

- Ans
- ☐ A. 2025
 - ☐ B. 2023
 - ☐ C. 2024
 - ☒ D. 2022

Question ID : 2752285706

Q.5 When was the Akali movement started?

- Ans
- ☐ A. 1925
 - ☐ B. 1935
 - ☒ C. 1920
 - ☐ D. 1930

Question ID : 2752285692

Q.6 The quorum for the meeting of the Rajya Sabha is fixed at _____ of the total members.

- Ans
- ☐ A. one-seventh
 - ☒ B. one-tenth
 - ☐ C. one-ninth
 - ☐ D. one-sixth

Question ID : 2752285701

Q.7 Which among the following is a low-cost energy efficient ventilator made by the Rail Coach Factory, Kapurthala?

- Ans
- ☐ A. Praan
 - ☒ B. Jeevan
 - ☐ C. Zindagi
 - ☐ D. Life

Question ID : 2752285698

Q.8 Which among the following books is not written by Chetan Bhagat?

- Ans
- ☐ A. One Indian Girl
 - ☐ B. Revolution 2020
 - ☐ C. What Young India Wants
 - ☒ D. Sons and Lovers

Question ID : 2752285695

Q.9 Who among the following is the Governor of the Reserve Bank of India as of April 2020?

- Ans
- ☐ A. Raghuram Rajan
 - ☒ B. Shaktikanta Das
 - ☐ C. Nirmala Sitharaman
 - ☐ D. Urjit Patel

Question ID : 2752285696

Q.10 Which among the following awards are famously known as 'Oscars'?

- Ans
- ☒ A. Academy Awards
 - ☐ B. Grammy Awards
 - ☐ C. Golden Globe Awards
 - ☐ D. Emmy Awards

Question ID : 2752285693

Q.11 Which among the following Parts of the Indian Constitution is related with the special provisions relating to certain classes?

- Ans
- ☐ A. XV
 - ☒ B. XVI
 - ☐ C. XIV
 - ☐ D. XIII

Question ID : 2752285704

Q.12 Which among the following is the first country that has won 5 men's and 6 women's world cup titles in cricket till April 2020?

- Ans
- ☒ A. Australia
 - ☐ B. England
 - ☐ C. India
 - ☐ D. New Zealand

Question ID : 2752285709

Q.13 Which among the following movements was also known as the August Movement?

- Ans
- ☐ A. Dandi March
 - ☒ B. Quit India Movement
 - ☐ C. Khilafat Movement
 - ☐ D. Simon Go Back Movement

Question ID : 2752285691

Q.14 Which among the following teams won the first edition of the ICC Women's T20 World Cup in 2009?

- Ans
- ☐ A. India
 - ☒ B. England
 - ☐ C. Australia
 - ☐ D. New Zealand

Question ID : 2752285707

Q.15 Who was the chairman of the States Committee of the Constituent Assembly?

- Ans
- ☐ A. B.R. Ambedkar
 - ☒ B. Jawaharlal Nehru
 - ☐ C. Rajendra Prasad
 - ☐ D. Gopinath Bardoloi

Question ID : 2752285702

Q.16 Which among the following Governments has launched "Mo Prativa" programme in collaboration with UNICEF (United Nations Children's Funds)?

- Ans
- ☐ A. West Bengal
 - ☐ B. Maharashtra
 - ☐ C. Karnataka
 - ☒ D. Odisha

Question ID : 2752285699

Q.17 Which among the following institutions launched the SAFE scheme in March 2020?

- Ans
- ☐ A. RBI
 - ☐ B. NABARD
 - ☒ C. SIDBI
 - ☐ D. SEBI

Question ID : 2752285697

Q.18 When did the Khilafat movement start?

- Ans
- ☐ A. 1935
 - ☐ B. 1928
 - ☒ C. 1919
 - ☐ D. 1892

Question ID : 2752285690

Q.19 Who among the following Indian Football players has been chosen for the FIFA Campaign to spread awareness for COVID 19?

- Ans
- ☐ A. Manpreet Singh
 - ☐ B. Harmanpreet Singh
 - ☐ C. Gurinder Singh
 - ☒ D. Sunil Chhetri

Question ID : 2752285705

Q.20 Which among the following Amendment Bills is known as the 'Women Reservation Bill' ?

- Ans
- ☐ A. 105
 - ☐ B. 110
 - ☒ C. 108
 - ☐ D. 102

Question ID : 2752285703

Section : Arithmetic Ability1

Q.1 180 percent of a number is 972. What will be 240 percent of that number?

- Ans
- ☐ A. 1386
 - ☒ B. 1296
 - ☐ C. 1080
 - ☐ D. 540

Question ID : 2752285718

Q.2 A merchant agrees to give a discount of 10 percent on cost price of wheat but gives away only 800 gm for every 1 Kg weight of wheat. What is his profit percent?

- Ans
- ☐ A. 8.5 percent
 - ☐ B. 10 percent
 - ☒ C. 12.5 percent
 - ☐ D. 11.5 percent

Question ID : 2752285716

Q.3 Kabir and Anushka sells some articles for Rs. 12000 each. Kabir calculates his profit percent on his cost price and Anushka calculates her profit percent wrongly on selling price. What is the difference in their profits if both claim to have a profit of 50 percent?

- Ans
- ☐ A. Rs. 4000
 - ☐ B. Rs. 6000
 - ☐ C. Rs. 1000
 - ☒ D. Rs. 2000

Question ID : 2752285722

Q.4 The difference between two numbers is 1500. 6 percent of a number is 8 percent of the other number. What is the ratio between the two numbers?

- Ans ☐ A. 7 : 4
☒ B. 4 : 3
☐ C. 6 : 1
☐ D. 5 : 3

Question ID : 2752285719

Q.5 The average of 6 terms is 35 and the sixth term is half of the remaining terms. What will be the sixth term?

- Ans ☐ A. 60
☐ B. 105
☐ C. 85
☒ D. 70

Question ID : 2752285714

Q.6 वर्तमान में प्रति वर्ष प्रति हजार जन्म दर 35 है, जबकि तद्विषयक मृत्यु दर प्रति वर्ष प्रति हजार 13 है। प्रतिशत में प्रति वर्ष जनसंख्या वृद्धि के संदर्भ में शुद्ध वृद्धि दर क्या है?

- Ans ☐ A. 4.3 प्रतिशत
☐ B. 5 प्रतिशत
☐ C. 2 प्रतिशत
☒ D. 2.2 प्रतिशत

Question ID : 2752285720

Q.7 The ratio between girls and boys in a college is 3:2. If 25 percent of girls and 20 percent of boys are scholarship holders, then what percentage of the total students do not get scholarship?

- Ans ☐ A. 64 percent
☐ B. 75 percent
☐ C. 80 percent
☒ D. 77 percent

Question ID : 2752285725

Q.8 What is the largest 5-digits number divisible by 8, 12 and 22?

- Ans ☐ A. 99999
☒ B. 99792
☐ C. 99978
☐ D. 99888

Question ID : 2752285710

Q.9 In a three digit number, the digit at one's place is thrice the digit at ten's place and double the digit at hundred's place. What is the number, if the sum of the digits is 11?

- Ans
- ☐ A. 231
 - ☐ B. 462
 - ☒ C. 326
 - ☐ D. 163

Question ID : 2752285712

Q.10 In a horse race, there are four horses P, Q, R and S. The payoff at P is 2:5, at Q is 4:7, at R is 5:9 and at S is 6:11. Amit bets Rs. 3465 on a horse which would fetch maximum amount. Luckily his horse has won. What is the total amount won by him?

- Ans
- ☐ A. Rs. 5355
 - ☐ B. Rs. 4851
 - ☐ C. Rs. 5390
 - ☒ D. Rs. 5445

Question ID : 2752285727

Q.11 Three cats X, Y and Z move in such a way that when X takes 6 steps, Y takes 7 steps and Z takes 8 steps in the same time. 3 steps of X are equal to 4 steps of Y and 5 steps of Z. What is the ratio of their speeds?

- Ans
- ☒ A. 40:35:32
 - ☐ B. 6:7:8
 - ☐ C. 31:27:32
 - ☐ D. 3:4:5

Question ID : 2752285726

Q.12 The marked price of the washing machine is Rs. 2000 more than the money Arpit has. The shopkeeper offers two successive discounts of 8 percent and 5 percent respectively. Now Arpit still has Rs. 3040 left after buying the washing machine. What is the marked price of the washing machine?

- Ans
- ☐ A. Rs. 50000
 - ☐ B. Rs. 48000
 - ☒ C. Rs. 40000
 - ☐ D. Rs. 38000

Question ID : 2752285715

Q.13 The difference between compound interest and simple interest on a certain sum of money at 4 percent per annum for 2 years is Rs. 80. What is the principal if interest is compounded annually?

- Ans
- ☐ A. Rs.40000
 - ☐ B. Rs. 38000
 - ☐ C. Rs. 45000
 - ☒ D. Rs. 50000

Question ID : 2752285729

Q.14 रोनित 30 प्रतिशत की छूट पर एक वस्तु बेचता है और उस वस्तु पर 40 प्रतिशत का लाभ अर्जित करता है। वस्तु की लागत मूल्य पर मॉर्कप कितना होगा?

- Ans
- ☐ A. 50 प्रतिशत
 - ☒ B. 100 प्रतिशत
 - ☐ C. 300 प्रतिशत
 - ☐ D. 200 प्रतिशत

Question ID : 2752285723

Q.15 An amount is to be divided between Ram, Tanish and Veer in the ratio 3 : 8 : 9 respectively. If Veer gets Rs. 1620 then, what is the share of Ram?

- Ans
- ☐ A. Rs. 1280
 - ☐ B. Rs. 980
 - ☒ C. Rs. 540
 - ☐ D. Rs. 1440

Question ID : 2752285724

Q.16 A student has to secure 45 percent marks to pass. He gets 294 marks and fails by 66 marks. What are the maximum marks?

- Ans
- ☐ A. 600
 - ☐ B. 1000
 - ☒ C. 800
 - ☐ D. 900

Question ID : 2752285717

Q.17 The numerator of a rational number is 5 less than its denominator. If the numerator is increased by 5 and denominator is decreased by 8, then it becomes 3. What was the rational number?

- Ans
- ☐ A. 6/11
 - ☒ B. 7/12
 - ☐ C. 9/14
 - ☐ D. 8/13

Question ID : 2752285711

Q.18 If a pen is sold at 10 percent gain instead of 10 percent loss, then the seller gets Rs. 2 more. What is the cost price of that pen?

- Ans
- ☐ A. Rs. 12
 - ☐ B. Rs. 15
 - ☒ C. Rs. 10
 - ☐ D. Rs. 5

Question ID : 2752285721

Q.19 What is the highest common factor of the fractions $(\frac{4}{3})$, $(\frac{14}{27})$ and $(\frac{16}{9})$?

- Ans
- ☒ A. $\frac{16}{27}$
 - ☒ B. $\frac{4}{9}$
 - ☒ C. $\frac{2}{9}$
 - ☒ D. $\frac{2}{27}$

Question ID : 2752285713

Q.20 Abhiraj took a loan of Rs. 100000 from a bank at the rate of 9.8 percent p.a. simple interest. He had to pay Rs. 68600 as interest. What is the time period?

- Ans
- ☒ A. 5 years
 - ☒ B. 2 years
 - ☒ C. 7 years
 - ☒ D. 3 years

Question ID : 2752285728

Section : Arithmetic Ability2

Q.1 If 512 identical small spheres are made out of a big sphere of diameter 32 cm, then what is the surface area of each small sphere?

- Ans
- ☒ A. 16π sq cm
 - ☒ B. 14π sq cm
 - ☒ C. 12π sq cm
 - ☒ D. 10π sq cm

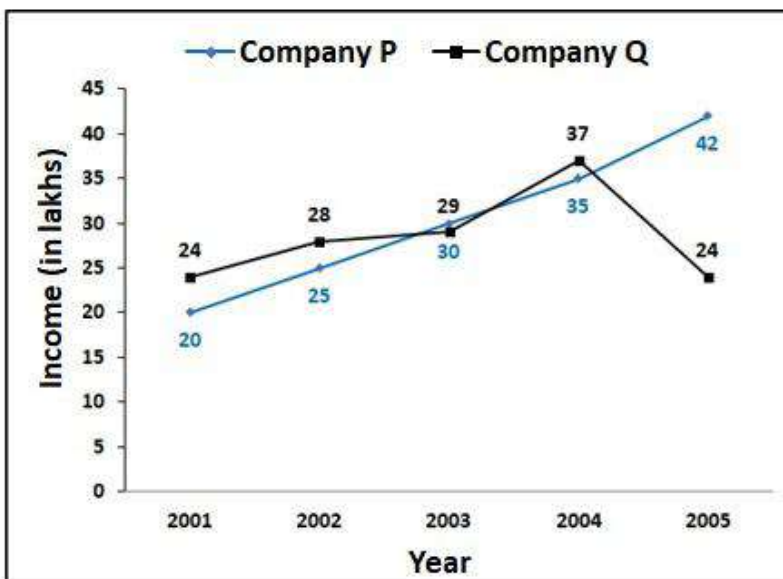
Question ID : 2752285740

Q.2 P and Q can do a work in 10 and 15 days respectively. They worked together for 2 days and then P left. In how many days Q can finish the remaining work?

- Ans
- ☒ A. 10 days
 - ☒ B. 15 days
 - ☒ C. 12 days
 - ☒ D. 8 days

Question ID : 2752285737

Q.3 The following line graph shows the income (in lakh rupees) of two water purifier manufacturing companies P and Q over 5 years. What would be the ratio of total income of these 5 years of Company P to that of Company Q?



- Ans
- ☒ A. 2 : 3
 - ☒ B. 24 : 25
 - ☒ C. 76 : 71
 - ☒ D. 1 : 1

Question ID : 2752285749

Q.4 A and B can do a work in 120 hours, B and C in 150 hours and C and A in 100 hours. If A, B and C worked together then, in how much time they will complete the work?

- Ans
- ☒ A. 5 days
 - ☒ B. 3 days and 8 hours
 - ☒ C. 4 days and 10 hours
 - ☒ D. 1 day and 16 hours

Question ID : 2752285736

Q.5 Ashita can do a work in 'a' days and Suman can do the same work in '2a' days. To finish the work together they take 10 days. What is the value of 'a'?

- Ans
- ☒ A. 12
 - ☒ B. 10
 - ☒ C. 15
 - ☒ D. 16

Question ID : 2752285735

Q.6 The following table shows the population of India in various years. What is the percentage increase in population from 1991 to 2011?

| Years | Population (in crores) |
|-------|---------------------------|
| 1981 | 70 |
| 1991 | 81.4 |
| 2001 | 90.5 |
| 2011 | 110.6 |

- Ans
- ☐ A. 37.59 percent
 - ☐ B. 40.12 percent
 - ☒ C. 35.87 percent
 - ☐ D. 24.69 percent

Question ID : 2752285745

Q.7 A right circular cone is 6 cm high and the radius is 12 cm. It is melted and recast into a sphere. What is the diameter of the sphere?

- Ans
- ☐ A. 16 cm
 - ☐ B. 8 cm
 - ☐ C. 10 cm
 - ☒ D. 12 cm

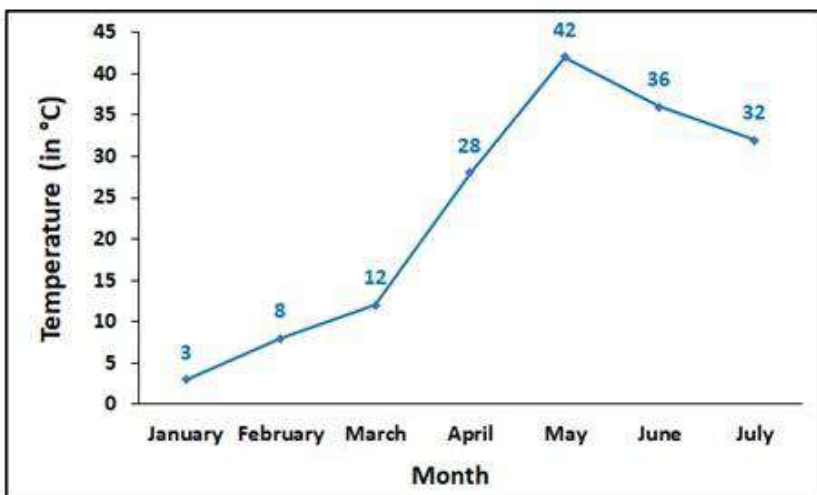
Question ID : 2752285741

Q.8 Abhishek rides a bicycle around a circular path of radius 100 m. The radius of the wheel of the bicycle is 150 cm. The bicycle comes to the starting point for the first time in 1 hour 40 minutes. What is the number of revolutions of the wheel in 45 minutes?

- Ans
- ☐ A. 45
 - ☒ B. 30
 - ☐ C. 40
 - ☐ D. 35

Question ID : 2752285733

Q.9 The following line graph shows the average temperature of a city in different months of a year. What is the decrease percentage of the temperature from May to June?



- Ans
- ☒ A. (500/21) percent
 - ☒ B. (300/17) percent
 - ☒ C. (200/7) percent
 - ☒ D. (100/7) percent

Question ID : 2752285747

Q.10 A man rides his bike 5 Km at an average speed of 30 Km/hr and travels a further 10 Km at an average speed of 20 Km/hr. What is the average speed for the entire trip?

- Ans
- ☒ A. 28.5 kmph
 - ☒ B. 25.5 kmph
 - ☒ C. 23 kmph
 - ☒ D. 22.5 kmph

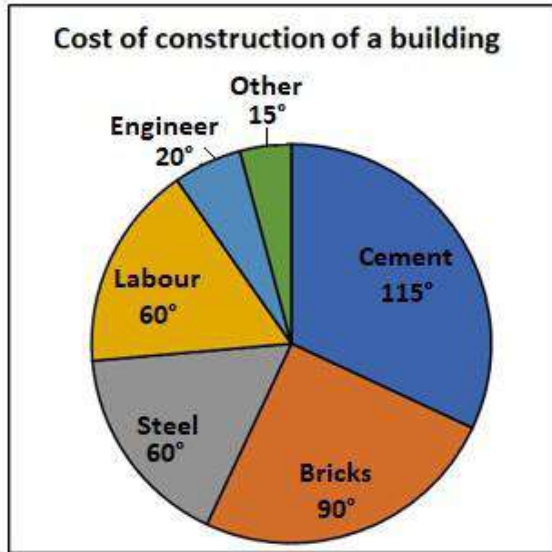
Question ID : 2752285734

Q.11 8 men can do a piece of work in 8 days while 16 women can do a piece of work in 5 days. In how many days 4 men and 5 women together can do this work?

- Ans
- ☒ A. 10 days
 - ☒ B. 8 days
 - ☒ C. 14 days
 - ☒ D. 6 days

Question ID : 2752285738

Q.12 The following pie chart shows the breakup in degrees the cost of construction of a building. The total cost of construction is Rs. 54000000. How much percentage of total amount is spent on bricks?



- Ans
- ☒ A. 60 percent
 - ☒ B. 15 percent
 - ☒ C. 25 percent
 - ☒ D. 90 percent

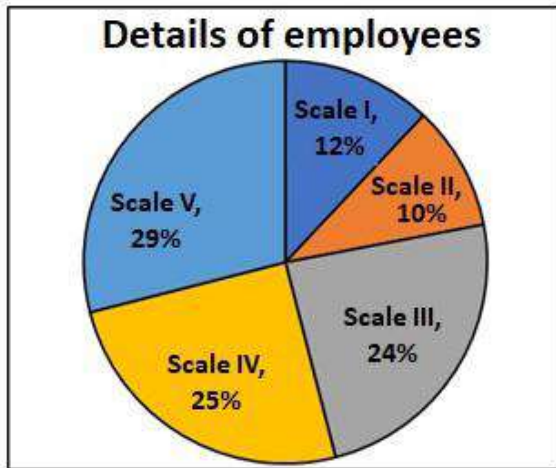
Question ID : 2752285743

Q.13 A car financier claims to be lending money at simple interest, but he includes the interest every six months for calculating principal. If he is charging an interest of 14 percent then, what is the effective rate of interest?

- Ans
- ☒ A. 14 percent
 - ☒ B. 15.19 percent
 - ☒ C. 14.49 percent
 - ☒ D. 14.25 percent

Question ID : 2752285730

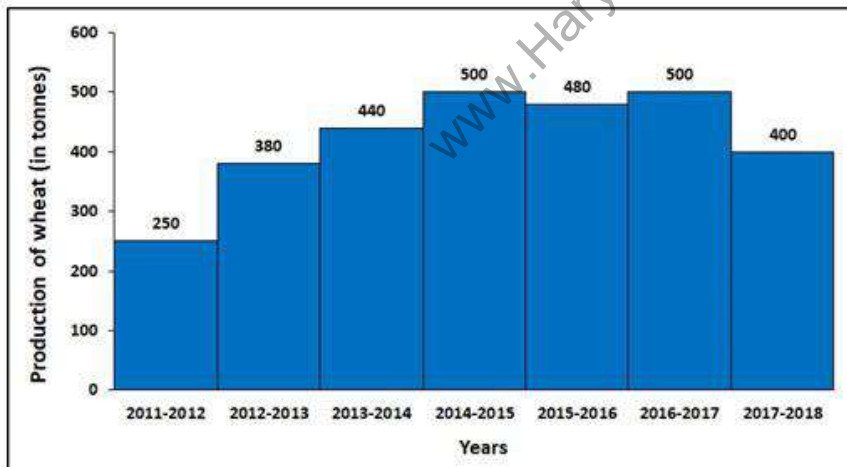
Q.14 The following pie-chart shows the details of 2000 employees of a company in various scales. How many employees are working on scale III?



- Ans
- ☒ A. 240
 - ☒ B. 500
 - ☒ C. 200
 - ☒ D. 480

Question ID : 2752285742

Q.15 The following histogram shows the production of wheat from the year 2011-2012 to 2017-2018. By how much percent the production in 2016-2017 increased compared to the production in 2011-2012?



- Ans
- ☒ A. 100 percent
 - ☒ B. 200 percent
 - ☒ C. 128 percent
 - ☒ D. 80 percent

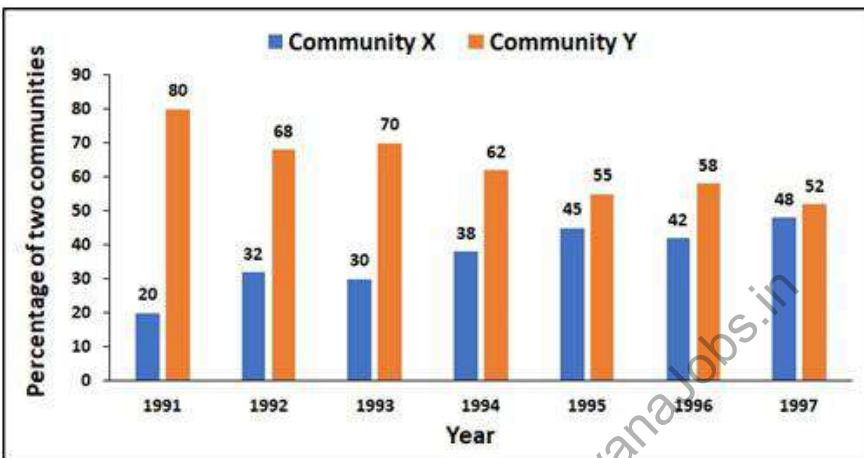
Question ID : 2752285748

Q.16 Arpit borrows some money at the rate of 4 percent p.a. for the first three years. He borrows the money at the rate of 8 percent p.a. for the next 4 years and at the rate of 12 percent p. a. for the next 5 years. If he pays a total simple interest of Rs. 8320 at the end of 12 years then, how much money did he borrow?

- Ans ☒ A. Rs. 8000
☒ B. Rs. 8300
☒ C. Rs. 7320
☒ D. Rs. 6000

Question ID : 2752285731

Q.17 The following bar diagram shows the percentage of two communities- Community X and Community Y in a state during the years from 1991 to 1997. What was the ratio between community X and community Y in the year 1995?



- Ans ☒ A. 5:17
☒ B. 9:11
☒ C. 25:23
☒ D. 75:76

Question ID : 2752285746

Q.18 Aditi had to walk a certain distance. She walked one-fourth distance at a speed of 3 Km/hr and the remaining distance at a speed of 6 Km/hr. If the total time taken was 10 hours, then what was the total distance?

- Ans ☒ A. 50 Kms
☒ B. 48 Kms
☒ C. 40 Kms
☒ D. 36 Kms

Question ID : 2752285732

Q.19 The following table shows the sales, expenses and capital of a company from 2005 to 2008.
In which year was the ratio of expenses and capital is highest?

| Years | Sales | Expenses | Capital |
|-------|-------|----------|---------|
| 2005 | 400 | 200 | 300 |
| 2006 | 600 | 200 | 400 |
| 2007 | 500 | 300 | 700 |
| 2008 | 700 | 300 | 700 |

- Ans
- ☒ A. 2008
 - ☒ B. 2005
 - ☒ C. 2006
 - ☒ D. 2007

Question ID : 2752285744

Q.20 A cylindrical drainage pipe is 70 cm long. The inside and outside diameters are 20 cm and 32 cm respectively. What is the volume of the pipe?

- Ans
- ☒ A. 34320 cu cm
 - ☒ B. 28630 cu cm
 - ☒ C. 13728 cu cm
 - ☒ D. 24240 cu cm

Question ID : 2752285739

Section : General English1

Q.1 Select the word that is closest in meaning (SYNONYM) to the word given below.

REPUGNANT

- Ans
- ☒ A. LIKEABLE
 - ☒ B. AGREEABLE
 - ☒ C. ABOMINABLE
 - ☒ D. RECREANT

Question ID : 2752285768

Q.2 Some parts of a sentence have been jumbled up, and labelled P, Q, R and S. Select the option that gives the correct sequence in which these parts can be rearranged to form a meaningful and grammatically correct sentence.

Distillation may result

P: that increases the

Q: in essentially complete separation,

R: concentration of selected

S: or it may be a partial separation

components in the mixture.

- Ans
- ☒ A. RPSQ
 - ☒ B. RPQS
 - ☒ C. QSRP
 - ☒ D. QSPR

Question ID : 2752285764

Q.3 Select the word segment that substitutes (replaces) the bracketed word segment correctly and completes the sentence meaningfully. Select the option 'no correction required' if the sentence is correct as given.

Detailed knowledge of fission and fusion weapons is (proliferated) to some degree in virtually every industrialized nation.

- Ans
- ☒ A. classified
 - ☒ B. privileged
 - ☒ C. mocked
 - ☒ D. No Correction Required

Question ID : 2752285755

Q.4 Select the word that is the opposite meaning (ANTONYM) to the word given below.

VEHEMENT

- Ans
- ☒ A. ARDENT
 - ☒ B. GENTLE
 - ☒ C. FERVENT
 - ☒ D. POTENT

Question ID : 2752285767

Q.5 Find the part of the given sentence that has an error in it. If there is no error, choose 'No error'.

The servicing and government sectors, where output (1)/ per hour and productivity growth is low, last saw increases in their shares of the (2)/ economy and employment during the 1990s. (3)/ No Error (4)

- Ans
- ☒ A. No Error
 - ☒ B. The servicing and government sectors, where output
 - ☒ C. economy and employment during the 1990s.
 - ☒ D. per hour and productivity growth is low, last saw increases in their shares of the

Question ID : 2752285753

Q.6 Select the word that is closest in meaning (SYNONYM) to the word given below.

ACUMEN

- Ans ☒ A. IGNORANCE
☒ B. ELICITATION
☒ C. INGENUITY
☒ D. MISINTERPRETATION

Question ID : 2752285769

Q.7 Find the part of the given sentence that has an error in it. If there is no error, choose 'No error'.

Not having clear legal title to properly limits (1)/ its potential to be used as collateral to (2)/ secure loans, depriving many poor countries. (3)/ No Error (4)

- Ans ☒ A. No Error
☒ B. Not having clear legal title to properly limits
☒ C. secure loans, depriving many poor countries.
☒ D. its potential to be used as collateral to

Question ID : 2752285752

Q.8 Some parts of a sentence have been jumbled up, and labelled P, Q, R and S. Select the option that gives the correct sequence in which these parts can be rearranged to form a meaningful and grammatically correct sentence.

The first is that the objective

P: to the home, on the justified premise

Q: that one's religion is a personal matter and is not

R: determined effort to restrict religious practices

S: will not be reached unless there is a

conducive to mass assertiveness.

- Ans ☒ A. SRQP
☒ B. SRPQ
☒ C. QPSR
☒ D. QPRS

Question ID : 2752285763

Q.9 Fill in the blank with the appropriate word.

Human population control is the practice of _____ the rate of growth of a human population.

- Ans ☒ A. stagnating
☒ B. altering
☒ C. destroying
☒ D. preserving

Question ID : 2752285759

Q.10 Some parts of a passage have been jumbled up, and labelled P, Q, R and S. Select the option that gives the correct sequence in which these parts can be rearranged to form a meaningful passage.

Glassblowing is a glass-forming technique that involves inflating molten glass into a bubble with the aid of a blowpipe.

P. Mold-blowing is an alternative glassblowing method that came after the invention of free-blowing.

Q. A lampworker is also a glassblower but manipulates glass with the use of a torch on a smaller scale.

R. A person who blows glass is called a glassblower, glassmith, or gaffer.

S. It is a tube through which a stream of air or gas is forced into a flame to concentrate and increase its heating action.

There are two types of mold, namely single-piece molds and multi-piece molds, are frequently used to produce mold-blown vessels.

Ans ☒ A. SRQP

☐ B. QPRS

☐ C. RPQS

☐ D. PRQS

Question ID : 2752285765

Q.11 Fill in the blank with the appropriate word.

The British East India Company, by the 18th century, had entered the Indian political _____ and established its dominance over other European powers.

Ans ☐ A. languor

☒ B. theatre

☐ C. lineament

☐ D. inaction

Question ID : 2752285762

Q.12 Select the word segment that substitutes (replaces) the bracketed word segment correctly and completes the sentence meaningfully. Select the option 'no correction required' if the sentence is correct as given.

Standpoint theory's most important concept is that an individual's own (speculates) are shaped by his or her social and political experiences.

Ans ☐ A. perseverance

☐ B. perception





☒ C. perspectives

☐ D. No Correction Required

Question ID : 2752285757

Q.13 Select the word segment that substitutes (replaces) the bracketed word segment correctly and completes the sentence meaningfully. Select the option 'no correction required' if the sentence is correct as given.

The words "opacity" and "opaque" are often used as (sequential) terms for objects or media. However, there is also a specific, quantitative definition of "opacity", used in astronomy, plasma physics, and other fields.

- Ans  A. demographical
 B. colloquial
 C. metaphorical
 D. No Correction Required

Question ID : 2752285758

Q.14 Some parts of a passage have been jumbled up, and labelled P, Q, R and S. Select the option that gives the correct sequence in which these parts can be rearranged to form a meaningful passage.

A supernova is a powerful and luminous stellar explosion.

P: A black hole as mentioned above is expected to form when very massive stars collapse at the end of their life cycle; it is region of spacetime where gravity is so strong that nothing —no particles or even electromagnetic radiation such as light—can escape from it.

Q: This transient astronomical event occurs during the last evolutionary stages of a massive star or when a white dwarf is triggered into runaway nuclear fusion.

R: The peak optical luminosity of a supernova can be comparable to that of an entire galaxy, before fading over several weeks or months.

S: The original form of the white dwarf, called the progenitor, either collapses to a neutron star or black hole, or it is completely destroyed.





The theory of general relativity predicts that a sufficiently compact mass can deform spacetime to form a black hole.

- Ans  A. RSPQ
 B. SPRQ
 C. PQRS
 D. QSRP

Question ID : 2752285766

Q.15 Find the part of the given sentence that has an error in it. If there is no error, choose 'No error'.

A country's level of human capital is (1)/ difficult to be measure since it is created (2)/ at home, at school, and on the job. (3)/ No Error (4)

- Ans  A. A country's level of human capital is
 B. at home, at school, and on the job.
 C. No Error
 D. difficult to be measure since it is created

Question ID : 2752285751

Q.16 Find the part of the given sentence that has an error in it. If there is no error, choose 'No error'.

In line with the predictions of the Malthusian theory, a cross-country analysis (1)/ finds a significant positive affect of the technical level on population density (2)/ and insignificant effect on income per significantly over the years. (3)/ No Error (4)

Ans



A. No Error



B. finds a significant positive affect of the technical level on population density



C. In line with the predictions of the Malthusian theory, a cross-country analysis



D. and insignificant effect on income per significantly over the years.

Question ID : 2752285754

Q.17 Select the word segment that substitutes (replaces) the bracketed word segment correctly and completes the sentence meaningfully. Select the option 'no correction required' if the sentence is correct as given.

Heating or electricity is one of the most (considered) costs in the operation of greenhouses across the globe, especially in colder climates.

Ans



A. consideration



B. No Correction Required



C. considerable



D. considering

Question ID : 2752285756

Q.18 Fill in the blank with the appropriate word.

The rich religious literature unwritten secular literature passed down from one generation to another in the form of _____ chants.

Ans



A. swarthy



B. sacerdotal



C. atheistical



D. notonectal

Question ID : 2752285760

Q.19 Fill in the blank with the appropriate word.

The Sātavāhanas are known for their _____ of Hinduism and Buddhism, which resulted in the construction of Buddhist monuments from Ellora to Amaravati.

Ans



A. patronage



B. partitioning



C. antagonism



D. obstruction

Question ID : 2752285761

Q.20 Find the part of the given sentence that has an error in it. If there is no error, choose 'No error'.

Living standards very widely from country to country, and (1)/ furthermore the change in living standards over time varies (2)/ widely from country to country. (3)/ No Error (4)

- Ans ☒ A. Living standards very widely from country to country, and
☐ B. No Error
☐ C. furthermore the change in living standards over time varies
☐ D. widely from country to country.

Question ID : 2752285750

Section : General English2

Q.1 Four words are given, out of which only one word is spelt correctly. Choose the correctly spelt word.

- Ans ☐ A. GIMICKEY
☐ B. GIMMICKEY
☒ C. GIMMICKY
☐ D. GIMICKY

Question ID : 2752285776

Q.2 Four words are given, out of which only one word is spelt correctly. Choose the correctly spelt word.

- Ans ☐ A. IGNOMINI
☐ B. IGNONIMINY
☒ C. IGNOMINY
☐ D. IGNONIMINI

Question ID : 2752285773

Q.3 Select the most appropriate 'one word' for the expressions given below.

A small portion or limited quantity

- Ans ☒ A. Modicum
☐ B. Onerous
☐ C. Munificent
☐ D. Entirety

Question ID : 2752285784

Q.4 Select the most appropriate meaning of the given idiom.

"Back against the wall"

- Ans
- ☒ A. To be forced into doing something wrong.
 - ☒ B. Be in a difficult situation from where escape is difficult.
 - ☒ C. Being in an intimate position.
 - ☒ D. To run away from the truth.

Question ID : 2752285778

Q.5 Select the most appropriate 'one word' for the expressions given below.

To impart or suggest in an artful or indirect way

- Ans
- ☒ A. Withhold
 - ☒ B. Conceal
 - ☒ C. With draw
 - ☒ D. Insinuate

Question ID : 2752285781

Q.6 Select the word that is closest in meaning (SYNONYM) to the word given below.

CHURLISH

- Ans
- ☒ A. RELIGIOUS
 - ☒ B. SULLEN
 - ☒ C. EXORBITANT
 - ☒ D. REFINED

Question ID : 2752285770

Q.7 Four words are given, out of which only one word is spelt correctly. Choose the correctly spelt word.

- Ans
- ☒ A. BELVEDER
 - ☒ B. BEVELDERE
 - ☒ C. BEVELDER
 - ☒ D. BELVEDERE

Question ID : 2752285772

Q.8 Select the word that is the opposite meaning (ANTONYM) to the word given below.

TEMPESTUOUS

- Ans
- ☒ A. APATHETIC
 - ☒ B. FURIOUS
 - ☒ C. NEFARIOUS
 - ☒ D. IMPASSIONED

Question ID : 2752285771

Q.9 Select the most appropriate meaning of the given idiom.

"Head over heels"

- Ans
- ☐ A. A stupid person or a person with low IQ.
 - ☐ B. Wrongly understanding something.
 - ☐ C. In a precarious position.
 - ☒ D. Being completely in love.

Question ID : 2752285777

Q.10 Select the most appropriate meaning of the given idiom.

"Bend over backwards"

- Ans
- ☐ A. To take a step back to avoid the situation.
 - ☐ B. Being very physically fit, active and agile.
 - ☒ C. To try to please or accommodate someone to an unusual degree.
 - ☐ D. Taking steps to simplify a situation or question.

Question ID : 2752285780

Q.11 Select the most appropriate 'one word' for the expressions given below.

Something that cannot be denied or not open to question.

- Ans
- ☐ A. Controvertible
 - ☐ B. Variable
 - ☐ C. Disputed
 - ☒ D. Incontrovertible

Question ID : 2752285783

Q.12 Select the most appropriate meaning of the given idiom.

"Stir up a hornets' nest"

- Ans
- ☐ A. Using foul or derogatory language.
 - ☐ B. Cook a difficult recipe.
 - ☒ C. Provoke trouble.
 - ☐ D. Tease a friend.

Question ID : 2752285779

Q.13 Select the most appropriate 'one word' for the expressions given below.

Extending or existing since beyond the reach of memory, record, or tradition.

- Ans
- ☐ A. Modern
 - ☐ B. Amenable
 - ☒ C. Immemorial
 - ☐ D. Ambivalent

Question ID : 2752285782

Q.14 Four words are given, out of which only one word is spelt correctly. Choose the correctly spelt word.

- Ans
- ☒ A. CONCENSUS
 - ☒ B. CONSECUS
 - ☒ C. CONSENSUS
 - ☒ D. CONSENSES

Question ID : 2752285775

Q.15 Four words are given, out of which only one word is spelt correctly. Choose the correctly spelt word.

- Ans
- ☒ A. NARCISSISM
 - ☒ B. NARCICISSM
 - ☒ C. NARSICISM
 - ☒ D. NARCISISM

Question ID : 2752285774

Comprehension:

Read the following information carefully and answer the given questions.

The origins of asceticism lie in man's attempts to achieve various ultimate goals or ideals: development of the "whole" person, human creativity, ideas, the "self," or skills demanding technical proficiency. Among the ancient Greeks, athletes preparing for physical contests disciplined their bodies by abstaining from various normal pleasures and by enduring difficult physical tests. As values other than those concerned with physical proficiency were developed, the concept expressed by asceticism and its cognates was applied to other ideals —e.g., mental facility, moral vitality, and spiritual ability.

Plato believed that it is necessary to suppress bodily desires so that the soul can be free to search for knowledge. The Stoics, among whom asceticism was primarily a discipline to achieve control over the promptings of the emotions, upheld the dignity of human nature and the wise man's necessary imperturbability, which they believed would become possible through the suppression of the affective, or appetitive, part of man.

In all strictly ascetic movements, celibacy has been regarded as the first commandment.

Celibates emerged among the earliest Christian communities and came to occupy a prominent status. Among the earliest Mesopotamian Christian communities, only the celibates were accepted as full members of the church, and in some religions only celibates have been permitted to be priests. Abstinence and fasting are by far the most common of all ascetic practices. Personal hygiene also fell under condemnation among ascetics.

Psychological forms of asceticism have also been developed. A technique of pain-causing introspection was used by Buddhist ascetics in connection with their practices for meditation.

SubQuestion No : 16

Q.16 In the past the concept of asceticism have not been applied to:

- Ans
- ☒ A. Devotional agility.
 - ☒ B. Spiritual ability.
 - ☒ C. Moral vitality.
 - ☒ D. Mental facility.

Question ID : 2752285787

Comprehension:

Read the following information carefully and answer the given questions.

The origins of asceticism lie in man's attempts to achieve various ultimate goals or ideals: development of the "whole" person, human creativity, ideas, the "self," or skills demanding technical proficiency. Among the ancient Greeks, athletes preparing for physical contests disciplined their bodies by abstaining from various normal pleasures and by enduring difficult physical tests. As values other than those concerned with physical proficiency were developed, the concept expressed by asceticism and its cognates was applied to other ideals —e.g., mental facility, moral vitality, and spiritual ability.

Plato believed that it is necessary to suppress bodily desires so that the soul can be free to search for knowledge. The Stoics, among whom asceticism was primarily a discipline to achieve control over the promptings of the emotions, upheld the dignity of human nature and the wise man's necessary imperturbability, which they believed would become possible through the suppression of the affective, or appetitive, part of man.

In all strictly ascetic movements, celibacy has been regarded as the first commandment.

Celibates emerged among the earliest Christian communities and came to occupy a prominent status. Among the earliest Mesopotamian Christian communities, only the celibates were accepted as full members of the church, and in some religions only celibates have been permitted to be priests. Abstinence and fasting are by far the most common of all ascetic practices. Personal hygiene also fell under condemnation among ascetics.

Psychological forms of asceticism have also been developed. A technique of pain-causing introspection was used by Buddhist ascetics in connection with their practices for meditation.

SubQuestion No : 17

Q.17 Stoic means a person who can endure pain or hardships without showing their feelings or complaining; Stoicism is a school of Hellenistic philosophy which was founded by Zeno of Citium, in Athens; Which of the following was not taught to students in Stoicism?

Ans

- ☒ A. Achieve control over the promptings of the emotions.
- ☒ B. Being imperturbable using asceticism.
- ☒ C. To be acutely sensitive to emotional disturbance.
- ☒ D. Suppression of the affective, or appetitive, part of man.

Question ID : 2752285788

Comprehension:

Read the following information carefully and answer the given questions.

The origins of asceticism lie in man's attempts to achieve various ultimate goals or ideals: development of the "whole" person, human creativity, ideas, the "self," or skills demanding technical proficiency. Among the ancient Greeks, athletes preparing for physical contests disciplined their bodies by abstaining from various normal pleasures and by enduring difficult physical tests. As values other than those concerned with physical proficiency were developed, the concept expressed by asceticism and its cognates was applied to other ideals —e.g., mental facility, moral vitality, and spiritual ability.

Plato believed that it is necessary to suppress bodily desires so that the soul can be free to search for knowledge. The Stoics, among whom asceticism was primarily a discipline to achieve control over the promptings of the emotions, upheld the dignity of human nature and the wise man's necessary imperturbability, which they believed would become possible through the suppression of the affective, or appetitive, part of man.

In all strictly ascetic movements, celibacy has been regarded as the first commandment.

Celibates emerged among the earliest Christian communities and came to occupy a prominent status. Among the earliest Mesopotamian Christian communities, only the celibates were accepted as full members of the church, and in some religions only celibates have been permitted to be priests. Abstinence and fasting are by far the most common of all ascetic practices. Personal hygiene also fell under condemnation among ascetics.

Psychological forms of asceticism have also been developed. A technique of pain-causing introspection was used by Buddhist ascetics in connection with their practices for meditation.

SubQuestion No : 18

Q.18 Which of the following is not an ascetic practice as given in the passage?

- Ans
- ☒ A. Not maintaining personal hygiene and reduction in movement.
 - ☒ B. Abstinence and fasting.
 - ☒ C. Pain causing introspection as part of meditation.
 - ☒ D. Offering a sacrifice to the almighty to develop a connection.

Question ID : 2752285790

Comprehension:

Read the following information carefully and answer the given questions.

The origins of asceticism lie in man's attempts to achieve various ultimate goals or ideals: development of the "whole" person, human creativity, ideas, the "self," or skills demanding technical proficiency. Among the ancient Greeks, athletes preparing for physical contests disciplined their bodies by abstaining from various normal pleasures and by enduring difficult physical tests. As values other than those concerned with physical proficiency were developed, the concept expressed by asceticism and its cognates was applied to other ideals —e.g., mental facility, moral vitality, and spiritual ability.

Plato believed that it is necessary to suppress bodily desires so that the soul can be free to search for knowledge. The Stoics, among whom asceticism was primarily a discipline to achieve control over the promptings of the emotions, upheld the dignity of human nature and the wise man's necessary imperturbability, which they believed would become possible through the suppression of the affective, or appetitive, part of man.

In all strictly ascetic movements, celibacy has been regarded as the first commandment.

Celibates emerged among the earliest Christian communities and came to occupy a prominent status. Among the earliest Mesopotamian Christian communities, only the celibates were accepted as full members of the church, and in some religions only celibates have been permitted to be priests. Abstinence and fasting are by far the most common of all ascetic practices. Personal hygiene also fell under condemnation among ascetics.

Psychological forms of asceticism have also been developed. A technique of pain-causing introspection was used by Buddhist ascetics in connection with their practices for meditation.

SubQuestion No : 19

Q.19 When asceticism originated, it was used by ancient Greeks for:

Ans



A. Connecting to god on a spiritual level.



B. Improving relations with partners.



C. Gaining political stability in the society.



D. Preparing for physical contests.

Question ID : 2752285786

Comprehension:

Read the following information carefully and answer the given questions.

The origins of asceticism lie in man's attempts to achieve various ultimate goals or ideals: development of the "whole" person, human creativity, ideas, the "self," or skills demanding technical proficiency. Among the ancient Greeks, athletes preparing for physical contests disciplined their bodies by abstaining from various normal pleasures and by enduring difficult physical tests. As values other than those concerned with physical proficiency were developed, the concept expressed by asceticism and its cognates was applied to other ideals —e.g., mental facility, moral vitality, and spiritual ability.

Plato believed that it is necessary to suppress bodily desires so that the soul can be free to search for knowledge. The Stoics, among whom asceticism was primarily a discipline to achieve control over the promptings of the emotions, upheld the dignity of human nature and the wise man's necessary imperturbability, which they believed would become possible through the suppression of the affective, or appetitive, part of man.

In all strictly ascetic movements, celibacy has been regarded as the first commandment.

Celibates emerged among the earliest Christian communities and came to occupy a prominent status. Among the earliest Mesopotamian Christian communities, only the celibates were accepted as full members of the church, and in some religions only celibates have been permitted to be priests. Abstinence and fasting are by far the most common of all ascetic practices. Personal hygiene also fell under condemnation among ascetics.

Psychological forms of asceticism have also been developed. A technique of pain-causing introspection was used by Buddhist ascetics in connection with their practices for meditation.

SubQuestion No : 20

Q.20 What is the meaning of the word 'celibate' as derived from the passage?

- Ans
- ☒ A. A person who can stay without eating or drinking for long durations.
 - ☒ B. A person who does not believe in humanity.
 - ☒ C. A person who abstains from marriage and sexual relations.
 - ☒ D. A person who has a lot of respect amongst the people of his community.

Question ID : 2752285789

Section : General Hindi1

Q.1 निम्नलिखित प्रश्न में, चार विकल्पों में से, उस विकल्प का चयन करें जो दिए गए शब्द का तत्सम रूप हो।

हृदय

- Ans
- ☒ A. हारि
 - ☒ B. हाट
 - ☒ C. खार
 - ☒ D. हिया

Question ID : 2752285798





Q.2 निम्नलिखित प्रश्न में, चार विकल्पों में से, उस विकल्प का चयन करें जो क्रिया के भेद वाला सही विकल्प हो।

तुम घर चले जाओ।

- Ans
- ☒ A. संयुक्त क्रिया
 - ☒ B. पूर्वकालिक क्रिया
 - ☒ C. नामधातु क्रिया
 - ☒ D. प्रेरणार्थक क्रिया




Question ID : 2752285791

Q.3 निम्नलिखित प्रश्न में, चार विकल्पों में से, उस विकल्प का चयन करें जो शुद्ध शब्द का सही विकल्प है।

- Ans  A. अष्टगयोग
 B. अष्टांगयोग्य
 C. अष्टांगयोग
 D. अष्टानयोग

Question ID : 2752285804





Q.4 निम्नलिखित प्रश्न में, चार विकल्पों में से, उस विकल्प का चयन करें जो देशज शब्द का सही विकल्प हो।

- Ans  A. कैची
 B. झुग्गी
 C. खबर
 D. अचार

Question ID : 2752285796

Q.5 निम्नलिखित प्रश्न में, चार विकल्पों में से, उस विकल्प का चयन करें जो कोष्ठक में दिए गए शब्द के अनुसार सर्वनाम के भेद का सही विकल्प हो।





(कोई) यहाँ आया था।

- Ans  A. निजवाचक
 B. प्रश्नवाचक
 C. निश्चयवाचक
 D. अनिश्चयवाचक

Question ID : 2752285794

Q.6 निम्नलिखित प्रश्न में, चार विकल्पों में से, उस विकल्प का चयन करें जो दिए गए शब्द के समानार्थी शब्द का विकल्प नहीं है।





भू

- Ans  A. भूकुटी
 B. भौह
 C. खंड
 D. त्योरी

Question ID : 2752285806

Q.7 निम्नलिखित प्रश्न में, चार विकल्पों में से, उस विकल्प का चयन करें जो कोष्ठक में दिए गए शब्द के अनुसार दिए गए वाक्य के लिए अव्यय के भेद का सही विकल्प हो।

वह (लगभग) साढ़े बारह बजे आया था।

- Ans  A. संबंधबोधक अव्यय
 B. निपात
 C. विस्मयादिबोधक अव्यय
 D. समुच्चयबोधक अव्यय

Question ID : 2752285792

Q.8 निम्नलिखित प्रश्न में, चार विकल्पों में से, उस विकल्प का चयन करें जो दिए गए शब्द के पर्यायवाची शब्द का सही विकल्प नहीं है।

फरेब

- Ans
- ☒ A. प्रवंचना
 - ☒ B. कपट
 - ☒ C. व्याल
 - ☒ D. छल

Question ID : 2752285799

Q.9 निम्नलिखित प्रश्न में, चार विकल्पों में से, उस सही विकल्प का चयन करें जो दिए गए शब्द के सही अर्थ का उचित विकल्प हो।

अवसान

- Ans
- ☒ A. सरल
 - ☒ B. समाप्ति
 - ☒ C. आसान
 - ☒ D. कठिनाई

Question ID : 2752285802

Q.10 निम्नलिखित प्रश्न में, चार विकल्पों में से, उस विकल्प का चयन करें जो सदैव बहुवचन शब्द का सबसे अच्छा विकल्प है।

- Ans
- ☒ A. तेल
 - ☒ B. प्रत्येक
 - ☒ C. चीनी
 - ☒ D. ओठ

Question ID : 2752285809

Q.11 निम्नलिखित प्रश्न में, चार विकल्पों में से, उस सही विकल्प का चयन करें जो वाक्यांशों के लिए एक शब्द का विकल्प हो।

दूसरे के अन्न पर जीने वाला

- Ans
- ☒ A. अपव्ययी
 - ☒ B. पराश्रित
 - ☒ C. परान्नभोगी
 - ☒ D. पारित

Question ID : 2752285801

Q.12 निम्नलिखित प्रश्न में, चार विकल्पों में से, उस विकल्प का चयन करें जो विलोम शब्द का सबसे अच्छा विकल्प है।

समास

- Ans ☒ A. व्यास
☒ B. शोषण
☒ C. विपद
☒ D. सम्पद

Question ID : 2752285800

Q.13 निम्नलिखित प्रश्न में, चार विकल्पों में से, उस विकल्प का चयन करें जो दिए गए शब्द के लिए सही तत्पुरुष समास के विग्रह का विकल्प हो।

परिक्षोपयोगी

- Ans ☒ A. परीक्षा के लिए उपयोगी
☒ B. परीक्षा और उपयोग
☒ C. परीक्षा से उपयोग
☒ D. परीक्षा का उपयोग

Question ID : 2752285797

Q.14 निम्नलिखित प्रश्न में, चार विकल्पों में से, उस विकल्प का चयन करें जो शुद्ध शब्द का सही विकल्प है।

- Ans ☒ A. आवन्थान
☒ B. आवांठन
☒ C. आबंटन
☒ D. आवंटन

Question ID : 2752285805

Q.15 निम्नलिखित प्रश्न में, चार विकल्पों में से, उस विकल्प का चयन करें जो विशेषण के भेद वाला विकल्प हो।

मेरी पुस्तक गायब हो गई।

- Ans ☒ A. सार्वनामिक
☒ B. गुणवाचक
☒ C. निश्चित संख्यावाचक
☒ D. अनिश्चित परिमाण वाचक

Question ID : 2752285795

Q.16 निम्नलिखित प्रश्न में, चार विकल्पों में से, उस सही विकल्प का चयन करें जो दिए गए शब्द-युग्म के अर्थ का सही विकल्प हो।

द्विप और द्वीप

- Ans
- ☒ A. हाथी और भाग्य
 - ☒ B. दूसरा और टापू
 - ☒ C. रस और टापू
 - ☒ D. हाथी और टापू

Question ID : 2752285807

Q.17 निम्नलिखित प्रश्न में, चार विकल्पों में से, उस सही विकल्प का चयन करें जो रिक्त स्थान के लिए उपयुक्त शब्द का सही विकल्प है।

जयंत के _____ में जगदीश जैसा पुत्र नहीं हुआ।

- Ans
- ☒ A. कुल
 - ☒ B. सर्व
 - ☒ C. कूल
 - ☒ D. कर्म

Question ID : 2752285803

Q.18 निम्नलिखित प्रश्न में, चार विकल्पों में से, उस विकल्प का चयन करें जो सदैव स्त्रीलिंग रूप वाला विकल्प है।

- Ans
- ☒ A. आँसू
 - ☒ B. आस्तीन
 - ☒ C. गजब
 - ☒ D. जीव

Question ID : 2752285808

Q.19 निम्नलिखित प्रश्न में, चार विकल्पों में से, उस विकल्प का चयन करें जो भाववाचक संज्ञा का सही विकल्प नहीं है।

- Ans
- ☒ A. जागरण
 - ☒ B. झोना
 - ☒ C. घबराहट
 - ☒ D. बिक्री

Question ID : 2752285793

Q.20 निम्नलिखित प्रश्न में, चार विकल्पों में से, उस विकल्प का चयन करें जो कोष्ठक में दिए गए शब्द के अनुसार अन्य पुरुष वाचक सर्वनाम का सबसे अच्छा विकल्प है।

- Ans
- ☒ A. (आपने) तो मेरी चिंता दूर कर दी।
 - ☒ B. (इनका) कहना कभी गलत नहीं हो सकता है।
 - ☒ C. (मैं) बहुत थक गया हूँ।
 - ☒ D. (तुम) जल्दी दुकान पर जाओ।

Question ID : 2752285810

Section : General Hindi2

Q.1 निम्नलिखित प्रश्न में, चार विकल्पों में से, उस विकल्प का चयन करें जो दिए गए वाक्य के लिए पक्ष के भेद का सबसे अच्छा विकल्प है।

अब काम अच्छा चलने लगा है!

- Ans
- ☒ A. पूर्णताद्योतक
 - ☒ B. आरंभद्योतक
 - ☒ C. नित्यताद्योतक
 - ☒ D. सातप्यबोधक

Question ID : 2752285813

Q.2 निम्नलिखित प्रश्न में, चार विकल्पों में से, उस विकल्प का चयन करें जो दिए गए मुहावरे का सही अर्थ वाला विकल्प है।

कलेजा निकाल के रख देना

- Ans
- ☒ A. असहनीय दुःख होना
 - ☒ B. व्याकुल होना
 - ☒ C. अत्यधिक प्रिय होना
 - ☒ D. सब कुछ समर्पित कर देना

Question ID : 2752285820

Q.3 निम्नलिखित प्रश्न में, चार विकल्पों में से, उस विकल्प का चयन करें जो दी गई लोकोक्ति का सही अर्थ वाला विकल्प है।

खूँटे के बल बछड़ा कूदे

- Ans
- ☒ A. अपनी सामर्थ्य से ज्यादा सोचना
 - ☒ B. खुशामद से कार्य करना
 - ☒ C. दूसरे की शह पाकर ही अकड़ दिखाना
 - ☒ D. देखा-देखी काम करना

Question ID : 2752285824

Q.4 निम्नलिखित प्रश्न में, चार विकल्पों में से, उस विकल्प का चयन करें जो दिए गए वाक्य के काल का सही विकल्प हो।

शायद कल दुकानें खुल जाए।

- Ans
- ☒ A. सामान्य भविष्यकाल
 - ☒ B. आसन्न भूतकाल
 - ☒ C. संभाव्य भविष्यकाल
 - ☒ D. संभाव्य वर्तमानकाल

Question ID : 2752285811

Q.5 निम्नलिखित प्रश्न में, चार विकल्पों में से, उस विकल्प का चयन करें जो दिए गए मुहावरे का सही अर्थ वाला विकल्प है।

काल के गाल में जाना

- Ans
- ☒ A. काम में रुकावट आना
 - ☒ B. बहुत दूर की सोचना
 - ☒ C. मृत्यु-पथ पर बढ़ना
 - ☒ D. बुद्धि भ्रष्ट होना

Question ID : 2752285822

Q.6 निम्नलिखित प्रश्न में, चार विकल्पों में से, उस विकल्प का चयन करें जो दी गई लोकोक्ति का सही अर्थ वाला विकल्प है।

गधा धोने से बछड़ा नहीं हो जाता

- Ans
- ☒ A. स्वभाव नहीं बदलता
 - ☒ B. गरीब की किस्मत ही बुरी होती है
 - ☒ C. अपना नुकसान करना
 - ☒ D. विपत्ति में बुद्धि काम नहीं करती

Question ID : 2752285825

Q.7 निम्नलिखित प्रश्न में, चार विकल्पों में से, उस विकल्प का चयन करें जो दिए गए मुहावरे का सही अर्थ वाला विकल्प है।

कागजी घोड़े दौड़ाना

- Ans
- ☒ A. हर किसी की बात पर भरोसा करना
 - ☒ B. प्रभावित करना
 - ☒ C. ध्यान न देना
 - ☒ D. केवल लिखा-पढ़ी करते रहना

Question ID : 2752285821

Q.8 निम्नलिखित प्रश्न में, चार विकल्पों में से, उस विकल्प का चयन करें जो शुद्ध वाक्य का सबसे अच्छा विकल्प है।

- Ans
- ☒ A. मुझे सफल होने की आशा नहीं है।
 - ☒ B. मुझे सफल होने से आशा नहीं है।
 - ☒ C. मुझे सफल होने की निराशा है।
 - ☒ D. मुझे सफल का होने की आशा नहीं है।

Question ID : 2752285814

Q.9 निम्नलिखित प्रश्न में, चार विकल्पों में से, उस विकल्प का चयन करें जो सही वाक्य भेद का विकल्प हो।

वह पुस्तक खो गई थी, परंतु मुझे मिल गई।

- Ans ☒ A. संयुक्त वाक्य
☐ B. सरल वाक्य
☐ C. मिश्र वाक्य
☐ D. विधानवाचक वाक्य

Question ID : 2752285816

Q.10 निम्नलिखित प्रश्न में, चार विकल्पों में से, उस विकल्प का चयन करें जो दिए गए वाक्य के लिए वृत्ति के भेद का सबसे अच्छा विकल्प है।

अगर बारिश हो जाए तो खेतों को पानी मिल जाता।

- Ans ☐ A. विध्यर्थ
☒ B. संकेतार्थ
☐ C. संभावनार्थ
☐ D. निश्चयार्थ

Question ID : 2752285812

Q.11 निम्नलिखित प्रश्न में, चार विकल्पों में से, उस विकल्प का चयन करें जो विराम चिह्न युक्त वाक्य का सही विकल्प हो।

- Ans ☐ A. इस पर उस मित्र ने कहा, "बहन जी! जब मैं आपके पति को देखने आया था, तभी रुपए लौटा दिए थे?"
☐ B. इस पर उस मित्र ने कहा, बहन जी! जब मैं आपके पति को देखने आया था, तभी रुपए लौटा दिए थे।
☒ C. इस पर उस मित्र ने कहा, "बहन जी! जब मैं आपके पति को देखने आया था, तभी रुपए लौटा दिए थे।"
☐ D. इस पर उस मित्र ने कहा, "बहन जी! जब मैं आपके पति को देखने आया था तभी रुपए लौटा दिए थे"

Question ID : 2752285817

Q.12 निम्नलिखित प्रश्न में, चार विकल्पों में से, उस विकल्प का चयन करें जो दी गई लोकोक्ति का सही अर्थ वाला विकल्प है।

खुदा गंजे को नाखून नहीं देता

- Ans ☐ A. अत्यंत तुच्छ होना
☒ B. ईश्वर सभी की भलाई का ध्यान रखता
☐ C. अपनी असफलता पर खीझना
☐ D. भाग्यशाली होना

Question ID : 2752285823

Q.13 निम्नलिखित प्रश्न में, चार विकल्पों में से, उस विकल्प का चयन करें जो विराम चिह्न युक्त वाक्य का सही विकल्प हो।

- Ans ☒ A. "सच बुआ?" राकेश ने खुश होकर कहा।
☒ B. "सच बुआ?" राकेश ने खुश होकर कहा
☒ C. सच बुआ राकेश ने खुश होकर कहा।
☒ D. सच बुआ? राकेश ने खुश होकर कहा।

Question ID : 2752285818

Q.14 निम्नलिखित प्रश्न में, चार विकल्पों में से, उस विकल्प का चयन करें जो विराम चिह्न युक्त वाक्य का सही विकल्प हो।

- Ans ☒ A. "मुझे ऐसा धन नहीं चाहिए, जो बिना परिश्रम के मिले" सोहम ने कहा।
☒ B. मुझे ऐसा धन नहीं चाहिए जो बिना परिश्रम के मिले। सोहम ने कहा।
☒ C. "मुझे ऐसा धन नहीं चाहिए, जो बिना परिश्रम के मिले।" सोहम ने कहा?
☒ D. "मुझे ऐसा धन नहीं चाहिए, जो बिना परिश्रम के मिले।" सोहम ने कहा।

Question ID : 2752285819

Q.15 निम्नलिखित प्रश्न में, चार विकल्पों में से, उस विकल्प का चयन करें जो सही वाक्य भेद का विकल्प हो।

इसकी तलाशी लो और घड़ी मिल जाएगी।

- Ans ☒ A. संयुक्त वाक्य
☒ B. सरल वाक्य
☒ C. संदेहवाचक वाक्य
☒ D. मिश्र वाक्य

Question ID : 2752285815

Comprehension:

निम्नलिखित गद्यांश को पढ़िए और दिए गए प्रश्नों के उत्तर दीजिए।

चेन्नई में आई बाढ़ अब उतार पर है। इस त्रासदी से निबटने में इस शहर ने जिस साहस का परिचय दिया, जिस तरह से सोशल मीडिया ने एक बार फिर बचाव के काम में अहम किरदार निभाया, बल्कि कुछ मामलों में तो जान बचाने में भी उसकी भूमिका रही। चेन्नई में आई बाढ़ की असली वजह थी अड्यार नदी-बेसिन का नये हवाई अड्डे के लिए अतिक्रमण। ठीक उसी तरह, जैसे दूसरे नदी विस्तारों का आवासीय निर्माण के लिए इस्तमाल कर लिया गया है। नदी के कुदरती रास्तों को अवरुद्ध किए जाने से इसका जल आस-पास के इलाकों में उमड़ गया। जब तक प्रकृति अपना क्रोध नहीं दिखाती, हमारे योजनाकार हर जोखिम को नजरअंदाज करते रहते हैं और उस चीज की तलाश में रहते हैं, जिसे वे ले सकते हैं। हमने इसी तरह का विध्वंसक सैलाब मुंबई में भी देखा। कुछ ही समय पहले श्रीनगर में भी ऐसी ही बर्बादी देखी। हर जगह मुख्य वजह मिली - अनियोजित शहरीकरण और बुनियादी नियमों की अनदेखी। फिर भी हर बार त्रासदी की गम्भीरता लोगों की यादों में धुँधली पड़ जाती है। चेन्नई की तरह दिल्ली में भी ऐसे सैलाब की सम्भावना है।

SubQuestion No : 16

Q.16 इनमें से कौन - सा बाढ़ का पर्यायवाची शब्द नहीं है?

- Ans ☒ A. दुर्बल
☒ B. वृद्धि
☒ C. सैलाब
☒ D. विकास

Question ID : 2752285830

Comprehension:

निम्नलिखित गद्यांश को पढ़िए और दिए गए प्रश्नों के उत्तर दीजिए।

चेन्नई में आई बाढ़ अब उतार पर है। इस त्रासदी से निबटने में इस शहर ने जिस साहस का परिचय दिया, जिस तरह से सोशल मीडिया ने एक बार फिर बचाव के काम में अहम किरदार निभाया, बल्कि कुछ मामलों में तो जान बचाने में भी उसकी भूमिका रही। चेन्नई में आई बाढ़ की असली वजह थी अड्यार नदी-बेसिन का नये हवाई अड्डे के लिए अतिक्रमण। ठीक उसी तरह, जैसे दूसरे नदी विस्तारों का आवासीय निर्माण के लिए इस्तमाल कर लिया गया है। नदी के कुदरती रास्तों को अवरुद्ध किए जाने से इसका जल आस-पास के इलाकों में उमड़ गया। जब तक प्रकृति अपना क्रोध नहीं दिखाती, हमारे योजनाकार हर जोखिम को नजरअंदाज करते रहते हैं और उस चीज की तलाश में रहते हैं, जिसे वे ले सकते हैं। हमने इसी तरह का विध्वंसक सैलाब मुम्बई में भी देखा। कुछ ही समय पहले श्रीनगर में भी ऐसी ही बर्बादी देखी। हर जगह मुख्य वजह मिली - अनियोजित शहरीकरण और बुनियादी नियमों की अनदेखी। फिर भी हर बार त्रासदी की गम्भीरता लोगों की यादों में धुंधली पड़ जाती है। चेन्नई की तरह दिल्ली में भी ऐसे सैलाब की सम्भावना है।

SubQuestion No : 17

Q.17 अनुच्छेद के अनुसार योजनाकार कब तक लापरवाह रहते हैं?

Ans



A. सरकार दबाव न बनाए



B. प्रकृति अपना क्रोध न दिखाए



C. जनता जागरूक न हो जाए



D. समस्या हल न हो जाए

Question ID : 2752285828

Comprehension:

निम्नलिखित गद्यांश को पढ़िए और दिए गए प्रश्नों के उत्तर दीजिए।

चेन्नई में आई बाढ़ अब उतार पर है। इस त्रासदी से निबटने में इस शहर ने जिस साहस का परिचय दिया, जिस तरह से सोशल मीडिया ने एक बार फिर बचाव के काम में अहम किरदार निभाया, बल्कि कुछ मामलों में तो जान बचाने में भी उसकी भूमिका रही। चेन्नई में आई बाढ़ की असली वजह थी अड्यार नदी-बेसिन का नये हवाई अड्डे के लिए अतिक्रमण। ठीक उसी तरह, जैसे दूसरे नदी विस्तारों का आवासीय निर्माण के लिए इस्तमाल कर लिया गया है। नदी के कुदरती रास्तों को अवरुद्ध किए जाने से इसका जल आस-पास के इलाकों में उमड़ गया। जब तक प्रकृति अपना क्रोध नहीं दिखाती, हमारे योजनाकार हर जोखिम को नजरअंदाज करते रहते हैं और उस चीज की तलाश में रहते हैं, जिसे वे ले सकते हैं। हमने इसी तरह का विध्वंसक सैलाब मुम्बई में भी देखा। कुछ ही समय पहले श्रीनगर में भी ऐसी ही बर्बादी देखी। हर जगह मुख्य वजह मिली - अनियोजित शहरीकरण और बुनियादी नियमों की अनदेखी। फिर भी हर बार त्रासदी की गम्भीरता लोगों की यादों में धुंधली पड़ जाती है। चेन्नई की तरह दिल्ली में भी ऐसे सैलाब की सम्भावना है।

SubQuestion No : 18

Q.18 इस अनुच्छेद का कोई उपयुक्त शीर्षक:

Ans



A. प्राचीन समाज



B. आज के समय की माँग



C. प्रकृति का कहर



D. शहरीकरण

Question ID : 2752285831

Comprehension:

निम्नलिखित गद्यांश को पढ़िए और दिए गए प्रश्नों के उत्तर दीजिए।

चेन्नई में आई बाढ़ अब उतार पर है। इस त्रासदी से निबटने में इस शहर ने जिस साहस का परिचय दिया, जिस तरह से सोशल मीडिया ने एक बार फिर बचाव के काम में अहम किरदार निभाया, बल्कि कुछ मामलों में तो जान बचाने में भी उसकी भूमिका रही। चेन्नई में आई बाढ़ की असली वजह थी अड्यार नदी-बेसिन का नये हवाई अड्डे के लिए अतिक्रमण। ठीक उसी तरह, जैसे दूसरे नदी विस्तारों का आवासीय निर्माण के लिए इस्तमाल कर लिया गया है। नदी के कुदरती रास्तों को अवरुद्ध किए जाने से इसका जल आस-पास के इलाकों में उमड़ गया। जब तक प्रकृति अपना क्रोध नहीं दिखाती, हमारे योजनाकार हर जोखिम को नजरअंदाज करते रहते हैं और उस चीज की तलाश में रहते हैं, जिसे वे ले सकते हैं। हमने इसी तरह का विध्वंसक सैलाब मुम्बई में भी देखा। कुछ ही समय पहले श्रीनगर में भी ऐसी ही बर्बादी देखी। हर जगह मुख्य वजह मिली - अनियोजित शहरीकरण और बुनियादी नियमों की अनदेखी। फिर भी हर बार त्रासदी की गम्भीरता लोगों की यादों में धुंधली पड़ जाती है। चेन्नई की तरह दिल्ली में भी ऐसे सैलाब की सम्भावना है।

SubQuestion No : 19

Q.19 मुंबई, श्रीनगर जैसे स्थानों में बाढ़ से हुई बर्बादी के पीछे कारण था?

- Ans
- ☒ A. त्रासदी की गम्भीरता
 - ☒ B. प्रकृति का सहयोग
 - ☒ C. शहरों का संकुचन
 - ☒ D. अनियोजित शहरीकरण

Question ID : 2752285829

Comprehension:

निम्नलिखित गद्यांश को पढ़िए और दिए गए प्रश्नों के उत्तर दीजिए।

चेन्नई में आई बाढ़ अब उतार पर है। इस त्रासदी से निबटने में इस शहर ने जिस साहस का परिचय दिया, जिस तरह से सोशल मीडिया ने एक बार फिर बचाव के काम में अहम किरदार निभाया, बल्कि कुछ मामलों में तो जान बचाने में भी उसकी भूमिका रही। चेन्नई में आई बाढ़ की असली वजह थी अड्यार नदी-बेसिन का नये हवाई अड्डे के लिए अतिक्रमण। ठीक उसी तरह, जैसे दूसरे नदी विस्तारों का आवासीय निर्माण के लिए इस्तमाल कर लिया गया है। नदी के कुदरती रास्तों को अवरुद्ध किए जाने से इसका जल आस-पास के इलाकों में उमड़ गया। जब तक प्रकृति अपना क्रोध नहीं दिखाती, हमारे योजनाकार हर जोखिम को नजरअंदाज करते रहते हैं और उस चीज की तलाश में रहते हैं, जिसे वे ले सकते हैं। हमने इसी तरह का विध्वंसक सैलाब मुम्बई में भी देखा। कुछ ही समय पहले श्रीनगर में भी ऐसी ही बर्बादी देखी। हर जगह मुख्य वजह मिली - अनियोजित शहरीकरण और बुनियादी नियमों की अनदेखी। फिर भी हर बार त्रासदी की गम्भीरता लोगों की यादों में धुंधली पड़ जाती है। चेन्नई की तरह दिल्ली में भी ऐसे सैलाब की सम्भावना है।

SubQuestion No : 20

Q.20 अनुच्छेद के अनुसार 'बाढ़ अब उतार पर है' का क्या अर्थ है?

- Ans
- ☒ A. बाढ़ अनियंत्रित है
 - ☒ B. बाढ़ घट रही है
 - ☒ C. बाढ़ उतर गई है
 - ☒ D. बाढ़ फैल रही है

Question ID : 2752285827

DSSSB Junior Assistant Question Paper 2021

| | |
|------------------|--------------------------------------|
| Participant ID | Join Telegram Group "HaryanaJobs.in" |
| Participant Name | |
| Test Center Name | |
| Test Date | 31/08/2021 |
| Test Time | 8:30 AM - 10:30 AM |
| Subject | Junior Assistant |

Section : General Ability1

Q.1 Select the option that is related to the third term on the same basis as the second term is related to the first term.

Screwdriver : Screw :: Hammer : ?

- Ans ☒ A. Handle
☒ B. Nail
☒ C. Iron
☒ D. Nut

Question ID : 2752286043

Q.2 Out of the given options, three are similar in a certain manner. However, one option is NOT like the other three. Select the option which is different from the rest.

- Ans ☒ A. QL : MP
☒ B. KP : GT
☒ C. MC : IG
☒ D. DX : GU

Question ID : 2752286041

Q.3 If car is bus, bus is scooter, scooter is bicycle, bicycle is boat, boat is aeroplane, aeroplane is helicopter, helicopter is bullock cart, then which of the following is a transport that can be used in water?

- Ans ☒ A. helicopter
☒ B. boat
☒ C. aeroplane
☒ D. bullock cart

Question ID : 2752286046

Q.4 In a certain code language,
2351 means grapes are very sour
4359 means these are the grapes
3851 means grapes are very healthy
what is the code for very?

- Ans ☒ A. 3
☒ B. 1
☒ C. 8
☒ D. 5

Question ID : 2752286049

Q.5 Arrange the following in a logical sequence:

1. Death
2. Toddler
3. Adult
4. Birth
5. Teen

- Ans ☒ A. 1, 5, 3, 4, 2
☒ B. 4, 2, 5, 1, 3
☒ C. 4, 2, 5, 3, 1
☒ D. 1, 3, 5, 4, 2

Question ID : 2752286050

Q.6 Out of the given options, three are similar in a certain manner. However, one option is NOT like the other three. Select the option which is different from the rest.

- Ans ☒ A. Skirt
☒ B. Shirt
☒ C. Sweater
☒ D. Jacket

Question ID : 2752286040

Q.7 Out of the given options, three are similar in a certain manner. However, one option is NOT like the other three. Select the option which is different from the rest.

- Ans ☒ A. ECA
☒ B. YAC
☒ C. JHF
☒ D. FDB

Question ID : 2752286039

Q.8 Out of the given options, three are similar in a certain manner. However, one option is NOT like the other three. Select the option which is different from the rest.

- Ans ☒ A. Chef : University
☒ B. Doctor: Hospital
☒ C. Artist : Theatre
☒ D. Student : Class

Question ID : 2752286038

Q.9 Select the pair that is related on the same basis to the pair given in the question.

IRX : KUB :: ?

- Ans ☒ A. MUD : OXH
☐ B. BRK : FUL
☐ C. HMW : JPZ
☐ D. QCK : OXM

Question ID : 2752286045

Q.10 Anjali, Bidisha, Charlie and Diksha compare their weights. The total weight of Anjali and Bidhisha together is equal to the total weight of Charlie and Diksha together. But the total weight of Bidhisha and Diksha together is more than that of Anjali and Charlie together. Anjali's weight is more than that of Bidhisha's. Who among all weigh the least?

- Ans ☐ A. Anjali
☐ B. Bidhisha
☐ C. Diksha
☒ D. Charlie

Question ID : 2752286053

Q.11 Find the missing term in the following series:

DF, HJ, LN, _____, TV

- Ans ☐ A. PT
☐ B. NQ
☐ C. MP
☒ D. PR

Question ID : 2752286035

Q.12 If FLAMINGO is coded as AMFLNGOI, then what is the code for PANDEMIC?

- Ans ☐ A. ANDPCMIE
☒ B. NDPAMICE
☐ C. DNPMIECA
☐ D. CMIPEDNA

Question ID : 2752286048

Q.13 Find the wrong term in the following series:

A, I, P, V, B, E

- Ans ☒ A. B
☐ B. I
☐ C. P
☐ D. V

Question ID : 2752286034

Q.14 If MATCH = 42, BELIEF = 56, then what is the code for MUSCULAR?

- Ans
- ☒ A. 81
 - ☒ B. 70
 - ☒ C. 100
 - ☒ D. 90

Question ID : 2752286047

Q.15 उस जोड़ी का चयन करें जो प्रश्न में दी गई जोड़ी से समान प्रकार से संबंधित है।

घोड़ा : घोड़ी :: ?

- Ans
- ☒ A. बैल : गाय
 - ☒ B. मुर्गी : चूड़ा
 - ☒ C. कुतिया : कुत्ता
 - ☒ D. शेरनी : शेर

Question ID : 2752286044

Q.16 Prachi said to Manish, "You are my mother's father's son-in-laws' son." How is Manish related to Prachi, if Manish's mother has no siblings?

- Ans
- ☒ A. Brother
 - ☒ B. Brother-in-law
 - ☒ C. Father
 - ☒ D. Son

Question ID : 2752286052

Q.17 Aman is shorter than Smriti, but not as short as Micky. Priyank is shorter than Sam, but taller than Smriti. Who is the shortest of all?

- Ans
- ☒ A. Aman
 - ☒ B. Micky
 - ☒ C. Sam
 - ☒ D. Priyank

Question ID : 2752286051

Q.18 Complete the following letter series:

HGF, MLK, RQP, WVU, _____

- Ans
- ☒ A. CDW
 - ☒ B. ACY
 - ☒ C. BAZ
 - ☒ D. DCX

Question ID : 2752286036

Q.19 Select the option that is related to the third term on the same basis as the second term is related to the first term.

EHK : ILO :: DQW : ?

- Ans ☐ A. GTN
☐ B. ESB
☐ C. IVB
☒ D. HUA

Question ID : 2752286042

Q.20 Find the missing term in the following series:

V3X, _____, P9R, M12O

- Ans ☐ A. S6V
☐ B. R6U
☒ C. S6U
☐ D. Q6V

Question ID : 2752286037

Section : General Ability2

Q.1 In the question two statements are given, followed by three conclusions, I, II and III. You have to consider the statements to be true even if it seems to be at variance from commonly known facts. You have to decide which of the given conclusions, if any, follows from the given statements.

Statement 1 : All watchmen are bodyguards.
Statement 2 : All trainers are bodyguards.

Conclusion I : Some trainers are watchmen.
Conclusion II : Some bodyguards are watchmen.
Conclusion III : Some bodyguards are trainers

- Ans ☐ A. Only conclusion I and II follows
☐ B. Only conclusion I follows
☒ C. Only conclusion II and III follows
☐ D. All conclusions I, II and III follow

Question ID : 2752286056

Q.2 In the question two statements are given, followed by two conclusions, I and II. You have to consider the statements to be true even if it seems to be at variance from commonly known facts. You have to decide which of the given conclusions, if any, follows from the given statements.

Statement 1 : All pencils are pens.

Statement 2 : No pens are books.

Conclusion I : Some books are pencils.

Conclusion II : Some pencils are pens.

- Ans ☐ A. Only conclusion I follows
- ☒ B. Only conclusion II follows
- ☐ C. Both conclusions I and II follow
- ☐ D. Neither conclusion I nor II follows

Question ID : 2752286055

Q.3 Select the option that is related to the third image on the same basis as the second image is related to the first image.

- Ans ☐ A.
- ☐ B.
- ☐ C.
- ☒ D.

Question ID : 2752286067

Q.4 Which two signs should be interchanged to make the given equation correct?

$$18 \div 3 + 2 \times 10 - 6 = 16$$

- Ans ☐ A. + and -
- ☐ B. ÷ and -
- ☒ C. + and ×
- ☐ D. ÷ and ×

Question ID : 2752286059

Q.5 Out of the given options, three are similar in a certain manner. However, one option is NOT like the other three. Select the option which is different from the rest.

- Ans ☐ A.
- ☐ B.
- ☒ C.
- ☐ D.

Question ID : 2752286068

Q.6 Complete the following number series:

17, 50, 149, 446, _____

Ans ☒ A. 1461

☒ B. 1337

☒ C. 1252

☒ D. 1783

Question ID : 2752286060

Q.7 From the given answer figures, select the one in which the question figure is hidden/embedded.

Ans ☒ A.

☒ B.

☒ C.

☒ D.

Question ID : 2752286072

Q.8 In the following question, four position of the same dice is given. Which number will be at the face opposite to the face having the 7?

Ans ☒ A. 5

☒ B. 9

☒ C. 4

☒ D. 8

Question ID : 2752286071

Q.9 In the question, one statement is given, followed by two arguments I and II. You have to consider the statement to be true even if it seems to be at variance from commonly known facts. You have to decide which of the given arguments, if any, supports the given statement.

Statement: Should there be only one type of fashion in the entire country?

Arguments:

I. Yes, it will promote equality among the residents of the country.

II. No, the culture of people staying in different regions of the country is different.

Ans ☒ A. Only argument II is strong

☒ B. Neither argument I nor argument II is strong

☒ C. Only argument I is strong

☒ D. Both argument I and argument II is strong

Question ID : 2752286057

Q.10 Which of the following answer figure completes the series of the question figure?

- Ans ☒ A.
☒ B.
☒ C.
☒ D.

Question ID : 2752286066

Q.11 Which of the following options is the wrong figure in the series?

- Ans ☒ A. Image D
☒ B. Image A
☒ C. Image C
☒ D. Image B

Question ID : 2752286069

Q.12 Complete the following number series:

17, 14, 19, 12, _____

- Ans ☒ A. 24
☒ B. 22
☒ C. 21
☒ D. 23

Question ID : 2752286061

Q.13 Which of the following Venn diagrams best represents the relationship between lion, carnivorous and goat?

- Ans ☒ A.
☒ B.
☒ C.
☒ D.

Question ID : 2752286062

Q.14 In the following figure, triangle represents fathers, rectangle represents engineers, circle represents pilots. How many fathers are pilots only?

- Ans ☒ A. 16
☒ B. 13
☒ C. 9
☒ D. 4

Question ID : 2752286064

Q.15 Select the option that is related to the third term on the same basis as the second term is related to the first term.

50 : 7 :: 82 : ?

- Ans ☒ A. 18
☒ B. 9
☒ C. 12
☒ D. 5

Question ID : 2752286058

Q.16 Which of the following Venn diagrams best represents the relationship between vegetables, onions and potatoes?

- Ans ☒ A.
☒ B.
☒ C.
☒ D.

Question ID : 2752286065

Q.17 The given Venn diagram shows the number of people who painted their house in red, yellow and green. How many of these people have painted their house yellow and green only?

- Ans ☒ A. 8
☒ B. 5
☒ C. 6
☒ D. 14

Question ID : 2752286063

Q.18 Which of the following answer figure patterns can be combined to make the question figure?

- Ans ☒ A.
☒ B.
☒ C.
☒ D.

Question ID : 2752286070

Q.19 In the question one statement is given, followed by two course of actions, I and II. You have to consider the statements to be true even if it seems to be at variance from commonly known facts. You have to decide which of the given course of actions, if any, follows from the given statements.

Statement: Steps should be taken to develop rural areas in India.

Course of Actions:

I : Each village in the rural area should have access to electricity.

II : There should be a formal education system in the rural areas.

- Ans ☒ A. Only I follows
- ☒ B. Both I and II follows
- ☒ C. Only II follows
- ☒ D. Neither I nor II follows

Question ID : 2752286054

Q.20 If a mirror is placed on the line MN, then which of the answer figures is the right image of the given figure?

- Ans ☒ A.
- ☒ B.
- ☒ C.
- ☒ D.

Question ID : 2752286073

Section : General Awareness1

Q.1 Which of the following banks primarily focuses on the development of MSME (Micro, Small and Medium Enterprise) sector?

- Ans ☒ A. National Bank For Agriculture & Rural Development
- ☒ B. Small Industries Development Bank of India
- ☒ C. Reserve Bank of India
- ☒ D. State Bank of India

Question ID : 2752286078

Q.2 _____ is the chemical process in which different types of chemical reactions involved in controlling the living state of the cells in an organism.

- Ans ☒ A. Transportation
- ☒ B. Reproduction
- ☒ C. Respiration
- ☒ D. Metabolism

Question ID : 2752286083

Q.3 Which among the following national parks is located in Manipur?

- Ans ☒ A. Keibul Lamjao National Park
- ☒ B. Coringa Wildlife Sanctuary
- ☒ C. Jim Corbett National Park
- ☒ D. Nagarhole National Park

Question ID : 2752286085

Q.4 Which among the following soils is formed as a result of high leaching?

- Ans ☒ A. Black
- ☒ B. Arid
- ☒ C. Laterite
- ☒ D. Red

Question ID : 2752286091

Q.5 When was Export-Import Bank of India established?

- Ans ☒ A. 1982
- ☒ B. 1996
- ☒ C. 1975
- ☒ D. 1970

Question ID : 2752286080

Q.6 The lens focuses light on the back of the eye. The back of the eye is known as _____.

- Ans ☒ A. retina
- ☒ B. lens
- ☒ C. iris
- ☒ D. cornea

Question ID : 2752286084

Q.7 _____ = GDP (Gross Domestic Product) + NFIA (net factor income from abroad).

- Ans ☒ A. Gross National Product
- ☒ B. Net national expenditure
- ☒ C. Net Domestic Product
- ☒ D. Net National Product

Question ID : 2752286082

Q.8 Indravati river is the tributary of which of the following rivers?

- Ans ☒ A. Godavari
- ☒ B. Mahanadi
- ☒ C. Krishna
- ☒ D. Narmada

Question ID : 2752286089

Q.9 Dhanuyatra is a great mass festival of Odisha which is based on the noble deeds of Lord

- Ans
- ☐ A. Ram
 - ☐ B. Ganesh
 - ☒ C. Krishna
 - ☐ D. Hanuman

Question ID : 2752286075

Q.10 Ainchaliyan is a type of religious songs often sung to a newly wed bride or to an unmarried girl, who is expected to get married in near future. It is associated with which of the following states?

- Ans
- ☐ A. Uttar Pradesh
 - ☒ B. Himachal Pradesh
 - ☐ C. Haryana
 - ☐ D. Punjab

Question ID : 2752286077

Q.11 Which among the following type of mountains is also known as "Mountains of Accumulation"?

- Ans
- ☐ A. Residual Mountains
 - ☐ B. Fold Mountains
 - ☒ C. Volcanic Mountains
 - ☐ D. Block Mountains

Question ID : 2752286090

Q.12 Rickets is caused due to the deficiency of which of the following vitamins?

- Ans
- ☐ A. Vitamin C
 - ☒ B. Vitamin D
 - ☐ C. Vitamin E
 - ☐ D. Vitamin A

Question ID : 2752286087

Q.13 Which among the following lines separates India and Pakistan?

- Ans
- ☒ A. Radcliffe Line
 - ☐ B. Hindenburg Line
 - ☐ C. Durand Line
 - ☐ D. MacMohan Line

Question ID : 2752286088

Q.14 Morulem is a traditional folk dance in Goa performed during which of the following festivals?

- Ans ☒ A. Carnival
☒ B. Lokrang Festival
☒ C. Sunburn Festival
☒ D. Shigmo Festival

Question ID : 2752286076

Q.15 Rani ki Vav or 'Queen's Stepwell' is a unique stepwell located in which of the following states?

- Ans ☒ A. Maharashtra
☒ B. Madhya Pradesh
☒ C. Gujarat
☒ D. Tamil Nadu

Question ID : 2752286074

Q.16 Which among the following taxes is imposed on the bodies that have negative externality?

- Ans ☒ A. Pigouvian tax
☒ B. Octroi tax
☒ C. Smith tax
☒ D. Tobin tax

Question ID : 2752286081

Q.17 Who among the following holds the record of presenting the most number of financial budgets as of April 2020?

- Ans ☒ A. Pranab Mukherjee
☒ B. Morarji Desai
☒ C. Nirmala Sitharaman
☒ D. Yashwant Sinha

Question ID : 2752286079

Q.18 Who among the following was the founder of the Chalukya Dynasty?

- Ans ☒ A. Aditya I
☒ B. Pulakeshin I
☒ C. Kokalla I
☒ D. Krishna I

Question ID : 2752286092

Q.19 The Bengal Sati Regulation which banned the Sati practice in all jurisdictions of British India was passed in _____.

- Ans
- ☐ A. 1850
 - ☐ B. 1792
 - ☐ C. 1838
 - ☒ D. 1829

Question ID : 2752286093

Q.20 Parrot belongs to which of the following classes of vertebrates?

- Ans
- ☒ A. Aves
 - ☐ B. Pisces
 - ☐ C. Reptilla
 - ☐ D. Amphibia

Question ID : 2752286086

Section : General Awareness2

Q.1 Who among the following famous NBA players died in a helicopter crash in January 2020?

- Ans
- ☐ A. Kevin Durant
 - ☒ B. Kobe Bryant
 - ☐ C. Stephen Curry
 - ☐ D. James Harden

Question ID : 2752286101

Q.2 Who among the following holds the record of winning the most ATP Masters 1000 singles titles in tennis as of April 2020?

- Ans
- ☐ A. Andy Murray
 - ☐ B. Novak Djokovic
 - ☒ C. Rafael Nadal
 - ☐ D. Roger Federer

Question ID : 2752286110

Q.3 The Surat Split was the splitting of the Indian National Congress into two groups - the Extremists and the Moderates - at the Surat session in _____.

- Ans
- ☐ A. 1885
 - ☐ B. 1932
 - ☒ C. 1907
 - ☐ D. 1918

Question ID : 2752286096

Q.4 How many teams participated in the 1975 Cricket World Cup?

- Ans ☒ A. 10
☒ B. 14
☒ C. 12
☒ D. 8

Question ID : 2752286109

Q.5 For which of the following films did Bhanu Athaiya receive an oscar for the best costume designer?

- Ans ☒ A. Swades
☒ B. Slumdog Millionaire
☒ C. Lagaan: Once Upon a Time in India
☒ D. Gandhi

Question ID : 2752286097

Q.6 Which among the following teams holds the record of the highest team score in the Under 19 Cricket World Cup as of April 2020?

- Ans ☒ A. England
☒ B. New Zealand
☒ C. Australia
☒ D. India

Question ID : 2752286112

Q.7 The Innovation Cell of the Ministry of Human Resources Development and All India Council for Technical Education in collaboration with Forge and InnovatioCuris launched a mega online challenge called _____ to test the ability of students to innovate.

- Ans ☒ A. SAMADHAN
☒ B. PARIKSHA
☒ C. SUVIDHA
☒ D. JEEVAN

Question ID : 2752286103

Q.8 Which among the following constitutional amendments incorporated Goa, Daman and Diu in the Indian Union?

- Ans ☒ A. 18th
☒ B. 5th
☒ C. 12th
☒ D. 22nd

Question ID : 2752286107

Q.9 Which among the following state's cabinets passed a resolution to abolish the Legislative Council on 27th January 2020?

- Ans
- ☒ A. Maharashtra
 - ☒ B. Madhya Pradesh
 - ☒ C. Tamil Nadu
 - ☒ D. Andhra Pradesh

Question ID : 2752286102

Q.10 Which among the following books is written by Salman Rushdie?

- Ans
- ☒ A. The Enchantress of Florence
 - ☒ B. The End of Imagination
 - ☒ C. The King of Dark Chamber
 - ☒ D. Between the Assassinations

Question ID : 2752286098

Q.11 Where was the first session of United Nations held?

- Ans
- ☒ A. New York
 - ☒ B. Paris
 - ☒ C. London
 - ☒ D. Geneva

Question ID : 2752286100

Q.12 The Indian Council Act passed in 1909 was popularly known as _____.

- Ans
- ☒ A. Charter Act
 - ☒ B. Morley Minto Reforms
 - ☒ C. Pitt's India Act
 - ☒ D. Wavell Plan

Question ID : 2752286095

Q.13 Article 29 and 30 of the Indian Constitution deals with the _____.

- Ans
- ☒ A. Right to Equality
 - ☒ B. Cultural and Educational Rights
 - ☒ C. Right Against Exploitation
 - ☒ D. Right to Freedom

Question ID : 2752286105

Q.14 The Beighton Cup is associated with which of the following sports?

- Ans
- ☒ A. Cricket
 - ☒ B. Golf
 - ☒ C. Table Tennis
 - ☒ D. Hockey

Question ID : 2752286113

Q.15 The concept of "Freedom of trade and commerce" in the Indian Constitution is borrowed from the constitution of which of the following countries?

- Ans ☒ A. Australia
☒ B. United States
☒ C. Japan
☒ D. Canada

Question ID : 2752286106

Q.16 In which year did Lord Mountbatten address the Constituent Assembly for the last time?

- Ans ☒ A. 1947
☒ B. 1945
☒ C. 1946
☒ D. 1948

Question ID : 2752286108

Q.17 What is the rank of India as per Global Talent Competitive Index (GTCI) 2020 released at the annual meeting of the World Economic Forum (WEF)?

- Ans ☒ A. 72
☒ B. 63
☒ C. 54
☒ D. 85

Question ID : 2752286104

Q.18 The Simla Conference of _____ was a meeting between the Viceroy of India Lord Wavell and the major political leaders of British India at Simla.

- Ans ☒ A. 1919
☒ B. 1945
☒ C. 1928
☒ D. 1936

Question ID : 2752286094

Q.19 Who among the following Indian women has scored the highest aggregate runs in the Women's ODI cricket format as of April 2020?

- Ans ☒ A. Harmanpreet Kaur
☒ B. Mithali Raj
☒ C. Smriti Mandhana
☒ D. Deepti Sharma

Question ID : 2752286111

Q.20 Who among the following was the first chairman of the ISRO?

- Ans ☒ A. A. S. Kiran Kumar
☒ B. Satish Dhawan
☒ C. Shailesh Nayak
☒ D. Vikram Sarabhai

Question ID : 2752286099

Section : Arithmetic Ability1

Q.1 In a bag there are notes of Rs. 10, Rs. 20 and Rs. 50 in the proportion 3 : 4 : 5. If there are in all Rs. 1800. What is the number of notes of Rs. 50?

- Ans ☒ A. 30
☒ B. 25
☒ C. 15
☒ D. 20

Question ID : 2752286129

Q.2 Three numbers are in the ratio 7 : 2 : 8. Sum of the, difference of first and second number and sum of second and third number is 90. What are the numbers?

- Ans ☒ A. 21 , 6 , 24
☒ B. 28 , 8 , 32
☒ C. 42 , 12 , 48
☒ D. 14 , 4 , 16

Question ID : 2752286130

Q.3 Price of gram flour is 20 percent costlier than wheat flour. How much percent is the price of wheat flour is less than gram flour?

- Ans ☒ A. 76.23 percent
☒ B. 25.11 percent
☒ C. 83.33 percent
☒ D. 16.67 percent

Question ID : 2752286124

Q.4 A contractor pays Rs. 100 to a worker for each day and the worker forfeits Rs. 40 for each day if he is idle. At the end of 30 days, the worker gets Rs. 2300. For how many days the worker was idle?

- Ans ☒ A. 6 days
☒ B. 5 days
☒ C. 8 days
☒ D. 7 days

Question ID : 2752286117

Q.5 The product of fractions M and N is $\frac{9}{8}$. What is the value of fraction N if fraction M is half of fraction N?

Ans ☒ A. $\frac{3}{2}$

☐ B. $\frac{9}{16}$

☐ C. $\frac{9}{4}$

☐ D. $\frac{3}{4}$

Question ID : 2752286115

Q.6 For the sale, a shopkeeper first increased the rate of its products by 15 percent and then offered a discount of 15 percent. What is the change in the rate of products in comparison to the original?

Ans ☒ A. 2.25 percent

☐ B. 1.50 percent

☐ C. 1 percent

☐ D. 2 percent

Question ID : 2752286123

Q.7 What is the least number by which 588 must be multiplied to make it a perfect square?

Ans ☐ A. 6

☐ B. 2

☐ C. 9

☒ D. 3

Question ID : 2752286114

Q.8 What should be the least number of years in which the simple interest on Rs. 2500 at 4.5 percent p.a. will be an exact number of rupees?

Ans ☐ A. 4

☐ B. 3

☒ C. 2

☐ D. 1

Question ID : 2752286132

Q.9 The product of LCM and HCF of two numbers is 216. The difference of the two numbers is 6. What are the numbers?

Ans ☐ A. 22,28

☐ B. 18,22

☐ C. 28,32

☒ D. 12,18

Question ID : 2752286116

Q.10 What is the average of 15, 17, 19, 21.....35, 37, 39?

Ans ☒ A. 27

☒ B. 23

☒ C. 25

☒ D. 21

Question ID : 2752286118

Q.11 In 200 liters of a mixture, milk and water are in the ratio 7 : 3. How much water should now be added so that the ratio of milk and water becomes 2 : 1?

Ans ☒ A. 12 liters

☒ B. 20 liters

☒ C. 14 liters

☒ D. 10 liters

Question ID : 2752286128

Q.12 A boy bought an old music system for Rs. 1000 and spent Rs. 200 on repairing it. He sold it for Rs. 1140 to his friend. What is his loss percent?

Ans ☒ A. 5 percent

☒ B. 20 percent

☒ C. 16 percent

☒ D. 8 percent

Question ID : 2752286125

Q.13 The students need to get 45 percent to pass an exam. Abhishek got 120 marks and fails by 60 marks. What were the maximum marks for the exam?

Ans ☒ A. 400

☒ B. 300

☒ C. 600

☒ D. 500

Question ID : 2752286122

Q.14 A dealer makes a profit of 10 percent even after giving a 10 percent discount on the marked price of a dining set. If he makes a profit of Rs. 900 on the sale of the dining set, what is the marked price?

Ans ☒ A. Rs. 10200

☒ B. Rs. 8500

☒ C. Rs. 11000

☒ D. Rs. 9000

Question ID : 2752286126

Q.15 There are two house groups - Red group and Blue group in a school, consisting of 40 and 50 students respectively. If the average weight of red group is 52 Kg and that of Blue group is 45 Kg, then what is the average weight of all group students?

- Ans ☒ A. 48.11
☒ B. 45
☒ C. 43
☒ D. 46.55

Question ID : 2752286120

Q.16 The difference in simple interest and compound interest on a certain sum of money in 2 years at 12 percent p.a. is Rs. 1728. What is the sum?

- Ans ☒ A. Rs. 60000
☒ B. Rs. 12000
☒ C. Rs. 120000
☒ D. Rs. 98000

Question ID : 2752286133

Q.17 What is the single equivalent discount of 5 percent, 8 percent and 14 percent?

- Ans ☒ A. 25.15 percent
☒ B. 24.836 percent
☒ C. 26.32 percent
☒ D. 27 percent

Question ID : 2752286119

Q.18 Present population of a city is 70000. It increases at the rate of 4 percent per year. What will be the population after 2 years ?

- Ans ☒ A. 75752
☒ B. 72754
☒ C. 73425
☒ D. 75712

Question ID : 2752286121

Q.19 The ratio of incomes of Sunil and Raju is 5 : 2. The ratio of their savings is 13 : 4. If each of them spend Rs. 4000 from their incomes. What are the incomes of both?

- Ans ☒ A. Rs. 30000 , Rs. 12000
☒ B. Rs. 20000, Rs. 8000
☒ C. Rs. 6000 , Rs.2000
☒ D. Rs. 10000 , Rs. 4000

Question ID : 2752286131

Q.20 Shabana offers a discount of 8 percent on a product and still makes a profit of 15 percent, what is the actual cost of the product if the marked price of that product is Rs. 1200 ?

- Ans
- ☐ A. Rs. 1080
 - ☐ B. Rs. 1104
 - ☐ C. Rs. 1180
 - ☒ D. Rs. 960

Question ID : 2752286127

Section : Arithmetic Ability2

Q.1 The pie chart shows the spending of a college on various sports during the year 2010. The college spends Rs. 400000 on sports. What is the ratio of the amount spent on football, basketball and swimming to that spent on golf, cricket and tennis?

- Ans
- ☐ A. 4 : 5
 - ☐ B. 3 : 2
 - ☐ C. 8 : 9
 - ☒ D. 8 : 17

Question ID : 2752286149

Q.2 Machine A can complete a task in 18 days. Machine B is 50 percent more efficient. In how many days will Machine B finishes the same task?

- Ans
- ☐ A. 8 days
 - ☐ B. 15 days
 - ☐ C. 10 days
 - ☒ D. 12 days

Question ID : 2752286139

Q.3 Two friends Kim and Joy jog the same distance every morning with speeds of 2 km/hr and 3 km/hr respectively. Joy always starts jogging 15 min late and finishes 15 min earlier than Kim. How much distance each covers while jogging every morning?

- Ans
- ☐ A. 6 Km
 - ☐ B. 5 Km
 - ☒ C. 3 Km
 - ☐ D. 10 Km

Question ID : 2752286137

Q.4 A survey was conducted to find out the popularity of graphical representation. How much percent of total students like bar graph?

- Ans
- ☐ A. 50 percent
 - ☒ B. 30 percent
 - ☐ C. 20 percent
 - ☐ D. 45 percent

Question ID : 2752286151

Q.5 Ankit and Dharesh start from a point and go in opposite directions with speeds of 3.5 km/hr and 10.5 km/hr respectively. After how much time will they be 77 km apart from each other?

- Ans ☒ A. 5 hours 30 minutes
☐ B. 3 hours 15 minutes
☐ C. 11 hours 10 minutes
☐ D. 6 hours 15 minutes

Question ID : 2752286136

Q.6 From a local bus stand, buses leave after every 6 minutes with an average speed of 40 km/hr. A person coming from opposite direction meets the buses after every 5 minutes. What is the speed of the person?

- Ans ☐ A. 10 Km/hr
☒ B. 8 Km/hr
☐ C. 4 Km/hr
☐ D. 15 Km/hr

Question ID : 2752286138

Q.7 A survey was carried out among 1000 people to find who they want as the captain of the one-day cricket team of India. How many people wanted Sehwag as the captain?

- Ans ☐ A. 250
☐ B. 350
☒ C. 150
☐ D. 120

Question ID : 2752286146

Q.8 On a sum of money, the simple interest for 2 years is Rs. 200, while the compound interest is Rs. 205, the rate of interest is same in both cases. What is the rate of interest?

- Ans ☐ A. 4 percent
☐ B. 10 percent
☒ C. 5 percent
☐ D. 8 percent

Question ID : 2752286134

Q.9 Three pipes of different diameters takes 40, 30 and 24 minutes respectively to fill a tank. If all these three pipes opened together, then in how many minutes will the tank get filled?

- Ans ☐ A. 18 minutes
☒ B. 10 minutes
☐ C. 16 minutes
☐ D. 8 minutes

Question ID : 2752286140

Q.10 The following table shows the expenditure (in rupees) of a company per annum over the years. What is the average amount (in rupees) of the tax which the company had to pay during the period?

- Ans
- ☒ A. 96.5 lakhs
 - ☒ B. 98.2 lakhs
 - ☒ C. 91.6 lakhs
 - ☒ D. 84 lakhs

Question ID : 2752286148

Q.11 A task can be completed by 12 men and 10 women in 3 days, or by 6 men and 8 women in 5 days. If 3 men and 5 women work together, then in how many days they will finish the task?

- Ans
- ☒ A. 24 days
 - ☒ B. 18 days
 - ☒ C. 9 days
 - ☒ D. 14 days

Question ID : 2752286142

Q.12 Two friends Saurabh and Harshit can complete a work in 3 and 6 days separately. In how many days will they finish the work if Saurabh begins and they work on alternate days?

- Ans
- ☒ A. 15 days
 - ☒ B. 10 days
 - ☒ C. 4 days
 - ☒ D. 8 days

Question ID : 2752286141

Q.13 The following table shows the exports of coal, bauxite and iron (in thousands of tonnes) over a six month period. What was the average value of coal exported over the 6 month period?

- Ans
- ☒ A. 20.16
 - ☒ B. 20.33
 - ☒ C. 24.33
 - ☒ D. 22.16

Question ID : 2752286147

Q.14 A sum of Rs. 50000 is lent out at the rate of 6 percent p.a. compounded annually. What will be the amount after 3 years?

- Ans
- ☒ A. Rs. 58570.25
 - ☒ B. Rs. 55050.50
 - ☒ C. Rs. 59550.80
 - ☒ D. Rs. 60000

Question ID : 2752286135

Q.15 A sphere of radius 4.2 cm is cut into two equal parts. What is the total surface area of each part?

- Ans ☒ A. 166.32 sq cm
☐ B. 189.36 sq cm
☐ C. 282 sq cm
☐ D. 332.64 sq cm

Question ID : 2752286145

Q.16 The following histogram shows the number of students with the corresponding percentage scored in the entrance exam for a college. If the college decided to admit only students who had scored above 60 percent in the exam. How many students got admission in the college ?

- Ans ☐ A. 180
☐ B. 90
☐ C. 70
☒ D. 100

Question ID : 2752286150

Q.17 What is the volume of a cone whose diameter is 12.6 cm and height is 4.9 cm?

- Ans ☐ A. 404.126 cu cm
☒ B. 203.742 cu cm
☐ C. 254.236 cu cm
☐ D. 104.652 cu cm

Question ID : 2752286143

Q.18 The following bar graph shows the production of pesticides (in kg) by a company (in thousands) over the years. What was the percentage increase in production of pesticides in 2009 compared to that in 2003?

- Ans ☒ A. 100 percent
☐ B. 80 percent
☐ C. 120 percent
☐ D. 60 percent

Question ID : 2752286152

Q.19 The following frequency polygon displays the weekly income of laborers of a factory. If laborers got Rs. 100 as diwali bonus then, how many laborers got Rs. 350 or more as their weekly income (including bonus) on diwali week?

- Ans ☐ A. 180
☐ B. 200
☐ C. 150
☒ D. 185

Question ID : 2752286153

Q.20 A solid cylinder has a hemisphere at its bottom and a cone at its top. The radius of the solid is 3.5 m, height of the cone is 2 m and height of the cylinder is 7 m. What is the volume of the resultant solid shape? Radii of all three are same.

- Ans ☒ A. 385 cu m
☒ B. 545 cu m
☒ C. 495 cu m
☒ D. 595 cu m

Question ID : 2752286144

Section : General English1

Q.1 Fill in the blank with appropriate word.

The scientists have provided numerous _____ researches, to prove their hypothesis.

- Ans ☒ A. empathetic
☒ B. empirical
☒ C. epiphanic
☒ D. imminent

Question ID : 2752286166

Q.2 Some parts of a sentence have been jumbled up, and labelled P, Q, R and S. Select the option that gives the correct sequence in which these parts can be rearranged to form a meaningful and grammatically correct sentence.

The employees of the restaurant

P. they were given leave without an

Q. and if something urgent cropped up

R. were well paid, well fed, well rested, well clothed

S. eyebrow raised and in the

blink of an eye.

- Ans ☒ A. RQPS
☒ B. RPSQ
☒ C. RPQS
☒ D. PSQP

Question ID : 2752286169

Q.3 Select the word that is closest in meaning (SYNONYM) to the word given below

Subterranean

- Ans ☒ A. Underground
☒ B. Subcutaneous
☒ C. Terrestrial
☒ D. Overt

Question ID : 2752286173

Q.4 Find the part of the given sentence that has an error in it. If there is no error, choose 'No error'.

The newly introduced stringently policies on income tax filing and collection (1)/ will certainly bring about a substantial increase (2)/ in revenue generated from income tax. (3)/ No Error (4)

Ans ☒ A. No error

☒ B. will certainly bring about a substantial increase

☒ C. in revenue generated from income tax.

☒ D. The newly introduced stringently policies on income tax filing and collection

Question ID : 2752286154

Q.5 Fill in the blank with appropriate word.

Their relationship had reached a point where it was _____.

Ans ☒ A. communicable

☒ B. irreconcilable

☒ C. sociable

☒ D. insatiable

Question ID : 2752286164

Q.6 Select the word segment that substitutes (replaces) the bracketed word segment correctly and completes the sentence meaningfully. Select the option 'no correction required' if the sentence is correct as given.

Gandhi completed his studies in England and became a lawyer, (for he practised law in South Africa) as he was racially discriminated in England.

Ans ☒ A. but he practice law in South Africa

☒ B. as, he practiced law in South Africa

☒ C. No corrections required

☒ D. but he practised law in South Africa

Question ID : 2752286159

Q.7 Find the part of the given sentence that has an error in it. If there is no error, choose 'No error'.

Everyone were absolutely perplexed (1)/ by his decision to not participate (2)/ in the upcoming assembly elections. (3)/ No Error (4)

Ans ☒ A. in the upcoming assembly elections.

☒ B. No error

☒ C. by his decision to not participate

☒ D. Everyone were absolutely perplexed

Question ID : 2752286157

Q.8 Select the word that is opposite in meaning (ANTONYM) to the word given below

Polygamy

- Ans ☒ A. Endogamy
☒ B. Homogamy
☒ C. Monogamy
☒ D. Misogamy

Question ID : 2752286172

Q.9 Select the word segment that substitutes (replaces) the bracketed word segment correctly and completes the sentence meaningfully. Select the option 'no correction required' if the sentence is correct as given.

(The latest edition of the Official Highway Code includes), new drug driving laws, HGV speed limit changes on single and dual carriageways.

- Ans ☒ A. The latest edition of the Official Highway Code is included
☒ B. No corrections required
☒ C. The latest edition of the Official Highway Code include
☒ D. The latest edition of the Official Highway Code included

Question ID : 2752286162

Q.10 Find the part of the given sentence that has an error in it. If there is no error, choose 'No error'.

In his memoirs, he has been quoted been saying that, (1)/ "It is my faith, based on experience, that if one's heart is pure, (2)/ calamity brings in its trained men and measures to fight it." (3)
No Error (4)

- Ans ☒ A. No error
☒ B. calamity brings in its trained men and measures to fight it."
☒ C. "It is my faith, based on experience, that if one's heart is pure,
☒ D. In his memoirs, he has been quoted been saying that,

Question ID : 2752286156

Q.11 Some parts of a sentence have been jumbled up, and labelled P, Q, R and S. Select the option that gives the correct sequence in which these parts can be rearranged to form a meaningful and grammatically correct sentence.

The cacophony of deafening noises

P. memories I have from
Q. is one of the more vivid
R. my time I
S. served in the

pre-Iraq war.

- Ans ☒ A. QPSR
☒ B. QPSP
☒ C. QPRS
☒ D. QSPR

Question ID : 2752286168

Q.12 Find the part of the given sentence that has an error in it. If there is no error, choose 'No error'.

The government has acknowledged its fault in the plummeting economy today; (1)/ owing to its various egregious and farfetched policies (2)/ which were assured to never yield any results. (3)/ No Error (4)

- Ans ☒ A. The government has acknowledged its fault in the plummeting economy today;
☐ B. owing to its various egregious and farfetched policies
☐ C. No error
☐ D. which were assured to never yield any results.

Question ID : 2752286158

Q.13 The question below consist of a set of labelled sentences. Out of four options given, select the most logical order of the sentences which form a paragraph.

Google's history began in 1995 when Larry Page met Sergey Brin.

P. At the time Larry Page was a Ph.D. student at Stanford University, and Sergey was considering studying there.

Q. In 1996 Larry and Sergey began working on a search engine called BackRub.

R. This engine worked on the Stanford servers for more than a year which eventually clogged up the bandwidth and hence Google.com was registered on September 15th, 1997.

S. The name came from the algorithms ranking for how many "back-links" a page has.

Google, is a play on words of "googol" which is a mathematical term for the number 1 followed by 100 zeros. It is rumoured that this reflects the founders' mission to organize the infinite amount of information on the internet.

- Ans ☐ A. PRSQ
☒ B. PQSR
☐ C. PQRS
☐ D. PSQR

Question ID : 2752286170

Q.14 Select the word that is closest in meaning (SYNONYM) to the word given below

Subversive

- Ans ☐ A. Obedient
☐ B. Legitimate
☒ C. Insurgent
☐ D. Admissible

Question ID : 2752286171

Q.15 Select the word segment that substitutes (replaces) the bracketed word segment correctly and completes the sentence meaningfully. Select the option 'no correction required' if the sentence is correct as given.

His (malicious intent could have been seen) when he decided to murder his entire family.

- Ans ☒ A. malicious intent was seen
☐ B. No corrections required
☐ C. malicious intent should be seen
☐ D. malicious intent would have been seen

Question ID : 2752286160

Q.16 The question below consist of a set of labelled sentences. Out of four options given, select the most logical order of the sentences which form a paragraph.

The pivotal engineering and scientific success of the Twentieth century was the Manhattan Project.

P. The only cloud hanging over the impressive achievement of the atomic researchers and engineers is what their success truly meant; hundreds of thousands of innocent lives obliterated.

Q. The Manhattan Project assimilated concepts and leaders from all scientific fields and engineering disciplines to construct the first two atomic bombs.

R. The presence of communication amid scientific minds was equally important to the success of the Manhattan Project as scientific intellect was.

S. From the study of nuclear physics and chemistry to the practical engineering and processing of uranium 235 and plutonium 239 and the final construction of the weapons, scientific knowledge grew at an exponential rate to critical levels.

Yet this grave definition of success cannot diminish the impressive collaboration and efficiency of the Manhattan Project.

Ans ☒ A. QPRS

☒ B. QSRP

☒ C. QSPR

☒ D. QPSR

Question ID : 2752286167

Q.17 Fill in the blank with appropriate word.

You can't just _____ that kind of data from these results.

Ans ☒ A. exalt

☒ B. exudate

☒ C. expedite

☒ D. extrapolate

Question ID : 2752286163

Q.18 Fill in the blank with appropriate word.

The massages were quite pleasantly _____.

Ans ☒ A. enumerating

☒ B. facilitating

☒ C. endowing

☒ D. rejuvenating

Question ID : 2752286165

Q.19 Find the part of the given sentence that has an error in it. If there is no error, choose 'No error'.

The mission Chandrayaan 2 could be a success, (1)/ had it not lost contact with the ISRO (2)/ in its final moments of descent. (3)/ No Error (4)

Ans ☒ A. The mission Chandrayaan 2 could be a success,

☒ B. had it not lost contact with the ISRO

☒ C. No error

☒ D. in its final moments of descent.

Question ID : 2752286155

Q.20 Select the word segment that substitutes (replaces) the bracketed word segment correctly and completes the sentence meaningfully. Select the option 'no correction required' if the sentence is correct as given.

(As the country copes from the aftermath of the horrors of Mumbai), the hard work of reconstruction, of rebuilding and of reimagining our country has begun.

- Ans ☒ A. As the country copes with the aftermath of the horrors of Mumbai
- ☒ B. As the country copes within the aftermath of the horrors of Mumbai
- ☒ C. As the country copes in the aftermath of the horrors of Mumbai
- ☒ D. No corrections required

Question ID : 2752286161

Section : General English2

Q.1 Select the word that is opposite in meaning (ANTONYM) to the word given below

Besiege

- Ans ☒ A. Defend
- ☒ B. Skirt
- ☒ C. Smother
- ☒ D. Palisade

Question ID : 2752286174

Q.2 Select the most appropriate meaning of the given idiom

The thin end of the wedge.

- Ans ☒ A. Watching all actions closely
- ☒ B. Beginning of something bad which seems harmless in the present but is likely to become worse in future.
- ☒ C. Someone who is against the religion
- ☒ D. To admit something readily

Question ID : 2752286184

Q.3 Four words are given, out of which only one word is spelt correctly. Choose the correctly spelt word.

- Ans ☒ A. Consaguinity
- ☒ B. Consanuity
- ☒ C. Consanguinity
- ☒ D. Consagnuity

Question ID : 2752286180

Q.4 Select the most appropriate 'one word' for the expressions given below

A person who is dissatisfied and rebellious.

- Ans ☒ A. Malcontent
☒ B. Interregnum
☒ C. Synod
☒ D. Monomaniac

Question ID : 2752286188

Q.5 Select the most appropriate meaning of the given idiom

Gird up one's loins

- Ans ☒ A. Get ready for the job
☒ B. With one's own efforts
☒ C. The end part of something
☒ D. Not having a prepared action before time

Question ID : 2752286183

Q.6 Select the most appropriate 'one word' for the expressions given below

A remark or statement, especially one with a moral content, that has been used too often to be interesting or thoughtful.

- Ans ☒ A. Platitude
☒ B. Solitude
☒ C. Finitude
☒ D. Habitude

Question ID : 2752286187

Q.7 Four words are given, out of which only one word is spelt correctly. Choose the correctly spelt word.

- Ans ☒ A. Alliteration
☒ B. Alliterasion
☒ C. Aliteretion
☒ D. Aliteration

Question ID : 2752286178

Q.8 Select the word that is closest in meaning (SYNONYM) to the word given below

Equestrian

- Ans ☒ A. Pedantic
☒ B. Callisthenics
☒ C. Pleasant
☒ D. Horseman

Question ID : 2752286175

Q.9 Four words are given, out of which only one word is spelt correctly. Choose the correctly spelt word.

- Ans
- ☒ A. Asthete
 - ☒ B. Acsthete
 - ☒ C. Ascsthete
 - ☒ D. Aesthete

Question ID : 2752286177

Q.10 Select the most appropriate 'one word' for the expressions given below

The joint control of a state's affairs by other states.

- Ans
- ☒ A. Condominium
 - ☒ B. Biennium
 - ☒ C. Dominion
 - ☒ D. Meconium

Question ID : 2752286186

Q.11 Select the most appropriate meaning of the given idiom

A skeleton in the cupboard

- Ans
- ☒ A. A secret which is revealed by someone.
 - ☒ B. A past event which is kept secret, something embarrassing or shameful
 - ☒ C. Shared secrets between family members
 - ☒ D. A secret of someone which is kept hidden from everyone else in the family.

Question ID : 2752286182

Q.12 Four words are given, out of which only one word is spelt correctly. Choose the correctly spelt word.

- Ans
- ☒ A. Convalescence
 - ☒ B. Convalesence
 - ☒ C. Convelence
 - ☒ D. Convalascence

Question ID : 2752286179

Q.13 Four words are given, out of which only one word is spelt correctly. Choose the correctly spelt word.

- Ans
- ☒ A. Palatable
 - ☒ B. Paetable
 - ☒ C. Palateble
 - ☒ D. Peetable

Question ID : 2752286176

Q.14 Select the most appropriate 'one word' for the expressions given below

Impossible to stop or prevent.

- Ans ☒ A. Inexorable
☒ B. Exorable
☒ C. Deplorable
☒ D. Uninsurable

Question ID : 2752286185

Q.15 Select the most appropriate meaning of the given idiom

Feet of clay

- Ans ☒ A. To be a good dancer
☒ B. To drive rashly
☒ C. A fundamental flaw or weakness in a person otherwise revered.
☒ D. Advance in harmony

Question ID : 2752286181

Comprehension:

Read the following information carefully and answer the given questions.

The New Yorker article, "A Star in a Bottle" explained the ambitious project upon which, world-wide physicists and engineers are embarking on: the creation of an artificial "star", which humanity hopes to use for its energy to power our civilization. This "artificial star" is essentially a controlled fusion reaction which, when successful, releases a massive amount of energy (gamma rays, in compliance with $E=mc^2$) that they can then harness as electricity. The current machine (work in progress) is the International Thermonuclear Experimental Reactor (ITER). This is an international project, which China, the U.S., Russia, and several European countries are participating in. The collaborators at ITER hope to use the machine to solve a major problem humanity faces as a civilization: the pollution in the atmosphere created by the burning of fossil fuels. The ITER project began during the Cold War in the mid-21st century. Apart from the obvious economic and environmental assets of such a machine, the curiosity of American physicists in the 21st century also acted as a major catalyst. In the early 1980's the Argentinian president, Juan Peron, incorrectly announced that his scientists had successfully constructed a fusion machine of such sorts. Americans, despite the fact that Peron's claim was a fraud, began to ponder and wonder that a thermonuclear fusion machine would look like. At that point, the U.S. government began to pour large amounts of money into the project, and was constantly disrupted by numerous set-backs and obstacles. One of the major problems the entire international collaboration faced was the issue of cost and each country's economic devotion to the project. The author claimed that as science and its frontier continued to advance, both the cost and complexity of further exploration sky rockets as well, which the ITER project clearly portrays.

SubQuestion No : 16

Q.16 According to the passage, which of the following given statements is incorrect?

- Ans ☒ A. ITER is an international project, and its participants are China, the U.S., Russia, and several European countries.
☒ B. International Thermonuclear Experimental Reactor is the name of the machine which is under development for harnessing the thermonuclear energy.
☒ C. Artificial star' is essentially a controlled fission reaction, similar to a nuclear bomb.
☒ D. In the early 1980's the Argentinian president, Juan Peron, incorrectly announced that his scientists had successfully constructed a thermonuclear fusion machine.

Question ID : 2752286193

Comprehension:

Read the following information carefully and answer the given questions.

The New Yorker article, "A Star in a Bottle" explained the ambitious project upon which, world-wide physicists and engineers are embarking on: the creation of an artificial "star", which humanity hopes to use for its energy to power our civilization. This "artificial star" is essentially a controlled fusion reaction which, when successful, releases a massive amount of energy (gamma rays, in compliance with $E=mc^2$) that they can then harness as electricity. The current machine (work in progress) is the International Thermonuclear Experimental Reactor (ITER). This is an international project, which China, the U.S., Russia, and several European countries are participating in. The collaborators at ITER hope to use the machine to solve a major problem humanity faces as a civilization- the pollution in the atmosphere created by the burning of fossil fuels. The ITER project began during the Cold War in the mid-21st century. Apart from the obvious economic and environmental assets of such a machine, the curiosity of American physicists in the 21st century also acted as a major catalyst. In the early 1980's the Argentinian president, Juan Peron, incorrectly announced that his scientists had successfully constructed a fusion machine of such sorts. Americans, despite the fact that Peron's claim was a fraud, began to ponder and wonder that a thermonuclear fusion machine would look like. At that point, the U.S. government began to pour large amounts of money into the project, and was constantly disrupted by numerous set-backs and obstacles. One of the major problems the entire international collaboration faced was the issue of cost and each country's economic devotion to the project. The author claimed that as science and its frontier continued to advance, both the cost and complexity of further exploration sky rockets as well, which the ITER project clearly portrays.

SubQuestion No : 17

Q.17 When did the project ITER begin?

- Ans
- ☐ A. In the middle of First World War
 - ☐ B. At the start of 21st century
 - ☐ C. During the Second World War
 - ☒ D. In the middle of 21st century

Question ID : 2752286192

Comprehension:

Read the following information carefully and answer the given questions.

The New Yorker article, "A Star in a Bottle" explained the ambitious project upon which, world-wide physicists and engineers are embarking on: the creation of an artificial "star", which humanity hopes to use for its energy to power our civilization. This "artificial star" is essentially a controlled fusion reaction which, when successful, releases a massive amount of energy (gamma rays, in compliance with $E=mc^2$) that they can then harness as electricity. The current machine (work in progress) is the International Thermonuclear Experimental Reactor (ITER). This is an international project, which China, the U.S., Russia, and several European countries are participating in. The collaborators at ITER hope to use the machine to solve a major problem humanity faces as a civilization- the pollution in the atmosphere created by the burning of fossil fuels. The ITER project began during the Cold War in the mid-21st century. Apart from the obvious economic and environmental assets of such a machine, the curiosity of American physicists in the 21st century also acted as a major catalyst. In the early 1980's the Argentinian president, Juan Peron, incorrectly announced that his scientists had successfully constructed a fusion machine of such sorts. Americans, despite the fact that Peron's claim was a fraud, began to ponder and wonder that a thermonuclear fusion machine would look like. At that point, the U.S. government began to pour large amounts of money into the project, and was constantly disrupted by numerous set-backs and obstacles. One of the major problems the entire international collaboration faced was the issue of cost and each country's economic devotion to the project. The author claimed that as science and its frontier continued to advance, both the cost and complexity of further exploration sky rockets as well, which the ITER project clearly portrays.

SubQuestion No : 18

Q.18 According to which country's fraudulent claim did America become curious about a thermonuclear fusion?

Ans ☒ A. The U.K.

☒ B. China

☒ C. Russia

☒ D. Argentina

Question ID : 2752286191

Comprehension:

Read the following information carefully and answer the given questions.

The New Yorker article, "A Star in a Bottle" explained the ambitious project upon which, world-wide physicists and engineers are embarking on: the creation of an artificial "star", which humanity hopes to use for its energy to power our civilization. This "artificial star" is essentially a controlled fusion reaction which, when successful, releases a massive amount of energy (gamma rays, in compliance with $E=mc^2$) that they can then harness as electricity. The current machine (work in progress) is the International Thermonuclear Experimental Reactor (ITER). This is an international project, which China, the U.S., Russia, and several European countries are participating in. The collaborators at ITER hope to use the machine to solve a major problem humanity faces as a civilization- the pollution in the atmosphere created by the burning of fossil fuels. The ITER project began during the Cold War in the mid-21st century. Apart from the obvious economic and environmental assets of such a machine, the curiosity of American physicists in the 21st century also acted as a major catalyst. In the early 1980's the Argentinian president, Juan Peron, incorrectly announced that his scientists had successfully constructed a fusion machine of such sorts. Americans, despite the fact that Peron's claim was a fraud, began to ponder and wonder that a thermonuclear fusion machine would look like. At that point, the U.S. government began to pour large amounts of money into the project, and was constantly disrupted by numerous set-backs and obstacles. One of the major problems the entire international collaboration faced was the issue of cost and each country's economic devotion to the project. The author claimed that as science and its frontier continued to advance, both the cost and complexity of further exploration sky rockets as well, which the ITER project clearly portrays.

SubQuestion No : 19

Q.19 According to the passage, what is major problem which the project ITER hopes to solve?

- Ans
- ☒ A. Reduction in the stress put on renewable resources
 - ☒ B. Solving the electricity crisis
 - ☒ C. Cost efficiency and energy saving
 - ☒ D. Reduction in pollution caused by the usage of fossil fuels

Question ID : 2752286190

Comprehension:

Read the following information carefully and answer the given questions.

The New Yorker article, "A Star in a Bottle" explained the ambitious project upon which, world-wide physicists and engineers are embarking on: the creation of an artificial "star", which humanity hopes to use for its energy to power our civilization. This "artificial star" is essentially a controlled fusion reaction which, when successful, releases a massive amount of energy (gamma rays, in compliance with $E=mc^2$) that they can then harness as electricity. The current machine (work in progress) is the International Thermonuclear Experimental Reactor (ITER). This is an international project, which China, the U.S., Russia, and several European countries are participating in. The collaborators at ITER hope to use the machine to solve a major problem humanity faces as a civilization- the pollution in the atmosphere created by the burning of fossil fuels. The ITER project began during the Cold War in the mid-21st century. Apart from the obvious economic and environmental assets of such a machine, the curiosity of American physicists in the 21st century also acted as a major catalyst. In the early 1980's the Argentinian president, Juan Peron, incorrectly announced that his scientists had successfully constructed a fusion machine of such sorts. Americans, despite the fact that Peron's claim was a fraud, began to ponder and wonder that a thermonuclear fusion machine would look like. At that point, the U.S. government began to pour large amounts of money into the project, and was constantly disrupted by numerous set-backs and obstacles. One of the major problems the entire international collaboration faced was the issue of cost and each country's economic devotion to the project. The author claimed that as science and its frontier continued to advance, both the cost and complexity of further exploration sky rockets as well, which the ITER project clearly portrays.

SubQuestion No : 20

Q.20 According to the passage, out of the numerous problems which the ITER project faced, which is the one mentioned in the passage.

- Ans** ☒ A. The cost of such a project and receiving the economic aid from the collaborators.
- ☒ B. The impracticality of the existence of such a machine.
- ☒ C. The security threats which accompanies while harnessing nuclear energy.
- ☒ D. The complexity of the programme.

Question ID : 2752286194

Section : General Hindi1

Q.1 निम्नलिखित प्रश्न में, चार विकल्पों में से, उस विकल्प का चयन करें जो सदैव स्त्रीलिंग रूप वाला विकल्प है।

- Ans** ☒ A. चादर
- ☒ B. सुराग
- ☒ C. मेवा
- ☒ D. पहिया

Question ID : 2752286212

Q.2 निम्नलिखित प्रश्न में, चार विकल्पों में से, उस विकल्प का चयन करें जो शुद्ध शब्द का सही विकल्प है।

- Ans** ☒ A. इमानदारी
- ☒ B. ईमानदारी
- ☒ C. ईमानदारी
- ☒ D. इमानादारी

Question ID : 2752286209

Q.3 निम्नलिखित प्रश्न में, चार विकल्पों में से, उस सही विकल्प का चयन करें जो रिक्त स्थान के लिए उपयुक्त शब्द का सही विकल्प है।

_____ का फल मीठा होता है।

- Ans
- ☒ A. कुल
 - ☒ B. कठिन
 - ☒ C. संतोष
 - ☒ D. क्रम

Question ID : 2752286207

Q.4 निम्नलिखित प्रश्न में, चार विकल्पों में से, उस सही विकल्प का चयन करें जो वाक्यांशों के लिए एक शब्द का विकल्प हो।

दिल से होनेवाला

- Ans
- ☒ A. हार्दिक
 - ☒ B. हस्तक्षेप
 - ☒ C. निर्दय
 - ☒ D. सरस

Question ID : 2752286205

Q.5 निम्नलिखित प्रश्न में, चार विकल्पों में से, उस विकल्प का चयन करें जो देशज शब्द का सही विकल्प हो।

- Ans
- ☒ A. काजू
 - ☒ B. औरत
 - ☒ C. डकार
 - ☒ D. डीज़ल

Question ID : 2752286200

Q.6 निम्नलिखित प्रश्न में, चार विकल्पों में से, उस विकल्प का चयन करें जो दिए गए शब्द के बहुवचन रूप का सबसे अच्छा विकल्प है।

चिड़िया

- Ans
- ☒ A. चिड़ियाँ
 - ☒ B. चिड़ियाओं
 - ☒ C. चीड़ीयाँ
 - ☒ D. चिड़ा

Question ID : 2752286213

Q.7 निम्नलिखित प्रश्न में, चार विकल्पों में से, उस सही विकल्प का चयन करें जो दिए गए शब्द-युग्म के अर्थ का सही विकल्प हो।

भंगि और भंगी

- Ans
- ☒ A. आधार और मेहतर
 - ☒ B. लहर और डरना
 - ☒ C. लहर और संसार
 - ☒ D. लहर और मेहतर

Question ID : 2752286211

Q.8 निम्नलिखित प्रश्न में, चार विकल्पों में से, उस विकल्प का चयन करें जो दिए गए शब्द का तत्सम रूप हो।

सेठ

- Ans ☒ A. सूत्र
☒ B. शीर्ष
☒ C. स्कंध
☒ D. श्रेष्ठी

Question ID : 2752286202

Q.9 निम्नलिखित प्रश्न में, चार विकल्पों में से, उस विकल्प का चयन करें जो क्रिया के भेद वाला सही विकल्प हो।

दीपक खाकर खेलने गया।

- Ans ☒ A. सरल क्रिया
☒ B. प्रेरणार्थक क्रिया
☒ C. नामधातु क्रिया
☒ D. पूर्वकालिक क्रिया

Question ID : 2752286195

Q.10 निम्नलिखित प्रश्न में, चार विकल्पों में से, उस विकल्प का चयन करें जो दिए गए शब्द के समानार्थी शब्द का विकल्प नहीं है।

पंक

- Ans ☒ A. चहला
☒ B. पग
☒ C. कीच
☒ D. कर्दम

Question ID : 2752286210

Q.11 निम्नलिखित प्रश्न में, चार विकल्पों में से, उस विकल्प का चयन करें जो कोष्ठक में दिए गए शब्द के अनुसार विशेषण के भेद वाला विकल्प हो।

बनारस का (बनारसी) पान बहुत प्रसिद्ध है।

- Ans ☒ A. गुणवाचक
☒ B. अनिश्चित परिमाण वाचक
☒ C. सार्वनामिक
☒ D. निश्चित संख्यावाचक

Question ID : 2752286199

Q.12 निम्नलिखित प्रश्न में, चार विकल्पों में से, उस विकल्प का चयन करें जो विलोम शब्द का सबसे अच्छा विकल्प है।

आतुर

- Ans ☒ A. आदत्त
☒ B. शांत
☒ C. आगामी
☒ D. आदर

Question ID : 2752286204

Q.13 निम्नलिखित प्रश्न में, चार विकल्पों में से, उस विकल्प का चयन करें जो दिए गए शब्द के लिए सही बहुव्रीहि समास के विग्रह का विकल्प हो।

चन्द्रभाल

- Ans
- ☒ A. चंद्र है जिसका भाल
 - ☒ B. भाला है जो चंद्रमा
 - ☒ C. चंद्र समान भाल
 - ☒ D. भाल पर चंद्रमा है जिसके

Question ID : 2752286201

Q.14 निम्नलिखित प्रश्न में, चार विकल्पों में से, उस विकल्प का चयन करें जो कोष्ठक में दिए गए शब्द के अनुसार अव्यय के भेद का सही विकल्प हो।

दीपक (प्रतिदिन) पढ़ता है।

- Ans
- ☒ A. संबंधबोधक अव्यय
 - ☒ B. समुच्चयबोधक अव्यय
 - ☒ C. विस्मयादिबोधक अव्यय
 - ☒ D. क्रियाविशेषण अव्यय

Question ID : 2752286196

Q.15 निम्नलिखित प्रश्न में, चार विकल्पों में से, उस विकल्प का चयन करें जो भाववाचक संज्ञा का सही विकल्प नहीं है।

- Ans
- ☒ A. कृपणता
 - ☒ B. दासत्व
 - ☒ C. दूत
 - ☒ D. समझ

Question ID : 2752286197

Q.16 निम्नलिखित प्रश्न में, चार विकल्पों में से, उस विकल्प का चयन करें जो दिए गए शब्द के पर्यायवाची शब्द का सही विकल्प नहीं है।

पर्जन्य

- Ans
- ☒ A. परार्थ
 - ☒ B. नीरद
 - ☒ C. जलद
 - ☒ D. वारिद

Question ID : 2752286203

Q.17 निम्नलिखित प्रश्न में, चार विकल्पों में से, उस सही विकल्प का चयन करें जो दिए गए शब्द के सही अर्थ का उचित विकल्प हो।

तनू

- Ans
- ☒ A. खदान
 - ☒ B. उपाय
 - ☒ C. खानदान
 - ☒ D. पुत्र

Question ID : 2752286206

Q.18 निम्नलिखित प्रश्न में, चार विकल्पों में से, उस विकल्प का चयन करें जो कोष्ठक में दिए गए शब्द के अनुसार मध्यम पुरुष वाचक सर्वनाम का सबसे अच्छा विकल्प है।

- Ans ☒ A. (इन्हें) हिफाजत से घर पहुँचा दो।
☒ B. (मेरा) नाम भी सुनील है।
☒ C. (वह) कुछ बताना चाहत था।
☒ D. (तुम) बहुत अच्छा गाना गाते हो।

Question ID : 2752286214

Q.19 निम्नलिखित प्रश्न में, चार विकल्पों में से, उस विकल्प का चयन करें जो कोष्ठक में दिए गए शब्द के अनुसार सर्वनाम के भेद का सही विकल्प हो।

खाने में (कुछ) तो खराबी है।

- Ans ☒ A. निजवाचक
☒ B. अनिश्चय वाचक
☒ C. सम्बन्ध वाचक
☒ D. प्रश्नवाचक

Question ID : 2752286198

Q.20 निम्नलिखित प्रश्न में, चार विकल्पों में से, उस विकल्प का चयन करें जो शुद्ध शब्द का सही विकल्प है।

- Ans ☒ A. जूआडी
☒ B. जूआदी
☒ C. जुआड़ी
☒ D. जुआरी

Question ID : 2752286208

Section : General Hindi2

Q.1 निम्नलिखित प्रश्न में, चार विकल्पों में से, उस विकल्प का चयन करें जो दिए गए मुहावरे का सही अर्थ वाला विकल्प है।

ककड़ी-खीरा समझना

- Ans ☒ A. शक्तिहीन
☒ B. बहुत प्रिय होना
☒ C. खूब पीटना
☒ D. तुच्छ या बेकार समझना

Question ID : 2752286224

Q.2 निम्नलिखित प्रश्न में, चार विकल्पों में से, उस विकल्प का चयन करें जो दिए गए वाक्य के लिए पक्ष के भेद का सबसे अच्छा विकल्प है।

बच्चे कितना अच्छा काव्य पठन कर रहे हैं!

- Ans
- ☒ A. आरंभद्योतक
 - ☒ B. पूर्णताद्योतक
 - ☒ C. प्रगतिद्योतक
 - ☒ D. सातप्यद्योतक

Question ID : 2752286217

Q.3 निम्नलिखित प्रश्न में, चार विकल्पों में से, उस विकल्प का चयन करें जो शुद्ध वाक्य का सबसे अच्छा विकल्प है।

- Ans
- ☒ A. तुम क्या काम करते हो?
 - ☒ B. तुम क्या काम करता है?
 - ☒ C. तुम क्या काम करते हैं?
 - ☒ D. तुम क्या काम है करता?

Question ID : 2752286218

Q.4 निम्नलिखित प्रश्न में, चार विकल्पों में से, उस विकल्प का चयन करें जो दिए गए वाक्य के लिए वृत्ति के भेद का सबसे अच्छा विकल्प है।

दफ्तर का कार्य अभी भी चल रहा है।

- Ans
- ☒ A. संभावनार्थ
 - ☒ B. विध्यर्थ
 - ☒ C. संदेहार्थ
 - ☒ D. निश्चयार्थ

Question ID : 2752286216

Q.5 निम्नलिखित प्रश्न में, चार विकल्पों में से, उस विकल्प का चयन करें जो दिए गए वाक्य के काल का सही विकल्प हो।

माँ खाना खिलाती तो मैं खाती।

- Ans
- ☒ A. सामान्य भविष्यकाल
 - ☒ B. संदिग्ध वर्तमानकाल
 - ☒ C. हेतुहेतुमद भूतकाल
 - ☒ D. सामान्य भूतकाल

Question ID : 2752286215

Q.6 निम्नलिखित प्रश्न में, चार विकल्पों में से, उस विकल्प का चयन करें जो दी गई लोकोक्ति का सही अर्थ वाला विकल्प है।

एक ही लकड़ी से सबको हाँकना

- Ans
- ☒ A. एक साथ अनेक कार्य करना
 - ☒ B. छोटे-बड़े का ध्यान न रखना
 - ☒ C. एकता में बल
 - ☒ D. एक जैसे दुर्गुण वाले

Question ID : 2752286227

Q.7 निम्नलिखित प्रश्न में, चार विकल्पों में से, उस विकल्प का चयन करें जो दी गई लोकोक्ति का सही अर्थ वाला विकल्प है।

कचहरी का दरवाजा खुला है

- Ans
- ☒ A. कठिनाइयों से डरना
 - ☒ B. सब दिन एक मान नहीं होते
 - ☒ C. छोटी मुसीबत से छूट कर बड़ी मुसीबत में पड़ना
 - ☒ D. न्याय पर सभी का अधिकार होता है

Question ID : 2752286228

Q.8 निम्नलिखित प्रश्न में, चार विकल्पों में से, उस विकल्प का चयन करें जो सही वाक्य भेद का विकल्प हो।

मनोहर या तो स्वयं आएगा या तार भेजेगा।

- Ans
- ☒ A. मिश्र वाक्य
 - ☒ B. प्रश्नवाचक वाक्य
 - ☒ C. संयुक्त वाक्य
 - ☒ D. सरल वाक्य

Question ID : 2752286219

Q.9 निम्नलिखित प्रश्न में, चार विकल्पों में से, उस विकल्प का चयन करें जो दी गई लोकोक्ति का सही अर्थ वाला विकल्प है।

खिसियानी बिल्ली खम्भा नोचे

- Ans
- ☒ A. उलटे सीधे काम करना
 - ☒ B. परिश्रम का कुछ भी फल न मिलना
 - ☒ C. मेहनत किसी की लाभ किसी और का
 - ☒ D. अपनी असफलता पर खीझना

Question ID : 2752286229

Q.10 निम्नलिखित प्रश्न में, चार विकल्पों में से, उस विकल्प का चयन करें जो विराम चिह्न युक्त वाक्य का सही विकल्प हो।

- Ans
- ☒ A. बेताल ने पूछा कैसे ...? धनंजय का अधिकार क्यों होना चाहिए।
 - ☒ B. बेताल ने पूछा, कैसे धनंजय का अधिकार क्यों होना चाहिए
 - ☒ C. बेताल ने पूछा, "कैसे ...?" धनंजय का अधिकार क्यों होना चाहिए?
 - ☒ D. बेताल ने पूछा कैसे धनंजय का अधिकार क्यों होना चाहिए

Question ID : 2752286221

Q.11 निम्नलिखित प्रश्न में, चार विकल्पों में से, उस विकल्प का चयन करें जो सही वाक्य भेद का विकल्प हो।

वह इस योग्य नहीं है कि सेना में भर्ती हो।

- Ans
- ☒ A. सरल वाक्य
 - ☒ B. विधानवाचक वाक्य
 - ☒ C. संयुक्त वाक्य
 - ☒ D. मिश्र वाक्य

Question ID : 2752286220

Q.12 निम्नलिखित प्रश्न में, चार विकल्पों में से, उस विकल्प का चयन करें जो दिए गए मुहावरे का सही अर्थ वाला विकल्प है।

खून के आँसू रोना

- Ans ☒ A. बहुत दुखी या परेशान होना
☐ B. बहुत परेशान करना
☐ C. कठिन परिश्रम करना
☐ D. बहुत क्रोध आना

Question ID : 2752286226

Q.13 निम्नलिखित प्रश्न में, चार विकल्पों में से, उस विकल्प का चयन करें जो विराम चिह्न युक्त वाक्य का सही विकल्प हो।

- Ans ☐ A. वे लाल पीले होकर बोले मरना अच्छा समझती है तो मर मैं जाता हूँ
☒ B. वे लाल-पीले होकर बोले, "मरना अच्छा समझती है तो मर! मैं जाता हूँ।"
☐ C. वे लाल पीले होकर बोले "मरना अच्छा समझती है तो मर! मैं जाता हूँ।"
☐ D. वे लालपीले होकर बोले, मरना अच्छा समझती है तो मर मैं जाता हूँ।

Question ID : 2752286222

Q.14 निम्नलिखित प्रश्न में, चार विकल्पों में से, उस विकल्प का चयन करें जो दिए गए मुहावरे का सही अर्थ वाला विकल्प है।

कढ़ी सा उबाल आना

- Ans ☐ A. अनाड़ीपन दिखाना
☒ B. जोश या क्रोध जल्दी खत्म हो जाना
☐ C. चुपचाप अपमान सहना
☐ D. बहुत लज्जित होना

Question ID : 2752286225

Q.15 निम्नलिखित प्रश्न में, चार विकल्पों में से, उस विकल्प का चयन करें जो विराम चिह्न युक्त वाक्य का सही विकल्प हो।

- Ans ☐ A. माँ ने गर्व से कहा नहीं राम झूठ बोलना अच्छा नहीं होता, बहुत बुरा होता है
☒ B. माँ ने गर्व से कहा, "नहीं राम! झूठ बोलना अच्छा नहीं होता, बहुत बुरा होता है।"
☐ C. माँ ने गर्व से कहा, नहीं राम! झूठ बोलना अच्छा नहीं होता, बहुत बुरा होता है
☐ D. माँ ने गर्व से कहा, "नहीं राम! झूठ बोलना अच्छा नहीं होता, बहुत बुरा होता है।

Question ID : 2752286223

Comprehension:

निम्नलिखित गद्यांश को ध्यानपूर्वक पढ़िए और दिए गए प्रश्नों के उत्तर दीजिए।

विज्ञापन कला जिस तेजी से उन्नति कर रही है, उससे मुझे भविष्य के लिए और भी अंदेशा है। लगता है ऐसा युग आने वाला है जब शिक्षा, विज्ञान, संस्कृति और साहित्य इनका केवल विज्ञापन कला के लिए ही उपयोग रह जाएगा। वैसे तो आज भी इस कला के लिए इनका खासा उपयोग होता है। बहुत-सी शिक्षण संस्थाएँ हैं जो सांप्रदायिक संस्थाओं का विज्ञापन मात्र हैं। अपनी पीढ़ी के कई लेखकों की कृतियाँ लाला छगनलाल, मगनलाल या इस तरह के नाम के किसी और लाल की स्मारक निधि से प्रकाशित होकर लाला जी की दिवंगत आत्मा के प्रति स्मारक होने का फर्ज अदा कर रही हैं मगर आने वाले युग में यह कला, दो कदम आगे बढ़ जाएगी। विद्यार्थियों को विश्वविद्यालय के दीक्षांत महोत्सव पर जो डिग्रियाँ दी जाएँगी, उनके निचले कोने में छपा रहेगा- 'आपकी शिक्षा के उपयोग का एक ही मार्ग है, आज ही आयात-निर्यात का धंधा प्रारंभ कीजिए। मुफ्त सूचीपत्र के लिए लिखिए।' हर नए आविष्कार का चेहरा मुस्कराता हुआ टेलीविजन पर जाकर कुछ इस तरह निवेदन करेगा- 'मुझे यह कहते हुए हार्दिक प्रसन्नता है कि मेरे प्रयत्न की सफलता का सारा श्रेय इस कंपनी को है, क्योंकि उन्हीं के प्रोत्साहन और प्रेरणा से मैंने इस दिशा में कदम बढ़ाया था।

SubQuestion No : 16

Q.16 अनुच्छेद में विज्ञापन के प्रति भविष्य के लिए क्या आशंका जताई गई है?

- Ans ☒ A. विज्ञापन का प्रगति पथ रुक जाएगा
☒ B. विज्ञापन का उपयोग गिने-चुने क्षेत्रों में ही किया जाएगा
☒ C. सभी क्षेत्र अपना मुख्य उद्देश्य छोड़कर विभिन्न उत्पादों का विज्ञापन करते नजर आएँगे
☒ D. विज्ञापन का महत्त्व कम हो जाएगा

Question ID : 2752286231

Comprehension:

निम्नलिखित गद्यांश को ध्यानपूर्वक पढ़िए और दिए गए प्रश्नों के उत्तर दीजिए।

विज्ञापन कला जिस तेजी से उन्नति कर रही है, उससे मुझे भविष्य के लिए और भी अंदेशा है। लगता है ऐसा युग आने वाला है जब शिक्षा, विज्ञान, संस्कृति और साहित्य इनका केवल विज्ञापन कला के लिए ही उपयोग रह जाएगा। वैसे तो आज भी इस कला के लिए इनका खासा उपयोग होता है। बहुत-सी शिक्षण संस्थाएँ हैं जो सांप्रदायिक संस्थाओं का विज्ञापन मात्र हैं। अपनी पीढ़ी के कई लेखकों की कृतियाँ लाला छगनलाल, मगनलाल या इस तरह के नाम के किसी और लाल की स्मारक निधि से प्रकाशित होकर लाला जी की दिवंगत आत्मा के प्रति स्मारक होने का फर्ज अदा कर रही हैं मगर आने वाले युग में यह कला, दो कदम आगे बढ़ जाएगी। विद्यार्थियों को विश्वविद्यालय के दीक्षांत महोत्सव पर जो डिग्रियाँ दी जाएँगी, उनके निचले कोने में छपा रहेगा- 'आपकी शिक्षा के उपयोग का एक ही मार्ग है, आज ही आयात-निर्यात का धंधा प्रारंभ कीजिए। मुफ्त सूचीपत्र के लिए लिखिए।' हर नए आविष्कार का चेहरा मुस्कराता हुआ टेलीविजन पर जाकर कुछ इस तरह निवेदन करेगा- 'मुझे यह कहते हुए हार्दिक प्रसन्नता है कि मेरे प्रयत्न की सफलता का सारा श्रेय इस कंपनी को है, क्योंकि उन्हीं के प्रोत्साहन और प्रेरणा से मैंने इस दिशा में कदम बढ़ाया था।

SubQuestion No : 17

Q.17 इस अनुच्छेद के माध्यम से लेखक क्या कहना चाहता है?

- Ans ☒ A. मानव जीवन व विज्ञापन कभी एक साथ नहीं आ सकते
☒ B. विज्ञापन कला ने मनुष्य के दैनिक जीवन को प्रभावित किया है
☒ C. मनुष्य विज्ञापन की महत्ता से कोसो दूर है
☒ D. विज्ञापन का मनुष्य के जीवन में कोई महत्त्व नहीं है

Question ID : 2752286233

Comprehension:

निम्नलिखित गद्यांश को ध्यानपूर्वक पढ़िए और दिए गए प्रश्नों के उत्तर दीजिए।

विज्ञापन कला जिस तेजी से उन्नति कर रही है, उससे मुझे भविष्य के लिए और भी अंदेशा है। लगता है ऐसा युग आने वाला है जब शिक्षा, विज्ञान, संस्कृति और साहित्य इनका केवल विज्ञापन कला के लिए ही उपयोग रह जाएगा। वैसे तो आज भी इस कला के लिए इनका खासा उपयोग होता है। बहुत-सी शिक्षण संस्थाएँ हैं जो सांप्रदायिक संस्थाओं का विज्ञापन मात्र हैं। अपनी पीढ़ी के कई लेखकों की कृतियाँ लाला छगनलाल, मगनलाल या इस तरह के नाम के किसी और लाल की स्मारक निधि से प्रकाशित होकर लाला जी की दिवंगत आत्मा के प्रति स्मारक होने का फर्ज अदा कर रही हैं मगर आने वाले युग में यह कला, दो कदम आगे बढ़ जाएगी। विद्यार्थियों को विश्वविद्यालय के दीक्षांत महोत्सव पर जो डिग्रियाँ दी जाएँगी, उनके निचले कोने में छपा रहेगा- 'आपकी शिक्षा के उपयोग का एक ही मार्ग है, आज ही आयात-निर्यात का धंधा प्रारंभ कीजिए। मुफ्त सूचीपत्र के लिए लिखिए।' हर नए आविष्कार का चेहरा मुस्कराता हुआ टेलीविजन पर जाकर कुछ इस तरह निवेदन करेगा- 'मुझे यह कहते हुए हार्दिक प्रसन्नता है कि मेरे प्रयत्न की सफलता का सारा श्रेय इस कंपनी को है, क्योंकि उन्हीं के प्रोत्साहन और प्रेरणा से मैंने इस दिशा में कदम बढ़ाया था।

SubQuestion No : 18

Q.18 वर्तमान में शिक्षण संस्थाओं की क्या स्थिति बन गई है?

- Ans ☒ A. छात्रों की कमी हो गई है
- ☒ B. वे सांप्रदायिक संस्थाओं के विज्ञापन मात्र बनकर रह गई है
- ☒ C. सांप्रदायिक संस्थाओं के साथ उनका कोई संबंध नहीं है
- ☒ D. मुक्त कार्य कर रहे है

Question ID : 2752286232

Comprehension:

निम्नलिखित गद्यांश को ध्यानपूर्वक पढ़िए और दिए गए प्रश्नों के उत्तर दीजिए।

विज्ञापन कला जिस तेजी से उन्नति कर रही है, उससे मुझे भविष्य के लिए और भी अंदेशा है। लगता है ऐसा युग आने वाला है जब शिक्षा, विज्ञान, संस्कृति और साहित्य इनका केवल विज्ञापन कला के लिए ही उपयोग रह जाएगा। वैसे तो आज भी इस कला के लिए इनका खासा उपयोग होता है। बहुत-सी शिक्षण संस्थाएँ हैं जो सांप्रदायिक संस्थाओं का विज्ञापन मात्र हैं। अपनी पीढ़ी के कई लेखकों की कृतियाँ लाला छगनलाल, मगनलाल या इस तरह के नाम के किसी और लाल की स्मारक निधि से प्रकाशित होकर लाला जी की दिवंगत आत्मा के प्रति स्मारक होने का फर्ज अदा कर रही हैं मगर आने वाले युग में यह कला, दो कदम आगे बढ़ जाएगी। विद्यार्थियों को विश्वविद्यालय के दीक्षांत महोत्सव पर जो डिग्रियाँ दी जाएँगी, उनके निचले कोने में छपा रहेगा- 'आपकी शिक्षा के उपयोग का एक ही मार्ग है, आज ही आयात-निर्यात का धंधा प्रारंभ कीजिए। मुफ्त सूचीपत्र के लिए लिखिए।' हर नए आविष्कार का चेहरा मुस्कराता हुआ टेलीविजन पर जाकर कुछ इस तरह निवेदन करेगा- 'मुझे यह कहते हुए हार्दिक प्रसन्नता है कि मेरे प्रयत्न की सफलता का सारा श्रेय इस कंपनी को है, क्योंकि उन्हीं के प्रोत्साहन और प्रेरणा से मैंने इस दिशा में कदम बढ़ाया था।

SubQuestion No : 19

Q.19 इस अनुच्छेद का कोई उपयुक्त शीर्षक:

- Ans ☒ A. विज्ञापन की घटती दुनिया।
- ☒ B. आज का विज्ञापन
- ☒ C. विज्ञापन की बढ़ती दुनिया।
- ☒ D. महत्त्वहीन विज्ञापन

Question ID : 2752286235

Comprehension:

निम्नलिखित गद्यांश को ध्यानपूर्वक पढ़िए और दिए गए प्रश्नों के उत्तर दीजिए।

विज्ञापन कला जिस तेजी से उन्नति कर रही है, उससे मुझे भविष्य के लिए और भी अंदेशा है। लगता है ऐसा युग आने वाला है जब शिक्षा, विज्ञान, संस्कृति और साहित्य इनका केवल विज्ञापन कला के लिए ही उपयोग रह जाएगा। वैसे तो आज भी इस कला के लिए इनका खासा उपयोग होता है। बहुत-सी शिक्षण संस्थाएँ हैं जो सांप्रदायिक संस्थाओं का विज्ञापन मात्र हैं। अपनी पीढ़ी के कई लेखकों की कृतियाँ लाला छगनलाल, मगनलाल या इस तरह के नाम के किसी और लाल की स्मारक निधि से प्रकाशित होकर लाला जी की दिवंगत आत्मा के प्रति स्मारक होने का फर्ज अदा कर रही हैं मगर आने वाले युग में यह कला, दो कदम आगे बढ़ जाएगी। विद्यार्थियों को विश्वविद्यालय के दीक्षांत महोत्सव पर जो डिग्रियाँ दी जाएँगी, उनके निचले कोने में छपा रहेगा- 'आपकी शिक्षा के उपयोग का एक ही मार्ग है, आज ही आयात-निर्यात का धंधा प्रारंभ कीजिए। मुफ्त सूचीपत्र के लिए लिखिए।' हर नए आविष्कार का चेहरा मुस्कराता हुआ टेलीविजन पर जाकर कुछ इस तरह निवेदन करेगा- 'मुझे यह कहते हुए हार्दिक प्रसन्नता है कि मेरे प्रयत्न की सफलता का सारा श्रेय इस कंपनी को है, क्योंकि उन्हीं के प्रोत्साहन और प्रेरणा से मैंने इस दिशा में कदम बढ़ाया था।

SubQuestion No : 20

Q.20 इनमें से कौन - सा शब्द स्मारक का पर्यायवाची शब्द नहीं है?

- Ans ☒ A. निशानी
☒ B. समाधि
☒ C. स्मृतिचिन्ह
☒ D. संस्था

Question ID : 2752286234

DSSSB Junior Assistant Question Paper 2021

| | |
|------------------|--------------------------------------|
| Participant ID | Join Telegram Group "HaryanaJobs.in" |
| Participant Name | |
| Test Center Name | |
| Test Date | 31/08/2021 |
| Test Time | 12:30 PM - 2:30 PM |
| Subject | Junior Assistant |

Section : General Ability1

Q.1 Select the option that is related to the third term on the same basis as the second term is related to the first term.

NSX : KPU :: RHQ : ?

Ans ☒ A. MGO

☒ B. OGN

☒ C. OEN

☒ D. NDP

Question ID : 2752286245

Q.2 A is the father of B and C. B is the son of A but C is not the son of A. How is C related to A?

Ans ☒ A. Brother

☒ B. Nephew

☒ C. Niece

☒ D. Daughter

Question ID : 2752286252

Q.3 Out of the given options, three are similar in a certain manner. However, one option is NOT like the other three. Select the option which is different from the rest.

Ans ☒ A. HIN

☒ B. KMP

☒ C. OQT

☒ D. WYB

Question ID : 2752286240

Q.4 Arrange the following in a logical sequence:

1. Foot
2. Eyes
3. Legs
4. Neck
5. Stomach

Ans ☒ A. 1, 3, 5, 4, 2

☒ B. 5, 4, 2, 1, 3

☒ C. 3, 1, 2, 4, 5

☒ D. 2, 5, 4, 1, 3

Question ID : 2752286253

Q.5 If SMALL = 57, MUST = 73, then what is the code for FINGER?

Ans ☒ A. 48

☒ B. 50

☒ C. 59

☒ D. 62

Question ID : 2752286250

Q.6 Out of the given options, three are similar in a certain manner. However, one option is NOT like the other three. Select the option which is different from the rest.

Ans ☒ A. Buy : Sell

☒ B. Bow : Arrow

☒ C. Profit : Earnings

☒ D. Chair : Table

Question ID : 2752286243

Q.7 In a class, Manisha's rank is 29th in the class and Nisha is 8 ranks ahead of Manisha. If Nisha ranks 32nd from the last, then how many students are there in the class?

Ans ☒ A. 51

☒ B. 53

☒ C. 54

☒ D. 52

Question ID : 2752286255

Q.8 Out of the given options, three are similar in a certain manner. However, one option is NOT like the other three. Select the option which is different from the rest.

Ans ☒ A. Bus

☒ B. Car

☒ C. Boat

☒ D. Cycle

Question ID : 2752286241

Q.9 Complete the following letter series:

BCQ, DER, FGS, _____

- Ans
- ☒ A. GKT
 - ☒ B. HJS
 - ☒ C. GJU
 - ☒ D. HIT

Question ID : 2752286238

Q.10 In a certain code language,
zin min tin lin means she loves rock music
gin zin yin tin means she has big rock
fin gin sin tin means she has smart watch
what is the code for big?

- Ans
- ☒ A. lin
 - ☒ B. zin
 - ☒ C. yin
 - ☒ D. tin

Question ID : 2752286251

Q.11 If Violet is Indigo, Indigo is Blue, Blue is Green, Green is Yellow, Yellow is Orange, Orange is Red, Red is White, White is Black, then which of the following is the color of sheep?

- Ans
- ☒ A. Black
 - ☒ B. White
 - ☒ C. Yellow
 - ☒ D. Red

Question ID : 2752286248

Q.12 Find the wrong term in the following series:

BKT, HQZ, NWF, TCL, ZHR

- Ans
- ☒ A. TCL
 - ☒ B. HQZ
 - ☒ C. NWF
 - ☒ D. ZHR

Question ID : 2752286239

Q.13 In a certain code language, Q=T, K=N and A=D, then how will MOVE be coded as?

- Ans
- ☒ A. PRYH
 - ☒ B. SQXI
 - ☒ C. RSZU
 - ☒ D. OQUI

Question ID : 2752286249

Q.14 Select the pair that is related on the same basis to the pair given in the question.

GPF : IOH :: ?

- Ans
- ☒ A. DMK : FPN
 - ☒ B. XRH : ZUG
 - ☒ C. RJC : TKE
 - ☒ D. VUG : XTI

Question ID : 2752286247

Q.15 Ritika, Esha, Nisha, Vishal, Darsh and Faiz are sitting around a round table facing the centre. Ritika is opposite Nisha, who is to the right of Faiz, who is not opposite Esha, Ritika is next to Vishal. If Esha is opposite Vishal, then who is to the right of Darsh?

- Ans
- ☒ A. Faiz
 - ☒ B. Vishal
 - ☒ C. Darsh
 - ☒ D. Ritika

Question ID : 2752286254

Q.16 Out of the given options, three are similar in a certain manner. However, one option is NOT like the other three. Select the option which is different from the rest.

- Ans
- ☒ A. KQZ : ENR
 - ☒ B. OVB : SZF
 - ☒ C. FIL : JMP
 - ☒ D. GMT : KQX

Question ID : 2752286242

Q.17 Select the pair that is related on the same basis to the pair given in the question.

Taka : Bangladesh :: ?

- Ans
- ☒ A. Rial : Iran
 - ☒ B. Yen : China
 - ☒ C. Kuwait : Dirham
 - ☒ D. Drachma : South Africa

Question ID : 2752286246

Q.18 Select the option that is related to the third term on the same basis as the second term is related to the first term.

Hammer : Tool :: Lizard : ?

- Ans
- ☒ A. Mammal
 - ☒ B. Reptile
 - ☒ C. Rodent
 - ☒ D. Amphibian

Question ID : 2752286244

Q.19 Find the missing term in the following series:

pq_pqq_qqp_q

- Ans ☒ A. qpq
☐ B. pqq
☐ C. qqp
☐ D. qqg

Question ID : 2752286237

Q.20 In the following question, one of the option cannot be formed by the word, given in the question. Find that word.

ENCYCLOPEDIA

- Ans ☐ A. PLACID
☒ B. LINKED
☐ C. POLICY
☐ D. COINED

Question ID : 2752286236

Section : General Ability2

Q.1 प्रश्न में एक कथन दिया गया है, जिसके बाद दो तर्क I और II दिए गए हैं। आपको उन कथनों को सत्य मानना है, भले ही यह सामान्यतः ज्ञात तथ्य से भिन्न प्रतीत हो। आपको यह निर्णय लेना है कि दिए गए तर्कों में से कौन सा, यदि कोई हो, तो दिए गए कथन का अनुसरण करता है।

कथन: किसी भी संगठन में जुड़ने से पहले कर्मचारियों की अनिवार्य चिकित्सा जांच होनी चाहिए?

तर्क:

- I. हाँ, इससे संगठन में जुड़ने से पहले कर्मचारियों की मेडिकल फिटनेस के बारे में जानने में संगठन को मदद मिलेगी।
II. नहीं, यह व्यक्तियों की गोपनीयता को बाधित करेगा और इसलिए यह उचित नहीं है।

- Ans ☐ A. तर्क I और तर्क II दोनों सबल हैं
☐ B. केवल तर्क II सबल है
☒ C. केवल तर्क I सबल है
☐ D. न तर्क I और न ही II सबल है

Question ID : 2752286258

Q.2 Find the least number which when divided by 7, 14 and 35 leaves a remainder 8 in each case.

- Ans ☐ A. 70
☒ B. 78
☐ C. 100
☐ D. 45

Question ID : 2752286263

Q.3 A cube is painted Red on two adjacent faces, Blue on other two adjacent faces and Green on the last two adjacent faces. This cube is cut into 125 smaller cubes. How many of these smaller cubes will have only three faces painted or no paint on any of its faces?

- Ans
- ☒ A. 36
 - ☒ B. 25
 - ☒ C. 24
 - ☒ D. 35

Question ID : 2752286272

Q.4 The given Venn diagram shows the number of students who are a member of quiz, dance and debate Club. How many of these students are a member of dance club?

- Ans
- ☒ A. 20
 - ☒ B. 18
 - ☒ C. 26
 - ☒ D. 34

Question ID : 2752286267

Q.5 The given Venn diagram shows the number of people in a colony who are teachers, writers and singers. There are 100 people in the colony. How many of these people are none of the above?

- Ans
- ☒ A. 10
 - ☒ B. 16
 - ☒ C. 24
 - ☒ D. 20

Question ID : 2752286264

Q.6 Select the option that is related to the third term on the same basis as the second term is related to the first term.

24 : 60 :: 64 : ?

- Ans
- ☒ A. 120
 - ☒ B. 160
 - ☒ C. 128
 - ☒ D. 146

Question ID : 2752286260

Q.7 Which of the following answer figure completes the series of the question figure?

- Ans
- ☒ A.
 - ☒ B.
 - ☒ C.
 - ☒ D.

Question ID : 2752286271

Q.8 Which of the following Venn diagrams best represents the relationship between animals, amphibians, reptiles?

- Ans ☒ A.
☐ B.
☐ C.
☐ D.

Question ID : 2752286266

Q.9 Out of the given options, three are similar in a certain manner. However, one option is NOT like the other three. Select the option which is different from the rest.

- Ans ☐ A.
☐ B.
☒ C.
☐ D.

Question ID : 2752286270

Q.10 If a mirror is placed on the line MN, then which of the answer figures is the right image of the given figure?

- Ans ☐ A.
☒ B.
☐ C.
☐ D.

Question ID : 2752286275

Q.11 Select the option that is related to the third image on the same basis as the second image is related to the first image.

- Ans ☐ A.
☐ B.
☒ C.
☐ D.

Question ID : 2752286268

Q.12 In the question two statements are given, followed by three conclusions, I, II and III. You have to consider the statements to be true even if it seems to be at variance from commonly known facts. You have to decide which of the given conclusions, if any, follows from the given statements.

Statement 1 : Some forks are plates.
Statement 2 : All plates are spoon.

Conclusion I : Some plates are forks.
Conclusion II : Some spoon are forks.
Conclusion III : All forks are spoon.

- Ans ☒ A. Only conclusion I and III follows
☒ B. Only conclusion I and II follows
☒ C. All conclusions I, II and III follow
☒ D. Only conclusion I follows

Question ID : 2752286259

Q.13 Which of the following answer figure patterns can be combined to make the question figure?

- Ans ☒ A.
☒ B.
☒ C.
☒ D.

Question ID : 2752286274

Q.14 प्रश्न में एक कथन दिया गया है, जिसके बाद कार्रवाई के दो क्रम I और II दिए गए हैं। आपको उन कथनों को सत्य मानना है, भले ही यह सामान्यतः ज्ञात तथ्य से भिन्न प्रतीत हो। आपको यह निर्णय लेना है कि दिए गए कार्रवाई के क्रम में से कौन सी, यदि कोई हो, तो दिए गए कथन का अनुसरण करता है।

कथन: कक्षा IX B में 80 प्रतिशत छात्र अपनी अंतिम परीक्षा में विफल रहे।

कार्रवाई का क्रम:

I: कक्षा IX B के शिक्षक ठीक से नहीं पढ़ा रहे हैं, इसलिए उन्हें निकाल दिया जाना चाहिए।

II: नई शिक्षण तकनीकों को लागू किया जाना चाहिए जो छात्रों की अवधारणाओं को बेहतर तरीके से समझने में मदद करेंगे।

- Ans ☒ A. केवल I अनुसरण करता है
☒ B. केवल II अनुसरण करता है
☒ C. न I और न ही II अनुसरण करता है
☒ D. I और II दोनों अनुसरण करते हैं

Question ID : 2752286256

Q.15 In the following figure, triangle represents Indians, rectangle represents cooks, circle represents footballers. How many Indian footballers are cook?

- Ans ☒ A. 15
☒ B. 20
☒ C. 10
☒ D. 18

Question ID : 2752286265

Q.16 In the question two statements are given, followed by two conclusions, I and II. You have to consider the statements to be true even if it seems to be at variance from commonly known facts. You have to decide which of the given conclusions, if any, follows from the given statements.

Statement 1 : All fish are tadpoles.
Statement 2 : All tadpoles are frogs.

Conclusion I : All frogs are tadpoles.
Conclusion II : All tadpoles are fish.

- Ans ☒ A. Only conclusion I follows
☒ B. Both I and II follows
☒ C. Only conclusion II follows
☒ D. Neither I nor II follows

Question ID : 2752286257

Q.17 Find the missing number in the following series:

3, 6, 24, _____, 1152

- Ans ☒ A. 156
☒ B. 120
☒ C. 96
☒ D. 144

Question ID : 2752286261

Q.18 If $15 \# 17 = 48$, $17 \# 13 = 45$, $18 @ 14 = 48$, then $16 @ 22 = ?$

- Ans ☒ A. 57
☒ B. 38
☒ C. 114
☒ D. 76

Question ID : 2752286262

Q.19 Which of the following cube in the answer figure cannot be made based on the unfolded cube in the question figure?

- Ans ☒ A.
☒ B.
☒ C.
☒ D.

Question ID : 2752286273

Q.20 Which of the following options is the wrong figure in the series?

- Ans
- ☒ A. Image C
 - ☒ B. Image B
 - ☒ C. Image A
 - ☒ D. Image D

Question ID : 2752286269

Section : General Awareness1

Q.1 As per the Indus Waters Treaty between India and Pakistan, India has been allowed the usage of which of the following rivers?

- Ans
- ☒ A. Indus, Jhelum, Chenab
 - ☒ B. Ravi, Indus, Chenab
 - ☒ C. Beas, Ravi, Sutlej
 - ☒ D. Chenab, Jhelum, Ravi

Question ID : 2752286293

Q.2 Sugar has the ability to absorb moisture from the surrounding it is exposed to. One of the following terms that describes this is known as _____.

- Ans
- ☒ A. Hygroscopy
 - ☒ B. Condensation
 - ☒ C. Eroding
 - ☒ D. Activation

Question ID : 2752286286

Q.3 Which one of the following describes the term "hypochondria"?

- Ans
- ☒ A. Daytime sleeping
 - ☒ B. Excessive snoring
 - ☒ C. Sleep with hallucinations
 - ☒ D. Anxiety about state of health

Question ID : 2752286289

Q.4 Which one of the following is the venue of the Kumbh Mela in 2021?

- Ans
- ☒ A. Ujjain
 - ☒ B. Haridwar
 - ☒ C. Nashik
 - ☒ D. Prayagraj

Question ID : 2752286278

Q.5 Jhulta Minar is located in which one of the following states of India?

- Ans ☒ A. Gujarat
☒ B. Uttar Pradesh
☒ C. Andhra Pradesh
☒ D. Rajasthan

Question ID : 2752286279

Q.6 Amongst the following, which river was earlier known as the "Sorrow of Bengal"?

- Ans ☒ A. Damodar
☒ B. Teesta
☒ C. Subarnarekha
☒ D. Kosi

Question ID : 2752286290

Q.7 The concepts of work and energy share which one of the following units of measurement?

- Ans ☒ A. Watt
☒ B. Joule
☒ C. Ampere
☒ D. Ohm

Question ID : 2752286285

Q.8 Amongst the following, who presents the Union Budget of India in Parliament?

- Ans ☒ A. Chief Economic Advisor
☒ B. Finance Secretary
☒ C. Prime Minister
☒ D. Finance Minister

Question ID : 2752286280

Q.9 Amongst the following, who became the first Chairman of the Planning Commission in 1950?

- Ans ☒ A. Morarji Desai
☒ B. Jawaharlal Nehru
☒ C. Indira Gandhi
☒ D. Sardar Vallabhbhai Patel

Question ID : 2752286281

Q.10 Which one of the following should not be added to convert waste to compost in a compost pit?

- Ans ☒ A. Microorganisms
☒ B. Water
☒ C. Leaves
☒ D. Plastic items

Question ID : 2752286288

Q.11 Amongst the following, who is known as the author of Arthashastra?

- Ans ☒ A. Kalidasa
☒ B. Aryabhatta
☒ C. Kautilya
☒ D. Varahamihira

Question ID : 2752286294

Q.12 Law of diminishing marginal utility, means the first unit of consumption of a good yields _____ than the second unit.

- Ans ☒ A. less utility
☒ B. more utility
☒ C. less price
☒ D. more price

Question ID : 2752286283

Q.13 Mrinalini Sarabhai was trained in which one of the following dance forms?

- Ans ☒ A. Lavani
☒ B. Bihu
☒ C. Bharatnatyam
☒ D. Gotipua

Question ID : 2752286276

Q.14 Which one of the following kings of the Vijayanagara empire belonged to the Tuluva dynasty?

- Ans ☒ A. Harihara I
☒ B. Sriranga I
☒ C. Krishnadevaraya
☒ D. Thimma Bhupala

Question ID : 2752286295

Q.15 One of the following is classified as a flowering plant. Name it.

- Ans ☒ A. Mosses
☒ B. Grasses
☒ C. Conifers
☒ D. Ferns

Question ID : 2752286287

Q.16 As on April 2020, GST on gold as a good is _____ percent , while in case of gold jewellery an additional 5 percent GST is applicable on the making charges of the gold ornaments.

- Ans ☒ A. 2
☒ B. 3
☒ C. 2.5
☒ D. 1.5

Question ID : 2752286284

Q.17 Amongst the following, the market value of share is described by _____.

- Ans ☒ A. future values of all earnings on the share
☒ B. IPO value of the share
☒ C. buying or selling value of share
☒ D. book value of share

Question ID : 2752286282

Q.18 Amongst the following, Annapurna Devi was a notable performer of which musical instrument?

- Ans ☒ A. Pakhawaj
☒ B. Sarangi
☒ C. Surbahar
☒ D. Ghatam

Question ID : 2752286277

Q.19 Which one of the following is not a Himalayan pass?

- Ans ☒ A. Palghat pass
☒ B. Zoji La
☒ C. Banihal pass
☒ D. Kora La

Question ID : 2752286291

Q.20 As of April 2020, which state produces the maximum quantity of coffee in India?

- Ans ☒ A. Tamil Nadu
☒ B. Kerala
☒ C. Odisha
☒ D. Karnataka

Question ID : 2752286292

Q.1 As of April 2020, which one of the following teams has never won the Indian Premier League (IPL)?

- Ans ☒ A. Mumbai Indians
☒ B. Royal Challengers Bangalore
☒ C. Kolkata Knight Riders
☒ D. Rajasthan Royals

Question ID : 2752286312

Q.2 भारत में, अप्रैल 2020 तक, निम्नलिखित में से कौन सा कर केंद्र और राज्य दोनों स्तरों पर लगाया जाता है?

- Ans ☒ A. उत्पाद शुल्क
☒ B. नगर शुल्क (ओक्ट्रॉई)
☒ C. मूल सीमा शुल्क
☒ D. वस्तु एवं सेवा कर

Question ID : 2752286309

Q.3 As of April 2020, which one of the following is not mentioned in the Preamble to the Constitution of India?

- Ans ☒ A. Liberty
☒ B. Peace
☒ C. Justice
☒ D. Equality

Question ID : 2752286307

Q.4 Which one of the following was the venue for Mahatma Gandhi's Quit India speech in 1942?

- Ans ☒ A. Cellular Jail
☒ B. Gowalia Tank Maidan
☒ C. Red Fort
☒ D. Sabarmati Ashram

Question ID : 2752286298

Q.5 Which one of the following was the venue for the first edition of the Commonwealth Games in 1930?

- Ans ☒ A. Hamilton, Canada
☒ B. Kuala Lumpur, Malaysia
☒ C. Sydney, Australia
☒ D. London, England

Question ID : 2752286313

Q.6 As of April 2020, the membership of the Rajya Sabha contains a provision for how many nominated members?

- Ans
- ☐ A. 20
 - ☐ B. 18
 - ☐ C. 16
 - ☒ D. 12

Question ID : 2752286308

Q.7 In April 2020, which country announced a relief package of \$2.9 million to India as relief for the coronavirus pandemic?

- Ans
- ☐ A. United Kingdom
 - ☐ B. China
 - ☐ C. Australia
 - ☒ D. United States of America

Question ID : 2752286305

Q.8 Amongst the following, name India's highest military honour for distinguished valour during wartime.

- Ans
- ☒ A. Param Vir Chakra
 - ☐ B. Kirti Chakra
 - ☐ C. Ashok Chakra
 - ☐ D. Maha Vir Chakra

Question ID : 2752286300

Q.9 Amongst the following, who created the "You Said It" comic strip featured in the The Times of India?

- Ans
- ☒ A. R.K. Laxman
 - ☐ B. Satish Acharya
 - ☐ C. Abu Abraham
 - ☐ D. Sudhir Tailang

Question ID : 2752286299

Q.10 Which one of the following Sikh gurus standardized and popularized the Gurmukhi script?

- Ans
- ☐ A. Guru Gobind Singh
 - ☒ B. Guru Angad
 - ☐ C. Guru Tegh Bahadur
 - ☐ D. Guru Nanak

Question ID : 2752286296

Q.11 In which year did the Bastar rebellion take place?

- Ans
- ☐ A. 1907
 - ☐ B. 1905
 - ☐ C. 1900
 - ☒ D. 1910

Question ID : 2752286297

Q.12 In which of the following games a player can also be called a raider?

- Ans
- ☒ A. Kabaddi
 - ☐ B. Hockey
 - ☐ C. Wrestling
 - ☐ D. Volleyball

Question ID : 2752286314

Q.13 Which one of the following is not a literary work by Munshi Premchand?

- Ans
- ☐ A. Nirmala
 - ☐ B. Gaban
 - ☐ C. Shatranj ke Khiladi
 - ☒ D. Anamdas ka Potha

Question ID : 2752286301

Q.14 As of April 2020, which one of the following languages is not a part of the Eighth Schedule to the Constitution of India?

- Ans
- ☒ A. Tulu
 - ☐ B. Sanskrit
 - ☐ C. Sindhi
 - ☐ D. Urdu

Question ID : 2752286310

Q.15 As on 7th April 2020, India had announced limited exports of popular _____ drug hydroxychloroquine.

- Ans
- ☐ A. anti-viral
 - ☐ B. anti-fungal
 - ☐ C. anti-bacterial
 - ☒ D. anti-malarial

Question ID : 2752286303

Q.16 As of April 2020, who is the highest wicket-taker in one day international in women's cricket?

- Ans ☒ A. Marizanne Kapp
☒ B. Catherine Fitzpatrick
☒ C. Jhulan Goswami
☒ D. Ellyse Perry

Question ID : 2752286311

Q.17 On April 7 2020, which state/union territory adopted the 5T (testing, tracing, treatment, teamwork, and tracking) method for curbing the coronavirus pandemic?

- Ans ☒ A. Chandigarh
☒ B. Delhi
☒ C. Rajasthan
☒ D. Uttar Pradesh

Question ID : 2752286306

Q.18 What was the code name for India's first nuclear test conducted at Pokhran in 1974?

- Ans ☒ A. Smiling Buddha
☒ B. Operation Shakti
☒ C. Operation Bandar
☒ D. Peaceful Buddha

Question ID : 2752286302

Q.19 Amongst the following, who was the first person to score a century for India in Test cricket?

- Ans ☒ A. Sunil Gavaskar
☒ B. Dilip Vengsarkar
☒ C. Lala Amarnath
☒ D. Lalchand Rajput

Question ID : 2752286315

Q.20 As of April 2020, which airline operated India's first cargo-on-seat flight for carrying crucial supplies in the wake of the coronavirus pandemic?

- Ans ☒ A. Vistara
☒ B. SpiceJet
☒ C. Indigo
☒ D. GoAir

Question ID : 2752286304

Q.1 An article bought for Rs. 500 is sold at a profit of 20 percent. Find its selling price.

- Ans ☒ A. Rs. 400
☒ B. Rs. 600
☒ C. Rs. 300
☒ D. Rs. 500

Question ID : 2752286327

Q.2 You have Rs. 3600 in your account and the interest rate is 5 percent per annum. After how many years would you earn Rs. 360 as simple interest?

- Ans ☒ A. 3 year
☒ B. 4 year
☒ C. 1 year
☒ D. 2 year

Question ID : 2752286334

Q.3 In the school library, the ratio of Science books to Social studies books is the same as the ratio of Social studies books to Math books. If there are 900 books of Science and 600 books of Social studies, find the number of books on Math?

- Ans ☒ A. 300
☒ B. 400
☒ C. 100
☒ D. 200

Question ID : 2752286331

Q.4 The marked price of a ceiling fan is Rs. 960. During off-season, if it is sold for Rs. 816, then the discount is Rs. _____.

- Ans ☒ A. 150
☒ B. 144
☒ C. 124
☒ D. 156

Question ID : 2752286320

Q.5 If a rectangular courtyard is 20 m 2 cm long and 26 m 18 cm broad and it is to be furnished with square tiles of the same size, then the least possible number of tiles is _____.

- Ans ☒ A. 345
☒ B. 221
☒ C. 632
☒ D. 481

Question ID : 2752286319

Q.6 A gets 5 times as much money as B gets, B gets only Rs. 25 more than what C gets. The three get Rs. 675 in all. Find the share of B?

- Ans
- ☐ A. Rs. 140
 - ☐ B. Rs. 200
 - ☐ C. Rs. 120
 - ☒ D. Rs. 100

Question ID : 2752286332

Q.7 In a class of 50 students 30 percent are boys. 80 percent of girl students passed an exam conducted for the whole class. What is the number of female students who passed the exam?

- Ans
- ☐ A. 25
 - ☒ B. 28
 - ☐ C. 31
 - ☐ D. 35

Question ID : 2752286325

Q.8 The greatest number of four digits which is divisible by 24, 36 and 50 is _____.

- Ans
- ☐ A. 8964
 - ☐ B. 9560
 - ☒ C. 9000
 - ☐ D. 8400

Question ID : 2752286316

Q.9 Which of the following two ratios is not in proportion?

- Ans
- ☐ A. 13 : 39 and 25 : 75
 - ☒ B. 24 : 28 and 36 : 48
 - ☐ C. 1 : 5 and 3 : 15
 - ☐ D. 4 : 12 and 9 : 27

Question ID : 2752286333

Q.10 If the product of two numbers is 3000 and their LCM is 300, then the HCF is _____.

- Ans
- ☐ A. 100
 - ☐ B. 50
 - ☒ C. 10
 - ☐ D. 40

Question ID : 2752286317

Q.11 Simplify: $120 \div [18 - \{20 - 3 \times (19 - 15)\}] =$ _____

Ans ☒ A. 12

☒ B. 8

☒ C. 16

☒ D. 14

Question ID : 2752286318

Q.12 If 40 percent of $a = b$, then b percent of 40 is the same as _____.

Ans ☒ A. 4 percent of a

☒ B. 14 percent of a

☒ C. 8 percent of a

☒ D. 16 percent of a

Question ID : 2752286323

Q.13 If a number is increased by 30 percent and then decreased by 20 percent, then the net increase or decrease percent is _____ percent.

Ans ☒ A. 4

☒ B. 2

☒ C. 3

☒ D. 1

Question ID : 2752286326

Q.14 The marked price on a bicycle was Rs. 4000 but the shopkeeper offered a double discount of 20 percent and 15 percent. How much did he finally sell the bicycle for?

Ans ☒ A. Rs. 2300

☒ B. Rs. 3600

☒ C. Rs. 2720

☒ D. Rs. 5700

Question ID : 2752286322

Q.15 David borrows Rs. 9500 from a bank. Find the amount to be paid by him at the end of 4 years at the rate of 7 percent per annum simple interest.

Ans ☒ A. Rs. 12170

☒ B. Rs. 12160

☒ C. Rs. 1217

☒ D. Rs. 1216

Question ID : 2752286335

Q.16 If the mean of 20 observations is 40 and that of another 30 observation is 32. Then the mean of all 50 observations is _____.

Ans ☒ A. 35.2

☐ B. 31.3

☐ C. 34.8

☐ D. 33.6

Question ID : 2752286321

Q.17 The third proportional to 0.16 and 0.4 is _____.

Ans ☐ A. 0.55

☐ B. 2

☒ C. 1

☐ D. 0.85

Question ID : 2752286330

Q.18 A man sold a fan for Rs. 430. Find the cost price if he incurred a loss of 14 percent.

Ans ☐ A. Rs. 200

☐ B. Rs. 300

☒ C. Rs. 500

☐ D. Rs. 400

Question ID : 2752286328

Q.19 Soham purchased an old scooter for Rs. 24000 and spent Rs. 2850 on its repairs. Then, he sold it to his friend Roshan for Rs. 27720. How much percent did Soham gain or lose?

Ans ☐ A. 2.14 percent loss

☒ B. 3.24 percent gain

☐ C. 3.27 percent gain

☐ D. 4.18 percent loss

Question ID : 2752286329

Q.20 How much is 30 percent of 50 greater than 20 percent of 30?

Ans ☐ A. 1

☐ B. 4

☒ C. 9

☐ D. 5

Question ID : 2752286324

Q.1 The given histogram represents the marks scored by a group of students in a Math test. How many students scored 70 marks or more?

- Ans
- ☒ A. 8
 - ☒ B. 9
 - ☒ C. 7
 - ☒ D. 6

Question ID : 2752286355

Q.2 The compound interest on principal amount of Rs. 20000 for 2 years at 11 percent per annum compounded annually is Rs. _____.

- Ans
- ☒ A. 4842
 - ☒ B. 4142
 - ☒ C. 4442
 - ☒ D. 4642

Question ID : 2752286337

Q.3 The simple interest on Rs. 6660 at $7\frac{1}{2}$ percent per annum for 8 months is Rs. _____.

- Ans
- ☒ A. 444
 - ☒ B. 555
 - ☒ C. 222
 - ☒ D. 333

Question ID : 2752286336

Q.4 If a factory produces 24 bicycles in a day, how many bicycles will be produced in 4 days?

- Ans
- ☒ A. 4
 - ☒ B. 96
 - ☒ C. 24
 - ☒ D. 6

Question ID : 2752286341

Q.5 The given frequency polygon shows the lifetime of neon lamps. Observe the given frequency polygon and answer the following question. What is the range of the lifetime of neon lamps?

- Ans
- ☒ A. 350
 - ☒ B. 500
 - ☒ C. 650
 - ☒ D. 850

Question ID : 2752286354

Q.6 If Sonam travelled at 28 km/hr instead of 20 km/hr, she would have travelled 40 km more in the same time. The actual distance travelled by her is _____.

- Ans
- ☐ A. 470 km
 - ☐ B. 900 km
 - ☒ C. 100 km
 - ☐ D. 540 km

Question ID : 2752286338

Q.7 A car running at 55 km/hr takes one hour to cover a certain distance. If the speed is increased by 25 km/hr then in how much time it will cover the distance?

- Ans
- ☐ A. 40 mins
 - ☐ B. 44 mins
 - ☒ C. 41.25 mins
 - ☐ D. 42.25 mins

Question ID : 2752286339

Q.8 A survey was conducted to find what genre of movies people liked the most. The result of the survey is shown in the given pie chart. If 66 people liked romantic movies, how many people were surveyed?

- Ans
- ☐ A. 100
 - ☐ B. 400
 - ☒ C. 300
 - ☐ D. 200

Question ID : 2752286349

Q.9 The favourite flavours of ice-cream for the children in a locality are given in percentage in the given pie chart. Observe the pie chart and answer the following question:

What will be the central angle in degrees of the sector corresponding to vanilla?

- Ans
- ☐ A. 110
 - ☐ B. 120
 - ☒ C. 108
 - ☐ D. 130

Question ID : 2752286351

Q.10 The given graph shows the monthly budget of a person in rupees. Expenses on food is more than the expenses on rent by _____ percent.

- Ans
- ☐ A. 250
 - ☐ B. 200
 - ☒ C. 500
 - ☐ D. 80

Question ID : 2752286353

Q.11 The given histogram shows the amount spent on auto fare daily by the employees of a certain company. Observe the given histogram and answer the following question. How many employees spent more than or equal to Rs 90 per day on auto fare?

- Ans
- ☐ A. 90
 - ☐ B. 130
 - ☐ C. 20
 - ☒ D. 110

Question ID : 2752286352

Q.12 An open cylindrical tank is to be painted from inside and outside. The diameter of the container is 42 cm and its height is 60 cm. What is the area that is to be painted?

- Ans
- ☒ A. 18612 cubic unit
 - ☐ B. 16854 cubic unit
 - ☐ C. 16782 square unit
 - ☐ D. 12564 square unit

Question ID : 2752286345

Q.13 Suhana packs gifts in 10 cubical boxes. The dimension of each cubical box is (20 cm × 20 cm × 20 cm). These boxes are to be covered with glossy paper. If the cost of glossy paper is Rs 5 per square metre, then what is the total cost (in rupees) of covering the boxes with glossy paper? (Assume no overlap and no wastage.)

- Ans
- ☒ A. 12
 - ☐ B. 14
 - ☐ C. 8
 - ☐ D. 10

Question ID : 2752286347

Q.14 If a polyhedron has 4 faces and 8 edges, then the number of vertices of that polyhedron is:

- Ans
- ☐ A. 4
 - ☐ B. 8
 - ☐ C. 10
 - ☒ D. 6

Question ID : 2752286346

Q.15 A is twice as fast as B and B is thrice as fast as C. The journey covered by C in 48 minutes will be covered by A in _____.

- Ans
- ☒ A. 8 min
 - ☐ B. 4 min
 - ☐ C. 6 min
 - ☐ D. 2 min

Question ID : 2752286340

Q.16 The pie chart given below shows the time taken in 7 different processes A1, A2, A3, A4, A5, A6 and A7 in making a car as a percentage of total time taken. The total time taken in making one car is 1100 hours. What is the difference between the time taken in processes A3 and A4?

- Ans
- ☐ A. 72 hours
 - ☐ B. 123 hours
 - ☐ C. 96 hours
 - ☒ D. 132 hours

Question ID : 2752286350

Q.17 If A, B and C together can complete a work in 40 minutes and if A and B together can complete the same work in 60 minutes, then how long will C take working alone to complete that work?

- Ans
- ☒ A. 120 minutes
 - ☐ B. 240 minutes
 - ☐ C. 60 minutes
 - ☐ D. 180 minutes

Question ID : 2752286343

Q.18 Ram can do a piece of work in 12 days and Laxman can do it in 6 days. In how many days they will be do the same work together?

- Ans
- ☒ A. 4
 - ☐ B. 10
 - ☐ C. 6
 - ☐ D. 8

Question ID : 2752286344

Q.19 Use the data in the given table to find the difference between the mode and mean of the data? 'f' is frequency and 'x' is value.

- Ans
- ☐ A. 0.48
 - ☐ B. 0.4
 - ☐ C. 0.5
 - ☒ D. 0.52

Question ID : 2752286348

Q.20 If 15 men take 50 days to complete a job, then in how many days can 25 men complete the job?

- Ans
- ☐ A. 60
 - ☐ B. 750
 - ☐ C. 75
 - ☒ D. 30

Question ID : 2752286342

Section : General English1

Q.1 Select the word that is opposite in meaning (ANTONYM) to the word given below

Aggravate

- Ans ☒ A. Conciliate
☒ B. Incense
☒ C. Pique
☒ D. Rankle

Question ID : 2752286374

Q.2 Find the part of the given sentence that has an error in it. If there is no error, choose 'No error'.

The recession had brought (1)/ in many to the streets in protest (2)/ against the authoritarian government. (3)/ No Error (4)

- Ans ☒ A. The recession had brought
☒ B. against the authoritarian government.
☒ C. in many to the streets in protest
☒ D. No error

Question ID : 2752286360

Q.3 Find the part of the given sentence that has an error in it. If there is no error, choose 'No error'.

The Large Hadron Collider (1)/ is the worlds' largest and (2)/ most powerful particle accelerator. (3)/ No Error (4)

- Ans ☒ A. most powerful particle accelerator.
☒ B. The Large Hadron Collider
☒ C. No error
☒ D. is the worlds' largest and

Question ID : 2752286356

Q.4 Fill in the blank with appropriate word.

In a _____ order, he listed down all the events which led to the series finale.

- Ans ☒ A. prelogical
☒ B. liturgical
☒ C. analogical
☒ D. chronological

Question ID : 2752286366

Q.5 Select the word segment that substitutes (replaces) the bracketed word segment correctly and completes the sentence meaningfully. Select the option 'no correction required' if the sentence is correct as given.

(An absurd ridiculous idea troubled him everywhere); the thought of restarting his life from scratch, moving away and not leaving a trace behind was a battle he was fighting with himself.

- Ans ☒ A. An absurdly ridiculous idea troubled him everywhere
☐ B. An absurdly and ridiculously idea troubled him everywhere
☐ C. An absurdly ridiculous idea trouble him everywhere
☐ D. No corrections required

Question ID : 2752286361

Q.6 Fill in the blank with appropriate word.

He is further called an epic poet by Kabirdas, and three epigrams in the Indian _____ are assigned to him.

- Ans ☐ A. haul
☒ B. anthology
☐ C. bevy
☐ D. caucus

Question ID : 2752286367

Q.7 Some parts of a sentence have been jumbled up, and labelled P, Q, R and S. Select the option that gives the correct sequence in which these parts can be rearranged to form a meaningful and grammatically correct sentence.

Dr. Freud believes that people with

- P. the mirror conclusively proving their
Q. schizophrenia cannot identify themselves
R. in the mirror and try to reach on the other side of
S. inability to distinguish themselves

from their reflection.

- Ans ☐ A. QPSR
☐ B. QRSP
☒ C. QRPS
☐ D. QPRS

Question ID : 2752286370

Q.8 Select the word segment that substitutes (replaces) the bracketed word segment correctly and completes the sentence meaningfully. Select the option 'no correction required' if the sentence is correct as given.

He found it extremely hilarious, (a honest man's controversial mistake).

- Ans ☒ A. the honest man's controversial mistake
☐ B. No corrections required
☐ C. an honest mans' controversial mistake
☐ D. the honest mans' controversial mistake

Question ID : 2752286363

Q.9 Find the part of the given sentence that has an error in it. If there is no error, choose 'No error'.

Despite being a hard worker, (1)/ his erroneous nature mostly (2)/ yielded non fruitful results. (3)/ No Error (4)

- Ans ☒ A. Despite being a hard worker,
☒ B. yielded non fruitful results.
☒ C. No error
☒ D. his erroneous nature mostly

Question ID : 2752286358

Q.10 Fill in the blank with appropriate word.

He is trying to be the _____ heavy metal guitarist by wearing black clothes, having unkempt hair and getting lots of tattoos.

- Ans ☒ A. quintessential
☒ B. sesquipedalian
☒ C. quinquennial
☒ D. parricide

Question ID : 2752286368

Q.11 Find the part of the given sentence that has an error in it. If there is no error, choose 'No error'.

The Judiciary system of India upheld (1)/ its integrity and the constitutional values (2)/ time and time again. (3)/ No Error (4)

- Ans ☒ A. The Judiciary system of India upheld
☒ B. its integrity and the constitutional values
☒ C. No error
☒ D. time and time again.

Question ID : 2752286359

Q.12 Find the part of the given sentence that has an error in it. If there is no error, choose 'No error'.

In spite of belonging (1)/ from a opportunity laden environment, (2)/ he could barely make a name for himself. (3)/ No Error (4)

- Ans ☒ A. he could barely make a name for himself.
☒ B. In spite of belonging
☒ C. No error
☒ D. from a opportunity laden environment,

Question ID : 2752286357

Q.13 Select the word that is closest in meaning (SYNONYM) to the word given below

Emissary

- Ans ☒ A. Representative
☐ B. Callous
☐ C. Solecism
☐ D. Nihilist

Question ID : 2752286373

Q.14 The question below consist of a set of labelled sentences. Out of four options given, select the most logical order of the sentences which form a paragraph.

Ravindra Kaushik also known as "Tiger" was born into a modest family on 11th April 1952 in Sri Ganganagar, Rajasthan.

P. Once while performing during his college days, he was approached by a RAW agent who offered him a chance to serve his country by joining RAW and becoming an intelligence agent.

Q. He took up the opportunity and joined Raw as soon as he finished his college and started working as an Undercover Agent in Pakistan providing valuable and confidential information to India.

R. Growing up, he witnessed the Indo-Pak war between 1965 and 1971 and this lit a patriotic fire in his heart to serve for his country.

S. He finished his schooling from a government college in Ganganagar and attended a private college, where he picked up his knack for acting; subsequently becoming famous for his acting.

He was eventually caught by the Pakistani Army and was tragically incarcerated by Pakistani government.

- Ans ☐ A. RSQP
☐ B. RQSP
☒ C. RSPQ
☐ D. SPQR

Question ID : 2752286369

Q.15 Some parts of a sentence have been jumbled up, and labelled P, Q, R and S. Select the option that gives the correct sequence in which these parts can be rearranged to form a meaningful and grammatically correct sentence.

Given that the Indian armed forces

P. have an overwhelming dependence on the Russian defence

Q. equipment, the news that Russia has grounded its

R. entire fleet of MiG 29 aircrafts due to structural

S. defects and subsequently found a large

percentage unsafe to fly, is ominous.

- Ans ☐ A. PQSR
☒ B. PQRS
☐ C. PSQR
☐ D. PRSQ

Question ID : 2752286371

Q.16 Select the word segment that substitutes (replaces) the bracketed word segment correctly and completes the sentence meaningfully. Select the option 'no correction required' if the sentence is correct as given.

(Embryonic stem cell studies are controversial because) the embryos are discarded once the cells are extracted from them.

- Ans ☒ A. Embryonic stem cell studies are controversial for
☒ B. Embryonic stem cell studies are controversial over
☒ C. Embryonic stem cell studies are controversial with
☒ D. No corrections required

Question ID : 2752286362

Q.17 Select the word that is closest in meaning (SYNONYM) to the word given below

Juxtapose

- Ans ☒ A. Resemblance
☒ B. Parasol
☒ C. Exult
☒ D. Collocate

Question ID : 2752286375

Q.18 Fill in the blank with appropriate word.

Narendra Modi's _____ as Prime Minister was the ex Finance Minister Dr. Manmohan Singh.

- Ans ☒ A. viability
☒ B. successor
☒ C. ruminant
☒ D. predecessor

Question ID : 2752286365

Q.19 The question below consist of a set of labelled sentences. Out of four options given, select the most logical order of the sentences which form a paragraph.

The global equilibrium, which had allowed the United States to grow and prosper in virtual isolation since 1815 was gone forever as the result of a short but shattering war.

P. Notable amongst these possessions was Puerto Rico, the Philippines, and the small island of Guam.

Q. The 1898 Treaty of Paris ending the war gave Cuba its independence and also ceded important Spanish possessions to the United States.

R. In 1898, U.S. domestic support for the independence of Cuba enmeshed the United States in a struggle with Spain over the fate of the island nation.

S. The decision to aid the Cuban resistance was a major departure from the traditional American practice of liberal nationalism, and the results of that decision had far-reaching consequences.

With such authority and command, United States was suddenly a colonial power with overseas dependencies.

Ans ☒ A. RSPQ

☒ B. RPSQ

☒ C. RQSP

☒ D. RSQP

Question ID : 2752286372

Q.20 Select the word segment that substitutes (replaces) the bracketed word segment correctly and completes the sentence meaningfully. Select the option 'no correction required' if the sentence is correct as given.

(He barely broke a cold sweat even in) that insanely intense workout regime.

Ans ☒ A. He barely broke a cold sweat even with

☒ B. He had barely broken a cold sweat even in

☒ C. No corrections required

☒ D. He barely broke a sweat even with

Question ID : 2752286364

Section : General English2

Q.1 Four words are given, out of which only one word is spelt correctly. Choose the correctly spelt word.

Ans ☒ A. Incoperal

☒ B. Incoporeal

☒ C. Incorpreal

☒ D. Incorporeal

Question ID : 2752286380

Q.2 Select the most appropriate 'one word' for the expressions given below

A rich fabric woven with a raised pattern, typically with gold or silver thread.

- Ans
- ☒ A. Couvade
 - ☒ B. Cascade
 - ☒ C. Aubade
 - ☒ D. Brocade

Question ID : 2752286390

Q.3 Select the most appropriate meaning of the given idiom

To have a hollow leg.

- Ans
- ☒ A. To have a pirate lineage
 - ☒ B. To have a faint memory
 - ☒ C. To have a large appetite
 - ☒ D. Under the influence of liquor

Question ID : 2752286386

Q.4 Select the word that is closest in meaning (SYNONYM) to the word given below

Bibulous

- Ans
- ☒ A. Inebriated
 - ☒ B. Cantankerous
 - ☒ C. Godly
 - ☒ D. Sober

Question ID : 2752286377

Q.5 Four words are given, out of which only one word is spelt correctly. Choose the correctly spelt word.

- Ans
- ☒ A. Concieted
 - ☒ B. Conceitied
 - ☒ C. Concetied
 - ☒ D. Conceited

Question ID : 2752286378

Q.6 Select the most appropriate 'one word' for the expressions given below

Lasting only for a short time.

- Ans
- ☒ A. Sycophant
 - ☒ B. Transient
 - ☒ C. Denegation
 - ☒ D. Inscrutable

Question ID : 2752286387

Q.7 Select the most appropriate meaning of the given idiom

Bring down the house

- Ans
- ☒ A. Yield in a difficult situation
 - ☒ B. Burn down the house
 - ☒ C. Receive applause
 - ☒ D. Confession with no holds barred

Question ID : 2752286384

Q.8 Select the most appropriate 'one word' for the expressions given below

Treat a sacred place or thing with violent disrespect.

- Ans
- ☒ A. Confederacy
 - ☒ B. Digress
 - ☒ C. Desecrate
 - ☒ D. Peculation

Question ID : 2752286388

Q.9 Four words are given, out of which only one word is spelt correctly. Choose the correctly spelt word.

- Ans
- ☒ A. Plenipotentiary
 - ☒ B. Plentpoteniary
 - ☒ C. Plenpoteniary
 - ☒ D. Plenpotentiary

Question ID : 2752286382

Q.10 Select the word that is opposite in meaning (ANTONYM) to the word given below

Destitute

- Ans
- ☒ A. Penurious
 - ☒ B. Precarious
 - ☒ C. Prosperous
 - ☒ D. Deficient

Question ID : 2752286376

Q.11 Four words are given, out of which only one word is spelt correctly. Choose the correctly spelt word.

- Ans
- ☒ A. Infammation
 - ☒ B. Infalmmation
 - ☒ C. Inflammation
 - ☒ D. Inflamattion

Question ID : 2752286381

Q.12 Select the most appropriate meaning of the given idiom

Chip off the old block

- Ans ☒ A. To show impudent contempt
☒ B. Resembling one's parents in habit
☒ C. Complete failure
☒ D. Persistent in struggle

Question ID : 2752286383

Q.13 Select the most appropriate 'one word' for the expressions given below

Whole body of wage earners.

- Ans ☒ A. Proletariat
☒ B. Nobility
☒ C. Dotage
☒ D. Aristocracy

Question ID : 2752286389

Q.14 Four words are given, out of which only one word is spelt correctly. Choose the correctly spelt word.

- Ans ☒ A. Viviporous
☒ B. Viviparous
☒ C. Vivipareous
☒ D. Viviporeous

Question ID : 2752286379

Q.15 Select the most appropriate meaning of the given idiom

Give the devil his due

- Ans ☒ A. To prepare for hard work
☒ B. To deal with the matter straight
☒ C. To do something thoroughly
☒ D. To acknowledge a person's good qualities who is disliked

Question ID : 2752286385

Comprehension:

Read the following information carefully and answer the given questions.

This past decade has witnessed a surge in wildlife tourism that has doubled and tripled the tourist load in several of the more accessible national parks and reserves. But serious infrastructural shortcomings have brought us precariously close to a breakdown of the ecosystem's capacity to absorb this load. The result is an unsatisfactory tourist experience (and an opportunity to impart conservation values lost), overworked, pressurized and confused wildlife staff, and occasional man-animal confrontation crises such as man-killing by tigers. Not to speak of the ecosystem that is being battered by humans.

An important function of wildlife refuges is to encourage tourism. Recognizing that it forms an ideal —hands-on method of orienting, educating and winning the hearts and minds of the general public to follow conservation values and concepts. This can only be achieved by communicating with tourists before and during their visits to a wildlife refuge.

This is referred to as —interpretation. Interpretations is properly done by having an interpretation centre which consists of photographic, written and audio-visual exhibits supplemented by free or priced literature and a person on hand to answer the queries of visitors. Tourists should be routed through this facility while their entry permits are being prepared. The general message should be the history of the wildlife refuge as a conservation microcosm, interesting facts of some of the species it supports, and an explanation of the mechanics of an ecosystem and its relevance to man, plus codes of conduct specific to the area and wildlife and jungles in general. This should be backed up by a cadre of trained naturalist guides, preferably from the local population, who should accompany the tourists in the refuge. In some of our wildlife refuge, very poor interpretation centres exist while in most, none exists at all. The result is tourist traffic, which is generally quite ignorant of wildlife, ecology and conservation values, who leave the refuge no wiser than when they came in. Leaving behind for good measure the detritus of their presence: plastic bags, cigarette packets, bottle, paper, a lot of which is nonbiodegradable and toxic. Add to this is the fact that wildlife guards and rangers are often diverted from their normal and actual work which is monitoring and managing the wildlife and the ecosystem —and are made to guide tourists and generally be at the back and call of people, irrelevant to the priorities of the wildlife refuge.

SubQuestion No : 16

Q.16 According to the passage, which of the following given statements is incorrect?

- Ans ☒ A. Interpretations is the method of providing information and knowledge through photographic, written and audio-visual exhibits supplemented by free or priced literature and a person on hand to answer the queries of visitors.
- ☒ B. The reason of an unsatisfactory tourist experience is overworked, pressurized and confused wildlife staff, and occasional man-animal confrontation crises such as man-killing by tigers.
- ☒ C. This past decade has seen an increase in the wildlife tourism that has doubled and tripled the tourism load in many of the several accessible national parks and reserves.
- ☒ D. It is an important function of wildlife refuges to encourage tourism.

Question ID : 2752286395

Comprehension:

Read the following information carefully and answer the given questions.

This past decade has witnessed a surge in wildlife tourism that has doubled and tripled the tourist load in several of the more accessible national parks and reserves. But serious infrastructural shortcomings have brought us precariously close to a breakdown of the ecosystem's capacity to absorb this load. The result is an unsatisfactory tourist experience (and an opportunity to impart conservation values lost), overworked, pressurized and confused wildlife staff, and occasional man-animal confrontation crises such as man-killing by tigers. Not to speak of the ecosystem that is being battered by humans.

An important function of wildlife refuges is to encourage tourism. Recognizing that it forms an ideal —hands-on method of orienting, educating and winning the hearts and minds of the general public to follow conservation values and concepts. This can only be achieved by communicating with tourists before and during their visits to a wildlife refuge.

This is referred to as —interpretation. Interpretations is properly done by having an interpretation centre which consists of photographic, written and audio-visual exhibits supplemented by free or priced literature and a person on hand to answer the queries of visitors. Tourists should be routed through this facility while their entry permits are being prepared. The general message should be the history of the wildlife refuge as a conservation microcosm, interesting facts of some of the species it supports, and an explanation of the mechanics of an ecosystem and its relevance to man, plus codes of conduct specific to the area and wildlife and jungles in general. This should be backed up by a cadre of trained naturalist guides, preferably from the local population, who should accompany the tourists in the refuge. In some of our wildlife refuge, very poor interpretation centres exist while in most, none exists at all. The result is tourist traffic, which is generally quite ignorant of wildlife, ecology and conservation values, who leave the refuge no wiser than when they came in. Leaving behind for good measure the detritus of their presence: plastic bags, cigarette packets, bottle, paper, a lot of which is nonbiodegradable and toxic. Add to this is the fact that wildlife guards and rangers are often diverted from their normal and actual work which is monitoring and managing the wildlife and the ecosystem —and are made to guide tourists and generally be at the back and call of people, irrelevant to the priorities of the wildlife refuge.

SubQuestion No : 17

Q.17 What is actual work of the wildlife guards and rangers?

- Ans
- ☒ A. To provide tourists with answers for all their queries on wildlife.
 - ☒ B. To act as a tourist guide for the tourists.
 - ☒ C. To inform and make aware about the preservation of the wildlife.
 - ☒ D. To protect, manage and monitor the wildlife refuge and the ecosystem.

Question ID : 2752286396

Comprehension:

Read the following information carefully and answer the given questions.

This past decade has witnessed a surge in wildlife tourism that has doubled and tripled the tourist load in several of the more accessible national parks and reserves. But serious infrastructural shortcomings have brought us precariously close to a breakdown of the ecosystem's capacity to absorb this load. The result is an unsatisfactory tourist experience (and an opportunity to impart conservation values lost), overworked, pressurized and confused wildlife staff, and occasional man-animal confrontation crises such as man-killing by tigers. Not to speak of the ecosystem that is being battered by humans.

An important function of wildlife refuges is to encourage tourism. Recognizing that it forms an ideal —hands-on method of orienting, educating and winning the hearts and minds of the general public to follow conservation values and concepts. This can only be achieved by communicating with tourists before and during their visits to a wildlife refuge.

This is referred to as —interpretation. Interpretations is properly done by having an interpretation centre which consists of photographic, written and audio-visual exhibits supplemented by free or priced literature and a person on hand to answer the queries of visitors. Tourists should be routed through this facility while their entry permits are being prepared. The general message should be the history of the wildlife refuge as a conservation microcosm, interesting facts of some of the species it supports, and an explanation of the mechanics of an ecosystem and its relevance to man, plus codes of conduct specific to the area and wildlife and jungles in general. This should be backed up by a cadre of trained naturalist guides, preferably from the local population, who should accompany the tourists in the refuge. In some of our wildlife refuge, very poor interpretation centres exist while in most, none exists at all. The result is tourist traffic, which is generally quite ignorant of wildlife, ecology and conservation values, who leave the refuge no wiser than when they came in. Leaving behind for good measure the detritus of their presence: plastic bags, cigarette packets, bottle, paper, a lot of which is nonbiodegradable and toxic. Add to this is the fact that wildlife guards and rangers are often diverted from their normal and actual work which is monitoring and managing the wildlife and the ecosystem —and are made to guide tourists and generally be at the back and call of people, irrelevant to the priorities of the wildlife refuge.

SubQuestion No : 18

Q.18 According to the passage, what is the cause of unsatisfactory tourist experience in the recent decade in the wildlife tourism?

- Ans
- ☒ A. Less accessibility of national parks and reserves.
 - ☒ B. Surge in wildlife tourism.
 - ☒ C. Human battering of ecosystems.
 - ☒ D. Significant infrastructural shortcomings.

Question ID : 2752286392

Comprehension:

Read the following information carefully and answer the given questions.

This past decade has witnessed a surge in wildlife tourism that has doubled and tripled the tourist load in several of the more accessible national parks and reserves. But serious infrastructural shortcomings have brought us precariously close to a breakdown of the ecosystem's capacity to absorb this load. The result is an unsatisfactory tourist experience (and an opportunity to impart conservation values lost), overworked, pressurized and confused wildlife staff, and occasional man-animal confrontation crises such as man-killing by tigers. Not to speak of the ecosystem that is being battered by humans.

An important function of wildlife refuges is to encourage tourism. Recognizing that it forms an ideal —hands-on method of orienting, educating and winning the hearts and minds of the general public to follow conservation values and concepts. This can only be achieved by communicating with tourists before and during their visits to a wildlife refuge.

This is referred to as —interpretation. Interpretations is properly done by having an interpretation centre which consists of photographic, written and audio-visual exhibits supplemented by free or priced literature and a person on hand to answer the queries of visitors. Tourists should be routed through this facility while their entry permits are being prepared. The general message should be the history of the wildlife refuge as a conservation microcosm, interesting facts of some of the species it supports, and an explanation of the mechanics of an ecosystem and its relevance to man, plus codes of conduct specific to the area and wildlife and jungles in general. This should be backed up by a cadre of trained naturalist guides, preferably from the local population, who should accompany the tourists in the refuge. In some of our wildlife refuge, very poor interpretation centres exist while in most, none exists at all. The result is tourist traffic, which is generally quite ignorant of wildlife, ecology and conservation values, who leave the refuge no wiser than when they came in. Leaving behind for good measure the detritus of their presence: plastic bags, cigarette packets, bottle, paper, a lot of which is nonbiodegradable and toxic. Add to this is the fact that wildlife guards and rangers are often diverted from their normal and actual work which is monitoring and managing the wildlife and the ecosystem —and are made to guide tourists and generally be at the back and call of people, irrelevant to the priorities of the wildlife refuge.

SubQuestion No : 19

Q.19 According to the passage, what is the ultimate purpose of encouraging wildlife tourism?

- Ans ☒ A. To win the hearts and minds of the general public over conservational values and concepts.
- ☐ B. To increase awareness about wildlife preservation.
- ☐ C. To educate people about wildlife.
- ☐ D. To involve the general public in maintaining and conserving ecosystems.

Question ID : 2752286393

Comprehension:

Read the following information carefully and answer the given questions.

This past decade has witnessed a surge in wildlife tourism that has doubled and tripled the tourist load in several of the more accessible national parks and reserves. But serious infrastructural shortcomings have brought us precariously close to a breakdown of the ecosystem's capacity to absorb this load. The result is an unsatisfactory tourist experience (and an opportunity to impart conservation values lost), overworked, pressurized and confused wildlife staff, and occasional man-animal confrontation crises such as man-killing by tigers. Not to speak of the ecosystem that is being battered by humans.

An important function of wildlife refuges is to encourage tourism. Recognizing that it forms an ideal —hands-on method of orienting, educating and winning the hearts and minds of the general public to follow conservation values and concepts. This can only be achieved by communicating with tourists before and during their visits to a wildlife refuge.

This is referred to as —interpretation. Interpretations is properly done by having an interpretation centre which consists of photographic, written and audio-visual exhibits supplemented by free or priced literature and a person on hand to answer the queries of visitors. Tourists should be routed through this facility while their entry permits are being prepared. The general message should be the history of the wildlife refuge as a conservation microcosm, interesting facts of some of the species it supports, and an explanation of the mechanics of an ecosystem and its relevance to man, plus codes of conduct specific to the area and wildlife and jungles in general. This should be backed up by a cadre of trained naturalist guides, preferably from the local population, who should accompany the tourists in the refuge. In some of our wildlife refuge, very poor interpretation centres exist while in most, none exists at all. The result is tourist traffic, which is generally quite ignorant of wildlife, ecology and conservation values, who leave the refuge no wiser than when they came in. Leaving behind for good measure the detritus of their presence: plastic bags, cigarette packets, bottle, paper, a lot of which is nonbiodegradable and toxic. Add to this is the fact that wildlife guards and rangers are often diverted from their normal and actual work which is monitoring and managing the wildlife and the ecosystem —and are made to guide tourists and generally be at the back and call of people, irrelevant to the priorities of the wildlife refuge.

SubQuestion No : 20

Q.20 According to the passage, how can a wildlife refuge educate and impart knowledge to the general public regarding conservation values and concepts?

- Ans
- ☒ A. By closely monitoring the wildlife behaviour and its preservation schemes.
 - ☒ B. By increasing accessibility of national parks and reserves.
 - ☒ C. By overcoming infrastructural shortfalls.
 - ☒ D. By communicating with the tourists before and during the wildlife visits through interpretation centres.

Question ID : 2752286394

Section : General Hindi1

Q.1 निम्नलिखित प्रश्न में, चार विकल्पों में से, उस विकल्प का चयन करें जो भाववाचक संज्ञा का सही विकल्प नहीं है।

- Ans
- ☒ A. छटपटाहट
 - ☒ B. मनाही
 - ☒ C. वाहवाह
 - ☒ D. बहाव

Question ID : 2752286399

Q.2 निम्नलिखित प्रश्न में, चार विकल्पों में से, उस विकल्प का चयन करें जो दिए गए शब्द के पर्यायवाची शब्द का सही विकल्प नहीं है।

भट

- Ans
- ☒ A. बहादुर
 - ☒ B. लड़ाका
 - ☒ C. योद्धा
 - ☒ D. डरपोक

Question ID : 2752286405

Q.3 निम्नलिखित प्रश्न में, चार विकल्पों में से, उस विकल्प का चयन करें जो विलोम शब्द का सबसे अच्छा विकल्प है।

ओतप्रोत

- Ans
- ☒ A. सीधा
 - ☒ B. विलग
 - ☒ C. सुगत
 - ☒ D. सुघर

Question ID : 2752286406

Q.4 निम्नलिखित प्रश्न में, चार विकल्पों में से, उस विकल्प का चयन करें जो सर्वनाम के भेद का सही विकल्प हो।

किसी को कुछ नहीं चाहिए।

- Ans
- ☒ A. संबंधवाचक
 - ☒ B. निश्चयवाचक
 - ☒ C. निजवाचक
 - ☒ D. अनिश्चयवाचक

Question ID : 2752286400

Q.5 निम्नलिखित प्रश्न में, चार विकल्पों में से, उस विकल्प का चयन करें जो कोष्ठक में दिए गए शब्द के अनुसार दिए गए वाक्य के लिए अव्यय के भेद का सही विकल्प हो।

मैं आपका उपहार ले लेता (किन्तु) माँ ने मना किया है।

- Ans
- ☒ A. समुच्चयबोधक अव्यय
 - ☒ B. विस्मयादिबोधक अव्यय
 - ☒ C. निपात
 - ☒ D. संबंधबोधक अव्यय

Question ID : 2752286398

Q.6 निम्नलिखित प्रश्न में, चार विकल्पों में से, उस विकल्प का चयन करें जो सदैव स्त्रीलिंग रूप वाला विकल्प है।

- Ans
- ☒ A. चिराग
 - ☒ B. आयात
 - ☒ C. कीचड़
 - ☒ D. गुंजाइश

Question ID : 2752286414

Q.7 निम्नलिखित प्रश्न में, चार विकल्पों में से, उस सही विकल्प का चयन करें जो रिक्त स्थान के लिए उपयुक्त शब्द का सही विकल्प है।

आज के _____ में पुरुषत्व नहीं रह गया है।

Ans ☒ A. पुरुषों

☐ B. परुष

☐ C. कूल

☐ D. स्त्रियों

Question ID : 2752286409

Q.8 निम्नलिखित प्रश्न में, चार विकल्पों में से, उस विकल्प का चयन करें जो शुद्ध शब्द का सही विकल्प है।

Ans ☐ A. उपलक्ष

☐ B. उपलक्षय

☒ C. उपलक्ष्य

☐ D. उप्लक्ष्य

Question ID : 2752286411

Q.9 निम्नलिखित प्रश्न में, चार विकल्पों में से, उस विकल्प का चयन करें जो देशज शब्द का सही विकल्प हो।

Ans ☐ A. फैसला

☐ B. नतीजा

☐ C. गरीब

☒ D. पगड़ी

Question ID : 2752286402

Q.10 निम्नलिखित प्रश्न में, चार विकल्पों में से, उस सही विकल्प का चयन करें जो दिए गए शब्द-युग्म के अर्थ का सही विकल्प हो।

शम और सम

Ans ☐ A. संयम और सब

☒ B. संयम और समान

☐ C. वीर और समान

☐ D. लय और सब

Question ID : 2752286413

Q.11 निम्नलिखित प्रश्न में, चार विकल्पों में से, उस विकल्प का चयन करें जो शुद्ध शब्द का सही विकल्प है।

Ans ☒ A. ऊधम

☐ B. उधम

☐ C. उधाम

☐ D. उद्य

Question ID : 2752286410

Q.12 निम्नलिखित प्रश्न में, चार विकल्पों में से, उस विकल्प का चयन करें जो सदैव पुल्लिंग रूप वाला विकल्प है।

- Ans ☒ A. घोषणा
☒ B. प्रतिभा
☒ C. टिप्पणी
☒ D. त्रिफला

Question ID : 2752286415

Q.13 निम्नलिखित प्रश्न में, चार विकल्पों में से, उस सही विकल्प का चयन करें जो दिए गए शब्द के सही अर्थ का उचित विकल्प हो।

निर्वाण

- Ans ☒ A. बनाना
☒ B. निर्माण
☒ C. निरंतर
☒ D. मुक्ति

Question ID : 2752286408

Q.14 निम्नलिखित प्रश्न में, चार विकल्पों में से, उस विकल्प का चयन करें जो दिए गए शब्द के समानार्थी शब्द का विकल्प नहीं है।

मंजूषा

- Ans ☒ A. पिटारा
☒ B. संदूक
☒ C. पेटी
☒ D. खारिज

Question ID : 2752286412

Q.15 निम्नलिखित प्रश्न में, चार विकल्पों में से, उस विकल्प का चयन करें जो क्रिया के भेद वाला सही विकल्प हो।

अध्यापिका छात्र से पाठ पढ़वाती है।

- Ans ☒ A. पूर्वकालिक क्रिया
☒ B. संयुक्त क्रिया
☒ C. प्रेरणार्थक क्रिया
☒ D. नामधातु क्रिया

Question ID : 2752286397

Q.16 निम्नलिखित प्रश्न में, चार विकल्पों में से, उस सही विकल्प का चयन करें जो वाक्यांश के लिए एक शब्द का विकल्प हो।

जिसका कोई स्वामी न हो

- Ans ☒ A. अनुचर
☒ B. अनंत
☒ C. अजन्मा
☒ D. अनाथ

Question ID : 2752286407

Q.17 निम्नलिखित प्रश्न में, चार विकल्पों में से, उस विकल्प का चयन करें जो कोष्ठक में दिए गए शब्द के अनुसार अन्य पुरुष वाचक सर्वनाम का सबसे अच्छा विकल्प है।

- Ans ☒ A. (मुझे) अब कुछ भी करने का मन नहीं करता।
☒ B. (उनसे) यह कार्य नहीं हो सकता है।
☒ C. (मुझको) जल्द ही कुछ करना होगा।
☒ D. (आपसे) जितना हो सकता है करिए और जाइए।

Question ID : 2752286416

Q.18 निम्नलिखित प्रश्न में, चार विकल्पों में से, उस विकल्प का चयन करें जो दिए गए शब्द के लिए सही बहुव्रीहि समास के विग्रह का विकल्प हो।

मुरलीधर

- Ans ☒ A. मुरली का अधर
☒ B. मुरली और धर
☒ C. मुरली को पकड़े हुए
☒ D. मुरली से धर

Question ID : 2752286403

Q.19 निम्नलिखित प्रश्न में, चार विकल्पों में से, उस विकल्प का चयन करें जो दिए गए शब्द का तत्सम रूप हो।

कुबड़ा

- Ans ☒ A. कच्छप
☒ B. काष्ठ
☒ C. कंदुक
☒ D. कुब्ज

Question ID : 2752286404

Q.20 निम्नलिखित प्रश्न में, चार विकल्पों में से, उस विकल्प का चयन करें जो कोष्ठक में दिए गए शब्द के अनुसार विशेषण के भेद वाला विकल्प हो।

(कौन छात्र) मेरा काम करेगा।

- Ans ☒ A. परिमाणवाचक
☒ B. गुणवाचक
☒ C. सार्वनामिक
☒ D. निश्चित संख्यावाचक

Question ID : 2752286401

Q.1 निम्नलिखित प्रश्न में, चार विकल्पों में से, उस विकल्प का चयन करें जो दिए गए मुहावरे का सही अर्थ वाला विकल्प है।

तीन तरह करना

- Ans
- ☒ A. हर बात में आपत्ति करना
 - ☒ B. चापलूसी करना
 - ☒ C. बहुत कठिन कार्य
 - ☒ D. अस्त-व्यस्त करना

Question ID : 2752286427

Q.2 निम्नलिखित प्रश्न में, चार विकल्पों में से, उस विकल्प का चयन करें जो सही वाक्य भेद का विकल्प हो।

राजा ने मंत्री को आदेश दिया कि उपस्थित हो जाओ।

- Ans
- ☒ A. मिश्र वाक्य
 - ☒ B. संदेहवाचक वाक्य
 - ☒ C. संयुक्त वाक्य
 - ☒ D. सरल वाक्य

Question ID : 2752286421

Q.3 निम्नलिखित प्रश्न में, चार विकल्पों में से, उस विकल्प का चयन करें जो शुद्ध वाक्य का सबसे अच्छा विकल्प है।

- Ans
- ☒ A. ये हीरे तुम सबका उपहार है क्योंकि तुमने दूसरों की पीड़ा को समझा।
 - ☒ B. ये हीरे तुम सबका उपहार है क्योंकि तुमने दूसरों की पीड़ा को समझा गया।
 - ☒ C. ये हीरे तुम सबका उपहार है ताकि तुमने दूसरों की पीड़ा को समझा।
 - ☒ D. ये हीरे तुम सबका उपहार है क्योंकि तुमने दूसरों की पीड़ा पर समझा।

Question ID : 2752286420

Q.4 निम्नलिखित प्रश्न में, चार विकल्पों में से, उस विकल्प का चयन करें जो दिए गए वाक्य के काल का सही विकल्प हो।

वह सिफारिश करता होगा।

- Ans
- ☒ A. आसन्न भूतकाल
 - ☒ B. संभाव्य भविष्यकाल
 - ☒ C. संदिग्ध वर्तमानकाल
 - ☒ D. संभाव्य वर्तमानकाल

Question ID : 2752286417

Q.5 निम्नलिखित प्रश्न में, चार विकल्पों में से, उस विकल्प का चयन करें जो दिए गए वाक्य के लिए वृत्ति के भेद का सबसे अच्छा विकल्प है।

अगर कोई वाहन मिल जाए तो समय से कार्यालय पहुँच जाऊँगा।

- Ans
- ☒ A. संभावनार्थ
 - ☒ B. विध्यर्थ
 - ☒ C. निश्चयार्थ
 - ☒ D. संकेतार्थ

Question ID : 2752286418

Q.6 निम्नलिखित प्रश्न में, चार विकल्पों में से, उस विकल्प का चयन करें जो दिए गए मुहावरे का सही अर्थ वाला विकल्प है।

चरणों की धूल

- Ans ☒ A. चालाक
☒ B. धोखे से अपने वश में करना
☒ C. तुच्छ व्यक्ति
☒ D. बहुत सुन्दर

Question ID : 2752286426

Q.7 निम्नलिखित प्रश्न में, चार विकल्पों में से, उस विकल्प का चयन करें जो विराम चिह्न युक्त वाक्य का सही विकल्प हो।

- Ans ☒ A. इसके अलावा एक खिलौना, घड़ी सूचिपत्र कई तरह की किताबें आदि थीं
☒ B. इसके अलावा एक खिलौना, घड़ी, सूचि-पत्र, कई तरह की किताबें आदि थीं।
☒ C. इसके अलावा एक खिलौना घड़ी सूचि पत्र कई तरह की किताबें आदि थीं।
☒ D. इसके अलावा एक खिलौना घड़ी सूचि पत्र कई तरह की किताबें आदि थीं

Question ID : 2752286425

Q.8 निम्नलिखित प्रश्न में, चार विकल्पों में से, उस विकल्प का चयन करें जो दी गई लोकोक्ति का सही अर्थ वाला विकल्प है।

भरे पेट शक्कर खारी

- Ans ☒ A. जरूरत पड़ने पर अपनों की याद आती है
☒ B. कुछ न मिलने से कुछ मिलना अच्छा होता है
☒ C. समय के अनुसार महत्त्व बदल जाता है
☒ D. काम न करने का बहाना

Question ID : 2752286431

Q.9 निम्नलिखित प्रश्न में, चार विकल्पों में से, उस विकल्प का चयन करें जो दी गई लोकोक्ति का सही अर्थ वाला विकल्प है।

मुँह में राम बगल में छूरी

- Ans ☒ A. उलटी सीधी बातें करना
☒ B. ऊपर से मित्र भीतर से शत्रु
☒ C. कठिन काम कोई नहीं करना चाहता है
☒ D. कुछ भी न सीख पाना

Question ID : 2752286429

Q.10 निम्नलिखित प्रश्न में, चार विकल्पों में से, उस विकल्प का चयन करें जो दिए गए मुहावरे का सही अर्थ वाला विकल्प है।

दिन लग जाना

- Ans
- ☒ A. हिम्मत करना
 - ☒ B. अच्छा समय आना
 - ☒ C. समय व्यतीत हो जाना
 - ☒ D. भयभीत होना

Question ID : 2752286428

Q.11 निम्नलिखित प्रश्न में, चार विकल्पों में से, उस विकल्प का चयन करें जो विराम चिह्न युक्त वाक्य का सही विकल्प हो।

- Ans
- ☒ A. व्यापारी बोला बेटा यह तुम क्या कर रहे हो? मुझे आधा ही कपड़ा क्यों दे रहे हो
 - ☒ B. व्यापारी बोला, बेटा यह तुम क्या कर रहे हो? मुझे आधा ही कपड़ा क्यों दे रहे हो?
 - ☒ C. व्यापारी बोला, "बेटा! यह तुम क्या कर रहे हो? मुझे आधा ही कपड़ा क्यों दे रहे हो?"
 - ☒ D. व्यापारी बोला, "बेटा यह तुम क्या कर रहे हो मुझे आधा ही कपड़ा क्यों दे रहे हो"

Question ID : 2752286424

Q.12 निम्नलिखित प्रश्न में, चार विकल्पों में से, उस विकल्प का चयन करें जो दिए गए वाक्य के लिए पक्ष के भेद का सबसे अच्छा विकल्प है।

वह लगातार क्रानूनी किताबें पढ़ता था तभी मुकदमा जीत गया!

- Ans
- ☒ A. आरंभद्योतक
 - ☒ B. पूर्णताद्योतक
 - ☒ C. अभ्यासद्योतक
 - ☒ D. सातप्यबोधक

Question ID : 2752286419

Q.13 निम्नलिखित प्रश्न में, चार विकल्पों में से, उस विकल्प का चयन करें जो दी गई लोकोक्ति का सही अर्थ वाला विकल्प है।

मछली के बच्चे को तैरना कौन सिखाता है

- Ans
- ☒ A. गुण जन्मजात आते हैं
 - ☒ B. सुधार की बजाय बिगाड़ करना
 - ☒ C. व्यर्थ दान
 - ☒ D. कुछ का कुछ करना

Question ID : 2752286430

Q.14 निम्नलिखित प्रश्न में, चार विकल्पों में से, उस विकल्प का चयन करें जो विराम चिह्न युक्त वाक्य का सही विकल्प हो।

- Ans
- ☒ A. मै कहता हूँ हाँ, मै झूठ बोलता हू, तभी तो तुम्हारा पेट भरता है नहीं तो कौन था तुम्हारा
 - ☒ B. मै कहता हूँ हाँ मै झूठ बोलता हू तभी तो तुम्हारा पेट भरता है नहीं तो कौन था तुम्हारा
 - ☒ C. मै कहता हूँ - हाँ, मै झूठ बोलता हू, तभी तो तुम्हारा पेट भरता है। नहीं तो कौन था तुम्हारा?
 - ☒ D. मै कहता हूँ हाँ मै झूठ बोलता हू तभी तो तुम्हारा पेट भरता है। नहीं तो कौन था तुम्हारा

Question ID : 2752286423

Q.15 निम्नलिखित प्रश्न में, चार विकल्पों में से, उस विकल्प का चयन करें जो सही वाक्य भेद का विकल्प हो।

मैं उनके घर गया तो था पर उनसे भेंट नहीं हुई।

- Ans ☒ A. मिश्र वाक्य
☒ B. सरल वाक्य
☒ C. विधानवाचक वाक्य
☒ D. संयुक्त वाक्य

Question ID : 2752286422

Comprehension:

निम्नलिखित गद्यांश को ध्यानपूर्वक पढ़िए और दिए गए प्रश्नों के उत्तर दीजिए।

साहित्य की शाश्वतता का प्रश्न एक महत्वपूर्ण प्रश्न है। अपने समय या युग का निर्माता साहित्यकार क्या सौ वर्ष बाद की परिस्थितियों का भी युग निर्माता हो पाठकों की मानसिकता और अभिरुचि बदल सकता है? अतः कोई भी कविता अपने सामयिक परिवेश के बदल जाने पर ठीक वही उत्तेजना पैदा नहीं कर सकती जो उसने अपने रचनाकाल के दौरान की होगी। पुराने साहित्य के प्रति अरुचि का कारण यह है कि समय, परिस्थितियाँ और भावबोध बदलने के साथ ही पाठकों की मानसिकता और अभिरुचि भी बदली रहती है। साहित्य की श्रेष्ठता मात्र ही उसके नित्य आकर्षण का आधार नहीं है। उसकी श्रेष्ठता का युगयुगीन आधार है, वे जीवन-मूल्य तथा उनकी अत्यंत कलात्मक अभिव्यक्ति जो मनुष्य की स्वतंत्रता तथा उच्चतर मानव विकास के लिए पथ-प्रदर्शक का काम करती है। पुराने साहित्य का केवल वही श्री-सौंदर्य हमारे ग्राह्य होगा जो नवीन जीवन-मूल्यों के विकास में सक्रिय सहयोग दे अथवा स्थिति रक्षा में सहायक हो। कुछ लोग साहित्य की सामाजिक प्रतिबद्धता को अस्वीकार करते हैं। वे मानते हैं कि साहित्यकार निरपेक्ष होता है और उस पर कोई भी दबाव आरोपित नहीं होना चाहिए। किंतु वे भूल जाते हैं कि साहित्य के निर्माण की मूल प्रेरणा मानव जीवन में ही विद्यमान रहती है।

SubQuestion No : 16

Q.16 किसी साहित्य की श्रेष्ठता का क्या आधार है?

- Ans ☒ A. जीवन-मूल्य तथा उनकी कलात्मक अभिव्यक्ति
☒ B. उसका आसानी से उपलब्ध होना
☒ C. साहित्यकार की रचना
☒ D. उसकी भाषा

Question ID : 2752286435

Comprehension:

निम्नलिखित गद्यांश को ध्यानपूर्वक पढ़िए और दिए गए प्रश्नों के उत्तर दीजिए।

साहित्य की शाश्वतता का प्रश्न एक महत्वपूर्ण प्रश्न है। अपने समय या युग का निर्माता साहित्यकार क्या सौ वर्ष बाद की परिस्थितियों का भी युग निर्माता हो पाठक की मानसिकता और अभिरुचि बदल सकता है? अतः कोई भी कविता अपने सामयिक परिवेश के बदल जाने पर ठीक वही उत्तेजना पैदा नहीं कर सकती जो उसने अपने रचनाकाल के दौरान की होगी। पुराने साहित्य के प्रति अरुचि का कारण यह है कि समय, परिस्थितियाँ और भावबोध बदलने के साथ ही पाठकों की मानसिकता और अभिरुचि भी बदली रहती है। साहित्य की श्रेष्ठता मात्र ही उसके नित्य आकर्षण का आधार नहीं है। उसकी श्रेष्ठता का युगयुगीन आधार है, वे जीवन-मूल्य तथा उनकी अत्यंत कलात्मक अभिव्यक्ति जो मनुष्य की स्वतंत्रता तथा उच्चतर मानव विकास के लिए पथ-प्रदर्शक का काम करती है। पुराने साहित्य का केवल वही श्री-सौंदर्य हमारे ग्राह्य होगा जो नवीन जीवन-मूल्यों के विकास में सक्रिय सहयोग दे अथवा स्थिति रक्षा में सहायक हो। कुछ लोग साहित्य की सामाजिक प्रतिबद्धता को अस्वीकार करते हैं। वे मानते हैं कि साहित्यकार निरपेक्ष होता है और उस पर कोई भी दबाव आरोपित नहीं होना चाहिए। किंतु वे भूल जाते हैं कि साहित्य के निर्माण की मूल प्रेरणा मानव जीवन में ही विद्यमान रहती है।

SubQuestion No : 17

Q.17 इस अनुच्छेद का कोई उपयुक्त शीर्षक:

- Ans ☒ A. पाठकों की रुचि
☒ B. साहित्य और साहित्यकार
☒ C. नवीन साहित्य
☒ D. साहित्य की प्रासंगिकता

Question ID : 2752286437

Comprehension:

निम्नलिखित गद्यांश को ध्यानपूर्वक पढ़िए और दिए गए प्रश्नों के उत्तर दीजिए।

साहित्य की शाश्वतता का प्रश्न एक महत्वपूर्ण प्रश्न है। अपने समय या युग का निर्माता साहित्यकार क्या सौ वर्ष बाद की परिस्थितियों का भी युग निर्माता हो पाठक की मानसिकता और अभिरुचि बदल सकता है? अतः कोई भी कविता अपने सामयिक परिवेश के बदल जाने पर ठीक वही उत्तेजना पैदा नहीं कर सकती जो उसने अपने रचनाकाल के दौरान की होगी। पुराने साहित्य के प्रति अरुचि का कारण यह है कि समय, परिस्थितियाँ और भावबोध बदलने के साथ ही पाठकों की मानसिकता और अभिरुचि भी बदली रहती है। साहित्य की श्रेष्ठता मात्र ही उसके नित्य आकर्षण का आधार नहीं है। उसकी श्रेष्ठता का युगयुगीन आधार है, वे जीवन-मूल्य तथा उनकी अत्यंत कलात्मक अभिव्यक्ति जो मनुष्य की स्वतंत्रता तथा उच्चतर मानव विकास के लिए पथ-प्रदर्शक का काम करती है। पुराने साहित्य का केवल वही श्री-सौंदर्य हमारे ग्राह्य होगा जो नवीन जीवन-मूल्यों के विकास में सक्रिय सहयोग दे अथवा स्थिति रक्षा में सहायक हो। कुछ लोग साहित्य की सामाजिक प्रतिबद्धता को अस्वीकार करते हैं। वे मानते हैं कि साहित्यकार निरपेक्ष होता है और उस पर कोई भी दबाव आरोपित नहीं होना चाहिए। किंतु वे भूल जाते हैं कि साहित्य के निर्माण की मूल प्रेरणा मानव जीवन में ही विद्यमान रहती है।

SubQuestion No : 18

Q.18 इनमें से कौन - सा शब्द प्रेरणा का पर्यायवाची शब्द नहीं है?

- Ans ☒ A. उत्तेजन
☒ B. भड़काना
☒ C. उकसाव
☒ D. उमंग

Question ID : 2752286436

Comprehension:

निम्नलिखित गद्यांश को ध्यानपूर्वक पढ़िए और दिए गए प्रश्नों के उत्तर दीजिए।

साहित्य की शाश्वतता का प्रश्न एक महत्वपूर्ण प्रश्न है। अपने समय या युग का निर्माता साहित्यकार क्या सौ वर्ष बाद की परिस्थितियों का भी युग निर्माता हो पाठक की मानसिकता और अभिरुचि बदल सकता है? अतः कोई भी कविता अपने सामयिक परिवेश के बदल जाने पर ठीक वही उत्तेजना पैदा नहीं कर सकती जो उसने अपने रचनाकाल के दौरान की होगी। पुराने साहित्य के प्रति अरुचि का कारण यह है कि समय, परिस्थितियाँ और भावबोध बदलने के साथ ही पाठकों की मानसिकता और अभिरुचि भी बदली रहती है। साहित्य की श्रेष्ठता मात्र ही उसके नित्य आकर्षण का आधार नहीं है। उसकी श्रेष्ठता का युगयुगीन आधार है, वे जीवन-मूल्य तथा उनकी अत्यंत कलात्मक अभिव्यक्ति जो मनुष्य की स्वतंत्रता तथा उच्चतर मानव विकास के लिए पथ-प्रदर्शक का काम करती है। पुराने साहित्य का केवल वही श्री-सौंदर्य हमारे ग्राह्य होगा जो नवीन जीवन-मूल्यों के विकास में सक्रिय सहयोग दे अथवा स्थिति रक्षा में सहायक हो। कुछ लोग साहित्य की सामाजिक प्रतिबद्धता को अस्वीकार करते हैं। वे मानते हैं कि साहित्यकार निरपेक्ष होता है और उस पर कोई भी दबाव आरोपित नहीं होना चाहिए। किंतु वे भूल जाते हैं कि साहित्य के निर्माण की मूल प्रेरणा मानव जीवन में ही विद्यमान रहती है।

SubQuestion No : 19

Q.19 पुराने साहित्य के प्रति आज के लोगों की अरुचि का क्या कारण है?

- Ans ☒ A. पुराने साहित्य का न मिलना
☒ B. समय, परिस्थितियाँ और भावनों का बदलना
☒ C. साहित्यों की भरमार
☒ D. भाषा की अज्ञानता

Question ID : 2752286434

Comprehension:

निम्नलिखित गद्यांश को ध्यानपूर्वक पढ़िए और दिए गए प्रश्नों के उत्तर दीजिए।

साहित्य की शाश्वतता का प्रश्न एक महत्वपूर्ण प्रश्न है। अपने समय या युग का निर्माता साहित्यकार क्या सौ वर्ष बाद की परिस्थितियों का भी युग निर्माता हो पाठक की मानसिकता और अभिरुचि बदल सकता है? अतः कोई भी कविता अपने सामयिक परिवेश के बदल जाने पर ठीक वही उत्तेजना पैदा नहीं कर सकती जो उसने अपने रचनाकाल के दौरान की होगी। पुराने साहित्य के प्रति अरुचि का कारण यह है कि समय, परिस्थितियाँ और भावबोध बदलने के साथ ही पाठकों की मानसिकता और अभिरुचि भी बदली रहती है। साहित्य की श्रेष्ठता मात्र ही उसके नित्य आकर्षण का आधार नहीं है। उसकी श्रेष्ठता का युगयुगीन आधार है, वे जीवन-मूल्य तथा उनकी अत्यंत कलात्मक अभिव्यक्ति जो मनुष्य की स्वतंत्रता तथा उच्चतर मानव विकास के लिए पथ-प्रदर्शक का काम करती है। पुराने साहित्य का केवल वही श्री-सौंदर्य हमारे ग्राह्य होगा जो नवीन जीवन-मूल्यों के विकास में सक्रिय सहयोग दे अथवा स्थिति रक्षा में सहायक हो। कुछ लोग साहित्य की सामाजिक प्रतिबद्धता को अस्वीकार करते हैं। वे मानते हैं कि साहित्यकार निरपेक्ष होता है और उस पर कोई भी दबाव आरोपित नहीं होना चाहिए। किंतु वे भूल जाते हैं कि साहित्य के निर्माण की मूल प्रेरणा मानव जीवन में ही विद्यमान रहती है।

SubQuestion No : 20

Q.20 अनुच्छेद के अनुसार बदलते युग का साहित्य की प्रासंगिकता और शाश्वतता पर क्या प्रभाव पड़ता है?

- Ans ☒ A. साहित्य का महत्त्व कभी नहीं बदलता चाहे वह किसी भी काल में लिखा गया हो
☒ B. कोई भी साहित्य अपने सामायिक परिवेश में पहले जैसा ही महत्त्व रखता है
☒ C. साहित्य जिस काल और परिस्थिति में लिखा जाता है, उस समय वह अधिक प्रासंगिक होता है
☒ D. बदलते युग का साहित्य पर कोई प्रभाव नहीं है

Question ID : 2752286433

DSSSB Junior Assistant Question Paper 2021

| | |
|------------------|--------------------------------------|
| Participant ID | Join Telegram Group "HaryanaJobs.in" |
| Participant Name | |
| Test Center Name | East Delhi Assessment Zone |
| Test Date | 31/08/2021 |
| Test Time | 4:30 PM - 6:30 PM |
| Subject | Junior Assistant |

Section : General Ability1

Q.1 Out of the given options, three are similar in a certain manner. However, one option is NOT like the other three. Select the option which is different from the rest.

- Ans ☒ A. Hoot : Cow
☒ B. Roar : Lion
☒ C. Chirp : Bird
☒ D. Hiss : Snake

Question ID : 2752286444

Q.2 In a certain code language,
por jor mor means father and son
nor tor por means son with mother
jor nor lor means mother and sister
what is the code for father?

- Ans ☒ A. jor
☒ B. mor
☒ C. por
☒ D. lor

Question ID : 2752286453

Q.3 Out of the given options, three are similar in a certain manner. However, one option is NOT like the other three. Select the option which is different from the rest.

- Ans ☒ A. LPT
☒ B. ZDG
☒ C. QUY
☒ D. GKO

Question ID : 2752286442

Q.4 Arrange the following in a logical sequence:

1. Alphabets
2. Paragraphs
3. Books
4. Sentences
5. Essays

- Ans ☒ A. 5, 2, 4, 3, 1
☒ B. 5, 4, 3, 2, 1
☒ C. 1, 4, 2, 5, 3
☒ D. 1, 2, 4, 3, 5

Question ID : 2752286455

Q.5 If P # Q means P is the son of Q; P @ Q means P is the mother of Q and P * Q means P is the daughter of Q, which of the following shows that D is father of A?

- Ans
- ☒ A. A @ B # C * D
 - ☒ B. A # B * C @ D
 - ☒ C. A # B @ C * D
 - ☒ D. A * B @ C # D

Question ID : 2752286457

Q.6 Select the pair that is related on the same basis to the pair given in the question.

Labourer : Wages :: ?

- Ans
- ☒ A. Entrepreneur : Profit
 - ☒ B. Interest : Loan
 - ☒ C. Business : Worker
 - ☒ D. Manager : Clerk

Question ID : 2752286446

Q.7 Out of the given options, three are similar in a certain manner. However, one option is NOT like the other three. Select the option which is different from the rest.

- Ans
- ☒ A. WUR
 - ☒ B. PNK
 - ☒ C. OMK
 - ☒ D. IGD

Question ID : 2752286445

Q.8 Find the missing number in the following series:

da_d_aadda_d

- Ans
- ☒ A. add
 - ☒ B. aaa
 - ☒ C. dda
 - ☒ D. ada

Question ID : 2752286439

Q.9 Select the pair that is related on the same basis to the pair given in the question.

MSY : QWC :: ?

- Ans
- ☒ A. EKY : JNC
 - ☒ B. LDT : OHV
 - ☒ C. OVY : SZC
 - ☒ D. NDZ : OFC

Question ID : 2752286449

Q.10 Find the wrong term in the following series:

T, R, P, N, L, K

- Ans ☒ A. N
☒ B. P
☒ C. K
☒ D. L

Question ID : 2752286438

Q.11 Shashi is 16th from the right end in a row of 52 boys. What is his position from the left side?

- Ans ☒ A. 38
☒ B. 35
☒ C. 37
☒ D. 36

Question ID : 2752286454

Q.12 Arrange the given words in the sequence in which they occur in the dictionary.

1. TRAGEDY
2. TRAFFIC
3. TRACTOR
4. TRANSIT
5. TRAINER

- Ans ☒ A. 2, 1, 5, 4, 3
☒ B. 3, 1, 5, 4, 2
☒ C. 2, 3, 1, 5, 4
☒ D. 3, 2, 1, 5, 4

Question ID : 2752286441

Q.13 Select the option that is related to the third term on the same basis as the second term is related to the first term.

Thread : Cloth :: Words : ?

- Ans ☒ A. School
☒ B. Author
☒ C. Sentence
☒ D. Classroom

Question ID : 2752286448

Q.14 If bucket is plate, plate is fork, fork is spoon, spoon is cup, cup is saucer, saucer is knife, then which among the following can be used to drink coffee?

- Ans ☒ A. fork
☒ B. knife
☒ C. saucer
☒ D. cup

Question ID : 2752286450

Q.15 If GRIND is coded as LMNII, then what is the code for BLEACH?

- Ans
- ☐ A. GIKUGE
 - ☐ B. HJGDFK
 - ☒ C. GGJVHC
 - ☐ D. HIKUGD

Question ID : 2752286452

Q.16 Select the option that is related to the third term on the same basis as the second term is related to the first term.

IOA : GLW :: DMG : ?

- Ans
- ☐ A. COH
 - ☐ B. AKE
 - ☒ C. BJC
 - ☐ D. FPJ

Question ID : 2752286447

Q.17 Out of the given options, three are similar in a certain manner. However, one option is NOT like the other three. Select the option which is different from the rest.

- Ans
- ☐ A. Biology
 - ☐ B. Chemistry
 - ☒ C. Geography
 - ☐ D. Physics

Question ID : 2752286443

Q.18 Five friends are standing in a row facing the south direction. Simran is to the immediate right to Disha. Binita is between Aasha and Disha. Manish is at the extreme right end of the row. Who is standing in the exact middle?

- Ans
- ☒ A. Disha
 - ☐ B. Binita
 - ☐ C. Simran
 - ☐ D. Aasha

Question ID : 2752286456

Q.19 Complete the following letter series:

RQP, TSR, VUT, XWV, _____

- Ans
- ☐ A. ZYB
 - ☐ B. WYX
 - ☐ C. UVW
 - ☒ D. ZYX

Question ID : 2752286440

Q.20 If I = 8, ICE = 16, then what is the code for IDEA?

- Ans
- ☐ A. 20
 - ☐ B. 19
 - ☒ C. 18
 - ☐ D. 17

Question ID : 2752286451

Section : General Ability2

Q.1 In the question two statements are given, followed by two conclusions, I and II. You have to consider the statements to be true even if it seems to be at variance from commonly known facts. You have to decide which of the given conclusions, if any, follows from the given statements.

Statement 1 : No dancers are singers.

Statement 2 : No singers are painters.

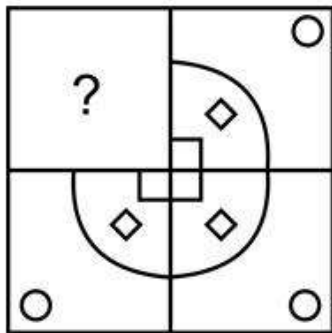
Conclusion I : No painters are dancers.

Conclusion II : Some singers are dancers.

- Ans
- ☒ A. Only conclusion I follows
 - ☒ B. Both conclusions I and II follow
 - ☒ C. Neither conclusion I nor II follows
 - ☒ D. Only conclusion II follows

Question ID : 2752286458

Q.2 Which of the following answer figure patterns can be combined to make the question figure?

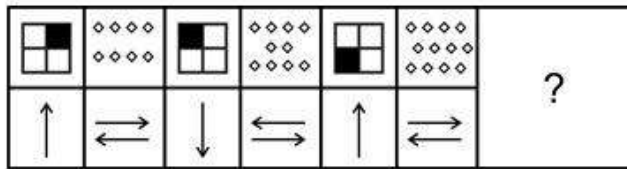


Ans

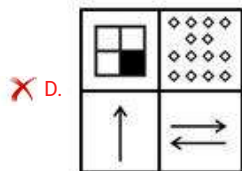
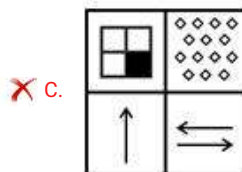
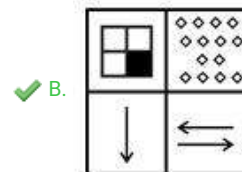
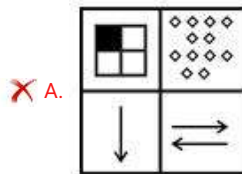
- ☒ A.
- ☒ B.
- ☒ C.
- ☒ D.

Question ID : 2752286475

Q.3 Which of the following answer figure completes the series of the question figure?



Ans



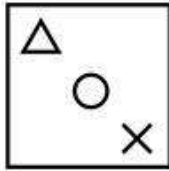
Question ID : 2752286473

Q.4 If a mirror is placed on the line MN, then which of the answer figures is the right image of the given figure?



Ans

☒ A.



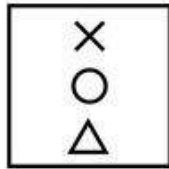
☒ B.



☒ C.

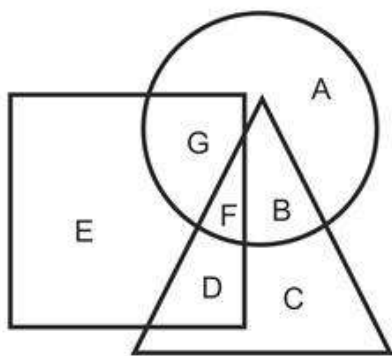


☒ D.



Question ID : 2752286476

Q.5 In the following figure, triangle represents graduates, square represents French-speaking individuals, circle represents females. Which area represents females who are graduates but do not know how to speak French?



Ans ☒ A. B

☒ B. C

☒ C. A

☒ D. F

Question ID : 2752286468

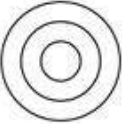
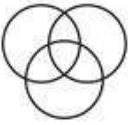
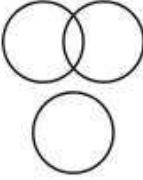
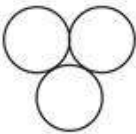
Q.6 The H.C.F. of two numbers is 5 and their L.C.M. is 2280. If one of the numbers is 95, then the other is:

- Ans ☒ A. 280
☒ B. 225
☒ C. 120
☒ D. 360

Question ID : 2752286463

Q.7 Which of the following Venn diagrams best represents the relationship between doctors, poets and men?

Ans

- ☒ A. 
- ☒ B. 
- ☒ C. 
- ☒ D. 

Question ID : 2752286469

Q.8 The sum of monthly salary of Ajay & Vijay is Rs. 54,000 & that of difference is Rs. 18,000. Ajay earns more than Vijay. Find the monthly salary of Vijay.

- Ans ☒ A. Rs. 20,000
☒ B. Rs. 48,000
☒ C. Rs. 18,000
☒ D. Rs. 36,000

Question ID : 2752286465

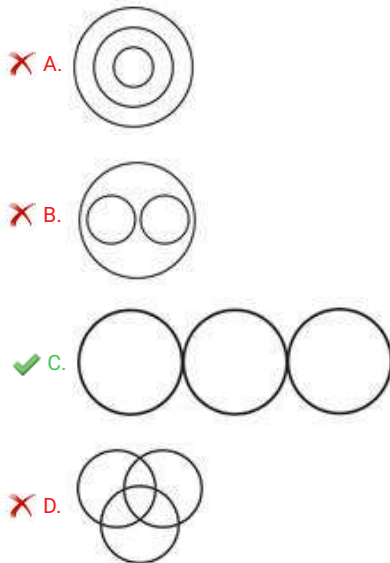
Q.9 If $42 @ 6 = 27$, $24 @ 8 = 20$, $36 @ 12 = 30$, then $54 @ 16 = ?$

- Ans ☒ A. 35
☒ B. 43
☒ C. 54
☒ D. 70

Question ID : 2752286464

Q.10 Which of the following Venn diagrams best represents the relationship between rice, wheat and maize?

Ans



Question ID : 2752286466

Q.11 Select the option that is related to the third term on the same basis as the second term is related to the first term.

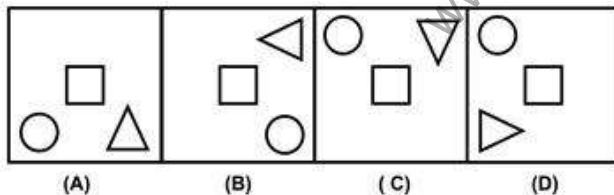
0.0169 : 0.13 :: 0.0016?

Ans

- ✗ A. 0.002
- ✓ B. 0.04
- ✗ C. 0.4
- ✗ D. 0.004

Question ID : 2752286462

Q.12 Which of the following options is the wrong figure in the series?

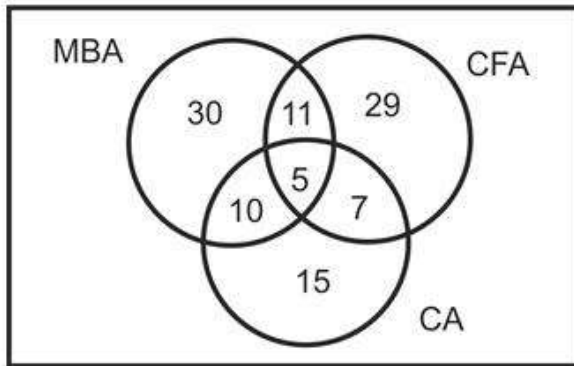


Ans

- ✗ A. Image B
- ✗ B. Image A
- ✓ C. Image C
- ✗ D. Image D

Question ID : 2752286470

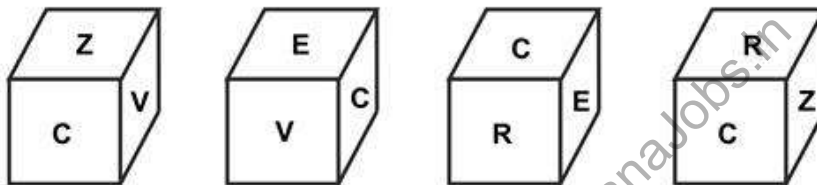
Q.13 The given Venn diagram shows the number of students in a batch pursuing MBA, CFA and CA. How many of these students are pursuing MBA and CFA only?



- Ans ☒ A. 30
☒ B. 11
☒ C. 19
☒ D. 49

Question ID : 2752286467

Q.14 In the following question, four position of the same dice is given. Which number will be at the face opposite to the face having the R?



- Ans ☒ A. C
☒ B. E
☒ C. V
☒ D. Z

Question ID : 2752286477

Q.15 In the question one statement is given, followed by two conclusions, I and II. You have to consider the statement to be true even if it seems to be at variance from commonly known facts. You have to decide which of the given conclusions, if any, follows from the given statement.

Statement: Few good dancers are invited to the fest organised by HBC College.

Conclusion I : Those who are not invited, are bad dancers.

Conclusion II. All the good dancers are invited to all the fests arranged by various institutions.


- Ans ☒ A. Neither conclusion I nor II follows
☒ B. Both conclusions I and II follows
☒ C. Only conclusion I follows
☒ D. Only conclusion II follows

Question ID : 2752286461

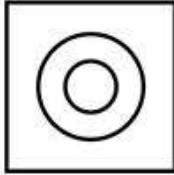
Q.16 Out of the given options, three are similar in a certain manner. However, one option is NOT like the other three. Select the option which is different from the rest.

Ans

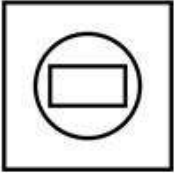
✗ A.



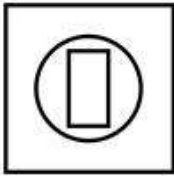
✓ B.



✗ C.

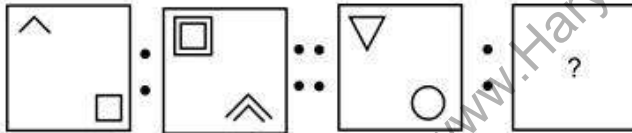


✗ D.



Question ID : 2752286472

Q.17 Select the option that is related to the third image on the same basis as the second image is related to the first image.



Ans

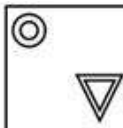
✗ A.



✗ B.



✓ C.



✗ D.



Question ID : 2752286471

Q.18 In the question, one statement is given, followed by two arguments I and II. You have to consider the statement to be true even if it seems to be at variance from commonly known facts. You have to decide which of the given arguments, if any, supports the given statement.

Statement: Should Government charge the same amount of tax to all the individuals?

Arguments:

I. Yes, it will reduce the burden of work of government officials.

II. No, it will lead to inequitable distribution of income in the society as poor and rich will pay same amount.

- Ans**
- ☒ A. Only argument I is strong
 - ☒ B. Neither argument I nor argument II is strong
 - ☒ C. Only argument II is strong
 - ☒ D. Both argument I and argument II is strong

Question ID : 2752286459

Q.19 In the question two statements are given, followed by three conclusions, I, II and III. You have to consider the statements to be true even if it seems to be at variance from commonly known facts. You have to decide which of the given conclusions, if any, follows from the given statements.

Statement 1 : All pineapples are apples.

Statement 2 : All bananas are apples.

Conclusion I : Some bananas are pineapples.

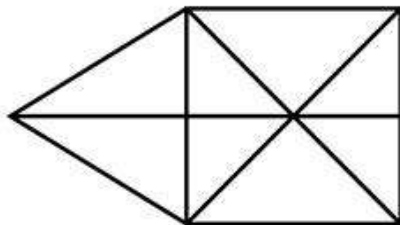
Conclusion II : Some apples are pineapples.

Conclusion III : Some apples are bananas.

- Ans**
- ☒ A. Only conclusion III follows
 - ☒ B. All conclusions I, II and III follow
 - ☒ C. Only conclusion II and III follows
 - ☒ D. Only conclusion II follows

Question ID : 2752286460

Q.20 How many maximum number of triangles are there in the given question figure?



- Ans**
- ☒ A. 17
 - ☒ B. 12
 - ☒ C. 15
 - ☒ D. 8

Question ID : 2752286474

Q.1 Amongst the following, which was the first country to adopt Goods and Services Tax (GST)?

- Ans ☒ A. Italy
☒ B. Russia
☒ C. France
☒ D. Germany

Question ID : 2752286483

Q.2 As of 2020, amongst the following, which country is India's largest export partner?

- Ans ☒ A. Iran
☒ B. United States of America
☒ C. South Korea
☒ D. Japan

Question ID : 2752286484

Q.3 Indian economy is which one of the following types?

- Ans ☒ A. Socialist economy
☒ B. Mixed economy
☒ C. Communist economy
☒ D. Capitalist economy

Question ID : 2752286482

Q.4 Which is the largest river of India that does not flow into the sea?

- Ans ☒ A. Mithi
☒ B. Yamuna
☒ C. Luni
☒ D. Son

Question ID : 2752286492

Q.5 Amongst the following, which living organisms shares characteristics with both plants and animals?

- Ans ☒ A. Paramecium
☒ B. Euglena
☒ C. Rhizopus
☒ D. Amoeba

Question ID : 2752286489

Q.6 Amongst the following, Rajasthan is most famous for the _____ fair.

- Ans ☒ A. Madhavpur
☒ B. Nauchandi
☒ C. Sonepur Cattle
☒ D. Pushkar

Question ID : 2752286478

Q.7 Which one of the following was not written by Kalidasa?

- Ans
- ☒ A. Malavikagnimitram
 - ☒ B. Vikramorvasiyam
 - ☒ C. Abhijnanasakuntalam
 - ☒ D. Mudrarakshasa

Question ID : 2752286496

Q.8 Which one of the following connects Rameswaram to mainland India?

- Ans
- ☒ A. Mahatma Gandhi setu
 - ☒ B. Nehru setu
 - ☒ C. Pamban bridge
 - ☒ D. Bogibeel bridge

Question ID : 2752286495

Q.9 Bubbles seen in alcoholic beverages are due to the presence of which one of the following gases?

- Ans
- ☒ A. Carbon dioxide
 - ☒ B. Hydrogen
 - ☒ C. Helium
 - ☒ D. Oxygen

Question ID : 2752286488

Q.10 In which of the following states is the Buddha Nullah located, which is a major source of pollution there?

- Ans
- ☒ A. Uttarakhand
 - ☒ B. Punjab
 - ☒ C. Uttar Pradesh
 - ☒ D. Haryana

Question ID : 2752286490

Q.11 The combination of the light of three colours - red, blue, and green yields which one of the following colour light?

- Ans
- ☒ A. Black
 - ☒ B. White
 - ☒ C. Grey
 - ☒ D. Charcoal

Question ID : 2752286487

Q.12 Amongst the following, name the notable Mandolin player.

- Ans
- ☒ A. Asad Ali Khan
 - ☒ B. Uppalapu Srinivas
 - ☒ C. Pannalal Ghosh
 - ☒ D. Braj Bhushan Kabra

Question ID : 2752286479

Q.13 As of April 2021, how many companies are listed on the SENSEX index of the Bombay Stock Exchange (BSE)?

- Ans
- ☒ A. 15
 - ☒ B. 30
 - ☒ C. 20
 - ☒ D. 25

Question ID : 2752286486

Q.14 Amongst the following, what best describes the repo rate in banking?

- Ans
- ☒ A. Rate of lending of RBI
 - ☒ B. Rate of interest
 - ☒ C. Rate of investment
 - ☒ D. Rate of taxation

Question ID : 2752286485

Q.15 In which one of the following states is Luddi dance performed?

- Ans
- ☒ A. Haryana
 - ☒ B. Punjab
 - ☒ C. Himachal Pradesh
 - ☒ D. Uttarakhand

Question ID : 2752286480

Q.16 Which one of the following describes the council of eight ministers formalized by Chhatrapati Shivaji?

- Ans
- ☒ A. Ashta mantri
 - ☒ B. Ashta subedar
 - ☒ C. Ashta peshwa
 - ☒ D. Ashta pradhan

Question ID : 2752286497

Q.17 Amongst the following, what best describes biomagnification?

- Ans
- ☒ A. Increase in contaminant quantity in food chain
 - ☒ B. Increased growth of living organisms
 - ☒ C. Expansion of the biosphere
 - ☒ D. Increased application of biotechnology

Question ID : 2752286491

Q.18 Sedimentary rock formations in lakes are known as _____.

- Ans
- ☒ A. Calamine
 - ☒ B. Magnetite
 - ☒ C. Lacustrine
 - ☒ D. Bauxite

Question ID : 2752286494

Q.19 Which one of the following monuments was not built by the Delhi Sultanate?

- Ans ☒ A. Red Fort
- ☐ B. Alai Minar
- ☐ C. Moth ki Masjid
- ☐ D. Quwwat-ul-Islam Mosque

Question ID : 2752286481

Q.20 Amongst the following, name the mountain range that is the source of the river Tapti.

- Ans ☐ A. Aravalli range
- ☐ B. Saser Kangri
- ☒ C. Satpura range
- ☐ D. Vindhya range

Question ID : 2752286493

Section : General Awareness2

Q.1 Amongst the following, B.R. Ambedkar was independent India's first _____ minister.

- Ans ☒ A. Law and Justice
- ☐ B. Home
- ☐ C. Finance
- ☐ D. Defence

Question ID : 2752286501

Q.2 Amongst the following, in the 2012 London Olympic Games, who was Saina Nehwal's opponent in the Bronze Medal Match?

- Ans ☐ A. Wang Shixian
- ☐ B. Li Xuerui
- ☐ C. Lianne Tan
- ☒ D. Wang Xin

Question ID : 2752286516

Q.3 Amongst the following, in which field did the late Nirmal Singh Khalsa win the Padma Shri?

- Ans ☐ A. Writing
- ☒ B. Arts
- ☐ C. Politics
- ☐ D. Sports

Question ID : 2752286507

Q.4 Amongst the following, who was the last Emperor/Empress of India?

- Ans ☐ A. George V
- ☐ B. Edward VII
- ☐ C. Victoria
- ☒ D. George VI

Question ID : 2752286498

Q.5 Amongst the following, who is the first Indian female chef to be awarded a Michelin star?

- Ans
- ☐ A. Madhur Jaffrey
 - ☐ B. Tarla Dalal
 - ☒ C. Garima Arora
 - ☐ D. Pankaj Bhadouria

Question ID : 2752286502

Q.6 Name the program launched in April 2020 by the Ministry of Civil Aviation for the transport of medical equipment throughout the country?

- Ans
- ☐ A. Sanjivani Flight
 - ☒ B. Lifeline Udan
 - ☐ C. Jeevan Med
 - ☐ D. Shakti

Question ID : 2752286506

Q.7 As of April 2020, how many IPL editions have been held outside India and which were the years?

- Ans
- ☐ A. 3 (2010, 2012, 2013)
 - ☐ B. 5 (2008, 2009, 2010, 2011, 2012)
 - ☐ C. 4 (2008, 2011, 2015, 2016)
 - ☒ D. 2 (2009 and 2014)

Question ID : 2752286514

Q.8 In March 2020, the Prime Minister of India set up which one of the following funds for Coronavirus relief?

- Ans
- ☐ A. PM Relief Fund
 - ☒ B. PM CARES Fund
 - ☐ C. PM National Relief Fund
 - ☐ D. PM Corona Fund

Question ID : 2752286508

Q.9 The failed attempt by the British Government to secure full Indian cooperation for Word War II is known as the _____ mission.

- Ans
- ☐ A. Rowlatt
 - ☒ B. Cripps
 - ☐ C. Simon
 - ☐ D. Dyer

Question ID : 2752286500

Q.10 What is the significance of National Science Day being celebrated on 28 February each year?

- Ans
- ☒ A. The day of the discovery of the Raman effect
 - ☐ B. Sir C.V. Raman's knighthood
 - ☐ C. The day Sir C.V. Raman was awarded the Nobel Prize
 - ☐ D. Sir C.V. Raman's birth anniversary

Question ID : 2752286504

Q.11 Amongst the following, where was the first Ramakrishna Math founded?

- Ans ☒ A. Aurangabad
☒ B. Bhubaneswar
☒ C. Baranagar
☒ D. Dhaleswar

Question ID : 2752286499

Q.12 As of April 2020, Sania Mirza was the first Indian woman to win which one of the following events in 2003?

- Ans ☒ A. US Open single girls
☒ B. Wimbledon Championships girls' doubles
☒ C. French Open mixed doubles junior
☒ D. Australian Open girls singles

Question ID : 2752286515

Q.13 Amongst the following, which article of the Constitution provides for the convening of the joint session of Parliament?

- Ans ☒ A. Article 250
☒ B. Article 108
☒ C. Article 175
☒ D. Article 300

Question ID : 2752286511

Q.14 As of April 2020, which one of the following books by Chetan Bhagat has been adapted into a film?

- Ans ☒ A. Revolution 2020
☒ B. Five Point Someone
☒ C. What Young India Wants
☒ D. The Girl in Room 105

Question ID : 2752286503

Q.15 Article 368 of the Indian Constitution provides the power for which one of the following?

- Ans ☒ A. Constitutional amendment
☒ B. Elections for Rajya Sabha
☒ C. Elections for Lok Sabha
☒ D. Appointment of Supreme Court judge

Question ID : 2752286512

Q.16 Amongst the following, whose record did Roger Federer break to win the most number of Grand Slam singles amongst male tennis players?

- Ans ☒ A. John McEnroe
☒ B. Andre Agassi
☒ C. Bjorn Borg
☒ D. Pete Sampras

Question ID : 2752286517

Q.17 As of April 2020, the elections to the Parliament and State Assemblies are conducted by which constitutional authority?

- Ans ☒ A. Election Commission of India
☒ B. President of India
☒ C. Governor
☒ D. Prime Minister

Question ID : 2752286509

Q.18 In April 2020, by how much were the salaries of the Union Cabinet, MPs, Prime Minister, President, Vice-President and Governor reduced in the wake of the coronavirus pandemic?

- Ans ☒ A. 30 percent
☒ B. 50 percent
☒ C. 40 percent
☒ D. 60 percent

Question ID : 2752286505

Q.19 As of April 2020, how many Olympic Gold Medals has Michael Phelps won till date?

- Ans ☒ A. 26
☒ B. 29
☒ C. 15
☒ D. 23

Question ID : 2752286513

Q.20 Amongst the following, name the Comptroller and Auditor General (CAG) of India as of April 2020.

- Ans ☒ A. Rajiv Mehrishi
☒ B. A.K. Roy
☒ C. V. Narahari Rao
☒ D. Gyan Prakash

Question ID : 2752286510

Section : Arithmetic Ability1

Q.1 0.8 of a number equals 0.12 of another number. What is the ratio of these numbers?

- Ans ☒ A. 20 : 3
☒ B. 3 : 20
☒ C. 10 : 3
☒ D. 3 : 10

Question ID : 2752286532

Q.2 What must be added to each term of the ratio 17 : 23 so that the ratio becomes 3 : 4?

- Ans ☒ A. 4
☒ B. 3
☒ C. 1
☒ D. 2

Question ID : 2752286533

Q.3 The ratio between the ages of Ram and Srinivas is 13 : 7 and the sum of their ages is 80 years. The ratio of their ages after 2 years will be:

- Ans
- ☒ A. 15 : 27
 - ☒ B. 23 : 11
 - ☒ C. 9 : 5
 - ☒ D. 11 : 23

Question ID : 2752286535

Q.4 The average consumption of petrol for a car for five months is 76 litres and for next seven months it is 112 litres. What is the average monthly consumption for the twelve months?

- Ans
- ☒ A. 112 litres
 - ☒ B. 86 litres
 - ☒ C. 97 litres
 - ☒ D. 79 litres

Question ID : 2752286522

Q.5 In an examination, 58 percent of the total examinees passed. If the number of failures is 588, then how many total number of examinees are there?

- Ans
- ☒ A. 1600
 - ☒ B. 1400
 - ☒ C. 1100
 - ☒ D. 1200

Question ID : 2752286526

Q.6 When the price of toys was increased by 40 percent, the number of toys sold fell by 30 percent. What is the effect on the sale of the shop?

- Ans
- ☒ A. 2 percent increase
 - ☒ B. 4 percent increase
 - ☒ C. 4 percent decrease
 - ☒ D. 2 percent decrease

Question ID : 2752286530

Q.7 H.C.F of three numbers is 7. If they be in the ratio 5 : 2 : 3, What are these numbers?

- Ans
- ☒ A. 35, 21, 14
 - ☒ B. 14, 35, 21
 - ☒ C. 14, 21, 35
 - ☒ D. 35, 14, 21

Question ID : 2752286518

Q.8 Two litre of water is evaporated from 8 litres of a solution containing 4 percent salt. What is the percentage of salt in the remaining solution?

- Ans
- ☒ A. 4.22 percent
 - ☒ B. 5.33 percent
 - ☒ C. 6.33 percent
 - ☒ D. 8.22 percent

Question ID : 2752286528

Q.9 Which of the following fractions is the smallest?

- Ans ☒ A. $\frac{6}{7}$
☒ B. $\frac{23}{29}$
☒ C. $\frac{12}{13}$
☒ D. $\frac{17}{11}$

Question ID : 2752286519

Q.10 Ram buys an article with 15 percent discount on its marked price. He makes a profit of 8 percent by selling it at Rs. 1836. What is the marked price ?

- Ans ☒ A. Rs. 1,000
☒ B. Rs. 2,200
☒ C. Rs. 2,000
☒ D. Rs. 2,600

Question ID : 2752286531

Q.11 A man spends 80 percent of his income. His income is increased by 18 percent and he increased his expenditure by 10 percent. By how much have his savings increased ?

- Ans ☒ A. 100 percent
☒ B. 75 percent
☒ C. 50 percent
☒ D. 25 percent

Question ID : 2752286527

Q.12 A man has some hens and cows. If the total number of heads of hens and cows together be 56 and number of feet equals 210, then number of hens are _____

- Ans ☒ A. 12
☒ B. 7
☒ C. 11
☒ D. 9

Question ID : 2752286534

Q.13 If $\sqrt{(0.02 \times 9.8 \times b)} = (4.6 \times 0.6 \times \sqrt{d})$, then $(b/d) = ?$

- Ans ☒ A. 38.86
☒ B. 388.60
☒ C. 0.38
☒ D. 3.88

Question ID : 2752286521

Q.14 If we multiply the fraction by itself and divide the product by its reciprocal, the fraction thus obtained is $(\frac{12167}{1331})$. What is the original fraction?

- Ans ☒ A. $\frac{23}{11}$
☒ B. $\frac{31}{11}$
☒ C. $\frac{13}{26}$
☒ D. $\frac{23}{13}$

Question ID : 2752286520

Q.15 Rs. 8,200 amounts to Rs. 9,430 in 3 years at simple interest. If the interest rate is increased by 2 percent, it would amount to how much?

- Ans
- ☐ A. Rs. 9,622
 - ☐ B. Rs. 9,122
 - ☐ C. Rs. 9,522
 - ☒ D. Rs. 9,922

Question ID : 2752286537

Q.16 Ravi bought a toy for Rs. 2000, which he decided to mark-up by 20 percent. After selling it at a discount of x percent, he still made a profit of 10.4 percent. What is the value of x?

- Ans
- ☐ A. 6 percent
 - ☐ B. 4 percent
 - ☐ C. 2 percent
 - ☒ D. 8 percent

Question ID : 2752286524

Q.17 The average weight of 32 students is 36 kg. By the admission of a new student the average weight is reduced to 35.6 kg. What is the weight of new student?

- Ans
- ☒ A. 22.8 kg
 - ☐ B. 24.8 kg
 - ☐ C. 32.8 kg
 - ☐ D. 26.8 kg

Question ID : 2752286523

Q.18 A sold a watch at a gain of 6 percent to B and B sold it to C at a gain of 8 percent. If C paid Rs. 105 for it, then what is the price paid by A ?

- Ans
- ☐ A. Rs. 89.7
 - ☐ B. Rs. 19.7
 - ☒ C. Rs. 91.7
 - ☐ D. Rs. 93.7

Question ID : 2752286529

Q.19 The simple interest on a certain sum for 4 years at 12 percent per annum is Rs. 1056. What is the sum?

- Ans
- ☐ A. Rs. 2000
 - ☐ B. Rs. 1200
 - ☒ C. Rs. 2200
 - ☐ D. Rs. 2400

Question ID : 2752286536

Q.20 If 28 percent of a number is 70, What is the number?

- Ans
- ☐ A. 150
 - ☒ B. 250
 - ☐ C. 200
 - ☐ D. 100

Question ID : 2752286525

Section : Arithmetic Ability2

Q.1 If a man covers 14.4 km in 4 hours, What is the distance covered by him in 7 hours?

- Ans ☐ A. 15.2 km
☐ B. 22.2 km
☐ C. 24.2 km
☒ D. 25.2 km

Question ID : 2752286540

Q.2 The curved surface areas of two spheres are in the ratio 4 : 9. Find the ratio of their volumes.

- Ans ☐ A. 9 : 8
☐ B. 27 : 8
☐ C. 8 : 9
☒ D. 8 : 27

Question ID : 2752286549

Q.3 A sum of money becomes Rs. 8,000 after three years and Rs. 12,000 after six years on compound interest. What is the sum?

- Ans ☒ A. Rs. 5,3333.33
☐ B. Rs. 7,3333.53
☐ C. Rs. 6,3333.33
☐ D. Rs. 4,3333.53

Question ID : 2752286538

Q.4 A sum is invested at compound interest payable annually. The interest of the first two successive years was Rs. 725 and Rs. 783. What is the sum?

- Ans ☐ A. Rs. 8062.5
☐ B. Rs. 9,052.5
☒ C. Rs. 9,062.5
☐ D. Rs. 9,082.5

Question ID : 2752286539

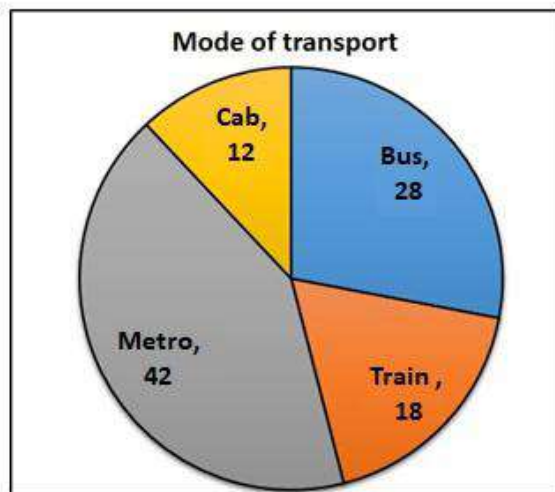
Q.5 The following table gives the information of the number of students from class 6 to class 10. The number of girls in class 10 is what percent more than the number of girls in class 6?

| Class | Girls | Boys |
|-------|-------|------|
| 6 | 44 | 72 |
| 7 | 50 | 68 |
| 8 | 48 | 86 |
| 9 | 56 | 92 |
| 10 | 54 | 88 |

- Ans ☐ A. 26.72 percent
☐ B. 20.72 percent
☒ C. 22.72 percent
☐ D. 18.72 percent

Question ID : 2752286550

Q.6 The pie chart gives the data of the number of people in a city, who take different modes of transport to go to work. If the number of people taking train are 4,500, how many people take the cab?



Ans ☒ A. 3,000

☒ B. 3,200

☒ C. 2,000

☒ D. 4,000

Question ID : 2752286551

Q.7 A man, on tour, travels first 360 km at 80 km/hr and the next 360 km at 120 km/hr. What is the average speed for the first 720 km of the tour?

Ans ☒ A. 96 km/hr

☒ B. 86 km/hr

☒ C. 106 km/hr

☒ D. 76 km/hr

Question ID : 2752286541

Q.8 If 5 men or 8 women can construct a wall in 60 days. Find the number of days that 10 men and 12 women take to construct it.

Ans ☒ A. 12.54 days

☒ B. 17.14 days

☒ C. 16.21 days

☒ D. 14.82 days

Question ID : 2752286545

Q.9 If the length of diagonal of a cube is $12\sqrt{3}$ cm. What is the surface area?

Ans ☒ A. 232 sq cm

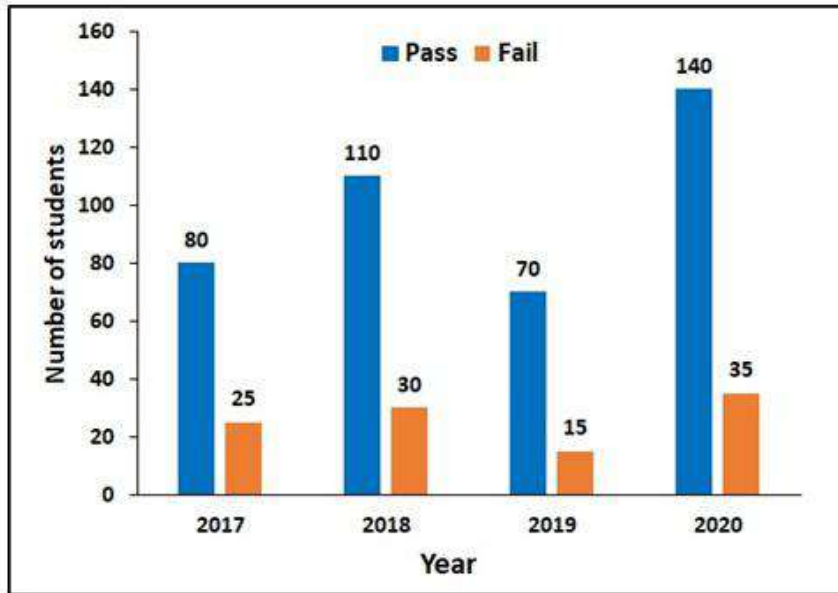
☒ B. 432 sq cm

☒ C. 864 sq cm

☒ D. 632 sq cm

Question ID : 2752286547

Q.10 The graph shows the number of students passed and failed in an examination from the year 2017 to 2020. Find the year in which, pass percentage is maximum?



Ans ☒ A. 2020

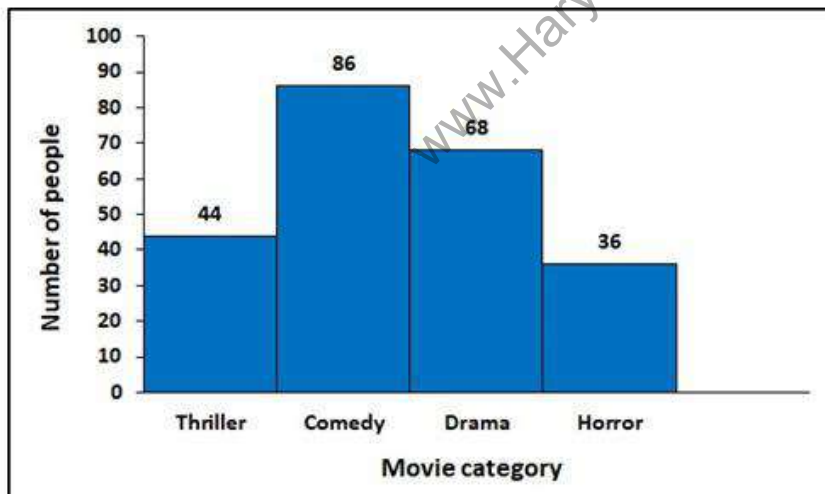
☒ B. 2018

☒ C. 2019

☒ D. 2017

Question ID : 2752286557

Q.11 The bar graph shows the number of people who likes to watch different movies. Which category of movie is highly preferred as per the survey?



Ans ☒ A. Comedy

☒ B. Horror

☒ C. Drama

☒ D. Thriller

Question ID : 2752286554

Q.12 A can do a certain work in 12 days which B alone can do in 10 days. A started the work and was joined by B after 2 days. Find the number of days the work lasted.

- Ans
- ☒ A. 10.42 days
 - ☒ B. 8.42 days
 - ☒ C. 5.62 days
 - ☒ D. 6.54 days

Question ID : 2752286544

Q.13 A man walking at 4 km/hr crosses a square field diagonally in 9 min. What is the area of the field?

- Ans
- ☒ A. 180,000 sq. m
 - ☒ B. 120,000 sq. m
 - ☒ C. 150,000 sq. m
 - ☒ D. 160,000 sq. m

Question ID : 2752286542

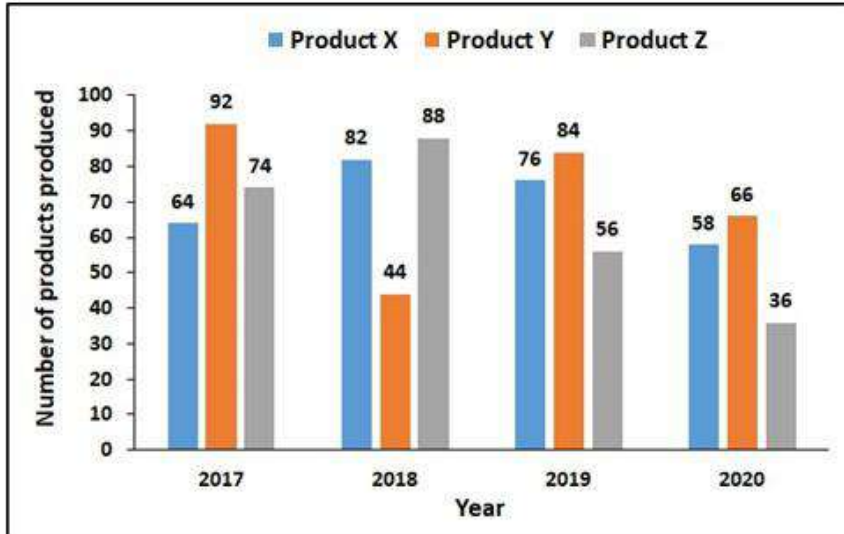
Q.14 The following table gives the number of different types of animals in a zoo. Which animal has seen the highest growth in numbers from 2016 to 2017 ?

| Animal | 2016 | 2017 |
|----------|------|------|
| Peacock | 1240 | 1280 |
| Lion | 450 | 380 |
| Tiger | 560 | 585 |
| Elephant | 1050 | 1180 |

- Ans
- ☒ A. Lion
 - ☒ B. Peacock
 - ☒ C. Tiger
 - ☒ D. Elephant

Question ID : 2752286552

Q.15 The graph shows the number of products produced in a company, from the year 2017 to 2020. Find the average of the 3 products produced in the year 2019.



Ans ☒ A. 68

☒ B. 72

☒ C. 86

☒ D. 56

Question ID : 2752286556

Q.16 A can do a certain work in 12 days while B can do it in 24 days. In how many days can A and B working together do the work?

Ans ☒ A. 8 days

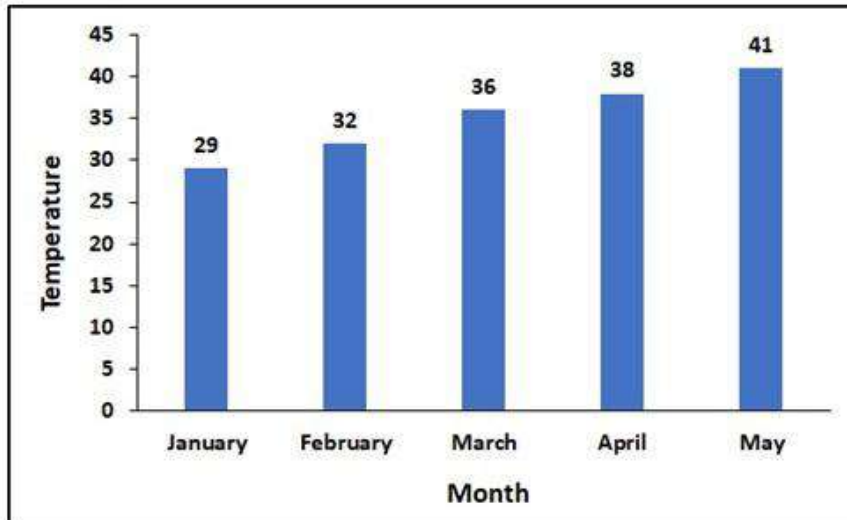
☒ B. 6 days

☒ C. 5 days

☒ D. 10 days

Question ID : 2752286543

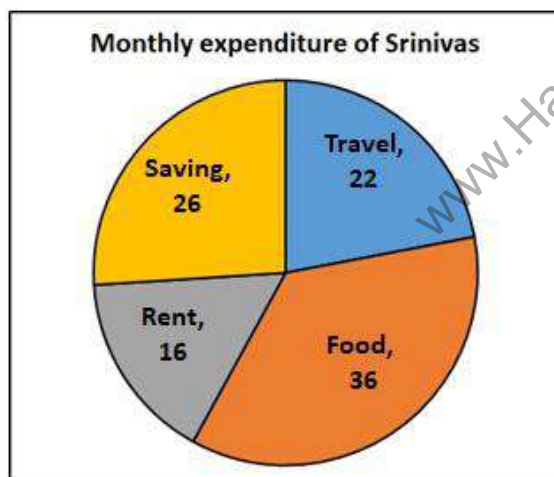
Q.17 The graph shows the temperature variance of a city in degree Celsius. What is the percentage change in temperature from January to May?



- Ans
- ☒ A. 18.37 percent
 - ☒ B. 28.74 percent
 - ☒ C. 36.42 percent
 - ☒ D. 41.38 percent

Question ID : 2752286555

Q.18 The pie chart shows, monthly expenditure of Srinivas. Food expenses is how much percentage more than his savings?



- Ans
- ☒ A. 36.46 percent
 - ☒ B. 44.28 percent
 - ☒ C. 38.46 percent
 - ☒ D. 32.62 percent

Question ID : 2752286553

Q.19 8 men and 12 women finish a job in 10 days, while 6 men and 8 women finish it in 15 days. Find the number of days, 10 women working together will finish it.

- Ans ☒ A. 12 days
☐ B. 8 days
☐ C. 10 days
☐ D. 14 days

Question ID : 2752286546

Q.20 The sum of length, breadth and depth of a cuboid is 21 cm and its diagonal is $6\sqrt{5}$ cm. What is its surface area?

- Ans ☐ A. 161 cu cm
☒ B. 261 cu cm
☐ C. 361 cu cm
☐ D. 231 cu cm

Question ID : 2752286548

Section : General English1

Q.1 Fill in the blank with appropriate word.

The _____ danger of dying a horrible death in that reclusive state was inevitable. It wasn't a question if, it was a question of when.

- Ans ☒ A. imminent
☐ B. baron
☐ C. vexatious
☐ D. remote

Question ID : 2752286568

Q.2 The question below consist of a set of labelled sentences. Out of four options given, select the most logical order of the sentences which form a paragraph.

Napoleon Bonaparte (1769-1821), also known as Napoleon I, was a French military leader and emperor who conquered much of Europe in the early 19th century.

P. Shrewd, ambitious and a skilled military strategist, Napoleon successfully waged war against various coalitions of European nations and expanded his empire.

Q. However, after a disastrous French invasion of Russia in 1812, Napoleon abdicated the throne two years later and was exiled to the island of Elba.

R. After seizing political power in France in a 1799 coup d'état, he crowned himself emperor in 1804.

S. Born on the island of Corsica, Napoleon rapidly rose through the ranks of the military during the French Revolution (1789-1799).

In 1815, he briefly returned to power in his Hundred Days campaign but after a crushing defeat at the Battle of Waterloo, he abdicated once again and was exiled to the remote island of Saint Helena, where he died at 51.

- Ans ☐ A. SQR P
☒ B. SRP Q
☐ C. SPQR
☐ D. SQPR

Question ID : 2752286571

Q.3 Select the word that is closest in meaning (SYNONYM) to the word given below

Fallible

- Ans ☒ A. Errant
☒ B. Chauvinist
☒ C. Anarchist
☒ D. Despotic

Question ID : 2752286577

Q.4 Select the word segment that substitutes (replaces) the bracketed word segment correctly and completes the sentence meaningfully. Select the option 'no correction required' if the sentence is correct as given.

The growth of science and technology (has conferred obvious and immense) benefits upon the community.

- Ans ☒ A. No corrections required
☒ B. had been conferring obviously and immense
☒ C. has been conferred obvious but immense
☒ D. has been conferring obvious but immensely

Question ID : 2752286566

Q.5 Fill in the blank with appropriate word.

The communist party, unjustifiably _____ itself the right to rule the state.

- Ans ☒ A. arrogated
☒ B. vitiated
☒ C. deracinated
☒ D. abrogated

Question ID : 2752286567

Q.6 Select the word segment that substitutes (replaces) the bracketed word segment correctly and completes the sentence meaningfully. Select the option 'no correction required' if the sentence is correct as given.

For the collective good of everyone, (we must haste this decision if) the general consensus approves it or not.

- Ans ☒ A. No corrections required
☒ B. we must haste this decision either
☒ C. we must haste this decision whether
☒ D. we must haste this decision should

Question ID : 2752286565

Q.7 Find the part of the given sentence that has an error in it. If there is no error, choose 'No error'.

The general consensus of the U.N. (1)/ conventions seems to have been in the favour (2)/ of the anti-nuclear weaponry states. (3) No Error (4)

- Ans ☒ A. of the anti-nuclear weaponry states.
☒ B. No error
☒ C. The general consensus of the U.N.
☒ D. conventions seems to have been in the favour

Question ID : 2752286562

Q.8 Select the word segment that substitutes (replaces) the bracketed word segment correctly and completes the sentence meaningfully. Select the option 'no correction required' if the sentence is correct as given.

He was believed to be the best amongst us(, yet he had deliberately sabotaged the plan) along with everyone's trust, conclusively proving that each man here is on his own.

- Ans
- ☒ A. but he had deliberately sabotaged the plan
 - ☒ B. and yet he deliberate sabotaged the plan
 - ☒ C. No corrections required
 - ☒ D. and yet he deliberately sabotaged the plan

Question ID : 2752286564

Q.9 Find the part of the given sentence that has an error in it. If there is no error, choose 'No error'.

As soon as he called, the dog ran (1)/ to the door upon hearing (2)/ the sound of his masters' voice after so long. (3)/ No Error (4)

- Ans
- ☒ A. the sound of his masters' voice after so long.
 - ☒ B. No error
 - ☒ C. to the door upon hearing
 - ☒ D. As soon as he called, the dog ran

Question ID : 2752286561

Q.10 Fill in the blank with appropriate word.

In 1918 Kaiser Wilhelm _____ as the German Emperor and led the way for Hitler's rule.

- Ans
- ☒ A. acceded
 - ☒ B. usurped
 - ☒ C. alleged
 - ☒ D. abdicated

Question ID : 2752286569

Q.11 Find the part of the given sentence that has an error in it. If there is no error, choose 'No error'.

She had to move a few (2)/ things to make room, but (2)/ that wasn't to hard. (3)/ No Error (4)

- Ans
- ☒ A. things to make room, but
 - ☒ B. She had to move a few
 - ☒ C. No error
 - ☒ D. that wasn't to hard.

Question ID : 2752286559

Q.12 Select the word that is closest in meaning (SYNONYM) to the word given below

Scrutinize

- Ans
- ☒ A. Tuft
 - ☒ B. Inspect
 - ☒ C. Suppress
 - ☒ D. Croquis

Question ID : 2752286575

Q.13 Some parts of a sentence have been jumbled up, and labelled P, Q, R and S. Select the option that gives the correct sequence in which these parts can be rearranged to form a meaningful and grammatically correct sentence.

There in the soap-scented

- P. they sorted, washed, dried, and
- Q. air and the glare of the neon,
- R. folded up to
- S. 20 loads of

clothes.

- Ans
- ☒ A. QRPS
 - ☒ B. QRSP
 - ☒ C. QPSR
 - ☒ D. QPRS

Question ID : 2752286572

Q.14 The question below consist of a set of labelled sentences. Out of four options given, select the most logical order of the sentences which form a paragraph.

The History of India begins with the Indus Valley Civilization and the coming of the Aryans.

- P. The earliest literary source that sheds light on India's past is the Rig Veda.
- Q. These two phases are generally described as the pre-Vedic and Vedic periods.
- R. It is difficult to date this work with any accuracy on the basis of tradition and ambiguous astronomical information contained in the hymns.
- S. Indus valley civilization, which flourished between 2800 BC and 1800 BC, had an advanced and flourishing economic system.

The Indus valley people practiced agriculture, domesticated animals, made tools and weapons from copper, bronze, and tin and even traded with some Middle East countries.

- Ans
- ☒ A. QPSR
 - ☒ B. QSPR
 - ☒ C. QRSP
 - ☒ D. QPRS

Question ID : 2752286574

Q.15 Select the word segment that substitutes (replaces) the bracketed word segment correctly and completes the sentence meaningfully. Select the option 'no correction required' if the sentence is correct as given.

("Do everyone understand the instructions of the principal"), asked the teacher.

- Ans
- ☒ A. "Does everyone understand the instructions of the principal"
 - ☒ B. No corrections required
 - ☒ C. "Does everyone understand the instructions of the principal?"
 - ☒ D. "Have everyone understood the instructions of the principal"

Question ID : 2752286563

Q.16 Find the part of the given sentence that has an error in it. If there is no error, choose 'No error'.

The annual rainfall received this (1)/ year dropped by 35 percent from last year causing (2)/ an extremely shortage of water in the state. (3)/ No Error (4)

- Ans
- ☒ A. The annual rainfall received this
 - ☒ B. an extremely shortage of water in the state.
 - ☒ C. year dropped by 35 percent from last year causing
 - ☒ D. No error

Question ID : 2752286558

Q.17 Select the word that is opposite in meaning (ANTONYM) to the word given below

Partisan

- Ans ☒ A. Addressor
☒ B. Inequitable
☒ C. Separatist
☒ D. Impartial

Question ID : 2752286576

Q.18 Fill in the blank with appropriate word.

His _____ theories; let alone be applicable, they couldn't even be properly understood.

- Ans ☒ A. elaborated
☒ B. convoluted
☒ C. inconspicuous
☒ D. abortifacient

Question ID : 2752286570

Q.19 Find the part of the given sentence that has an error in it. If there is no error, choose 'No error'.

Economist and Chief Executive Officer of the (1)/ Economic Growth Welfare, Charan Singh, (2)/ shared his views on the dip in country's GDP growth to 4.5 percent. (3)/ No Error (4)

- Ans ☒ A. Economist and Chief Executive Officer of the
☒ B. shared his views on the dip in country's GDP growth to 4.5 percent.
☒ C. No error
☒ D. Economic Growth Welfare, Charan Singh,

Question ID : 2752286560

Q.20 Some parts of a sentence have been jumbled up, and labelled P, Q, R and S. Select the option that gives the correct sequence in which these parts can be rearranged to form a meaningful and grammatically correct sentence.

"In his interaction with chief ministers

P. last week, Prime Minister Narendra Modi asked
Q. them for suggestions for an exit strategy
R. on March 24 to contain novel coronavirus outbreak."
S. to end the nationwide lockdown enforced

the reporter reported.

- Ans ☒ A. PSRQ
☒ B. PQRS
☒ C. PQSR
☒ D. PRSQ

Question ID : 2752286573

Q.1 Four words are given, out of which only one word is spelt correctly. Choose the correctly spelt word.

- Ans ☒ A. Imponderebel
☒ B. Imponsterable
☒ C. Impondarable
☒ D. Imponderable

Question ID : 2752286584

Q.2 Select the word that is closest in meaning (SYNONYM) to the word given below

Vegetate

- Ans ☒ A. Modular
☒ B. Languish
☒ C. Decay
☒ D. Desire

Question ID : 2752286579

Q.3 Select the most appropriate meaning of the given idiom

To get into a scrape

- Ans ☒ A. To surrender or give up a contest.
☒ B. To be completely baffled by a particular event.
☒ C. To find oneself in an awkward predicament.
☒ D. To indulge in over refined arguments.

Question ID : 2752286587

Q.4 Select the most appropriate meaning of the given idiom

To pour oil on troubled water

- Ans ☒ A. Things which do not mix and match.
☒ B. To calm quarrels with pacifying words.
☒ C. To make matters worse
☒ D. To tip carelessly

Question ID : 2752286586

Q.5 Four words are given, out of which only one word is spelt correctly. Choose the correctly spelt word.

- Ans ☒ A. Chaffeur
☒ B. Chauffeur
☒ C. Chauffuer
☒ D. Chauffur

Question ID : 2752286580

Q.6 Four words are given, out of which only one word is spelt correctly. Choose the correctly spelt word.

- Ans ☒ A. Jurisprudense
☒ B. Jurisprudanse
☒ C. Jurisprudance
☒ D. Jurisprudence

Question ID : 2752286582

Q.7 Select the most appropriate meaning of the given idiom

Will o' the wisp

- Ans ☒ A. An impractical person.
☒ B. Quarrelling over trivial matters.
☒ C. Anything which eludes or deceives.
☒ D. A lover of women's company.

Question ID : 2752286588

Q.8 Select the most appropriate 'one word' for the expressions given below

A person or state signing a treaty or other document jointly with others.

- Ans ☒ A. Frater
☒ B. Pauper
☒ C. Cosignatory
☒ D. Cogent

Question ID : 2752286592

Q.9 Four words are given, out of which only one word is spelt correctly. Choose the correctly spelt word.

- Ans ☒ A. Prespicious
☒ B. Perspicacious
☒ C. Prespiciuos
☒ D. Prespicaious

Question ID : 2752286581

Q.10 Select the most appropriate 'one word' for the expressions given below

Conversation or speech characterized by quick, witty comments or replies.

- Ans ☒ A. Matricide
☒ B. Repartee
☒ C. Groan
☒ D. Aphasia

Question ID : 2752286589

Q.11 Select the word that is opposite in meaning (ANTONYM) to the word given below

Resplendent

- Ans ☒ A. Opaque
☒ B. Lustreless
☒ C. Brilliant
☒ D. Transparent

Question ID : 2752286578

Q.12 Select the most appropriate meaning of the given idiom

To pay off old scores

- Ans ☒ A. To lead a life of dissipation
☒ B. To be humble
☒ C. To be a role model
☒ D. To take revenge

Question ID : 2752286585

Q.13 Four words are given, out of which only one word is spelt correctly. Choose the correctly spelt word.

- Ans ☒ A. Addandum
☒ B. Addendum
☒ C. Addanddum
☒ D. Addenddum

Question ID : 2752286583

Q.14 Select the most appropriate 'one word' for the expressions given below

One who spends money recklessly.

- Ans ☒ A. Folio
☒ B. Prodigal
☒ C. Protégé
☒ D. Rostrum

Question ID : 2752286591

Q.15 Select the most appropriate 'one word' for the expressions given below

Pleasant or sharp taste.

- Ans ☒ A. Piquant
☒ B. Impious
☒ C. Saccharin
☒ D. Siesta

Question ID : 2752286590

Comprehension:

Read the following information carefully and answer the given questions.

By 5,000 BC the people of Egypt had begun farming. They also wove linen and made pottery. Later they learned to use bronze. About 3,200 BC the Egyptians invented writing. The first Egyptian in history was King Menes aka Narmer who lived shortly before 3,100 BC. At that time Egypt was divided into northern (lower) Egypt and southern (upper Egypt). In 3118 BC Menes managed to unite the two. He made Memphis his capital. Ancient Egypt was a highly organized society. The country was divided into 42 areas called nomes. Each one was governed by nomarch. Farmers paid part of their crops in taxes.

The first period of Egyptian history, which ended in 2181 BC is called the Old Kingdom. During it the pharaohs built pyramids. The first pyramid, the step pyramid was built by Zoser about 2665 BC. Others were built by the following pharaohs Sneferu and Khufu.

However central authority in Egypt eventually weakened. After about 1281 BC Egypt split into parts and there were civil wars between the rival areas. This period of civil disorder is called the First Intermediate Period and it lasted until 2055 BC. Finally, Mentuhotep II succeeded in reuniting Egypt and he founded the Middle Kingdom.

The Middle Kingdom lasted until 1650 BC. It was a great period of art and literature in Egypt. Furthermore, the pharaohs carried out successful military campaigns and more pyramids were built. However, the Middle Kingdom was followed by the Second Intermediate Period. At about 1650 BC Palestinian people called the Hyksos seized power in northern Egypt. They ruled from the city of Avaris. However native Egyptians continued to rule southern Egypt and in 1550 BC they drove out the Hyksos and reunited Egypt. So began the New Kingdom. It lasted from 1550 to 1070 BC. During this era, Egypt was rich and powerful once again. Egypt controlled Nubia, the land to the south and invaded Palestine and Syria. Meanwhile, great new temples were built at Thebes and pharaohs were buried in the Valley of the Kings. Then about 1364 BC, Akhenaten became pharaoh. He worshiped only the sun god Aten. However, his son Tutankhamen worshiped the old gods.

SubQuestion No : 16

Q.16 When was Menes able to unite the two halves of Egypt?

- Ans
- ☒ A. 3200 BC
 - ☒ B. 2181 BC
 - ☒ C. 3118 BC
 - ☒ D. 3100 BC

Question ID : 2752286594

Comprehension:

Read the following information carefully and answer the given questions.

By 5,000 BC the people of Egypt had begun farming. They also wove linen and made pottery. Later they learned to use bronze. About 3,200 BC the Egyptians invented writing. The first Egyptian in history was King Menes aka Narmer who lived shortly before 3,100 BC. At that time Egypt was divided into northern (lower) Egypt and southern (upper Egypt). In 3118 BC Menes managed to unite the two. He made Memphis his capital. Ancient Egypt was a highly organized society. The country was divided into 42 areas called nomes. Each one was governed by nomarch. Farmers paid part of their crops in taxes.

The first period of Egyptian history, which ended in 2181 BC is called the Old Kingdom. During it the pharaohs built pyramids. The first pyramid, the step pyramid was built by Zoser about 2665 BC. Others were built by the following pharaohs Sneferu and Khufu.

However central authority in Egypt eventually weakened. After about 1281 BC Egypt split into parts and there were civil wars between the rival areas. This period of civil disorder is called the First Intermediate Period and it lasted until 2055 BC. Finally, Mentuhotep II succeeded in reuniting Egypt and he founded the Middle Kingdom.

The Middle Kingdom lasted until 1650 BC. It was a great period of art and literature in Egypt. Furthermore, the pharaohs carried out successful military campaigns and more pyramids were built. However, the Middle Kingdom was followed by the Second Intermediate Period. At about 1650 BC Palestinian people called the Hyksos seized power in northern Egypt. They ruled from the city of Avaris. However native Egyptians continued to rule southern Egypt and in 1550 BC they drove out the Hyksos and reunited Egypt. So began the New Kingdom. It lasted from 1550 to 1070 BC. During this era, Egypt was rich and powerful once again. Egypt controlled Nubia, the land to the south and invaded Palestine and Syria. Meanwhile, great new temples were built at Thebes and pharaohs were buried in the Valley of the Kings. Then about 1364 BC, Akhenaten became pharaoh. He worshiped only the sun god Aten. However, his son Tutankhamen worshiped the old gods.

SubQuestion No : 17

Q.17 According to the passage, which of the following given option is an incorrect statement?

Ans ☒ A. Nomes were governed by Nomarches.

☒ B. After the First Intermediate Period, the native Egyptians continued to rule upper Egypt and in 1550 BC they drove out the Hyksos and reunited Egypt which began the New Kingdom.

☒ C. The Middle Kingdom was founded by Mentuhotep II and it lasted till 1650 BC.

☒ D. The Middle Kingdom unification was ended by Hyksos who sieged the Northern Egypt at about 1650.

Question ID : 2752286598

Comprehension:

Read the following information carefully and answer the given questions.

By 5,000 BC the people of Egypt had begun farming. They also wove linen and made pottery. Later they learned to use bronze. About 3,200 BC the Egyptians invented writing. The first Egyptian in history was King Menes aka Narmer who lived shortly before 3,100 BC. At that time Egypt was divided into northern (lower) Egypt and southern (upper Egypt). In 3118 BC Menes managed to unite the two. He made Memphis his capital. Ancient Egypt was a highly organized society. The country was divided into 42 areas called nomes. Each one was governed by nomarch. Farmers paid part of their crops in taxes.

The first period of Egyptian history, which ended in 2181 BC is called the Old Kingdom. During it the pharaohs built pyramids. The first pyramid, the step pyramid was built by Zoser about 2665 BC. Others were built by the following pharaohs Sneferu and Khufu.

However central authority in Egypt eventually weakened. After about 1281 BC Egypt split into parts and there were civil wars between the rival areas. This period of civil disorder is called the First Intermediate Period and it lasted until 2055 BC. Finally, Mentuhotep II succeeded in reuniting Egypt and he founded the Middle Kingdom.

The Middle Kingdom lasted until 1650 BC. It was a great period of art and literature in Egypt. Furthermore, the pharaohs carried out successful military campaigns and more pyramids were built. However, the Middle Kingdom was followed by the Second Intermediate Period. At about 1650 BC Palestinian people called the Hyksos seized power in northern Egypt. They ruled from the city of Avaris. However native Egyptians continued to rule southern Egypt and in 1550 BC they drove out the Hyksos and reunited Egypt. So began the New Kingdom. It lasted from 1550 to 1070 BC. During this era, Egypt was rich and powerful once again. Egypt controlled Nubia, the land to the south and invaded Palestine and Syria. Meanwhile, great new temples were built at Thebes and pharaohs were buried in the Valley of the Kings. Then about 1364 BC, Akhenaten became pharaoh. He worshiped only the sun god Aten. However, his son Tutankhamen worshiped the old gods.

SubQuestion No : 18

Q.18 What is the period of first civil disorder known as?

Ans

- ☒ A. The First Intermediate Period
- ☐ B. The Second Intermediate Period
- ☐ C. Middle Kingdom
- ☐ D. Old Kingdom

Question ID : 2752286595

Comprehension:

Read the following information carefully and answer the given questions.

By 5,000 BC the people of Egypt had begun farming. They also wove linen and made pottery. Later they learned to use bronze. About 3,200 BC the Egyptians invented writing. The first Egyptian in history was King Menes aka Narmer who lived shortly before 3,100 BC. At that time Egypt was divided into northern (lower) Egypt and southern (upper Egypt). In 3118 BC Menes managed to unite the two. He made Memphis his capital. Ancient Egypt was a highly organized society. The country was divided into 42 areas called nomes. Each one was governed by nomarch. Farmers paid part of their crops in taxes.

The first period of Egyptian history, which ended in 2181 BC is called the Old Kingdom. During it the pharaohs built pyramids. The first pyramid, the step pyramid was built by Zoser about 2665 BC. Others were built by the following pharaohs Sneferu and Khufu.

However central authority in Egypt eventually weakened. After about 1281 BC Egypt split into parts and there were civil wars between the rival areas. This period of civil disorder is called the First Intermediate Period and it lasted until 2055 BC. Finally, Mentuhotep II succeeded in reuniting Egypt and he founded the Middle Kingdom.

The Middle Kingdom lasted until 1650 BC. It was a great period of art and literature in Egypt. Furthermore, the pharaohs carried out successful military campaigns and more pyramids were built. However, the Middle Kingdom was followed by the Second Intermediate Period. At about 1650 BC Palestinian people called the Hyksos seized power in northern Egypt. They ruled from the city of Avaris. However native Egyptians continued to rule southern Egypt and in 1550 BC they drove out the Hyksos and reunited Egypt. So began the New Kingdom. It lasted from 1550 to 1070 BC. During this era, Egypt was rich and powerful once again. Egypt controlled Nubia, the land to the south and invaded Palestine and Syria. Meanwhile, great new temples were built at Thebes and pharaohs were buried in the Valley of the Kings. Then about 1364 BC, Akhenaten became pharaoh. He worshiped only the sun god Aten. However, his son Tutankhamen worshiped the old gods.

SubQuestion No : 19

Q.19 Under which Pharaoh's rule was the first pyramid built?

- Ans
- ☒ A. Sneferu
 - ☒ B. Menes
 - ☒ C. Khufu
 - ☒ D. Zoser

Question ID : 2752286596

Comprehension:

Read the following information carefully and answer the given questions.

By 5,000 BC the people of Egypt had begun farming. They also wove linen and made pottery. Later they learned to use bronze. About 3,200 BC the Egyptians invented writing. The first Egyptian in history was King Menes aka Narmer who lived shortly before 3,100 BC. At that time Egypt was divided into northern (lower) Egypt and southern (upper Egypt). In 3118 BC Menes managed to unite the two. He made Memphis his capital. Ancient Egypt was a highly organized society. The country was divided into 42 areas called nomes. Each one was governed by nomarch. Farmers paid part of their crops in taxes.

The first period of Egyptian history, which ended in 2181 BC is called the Old Kingdom. During it the pharaohs built pyramids. The first pyramid, the step pyramid was built by Zoser about 2665 BC. Others were built by the following pharaohs Sneferu and Khufu.

However central authority in Egypt eventually weakened. After about 1281 BC Egypt split into parts and there were civil wars between the rival areas. This period of civil disorder is called the First Intermediate Period and it lasted until 2055 BC. Finally, Mentuhotep II succeeded in reuniting Egypt and he founded the Middle Kingdom.

The Middle Kingdom lasted until 1650 BC. It was a great period of art and literature in Egypt. Furthermore, the pharaohs carried out successful military campaigns and more pyramids were built. However, the Middle Kingdom was followed by the Second Intermediate Period. At about 1650 BC Palestinian people called the Hyksos seized power in northern Egypt. They ruled from the city of Avaris. However native Egyptians continued to rule southern Egypt and in 1550 BC they drove out the Hyksos and reunited Egypt. So began the New Kingdom. It lasted from 1550 to 1070 BC. During this era, Egypt was rich and powerful once again. Egypt controlled Nubia, the land to the south and invaded Palestine and Syria. Meanwhile, great new temples were built at Thebes and pharaohs were buried in the Valley of the Kings. Then about 1364 BC, Akhenaten became pharaoh. He worshiped only the sun god Aten. However, his son Tutankhamen worshiped the old gods.

SubQuestion No : 20

Q.20 When was the Middle Kingdom founded?

- Ans
- ☒ A. 1650 BC
 - ☒ B. 2665 BC
 - ☒ C. 2055 BC
 - ☒ D. 2181 BC

Question ID : 2752286597

Section : General Hindi 1

Q.1 निम्नलिखित प्रश्न में, चार विकल्पों में से, उस विकल्प का चयन करें जो विलोम शब्द का सबसे अच्छा विकल्प है।

अवनत

- Ans
- ☒ A. नम्र
 - ☒ B. पतित
 - ☒ C. उन्नत
 - ☒ D. नीचा

Question ID : 2752286608

Q.2 निम्नलिखित प्रश्न में, चार विकल्पों में से, उस विकल्प का चयन करें जो दिए गए शब्द का तद्भव रूप हो।

निर्गलन

- Ans
- ☒ A. नारियल
 - ☒ B. नाथ
 - ☒ C. निगलना
 - ☒ D. नीचे

Question ID : 2752286605

Q.3 निम्नलिखित प्रश्न में, चार विकल्पों में से, उस विकल्प का चयन करें जो प्रत्यय से बने शब्द का सही विकल्प हो।

- Ans ☒ A. निरापद
☒ B. आज्ञा
☒ C. उलझन
☒ D. निष्फल

Question ID : 2752286603

Q.4 निम्नलिखित प्रश्न में, चार विकल्पों में से, उस विकल्प का चयन करें जो शुद्ध शब्द का सही विकल्प है।

- Ans ☒ A. आर्द्रता
☒ B. आर्दता
☒ C. आर्दता
☒ D. आर्तदता

Question ID : 2752286613

Q.5 निम्नलिखित प्रश्न में, चार विकल्पों में से, उस सही विकल्प का चयन करें जो वाक्यांशों के लिए एक शब्द का विकल्प हो।

जिसका इलाज न हो सके

- Ans ☒ A. अभियुक्त
☒ B. असाध्य
☒ C. अशक्त
☒ D. अक्षम्य

Question ID : 2752286609

Q.6 निम्नलिखित प्रश्न में, चार विकल्पों में से, उस सही विकल्प का चयन करें जो दिए गए शब्द-युग्म के अर्थ का सही विकल्प हो।

संग और संघ

- Ans ☒ A. साथ और समिति
☒ B. साथ और पसीना
☒ C. उजला और समिति
☒ D. साथ और शक

Question ID : 2752286615

Q.7 निम्नलिखित प्रश्न में, चार विकल्पों में से, उस विकल्प का चयन करें जो दिए गए शब्द के पर्यायवाची शब्द का सही विकल्प नहीं है।

मनन

- Ans ☒ A. स्मरण
☒ B. अभिष्ट
☒ C. चिंतन
☒ D. अवधारण

Question ID : 2752286607

Q.8 निम्नलिखित प्रश्न में, चार विकल्पों में से, उस विकल्प का चयन करें जो दिए गए शब्द के समानार्थी शब्द का विकल्प नहीं है।

यौवन

- Ans ☒ A. रमणी
☒ B. तरुणावस्था
☒ C. तारुण्य
☒ D. युवावस्था

Question ID : 2752286614

Q.9 निम्नलिखित प्रश्न में, चार विकल्पों में से, उस विकल्प का चयन करें जो सदैव बहुवचन रूप का सबसे अच्छा विकल्प है।

- Ans ☒ A. डिबिया
☒ B. दाव
☒ C. बात
☒ D. गौ

Question ID : 2752286617

Q.10 निम्नलिखित प्रश्न में, चार विकल्पों में से, उस सही विकल्प का चयन करें जो दिए गए शब्द के सही अर्थ का उचित विकल्प हो।

पुर और पूर

- Ans ☒ A. नगर और बाढ़
☒ B. नगर और रास्ता
☒ C. जल और बाढ़
☒ D. हाथ और बाढ़

Question ID : 2752286610

Q.11 निम्नलिखित प्रश्न में, चार विकल्पों में से, उस विकल्प का चयन करें जो दिए गए शब्द का तत्सम रूप हो।

बारह

- Ans ☒ A. द्वादश
☒ B. दधि
☒ C. नब
☒ D. द्विगुण

Question ID : 2752286604

Q.12 निम्नलिखित प्रश्न में, चार विकल्पों में से, उस विकल्प का चयन करें जो दिए गए संधि विच्छेद की संधि का सही विकल्प हो।

स्वर्ग + अवसर

- Ans ☒ A. स्वर्गावसर
☒ B. स्वर्गवासर
☒ C. स्वर्गावसर
☒ D. स्वर्गअवसर

Question ID : 2752286599

Q.13 निम्नलिखित प्रश्न में, चार विकल्पों में से, उस विकल्प का चयन करें जो सदैव पुल्लिंग रूप वाला विकल्प नहीं है।

- Ans
- ☒ A. दिमाग
 - ☒ B. मक्खन
 - ☒ C. कुरान
 - ☒ D. चिकित्सा

Question ID : 2752286616

Q.14 निम्नलिखित प्रश्न में, चार विकल्पों में से, उस विकल्प का चयन करें जो देशज शब्द का सही विकल्प हो।

- Ans
- ☒ A. चटपट
 - ☒ B. सरदार
 - ☒ C. चेचक
 - ☒ D. हार

Question ID : 2752286606

Q.15 निम्नलिखित प्रश्न में, चार विकल्पों में से, उस विकल्प का चयन करें जो कोष्ठक में दिए गए शब्द के अनुसार अन्य पुरुष वाचक सर्वनाम का सबसे अच्छा विकल्प है।

- Ans
- ☒ A. (आपने) हमारी सहायता की उसके लिए धन्यवाद।
 - ☒ B. (मुझे) आज ही यह गृहकार्य पूरा कर के देना है
 - ☒ C. (उसे) काम पूरा कर देना चाहिए था।
 - ☒ D. (हमें) कहीं भी नहीं जाना है।

Question ID : 2752286618

Q.16 निम्नलिखित प्रश्न में, चार विकल्पों में से, उस सही विकल्प का चयन करें जो रिक्त स्थान के लिए उपयुक्त शब्द का सही विकल्प है।

भयंकर गर्मी के कारण सभी _____ सुख गये हैं।

- Ans
- ☒ A. श्रोत
 - ☒ B. स्वक्ष
 - ☒ C. स्रोत
 - ☒ D. शौर्य

Question ID : 2752286611

Q.17 निम्नलिखित प्रश्न में, चार विकल्पों में से, उस विकल्प का चयन करें जो दिए गए शब्द के लिए सही बहुव्रीहि समास के विग्रह का विकल्प हो।

चौलड़ी

- Ans
- ☒ A. चार की लड़ी
 - ☒ B. चार लड़ी
 - ☒ C. चार हैं लड़ियाँ जिसकी
 - ☒ D. चार जैसी लड़ी

Question ID : 2752286601

Q.18 निम्नलिखित प्रश्न में, चार विकल्पों में से, उस विकल्प का चयन करें जो शुद्ध शब्द का सही विकल्प है।

- Ans ☒ A. दस्तावेज़
☐ B. दस्ताबेज
☐ C. दसत्बेज
☐ D. दशात्बेज

Question ID : 2752286612

Q.19 निम्नलिखित प्रश्न में, चार विकल्पों में से, उस विकल्प का चयन करें जो उपसर्ग से बने शब्द का सही विकल्प हो।

- Ans ☐ A. घुटन
☐ B. छिडकाव
☒ C. अभिकरण
☐ D. घिरनी

Question ID : 2752286602

Q.20 निम्नलिखित प्रश्न में, चार विकल्पों में से, उस विकल्प का चयन करें जो दिए गए शब्द के सही संधि विच्छेद का विकल्प हो।

पुष्पावली

- Ans ☐ A. पुष्प + वली
☐ B. पुष्प + आवली
☐ C. पुष्पा + वाली
☒ D. पुष्प + अवली

Question ID : 2752286600

Section : General Hindi2

Q.1 निम्नलिखित प्रश्न में, चार विकल्पों में से, उस विकल्प का चयन करें जो दी गई मुहावरे का सही अर्थ वाला विकल्प है।

गुलर का फूल होना

- Ans ☐ A. क्रोध दबाना
☐ B. सुस्त चलना
☐ C. डींग हकना
☒ D. लापता होना

Question ID : 2752286631

Q.2 निम्नलिखित प्रश्न में, चार विकल्पों में से, उस विकल्प का चयन करें जो दी गई मुहावरे का सही अर्थ वाला विकल्प है।

घाव हरा होना

- Ans ☒ A. भुला हुआ दुःख पुनः याद आना
☐ B. सहायता करना
☐ C. तसल्ली देना
☐ D. समृद्ध होना

Question ID : 2752286632

Q.3 निम्नलिखित प्रश्न में, चार विकल्पों में से, उस विकल्प का चयन करें जो दिए गए लोकोक्ति का सही अर्थ वाला विकल्प है।

समर्थ को नहीं दोष गोसाईं

- Ans ☒ A. धैर्य से किया गया काम
☒ B. सच्चे आदमी को कोई खतरा नहीं होता है
☒ C. कुछ भी न सीख पाना
☒ D. समर्थ आदमी का दोष नहीं देखा जाता है

Question ID : 2752286629

Q.4 निम्नलिखित प्रश्न में, चार विकल्पों में से, उस विकल्प का चयन करें जो शुद्ध वाक्य का सबसे अच्छा विकल्प है।

- Ans ☒ A. अपनी सुन्दरता और कारीगरी के कारण ताजमहल पूरे विश्व से प्रसिद्ध है।
☒ B. अपनी सुन्दरता और कारीगरी के कारण ताजमहल पूरे विश्व भारत में प्रसिद्ध है।
☒ C. अपनी सुन्दरता और कारीगरी के कारण ताजमहल पूरे विश्व में प्रसिद्ध है।
☒ D. अपनी सुन्दरता और कारीगरी पर ताजमहल पूरे विश्व में प्रसिद्ध है।

Question ID : 2752286622

Q.5 निम्नलिखित प्रश्न में, चार विकल्पों में से, उस विकल्प का चयन करें जो विराम चिह्न युक्त वाक्य का सही विकल्प हो।

- Ans ☒ A. दैत्य ने कहा, मैं तैयार हूँ। तुम कब, कहा और किस तरह लड़ना चाहते हो, तय कर लो।
☒ B. दैत्य ने कहा, "मैं तैयार हूँ। तुम कब, कहाँ और किस तरह लड़ना चाहते हो, तय कर लो।"
☒ C. दैत्य ने कहा, मैं तैयार हूँ, तुम कब, कहा और किस तरह लड़ना चाहते हो, तय कर लो?
☒ D. दैत्य ने कहा मैं तैयार हूँ तुम कब कहा और किस तरह लड़ना चाहते हो, तय कर लो।

Question ID : 2752286627

Q.6 निम्नलिखित प्रश्न में, चार विकल्पों में से, उस विकल्प का चयन करें जो विराम चिह्न युक्त वाक्य का सही विकल्प हो।

- Ans ☒ A. "ओह! तुम तो सारी गंदी चीजे ही बटोर रहे हो।" दोनों भाइयों ने कहा।
☒ B. ओह तुम तो सारी गंदी चीजे ही बटोर रहे हो" दोनों भाइयों ने कहा।
☒ C. "ओह! तुम तो सारी गंदी चीजे ही बटोर रहे हो।" दोनों भाइयों ने कहा?
☒ D. "ओह! तुम तो सारी गंदी चीजे ही बटोर रहे हो-" दोनों भाइयों ने कहा।

Question ID : 2752286626

Q.7 निम्नलिखित प्रश्न में, चार विकल्पों में से, उस विकल्प का चयन करें जो दी गई मुहावरे का सही अर्थ वाला विकल्प है।

चांदी काटना

- Ans ☒ A. धोखे में पड़ना
☒ B. थोड़े दिन का सुख
☒ C. आय से ज्यादा व्यय करना
☒ D. खूब आमदनी करना

Question ID : 2752286633

Q.8 निम्नलिखित प्रश्न में, चार विकल्पों में से, उस विकल्प का चयन करें जो दिए गए लोकोक्ति का सही अर्थ वाला विकल्प है।

सौ दिन चोर के एक दिन साहूकार का

- Ans ☒ A. परिस्थिति को न समझना
☒ B. चोरी एक न एक दिन खुल ही जाती है
☒ C. कुछ भी न सीख पाना
☒ D. बढ़ कर टक्कर देना

Question ID : 2752286628

Q.9 निम्नलिखित प्रश्न में, चार विकल्पों में से, उस विकल्प का चयन करें जो विराम चिह्न युक्त वाक्य का सही विकल्प हो।

- Ans ☒ A. सियार अकड़कर बोला, "अच्छा मामू! तुम यही ठहरो। मैं उसे देखकर आता हूँ ?
☒ B. सियार अकड़कर बोला, "अच्छा मामू! तुम यहीं ठहरो। मैं उसे देखकर आता हूँ।"
☒ C. सियार अकड़कर बोला- अच्छा मामू! तुम यही ठहरो मैं उसे देखकर आता हूँ
☒ D. सियार अकड़कर बोला अच्छा मामू तुम यही ठहरो मैं उसे देखकर आता हूँ

Question ID : 2752286625

Q.10 निम्नलिखित प्रश्न में, चार विकल्पों में से, उस विकल्प का चयन करें जो सही वाक्य भेद का विकल्प हो।

जो औरत वह बैठी है वो मेरी माँ है।

- Ans ☒ A. मिश्र वाक्य
☒ B. संयुक्त वाक्य
☒ C. प्रश्नवाचक वाक्य
☒ D. सरल वाक्य

Question ID : 2752286623

Q.11 निम्नलिखित प्रश्न में, चार विकल्पों में से, उस विकल्प का चयन करें जो दिए गए लोकोक्ति का सही अर्थ वाला विकल्प है।

रस्सी जल गई पर ऐठ न गई

- Ans ☒ A. घमंड का खत्म न होना
☒ B. छोटी चीज का बड़े काम में लाना
☒ C. सीमित दायरा
☒ D. कठिन काम कोई नहीं करना चाहता है

Question ID : 2752286630

Q.12 निम्नलिखित प्रश्न में, चार विकल्पों में से, उस विकल्प का चयन करें जो दिए गए वाक्य के लिए पक्ष के भेद का सबसे अच्छा विकल्प है।

राज कितना अच्छा लिख रहा है!

- Ans ☒ A. नित्यताद्योतक
☒ B. आरंभद्योतक
☒ C. अभ्यासद्योतक
☒ D. सातप्यबोधक

Question ID : 2752286621

Q.13 निम्नलिखित प्रश्न में, चार विकल्पों में से, उस विकल्प का चयन करें जो दिए गए वाक्य के लिए वृत्ति के भेद का सबसे अच्छा विकल्प है।

कृपया बाजार तक जाने का रास्ता बताइए।

- Ans ☒ A. विध्यर्थ
☒ B. संदेहार्थ
☒ C. संकेतार्थ
☒ D. निश्चयार्थ

Question ID : 2752286620

Q.14 निम्नलिखित प्रश्न में, चार विकल्पों में से, उस विकल्प का चयन करें जो सही वाक्य भेद का विकल्प हो।

मैं बहुत तेज दौड़ा फिर भी बस नहीं पकड़ सका।

- Ans ☒ A. संयुक्त वाक्य
☒ B. मिश्र वाक्य
☒ C. सरल वाक्य
☒ D. विधानवाचक वाक्य

Question ID : 2752286624

Q.15 निम्नलिखित प्रश्न में, चार विकल्पों में से, उस विकल्प का चयन करें जो दिए गए वाक्य के काल का सही विकल्प हो।

वह गाये तो मैं भी गाऊं।

- Ans ☒ A. सामान्य भविष्यकाल
☒ B. आसन्न भूतकाल
☒ C. सामान्य भूतकाल
☒ D. हेतुहेतुमद भविष्यकाल

Question ID : 2752286619

Comprehension:

निम्नलिखित गद्यांश को ध्यानपूर्वक पढ़िए और दिए गए प्रश्नों के उत्तर दीजिए।

हम अपने कार्यों को देश के अनुकूल होने की कसौटी पर कसकर चलने की आदत डालें, यह बहुत उचित है, बहुत सुंदर है, पर हम इसमें तभी सफल होंगे जब तक हम अपने देश की भीतरी दशा को ठीक-ठाक न समझ लें। हमारे देश को दो बातों की सबसे ज्यादा जरूरत है। एक शक्ति-बोध और दूसरा सौंदर्य-बोध! बस, हम यह समझ लें कि हमारा कोई भी काम ऐसा न हो जो देश में कमजोरी की भावना को बल दे। जब हम कभी भी ऐसी चर्चा करते हैं कि हमारे देश में यह नहीं हो रहा है, वह नहीं हो रहा है। अपने देश को हीन और दूसरे देशों को श्रेष्ठ सिद्ध करते हैं। इन सब कार्यों से हम देश के शक्ति बोध को भयंकर चोट पहुँचा रहे हैं और देश के सामूहिक मानसिक बल का ह्रास हो रहा है। जब हम मुँह से गंदे शब्दों का उपयोग करते हैं। अपना घर, दफ्तर, गली गंदी रखते हैं। वचन देकर भी पूरा नहीं करते और इसी तरह किसी भी रूप में जब सुरुचि और सौंदर्य को हमारे किसी काम से ठेस लगती है। तो हमारे द्वारा देश के सौंदर्य-बोध को भयंकर आघात लग रहा है और हमारे द्वारा देश की संस्कृति को गहरी चोट पहुँच रही है।

SubQuestion No : 16

Q.16 इनमें से कौन - सा शब्द आघात का समानार्थी शब्द नहीं है?

- Ans ☒ A. संकट
☒ B. प्रहार
☒ C. चोट
☒ D. आहुति

Question ID : 2752286638

Comprehension:

निम्नलिखित गद्यांश को ध्यानपूर्वक पढ़िए और दिए गए प्रश्नों के उत्तर दीजिए।

हम अपने कार्यों को देश के अनुकूल होने की कसौटी पर कसकर चलने की आदत डालें, यह बहुत उचित है, बहुत सुंदर है, पर हम इसमें तभी सफल होंगे जब तक हम अपने देश की भीतरी दशा को ठीक-ठाक न समझ लें। हमारे देश को दो बातों की सबसे ज्यादा जरूरत है। एक शक्ति-बोध और दूसरा सौंदर्य-बोध! बस, हम यह समझ लें कि हमारा कोई भी काम ऐसा न हो जो देश में कमजोरी की भावना को बल दे। जब हम कभी भी ऐसी चर्चा करते हैं कि हमारे देश में यह नहीं हो रहा है, वह नहीं हो रहा है। अपने देश को हीन और दूसरे देशों को श्रेष्ठ सिद्ध करते हैं। इन सब कार्यों से हम देश के शक्ति बोध को भयंकर चोट पहुँचा रहे हैं और देश के सामूहिक मानसिक बल का हास हो रहा है। जब हम मुँह से गंदे शब्दों का उपयोग करते हैं। अपना घर, दफ्तर, गली गंदी रखते हैं। वचन देकर भी पूरा नहीं करते और इसी तरह किसी भी रूप में जब सुरुचि और सौंदर्य को हमारे किसी काम से ठेस लगती है। तो हमारे द्वारा देश के सौंदर्य-बोध को भयंकर आघात लग रहा है और हमारे द्वारा देश की संस्कृति को गहरी चोट पहुँच रही है।

SubQuestion No : 17

Q.17 इस अनुच्छेद का कोई उपयुक्त शीर्षक:

- Ans
- ☐ A. देश और लोग
 - ☐ B. देश की कमियाँ
 - ☐ C. देश की तुलना
 - ☒ D. हमारा देश और हमारा दायित्व

Question ID : 2752286639

Comprehension:

निम्नलिखित गद्यांश को ध्यानपूर्वक पढ़िए और दिए गए प्रश्नों के उत्तर दीजिए।

हम अपने कार्यों को देश के अनुकूल होने की कसौटी पर कसकर चलने की आदत डालें, यह बहुत उचित है, बहुत सुंदर है, पर हम इसमें तभी सफल होंगे जब तक हम अपने देश की भीतरी दशा को ठीक-ठाक न समझ लें। हमारे देश को दो बातों की सबसे ज्यादा जरूरत है। एक शक्ति-बोध और दूसरा सौंदर्य-बोध! बस, हम यह समझ लें कि हमारा कोई भी काम ऐसा न हो जो देश में कमजोरी की भावना को बल दे। जब हम कभी भी ऐसी चर्चा करते हैं कि हमारे देश में यह नहीं हो रहा है, वह नहीं हो रहा है। अपने देश को हीन और दूसरे देशों को श्रेष्ठ सिद्ध करते हैं। इन सब कार्यों से हम देश के शक्ति बोध को भयंकर चोट पहुँचा रहे हैं और देश के सामूहिक मानसिक बल का हास हो रहा है। जब हम मुँह से गंदे शब्दों का उपयोग करते हैं। अपना घर, दफ्तर, गली गंदी रखते हैं। वचन देकर भी पूरा नहीं करते और इसी तरह किसी भी रूप में जब सुरुचि और सौंदर्य को हमारे किसी काम से ठेस लगती है। तो हमारे द्वारा देश के सौंदर्य-बोध को भयंकर आघात लग रहा है और हमारे द्वारा देश की संस्कृति को गहरी चोट पहुँच रही है।

SubQuestion No : 18

Q.18 हम अपने देश के शक्ति-बोध को किस प्रकार नुकसान पहुंचाते हैं?

- Ans
- ☐ A. देश की कमजोरी की भावना को बल न देकर
 - ☒ B. देश की कमियों को बताना दूसरे देश से तुलना करना
 - ☐ C. किसी भी प्रकार की चर्चा न करके
 - ☐ D. सबसे देश की तारीफ करना

Question ID : 2752286636

Comprehension:

निम्नलिखित गद्यांश को ध्यानपूर्वक पढ़िए और दिए गए प्रश्नों के उत्तर दीजिए।

हम अपने कार्यों को देश के अनुकूल होने की कसौटी पर कसकर चलने की आदत डालें, यह बहुत उचित है, बहुत सुंदर है, पर हम इसमें तभी सफल होंगे जब तक हम अपने देश की भीतरी दशा को ठीक-ठाक न समझ लें। हमारे देश को दो बातों की सबसे ज्यादा जरूरत है। एक शक्ति-बोध और दूसरा सौंदर्य-बोध! बस, हम यह समझ लें कि हमारा कोई भी काम ऐसा न हो जो देश में कमजोरी की भावना को बल दे। जब हम कभी भी ऐसी चर्चा करते हैं कि हमारे देश में यह नहीं हो रहा है, वह नहीं हो रहा है। अपने देश को हीन और दूसरे देशों को श्रेष्ठ सिद्ध करते हैं। इन सब कार्यों से हम देश के शक्ति बोध को भयंकर चोट पहुँचा रहे हैं और देश के सामूहिक मानसिक बल का हास हो रहा है। जब हम मुँह से गंदे शब्दों का उपयोग करते हैं। अपना घर, दफ्तर, गली गंदी रखते हैं। वचन देकर भी पूरा नहीं करते और इसी तरह किसी भी रूप में जब सुरुचि और सौंदर्य को हमारे किसी काम से ठेस लगती है। तो हमारे द्वारा देश के सौंदर्य-बोध को भयंकर आघात लग रहा है और हमारे द्वारा देश की संस्कृति को गहरी चोट पहुँच रही है।

SubQuestion No : 19

Q.19 अनुच्छेद के अपने कार्यों को देश की कसौटी पर कसकर करने का क्या अर्थ है?

- Ans**
- ☒ A. अपने अनुसार कार्य करना
 - ☒ B. सबसे पहले अपने हित की सोचना
 - ☒ C. ऐसे कार्यों को करना जिसमें देश का अहित हो
 - ☒ D. ऐसे कार्यों को नहीं करना जिससे अपने देश का अहित हो

Question ID : 2752286635

Comprehension:

निम्नलिखित गद्यांश को ध्यानपूर्वक पढ़िए और दिए गए प्रश्नों के उत्तर दीजिए।

हम अपने कार्यों को देश के अनुकूल होने की कसौटी पर कसकर चलने की आदत डालें, यह बहुत उचित है, बहुत सुंदर है, पर हम इसमें तभी सफल होंगे जब तक हम अपने देश की भीतरी दशा को ठीक-ठाक न समझ लें। हमारे देश को दो बातों की सबसे ज्यादा जरूरत है। एक शक्ति-बोध और दूसरा सौंदर्य-बोध! बस, हम यह समझ लें कि हमारा कोई भी काम ऐसा न हो जो देश में कमजोरी की भावना को बल दे। जब हम कभी भी ऐसी चर्चा करते हैं कि हमारे देश में यह नहीं हो रहा है, वह नहीं हो रहा है। अपने देश को हीन और दूसरे देशों को श्रेष्ठ सिद्ध करते हैं। इन सब कार्यों से हम देश के शक्ति बोध को भयंकर चोट पहुँचा रहे हैं और देश के सामूहिक मानसिक बल का हास हो रहा है। जब हम मुँह से गंदे शब्दों का उपयोग करते हैं। अपना घर, दफ्तर, गली गंदी रखते हैं। वचन देकर भी पूरा नहीं करते और इसी तरह किसी भी रूप में जब सुरुचि और सौंदर्य को हमारे किसी काम से ठेस लगती है। तो हमारे द्वारा देश के सौंदर्य-बोध को भयंकर आघात लग रहा है और हमारे द्वारा देश की संस्कृति को गहरी चोट पहुँच रही है।

SubQuestion No : 20

Q.20 देश की संस्कृति को गहरी चोट कब लगती है?

- Ans**
- ☒ A. जब देश के शक्ति बोध को भयंकर चोट लगती है
 - ☒ B. जब हम अपने कार्यों को सुचारुरूप से करते हैं
 - ☒ C. जब सबकुछ ठीक-ठाक चलता है
 - ☒ D. जब देश के सौंदर्य-बोध को भयंकर आघात पहुँचता है

Question ID : 2752286637