

Catalog

4 August 2021 1st.....	1
4 August 2021 2nd.....	33
4 August 2021 3rd.....	63
5 August 2021 1st.....	90
5 August 2021 2nd.....	121
5 August 2021 3rd.....	152
6 August 2021 1st.....	183
6 August 2021 2nd.....	214
6 August 2021 3rd.....	247
9 August 2021 1st.....	279
9 August 2021 2nd.....	311
9 August 2021 3rd.....	344
10 August 2021 1st.....	377
10 August 2021 2nd.....	410
10 August 2021 3rd.....	442
11 August 2021 1st.....	473
11 August 2021 2nd.....	504
11 August 2021 3rd.....	536
12 August 2021 1st.....	568
12 August 2021 2nd.....	599
12 August 2021 3rd.....	632

Combined Higher Secondary Level Examination 2020 (Tier-I)

Roll Number	Join Telegram: HaryanaJobs.in
Candidate Name	
Venue Name	
Exam Date	04/08/2021
Exam Time	9:00 AM - 10:00 AM
Subject	Combined Higher Secondary Level Exam 2020

Section : English Language

Q.1 Select the most appropriate option to substitute the underlined segment in the given sentence. If there is no need to substitute it, select 'No substitution'.

If he doesn't reach the station in time, he would sure miss the train.

- Ans
- ☒ 1. would surely miss
 - ☒ 2. No substitution
 - ☒ 3. will sure missing
 - ☒ 4. will surely miss

Question ID : 6549789568

Status : Answered

Chosen Option : 4

Q.2 Select the most appropriate option to fill in the blank.

It is claimed that if you take a certain homeopathic medicine, it will _____ you against the coronavirus.

- Ans
- ☒ 1. shelter
 - ☒ 2. immune
 - ☒ 3. reinforce
 - ☒ 4. fortify

Question ID : 6549789579

Status : Answered

Chosen Option : 2

Q.3 Select the most appropriate synonym of the given word.

WRY

- Ans
- ☒ 1. straight
 - ☒ 2. frank
 - ☒ 3. forthright
 - ☒ 4. crooked

Question ID : 6549789577

Status : Not Answered

Chosen Option : --

Q.4 In the given sentence, identify the segment which contains the grammatical error.

My mother generally read the local newspaper to keep abreast of the local news.

- Ans
- ☒ 1. the local newspaper
 - ☒ 2. of the local news
 - ☒ 3. My mother generally read
 - ☒ 4. to keep abreast

Question ID : 6549789557
Status : Answered
Chosen Option : 3

Q.5 Select the most appropriate ANTONYM of the given word.

SUSTENANCE

- Ans
- ☒ 1. refreshment
 - ☒ 2. livelihood
 - ☒ 3. starvation
 - ☒ 4. nourishment

Question ID : 6549789065
Status : Not Answered
Chosen Option : --

Q.6 Select the INCORRECTLY spelt word.

- Ans
- ☒ 1. superior
 - ☒ 2. superstition
 - ☒ 3. superfluous
 - ☒ 4. supreme

Question ID : 6549789574
Status : Answered
Chosen Option : 3

Q.7 Select the option that will improve the underlined segment in the given sentence. In case no improvement is needed, select 'No improvement'

What a palace home!

- Ans
- ☒ 1. pushy
 - ☒ 2. palatial
 - ☒ 3. palatable
 - ☒ 4. No improvement

Question ID : 6549789062
Status : Answered
Chosen Option : 2

Q.8 Select the most appropriate synonym of the given word.

MALIGNANT

- Ans ☒ 1. vicious
☐ 2. beneficial
☐ 3. loving
☐ 4. healthy

Question ID : 6549789073
Status : Not Answered
Chosen Option : --

Q.9 Select the most appropriate meaning of the given idiom.

Under wraps

- Ans ☐ 1. under estimate
☐ 2. double layered
☒ 3. secretly
☐ 4. underhand

Question ID : 6549789067
Status : Answered
Chosen Option : 3

Q.10 Select the most appropriate ANTONYM of the given word.

DEVIOUS

- Ans ☐ 1. Deceitful
☐ 2. shrewd
☒ 3. straight
☐ 4. calculating

Question ID : 6549789569
Status : Not Answered
Chosen Option : --

Q.11 Select the correct indirect form of the given sentence.

Anju said to Vijaya, "You can stay with us whenever you are in Delhi."

- Ans ☒ 1. Anju told Vijaya that she could stay with them whenever she was in Delhi.
☐ 2. Anju told Vijaya that she could stay with them whenever you were in Delhi.
☐ 3. Anju told Vijaya that she can stay with us whenever she is in Delhi.
☐ 4. Anju told Vijaya that you can stay with us whenever you are in Delhi.

Question ID : 6549789556
Status : Answered
Chosen Option : 1

Q.12 Select the option which means the same as the group of words given.

A government run by the wealthy people

- Ans
- ☒ 1. oligarchy
 - ☒ 2. monarchy
 - ☒ 3. plutocracy
 - ☒ 4. aristocracy

Question ID : 6549789576

Status : Answered

Chosen Option : 4

Q.13 Select the correct passive form of the given sentence.

The Central Board of Secondary Education has launched a new helpline for students.

- Ans
- ☒ 1. A new helpline for students is launched by the Central Board of Secondary Education.
 - ☒ 2. A new helpline for students will be launched by the Central Board of Secondary Education.
 - ☒ 3. A new helpline for students had been launched by the Central Board of Secondary Education.
 - ☒ 4. A new helpline for students has been launched by the Central Board of Secondary Education.

Question ID : 6549789050

Status : Answered

Chosen Option : 4

Q.14 Given below are four jumbled sentences. Out of the given options, pick the one that gives their correct order.

- A. He lived in a small house near the main road of a village.
- B. As both, he and his wife, worked hard, they made a small fortune.
- C. But one thing caused them great sorrow: they had no children.
- D. After he got married, he started a tailor's shop.

- Ans
- ☒ 1. ABDC
 - ☒ 2. BDAC
 - ☒ 3. ADBC
 - ☒ 4. BACD

Question ID : 6549789565

Status : Answered

Chosen Option : 3

Q.15 Select the most appropriate word to fill in the blank.

Debjyoti's short animation film _____ highlights the stark contrast between the rich and the poor in India.

- Ans
- ☒ 1. poignantly
 - ☐ 2. strictly
 - ☐ 3. carelessly
 - ☐ 4. sweetly

Question ID : 6549789075
Status : Answered
Chosen Option : 2

Q.16 Select the most appropriate meaning of the given idiom.

On tenterhooks

- Ans
- ☐ 1. Very sad
 - ☒ 2. Very tense
 - ☐ 3. Very happy
 - ☐ 4. very angry

Question ID : 6549789571
Status : Not Answered
Chosen Option : --

Q.17 Select the INCORRECTLY spelt word.

- Ans
- ☐ 1. disappear
 - ☐ 2. until
 - ☒ 3. twelfth
 - ☐ 4. temperature

Question ID : 6549789068
Status : Answered
Chosen Option : 3

Q.18 Examine the four jumbled sentences. Out of the given options, pick the one that gives their correct order.

- A. We gently put the fledgling back into the nest.
- B. One morning, we found one of the four fallen on the ground.
- C. The robin couple built a nest in our verandah and laid four eggs.
- D. Once they had hatched, they busily took turns feeding the four.

- Ans
- ☒ 1. CDBA
 - ☐ 2. ACDB
 - ☐ 3. BADC
 - ☐ 4. DABC

Question ID : 6549789061
Status : Answered
Chosen Option : 1

Q.19 Select the word which means the same as the group of words given.

That which is incapable of being read or understood

- Ans
- ☒ 1. Indelible
 - ☒ 2. Illegible
 - ☒ 3. Illegal
 - ☒ 4. Intelligible

Question ID : 6549789070
Status : Answered
Chosen Option : 2

Q.20 The following sentence has been split into four segments. Identify the segment which contains a grammatical error.

Deepu's mother / has repeated asked him / to lower the volume / of his mobile.

- Ans
- ☒ 1. has repeated asked him
 - ☒ 2. to lower the volume
 - ☒ 3. of his mobile
 - ☒ 4. Deepu's mother

Question ID : 6549789053
Status : Answered
Chosen Option : 1

Comprehension:

In the following passage, some words have been deleted. Fill in the blanks with the help of the alternatives given. Select the most appropriate option for each blank.

A year is hardly sufficient time for a Master to (1) _____ about a new school, leave alone absorb a distinct tradition like (2) _____. Most of the new appointees had not served in a residential school and (3) _____ time to learn. But the short tenure did not allow (4) _____. They could not develop understanding of the student and his (5) _____.

SubQuestion No : 21

Q.21 Select the most appropriate option for blank No. 1.

- Ans
- ☒ 1. learnt
 - ☒ 2. learn
 - ☒ 3. learns
 - ☒ 4. learning

Question ID : 6549789055
Status : Answered
Chosen Option : 2

Comprehension:

In the following passage, some words have been deleted. Fill in the blanks with the help of the alternatives given. Select the most appropriate option for each blank.

A year is hardly sufficient time for a Master to (1) _____ about a new school, leave alone absorb a distinct tradition like (2) _____. Most of the new appointees had not served in a residential school and (3) _____ time to learn. But the short tenure did not allow (4) _____. They could not develop understanding of the student and his (5) _____.

SubQuestion No : 22

Q.22 Select the most appropriate option for blank No. 2.

- Ans
- ☒ 1. ourselves
 - ☒ 2. himself
 - ☒ 3. mine
 - ☒ 4. ours

Question ID : **6549789056**

Status : **Answered**

Chosen Option : **1**

Comprehension:

In the following passage, some words have been deleted. Fill in the blanks with the help of the alternatives given. Select the most appropriate option for each blank.

A year is hardly sufficient time for a Master to (1) _____ about a new school, leave alone absorb a distinct tradition like (2) _____. Most of the new appointees had not served in a residential school and (3) _____ time to learn. But the short tenure did not allow (4) _____. They could not develop understanding of the student and his (5) _____.

SubQuestion No : 23

Q.23 Select the most appropriate option for blank No. 3.

- Ans
- ☒ 1. needing
 - ☒ 2. need
 - ☒ 3. needed
 - ☒ 4. needs

Question ID : **6549789057**

Status : **Answered**

Chosen Option : **2**

Comprehension:

In the following passage, some words have been deleted. Fill in the blanks with the help of the alternatives given. Select the most appropriate option for each blank.

A year is hardly sufficient time for a Master to (1) _____ about a new school, leave alone absorb a distinct tradition like (2) _____. Most of the new appointees had not served in a residential school and (3) _____ time to learn. But the short tenure did not allow (4) _____. They could not develop understanding of the student and his (5) _____.

SubQuestion No : 24

Q.24 Select the most appropriate option for blank No. 4.

- Ans
- ☒ 1. them
 - ☒ 2. those
 - ☒ 3. these
 - ☒ 4. that

Question ID : **6549789058**

Status : **Answered**

Chosen Option : **1**

Comprehension:

In the following passage, some words have been deleted. Fill in the blanks with the help of the alternatives given. Select the most appropriate option for each blank.

A year is hardly sufficient time for a Master to (1) _____ about a new school, leave alone absorb a distinct tradition like (2) _____. Most of the new appointees had not served in a residential school and (3) _____ time to learn. But the short tenure did not allow (4) _____. They could not develop understanding of the student and his (5) _____.

SubQuestion No : 25

Q.25 Select the most appropriate option for blank No. 5.

- Ans
- ☒ 1. environmentalist
 - ☒ 2. environmental
 - ☒ 3. environment
 - ☒ 4. environmentally

Question ID : **6549789059**

Status : **Answered**

Chosen Option : **3**

Section : **General Intelligence**





Q.1 Read the given statements and conclusions carefully. Assuming that the information given in the statements is true, even if it appears to be at variance with commonly known facts, decide which of the given conclusions logically follow(s) from the statements.

Statements:

All computers are machines.
No television is a computer.
All televisions are instruments.

Conclusions:

I. Some instruments are machines.
II. Some machines are computers.
III. Some televisions are machines.

- Ans**  1. Only conclusion II follows.
-  2. Only conclusion I follows.
-  3. Only conclusions II and III follow.
-  4. None of the conclusions follow.





Question ID : 6549789093

Status : Answered

Chosen Option : 1

Q.2 Select the combination of letters that when sequentially placed in the blanks of the given letter series will complete the series.

a _ bcde _ abbcd _ aabb _ ee

- Ans**  1. aeaebecd
-  2. aeecdbea
-  3. abeaeeed
-  4. abecdeae





Question ID : 6549788785

Status : Answered

Chosen Option : 3

Q.3 Select the option in which the words share the same relationship as that shared by the given pair of words.

Ammeter : Electric current

- Ans**  1. Density : Lactometer
-  2. Pressure : Barometer
-  3. Hygrometer : Humidity
-  4. Polarimeter : Steps

Question ID : 6549789595

Status : Answered

Chosen Option : 3

Q.4 'Straw' is related to 'Nest' in the same way as 'Cotton' is related to '_____'.
 Ans

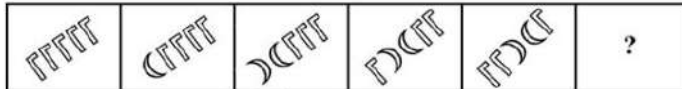
- ☒ 1. Textile industry
- ☒ 2. Thread
- ☒ 3. Sewing
- ☒ 4. Wool

Question ID : 6549789087

Status : Answered

Chosen Option : 3

Q.5 Select the figure from among the given options that can replace the question mark (?) in the following series.



Ans

- ☒ 1.
- ☒ 2.
- ☒ 3.
- ☒ 4.

Question ID : 6549789600

Status : Answered

Chosen Option : 3

Q.6 The sales boy of a washing machine store charges his customers 24% more than the cost price. If a customer paid ₹6,200 for a washing machine, then what was the cost price of the washing machine?

- Ans
- ☒ 1. ₹5,500
 - ☒ 2. ₹5,000
 - ☒ 3. ₹6,200
 - ☒ 4. ₹7,200

Question ID : 6549789581

Status : Answered

Chosen Option : 2

Q.7 Study the given pattern carefully and select the number that can replace the question mark (?) in it.

28 16 27
44 16 15
84 ? 24

- Ans
- ☒ 1. 27
 - ☒ 2. 30
 - ☒ 3. 28
 - ☒ 4. 29

Question ID : **6549789585**

Status : **Not Answered**

Chosen Option : --

Q.8 Select the option that is related to the third number in the same way as the second number is related to the first number.

12 : 150 :: 14 : ?

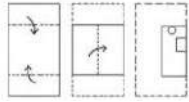
- Ans
- ☒ 1. 203
 - ☒ 2. 502
 - ☒ 3. 302
 - ☒ 4. 205

Question ID : **6549789583**

Status : **Answered**

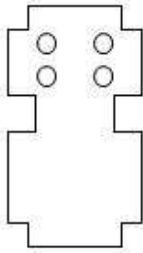
Chosen Option : 1

Q.9 The sequence of folding a piece of paper and the manner in which the folded paper has been cut is shown in the following figures. How would this paper look when unfolded?

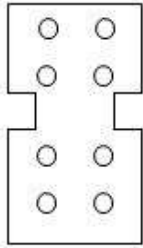


Ans

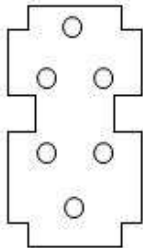
✓ 1.



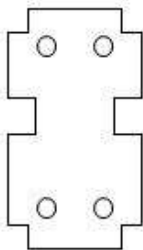
✗ 2.



✗ 3.



✗ 4.



Question ID : 6549789098

Status : Answered

Chosen Option : 1

Q.10 Select the number from among the given options that can replace the question mark (?) in the following series.

3, 5, 15, 41, ?, 173

Ans ✓ 1. 91

✗ 2. 112

✗ 3. 78

✗ 4. 106

Question ID : 6549789081

Status : Answered

Chosen Option : 1

Q.11 Four letter-clusters have been given, out of which three are alike in some manner and one is different. Select the letter-cluster that is different.

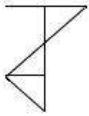
- Ans ☒ 1. NRJQ
☒ 2. DHSZ
☒ 3. TXCJ
☒ 4. GKPW

Question ID : 6549789596

Status : Not Answered

Chosen Option : --

Q.12 Select the option in which the given figure is embedded (rotation is NOT allowed).



Ans

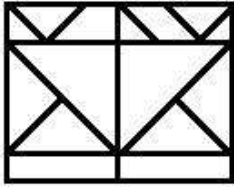
- ☒ 1.
- ☒ 2.
- ☒ 3.
- ☒ 4.

Question ID : 6549789097

Status : Answered

Chosen Option : 1

Q.13 Find the number of triangles in the given figure.



- Ans
- ☒ 1. 15
 - ☒ 2. 11
 - ☒ 3. 14
 - ☒ 4. 13

Question ID : 6549789601
Status : Answered
Chosen Option : 3

Q.14 In a certain code language, FORWARD is written as CSZXQPE. How will NUMERAL be written in that language?

- Ans
- ☒ 1. MZSDNTO
 - ☒ 2. KZQDLTL
 - ☒ 3. KBQFLVM
 - ☒ 4. MUNELAR

Question ID : 6549789084
Status : Answered
Chosen Option : 3

Q.15 Which two signs should be interchanged to make the following equation correct?

$$12 - 8 + 4 \div 2 \times 8 = 4$$

- Ans
- ☒ 1. - and \times
 - ☒ 2. \times and +
 - ☒ 3. \div and -
 - ☒ 4. \times and \div

Question ID : 6549789077
Status : Answered
Chosen Option : 2

Q.16 In a certain code language, HAMPER is coded as 17212322036 and INSULT is coded as 16286421340. How will SAFETY be coded in that language?

- Ans
- ☒ 1. 621910550
 - ☒ 2. 612195030
 - ☒ 3. 629101350
 - ☒ 4. 610195320

Question ID : 6549789590
Status : Not Answered
Chosen Option : --

Q.17 Select the option that is related to the third letter-cluster in the same way as the second letter-cluster is related to the first letter-cluster.

BYDW : UFSH :: CXFU : ?

- Ans
- ☒ 1. TGQJ
 - ☒ 2. SHQJ
 - ☒ 3. RIPK
 - ☒ 4. RIOL

Question ID : 6549789086

Status : Answered

Chosen Option : 1

Q.18 Four words have been given, out of which three are alike in some manner and one is different. Select the word that is different.

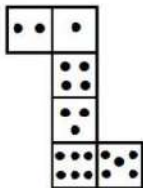
- Ans
- ☒ 1. Integrity
 - ☒ 2. Joviality
 - ☒ 3. Honesty
 - ☒ 4. Truthfulness

Question ID : 6549789092

Status : Answered

Chosen Option : 4

Q.19 A cube is made by folding the given sheet. In the cube so formed, how many dots lie opposite to the face having 4 dots?



- Ans
- ☒ 1. 2
 - ☒ 2. 5
 - ☒ 3. 6
 - ☒ 4. 1

Question ID : 6549789599


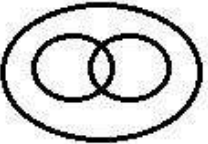

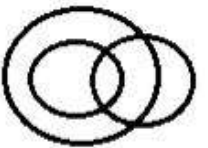
Status : Answered

Chosen Option : 3

Q.20 Select the Venn diagram that best represents the relationship between the following classes.

Women, Professors, Widows

Ans

- ☒ 1. 
- ☒ 2. 
- ☒ 3. 
- ☒ 4. 

Question ID : 6549789605

Status : Answered

Chosen Option : 4

Q.21 Snigda said that she met her mother's only brother's son's mother's father-in-law. Whom did she meet?

Ans

- ☒ 1. Father
- ☒ 2. Uncle
- ☒ 3. Grandfather
- ☒ 4. Brother

Question ID : 6549788281

Status : Answered

Chosen Option : 3

Q.22 Four numbers have been given, out of which three are alike in some manner and one is different. Select the number that is different.

Ans

- ☒ 1. 6341
- ☒ 2. 6138
- ☒ 3. 5423
- ☒ 4. 1652

Question ID : 6549789587

Status : Answered

Chosen Option : 2

Q.23 Select the option in which the numbers are related in the same way as are the numbers of the following set.

{9, 12, 18}

- Ans
- ☐ 1. {7, 13, 27}
 - ☐ 2. {21, 29, 44}
 - ☐ 3. {5, 12, 24}
 - ☒ 4. {13, 19, 31}

Question ID : 6549789079

Status : Answered

Chosen Option : 4

Q.24 Select the correct option that indicates the arrangement of the given words in the order in which they appear in an English dictionary.

- 1. Multifocal
- 2. Movement
- 3. Multinomial
- 4. Moviemaker
- 5. Mutual fund

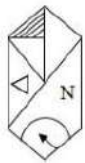
- Ans
- ☐ 1. 4, 2, 3, 1, 5
 - ☐ 2. 1, 5, 2, 3, 4
 - ☐ 3. 4, 2, 1, 3, 5
 - ☒ 4. 2, 4, 1, 3, 5

Question ID : 6549789588

Status : Answered

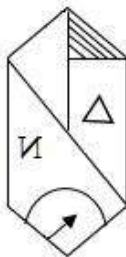
Chosen Option : 4

Q.25 Select the correct mirror image of the given figure when the mirror is placed at the right side of the figure.

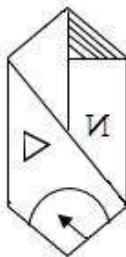


Ans

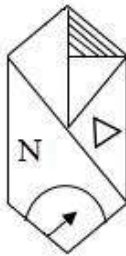
X 1.



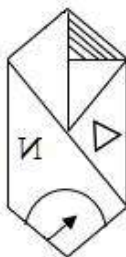
X 2.



X 3.



✓ 4.



Question ID : **6549789099**

Status : **Answered**

Chosen Option : **4**

Q.1 A solid metallic hemisphere of radius 6.3 cm is melted and recast into a right circular cylinder of radius 9 cm. What is the height (in cm, correct to one decimal place) of the cylinder?

- Ans
- ☒ 1. 1.9
 - ☒ 2. 2.7
 - ☒ 3. 2.5
 - ☒ 4. 2.1

Question ID : 6549789103

Status : Answered

Chosen Option : 4

Q.2 If $\cos \theta = \frac{4x}{1+4x^2}$, then what is the value of $\sin \theta$?

- Ans
- ☒ 1. $\frac{1+4x^2}{1-4x^2}$
 - ☒ 2. $\frac{1+4x^2}{4x^2}$
 - ☒ 3. $\frac{1-4x^2}{1+4x^2}$
 - ☒ 4. $\frac{1-4x^2}{4x}$

Question ID : 6549789625

Status : Answered

Chosen Option : 3

Q.3 In a triangle ABC, $\angle BAC = 90^\circ$ and AD is perpendicular to BC. If AD = 8.4 cm and BD = 4.8 cm, then the length of BC is:

- Ans
- ☒ 1. 19.5 cm
 - ☒ 2. 15 cm
 - ☒ 3. 18 cm
 - ☒ 4. 18.5 cm

Question ID : 6549789113

Status : Answered

Chosen Option : 1

Q.4 Tap P can fill a cistern in 6 hours and tap Q can empty the full cistern in 10 hours. If both taps P and Q are kept open simultaneously, then in how many hours will the empty cistern be completely full?

- Ans**
- ☒ 1. 15
 - ☐ 2. 18
 - ☐ 3. 16
 - ☐ 4. 12

Question ID : **6549789101**
Status : **Answered**
Chosen Option : **1**

Q.5 One dozen notebooks quoted at ₹125 are available at 20% discount. How many notebooks can be bought for ₹75?

- Ans**
- ☐ 1. 10
 - ☐ 2. 6
 - ☒ 3. 9
 - ☐ 4. 8

Question ID : **6549789105**
Status : **Answered**
Chosen Option : **3**

Q.6 A man invests ₹7,000 at 8% per annum simple interest for 2 years and ₹10,000 at compound interest at the same rate for the same period, compounded annually. What will be the total interest and the total amount (in ₹) respectively, on maturity?

- Ans**
- ☐ 1. 19,748 and 2,874
 - ☐ 2. 2,748 and 19,784
 - ☐ 3. 19,784 and 2,784
 - ☒ 4. 2,784 and 19,784

Question ID : **6549789614**
Status : **Answered**
Chosen Option : **4**

Q.7 If $(\sin A - \cos A) = 0$, then what is the value of $\cot A$?

- Ans**
- ☐ 1. $\frac{\pi}{6}$
 - ☐ 2. 0
 - ☒ 3. 1
 - ☐ 4. $\frac{\pi}{4}$

Question ID : **6549789119**
Status : **Answered**
Chosen Option : **3**

Q.8 A boat can travel with a speed of 19 km/h in still water. If the speed of the stream is 3 km/h, then what will be the total time (in hours) taken by the boat to go 88 km downstream and 24 km upstream?

- Ans**
- ☒ 1. 4.5
 - ☒ 2. 5
 - ☒ 3. 4
 - ☒ 4. 5.5

Question ID : 6549789607

Status : Answered

Chosen Option : 4

Q.9 A is 150% of B and B is 40% of C. If $A + B + C = 20$, then the value of $2B + 3C - 4A$ is equal to:

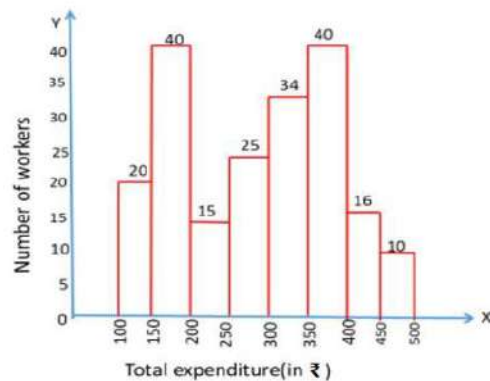
- Ans**
- ☒ 1. 16
 - ☒ 2. 14
 - ☒ 3. 20
 - ☒ 4. 15

Question ID : 6549789611

Status : Answered

Chosen Option : 2

Q.10 The following histogram represents the distribution of household expenditure (in ₹) of 200 manual workers in a city.



The ratio of the number of workers whose household expenditure is less than ₹200 to the number of workers whose household expenditure is ₹300 and above is:

- Ans**
- ☒ 1. 3 : 5
 - ☒ 2. 2 : 5
 - ☒ 3. 4 : 5
 - ☒ 4. 3 : 4

Question ID : 6549789122

Status : Answered

Chosen Option : 1

Q.11 Using algebraic identities, simplify the following expression.

$$\frac{(x^4 + x^2 + 1)}{(x^2 + x + 1)}$$

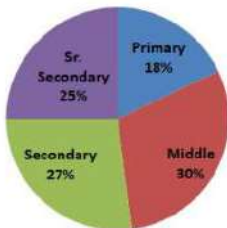
- Ans
- ☒ 1. $(x^2 - 2x + 1)$
 - ☒ 2. $(x^2 + x + 1)$
 - ☒ 3. $(x^2 + 2x + 1)$
 - ☒ 4. $(x^2 - x + 1)$

Question ID : 6549789116

Status : Answered

Chosen Option : 4

Q.12 Students of Primary, Middle, Secondary and Sr. Secondary classes collected donation for a Relief Fund as shown in the pie chart. If the donation collected from Middle classes was ₹6,750, then how much money was collected by the Primary classes?



- Ans
- ☒ 1. ₹4,050
 - ☒ 2. ₹4,005
 - ☒ 3. ₹4,500
 - ☒ 4. ₹3,960

Question ID : 6549789427

Status : Answered

Chosen Option : 1

Q.13 One-quarter of a circular pizza of diameter 28 cm was removed from the whole pizza. What is the perimeter (in cm) of the remaining pizza? (Take $\pi = \frac{22}{7}$.)

- Ans
- ☒ 1. 88
 - ☒ 2. 94
 - ☒ 3. 80
 - ☒ 4. 66

Question ID : 6549789111

Status : Answered

Chosen Option : 4

Q.14 The inner and outer radii of two concentric circles are 6.7 cm and 9.5 cm, respectively. What is the difference between their circumferences (in cm)? Take $\pi = \frac{22}{7}$.

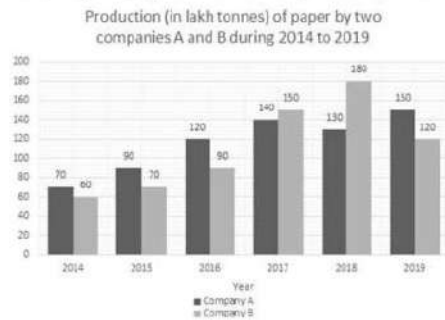
- Ans
- ☒ 1. 20.5
 - ☒ 2. 10.4
 - ☒ 3. 6.5
 - ☒ 4. 17.6

Question ID : 6549789615

Status : Answered

Chosen Option : 4

Q.15 Study the given graph and answer the question that follows.



The average production of paper by company B in 2014, 2017 and 2018 was $13\frac{1}{3}\%$ less than the production of paper by company A in the year:

- Ans
- ☒ 1. 2016
 - ☒ 2. 2018
 - ☒ 3. 2017
 - ☒ 4. 2019

Question ID : 6549787911

Status : Answered

Chosen Option : 4

Q.16 What is the perimeter (in cm) of an equilateral triangle whose height is 3.46 cm? Take $\sqrt{3} = 1.73$.

- Ans
- ☒ 1. 10.4
 - ☒ 2. 9
 - ☒ 3. 6
 - ☒ 4. 12

Question ID : 6549789617

Status : Answered

Chosen Option : 3

Q.17 The value of $\left[\frac{1}{2}(232 \div 29 \text{ of } 2) + 77 \times 10\right] \div 18 - \frac{18 \times 8 + 4 \text{ of } 3 - 4}{2 \times (8 - 6) + 1 - 2 \times 3 \div 4 \text{ of } \frac{1}{2}}$ is:

- Ans ☒ 1. 39
☒ 2. 44
☒ 3. 33
☒ 4. 47

Question ID : 6549789118
 Status : Answered
 Chosen Option : 1

Q.18 The string of a kite is 158 m long and it makes an angle of 30° with the horizontal. What is the height (in m) of the kite?
 Assume there is no slack in the string.

- Ans ☒ 1. 100
☒ 2. 99
☒ 3. 79
☒ 4. 80

Question ID : 6549789121
 Status : Answered
 Chosen Option : 3

Q.19 If $\left(x + \frac{1}{x}\right)^3 = 27$, then what is the value of $\left(x^2 + \frac{1}{x^2}\right)$? Given that x is real.

- Ans ☒ 1. 11
☒ 2. 25
☒ 3. 7
☒ 4. 9

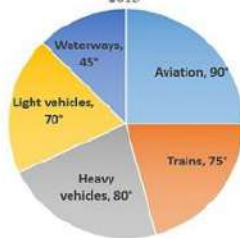
Question ID : 6549789619
 Status : Answered
 Chosen Option : 3

Q.20 Study the given pie-chart and answer the question that follows.

The pie-chart represents the consumption of fuel (in million litres) by various modes of transport of a country X in the year 2015. The total consumption of fuel by various modes of transport of the country is 800 million litres.

(The data shown here is only for mathematical exercise. They do not represent the actual figures of the country.)

Consumption of fuel (in million litres) by various modes of transport of a country X in the year 2015



To obtain fuel, energy is required to run the machinery, which is to be produced by burning coal.

If 1 tonne of coal is burnt to produce 0.4 million litres of oil, then approximately what is the requirement of coal (in tonnes) for the Trains sector?

- Ans**
- ☒ 1. 417
 - ☐ 2. 415
 - ☐ 3. 418
 - ☐ 4. 420

Question ID : 6549789630

Status : Answered

Chosen Option : 1

Q.21 One-fifth of a journey is covered at a speed of 30 km/h, one-fourth of the journey at a speed of 25 km/h and the rest at 60 km/h. What is the average speed (in km/h, correct to one decimal place) for the whole journey?

- Ans**
- ☒ 1. 38.7
 - ☐ 2. 30.6
 - ☐ 3. 40.5
 - ☐ 4. 25.4

Question ID : 6549789609

Status : Answered

Chosen Option : 1

Q.22 If $a + b = p$, $ab = q$, then $(a^4 + b^4)$ is equal to:

- Ans**
- ☐ 1. $p^4 - 2p^2q^2 + q^2$
 - ☐ 2. $p^4 - 4p^2q^2 + 2q^2$
 - ☐ 3. $p^4 - 4p^2q + q^2$
 - ☒ 4. $p^4 - 4p^2q + 2q^2$

Question ID : 6549789115

Status : Answered

Chosen Option : 4

Q.23 What is the greatest five-digit number that is completely divisible by 8, 15, 16, 21 and 5?

- Ans
- ☒ 1. 92680
 - ☒ 2. 99120
 - ☒ 3. 95760
 - ☒ 4. 98320

Question ID : 6549789622
Status : Answered
Chosen Option : 2

Q.24 By selling an article for ₹1,170, Elisa suffers as much loss as she would have gained by selling it at a profit of 22%. If she sells it for ₹1,450, then her profit/loss per cent (correct up to one decimal place) is:

- Ans
- ☒ 1. Profit, 3.3
 - ☒ 2. Loss, 3.3
 - ☒ 3. Loss, 26.2
 - ☒ 4. Profit, 26.2

Question ID : 6549789107
Status : Answered
Chosen Option : 2

Q.25 If $A : B = 11 : 7$ and $B : C = 5 : 19$, then what is $A : B : C$?

- Ans
- ☒ 1. 55 : 35 : 133
 - ☒ 2. 35 : 55 : 133
 - ☒ 3. 35 : 133 : 55
 - ☒ 4. 55 : 133 : 35

Question ID : 6549789613
Status : Answered
Chosen Option : 1

Section : General Awareness

Q.1 Who among the following is the first Indian pistol shooter to reach number one in world rankings by the International Shooting Sport Federation?

- Ans
- ☒ 1. Heena Sidhu
 - ☒ 2. Kajal Saini
 - ☒ 3. Tejaswini Sawant
 - ☒ 4. Suma Shirur

Question ID : 6549789149
Status : Not Answered
Chosen Option : --

Q.2 Who among the following has become the first woman umpire to officiate in a men's Test match in January 2021?

- Ans
- ☒ 1. Danielle Wyatt
 - ☒ 2. Jess Jonassen
 - ☒ 3. Suzie Bates
 - ☒ 4. Claire Polosak

Question ID : 6549789655

Status : **Not Answered**

Chosen Option : --

Q.3 Which part of soil has organic materials incorporated with the mineral matter, nutrients and water?

- Ans
- ☒ 1. Horizon D
 - ☒ 2. Horizon C
 - ☒ 3. Horizon A
 - ☒ 4. Horizon B

Question ID : 6549789138

Status : **Not Answered**

Chosen Option : --

Q.4 In which of the following states is Sabarimala Sree Dharma Sastha Temple located?

- Ans
- ☒ 1. Karnataka
 - ☒ 2. Telangana
 - ☒ 3. Andhra Pradesh
 - ☒ 4. Kerala

Question ID : 6549789633

Status : **Not Answered**

Chosen Option : --

Q.5 Identify the Indian state which was known as 'Pragjyotisha' during the epic period.

- Ans
- ☒ 1. Assam
 - ☒ 2. Odisha
 - ☒ 3. Kerala
 - ☒ 4. Bihar

Question ID : 6549789142

Status : **Not Answered**

Chosen Option : --

Q.6 What is the SI unit for measuring pressure?

- Ans ☒ 1. Pascal
☒ 2. Candela
☒ 3. Ampere
☒ 4. Kelvin

Question ID : 6549789135
Status : Answered
Chosen Option : 1

Q.7 Who among the following was appointed by AIFF (All India Football Federation) as its first Deputy General Secretary in January 2021?

- Ans ☒ 1. Abhishek Yadav
☒ 2. Praful Patel
☒ 3. Umesh Sinha
☒ 4. Kushal Das

Question ID : 6549789653
Status : Not Answered
Chosen Option : --

Q.8 Kabartal Wetland was designated as a Ramsar site in 2020. In which of the following states is it located?

- Ans ☒ 1. Haryana
☒ 2. Bihar
☒ 3. Himachal Pradesh
☒ 4. Punjab

Question ID : 6549789645
Status : Not Answered
Chosen Option : --

Q.9 _____ are gently sloping areas of the ocean basins.

- Ans ☒ 1. Deep sea plains
☒ 2. Continental shelves
☒ 3. Continental slopes
☒ 4. Oceanic deeps

Question ID : 6549789139
Status : Not Answered
Chosen Option : --

Q.10 Who among the following was appointed as the Chief Justice of the Andhra Pradesh High Court in January 2021?

- Ans
- ☐ 1. Sharad Arvind Bobde
 - ☐ 2. Hima Kohli
 - ☐ 3. Rajan Datta
 - ☒ 4. Arup Kumar Goswami

Question ID : **6549789636**
Status : **Answered**
Chosen Option : **4**

Q.11 Who among the following Indian nationals got the 'Legion of Merit' Award 2020 from the US?

- Ans
- ☐ 1. Dr Manmohan Singh
 - ☒ 2. Narendra Modi
 - ☐ 3. Dr K Sivan
 - ☐ 4. General Bipin Rawat

Question ID : **6549789144**
Status : **Answered**
Chosen Option : **2**

Q.12 Who among the following became the first Lokpal of India?

- Ans
- ☐ 1. Dilip B Bhosale
 - ☐ 2. Pradip Kumar Mohanty
 - ☒ 3. Pinaki Chandra Ghose
 - ☐ 4. Ajay Kumar Tripathi

Question ID : **6549789147**
Status : **Not Answered**
Chosen Option : **--**

Q.13 In which of the following states did the Land Grabbing (Prohibition) Act, 2020 come into force in December 2020?

- Ans
- ☐ 1. Punjab
 - ☐ 2. Maharashtra
 - ☒ 3. Gujarat
 - ☐ 4. Madhya Pradesh

Question ID : **6549789132**
Status : **Not Answered**
Chosen Option : **--**

Q.14 What happens to Indian exports when Indian rupee is devalued?

Ans

- ☒ 1. Export prices fluctuate
- ☒ 2. Exports become cheaper
- ☒ 3. Export prices remain stable
- ☒ 4. Exports become dearer

Question ID : 6549789134

Status : Not Answered

Chosen Option : --

Q.15 _____ is the process of turning on a computer and powering up the system.

Ans

- ☒ 1. Booting
- ☒ 2. Loading
- ☒ 3. Saving
- ☒ 4. Execution

Question ID : 6549789631

Status : Answered

Chosen Option : 1

Q.16 What do you call a key on a computer keyboard that is used to move the pointer (cursor) around on the screen?

Ans

- ☒ 1. Navigation key
- ☒ 2. Numeric key
- ☒ 3. Function key
- ☒ 4. Control key

Question ID : 6549789127

Status : Answered

Chosen Option : 1

Q.17 Vitamin B12 is generally NOT present in _____.

Ans

- ☒ 1. milk products
- ☒ 2. plant foods
- ☒ 3. fish products
- ☒ 4. poultry products

Question ID : 6549789137

Status : Not Answered

Chosen Option : --

Q.18 Who among the following is considered as the 'Father of Modern Atomic Theory'?

- Ans
- ☒ 1. Robert Boyle
 - ☐ 2. John Dalton
 - ☒ 3. Willard Gibbs
 - ☒ 4. Otto Hahn

Question ID : 6549789641
Status : Not Answered
Chosen Option : --

Q.19 _____ plains are formed due to the weathering of soluble rocks such as limestone and dolomite.

- Ans
- ☒ 1. Glacial
 - ☐ 2. Karst
 - ☒ 3. Deposition
 - ☒ 4. Desert

Question ID : 6549789646
Status : Not Answered
Chosen Option : --

Q.20 Which of the following state governments unveiled a Braille version of the Constitution of India in January 2021?

- Ans
- ☒ 1. Haryana
 - ☒ 2. Andhra Pradesh
 - ☒ 3. Punjab
 - ☐ 4. Maharashtra

Question ID : 6549789635
Status : Not Answered
Chosen Option : --

Q.21 In which of the following cities is the corporate centre of State Bank of India (SBI) situated?

- Ans
- ☒ 1. Hyderabad
 - ☒ 2. Kolkata
 - ☐ 3. Mumbai
 - ☒ 4. Bengaluru

Question ID : 6549789638
Status : Not Answered
Chosen Option : --

Q.22 In which of the following years was the Vijayanagar empire founded?

- Ans
- ☐ 1. 1456
 - ☐ 2. 1229
 - ☐ 3. 1412
 - ☒ 4. 1336

Question ID : 6549789648

Status : Not Answered

Chosen Option : --

Q.23 In which of the following years did Telangana become the 29th state of India after the reorganisation of the state of Andhra Pradesh?

- Ans
- ☒ 1. 2014
 - ☐ 2. 1994
 - ☐ 3. 2010
 - ☐ 4. 1998

Question ID : 6549789651

Status : Answered

Chosen Option : 1

Q.24 'Kati Bihu' in Assam is celebrated by lighting a lamp in front of a _____ tree / plant.

- Ans
- ☐ 1. banyan
 - ☒ 2. tulsi
 - ☐ 3. banana
 - ☐ 4. neem

Question ID : 6549789129

Status : Not Answered

Chosen Option : --

Q.25 Who among the following was awarded the Rabindranath Tagore Literary Award 2020?

- Ans
- ☐ 1. Ashraf Patel
 - ☐ 2. Ranjitsinh Disale
 - ☐ 3. Vidyut Mohan
 - ☒ 4. Raj Kamal Jha

Question ID : 6549789650

Status : Not Answered

Chosen Option : --





Combined Higher Secondary Level Examination 2020 (Tier-I)

Roll Number	Join Telegram: HaryanaJobs.in
Candidate Name	
Venue Name	
Exam Date	04/08/2021
Exam Time	12:00 PM - 1:00 PM
Subject	Combined Higher Secondary Level Exam 2020

Section : English Language

Q.1 Select the most appropriate meaning of the given idiom.

To go red in the face

- Ans  1. To shout at someone for doing something wrong
-  2. To feel embarrassed
-  3. To feel very happy and proud
-  4. To feel extremely irritated

Question ID : 6549787350

Status : Answered

Chosen Option : 4

Q.2 Select the most appropriate meaning of the underlined idiom in the given sentence.

His jokes fell flat on the audience.

- Ans  1. deeply touched
-  2. failed to have an effect
-  3. irritated
-  4. provoked laughter





Question ID : 6549788056

Status : Answered

Chosen Option : 2

Q.3 Select the correct indirect form of the given sentence.

She said to her friend, "Will you take my dog for a walk?"

- Ans  1. She asked her friend that if she will take her dog for a walk.
-  2. She asked her friend will she take her dog for a walk.
-  3. She asked her friend if she would take her dog for a walk.
-  4. She asked to her friend if she would take my dog for a walk.

Question ID : 6549788041

Status : Answered

Chosen Option : 3

Q.4 Fill in the blank with most appropriate word.

This train is _____ for Bihar.

- Ans ☒ 1. bound
☒ 2. going
☒ 3. running
☒ 4. intending

Question ID : 6549788064
Status : Answered
Chosen Option : 3

Q.5 Select the most appropriate option to substitute the underlined segment in the given sentence. If there is no need to substitute it, select 'No substitution'.

We were quite impressed with the enthusiasm that she work for.

- Ans ☒ 1. that she is working on
☒ 2. that she worked with
☒ 3. which she works for
☒ 4. No substitution

Question ID : 6549788053
Status : Answered
Chosen Option : 2

Q.6 Sentences of a paragraph are given below in jumbled order. Arrange the sentences in the right order to form a meaningful and coherent paragraph.

- A. On the other, there is the principle of leadership.
B. Democracy rests on a tension between two different principles.
C. While the first gives priority to rules, the second gives importance to persons.
D. On the one hand, there is the principle of equality before the law, or more generally, equality.

- Ans ☒ 1. BDAC
☒ 2. CDAB
☒ 3. DACB
☒ 4. ADBC

Question ID : 6549787344
Status : Answered
Chosen Option : 1

Q.7 Select the most appropriate one-word substitution for the given words.

a person who formally requests something, especially a job

- Ans ☒ 1. applicant
☒ 2. trainee
☒ 3. contestant
☒ 4. nominee

Question ID : 6549788061
Status : Answered
Chosen Option : 1

Q.8 Select the option that can be used as a one-word substitute for the given group of words.

Continuing for a long time

- Ans
- ☒ 1. Profound
 - ☒ 2. Project (v)
 - ☒ 3. Prolonged
 - ☒ 4. Infinite

Question ID : 6549787353

Status : Answered

Chosen Option : 3

Q.9 The following sentence has been split into four segments. Identify the segment that contains a grammatical error.

All our / furnitures were / spoiled in the recent / rains and floods.

- Ans
- ☒ 1. furnitures were
 - ☒ 2. rains and floods
 - ☒ 3. spoiled in the recent
 - ☒ 4. All our

Question ID : 6549787336

Status : Answered

Chosen Option : 1

Q.10 Select the most appropriate antonym of the given word.

WISDOM

- Ans
- ☒ 1. stupidity
 - ☒ 2. youth
 - ☒ 3. stability
 - ☒ 4. maturity

Question ID : 6549788054

Status : Answered

Chosen Option : 1

Q.11 Select the most appropriate synonym of the given word.

COMPLY

- Ans
- ☒ 1. obey
 - ☒ 2. adore
 - ☒ 3. decline
 - ☒ 4. deny

Question ID : 6549788062

Status : Answered

Chosen Option : 1

Q.12 Select the INCORRECTLY spelt word.

- Ans
- ☒ 1. Feature
 - ☒ 2. Torches
 - ☒ 3. Sacrifice
 - ☒ 4. Highlite

Question ID : 6549787351
Status : Answered
Chosen Option : 4

Q.13 Select the most appropriate option to substitute the underlined segment in the given sentence. If there is no need to substitute it, select 'No substitution required'.

I practised for the debate; that's why I am late.

- Ans
- ☒ 1. No substitution required
 - ☒ 2. am practising for
 - ☒ 3. was practising for
 - ☒ 4. have practised for

Question ID : 6549787345
Status : Answered
Chosen Option : 3

Q.14 Select the most appropriate synonym of the given word.

Dearth

- Ans
- ☒ 1. Death
 - ☒ 2. Weakness
 - ☒ 3. Leakage
 - ☒ 4. Shortage

Question ID : 6549787356
Status : Answered
Chosen Option : 4

Q.15 Select the most appropriate ANTONYM of the given word.

Weird

- Ans
- ☒ 1. Apparent
 - ☒ 2. Normal
 - ☒ 3. Abnormal
 - ☒ 4. Wide

Question ID : 6549787348
Status : Answered
Chosen Option : 2

Q.16 Select the most appropriate word to fill in the blank.

If the test booklet seal is broken or _____ with, bring it immediately to the notice of the invigilator.

- Ans
- ☒ 1. adjusted
 - ☒ 2. opened
 - ☒ 3. tampered
 - ☒ 4. closed

Question ID : 6549787358

Status : Answered

Chosen Option : 3

Q.17 In the given sentence, identify the segment which contains a grammatical error.

As soon as the bus driver was seeing the child crossing the road, he applied the brakes.

- Ans
- ☒ 1. As soon as the bus driver
 - ☒ 2. was seeing the child
 - ☒ 3. crossing the road
 - ☒ 4. he applied the brakes

Question ID : 6549788042

Status : Answered

Chosen Option : 2

Q.18 Given below are four sentences in jumbled order. Select the option that gives their correct order.

- A. On coming out, his skin would be shining like ebony and he would squeal with pleasure.
- B. First, he would lie down on the sand bank while I rubbed him clean with the sand of the river.
- C. Every day, I used to take the baby elephant to the river for his bath.
- D. After that, he would lie in the water for a long time.

- Ans
- ☒ 1. ADCB
 - ☒ 2. DABC
 - ☒ 3. BADC
 - ☒ 4. CBDA

Question ID : 6549788050

Status : Answered

Chosen Option : 4

Q.19 Select the option that expresses the given sentence in the active or passive voice.

Designer clothes were sold to the masses by Pierre Cardin.

- Ans
- ☒ 1. The masses were sold by Pierre Cardin to the designer clothes.
 - ☒ 2. Designer clothes have been sold by Pierre Cardin to the masses.
 - ☒ 3. Pierre Cardin sold designer clothes to the masses.
 - ☒ 4. Pierre Cardin had sold designer clothes to the masses.

Question ID : 6549787333

Status : Answered

Chosen Option : 3

Q.20 Select the misspelt word.

- Ans  1. accomodate
 2. annihilate
 3. appropriate
 4. accelerate

Question ID : 6549788059

Status : Answered

Chosen Option : 1





Comprehension:

In the following passage, some words have been deleted. Select the most appropriate option to fill in each blank.

'SkillSet' was founded in 2014 to collect and co-ordinate (1) _____ about educational access and quality for students with special needs and disabilities. The organisation (2) _____ thousands of enquiries every year and offers (3) _____ to students on how to apply to colleges and universities across the country and how to find out about special (4) _____ and scholarships. We ensure easy access to higher education for all students, (5) _____ those with disabilities. Your donations and suggestions will help us to improve our service to customers and you will also be helping us to continue our valuable work.

SubQuestion No : 21

Q.21 Select the most appropriate option to fill in blank number 1.

- Ans  1. funding
 2. admissions
 3. information
 4. officials

Question ID : 6549787338

Status : Answered

Chosen Option : 1





Comprehension:

In the following passage, some words have been deleted. Select the most appropriate option to fill in each blank.

'SkillSet' was founded in 2014 to collect and co-ordinate (1) _____ about educational access and quality for students with special needs and disabilities. The organisation (2) _____ thousands of enquiries every year and offers (3) _____ to students on how to apply to colleges and universities across the country and how to find out about special (4) _____ and scholarships. We ensure easy access to higher education for all students, (5) _____ those with disabilities. Your donations and suggestions will help us to improve our service to customers and you will also be helping us to continue our valuable work.

SubQuestion No : 22

Q.22 Select the most appropriate option to fill in blank number 2.

- Ans  1. passes
 2. receives
 3. transmits
 4. sends

Question ID : 6549787339

Status : Answered

Chosen Option : 2

Comprehension:

In the following passage, some words have been deleted. Select the most appropriate option to fill in each blank.

'SkillSet' was founded in 2014 to collect and co-ordinate (1) _____ about educational access and quality for students with special needs and disabilities. The organisation (2) _____ thousands of enquiries every year and offers (3) _____ to students on how to apply to colleges and universities across the country and how to find out about special (4) _____ and scholarships. We ensure easy access to higher education for all students, (5) _____ those with disabilities. Your donations and suggestions will help us to improve our service to customers and you will also be helping us to continue our valuable work.

SubQuestion No : 23

Q.23 Select the most appropriate option to fill in blank number 3.

- Ans
- ☒ 1. comments
 - ☒ 2. conditions
 - ☒ 3. advice
 - ☒ 4. instructions

Question ID : **6549787340**

Status : **Answered**

Chosen Option : **3**

Comprehension:

In the following passage, some words have been deleted. Select the most appropriate option to fill in each blank.

'SkillSet' was founded in 2014 to collect and co-ordinate (1) _____ about educational access and quality for students with special needs and disabilities. The organisation (2) _____ thousands of enquiries every year and offers (3) _____ to students on how to apply to colleges and universities across the country and how to find out about special (4) _____ and scholarships. We ensure easy access to higher education for all students, (5) _____ those with disabilities. Your donations and suggestions will help us to improve our service to customers and you will also be helping us to continue our valuable work.

SubQuestion No : 24

Q.24 Select the most appropriate option to fill in blank number 4.

- Ans
- ☒ 1. systems
 - ☒ 2. facilities
 - ☒ 3. effects
 - ☒ 4. purposes

Question ID : **6549787341**

Status : **Answered**

Chosen Option : **2**

Comprehension:

In the following passage, some words have been deleted. Select the most appropriate option to fill in each blank.

'SkillSet' was founded in 2014 to collect and co-ordinate (1) _____ about educational access and quality for students with special needs and disabilities. The organisation (2) _____ thousands of enquiries every year and offers (3) _____ to students on how to apply to colleges and universities across the country and how to find out about special (4) _____ and scholarships. We ensure easy access to higher education for all students, (5) _____ those with disabilities. Your donations and suggestions will help us to improve our service to customers and you will also be helping us to continue our valuable work.

SubQuestion No : 25

Q.25 Select the most appropriate option to fill in blank number 5.

- Ans
- ☒ 1. excluding
 - ☒ 2. especially
 - ☒ 3. additionally
 - ☒ 4. except

Question ID : 6549787342

Status : Answered

Chosen Option : 2

Section : General Intelligence

Q.1 Select the word-pair in which the two words are related in the same way as are the two words in the following word-pair.

Language : Telugu

- Ans
- ☒ 1. Hindi : India
 - ☒ 2. Vehicle : Mechanic
 - ☒ 3. Continent : Asia
 - ☒ 4. Society : Service

Question ID : 6549788080

Status : Answered

Chosen Option : 3

Q.2 Select the combination of letters that when sequentially placed in the blanks of the given letter series will complete the series.

Z H _ O R C _ _ K _ R _ Z H _ O _ C

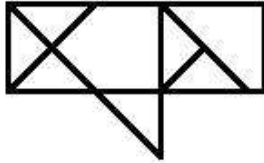
- Ans
- ☒ 1. Z, H, K, O, C, K, R
 - ☒ 2. K, Z, H, H, K, R, K, R
 - ☒ 3. K, Z, H, O, C, K, R
 - ☒ 4. K, Z, O, R, C, K, R

Question ID : 6549787270

Status : Answered

Chosen Option : 3

Q.3 How many triangles are there in the figure given below?



- Ans
- ☐ 1. 8
 - ☒ 2. 10
 - ☐ 3. 9
 - ☐ 4. 11

Question ID : 6549788086
Status : Answered
Chosen Option : 4

Q.4 In a code language, if RAFT is written as 180 and DON is written as 99, then how will SHOWER be written in the same language?

- Ans
- ☐ 1. 448
 - ☐ 2. 225
 - ☐ 3. 165
 - ☒ 4. 528

Question ID : 6549788075
Status : Answered
Chosen Option : 4

Q.5 Read the given statements and conclusions carefully. Assuming that the information given in the statements is true, even if it appears to be at variance with commonly known facts, decide which of the given conclusions logically follow(s) from the statements.

Statements:

- All trucks are cars.
- No wheel is a car.
- No car is a bus.

Conclusions:

- I. No bus is a truck.
- II. No wheel is a bus.
- III. Some cars are trucks.

- Ans
- ☐ 1. All the conclusions follow.
 - ☐ 2. Both conclusions I and II follow.
 - ☐ 3. Both conclusions II and III follow.
 - ☒ 4. Both conclusions I and III follow.

Question ID : 6549787376
Status : Answered
Chosen Option : 4

Q.6 Barun is the son of Chetan. Advita and Chetan are a married couple. Prakul is the brother of Chetan. Diya is the daughter of Advita. Suman is the brother of Barun. How is Diya related to Barun?

- Ans
- ☒ 1. Aunt
 - ☒ 2. Mother
 - ☒ 3. Sister
 - ☒ 4. Cousin

Question ID : 6549786564
Status : Answered
Chosen Option : 3

Q.7 Select the option that is related to the third number in the same way as the second number is related to the first number and the sixth number is related to the fifth number.

3 : 65 :: 5 : ? :: 4 : 126

- Ans
- ☒ 1. 217
 - ☒ 2. 166
 - ☒ 3. 344
 - ☒ 4. 216

Question ID : 6549788068
Status : Answered
Chosen Option : 1

Q.8 Select the option that is embedded in the given figure (rotation is NOT allowed).



- Ans
- ☒ 1.
 - ☒ 2.
 - ☒ 3.
 - ☒ 4.

Question ID : 6549787380
Status : Answered
Chosen Option : 3

Q.9 Select the option in which the numbers are related in the same way as are the numbers of the following set.

(42, 14, 294)

- Ans  1. (30, 16, 242)
 2. (34, 18, 306)
 3. (21, 15, 205)
 4. (36, 21, 360)

Question ID : 6549787362

Status : Answered

Chosen Option : 2

Q.10 In a certain code language, BACK is written as YEXP and MIXTURE is written as NOCGAIL. How will FROGS be written in that language?

- Ans  1. VIVTH
 2. UILTG
 3. UULTG
 4. UIUTH

Question ID : 6549787367

Status : Answered

Chosen Option : 4

Q.11 Three of the following four letter-clusters are alike in a certain way and one is different. Select the odd one.

- Ans  1. KPUZ
 2. TYDI
 3. LQVA
 4. BGLP

Question ID : 6549788081

Status : Answered

Chosen Option : 4

Q.12 Select the number from among the given options that can replace the question mark (?) in the following series.

14, 16, 34, 104, 418, ?

- Ans  1. 2158
 2. 1894
 3. 1560
 4. 2092

Question ID : 6549787364

Status : Answered

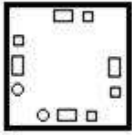
Chosen Option : 4

Q.13 The sequence of folding a piece of paper and the manner in which the folded paper has been cut is shown in the following figures. How would this paper look when unfolded?




Ans

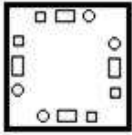
☒ 1.



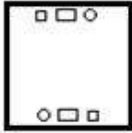
☒ 2.



☒ 3.



☒ 4.



Question ID : 6549787381

Status : Answered

Chosen Option : 3

Q.14 Select the option that represents the correct order of the given words as they would appear in an English dictionary.

1. Presume
2. Prepare
3. Priority
4. Prince
5. Prick

Ans

☒ 1. 2, 1, 5, 3, 4

☒ 2. 1, 2, 5, 4, 3

☒ 3. 2, 1, 5, 4, 3

☒ 4. 2, 1, 4, 5, 3

Question ID : 6549788073

Status : Answered

Chosen Option : 3

Q.15 What was the day of the week on 22 February 2012?

Ans

☒ 1. Friday

☒ 2. Wednesday

☒ 3. Tuesday

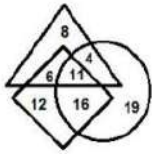
☒ 4. Thursday

Question ID : 6549788066

Status : Not Answered

Chosen Option : --

Q.16 In the Venn Diagram given below, if 'Rhombus' represents 'Psychologists', 'Triangle' represents 'Corporate Employees' and 'Circle' represents 'Fathers', then how many Psychologists are Corporate Employees but NOT Fathers?



- Ans ☒ 1. 6
☒ 2. 12
☒ 3. 11
☒ 4. 8

Question ID : 6549788090
 Status : Answered
 Chosen Option : 1

Q.17 Select the option that is related to the third word in the same way as the second word is related to the first word.

Africa : Algeria :: South America : ?

- Ans ☒ 1. Canada
☒ 2. Argentina
☒ 3. Mexico
☒ 4. Germany

Question ID : 6549787370
 Status : Answered
 Chosen Option : 2

Q.18 Which two signs should be interchanged to make the given equation correct?

$$21 + 5 - 45 \times 9 \div 3 = 11$$

- Ans ☒ 1. + and -
☒ 2. + and ×
☒ 3. ÷ and ×
☒ 4. × and -

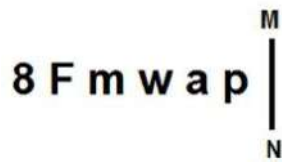
Question ID : 6549787360
 Status : Answered
 Chosen Option : 4

Q.19 Four words have been given, out of which three are alike in some manner and one is different. Select the word that is different.

- Ans ☒ 1. Oslo
☒ 2. Baht
☒ 3. Peso
☒ 4. Rial

Question ID : 6549787375
 Status : Answered
 Chosen Option : 1

Q.20 Select the correct mirror image of the given combination when the mirror is placed at MN as shown.



Ans

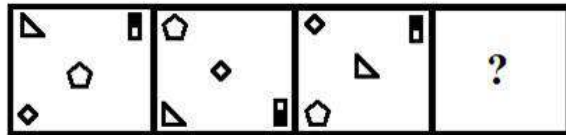
- ✗ 1. d e w m 7 8
- ✗ 2. q s w m 7 8
- ✗ 3. q s w m 7 8
- ✓ 4. q s w m 7 8

Question ID : 6549787382

Status : Answered

Chosen Option : 4

Q.21 Select the figure that will replace the question mark (?) in the following figure series.



Ans

- ✗ 1.
- ✓ 2.
- ✗ 3.
- ✗ 4.

Question ID : 6549788085

Status : Answered

Chosen Option : 4

Q.22 Select the option that is related to the third term in the same way as the second term is related to the first term.

POSTED : TPQEFU :: COUNTS : ?

- Ans**
- ☒ 1. VPDTUO
 - ☐ 2. VPTDOW
 - ☐ 3. VPETVO
 - ☐ 4. UQDTUO

Question ID : 6549787369

Status : Answered

Chosen Option : 1

Q.23 Four number-pairs have been given, out of which three are alike in some manner and one is different. Select the one that is different.

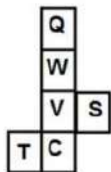
- Ans**
- ☒ 1. 322 : 18
 - ☐ 2. 289 : 17
 - ☐ 3. 225 : 15
 - ☐ 4. 484 : 22

Question ID : 6549788072

Status : Answered

Chosen Option : 1

Q.24 Which of the following pairs of letters will be on the opposite faces when the given sheet is folded to form a cube?



- Ans**
- ☐ 1. T and V
 - ☐ 2. S and C
 - ☐ 3. Q and S
 - ☒ 4. C and W

Question ID : 6549788084

Status : Answered

Chosen Option : 4

Q.25 Select the option in which the numbers share the same relationship as that shared by the numbers in the given set.

(4, 3, 73)

- Ans  1. (7, 5, 345)
 2. (5, 4, 141)
 3. (6, 2, 230)
 4. (5, 7, 302)





Question ID : 6549788070

Status : Answered

Chosen Option : 2

Section : Quantitative Aptitude

Q.1 A rhombus of side 28 cm has one angle of 60° . What is the length of the larger diagonal?





- Ans  1. $28(1 + \sqrt{3})$ cm
 2. $28\sqrt{2}$ cm
 3. 28 cm
 4. $28\sqrt{3}$ cm

Question ID : 6549788110

Status : Answered

Chosen Option : 4

Q.2 If $\sqrt{x} + \frac{1}{\sqrt{x}} = \sqrt{6}$, then the value of $x^6 + \frac{1}{x^6}$ will be:


- Ans  1. 2270
 2. 2502
 3. 2702
 4. 2712

Question ID : 6549787399

Status : Answered

Chosen Option : 3

Q.3 An article was sold for ₹512 after giving two equal successive discounts on the marked price of ₹800. The percentage discount offered is:

- Ans  1. 16%
 2. 20%
 3. 18%
 4. 15%

Question ID : 6549787388

Status : Answered

Chosen Option : 2

Q.4 Varun and Madhur invested ₹25,000 each in different schemes. Varun earned simple interest at 11% per annum, whereas Madhur earned compound interest at 10% per annum compounded annually. Who received more interest after 2 years and how much?

- Ans**
- ☒ 1. Madhur, ₹302.50
 - ☒ 2. Madhur, ₹250
 - ☒ 3. Varun, ₹500
 - ☒ 4. Varun, ₹250

Question ID : 6549788099

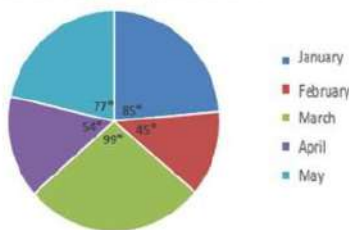
Status : Answered

Chosen Option : 4

Q.5 Study the given pie chart and answer the question that follows.

The pie chart shows the distribution (degree-wise) of the number of computers sold by a shopkeeper during five months.

Total Number of Computers Sold = 5400



In which month was the number of computers sold above 25% of the total number of computers sold in 5 months?

- Ans**
- ☒ 1. March
 - ☒ 2. May
 - ☒ 3. February
 - ☒ 4. January

Question ID : 6549787104

Status : Answered

Chosen Option : 1

Q.6 ABC is a right-angled triangle, right-angled at B. D is a point on AC such that AD = 12 cm and CD = 16 cm. If BD bisects $\angle ABC$, then the perimeter of $\triangle ABC$ will be:

- Ans**
- ☒ 1. 66 cm
 - ☒ 2. 56.2 cm
 - ☒ 3. 66.2 cm
 - ☒ 4. 67.2 cm

Question ID : 6549787396

Status : Not Answered

Chosen Option : --

Q.7 The average daily income of Shyam Lal during the month of February 2020 was ₹560. The average income for the first 16 days was ₹590 and for the last 16 days it was ₹500. What was his average income for 14th, 15th and 16th February?

- Ans**
- ☒ 1. ₹545
 - ☒ 2. ₹400
 - ☒ 3. ₹590
 - ☒ 4. ₹587

Question ID : 6549788094

Status : Answered

Chosen Option : 2

Q.8 A train starts running at a uniform speed of 60 km/h from station P towards station Q. At the same time another train starts running from station Q towards station P. If the distance between the stations P and Q is 275 km and the trains meet in two and a half hours, then what is the speed of the train running towards station P in km/h?

- Ans**
- ☒ 1. 48
 - ☒ 2. 44
 - ☒ 3. 40
 - ☒ 4. 50

Question ID : 6549788092

Status : Answered

Chosen Option : 4

Q.9 Two chords AB and CD of a circle intersect at O. If CO = 4 cm, OD = 3.75 cm, and AB = 8 cm, then what is the length (in cm) of the smaller among AO and OB?

- Ans**
- ☒ 1. 2.75
 - ☒ 2. 5.25
 - ☒ 3. 5
 - ☒ 4. 3

Question ID : 6549787394

Status : Answered

Chosen Option : 4

Q.10 A is thrice as efficient as B. A takes 24 days less than B to complete a work. If they work together, in how many days, will the work be completed?

- Ans**
- ☒ 1. 9
 - ☒ 2. 12
 - ☒ 3. 15
 - ☒ 4. 8

Question ID : 6549787384

Status : Answered

Chosen Option : 1

Q.11 If a number $54k31m82$ is divisible by 11, what will be the maximum value of $(k+m)$?

- Ans
- ☒ 1. 23
 - ☐ 2. 13
 - ☐ 3. 12
 - ☐ 4. 11

Question ID : 6549788107

Status : Answered

Chosen Option : 3

Q.12 If $x - \frac{2}{x} = 4$, then what will be the value of $x^2 + \frac{4}{x^2}$?

- Ans
- ☒ 1. 20
 - ☐ 2. 18
 - ☐ 3. 12
 - ☐ 4. 8

Question ID : 6549788104

Status : Answered

Chosen Option : 1

Q.13 In triangle ABC, if BD and CD bisect $\angle B$ and $\angle C$, respectively, and $\angle BDC = 135^\circ$, then find the measure of $\angle BAC$.

- Ans
- ☒ 1. 90°
 - ☐ 2. 75°
 - ☐ 3. 45°
 - ☐ 4. 65°

Question ID : 6549788102

Status : Answered

Chosen Option : 1

Q.14 In a circle with centre O, PA and PB are the tangents at A and B, respectively, from an external point P. If $\angle APB = 42^\circ$, then what will be the measure of $\angle AOB$?

- Ans
- ☐ 1. 121°
 - ☐ 2. 142°
 - ☐ 3. 159°
 - ☒ 4. 138°

Question ID : 6549788100

Status : Answered

Chosen Option : 4

Q.15 Study the given pie charts and answer the question that follows.

The pie charts represent the distribution of candidates who were enrolled for Bank Clerical Examination Fig (i) and the candidates (out of those enrolled) who passed the examination Fig (ii) in five different institutes P, Q, R, S and T.

(I) Total number of candidates enrolled in five different institutes = 5500

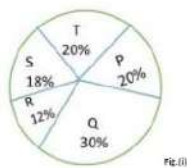


Fig. (i)

(II) Total number of candidates who passed the examination from five institutes = 3300

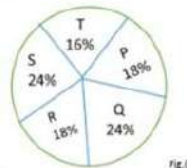


Fig. (ii)

The ratio of the candidates who passed to the candidates enrolled from institute S is:

- Ans**
- ☒ 1. 5 : 6
 - ☒ 2. 3 : 4
 - ☒ 3. 6 : 7
 - ☒ 4. 4 : 5

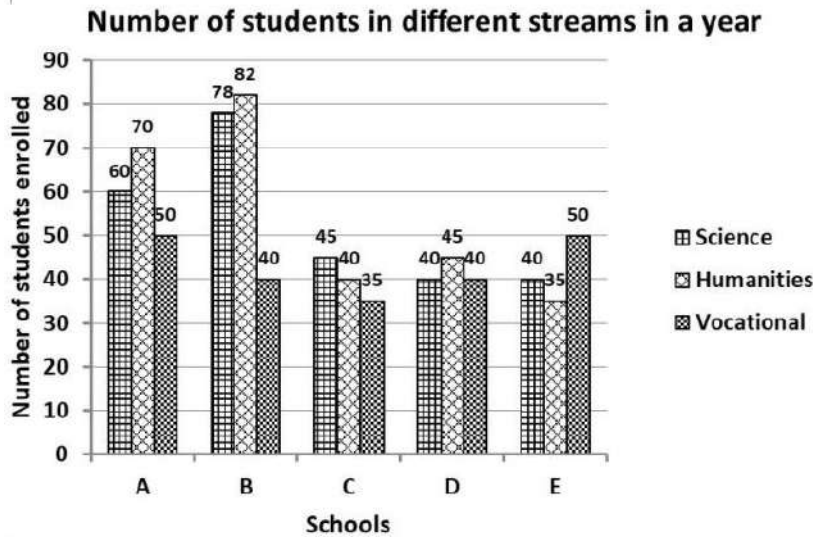
Question ID : **6549787405**

Status : **Answered**

Chosen Option : **4**

Q.16 The number of students enrolled in different streams at Senior Secondary level in five schools has been shown in the bar graph.

What is the ratio of the number of students enrolled in the vocational stream in schools A, C and E taken together to those enrolled in the humanities stream in the schools B, D and E taken together?



- Ans ☒ 1. 5 : 6
☒ 2. 7 : 9
☒ 3. 2 : 3
☒ 4. 9 : 11

Question ID : 6549788115

Status : Answered

Chosen Option : 1

Q.17 If $x^4 + \frac{1}{x^4} = 3842$, then the positive value of $x + \frac{1}{x}$ will be:

- Ans ☒ 1. 12
☒ 2. 8
☒ 3. 10
☒ 4. 6

Question ID : 6549787398

Status : Answered

Chosen Option : 2

Q.18

The value of $31\frac{2}{5} \div \left[168 \div \frac{3}{7} \text{ of } 28 + \left(33 \div \frac{5}{2} \right) + \left(7\frac{3}{5} - 3\frac{2}{5} \right) \right]$ is:

Ans

- ☒ 1. 5
- ☒ 2. 1
- ☒ 3. 3
- ☒ 4. 10

Question ID : 6549787401

Status : Answered

Chosen Option : 2

Q.19

If $\operatorname{cosec} \theta = \frac{41}{9}$ and θ is an acute angle, then the value of $5 \tan \theta$ will be:

Ans

- ☒ 1. $\frac{11}{8}$
- ☒ 2. $\frac{13}{4}$
- ☒ 3. $\frac{7}{8}$
- ☒ 4. $\frac{9}{8}$

Question ID : 6549787402

Status : Answered

Chosen Option : 4

Q.20

The volume of a metallic cylindrical pipe is 3564 cm^3 . If its external radius is 12 cm and thickness is 3 cm, then the length of the pipe will be:

(Take $\pi = \frac{22}{7}$.)

Ans

- ☒ 1. 22 cm
- ☒ 2. 20 cm
- ☒ 3. 18 cm
- ☒ 4. 16 cm

Question ID : 6549787386

Status : Not Answered

Chosen Option : --

Q.21 A shopkeeper bought pens at the rate of ₹1,350 for 15 dozen pens and sold them at the rate of ₹495 for 5 dozen pens. His percentage profit or percentage loss is:

- Ans**
- ☒ 1. Profit 10%
 - ☐ 2. Profit 15%
 - ☐ 3. Loss 15%
 - ☐ 4. Loss 10%

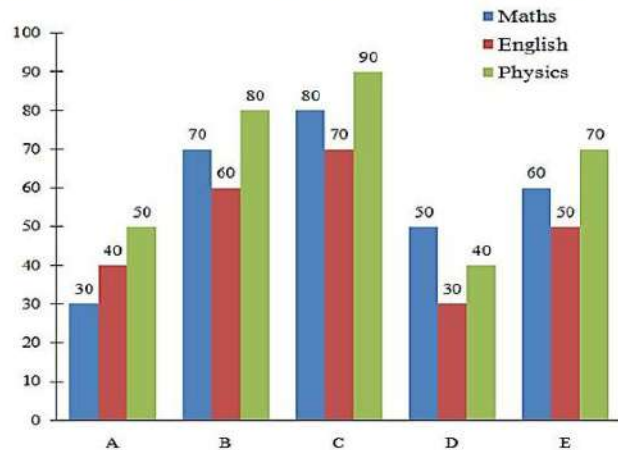
Question ID : 6549787390

Status : Not Answered

Chosen Option : --

Q.22 Study the following graph and answer the question that follows.

Marks scored by five students (A, B, C, D and E) in three subjects (Maths, English and Physics)



What is the ratio of the marks of D's in Maths and Physics together to the marks of B's in English and Physics?

- Ans**
- ☐ 1. 14 : 13
 - ☐ 2. 7 : 14
 - ☒ 3. 9 : 14
 - ☐ 4. 2 : 7

Question ID : 6549788618

Status : Answered

Chosen Option : 3

Q.23 The population of a town increased by 15% in 2018 and 10% in 2019. Due to a pandemic, it decreased by 10% in 2020. What was the percentage increase in the population of the town in 3 years?

- Ans**
- ☐ 1. 12.5%
 - ☐ 2. 17.5%
 - ☒ 3. 13.85%
 - ☐ 4. 15%

Question ID : 6549788096

Status : Not Answered

Chosen Option : --

Q.24 If $a : b = 2 : 3$ and $c : d = 5a : 3b$, then $2c : 5d$ is equal to:

- Ans
- ☒ 1. $1 : 1$
 - ☒ 2. $10 : 9$
 - ☒ 3. $4 : 9$
 - ☒ 4. $9 : 10$

Question ID : 6549788098

Status : Answered

Chosen Option : 3

Q.25 Solve the following equation and find the value of θ .

$$3 \cot \theta + \tan \theta - 2\sqrt{3} = 0, 0 < \theta < 90^\circ$$

- Ans
- ☒ 1. 30°
 - ☒ 2. 45°
 - ☒ 3. 60°
 - ☒ 4. 15°

Question ID : 6549787404

Status : Not Answered

Chosen Option : --

Section : General Awareness

Q.1 Which of the given Articles of the Constitution of India mentions the following?

"There shall be a council of Ministers with the Prime Minister at the head to aid and advise the President who shall in the exercise of his functions, act in accordance with such advice."

- Ans
- ☒ 1. Article 71(1)
 - ☒ 2. Article 71(2)
 - ☒ 3. Article 74(1)
 - ☒ 4. Article 74(2)

Question ID : 6549787430

Status : Answered

Chosen Option : 1

Q.2 In which country was the World Snooker Championship 2020 held from 31 July to 16 August 2020?

- Ans
- ☒ 1. England
 - ☒ 2. Germany
 - ☒ 3. Switzerland
 - ☒ 4. France

Question ID : 6549787432

Status : Not Answered

Chosen Option : --

Q.3 In which year did India host the Commonwealth Games?

- Ans
- ☒ 1. 2018
 - ☒ 2. 2010
 - ☒ 3. 2006
 - ☒ 4. 2014

Question ID : **6549788138**
Status : **Answered**
Chosen Option : **2**

Q.4 What is the generic name of calcium sulphate hemihydrate?

- Ans
- ☒ 1. Baking soda
 - ☒ 2. Plaster of Paris
 - ☒ 3. Detergent powder
 - ☒ 4. Vinegar

Question ID : **6549788126**
Status : **Answered**
Chosen Option : **2**

Q.5 Which of the following rivers originates from the state of Rajasthan?

- Ans
- ☒ 1. Narmada
 - ☒ 2. Banas
 - ☒ 3. Mahi
 - ☒ 4. Chambal

Question ID : **6549787421**
Status : **Answered**
Chosen Option : **2**

Q.6 Who was the ruler of Delhi sultanate when Ibn Batuta came in India?

- Ans
- ☒ 1. Alauddin Khalji
 - ☒ 2. Firuz Shah Tughlaq
 - ☒ 3. Muhammad Bin Tughlaq
 - ☒ 4. Ibrahim Lodi

Question ID : **6549787425**
Status : **Answered**
Chosen Option : **1**

Q.7 Which of the following keyboard shortcuts will you press in order to minimise all programs on a computer screen and display the desktop?

- Ans
- ☐ 1. Windows + C
 - ☐ 2. Windows + M
 - ☐ 3. Windows + F
 - ☒ 4. Windows + D

Question ID : 6549788116

Status : **Not Answered**

Chosen Option : --

Q.8 Which has been India's most successful sport in the history of Olympic games having won medals maximum number of times till December 2020?

- Ans
- ☐ 1. Badminton
 - ☐ 2. Football
 - ☐ 3. Wrestling
 - ☒ 4. Field Hockey

Question ID : 6549788140

Status : **Answered**

Chosen Option : 3

Q.9 In which of the following caves is the painting named 'Padmapani Bodhisattva' found?

- Ans
- ☐ 1. Ajanta Cave No. 4
 - ☐ 2. Ajanta Cave No. 2
 - ☐ 3. Ajanta Cave No. 3
 - ☒ 4. Ajanta Cave No. 1

Question ID : 6549787412

Status : **Not Answered**

Chosen Option : --

Q.10 Down Syndrome, which causes learning difficulties and physical health development delays and disabilities, is a:

- Ans
- ☐ 1. bacterial disease
 - ☒ 2. genetic disease
 - ☐ 3. viral disease
 - ☐ 4. fungal disease

Question ID : 6549787420

Status : **Answered**

Chosen Option : 2

Q.11 Who among the following became the youngest speaker of Lok Sabha till March 2021?

- Ans ☒ 1. Ganti Mohana Chandra Balayogi
☐ 2. Meira Kumar
☐ 3. Sumitra Mahajan
☐ 4. PA Sangma

Question ID : 6549788136
Status : Answered
Chosen Option : 4

Q.12 _____ launched 'Harit Path', a mobile app, in 2020.

- Ans ☒ 1. National Highways Authority of India
☐ 2. Pradhan Mantri Gram Sadak Yojana
☐ 3. Central Public Works Department
☐ 4. Public Works Department of Delhi

Question ID : 6549788120
Status : Answered
Chosen Option : 1

Q.13 निम्नलिखित में से कौन सी एशिया की सबसे बड़ी खारे पानी की झील है?

- Ans ☐ 1. लोकटक
☐ 2. पुलीकट
☐ 3. वूलर
☒ 4. चिलका

Question ID : 6549788130
Status : Answered
Chosen Option : 4

Q.14 CorelDraw is an example of a/an:

- Ans ☐ 1. database software
☐ 2. accounting software
☐ 3. spreadsheet software
☒ 4. desktop publishing software

Question ID : 6549787410
Status : Not Answered
Chosen Option : --

Q.15 What minimum support price per quintal of groundnut has been declared by the Government of India for the marketing season 2020-21?

- Ans ☒ 1. ₹5275
☐ 2. ₹6765
☐ 3. ₹6285
☐ 4. ₹4795

Question ID : 6549787417
Status : Not Answered
Chosen Option : --

Q.16 Mirzai and bandi (types of jackets in white or black) are popular in the _____ region/s.

- Ans ☐ 1. Ladakh and Kashmir
☒ 2. Bundelkhand and Malwa
☐ 3. Western Ghat
☐ 4. North Eastern

Question ID : 6549788118
Status : Answered
Chosen Option : 2

Q.17 What do you call the point in the orbit of the moon or a satellite at which it is nearest to Earth?

- Ans ☒ 1. Perigee
☐ 2. Eclipse
☐ 3. Apsis
☐ 4. Apogee

Question ID : 6549788131
Status : Answered
Chosen Option : 1

Q.18 Which of the following types of rocks are formed by the lithification process?

- Ans ☒ 1. Sedimentary rocks
☐ 2. Metamorphic rocks
☐ 3. Igneous rocks
☐ 4. Primary rocks

Question ID : 6549787422
Status : Answered
Chosen Option : 1

Q.19 Bhaskaravarman of the Varman dynasty ruled in the ____ region.

- Ans ☒ 1. Kamarupa
☒ 2. Ujjain
☒ 3. Magadha
☒ 4. Vaishali

Question ID : 6549788133
Status : Not Answered
Chosen Option : --

Q.20 Who among the following took charge as the CEO and Managing Director of HDFC Bank in October 2020?

- Ans ☒ 1. Sashidhar Jagdishan
☒ 2. Rakesh Sharma
☒ 3. Sandeep Bakhshi
☒ 4. Amitabh Chaudhry

Question ID : 6549788123
Status : Answered
Chosen Option : 1

Q.21 Convention on the prohibition of the use of nuclear weapons and reducing nuclear danger under the nuclear weapons cluster were two resolutions sponsored by India that ____ adopted in 2020.

- Ans ☒ 1. UN General Assembly
☒ 2. World Health Organization
☒ 3. World Bank
☒ 4. International Labour Organization

Question ID : 6549788121
Status : Answered
Chosen Option : 1

Q.22 Which of the following organisations released the 'Global Economic Freedom Index 2020 Annual Report'?

- Ans ☒ 1. Germanwatch
☒ 2. StartupBlink
☒ 3. The Heritage Foundation
☒ 4. World Economic Forum

Question ID : 6549787415
Status : Answered
Chosen Option : 1

Q.23 Which of the following is NOT a use of washing soda?

- Ans
- ☐ 1. It can be used as a cleaning agent for domestic purposes.
 - ☐ 2. It is used in glass, soap and paper industries.
 - ☒ 3. It is used to make drinking water free from germs.
 - ☐ 4. It is used for removing permanent hardness of water.

Question ID : 6549787418

Status : Answered

Chosen Option : 3

Q.24 In 2020, the Nobel Prize in Physiology or Medicine was awarded jointly to Harvey J Alter, Michael Houghton and Charles M Rice for the discovery of:

- Ans
- ☐ 1. Norwalk virus
 - ☐ 2. Epstein-Barr virus
 - ☐ 3. tobacco mosaic virus
 - ☒ 4. hepatitis C virus

Question ID : 6549787427

Status : Answered

Chosen Option : 3

Q.25 Which Indian actor was conferred with the 'Most Inspiring Indian Bollywood Actor' award in the UK in 2019?

- Ans
- ☐ 1. John Abraham
 - ☐ 2. Nawazuddin Siddique
 - ☒ 3. Sanjay Kapoor
 - ☐ 4. Boman Irani

Question ID : 6549788135

Status : Answered

Chosen Option : 2

Combined Higher Secondary Level Examination 2020 (Tier-I)

Roll Number	Join Telegram: HaryanaJobs.in
Candidate Name	
Venue Name	
Exam Date	04/08/2021
Exam Time	3:00 PM - 4:00 PM
Subject	Combined Higher Secondary Level Exam 2020

Section : English Language

Q.1 In the given sentence identify the segment which contains the grammatical error.

I would have died if he did not dress my wound that day.

- Ans ☒ 1. if he did not dress
☒ 2. that day
☒ 3. I would have died
☒ 4. my wound

Question ID : 6549787841

Status : Answered

Chosen Option : 3

Q.2 Select the most appropriate word to fill in the blank.

Priya has a very _____ nature and does not accept financial help even from her own parents.

- Ans ☒ 1. impartial
☒ 2. disinterested
☒ 3. biased
☒ 4. independent

Question ID : 6549787054

Status : Answered

Chosen Option : 4

Q.3 Select the most appropriate synonym of the given word.

Encroach

- Ans ☒ 1. Disregard
☒ 2. Ignore
☒ 3. Intrude
☒ 4. Forget

Question ID : 6549787052

Status : Answered

Chosen Option : 3

Q.4 Sentences of a paragraph are given below in jumbled order. Arrange the sentences in the right order to form a meaningful and coherent paragraph.





- A. Cheetahs are one of the world's most-recognisable cats, known especially for their speed.
B. Their faces too are distinguished by prominent black lines that curve from the inner corner of each eye to the outer corners of the mouth, like a well-worn trail of inky tears.
C. Cheetahs are covered almost entirely with small black spots on a background of pale yellow and have a white underbelly.
D. They have a long, slender body measuring 1.2 metres (4 feet), with a long tail (65–85 cm [2–3 feet]) that generally ends in a white tuft.

- Ans  1. BADC
 2. ABDC
 3. DABC
 4. CADB

Question ID : **6549787040**
Status : **Answered**
Chosen Option : **2**

Q.5 Select the most appropriate meaning of the given idiom.

Pull something off

- Ans  1. Drag something forcibly
 2. Take out the cover or lid
 3. Make something happen
 4. Make a lot of noise

Question ID : **6549787046**
Status : **Answered**
Chosen Option : **3**

Q.6 Select the most appropriate meaning of the given idiom.





Go to the dogs

- Ans  1. Fail miserably
 2. Deteriorate shockingly
 3. Want something badly
 4. Go crazy

Question ID : **6549787855**
Status : **Answered**
Chosen Option : **2**

Q.7 Select the option that can be used as a one-word substitute for the given group of words.

Fond of company

- Ans  1. Cheerful
 2. Gracious
 3. Gregarious
 4. Amiable

Question ID : **6549787051**
Status : **Answered**
Chosen Option : **3**

Q.8 Select the most appropriate option to substitute the underlined segment in the given sentence. If there is no need to substitute it, select 'No improvement'.

The child is crying because she can't find her mother.

- Ans ☒ 1. No improvement
☐ 2. A child is crying
☐ 3. The child has cried
☐ 4. The child were crying

Question ID : **6549787850**
Status : **Answered**
Chosen Option : **2**

Q.9 Select the INCORRECTLY spelt word.

- Ans ☐ 1. Callous
☐ 2. Vicious
☒ 3. Hienous
☐ 4. Vicarious

Question ID : **6549787049**
Status : **Answered**
Chosen Option : **3**

Q.10 Select the most appropriate ANTONYM of the given word.

INDIGNANT

- Ans ☐ 1. Annoyed
☒ 2. Pleased
☐ 3. Upset
☐ 4. Peeved

Question ID : **6549787853**
Status : **Answered**
Chosen Option : **2**

Q.11 Select the most appropriate ANTONYM of the given word.

Harrowing

- Ans ☐ 1. Worrying
☐ 2. Repetitive
☒ 3. Pleasant
☐ 4. Stressful

Question ID : **6549787044**
Status : **Answered**
Chosen Option : **3**

Q.12 Select the option that expresses the given sentence in direct speech.

My friends say that many young people are very active on social media now.

- Ans
- ☒ 1. My friends say, "Many young people were very active on social media now."
 - ☒ 2. My friends said, "Many young people were very active on social media then."
 - ☒ 3. My friends say, "Many young people are very active on social media now."
 - ☒ 4. My friends are saying, "Many young people are very active on social media then."

Question ID : 6549787031

Status : Answered

Chosen Option : 3

Q.13 Select the most appropriate option to substitute the underlined segment in the given sentence. If there is no need to substitute it, select 'No substitution required'.

The roof is being held up over two stone pillars.

- Ans
- ☒ 1. is hold up on
 - ☒ 2. No substitution required
 - ☒ 3. was held above
 - ☒ 4. is held up by

Question ID : 6549787043

Status : Answered

Chosen Option : 4

Q.14 Given below are four jumbled sentences. Out of the given options pick the one that gives their correct order.

- A. He confessed that the only thing he was afraid of was snakes.
- B. On my second visit to West Africa I met a young man on board the ship.
- C. I told him that it was very unlikely that he would see any.
- D. He was going out to take up a job in a banana plantation.

- Ans
- ☒ 1. BDAC
 - ☒ 2. ADBC
 - ☒ 3. BACD
 - ☒ 4. DBAC

Question ID : 6549787849

Status : Not Attempted and
Marked For Review

Chosen Option : --

Q.15 Select the INCORRECTLY spelt word.

- Ans
- ☒ 1. Entreat
 - ☒ 2. Entrust
 - ☒ 3. Envelope
 - ☒ 4. Envoy

Question ID : 6549787856

Status : Answered

Chosen Option : 3

Q.16 Select the word which means the same as the group of words given.

A person who arranges and sells cut flowers

- Ans
- ☒ 1. Botanist
 - ☒ 2. Anthropologist
 - ☒ 3. Horticulturist
 - ☒ 4. Florist

Question ID : **6549787858**
Status : **Answered**
Chosen Option : **4**

Q.17 Select the correct passive form of the given sentence.

At the last moment, a fireman pulled out Manohar from the burning bus.

- Ans
- ☒ 1. At the last moment, Manohar was pulling out of the burning bus by a fireman.
 - ☒ 2. At the last moment, Manohar was pulled out of the burning bus by a fireman.
 - ☒ 3. At the last moment, Manohar had been pulled out of the burning bus by a fireman.
 - ☒ 4. At the last moment, a fireman was pulled out of the burning bus by Manohar.

Question ID : **6549787838**
Status : **Answered**
Chosen Option : **2**

Q.18 Select the most appropriate word to fill in the blank in the given sentence.

The passengers waited _____ for the local train to arrive.

- Ans
- ☒ 1. hastily
 - ☒ 2. meekly
 - ☒ 3. patiently
 - ☒ 4. considerably

Question ID : **6549787863**
Status : **Answered**
Chosen Option : **3**

Q.19 Select the most appropriate synonym of the given word.

APPARENTLY

- Ans
- ☒ 1. Seemingly
 - ☒ 2. Considerably
 - ☒ 3. Unlikely
 - ☒ 4. Questionably

Question ID : **6549787861**
Status : **Answered**
Chosen Option : **3**

Q.20 The following sentence has been divided into parts. One of them may contain an error. Select the part that contains the error from the given options. If you don't find any error, mark 'No error' as your answer.

At the workshop, / they were taught how to nail / the pieces of wood together to create toys.

Ans



1. No error



2. they were taught how to nail



3. the pieces of wood together to create toys



4. At the workshop

Question ID : **6549787032**

Status : **Not Answered**

Chosen Option : --

Comprehension:

In the following passage some words have been deleted. Fill in the blanks with the help of the alternatives given. Select the most appropriate option for each blank.

Equiano was born in 1745 in Nigeria. When he (1) _____ about eleven, Equiano was kidnapped and sold to slave traders headed (2) _____ the West Indies. Though he spent a brief (3) _____ in the state of Virginia, much of Equiano's time (4) _____ serving on slave ships and British navy vessels. In his service on these (5) _____, Equiano traveled extensively.

SubQuestion No : 21

Q.21 Select the most appropriate option for blank number1.

Ans



1. is



2. were



3. are



4. was

Question ID : **6549787843**

Status : **Answered**

Chosen Option : 4

Comprehension:

In the following passage some words have been deleted. Fill in the blanks with the help of the alternatives given. Select the most appropriate option for each blank.

Equiano was born in 1745 in Nigeria. When he (1) _____ about eleven, Equiano was kidnapped and sold to slave traders headed (2) _____ the West Indies. Though he spent a brief (3) _____ in the state of Virginia, much of Equiano's time (4) _____ serving on slave ships and British navy vessels. In his service on these (5) _____, Equiano traveled extensively.

SubQuestion No : 22

Q.22 Select the most appropriate option for blank number 2.

Ans



1. on



2. to



3. in



4. about

Question ID : **6549787844**

Status : **Not Answered**

Chosen Option : --

Comprehension:

In the following passage some words have been deleted. Fill in the blanks with the help of the alternatives given. Select the most appropriate option for each blank.

Equiano was born in 1745 in Nigeria. When he (1) _____ about eleven, Equiano was kidnapped and sold to slave traders headed (2) _____ the West Indies. Though he spent a brief (3) _____ in the state of Virginia, much of Equiano's time (4) _____ serving on slave ships and British navy vessels. In his service on these (5) _____, Equiano traveled extensively.

SubQuestion No : 23

Q.23 Select the most appropriate option for blank number 3.

- Ans
- ☒ 1. era
 - ☒ 2. age
 - ☒ 3. period
 - ☒ 4. life

Question ID : **6549787845**

Status : **Not Answered**

Chosen Option : --

Comprehension:

In the following passage some words have been deleted. Fill in the blanks with the help of the alternatives given. Select the most appropriate option for each blank.

Equiano was born in 1745 in Nigeria. When he (1) _____ about eleven, Equiano was kidnapped and sold to slave traders headed (2) _____ the West Indies. Though he spent a brief (3) _____ in the state of Virginia, much of Equiano's time (4) _____ serving on slave ships and British navy vessels. In his service on these (5) _____, Equiano traveled extensively.

SubQuestion No : 24

Q.24 Select the most appropriate option for blank number 4.

- Ans
- ☒ 1. spent
 - ☒ 2. was spent
 - ☒ 3. is spent
 - ☒ 4. has been spent

Question ID : **6549787846**

Status : **Not Answered**

Chosen Option : --

Comprehension:

In the following passage some words have been deleted. Fill in the blanks with the help of the alternatives given. Select the most appropriate option for each blank.

Equiano was born in 1745 in Nigeria. When he (1) _____ about eleven, Equiano was kidnapped and sold to slave traders headed (2) _____ the West Indies. Though he spent a brief (3) _____ in the state of Virginia, much of Equiano's time (4) _____ serving on slave ships and British navy vessels. In his service on these (5) _____, Equiano traveled extensively.

SubQuestion No : 25

Q.25 Select the most appropriate option for blank number 5.

- Ans
- ☒ 1. liners
 - ☒ 2. crafts
 - ☒ 3. tankers
 - ☒ 4. ships

Question ID : **6549787847**

Status : **Not Answered**

Chosen Option : --

Q.1 Nirmala introduced Rahul as the son of the sister of her mother. How is Nirmala related to Rahul?

- Ans
- ☒ 1. Brother
 - ☒ 2. Brother-in-law
 - ☒ 3. Cousin
 - ☒ 4. Maternal uncle

Question ID : **6549787069**

Status : **Answered**

Chosen Option : **3**

Q.2 Which two signs should be interchanged to balance the following equation?

$$646 \div 19 - 746 + 20 \times 34 = 100$$

- Ans
- ☒ 1. - and ×
 - ☒ 2. × and +
 - ☒ 3. - and +
 - ☒ 4. × and ÷

Question ID : **6549787865**

Status : **Answered**

Chosen Option : **3**

Q.3 Select the correct option that indicates the arrangement of the given words in a logical and meaningful order.

1. Prescription
2. Diagnosis
3. Illness
4. Follow-up
5. Recovery

- Ans
- ☒ 1. 3-4-1-2-5
 - ☒ 2. 1-2-5-3-4
 - ☒ 3. 3-2-1-5-4
 - ☒ 4. 2-3-1-4-5

Question ID : **6549787063**

Status : **Answered**

Chosen Option : **4**

Q.4 Four letter-clusters have been given, out of which three are alike in some manner and one is different. Select the letter-cluster that is different.

- Ans
- ☒ 1. PVBH
 - ☒ 2. CIOU
 - ☒ 3. SYDJ
 - ☒ 4. KQWC

Question ID : **6549787071**

Status : **Answered**

Chosen Option : **3**

Q.5 In a certain code language, CANDIDATE is coded as 846292417 and ACTION is coded as 481936. How will DICTATION be coded in that language?

- Ans**
- ☒ 1. 493212965
 - ☒ 2. 298242956
 - ☒ 3. 493212975
 - ☒ 4. 298141936

Question ID : **6549787065**


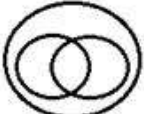
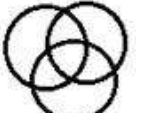
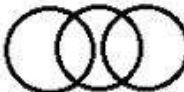
Status : **Answered**

Chosen Option : **4**

Q.6 Select the Venn diagram that best represents the relationship between the following classes.

Teachers, Graduates, Tennis players

Ans

- ☒ 1. 
- ☒ 2. 
- ☒ 3. 
- ☒ 4. 

Question ID : **6549787080**

Status : **Answered**

Chosen Option : **3**

Q.7 Three different positions of the same dice are shown. Select the number that will be on the face opposite to the face having 6.



Ans

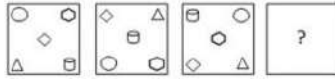
- ☒ 1. 2
- ☒ 2. 4
- ☒ 3. 3
- ☒ 4. 1

Question ID : **6549787074**

Status : **Answered**

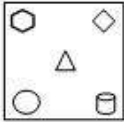
Chosen Option : **1**

Q.8 Select the figure from among the given options that can replace the question mark (?) in the following series.

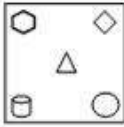


Ans

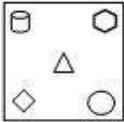
☒ 1.



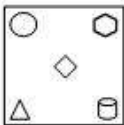
☒ 2.



☒ 3.



☒ 4.



Question ID : **6549787075**

Status : **Answered**

Chosen Option : **2**

Q.9 Select the option that is related to the third word in the same way as the second word is related to the first word.

Galvanometer : Electric current : : Graphometer : ?

Ans

☒ 1. Angles

☒ 2. Oscillations

☒ 3. Altitudes

☒ 4. Humidity

Question ID : **6549787875**

Status : **Answered**

Chosen Option : **1**

Q.10 In a certain code language, PROUD is written as WYJPK. How will GUILTY be written in that language?

Ans

☒ 1. BPBOGT

☒ 2. NDPASF

☒ 3. NPDSAF

☒ 4. BBPGOT

Question ID : **6549787872**

Status : **Answered**

Chosen Option : **1**

Q.11 From the given options choose the one in which the set of numbers do not follow the same Logic/Rule/Relation as the numbers given in below set.

(32, 16, 96)

- Ans
- ☒ 1. (42, 21, 126)
 - ☒ 2. (26, 13, 78)
 - ☒ 3. (36, 18, 108)
 - ☒ 4. (22, 11, 68)

Question ID : 6549787867

Status : Answered

Chosen Option : 2

Q.12 Select the option in which the numbers share the same relationship as that shared by the given pair of numbers.

185 : 199

- Ans
- ☒ 1. 139 : 152
 - ☒ 2. 174 : 187
 - ☒ 3. 126 : 134
 - ☒ 4. 89 : 106

Question ID : 6549787058

Status : Not Answered

Chosen Option : --

Q.13 Select the option in which the words share the same relationship as that shared by the given pair of words.

Power : Watt

- Ans
- ☒ 1. Current : Volt
 - ☒ 2. Force : Pascal
 - ☒ 3. Volume : Pound
 - ☒ 4. Resistance : Ohm

Question ID : 6549787070

Status : Answered

Chosen Option : 4

Q.14 Select the number from among the given options that can replace the question mark (?) in the following series.

4, 5, 13, 22, 86, 111, ?

- Ans
- ☒ 1. 327
 - ☒ 2. 427
 - ☒ 3. 247
 - ☒ 4. 237

Question ID : 6549787869

Status : Answered

Chosen Option : 1

Q.15 Four numbers have been given, out of which three are alike in some manner and one is different. Select the number that is different.

- Ans ☒ 1. 348
☒ 2. 231
☒ 3. 252
☒ 4. 217

Question ID : **6549787062**
Status : **Answered**
Chosen Option : **4**

Q.16 A driver increases the speed of his vehicle by 5 km/h after every one hour. If the initial speed of the vehicle was 75 km/h, then what was the average speed of the vehicle in a journey of 4 hours?

- Ans ☒ 1. 82.5 km/h
☒ 2. 83.75 km/h
☒ 3. 83 km/h
☒ 4. 82km/h

Question ID : **6549787056**
Status : **Answered**
Chosen Option : **1**

Q.17 Read the given statements and conclusions carefully. Assuming that the information given in the statements is true, even if it appears to be at variance with commonly known facts, decide which of the given conclusions logically follow(s) from the statements.

Statements:

All plots are flats.

All flats are hotels.

Some hotels are restaurants.

Conclusions:

I. Some restaurants are flats.

II. Some hotels are plots.

III. No plot is a restaurant.

- Ans ☒ 1. Only conclusion I follows .
☒ 2. Only conclusion II follows .
☒ 3. Both conclusions I and II follow .
☒ 4. Both conclusions II and III follow .

Question ID : **6549787881**
Status : **Answered**
Chosen Option : **2**

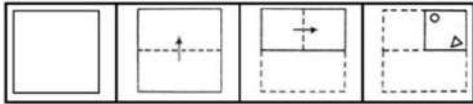
Q.18 Select the option that is related to the third term in the same way as the second term is related to the first term.

AMIDST : AIMDST :: SYNTAX : ?

- Ans ☒ 1. SNYATX
☒ 2. NYSTAX
☒ 3. SANYTX
☒ 4. NSYATX

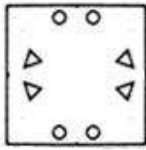
Question ID : **6549787874**
Status : **Marked For Review**
Chosen Option : **1**

Q.19 The sequence of folding a piece of paper and the manner in which the folded paper has been cut is shown in the following figures. How would this paper look when unfolded?

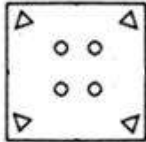


Ans

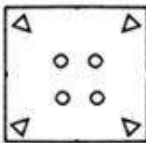
☒ 1.



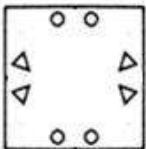
☒ 2.



☒ 3.



☒ 4.



Question ID : 6549787886

Status : Answered

Chosen Option : 4

Q.20 Select the combination of letters that when sequentially placed in the blanks of the given letter series will complete the series.

p l _ p p _ s p _ l s p p l _ p

Ans

☒ 1. s p p l

☒ 2. s l p s

☒ 3. l s l p

☒ 4. p l s p

Question ID : 6549786159

Status : Answered

Chosen Option : 2

Q.21 Four words have been given, out of which three are alike in some manner and one is different. Select the word that is different.

Ans

☒ 1. Fluster

☒ 2. Confound

☒ 3. Agitate

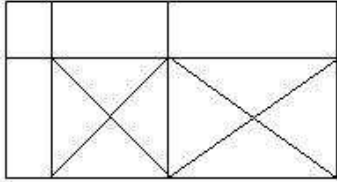
☒ 4. Calm

Question ID : 6549787880

Status : Answered

Chosen Option : 3

Q.22 How many rectangles are there in the given figure?



Ans ☒ 1. 18

☐ 2. 20

☐ 3. 16

☐ 4. 19

Question ID : 6549787076

Status : Answered

Chosen Option : 4

Q.23 Select the option in which the numbers are related in the same way as are the numbers of the following set.

(2194, 1328, 726)

Ans ☐ 1. (1170, 570, 228)

☐ 2. (1560, 1131, 551)

☐ 3. (1406, 962, 390)

☒ 4. (1725, 997, 509)

Question ID : 6549787060

Status : Not Answered

Chosen Option : --

Q.24 Select the correct mirror image of the given combination when the mirror is placed at 'PQ' as shown.

ARISTOCRAT

Ans ☐ 1. VBI2LOCBA7

☐ 2. VBI2LCOB7A

☐ 3. TAJOC72IRA

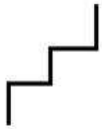
☒ 4. TAJOC72IRA

Question ID : 6549787887

Status : Answered

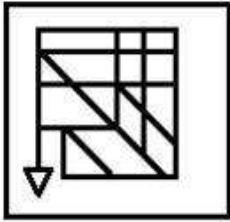
Chosen Option : 4

Q.25 Select the option in which the given figure is embedded (rotation is NOT allowed).

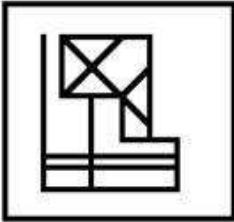


Ans

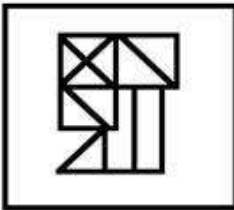
✓ 1.



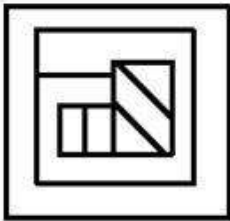
✗ 2.



✗ 3.



✗ 4.



Question ID : 6549787885

Status : Answered

Chosen Option : 1

Section : Quantitative Aptitude

Q.1 When $(2^{24} - 1)$ is divided by 7, the remainder is:

Ans ✗ 1. 2

✓ 2. 0

✗ 3. 4

✗ 4. 1

Question ID : 6549787097

Status : Answered

Chosen Option : 2

Q.2 If $a + b + c = 7$ and $a^3 + b^3 + c^3 - 3abc = 301$, then $ab + bc + ca = ?$

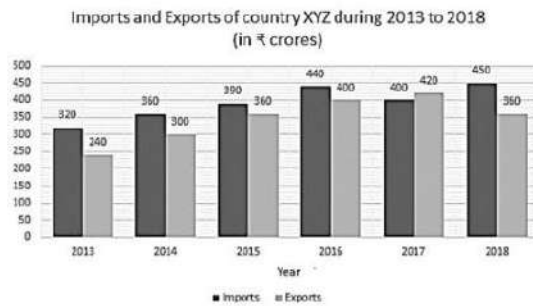
- Ans
- ☒ 1. -4
 - ☒ 2. -2
 - ☒ 3. 3
 - ☒ 4. 2

Question ID : 6549787904

Status : Answered

Chosen Option : 4

Q.3 Study the given graph and answer the question that follows.



By what percentage is the total exports in 2014 and 2016 less than the total imports in the same two years?

- Ans
- ☒ 1. 12.5
 - ☒ 2. 12.9
 - ☒ 3. 14.3
 - ☒ 4. 11.25

Question ID : 6549786599

Status : Answered

Chosen Option : 1

Q.4 In a circle with centre O , chord AB and diameter CD intersect each other at point E , inside the circle. If $\angle AOD = 42^\circ$ and $\angle BOC = 104^\circ$, then what is the measure (in degrees) of $\angle AED$?

- Ans
- ☒ 1. 73
 - ☒ 2. 62
 - ☒ 3. 58
 - ☒ 4. 84

Question ID : 6549787899

Status : Answered

Chosen Option : 1

Q.5 If $x^2 - 3\sqrt{2}x + 1 = 0$, then what is the value of $x^3 + \left(\frac{1}{x^3}\right)$?

- Ans
- ☒ 1. $30\sqrt{6}$
 - ☒ 2. $45\sqrt{2}$
 - ☒ 3. $15\sqrt{6}$
 - ☒ 4. $30\sqrt{2}$

Question ID : 6549787903

Status : Answered

Chosen Option : 2

Q.6 If $x^2 + 1 - 2x = 0$, $x > 0$, then $x^2(x^2 - 2) =$ _____.

- Ans
- ☒ 1. 1
 - ☒ 2. $\sqrt{2}$
 - ☒ 3. -1
 - ☒ 4. 0

Question ID : 6549787094

Status : Answered

Chosen Option : 3

Q.7 Chords AB and CD of a circle intersect externally at P. If CD = 11.6 cm, PD = 6.4 cm and PB = 7.2 cm, then AB (in cm) is equal to:

- Ans
- ☒ 1. 12
 - ☒ 2. 16
 - ☒ 3. 8.8
 - ☒ 4. 4.8

Question ID : 6549787090

Status : Answered

Chosen Option : 3

Q.8 If $2\cos^2 \theta = 3(1 - \sin \theta)$, $0^\circ < \theta < 90^\circ$, then what is the value of $(\tan 2\theta + \operatorname{cosec} 3\theta - \sec 2\theta)$?

- Ans
- ☒ 1. $\sqrt{3} + 1$
 - ☒ 2. $\sqrt{3} - 1$
 - ☒ 3. $\frac{1+\sqrt{3}}{\sqrt{3}}$
 - ☒ 4. $\frac{1-\sqrt{3}}{\sqrt{3}}$

Question ID : 6549787909

Status : Answered

Chosen Option : 2

Q.9 The value of $8 \div 2$ of $3 - [56 \div 4$ of $\{4 \times 3 - (9 - 11) \div (2 \div 4$ of $4)\}$ is:

- Ans
- ☒ 1. $\frac{11}{6}$
 - ☒ 2. $\frac{5}{6}$
 - ☒ 3. $\frac{4}{3}$
 - ☒ 4. $\frac{1}{2}$

Question ID : 6549787906

Status : Answered

Chosen Option : 2

Q.10 The perimeters of two similar triangles ABC and PQR are 156 cm and 46.8 cm, respectively. If BC = 19.5 cm and QR = x cm, then the value of x is:

- Ans**
- ☒ 1. 5.85 cm
 - ☐ 2. 6.75 cm
 - ☐ 3. 3.76 cm
 - ☐ 4. 4.29 cm

Question ID : **6549787092**
 Status : **Answered**
 Chosen Option : 1

Q.11 A can complete a certain work in 30 days. He started the work. After 4 days, B joined him and the whole work was completed in 10 days from the beginning. B alone can complete one-third of the same work in:

- Ans**
- ☐ 1. 6 days
 - ☒ 2. 3 days
 - ☐ 3. 4 days
 - ☐ 4. 2 days

Question ID : **6549787889**
 Status : **Marked For Review**
 Chosen Option : 1

Q.12 If the difference between the compound interest compounded annually and the simple interest on a certain sum of money for three years at 10% per annum is ₹279, then the sum (in ₹) is:

- Ans**
- ☐ 1. 10,000
 - ☐ 2. 8,000
 - ☐ 3. 7,500
 - ☒ 4. 9,000

Question ID : **6549787089**
 Status : **Answered**
 Chosen Option : 4

Q.13 In $\triangle ABC$, $\angle A = 90^\circ$, $AB = 20$ cm and $BC = 29$ cm. What is the value of $(\sin B - \cot C)$?

- Ans**
- ☐ 1. $-\frac{9}{29}$
 - ☒ 2. $-\frac{189}{580}$
 - ☐ 3. $\frac{189}{580}$
 - ☐ 4. $\frac{9}{29}$

Question ID : **6549787907**
 Status : **Answered**
 Chosen Option : 2

Q.14 In a constituency, 55% of the total number of voters are males and the rest are females. If 40% of the males are illiterate and 40% of the females are literate, then by what percentage is the number of illiterate females more than that of the illiterate males (correct to one decimal place)?

- Ans ☒ 1. 22.7%
☐ 2. 16.4%
☐ 3. 21.5%
☐ 4. 20.8%

Question ID : 6549787086

Status : Not Answered

Chosen Option : --

Q.15 By selling 3 dozen oranges for ₹405, a trader loses 25%. How many oranges should he sell for ₹288 if he needs to earn a profit of 20% in the transaction?

- Ans ☐ 1. 18
☐ 2. 15
☒ 3. 16
☐ 4. 12

Question ID : 6549787895

Status : Not Answered

Chosen Option : --

Q.16 X and Y start at the same time to ride from place A to place B, which is 80 km away from A. X travels 4 km per hour slower than Y. Y reaches place B and at once turns back meeting X, 16 km from place B. Y's speed (in km/h) is:

- Ans ☐ 1. 9
☐ 2. 15
☐ 3. 8
☒ 4. 12

Question ID : 6549787082

Status : Answered

Chosen Option : 4

Q.17 There are three numbers. If the ratio of the first to the second number is 2 : 7 and that of the second to the third number is 5 : 8, then the ratio of the first to the third number is:

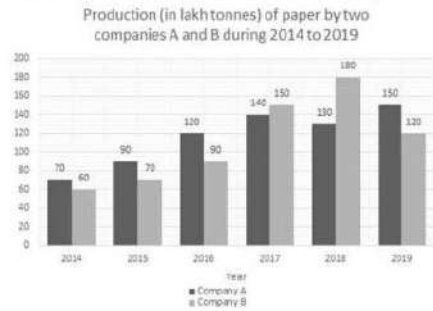
- Ans ☐ 1. 7 : 8
☒ 2. 5 : 28
☐ 3. 1 : 4
☐ 4. 5 : 7

Question ID : 6549787088

Status : Answered

Chosen Option : 2

Q.18 Study the given graph and answer the question that follows.



What is the ratio of the total production of paper by company A in 2016 and 2019 to the total production of paper by company B in 2014 and 2017?

- Ans ☒ 1. 9 : 7
☒ 2. 3 : 2
☒ 3. 5 : 4
☒ 4. 8 : 5

Question ID : 6549787910

Status : Answered

Chosen Option : 1

Q.19 BD and CE are the medians of $\triangle ABC$, right angled at A . If $CE = \frac{5\sqrt{13}}{2}$ cm, $BC = 10$ cm, then the length of BD is:

- Ans ☒ 1. $3\sqrt{7}$ cm
☒ 2. $3\sqrt{5}$ cm
☒ 3. $\sqrt{13}$ cm
☒ 4. $\frac{5}{2}\sqrt{7}$ cm

Question ID : 6549787901

Status : Answered

Chosen Option : 4

Q.20 The following histogram represents the daily earnings of 50 medical stores in a locality.



The difference between the percentage of medical stores whose daily earnings are less than ₹1,000 and the percentage of medical stores whose daily earnings are ₹1,200 and above is:

- Ans ☒ 1. 24%
☒ 2. 16%
☒ 3. 15%
☒ 4. 12%

Question ID : 6549787105

Status : Not Answered

Chosen Option : --

Q.21 The marked price of an article is ₹480. A person buys it at two successive discounts of 15% and 10%. He sells it at a profit of 25%. What is his profit (in ₹)?

- Ans**
- ☒ 1. 95.40
 - ☒ 2. 90.60
 - ☒ 3. 91.80
 - ☒ 4. 93.20

Question ID : **6549787893**

Status : **Answered**

Chosen Option : **3**

Q.22 The average of 19 numbers is 48. The average of the first 7 numbers is 50.6 and that of the last 13 numbers is 47.6. If the 7th number is excluded, then what is the average of the remaining numbers (correct to one decimal place)?

- Ans**
- ☒ 1. 42.4
 - ☒ 2. 49.5
 - ☒ 3. 39.6
 - ☒ 4. 47.3

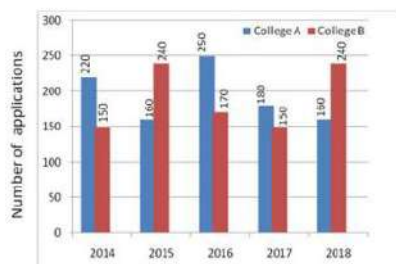
Question ID : **6549787804**

Status : **Answered**

Chosen Option : **4**

Q.23 Study the following bar graph and answer the question given below.

The bar graph represents the total number of applications received for B.Sc. Mathematics by two different colleges A and B in 5 different years.



Find the difference between the average number of applications received by college A from 2014 to 2018 and the average number of applications received by college B from 2014 to 2018?

- Ans**
- ☒ 1. 5
 - ☒ 2. 4
 - ☒ 3. 6
 - ☒ 4. 8

Question ID : **6549788821**

Status : **Answered**

Chosen Option : **2**

Q.24 As observed from the top of a lighthouse, 42 m high above sea-level, the angle of depression of a ship sailing directly towards it changes from 30° to 45° . The distance travelled by the ship during the period of observation is:

- Ans
- ☒ 1. $42(1 - \sqrt{3})$
 - ☒ 2. $42(\sqrt{3} + 1)$
 - ☒ 3. $42(\sqrt{3} - 1)$
 - ☒ 4. 42

Question ID : **6549787100**
 Status : **Answered**
 Chosen Option : **3**

Q.25 What is the cost (in ₹) of levelling a triangular park with sides 60 m, 112 m and 164 m at the rate of ₹10.50 per m^2 ?

- Ans
- ☒ 1. 21,063
 - ☒ 2. 20,160
 - ☒ 3. 21,168
 - ☒ 4. 21,000

Question ID : **6549787891**
 Status : **Not Answered**
 Chosen Option : --

Section : **General Awareness**

Q.1 According to which of the following Schedules to the Constitution provides for allocation of seats to the states and union territories in Rajya Sabha?

- Ans
- ☒ 1. Fourth
 - ☒ 2. Sixth
 - ☒ 3. Seventh
 - ☒ 4. Second

Question ID : **6549787935**
 Status : **Answered**
 Chosen Option : **2**

Q.2 Which of the following rivers rises in the west of Rohtang Pass in the Kullu hills of Himachal Pradesh and flows through the Chamba valley of the state?

- Ans
- ☒ 1. Satluj
 - ☒ 2. Ravi
 - ☒ 3. Beas
 - ☒ 4. Chenab

Question ID : **6549787121**
 Status : **Answered**
 Chosen Option : **1**

Q.3 How many Rajya Sabha seats come from the state of Assam?

- Ans ☒ 1. 7
- ☐ 2. 15
- ☐ 3. 9
- ☐ 4. 18

Question ID : **6549787126**
Status : **Answered**
Chosen Option : 1

Q.4 In which of the following years was the Cornwallis Code enacted?

- Ans ☐ 1. 1857
- ☒ 2. 1793
- ☐ 3. 1805
- ☐ 4. 1723

Question ID : **6549787930**
Status : **Answered**
Chosen Option : 2

Q.5 Which of the following is the full form of EBCDIC?

- Ans ☒ 1. Extended Binary-Coded-Decimal Interchange Code
- ☐ 2. Extended Binary-Control-Device Interchange Code
- ☐ 3. Electronic Binary-Coded-Device Interchange Code
- ☐ 4. Electronic Binary-Control-Decimal Interchange Code

Question ID : **6549787915**
Status : **Answered**
Chosen Option : 3

Q.6 Which of the following factors is NOT responsible for the loss of fertility of agricultural land?

- Ans ☐ 1. Salinisation of soil
- ☒ 2. Higher cation exchange capacity of soil
- ☐ 3. Alkalisiation of soil
- ☐ 4. Waterlogging

Question ID : **6549787120**
Status : **Answered**
Chosen Option : 4

Q.7 Which of the following banks has signed a loan of \$40 million to Northern Arc Capital to support the microfinance borrowers and the MSME sectors in India?

- Ans ☐ 1. AIIB
- ☐ 2. World Bank
- ☐ 3. IMF
- ☒ 4. ADB

Question ID : **6549787922**
Status : **Not Answered**
Chosen Option : --

Q.8 Which of the following devices accepts the results produced by the computer in a machine-readable form?

- Ans
- ☒ 1. Microphone
 - ☒ 2. Printer
 - ☒ 3. Graphics tablet
 - ☒ 4. Mouse

Question ID : **6549787106**
Status : **Answered**
Chosen Option : **2**

Q.9 Kuldeep Handoo has won the Dronacharya Award in 2020. He belongs to which of the following sports?

- Ans
- ☒ 1. Wushu
 - ☒ 2. Swimming
 - ☒ 3. Boxing
 - ☒ 4. Wrestling

Question ID : **6549787937**
Status : **Not Answered**
Chosen Option : --

Q.10 Which of the following is one of the basic plant nutrients of fertilizers that are commonly used in agriculture?

- Ans
- ☒ 1. Sodium
 - ☒ 2. Mercury
 - ☒ 3. Arsenic
 - ☒ 4. Potassium

Question ID : **6549787923**
Status : **Answered**
Chosen Option : **4**

Q.11 Who among the following has written the novel 'The Awasthis of Aamnagri'?

- Ans
- ☒ 1. Shubha Sharma
 - ☒ 2. Debashish Panigrahi
 - ☒ 3. Sarabjit Singh
 - ☒ 4. Chetan Bhagat

Question ID : **6549787932**
Status : **Not Answered**
Chosen Option : --

Q.12 The 'SAKSHAM' campaign launched by the Government of India in January 2021 aims to spread awareness about _____.

- Ans
- ☒ 1. adoption of cleaner fuels
 - ☒ 2. empowerment of women
 - ☒ 3. protection of girl child
 - ☒ 4. education for children

Question ID : **6549787111**
Status : **Answered**
Chosen Option : **2**

Q.13 Who among the following footballers won the 'Best FIFA Men's Player Award' 2020?

- Ans
- ☒ 1. Lionel Messi
 - ☒ 2. Cristiano Ronaldo
 - ☒ 3. Robert Lewandowski
 - ☒ 4. Raheem Sterling

Question ID : **6549787128**
Status : **Answered**
Chosen Option : **2**

Q.14 Shigmotsav is essentially a festival of the masses, celebrated on the full moon day in the month of Phalguna (March). Which state celebrates this festival?

- Ans
- ☒ 1. Haryana
 - ☒ 2. Meghalaya
 - ☒ 3. Sikkim
 - ☒ 4. Goa

Question ID : **6549787917**
Status : **Answered**
Chosen Option : **3**

Q.15 India has engaged actively in the multilateral negotiations in the UNFCCC. What is the full form of UNFCCC?

- Ans
- ☒ 1. United Nations Framework of Central Climate Change
 - ☒ 2. United Nations Fellowship of Central Climate Change
 - ☒ 3. United Nations Framework Convention on Climate Change
 - ☒ 4. United Nations Fellowship Convention on Climate Change

Question ID : **6549787925**
Status : **Answered**
Chosen Option : **1**

Q.16 Suryadhar lake is located in which of the following states?

- Ans
- ☒ 1. Himachal Pradesh
 - ☒ 2. Arunachal Pradesh
 - ☒ 3. Uttarakhand
 - ☒ 4. Meghalaya

Question ID : **6549787926**
Status : **Not Answered**
Chosen Option : **--**

Q.17 Which of the followings sports was added to the Asian Beach Games Program 2021 as of December 2020?

- Ans
- ☒ 1. Athletics
 - ☒ 2. Aquatics
 - ☒ 3. Basketball
 - ☒ 4. Coastal Rowing

Question ID : **6549787130**
Status : **Not Answered**
Chosen Option : **--**

Q.18 In which of the following states is Buxa National Park situated?

- Ans
- ☐ 1. Punjab
 - ☐ 2. Haryana
 - ☐ 3. Karnataka
 - ☒ 4. West Bengal

Question ID : 6549787927

Status : Answered

Chosen Option : 4

Q.19 Which of the following states Government has unveiled the 'Farmer Registration and Unified beneficiary Information System' (FRUITS), an e-governance portal, to create a repository of farmland information and farm loan details on a single platform?

- Ans
- ☒ 1. Karnataka
 - ☐ 2. Tamil Nadu
 - ☐ 3. Kerala
 - ☐ 4. Chhattisgarh

Question ID : 6549787920

Status : Not Answered

Chosen Option : --

Q.20 In which of the following cities was India's first indigenously designed and developed driverless metro car unveiled in January 2021?

- Ans
- ☐ 1. Delhi
 - ☐ 2. Chennai
 - ☐ 3. Kolkata
 - ☒ 4. Bengaluru

Question ID : 6549787110

Status : Answered

Chosen Option : 4

Q.21 Who among the following were awarded the Nobel Prize 2020 in Economics Sciences?

- Ans
- ☐ 1. James J Heckman and Daniel L McFadden
 - ☒ 2. Paul R Milgrom and Robert B Wilson
 - ☐ 3. William Vickrey and James A Mirrlees
 - ☐ 4. Robert W Fogel and Douglass C North

Question ID : 6549787125

Status : Not Answered

Chosen Option : --

Q.22 Which of the following battles did Maulvi Ahmadullah Shah fight, defeating the forces under Henry Lawrence?

- Ans
- ☐ 1. Battle of Kintoor
 - ☐ 2. Battle of Saragarhi
 - ☒ 3. Battle of Chinhat
 - ☐ 4. Battle of Najafgarh

Question ID : 6549787123

Status : Not Answered

Chosen Option : --

Q.23 Which of the following is used as a primary means of implementing the monetary policy of the Reserve Bank of India?

Ans



1. Repo rate



2. Call money



3. Mumbai Interbank Offer Rate



4. Promissory notes

Question ID : **6549787113**

Status : **Answered**

Chosen Option : **1**

Q.24 In which of the following states is Sri Bhramaramba Mallikarjuna Temple located?

Ans



1. Andhra Pradesh



2. Odisha



3. Maharashtra



4. Tamil Nadu

Question ID : **6549787108**

Status : **Not Answered**

Chosen Option : **--**

Q.25 Which of the following diseases is caused by Helicobacter pylori?

Ans



1. Gastritis



2. Ringworm



3. Chikungunya



4. Rubella

Question ID : **6549787116**

Status : **Not Answered**

Chosen Option : **--**

Combined Higher Secondary Level Examination 2020 (Tier-I)

Roll Number	Join Telegram: HaryanaJobs.in
Candidate Name	
Venue Name	
Exam Date	05/08/2021
Exam Time	9:00 AM - 10:00 AM
Subject	Combined Higher Secondary Level Exam 2020

Section : English Language

Q.1 Select the most appropriate word to fill in the blank.

Today you may not _____ what you hear, but that is the truth and you have to accept it.

- Ans
- ☒ 1. answer
 - ☒ 2. reply
 - ☒ 3. enjoy
 - ☒ 4. like

Question ID : 6549787761

Status : Answered

Chosen Option : 4

Q.2 Select the option that can be used as a one-word substitute for the given group of words.

The branch of physics concerned with the properties of sound

- Ans
- ☒ 1. Optics
 - ☒ 2. Photonics
 - ☒ 3. Mechanics
 - ☒ 4. Acoustics

Question ID : 6549786343

Status : Answered

Chosen Option : 2

Q.3 Select the most appropriate word to fill in the blank.

His voice was _____ by the sound of the helicopter.

- Ans
- ☒ 1. driven
 - ☒ 2. drawn
 - ☒ 3. dawned
 - ☒ 4. drowned

Question ID : 6549786348

Status : Answered

Chosen Option : 1





Q.4 Select the INCORRECTLY spelt word.

- Ans  1. Resolute
 2. Hautily
 3. Discussion
 4. Evidence

Question ID : **6549787756**
 Status : **Answered**
 Chosen Option : **2**

Q.5 Sentences of a paragraph are given below in jumbled order. Arrange the sentences in the right order to form a meaningful and coherent paragraph.





- A. As a result, he had a debt of 500 million US dollars at the time of his death.
 B. Unfortunately, he began spending lavishly on anything he desired, not what he actually needed.
 C. Michael Jackson, called the 'King of Pop Music', stayed at the top of his career for many years.
 D. He was respected for his work culture; he would spend long nights at the studio to fix a note correctly in a song.

- Ans  1. DBAC
 2. CDBA
 3. BADC
 4. ADCB

Question ID : **6549787747**
 Status : **Not Answered**
 Chosen Option : --

Q.6 Select the most appropriate meaning of the given idiom.





To have eggs on one's face

- Ans  1. To be embarrassed because of one's action
 2. To apply egg yolk on one's face for making it look beautiful
 3. To throw eggs on a speaker's face
 4. To buy eggs and break them

Question ID : **6549787753**
 Status : **Answered**
 Chosen Option : **1**

Q.7 Select the option that expresses the given sentence in passive voice.

Sai Kumari gave Akhila a bouquet of lilies on her birthday.

- Ans  1. Akhila was given a bouquet of lilies on her birthday by Sai Kumari.
 2. Akhila was gave a bouquet of lilies on her birthday by Sai Kumari.
 3. Akhila is given a bouquet of lilies on her birthday by Sai Kumari.
 4. Akhila gave a bouquet of lilies on her birthday to Sai Kumari.

Question ID : **6549786323**
 Status : **Answered**
 Chosen Option : **1**

Q.8 The following sentence has been divided into parts. One of them may contain an error. Select the part that contains the error from the given options. If you don't find any error, mark 'No error' as your answer.

A probe has been ordered / by the incident / that occurred at the celebrations.

- Ans
- ☒ 1. A probe has been ordered
 - ☒ 2. that occurred at the celebrations
 - ☒ 3. by the incident
 - ☒ 4. No error

Question ID : 6549786326
Status : Not Answered
Chosen Option : --

Q.9 Select the most appropriate ANTONYM of the given word.

Disheveled

- Ans
- ☒ 1. Untidy
 - ☒ 2. Cluttered
 - ☒ 3. Ordered
 - ☒ 4. Unkempt

Question ID : 6549786338
Status : Answered
Chosen Option : 3

Q.10 Select the most appropriate synonym of the given word.

Despicable

- Ans
- ☒ 1. Commendable
 - ☒ 2. Laudable
 - ☒ 3. Contemptible
 - ☒ 4. Desirable

Question ID : 6549786346
Status : Answered
Chosen Option : 3

Q.11 Select the most appropriate option to substitute the underlined segment in the given sentence. If there is no need to substitute it, select 'No substitution required'.

India has identified a nose-based vaccine against Covid-19 that could be a 'game-changer'.

- Ans
- ☒ 1. No substitution required
 - ☒ 2. a nasal vaccine
 - ☒ 3. an aural vaccine
 - ☒ 4. a sense-based vaccine

Question ID : 6549787750
Status : Answered
Chosen Option : 2

Q.12 Select the option that can be used as a one-word substitute for the given group of words.

A new project or business activity involving some risk

- Ans
- ☒ 1. Entrepreneur
 - ☒ 2. Venture (n)
 - ☒ 3. Experiment
 - ☒ 4. Taboo

Question ID : 6549787758

Status : Answered

Chosen Option : 1

Q.13 Select the most appropriate option to substitute the underlined segment in the given sentence. If there is no need to substitute it, select 'No substitution required'.

Lavanya was happy to see that the tree they had planted the previous year has grow quite taller.

- Ans
- ☒ 1. No substitution required
 - ☒ 2. had grown quite tall
 - ☒ 3. had grow quite taller
 - ☒ 4. had grown quite tallest

Question ID : 6549786335

Status : Answered

Chosen Option : 2

Q.14 The following sentence has been split into four segments. Identify the segment that contains a grammatical error.

The sports day events / will be conducted / from 3:30 p.m. and 5:30 p.m. / on Saturday.

- Ans
- ☒ 1. The sports day events
 - ☒ 2. from 3:30 p.m. and 5:30 p.m.
 - ☒ 3. on Saturday
 - ☒ 4. will be conducted

Question ID : 6549787739

Status : Answered

Chosen Option : 2

Q.15 Select the option that expresses the given sentence in direct speech.

The students asked the teacher where they could find the information for their project.

- Ans
- ☒ 1. The students said to the teacher, "Where can you find the information for our project?"
 - ☒ 2. The students asked the teacher, "Where can we find the information for our project?"
 - ☒ 3. The teacher said to the students, "Where you can find the information for your project."
 - ☒ 4. The teacher said to the students, "I will tell you where you can find the information for your project."

Question ID : 6549787738

Status : Answered

Chosen Option : 2

Q.16 Select the INCORRECTLY spelt word.

- Ans  1. Possesions
-  2. Irritation
-  3. Invitation
-  4. Protection

Question ID : 6549786341
Status : Answered
Chosen Option : 1

Q.17 Select the most appropriate synonym of the given word.


Forbid

- Ans  1. Close
-  2. Prohibit
-  3. Adieu
-  4. Encourage

Question ID : 6549787759
Status : Answered
Chosen Option : 2

Q.18 Select the most appropriate ANTONYM of the given word.

Accustomed

- Ans  1. Terrific
-  2. Fabulous
-  3. Ordinary
-  4. Unusual

Question ID : 6549787751
Status : Answered
Chosen Option : 3

Q.19 Sentences of a paragraph are given below in jumbled order. Arrange the sentences in the right order to form a meaningful and coherent paragraph.





- A. Humans work because they have to; they play because they want to.
- B. The most useful definitions are those that clarify the relationship of sports to play, games and contests.
- C. "Play," wrote the German theorist Carl Diem, "is purposeless activity, for its own sake, the opposite of work."
- D. Sports are part of every culture, past and present, but each culture has its own definition of sports.

- Ans  1. ABCD
-  2. DCBA
-  3. DBCA
-  4. BADC

Question ID : 6549786334
Status : Answered
Chosen Option : 3

Q.20 Select the most appropriate meaning of the given idiom.

Thick as thieves

- Ans**  1. Having a close friendship
 2. Being very dishonest
 3. Never helping anyone
 4. Telling lies all the time

Question ID : **6549786340**

Status : **Answered**

Chosen Option : **2**



Comprehension:

In the following passage, some words have been deleted. Select the most appropriate option to fill in each blank.

Meghalaya, a hilly state of India, is located in the northeastern part of the country. It is (1)_____ by the Indian state of Assam in the north and northeast and (2) _____ Bangladesh in the south and southwest. The state capital is (3) _____ hill town of Shillong, located in east-central Meghalaya. Meghalaya is an upland area formed by a (4)_____ block of the Deccan plateau. Its summits vary in (5) _____ from 4,000 to 6,000 feet (1,220 to 1,830 metres).

SubQuestion No : 21

Q.21 Select the most appropriate option to fill in blank no.1.

- Ans**  1. bind
 2. bonded
 3. bounded
 4. bounding

Question ID : **6549786328**

Status : **Answered**

Chosen Option : **3**

Comprehension:

In the following passage, some words have been deleted. Select the most appropriate option to fill in each blank.

Meghalaya, a hilly state of India, is located in the northeastern part of the country. It is (1)_____ by the Indian state of Assam in the north and northeast and (2) _____ Bangladesh in the south and southwest. The state capital is (3) _____ hill town of Shillong, located in east-central Meghalaya. Meghalaya is an upland area formed by a (4)_____ block of the Deccan plateau. Its summits vary in (5) _____ from 4,000 to 6,000 feet (1,220 to 1,830 metres).

SubQuestion No : 22

Q.22 Select the most appropriate option to fill in blank no.2.

- Ans**  1. near
 2. with
 3. beside
 4. by

Question ID : **6549786329**

Status : **Answered**

Chosen Option : **4**

Comprehension:

In the following passage, some words have been deleted. Select the most appropriate option to fill in each blank.

Meghalaya, a hilly state of India, is located in the northeastern part of the country. It is (1)_____ by the Indian state of Assam in the north and northeast and (2) _____ Bangladesh in the south and southwest. The state capital is (3) _____ hill town of Shillong, located in east-central Meghalaya. Meghalaya is an upland area formed by a (4)_____ block of the Deccan plateau. Its summits vary in (5) _____ from 4,000 to 6,000 feet (1,220 to 1,830 metres).

SubQuestion No : 23

Q.23 Select the most appropriate option to fill in blank no.3.

- Ans
- ☒ 1. a
 - ☒ 2. one
 - ☒ 3. only
 - ☒ 4. the

Question ID : 6549786330

Status : Answered

Chosen Option : 4

Comprehension:

In the following passage, some words have been deleted. Select the most appropriate option to fill in each blank.

Meghalaya, a hilly state of India, is located in the northeastern part of the country. It is (1)_____ by the Indian state of Assam in the north and northeast and (2) _____ Bangladesh in the south and southwest. The state capital is (3) _____ hill town of Shillong, located in east-central Meghalaya. Meghalaya is an upland area formed by a (4)_____ block of the Deccan plateau. Its summits vary in (5) _____ from 4,000 to 6,000 feet (1,220 to 1,830 metres).

SubQuestion No : 24

Q.24 Select the most appropriate option to fill in blank no.4.

- Ans
- ☒ 1. withdrawn
 - ☒ 2. standing
 - ☒ 3. removed
 - ☒ 4. detached

Question ID : 6549786331

Status : Answered

Chosen Option : 1

Comprehension:

In the following passage, some words have been deleted. Select the most appropriate option to fill in each blank.

Meghalaya, a hilly state of India, is located in the northeastern part of the country. It is (1)_____ by the Indian state of Assam in the north and northeast and (2) _____ Bangladesh in the south and southwest. The state capital is (3) _____ hill town of Shillong, located in east-central Meghalaya. Meghalaya is an upland area formed by a (4)_____ block of the Deccan plateau. Its summits vary in (5) _____ from 4,000 to 6,000 feet (1,220 to 1,830 metres).

SubQuestion No : 25

Q.25 Select the most appropriate option to fill in blank no.5.

- Ans
- ☒ 1. distance
 - ☒ 2. rise
 - ☒ 3. elevation
 - ☒ 4. increase

Question ID : 6549786332

Status : Answered

Chosen Option : 3

Section : General Intelligence

Q.1 Ruchi's husband's grandfather is Abhinav, whose grandson's father is Viyan. If Abhinav and his wife have only one son, how is Viyan related to Ruchi's husband?

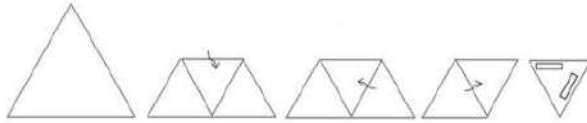
- Ans
- ☒ 1. Brother-in-law
 - ☒ 2. Uncle
 - ☒ 3. Cousin
 - ☒ 4. Father

Question ID : 6549789774

Status : Answered

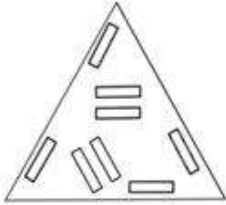
Chosen Option : 4

Q.2 The sequence of folding a piece of paper and the manner in which the folded paper has been cut is shown in the following figures. How would this paper look when unfolded?

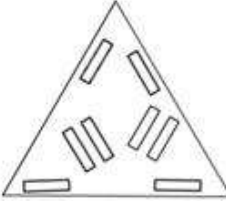


Ans

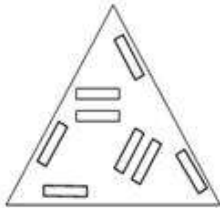
☒ 1.



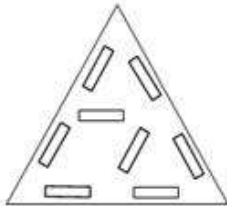
☒ 2.



☒ 3.



☒ 4.



Question ID : 6549786371

Status : Answered

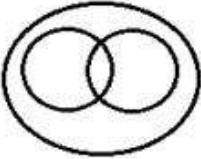
Chosen Option : 1

Q.3 Select the Venn diagram that best represents the relationship between the following classes.

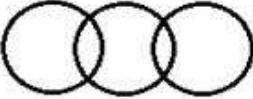
Statisticians, Men, Pathologists

Ans

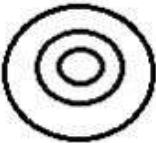
✗ 1.




✓ 2.



✗ 3.



✗ 4.

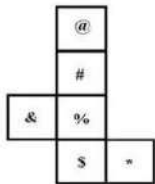


Question ID : 6549787787

Status : Answered

Chosen Option : 1

Q.4 A cube is made by folding the given sheet. In the cube so formed, what would be the symbol on the opposite side of 'S'?



Ans

✗ 1. *

✗ 2. @

✓ 3. #

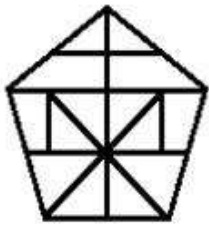
✗ 4. &

Question ID : 6549787781

Status : Answered

Chosen Option : 3

Q.5 Find the number of triangles in the given figure.



- Ans
- ☒ 1. 17
 - ☒ 2. 18
 - ☒ 3. 16
 - ☒ 4. 19

Question ID : 6549787783

Status : Answered

Chosen Option : 4

Q.6 Select the correct mirror image of the given figure when the mirror is placed at the right side.



Ans

- ☒ 1.
- ☒ 2.
- ☒ 3.
- ☒ 4.

Question ID : 6549786372

Status : Answered

Chosen Option : 1

Q.7 Select the correct option that indicates the arrangement of the given words in the order in which they appear in an English dictionary.

1. Inhaler
2. Inimitable
3. Inhabitant
4. Ingenuous
5. Inheritance

- Ans
- ☐ 1. 4, 3, 5, 1, 2
 - ☐ 2. 4, 5, 2, 1, 3
 - ☐ 3. 4, 1, 3, 5, 2
 - ☒ 4. 4, 3, 1, 5, 2

Question ID : 6549787770

Status : Answered

Chosen Option : 4

Q.8 Select the number from among the given options that can replace the question mark (?) in the following series.

71, 56, 44, 35, 29, ?

- Ans
- ☒ 1. 26
 - ☐ 2. 20
 - ☐ 3. 29
 - ☐ 4. 23

Question ID : 6549786354

Status : Answered

Chosen Option : 1

Q.9 Select the option in which the numbers are related in the same way as are the numbers of the following set.

47 : 58 : 71

- Ans
- ☒ 1. 72 : 81 : 90
 - ☐ 2. 89 : 98 : 106
 - ☐ 3. 76 : 89 : 105
 - ☐ 4. 68 : 80 : 88

Question ID : 6549786352

Status : Answered

Chosen Option : 2

Q.10 Four numbers have been given, out of which three are alike in some manner and one is different. Select the number that is different.

- Ans
- ☐ 1. 463
 - ☒ 2. 308
 - ☐ 3. 137
 - ☐ 4. 229

Question ID : 6549787769

Status : Not Answered

Chosen Option : --

Q.11 Four letter-clusters have been given, out of which three are alike in some manner and one is different. Select the letter-cluster that is different.

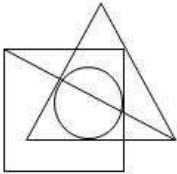
- Ans
- ☒ 1. GKPJ
 - ☒ 2. TXBV
 - ☒ 3. KOLF
 - ☒ 4. QUFZ

Question ID : 6549787778

Status : Answered

Chosen Option : 4

Q.12 Select the option that is embedded in the given figure (rotation is NOT allowed).



Ans

- ☒ 1.
- ☒ 2.
- ☒ 3.
- ☒ 4.

Question ID : 6549786370

Status : Answered

Chosen Option : 4

Q.13 In a certain code language, VICTORY is coded as 29472435 and HASTY is coded as 278119. How will SUBLIME be coded in that language?

- Ans
- ☒ 1. 2143152558
 - ☒ 2. 2134152558
 - ☒ 3. 1514131285
 - ☒ 4. 1213141585

Question ID : 6549787772

Status : Not Answered

Chosen Option : --

Q.14 Read the given statements and conclusions carefully. Assuming that the information given in the statements is true, even if it appears to be at variance with commonly known facts, decide which of the given conclusions logically follow(s) from the statements.

Statements:

Some dogs are bulls.
All bulls are donkeys.

Conclusions:

I. All dogs are donkeys.
II. Some donkeys are dogs.

- Ans**
- ☒ 1. Both conclusions I and II follow.
 - ☒ 2. Only conclusion I follows.
 - ☒ 3. Only conclusion II follows.
 - ☒ 4. Neither conclusion I nor II follows.

Question ID : **6549786366**

Status : **Answered**

Chosen Option : **3**

Q.15 Select the option in which the words share the same relationship as that shared by the given pair of words.

Mosquito : Swarm

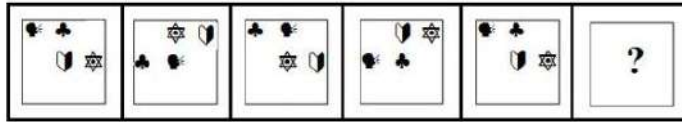
- Ans**
- ☒ 1. Monkey : Pride
 - ☒ 2. Shark : School
 - ☒ 3. Snake : Sleuth
 - ☒ 4. Cat : Murder

Question ID : **6549787777**

Status : **Answered**

Chosen Option : **2**

Q.16 Select the figure from among the given options that can replace the question mark (?) in the following series.




Ans

✓ 1.



✗ 2.



✗ 3.



✗ 4.



Question ID : 6549787782

Status : Answered

Chosen Option : 1

Q.17 Select the option that is related to the third number in the same way as the second number is related to the first number.

18 : 163 :: 24 : ?

Ans ✗ 1. 216

✓ 2. 289

✗ 3. 298

✗ 4. 222

Question ID : 6549787765

Status : Answered

Chosen Option : 4

Q.18 Which two digits and signs need to be interchanged so as to balance the given equation?

$$65 + 13 - 119 \div 32 \times 8 = 175$$

Ans ✗ 1. 8 and 3; × and ÷

✓ 2. 9 and 8; + and ÷

✗ 3. 5 and 8; - and ×

✗ 4. 2 and 9; + and ×

Question ID : 6549786350

Status : Answered

Chosen Option : 2

Q.19 The District Transport Authority has started special bus services for college going students. One bus starts from village P. The number of girls in the bus is one-fourth of the number of boys. In village Q, 20 boys leave the bus at their college stop and ten girls enter the bus. Now the number of boys and girls is equal. How many students enter the bus in the beginning?

- Ans
- ☒ 1. 60
 - ☒ 2. 40
 - ☒ 3. 30
 - ☒ 4. 50

Question ID : 6549787763
Status : Answered
Chosen Option : 4

Q.20 Select the option that is related to the third term in the same way as the second term is related to the first term.

OUTSTAY : AOSTTUY :: ROUGHLY : ?

- Ans
- ☒ 1. GUROHLY
 - ☒ 2. ORGULHY
 - ☒ 3. GHLOURY
 - ☒ 4. GUORYLH

Question ID : 6549786359
Status : Answered
Chosen Option : 2

Q.21 Four options have been given, out of which three are alike in some manner and one is different. Select the option that is different.

- Ans
- ☒ 1. Bangladesh
 - ☒ 2. Singapore
 - ☒ 3. Indonesia
 - ☒ 4. Sri Lanka

Question ID : 6549786365
Status : Answered
Chosen Option : 4

Q.22 Select the option that is related to the third word in the same way as the second word is related to the first word.

Flock : Sheep :: Crowd : ?

- Ans
- ☒ 1. Swans
 - ☒ 2. Human
 - ☒ 3. Fly
 - ☒ 4. Fish

Question ID : 6549786360
Status : Answered
Chosen Option : 2

Q.23 Select the combination of letters that when sequentially placed in the blanks of the given letter series will complete the series.

k j i _ k _ _ i k j i _ k _ _ i

- Ans
-  1. j k j k j k
 -  2. i j i i j i
 -  3. k i j k i j
 -  4. i k j i k j

Question ID : 6549786967

Status : Answered

Chosen Option : 2

Q.24 In a certain code language, EXTREME is written as VCGIVNV. How will INITIAL be written in that language?

- Ans
-  1. SMSGSZP
 -  2. RMSHRZP
 -  3. SNRGS AO
 -  4. RMRGRZO

Question ID : 6549786357

Status : Answered

Chosen Option : 4

Q.25 Study the given pattern carefully and select the number that can replace the question mark (?) in it.

13 50 8
12 39 5
15 51 ?

- Ans
-  1. 7
 -  2. 10
 -  3. 12
 -  4. 9

Question ID : 6549787767

Status : Not Answered

Chosen Option : --

Section : Quantitative Aptitude

Q.1 The value of $\frac{5}{4} \times 2\frac{2}{3} \div \frac{5}{9}$ of $1\frac{1}{5} + \frac{2}{25} \times 4\frac{1}{6} \div \frac{2}{7}$ of $2\frac{1}{3}$ is:

- Ans
- ☒ 1. $5\frac{1}{2}$
 - ☐ 2. $3\frac{1}{2}$
 - ☐ 3. $2\frac{1}{2}$
 - ☐ 4. $1\frac{1}{2}$

Question ID : 6549786391
Status : Not Answered
Chosen Option : --

Q.2 If $x + y + z = 13$, $x^2 + y^2 + z^2 = 91$ and $xz = y^2$, then the difference between z and x is:

- Ans
- ☐ 1. 3
 - ☒ 2. 8
 - ☐ 3. 5
 - ☐ 4. 9

Question ID : 6549786388
Status : Answered
Chosen Option : 3

Q.3 If $\tan x = \cot(48^\circ + 2x)$, and $0^\circ < x < 90^\circ$, then what is the value of x ?

- Ans
- ☐ 1. 12°
 - ☒ 2. 14°
 - ☐ 3. 16°
 - ☐ 4. 21°

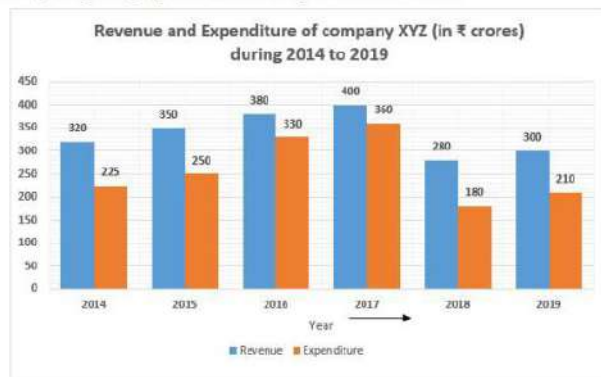
Question ID : 6549786394
Status : Answered
Chosen Option : 2

Q.4 The radius of a sphere is 9 cm. It is melted and drawn into a wire of radius 0.3 cm. The length of the wire is:

- Ans
- ☐ 1. 112 m
 - ☒ 2. 108 m
 - ☐ 3. 118 m
 - ☐ 4. 106 m

Question ID : 6549786376
Status : Answered
Chosen Option : 2

Q.5 Study the given graph and answer the question that follows.



The total revenue of the company in 2014, 2016 and 2018 is what percentage of the total expenditure in 2015 to 2017 and 2019 (correct to one decimal place)?

- Ans**
- ☒ 1. 85.2%
 - ☐ 2. 84.3%
 - ☐ 3. 83.4%
 - ☐ 4. 81.6%

Question ID : 6549787812

Status : Answered

Chosen Option : 1

Q.6 If the five-digit number $672xy$ is divisible by 3, 7 and 11, then what is the value of $(6x + 5y)$?

- Ans**
- ☐ 1. 23
 - ☐ 2. 24
 - ☐ 3. 16
 - ☒ 4. 17

Question ID : 6549787804

Status : Answered

Chosen Option : 4

Q.7 In $\triangle XYZ$, P is the midpoint of side XZ and Q is a point on side XY such that QZ bisects PY . If $XQ = 24$ cm, then what is the length (in cm) of QY ?

- Ans**
- ☐ 1. 6
 - ☐ 2. 18
 - ☐ 3. 8
 - ☒ 4. 12

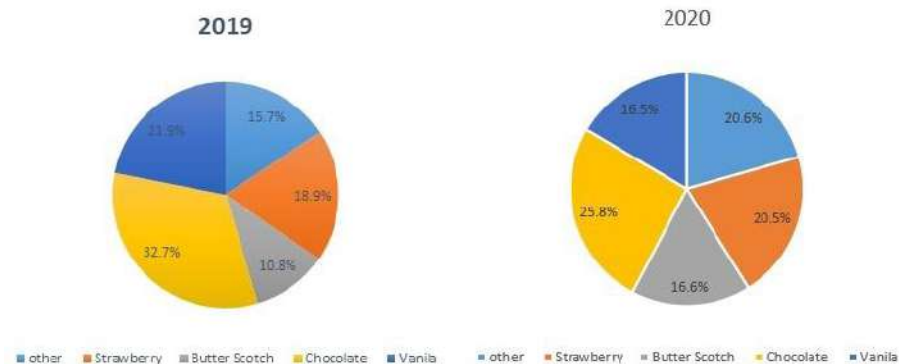
Question ID : 6549787799

Status : Answered

Chosen Option : 4

Q.8 Study the given pie-charts and answer the question that follows.

The pie charts represent the popularity of ice-cream flavours among families in the years 2019 and 2020.



If 1% increase resulted in annual additional sales of ₹10,000, then how much (in ₹), did the combined Strawberry, other and Butterscotch sales increase from 2019 to 2020?

- Ans**
- ✓ 1. 1,23,000
 - ✗ 2. 1,32,000
 - ✗ 3. 3,12,000
 - ✗ 4. 2,13,000

Question ID : 6549787002
Status : Not Answered
Chosen Option : --

Q.9 The simple interest on a sum of ₹8,000 at a certain rate per cent per annum for 3 years is ₹3,600. What will be the amount (in ₹) of the same sum after 2 years at the same rate, if the interest is compounded 8-monthly?

- Ans**
- ✗ 1. 11,239
 - ✗ 2. 10,450
 - ✗ 3. 10,580
 - ✓ 4. 10,648

Question ID : 6549787796
Status : Answered
Chosen Option : 4

Q.10 Two successive discounts each of $x\%$ on the marked price of an article are equal to a single discount of ₹350. If the marked price of the article is ₹800, then the value of x is:

- Ans**
- ✗ 1. 27.5%
 - ✗ 2. 20%
 - ✓ 3. 25%
 - ✗ 4. 22.5%

Question ID : 6549786378
Status : Answered
Chosen Option : 4

Q.11 The speed of a train is 78 km/h . It crosses a tunnel in 45 s and overtakes a person walking at a speed of 6 km/h, in the same direction, in 15 s. The length (in m) of the tunnel is:

- Ans ☒ 1. 675
☒ 2. 650
☒ 3. 975
☒ 4. 780

Question ID : 6549787789

Status : Answered

Chosen Option : 3

Q.12 A bag contains coins of denomination ₹1, ₹2 and ₹5 in the ratio of 4 : 5 : 8. If the total value of these coins is ₹432, then what is the number of ₹2 coins?

- Ans ☒ 1. 40
☒ 2. 30
☒ 3. 50
☒ 4. 60

Question ID : 6549787795

Status : Answered

Chosen Option : 1

Q.13 A chord PQ of a circle C_1 of radius 9.25 cm touches another circle C_2 that is concentric to C_1 , and the radius of C_2 is 3 cm . What is the length (in cm) of PQ ?

- Ans ☒ 1. 12
☒ 2. 19.5
☒ 3. 17.5
☒ 4. 15

Question ID : 6549787797

Status : Answered

Chosen Option : 3

Q.14 In an isosceles triangle ABC, $AB = AC$ and AD is perpendicular to BC. If AD = 12 cm and the perimeter of $\triangle ABC$ is 36 cm, then the length of BC (in cm) is:

- Ans ☒ 1. 5
☒ 2. 12
☒ 3. 10
☒ 4. 13

Question ID : 6549786386

Status : Answered

Chosen Option : 3

Q.15 The price of a commodity increases by 28%. However, the expenditure on it increases by 12%. What is the percentage increase or decrease in its consumption?

- Ans
- ☒ 1. 16% Increase
 - ☒ 2. 12.5% Decrease
 - ☒ 3. 12.5% Increase
 - ☒ 4. 16% Decrease

Question ID : 6549787793

Status : Answered

Chosen Option : 2

Q.16 The coefficient of x^3y in $(x - 2y) \times (5x + y)^3$ is:

- Ans
- ☒ 1. 75
 - ☒ 2. -150
 - ☒ 3. 250
 - ☒ 4. -175

Question ID : 6549787801

Status : Answered

Chosen Option : 1

Q.17 A can complete a work in 20 days, while B can complete the same work in 25 days. Both worked together for 10 days and then C alone completed the remaining work in 10 days. In how many days will A, B and C together complete the same work?

- Ans
- ☒ 1. 10 days
 - ☒ 2. 5 days
 - ☒ 3. 8 days
 - ☒ 4. 12 days

Question ID : 6549786374

Status : Answered

Chosen Option : 1

Q.18 The average height of a certain number of students in a group is 155.6 cm . If 12 students having an average height of 150.5 cm join the group and 7 students having an average height of 159 cm leave the group, the average height of the students in the group will decrease by 34 mm . What is the number of students, initially, in the group?

- Ans
- ☒ 1. 30
 - ☒ 2. 25
 - ☒ 3. 40
 - ☒ 4. 20

Question ID : 6549787791

Status : Answered

Chosen Option : 1

Q.19

If $\cos\theta = \frac{\sqrt{3}}{2}$, then the value of $\frac{2-\sin^2\theta}{1-\cot^2\theta} + (\sec^2\theta + \operatorname{cosec}\theta)$ is:

Ans

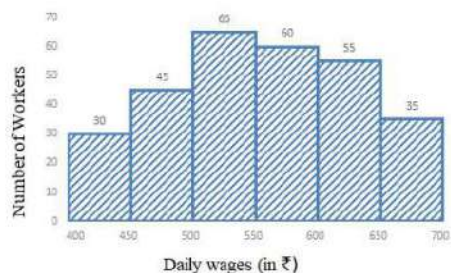
- ☒ 1. $\frac{25}{12}$
- ☒ 2. $\frac{59}{24}$
- ☐ 3. $-\frac{25}{12}$
- ☐ 4. $-\frac{59}{24}$

Question ID : 6549786392

Status : Answered

Chosen Option : 4

Q.20 Study the given graph which shows the number of workers with their daily wages and answer the question that follows.



What is the ratio of the total number of workers whose daily wages are ₹450 or above but less than ₹500 to the total number of workers whose daily wages are ₹650 or above?

Ans

- ☒ 1. 9 : 7
- ☐ 2. 5 : 2
- ☐ 3. 2 : 5
- ☐ 4. 7 : 9

Question ID : 6549786395

Status : Not Answered

Chosen Option : --

Q.21 The value of

$$\frac{\tan 50^\circ + \sec 50^\circ}{\cot 40^\circ + \operatorname{cosec} 40^\circ} + \cos^2 65^\circ + \sin 65^\circ \cos 25^\circ + \tan 30^\circ \text{ is:}$$

Ans

☒ 1. $\frac{\sqrt{3}(\sqrt{3}+1)}{3}$

☒ 2. $2 + \sqrt{3}$

☒ 3. $\frac{6 + \sqrt{3}}{3}$

☒ 4. $1 + \sqrt{3}$

Question ID : 6549787807

Status : Not Answered

Chosen Option : --

Q.22 In a circle, AB and DC are two chords. When AB and DC are produced, they meet at P. If PC = 2.8 cm, PB = 3.15 cm and AB = 3.85 cm, then CD =?

Ans

☒ 1. 5.075 cm

☒ 2. 4.175 cm

☒ 3. 6.975 cm

☒ 4. 7.875 cm

Question ID : 6549786384

Status : Not Answered

Chosen Option : --

Q.23 The pie chart shows the money spent by Aditya through credit cards of different banks. The total money spent by him through credit cards in a year is ₹3,60,000.



How much more money was spent through Card C as compared to Card D?

Ans

☒ 1. ₹2,000

☒ 2. ₹40,000

☒ 3. ₹20,000

☒ 4. ₹1,80,000

Question ID : 6549788113

Status : Not Answered

Chosen Option : --

Q.24 A person sold an article at a loss of 12%. Had he sold it at a gain of 10.5%, he would have got ₹112.50 more. What is the original selling price (in ₹) of the article?

- Ans ☒ 1. 440.00
☒ 2. 560.00
☒ 3. 552.50
☒ 4. 500.00

Question ID : 6549786380
 Status : Answered
 Chosen Option : 3

Q.25 If $x^2 + 4y^2 + 3z^2 + \frac{19}{4} = 2\sqrt{3}(x + y + z)$, then the value of $(x - 4y + 3z)$ is:

- Ans ☒ 1. $\frac{\sqrt{3}}{3}$
☒ 2. $2\sqrt{3}$
☒ 3. $\sqrt{3}$
☒ 4. $\frac{\sqrt{3}}{2}$

Question ID : 6549786389
 Status : Not Answered
 Chosen Option : --

Section : General Awareness

Q.1 Who among the following was the first Indian Governor of the Reserve Bank of India?

- Ans ☒ 1. KC Neogy
☒ 2. CD Deshmukh
☒ 3. Liaquat Ali Khan
☒ 4. Morarji Desai

Question ID : 6549787820
 Status : Answered
 Chosen Option : 1

Q.2 Which of the following hormone is secreted by brain that helps to regulate sleep-wake cycles?

- Ans ☒ 1. Insulin
☒ 2. Melatonin
☒ 3. Oxytoxin
☒ 4. Aldosterone

Question ID : 6549786408
 Status : Answered
 Chosen Option : 4

Q.3 Which of the following is one of the file formats used for web graphics?

- Ans
- ☒ 1. .gif
 - ☐ 2. .exe
 - ☐ 3. .txt
 - ☐ 4. .docx

Question ID : 6549786400
Status : Answered
Chosen Option : 2

Q.4 In which of the following years did the Prime Minister of India, Narendra Modi, launch Atal Pension Yojana?

- Ans
- ☐ 1. 2014
 - ☐ 2. 2018
 - ☐ 3. 2020
 - ☒ 4. 2015

Question ID : 6549786407
Status : Answered
Chosen Option : 4

Q.5 Shanti Swarup Bhatnagar Prize is associated with which of the following disciplines?

- Ans
- ☐ 1. Sports
 - ☐ 2. Literature
 - ☐ 3. Music
 - ☒ 4. Science and Technology

Question ID : 6549787832
Status : Not Answered
Chosen Option : --

Q.6 In which year did the Central Government of India appoint the States Reorganisation Commission?

- Ans
- ☐ 1. 1958
 - ☒ 2. 1953
 - ☐ 3. 1950
 - ☐ 4. 1951

Question ID : 6549786420
Status : Not Answered
Chosen Option : --

Q.7 In which of the following North Eastern states is the first ever specialised 'Ginger' Processing Plant being revived in December 2020?

- Ans
- ☒ 1. Mizoram
 - ☒ 2. Assam
 - ☒ 3. Sikkim
 - ☒ 4. Meghalaya

Question ID : 6549787828

Status : Answered

Chosen Option : 2

Q.8 Dandeli Wildlife Sanctuary is located in which of the following states?

- Ans
- ☒ 1. Karnataka
 - ☒ 2. Jharkhand
 - ☒ 3. Sikkim
 - ☒ 4. Kerala

Question ID : 6549787827

Status : Not Answered

Chosen Option : --

Q.9 In which of the following districts was Telangana's first rescue and rehabilitation centre for monkeys, launched in December 2020?

- Ans
- ☒ 1. Narayanpet
 - ☒ 2. Nirmal
 - ☒ 3. Mulugu
 - ☒ 4. Adilabad

Question ID : 6549787817

Status : Not Answered

Chosen Option : --

Q.10 Which of the following is a salt-water lake?

- Ans
- ☒ 1. Pangong Tso
 - ☒ 2. Kolleru
 - ☒ 3. Nainital
 - ☒ 4. Loktak

Question ID : 6549786411

Status : Not Answered

Chosen Option : --

Q.11 FIFA World Cup 2022 venue, Ahmad Bin Ali Stadium, which was built by Indian construction giant Larsen & Turbo is located in which of the following countries?

- Ans ☒ 1. Qatar
☐ 2. Oman
☐ 3. Bahrain
☐ 4. Saudi Arabia

Question ID : 6549787837
Status : Answered
Chosen Option : 1

Q.12 Which of the following is a vector quantity?

- Ans ☐ 1. Electric charge
☐ 2. Electric flux
☒ 3. Electric field
☐ 4. Electric current

Question ID : 6549786410
Status : Answered
Chosen Option : 3

Q.13 According to the Constitution of India a Judge of the Supreme Court cannot be removed from office except by an order of the _____.

- Ans ☐ 1. Vice President
☐ 2. Attorney General
☐ 3. Prime Minister
☒ 4. President

Question ID : 6549787833
Status : Answered
Chosen Option : 2

Q.14 Who among the following persons was awarded the Padma Shri for social work in 2019?

- Ans ☐ 1. Narsingh Dev Jamwal
☐ 2. Ramaswami Venkataswami
☐ 3. Anup Ranjan Pandey
☒ 4. Devarapalli Prakash Rao

Question ID : 6549786417
Status : Not Answered
Chosen Option : --

Q.15 Who was appointed as the first Surveyor General of India in 1815?

- Ans
- ☐ 1. John Hodgson
 - ☐ 2. Thomas Hickey
 - ☐ 3. Henry Walpole
 - ☒ 4. Colin Mackenzie

Question ID : 6549786415
Status : Answered
Chosen Option : 3

Q.16 Kisan Fasal Rahat Yojana, which will replace (PMFBY) Pradhan Mantri Fasal Bima Yojna, has been launched by which of the following states government in December 2020?

- Ans
- ☒ 1. Jharkhand
 - ☐ 2. Punjab
 - ☐ 3. Andhra Pradesh
 - ☐ 4. Chhattisgarh

Question ID : 6549787818
Status : Not Answered
Chosen Option : --

Q.17 Who among the following persons was elected, unopposed, as the President of Hockey India in November 2020?

- Ans
- ☒ 1. Gyanendro Ningombam
 - ☐ 2. David John
 - ☐ 3. Mohd Mushtaque Ahmad
 - ☐ 4. Harendra Singh

Question ID : 6549786422
Status : Answered
Chosen Option : 1

Q.18 Where is Mount Diavolo, an important mountain peak in the Andaman and Nicobar Islands, located?

- Ans
- ☐ 1. Great Nicobar
 - ☐ 2. North Andaman
 - ☒ 3. Middle Andaman
 - ☐ 4. South Andaman

Question ID : 6549786412
Status : Not Answered
Chosen Option : --

Q.19 Raja Parba is a unique festival celebrating the onset of monsoon and the earth's womanhood. It is celebrated in which of the following states?

- Ans
- ☐ 1. Bihar
 - ☒ 2. Odisha
 - ☐ 3. Meghalaya
 - ☐ 4. Uttar Pradesh

Question ID : 6549787815
Status : Answered
Chosen Option : 2

Q.20 Ustad Iqbal Ahmed Khan, a recipient of the Sangeet Natak Academy Award, belongs to the _____ Gharana.

- Ans
- ☒ 1. Dilli
 - ☐ 2. Jaipur-Atrauli
 - ☐ 3. Gwalior
 - ☐ 4. Agra

Question ID : 6549786402
Status : Answered
Chosen Option : 1

Q.21 Which country ranked first in the 'Human Development Report 2020' released by the United Nations Development Programme?

- Ans
- ☒ 1. Norway
 - ☐ 2. Germany
 - ☐ 3. Switzerland
 - ☐ 4. Hong Kong

Question ID : 6549786405
Status : Answered
Chosen Option : 1

Q.22 _____ is an advanced discipline that teaches students how to analyse and find patterns in large amounts of data.

- Ans
- ☐ 1. Computer science
 - ☒ 2. Data science
 - ☐ 3. Software development
 - ☐ 4. Computer programming

Question ID : 6549787813
Status : Answered
Chosen Option : 2

Q.23 Who among the following sportsmen is the brand ambassador of SBOTOP, which is a global online betting platform?

- Ans
- ☒ 1. Bajrang Punia
 - ☒ 2. Sushil Kumar
 - ☒ 3. Rohit Sharma
 - ☒ 4. Dwayne Bravo

Question ID : 6549787835

Status : **Not Answered**

Chosen Option : --

Q.24 Which of the following parts of the body/glands maintains the body temperature?

- Ans
- ☒ 1. Pituitary
 - ☒ 2. Adrenal
 - ☒ 3. Thyroid
 - ☒ 4. Hypothalamus

Question ID : 6549787823

Status : **Answered**

Chosen Option : 4

Q.25 _____'s foster mother Mahapajapati Gotami was the first woman to be ordained as a bhikkhuni.

- Ans
- ☒ 1. Ashoka
 - ☒ 2. Buddha
 - ☒ 3. Arjuna
 - ☒ 4. Bindusara

Question ID : 6549787830

Status : **Not Answered**

Chosen Option : --

Combined Higher Secondary Level Examination 2020 (Tier-I)

Roll Number	Join Telegram: HaryanaJobs.in
Candidate Name	
Venue Name	
Exam Date	05/08/2021
Exam Time	12:00 PM - 1:00 PM
Subject	Combined Higher Secondary Level Exam 2020

Section : English Language

Q.1 Select the most appropriate option to substitute the underlined segment in the given sentence. If there is no need to substitute it, select 'No substitution required'.

What are the options available of me for a change of career?

- Ans
- ☒ 1. options available over me
 - ☒ 2. options available from me
 - ☒ 3. options available to me
 - ☒ 4. No substitution required

Question ID : 6549786134

Status : Answered

Chosen Option : 3

Q.2 Select the option that can be used as a one-word substitute for the given group of words.

Instrument that measures the altitude of the land surface

- Ans
- ☒ 1. Altimeter
 - ☒ 2. Thermometer
 - ☒ 3. Barometer
 - ☒ 4. Chronometer

Question ID : 6549786142

Status : Answered

Chosen Option : 1

Q.3 Select the most appropriate option to substitute the underlined segment in the given sentence. If there is no need to substitute it, select 'No substitution required'.

If the box breaking the glass bottle will be shattered.

- Ans
- ☒ 1. If the box break
 - ☒ 2. If the box breaks
 - ☒ 3. If the box broke
 - ☒ 4. No substitution required

Question ID : 6549786840

Status : Answered

Chosen Option : 2

Q.4 Sentences of a paragraph are given below in jumbled order. Arrange the sentences in the right order to form a meaningful and coherent paragraph.

A. Due to this tilt as the Earth wobbles around the Sun, different points of the Earth receive more or less sunlight.

B. Furthermore, we also wouldn't have solstices or equinoxes.

C. We know that seasons are caused by the Earth having a slight tilt on its axis.

D. If the Sun just shone directly on the Equator all year long, we would be left without seasons.

Ans  1. CBDA

 2. ABCD

 3. ACBD

 4. CADB

Question ID : 6549786131

Status : Answered


Chosen Option : 4

Q.5 Select the most appropriate ANTONYM of the given word.

Naïve

Ans  1. Simple

 2. Sophisticated

 3. Immature

 4. Unsuspicious

Question ID : 6549786843

Status : Answered

Chosen Option : 2


Q.6 The following sentence has been divided into parts. One of them may contain an error. Select the part that contains the error from the given options. If you don't find any error, mark 'No error' as your answer.

The energy required / for perform various functions of the body / is obtained from food.

Ans  1. for perform various functions of the body

 2. is obtained from food

 3. The energy required

 4. No error

Question ID : 6549786123

Status : Answered

Chosen Option : 1

Q.7 Select the INCORRECTLY spelt word.

Ans  1. Aptitude

 2. Attitude

 3. Altitude

 4. Attaractive

Question ID : 6549786140

Status : Answered

Chosen Option : 4

Q.8 Select the most appropriate word to fill in the blank.

A micromanager frequently demands reports and updates leaving little room for subordinates to take _____ on their own.

- Ans
- ☒ 1. decisions
 - ☐ 2. results
 - ☐ 3. verdicts
 - ☐ 4. decrees

Question ID : 6549786145

Status : Answered

Chosen Option : 1

Q.9 Sentences of a paragraph are given below in jumbled order. Arrange the sentences in the right order to form a meaningful and coherent paragraph.

- A. Games involved gladiators fighting wild animals or each other.
- B. Inside, tiered seating encircled the arena, where animals were caged and stage sets prepared.
- C. Inaugurated in AD 80, the 50,000-seat Colosseum is also known as the Flavian Amphitheatre.
- D. Rome's great gladiatorial arena is the most monumental of the city's ancient sights.

- Ans
- ☐ 1. ADCB
 - ☐ 2. BCAD
 - ☐ 3. DABC
 - ☒ 4. DCBA

Question ID : 6549786839

Status : Answered

Chosen Option : 1

Q.10 Select the most appropriate ANTONYM of the given word.

Compel

- Ans
- ☐ 1. Induce
 - ☐ 2. Influence
 - ☒ 3. Dissuade
 - ☐ 4. Persuade

Question ID : 6549786135

Status : Answered

Chosen Option : 3

Q.11 Select the most appropriate word to fill in the blank.

The first van was sent as a _____ to mislead the thugs.

- Ans
- ☒ 1. persuasion
 - ☐ 2. decoy
 - ☒ 3. determination
 - ☒ 4. temptation

Question ID : 6549786853
Status : Answered
Chosen Option : 2

Q.12 Select the most appropriate synonym of the given word.

Salient

- Ans
- ☒ 1. Sturdy
 - ☒ 2. Navigable
 - ☒ 3. Marine
 - ☐ 4. Noticeable

Question ID : 6549786851
Status : Answered
Chosen Option : 4

Q.13 Select the most appropriate synonym of the given word.

Apathetic

- Ans
- ☒ 1. Instantaneous
 - ☒ 2. Irrelevant
 - ☒ 3. Irregular
 - ☐ 4. Indifferent

Question ID : 6549786143
Status : Answered
Chosen Option : 4

Q.14 Select the most appropriate meaning of the given idiom.

Butter fingers

- Ans
- ☒ 1. To be very efficient
 - ☒ 2. To like rich food
 - ☒ 3. To cook well
 - ☐ 4. To be clumsy

Question ID : 6549786137
Status : Answered
Chosen Option : 1

Q.15 The following sentence has been divided into parts. One of them may contain an error. Select the part that contains the error from the given options. If you don't find any error, mark 'No error' as your answer.

The monkeys swung / on the branches and / jumped over the compound wall.

- Ans
- ☒ 1. The monkeys swung
 - ☐ 2. No error
 - ☐ 3. on the branches and
 - ☐ 4. jumped over the compound wall

Question ID : 6549786831
Status : Answered
Chosen Option : 2

Q.16 Select the option that expresses the given sentence in reported speech.

Neil Armstrong said, "It's a small step for man but a giant leap for mankind."

- Ans
- ☐ 1. Neil Armstrong said that a small step for man can be giant leap for mankind.
 - ☐ 2. Neil Armstrong had said that a small step for man is a giant leap for mankind.
 - ☒ 3. Neil Armstrong said that it was a small step for man but a giant leap for mankind.
 - ☐ 4. Neil Armstrong says that was a small step for man but a giant leap for mankind.

Question ID : 6549786122
Status : Answered
Chosen Option : 3

Q.17 Select the option that expresses the given sentence in passive voice.

Have you submitted the papers at the post office?

- Ans
- ☐ 1. Have the papers been submit by you at the post office?
 - ☐ 2. Had the papers submitted by you to the post office?
 - ☐ 3. Has the papers been submitted by you at the post office?
 - ☒ 4. Have the papers been submitted by you at the post office?

Question ID : 6549786828
Status : Answered
Chosen Option : 4

Q.18 Select the option that can be used as a one-word substitute for the given group of words.

A place or scene of activity, debate, or conflict

- Ans
- ☐ 1. Stadium
 - ☐ 2. Floor
 - ☒ 3. Arena
 - ☐ 4. Site

Question ID : 6549786848
Status : Answered
Chosen Option : 3

Q.19 Select the INCORRECTLY spelt word.

- Ans
- ☒ 1. Whisper
 - ☒ 2. Secluded
 - ☒ 3. Readable
 - ☒ 4. Twinkle

Question ID : 6549786846

Status : Answered

Chosen Option : 3

Q.20 Select the most appropriate meaning of the given idiom.

Large-hearted

- Ans
- ☒ 1. Corrupt
 - ☒ 2. Unhealthy
 - ☒ 3. Overweight
 - ☒ 4. Generous

Question ID : 6549786845

Status : Answered

Chosen Option : 4

Comprehension:

In the following passage, some words have been deleted. Select the most appropriate option to fill in each blank.

In the generation of hydroelectric power, water is collected or (1) _____ at a higher elevation and led downward (2) _____ large pipes to a lower elevation; the difference in elevations is (3) _____ as the head. At the end of its passage down the pipes, the falling water (4) _____ turbines to rotate. The turbines in turn drive generators, (5) _____ convert the turbines' mechanical energy into electricity.

SubQuestion No : 21

Q.21 Select the most appropriate option to fill in blank no.1.

- Ans
- ☒ 1. hoarded
 - ☒ 2. amassed
 - ☒ 3. stored
 - ☒ 4. deposited

Question ID : 6549786833

Status : Answered

Chosen Option : 3

Comprehension:

In the following passage, some words have been deleted. Select the most appropriate option to fill in each blank.

In the generation of hydroelectric power, water is collected or (1) _____ at a higher elevation and led downward (2) _____ large pipes to a lower elevation; the difference in elevations is (3) _____ as the head. At the end of its passage down the pipes, the falling water (4) _____ turbines to rotate. The turbines in turn drive generators, (5) _____ convert the turbines' mechanical energy into electricity.

SubQuestion No : 22

Q.22 Select the most appropriate option to fill in blank no.2.

- Ans
- ☒ 1. beyond
 - ☒ 2. above
 - ☒ 3. through
 - ☒ 4. over

Question ID : 6549786834

Status : Answered

Chosen Option : 3

Comprehension:

In the following passage, some words have been deleted. Select the most appropriate option to fill in each blank.

In the generation of hydroelectric power, water is collected or (1) _____ at a higher elevation and led downward (2) _____ large pipes to a lower elevation; the difference in elevations is (3) _____ as the head. At the end of its passage down the pipes, the falling water (4) _____ turbines to rotate. The turbines in turn drive generators, (5) _____ convert the turbines' mechanical energy into electricity.

SubQuestion No : 23

Q.23 Select the most appropriate option to fill in blank no.3.

- Ans
- ☒ 1. known
 - ☒ 2. being known
 - ☒ 3. told
 - ☒ 4. know

Question ID : 6549786835

Status : Answered

Chosen Option : 1

Comprehension:

In the following passage, some words have been deleted. Select the most appropriate option to fill in each blank.

In the generation of hydroelectric power, water is collected or (1) _____ at a higher elevation and led downward (2) _____ large pipes to a lower elevation; the difference in elevations is (3) _____ as the head. At the end of its passage down the pipes, the falling water (4) _____ turbines to rotate. The turbines in turn drive generators, (5) _____ convert the turbines' mechanical energy into electricity.

SubQuestion No : 24

Q.24 Select the most appropriate option to fill in blank no.4.

- Ans
- ☒ 1. produces
 - ☒ 2. begins
 - ☒ 3. effects
 - ☒ 4. causes

Question ID : 6549786836

Status : Answered

Chosen Option : 4

Comprehension:

In the following passage, some words have been deleted. Select the most appropriate option to fill in each blank.

In the generation of hydroelectric power, water is collected or (1) _____ at a higher elevation and led downward (2) _____ large pipes to a lower elevation; the difference in elevations is (3) _____ as the head. At the end of its passage down the pipes, the falling water (4) _____ turbines to rotate. The turbines in turn drive generators, (5) _____ convert the turbines' mechanical energy into electricity.

SubQuestion No : 25

Q.25 Select the most appropriate option to fill in blank no.5.

- Ans
- ☒ 1. they
 - ☒ 2. whose
 - ☒ 3. which
 - ☒ 4. who

Question ID : 6549786837

Status : Answered

Chosen Option : 3

Section : General Intelligence

Q.1 Select the option that is related to the third term in the same way as the second term is related to the first term.

QUORATE : AEOQRTU :: SANDBOX : ?

- Ans
- ☒ 1. DNASXOB
 - ☒ 2. ASDNOBX
 - ☒ 3. ABDNOSX
 - ☒ 4. BOXSAND

Question ID : 6549786864

Status : Not Answered

Chosen Option : --

Q.2 Select the option in which the numbers share the same relationship as that shared by the given pair of numbers.

12 : 20

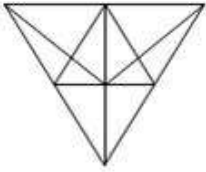
- Ans ☒ 1. 30 : 42
☐ 2. 24 : 36
☐ 3. 42 : 57
☐ 4. 18 : 28

Question ID : 6549786149

Status : Answered

Chosen Option : 1

Q.3 How many triangles are there in the given figure?



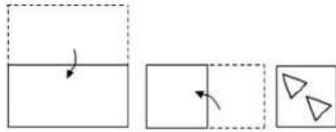
- Ans ☐ 1. 24
☒ 2. 28
☐ 3. 22
☐ 4. 26

Question ID : 6549786167

Status : Answered

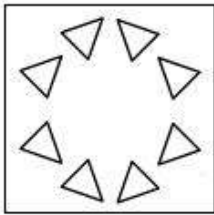
Chosen Option : 1

Q.4 The sequence of folding a piece of paper and the manner in which the folded paper has been cut is shown in the following figures. How would this paper look when unfolded?

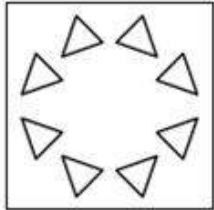


Ans

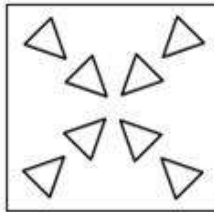
 1.



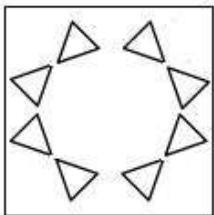
 2.



 3.



 4.

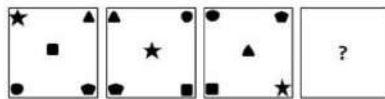


Question ID : 6549786876

Status : Answered

Chosen Option : 2

Q.5 Select the figure from among the given options that can replace the question mark (?) in the following series.



Ans

☒ 1.



☒ 2.



☒ 3.



☒ 4.



Question ID : 6549786166

Status : Answered

Chosen Option : 3

Q.6 Select the correct option that indicates the arrangement of the given words in the order in which they appear in an English dictionary.

1. Expanse
2. Expansive
3. Expandable
4. Expansion
5. Expanded

Ans ☒ 1. 3-2-1-5-4

☒ 2. 3-5-1-4-2

☒ 3. 1-2-5-3-4

☒ 4. 5-3-1-2-4

Question ID : 6549786154

Status : Answered

Chosen Option : 2

Q.7 Tushar is the only son of Jitendra, and Kirti is the daughter of Jitendra's father's brother. Suhani is the sister of Tushar. How is Suhani related to Kirti?

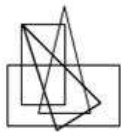
- Ans
- ☒ 1. Sister
 - ☒ 2. Cousin
 - ☒ 3. Aunt
 - ☒ 4. Niece

Question ID : 6549789809

Status : Answered

Chosen Option : 2

Q.8 Select the option that is embedded in the given figure (rotation is NOT allowed).



Ans

- ☒ 1.
- ☒ 2.
- ☒ 3.
- ☒ 4.

Question ID : 6549786875

Status : Answered

Chosen Option : 3

Q.9 Select the option in which the numbers are related in the same way as are the numbers of the following set.

(72, 56, 42)

- Ans
- ☒ 1. (80, 48, 24)
 - ☒ 2. (132, 110, 90)
 - ☒ 3. (80, 68, 58)
 - ☒ 4. (126, 102, 80)

Question ID : 6549786857

Status : Not Answered

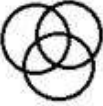
Chosen Option : --

Q.10 Select the Venn diagram that best represents the relationship between the following classes.

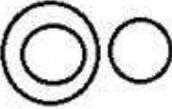
Women, Mothers, Sisters

Ans

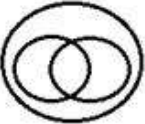
✗ 1.



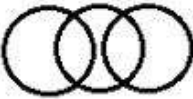
✗ 2.



✓ 3.



✗ 4.



Question ID : 6549786171

Status : Answered

Chosen Option : 3

Q.11 Read the given statements and conclusions carefully. Assuming that the information given in the statements is true, even if it appears to be at variance with commonly known facts, decide which of the given conclusions logically follow(s) from the statements.

Statements:

Some ducks are hens.
Some hens are chickens.

Conclusions:

I. Some ducks are chickens.
II. Some hens are ducks.

Ans

✗ 1.

Neither conclusion I nor II follows.

✓ 2.

Only conclusion II follows.

✗ 3.

Both conclusions I and II follow.

✗ 4.

Only conclusion I follows.

Question ID : 6549786871

Status : Answered

Chosen Option : 2

Q.12 Three different positions of the same dice are shown. Select the letter that will be on the face opposite to the face having the letter E.



- Ans**
- ☒ 1. A
 - ☒ 2. D
 - ☒ 3. F
 - ☒ 4. C

Question ID : 6549786165

Status : Answered

Chosen Option : 3

Q.13 Select the option in which the words share the same relationship as that shared by the given pair of words.

Virus : Ebola

- Ans**
- ☒ 1. Bacteria : Plague
 - ☒ 2. Mosquito : Jaundice
 - ☒ 3. Fungi : Diarrhoea
 - ☒ 4. Season : Common cold

Question ID : 6549786161

Status : Answered

Chosen Option : 4

Q.14 A notebook costs ₹12 each. A pen costs ₹9 each. Tina spends ₹123 on a total of 11 pieces of these articles. How many notebooks did she purchase?

- Ans**
- ☒ 1. 11
 - ☒ 2. 8
 - ☒ 3. 6
 - ☒ 4. 9

Question ID : 6549786147

Status : Answered

Chosen Option : 2

Q.15 In a certain code language, ENVELOPE is written as IQZHPRTH. How will INTIMATE be written in that language?

- Ans**
- ☒ 1. NRYMREYI
 - ☒ 2. KPVKOCVG
 - ☒ 3. LPWPCWG
 - ☒ 4. MQXLQDXH




Question ID : 6549786862

Status : Answered

Chosen Option : 4

Q.16 Select the option in which the numbers are related in the same way as are the numbers of the following set.





221 : 348 : 517

- Ans  1. 995 : 1326 : 1723
 2. 1005 : 1336 : 1733
 3. 1331 : 1728 : 2744
 4. 343 : 512 : 729

Question ID : 6549786151
 Status : Not Answered
 Chosen Option : --

Q.17 Which two digits and signs need to be interchanged so as to balance the given equation?

$97 \div 24 - 16 \times 5 + 37 = 53$

- Ans  1. 2 and 3; \div and -
 2. 7 and 6; + and -
 3. 4 and 7; \div and +
 4. 2 and 3; + and \times


Question ID : 6549786855
 Status : Answered
 Chosen Option : 2

Q.18 Four letter-clusters have been given in the options, out of which three are alike in some manner and one is different. Select the letter-cluster that is different.

- Ans  1. ORVA
 2. EHLQ
 3. ILPU
 4. KOSW

Question ID : 6549786162
 Status : Answered
 Chosen Option : 4

Q.19 Four numbers have been given in the options, out of which three are alike in some manner and one is different. Select the number that is different.

- Ans  1. 345
 2. 514
 3. 733
 4. 218

Question ID : 6549786153
 Status : Answered
 Chosen Option : 3

Q.20 Four words have been given, out of which three are alike in some manner and one is different. Select the word that is different.

- Ans** ☒ 1. Geology
☒ 2. Entomology
☒ 3. Mycology
☒ 4. Genomics

Question ID : 6549786870
 Status : Answered
 Chosen Option : 4

Q.21 Select the number from among the given options that can replace the question mark (?) in the following series.

12, 22, 40, 74, 140, ?

- Ans** ☒ 1. 280
☒ 2. 268
☒ 3. 270
☒ 4. 274

Question ID : 6549786859
 Status : Answered
 Chosen Option : 3

Q.22 Select the correct mirror image of the given figure when the mirror is placed at the right side.



- Ans** ☒ 1.
☒ 2.
☒ 3.
☒ 4.

Question ID : 6549786877
 Status : Answered
 Chosen Option : 3

Q.23 Select the option that is related to the third word in the same way as the second word is related to the first word.

Hindi : Devanagari :: English : ?

- Ans
- ☒ 1. Greek
 - ☒ 2. British
 - ☒ 3. Persian
 - ☒ 4. Latin

Question ID : 6549786865

Status : Answered

Chosen Option : 2

Q.24 In a certain code language, BOOTLACE is coded as 49960372 and CAPELIN is coded as 7382015. How will TAPIOCA be coded in that language?

- Ans
- ☒ 1. 3673819
 - ☒ 2. 6381973
 - ☒ 3. 6582975
 - ☒ 4. 5381963

Question ID : 6549786156

Status : Answered

Chosen Option : 2

Q.25 Select the combination of letters that when sequentially placed in the blanks of the given series will complete the series.

O _ E _ O Z _ T _ Z _ T

- Ans
- ☒ 1. O E T Z T
 - ☒ 2. E Z T O E
 - ☒ 3. Z T E O E
 - ☒ 4. T E Z O Z

Question ID : 6549789770

Status : Answered

Chosen Option : 3

Section : Quantitative Aptitude

Q.1 The successive discounts 18 % , 10 % and 15 % are equivalent to a single discount of:

- Ans
- ☒ 1. 39.25%
 - ☒ 2. 37.27%
 - ☒ 3. 45.16%
 - ☒ 4. 41.32%

Question ID : 6549786883

Status : Answered

Chosen Option : 4

Q.2 If $9x^2 - 6x + 1 = 0$, then the value of $27x^3 + (27x^3)^{-1}$ will be:

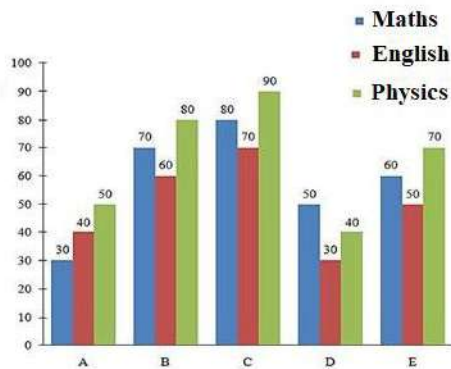
- Ans
- ☒ 1. 8
 - ☒ 2. 4
 - ☒ 3. 2
 - ☒ 4. 1

Question ID : 6549786185

Status : Answered

Chosen Option : 3

Q.3 Study the following graph and answer the question that follows.
Marks scored by five students A, B, C, D and E in three subjects (Maths, English and Physics)



What are the approximate average marks obtained by C?

- Ans
- ☒ 1. 65
 - ☒ 2. 75
 - ☒ 3. 80
 - ☒ 4. 70

Question ID : 6549788316

Status : Answered

Chosen Option : 3

Q.4 In $\triangle ABC$, the length of BC is less than twice the length of AB by 2 cm. The length of AC exceeds the length of AB by 6 cm. The perimeter is 60 cm. The length (in cm) of the largest side of the triangle ABC is:

- Ans
- ☒ 1. 28
 - ☒ 2. 26
 - ☒ 3. 30
 - ☒ 4. 20

Question ID : 6549786183


Status : Answered


Chosen Option : 2


Q.5


If $\cos\theta = \frac{p^2-1}{p^2+1}$, $0^\circ < \theta < 90^\circ$, then $\operatorname{cosec}\theta$ is equal to:

Ans

 1. $\frac{2P}{1-P^2}$

 2. $\frac{2P}{1+P^2}$

 3. $\frac{1+P^2}{2P}$

 4. $\frac{1-P^2}{2P}$

Question ID : 6549786897

Status : Answered

Chosen Option : 3

Q.6

What will be the compound interest (in ₹) on a sum of ₹7,200 for 18 months at a rate of 20% per annum, if the interest is compounded half-yearly (nearest to an integer)?

Ans

 1. 3,238

 2. 2,338

 3. 2,833

 4. 2,383

Question ID : 6549786180

Status : Answered

Chosen Option : 4

Q.7

A circle is inscribed in a triangle ABC. It touches sides AB, BC and AC at points R, P and Q, respectively. If AQ = 6.5 cm, PC = 7.5 cm and BR = 9 cm, then the perimeter (in cm) of the triangle ABC will be:

Ans

 1. 55

 2. 27.5

 3. 46

 4. 23

Question ID : 6549786181


Status : Answered


Chosen Option : 3


Q.8 If $(4x - 5)^3 + (x - 2)^3 + 27(2x - 5)^3 = 9(4x - 5)(x - 2)(2x - 5)$,


then the value of $(x + \frac{3}{2})$ will be:

Ans

 1. $\frac{3}{2}$

 2. $\frac{1}{2}$

 3. $\frac{7}{2}$

 4. $\frac{5}{2}$


Question ID : 6549786894


Status : Answered


Chosen Option : 3


Q.9 If $9a^2 + 4b^2 + 49c^2 + 18 = 2(2b + 28c - 3a)$, then the value of $(a + 2b - c)$ will be:

Ans

 1. $\frac{11}{21}$

 2. $\frac{2}{21}$

 3. $\frac{26}{21}$

 4. $\frac{5}{21}$

Question ID : 6549786893

Status : Answered

Chosen Option : 3

Q.10 If $7 \sin^2 \theta + 3 \cos^2 \theta = 4, 0^\circ < \theta < 90^\circ$, then the value of θ will be:

Ans

 1. 60°

 2. 45°

 3. 75°

 4. 30°

Question ID : 6549786899

Status : Answered

Chosen Option : 4

Q.11 The value of $61\frac{3}{5} \div \left[40 \div 2 \text{ of } 5 + 27 \div \frac{1}{3} - \left(78 \div 3\frac{1}{3} \right) \right]$ is:

Ans

☐ 1. $\frac{11}{25}$

☒ 2. 1

☐ 3. $\frac{41}{25}$

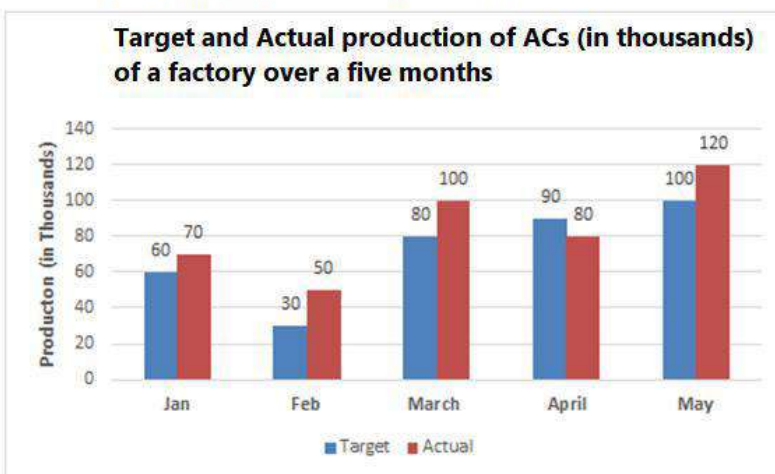
☐ 4. -5

Question ID : 6549786896

Status : Answered

Chosen Option : 2

Q.12 Study the given graph and answer the question that follows.



In which month is the actual production of ACs 20% more than its target production?

Ans

☐ 1. February

☒ 2. May

☐ 3. January

☐ 4. March

Question ID : 6549786196

Status : Answered

Chosen Option : 2

Q.13 From a rectangular sheet of dimensions $32 \text{ cm} \times 18 \text{ cm}$, a square of side 3 cm is cut from the four corners of the sheet and a box is made. The volume of the box is:

- Ans
- ☒ 1. 946 cm^3
 - ☒ 2. 936 cm^3
 - ☐ 3. 1305 cm^3
 - ☐ 4. 1300 cm^3

Question ID : 6549786881
Status : Answered
Chosen Option : 2

Q.14 A train travels at a speed of 66 km/h and halts at five junctions for a certain time. It covers a distance of 1485 km in one day. For how long (in minutes) does the train stop at each junction, if it halts for the same period of time at all the junctions?

- Ans
- ☐ 1. 15
 - ☒ 2. 18
 - ☐ 3. 12
 - ☐ 4. 20

Question ID : 6549786173
Status : Answered
Chosen Option : 2

Q.15 The income of A is 40% less than that of B . If A gets 25% rise in his income and B gets 40% rise in his income, then the percentage increase (correct to two decimal places) in the combined incomes of A and B will be:

- Ans
- ☐ 1. 35.19
 - ☐ 2. 37.86
 - ☐ 3. 31.67
 - ☒ 4. 34.38

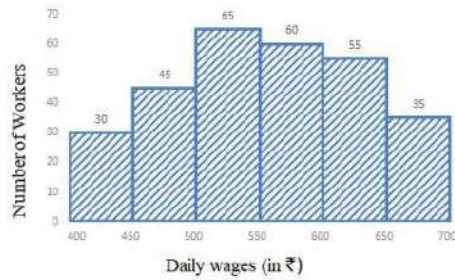
Question ID : 6549786177
Status : Answered
Chosen Option : 4

Q.16 If PA and PB are tangents drawn to a circle with centre O at A and B from external point P such that $\angle APB = 78^\circ$, then $\angle OAB$ is equal to:

- Ans
- ☒ 1. 39°
 - ☐ 2. 12°
 - ☐ 3. 36°
 - ☐ 4. 29°

Question ID : 6549786889
Status : Answered
Chosen Option : 1

Q.17 Study the graph which shows the daily wages (in ₹) with number of workers and answer the question that follows.



If the ratio of the total number of workers whose daily wages are less than ₹450 to the total number of workers whose daily wages are ₹600 or above is a : b, then what is the difference between b and a?

- Ans**
- ☒ 1. 2
 - ☐ 2. 1
 - ☐ 3. 0
 - ☐ 4. 3

Question ID : 6549786094

Status : Answered

Chosen Option : 1

Q.18 If a nine-digit number $489x6378y$ is divisible by 72, then the value of $\sqrt{8x+6y}$ will be:

- Ans**
- ☐ 1. 10
 - ☐ 2. 4
 - ☐ 3. 6
 - ☒ 4. 8

Question ID : 6549786188

Status : Answered

Chosen Option : 4

Q.19 The value of $\frac{3 \tan^2 60^\circ + \sec^2 30^\circ - \sin^2 45^\circ}{(\cos 15^\circ + \sin 75^\circ)(\sec 15^\circ + \operatorname{cosec} 75^\circ)}$ is:

- Ans**
- ☐ 1. $\frac{5}{12}$
 - ☐ 2. $\frac{65}{24}$
 - ☐ 3. $\frac{13}{12}$
 - ☒ 4. $\frac{59}{24}$

Question ID : 6549786191

Status : Answered

Chosen Option : 4

Q.20 The average of eighteen numbers is 42. The average of the last ten numbers is 40 and that of the first five numbers is 44. The seventh number is 6 less than the sixth and 7 less than the eighth number. The average of the sixth and the eighth number is:

- Ans**
- ☒ 1. 46.5
 - ☒ 2. 47.5
 - ☒ 3. 45
 - ☒ 4. 48

Question ID : 6549786175

Status : Answered

Chosen Option : 2

Q.21 Study the given graph which shows the Target and Actual production of AC's (in thousands) of a factory over five months and answer the question that follows.

Target and Actual Production of AC's (in Thousands) of a factory over five months



The ratio of the combined target production of ACs from January to April to that of the actual production of ACs from March to May is:

- Ans**
- ☒ 1. 13 : 15
 - ☒ 2. 19 : 15
 - ☒ 3. 15 : 13
 - ☒ 4. 15 : 19

Question ID : 6549786900

Status : Answered

Chosen Option : 1

Q.22 In $\triangle ABC$, $\angle A = 66^\circ$. If I is the incentre of the triangle, then the measure of $\angle BIC$ will be:

- Ans**
- ☒ 1. 123°
 - ☒ 2. 109°
 - ☒ 3. 119°
 - ☒ 4. 112°

Question ID : 6549786891

Status : Answered

Chosen Option : 1

Q.23 A can do 60% of a work in 18 days, while B can do 40% of the same work in 10 days. Both work together for 10 days only. C completed the remaining work in 4 days. In how many days will C complete the same work?

- Ans
- ☒ 1. 12
 - ☒ 2. 15
 - ☒ 3. 25
 - ☒ 4. 18

Question ID : 6549786879

Status : Answered

Chosen Option : 2

Q.24 A bought an article for ₹4,800 and sold it at a loss of 30%. With this amount, he bought another article and sold it at a gain of 60%. What was his overall gain/loss?

- Ans
- ☒ 1. Loss 18%
 - ☒ 2. Gain 12%
 - ☒ 3. Gain 10%
 - ☒ 4. Loss 15%

Question ID : 6549786885

Status : Answered

Chosen Option : 2

Q.25 The ratio of the incomes of A and B is 7 : 5. A and B save ₹4,000 and ₹3,500, respectively. If the expenditure of B is half the expenditure of A, then the total income of A and B (in ₹) will be:

- Ans
- ☒ 1. 10,000
 - ☒ 2. 13,500
 - ☒ 3. 12,000
 - ☒ 4. 15,000

Question ID : 6549786179

Status : Answered

Chosen Option : 3

Section : General Awareness

Q.1 Who among the following politicians was the Home Minister of India in Rajiv Gandhi's cabinet from 1986 to 1989?

- Ans
- ☒ 1. Madhavrao Scindia
 - ☒ 2. Ajit Kumar Panja
 - ☒ 3. Buta Singh
 - ☒ 4. Ashoke Kumar Sen

Question ID : 6549786922

Status : Not Answered

Chosen Option : --

Q.2 Which maharaja of Manipur signed the Instrument of Accession with the Government of India?

- Ans
- ☐ 1. Kulachandra Singh
 - ☒ 2. Bodhchandra Singh
 - ☐ 3. Nara Singh
 - ☐ 4. Gambhir Singh

Question ID : 6549786925
Status : Not Answered
Chosen Option : --

Q.3 Where was the Khelo India Ice Hockey Tournament held in January 2021?

- Ans
- ☐ 1. Lungnak
 - ☐ 2. Shargole
 - ☐ 3. Drass
 - ☒ 4. Chiktan

Question ID : 6549786221
Status : Answered
Chosen Option : 4

Q.4 The world's only floating national park, Keibul Lamjao National Park, is located in ____.

- Ans
- ☒ 1. Manipur
 - ☐ 2. Assam
 - ☐ 3. Nagaland
 - ☐ 4. Tripura

Question ID : 6549786916
Status : Answered
Chosen Option : 1

Q.5 Which of the following is a Kharif crop in North India and a Rabi crop in South India?

- Ans
- ☐ 1. Wheat
 - ☒ 2. Sesamum
 - ☐ 3. Finger millet
 - ☐ 4. Barley

Question ID : 6549786211
Status : Answered
Chosen Option : 4

Q.6 Which of the following is a single user operating system?

- Ans
- ☐ 1. Windows 7
 - ☒ 2. MS-DOS
 - ☐ 3. Windows NT
 - ☐ 4. Linux

Question ID : 6549786197
Status : Answered
Chosen Option : 4

Q.7 In January 2021, the Defence Research Development Organisation (DRDO) developed India's first indigenous machine pistol called 'Asmi' in collaboration with _____.

- Ans
- ☐ 1. Army War College, Mhow
 - ☐ 2. Central Ordnance Depot, Jabalpur
 - ☒ 3. Infantry School, Mhow
 - ☐ 4. College of Military Engineering, Pune

Question ID : 6549786910
Status : Not Answered
Chosen Option : --

Q.8 How many terabytes make one petabyte?

- Ans
- ☐ 1. 1048
 - ☐ 2. 1042
 - ☐ 3. 1084
 - ☒ 4. 1024

Question ID : 6549786905
Status : Answered
Chosen Option : 4

Q.9 Public Sector Banks account for about _____ of market share in Indian banking as per the Economic Survey 2019-20.

- Ans
- ☒ 1. 70%
 - ☐ 2. 50%
 - ☐ 3. 80%
 - ☐ 4. 40%

Question ID : 6549786204
Status : Not Answered
Chosen Option : --

Q.10 Who among the following did the Sports Authority of India appoint as the middle-and-long distance coach of the Indian athletics team in January 2021?

- Ans
- ☐ 1. Avinash Sable
 - ☐ 2. Radhakrishnan Nair
 - ☐ 3. Adille Sumariwalla
 - ☒ 4. Nikolai Snegarev

Question ID : 6549786927

Status : Answered

Chosen Option : 4

Q.11 The inertia of an object is measured by its ____.

- Ans
- ☐ 1. volume
 - ☐ 2. speed
 - ☒ 3. mass
 - ☐ 4. area

Question ID : 6549786915

Status : Answered

Chosen Option : 3

Q.12 Which of the following beaches was NOT awarded the international 'Blue Flag' certification by Foundation of Environment Education, Denmark as of October 2020?

- Ans
- ☐ 1. Kappad
 - ☐ 2. Ghoghla
 - ☒ 3. Talasari
 - ☐ 4. Rushikonda

Question ID : 6549786216

Status : Not Answered

Chosen Option : --

Q.13 Which web portal and mobile application did the Ministry of Housing and Urban Affairs, Government of India, launch in December 2020?

- Ans
- ☐ 1. e-Uparjan
 - ☐ 2. e-Rozgar
 - ☒ 3. e-Sampada
 - ☐ 4. e-Dharti

Question ID : 6549786201

Status : Answered

Chosen Option : 3

Q.14 Who among the following was a World War II veteran, also associated with cricket?

- Ans
- ☒ 1. Brad Friedel
 - ☒ 2. Alan Burgess
 - ☒ 3. Ivan Cordoba
 - ☒ 4. Erik Karlsson

Question ID : 6549786219
Status : Answered
Chosen Option : 2

Q.15 Which of the following Articles of the Constitution of India deals with the organisation of agriculture and animal husbandry?

- Ans
- ☒ 1. Article 84
 - ☒ 2. Article 92
 - ☒ 3. Article 29
 - ☒ 4. Article 48

Question ID : 6549786217
Status : Answered
Chosen Option : 4

Q.16 The Sufi shrine Charar-e-Sharief (or Sharif) is located near _____ city.

- Ans
- ☒ 1. Srinagar
 - ☒ 2. Mumbai
 - ☒ 3. Hyderabad
 - ☒ 4. Lucknow

Question ID : 6549786199
Status : Answered
Chosen Option : 1

Q.17 Which of the following watershed development projects is sponsored by the Central Government aims at enabling the rural population to conserve water?

- Ans
- ☒ 1. Jal Kranti Abhiyan
 - ☒ 2. Haryali
 - ☒ 3. Neeru-Meeru
 - ☒ 4. Arvary Pani Sansad

Question ID : 6549786212
Status : Not Answered
Chosen Option : --

Q.18 Which was the first empire in ancient India to use elephants in its war on a large scale?

- Ans
- ☐ 1. Shunga
 - ☐ 2. Chola
 - ☐ 3. Kushans
 - ☒ 4. Magadha

Question ID : 6549786920
Status : Answered
Chosen Option : 4

Q.19 'Purusha Sukta' is a hymn from which Veda?

- Ans
- ☐ 1. Atharvaveda
 - ☐ 2. Yajurveda
 - ☒ 3. Rigveda
 - ☐ 4. Samaveda

Question ID : 6549786214
Status : Answered
Chosen Option : 4

Q.20 Which of the following was the country in focus at the 51st International Film Festival of India held in Goa in January 2021?

- Ans
- ☐ 1. Myanmar
 - ☐ 2. Nepal
 - ☒ 3. Bangladesh
 - ☐ 4. Bhutan

Question ID : 6549786202
Status : Answered
Chosen Option : 3

Q.21 Who discovered blood circulation?

- Ans
- ☐ 1. Charles Darwin
 - ☐ 2. David Baltimore
 - ☒ 3. William Harvey
 - ☐ 4. Rosalind Franklin

Question ID : 6549786207
Status : Answered
Chosen Option : 3

Q.22 Which of the following diseases is caused by Leishmania, a protozoan organism?

- Ans
- ☒ 1. Sleeping sickness
 - ☐ 2. Kala-azar
 - ☐ 3. Malaria
 - ☐ 4. Acne

Question ID : 6549786913
Status : Answered
Chosen Option : 2

Q.23 Which of the following is a main species of moist deciduous forests?

- Ans
- ☒ 1. Sandalwood
 - ☐ 2. Khejri
 - ☐ 3. Amaltas
 - ☐ 4. Neem

Question ID : 6549786917
Status : Answered
Chosen Option : 2

Q.24 A Shadava Raga has only _____ notes in its scale.

- Ans
- ☐ 1. seven
 - ☐ 2. eight
 - ☐ 3. five
 - ☒ 4. six

Question ID : 6549786907
Status : Not Answered
Chosen Option : --

Q.25 As per Union Budget 2021, 9% of the government revenue will be spent on _____.

- Ans
- ☐ 1. defence
 - ☐ 2. interest payments
 - ☐ 3. pensions
 - ☒ 4. centrally sponsored schemes

Question ID : 6549786912
Status : Answered
Chosen Option : 1

Combined Higher Secondary Level Examination 2020 (Tier-I)

Roll Number	Join Telegram: HaryanaJobs.in
Candidate Name	
Venue Name	
Exam Date	05/08/2021
Exam Time	3:00 PM - 4:00 PM
Subject	Combined Higher Secondary Level Exam 2020

Section : English Language

Q.1 Select the **INCORRECTLY** spelt word.

- Ans
- ☒ 1. Fragrance
 - ☒ 2. Interfere
 - ☒ 3. Temparary
 - ☒ 4. Accustomed

Question ID : 6549787553

Status : Answered

Chosen Option : 3

Q.2 Select the most appropriate meaning of the idiomatic expression given.

To poke one's nose into

- Ans
- ☒ 1. To clean one's nose with a twig
 - ☒ 2. To bury oneself in another matter
 - ☒ 3. To insert something in another's nose
 - ☒ 4. To take interest in others' affairs

Question ID : 6549787552

Status : Answered

Chosen Option : 4

Q.3 Select the most appropriate option to substitute the underlined segment in the given sentence. If there is no need to substitute it, select 'No substitution'.

Large glasses magnified his eyes so that to gave him the appearance of a wise owl.

- Ans
- ☒ 1. as though to gave
 - ☒ 2. so that it gives
 - ☒ 3. No substitution
 - ☒ 4. so as to give

Question ID : 6549788356

Status : Answered

Chosen Option : 2

Q.4 In the given sentence, identify the segment which contains a grammatical error.

Despite of being a close friend he did not help me in any way.

- Ans
- ☒ 1. a close friend
 - ☒ 2. in any way
 - ☒ 3. he did not help me
 - ☒ 4. Despite of being

Question ID : **6549788345**
Status : **Answered**
Chosen Option : **4**

Q.5 Select the most appropriate ANTONYM of the given word.

Restrictive

- Ans
- ☒ 1. Thrifty
 - ☒ 2. Broad
 - ☒ 3. Liberal
 - ☒ 4. Closed

Question ID : **6549787550**
Status : **Marked For Review**
Chosen Option : **2**

Q.6 Select the option that can be used as a one-word substitute for the given group of words.

Relating to soldiers or war

- Ans
- ☒ 1. Martial
 - ☒ 2. Official
 - ☒ 3. Political
 - ☒ 4. Marital

Question ID : **6549787555**
Status : **Answered**
Chosen Option : **1**

Q.7 Select the most appropriate antonym of the given word.

NEGLECT

- Ans
- ☒ 1. fail
 - ☒ 2. care
 - ☒ 3. omit
 - ☒ 4. trust

Question ID : **6549788357**
Status : **Answered**
Chosen Option : **2**

Q.8 Select the option that expresses the given sentence in active or passive voice.

Wi-Fi hotspots will be installed by the government in remote areas by 2022.

- Ans
- ☐ 1. Wi-Fi hotspots will install in remote areas by 2022 by the government.
 - ☐ 2. Remote areas will install Wi-Fi hotspots by the government by 2022.
 - ☐ 3. The government will install remote areas and hotspots by 2022.
 - ☒ 4. The government will install Wi-Fi hotspots in remote areas by 2022.

Question ID : 6549787535

Status : Answered

Chosen Option : 4

Q.9 The following sentence has been split into four segments. Identify the segment that contains a grammatical error.

The police arrested / two young men, but / neither of them were / responsible for the robbery.

- Ans
- ☐ 1. for the robbery
 - ☐ 2. two young men, but
 - ☐ 3. The police arrested
 - ☒ 4. neither of them were

Question ID : 6549787538

Status : Answered

Chosen Option : 4

Q.10 Fill in the blank with most appropriate word.

The old building was _____ by the authorities.

- Ans
- ☐ 1. pulled through
 - ☒ 2. pulled down
 - ☐ 3. pulled up
 - ☐ 4. pulled off

Question ID : 6549788367

Status : Answered

Chosen Option : 2

Q.11 Select the most appropriate synonym of the given word.

Herald

- Ans
- ☐ 1. Halt
 - ☒ 2. Announce
 - ☐ 3. Suppress
 - ☐ 4. Succeed

Question ID : 6549787558

Status : Not Attempted and
Marked For Review

Chosen Option : --

Q.12 Select the most appropriate option to substitute the underlined segment in the given sentence. If there is no need to substitute it, select 'No substitution required'.

I want to buy this book. Please give me any money.

- Ans
- ☒ 1. some money
 - ☐ 2. less money
 - ☐ 3. No substitution required
 - ☐ 4. little money

Question ID : 6549787547
Status : Answered
Chosen Option : 1

Q.13 Select the most appropriate one-word substitution for the given words.

one who pretends to be what he is not

- Ans
- ☐ 1. stoic
 - ☐ 2. fanatic
 - ☒ 3. hypocrite
 - ☐ 4. optimist

Question ID : 6549788364
Status : Marked For Review
Chosen Option : 1

Q.14 Select the misspelt word.

- Ans
- ☐ 1. vicious
 - ☒ 2. trecherous
 - ☐ 3. lustrous
 - ☐ 4. pompous

Question ID : 6549788362
Status : Marked For Review
Chosen Option : 2

Q.15 Select the most appropriate word to fill in the blank.

Despite their _____, impersonal rules that apply to all are essential in large systems.

- Ans
- ☐ 1. support
 - ☐ 2. advantages
 - ☐ 3. benefits
 - ☒ 4. limitations

Question ID : 6549787560
Status : Marked For Review
Chosen Option : 4

Q.16 Select the correct indirect form of the given sentence.

The watchman said, "I did not see anyone last night."

- Ans
- ☒ 1. The watchman said that he had not seen anyone the previous night.
 - ☐ 2. The watchman said that he did not see anyone last night.
 - ☐ 3. The watchman said that he did not saw anyone the previous night.
 - ☐ 4. The watchman said that I had not seen anyone last night.

Question ID : 6549788344

Status : Answered

Chosen Option : 1

Q.17 Select the most appropriate meaning of the underlined idiom in the given sentence.

The friends quarrelled some time ago but now they are trying to make up with each other.

- Ans
- ☐ 1. to part forever
 - ☐ 2. to blame each other
 - ☐ 3. to compete with one another
 - ☒ 4. to settle their differences

Question ID : 6549788359

Status : Answered

Chosen Option : 4

Q.18 Given below are four sentences in jumbled order. Select the option that gives their correct order.

- A. The other was a ruffled, glum-faced man, heavily built and roughly dressed.
- B. One man had a handsome presence with a bold and frank look.
- C. But the most striking thing was that they were handcuffed together.
- D. The two men who boarded the train from Denver were an odd pair.

- Ans
- ☐ 1. DCAB
 - ☐ 2. BADC
 - ☐ 3. ADCB
 - ☒ 4. DBAC

Question ID : 6549788353

Status : Answered

Chosen Option : 2

Q.19 Sentences of a paragraph are given below in jumbled order. Arrange the sentences in the right order to form a meaningful and coherent paragraph.

- A. Earlier, they had to look through hundreds of mugshots in large books and they could make a positive identification only in 5% of the cases.
 B. This saves a lot of time and effort and also leads to more positive identifications.
 C. Now computers make this easier for witnesses by projecting only pictures that match the descriptions closely.
 D. After a crime, witnesses often give the police a description and thus help to identify the criminal.

- Ans ☒ 1. DACB
☒ 2. CBAD
☒ 3. BACD
☒ 4. ACBD

Question ID : 6549787546

Status : Answered

Chosen Option : 2

Q.20 Select the most appropriate synonym of the given word.

ADEPT

- Ans ☒ 1. clumsy
☒ 2. rough
☒ 3. lazy
☒ 4. skilled

Question ID : 6549788365

Status : Answered

Chosen Option : 4

Comprehension:

In the following passage, some words have been deleted. Select the most appropriate option to fill in each blank.

We must understand that people can process very little information presented orally. So, it is (1) _____, particularly for a teacher, to realise that the students have sometimes listened to three or four teachers (2) _____ you. So, the teacher must have props like notes, handouts and slides that will make the learning material (3) _____ alive for the students and stay that way with them. A visual aid, a little movement or colour will get the students' attention. Another important thing to (4) _____ is that long, complicated sentences spoken fast are simply too difficult for students to understand. It is, therefore, (5) _____ to use short sentences that make sense to them instantly.

SubQuestion No : 21

Q.21 Select the most appropriate option to fill in blank number 1.

- Ans ☒ 1. urgent
☒ 2. unnecessary
☒ 3. important
☒ 4. immaterial

Question ID : 6549787540

Status : Answered

Chosen Option : 3

Comprehension:

In the following passage, some words have been deleted. Select the most appropriate option to fill in each blank.

We must understand that people can process very little information presented orally. So, it is (1) _____, particularly for a teacher, to realise that the students have sometimes listened to three or four teachers (2) _____ you. So, the teacher must have props like notes, handouts and slides that will make the learning material (3) _____ alive for the students and stay that way with them. A visual aid, a little movement or colour will get the students' attention. Another important thing to (4) _____ is that long, complicated sentences spoken fast are simply too difficult for students to understand. It is, therefore, (5) _____ to use short sentences that make sense to them instantly.

SubQuestion No : 22

Q.22 Select the most appropriate option to fill in blank number 2.

- Ans
- ☒ 1. after
 - ☒ 2. beside
 - ☒ 3. behind
 - ☒ 4. before

Question ID : 6549787541

Status : Answered

Chosen Option : 2

Comprehension:

In the following passage, some words have been deleted. Select the most appropriate option to fill in each blank.

We must understand that people can process very little information presented orally. So, it is (1) _____, particularly for a teacher, to realise that the students have sometimes listened to three or four teachers (2) _____ you. So, the teacher must have props like notes, handouts and slides that will make the learning material (3) _____ alive for the students and stay that way with them. A visual aid, a little movement or colour will get the students' attention. Another important thing to (4) _____ is that long, complicated sentences spoken fast are simply too difficult for students to understand. It is, therefore, (5) _____ to use short sentences that make sense to them instantly.

SubQuestion No : 23

Q.23 Select the most appropriate option to fill in blank number 3.

- Ans
- ☒ 1. be
 - ☒ 2. go
 - ☒ 3. come
 - ☒ 4. stay

Question ID : 6549787542

Status : Answered

Chosen Option : 3

Comprehension:

In the following passage, some words have been deleted. Select the most appropriate option to fill in each blank.

We must understand that people can process very little information presented orally. So, it is (1) _____, particularly for a teacher, to realise that the students have sometimes listened to three or four teachers (2) _____ you. So, the teacher must have props like notes, handouts and slides that will make the learning material (3) _____ alive for the students and stay that way with them. A visual aid, a little movement or colour will get the students' attention. Another important thing to (4) _____ is that long, complicated sentences spoken fast are simply too difficult for students to understand. It is, therefore, (5) _____ to use short sentences that make sense to them instantly.

SubQuestion No : 24

Q.24 Select the most appropriate option to fill in blank number 4.

- Ans
- ☒ 1. guess
 - ☒ 2. determine
 - ☒ 3. realise
 - ☒ 4. decide

Question ID : **6549787543**

Status : **Answered**

Chosen Option : **3**

Comprehension:

In the following passage, some words have been deleted. Select the most appropriate option to fill in each blank.

We must understand that people can process very little information presented orally. So, it is (1) _____, particularly for a teacher, to realise that the students have sometimes listened to three or four teachers (2) _____ you. So, the teacher must have props like notes, handouts and slides that will make the learning material (3) _____ alive for the students and stay that way with them. A visual aid, a little movement or colour will get the students' attention. Another important thing to (4) _____ is that long, complicated sentences spoken fast are simply too difficult for students to understand. It is, therefore, (5) _____ to use short sentences that make sense to them instantly.

SubQuestion No : 25

Q.25 Select the most appropriate option to fill in blank number 5.

- Ans
- ☒ 1. advisable
 - ☒ 2. mandatory
 - ☒ 3. compulsory
 - ☒ 4. critical

Question ID : **6549787544**

Status : **Not Answered**

Chosen Option : **--**

Section : **General Intelligence**

Q.1 Read the given statements and conclusions carefully. Assuming that the information given in the statements is true, even if it appears to be at variance with commonly known facts, decide which of the given conclusions logically follow(s) from the statements.

Statements:

Some drivers are artists.

All fathers are artists.

No father is a doctor.

Conclusions:

I. No doctor is an artist.

II. No driver is a doctor.

III. Some artists are fathers.

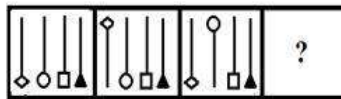
- Ans**
- ☒ 1. Both conclusions I and III follow
 - ☒ 2. Only conclusion II follows
 - ☒ 3. Only conclusion III follows
 - ☒ 4. Both conclusions I and II follow

Question ID : 6549787578

Status : Answered

Chosen Option : 3

Q.2 Select the figure that will replace the question mark (?) in the following figure series.



Ans

- ☒ 1.
- ☒ 2.
- ☒ 3.
- ☒ 4.

Question ID : 6549788388

Status : Answered

Chosen Option : 4

Q.3 In a code language, if LOCK is written as 1212311 and KEY is written as 112225, then how will DEAR be written in the same language?

- Ans
- ☒ 1. 4232609
 - ☒ 2. 4222618
 - ☒ 3. 4052619
 - ☒ 4. 4220218

Question ID : 6549788378

Status : **Marked For Review**

Chosen Option : 4

Q.4 Select the number from among the given options that can replace the question mark (?) in the following series.

52, ?, 113, 162, 226, 307

- Ans
- ☒ 1. 70
 - ☒ 2. 77
 - ☒ 3. 89
 - ☒ 4. 83

Question ID : 6549787566

Status : **Answered**

Chosen Option : 2

Q.5 Three of the following four letter-cluster pairs are alike in a certain way and one is different. Select the odd one.

- Ans
- ☒ 1. FRY : HTB
 - ☒ 2. TAP : VDT
 - ☒ 3. DRY : FUC
 - ☒ 4. RAT : TDX

Question ID : 6549788384

Status : **Answered**

Chosen Option : 1

Q.6 Select the option that is related to the third word in the same way as the second word is related to the first word.

Kick : Football : : Backstroke : ?

- Ans
- ☒ 1. Swimming
 - ☒ 2. Polo
 - ☒ 3. Weight lifting
 - ☒ 4. Cricket

Question ID : 6549787572

Status : **Answered**

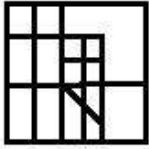
Chosen Option : 4

Q.7 Select the option in which the given figure is embedded (rotation is NOT allowed).

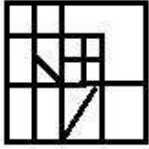


Ans

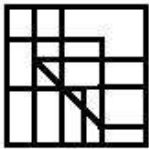
✗ 1.



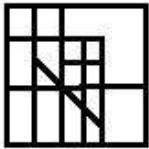
✗ 2.



✗ 3.



✓ 4.



Question ID : 6549787582

Status : Answered

Chosen Option : 4

Q.8 Select the correct mirror image of the given combination when the mirror is placed at MN as shown.

R w b 5 1 9

M
|
N

Ans

✗ 1.

9 1 2 q w R

✗ 2.

R w p 2 1 9

✓ 3.

9 1 2 d w R

✗ 4.

9 1 5 d w R

Question ID : 6549787584

Status : Answered

Chosen Option : 3

Q.9 In a group of 72 workers, each worker participates in one or more of three activities, i.e. Quiz, Mono-acting and Mimicry. 11 workers participate in Quiz only, 15 participate in Mono-acting only and 14 participate in Mimicry only. If 5 workers participate in all three activities, then how many workers participate in any two activities?

- Ans
- ☐ 1. 25
 - ☐ 2. 37
 - ☒ 3. 27
 - ☐ 4. 15

Question ID : 6549788369

Status : **Not Attempted and Marked For Review**

Chosen Option : --

Q.10 Select the option in which the numbers are related in the same way as are the numbers of the following set.

(21, 13, 17)

- Ans
- ☐ 1. (11, 21, 140)
 - ☐ 2. (25, 35, 38)
 - ☐ 3. (22, 57, 81)
 - ☒ 4. (32, 46, 39)

Question ID : 6549787564

Status : **Answered**

Chosen Option : 4

Q.11 Select the option in which the numbers in the set share the same relationship as the numbers in the given set.

(25, 19, 36)

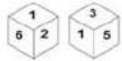
- Ans
- ☐ 1. (27, 11, 38)
 - ☐ 2. (20, 14, 66)
 - ☐ 3. (24, 22, 49)
 - ☒ 4. (22, 17, 25)

Question ID : 6549788373

Status : **Not Answered**

Chosen Option : --

Q.12 Two different positions of the same dice are shown, the six faces of which are numbered from 1 to 6. Select the number that will be on the face opposite to the one having '4'.



Ans ☒ 1. 1

☒ 2. 5

☒ 3. 3

☒ 4. 2

Question ID : 6549788387

Status : Answered

Chosen Option : 1

Q.13 In a certain code language, 'MODERATE' is written as 'OQEFTBVF' and 'LIFE' is written as 'NJGF'. How will 'CLEAR' be written in that language?

Ans ☒ 1. ENFBT

☒ 2. DOFCT

☒ 3. DNFBT

☒ 4. DNGBU

Question ID : 6549787569

Status : Answered

Chosen Option : 1

Q.14 Select the correct combination of mathematical signs that can sequentially replace the * signs and balance the given equation.

$$100 * 25 * 35 * 15 * 5 * 190$$

Ans ☒ 1. -, +, ÷, ×, =

☒ 2. ×, -, +, ÷, =

☒ 3. -, +, ×, ÷, =

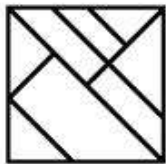
☒ 4. +, -, ÷, ×, =

Question ID : 6549787562

Status : Answered

Chosen Option : 3

Q.15 How many triangles are there in the figure given below?



- Ans ☒ 1. 10
☒ 2. 9
☒ 3. 8
☒ 4. 11

Question ID : 6549788389
 Status : Answered
 Chosen Option : 2

Q.16 Select the option that is related to the third term in the same way as the second term is related to the first term.

TANGLE : XERKPI :: FIGHTS : ?

- Ans ☒ 1. JMKLXW
☒ 2. JMKMXX
☒ 3. JNOLXW
☒ 4. KMKLYW

Question ID : 6549787571
 Status : Answered
 Chosen Option : 1

Q.17 Select the combination of letters that when sequentially placed in the blanks of the given series will complete the series.

H _ Z _ H O Z C H O _ D _ O _ E H _ Z F

- Ans ☒ 1. O B Z H Z O
☒ 2. O C Z H Z H
☒ 3. O B H O Z O
☒ 4. H B Z H H O

Question ID : 6549787573
 Status : Answered
 Chosen Option : 1

Q.18 Select the word-pair in which the two words are related in the same way as are the two words in the following word-pair.

Courage : Bravery

- Ans
- ☐ 1. Aggressive : Fragile
 - ☐ 2. Patience : Violent
 - ☐ 3. Afraid : Lazy
 - ☒ 4. Systematic : Orderly

Question ID : 6549788383

Status : Answered

Chosen Option : 4

Q.19 Select the option that is related to the fourth number in the same way as the first number is related to the second number and the fifth number is related to the sixth number.

11 : 242 :: ? : 162 :: 14 : 392

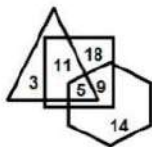
- Ans
- ☒ 1. 9
 - ☐ 2. 10
 - ☐ 3. 8
 - ☐ 4. 12

Question ID : 6549788371

Status : Answered

Chosen Option : 1

Q.20 In the Venn diagram given below, if 'Hexagon' represents 'Farmers', 'Triangle' represents 'Villagers' and 'Square' represents 'Beneficiaries', then how many Farmers are there who are Villagers and Beneficiaries also?



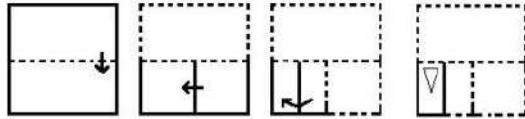
- Ans
- ☐ 1. 9
 - ☐ 2. 18
 - ☐ 3. 11
 - ☒ 4. 5

Question ID : 6549788393

Status : Answered

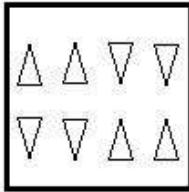
Chosen Option : 4

Q.21 The sequence of folding a piece of paper and the manner in which the folded paper has been cut is shown in the following figures. How would this paper look when unfolded?

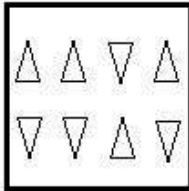


Ans

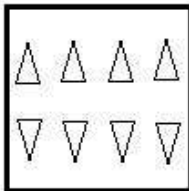
☒ 1.



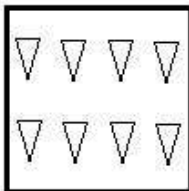
☒ 2.



☒ 3.



☒ 4.



Question ID : 6549787583

Status : Answered

Chosen Option : 3

Q.22 Four words have been given, out of which three are alike in some manner and one is different. Select the word that is different.

Ans

☒ 1. Gastroenterologist

☒ 2. Psychiatrist

☒ 3. Ophthalmologist

☒ 4. Cardiologist

Question ID : 6549787577

Status : Not Answered

Chosen Option : --

Q.23 A family consists of six members. Surendar is the son of Revant. Pranavi is the wife of Revant. Yugal is the brother of Revant. Kundana is the daughter of Pranavi. Janardan is the brother of Pranavi. How many children does Pranavi have?

- Ans
- ☐ 1. 4
 - ☐ 2. 3
 - ☒ 3. 2
 - ☐ 4. 1

Question ID : **6549786766**
Status : **Answered**
Chosen Option : **3**

Q.24 Four number-pairs have been given, out of which three are alike in some manner and one is different. Select the one that is different.

- Ans
- ☐ 1. 9 : 734
 - ☐ 2. 7 : 348
 - ☐ 3. 5 : 130
 - ☒ 4. 8 : 516

Question ID : **6549788375**
Status : **Answered**
Chosen Option : **4**

Q.25 Select the option that represents the correct order of the given words as they would appear in an English dictionary.

1. Primary
2. Pristine
3. Predator
4. Precaution
5. Preserve

- Ans
- ☐ 1. 4, 5, 3, 1, 2
 - ☐ 2. 3, 4, 5, 1, 2
 - ☒ 3. 4, 3, 5, 1, 2
 - ☐ 4. 4, 3, 5, 2, 1

Question ID : **6549788376**
Status : **Answered**
Chosen Option : **3**

Q.1 Sachin alone can complete a piece of work for ₹8,500 in $8\frac{1}{2}$ days. But with the help of Vishnu, the work is completed in 6 days. The share to be paid to Vishnu is:

- Ans
- ☒ 1. ₹3,200
 - ☒ 2. ₹2,500
 - ☒ 3. ₹2,400
 - ☒ 4. ₹2,000

Question ID : 6549787586
Status : Answered
Chosen Option : 2

Q.2 If $x - y = 4$ and $x^3 - y^3 = 316$, then the value of $x^4 + y^4$ is:

- Ans
- ☒ 1. 2248
 - ☒ 2. 2482
 - ☒ 3. 2428
 - ☒ 4. 2284

Question ID : 6549787601
Status : Answered
Chosen Option : 2

Q.3 An article was sold at a loss of 24%. If it were sold for ₹1,596 more, then there would have been a gain of 18%. The cost price of the article is:

- Ans
- ☒ 1. ₹3,400
 - ☒ 2. ₹3,600
 - ☒ 3. ₹3,800
 - ☒ 4. ₹4,200

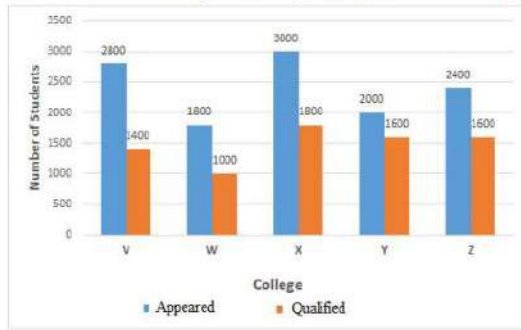
Question ID : 6549787592
Status : Answered
Chosen Option : 3

Q.4 If $a : b = 3 : 5$, $b : c = 7 : 8$ and $c : d = 2 : 3$, then $2a : 3d$ is equal to:

- Ans
- ☒ 1. 1 : 2
 - ☒ 2. 7 : 30
 - ☒ 3. 7 : 15
 - ☒ 4. 7 : 20

Question ID : 6549788401
Status : Answered
Chosen Option : 2

Q.5 Study the following graph and answer the question that follows.
Number of students that appeared and qualified, from various colleges, at a scholarship examination.



What is the difference between the average number of students that appeared for the scholarship examination from all the given colleges, and the average number of students that qualified from all the colleges together?

- Ans ☒ 1. 920
☒ 2. 940
☒ 3. 930
☒ 4. 910

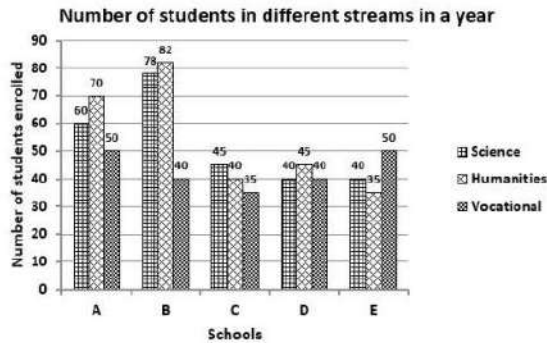
Question ID : 6549788719

Status : Marked For Review

Chosen Option : 1

Q.6 The number of students enrolled in different streams at Senior Secondary level in five schools is shown in the given bar graph.

The number of students enrolled in the Humanities stream in schools A, C and D is what percentage of the number of students enrolled in the Vocational stream in schools C, D and E?



- Ans ☒ 1. 75
☒ 2. 80.64
☒ 3. 115
☒ 4. 124

Question ID : 6549788418

Status : Answered

Chosen Option : 4

Q.7 The in-radius and circumradius of a right-angled triangle is 3 cm and 12.5 cm, respectively. The area of the triangle is:

- Ans
- ☒ 1. 64 cm^2
 - ☒ 2. 48 cm^2
 - ☒ 3. 88 cm^2
 - ☒ 4. 84 cm^2

Question ID : 6549787598

Status : Not Answered

Chosen Option : --

Q.8 If $a + b = 24$ and $a^2 + b^2 = 306$, where $a > b$, then the value of $4a - 5b$ is:

- Ans
- ☒ 1. 18
 - ☒ 2. 20
 - ☒ 3. 12
 - ☒ 4. 15

Question ID : 6549787600

Status : Answered

Chosen Option : 4

Q.9 If the number $87m6203m$ is divisible by 6, then find the sum of all possible values of 'm'.

- Ans
- ☒ 1. 10
 - ☒ 2. 20
 - ☒ 3. 16
 - ☒ 4. 15

Question ID : 6549788410

Status : Not Answered

Chosen Option : --

Q.10 What is the coefficient of y^2 in the expansion of $(\sqrt{2}y^2 - 5\sqrt{3})^3$?

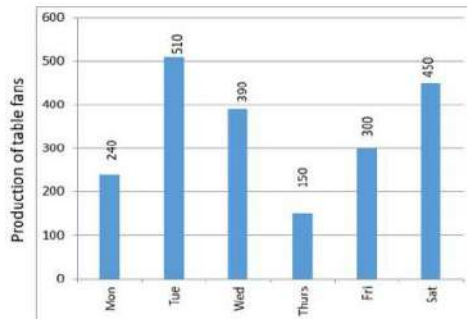
- Ans
- ☒ 1. $-225\sqrt{2}$
 - ☒ 2. $-30\sqrt{3}$
 - ☒ 3. $225\sqrt{2}$
 - ☒ 4. $30\sqrt{3}$

Question ID : 6549788407

Status : Marked For Review

Chosen Option : 2

Q.11 Study the given bar graph and answer the question that follows.
The bar graph shows the production of table fans in a factory during one week.



The average production of table fans on Friday and Saturday exceeds the average production of table fans during the week by:

- Ans
- ☒ 1. 45
 - ☒ 2. 30
 - ☒ 3. 35
 - ☒ 4. 40

Question ID : 6549787305
Status : Answered
Chosen Option : 3

Q.12 In a triangle ABC, if BD and CD bisect $\angle B$ and $\angle C$, respectively, and $\angle A = 100^\circ$, then find $\angle BDC$.

- Ans
- ☒ 1. 130°
 - ☒ 2. 100°
 - ☒ 3. 110°
 - ☒ 4. 140°

Question ID : 6549788405
Status : Answered
Chosen Option : 4

Q.13 Two circles of radii 4 cm and 3 cm, respectively, touch each other externally. What is the distance (in cm) between their centres?

- Ans
- ☒ 1. 5
 - ☒ 2. 16
 - ☒ 3. 7
 - ☒ 4. 9

Question ID : 6549787596
Status : Answered
Chosen Option : 3

Q.14 A number P is 20% more than a number Q but 10% less than a number R. What percentage is number Q of number R?

- Ans
- ☒ 1. 80
 - ☒ 2. 85
 - ☒ 3. 75
 - ☒ 4. 90

Question ID : 6549788399

Status : Answered

Chosen Option : 4

Q.15 If $\cos\theta = \frac{7}{3\sqrt{6}}$ and θ is an acute angle, then the value of $27\sin^2\theta - \frac{3}{2}$ is:

- Ans
- ☒ 1. 12
 - ☒ 2. 15
 - ☒ 3. 1
 - ☒ 4. 9

Question ID : 6549787604

Status : Answered

Chosen Option : 3

Q.16 During his morning walk, Atul walks for 45 minutes at a speed of 8 km/h and takes 15 rounds of a park. Shekhar takes 10 rounds of the same park in 40 minutes. What is the speed of Shekhar in km/h?

- Ans
- ☒ 1. 7.2
 - ☒ 2. 6
 - ☒ 3. 6.75
 - ☒ 4. 7.5

Question ID : 6549788395

Status : Answered

Chosen Option : 2

Q.17 For $A = 30^\circ$, find the value of: $\frac{-3\sin^2 2A + 2\sec^2 A - \tan \frac{3A}{2}}{\frac{1}{3}\sin 3A}$

- Ans
- ☒ 1. $-\frac{7}{4}$
 - ☒ 2. $-\frac{7}{36}$
 - ☒ 3. $\frac{57}{4}$
 - ☒ 4. $\frac{11}{4}$

Question ID : 6549788413

Status : Answered

Chosen Option : 1

Q.18 Find the value of θ , if $\sec^2 \theta + (1 - \sqrt{3}) \tan \theta - (1 + \sqrt{3}) = 0$, where θ is an acute angle.

- Ans ☒ 1. 60°
☒ 2. 30°
☒ 3. 45°
☒ 4. 15°

Question ID : 6549787606

Status : Not Answered

Chosen Option : --

Q.19 How many spherical bullets, each bullet being 7 cm in diameter, can be made out of a cube of lead whose edge measures 77 cm?

(Take $\pi = \frac{22}{7}$)

- Ans ☒ 1. 1452
☒ 2. 4521
☒ 3. 2451
☒ 4. 2541

Question ID : 6549787588

Status : Answered

Chosen Option : 4

Q.20 The distance between two equal parallel chords of a circle is 10 cm. If the chords are 24 cm long, then what is the length of the radius?

- Ans ☒ 1. $2\sqrt{61}$ cm
☒ 2. 17 cm
☒ 3. 26 cm
☒ 4. 13 cm

Question ID : 6549788403

Status : Answered

Chosen Option : 4

Q.21 The numbers 2, 3, 4 and 5 occur $(2 + 5k)$, $(5k - 7)$, $(2k - 3)$ and $(k + 2)$ times, respectively. The average of the numbers is 2.85. Later on, the number 2 was replaced by 6 in all the places. What is the average of the new numbers?

- Ans ☒ 1. 2.4
☒ 2. 5.25
☒ 3. 3.85
☒ 4. 4.75

Question ID : 6549788397

Status : Not Answered

Chosen Option : --

Q.22 Krishan invested a sum of ₹25,000 in two parts. He earned 11% p.a. simple interest on part 1 and 10% p.a. compound interest compounded annually on part 2. If the total interest received by him after 2 years is ₹5,370, then find the sum invested on simple interest.

- Ans
- ☒ 1. ₹11,000
 - ☒ 2. ₹12,000
 - ☒ 3. ₹12,500
 - ☒ 4. ₹13,000

Question ID : **6549788402**

Status : **Not Answered**

Chosen Option : --

Q.23 The value of $18\frac{2}{11} + \left[\frac{7}{33} + \left\{ \frac{29}{6} - \frac{3}{11} \times \left(5\frac{1}{6} - 3\frac{1}{3} \right) \right\} \right]$ is:

- Ans
- ☒ 1. 4
 - ☒ 2. 5
 - ☒ 3. 2
 - ☒ 4. 8

Question ID : **6549787603**

Status : **Not Answered**

Chosen Option : --

Q.24 An article is listed at ₹5,000 and two successive discounts of 12% and 12% are given on it. How much will the seller gain or lose if he gives a single discount of 24%?

- Ans
- ☒ 1. Loss ₹72
 - ☒ 2. Loss ₹64
 - ☒ 3. Profit ₹64
 - ☒ 4. Profit ₹72

Question ID : **6549787590**

Status : **Not Answered**

Chosen Option : --

Q.25 The given pie charts show the distribution of students of graduate and postgraduate levels in five different institutes, P,

Q, R, S and T, in a town. Study the pie charts and answer the question that follows.

(i) Total number of students of graduate level in five different institutes = 12400

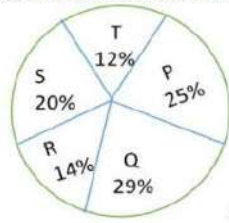


Fig. (i)

(ii) Total number of students of postgraduate level in five different institutes = 8000

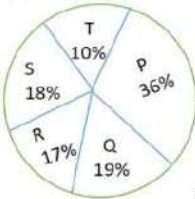


Fig. (ii)

The total number of graduate and post graduate level students in institute Q is:

- Ans**
- ☒ 1. 5216
 - ☒ 2. 5126
 - ☒ 3. 5116
 - ☒ 4. 4116

Question ID : 6549787607

Status : **Not Answered**

Chosen Option : --

Section : General Awareness

Q.1 How many Olympic Medals did India win in the sport of wrestling, as of January 2021?

- Ans**
- ☒ 1. Two
 - ☒ 2. Four
 - ☒ 3. Three
 - ☒ 4. Five

Question ID : 6549788443

Status : **Not Answered**

Chosen Option : --

Q.2 Which of the following is the world's third-highest mountain that connects the borders of India and Nepal?

- Ans**
- ☒ 1. Nanga Parbat
 - ☒ 2. Kanchenjunga
 - ☒ 3. K2
 - ☒ 4. Broad Peak

Question ID : 6549788434

Status : **Marked For Review**

Chosen Option : 3

Q.3 In which state was the foundation stone for a water supply project laid down by Prime Minister Narendra Modi in July 2020?

- Ans ☒ 1. Manipur
☐ 2. Uttar Pradesh
☐ 3. Telangana
☐ 4. Punjab

Question ID : **6549787617**
Status : **Marked For Review**
Chosen Option : 2

Q.4 What is the minimum age to be an eligible voter for Lok Sabha elections?

- Ans ☐ 1. 17 years
☐ 2. 15 years
☒ 3. 18 years
☐ 4. 16 years

Question ID : **6549788439**
Status : **Answered**
Chosen Option : 3

Q.5 Which type of storage device is a hard disk?

- Ans ☒ 1. Secondary
☐ 2. Tertiary
☐ 3. Off-line
☐ 4. Primary

Question ID : **6549788419**
Status : **Answered**
Chosen Option : 1

Q.6 What is the use of the functional key F7 in Microsoft Word 2010?

- Ans ☐ 1. It is used to open the Help window.
☒ 2. It is used to run spell check and grammar check.
☐ 3. It is used for renaming files and folders.
☐ 4. It is used as a search key.

Question ID : **6549787612**
Status : **Not Answered**
Chosen Option : --

Q.7 The cause of Siderosis is excessive deposition of _____ in the body tissue.

- Ans ☒ 1. iron
☒ 2. aluminium
☒ 3. coal
☒ 4. zinc

Question ID : 6549787620

Status : **Not Attempted and Marked For Review**

Chosen Option : --

Q.8 How many storeys does Qutab Minar have in Delhi?

- Ans ☒ 1. Five
☒ 2. Eight
☒ 3. Seven
☒ 4. Six

Question ID : 6549788421

Status : **Not Attempted and Marked For Review**

Chosen Option : --

Q.9 Who among the following was conferred with the 'Best Actor' award at the Dadasaheb Phalke International Film Festival in February 2020?

- Ans ☒ 1. Hrithik Roshan
☒ 2. Amir Khan
☒ 3. Ranveer Singh
☒ 4. Ranbir Kapoor

Question ID : 6549788438

Status : **Not Attempted and Marked For Review**

Chosen Option : --

Q.10 By which amendment of the Constitution of India were the terms 'socialist' and 'secular' added in the preamble?

- Ans ☒ 1. Constitution (Forty-First Amendment) Act, 1976
☒ 2. Constitution (Forty-Third Amendment) Act, 1977
☒ 3. Constitution (Forty-Fourth Amendment) Act, 1978
☒ 4. Constitution (Forty-Second Amendment) Act, 1976

Question ID : 6549787632

Status : **Answered**

Chosen Option : 4

Q.11 Who won the 10 m air rifle event at the fifth edition of the International Online Shooting Championship in October 2020?

- Ans
- ☐ 1. Rahi Sarnobat
 - ☐ 2. Manu Bhaker
 - ☐ 3. Divyansh Singh Panwar
 - ☒ 4. Visnu Shivaraj Pandian

Question ID : **6549787634**
Status : **Marked For Review**
Chosen Option : **2**

Q.12 Lohit river is a tributary of:

- Ans
- ☐ 1. Ghaghara
 - ☐ 2. Yamuna
 - ☐ 3. Chambal
 - ☒ 4. Brahmaputra

Question ID : **6549787623**
Status : **Not Answered**
Chosen Option : --

Q.13 Who among the following is the first Indian to be awarded with UN Military Gender Advocate Award in May 2020?

- Ans
- ☐ 1. Shivangi Singh
 - ☒ 2. Suman Gawani
 - ☐ 3. Jyoti Sharma
 - ☐ 4. Rani Rampal

Question ID : **6549788423**
Status : **Marked For Review**
Chosen Option : **2**

Q.14 Which of the following statements about bromine is correct?

- Ans
- ☐ 1. It is a metal.
 - ☐ 2. It is a gas at room temperature.
 - ☐ 3. It is a solid at room temperature.
 - ☒ 4. It is a liquid at room temperature.

Question ID : **6549787622**
Status : **Not Answered**
Chosen Option : --

Q.15 In September 2020, who was appointed as the Chairman of National School of Drama?

- Ans ☒ 1. Paresh Rawal
☐ 2. Nawazuddin Siddiqui
☐ 3. Anupam Kher
☐ 4. Waman Kendre

Question ID : 6549787629
Status : Answered
Chosen Option : 2

Q.16 In the central budget 2020-21 the eligibility limit for NBFCs for debt recovery under the SARFAESI Act was proposed to be reduced to an asset size of:

- Ans ☐ 1. ₹200 crores
☐ 2. ₹300 crores
☒ 3. ₹100 crores
☐ 4. ₹400 crores

Question ID : 6549787619
Status : Answered
Chosen Option : 1

Q.17 With which of the following sports is Murugappa Gold Cup associated?

- Ans ☐ 1. Table tennis
☒ 2. Hockey
☐ 3. Football
☐ 4. Cricket

Question ID : 6549788441
Status : Not Answered
Chosen Option : --

Q.18 In which of the following states is Sambhar Salt Lake situated?

- Ans ☒ 1. Rajasthan
☐ 2. Gujarat
☐ 3. Andhra Pradesh
☐ 4. Punjab

Question ID : 6549787624
Status : Not Answered
Chosen Option : --

Q.19 Which of the following statements is correct?

- Ans
- ☒ 1. In 1774, the Asiatic Society was founded by Sir Williams Jones.
 - ☒ 2. In 1775, the Siraj ud-Daulah was defeated in the Battle of Plassey.
 - ☒ 3. In 1776, the first railway service began from Bombay to Thane.
 - ☒ 4. In 1793, the Cornwallis code was enacted.

Question ID : 6549787627

Status : **Marked For Review**

Chosen Option : 1

Q.20 Where is Kandariya Mahadev Temple situated?

- Ans
- ☒ 1. Khajuraho
 - ☒ 2. Modhera
 - ☒ 3. Deogarh
 - ☒ 4. Aurangabad

Question ID : 6549787614

Status : **Marked For Review**

Chosen Option : 1

Q.21 Which of the following Indian cities hosted the International Summit on Women in STEM (Science, Technology, Engineering and Mathematics) in January 2020?

- Ans
- ☒ 1. Hyderabad
 - ☒ 2. Pune
 - ☒ 3. New Delhi
 - ☒ 4. Lucknow

Question ID : 6549788424

Status : **Not Answered**

Chosen Option : --

Q.22 In which of the following states is the Bhadra Wildlife Sanctuary located?

- Ans
- ☒ 1. West Bengal
 - ☒ 2. Karnataka
 - ☒ 3. Bihar
 - ☒ 4. Gujarat

Question ID : 6549788433

Status : **Marked For Review**

Chosen Option : 3

Q.23 Cuscuta is an example of:

Ans



1. autotroph



2. saprotroph



3. host



4. parasite

Question ID : 6549788429

Status : Not Answered

Chosen Option : --

Q.24 Who was the founder of the Mamluk dynasty in India?

Ans



1. Qutb al-Din Aibak



2. Bakhtiyar Khilji



3. Razia Sultan



4. Iltutmish

Question ID : 6549788436

Status : Answered

Chosen Option : 1

Q.25 In which year was the Marine Products Export Development Authority (MPEDA) established in India?

Ans



1. 1948



2. 1974



3. 1947



4. 1972

Question ID : 6549788426

Status : Not Answered

Chosen Option : --

Combined Higher Secondary Level Examination 2020 (Tier-I)

Roll Number	Join Telegram: HaryanaJobs.in
Candidate Name	
Venue Name	
Exam Date	06/08/2021
Exam Time	9:00 AM - 10:00 AM
Subject	Combined Higher Secondary Level Exam 2020

Section : English Language

Q.1 Select the most appropriate meaning of the given idiom.

To add insult to injury

- Ans
- ☒ 1. to make fun of someone
 - ☒ 2. to work hard on making up
 - ☒ 3. to make something worse
 - ☒ 4. to wound physically

Question ID : 6549789167

Status : Answered

Chosen Option : 3

Q.2 Given below are four sentences in jumbled order. Select the option that gives their correct order.

- A. Then he started on his eighteen kilometer expedition back to his village.
- B. Mohan first equipped himself with a long, sturdy stick.
- C. At several points, he lost the road and had to swim his way ahead.
- D. It was a journey he would never forget where he had to use his stick constantly to locate the road.

- Ans
- ☒ 1. DCAB
 - ☒ 2. ACBD
 - ☒ 3. CDBA
 - ☒ 4. BADC

Question ID : 6549788354

Status : Answered

Chosen Option : 4

Q.3 Select the most appropriate meaning of the underlined idiom in the given sentence.

He is very impulsive and does things without rhyme or reason.

- Ans
- ☒ 1. without proper planning
 - ☒ 2. without a reasonable explanation
 - ☒ 3. without any resources
 - ☒ 4. without anyone's help

Question ID : 6549788360

Status : Answered

Chosen Option : 4

Q.4 Select the most appropriate ANTONYM of the given word.

LAVISH

- Ans  1. excessive
 2. luxurious
 3. tiny
 4. frugal

Question ID : 6549789165

Status : Answered

Chosen Option : 4

Q.5 Examine the four jumbled sentences. Out of the given options, pick the one that gives their correct order.

- A. Next, keep tapping the pot on all sides and at the bottom until the plant loosens.
B. Finally, slide the plant gently and remove the old potting mix on a newspaper.
C. The first thing to do when repotting is to remove the plant from the current pot.
D. Begin by holding the plant gently, and turning the pot sideways.

- Ans  1. CDAB
 2. DBCA
 3. BDAC
 4. ACDB





Question ID : 6549789161

Status : Answered

Chosen Option : 1

Q.6 Fill in the blank with most appropriate word.

This part of the sea _____ with sharks.

- Ans  1. expands
 2. crowds
 3. suffices
 4. teems

Question ID : 6549788368

Status : Answered

Chosen Option : 2

Q.7 Select the most appropriate antonym of the given word.

AFFINITY



- Ans  1. aversion
 2. weakness
 3. inclination
 4. attraction

Question ID : 6549788358

Status : Answered

Chosen Option : 1

Q.8 Select the misspelt word.

- Ans  1. applause
 2. modern
 3. arrivel
 4. serious

Question ID : **6549788361**
Status : **Answered**
Chosen Option : **3**

Q.9 Select the most appropriate synonym of the given word.





LIVID

- Ans  1. furious
 2. timid
 3. mild
 4. lively

Question ID : **6549789173**
Status : **Answered**
Chosen Option : **1**

Q.10 Select the correct passive form of the given sentence.





He drove the car very carefully on the hilly terrain.

- Ans  1. The car was driven very carefully on the hilly terrain.
 2. The car is being driven very carefully on the hilly terrain.
 3. The car has been driven very carefully on the hilly terrain.
 4. The car is driven very carefully on the hilly terrain.

Question ID : **6549788343**
Status : **Answered**
Chosen Option : **1**

Q.11 In the given sentence, identify the segment which contains a grammatical error.

If you rent a house near your office, it will save you time as well as also money.

- Ans  1. If you rent a house
 2. as well as also money
 3. near your office
 4. it will save you time

Question ID : **6549788346**
Status : **Answered**
Chosen Option : **4**

Q.12 Select the most appropriate option to substitute the underlined segment in the given sentence. If there is no need to substitute it, select 'No substitution'.

Small desert animals burrow underground across the days and come out only at night.

- Ans
- ☒ 1. within the days
 - ☒ 2. during the day
 - ☒ 3. No substitution
 - ☒ 4. between days

Question ID : 6549788355

Status : Answered

Chosen Option : 2

Q.13 Select the correct indirect form of the given sentence.

"I love Bollywood music," Deepu said to Reena.

- Ans
- ☒ 1. Deepu told Reena that he loved Bollywood music.
 - ☒ 2. Deepu will say to Reena that he loved Bollywood music.
 - ☒ 3. Deepu says to Reena that he loves Bollywood music.
 - ☒ 4. Deepu had told Reena that he loved Bollywood music.

Question ID : 6549789152

Status : Answered

Chosen Option : 1

Q.14 Select the word which means the same as the group of words given.

Killing of one's mother

- Ans
- ☒ 1. infanticide
 - ☒ 2. patricide
 - ☒ 3. regicide
 - ☒ 4. matricide

Question ID : 6549789172

Status : Answered

Chosen Option : 4

Q.15 The following sentence has been split into four segments. Identify the segment which contains a grammatical error.

Notwithstanding we were / all busy that weekend / we had to / cancel the outing.

- Ans
- ☒ 1. cancel the outing
 - ☒ 2. we had to
 - ☒ 3. Notwithstanding we were
 - ☒ 4. all busy that weekend

Question ID : 6549789153

Status : Answered

Chosen Option : 3





Q.16 Select the INCORRECTLY spelt word.

- Ans  1. aggravate
 2. titilate
 3. mediate
 4. initiate

Question ID : 6549789170
Status : Answered
Chosen Option : 2

Q.17 Select the most appropriate synonym of the given word.

CALLOUS

- Ans  1. inaccurate
 2. insensitive
 3. incredible
 4. inexperienced

Question ID : 6549788366
Status : Answered
Chosen Option : 2

Q.18 Select the most appropriate one-word substitution for the given words.



a period of two weeks

- Ans  1. month
 2. century
 3. decade
 4. fortnight

Question ID : 6549788363
Status : Answered
Chosen Option : 4

Q.19 Select the option that will improve the underlined segment in the given sentence. In case no improvement is needed, select 'No improvement'

I must have dropped one of my gloves in the car.

- Ans  1. any
 2. No improvement
 3. an
 4. the

Question ID : 6549789164
Status : Answered
Chosen Option : 1

Q.20 Select the most appropriate word to fill in the blank.

It is _____ to see so many of our fellow Indians help the migrants in their struggle to go home.

- Ans
- ☒ 1. savouring
 - ☒ 2. heartening
 - ☒ 3. reuniting
 - ☒ 4. relishing

Question ID : 6549789175

Status : Answered

Chosen Option : 2

Comprehension:

In the following passage some words have been deleted. Fill in the blanks with the help of the alternatives given. Select the most appropriate option for each number.

In the 'Kingdom of Fools', both the king and the ministers were complete fools. They didn't want to do things (1)_____ other kingdoms, so they decided to (2)_____ night into day and day into night. They (3)_____ that everyone should be awake at night, (4)_____ their lands and run their (5)_____ only after dark and should go to bed as soon as the sun came up.

SubQuestion No : 21

Q.21 Select the most appropriate option to fill in the blank no. 1.

- Ans
- ☒ 1. like
 - ☒ 2. than
 - ☒ 3. so as
 - ☒ 4. same

Question ID : 6549788348

Status : Answered

Chosen Option : 1

Comprehension:

In the following passage some words have been deleted. Fill in the blanks with the help of the alternatives given. Select the most appropriate option for each number.

In the 'Kingdom of Fools', both the king and the ministers were complete fools. They didn't want to do things (1)_____ other kingdoms, so they decided to (2)_____ night into day and day into night. They (3)_____ that everyone should be awake at night, (4)_____ their lands and run their (5)_____ only after dark and should go to bed as soon as the sun came up.

SubQuestion No : 22

Q.22 Select the most appropriate option to fill in the blank no. 2.

- Ans
- ☒ 1. adjust
 - ☒ 2. develop
 - ☒ 3. change
 - ☒ 4. agree

Question ID : 6549788349

Status : Answered

Chosen Option : 3

Comprehension:

In the following passage some words have been deleted. Fill in the blanks with the help of the alternatives given. Select the most appropriate option for each number.

In the 'Kingdom of Fools', both the king and the ministers were complete fools. They didn't want to do things (1)_____ other kingdoms, so they decided to (2)_____ night into day and day into night. They (3)_____ that everyone should be awake at night, (4)_____ their lands and run their (5)_____ only after dark and should go to bed as soon as the sun came up.

SubQuestion No : 23

Q.23 Select the most appropriate option to fill in the blank no. 3.

Ans



1. ordered



2. presented



3. ruled



4. believed

Question ID : **6549788350**

Status : **Answered**

Chosen Option : **1**

Comprehension:

In the following passage some words have been deleted. Fill in the blanks with the help of the alternatives given. Select the most appropriate option for each number.

In the 'Kingdom of Fools', both the king and the ministers were complete fools. They didn't want to do things (1)_____ other kingdoms, so they decided to (2)_____ night into day and day into night. They (3)_____ that everyone should be awake at night, (4)_____ their lands and run their (5)_____ only after dark and should go to bed as soon as the sun came up.

SubQuestion No : 24

Q.24 Select the most appropriate option to fill in the blank no. 4.

Ans



1. till



2. cut



3. dig



4. sow

Question ID : **6549788351**

Status : **Answered**

Chosen Option : **3**

Comprehension:

In the following passage some words have been deleted. Fill in the blanks with the help of the alternatives given. Select the most appropriate option for each number.

In the 'Kingdom of Fools', both the king and the ministers were complete fools. They didn't want to do things (1)_____ other kingdoms, so they decided to (2)_____ night into day and day into night. They (3)_____ that everyone should be awake at night, (4)_____ their lands and run their (5)_____ only after dark and should go to bed as soon as the sun came up.

SubQuestion No : 25

Q.25 Select the most appropriate option to fill in the blank no. 5.

- Ans
- ☒ 1. employment
 - ☒ 2. livelihood
 - ☒ 3. career
 - ☒ 4. business

Question ID : 6549788352

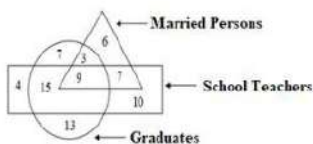
Status : Answered

Chosen Option : 2

Section : General Intelligence

Q.1 In the given diagram, the circle stands for 'graduates', the rectangle stands for 'school teachers', and the triangle stands for 'married persons'. The numbers given in the different segments represent the number of persons in that category.

How many school teachers are either graduates or married persons but NOT both?



- Ans
- ☒ 1. 15
 - ☒ 2. 29
 - ☒ 3. 22
 - ☒ 4. 25

Question ID : 6549789201

Status : Answered

Chosen Option : 3

Q.2 Four letter-clusters have been given, out of which three are alike in some manner and one is different. Select the letter-cluster that is different.

- Ans
- ☒ 1. MIGF
 - ☒ 2. BDMS
 - ☒ 3. HKPT
 - ☒ 4. KMPV

Question ID : 6549789192


Status : Not Answered

Chosen Option : --

Q.3 ₹481 is distributed among A, B and C in such a way that B gets two-thirds of what A gets and C gets three-fourths of what B gets. How much does B get?

Ans  1. ₹148

 2. ₹111

 3. ₹168

 4. ₹222

Question ID : 6549789177

Status : Not Answered

Chosen Option : --

Q.4 Two statements are given, followed by three conclusions numbered I, II and III. Assuming the statements to be true, even if they seem to be at variance with commonly known facts, decide which of the conclusions logically follow(s) from the statements.

Statements:

All statements are answers.

Some statements are questions.

Conclusions:

I. No question is a statement.

II. Some answers are statements.

III. Some questions are statements.

Ans  1. Only conclusions I and III follow

 2. Either conclusion I or III follows

 3. Only conclusions I and II follow

 4. Only conclusions II and III follow


Question ID : 6549788386

Status : Answered

Chosen Option : 4


Q.5 Select the correct mirror image of the given combination when a mirror is placed on its right side.

4 6 H S P Y

Ans  1. Y P S H 6 4

 2. Y P S H 9 4

 3. Y P S H 6 4

 4. Y P S H 6 4

Question ID : 6549788392

Status : Answered

Chosen Option : 1

Q.6 If 'A + B' means 'A is the mother of B', 'A × B' means 'A is the sister of B', and 'A * B' means 'A is the daughter of B', then how is R related to P in the following expression?

'R + V × Q × M * P'

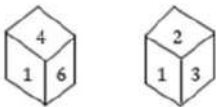
- Ans
- ☒ 1. Mother
 - ☒ 2. Wife
 - ☒ 3. Daughter
 - ☒ 4. Sister

Question ID : 6549787574

Status : Answered

Chosen Option : 3

Q.7 Two different positions of the same dice are shown. Select the number that will be at the top if '6' is at the bottom.



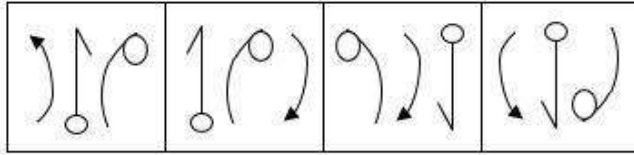
- Ans
- ☒ 1. 4
 - ☒ 2. 5
 - ☒ 3. 2
 - ☒ 4. 3

Question ID : 6549789195

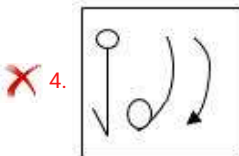
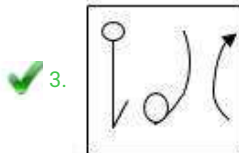
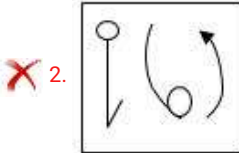
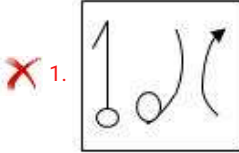
Status : Answered

Chosen Option : 4

Q.8 Select the figure that will come next in the following series.



Ans



Question ID : 6549789196

Status : Not Answered

Chosen Option : --

Q.9 Select the number that can replace the question mark (?) in the following series.

35, 35, 33, 99, 95, 475, ?

Ans ✗ 1. 481

✗ 2. 501

✗ 3. 476

✓ 4. 469

Question ID : 6549788374

Status : Not Answered

Chosen Option : --

Q.10 Select the option in which the numbers are related in the same way as are the numbers of the following set.

{2, 2, 9}

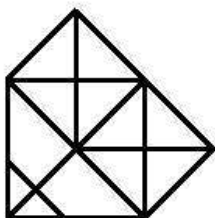
- Ans
- ☒ 1. {8, 36, 81}
 - ☒ 2. {6, 18, 46}
 - ☒ 3. {4, 8, 25}
 - ☒ 4. {12, 60, 98}

Question ID : 6549789181

Status : Answered

Chosen Option : 3

Q.11 How many triangles are there in the following figure?



- Ans
- ☒ 1. 24
 - ☒ 2. 19
 - ☒ 3. 26
 - ☒ 4. 22

Question ID : 6549789197

Status : Answered

Chosen Option : 4

Q.12 In a certain code language, BANKER is coded as 57 and SPAN is coded as 54. How will PRANK be coded in that language?

- Ans
- ☒ 1. 58
 - ☒ 2. 61
 - ☒ 3. 65
 - ☒ 4. 69

Question ID : 6549789186

Status : Answered

Chosen Option : 3

Q.13 Four numbers have been given, out of which three are alike in some manner and one is different. Select the number that is different.

- Ans  1. 2197
 2. 4913
 3. 2379
 4. 1331

Question ID : 6549789183
 Status : Answered
 Chosen Option : 4

Q.14 Select the option in which the numbers in the set share the same relationship as the numbers in the given set.





(14, 22, 77)

- Ans  1. (20, 16, 105)
 2. (17, 15, 76)
 3. (18, 32, 144)
 4. (22, 11, 86)

Question ID : 6549788372
 Status : Answered
 Chosen Option : 3

Q.15 Select the option in which the numbers share the same relationship as that shared by the given pair of numbers.

28 : 70

- Ans  1. 18 : 45
 2. 12 : 32
 3. 30 : 84
 4. 34 : 86

Question ID : 6549789179
 Status : Not Answered
 Chosen Option : --

Q.16 'Bracelet' is related to 'Ornaments' in the same way as 'Clove' is related to '_____'.

- Ans  1. Spices
 2. Kitchen
 3. Taste
 4. Cooking

Question ID : 6549788380
 Status : Answered
 Chosen Option : 1

Q.17 Select the option figure which contains figure X embedded in it as its part (rotation is NOT allowed).




Figure X

Ans

✗ 1.



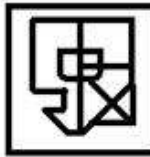
✗ 2.



✓ 3.



✗ 4.



Question ID : 6549788390

Status : Answered

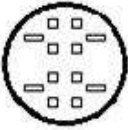
Chosen Option : 3

Q.18 A piece of paper is folded and cut as shown below in the question figures. Select from the given answer figures, how it will appear when unfolded.

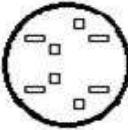


Ans

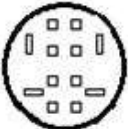
✓ 1.



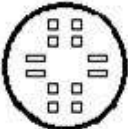
✗ 2.



✗ 3.



✗ 4.



Question ID : 6549788391

Status : Answered

Chosen Option : 1

Q.19 Select the correct option that indicates the arrangement of the given words in a logical and meaningful order.

1. Class
2. Admission
3. Certificate
4. Application
5. Assessment

Ans ✓ 1. 4, 2, 1, 5, 3

✗ 2. 4, 2, 5, 1, 3

✗ 3. 3, 5, 2, 3, 1

✗ 4. 2, 4, 3, 1, 5

Question ID : 6549789184

Status : Answered

Chosen Option : 2

Q.20 Which two signs should be interchanged to make the given equation correct?

$$39 \div 3 \times 13 + 26 - 13 = 2$$

- Ans
- ☒ 1. \times and $-$
 - ☒ 2. \div and $-$
 - ☒ 3. \div and \times
 - ☒ 4. $+$ and $-$

Question ID : 6549788370

Status : Not Answered

Chosen Option : --

Q.21 Three of the following four words are alike in a certain way and one is different. Select the odd one.

- Ans
- ☒ 1. Contentment
 - ☒ 2. Jealousy
 - ☒ 3. Sadness
 - ☒ 4. Disgust

Question ID : 6549788385

Status : Answered

Chosen Option : 2

Q.22 Select the option that is related to the third letter-cluster in the same way as the second letter-cluster is related to the first letter-cluster.

NEED : OGHH :: FAST : ?

- Ans
- ☒ 1. ECVZ
 - ☒ 2. GCWY
 - ☒ 3. GCVX
 - ☒ 4. GDUX

Question ID : 6549788379

Status : Answered

Chosen Option : 3

Q.23 In a code language, SAUCE is written as ASVEC. How will MEANT be written as in that language?

- Ans
- ☒ 1. EMANT
 - ☒ 2. MEBTN
 - ☒ 3. EMBTN
 - ☒ 4. EMCTN

Question ID : 6549788377

Status : Not Answered

Chosen Option : --

Q.24 Select the option that represents the letters that, when placed from left to right in the blanks below, will complete the letter sequence correctly.

K _ P _ L C _ R _ C P _ N _ P R

- Ans
- ☐ 1. E R P R R C
 - ☐ 2. C P P M R R
 - ☐ 3. M R P M R R
 - ☒ 4. C R P M R C

Question ID : 6549788381

Status : Not Answered

Chosen Option : --

Q.25 Select the option in which the words share the same relationship as that shared by the given pair of words.

Necklace : Gold

- Ans
- ☐ 1. Ocean : River
 - ☒ 2. Paper : Wood pulp
 - ☐ 3. Potter : Clay
 - ☐ 4. Grass : Lawn

Question ID : 6549789191

Status : Answered

Chosen Option : 2

Section : Quantitative Aptitude

Q.1 A sum of money lent at simple interest amounts to ₹9,920 after 2 years and to ₹12,800 after 5 years. Find the rate of interest per annum.

- Ans
- ☐ 1. 6.57%
 - ☒ 2. 12%
 - ☐ 3. 18%
 - ☐ 4. 9.68%

Question ID : 6549789210

Status : Answered

Chosen Option : 2

Q.2

If $a + b - c = 0$, then what is the value of $\frac{(b-c)^2}{4bc} \frac{(c-a)^2}{4ca} \frac{(a+b)^2}{4ab}$?

Ans

☐ 1. $\frac{1}{2}$

☒ 2. $-\frac{3}{4}$

☐ 3. $-\frac{1}{2}$

☐ 4. $\frac{3}{4}$

Question ID : 6549788409

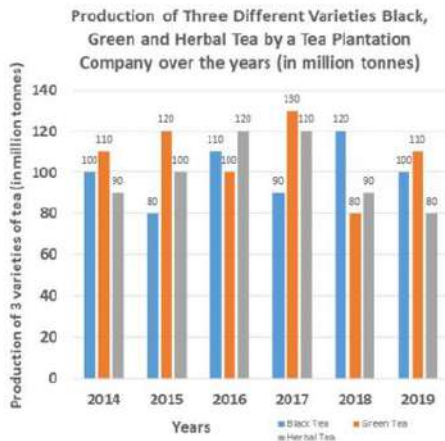
Status : Not Answered

Chosen Option : --

Q.3

Study the given bar graph and answer the question that follows.

A tea plantation company produces three varieties of tea—black tea, green tea and herbal tea. The production of three varieties (in million tonnes) over a period of six years from 2014 to 2019, has been shown in the bar graph here. The X-axis represents the years and the Y-axis displays the production of the three varieties in million tonnes.



The total production of green tea in 2016 and 2018 is what per cent of the total production of herbal tea in 2015 and 2017?

Ans

☐ 1. 83.4

☐ 2. 85.6

☐ 3. 79.7

☒ 4. 81.8

Question ID : 6549789123

Status : Answered

Chosen Option : 4

Q.4 A reduction of 20% in the rate of sugar enables Sudhir to get 6 kg more sugar for ₹960. What is the reduced rate of sugar per kg?

- Ans**
- ☒ 1. ₹35
 - ☒ 2. ₹36
 - ☒ 3. ₹32
 - ☒ 4. ₹40

Question ID : 6549789207

Status : **Answered**

Chosen Option : 3

Q.5 D, E and F are the feet of the perpendiculars from the vertices A, B and C, respectively, of a triangle ABC. If angle BED and angle BFE (in degrees) are 24 and 110, respectively, what is the measure (in degrees) of angle EBF?

- Ans**
- ☒ 1. 55
 - ☒ 2. 67
 - ☒ 3. 86
 - ☒ 4. 46

Question ID : 6549788406

Status : **Not Answered**

Chosen Option : --

Q.6 In ΔPQR , points T and S are on PQ and PR, respectively, such that TS is parallel to QR. If $TQ = 7.2$ cm, $PS = 1.8$ cm and $SR = 5.4$ cm, then find the length of PT.

- Ans**
- ☒ 1. 2 cm
 - ☒ 2. 2.4 cm
 - ☒ 3. 1.35 cm
 - ☒ 4. 3.6 cm

Question ID : 6549789213

Status : **Answered**

Chosen Option : 2

Q.7 A pair of jeans marked at ₹960 is offered in a departmental store for ₹816. What is the percentage of discount given by the shopkeeper?

- Ans**
- ☒ 1. 17.64
 - ☒ 2. 17
 - ☒ 3. 15
 - ☒ 4. 16

Question ID : 6549788398

Status : **Answered**

Chosen Option : 3

Q.8 If $a : b = 5 : 7$, $b : c = 8 : 15$, then find the value of $8c : 5a$.

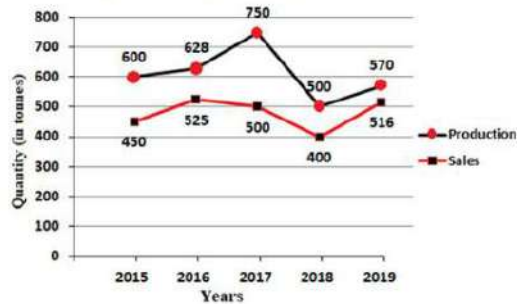
- Ans
- ☒ 1. $24 : 5$
 - ☒ 2. $21 : 5$
 - ☒ 3. $176 : 65$
 - ☒ 4. $8 : 21$

Question ID : 6549789209

Status : Answered

Chosen Option : 2

Q.9 The line graph shows the production (in tonnes) and the sales (in tonnes) of a company.



What is the percentage of maximum increase or reduction in the production of the company in comparison to the previous year?

- Ans
- ☒ 1. 46.67% reduction
 - ☒ 2. 33.33% reduction
 - ☒ 3. 50% increase
 - ☒ 4. 29% increase

Question ID : 6549789226

Status : Answered

Chosen Option : 2

Q.10 Ravi can row a boat in still water at the speed of 14 km/h. If a river is flowing at the speed of 2 km/h and Ravi takes 3 hours to cover a certain distance upstream, then how much time will he take to cover the same distance downstream?

- Ans
- ☒ 1. 2 h 20 m
 - ☒ 2. 2 h
 - ☒ 3. 2 h 15 m
 - ☒ 4. 2 h 30 m

Question ID : 6549789203

Status : Answered

Chosen Option : 3

Q.11 Simplify the following expression.

$$\frac{3}{5} + 2\frac{2}{5} \div \left[\left(\frac{7}{8} - \frac{3}{4} \right) \times 4 - 6\frac{2}{3} \div \frac{4}{3} \right] \times \frac{1}{3}$$

Ans

✓ 1. $\frac{19}{45}$

✗ 2. $-\frac{2}{9}$

✗ 3. $-\frac{13}{5}$

✗ 4. $\frac{17}{15}$

Question ID : 6549788411

Status : Answered

Chosen Option : 1

Q.12 PA and PB are tangents drawn to a circle with centre O from an external point P. If A and B are points on the circle and $\angle OBA = 42^\circ$, then $\angle APB$ is:

Ans

✗ 1. 78°

✓ 2. 84°

✗ 3. 76°

✗ 4. 86°

Question ID : 6549789211

Status : Answered

Chosen Option : 2

Q.13 Simplify the following expression.

$$(2a - b - 3c)(4a^2 + b^2 + 9c^2 + 2ab + 6ac - 3bc)$$

Ans

✗ 1. $-8a^3 + b^3 + 27c^3$

✗ 2. $8a^3 + b^3 + 27c^3$

✓ 3. $8a^3 - b^3 - 27c^3 - 18abc$

✗ 4. $8a^3 - b^3 - 27c^3 + 18abc$

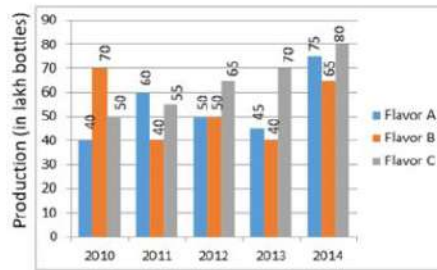
Question ID : 6549789215

Status : Answered

Chosen Option : 3

- Q.14** A soft drink company prepares drinks of three different flavours — A, B and C. The production of the three flavours over a period of five years from 2010 to 2014 has been expressed in the given bar graph. Study the graph and answer the question that follows.

Production of three different flavours A, B and C (in lakh bottles) by a company over five years.



The difference between the average production of flavour A in 2012, 2013 and 2014 and the average production of flavour C in 2012, 2013 and 2014 is:

- Ans**
- ☒ 1. 10 lakh bottles
 - ☒ 2. 12 lakh bottles
 - ☒ 3. 18 lakh bottles
 - ☒ 4. 15 lakh bottles

Question ID : 6549787709

Status : Not Answered

Chosen Option : --

- Q.15** If $x - y = 4$ and $xy = 3$, then what is the value of $x^3 - y^3$?

- Ans**
- ☒ 1. 88
 - ☒ 2. 28
 - ☒ 3. 100
 - ☒ 4. 64

Question ID : 6549788408

Status : Answered

Chosen Option : 3

- Q.16** In a rectangular park having dimensions $60 \text{ m} \times 40 \text{ m}$, two circular flower beds with radius 7 m are developed. What is the area of the remaining portion of the park? (Use $\pi = \frac{22}{7}$)

- Ans**
- ☒ 1. 1196 m^2
 - ☒ 2. 1749 m^2
 - ☒ 3. 2092 m^2
 - ☒ 4. 2246 m^2

Question ID : 6549788396

Status : Answered

Chosen Option : 3

Q.17 Joseph bought two woollen jackets for ₹2,100 and ₹3,150, respectively. By selling the first at a gain of $k\%$ and the second at a loss of $k\%$, he found that the selling price of both is the same. What is the value of k ?

- Ans ☒ 1. 20
☒ 2. 22.64
☒ 3. 15
☒ 4. 25

Question ID : 6549788400
 Status : Not Answered
 Chosen Option : --

Q.18 If the number $34k56k$ is divisible by 6, then what will be the largest value of k ?

- Ans ☒ 1. 6
☒ 2. 8
☒ 3. 9
☒ 4. 4

Question ID : 6549789218
 Status : Answered
 Chosen Option : 1

Q.19 Evaluate the following expression.

$$\frac{\tan^2 60^\circ + \operatorname{cosec} 30^\circ \sin 90^\circ + 3 \sec^2 30^\circ}{4 \sin^2 45^\circ + \sec^2 60^\circ - \cot^2 30^\circ - 5 \cos^2 90^\circ}$$

- Ans ☒ 1. $\frac{7}{3}$
☒ 2. 3
☒ 3. $\frac{19}{17}$
☒ 4. -12

Question ID : 6549789221
 Status : Answered
 Chosen Option : 2

Q.20 Two chords PQ and RS of a circle meet at A when produced. AT is a tangent to the circle meeting it at T. The ratio PA : SA is equal to which of the following?

- Ans ☒ 1. RQ : QT
☒ 2. AQ : AT
☒ 3. AQ : QR
☒ 4. RA : AQ

Question ID : 6549788404
 Status : Not Answered
 Chosen Option : --

Q.21 The average weight of 3 persons A, B and C is 60 kg. When D joins the group, the average weight becomes 65 kg. When another person E whose weight is 3 kg less than that of D replaces A, the average weight of B, C, D and E becomes 67 kg. What is the weight of A?

- Ans
- ☒ 1. 60 kg
 - ☒ 2. 69 kg
 - ☒ 3. 72 kg
 - ☒ 4. 65 kg

Question ID : 6549789205
Status : Answered
Chosen Option : 2

Q.22 In a triangle ABC, right-angled at C, if $\sec A = \frac{13}{5}$, then find the value of $\frac{1 + \sin A}{\cos B}$.

- Ans
- ☒ 1. $\frac{25}{12}$
 - ☒ 2. $\frac{3}{2}$
 - ☒ 3. $\frac{18}{5}$
 - ☒ 4. 5

Question ID : 6549788412
Status : Answered
Chosen Option : 1

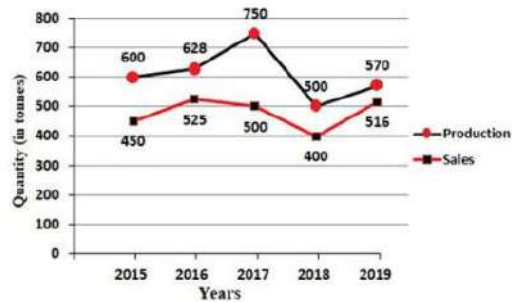
Q.23 Geeta can assemble a toy in 10 minutes, whereas Sudha can assemble the same toy in 15 minutes. If they work together, how much time will they take to assemble 60 toys?

- Ans
- ☒ 1. 6 hours
 - ☒ 2. 5 hours
 - ☒ 3. 7 hours
 - ☒ 4. 7 hours 30 minutes

Question ID : 6549788394
Status : Not Answered
Chosen Option : --

Q.24 The given line graph shows the production (in tonnes) and the sales (in tonnes) of a company.

How much more is the production in 2015 and 2017 taken together than the sales in 2016 and 2018 taken together (in tonnes)?



- Ans
- ☒ 1. 425
 - ☐ 2. 328
 - ☐ 3. 434
 - ☐ 4. 178

Question ID : 6549788415

Status : Not Answered

Chosen Option : --

Q.25 If $\operatorname{cosec}^2 \theta (\cos \theta - 1)(1 + \cos \theta) = k$, then what is the value of k?

- Ans
- ☐ 1. 1
 - ☒ 2. -1
 - ☐ 3. $\frac{1}{2}$
 - ☐ 4. 0

Question ID : 6549788414

Status : Answered

Chosen Option : 1

Section : General Awareness

Q.1 Whose autobiography is titled 'The Substance and the Shadow'?

- Ans
- ☐ 1. Kishore Kumar
 - ☐ 2. Rajesh Khanna
 - ☐ 3. Raj Kapoor
 - ☒ 4. Dilip Kumar

Question ID : 6549789246

Status : Not Answered

Chosen Option : --

Q.2 Which of the following file formats does MS Paint use to open and save files in Windows?

- Ans
- ☐ 1. .DOC
 - ☐ 2. .XIS
 - ☒ 3. .JPEG
 - ☐ 4. .PPT

Question ID : 6549789227
Status : Not Answered
Chosen Option : --

Q.3 Which of the following nations ranked first in the World Press Freedom index 2020?

- Ans
- ☐ 1. India
 - ☐ 2. France
 - ☒ 3. Norway
 - ☐ 4. The US

Question ID : 6549788425
Status : Not Answered
Chosen Option : --

Q.4 The musical instrument 'Kartal' from the state of Rajasthan comes under the category of _____.

- Ans
- ☐ 1. electrophones
 - ☐ 2. membranophones
 - ☐ 3. chordophones
 - ☒ 4. idiophones

Question ID : 6549789229
Status : Not Answered
Chosen Option : --

Q.5 Who among the following is India's highest wicket taker in test cricket as of December 2020?

- Ans
- ☐ 1. Kapil Dev
 - ☒ 2. Anil Kumble
 - ☐ 3. Narendra Hirwani
 - ☐ 4. Bishan Singh Bedi

Question ID : 6549789249
Status : Not Answered
Chosen Option : --

Q.6 What is India's rank on the World Economic Forum's Global Competitiveness Index of 141 countries for the year 2019?

- Ans
- ☐ 1. 48th
 - ☐ 2. 45th
 - ☒ 3. 68th
 - ☐ 4. 65th

Question ID : 6549788427

Status : Not Answered

Chosen Option : --

Q.7 The deficiency of which of the following vitamins causes night blindness?

- Ans
- ☐ 1. Vitamin B2
 - ☒ 2. Vitamin A
 - ☐ 3. Vitamin E
 - ☐ 4. Vitamin D

Question ID : 6549788428

Status : Not Answered

Chosen Option : --

Q.8 Which of the following is a computer application software?

- Ans
- ☒ 1. Word processor
 - ☐ 2. RAM
 - ☐ 3. Visual Basic
 - ☐ 4. Java

Question ID : 6549788420

Status : Not Answered

Chosen Option : --

Q.9 How many states does the 'STARS' project launched by the Government of India and World Bank in 2020 seek to cover?

- Ans
- ☐ 1. 8
 - ☐ 2. 4
 - ☐ 3. 10
 - ☒ 4. 6

Question ID : 6549789231

Status : Not Answered

Chosen Option : --

Q.10 In the Battle of Swally (1612) the British fought against the _____.

- Ans
- ☒ 1. Danish
 - ☒ 2. Portuguese
 - ☒ 3. French
 - ☒ 4. Dutch

Question ID : 6549789244
Status : Not Answered
Chosen Option : --

Q.11 Where is Harmandir Sahib (Golden Temple) situated?

- Ans
- ☒ 1. Amritsar
 - ☒ 2. Patiala
 - ☒ 3. Ludhiana
 - ☒ 4. Jalandhar

Question ID : 6549788422
Status : Not Answered
Chosen Option : --

Q.12 Which Indian state was the highest contributor to Food Corporation of India (FCI)'s total paddy procurement across the country till May 2020?

- Ans
- ☒ 1. Telangana
 - ☒ 2. Uttar Pradesh
 - ☒ 3. Andhra Pradesh
 - ☒ 4. Punjab

Question ID : 6549789241
Status : Not Answered
Chosen Option : --

Q.13 Heat, in _____, is a type of energy transfer from a warmer substance to a colder one.

- Ans
- ☒ 1. gravity
 - ☒ 2. friction
 - ☒ 3. thermodynamics
 - ☒ 4. magnet

Question ID : 6549789237
Status : Not Answered
Chosen Option : --

Q.14 LAC (Line of Actual Control) is an effective border between India and _____.

- Ans
- ☒ 1. Bhutan
 - ☒ 2. Pakistan
 - ☒ 3. Sri Lanka
 - ☒ 4. China

Question ID : 6549788431

Status : Not Answered

Chosen Option : --

Q.15 In which of the following categories does Indian boxer Lovlina Borgohain play?

- Ans
- ☒ 1. 69 kg
 - ☒ 2. 91 kg
 - ☒ 3. 81 kg
 - ☒ 4. 75 kg

Question ID : 6549789251

Status : Not Answered

Chosen Option : --

Q.16 Dr. Tsering Landol, who was one of the recipients of the Padma Bhushan 2020 award, hails from:

- Ans
- ☒ 1. Nagaland
 - ☒ 2. Mizoram
 - ☒ 3. Ladakh
 - ☒ 4. Arunachal Pradesh

Question ID : 6549788437

Status : Not Answered

Chosen Option : --

Q.17 The National Education Policy (NEP), 2020 commits to raising the total expenditure by states and centre on education to _____ of GDP.

- Ans
- ☒ 1. 4%
 - ☒ 2. 6%
 - ☒ 3. 2%
 - ☒ 4. 8%

Question ID : 6549789234

Status : Not Answered

Chosen Option : --

Q.18 Which sport has been approved to be played at the 2024 Summer Olympics in Paris for the first time?

- Ans
- ☐ 1. Parkour race
 - ☐ 2. Darts
 - ☒ 3. Breakdancing
 - ☐ 4. Cricket

Question ID : 6549789232

Status : Not Answered

Chosen Option : --

Q.19 What was the total number of gold medals won by India at Commonwealth Games 2018?

- Ans
- ☐ 1. 44
 - ☐ 2. 33
 - ☒ 3. 26
 - ☐ 4. 18

Question ID : 6549788442

Status : Not Answered

Chosen Option : --

Q.20 As of January 2021, more than 93% of India's chromite resources were located in:

- Ans
- ☒ 1. Odisha
 - ☐ 2. Jharkhand
 - ☐ 3. Madhya Pradesh
 - ☐ 4. Karnataka

Question ID : 6549788432

Status : Not Answered

Chosen Option : --

Q.21 Who among the following presided over the special session of Congress in September 1923 and at the age of 35 became the youngest man to be elected as the President of the Congress?

- Ans
- ☐ 1. Mahadev Govind Ranade
 - ☐ 2. Ram Manohar Lohia
 - ☐ 3. Bal Gangadhar Tilak
 - ☒ 4. Maulana Abul Kalam Azad

Question ID : 6549788435

Status : Not Answered

Chosen Option : --

Q.22 _____ holds office from the date of his/her election till immediately before the first meeting of the Lok Sabha after the dissolution of the one to which he/she was elected.

Ans



1. Speaker



2. Minister of Parliamentary Affairs



3. Minister of Information and Broadcasting



4. Vice President

Question ID : 6549789247

Status : Not Answered

Chosen Option : --

Q.23 One-third of the members of the Vidhan Parishad retire every _____ year/s.

Ans



1. four



2. one



3. three



4. two

Question ID : 6549788440

Status : Not Answered

Chosen Option : --

Q.24 Which among the following is used as the fining agent in wine?

Ans



1. Gelatin



2. Chlorine



3. Sodium



4. Baking Soda

Question ID : 6549788430

Status : Not Answered

Chosen Option : --

Q.25 'Per Drop More Crop' is the goal for which Government of India scheme?

Ans



1. Pradhan Mantri Krishi Sinchayee Yojana (PMKSY)



2. Pradhan Mantri Awaas Yojana Gramin (PMAY-G)



3. Pradhan Mantri Jan-Dhan Yojana (PMJDY)



4. Pradhan Mantri MUDRA Yojana (PMMY)

Question ID : 6549789242

Status : Not Answered

Chosen Option : --





Combined Higher Secondary Level Examination 2020 (Tier-I)

Roll Number	Join Telegram: HaryanaJobs.in
Candidate Name	
Venue Name	
Exam Date	06/08/2021
Exam Time	12:00 PM - 1:00 PM
Subject	Combined Higher Secondary Level Exam 2020

Section : English Language

Q.1 Select the most appropriate meaning of the given idiom.

Hard nut to crack

- Ans  1. a difficult person or problem
-  2. someone who solves puzzles easily
-  3. someone who needs guidance
-  4. a person who likes to joke around





Question ID : 6549788764

Status : Answered

Chosen Option : 1

Q.2 Select the most appropriate option to substitute the underlined segment in the given sentence. If there is no need to substitute it, select 'No substitution'.

The miscreants were shifted to another building that same evening and was keeping in custody by the police.

- Ans  1. No substitution
-  2. were kept
-  3. keeps
-  4. was kept

Question ID : 6549788759

Status : Answered

Chosen Option : 2

Q.3 Select the correct indirect form of the given sentence.

“Madam, please watch this program on our folk songs,” says Sitab.

- Ans
- ☒ 1. Sitab says Madam is watching the program on our folk songs.
 - ☒ 2. Sitab requests Madam to watch that program on their folk songs.
 - ☒ 3. Sitab asks Madam have you watched the program on their folk songs.
 - ☒ 4. Sitab said to Madam to watch the program on our folk songs.

Question ID : **6549789657**

Status : **Answered**

Chosen Option : **2**

Q.4 In the given sentence, identify the segment which contains the grammatical error.

When I was at school I found my class teacher to be the best mentor as she always have time to listen and guide.

- Ans
- ☒ 1. to be the best mentor
 - ☒ 2. as she always have time to listen and guide
 - ☒ 3. When I was at school
 - ☒ 4. I found my class teacher

Question ID : **6549789658**

Status : **Answered**

Chosen Option : **2**

Q.5 Select the most appropriate synonym of the given word.

BONHOMIE

- Ans
- ☒ 1. deceit
 - ☒ 2. companionship
 - ☒ 3. irritation
 - ☒ 4. fickleness

Question ID : **6549789678**

Status : **Answered**

Chosen Option : **2**

Q.6 Select the most appropriate ANTONYM of the given word.

BEWILDER

- Ans
- ☒ 1. weaken
 - ☒ 2. enlighten
 - ☒ 3. terrify
 - ☒ 4. confuse

Question ID : **6549789670**

Status : **Answered**

Chosen Option : **2**

Q.7 In the given sentence, identify the segment which contains the grammatical error.

The teacher and her student was engaged in a discussion on the current political crisis.

- Ans
- ☒ 1. was engaged
 - ☐ 2. on the current
 - ☐ 3. political crisis
 - ☐ 4. in a discussion

Question ID : 6549788750

Status : Answered

Chosen Option : 1

Q.8 Select the option that will improve the underlined segment in the given sentence. In case no improvement is needed, select 'No improvement'

The advertising industry wants us to believe that buy more stuff will make us happier.

- Ans
- ☐ 1. that bought more
 - ☐ 2. that buys more
 - ☒ 3. that buying more
 - ☐ 4. No improvement

Question ID : 6549789669

Status : Answered

Chosen Option : 3

Q.9 Select the word which means the same as the group of words given.

Something which cannot be taken by force

- Ans
- ☒ 1. Impregnable
 - ☐ 2. Irresistible
 - ☐ 3. Imperative
 - ☐ 4. Impromptu

Question ID : 6549788767

Status : Answered

Chosen Option : 1

Q.10 Select the option which means the same as the group of words given.

Not active or growing

- Ans
- ☒ 1. dormant
 - ☐ 2. duplicate
 - ☐ 3. invisible
 - ☐ 4. inanimate

Question ID : 6549789677

Status : Answered

Chosen Option : 1

Q.11 Select the most appropriate meaning of the given idiom:

know inside out

- Ans**
- ☒ 1. To know a little about something
 - ☒ 2. To know everything by rote memory
 - ☒ 3. To know something thoroughly
 - ☒ 4. To always know a lot about every topic

Question ID : **6549789672**

Status : **Answered**

Chosen Option : **3**

Q.12 Select the correct passive form of the given sentence.

Radha plays the sitar very well.

- Ans**
- ☒ 1. The sitar is being played by Radha very well.
 - ☒ 2. Radha has been playing the sitar very well.
 - ☒ 3. Radha is playing the sitar very well.
 - ☒ 4. The sitar is played very well by Radha.

Question ID : **6549788747**

Status : **Answered**

Chosen Option : **4**

Q.13 Select the most appropriate word to fill in the blank.

Savita was crying _____ as she felt that her world had fallen apart due to the accident.

- Ans**
- ☒ 1. hardly
 - ☒ 2. definitely
 - ☒ 3. mildly
 - ☒ 4. bitterly

Question ID : **6549788772**

Status : **Not Answered**

Chosen Option : **--**

Q.14 Select the most appropriate synonym of the given word.

FASCINATION

- Ans**
- ☒ 1. dislike
 - ☒ 2. happiness
 - ☒ 3. agreement
 - ☒ 4. appeal

Question ID : **6549788770**

Status : **Answered**

Chosen Option : **4**

Q.15 Examine the four jumbled sentences. Out of the given options, pick the one that gives their correct order.

- A. Yet few people know the long history of making soap.
- B. As a prevention, they recommend the frequent washing of hands for 20 seconds.
- C. Scientists have declared that COVID-19 is here to stay.
- D. This advice is practical and easy to follow as soap is a common and inexpensive consumer product.

- Ans
- ☒ 1. CABD
 - ☒ 2. BDAC
 - ☒ 3. CBDA
 - ☒ 4. ABDC

Question ID : **6549789666**
Status : **Answered**
Chosen Option : **3**

Q.16 Select the most appropriate option to fill in the blank.

The migrant crisis led several states to _____ existing labour laws in order to improve their condition.

- Ans
- ☒ 1. introduce
 - ☒ 2. amend
 - ☒ 3. initiate
 - ☒ 4. abandon

Question ID : **6549789680**
Status : **Answered**
Chosen Option : **2**

Q.17 Select the most appropriate antonym of the given word.

EQUILIBRIUM

- Ans
- ☒ 1. stability
 - ☒ 2. imbalance
 - ☒ 3. adherence
 - ☒ 4. coolness

Question ID : **6549788762**
Status : **Answered**
Chosen Option : **2**

Q.18 Select the INCORRECTLY spelt word.

- Ans
- ☒ 1. flapped
 - ☒ 2. noncomital
 - ☒ 3. referred
 - ☒ 4. accommodate

Question ID : **6549789675**
Status : **Answered**
Chosen Option : **2**

Q.19 Given below are four jumbled sentences. Out of the given options, select the one that gives their correct order.

- A. How will we ever reach our goal if we don't follow our ideals and principles and follow the path we say we believe in?
 B. Many of us believe in God, do our daily prayers and vow to be good.
 C. But unfortunately, when it comes to putting our ideas into practice, we procrastinate.
 D. There may be variations in our chosen ideals of Him, but each of us believes in Him nevertheless.





- Ans  1. BADC
 2. ABCD
 3. ACDB
 4. BDCA

Question ID : 6549788758

Status : Answered

Chosen Option : 4

Q.20 Select the INCORRECTLY spelt word.

- Ans  1. promotion
 2. tradition
 3. applicasion
 4. completion

Question ID : 6549788765

Status : Answered

Chosen Option : 3

Comprehension:

In the following passage, some words have been deleted. Fill in the blanks with the help of the alternatives given. Select the most appropriate option for each blank.

An appetising and nutritious meal is always recommended because what we eat (1) _____ our senses. The effect of food on our mind, body and spirit had been the centre (2) _____ discussion even in ancient Greece, when Pythagoras argued in favour of a healthy, vegetarian (3) _____. Though at the time when the philosopher lived, in around 500 BC, the term 'vegetarianism' was (4) _____, his diet came to be known as 'the Pythagorean diet'. He is known for his theory on geometry, but few are aware of his profound (5) _____ on food habits!

SubQuestion No : 21

Q.21 Select the most appropriate option for blank No. 1.

- Ans  1. enables
 2. hurts
 3. creates
 4. affects

Question ID : 6549788752

Status : Answered

Chosen Option : 4

Comprehension:

In the following passage, some words have been deleted. Fill in the blanks with the help of the alternatives given. Select the most appropriate option for each blank.

An appetising and nutritious meal is always recommended because what we eat (1) _____ our senses. The effect of food on our mind, body and spirit had been the centre (2) _____ discussion even in ancient Greece, when Pythagoras argued in favour of a healthy, vegetarian (3) _____. Though at the time when the philosopher lived, in around 500 BC, the term 'vegetarianism' was (4) _____, his diet came to be known as 'the Pythagorean diet'. He is known for his theory on geometry, but few are aware of his profound (5) _____ on food habits!

SubQuestion No : 22

Q.22 Select the most appropriate option for blank No. 2.

- Ans
- ☒ 1. on
 - ☒ 2. of
 - ☐ 3. with
 - ☐ 4. to

Question ID : **6549788753**

Status : **Answered**

Chosen Option : **2**

Comprehension:

In the following passage, some words have been deleted. Fill in the blanks with the help of the alternatives given. Select the most appropriate option for each blank.

An appetising and nutritious meal is always recommended because what we eat (1) _____ our senses. The effect of food on our mind, body and spirit had been the centre (2) _____ discussion even in ancient Greece, when Pythagoras argued in favour of a healthy, vegetarian (3) _____. Though at the time when the philosopher lived, in around 500 BC, the term 'vegetarianism' was (4) _____, his diet came to be known as 'the Pythagorean diet'. He is known for his theory on geometry, but few are aware of his profound (5) _____ on food habits!

SubQuestion No : 23

Q.23 Select the most appropriate option for blank No. 3.

- Ans
- ☐ 1. bread
 - ☐ 2. nourishment
 - ☒ 3. diet
 - ☐ 4. nutrition

Question ID : **6549788754**

Status : **Answered**

Chosen Option : **3**

Comprehension:

In the following passage, some words have been deleted. Fill in the blanks with the help of the alternatives given. Select the most appropriate option for each blank.

An appetising and nutritious meal is always recommended because what we eat (1) _____ our senses. The effect of food on our mind, body and spirit had been the centre (2) _____ discussion even in ancient Greece, when Pythagoras argued in favour of a healthy, vegetarian (3) _____. Though at the time when the philosopher lived, in around 500 BC, the term 'vegetarianism' was (4) _____, his diet came to be known as 'the Pythagorean diet'. He is known for his theory on geometry, but few are aware of his profound (5) _____ on food habits!

SubQuestion No : 24

Q.24 Select the most appropriate option for blank No. 4.

Ans  1. unknown

 2. knowledgeable

 3. knowing

 4. known

Question ID : **6549788755**

Status : **Answered**

Chosen Option : 1

Comprehension:


In the following passage, some words have been deleted. Fill in the blanks with the help of the alternatives given. Select the most appropriate option for each blank.

An appetising and nutritious meal is always recommended because what we eat (1) _____ our senses. The effect of food on our mind, body and spirit had been the centre (2) _____ discussion even in ancient Greece, when Pythagoras argued in favour of a healthy, vegetarian (3) _____. Though at the time when the philosopher lived, in around 500 BC, the term 'vegetarianism' was (4) _____, his diet came to be known as 'the Pythagorean diet'. He is known for his theory on geometry, but few are aware of his profound (5) _____ on food habits!

SubQuestion No : 25

Q.25 Select the most appropriate option for blank No. 5.

Ans  1. creation

 2. greatness

 3. development

 4. wisdom

Question ID : **6549788756**

Status : **Answered**

Chosen Option : 4

Section : **General Intelligence**

Q.1 In a code language, CIRCUS is written as DKUGZY. How will JOKER be written in the same language?

- Ans
- ☒ 1. KQUIV
 - ☒ 2. KRNJW
 - ☒ 3. KQM JW
 - ☒ 4. KQNIW

Question ID : 6549788781

Status : Answered

Chosen Option : 4

Q.2 Select the option in which the numbers are related in the same way as are the numbers of the following set.

{46, 53, 64}

- Ans
- ☒ 1. {68, 73, 85}
 - ☒ 2. {34, 41, 43}
 - ☒ 3. {23, 30, 34}
 - ☒ 4. {56, 64, 66}

Question ID : 6549789686

Status : Answered

Chosen Option : 2

Q.3 Select the option that is related to the third letter-cluster in the same way as the second letter-cluster is related to the first letter-cluster.

REST : SCTR :: BEST : ?

- Ans
- ☒ 1. SBTR
 - ☒ 2. CCRT
 - ☒ 3. CCTR
 - ☒ 4. CDTR

Question ID : 6549788783

Status : Answered

Chosen Option : 3

Q.4 Select the correct option that indicates the arrangement of the given words in a logical and meaningful order.

1. Income
2. Employment
3. Superannuation
4. Interview
5. Education
6. Promotion

- Ans
- ☐ 1. 3, 4, 2, 1, 6, 5
 - ☐ 2. 5, 1, 4, 2, 6, 3
 - ☐ 3. 3, 6, 1, 4, 2, 5
 - ☒ 4. 5, 4, 2, 1, 6, 3

Question ID : 6549789689

Status : Answered

Chosen Option : 4

Q.5 Select the combination of letters that when sequentially placed in the blanks of the given series will complete the series.

b a _ d a _ b b _ d _ a c b _ a d d _ c b

- Ans
- ☐ 1. c a d d b a
 - ☐ 2. d c d a b d
 - ☐ 3. b c a c b a
 - ☒ 4. d c a d b a

Question ID : 6549788886

Status : Answered

Chosen Option : 4

Q.6 'Second' is related to 'Minute' in the same way as 'Day' is related to '_____'.

- Ans
- ☐ 1. Dusk
 - ☐ 2. Dawn
 - ☒ 3. Week
 - ☐ 4. Night

Question ID : 6549788784

Status : Answered

Chosen Option : 3

Q.7 Select the correct mirror image of the given figure when the mirror is placed to the right side of the figure.

TER\$MISNATE

Ans

- ☒ 1. TER\$MISNATE
- ☒ 2. TER\$MISNATE
- ☒ 3. TER\$MISNATE
- ☒ 4. TER\$MISNATE

Question ID : 6549788796

Status : Answered

Chosen Option : 4

Q.8 If 'x' means '-', '÷' means '+', '+' means 'x' and '-' means '÷', then what will be the value of the following expression?

$$16 \div 32 - 4 \times 2 + 1 = ?$$

Ans

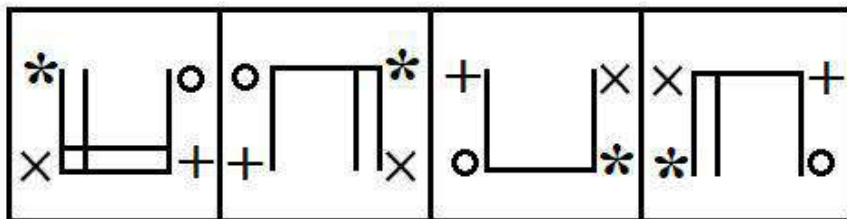
- ☒ 1. 7.5
- ☒ 2. 32
- ☒ 3. 22
- ☒ 4. 10

Question ID : 6549788774

Status : Answered

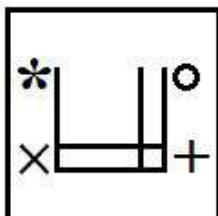
Chosen Option : 3

Q.9 Select the figure that will come next in the following series.

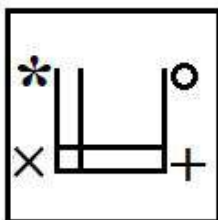


Ans

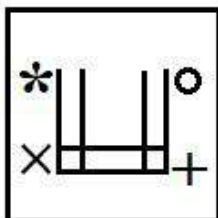
✓ 1.



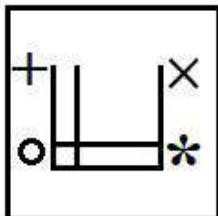
✗ 2.



✗ 3.



✗ 4.




Question ID : 6549789701

Status : Answered

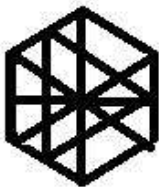
Chosen Option : 1

Q.10 In which of the following options is the given figure embedded? (rotation is NOT allowed)

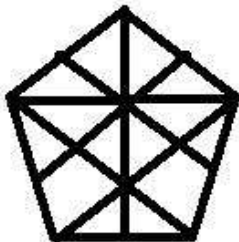


Ans


✗ 1.



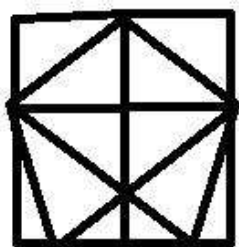
✗ 2.



✓ 3.



✗ 4.



Question ID : 6549788794

Status : Answered

Chosen Option : 3

Q.11 In a certain code language, MAKER is coded as 90. How will BROTHER be coded in that language?

Ans ✗ 1. 95

✓ 2. 100

✗ 3. 119

✗ 4. 112

Question ID : 6549789691

Status : Not Answered

Chosen Option : --

Q.12 Select the set in which the numbers are related in the same way as are the numbers of the following set.

(2, 6, 9)

- Ans ☒ 1. (4, 12, 18)
☐ 2. (8, 12, 17)
☐ 3. (5, 15, 30)
☐ 4. (7, 22, 17)

Question ID : 6549788776

Status : Answered

Chosen Option : 1

Q.13 Sunita appeared for a test consisting of 260 questions and answered 40% of the first 130 questions correctly. What percentage of the rest 130 questions must she answer correctly so as to score 60% in the entire test?

- Ans ☐ 1. 70%
☐ 2. 84%
☐ 3. 75%
☒ 4. 80%

Question ID : 6549789682

Status : Answered

Chosen Option : 4

Q.14 'U + W' means 'U is the father of W';
'U - W' means 'U is the wife of W';
'U × W' means 'U is the brother of W'; and
'U ÷ W' means 'U is the daughter of W'.
If 'K ÷ L + M + N', then how is K related to N?

- Ans ☐ 1. Daughter
☐ 2. Mother
☒ 3. Aunt
☐ 4. Sister

Question ID : 6549789798

Status : Answered

Chosen Option : 3

Q.15 Four numbers have been given, out of which three are alike in some manner and one is different. Select the number that is different.

- Ans ☒ 1. 115
☐ 2. 73
☐ 3. 127
☐ 4. 89

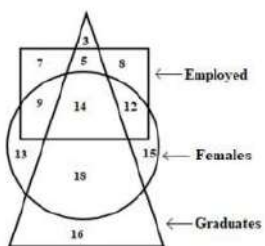
Question ID : 6549789688

Status : Answered

Chosen Option : 1

Q.16 In the given diagram, the shapes indicate the categories of persons. The numbers given in the different segments represent the number of persons in that category.

How many females are either graduates or employed but NOT both?



Ans ☒ 1. 39

☒ 2. 40

☒ 3. 35

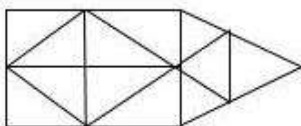
☒ 4. 41

Question ID : 6549789706

Status : Answered

Chosen Option : 1

Q.17 How many triangles are there in the following figure?



Ans ☒ 1. 14

☒ 2. 16

☒ 3. 19

☒ 4. 17

Question ID : 6549789702

Status : Answered

Chosen Option : 4

Q.18 Four letter-clusters have been given, out of which three are alike in some manner and one is different. Select the letter-cluster that is different.

Ans ☒ 1. HKMR

☒ 2. FMNQ

☒ 3. BJPV

☒ 4. DLRT

Question ID : 6549789697

Status : Not Answered

Chosen Option : --

Q.19 Three statements are given, followed by four conclusions numbered I, II, III and IV. Assuming the statements to be true, even if they seem to be at variance with commonly known facts, decide which of the conclusions logically follows from the statements.

Statements:

All cats are birds.
Some tigers are cats.
All bees are tigers.

Conclusions:

I. All bees are birds.
II. Some bees are birds.
III. Some birds are tigers.
IV. All tigers are birds.

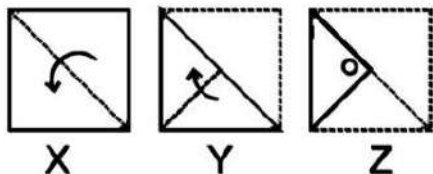
- Ans**
- ☒ 1. Only conclusion IV follows
 - ☒ 2. Only conclusion II follows
 - ☒ 3. Only conclusion III follows
 - ☒ 4. Only conclusion I follows

Question ID : **6549788790**

Status : **Answered**

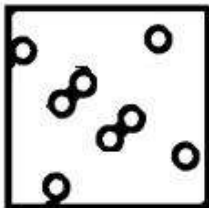
Chosen Option : **3**

Q.20 A paper is folded and cut as shown in the following figures (X, Y and Z). How will it appear when unfolded?

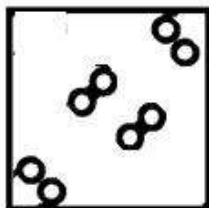


Ans

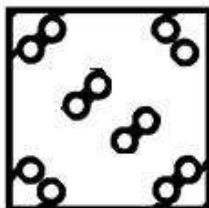
✗ 1.



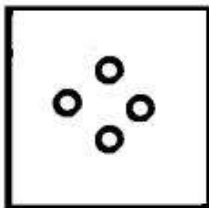
✗ 2.



✗ 3.



✓ 4.



Question ID : 6549788795

Status : Answered

Chosen Option : 4

Q.21 Three of the following four words are alike in a certain way and one is different. Select the odd one.

Ans ✗ 1. Cat

✗ 2. Lion

✓ 3. Dog

✗ 4. Tiger

Question ID : 6549788789

Status : Answered

Chosen Option : 3

Q.22 Select the option in which the words share the same relationship as that shared by the given pair of words.

Purification : Filter

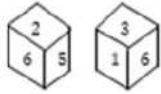
- Ans ☒ 1. Digging : Spade
☒ 2. Selling : Car
☒ 3. Coloring : House
☒ 4. Walking : Exercise

Question ID : 6549789696

Status : Answered

Chosen Option : 4

Q.23 Two different positions of the same dice are shown. Select the number that will be at the top if '1' is at the bottom.



- Ans ☒ 1. 6
☒ 2. 4
☒ 3. 5
☒ 4. 2

Question ID : 6549789700

Status : Answered

Chosen Option : 4

Q.24 Select the option in which the numbers share the same relationship as that shared by the given pair of numbers.

24 : 37

- Ans ☒ 1. 8 : 9
☒ 2. 17 : 28
☒ 3. 78 : 87
☒ 4. 63 : 82

Question ID : 6549789684

Status : Answered

Chosen Option : 4

Q.25 Select the number that can replace the question mark (?) in the following series.

63, 63, 56, 56, 49, 49, 42, ?

- Ans ☒ 1. 42
☒ 2. 35
☒ 3. 30
☒ 4. 27

Question ID : 6549788778

Status : Answered

Chosen Option : 1

Section : Quantitative Aptitude

Q.1 A train is running at a speed of 99 km/h. If the train is 565 m long, then what will be the time (in seconds) taken by it to cross a 975 m long tunnel?

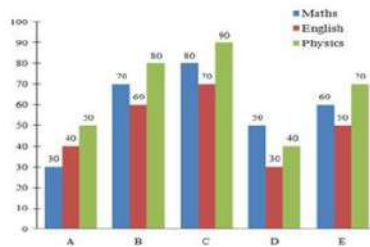
- Ans**
- ☒ 1. 54
 - ☒ 2. 56
 - ☐ 3. 40
 - ☐ 4. 42

Question ID : 6549789708

Status : Answered

Chosen Option : 2

Q.2 Study the following graph and answer the question that follows.
Marks scored by five students in three subjects (Maths, English and Physics). Total marks for each subject are 100.



What is the difference between the total marks obtained by B and the total marks obtained by C?

- Ans**
- ☐ 1. 35
 - ☐ 2. 25
 - ☐ 3. 20
 - ☒ 4. 30

Question ID : 6549789325

Status : Answered

Chosen Option : 4

Q.3 What is the area (in cm^2 , correct to one decimal place) of a triangle whose base is 21.4 cm and height is 15.5 cm?

- Ans**
- ☒ 1. 165.9
 - ☐ 2. 156.6
 - ☐ 3. 165.6
 - ☐ 4. 156.9

Question ID : 6549789718

Status : Answered

Chosen Option : 1

Q.4 A ladder 10 m long rests against a vertical wall making an angle of 30° with the wall. How high up (in m) does it reach the wall from the ground? (Take $\sqrt{3} = 1.73$.)

- Ans ☒ 1. 8.65
☐ 2. 5.88
☐ 3. 5
☐ 4. 8.56

Question ID : **6549789726**
 Status : **Answered**
 Chosen Option : **1**

Q.5 Two numbers are in the ratio of 9 : 7. If the larger number is 56 more than one-seventh of the smaller, then what is the sum of the two numbers?

- Ans ☐ 1. 72
☐ 2. 130
☒ 3. 112
☐ 4. 96

Question ID : **6549789714**
 Status : **Answered**
 Chosen Option : **3**

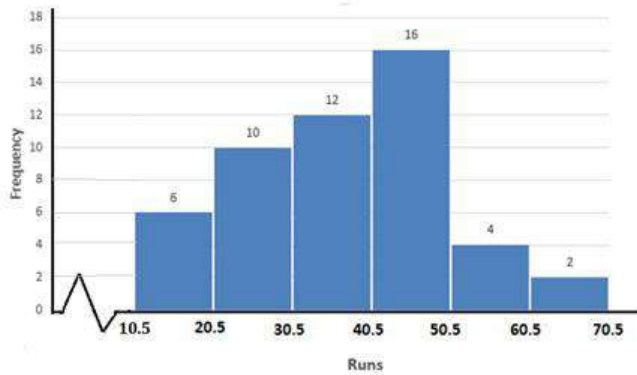
Q.6 What is the value of x if it is given that

$$4\left\{2\left(\frac{3}{4} \text{ of } 24 - 1\right) + 3(7 \div x) - 5 \times 8 + 1\right\} = 20^2 ?$$

- Ans ☐ 1. 0.625
☒ 2. 0.2
☐ 3. 0.75
☐ 4. 0.4

Question ID : **6549788815**
 Status : **Answered**
 Chosen Option : **2**

- Q.7** The histogram given below presents the frequency distribution of average runs scored by 50 selected players from a district in local cricket tournament. Study the histogram and answer the question that follows.



How many players scored 30.5 runs or less?

- Ans
- ☒ 1. 28
 - ☒ 2. 34
 - ☒ 3. 12
 - ☒ 4. 16

Question ID : 6549788819
Status : Answered
Chosen Option : 4

- Q.8** If the nine-digit number 87605x31y is divisible by 72, then the value of $2x-3y$ is:

- Ans
- ☒ 1. 2
 - ☒ 2. 1
 - ☒ 3. 0
 - ☒ 4. -1

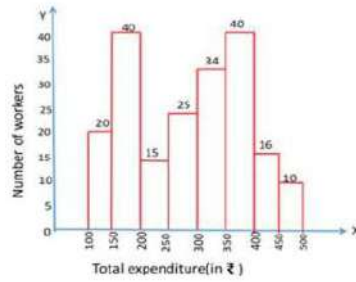
Question ID : 6549789723
Status : Answered
Chosen Option : 1

- Q.9** One side of a rectangular field is 39 m and its diagonal is 89 m. What is the area of the field?

- Ans
- ☒ 1. 2160 m²
 - ☒ 2. 3120 m²
 - ☒ 3. 3140 m²
 - ☒ 4. 2100 m²

Question ID : 6549788800
Status : Answered
Chosen Option : 2

Q.10 The following histogram represents the distribution of total household expenditure (in ₹) of 200 manual workers in a city.



The number of workers whose total expenditure is ₹350 and above is what percentage less than the number of workers whose total expenditure is less than ₹250?

- Ans**
- ☒ 1. 15%
 - ☒ 2. 12%
 - ☒ 3. 14%
 - ☒ 4. 10%

Question ID : 6549787912

Status : Answered

Chosen Option : 2

Q.11 The base of a triangle is equal to the perimeter of a square whose diagonal is $7\sqrt{2}$ cm and its height is equal to the side of a square whose area is 169 cm^2 . The area (in cm^2) of the triangle is:

- Ans**
- ☒ 1. 182
 - ☒ 2. 175
 - ☒ 3. 156
 - ☒ 4. 130

Question ID : 6549788810

Status : Answered

Chosen Option : 1

Q.12 A can do a piece of work in 12 days. He worked for 6 days and left, and then B finished it in 10 days. If both work together, then in how many days will they finish the same work?

- Ans**
- ☒ 1. 9.5
 - ☒ 2. 9
 - ☒ 3. 7.5
 - ☒ 4. 7

Question ID : 6549788798

Status : Answered

Chosen Option : 3

Q.13 The 12% interest earned on a sum of money of ₹2,60,000 is to be used for awarding 24 scholarships of equal value every year in a school. What is the value (in ₹) of each scholarship?

- Ans ☒ 1. 1,300
☒ 2. 1,150
☒ 3. 1,200
☒ 4. 1,250

Question ID : 6549789715
 Status : Answered
 Chosen Option : 1

Q.14 Two numbers are less than a third number by 37% and 30%, respectively. By what percentage is the second number more than the first?

- Ans ☒ 1. $\frac{100}{9}$
☒ 2. $\frac{10}{9}$
☒ 3. 10
☒ 4. $\frac{100}{3}$

Question ID : 6549789712
 Status : Answered
 Chosen Option : 1

Q.15 If a person sells a ceiling fan for ₹557.75, then he gets a 15% profit. To get a 20% profit, at what amount should he sell the fan?

- Ans ☒ 1. ₹572
☒ 2. ₹589
☒ 3. ₹596
☒ 4. ₹582

Question ID : 6549788804
 Status : Answered
 Chosen Option : 4

Q.16 If $\left(x^2 + \frac{1}{49x^2}\right) = 15\frac{5}{7}$, then what is the value of $\left(x + \frac{1}{7x}\right)$?

- Ans ☒ 1. 7
☒ 2. ± 7
☒ 3. ± 4
☒ 4. 4

Question ID : 6549789720
 Status : Answered
 Chosen Option : 3

Q.17 If $\sin \theta + \operatorname{cosec} \theta = 7$, then what is the value of $\sin^3 \theta + \operatorname{cosec}^3 \theta$?

- Ans
- ☐ 1. 350
 - ☐ 2. 382
 - ☒ 3. 322
 - ☐ 4. 367

Question ID : 6549788818
Status : Answered
Chosen Option : 3

Q.18 If $a + b + c = 2$ and $ab + bc + ca = -1$, then the value of $a^3 + b^3 + c^3 - 3abc$ is:

- Ans
- ☒ 1. 14
 - ☐ 2. 2
 - ☐ 3. 5
 - ☐ 4. 10

Question ID : 6549788813
Status : Answered
Chosen Option : 1

Q.19 By selling a pen for ₹26, a man loses one-fourteenth of what it costs him. The cost price of the pen is:

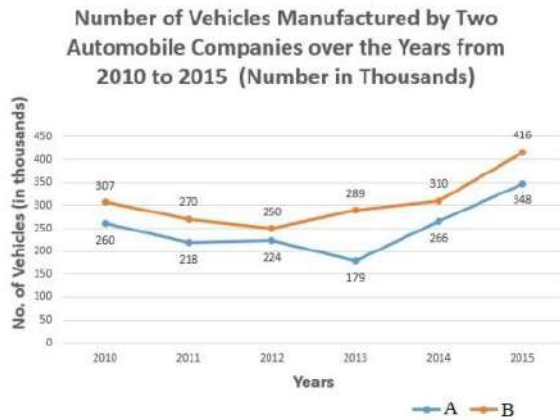
- Ans
- ☐ 1. ₹27
 - ☐ 2. ₹39
 - ☐ 3. ₹38
 - ☒ 4. ₹28

Question ID : 6549788802
Status : Answered
Chosen Option : 4

Q.20 Study the line graph and answer the question that follows.

The line graph represents the number of vehicles (in thousands) manufactured by two automobile companies A and B over the years from 2010 to 2015. The X-axis represents the years and the Y-axis represents number of vehicles in thousands.

(The data shown here is only for mathematical exercise. They do not represent the actual figures of the country.)



Company B is projecting an increase in the number of vehicles to be manufactured in 2016 by 70% with respect to its average number of vehicles from 2010 to 2015. What should be the approximate percentage increase in the number of vehicles (in thousands) to be manufactured by Company A in 2016 with respect to the number of vehicles in 2015, so that it is at par with Company B?

- Ans
- ☒ 1. 57
 - ☒ 2. 42
 - ☒ 3. 50
 - ☒ 4. 45

Question ID : **6549789731**

Status : **Not Answered**

Chosen Option : --

Q.21 Points A, B, C and D are concyclic points of a circle with centre O, such that $\angle DOC = 73^\circ$. The measure of $\angle ABC$ is 215° . What is the measure of $\angle AOD$?

- Ans
- ☒ 1. 145°
 - ☒ 2. 273°
 - ☒ 3. 87°
 - ☒ 4. 72°

Question ID : **6549789716**

Status : **Not Answered**

Chosen Option : --

Q.22 There are 90 students in a hostel. Due to new admissions, 30 new students join the mess and the daily expenses of the mess increases by ₹560, while the average expenditure per head diminishes by ₹10. What was the original daily expenditure (in ₹) of the mess?

- Ans
- ☒ 1. 4,280
 - ☒ 2. 5,280
 - ☐ 3. 3,680
 - ☐ 4. 4,980

Question ID : 6549789710

Status : Answered

Chosen Option : 2

Q.23 The angle of elevation of a ladder against a wall is 45° . The length of the ladder is 12 m. What is the distance between the wall and the foot of the ladder?

- Ans
- ☐ 1. $4\sqrt{3}$ m
 - ☒ 2. $6\sqrt{2}$ m
 - ☐ 3. $3\sqrt{2}$ m
 - ☐ 4. $5\sqrt{3}$ m

Question ID : 6549788816

Status : Answered

Chosen Option : 2

Q.24 In a circle with center O , APB is a tangent at P . If MN is a diameter such that $\angle BPN = 52^\circ$, then what is the measure of $\angle PNM$?

- Ans
- ☒ 1. 38°
 - ☐ 2. 48°
 - ☐ 3. 52°
 - ☐ 4. 90°

Question ID : 6549788808

Status : Answered

Chosen Option : 1

Q.25 If $(2a + 3b)(2c - 3d) = (2a - 3b)(2c + 3d)$, then:

- Ans
- ☐ 1. $\frac{a}{b} = \frac{d}{c}$
 - ☒ 2. $\frac{a}{b} = \frac{c}{d}$
 - ☐ 3. $\frac{a}{d} = \frac{c}{b}$
 - ☐ 4. $\frac{b}{a} = \frac{c}{d}$

Question ID : 6549788812

Status : Answered

Chosen Option : 2

Section : General Awareness

Q.1 In which of the following states is the Loktak Lake located?

- Ans
- ☒ 1. Rajasthan
 - ☒ 2. Sikkim
 - ☒ 3. Manipur
 - ☒ 4. Haryana

Question ID : **6549788836**
Status : **Not Answered**
Chosen Option : --

Q.2 Which of the following mountain ranges is home to the second-highest peak of the world, K2?

- Ans
- ☒ 1. Ladakh Range
 - ☒ 2. East Karakoram Range
 - ☒ 3. Zaskar Range
 - ☒ 4. Pir Panjal Range

Question ID : **6549788835**
Status : **Not Answered**
Chosen Option : --

Q.3 What was the theme of the World Sustainable Development Summit 2021?

- Ans
- ☒ 1. Partnerships for a Resilient Planet
 - ☒ 2. Towards 2030 Goals: Making the Decade Count
 - ☒ 3. Attaining the 2030 Agenda: Delivering on our Promise
 - ☒ 4. Redefining Our Common Future: Safe and Secure Environment For All

Question ID : **6549788829**
Status : **Not Answered**
Chosen Option : --

Q.4 Hamideh Banu Maryam Makani was the wife of Mughal emperor _____.

- Ans
- ☒ 1. Humayun
 - ☒ 2. Babur
 - ☒ 3. Jahangir
 - ☒ 4. Shah Jahan

Question ID : **6549789749**
Status : **Not Answered**
Chosen Option : --

Q.5 In which of the following states is the Sirki Waterfall located?

- Ans ☒ 1. Arunachal Pradesh
- ☐ 2. Andhra Pradesh
- ☐ 3. Himachal Pradesh
- ☐ 4. Madhya Pradesh

Question ID : **6549789747**
Status : **Not Answered**
Chosen Option : --

Q.6 Which of the following international awards did Indian drama series 'Delhi Crime' win in 2020?

- Ans ☐ 1. Golden Globe Award for Best Television Series – Drama
- ☐ 2. British Academy Television Award for Best Drama Series
- ☒ 3. International Emmy Award for Best Drama Series
- ☐ 4. Cannes Corporate Media & TV Awards – Best Drama

Question ID : **6549789751**
Status : **Not Answered**
Chosen Option : --

Q.7 Who among the following won the Golden Globe 2020 award for 'Best Performance by an Actress in a Motion Picture – Drama'?

- Ans ☒ 1. Renée Zellweger
- ☐ 2. Charlize Theron
- ☐ 3. Cynthia Erivo
- ☐ 4. Beanie Feldstein

Question ID : **6549788841**
Status : **Answered**
Chosen Option : 1

Q.8 Since 2000, Euro norms are followed in India under the name _____ Stage Emission Standards for four wheeled vehicles.

- Ans ☒ 1. Bharat
- ☐ 2. Jagat
- ☐ 3. India
- ☐ 4. Hindustan

Question ID : **6549789739**
Status : **Answered**
Chosen Option : 1

Q.9 The innermost part of a flower is called the:

- Ans
- ☒ 1. stamen
 - ☒ 2. petal
 - ☒ 3. pistil
 - ☒ 4. sepal

Question ID : **6549788832**
Status : **Answered**
Chosen Option : 1

Q.10 Which of the following indigenous games is included in the Khelo India Youth Games 2021?

- Ans
- ☒ 1. Pallankuzhi
 - ☒ 2. Gatka
 - ☒ 3. Nondi
 - ☒ 4. Chaupar

Question ID : **6549789736**
Status : **Answered**
Chosen Option : 2

Q.11 Who among the following was one of the winners of Nobel Prize in Physics 2020?

- Ans
- ☒ 1. Michel Mayor
 - ☒ 2. Kip Thorne
 - ☒ 3. Arthur Ashkin
 - ☒ 4. Roger Penrose

Question ID : **6549789742**
Status : **Answered**
Chosen Option : 4

Q.12 In which of the following mountain ranges will you find the Guru Shikhar peak?

- Ans
- ☒ 1. Karakoram
 - ☒ 2. Vindhya
 - ☒ 3. Satpura
 - ☒ 4. Aravalli

Question ID : **6549789746**
Status : **Not Answered**
Chosen Option : --

Q.13 Which keyboard shortcut in Microsoft Excel 2016 should you use to insert a new worksheet for Windows 10 operating system?

- Ans
- ☐ 1. Shift + F12
 - ☐ 2. Shift + F7
 - ☐ 3. Shift + F5
 - ☒ 4. Shift + F11

Question ID : 6549789732

Status : Not Answered

Chosen Option : --

Q.14 Which of the following companies in India has tied up with Facebook to train offline retailers to go digital on social media platforms?

- Ans
- ☐ 1. Nokia
 - ☒ 2. Samsung India
 - ☐ 3. Vivo
 - ☐ 4. Reliance

Question ID : 6549788824

Status : Answered

Chosen Option : 4

Q.15 According to Article 24 of the Constitution of India, a person below _____ years of age shall not be employed to work in any factory.

- Ans
- ☒ 1. 14
 - ☐ 2. 25
 - ☐ 3. 19
 - ☐ 4. 21

Question ID : 6549788844

Status : Answered

Chosen Option : 1

Q.16 With which of the following musical instruments is the musician Zakir Hussain associated?

- Ans
- ☒ 1. Tabla
 - ☐ 2. Tanpura
 - ☐ 3. Vichitra veena
 - ☐ 4. Dhol

Question ID : 6549788826

Status : Answered

Chosen Option : 1

Q.17 Who among the following film makers was conferred with the 'Padma Shri', the fourth highest civilian honour of the country, in 2020?

- Ans  1. Tanuja Chandra
 2. Ekta Kapoor
 3. Deepa Mehta
 4. Zoya Akhtar

Question ID : 6549789737

Status : Not Answered

Chosen Option : --

Q.18 With which of the following sports is Indian sportsperson Bhavani Devi associated?

- Ans  1. Wrestling
 2. Boxing
 3. Fencing
 4. Rowing

Question ID : 6549789756

Status : Not Answered

Chosen Option : --

Q.19 Litmus paper changes to _____ colour when put in soap water.

- Ans  1. blue
 2. red
 3. yellow
 4. orange

Question ID : 6549788834

Status : Answered

Chosen Option : 1

Q.20 Who among the following is the only Indian to have won an individual gold medal at the Olympics?

- Ans  1. Vijender Singh
 2. Abhinav Bindra
 3. P. V. Sindhu
 4. Karnam Malleswari

Question ID : 6549788846

Status : Answered

Chosen Option : 2

Q.21 What was India's per capita net national income (estimated) during 2019-20?

- Ans
- ☐ 1. ₹1,15,050
 - ☐ 2. ₹1,85,050
 - ☐ 3. ₹1,55,050
 - ☒ 4. ₹1,35,050

Question ID : 6549788831
Status : Answered
Chosen Option : 2

Q.22 Who among the following was the President of the Board of Control for Cricket in India (BCCI) as of December 2020?

- Ans
- ☐ 1. Sanjay Manjrekar
 - ☐ 2. Ravi Shastri
 - ☒ 3. Sourav Ganguly
 - ☐ 4. Kapil Dev

Question ID : 6549789754
Status : Answered
Chosen Option : 3

Q.23 The normal term of every Lok Sabha is _____ years.

- Ans
- ☐ 1. 12
 - ☒ 2. 5
 - ☐ 3. 10
 - ☐ 4. 7

Question ID : 6549789752
Status : Answered
Chosen Option : 2

Q.24 'Memoirs of Babur' or 'Baburnama', also known as 'Tuzk-e Babri', was written by:

- Ans
- ☐ 1. Faizi
 - ☐ 2. Abdul Rahim Khan-i-Khanan
 - ☒ 3. Babur
 - ☐ 4. Talib Amah

Question ID : 6549788839
Status : Answered
Chosen Option : 3

Q.25 'Ranapa', a folk dance form of Odisha, consists of enacting chapters from the life of Lord _____.

- Ans**
- ☒ 1. Indra
 - ☒ 2. Ram
 - ☒ 3. Krishna
 - ☒ 4. Hanuman

Question ID : **6549789734**

Status : **Not Answered**

Chosen Option : --

Combined Higher Secondary Level Examination 2020 (Tier-I)

Roll Number	Join Telegram: HaryanaJobs.in
Candidate Name	
Venue Name	
Exam Date	06/08/2021
Exam Time	3:00 PM - 4:00 PM
Subject	Combined Higher Secondary Level Exam 2020

Section : English Language

Q.1 Select the misspelt word.

- Ans
- ☒ 1. already
 - ☒ 2. library
 - ☒ 3. instalment
 - ☒ 4. boundry

Question ID : 6549789371

Status : Answered

Chosen Option : 3

Q.2 The following sentence has been split into four segments. Identify the segment that contains a grammatical error.

My brother lost / his job during the lockdown, / but he had got / a new job now.

- Ans
- ☒ 1. his job during the lockdown
 - ☒ 2. but he had got
 - ☒ 3. a new job now
 - ☒ 4. My brother lost

Question ID : 6549787638

Status : Answered

Chosen Option : 2

Q.3 Select the most appropriate option to substitute the underlined segment in the given sentence. If there is no need to substitute it, select 'No substitution required'.

A school teacher earns fewer salary from a college lecturer.

- Ans
- ☒ 1. a lower salary than
 - ☒ 2. No substitution required
 - ☒ 3. fewer salary than
 - ☒ 4. less salary from

Question ID : 6549787649

Status : Answered

Chosen Option : 2

Q.4 Given below are four sentences in jumbled order. Select the option that gives their correct order.

- A. Once, on an airplane, I leaned over to tie my shoelace.
- B. I found myself pinned helplessly in the crash position, unable to move.
- C. I always have catastrophes when I travel.
- D. Just at that moment, the person in the seat ahead threw his seat back into full recline.

- Ans
- ☒ 1. ABDC
 - ☒ 2. CADB
 - ☒ 3. DBAC
 - ☒ 4. BDAC

Question ID : 6549789364

Status : Answered

Chosen Option : 2

Q.5 Select the option that can be used as a one-word substitute for the given group of words.

A strong interest in something or someone

- Ans
- ☒ 1. Fixation
 - ☒ 2. Empathy
 - ☒ 3. Apathy
 - ☒ 4. Attachment

Question ID : 6549787657

Status : Answered

Chosen Option : 3

Q.6 Select the option that expresses the given sentence in direct speech.

She told the car mechanic that her car was giving very low mileage.

- Ans
- ☒ 1. The car mechanic said to her, "Your car is giving very low mileage."
 - ☒ 2. She said to the car mechanic, "Her car has been giving very low mileage."
 - ☒ 3. She said to the car mechanic, "My car is giving very low mileage."
 - ☒ 4. She asked the car mechanic, "Why is my car giving very low mileage?"

Question ID : 6549787637

Status : Answered

Chosen Option : 3

Q.7 Select the most appropriate antonym of the given word.

SAVAGE

- Ans
- ☒ 1. violent
 - ☒ 2. cultured
 - ☒ 3. vicious
 - ☒ 4. brutal

Question ID : 6549789368

Status : Answered

Chosen Option : 2

Q.8 Select the most appropriate option to substitute the underlined segment in the given sentence. If there is no need to substitute it, select 'No substitution'.

The workers' union has threatened for going to an indefinite strike.

- Ans
- ☒ 1. to be going for
 - ☒ 2. No substitution
 - ☒ 3. for going to
 - ☒ 4. to go on

Question ID : 6549789365
Status : Answered
Chosen Option : 2

Q.9 Select the most appropriate one-word substitution for the given words.

To come to an end

- Ans
- ☒ 1. initiate
 - ☒ 2. exhale
 - ☒ 3. inspire
 - ☒ 4. expire

Question ID : 6549789373
Status : Answered
Chosen Option : 2

Q.10 Select the most appropriate synonym of the given word.

COMMENCE

- Ans
- ☒ 1. complete
 - ☒ 2. resume
 - ☒ 3. conclude
 - ☒ 4. launch

Question ID : 6549789376
Status : Answered
Chosen Option : 4

Q.11 Select the most appropriate ANTONYM of the given word.

Friendly

- Ans
- ☒ 1. Amiable
 - ☒ 2. Zealous
 - ☒ 3. Hostile
 - ☒ 4. Upright

Question ID : 6549787650
Status : Answered
Chosen Option : 3

Q.12 Select the most appropriate meaning of the underlined idiom in the given sentence.

Organic food seems to be in vogue these days.

- Ans
- ☒ 1. readily available
 - ☒ 2. out of stock
 - ☒ 3. in fashion
 - ☒ 4. very expensive

Question ID : 6549789370

Status : Answered

Chosen Option : 1

Q.13 Sentences of a paragraph are given below in jumbled order. Arrange the sentences in the right order to form a meaningful and coherent paragraph.

- A. Oprah Winfrey is one of the richest and most powerful American women, loved and admired by everyone.
B. When she was only 19, she became the first black female assistant to Nashville's evening news anchor.
C. But Oprah had a very difficult and traumatic childhood.
D. In 1986, Oprah became the television presenter of her own talk show called 'The Oprah Winfrey Show'.

- Ans
- ☒ 1. CBDA
 - ☒ 2. DACB
 - ☒ 3. ABDC
 - ☒ 4. BCAD

Question ID : 6549787646

Status : Answered

Chosen Option : 3

Q.14 Fill in the blank with most appropriate word.

I am _____ of joining the armed forces.

- Ans
- ☒ 1. interested
 - ☒ 2. keen
 - ☒ 3. desirous
 - ☒ 4. eager

Question ID : 6549789378

Status : Answered

Chosen Option : 3

Q.15 Select the INCORRECTLY spelt word.

- Ans
- ☒ 1. Benifitairy
 - ☒ 2. Territory
 - ☒ 3. Strategy
 - ☒ 4. Tractor

Question ID : 6549787655

Status : Answered

Chosen Option : 1

Q.16 In the given sentence, identify the segment which contains a grammatical error.

Every participant gave so outstanding performance that it became difficult to choose the winner.

- Ans
- ☒ 1. Every participant gave
 - ☐ 2. so outstanding performance
 - ☐ 3. to choose the winner
 - ☐ 4. that it became difficult

Question ID : 6549789356
Status : Answered
Chosen Option : 2

Q.17 Select the correct passive form of the given sentence.

She has put fresh flowers in the flower vase.

- Ans
- ☐ 1. Fresh flowers are put in the flower vase.
 - ☐ 2. Fresh flowers are being put in the flower vase.
 - ☐ 3. Fresh flowers has been put in the flower vase.
 - ☒ 4. Fresh flowers have been put in the flower vase.

Question ID : 6549789353
Status : Answered
Chosen Option : 4

Q.18 Select the most appropriate meaning of the given idiom.

To play with fire

- Ans
- ☒ 1. To act in a dangerous and risky way
 - ☐ 2. To hold a revenge against someone
 - ☐ 3. To fight fires like a fireman
 - ☐ 4. To pour oil on a burning fire

Question ID : 6549787652
Status : Answered
Chosen Option : 1

Q.19 Select the most appropriate synonym of the given word.

Imitate

- Ans
- ☒ 1. Mimic
 - ☐ 2. Effect
 - ☐ 3. Disregard
 - ☐ 4. Enlighten

Question ID : 6549787658
Status : Answered
Chosen Option : 1

Q.20 Select the most appropriate word to fill in the blank.

You don't usually discuss money with friends, because it may _____ the relationship negatively.

- Ans
- ☒ 1. affect
 - ☐ 2. improve
 - ☐ 3. strengthen
 - ☐ 4. effect

Question ID : 6549787660

Status : Answered

Chosen Option : 4

Comprehension:

In the following passage, some words have been deleted. Fill in the blanks with the help of the alternatives given. Select the most appropriate option for each number.

The little princess said, "I shut you in a golden cage because I wanted to have you all to (1) _____. I never knew it would make you so unhappy. I love you (2) _____ to grant you freedom and let you be happy in your (3) _____." Then she opened the cage and let out the (4) _____ little bird. The bird said, "I will come back to sing you the (5) _____ songs I know," and flew away into the blue.

SubQuestion No : 21

Q.21 Select the most appropriate option to fill in the blank no. 1.

- Ans
- ☐ 1. himself
 - ☐ 2. herself
 - ☒ 3. myself
 - ☐ 4. itself

Question ID : 6549789358

Status : Answered

Chosen Option : 3

Comprehension:

In the following passage, some words have been deleted. Fill in the blanks with the help of the alternatives given. Select the most appropriate option for each number.

The little princess said, "I shut you in a golden cage because I wanted to have you all to (1) _____. I never knew it would make you so unhappy. I love you (2) _____ to grant you freedom and let you be happy in your (3) _____." Then she opened the cage and let out the (4) _____ little bird. The bird said, "I will come back to sing you the (5) _____ songs I know," and flew away into the blue.

SubQuestion No : 22

Q.22 Select the most appropriate option to fill in the blank no. 2.

- Ans
- ☐ 1. so much
 - ☒ 2. enough
 - ☐ 3. more
 - ☐ 4. so

Question ID : 6549789359

Status : Answered

Chosen Option : 1

Comprehension:

In the following passage, some words have been deleted. Fill in the blanks with the help of the alternatives given. Select the most appropriate option for each number.

The little princess said, "I shut you in a golden cage because I wanted to have you all to (1) _____. I never knew it would make you so unhappy. I love you (2) _____ to grant you freedom and let you be happy in your (3) _____." Then she opened the cage and let out the (4) _____ little bird. The bird said, "I will come back to sing you the (5) _____ songs I know," and flew away into the blue.


SubQuestion No : 23

Q.23 Select the most appropriate option to fill in the blank no. 3.

Ans  1. way

 2. turn

 3. cage

 4. path

Question ID : 6549789360

Status : **Answered**

Chosen Option : 4

Comprehension:


In the following passage, some words have been deleted. Fill in the blanks with the help of the alternatives given. Select the most appropriate option for each number.

The little princess said, "I shut you in a golden cage because I wanted to have you all to (1) _____. I never knew it would make you so unhappy. I love you (2) _____ to grant you freedom and let you be happy in your (3) _____." Then she opened the cage and let out the (4) _____ little bird. The bird said, "I will come back to sing you the (5) _____ songs I know," and flew away into the blue.

SubQuestion No : 24

Q.24 Select the most appropriate option to fill in the blank no. 4.

Ans  1. terrorizing

 2. terrifying

 3. terrified

 4. terrible

Question ID : 6549789361

Status : **Not Answered**

Chosen Option : --

Comprehension:

In the following passage, some words have been deleted. Fill in the blanks with the help of the alternatives given. Select the most appropriate option for each number.

The little princess said, "I shut you in a golden cage because I wanted to have you all to (1) _____. I never knew it would make you so unhappy. I love you (2) _____ to grant you freedom and let you be happy in your (3) _____." Then she opened the cage and let out the (4) _____ little bird. The bird said, "I will come back to sing you the (5) _____ songs I know," and flew away into the blue.

SubQuestion No : 25

Q.25 Select the most appropriate option to fill in the blank no. 5.

- Ans
- ☒ 1. much lovely
 - ☒ 2. more lovely
 - ☒ 3. most lovelier
 - ☒ 4. loveliest

Question ID : 6549789362

Status : Answered

Chosen Option : 4

Section : General Intelligence

Q.1 Select the option figure which contains figure X embedded in it as its part (rotation is NOT allowed).


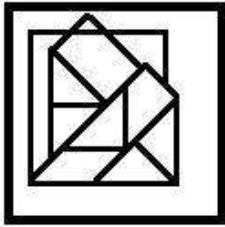


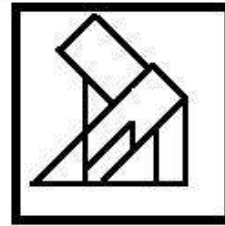
Figure X

Ans

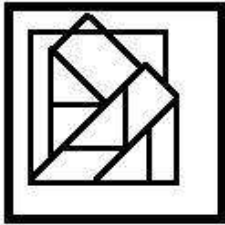
✗ 1.



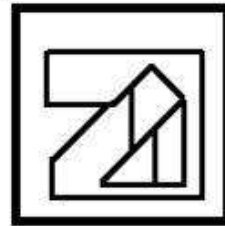
✗ 2.



✓ 3.



✗ 4.



Question ID : 6549789400

Status : Answered

Chosen Option : 3

Q.2 Two statements are given, followed by three conclusions numbered I, II and III. Assuming the statements to be true, even if they seem to be at variance with commonly known facts, decide which of the conclusions logically follow(s) from the statements.

Statements:

All bottles are utensils.

All kitchens are utensils.

Conclusions:

I. No bottle is a kitchen.

II. Some bottles are kitchens.

III. No utensil is a bottle.

Ans



1. Either conclusion I or II follows



2. Only conclusions I and II follow



3. All the conclusions follow



4. Only conclusions II and III follow

Question ID : **6549789396**

Status : **Answered**

Chosen Option : 1

Q.3 Mahendra is the son of Naman, who is the brother of Reema's mother. How is Mahendra related to Reema?

Ans



1. Cousin



2. Son



3. Uncle



4. Brother

Question ID : **6549788584**

Status : **Answered**

Chosen Option : 3

Q.4 Select the option in which the numbers are related in the same way as are the numbers of the following set.

(15, 7, 252)

Ans



1. (12, 16, 372)



2. (23, 9, 510)



3. (27, 10, 520)



4. (16, 14, 451)

Question ID : **6549787666**

Status : **Not Answered**

Chosen Option : --

Q.5 Three of the following four words are alike in a certain way and one is different. Select the odd one.

- Ans ☒ 1. Dry Fruits
☒ 2. Almond
☒ 3. Cashew
☒ 4. Walnuts

Question ID : 6549789395
 Status : Answered
 Chosen Option : 2

Q.6 Select the option that is related to the third letter-cluster in the same way as the second letter-cluster is related to the first letter-cluster.

FOR : MVY :: DEX : ?

- Ans ☒ 1. KLE
☒ 2. LLF
☒ 3. KME
☒ 4. KLF

Question ID : 6549789389
 Status : Answered
 Chosen Option : 1

Q.7 Select the combination of letters that when sequentially placed in the blanks of the given letter series will complete the series.

p _ q q r _ p p q _ r r _ p q _ _ r

- Ans ☒ 1. p r q p q r
☒ 2. r p q r p q
☒ 3. q q p p r r
☒ 4. q p r q r q

Question ID : 6549786866
 Status : Answered
 Chosen Option : 1

Q.8 Select the option in which the words share the same relationship as that shared by the given pair of words.

Axe : Chop

- Ans ☒ 1. Scalpel : Stitching
☒ 2. Chisel : Carve
☒ 3. Scissor : Design
☒ 4. Compass : Architecture

Question ID : 6549787676
 Status : Answered
 Chosen Option : 1

Q.9 Four letter-clusters have been given, out of which three are alike in some manner and one is different. Select the letter-cluster that is different.

- Ans
- ☒ 1. XZCG
 - ☒ 2. BDGK
 - ☒ 3. VYAE
 - ☒ 4. MORV

Question ID : 6549787677
Status : Answered
Chosen Option : 3

Q.10 In a code language, MAGIC is written as NZTRX. How will LAYER be written in that language?

- Ans
- ☒ 1. OZBVH
 - ☒ 2. NZBVQ
 - ☒ 3. OZBVI
 - ☒ 4. PZPVI

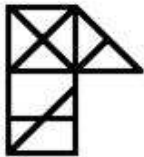
Question ID : 6549789387
Status : Answered
Chosen Option : 3

Q.11 In a certain code language, 'FOSTER' is coded as '61219202218' and 'CARGO' is coded as '32618712'. How will 'MARRIAGE' be coded in that language?

- Ans
- ☒ 1. 132618180926705
 - ☒ 2. 132618181826722
 - ☒ 3. 140118181801722
 - ☒ 4. 132609091826705

Question ID : 6549787671
Status : Answered
Chosen Option : 1

Q.12 How many triangles are there in the given figure?



- Ans
- ☒ 1. 16
 - ☒ 2. 15
 - ☒ 3. 17
 - ☒ 4. 14

Question ID : 6549787682
Status : Not Answered
Chosen Option : --

Q.13 Four number-pairs have been given, out of which three are alike in some manner and one is different. Select the number-pair that is different.

- Ans
- ☒ 1. 4 : 70
 - ☒ 2. 7 : 349
 - ☒ 3. 3 : 30
 - ☒ 4. 8 : 518

Question ID : 6549787668

Status : Answered

Chosen Option : 3

Q.14 A piece of paper is folded and cut as shown below in the question figures. Select from the given answer figures, how it will appear when unfolded.



Ans

- ☒ 1.
- ☒ 2.
- ☒ 3.
- ☒ 4.

Question ID : 6549789401

Status : Answered

Chosen Option : 2

Q.15 Ankit is 30 years younger than his father. After 4 years Ankit's sister will be half the age of her father. The total of the present ages of Ankit and his sister is 67 years. What is the present age of Ankit's father?

- Ans ☒ 1. 66 years
☐ 2. 48 years
☐ 3. 60 years
☐ 4. 52 years

Question ID : 6549787662
Status : Answered
Chosen Option : 1

Q.16 Select the correct option that indicates the arrangement of the given words in the order in which they appear in an English dictionary.

1. Mosaic
2. Mosquito
3. Mortgage
4. Moratorium
5. Morphed

- Ans ☒ 1. 4, 5, 3, 1, 2
☐ 2. 1, 4, 3, 2, 5
☐ 3. 4, 3, 1, 2, 5
☐ 4. 4, 1, 3, 5, 2

Question ID : 6549787669
Status : Answered
Chosen Option : 1

Q.17 Select the option that is related to the fourth number in the same way as the first number is related to the second number and the fifth number is related to the sixth number.

26 : 182 :: ? : 203 :: 38 : 266

- Ans ☐ 1. 35
☒ 2. 29
☐ 3. 33
☐ 4. 27

Question ID : 6549787664
Status : Not Answered
Chosen Option : --

Q.18 Which two signs and two numbers should be interchanged to make the given equation correct?

$$12 \times 5 + 7 \div 4 - 6 = 25$$

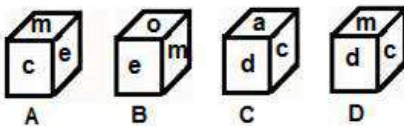
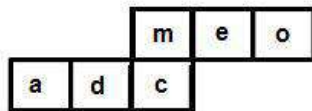
- Ans
- ☒ 1. \times and \div , 7 and 6
 - ☒ 2. \times and $-$, 6 and 5
 - ☒ 3. \div and $-$, 4 and 12
 - ☒ 4. \times and $+$, 12 and 4

Question ID : 6549789380

Status : Answered

Chosen Option : 3

Q.19 Select the cubes that can be formed by folding the given sheet along the lines.



- Ans
- ☒ 1. Only A and D
 - ☒ 2. Only B, C and D
 - ☒ 3. Only A, C and D
 - ☒ 4. Only B and C

Question ID : 6549787680

Status : Answered

Chosen Option : 4

Q.20 Select the correct mirror image of the given letter cluster when a mirror is placed on the right side of the cluster.

DNKTRA

- Ans
- ☒ 1. AЯTKRD
 - ☒ 2. AЯTKND
 - ☒ 3. AЯTKRD
 - ☒ 4. AЯTKND

Question ID : 6549789402

Status : Answered

Chosen Option : 3

Q.21 Select the option in which the numbers share the same relationship as that shared by the numbers in the given set.

(6, 8, 192)

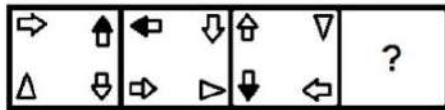
- Ans ☒ 1. (11, 9, 396)
- ☒ 2. (7, 5, 78)
- ☒ 3. (12, 13, 263)
- ☒ 4. (8, 11, 180)

Question ID : 6549789382

Status : Answered

Chosen Option : 1

Q.22 Select the figure from among the given options that can replace the question mark (?) in the following series.



Ans

- ☒ 1.
- ☒ 2.
- ☒ 3.
- ☒ 4.

Question ID : 6549787681

Status : Answered

Chosen Option : 4

Q.23 Select the number that can replace the question mark (?) in the following series.

14, 29, 60, 123, ?, 505

- Ans
- ☒ 1. 305
 - ☒ 2. 250
 - ☒ 3. 280
 - ☒ 4. 150

Question ID : 6549789384

Status : Answered

Chosen Option : 2

Q.24 'Soldier' is related to 'Security' in the same way as 'Farmer' is related to '_____'. .

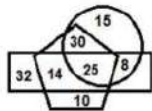
- Ans
- ☒ 1. Army
 - ☒ 2. Agriculture
 - ☒ 3. Poverty
 - ☒ 4. Rain

Question ID : 6549789390

Status : Answered

Chosen Option : 2

Q.25 In the following Venn diagram, the pentagon stands for 'Librarians', the rectangle stands for 'Income Tax Payers', and the circle stands for 'Post-graduates'. The given numbers represent the number of persons in that particular category.



How many librarians are there who are also post-graduates?

- Ans
- ☒ 1. 14
 - ☒ 2. 55
 - ☒ 3. 30
 - ☒ 4. 25

Question ID : 6549787686

Status : Answered

Chosen Option : 2

Q.1 If the simple interest on a certain sum of money borrowed for 4 years at 9.5% per annum exceeds the simple interest on the same sum for 3 years at 12.5% per annum by ₹225, then the sum borrowed is:

- Ans**
- ☒ 1. ₹35,000
 - ☒ 2. ₹45,000
 - ☒ 3. ₹48,000
 - ☒ 4. ₹42,000

Question ID : 6549787695

Status : Answered

Chosen Option : 3

Q.2 Suman and Lata working together can complete a task in 8 days. If Lata can complete the same task in 12 days, then how many days will Suman take to complete the same task?

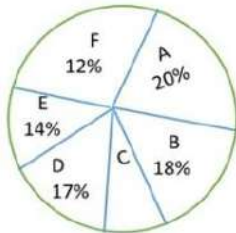
- Ans**
- ☒ 1. 18
 - ☒ 2. 15
 - ☒ 3. 10
 - ☒ 4. 24

Question ID : 6549789404

Status : Answered

Chosen Option : 4

Q.3 The following pie chart represents the percentage-wise distribution of 300 students of class X in a school in six different sections A, B, C, D, E and F.



The given table shows the number of boys of class X in six different sections A, B, C, D, E and F.

Section	A	B	C	D	E	F
No. of boys	36	26	34	28	-----	20

The total number of boys in sections A, B and D together is what percentage more than the total number of girls in sections A, B and D together?

- Ans**
- ☒ 1. 18%
 - ☒ 2. 30%
 - ☒ 3. 15%
 - ☒ 4. 20%

Question ID : 6549787711

Status : Answered

Chosen Option : 4

Q.4 If the adjacent sides of a rectangle whose perimeter is 60 cm are in the ratio 3 : 2, then what will be the area of the rectangle?

- Ans
- ☒ 1. 300 cm²
 - ☒ 2. 216 cm²
 - ☒ 3. 60 cm²
 - ☒ 4. 864 cm²

Question ID : 6549789406
Status : Answered
Chosen Option : 2

Q.5 The circumference of a circle is 'aπ' units and the area of the circle is 'bπ' square units. If a : b is equal to 4 : 5, then the radius of the circle is:

- Ans
- ☒ 1. 3 cm
 - ☒ 2. 2.5 cm
 - ☒ 3. 5 cm
 - ☒ 4. 2 cm

Question ID : 6549787696
Status : Answered
Chosen Option : 2

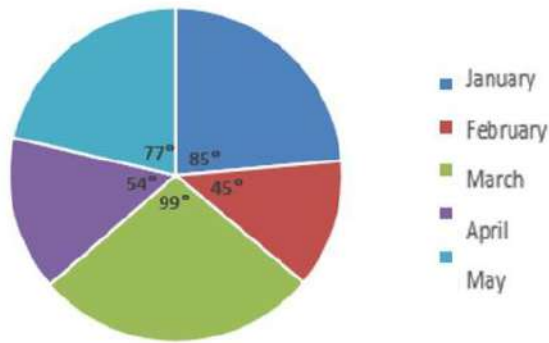
Q.6 If $x + \frac{81}{x} = 18$ where $x > 0$, then the value of $x^2 + \frac{162}{x^2}$ is:

- Ans
- ☒ 1. 78
 - ☒ 2. 83
 - ☒ 3. 85
 - ☒ 4. 81

Question ID : 6549787700
Status : Not Answered
Chosen Option : --

- Q.7** Study the given pie chart and answer the question that follows.
The pie chart shows the distribution (degree wise) of the number of computers sold by a shopkeeper during five months.

Total Number of Computers Sold = 5400



By what percentage is the total number of computers sold in February and March more than the number of computers sold in April and May (correct to one decimal place)?

- Ans**
- ☒ 1. 11.5%
 - ☒ 2. 9.9%
 - ☒ 3. 10.6%
 - ☒ 4. 8.8%

Question ID : 6549786902

Status : Answered

Chosen Option : 2

- Q.8** Mohan takes 2 hours more than Kishore to walk 63 km. If Mohan increases his speed by 50%, then he can make it in 1 hour less than Kishore. How much time does Kishore take to walk 63 km?

- Ans**
- ☒ 1. 7 hours
 - ☒ 2. 9 hours
 - ☒ 3. 6 hours
 - ☒ 4. 5 hours

Question ID : 6549787688

Status : Answered

Chosen Option : 1

- Q.9** Points D, E and F are on the sides AB, BC and AC, respectively, of triangle ABC such that AE, BF and CD bisect $\angle A$, $\angle B$ and $\angle C$, respectively. If AB = 6 cm, BC = 7 cm and AC = 8 cm, then what will be the length of BE?

- Ans**
- ☒ 1. 4 cm
 - ☒ 2. 3 cm
 - ☒ 3. 3.6 cm
 - ☒ 4. 3.5 cm

Question ID : 6549789416

Status : Answered

Chosen Option : 3

Q.10 If the angle between the internal bisectors of two angles $\angle B$ and $\angle C$ of a triangle ABC is 125° , then the value of $\angle A$ is:

Ans

- ☒ 1. 65°
- ☒ 2. 70°
- ☒ 3. 72°
- ☒ 4. 62°

Question ID : 6549787698

Status : Not Answered

Chosen Option : --

Q.11 If $3 \cot A = 4 \tan A$ and A is an acute angle, then what will be the value of $\sec A$?

Ans

- ☒ 1. $\frac{\sqrt{7}}{2}$
- ☒ 2. $\frac{\sqrt{21}}{3}$
- ☒ 3. $\frac{1}{\sqrt{3}}$
- ☒ 4. $\frac{1}{2}$

Question ID : 6549789424

Status : Answered

Chosen Option : 1

Q.12 The present population of a village (males and females) is 7640. If the number of males increases by 25% and the number of females increases by 15%, then the population will become 9214. The difference between the present population of males and females in the village is:

Ans

- ☒ 1. 820
- ☒ 2. 960
- ☒ 3. 940
- ☒ 4. 920

Question ID : 6549787692

Status : Not Answered

Chosen Option : --

Q.13 What is the value of $\frac{\cos^2 20^\circ + \cos^2 70^\circ}{\sin^2 90^\circ} - \tan^2 45^\circ$?

Ans

- ☒ 1. 0
- ☒ 2. 1
- ☒ 3. -2
- ☒ 4. -1

Question ID : 6549789422

Status : Answered

Chosen Option : 1

Q.14 Two positive numbers are in the ratio 8 : 13. If the sum of their squares is 2097, then the sum of the two numbers is:

- Ans  1. 65
 2. 63
 3. 64
 4. 60

Question ID : 6549787694

Status : Answered

Chosen Option : 2

Q.15 When a positive integer ' n ' is divided by 12, the remainder is 5. What will be the remainder if $8n^2 + 7$ is divided by 12?

- Ans  1. 2
 2. 5
 3. 3
 4. 4





Question ID : 6549787703

Status : Answered

Chosen Option : 3

Q.16 Simplify the following expression.

$$\frac{3\frac{2}{3} - 5\frac{7}{9} \div \frac{1}{3} \times 1\frac{2}{13}}{\frac{2}{3} \text{ of } 1\frac{1}{3} \div \frac{1}{3}}$$

- Ans  1. $-2\frac{77}{104}$
 2. $-29\frac{2}{5}$
 3. $-6\frac{1}{8}$
 4. $-14\frac{1}{4}$

Question ID : 6549789421

Status : Answered

Chosen Option : 4

Q.17 A customer availed a 10% discount on the purchase of a table and paid ₹4,950 for it. How much money would he have saved if he had bargained to get 12% discount?

- Ans**
- ☒ 1. ₹660
 - ☒ 2. ₹99
 - ☒ 3. ₹108.90
 - ☒ 4. ₹110

Question ID : **6549789408**

Status : **Answered**

Chosen Option : **4**

Q.18 If $x - \frac{1}{x} = 2\sqrt{2}$, then what will be the value of $x^3 - \frac{1}{x^3}$?

- Ans**
- ☒ 1. $22\sqrt{2}$
 - ☒ 2. $12\sqrt{2}$
 - ☒ 3. $10\sqrt{2}$
 - ☒ 4. $20\sqrt{2}$

Question ID : **6549789418**


Status : **Answered**

Chosen Option : **1**

Q.19 Study the given pie chart and answer the question that follows.

Total number of students admitted in a college = 700.

Distribution of the percentage of students in various courses.



Percentage-wise distribution of the number of boys.

Course	Number of boys
B.Sc. Maths	40%
B.Sc. Physics	68%
B.Sc. Chemistry	58%
B.Sc. Computer Science	80%
B.Com.	75%
BBA	65%

The difference between the number of boys and the number of girls admitted in B.Com. is:

- Ans
- ☒ 1. 65
 - ☒ 2. 70
 - ☒ 3. 75
 - ☒ 4. 60

Question ID : 6549789628

Status : Not Answered

Chosen Option : --

Q.20 If $x^4 - 12x^2 + 1 = 0$, then what will be the value of $x^4 + \frac{1}{x^4}$?

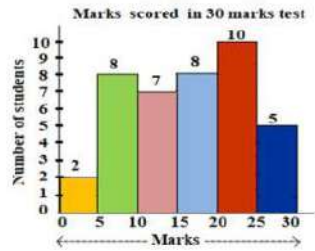
- Ans
- ☒ 1. 142
 - ☒ 2. 146
 - ☒ 3. 10
 - ☒ 4. 144

Question ID : 6549789419

Status : Answered

Chosen Option : 1

Q.21 The histogram shows the marks scored by 40 students in a test with maximum 30 marks. How many students scored 10 or more marks?



- Ans
- ☒ 1. 10
 - ☒ 2. 30
 - ☒ 3. 38
 - ☒ 4. 23

Question ID : 6549789425

Status : Not Answered

Chosen Option : --

Q.22 Amit purchased stationery marked for ₹8,000 at 12% discount and spent ₹160 on transportation. He sold the stationery at the marked price. Find his profit percentage.

- Ans
- ☒ 1. 10
 - ☒ 2. 12
 - ☒ 3. $12\frac{1}{2}$
 - ☒ 4. $11\frac{1}{9}$

Question ID : 6549789410

Status : Answered

Chosen Option : 3

Q.23 Chord AB of a circle with radius 5 cm is at a distance of 4 cm from the centre O. If tangents drawn at A and B intersect at P, then find the length of the tangent AP.

- Ans
- ☒ 1. 7.5 cm
 - ☒ 2. 3.75 cm
 - ☒ 3. 3 cm
 - ☒ 4. 2.4 cm

Question ID : 6549789414

Status : Not Answered

Chosen Option : --

Q.24

If $\frac{\sin^2 \theta}{\tan^2 \theta - \sin^2 \theta} = 5$, then the value of $\frac{24 \cos^2 \theta - 15 \sec^2 \theta}{6 \operatorname{cosec}^2 \theta - 7 \cot^2 \theta}$ is:

- Ans
- ☒ 1. 6
 - ☒ 2. 2
 - ☒ 3. 4
 - ☒ 4. 1

Question ID : 6549787706

Status : Not Answered

Chosen Option : --

Q.25

The average of the squares of four consecutive odd natural numbers is 201. The average of 7 times of the largest number and 3 times of the smallest number is:

- Ans
- ☒ 1. 72
 - ☒ 2. 78
 - ☒ 3. 76
 - ☒ 4. 66

Question ID : 6549787690

Status : Not Answered

Chosen Option : --

Section : General Awareness

Q.1 Who among the following represented India at the international level in shooting?

- Ans
- ☒ 1. Aditi Chauhan
 - ☒ 2. Anjum Moudgil
 - ☒ 3. Amit Panghal
 - ☒ 4. Ashalata Devi

Question ID : 6549787736

Status : Answered

Chosen Option : 1

Q.2 Ujjain is on the banks of river _____.


- Ans
- ☒ 1. Kshipra
 - ☒ 2. Dibang
 - ☒ 3. Sarayu
 - ☒ 4. Saraswati

Question ID : 6549789442

Status : Answered

Chosen Option : 4

Q.3 Which of the following is NOT a correct match of Dargah and its respective location?

- Ans  1. Shaikh Nizamuddin Auliya Dargah - Agra
-  2. Khwaja Qutbuddin Bakhtiyar Kaki Dargah - Delhi
-  3. Haji Ali Dargah - Mumbai
-  4. Shaikh Muinuddin Sijzi (chishti) Dargah - Ajmer

Question ID : **6549787729**
Status : **Not Answered**
Chosen Option : --

Q.4 Which of the following was the first operating system written in 'C' language?

- Ans  1. UNIX
-  2. Windows 95
-  3. Xenix
-  4. LINUX

Question ID : **6549787712**
Status : **Answered**
Chosen Option : 1

Q.5 Which of the following is the correct full form of JPEG?

- Ans  1. Joint Pixel Experts Group
-  2. Joint Photographic Experts Group
-  3. Joint Pixel Exports Group
-  4. Joint Photography Exports Group

Question ID : **6549789430**
Status : **Answered**
Chosen Option : 3

Q.6 Who among the following was the captain of women's hockey team of India as of December 2020?

- Ans  1. Rajani Etimarpu
-  2. Rani Rampal
-  3. Reena Khokhar
-  4. Grace Ekka

Question ID : **6549789452**
Status : **Not Answered**
Chosen Option : --

Q.7 Who won the Chess.com's 2020 Junior Speed Online Chess Championship after beating Russia's Alexey Sarana?

- Ans**
- ☐ 1. Magnus Carlsen
 - ☐ 2. D Gukesh
 - ☐ 3. Raunak Sadhwani
 - ☒ 4. Nihal Sarin

Question ID : **6549787734**
Status : **Not Answered**
Chosen Option : --

Q.8 Which Indian actor received the 'Crystal Award' at the World Economic Forum 2020?

- Ans**
- ☒ 1. Deepika Padukone
 - ☐ 2. Alia Bhatt
 - ☐ 3. Kareena Kapoor
 - ☐ 4. Katrina Kaif

Question ID : **6549789447**
Status : **Answered**
Chosen Option : **1**

Q.9 Ministry of Finance introduced a new form called Form 26AS for:

- Ans**
- ☐ 1. school admission application
 - ☒ 2. tax payers
 - ☐ 3. e-Visa application
 - ☐ 4. job application

Question ID : **6549787719**
Status : **Not Answered**
Chosen Option : --

Q.10 Which of the following national parks is situated in Kerala?

- Ans**
- ☐ 1. Tadoba National Park
 - ☐ 2. Kaziranga National Park
 - ☐ 3. Sanjay Gandhi National Park
 - ☒ 4. Eravikulam National Park

Question ID : **6549787726**
Status : **Answered**
Chosen Option : **4**

Q.11 Which of the following statements about blood pressure is correct?

- Ans
- ☒ 1. The normal systolic pressure is about 80 mm of Hg and diastolic pressure is 120 mm of Hg.
 - ☒ 2. The normal systolic pressure is about 72 mm of Hg and diastolic pressure is 35 mm of Hg.
 - ☒ 3. The normal systolic pressure is about 160 mm of Hg and diastolic pressure is 80 mm of Hg.
 - ☒ 4. The normal systolic pressure is about 120 mm of Hg and diastolic pressure is 80 mm of Hg.

Question ID : 6549787722

Status : Answered

Chosen Option : 4

Q.12 How many recognised essential vitamins are there as on March 2021?

- Ans
- ☒ 1. 15
 - ☒ 2. 11
 - ☒ 3. 13
 - ☒ 4. 9

Question ID : 6549789438

Status : Not Answered

Chosen Option : --

Q.13 For which of the following categories were Paul R Milgrom and Robert B Wilson awarded the Nobel Prize in 2020?

- Ans
- ☒ 1. Chemistry
 - ☒ 2. Physiology or Medicine
 - ☒ 3. Literature
 - ☒ 4. Economic Sciences

Question ID : 6549787731

Status : Answered

Chosen Option : 4

Q.14 Which of the following states had the highest per capita income for the year 2019-2020?

- Ans
- ☒ 1. Gujarat
 - ☒ 2. Goa
 - ☒ 3. Kerala
 - ☒ 4. Sikkim

Question ID : 6549789437

Status : Not Answered

Chosen Option : --

Q.15 Which country apart from India was declared a winner at the 2020 Online FIDE Chess Olympiad?

- Ans  1. Sweden
 2. Russia
 3. Brazil
 4. Finland





Question ID : 6549789435
Status : Not Answered
Chosen Option : --

Q.16 Good Governance Day is observed annually on 25 December on the birth anniversary of _____.

- Ans  1. Atal Bihari Vajpayee
 2. Rajiv Gandhi
 3. Jawaharlal Nehru
 4. P. V. Narasimha Rao

Question ID : 6549787716
Status : Answered
Chosen Option : 1

Q.17 IC 1101 is a _____.

- Ans  1. asteroid
 2. galaxy
 3. supernova
 4. satellite

Question ID : 6549789440
Status : Not Answered
Chosen Option : --

Q.18 Which of the following was the first High Court established in India?

- Ans  1. Bombay
 2. Calcutta
 3. Delhi
 4. Madras

Question ID : 6549789450
Status : Answered
Chosen Option : 2

Q.19 Who among the following is NOT a part of the committee, which is constructed to provide suggestions to the Prime Minister regarding the appointment of a chief commissioner of Central Information Commission?

Ans



1. Speaker of the Lok Sabha



2. A Union Cabinet Minister appointed by Prime Minister



3. Leader of Opposition in Lok Sabha



4. Prime Minister

Question ID : 6549787732

Status : Not Answered

Chosen Option : --

Q.20 Which of the following rivers is a tributary of Krishna River?

Ans



1. Bhavani



2. Tungabhadra



3. Hemavati



4. Amravati

Question ID : 6549787727

Status : Answered

Chosen Option : 2

Q.21 To which of the following states does the dance drama 'Khyal' belong?

Ans



1. Rajasthan



2. Gujarat



3. Madhya Pradesh



4. Punjab

Question ID : 6549787714

Status : Not Answered

Chosen Option : --

Q.22 In Indian history who were referred to as the 'atavika rajya'?

Ans



1. South Indian kingdom



2. Republican state



3. Forest kingdom



4. Mughal empire

Question ID : 6549789445

Status : Not Answered

Chosen Option : --

Q.23 Which of the following ministries launched the e-Sampada mobile app in December 2020?

Ans



1. Ministry of Housing and Urban Affairs



2. Ministry of Agriculture and Farmers' Welfare



3. Ministry of Ayurveda, Yoga & Naturopathy, Unani, Siddha and Homoeopathy



4. Ministry of Home Affairs

Question ID : 6549787717

Status : Not Answered

Chosen Option : --

Q.24 Where in India will you find India's largest tulip garden?

Ans



1. Munsiyari



2. Srinagar



3. Lansdowne



4. Dehradun

Question ID : 6549789441

Status : Not Answered

Chosen Option : --

Q.25 Which of the following festivals is celebrated for fertility and better fortune in Jharkhand?

Ans



1. Karam



2. Sarhul



3. Sohrai



4. Jawa

Question ID : 6549789432

Status : Not Answered

Chosen Option : --

Combined Higher Secondary Level Examination 2020 (Tier-I)

Roll Number	Join Telegram: HaryanaJobs.in
Candidate Name	
Venue Name	
Exam Date	09/08/2021
Exam Time	9:00 AM - 10:00 AM
Subject	Combined Higher Secondary Level Exam 2020

Section : English Language

Q.1 Select the option that expresses the given sentence in passive voice.

Aditya passed the driving test quite easily.

- Ans
- ☒ 1. The driving test had passed quite easily by Aditya.
 - ☒ 2. The driving test have been passed quite easily by Aditya.
 - ☒ 3. The driving test could passed quite easily by Aditya.
 - ☒ 4. The driving test was passed quite easily by Aditya.

Question ID : 6549786121

Status : Answered

Chosen Option : 4

Q.2 Select the most appropriate meaning of the given idiom.

To cut corners

- Ans
- ☒ 1. cut something easily without spoiling it
 - ☒ 2. cut something into pieces
 - ☒ 3. be able to do a job effortlessly
 - ☒ 4. not do a thing well in order to save money or effort

Question ID : 6549788561

Status : Answered

Chosen Option : 4

Q.3 Select the most appropriate meaning of the given idiom.

Cook the books

- Ans
- ☒ 1. To falsify financial records
 - ☒ 2. To be a good writer
 - ☒ 3. To write books on cooking
 - ☒ 4. To be a good editor

Question ID : 6549786138

Status : Answered

Chosen Option : 1

Q.4 In the given sentence, identify the segment which contains a grammatical error.

Doctors say that home isolation is far more effective than hospitalise in cases of mild infection.

- Ans
- ☒ 1. far more effective
 - ☒ 2. than hospitalise
 - ☒ 3. isolation is
 - ☒ 4. Doctors say that

Question ID : 6549788547

Status : Answered

Chosen Option : 2

Q.5 Select the most appropriate option to substitute the underlined segment in the given sentence. If there is no need to substitute it, select 'No substitution required'.

Sometimes the family liking to play a game together after dinner.

- Ans
- ☒ 1. Sometimes the family likes
 - ☒ 2. Sometime the family likes
 - ☒ 3. No substitution required
 - ☒ 4. Sometimes the family are like

Question ID : 6549786133

Status : Answered

Chosen Option : 1

Q.6 Select the most appropriate word to fill in the blank.

Have you thought about the _____ of the recent decision you took?

- Ans
- ☒ 1. conclusions
 - ☒ 2. complexes
 - ☒ 3. consequences
 - ☒ 4. concerns

Question ID : 6549786146

Status : Answered

Chosen Option : 3

Q.7 Given below are four jumbled sentences. Out of the given options, select the one that gives their correct order.

- A. On either side of the trunk there are a few scattered tufts of short grass.
- B. It is towards one of these fallen trees that I am now looking.
- C. A very violent cyclonic storm has struck the forest, uprooting a number of trees.
- D. The trunk of the tree is ripped apart and the branches are lying all around it.

- Ans
- ☒ 1. ABDC
 - ☒ 2. ADBC
 - ☒ 3. CBDA
 - ☒ 4. CDAB

Question ID : 6549788555

Status : Answered

Chosen Option : 4

Q.8 Select the most appropriate synonym of the given word.

Paranoid

- Ans  1. Impeccable
 2. Suspicious
 3. Insignificant
 4. Patronising

Question ID : 6549786144
Status : Not Answered
Chosen Option : --

Q.9 Select the INCORRECTLY spelt word.

- Ans  1. Endurance
 2. Tolerance
 3. Insistence
 4. Persistence

Question ID : 6549786139
Status : Answered
Chosen Option : 4

Q.10 Select the word which means the same as the group of words given.





One who has the power to do anything

- Ans  1. omnipresent
 2. multifaceted
 3. omnipotent
 4. multilingual

Question ID : 6549788566
Status : Answered
Chosen Option : 3

Q.11 Select the most appropriate word to fill in the blank.

The headmaster _____ on the stage and gave a short speech.

- Ans  1. prescribed
 2. appeared
 3. delighted
 4. remembered

Question ID : 6549788569
Status : Answered
Chosen Option : 2

Q.12 Select the most appropriate ANTONYM of the given word.

BRAVERY

- Ans
- ☒ 1. heroism
 - ☒ 2. strength
 - ☒ 3. cowardice
 - ☒ 4. courage

Question ID : 6549788559
Status : Answered
Chosen Option : 3

Q.13 Select the most appropriate synonym of the given word.

ABSOLUTE

- Ans
- ☒ 1. limited
 - ☒ 2. complete
 - ☒ 3. partial
 - ☒ 4. conditional

Question ID : 6549788567
Status : Answered
Chosen Option : 2

Q.14 Select the most appropriate ANTONYM of the given word.

Clandestine

- Ans
- ☒ 1. Heavy
 - ☒ 2. Honest
 - ☒ 3. Dressed
 - ☒ 4. Opaque

Question ID : 6549786136
Status : Not Answered
Chosen Option : --

Q.15 Select the option that can be used as a one-word substitute for the given group of words.

A person who presents a radio/television programme

- Ans
- ☒ 1. Idol
 - ☒ 2. Anchor
 - ☒ 3. Speaker
 - ☒ 4. Star

Question ID : 6549786141
Status : Answered
Chosen Option : 2

Q.16 Select the most appropriate option to substitute the underlined segment in the given sentence. If there is no need to substitute it, select 'No substitution'.

Had you not interfering in my affairs, I would have been in the US now.

- Ans
- ☒ 1. No substitution
 - ☒ 2. Had you not interfered
 - ☒ 3. Was you not interfere
 - ☒ 4. Have you not been interfering

Question ID : 6549788558

Status : Answered

Chosen Option : 2

Q.17 Sentences of a paragraph are given below in jumbled order. Arrange the sentences in the right order to form a meaningful and coherent paragraph.

- A. His father shifted his own ambitions to those of his son, providing him with models and support for his first exhibition at the age of 13.
- B. Pablo Picasso was the son of José Ruiz Blasco, a professor of drawing, and Maria Picasso López.
- C. From that point his ability to experiment with what he learned and to develop new expressive means quickly allowed him to surpass his father's abilities.
- D. His unusual adeptness for drawing began to manifest itself early, around the age of 10, when he became his father's pupil.

- Ans
- ☒ 1. BDCA
 - ☒ 2. DCAB
 - ☒ 3. BADC
 - ☒ 4. CDAB

Question ID : 6549786132

Status : Answered

Chosen Option : 1

Q.18 The following sentence has been divided into parts. One of them may contain an error. Select the part that contains the error from the given options. If you don't find any error, mark 'No error' as your answer.

The need today is for both sides / to introspect and re-examine the issue carefully / and resolve it amicably.

- Ans
- ☒ 1. to introspect and re-examine the issue carefully
 - ☒ 2. and resolve it amicably
 - ☒ 3. No error
 - ☒ 4. The need today is for both sides

Question ID : 6549786124

Status : Answered

Chosen Option : 4

Q.19 Select the INCORRECTLY spelt word.

- Ans
- ☒ 1. assimilate
 - ☒ 2. readable
 - ☒ 3. acquire
 - ☒ 4. acknowledge

Question ID : 6549788564

Status : Answered

Chosen Option : 4

Q.20 Select the correct indirect form of the given sentence.

My niece said, "I have decided to take coaching in badminton."

- Ans
- ☒ 1. My niece told me that she had decided to take coaching in badminton.
 - ☒ 2. My niece told that I have decided to take coaching in badminton.
 - ☒ 3. My niece said she is deciding to take coaching in badminton.
 - ☒ 4. My niece said she will decide to take coaching in badminton.

Question ID : 6549788546

Status : Answered

Chosen Option : 1

Comprehension:

In the following passage, some words have been deleted. Select the most appropriate option to fill in each blank.

Kanjirapally has the highest number of rainy days in Kerala. It receives the highest (1)_____ of summer rains, winter rains and northeast monsoons in Kerala, (2)_____ it one of the very few (3)_____ in India enjoying equatorial rainforest type climate, with no (4) _____ dry season. The well-distributed rainfall pattern of Kanjirapally is the (5)_____ reason for the phenomenon of high yield of latex from rubber plantations in and around the town.

SubQuestion No : 21

Q.21 Select the most appropriate option to fill in blank no.1.

- Ans
- ☒ 1. amount
 - ☒ 2. number
 - ☒ 3. expanse
 - ☒ 4. extent

Question ID : 6549786126

Status : Answered

Chosen Option : 1

Comprehension:

In the following passage, some words have been deleted. Select the most appropriate option to fill in each blank.

Kanjirapally has the highest number of rainy days in Kerala. It receives the highest (1)_____ of summer rains, winter rains and northeast monsoons in Kerala, (2)_____ it one of the very few (3)_____ in India enjoying equatorial rainforest type climate, with no (4) _____ dry season. The well-distributed rainfall pattern of Kanjirapally is the (5)_____ reason for the phenomenon of high yield of latex from rubber plantations in and around the town.

SubQuestion No : 22

Q.22 Select the most appropriate option to fill in blank no.2.

- Ans
- ☒ 1. make
 - ☒ 2. making
 - ☒ 3. made
 - ☒ 4. makes

Question ID : 6549786127

Status : Answered

Chosen Option : 2

Comprehension:

In the following passage, some words have been deleted. Select the most appropriate option to fill in each blank.

Kanjirapally has the highest number of rainy days in Kerala. It receives the highest (1)_____ of summer rains, winter rains and northeast monsoons in Kerala, (2)_____ it one of the very few (3)_____ in India enjoying equatorial rainforest type climate, with no (4) _____ dry season. The well-distributed rainfall pattern of Kanjirapally is the (5)_____ reason for the phenomenon of high yield of latex from rubber plantations in and around the town.

SubQuestion No : 23

Q.23 Select the most appropriate option to fill in blank no.3.

- Ans
- ☒ 1. space
 - ☒ 2. places
 - ☒ 3. spot
 - ☒ 4. place

Question ID : 6549786128

Status : Answered

Chosen Option : 2

Comprehension:

In the following passage, some words have been deleted. Select the most appropriate option to fill in each blank.

Kanjirapally has the highest number of rainy days in Kerala. It receives the highest (1)_____ of summer rains, winter rains and northeast monsoons in Kerala, (2)_____ it one of the very few (3)_____ in India enjoying equatorial rainforest type climate, with no (4) _____ dry season. The well-distributed rainfall pattern of Kanjirapally is the (5)_____ reason for the phenomenon of high yield of latex from rubber plantations in and around the town.

SubQuestion No : 24

Q.24 Select the most appropriate option to fill in blank no.4.

- Ans
- ☒ 1. individual
 - ☒ 2. divergent
 - ☒ 3. diverse
 - ☒ 4. distinct

Question ID : 6549786129

Status : Answered

Chosen Option : 4

Comprehension:

In the following passage, some words have been deleted. Select the most appropriate option to fill in each blank.

Kanjirapally has the highest number of rainy days in Kerala. It receives the highest (1)_____ of summer rains, winter rains and northeast monsoons in Kerala, (2)_____ it one of the very few (3)_____ in India enjoying equatorial rainforest type climate, with no (4) _____ dry season. The well-distributed rainfall pattern of Kanjirapally is the (5)_____ reason for the phenomenon of high yield of latex from rubber plantations in and around the town.

SubQuestion No : 25

Q.25 Select the most appropriate option to fill in blank no.5.

- Ans
- ☒ 1. insignificant
 - ☒ 2. primary
 - ☒ 3. minor
 - ☒ 4. initial

Question ID : 6549786130

Status : Answered

Chosen Option : 2

Section : General Intelligence

Q.1 Select the option in which the numbers are related in the same way as are the numbers of the following set.

28 : 50 : 94

- Ans
- ☒ 1. 22 : 37 : 67
 - ☒ 2. 41 : 77 : 149
 - ☒ 3. 19 : 40 : 82
 - ☒ 4. 36 : 66 : 126

Question ID : 6549786150

Status : Answered

Chosen Option : 4

Q.2 Select the number from among the given options that can replace the question mark (?) in the following series.

8, 8, 11, 11, 14, 14, ?


- Ans
- ☐ 1. 22
 - ☐ 2. 14
 - ☐ 3. 18
 - ☒ 4. 17

Question ID : 6549786152

Status : Answered

Chosen Option : 4

Q.3 Find the number of triangles in the given figure.



- Ans
- ☐ 1. 26
 - ☐ 2. 22
 - ☐ 3. 24
 - ☒ 4. 34

Question ID : 6549788591

Status : Answered

Chosen Option : 3

Q.4 Read the given statements and conclusions carefully. Assuming that the information given in the statements is true, even if it appears to be at variance with commonly known facts, decide which of the given conclusions logically follow(s) from the statements.

Statements:

All rats are cats.

Some cats are not dogs.

Conclusions:

I. Some dogs are not rats.

II. Some dogs are rats.

Ans



1. Both conclusions I and II follow.



2. Only conclusion II follows.



3. Only conclusion I follows.



4. Neither conclusion I nor II follows.

Question ID : **6549786164**

Status : **Answered**

Chosen Option : **2**

Q.5 Select the word-pair in which the two words are related in the same way as are the two words in the given word-pair.

Mathematics : Teacher

Ans



1. Hockey : Coach



2. Science : Researcher



3. Student : Tutor



4. Story : Book

Question ID : **6549788585**

Status : **Answered**

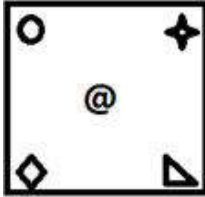
Chosen Option : **2**

Q.6 Select the figure that will come next in the following figure series.




Ans

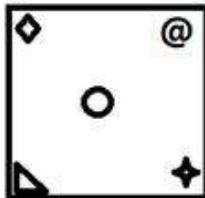
✓ 1.



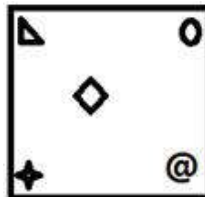
✗ 2.



✗ 3.



✗ 4.



Question ID : 6549788590

Status : Answered

Chosen Option : 1

Q.7 Select the combination of letters that when sequentially placed in the blanks of the given series will complete the series.

s _ t m s r _ m _ r t _ s _ t m

Ans

✓ 1. r, t, s, m, r

✗ 2. r, t, r, m, s

✗ 3. r, s, m, r, t

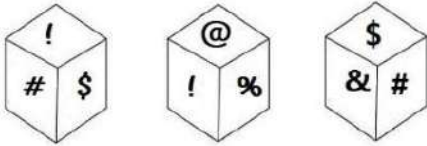
✗ 4. r, s, t, r, m

Question ID : 6549787775

Status : Answered

Chosen Option : 1

Q.8 Three different positions of the same dice are shown. Which symbol is on the face opposite to the face having the symbol '!'?



- Ans
- ☒ 1. &
 - ☐ 2. %
 - ☐ 3. #
 - ☐ 4. \$

Question ID : 6549788589
Status : Answered
Chosen Option : 1

Q.9 Four words have been given, out of which three are alike in some manner and one is different. Select the word that is different.

- Ans
- ☐ 1. Steel
 - ☐ 2. Brass
 - ☒ 3. Nickel
 - ☐ 4. Bronze

Question ID : 6549786163
Status : Answered
Chosen Option : 3

Q.10 The cost of 5 pens and 12 pencils is ₹45. What would be the cost for 20 pens and 48 pencils?

- Ans
- ☒ 1. ₹180
 - ☐ 2. ₹210
 - ☐ 3. ₹135
 - ☐ 4. ₹235

Question ID : 6549788571
Status : Answered
Chosen Option : 1

Q.11 Select the set in which the numbers are related in the same way as are the numbers of the following set.

(313, 2732, 98211)

- Ans
- ☐ 1. (103, 7341, 92501)
 - ☒ 2. (601, 9401, 71427)
 - ☐ 3. (201, 4532, 65712)
 - ☐ 4. (301, 6543, 94263)

Question ID : 6549788575
Status : Not Answered
Chosen Option : --

Q.12 Which of the following numbers does NOT belong to the group?

423, 171, 801, 900, 701

- Ans
- ☒ 1. 171
 - ☒ 2. 701
 - ☒ 3. 801
 - ☒ 4. 423

Question ID : 6549788577

Status : Not Answered

Chosen Option : --

Q.13 Select the option that is embedded in the given figure (rotation is NOT allowed).



Ans

- ☒ 1.
- ☒ 2.
- ☒ 3.
- ☒ 4.

Question ID : 6549786168

Status : Answered

Chosen Option : 2

Q.14 Three of the following four letter-clusters are alike in a certain way and one is different. Select the odd one.

- Ans
- ☒ 1. YTSR
 - ☒ 2. AEKM
 - ☒ 3. IMPV
 - ☒ 4. JMSU

Question ID : 6549788586

Status : Not Answered

Chosen Option : --

Q.15 Select the option that is related to the third number in the same way as the second number is related to the first number.

166 : 415 :: 256 : ?

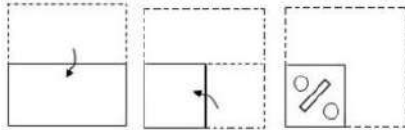
- Ans ☒ 1. 640
☒ 2. 549
☒ 3. 428
☒ 4. 597

Question ID : 6549788573

Status : Not Answered

Chosen Option : --

Q.16 The sequence of folding a piece of paper and the manner in which the folded paper has been cut are shown in the following figures. How would this paper look when unfolded?



Ans

- ☒ 1.
- ☒ 2.
- ☒ 3.
- ☒ 4.

Question ID : 6549786169

Status : Answered

Chosen Option : 2

Q.17 M's wife is N's daughter-in-law. P is the husband of O, who is the sister of M. How is P related to N?

- Ans
- ☐ 1. Brother
 - ☐ 2. Cousin
 - ☐ 3. Nephew
 - ☒ 4. Son-in-law

Question ID : 6549789767

Status : Answered

Chosen Option : 4

Q.18 If in a code language, ORGAN is coded as 17141518 and FINGER is coded as 56791418, then how will you code NECK?

- Ans
- ☐ 1. 113497
 - ☐ 2. 248741
 - ☒ 3. 351114
 - ☐ 4. 532761

Question ID : 6549788580

Status : Not Answered

Chosen Option : --

Q.19 In a certain code language, HUSBAND is written as ABDHNSU. How will HOUSEWIFE be written in that language?

- Ans
- ☐ 1. EFIWESUOH
 - ☐ 2. EHEFOIUWS
 - ☒ 3. EEFHIOSUW
 - ☐ 4. ESEFUOIWH

Question ID : 6549786155

Status : Answered

Chosen Option : 3

Q.20 Select the correct mirror image of the given figure when the mirror is placed at the right side.



Ans

☒ 1.



☒ 2.



☒ 3.



☒ 4.



Question ID : 6549786170

Status : Answered

Chosen Option : 2

Q.21 Which two digits and signs need to be interchanged so as to balance the given equation?

$$75 - 13 + 19 \times 8 \div 5 = 93$$

Ans

☒ 1. 7 and 9; + and \times

☒ 2. 5 and 8; - and \div

☒ 3. 3 and 5; - and \times

☒ 4. 8 and 3; \times and \div

Question ID : 6549786148

Status : Answered

Chosen Option : 2

Q.22 Select the option that is related to the third term in the same way as the second term is related to the first term.

SHORTLY : OHSYLTR :: WALKING : ?

- Ans
- ☒ 1. LAWNIKG
 - ☒ 2. KLAWGNI
 - ☒ 3. AWKLNIG
 - ☒ 4. LAWGNIG

Question ID : 6549786157
Status : Not Answered
Chosen Option : --

Q.23 Select the option that is related to the third word in the same way as the second word is related to the first word.

Wakeful : Sleepless :: Sitting : ?

- Ans
- ☒ 1. Idle Resting
 - ☒ 2. Situated
 - ☒ 3. Sedentary
 - ☒ 4. Steadily

Question ID : 6549786158
Status : Answered
Chosen Option : 4

Q.24 Arrange the following words in a meaningful sequence.

- 1. Manager
- 2. Worker
- 3. General manager
- 4. Supervisor
- 5. Owner

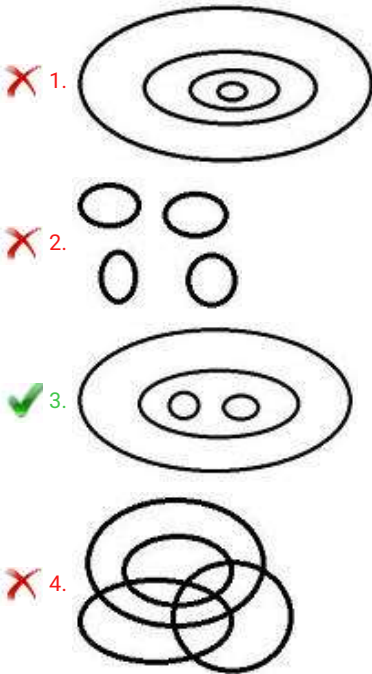
- Ans
- ☒ 1. 3, 5, 4, 1, 2
 - ☒ 2. 1, 3, 5, 2, 4
 - ☒ 3. 4, 3, 2, 1, 5
 - ☒ 4. 5, 3, 1, 4, 2

Question ID : 6549788578
Status : Answered
Chosen Option : 4

Q.25 Select the Venn diagram that best represents the relationship between the following four classes.

Books, Library, Chapter, Index

Ans



Question ID : 6549788595

Status : Answered

Chosen Option : 1

Section : Quantitative Aptitude

Q.1 If $71^{83} + 73^{83}$ is divided by 36, the remainder is:

Ans

1. 0
2. 8
3. 9
4. 13

Question ID : 6549788612

Status : Answered

Chosen Option : 1

Q.2 A shopkeeper marks his goods at a price such that after giving a discount of 20 % , he gains 25 % . If the cost price of the article is ₹560, what will be its marked price (in ₹)?

Ans

1. 914
2. 875
3. 856
4. 765

Question ID : 6549786176

Status : Answered

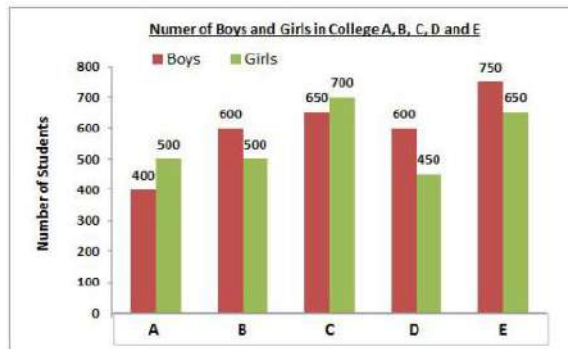
Chosen Option : 2

Q.3 If $\frac{\cot\theta + \cos\theta}{\cot\theta - \cos\theta} = \frac{k+1}{1-k}$, $k \neq 1$, then k is equal to:

- Ans ☒ 1. $\sin\theta$
☒ 2. $\operatorname{cosec}\theta$
☒ 3. $\cos\theta$
☒ 4. $\sec\theta$

Question ID : 6549786190
 Status : Not Answered
 Chosen Option : --

Q.4 Study the given bargraph and answer the question that follows.



What is the ratio of the boys taken together in colleges A, B and C to the girls taken together in all 5 colleges?

- Ans ☒ 1. 35 : 61
☒ 2. 33 : 56
☒ 3. 37 : 59
☒ 4. 31 : 56

Question ID : 6549786193
 Status : Answered
 Chosen Option : 2

Q.5 40 persons take 6 days to complete a certain task, working 10 hours a day. How many hours a day will be sufficient for 30 persons to complete the same task in 10 days?

- Ans ☒ 1. 9
☒ 2. 8
☒ 3. 10
☒ 4. 6

Question ID : 6549786172
 Status : Answered
 Chosen Option : 2

Q.6 If $\sqrt{13} \sin \theta = 2$, then the value of $\frac{3 \tan \theta + \sqrt{13} \sin \theta}{\sqrt{13} \cos \theta - 3 \tan \theta}$ is:

- Ans
- ☒ 1. 5
 - ☐ 2. 4
 - ☐ 3. 3
 - ☐ 4. $\frac{1}{2}$

Question ID : 6549788615

Status : Answered

Chosen Option : 2

Q.7 If $\cos^2 \theta - \sin^2 \theta - 3 \cos \theta + 2 = 0$, $0^\circ < \theta < 90^\circ$, then what will be the value of $\sec \theta - \cos \theta$?

- Ans
- ☐ 1. $\frac{4}{3}$
 - ☐ 2. $\frac{1}{2}$
 - ☒ 3. $\frac{3}{2}$
 - ☐ 4. $\frac{2}{3}$

Question ID : 6549786192

Status : Answered

Chosen Option : 3

Q.8 If $x + 2y = 19$ and $x^3 + 8y^3 = 361$, then xy is equal to:

- Ans
- ☒ 1. 57
 - ☐ 2. 56
 - ☐ 3. 55
 - ☐ 4. 58

Question ID : 6549788609

Status : Answered

Chosen Option : 1

Q.9 The perimeter of a right-angled triangle whose sides that make right angles are 15 cm and 20 cm is:

- Ans
- ☒ 1. 60 cm
 - ☐ 2. 50 cm
 - ☐ 3. 70 cm
 - ☐ 4. 40 cm

Question ID : 6549788607

Status : Answered

Chosen Option : 1

Q.10 The compound interest on a certain sum of money for 3 years, compounded annually, at a rate of interest of 10% per annum is ₹1,324. The sum is:

- Ans**
- ☒ 1. ₹5,500
 - ☒ 2. ₹4,500
 - ☒ 3. ₹4,000
 - ☒ 4. ₹5,000

Question ID : 6549788604

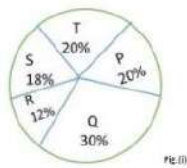
Status : Not Answered

Chosen Option : --

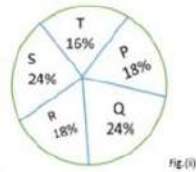
Q.11 Study the given pie charts and answer the question that follows.

The pie charts represent the distribution of candidates who were enrolled for Bank Clerical Examination Fig (i) and the candidates (out of those enrolled) who passed the examination Fig (ii) in five different institutes P, Q, R, S and T.

(I) Total number of candidates enrolled in five different institutes = 5500



(II) Total number of candidates who passed the examination from five institutes = 3300



The percentage of the candidates who passed to the number of candidates enrolled for institutes P and T together is:

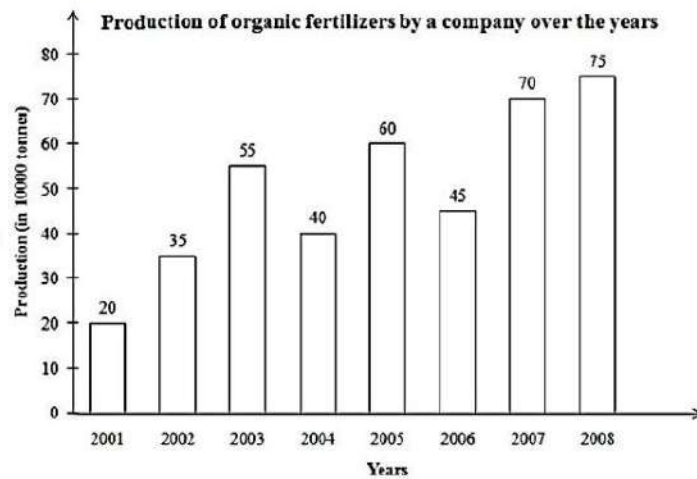
- Ans**
- ☒ 1. 54%
 - ☒ 2. 51%
 - ☒ 3. 50%
 - ☒ 4. 52%

Question ID : 6549787406

Status : Answered

Chosen Option : 2

Q.12 Study the given bar graph and answer the question that follows.



In which year was the percentage increase in production as compared to the previous year, the maximum?

- Ans ☒ 1. 2002
☒ 2. 2005
☒ 3. 2007
☒ 4. 2008

Question ID : 6549788620

Status : Answered

Chosen Option : 1

Q.13 X sells an article to Y at 12% loss. Y sells it to Z at 9% profit. If Z pays ₹21,582 for it, then at what price (in ₹) was the article purchased by X?

- Ans ☒ 1. 19,800
☒ 2. 23,275
☒ 3. 22,500
☒ 4. 21,000

Question ID : 6549786178

Status : Answered

Chosen Option : 3

Q.14 If $(3x + 2y)^3 + (3x - 2y)^3 = 3kx(3x^2 + 4y^2)$, then the value of k will be:

- Ans ☒ 1. 18
☒ 2. 9
☒ 3. 3
☒ 4. 6

Question ID : 6549786186

Status : Not Answered

Chosen Option : --

Q.15 The value of $42 \div 10 - \left(\frac{7}{4} \times \frac{1}{3}\right)$ of $\frac{6}{5} + \frac{16}{3} \times \frac{9}{10} - \left(\frac{1}{6} \div \frac{1}{36}\right)$ is:

- Ans
- ☒ 1. 1.7
 - ☒ 2. 2.9
 - ☒ 3. 1.5
 - ☒ 4. 2.3

Question ID : 6549786189
Status : Answered
Chosen Option : 4

Q.16 A solid cube having volume 46656 cm^3 is cut into 27 cubes of equal volume. The surface area (in cm^2) of the smaller cubes is:

- Ans
- ☒ 1. 864
 - ☒ 2. 756
 - ☒ 3. 936
 - ☒ 4. 921

Question ID : 6549786174
Status : Not Answered
Chosen Option : --

Q.17 If $27x^3 - 64y^3 = (Ax + By)(Cx^2 + Dy^2 - Exy)$, then value of $(A - B + C - D + E)$ will be:

- Ans
- ☒ 1. -12
 - ☒ 2. 18
 - ☒ 3. 15
 - ☒ 4. -20

Question ID : 6549786187
Status : Answered
Chosen Option : 1

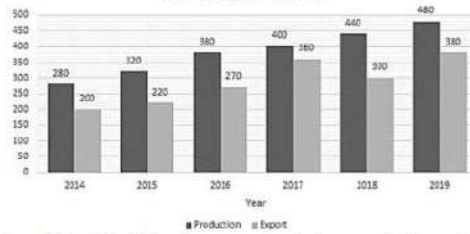
Q.18 A circle touches the side BC of $\triangle ABC$ at P and also touches AB and AC produced at Q and R , respectively. If the perimeter of $\triangle ABC = 14.1 \text{ cm}$, then the length (in cm) of AQ will be:

- Ans
- ☒ 1. 10.3
 - ☒ 2. 7.05
 - ☒ 3. 6.25
 - ☒ 4. 9.15

Question ID : 6549786182
Status : Not Answered
Chosen Option : --

Q.19 Study the given graph and answer the question that follows.

Production and Export of sugar (in million kg) by country ABC during 2014 to 2019



For which of the following years was the increase in the production of sugar as compared to that in its preceding year between 8% and 10%?

- Ans**
- ☒ 1. 2018
 - ☒ 2. 2017
 - ☒ 3. 2019
 - ☒ 4. 2015

Question ID : 6549788013

Status : Not Answered

Chosen Option : --

Q.20 In a proportion, the product of the first and fourth terms is 70 and that of the second and third terms is $3.5y$. The value of y is:

- Ans**
- ☒ 1. 17
 - ☒ 2. 20
 - ☒ 3. 15
 - ☒ 4. 22

Question ID : 6549788603

Status : Answered

Chosen Option : 2

Q.21 Two circles touch each other externally. The distance between their centres is 14 cm. If the radius of one circle is 8 cm, then the radius of the other circle is:

- Ans**
- ☒ 1. 7 cm
 - ☒ 2. 6 cm
 - ☒ 3. 5 cm
 - ☒ 4. 8 cm

Question ID : 6549788605

Status : Answered

Chosen Option : 2

Q.22 The average of 42 numbers is 37. The average of the first 26 numbers is 32, and the average of the last 17 numbers is 44. The 26th number is:

- Ans
- ☒ 1. 28
 - ☒ 2. 27
 - ☒ 3. 26
 - ☒ 4. 25

Question ID : 6549788599

Status : Not Answered

Chosen Option : --

Q.23 Dimple is travelling at a speed of 90 km per hour on a highway, while Sachin is travelling at a speed of 108 km per hour. What is the difference in their speeds, in metres per second?

- Ans
- ☒ 1. 5
 - ☒ 2. 3
 - ☒ 3. 4
 - ☒ 4. 6

Question ID : 6549788597

Status : Not Answered

Chosen Option : --

Q.24 In $\triangle ABC$, D and E are the points on the sides AB and AC , respectively such that $\angle AED = \angle ABC$. If $AE = 6$ cm, $BD = 2$ cm, $DE = 3$ cm and $BC = 5$ cm, then $(AB + AC)$ is equal to:

- Ans
- ☒ 1. $\frac{86}{3}$ cm
 - ☒ 2. $\frac{49}{3}$ cm
 - ☒ 3. $\frac{50}{3}$ cm
 - ☒ 4. $\frac{70}{3}$ cm

Question ID : 6549786184

Status : Not Answered

Chosen Option : --

Q.25 Gaurav earns ₹800 per day. After some weeks, he earns ₹960 per day. What is the percentage increase in his daily earnings?

- Ans
- ☒ 1. 18%
 - ☒ 2. 20%
 - ☒ 3. 16%
 - ☒ 4. 14%

Question ID : 6549788601

Status : Not Answered

Chosen Option : --

Q.1 In which year did Gongsu Ugyen Wangchuck become the first monarch of Bhutan?

- Ans
- ☐ 1. 1901
 - ☐ 2. 1910
 - ☐ 3. 1905
 - ☒ 4. 1907

Question ID : 6549788638

Status : Not Answered

Chosen Option : --

Q.2 Who among the following is the youngest test debutant in the history of cricket as on May 2020?

- Ans
- ☐ 1. Mushtaq Mohammad
 - ☐ 2. Danish Kaneria
 - ☒ 3. Hasan Raza
 - ☐ 4. Mohammad Sharif

Question ID : 6549788643

Status : Answered

Chosen Option : 1

Q.3 Which of the following state governments approved the Freedom of Religion Bill 2020 in December 2020?

- Ans
- ☐ 1. Telangana
 - ☐ 2. Rajasthan
 - ☒ 3. Madhya Pradesh
 - ☐ 4. Uttar Pradesh

Question ID : 6549786203

Status : Answered

Chosen Option : 4

Q.4 Bangladesh was a part of Pakistan from ____.

- Ans
- ☐ 1. 1947 - 1973
 - ☐ 2. 1948 - 1975
 - ☐ 3. 1948 - 1979
 - ☒ 4. 1947 - 1971

Question ID : 6549788641

Status : Answered

Chosen Option : 4

Q.5 Which of the following is a pass on the Pir Panjal Range?

- Ans
- ☐ 1. Fotu La
 - ☐ 2. Zoji La
 - ☒ 3. Banihal
 - ☐ 4. Khardung La

Question ID : **6549786209**
Status : **Not Answered**
Chosen Option : --

Q.6 Which of the following is a primary storage device in a personal computer?

- Ans
- ☐ 1. Hard disk
 - ☐ 2. Compact disk
 - ☐ 3. Pen drive
 - ☒ 4. Random-access memory

Question ID : **6549786198**
Status : **Answered**
Chosen Option : 2

Q.7 Which one of the following is the largest valley in Asia?

- Ans
- ☐ 1. Alai valley
 - ☒ 2. Dang valley
 - ☐ 3. Chuy valley
 - ☐ 4. Fergana valley

Question ID : **6549788636**
Status : **Answered**
Chosen Option : 1

Q.8 In which Olympic Games did Shabana Akhtar, the first female athlete to represent Pakistan, participate?

- Ans
- ☐ 1. Beijing Olympics
 - ☒ 2. Atlanta Olympics
 - ☐ 3. Sydney Olympics
 - ☐ 4. Barcelona Olympics

Question ID : **6549788645**
Status : **Not Answered**
Chosen Option : --

Q.9 In which of the following years did the Santhal Revolt take place?

- Ans
- ☐ 1. 1848-49
 - ☐ 2. 1874-75
 - ☐ 3. 1825-26
 - ☒ 4. 1855-56

Question ID : 6549786213

Status : Not Answered

Chosen Option : --

Q.10 Which Indian Cabinet Minister was appointed as Executive Board Chairman of World Health Organization (WHO) in May 2020?

- Ans
- ☐ 1. Smriti Irani
 - ☐ 2. Nirmala Sitharaman
 - ☐ 3. Piyush Goyal
 - ☒ 4. Harsh Vardhan

Question ID : 6549788626

Status : Answered

Chosen Option : 4

Q.11 Who among the following boxers won a gold medal in the 57 kg category at the Cologne Boxing World Cup held at Germany in December 2020?

- Ans
- ☐ 1. Simranjit Kaur Baath
 - ☐ 2. Pooja Rani
 - ☐ 3. Sakshi Choudhary
 - ☒ 4. Manisha Moun

Question ID : 6549786220

Status : Not Answered

Chosen Option : --

Q.12 'Puanchei' is the traditional dress of ____.

- Ans
- ☐ 1. Karnataka
 - ☒ 2. Mizoram
 - ☐ 3. Goa
 - ☐ 4. Sikkim

Question ID : 6549788623

Status : Answered

Chosen Option : 2

Q.13 The concept of fiscal policy is based fundamentally on the ideas of _____.

Ans

- ☒ 1. Warren Buffett
- ☒ 2. Elinor Ostrom
- ☒ 3. John Maynard Keynes
- ☒ 4. Milton Friedman

Question ID : 6549786205

Status : Not Answered

Chosen Option : --

Q.14 What is the currency of Myanmar?

Ans

- ☒ 1. Myanmar Riel
- ☒ 2. Myanmar Dong
- ☒ 3. Myanmar Kyat
- ☒ 4. Myanmar Ringgit

Question ID : 6549788628

Status : Answered

Chosen Option : 3

Q.15 Due to which of the following reactions are household bleaching agents using phosphorous, sulphur and chlorine formed?

Ans

- ☒ 1. Decomposition reaction
- ☒ 2. Displacement reaction
- ☒ 3. Combination reaction
- ☒ 4. Disproportionation reaction

Question ID : 6549786206

Status : Not Answered

Chosen Option : --

Q.16 Which Indian Information Technology company won the 2020 'IBM Beacon Award'?

Ans

- ☒ 1. Tata Consultancy Services
- ☒ 2. Wipro
- ☒ 3. Tech Mahindra
- ☒ 4. Infosys

Question ID : 6549788640

Status : Not Answered

Chosen Option : --

Q.17 A major portion of 'Sufed Koh' mountain range lies in _____.

- Ans ☒ 1. Pakistan
☒ 2. China
☒ 3. India
☒ 4. Myanmar

Question ID : 6549788635
Status : Not Answered
Chosen Option : --

Q.18 Which natural port is located along the west coast of India?

- Ans ☒ 1. Visakhapatnam
☒ 2. Haldia
☒ 3. Chennai
☒ 4. Marmagao

Question ID : 6549786210
Status : Answered
Chosen Option : 4

Q.19 Which day in May 2020 was observed as 'International Tea Day'?

- Ans ☒ 1. 21 May
☒ 2. 1 May
☒ 3. 15 May
☒ 4. 23 May

Question ID : 6549788625
Status : Not Answered
Chosen Option : --

Q.20 Which of the following is a polar molecule?

- Ans ☒ 1. Carbon tetrachloride
☒ 2. Carbon dioxide
☒ 3. Benzene
☒ 4. Water

Question ID : 6549786208
Status : Answered
Chosen Option : 4

Q.21 Which one of the following features is NOT shown by metals?

- Ans ☒ 1. Looks dull
☐ 2. Can be pounded into shape
☐ 3. Can be made into a wire
☐ 4. Conducts heat

Question ID : 6549788631
Status : Answered
Chosen Option : 1

Q.22 Who authored the book 'Jinnah: His Successes, Failures and Role in History'?

- Ans ☐ 1. Khushwant Singh
☐ 2. Intizar Husain
☒ 3. Ishtiaq Ahmed
☐ 4. Ishrat Husain

Question ID : 6549786215
Status : Not Answered
Chosen Option : --

Q.23 To which of the following Gharanas did the Hindustani classical vocalist Ustad Bade Ghulam Ali Khan belong?

- Ans ☒ 1. Patiala Gharana
☐ 2. Jaipur-Atrauli Gharana
☐ 3. Kirana Gharana
☐ 4. Gwalior Gharana

Question ID : 6549786200
Status : Not Answered
Chosen Option : --

Q.24 Which one of the following is a computer virus?

- Ans ☐ 1. Penguin
☐ 2. Panda
☐ 3. Spider
☒ 4. Creeper

Question ID : 6549788621
Status : Not Answered
Chosen Option : --

Q.25 Which was the first part of India to hold an election based on universal adult franchise?

Ans



1. Assam



2. Tripura



3. Manipur



4. Bihar

Question ID : **6549786218**

Status : **Not Answered**

Chosen Option : --

Combined Higher Secondary Level Examination 2020 (Tier-I)

Roll Number	Join Telegram: HaryanaJobs.in
Candidate Name	
Venue Name	
Exam Date	09/08/2021
Exam Time	12:00 PM - 1:00 PM
Subject	Combined Higher Secondary Level Exam 2020

Section : English Language

Q.1 Sentences of a paragraph are given below in jumbled order. Arrange the sentences in the right order to form a meaningful and coherent paragraph.

- A. That is why they are considered the best indoor plants to keep at homes and offices.
- B. The indoor bonsai plants enhance the aesthetic appeal of the space and offer multiple health and psychological benefits.
- C. Bonsai is an important part of Japanese culture dating back to the 14th century.
- D. It is the art of cultivating small trees within a container that take the shape and scale of full-size trees.

- Ans
- ☒ 1. ABCD
 - ☒ 2. DCBA
 - ☒ 3. CDBA
 - ☒ 4. CBAD

Question ID : 6549787141

Status : Answered

Chosen Option : 3

Q.2 Select the option that expresses the given sentence in direct speech.

The plumber told Ranjit that he had fixed the leaking tap.

- Ans
- ☒ 1. The plumber told to Ranjit, "He had fixed the leaking tap."
 - ☒ 2. The plumber told Ranjit, "Had he fixed the leaking tap?"
 - ☒ 3. The plumber said to Ranjit, "You had fix the leaking tap."
 - ☒ 4. The plumber said to Ranjit, "I have fixed the leaking tap."

Question ID : 6549787132

Status : Answered

Chosen Option : 3

Q.3 Select the most appropriate option to substitute the underlined segment in the given sentence. If there is no need to substitute it, select 'No substitution required'.

A heavy fine will be inflicted with them if they do not pay the taxes in time.

- Ans
- ☐ 1. will be inflicted for them
 - ☐ 2. will be inflicted of them
 - ☐ 3. No substitution required
 - ☒ 4. will be inflicted on them

Question ID : 6549787144

Status : Answered

Chosen Option : 4

Q.4 The following sentence has been divided into parts. One of them may contain an error. Select the part that contains the error from the given options. If you don't find any error, mark 'No error' as your answer.

She managed the company / so well that it is made / a huge profit that year.

- Ans
- ☐ 1. a huge profit that year
 - ☒ 2. so well that it is made
 - ☐ 3. She managed the company
 - ☐ 4. No error

Question ID : 6549787133

Status : Answered

Chosen Option : 2

Q.5 Select the correct passive form of the given sentence.

How much will they pay you?

- Ans
- ☐ 1. How much will they be paying?
 - ☒ 2. How much will you be paid by them?
 - ☐ 3. Payment will be done by them?
 - ☐ 4. They will have paid you how much?

Question ID : 6549789151

Status : Answered

Chosen Option : 2

Q.6 Select the option that will improve the underlined segment in the given sentence. In case no improvement is needed, select 'No improvement'

According to J Krishnamurti, education is not about having a career but about being able to look, observation and listen.

- Ans
- ☐ 1. observer
 - ☐ 2. observant
 - ☒ 3. observe
 - ☐ 4. No improvement

Question ID : 6549789163

Status : Answered

Chosen Option : 3

Q.7 Select the most appropriate meaning of the given idiom.

Poke one's nose

- Ans
- ☒ 1. Not be careful about one's health
 - ☒ 2. Interfere or meddle
 - ☒ 3. Do unhygienic things
 - ☒ 4. Tease or irritate

Question ID : 6549787147
Status : Answered
Chosen Option : 4

Q.8 Select the INCORRECTLY spelt word.

- Ans
- ☒ 1. Multinational
 - ☒ 2. Business
 - ☒ 3. Conglomerate
 - ☒ 4. Corporation

Question ID : 6549787150
Status : Answered
Chosen Option : 3

Q.9 Select the most appropriate word to fill in the blank.

The kite was stuck so high on the tree that it was _____ the reach of the boys.

- Ans
- ☒ 1. below
 - ☒ 2. beneath
 - ☒ 3. beside
 - ☒ 4. beyond

Question ID : 6549787155
Status : Answered
Chosen Option : 4

Q.10 Select the most appropriate synonym of the given word.

Allege

- Ans
- ☒ 1. Soothe
 - ☒ 2. Placate
 - ☒ 3. Charge
 - ☒ 4. Appease

Question ID : 6549787153
Status : Answered
Chosen Option : 3

Q.11 Select the most appropriate ANTONYM of the given word.

Drab

- Ans
- ☒ 1. Tiring
 - ☒ 2. Dry
 - ☒ 3. Boring
 - ☒ 4. Bright

Question ID : 6549787145
Status : Answered
Chosen Option : 4

Q.12 Select the most appropriate synonym of the given word.

CLEAN

- Ans
- ☒ 1. shy
 - ☒ 2. honest
 - ☒ 3. talkative
 - ☒ 4. tall

Question ID : 6549789174
Status : Answered
Chosen Option : 2

Q.13 The following sentence has been split into four segments. Identify the segment which contains a grammatical error.

He will be leaving / home at 8 a.m. / to beating / the office rush hour.

- Ans
- ☒ 1. home at 8 a.m.
 - ☒ 2. the office rush hour
 - ☒ 3. to beating
 - ☒ 4. He will be leaving

Question ID : 6549789154
Status : Answered
Chosen Option : 3

Q.14 Select the option that can be used as a one-word substitute for the given group of words.

The nest of a squirrel, typically in the form of a mass of twigs in a tree

- Ans
- ☒ 1. Hole
 - ☒ 2. Burrow
 - ☒ 3. Lair
 - ☒ 4. Drey

Question ID : 6549787152
Status : Answered
Chosen Option : 2

Q.15 Select the INCORRECTLY spelt word.

- Ans
- ☒ 1. spurious
 - ☒ 2. conscentious
 - ☒ 3. defamation
 - ☒ 4. condemnation

Question ID : 6549789169
Status : Answered
Chosen Option : 4

Q.16 Select the most appropriate meaning of the given idiom.

A fire in someone's belly

- Ans
- ☒ 1. one who is energetic and enthusiastic about something
 - ☒ 2. one who is rich and powerful and exploits the poor
 - ☒ 3. one who comes from a middle class background
 - ☒ 4. one who continues to work without wanting a reward

Question ID : 6549789168
Status : Answered
Chosen Option : 1

Q.17 Select the most appropriate ANTONYM of the given word.

DISJOINTED

- Ans
- ☒ 1. abrupt
 - ☒ 2. soft
 - ☒ 3. connected
 - ☒ 4. sharp

Question ID : 6549789166
Status : Answered
Chosen Option : 3

Q.18 Select the most appropriate word to fill in the blank.

A good teacher is the one who can explain the most complex subjects in a _____ way.

- Ans
- ☒ 1. lengthy
 - ☒ 2. straightforward
 - ☒ 3. distracted
 - ☒ 4. roundabout

Question ID : 6549789176
Status : Answered
Chosen Option : 2

Q.19 Examine the four jumbled sentences. Out of the given options, pick the one that gives their correct order.

- A. They can travel to the airport by personal vehicle or registered cabs only.
- B. Finally, all passengers are advised to strictly follow social distancing markers.
- C. According to the Government guidelines, air travel is declared open from May 2020 for passengers.
- D. Once there, they can walk in through the Entry Gates, which shall be kept open.

- Ans
- ☒ 1. ACBD
 - ☒ 2. DCAB
 - ☒ 3. CADB
 - ☒ 4. BCAD

Question ID : 6549789162
Status : Answered
Chosen Option : 3

Q.20 Select the word which means the same as the group of words given.

A sentimental longing for a time in the past

- Ans
- ☒ 1. sepia
 - ☒ 2. myopia
 - ☒ 3. nostalgia
 - ☒ 4. dystopia

Question ID : 6549789171
Status : Not Answered
Chosen Option : --

Comprehension:

In the following passage, some words have been deleted. Fill in the blanks with the help of the alternatives given. Select the most appropriate option for each blank.

According to Harari, a leading thinker, we are all busy (1) _____ a fantasy self online. It is the age of Facebook and Instagram, wherein (2) _____ are busy creating perfect stories about ourselves. For example, pictures (3) _____ perfect holidays never show the stress of traffic snarls and a host of (4) _____ problems faced. We soon begin to believe in this perfect online self to be (5) _____ real one.

SubQuestion No : 21

Q.21 Select the most appropriate option for blank No. 1.

- Ans
- ☒ 1. creation
 - ☒ 2. creating
 - ☒ 3. creates
 - ☒ 4. creative

Question ID : 6549789156
Status : Answered
Chosen Option : 2

Comprehension:

In the following passage, some words have been deleted. Fill in the blanks with the help of the alternatives given. Select the most appropriate option for each blank.

According to Harari, a leading thinker, we are all busy (1) _____ a fantasy self online. It is the age of Facebook and Instagram, wherein (2) _____ are busy creating perfect stories about ourselves. For example, pictures (3) _____ perfect holidays never show the stress of traffic snarls and a host of (4) _____ problems faced. We soon begin to believe in this perfect online self to be (5) _____ real one.

SubQuestion No : 22

Q.22 Select the most appropriate option for blank No. 2.

Ans



1. us



2. ours



3. each



4. we

Question ID : 6549789157

Status : **Answered**

Chosen Option : 4

Comprehension:

In the following passage, some words have been deleted. Fill in the blanks with the help of the alternatives given. Select the most appropriate option for each blank.

According to Harari, a leading thinker, we are all busy (1) _____ a fantasy self online. It is the age of Facebook and Instagram, wherein (2) _____ are busy creating perfect stories about ourselves. For example, pictures (3) _____ perfect holidays never show the stress of traffic snarls and a host of (4) _____ problems faced. We soon begin to believe in this perfect online self to be (5) _____ real one.

SubQuestion No : 23

Q.23 Select the most appropriate option for blank No. 3.

Ans



1. on



2. from



3. of



4. In

Question ID : 6549789158

Status : **Answered**

Chosen Option : 3





Comprehension:

In the following passage, some words have been deleted. Fill in the blanks with the help of the alternatives given. Select the most appropriate option for each blank.

According to Harari, a leading thinker, we are all busy (1) _____ a fantasy self online. It is the age of Facebook and Instagram, wherein (2) _____ are busy creating perfect stories about ourselves. For example, pictures (3) _____ perfect holidays never show the stress of traffic snarls and a host of (4) _____ problems faced. We soon begin to believe in this perfect online self to be (5) _____ real one.

SubQuestion No : 24

Q.24 Select the most appropriate option for blank No. 4.

- Ans  1. other
-  2. another
-  3. few
-  4. same

Question ID : 6549789159

Status : **Not Answered**

Chosen Option : --



Comprehension:

In the following passage, some words have been deleted. Fill in the blanks with the help of the alternatives given. Select the most appropriate option for each blank.

According to Harari, a leading thinker, we are all busy (1) _____ a fantasy self online. It is the age of Facebook and Instagram, wherein (2) _____ are busy creating perfect stories about ourselves. For example, pictures (3) _____ perfect holidays never show the stress of traffic snarls and a host of (4) _____ problems faced. We soon begin to believe in this perfect online self to be (5) _____ real one.

SubQuestion No : 25

Q.25 Select the most appropriate option for blank No. 5.

- Ans  1. a
-  2. an
-  3. one
-  4. the

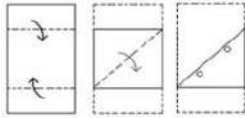
Question ID : 6549789160

Status : **Answered**

Chosen Option : 4

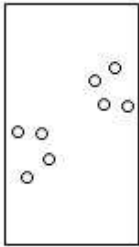
Section : **General Intelligence**

Q.1 The sequence of folding a piece of paper and the manner in which the folded paper has been cut is shown in the following figures. How would this paper look when unfolded?




Ans


✓ 1.




✗ 2.



✗ 3.



✗ 4.



Question ID : 6549789199

Status : Answered

Chosen Option : 1

Q.2 'Craniology' is related to 'Skull' and 'Oology' is related to 'Eggs' in the same way as 'Pedology' is related to ____.

Ans

✗ 1. Fossils

✗ 2. Artifacts

✓ 3. Soil

✗ 4. Shells

Question ID : 6549789188

Status : Not Answered


Chosen Option : --

Q.3 Select the Venn diagram that best represents the relationship between the following classes.

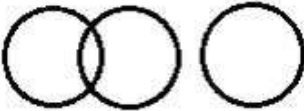
Kings, Queens, Mothers

Ans

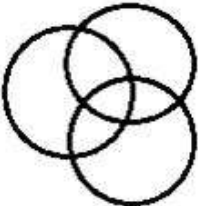
✗ 1.



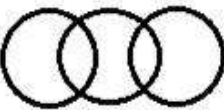
✓ 2.



✗ 3.



✗ 4.



Question ID : 6549787181

Status : Answered

Chosen Option : 2

Q.4 उस विकल्प का चयन कीजिए जिसके शब्दों के मध्य वही संबंध है, जो दिए गए शब्द-युग्म के शब्दों के मध्य है।

मुर्गा : मुर्गी

Ans



1. घोड़ा : घोड़ी



2. मालिक : मकान मालिक



3. मेंढक : टैंडपोल



4. बिल्ली : बिल्ली का बच्चा

Question ID : 6549787171

Status : Answered

Chosen Option : 1

Q.5 If 31 August 2008 was Sunday, then what was the day of the week on 30 August 2012?

Ans



1. Monday



2. Thursday



3. Tuesday



4. Wednesday

Question ID : 6549787157

Status : Not Answered

Chosen Option : --

Q.6 M is the only son of R. P is the sister of Q. X is the father of C, who is the wife of R. Q is the daughter of X's only daughter. How is M related to X?

- Ans
- ☒ 1. Son
 - ☒ 2. Nephew
 - ☒ 3. Grandson
 - ☒ 4. Brother

Question ID : 6549788382

Status : Answered

Chosen Option : 3

Q.7 Select the option in which the numbers are related in the same way as are the numbers of the following set.

{6, 15, 27}

- Ans
- ☒ 1. {12, 32, 54}
 - ☒ 2. {8, 24, 34}
 - ☒ 3. {4, 10, 18}
 - ☒ 4. {14, 38, 57}

Question ID : 6549789180

Status : Answered

Chosen Option : 3

Q.8 Four letter-clusters have been given, out of which three are alike in some manner and one is different. Select the odd one.

- Ans
- ☒ 1. LPTA
 - ☒ 2. CGLR
 - ☒ 3. QUZF
 - ☒ 4. NRWC

Question ID : 6549787172

Status : Answered

Chosen Option : 1

Q.9 Select the number from among the given options that can replace the question mark (?) in the following series.

7, 9, 14, 24, ?, 67

- Ans
- ☒ 1. 45
 - ☒ 2. 37
 - ☒ 3. 41
 - ☒ 4. 43

Question ID : 6549789182

Status : Answered

Chosen Option : 3

Q.10 In a certain code language, CHECK is written as 6165622 and SURGE is written as 392136145. How will PRIEST be written as in that language?

- Ans  1. 3436953640
-  2. 3236953840
-  3. 3236185384
-  4. 1618953840

Question ID : 6549787166

Status : Answered

Chosen Option : 2

Q.11 Four number-pairs have been given, out of which three are alike in some manner and one is different. Select the one that is different.

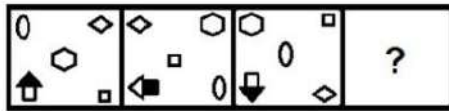
- Ans  1. 9 : 90
-  2. 8 : 66
-  3. 7 : 56
-  4. 5 : 30

Question ID : 6549787163

Status : Answered

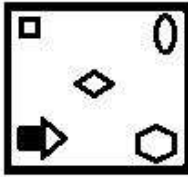
Chosen Option : 2

Q.12 Select the figure from among the given options that can replace the question mark (?) in the following series.




Ans

✓ 1.



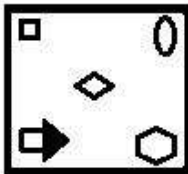
✗ 2.



✗ 3.



✗ 4.



Question ID : 6549787176

Status : Answered

Chosen Option : 1

Q.13 Select the correct option that indicates the arrangement of the given words in the order in which they appear in an English dictionary.

1. Pleasant
2. Placard
3. Plentiful
4. Pleased
5. Plight

Ans

✗ 1. 4, 1, 2, 3, 5

✗ 2. 2, 1, 4, 5, 3

✗ 3. 1, 2, 4, 3, 5

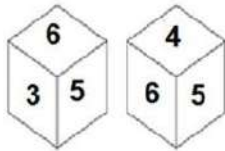
✓ 4. 2, 1, 4, 3, 5

Question ID : 6549787164

Status : Answered

Chosen Option : 4

Q.14 Two different positions of the same dice are shown. Select the number that will be on the face opposite to the one having 4.



- Ans
- ☒ 1. 1
 - ☒ 2. 3
 - ☒ 3. 5
 - ☒ 4. 2

Question ID : 6549787175

Status : Answered

Chosen Option : 2

Q.15 Which two signs should be interchanged to make the following equation correct?

$$10 - 15 \times 9 \div 6 + 8 = 8$$

- Ans
- ☒ 1. + and ÷
 - ☒ 2. × and -
 - ☒ 3. + and ×
 - ☒ 4. - and ÷

Question ID : 6549789178

Status : Answered

Chosen Option : 4

Q.16 Read the given statements and conclusions carefully. Assuming that the information given in the statements is true, even if it appears to be at variance with commonly known facts, decide which of the given conclusions logically follow(s) from the statements.

Statements:

Some teachers are graduates.
Some graduates are females.
All females are women.

Conclusions:

- I. Some females are teachers.
- II. Some women are teachers.
- III. All women are females.

- Ans
- ☒ 1. Only conclusion I follows.
 - ☒ 2. Only conclusion II follows.
 - ☒ 3. None of the conclusions follow.
 - ☒ 4. Only conclusions II and III follow.

Question ID : 6549789194

Status : Answered

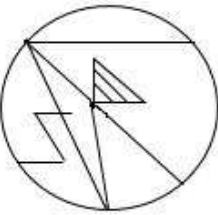
Chosen Option : 3

Q.17 Select the correct mirror image of the given figure when the mirror is placed at the right side of the figure.

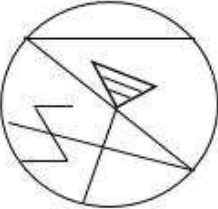


Ans

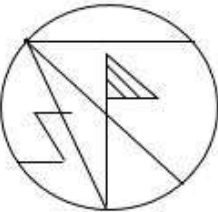
✗ 1.



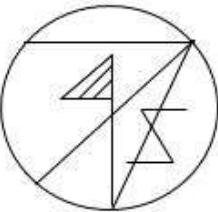
✗ 2.



✓ 3.



✗ 4.



Question ID : 6549789200

Status : Answered

Chosen Option : 3

Q.18 Select the combination of letters that when sequentially placed in the blanks of the given letter series will complete the series.

a c _ d a _ d d a _ _ d a c _ d

Ans

✓ 1. d c c d d

✗ 2. a c d c a

✗ 3. d a c c d

✗ 4. c c d a d




Question ID : 6549786361

Status : Answered

Chosen Option : 1

Q.19 Select the option that is related to the third letter-cluster in the same way as the second letter-cluster is related to the first letter-cluster.

DGKP : BJGU :: HKOT : ?

- Ans  1. GJNS
 2. FNKY
 3. JIRP
 4. FMKW

Question ID : 6549789187

Status : Answered

Chosen Option : 2

Q.20 Four words have been given, out of which three are alike in some manner and one is different. Select the word that is different.

- Ans  1. Potato
 2. Cucumber
 3. Pumpkin
 4. Bean

Question ID : 6549789193

Status : Answered

Chosen Option : 2

Q.21 Select the option in which the numbers are related in the same way as are the numbers of the following set.

(11, 5, 246)

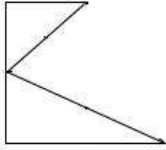
- Ans  1. (14, 6, 412)
 2. (12, 9, 224)
 3. (10, 7, 355)
 4. (16, 9, 331)

Question ID : 6549787161

Status : Answered

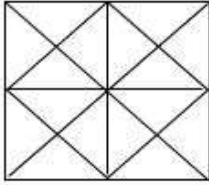
Chosen Option : 1

Q.22 Select the option in which the given figure is embedded (rotation is NOT allowed).

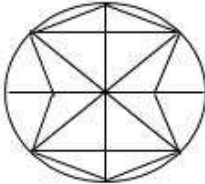


Ans

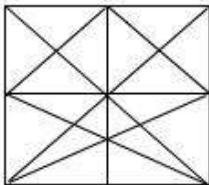
✗ 1.



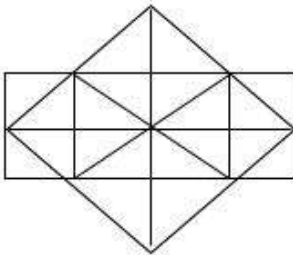
✗ 2.



✓ 3.



✗ 4.



Question ID : 6549789198

Status : Answered

Chosen Option : 3

Q.23 Select the option that is related to the fourth number in the same way as the first number is related to the second number and the fifth number is related to the sixth number.

12 : 146 :: ? : 443 :: 16 : 258

Ans

✗ 1. 23

✗ 2. 19

✓ 3. 21

✗ 4. 20

Question ID : 6549787159

Status : Answered

Chosen Option : 3

Q.24 In a certain code language, HIGHER is written as JIIHSF. How will CODING be written in that language?

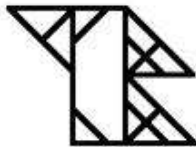
- Ans
- ☒ 1. PDJEHO
 - ☐ 2. OHJEPD
 - ☐ 3. FOHEND
 - ☐ 4. PDEJOK

Question ID : 6549789185

Status : Not Answered

Chosen Option : --

Q.25 How many triangles are there in the given figure?



- Ans
- ☐ 1. 16
 - ☒ 2. 17
 - ☐ 3. 18
 - ☐ 4. 15

Question ID : 6549787177

Status : Answered

Chosen Option : 2

Section : Quantitative Aptitude

Q.1 Suresh purchased a computer table for ₹9,000 and a centre table for ₹4,000. He sold the computer table with 8% profit. With what profit percentage should he sell the centre table so as to gain 10% on the whole transaction?

- Ans
- ☐ 1. 15
 - ☐ 2. 12
 - ☐ 3. 14
 - ☒ 4. 14.5

Question ID : 6549789208

Status : Answered

Chosen Option : 4

Q.2 Study the given bar graph and answer the question that follows.

The bar graph indicates the production of sugar (in lakh tonnes) by three different sugar companies P, Q and R over the years 2015 to 2019.



The percentage rise in the production of sugar by company Q as compared to the previous year is the maximum in the year:

- Ans
1. 2017
 2. 2019
 3. 2016
 4. 2018

Question ID : 6549787206

Status : Answered

Chosen Option : 3

Q.3 The simple interest on a certain sum of money for 5 years at the rate of 10% per annum is half the compound interest on ₹5,000 for 2 years at the rate of 10% per annum, interest compounded yearly. The sum placed on simple interest is:

- Ans
1. ₹1,450
 2. ₹1,050
 3. ₹1,500
 4. ₹1,540

Question ID : 6549787190

Status : Answered

Chosen Option : 2

Q.4 If the number 645A2879B8 is divisible by both 8 and 9, then the smallest possible values of A and B will be:

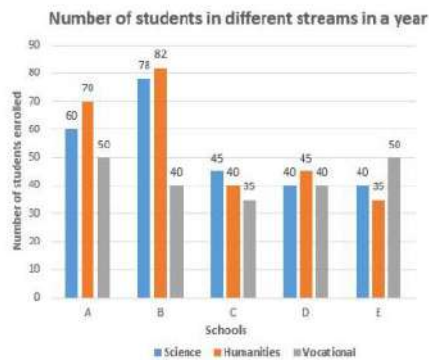
- Ans
1. A = 3, B = 4
 2. A = 4, B = 3
 3. A = 2, B = 3
 4. A = 3, B = 2

Question ID : 6549787198

Status : Answered

Chosen Option : 4

Q.5 The number of students enrolled in different streams at Senior Secondary level in five schools is shown in the bar graph.



In which school is the number of students the least?

- Ans ☒ 1. C
☒ 2. E
☒ 3. D
☒ 4. A

Question ID : 6549789223

Status : Answered

Chosen Option : 1

Q.6 If $(40\sqrt{5}x^3 - 2\sqrt{2}y^3) \div (2\sqrt{5}x - \sqrt{2}y) = Ax^2 + By^2 - Cxy$, then find the value of $A + 3B - \sqrt{10}C$.

- Ans ☒ 1. 34
☒ 2. 46
☒ 3. 6
☒ 4. 28

Question ID : 6549789217

Status : Answered

Chosen Option : 2

Q.7 A shopkeeper offers successive discounts of 35%, 10% and 6% on every item. At what price (nearest to a rupee) customers can get an item marked for ₹1,000?

- Ans ☒ 1. ₹562
☒ 2. ₹550
☒ 3. ₹450
☒ 4. ₹645

Question ID : 6549789206

Status : Not Attempted and Marked For Review

Chosen Option : --

Q.8 If $x^4 + \frac{1}{x^4} = 1154$, $x > 0$, then what will be the value of $x + \frac{1}{x}$?

- Ans
- ☒ 1. $\sqrt{34}$
 - ☒ 2. 18
 - ☒ 3. $\sqrt{32}$
 - ☒ 4. 6

Question ID : 6549789216

Status : Answered

Chosen Option : 4

Q.9 If $\frac{\operatorname{cosec}^2 \theta}{\operatorname{cosec}^2 \theta - \cot^2 \theta} = \frac{13}{4}$, $0^\circ < \theta < 90^\circ$, then the value of $\frac{52 \cos^2 \theta - 9 \tan^2 \theta}{18 \sec^2 \theta + 8 \cot^2 \theta}$ will be:

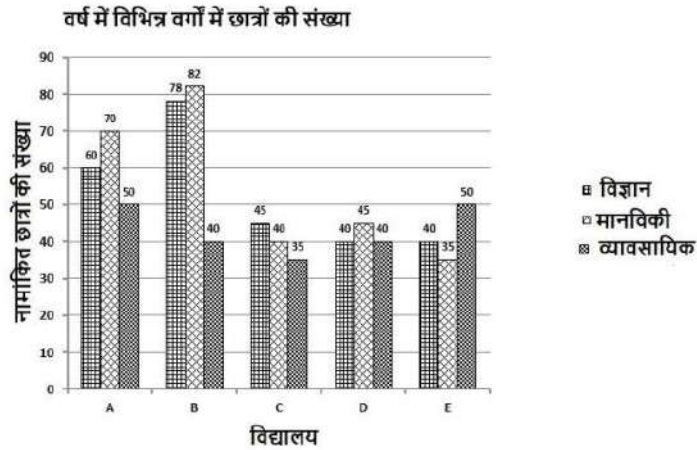
- Ans
- ☒ 1. $\frac{4}{11}$
 - ☒ 2. $\frac{8}{11}$
 - ☒ 3. $\frac{8}{13}$
 - ☒ 4. $\frac{5}{11}$

Question ID : 6549787201

Status : Answered

Chosen Option : 2

Q.10 पांच स्कूलों में उच्चतर माध्यमिक स्तर की विभिन्न शाखाओं में नामांकित छात्रों की संख्या को दंड आलेख (bar graph) में दर्शाया गया है।



स्कूल A में विज्ञान शाखा में नामांकित छात्रों की संख्या, सभी पांच स्कूलों में सभी शाखाओं में छात्रों की कुल संख्या का कितना प्रतिशत है?

- Ans
- ☒ 1. 8.57
 - ☒ 2. 8
 - ☒ 3. 7.5
 - ☒ 4. 6

Question ID : 6549789527

Status : Answered

Chosen Option : 2

Q.11 Simplify the following expression.

$$\frac{52 + 1170 \div 26 + 13 \times 2}{2 + 1\frac{1}{8} \text{ of } 2 - 1\frac{1}{4}}$$

- Ans
- ☒ 1. $61\frac{1}{2}$
 - ☒ 2. $24\frac{5}{6}$
 - ☒ 3. $37\frac{1}{3}$
 - ☒ 4. 41

Question ID : 6549789219

Status : Answered

Chosen Option : 4

Q.12 If $5 \cos \theta = 4 \sin \theta$, $0^\circ \leq \theta \leq 90^\circ$, then what will be the value of $\sec \theta$?

Ans

☐ 1. $\frac{\sqrt{41}}{5}$

☐ 2. $\frac{3}{5}$

☐ 3. $\frac{\sqrt{41}}{16}$

☒ 4. $\frac{\sqrt{41}}{4}$

Question ID : 6549789222

Status : Answered

Chosen Option : 4

Q.13 If $x + y = 27$ and $x^2 + y^2 = 425$, then the value of $(x - y)^2$ will be:

Ans

☐ 1. 225

☐ 2. 169

☒ 3. 121

☐ 4. 144

Question ID : 6549787195

Status : Answered

Chosen Option : 3

Q.14 AB is the diameter of a circle of radius 9 cm. PQ is a chord (not a diameter) that intersects AB at M perpendicularly. If AM : BM = 5 : 4, then the length of chord PQ will be:

Ans

☐ 1. $5\sqrt{5}$ cm

☐ 2. $6\sqrt{5}$ cm

☐ 3. $6\sqrt{3}$ cm

☒ 4. $8\sqrt{5}$ cm

Question ID : 6549787191

Status : Not Answered

Chosen Option : --

Q.15 The speed of a car is 40% more than that of a bus. A train covers 1020 km in $8\frac{1}{2}$ hours. How much distance will the car cover in $1\frac{3}{4}$ hours if the speed of the bus is half the speed of the train?

- Ans**
- ☒ 1. 164 km
 - ☒ 2. 145 km
 - ☒ 3. 147 km
 - ☒ 4. 174 km

Question ID : 6549787183

Status : Answered

Chosen Option : 3

Q.16 In a right-angled triangle ABC right angled at C, $\sin A = \sin B$. What is the value of $\cos A$?

- Ans**
- ☒ 1. $\frac{\sqrt{3}}{2}$
 - ☒ 2. 1
 - ☒ 3. $\frac{1}{\sqrt{2}}$
 - ☒ 4. $\frac{1}{2}$

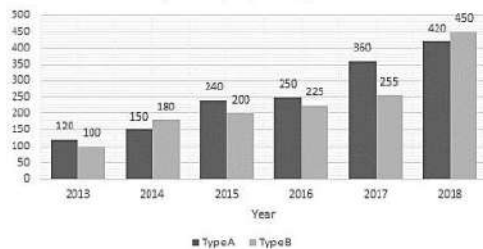
Question ID : 6549789220

Status : Answered

Chosen Option : 3

Q.17 Study the given graph and answer the question that follows.

Production (in thousands) of two types of Vehicles A and B by a company during 2013 to 2018



By what percentage (approximately) is the average number of vehicles of type B produced in 2014, 2016 and 2018 less than the number of vehicles of type A produced in 2017?

- Ans**
- ☒ 1. 21.4
 - ☒ 2. 18.6
 - ☒ 3. 20.8
 - ☒ 4. 23.6

Question ID : 6549786699

Status : Answered

Chosen Option : 1

Q.18 If two numbers are in the ratio 4 : 7 and the sum of their cubes is 407000, then the greater number will be:

- Ans ☒ 1. 70
☒ 2. 63
☒ 3. 84
☒ 4. 77

Question ID : 6549787189
 Status : Answered
 Chosen Option : 1

Q.19 The average pass percentage of girls in class X examination in a school is 85% and that of boys is 83%. The average pass percentage of all boys and girls in class X of that school is 83.7%. Find the percentage of the number of girls in class X of that school.

- Ans ☒ 1. 35%
☒ 2. 30%
☒ 3. 45%
☒ 4. 40%

Question ID : 6549787185
 Status : Answered
 Chosen Option : 1

Q.20 AB is 12 cm long chord of a circle with centre O and radius 10 cm. The tangents at A and B intersect at P. What is the length of OP?

- Ans ☒ 1. 12.5 cm
☒ 2. 12 cm
☒ 3. 10 cm
☒ 4. $2\sqrt{61}$ cm

Question ID : 6549789212
 Status : Not Answered
 Chosen Option : --

Q.21 A square park has been divided into two rectangles of equal area. If the perimeter of each of these rectangles is 39 m, then what will be the perimeter of the square park?

- Ans ☒ 1. 104 m
☒ 2. 39 m
☒ 3. 78 m
☒ 4. 52 m

Question ID : 6549789204
 Status : Not Answered
 Chosen Option : --

Q.22 If the perimeter of an isosceles right triangle is $15(\sqrt{2} + 1)$ cm, then the area of the triangle will be:

- Ans
- ☒ 1. 46.5 cm^2
 - ☒ 2. 45 cm^2
 - ☒ 3. 56.25 cm^2
 - ☒ 4. 55 cm^2

Question ID : 6549787193

Status : Not Answered

Chosen Option : --

Q.23 A circle is inscribed in a right-angled triangle. The lengths of the two sides containing the right angle are 15 cm and 8 cm. What is the radius of the in-circle?

- Ans
- ☒ 1. 4.5 cm
 - ☒ 2. 3 cm
 - ☒ 3. 3.75 cm
 - ☒ 4. 4 cm

Question ID : 6549789214

Status : Not Answered

Chosen Option : --

Q.24 A can complete a task in 6 days, while B can complete the same task in 12 days. How many days will they take to complete the same task if they work together?

- Ans
- ☒ 1. 5
 - ☒ 2. 4
 - ☒ 3. $4\frac{1}{2}$
 - ☒ 4. 3

Question ID : 6549789202

Status : Answered

Chosen Option : 2

Q.25 Ramesh saves $26\frac{2}{3}\%$ of his monthly salary. When his expenses are increased by 20%, he is able to save ₹4,080 per month. His monthly salary is:

- Ans
- ☒ 1. ₹35,000
 - ☒ 2. ₹38,000
 - ☒ 3. ₹34,000
 - ☒ 4. ₹30,000

Question ID : 6549787187

Status : Answered

Chosen Option : 3

Q.1 Which of the following teams has won the Indian Premier League (IPL) trophy five times as of November 2020?

- Ans
- ☐ 1. Rajasthan Royals
 - ☐ 2. Sunrisers Hyderabad
 - ☐ 3. Chennai Super Kings
 - ☒ 4. Mumbai Indians

Question ID : 6549787229

Status : Answered

Chosen Option : 4

Q.2 Second generation computers (1955-1964) were made of:

- Ans
- ☐ 1. large scale integrated circuit chips
 - ☐ 2. vacuum tubes
 - ☒ 3. transistors
 - ☐ 4. small scale integrated circuit chips

Question ID : 6549787207

Status : Not Answered

Chosen Option : --

Q.3 Which of the following Articles of the Constitution of India details 'Prohibition of discrimination on grounds of religion, race, caste, sex or place of birth'?

- Ans
- ☐ 1. Article 22
 - ☐ 2. Article 27
 - ☒ 3. Article 15
 - ☐ 4. Article 10

Question ID : 6549789248

Status : Answered

Chosen Option : 1

Q.4 Where were the terracotta models of the plough excavated in Harappan civilisation?

- Ans
- ☒ 1. Banawali
 - ☐ 2. Kashmir
 - ☐ 3. Amrinal
 - ☐ 4. Lothal

Question ID : 6549787224

Status : Answered

Chosen Option : 1

Q.5 Who among the following started the construction of the Qutub Minar?

- Ans
- ☐ 1. Akbar
 - ☐ 2. Jahangir
 - ☐ 3. Iltutmish
 - ☒ 4. Qutb al-Din Aibak

Question ID : 6549787209
Status : Answered
Chosen Option : 4

Q.6 Which of the following institutions conducts the survey on employment and unemployment?

- Ans
- ☐ 1. NITI Aayog
 - ☐ 2. National Institution of Economic and Social Research
 - ☐ 3. National Council of Applied Economic Research
 - ☒ 4. National Sample Survey Organisation

Question ID : 6549787214
Status : Not Answered
Chosen Option : --

Q.7 In which year did Akbar analyse the state revenue statistics for the last 10 years, which contained information on price fluctuations and land productivity?

- Ans
- ☐ 1. 1569
 - ☐ 2. 1548
 - ☒ 3. 1580
 - ☐ 4. 1536

Question ID : 6549789243
Status : Not Answered
Chosen Option : --

Q.8 Which of the following provisions and the constitutions of different countries from which they have been adopted in the Constitution of India has been INCORRECTLY paired?

- Ans
- ☐ 1. The idea of the rule of law - British Constitution
 - ☐ 2. Charter of Fundamental rights - United States Constitution
 - ☐ 3. Directive Principles of State Policy - Irish Constitution
 - ☒ 4. Principals of Liberty, Equality and Fraternity - Canadian Constitution

Question ID : 6549787227
Status : Answered
Chosen Option : 4

Q.9 Purna, Manjira and Pranhita are tributaries of:

- Ans ☒ 1. Godavari
☒ 2. Indus
☒ 3. Yamuna
☒ 4. Chambal

Question ID : 6549787222
Status : Not Answered
Chosen Option : --

Q.10 With which bank did Indian Army sign an MoU for serving retired personnel in December 2020?

- Ans ☒ 1. State Bank of India
☒ 2. Union Bank
☒ 3. HDFC Bank
☒ 4. Bank of Baroda

Question ID : 6549787211
Status : Not Answered
Chosen Option : --

Q.11 Which of the following valleys is NOT located in Himachal Pradesh?

- Ans ☒ 1. Silent Valley
☒ 2. Malana Valley
☒ 3. Markha Valley
☒ 4. Chumbi Valley

Question ID : 6549787221
Status : Answered
Chosen Option : 1

Q.12 When an economy is facing inflation, what will the central bank of the country do?

- Ans ☒ 1. Reduce the cost of money by reducing rates
☒ 2. Raise the cost of money by raising rates
☒ 3. Set up more ATMs to help the public
☒ 4. Print more notes

Question ID : 6549789235
Status : Not Answered
Chosen Option : --

Q.13 Which everyday morning ritual is part of quantum mechanics?

Ans

- ☒ 1. Brushing teeth
- ☒ 2. Making tea
- ☒ 3. Ringing of an alarm clock
- ☒ 4. Reading newspaper

Question ID : 6549789236

Status : Not Answered

Chosen Option : --

Q.14 Which of the following is a dance form of West Bengal where there is a confluence of dancing, singing, drama and recital?

Ans

- ☒ 1. Bhavai
- ☒ 2. Alkap
- ☒ 3. Tippani
- ☒ 4. Hudo

Question ID : 6549789230

Status : Not Answered

Chosen Option : --

Q.15 Which of the following is a capacity-building scheme that was launched in 2020 for civil servants aimed at upgrading the post-recruitment training mechanism of the officers and employees at all levels?

Ans

- ☒ 1. Mission Karmayogi
- ☒ 2. Mission Sahayog
- ☒ 3. Mission Swabhiman
- ☒ 4. Mission Rakshak

Question ID : 6549789233

Status : Not Answered

Chosen Option : --

Q.16 Who was awarded the Nobel Prize in Literature 2020?

Ans

- ☒ 1. Reinhard Genzel
- ☒ 2. Roger Penrose
- ☒ 3. Andrea M Ghez
- ☒ 4. Louise Glück

Question ID : 6549787226

Status : Not Answered

Chosen Option : --

Q.17 In which of the following options is the substance INCORRECTLY paired with the acid present in that substance?

- Ans
- ☐ 1. Tomato - Oxalic Acid
 - ☐ 2. Vinegar - Acetic Acid
 - ☐ 3. Orange - Citric Acid
 - ☒ 4. Lemon - Lactic Acid

Question ID : 6549787217

Status : Not Answered

Chosen Option : --

Q.18 Which Indian film was the first film to win the 'Palme d'Or' at Cannes Film Festival?

- Ans
- ☐ 1. Mother India
 - ☐ 2. Mughal-e-Azam
 - ☒ 3. Neecha Nagar
 - ☐ 4. Ram Aur Shyam

Question ID : 6549789245

Status : Not Answered

Chosen Option : --

Q.19 How many bits does an IP address consist of?

- Ans
- ☐ 1. 24
 - ☒ 2. 32
 - ☐ 3. 16
 - ☐ 4. 12

Question ID : 6549789228

Status : Not Answered

Chosen Option : --

Q.20 Who among the following is the head coach of India's men's (Senior) football team as of December 2020?

- Ans
- ☐ 1. Dražen Ladić
 - ☒ 2. Igor Stimac
 - ☐ 3. Robert Jarni
 - ☐ 4. Stephen Constantine

Question ID : 6549789250

Status : Not Answered

Chosen Option : --

Q.21 Which of the following ships was launched on 14 December 2020 in Kolkata?

- Ans
- ☒ 1. INS Jalashwa
 - ☒ 2. INS Himgiri
 - ☒ 3. INS Kolkata
 - ☒ 4. INS Shardul

Question ID : 6549787212

Status : Not Answered

Chosen Option : --

Q.22 Who among the following is the first table tennis player to win the Rajiv Gandhi Khel Ratna Award?

- Ans
- ☒ 1. Manika Batra
 - ☒ 2. Sharath Kamal
 - ☒ 3. Poulomi Ghatak
 - ☒ 4. Soumyajit Ghosh

Question ID : 6549787231

Status : Not Answered

Chosen Option : --

Q.23 India's longest LPG pipeline is from Jamnagar to ____.

- Ans
- ☒ 1. Vijaynagar
 - ☒ 2. Namrup
 - ☒ 3. Hazira
 - ☒ 4. Loni

Question ID : 6549789240

Status : Not Answered

Chosen Option : --

Q.24 According to 'Population estimation of tigers in reserves for 2018-19' which of the following is India's largest tiger reserve?

- Ans
- ☒ 1. Corbett
 - ☒ 2. Dudhwa
 - ☒ 3. Nagarhole
 - ☒ 4. Bandipore

Question ID : 6549789239

Status : Answered

Chosen Option : 1

Q.25 Onions produce the chemical irritant known as syn-propanethial-S-oxide; this stimulates the eyes' _____ glands which release tears.

Ans



1. lachrymal



2. parotid



3. sublingual



4. submandibular

Question ID : 6549789238

Status : **Not Answered**

Chosen Option : --

Combined Higher Secondary Level Examination 2020 (Tier-I)

Roll Number	Join Telegram: HaryanaJobs.in
Candidate Name	
Venue Name	
Exam Date	09/08/2021
Exam Time	3:00 PM - 4:00 PM
Subject	Combined Higher Secondary Level Exam 2020

Section : English Language

Q.1 Select the most appropriate ANTONYM of the given word.

COMPLETE

- Ans
- ☐ 1. plentiful
 - ☐ 2. bulky
 - ☒ 3. partial
 - ☐ 4. vacant

Question ID : 6549788660

Status : Answered

Chosen Option : 3

Q.2 Select the most appropriate word to fill in the blank.

The prisoner was very upset and angry and there was _____ in her voice.

- Ans
- ☒ 1. bitterness
 - ☐ 2. thickness
 - ☐ 3. stillness
 - ☐ 4. eagerness

Question ID : 6549788670

Status : Answered

Chosen Option : 1

Q.3 In the given sentence, identify the segment which contains a grammatical error.

We've decided to spend our time play online games as we will not go out on a vacation this year.

- Ans
- ☐ 1. not go out
 - ☒ 2. play online games
 - ☐ 3. to spend our time
 - ☐ 4. we've decided

Question ID : 6549788648

Status : Answered

Chosen Option : 1

Q.4 Select the INCORRECTLY spelt word.

- Ans
- ☒ 1. converse
 - ☒ 2. convert
 - ☒ 3. convean
 - ☒ 4. convent

Question ID : 6549786745
Status : Answered
Chosen Option : 3

Q.5 Select the option which means the same as the group of words given.

One who cannot be reformed or changed

- Ans
- ☒ 1. invincible
 - ☒ 2. infallible
 - ☒ 3. incorrigible
 - ☒ 4. indelible

Question ID : 6549786747
Status : Answered
Chosen Option : 3

Q.6 Given below are four jumbled sentences. Out of the given options, select the one that gives their correct order.

- A. It becomes evident from their stories that their desire to succeed became their driving force, their purpose in life.
- B. We read many stories of people who overcame serious disabilities.
- C. This is what made a paralytic, Wilma Rudolf, win three gold medals on the track in the 1960 Olympics.
- D. They wanted to prove to themselves that they could do it in spite of all odds - and they did it.

- Ans
- ☒ 1. BADC
 - ☒ 2. ACBD
 - ☒ 3. ADBC
 - ☒ 4. BCDA

Question ID : 6549788656
Status : Answered
Chosen Option : 1

Q.7 Select the word which means the same as the group of words given.

A person who pretends to have morals and beliefs that he or she doesn't believe in

- Ans
- ☒ 1. communal
 - ☒ 2. versatile
 - ☒ 3. hypocrite
 - ☒ 4. radical

Question ID : 6549788667
Status : Answered
Chosen Option : 3

Q.8 Select the correct passive form of the given sentence.

We mow the lawn once every month.

- Ans
- ☒ 1. The lawn was mowed once every month.
 - ☒ 2. The lawn has been mowed once every month.
 - ☒ 3. The lawn is mowed once every month.
 - ☒ 4. The lawn will be mowed once every month.

Question ID : 6549786727

Status : Answered

Chosen Option : 3

Q.9 Given below are four jumbled sentences. Out of the given options, pick the one that gives their correct order.

- A. They were covered with mud from head to foot.
- B. Two men were fighting, crying out and cursing, at the bottom of the ditch.
- C. "Stop that!" shouted the sergeant.
- D. Three or four soldiers, holding torches, were standing around a ditch.

- Ans
- ☒ 1. DCBA
 - ☒ 2. BDAC
 - ☒ 3. DBAC
 - ☒ 4. BACD

Question ID : 6549786738

Status : Answered

Chosen Option : 4

Q.10 Select the most appropriate option to substitute the underlined segment in the given sentence. If there is no need to substitute it, select 'No substitution'.

Ashoka was one of the greater king of India.

- Ans
- ☒ 1. the more great kings
 - ☒ 2. the greater kings
 - ☒ 3. No substitution
 - ☒ 4. the greatest kings

Question ID : 6549786739

Status : Answered

Chosen Option : 4

Q.11 Select the most appropriate ANTONYM of the given word.

NONDESCRIP

- Ans
- ☒ 1. distinguished
 - ☒ 2. ordinary
 - ☒ 3. vague
 - ☒ 4. common

Question ID : 6549786742

Status : Answered

Chosen Option : 3

Q.12 Select the most appropriate meaning of the given idiom.

A blessing in disguise

- Ans ☒ 1. something good that isn't recognised at first
- ☐ 2. someone who comes disguised
- ☐ 3. a person who blesses others quietly
- ☐ 4. an event that is unknown

Question ID : 6549788662

Status : Answered

Chosen Option : 1

Q.13 Select the correct indirect form of the given sentence.

The supervisor said to the staff, "Make sure that every room is disinfected properly."

- Ans ☐ 1. The supervisor instructed the staff to make sure that every room had been disinfected properly.
- ☐ 2. The supervisor instructed the staff to make sure that every room was being disinfected properly.
- ☐ 3. The supervisor instructs the staff to make sure that every room is disinfected properly.
- ☒ 4. The supervisor instructed the staff to make sure that every room was disinfected properly.

Question ID : 6549788647

Status : Answered

Chosen Option : 4

Q.14 Select the most appropriate meaning of the given idiom.

Needle in a haystack

- Ans ☐ 1. Someone having vast opportunities
- ☐ 2. Someone in trouble
- ☒ 3. Something impossible to find
- ☐ 4. Something very trivial

Question ID : 6549786744

Status : Answered

Chosen Option : 3

Q.15 Select the most appropriate synonym of the given word.

COMPLICATED

- Ans ☐ 1. painful
- ☒ 2. complex
- ☐ 3. simplified
- ☐ 4. plain

Question ID : 6549788668

Status : Answered

Chosen Option : 3

Q.16 In the given sentence, identify the segment which contains the grammatical error.

Amphan, the more severe cyclone in the Bay of Bengal since the super cyclone of 1999, made landfall in the afternoon on Wednesday.

- Ans
- ☒ 1. since the super cyclone
 - ☒ 2. the more severe cyclone
 - ☒ 3. in the afternoon
 - ☒ 4. made landfall

Question ID : 6549786730

Status : Answered

Chosen Option : 2

Q.17 Select the INCORRECTLY spelt word.

- Ans
- ☒ 1. collide
 - ☒ 2. conscious
 - ☒ 3. existence
 - ☒ 4. grammer

Question ID : 6549788665

Status : Answered

Chosen Option : 4

Q.18 Select the most appropriate option to substitute the underlined segment in the given sentence. If there is no need to substitute it, select 'No substitution'.

Just like a spider that spins its own web and later destroys it, human beings can also destroy the web of desires that engulfs it.

- Ans
- ☒ 1. engulfs them
 - ☒ 2. engulfing it
 - ☒ 3. engulf it
 - ☒ 4. No substitution

Question ID : 6549788659

Status : Answered

Chosen Option : 1

Q.19 Select the most appropriate synonym of the given word.

DELECTABLE

- Ans
- ☒ 1. luscious
 - ☒ 2. horrible
 - ☒ 3. unpleasant
 - ☒ 4. offensive

Question ID : 6549786750

Status : Answered

Chosen Option : 1

Q.20 Select the most appropriate option to fill in the blank.

With a lot of difficulty, he could _____ only two tickets for the train from Mumbai to Ranchi.

- Ans ☒ 1. procure
☒ 2. gain
☒ 3. incur
☒ 4. attain

Question ID : **6549786752**
 Status : **Answered**
 Chosen Option : **4**

Comprehension:

In the following passage some words have been deleted. Fill in the blanks with the help of the alternatives given. Select the most appropriate option for each blank.

Students in the sixth grade of a certain school in Navi Mumbai love (1)_____ History lessons, thanks to a novel teaching aid. It (2) _____ not surprising given the fact that their study material (3) _____ comic books and they use their textbooks for (4) _____ to put things into perspective. Besides, students are (5) _____ to tap other sources of information as well.

SubQuestion No : 21

Q.21 Select the most appropriate option for blank no. 1.

- Ans ☒ 1. her
☒ 2. their
☒ 3. them
☒ 4. our

Question ID : **6549786732**
 Status : **Answered**
 Chosen Option : **2**

Comprehension:

In the following passage some words have been deleted. Fill in the blanks with the help of the alternatives given. Select the most appropriate option for each blank.

Students in the sixth grade of a certain school in Navi Mumbai love (1)_____ History lessons, thanks to a novel teaching aid. It (2) _____ not surprising given the fact that their study material (3) _____ comic books and they use their textbooks for (4) _____ to put things into perspective. Besides, students are (5) _____ to tap other sources of information as well.

SubQuestion No : 22

Q.22 Select the most appropriate option for blank no. 2.

- Ans ☒ 1. were
☒ 2. was
☒ 3. are
☒ 4. is

Question ID : **6549786733**
 Status : **Answered**
 Chosen Option : **4**

Comprehension:

In the following passage some words have been deleted. Fill in the blanks with the help of the alternatives given. Select the most appropriate option for each blank.

Students in the sixth grade of a certain school in Navi Mumbai love (1)_____ History lessons, thanks to a novel teaching aid. It (2) _____ not surprising given the fact that their study material (3) _____ comic books and they use their textbooks for (4) _____ to put things into perspective. Besides, students are (5) _____ to tap other sources of information as well.

SubQuestion No : 23

Q.23 Select the most appropriate option for blank no. 3.

- Ans
- ☒ 1. is including
 - ☒ 2. includes
 - ☒ 3. include
 - ☒ 4. has included

Question ID : **6549786734**

Status : **Answered**

Chosen Option : **1**

Comprehension:

In the following passage some words have been deleted. Fill in the blanks with the help of the alternatives given. Select the most appropriate option for each blank.

Students in the sixth grade of a certain school in Navi Mumbai love (1)_____ History lessons, thanks to a novel teaching aid. It (2) _____ not surprising given the fact that their study material (3) _____ comic books and they use their textbooks for (4) _____ to put things into perspective. Besides, students are (5) _____ to tap other sources of information as well.

SubQuestion No : 24

Q.24 Select the most appropriate option for blank no. 4.

- Ans
- ☒ 1. suggestion
 - ☒ 2. reference
 - ☒ 3. practice
 - ☒ 4. indication

Question ID : **6549786735**

Status : **Not Answered**

Chosen Option : **--**




Comprehension:

In the following passage some words have been deleted. Fill in the blanks with the help of the alternatives given. Select the most appropriate option for each blank.

Students in the sixth grade of a certain school in Navi Mumbai love (1)_____ History lessons, thanks to a novel teaching aid. It (2)_____ not surprising given the fact that their study material (3)_____ comic books and they use their textbooks for (4)_____ to put things into perspective. Besides, students are (5)_____ to tap other sources of information as well.

SubQuestion No : 25

Q.25 Select the most appropriate option for blank no. 5.

- Ans  1. boosted
 2. encouraged
 3. heartened
 4. cheered

Question ID : **6549786736**
 Status : **Answered**
 Chosen Option : **3**

Section : General Intelligence

Q.1 Select the word-pair in which the two words are related in the same way as are the two words in the following word-pair.

Bread : Wheat

- Ans  1. Sauce : Tomato
 2. Meal : Flour
 3. Book : Library
 4. Zoo : Animal

Question ID : **6549788686**
 Status : **Answered**
 Chosen Option : **1**





Q.2 Read the given statements and conclusions carefully. Assuming that the information given in the statements is true, even if it appears to be at variance with commonly known facts, decide which of the given conclusions logically follow(s) from the statements.

Statements:

Some magicians are psychologists.
 All psychologists are tourists.

Conclusions:

I. All tourists are psychologists.
 II. All magicians are tourists.

- Ans  1. Both conclusions I and II follow
 2. Only conclusion I follows
 3. Only conclusion II follows
 4. Neither conclusion I nor II follows

Question ID : **6549786770**
 Status : **Answered**
 Chosen Option : **4**

Q.3 किसी महिला की ओर इशारा करते हुए, राज ने कहा, "वह मेरी माँ के ससुर के भाई की इकलौती बेटी है"। महिला का राज से क्या संबंध है?

- Ans
- ☒ 1. भाभी
 - ☒ 2. बुआ
 - ☒ 3. चचेरी बहन
 - ☒ 4. बहन

Question ID : 6549789802

Status : Answered

Chosen Option : 2

Q.4 Select the figure that will come next in the following figure series.



Ans

- ☒ 1.
- ☒ 2.
- ☒ 3.
- ☒ 4.

Question ID : 6549788691

Status : Answered

Chosen Option : 2

Q.5 निम्न शब्दों को तार्किक और अर्थपूर्ण क्रम में व्यवस्थित करें।

1. योजना (Plan)
2. खरीदारी (Shop)
3. मॉल (Mall)
4. गाड़ी चलाना (Drive)
5. वापस आना (Return)

Ans  1. 1, 4, 3, 2, 5

 2. 3, 4, 5, 2, 1

 3. 1, 4, 2, 5, 3

 4. 4, 5, 1, 2, 3

Question ID : 6549788679

Status : Answered

Chosen Option : 1

Q.6 Select the option that is related to the third term in the same way as the second term is related to the first term.

RIGHT : UGKKR :: CHAOS : ?

Ans  1. FQREF

 2. FEFRQ

 3. FREFQ

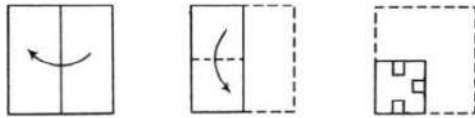
 4. FFERQ

Question ID : 6549786763

Status : Answered

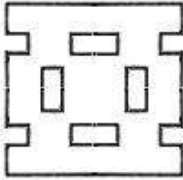
Chosen Option : 4

Q.7 The sequence of folding a piece of paper and the manner in which the folded paper has been cut is shown in the following figures. How would this paper look when unfolded?

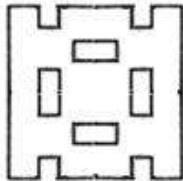


Ans

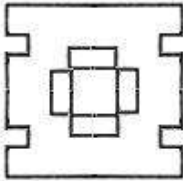
✗ 1.



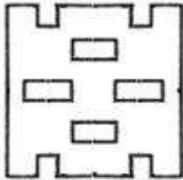
✓ 2.



✗ 3.



✗ 4.



Question ID : 6549786775

Status : Answered

Chosen Option : 2

Q.8 Select the correct mirror image of the given combination when the mirror is placed at 'PQ' as shown.

GOVERNMENT
P
|
Q

Ans

✓ 1.

TNEMRƎVOƆ

✗ 2.

GOƎƎMƎƎƎƎƎ

✗ 3.

TNEMRƎVOƆ

✗ 4.

GOƎƎMƎƎƎƎƎ

Question ID : 6549786776

Status : Answered

Chosen Option : 1

Q.9 Select the correct combination of mathematical signs that can sequentially replace the * signs and balance the given equation.

$$7 * 96 * 8 * 39 * 25 = 70$$

- Ans
- ☒ 1. $\times, -, \div, +$
 - ☒ 2. $\times, \div, -, +$
 - ☒ 3. $+, \div, -, \times$
 - ☒ 4. $-, \times, \div, +$

Question ID : 6549786754

Status : Answered

Chosen Option : 2

Q.10 Five of the following six numbers are alike in a certain way and one is different. Select the number that is different from the rest.

8, 24, 125, 343, 1331, 2197

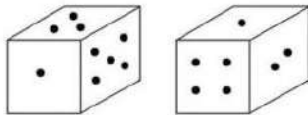
- Ans
- ☒ 1. 2197
 - ☒ 2. 1331
 - ☒ 3. 24
 - ☒ 4. 125

Question ID : 6549788678

Status : Answered

Chosen Option : 3

Q.11 Two different positions of the same dice are given below. How many dots will be on the face opposite to the face having 1 dot?




- Ans
- ☒ 1. 6
 - ☒ 2. 2
 - ☒ 3. 5
 - ☒ 4. 4

Question ID : 6549788690

Status : Answered

Chosen Option : 1

Q.12 Find the number of circles in the following figure.



- Ans
- ☒ 1. 6
 - ☐ 2. 8
 - ☐ 3. 10
 - ☐ 4. 11

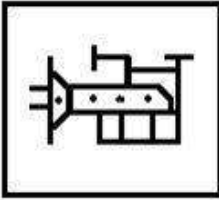
Question ID : 6549788692
Status : Answered
Chosen Option : 1

Q.13 Select the option in which the given figure is embedded (rotation is NOT allowed).

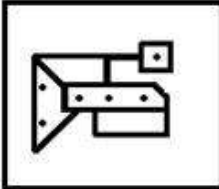


Ans

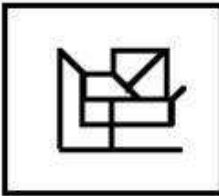
✓ 1.



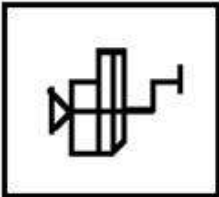
✗ 2.



✗ 3.



✗ 4.



Question ID : 6549786774

Status : Answered

Chosen Option : 2

Q.14 Select the option in which the numbers are related in the same way as are the numbers of the following set.

(3, 3, 11)

Ans

✗ 1. (4, 5, 18)

✗ 2. (5, 8, 26)

✓ 3. (7, 11, 35)

✗ 4. (6, 15, 47)

Question ID : 6549786756

Status : Not Attempted and Marked For Review

Chosen Option : --

Q.15 Three of the following four number triads are alike in a certain way and one is different.
Select the one that is different.

- Ans  1. (3, 6, 9)
-  2. (2, 4, 8)
-  3. (1, 2, 1)
-  4. (4, 8, 16)



Question ID : 6549788676

Status : Answered

Chosen Option : 3

Q.16 Select the option that is related to the third word in the same way as the second word is related to the first word.

Dolphins : Click :: Jackals : ?

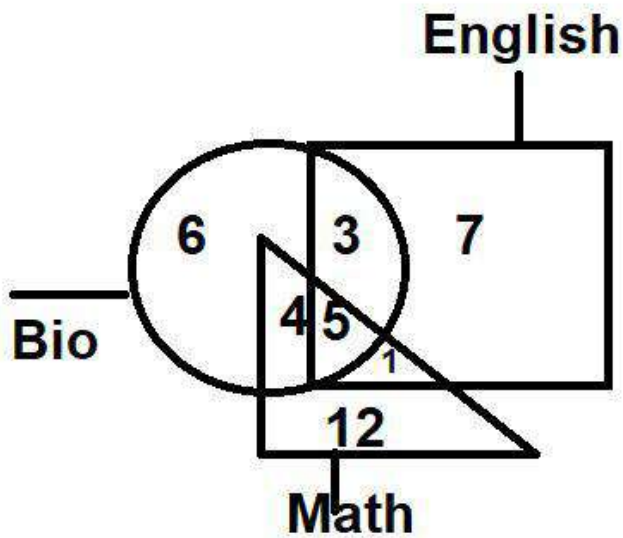
- Ans  1. Bleat
-  2. Scream
-  3. Squeak
-  4. Howl

Question ID : 6549786764

Status : Answered

Chosen Option : 1

Q.17 Observe the following diagram and answer the question that follows.



Find the number of students who study two or more subjects.

- Ans
- ☒ 1. 9
 - ☒ 2. 13
 - ☒ 3. 7
 - ☒ 4. 5

Question ID : 6549788696

Status : Answered

Chosen Option : 2

Q.18 In a certain code language, VIRTUE is written as XCBYAN. How will MODEST be written in that language?

- Ans
- ☒ 1. IJNYYS
 - ☒ 2. JISYNY
 - ☒ 3. INYJYS
 - ☒ 4. JISNYY

Question ID : 6549786761

Status : Not Answered

Chosen Option : --

Q.19 If in a code language, DISK is coded as 65 and WIRE is coded as 53, then how will you code CELL?

- Ans
- ☒ 1. 46
 - ☒ 2. 32
 - ☒ 3. 76
 - ☒ 4. 82

Question ID : 6549788681

Status : Answered

Chosen Option : 3

Q.20 Select the option that is related to the third number in the same way as the second number is related to the first number.

27 : 702 :: 12 : ?

- Ans
- ☒ 1. 402
 - ☒ 2. 103
 - ☒ 3. 341
 - ☒ 4. 132

Question ID : 6549788674

Status : Answered

Chosen Option : 4

Q.21 Select the number from among the given options that can replace the question mark (?) in the following series.

5, 9, 16, 31, 60, 119, ?

- Ans
- ☒ 1. 436
 - ☒ 2. 326
 - ☒ 3. 236
 - ☒ 4. 346

Question ID : 6549786758

Status : Answered

Chosen Option : 3

Q.22 Select the combination of letters that when sequentially placed in the blanks of the given series will complete the series.

k l _ p n _ k l m p _ b _ l m _ n b k _ m p n b

- Ans
- ☒ 1. m, n, b, p, k, l
 - ☒ 2. k, l, m, n, b, p
 - ☒ 3. m, b, n, k, p, l
 - ☒ 4. n, m, b, l, p, k

Question ID : 6549787876

Status : Answered

Chosen Option : 3

Q.23 Rohit is three times the age of his son Rishabh. Five years ago, he was four times older than Rishabh. What is Rohit's age at present?

- Ans
- ☒ 1. 45 years
 - ☒ 2. 60 years
 - ☒ 3. 30 years
 - ☒ 4. 15 years

Question ID : 6549788672

Status : Not Attempted and Marked For Review

Chosen Option : --

Q.24 Three of the following four letter-clusters are alike in a certain way and one is different. Select the odd one.

- Ans  1. ULO
 2. ILO
 3. ENO
 4. UOD

Question ID : 6549788687

Status : Not Answered

Chosen Option : --

Q.25 Four words have been given, out of which three are alike in some manner and one is different. Select the word that is different.

- Ans  1. Horde
 2. Piglet
 3. Ambush
 4. Herd

Question ID : 6549786769

Status : Not Answered

Chosen Option : --

Section : Quantitative Aptitude

Q.1 For what value of θ (in degrees) is the following equation true?

$$\sin 3\theta \cos \theta - \cos 3\theta \sin \theta = \frac{1}{2}, 0 < \theta < \frac{\pi}{2}$$





- Ans  1. 45
 2. 30
 3. 60
 4. 15

Question ID : 6549786798

Status : Not Answered

Chosen Option : --

Q.2 If $a^2 + b^2 + c^2 = 576$ and $(ab + bc + ca) = 50$, then what is the value of $(a + b + c)$, if $(a + b + c) < 0$?

- Ans  1. ± 26
 2. -24
 3. -26
 4. ± 24

Question ID : 6549786793

Status : Answered

Chosen Option : 1

Q.3 A ₹900 में एक वस्तु खरीदकर 25% के लाभ पर B को बेचता है। B इसे C को बेचता है, जो इसे 10% की हानि पर ₹1,350 में बेचता है। B का लाभ प्रतिशत (निकटतम पूर्णांक तक) क्या होगा?

- Ans**
- ☒ 1. 33
 - ☐ 2. 30
 - ☐ 3. 35
 - ☐ 4. 34

Question ID : 6549786784

Status : **Not Answered**

Chosen Option : --

Q.4 The list price of coconut oil is 15% more than its cost price. At what per cent less should it be sold for no profit and no loss?

- Ans**
- ☐ 1. $13\frac{3}{23}\%$
 - ☒ 2. $13\frac{1}{23}\%$
 - ☐ 3. $13\frac{2}{23}\%$
 - ☐ 4. $13\frac{4}{23}\%$

Question ID : 6549788702

Status : **Answered**

Chosen Option : 2

Q.5 Study the given bar graphs and answer the question that follows.

The bar graphs represent the amount invested in raw materials (in ₹ crore) and the sale of the products, by a textile company in the years 2007– 2012. The X-axis represents the years. The Y-axis represents the amount invested in raw materials (in ₹ crore) in figure 1 and sale of products in figure 2, respectively.

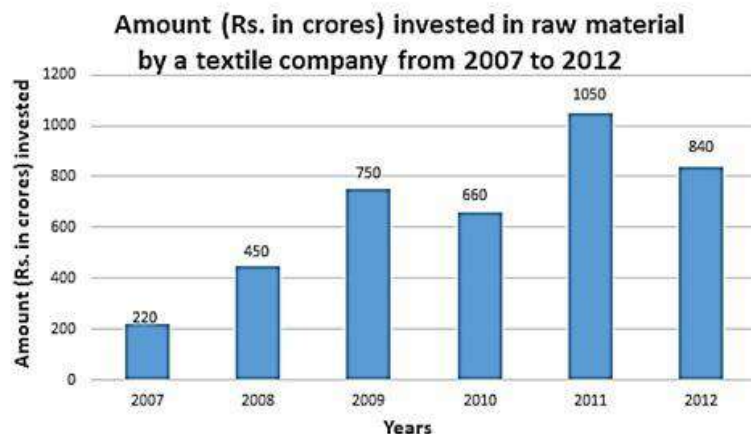


Figure 1

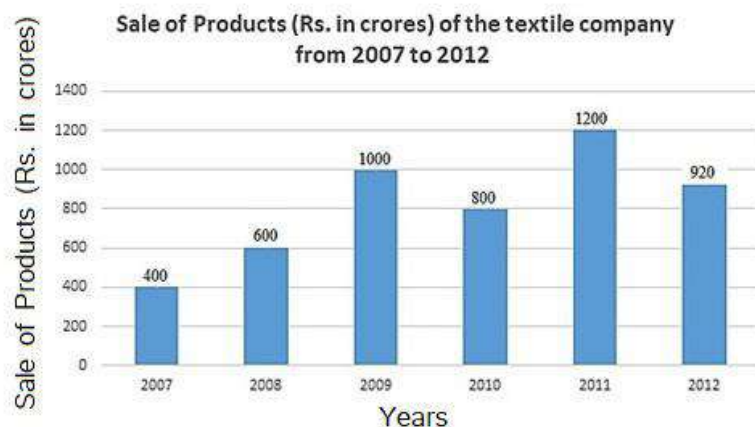


Figure 2

In which two years was the difference of the amount invested and the sales of products the same?

- Ans
- ☒ 1. 2009 and 2012
 - ☒ 2. 2010 and 2011
 - ☒ 3. 2007 and 2009
 - ☒ 4. 2008 and 2011

Question ID : 6549786799
Status : Answered
Chosen Option : 2

Q.6 The value of

$$28 \div [25 + 8 \div 4 - \{25 + (25 \text{ of } 8 \div 20) - (125 \div 5 \text{ of } 25)\}] + (25 \times 5) \text{ is:}$$

- Ans
- ☒ 1. 129
 - ☒ 2. -121
 - ☒ 3. -4
 - ☒ 4. 121

Question ID : 6549786795

Status : Not Answered

Chosen Option : --

Q.7

If $\left(2x + \frac{1}{2x}\right) = 5$, then what is the value of $\left(8x^3 + \frac{1}{8x^3}\right)$?

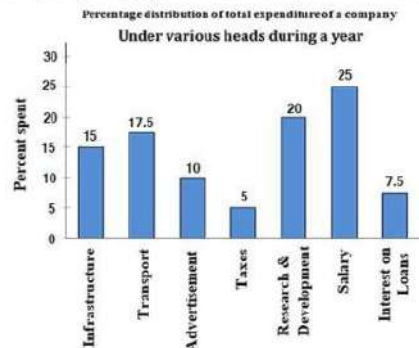
- Ans
- ☒ 1. 110
 - ☒ 2. 120
 - ☒ 3. 100
 - ☒ 4. 125

Question ID : 6549786792

Status : Answered

Chosen Option : 2

Q.8 Study the given graph and answer the question that follows.



What is the ratio of the total expenditure on Infrastructure and Transport to the total expenditure on Taxes and Interest on Loans?

- Ans
- ☒ 1. 13 : 5
 - ☒ 2. 13 : 6
 - ☒ 3. 13 : 7
 - ☒ 4. 13 : 8

Question ID : 6549788315

Status : Answered

Chosen Option : 1

Q.9 A can complete one-sixth of a work in 5 days and B can complete one-fourth of the same work in 15 days. In how many days, will both working together complete the work?

- Ans**
- ☒ 1. 20 days
 - ☐ 2. 10 days
 - ☐ 3. 25 days
 - ☐ 4. 12 days

Question ID : **6549786778**
Status : **Answered**
Chosen Option : 1

Q.10 Chords AB and CD of a circle intersect externally at P. If AB = 8.8 cm, PB = 7.2 cm, PD = 6.4 cm, then CD is equal to:

- Ans**
- ☐ 1. 10.8 cm
 - ☐ 2. 10.6 cm
 - ☐ 3. 11.4 cm
 - ☒ 4. 11.6 cm

Question ID : **6549786788**
Status : **Not Answered**
Chosen Option : --

Q.11 The total surface area of a solid cube is 4.86 m^2 . It is melted and recast into a right circular cylinder of radius 0.3 m. What is the height (in m) of the cylinder (correct to one decimal place)? Take $\pi = \frac{22}{7}$.

- Ans**
- ☐ 1. 1.8
 - ☒ 2. 2.6
 - ☐ 3. 2.8
 - ☐ 4. 3.5

Question ID : **6549786780**
Status : **Not Answered**
Chosen Option : --

Q.12 In what time will a sum of ₹1,25,000 amount to ₹1,48,877 at 12% per annum, if interest is being compounded half-yearly?

- Ans**
- ☒ 1. $1\frac{1}{2}$ year
 - ☐ 2. $2\frac{1}{2}$ years
 - ☐ 3. 1 year
 - ☐ 4. 3 years

Question ID : **6549788705**
Status : **Answered**
Chosen Option : 1

Q.13 If $\sin B = \frac{9}{41}$, then what is the value of $\cot B$, where $0^\circ < B < 90^\circ$?

Ans

☒ 1. $\frac{41}{9}$

☒ 2. $\frac{40}{9}$

☒ 3. $\frac{9}{41}$

☒ 4. $\frac{9}{40}$

Question ID : 6549786796

Status : Answered

Chosen Option : 2

Q.14 Two trains X and Y of lengths 450 meters and 550 meters, respectively, are running in the same direction on parallel tracks. If the speeds of X and Y are 58 km/h and 86 km/h, respectively, then what will be the time taken by them to cross each other?

(correct to one decimal place)

Ans

☒ 1. 122.6 seconds

☒ 2. 128.6 seconds

☒ 3. 126.6 seconds

☒ 4. 124.6 seconds

Question ID : 6549788698

Status : Not Answered

Chosen Option : --

Q.15 The value of $\frac{\cos 8^\circ \cos 24^\circ \cos 60^\circ \cos 66^\circ \cos 82^\circ}{\sin 82^\circ \sin 66^\circ \sin 60^\circ \sin 8^\circ \sin 24^\circ}$ is:

Ans

☒ 1. 1

☒ 2. $\frac{1}{\sqrt{2}}$

☒ 3. $\frac{1}{\sqrt{3}}$

☒ 4. 0

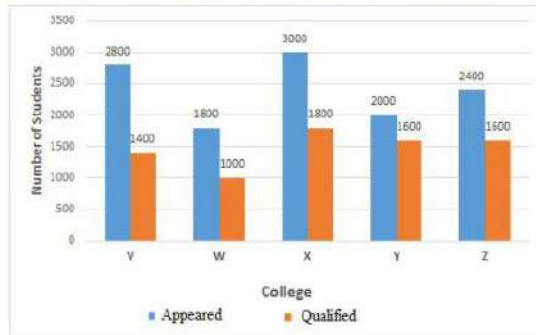
Question ID : 6549788716

Status : Not Answered

Chosen Option : --

Q.16 Study the following graph and answer the question that follows.

Number of students that appeared and qualified, from various colleges, at a scholarship examination.



The average number of students that qualified in the examination from Colleges X and Y is what percentage of the average number of students that appeared for the examination from the same colleges?

- Ans
- ☒ 1. 66
 - ☒ 2. 68
 - ☒ 3. 62
 - ☒ 4. 64

Question ID : 6549788721

Status : Answered

Chosen Option : 2

Q.17 If $3x + y = 12$ and $xy = 9$, then the value of $(3x - y)$ is:

- Ans
- ☒ 1. 4
 - ☒ 2. 5
 - ☒ 3. 6
 - ☒ 4. 3

Question ID : 6549788710

Status : Answered

Chosen Option : 3

Q.18 The difference between the two perpendicular sides of a right-angled triangle is 17 cm and its area is 84 cm^2 . What is the perimeter (in cm) of the triangle?

- Ans
- ☒ 1. 56
 - ☒ 2. 65
 - ☒ 3. 72
 - ☒ 4. 49

Question ID : 6549786790

Status : Not Answered

Chosen Option : --

Q.19 The perimeter of an isosceles triangle is 220 cm. If the base is 40 cm, then the length of each of the other sides is:

- Ans  1. 85 cm
 2. 90 cm
 3. 80 cm
 4. 95 cm

Question ID : 6549788708

Status : **Not Answered**

Chosen Option : --

Q.20 If $x : y = 4 : 5$, then the value of $(8x - 6y) : (9x - 7y)$ is:

- Ans  1. 2 : 1
 2. 1 : 2
 3. 2 : 3
 4. 1 : 3

Question ID : 6549788704

Status : **Answered**

Chosen Option : 1

Q.21 If $31^{47} + 43^{47}$ is divided by 37, the remainder is:


- Ans  1. 2
 2. 3
 3. 0
 4. 1

Question ID : 6549788713

Status : **Not Answered**

Chosen Option : --

Q.22 A dealer allows his customers a discount of 35% and still gains 30%. If the cost price of an article is ₹950, then what is its marked price (in ₹)?

- Ans  1. 1,900
 2. 1,750
 3. 1,800
 4. 1,500

Question ID : 6549786782

Status : **Not Answered**

Chosen Option : --

Q.23 In a circle, two chords UV and WX intersect each other at a point Z within the circle. If $UZ = 18$ cm, $ZV = 6$ cm and $WZ = 9$ cm, then the length of ZX is:

- Ans**
- ☒ 1. 6 cm
 - ☒ 2. 8 cm
 - ☒ 3. 4 cm
 - ☒ 4. 10 cm

Question ID : 6549788706

Status : Not Answered

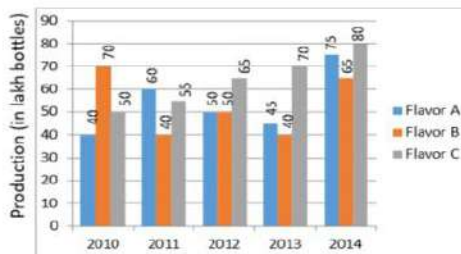
Chosen Option : --

Q.24

Study the given bar graph and answer the question that follows.

A soft drink company prepares drinks of three different flavours A, B and C. The bar graph shows the production of three flavours over a period of five years from 2010 to 2014.

Production of three different flavours A, B and C by a company over the five years (in lakh bottles).



What percentage of the total production of soft drink of flavour A in 2013 and 2014 is the total production of soft drink of flavour B in 2011 and 2012?

- Ans**
- ☒ 1. 60 %
 - ☒ 2. 70 %
 - ☒ 3. 55 %
 - ☒ 4. 75 %

Question ID : 6549787407

Status : Answered

Chosen Option : 4

Q.25 The average of 29 numbers is 38. The average of the first 19 numbers is 34 and that of the last 9 numbers is 48. The 20th number is:

- Ans**
- ☒ 1. 28
 - ☒ 2. 26
 - ☒ 3. 24
 - ☒ 4. 22

Question ID : 6549788700

Status : Answered

Chosen Option : 3

Q.1 Who among the following is the author of 'The Brahma Sutra – The Philosophy of Spiritual life'?

- Ans ☒ 1. Sarvepalli Radhakrishnan
☐ 2. Indira Gandhi
☐ 3. Sarojini Naidu
☐ 4. Rajendra Prasad

Question ID : 6549786821
Status : Answered
Chosen Option : 1

Q.2 Which company invested ₹11,400 crores during the financial year 2019-2020 across its market payments and wholesale business units in India to strengthen its foothold in India?

- Ans ☐ 1. Apple Inc.
☐ 2. Walmart Inc.
☐ 3. eBay Inc.
☒ 4. Amazon.com, Inc.

Question ID : 6549786811
Status : Answered
Chosen Option : 2

Q.3 Who became the Chief Justice of Jammu and Kashmir High Court in December 2020?

- Ans ☐ 1. Sanjib Banerjee
☒ 2. Pankaj Mithal
☐ 3. Hemant Kumar Pandey
☐ 4. Umesh Sinha

Question ID : 6549786824
Status : Not Answered
Chosen Option : --

Q.4 A mass of snow and ice that moves slowly under the influence of gravity along a confined course away from its place of accumulation is called a ____.

- Ans ☐ 1. lagoon
☒ 2. glacier
☐ 3. block mountain
☐ 4. plateau

Question ID : 6549786816
Status : Answered
Chosen Option : 2

Q.5 Who among the following is one of the seven winners of the Young Champions of the Earth 2020 prize given by UNEP?

- Ans**
- ☒ 1. Veer Vikram Singh
 - ☒ 2. Vidyut Mohan
 - ☒ 3. Suchi Chaudhary
 - ☒ 4. Khushi Chindaliya

Question ID : **6549786809**
Status : **Not Answered**
Chosen Option : --

Q.6 As of January 2021, how many Olympic medals did India win in the sport of field hockey?

- Ans**
- ☒ 1. 9
 - ☒ 2. 12
 - ☒ 3. 11
 - ☒ 4. 8

Question ID : **6549788746**
Status : **Answered**
Chosen Option : 4

Q.7 In 711 CE, Arab general _____ conquered Sind, which became a part of the Caliph's domain.

- Ans**
- ☒ 1. Qutub-ud-din Aibak
 - ☒ 2. Muhammad-Bin-Tughlaq
 - ☒ 3. Muhammad Bin Qasim
 - ☒ 4. Muhammad Ghori

Question ID : **6549786819**
Status : **Answered**
Chosen Option : 4

Q.8 On which of the following days is World Computer Literacy Day observed?

- Ans**
- ☒ 1. 5 June
 - ☒ 2. 2 December
 - ☒ 3. 13 May
 - ☒ 4. 30 September

Question ID : **6549786804**
Status : **Not Answered**
Chosen Option : --

Q.9 Which of the following recommends Minimum Support Prices for crops in India?

- Ans ☒ 1. Commission for Agricultural Costs & Prices
☐ 2. NITI Aayog
☐ 3. Indian Council of Agricultural Research
☐ 4. Fiscal Prudence Commission

Question ID : 6549788729

Status : Answered

Chosen Option : 2

Q.10 Who among the following was adjudged as the 'Player of the Series' in the Australia versus India T20I series played in December 2020?

- Ans ☐ 1. Matthew Wade
☐ 2. T Natarajan
☒ 3. Hardik Pandya
☐ 4. Mitchell Swepson

Question ID : 6549788744

Status : Not Answered

Chosen Option : --

Q.11 A message that tries to trick a person into providing information such as his social security number, bank account information or login username and password for a website is a type of malware called:

- Ans ☐ 1. Worms
☐ 2. Zombie
☐ 3. Macro Virus
☒ 4. Phishing

Question ID : 6549788722

Status : Answered

Chosen Option : 1

Q.12 What is the molecular formula for hydrochloric acid?

- Ans ☐ 1. H_2SO_4
☐ 2. HNO_3
☐ 3. KOH
☒ 4. HCl

Question ID : 6549788732

Status : Answered

Chosen Option : 4

Q.13 Mount Jopuno is situated in which of the following states?

- Ans
- ☒ 1. Uttarakhand
 - ☒ 2. Sikkim
 - ☒ 3. Andhra Pradesh
 - ☒ 4. Himachal Pradesh

Question ID : 6549786815
Status : Not Answered
Chosen Option : --

Q.14 From which of the following sources does the brain get energy?

- Ans
- ☒ 1. Nucleic acids
 - ☒ 2. Fatty acids
 - ☒ 3. Amino acids
 - ☒ 4. Glucose

Question ID : 6549786812
Status : Answered
Chosen Option : 4

Q.15 Which of the following is the largest river island in India?

- Ans
- ☒ 1. Diu island
 - ☒ 2. Gundu island
 - ☒ 3. Divar island
 - ☒ 4. Majuli island

Question ID : 6549788737
Status : Not Answered
Chosen Option : --

Q.16 What is the minimum age requirement for appointment as a Governor?

- Ans
- ☒ 1. 26 years
 - ☒ 2. 35 years
 - ☒ 3. 25 years
 - ☒ 4. 42 years

Question ID : 6549788742
Status : Answered
Chosen Option : 2

Q.17 Which of the following was included as an official Olympic sport in December 2020?

- Ans  1. Breakdancing
-  2. Cricket
-  3. Chess
-  4. Bowling

Question ID : 6549786826
Status : Answered
Chosen Option : 3

Q.18 Who among the following was appointed as the Chairman of the National Stock Exchange (NSE) in December 2019?

- Ans  1. Girish Chandra Chaturvedi
-  2. Vikramajit Sen
-  3. Ashok Chawla
-  4. Ashishkumar Chauhan

Question ID : 6549788726
Status : Not Answered
Chosen Option : --

Q.19 Who was the President of the Indian National Congress when India won its freedom in the year 1947?

- Ans  1. Abul Kalam Azad
-  2. Vallabhbhai Patel
-  3. Jawaharlal Nehru
-  4. J. B. Kripalani

Question ID : 6549788739
Status : Answered
Chosen Option : 4

Q.20 ISRO launched _____, it's 42nd communication satellite, in December 2020.

- Ans  1. CMS-01
-  2. GSAT-31
-  3. GSAT-30
-  4. INSAT-4CR

Question ID : 6549786814
Status : Answered
Chosen Option : 2

Q.21 As of December 2020, under the Startup India Initiative, the monthly allowance for startups with women as founder/co-founder was _____ per month for a period of one year.

- Ans
- ☒ 1. ₹50,000
 - ☒ 2. ₹30,000
 - ☒ 3. ₹20,000
 - ☒ 4. ₹40,000

Question ID : 6549788727

Status : Not Answered

Chosen Option : --

Q.22 Who among the following won the Golden Globe 2020 award for 'Best Performance by an Actor in a Motion Picture – Drama'?

- Ans
- ☒ 1. Lucas Hedges
 - ☒ 2. Joaquin Phoenix
 - ☒ 3. John David Washington
 - ☒ 4. Jonathan Pryce

Question ID : 6549788741

Status : Not Answered

Chosen Option : --

Q.23 Which of the following is NOT one of the three parallel ranges of the Himalayas in its longitudinal extent?

- Ans
- ☒ 1. Shiwaliks
 - ☒ 2. Himshikha
 - ☒ 3. Himachal
 - ☒ 4. Himadri

Question ID : 6549788736

Status : Answered

Chosen Option : 2

Q.24 With which of the following musical instruments is the musician Pandit Shiv Kumar Sharma associated?

- Ans
- ☒ 1. Dholak
 - ☒ 2. Sarangi
 - ☒ 3. Santoor
 - ☒ 4. Sarod

Question ID : 6549788724

Status : Answered

Chosen Option : 3

Q.25 Which of the following festivals is called the month of merits and is celebrated between May and June?

Ans



1. Saga Dawa



2. Bhanu Jaati



3. Losar



4. Losoong

Question ID : 6549786806

Status : **Not Answered**

Chosen Option : --

Combined Higher Secondary Level Examination 2020 (Tier-I)

Roll Number	Join Telegram: HaryanaJobs.in
Candidate Name	
Venue Name	
Exam Date	10/08/2021
Exam Time	9:00 AM - 10:00 AM
Subject	Combined Higher Secondary Level Exam 2020

Section : English Language

Q.1 Select the option that can be used as a one-word substitute for the given group of words.

A large cage, building or enclosure to keep birds

- Ans
- ☒ 1. Zoo
 - ☒ 2. Apiary
 - ☒ 3. Aquarium
 - ☒ 4. Aviary

Question ID : 6549786949

Status : Answered

Chosen Option : 4

Q.2 Select the most appropriate antonym of the given word.

Expunge

- Ans
- ☒ 1. Insert
 - ☒ 2. Deplete
 - ☒ 3. Exhaust
 - ☒ 4. Remove

Question ID : 6549789367

Status : Answered

Chosen Option : 1

Q.3 Select the most appropriate ANTONYM of the given word.

Uphold

- Ans
- ☒ 1. Support
 - ☒ 2. Maintain
 - ☒ 3. Endorse
 - ☒ 4. Oppose

Question ID : 6549786944

Status : Answered

Chosen Option : 4

Q.4 Given below are four sentences in jumbled order. Select the option that gives their correct order.

- A. His school was closed as it was the height of summer.
- B. It was on one such day that Ranji discovered a pool in the forest.
- C. As he had no friends yet, he wandered alone in the hills and forests.
- D. Ranji had been less than a month in Rajpur.

- Ans
- ☒ 1. ACBD
 - ☒ 2. CBDA
 - ☒ 3. BADC
 - ☒ 4. DACB

Question ID : 6549789363

Status : Not Attempted and
Marked For Review

Chosen Option : -

Q.5 The following sentence has been divided into parts. One of them may contain an error. Select the part that contains the error from the given options. If you don't find any error, mark 'No error' as your answer.

The Prime Minister chair a high-level meeting / with senior officials / to review the Covid situation.

- Ans
- ☒ 1. with senior officials
 - ☒ 2. The Prime Minister chair a high-level meeting
 - ☒ 3. to review the Covid situation
 - ☒ 4. No error

Question ID : 6549786932

Status : Answered

Chosen Option : 2

Q.6 Select the most appropriate word to fill in the blank.

In the past month, the price of oil has _____ several times.

- Ans
- ☒ 1. fumbled
 - ☒ 2. fluctuated
 - ☒ 3. faltered
 - ☒ 4. failed

Question ID : 6549786954

Status : Answered

Chosen Option : 2

Q.7 Select the most appropriate one-word substitution for the given words.

Leather straps put around a horse's head to control it

- Ans ☒ 1. bridle
☒ 2. bridal
☒ 3. saddle
☒ 4. stirrup

Question ID : 6549789374

Status : Answered

Chosen Option : 1

Q.8 Select the correct indirect form of the given sentence.

Mother said, "All the guests will arrive tonight."

- Ans ☒ 1. Mother said that all the guests would arrive that night.
☒ 2. Mother said that all the guests will arrive tonight.
☒ 3. Mother told that all the guests would arrive tonight.
☒ 4. Mother said that all the guests will arrive that night.

Question ID : 6549789354

Status : Answered

Chosen Option : 1

Q.9 Sentences of a paragraph are given below in jumbled order. Arrange the sentences in the right order to form a meaningful and coherent paragraph.

- A. The word Jama means 'a robe or shawl' and War means 'Yard (the measuring unit)'.
B. Jamawar (also spelled as Jamavar) is a fabric that has its roots in Kashmir.
C. People in the earlier times used to buy a yard of the shawl to protect themselves from the chilly winter.
D. The Jamawar is an adulterated form of Pashmina silk since it contains a blend of cotton and wool.

- Ans ☒ 1. BACD
☒ 2. BCAD
☒ 3. DCBA
☒ 4. DCAB

Question ID : 6549786940

Status : Answered

Chosen Option : 1

Q.10 Select the most appropriate meaning of the given idiom.

Rank and file

- Ans ☒ 1. The manager of a personnel department
☒ 2. Ordinary workers in a company
☒ 3. Financial activities in a firm
☒ 4. A very well-organised company

Question ID : 6549786946

Status : Not Answered

Chosen Option : -

Q.11 Select the most appropriate meaning of the underlined idiom in the given sentence.

My brother has decided to settle in London for good.

- Ans
- ☒ 1. forever
 - ☐ 2. briefly
 - ☐ 3. for a better income
 - ☐ 4. for a promotion

Question ID : 6549789369
Status : Answered
Chosen Option : 1

Q.12 Select the most appropriate option to substitute the underlined segment in the given sentence. If there is no need to substitute it, select 'No substitution required'.

Unless someone makes a complaint, they will not clear the garbage from the street.

- Ans
- ☐ 1. Without someone makes a complaint
 - ☒ 2. No substitution required
 - ☐ 3. Despite someone makes a complaint
 - ☐ 4. Except someone makes a complaint

Question ID : 6549786941
Status : Answered
Chosen Option : 2

Q.13 Select the INCORRECTLY spelt word.

- Ans
- ☐ 1. Plump
 - ☐ 2. Muscle
 - ☐ 3. Gnaw
 - ☒ 4. Rinckle

Question ID : 6549786947
Status : Answered
Chosen Option : 4

Q.14 In the given sentence, identify the segment which contains a grammatical error.

We are yet living in the same house.

- Ans
- ☐ 1. We are
 - ☐ 2. same house
 - ☐ 3. in the
 - ☒ 4. yet living

Question ID : 6549789355
Status : Answered
Chosen Option : 4

Q.15 Select the most appropriate synonym of the given word.


FORSAKE

- Ans  1. desert
 2. hold
 3. claim
 4. help

Question ID : 6549789375
Status : Answered
Chosen Option : 1

Q.16 Select the most appropriate synonym of the given word.





Profuse

- Ans  1. Meagre
 2. Abundant
 3. Limited
 4. Consistent

Question ID : 6549786952
Status : Answered
Chosen Option : 2

Q.17 Select the option that expresses the given sentence in passive voice.

The clouds hid the sun.

- Ans  1. The sun was hidden by the clouds.
 2. The sun is hidden by the clouds.
 3. The clouds are hid by the sun.
 4. The sun was hide by the clouds.

Question ID : 6549786929
Status : Answered
Chosen Option : 1

Q.18 Select the misspelt word.

- Ans  1. mature
 2. mischief
 3. miserable
 4. moisture

Question ID : 6549789372
Status : Marked For Review
Chosen Option : 1

Q.19 Select the most appropriate option to substitute the underlined segment in the given sentence. If there is no need to substitute it, select 'No substitution'.

How long have you being seating on this bench?

- Ans
- ☒ 1. being sat
 - ☒ 2. No substitution
 - ☒ 3. been sitting
 - ☒ 4. been seating

Question ID : 6549789366

Status : Answered

Chosen Option : 3

Q.20 Fill in the blank with most appropriate word.

The air _____ has gone up significantly.

- Ans
- ☒ 1. rent
 - ☒ 2. charge
 - ☒ 3. cost
 - ☒ 4. fare

Question ID : 6549789377

Status : Answered

Chosen Option : 4

Comprehension:

In the following passage, some words have been deleted. Select the most appropriate option to fill in each blank.

Kashmiri carpets have been appreciated since a long time for their intricate work. Their uniqueness (1) _____ in their manufacturing. These carpets are (2) _____ handmade and are knotted, not tufted. You can (3) _____ different carpets from a variety of silk or woolen ones. These are (4) _____ in colourful themes. The main art of carpet manufacturing is (5) _____ with the knotting. These knots determine the durability and value of the carpet.

SubQuestion No : 21

Q.21 Select the most appropriate option to fill in blank no. 1.

- Ans
- ☒ 1. is lying
 - ☒ 2. lying
 - ☒ 3. lies
 - ☒ 4. lie

Question ID : 6549786934

Status : Answered

Chosen Option : 3

Comprehension:

In the following passage, some words have been deleted. Select the most appropriate option to fill in each blank.

Kashmiri carpets have been appreciated since a long time for their intricate work. Their uniqueness (1) _____ in their manufacturing. These carpets are (2) _____ handmade and are knotted, not tufted. You can (3) _____ different carpets from a variety of silk or woolen ones. These are (4) _____ in colourful themes. The main art of carpet manufacturing is (5) _____ with the knotting. These knots determine the durability and value of the carpet.

SubQuestion No : 22

Q.22 Select the most appropriate option to fill in blank no. 2.

- Ans
- ☒ 1. absolutely
 - ☒ 2. merely
 - ☒ 3. simply
 - ☒ 4. purely

Question ID : 6549786935

Status : Answered

Chosen Option : 4

Comprehension:

In the following passage, some words have been deleted. Select the most appropriate option to fill in each blank.

Kashmiri carpets have been appreciated since a long time for their intricate work. Their uniqueness (1) _____ in their manufacturing. These carpets are (2) _____ handmade and are knotted, not tufted. You can (3) _____ different carpets from a variety of silk or woolen ones. These are (4) _____ in colourful themes. The main art of carpet manufacturing is (5) _____ with the knotting. These knots determine the durability and value of the carpet.

SubQuestion No : 23

Q.23 Select the most appropriate option to fill in blank no. 3.

- Ans
- ☒ 1. indicate
 - ☒ 2. elect
 - ☒ 3. choose
 - ☒ 4. decide

Question ID : 6549786936

Status : Answered

Chosen Option : 3

Comprehension:

In the following passage, some words have been deleted. Select the most appropriate option to fill in each blank.

Kashmiri carpets have been appreciated since a long time for their intricate work. Their uniqueness (1) _____ in their manufacturing. These carpets are (2) _____ handmade and are knotted, not tufted. You can (3) _____ different carpets from a variety of silk or woolen ones. These are (4) _____ in colourful themes. The main art of carpet manufacturing is (5) _____ with the knotting. These knots determine the durability and value of the carpet.

SubQuestion No : 24

Q.24 Select the most appropriate option to fill in blank no. 4.

- Ans
- ☒ 1. devised
 - ☒ 2. designed
 - ☒ 3. defined
 - ☒ 4. described

Question ID : 6549786937

Status : Answered

Chosen Option : 2

Comprehension:

In the following passage, some words have been deleted. Select the most appropriate option to fill in each blank.

Kashmiri carpets have been appreciated since a long time for their intricate work. Their uniqueness (1) _____ in their manufacturing. These carpets are (2) _____ handmade and are knotted, not tufted. You can (3) _____ different carpets from a variety of silk or woolen ones. These are (4) _____ in colourful themes. The main art of carpet manufacturing is (5) _____ with the knotting. These knots determine the durability and value of the carpet.

SubQuestion No : 25

Q.25 Select the most appropriate option to fill in blank no. 5.

- Ans
- ☒ 1. assisted
 - ☒ 2. abetted
 - ☒ 3. attended
 - ☒ 4. associated


Question ID : 6549786938

Status : Answered

Chosen Option : 4

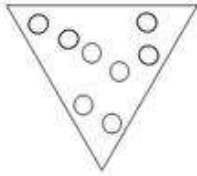
Section : General Intelligence

Q.1 The sequence of folding a piece of paper and the manner in which the folded paper has been cut is shown in the following figures. How would this paper look when unfolded?

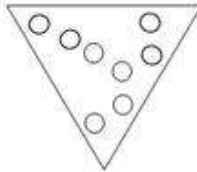


Ans

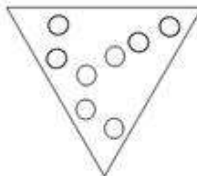
☒ 1.



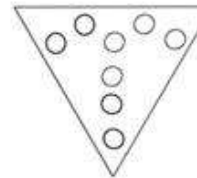
☒ 2.



☒ 3.



☒ 4.



Question ID : 6549786977

Status : Answered

Chosen Option : 2

Q.2 Four options have been given, out of which three are alike in some manner and one is different. Select the option that is different.

Ans

☒ 1. Delhi

☒ 2. Puducherry

☒ 3. Chandigarh

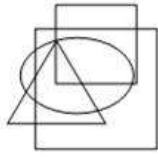
☒ 4. Jammu & Kashmir

Question ID : 6549786971

Status : Answered

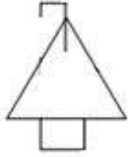
Chosen Option : 1

Q.3 Select the option that is embedded in the given figure (rotation is NOT allowed).

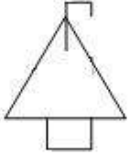


Ans

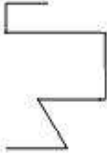
✗ 1.



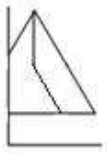
✗ 2.



✓ 3.

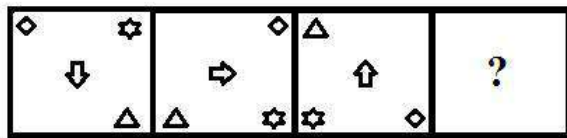


✗ 4.



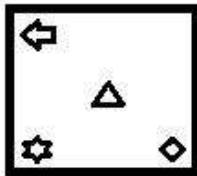
Question ID : 6549786976
Status : Answered
Chosen Option : 4

Q.4 Select the figure that will replace the question mark (?) in the following figure series.

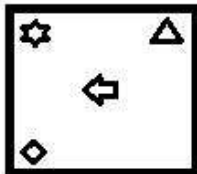


Ans

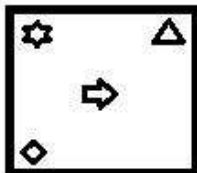
✗ 1.



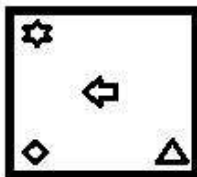
✓ 2.



✗ 3.



✗ 4.



Question ID : 6549789398

Status : Answered

Chosen Option : 2

Q.5 Four number-pairs have been given, out of which three are alike in some manner and one is different. Select the one that is different.

Ans

✗ 1. 17 : 291

✗ 2. 15 : 227

✓ 3. 13 : 169

✗ 4. 11 : 123

Question ID : 6549789385

Status : Answered

Chosen Option : 3

Q.6 Select the option in which the numbers share the same relationship as that shared by the numbers in the given set.

(7, 4, 33)

- Ans ☒ 1. (9, 5, 56)
☒ 2. (7, 4, 71)
☒ 3. (8, 5, 40)
☒ 4. (11, 8, 175)

Question ID : 6549789383

Status : Answered

Chosen Option : 1

Q.7 Which two digits need to be interchanged so as to balance the given equation?

$$75 \div 18 + 51 \times 8 - 82 = 87$$

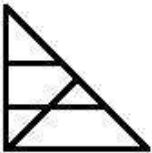
- Ans ☒ 1. 7 and 8
☒ 2. 1 and 5
☒ 3. 5 and 2
☒ 4. 8 and 2

Question ID : 6549786956

Status : Not Attempted and
Marked For Review

Chosen Option : -

Q.8 How many triangles are there in the figure given below?



- Ans ☒ 1. 8
☒ 2. 7
☒ 3. 9
☒ 4. 6

Question ID : 6549789399

Status : Answered

Chosen Option : 2

Q.9 उस विकल्प का चयन कीजिए जिसका तीसरे शब्द से वही संबंध है, जो दूसरे शब्द का पहले शब्द से है।

बिस्तर : गद्दा :: कुर्सी : ?

- Ans
- ☒ 1. बोरा
 - ☐ 2. कुशन
 - ☐ 3. तकिया
 - ☐ 4. फॉम

Question ID : 6549786966

Status : Answered

Chosen Option : 2

Q.10 If Raman is the brother of the son of Kshitij's son, how is Raman related to Kshitij?

- Ans
- ☒ 1. Grandson
 - ☐ 2. Nephew
 - ☐ 3. Cousin
 - ☐ 4. Son

Question ID : 6549786059

Status : Answered

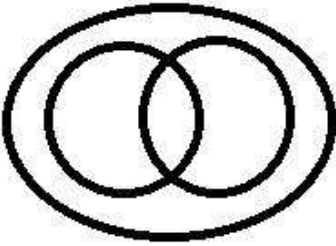
Chosen Option : 1

Q.11 Which of the following Venn diagrams best represents the words given below?

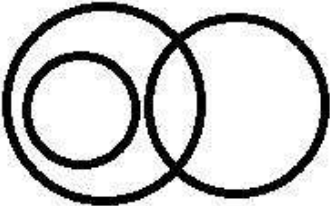
Engineers, Educated Persons, Males

Ans

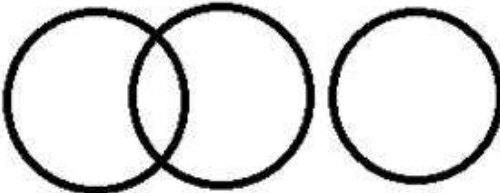
✗ 1.



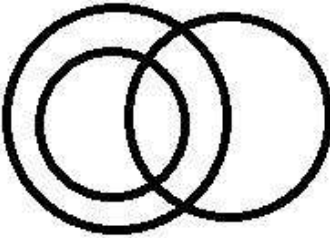
✗ 2.



✗ 3.



✓ 4.



Question ID : 6549789403

Status : Answered

Chosen Option : 4

Q.12 Select the word-pair in which the two words are related in the same way as are the two words in the following word-pair.

Growth : Expansion

Ans

✗ 1. Child : Birth

✓ 2. Urge : Request

✗ 3. First : Last

✗ 4. Temporary : Permanent

Question ID : 6549789393

Status : Answered

Chosen Option : 2

Q.13 Three of the following four letter-clusters are alike in a certain way and one is different. Select the odd one.

- Ans  1. KMQT
 2. LNQU
 3. QSVZ
 4. ACFJ

Question ID : 6549789394

Status : Answered

Chosen Option : 1

Q.14 Select the correct option that indicates the arrangement of the following words in a logical and meaningful order.

1. Universe
2. Chennai
3. World
4. Asia
5. Tamil Nadu

- Ans  1. 1, 4, 3, 5, 2
 2. 1, 3, 4, 2, 5
 3. 1, 3, 4, 5, 2
 4. 3, 1, 5, 4, 2



Question ID : 6549789386

Status : Answered

Chosen Option : 3

Q.15 Select the combination of letters that when sequentially placed in the blanks of the given letter series will complete the series.

a _ bcd _ _ aabc _ dea _ _ cd _ e

- Ans  1. adebdda
 2. adedabd
 3. adabded
 4. dabdade

Question ID : 6549788583

Status : Answered

Chosen Option : 1

Q.16 Select the correct mirror image of the given figure when the mirror is placed at the right side.

GRS?@915

Ans

☒ 1. 519@? SRG

☒ 2. 519@? SRG

☒ 3. 519@? SRG

☒ 4. 519@? SRG

Question ID : 6549786978

Status : Answered

Chosen Option : 4

Q.17 In a certain code language, ENDORSE is written as VMWLIHV. How will INSTRUCT be written in that language?

Ans

☒ 1. SNRGSAOT

☒ 2. SMSGSZPR

☒ 3. RMSHRZPG

☒ 4. RMHGIFXG

Question ID : 6549786963

Status : Answered

Chosen Option : 4

Q.18 Select the number from among the given options that can replace the question mark (?) in the following series.

8, 24, 48, 80, ?, 168

Ans

☒ 1. 122

☒ 2. 116

☒ 3. 120

☒ 4. 118

Question ID : 6549786960

Status : Answered

Chosen Option : 3

Q.19 Vishal has a total of ₹4,100 in the denominations of 5, 10, 20 and 50 rupee notes. He has an equal number of 5 and 10 rupee notes. The number of 20 rupee notes is double the number of 5 rupee notes. The number of 50 rupee notes is thrice the number of 10 rupee notes. How many 5 rupee notes are there with Vishal?

Ans

☒ 1. 10

☒ 2. 40

☒ 3. 30

☒ 4. 20

Question ID : 6549789379

Status : Answered

Chosen Option : 4

Q.20 Read the given statements and conclusions carefully. Assuming that the information given in the statements is true, even if it appears to be at variance with commonly known facts, decide which of the given conclusions logically follow(s) from the statements.

Statements:

All computers are calculators.

All calculators are boxes.

Conclusions:

I. All computers are boxes.

II. Some boxes are computers.

- Ans ☒ 1. Both conclusions I and II follow.
- ☐ 2. Only conclusion II follows.
- ☐ 3. Neither conclusion I nor II follows.
- ☐ 4. Only conclusion I follows.

Question ID : 6549786972

Status : Answered

Chosen Option : 1

Q.21 In a code language, if FORTUNE is written as 716192122156, then how will OCTOBER be written in the same language?

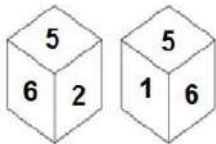
- Ans ☐ 1. 16420173819
- ☒ 2. 16421163619
- ☐ 3. 14422163519
- ☐ 4. 1532063618

Question ID : 6549789388

Status : Answered

Chosen Option : 2

Q.22 Two different positions of the same dice are shown, the six faces of which are numbered from 1 to 6. Which number is on the face opposite to the face showing '2'?



- Ans ☐ 1. 3
- ☐ 2. 6
- ☐ 3. 5
- ☒ 4. 1





Question ID : 6549789397

Status : Answered

Chosen Option : 4

Q.23 Select the option in which the numbers are related in the same way as are the numbers of the following set.

29 : 36 : 39

- Ans  1. 48 : 52 : 55
 2. 54 : 58 : 61
 3. 69 : 72 : 76
 4. 78 : 79 : 82

Question ID : 6549786958

Status : Not Attempted and
Marked For Review

Chosen Option : -

Q.24 Select the option that is related to the third term in the same way as the second term is related to the first term.

DEBONAIR : EDRIOBAN :: HALLMARK : ?

- Ans  1. LLAMKRAM
 2. AHKRLMA
 3. AHKRLAM
 4. AHLLAMKR



Question ID : 6549786965

Status : Answered

Chosen Option : 3

Q.25 Select the option that is related to the third number in the same way as the second number is related to the first number.

6 : 27 :: 9 : ?

- Ans  1. 66
 2. 74
 3. 110
 4. 95

Question ID : 6549789381

Status : Not Attempted and
Marked For Review

Chosen Option : -

Section : Quantitative Aptitude

Q.1 A solid metallic sphere of radius 10 cm is melted and recast into spheres of radius 2 cm each. How many such spheres can be made?

- Ans**
- ☒ 1. 64
 - ☒ 2. 216
 - ☒ 3. 100
 - ☒ 4. 125

Question ID : 6549786982

Status : Answered

Chosen Option : 4

Q.2 There are 3 groups of persons – male, female and children. There are 20 males and the number of females and children taken together is 4 more than that of the males. The average weight of males is 54 kg, that of females is 49 kg and that of children is 30 kg. If the average weight of the whole group is 48.25 kg, then what is the difference between the number of females and the number of children?

- Ans**
- ☒ 1. 17
 - ☒ 2. 10
 - ☒ 3. 7
 - ☒ 4. 14

Question ID : 6549789407

Status : Not Attempted and Marked For Review

Chosen Option : –

Q.3 If $x + \frac{1}{15x} = 3$, then the value of $9x^3 + \frac{1}{375x^3}$ will be:

- Ans**
- ☒ 1. 237.6
 - ☒ 2. 376.2
 - ☒ 3. 273.6
 - ☒ 4. 367.2

Question ID : 6549786994

Status : Answered

Chosen Option : 1

Q.4 Simplify the given expression.

$$\left(x - \frac{2}{x}\right)^3 - \left(x + \frac{2}{x}\right)^3$$

Ans

✓ 1. $-4\left(3x + \frac{4}{x^3}\right)$

✗ 2. $4\left(3x - \frac{4}{x^3}\right)$

✗ 3. $-4\left(x + \frac{4}{x^3}\right)$

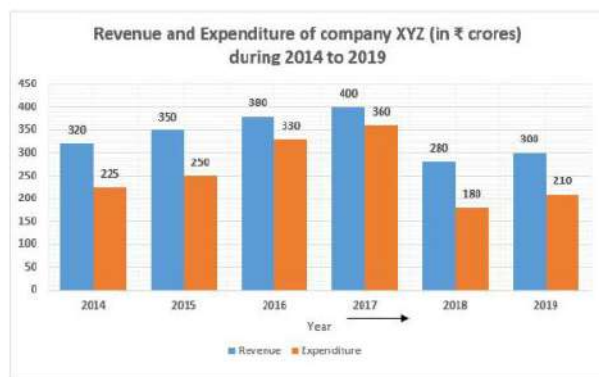
✗ 4. $2\left(x - \frac{4}{x^3}\right)$

Question ID : 6549789417

Status : Answered

Chosen Option : 1

Q.5 Study the given graph and answer the question that follows.



By what percentage is the average expenditure of the company in 2014, 2016 and 2018 less than the revenue in 2017?

Ans

✗ 1. 37.5%

✗ 2. 56.25%

✗ 3. 63.27%

✓ 4. 38.75%

Question ID : 6549787810

Status : Answered

Chosen Option : 4

Q.6 Evaluate the following expression.

$$\frac{3(\cot^2 46^\circ - \sec^2 44^\circ)}{2(\sin^2 28^\circ + \sin^2 62^\circ)} + \frac{2\cos^2 60^\circ \tan^2 33^\circ \tan^2 57^\circ}{\sec^2(90^\circ - \theta) - \cot^2 \theta}$$

- Ans ☒ 1. -1
☒ 2. 1
☒ 3. -2
☒ 4. 2

Question ID : 6549789423

Status : Answered

Chosen Option : 1

Q.7 Nalini's younger brother is 12 years old. If the ratio of the age of Nalini to that of her brother is 7 : 6, then what will be ratio in their ages 6 years hence?

- Ans ☒ 1. 10 : 9
☒ 2. 13 : 12
☒ 3. 17 : 15
☒ 4. 10 : 6

Question ID : 6549789411

Status : Answered

Chosen Option : 1

Q.8 $16\frac{1}{4} \div [2\frac{1}{6} + \{4\frac{1}{3} - (2\frac{1}{2} + \frac{3}{4})\}]$ is equal to:

- Ans ☒ 1. 6
☒ 2. 4
☒ 3. 5
☒ 4. 3

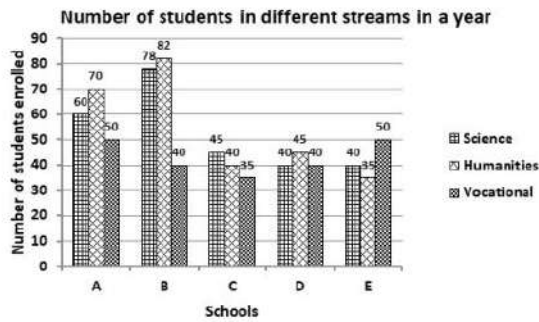
Question ID : 6549786997

Status : Answered

Chosen Option : 3

Q.9 The number of students enrolled in different streams at Senior Secondary level in five schools is shown in the bar graph.

What is the ratio of the number of students of science stream of schools A, B and D taken together to the number of students of vocational stream in schools B, D and E taken together?



- Ans
- ☒ 1. 94 : 65
 - ☒ 2. 178 : 125
 - ☒ 3. 7 : 5
 - ☒ 4. 89 : 65

Question ID : 6549789428

Status : Answered

Chosen Option : 4

Q.10 ABC is a triangle inscribed in a circle and $\angle ACB$ is equal to 35° . P is a point on the circle on the side AB, opposite to C. What is the value of $\angle APB$ in degrees?

- Ans
- ☒ 1. 72.5
 - ☒ 2. 145
 - ☒ 3. 175
 - ☒ 4. 70

Question ID : 6549789413

Status : Answered

Chosen Option : 2

Q.11 Let O be the centre of a circle and AC be the diameter. BD is a chord intersecting AC at E. AD and AB are joined. If $\angle BOC = 40^\circ$ and $\angle AOD = 120^\circ$, then $\angle BEC$ is equal to:

- Ans
- ☒ 1. 55°
 - ☒ 2. 80°
 - ☒ 3. 90°
 - ☒ 4. 70°

Question ID : 6549786990

Status : Answered

Chosen Option : 2

Q.12 The simple interest on a sum of ₹12,000 at the end of 5 years is ₹6,000. What would have been the compound interest on the same sum at the same rate for 3 years when compounded annually?

- Ans
- ☒ 1. ₹3,970
 - ☒ 2. ₹3,972
 - ☒ 3. ₹3,600
 - ☒ 4. ₹2,520

Question ID : 6549789412
Status : Answered
Chosen Option : 2

Q.13 10 men or 15 women can complete a work in 30 days. In how many days can 15 men and 27 women complete the work?

- Ans
- ☒ 1. $6\frac{1}{11}$
 - ☒ 2. $5\frac{1}{11}$
 - ☒ 3. $11\frac{1}{11}$
 - ☒ 4. $9\frac{1}{11}$

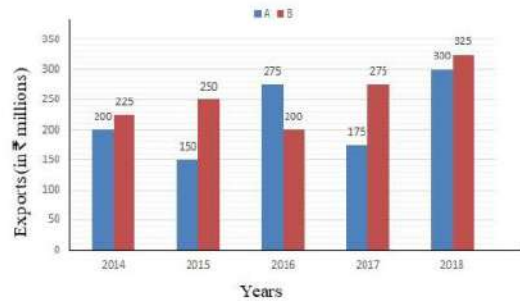
Question ID : 6549786980
Status : Answered
Chosen Option : 4

Q.14 A person saves 25% of his income. If his income increases by 20% and his saving remains the same, then what will be the increased percentage of his expenditure?

- Ans
- ☒ 1. 20
 - ☒ 2. 26
 - ☒ 3. 30
 - ☒ 4. $26\frac{2}{3}$

Question ID : 6549789409
Status : Answered
Chosen Option : 4

Q.15 Study the given bar graph and answer the question that follows.
The bar graph shows the exports of cars of types A and B (in ₹ million).



What is the ratio of the total exports of cars of type A in 2016 and 2018 to the total exports of cars of type B in 2015 and 2017?

- Ans ☒ 1. 23 : 21
☒ 2. 15 : 29
☒ 3. 18 : 23
☒ 4. 21 : 23

Question ID : 6549787001

Status : Answered

Chosen Option : 1

Q.16 If $x^6 - 6\sqrt{6}y^6 = (x^2 + Ay^2)(x^4 + Bx^2y^2 + Cy^4)$, then what will be the value of $(A^2 - B^2 + C^2)$?

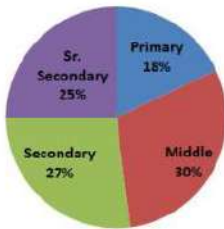
- Ans ☒ 1. 27
☒ 2. 42
☒ 3. 36
☒ 4. 18

Question ID : 6549786995

Status : Not Attempted and
Marked For Review

Chosen Option : -

Q.17 Students of Primary, Middle, Secondary and Sr. Secondary classes collected donation for a Relief Fund as shown in the given pie chart. If the donation collected from Middle classes was ₹6,750, then how much more money was collected by Middle classes as compared to Secondary classes?



- Ans
- ☒ 1. ₹6,075
 - ☒ 2. ₹1,125
 - ☒ 3. ₹675
 - ☒ 4. ₹2,025

Question ID : 6549788416

Status : Answered

Chosen Option : 2

Q.18 For $\theta : 0^\circ < \theta < 90^\circ$

$3 \sec \theta + 4 \cos \theta = 4\sqrt{3}$, find the value of $(1 - \sin \theta + \cos \theta)$.

- Ans
- ☒ 1. $\frac{1 + 2\sqrt{3}}{2}$
 - ☒ 2. $\frac{1 + \sqrt{3}}{2}$
 - ☒ 3. $\frac{1 - \sqrt{3}}{2}$
 - ☒ 4. $\frac{1 - 2\sqrt{3}}{2}$

Question ID : 6549787000

Status : Not Attempted and Marked For Review

Chosen Option : -

Q.19 An article is sold at a certain price. If it is sold at $33\frac{1}{3}\%$ of this price, there is a loss of $33\frac{1}{3}\%$. What is the percentage profit or percentage loss when it is sold at 40% of the original selling price?

- Ans
- ☒ 1. Loss 12%
 - ☒ 2. Profit 18%
 - ☒ 3. Loss 20%
 - ☒ 4. Profit 15%

Question ID : 6549786986

Status : Answered

Chosen Option : 3

Q.20 In triangle ABC , AD is the internal bisector of $\angle A$ meeting BC at D . If $BD = 3.6$ cm and $BC = 8$ cm, then the ratio of AB to AC will be:

- Ans
- ☒ 1. 11 : 9
 - ☒ 2. 7 : 13
 - ☒ 3. 13 : 7
 - ☒ 4. 9 : 11

Question ID : 6549786992
Status : Answered
Chosen Option : 4

Q.21 In $\triangle ABC$, points D and E are on AB and AC , respectively, such that DE is parallel to BC . If $AD = 3$ cm, $BD = 6$ cm and $AE = 2$ cm, then find the length of CE .

- Ans
- ☒ 1. 6 cm
 - ☒ 2. 16 cm
 - ☒ 3. 8 cm
 - ☒ 4. 4 cm

Question ID : 6549789415
Status : Answered
Chosen Option : 4

Q.22 After allowing a discount of 15% on the marked price of an article, it was sold for ₹425. Had the discount not been given, the profit would have been 25%. What was the cost price (in ₹) of the article?

- Ans
- ☒ 1. 325
 - ☒ 2. 450
 - ☒ 3. 500
 - ☒ 4. 400

Question ID : 6549786984
Status : Answered
Chosen Option : 3

Q.23 What is the sum of all the possible values of k for which a seven-digit number $23k567k$ is divisible by 3?

- Ans
- ☒ 1. 15
 - ☒ 2. 3
 - ☒ 3. 109
 - ☒ 4. 16

Question ID : 6549789420
Status : Answered
Chosen Option : 1

Q.24 Sunil can row a boat 20 km upstream in 1 hour 15 minutes. If the speed of the current of the river is 2 km/h, then how much time will he take to row the boat 30 km downstream?

- Ans
- ☒ 1. 1 h 10 m
 - ☒ 2. 1 h 45 m
 - ☒ 3. 1 h 30 m
 - ☒ 4. 1 h 20 m

Question ID : 6549789405
Status : Answered
Chosen Option : 3

Q.25 If $\tan \theta = \frac{4}{3}$, then the value of $\frac{9 \sin \theta + 12 \cos \theta}{27 \cos \theta - 20 \sin \theta}$ will be equal to:

- Ans
- ☒ 1. 72
 - ☒ 2. 36
 - ☒ 3. 18
 - ☒ 4. 100

Question ID : 6549786998
Status : Answered
Chosen Option : 1

Section : General Awareness

Q.1 Which part of India did the Nizams of Asafjahi dynasty rule?

- Ans
- ☒ 1. Western kingdoms
 - ☒ 2. Eastern states
 - ☒ 3. Deccan provinces
 - ☒ 4. Northern India

Question ID : 6549789446
Status : Not Answered
Chosen Option : -

Q.2 Who among the following is the youngest mayor in India as of January 2021?

- Ans
- ☒ 1. Sabitha Beegam
 - ☒ 2. Arya Rajendran
 - ☒ 3. Rekha Priyadarshini
 - ☒ 4. Mekala Kavya

Question ID : 6549787011
Status : Answered
Chosen Option : 2

Q.3 Which of the following places in India has 0% forest area as per the Indian State of Forest Report 2019?

- Ans
- ☐ 1. Andaman and Nicobar Islands
 - ☐ 2. Puducherry
 - ☒ 3. Lakshadweep
 - ☐ 4. Goa

Question ID : 6549787018
Status : Answered
Chosen Option : 2

Q.4 Who among the following was a Portuguese writer who wrote about the trade and society in south India?

- Ans
- ☐ 1. Niccolao Manucci
 - ☐ 2. Francois Bernier
 - ☐ 3. Jean-Baptiste Tavernier
 - ☒ 4. Duarte Barbosa

Question ID : 6549787021
Status : Marked For Review
Chosen Option : 2

Q.5 'Maand' is primarily a traditional folk singing style from _____.

- Ans
- ☐ 1. Madhya Pradesh
 - ☐ 2. Jharkhand
 - ☒ 3. Rajasthan
 - ☐ 4. Bihar

Question ID : 6549787008
Status : Not Attempted and Marked For Review
Chosen Option : -

Q.6 Which of the following types of computer is used in climate research and weather forecasting?

- Ans
- ☐ 1. Mainframe computers
 - ☐ 2. Micro-computers
 - ☒ 3. Supercomputers
 - ☐ 4. Mini-computers

Question ID : 6549787006
Status : Answered
Chosen Option : 1

Q.7 Who among the following introduced the concept of electric field for the first time?

- Ans
- ☐ 1. Blaise Pascal
 - ☒ 2. Michael Faraday
 - ☐ 3. Charles Augustin de Coulomb
 - ☐ 4. Joseph Henry

Question ID : 6549787014
Status : Answered
Chosen Option : 2

Q.8 Which of the following keys will you press in Windows 10 to turn the volume up?

- Ans
- ☐ 1. F4
 - ☐ 2. F5
 - ☐ 3. F6
 - ☒ 4. F8

Question ID : 6549789429
Status : Not Answered
Chosen Option : –

Q.9 Who among the following Indian cricketers holds the record of most number of catches taken by a non-wicketkeeper while standing in the slip cordon, as of January 2021?

- Ans
- ☐ 1. VVS Laxman
 - ☐ 2. Manoj Prabhakar
 - ☒ 3. Rahul Dravid
 - ☐ 4. Javagal Srinath

Question ID : 6549789451
Status : Not Answered
Chosen Option : –

Q.10 Which of the following is the state flower of Manipur?

- Ans
- ☐ 1. Foxtail Orchids
 - ☒ 2. Shirui Lily
 - ☐ 3. Pink Rhododendron
 - ☐ 4. Retusa

Question ID : 6549789444
Status : Not Answered
Chosen Option : –

Q.11 Which of the following months was celebrated as 'Nutrition Month' in India in the year 2020?

- Ans
- ☐ 1. December
 - ☐ 2. November
 - ☒ 3. September
 - ☐ 4. August

Question ID : 6549789434
Status : Answered
Chosen Option : 3

Q.12 Who among the following was awarded the International Children's Peace Prize 2020?

- Ans
- ☐ 1. Malala Yousafzai
 - ☒ 2. Sadat Rahman
 - ☐ 3. Greta Thunberg
 - ☐ 4. Neha Gupta

Question ID : 6549787023
Status : Answered
Chosen Option : 3

Q.13 'Nikshay Poshan Yojana' is a scheme introduced by the Government of India to provide nutritional support to _____ patients.

- Ans
- ☐ 1. diabetes
 - ☐ 2. arthritis
 - ☒ 3. tuberculosis
 - ☐ 4. cancer

Question ID : 6549787013
Status : Marked For Review
Chosen Option : 1

Q.14 Chemicals called _____ link to form proteins.

- Ans
- ☐ 1. oxalic acids
 - ☒ 2. amino acids
 - ☐ 3. citric acids
 - ☐ 4. nitric acids

Question ID : 6549789439
Status : Answered
Chosen Option : 2

Q.15 In which of the following cities was the 89th Annual General Meeting of the Board of Control for Cricket in India held?

- Ans ☒ 1. Ahmedabad
☐ 2. Indore
☐ 3. Lucknow
☐ 4. Nagpur

Question ID : 6549787028
Status : Not Answered
Chosen Option : –

Q.16 Which of the following has a tetragonal crystal system?

- Ans ☐ 1. Potassium nitrate
☐ 2. Zinc oxide
☐ 3. Cadmium sulphide
☒ 4. Calcium sulphate

Question ID : 6549787016
Status : Not Answered
Chosen Option : –

Q.17 Which of the following states emerged as a separate state in 1963?

- Ans ☒ 1. Nagaland
☐ 2. Mizoram
☐ 3. Arunachal Pradesh
☐ 4. Tripura

Question ID : 6549787026
Status : Answered
Chosen Option : 1

Q.18 When was the Editors Guild of India founded?

- Ans ☐ 1. 1982
☒ 2. 1978
☐ 3. 1956
☐ 4. 1989

Question ID : 6549789448
Status : Not Answered
Chosen Option : –

Q.19 Which present day Indian state came into existence as the Mysore state in 1953?

- Ans
- ☐ 1. Kerala
 - ☒ 2. Karnataka
 - ☐ 3. Tamil Nadu
 - ☐ 4. Andhra Pradesh

Question ID : 6549789443
Status : Answered
Chosen Option : 2

Q.20 Where was the world's largest solar tree installed in India in 2020?

- Ans
- ☐ 1. Jaipur
 - ☒ 2. Durgapur
 - ☐ 3. Bokaro
 - ☐ 4. Bhopal

Question ID : 6549789433
Status : Answered
Chosen Option : 2

Q.21 Which of the following Articles of the Constitution of India mentions 'Continuance of the rights of citizenship'?

- Ans
- ☐ 1. Article 12
 - ☒ 2. Article 10
 - ☐ 3. Article 9
 - ☐ 4. Article 11

Question ID : 6549789449
Status : Not Answered
Chosen Option : -

Q.22 Who among the following athletes was the first ever youth ambassador of United Nations International Children's Emergency Fund (UNICEF) India?

- Ans
- ☐ 1. Dutee Chand
 - ☐ 2. KT Irfan
 - ☐ 3. Neeraj Chopra
 - ☒ 4. Hima Das

Question ID : 6549789453
Status : Not Answered
Chosen Option : -

Q.23 Where was the first factory of the Indian Iron and Steel Company (IISCO) set up?

- Ans
- ☐ 1. Durgapur
 - ☐ 2. Jabalpur
 - ☐ 3. Jamshedpur
 - ☒ 4. Hirapur

Question ID : 6549787017
Status : Answered
Chosen Option : 1

Q.24 Which of the following states has the longest roadway network as on March 2021?

- Ans
- ☐ 1. Rajasthan
 - ☒ 2. Maharashtra
 - ☐ 3. Madhya Pradesh
 - ☐ 4. Gujarat

Question ID : 6549789436
Status : Answered
Chosen Option : 2

Q.25 'Rahide' is a long scarf worn by the women of _____ to protect their head from cool breeze as well as to show their traditional social affinity.

- Ans
- ☐ 1. Madhya Pradesh
 - ☒ 2. Himachal Pradesh
 - ☐ 3. Uttar Pradesh
 - ☐ 4. Arunachal Pradesh

Question ID : 6549789431
Status : Answered
Chosen Option : 2

Combined Higher Secondary Level Examination 2020 (Tier-I)

Roll Number	Join Telegram: HaryanaJobs.in
Candidate Name	
Venue Name	
Exam Date	10/08/2021
Exam Time	12:00 PM - 1:00 PM
Subject	Combined Higher Secondary Level Exam 2020

Section : English Language

Q.1 Select the **INCORRECTLY** spelt word.

- Ans
- ☒ 1. movement
 - ☒ 2. executive
 - ☒ 3. dissappear
 - ☒ 4. development

Question ID : 6549788664

Status : Answered

Chosen Option : 3

Q.2 Select the most appropriate **ANTONYM** of the given word.

REPULSION

- Ans
- ☒ 1. complacence
 - ☒ 2. attraction
 - ☒ 3. addiction
 - ☒ 4. disgust

Question ID : 6549788661

Status : Answered

Chosen Option : 2

Q.3 Select the most appropriate option to substitute the underlined segment in the given sentence. If there is no need to substitute it, select 'No substitution required'.

This is the student which won the first prize in the recitation.

- Ans
- ☒ 1. whose won
 - ☒ 2. whom won
 - ☒ 3. who won
 - ☒ 4. No substitution required

Question ID : 6549787245

Status : Answered

Chosen Option : 3

Q.4 Select the word which means the same as the group of words given.

A professional who works with patients who have heart problems

- Ans
- ☒ 1. orthopedic
 - ☒ 2. urologist
 - ☒ 3. cardiologist
 - ☒ 4. paediatrician

Question ID : 6549788666
Status : Answered
Chosen Option : 3

Q.5 Select the option that can be used as a one-word substitute for the given group of words.

The study of ancient civilisations and cultures by examining their sites

- Ans
- ☒ 1. Archaeology
 - ☒ 2. Entomology
 - ☒ 3. Etymology
 - ☒ 4. Arachnology

Question ID : 6549787253
Status : Answered
Chosen Option : 1

Q.6 Select the most appropriate synonym of the given word.

DILEMMA

- Ans
- ☒ 1. predicament
 - ☒ 2. importance
 - ☒ 3. attraction
 - ☒ 4. fascination

Question ID : 6549788669
Status : Answered
Chosen Option : 1

Q.7 The following sentence has been divided into four segments. Select the segment that contains a grammatical error from the given options.

I am going / to home / soon after the / programme gets over.

- Ans
- ☒ 1. soon after the
 - ☒ 2. to home
 - ☒ 3. I am going
 - ☒ 4. programme gets over

Question ID : 6549787234
Status : Answered
Chosen Option : 1

Q.8 Select the correct passive form of the given sentence.

Shashi was enjoying the game.

- Ans
- ☐ 1. The game is being enjoyed by Shashi.
 - ☐ 2. The game was enjoying by Shashi.
 - ☐ 3. The game has been enjoyed by Shashi.
 - ☒ 4. The game was being enjoyed by Shashi.

Question ID : **6549788646**
Status : **Answered**
Chosen Option : **4**

Q.9 In the given sentence, identify the segment which contains a grammatical error.

Due to the lockdown most schools teaches students through online classes.

- Ans
- ☐ 1. most schools
 - ☒ 2. teaches students
 - ☐ 3. Due to the lockdown
 - ☐ 4. through online classes

Question ID : **6549788649**
Status : **Answered**
Chosen Option : **2**

Q.10 Select the option that expresses the given sentence in reported speech.

My mother said to me, "Aravind, the baby has been crying all day."

- Ans
- ☐ 1. My mother said Aravind that the baby has been crying all the day.
 - ☒ 2. My mother told me that the baby had been crying all day.
 - ☐ 3. My mother told to Aravind why the baby has been crying all day.
 - ☐ 4. Aravind told my mother that the baby had been crying all day.

Question ID : **6549787233**
Status : **Answered**
Chosen Option : **2**

Q.11 Select the most appropriate ANTONYM of the given word.

Lucid

- Ans
- ☐ 1. Clear
 - ☐ 2. Acidic
 - ☐ 3. Obvious
 - ☒ 4. Confusing

Question ID : **6549787246**
Status : **Answered**
Chosen Option : **1**

Q.12 Select the most appropriate meaning of the given idiom.

Burn the midnight oil

- Ans
- ☒ 1. burn things using oil
 - ☒ 2. work many nights at a stretch
 - ☒ 3. create problems in the night
 - ☒ 4. work late into the night

Question ID : 6549788663

Status : Answered

Chosen Option : 2

Q.13 Select the most appropriate word to fill in the blank.

The government is making air bags _____ for front seat passengers in all cars.

- Ans
- ☒ 1. compulsory
 - ☒ 2. suggested
 - ☒ 3. temporary
 - ☒ 4. registered

Question ID : 6549787256

Status : Answered

Chosen Option : 1

Q.14 Given below are four jumbled sentences. Out of the given options, select the one that gives their correct order.

- A. I sat patiently through them knowing they were not for me.
- B. The headmaster read the list of qualities this year's best student award had - most giving, contributed most to society, and so on.
- C. At my high school graduation, the awards were being presented for achievement, contribution to the school, the community, scholarship, and more.
- D. But when I heard my name called, I began to cry as I could not believe that I was actually chosen for the award.

- Ans
- ☒ 1. BACD
 - ☒ 2. CBDA
 - ☒ 3. CABD
 - ☒ 4. BDCA

Question ID : 6549788657

Status : Answered

Chosen Option : 1

Q.15 Select the most appropriate meaning of the given idiom.

To come round

- Ans
- ☒ 1. To meet someone by chance
 - ☒ 2. To spend a lot of time with someone
 - ☒ 3. To go round and round
 - ☒ 4. To become conscious again

Question ID : 6549787248

Status : Answered

Chosen Option : 2

Q.16 Select the INCORRECTLY spelt word.

- Ans
- ☒ 1. Temporary
 - ☒ 2. Subsikuent
 - ☒ 3. Permanent
 - ☒ 4. Dominant

Question ID : 6549787251

Status : Answered

Chosen Option : 2

Q.17 Sentences of a paragraph are given below in jumbled order. Arrange the sentences in the right order to form a meaningful and coherent paragraph.

- A. The test procedure starts at 10 a.m. in all the test centres.
- B. When you enter the test hall, you should have your Test Admit Card with you.
- C. You are, therefore, required to reach the test centre by 9.30 a.m.
- D. Remember that, if you report after 10 a.m., you will not be admitted.

- Ans
- ☒ 1. DBAC
 - ☒ 2. ACDB
 - ☒ 3. DACB
 - ☒ 4. CADB

Question ID : 6549787242

Status : Answered

Chosen Option : 2

Q.18 Select the most appropriate synonym of the given word.

Emerge

- Ans
- ☒ 1. Appear
 - ☒ 2. Erase
 - ☒ 3. Close
 - ☒ 4. Enforce

Question ID : 6549787254

Status : Answered

Chosen Option : 1

Q.19 Select the most appropriate option to substitute the underlined segment in the given sentence. If there is no need to substitute it, select 'No substitution'.

The migrant said that he did not planning to come back to the city for quite some time.

- Ans
- ☒ 1. No substitution
 - ☒ 2. was not planned
 - ☒ 3. do not planning
 - ☒ 4. did not plan

Question ID : 6549788658

Status : Answered

Chosen Option : 4

Q.20 Select the most appropriate word to fill in the blank.

The mother monkey picked up her baby and climbed up the tree to _____.

- Ans
- ☒ 1. safety
 - ☒ 2. ability
 - ☒ 3. cruelty
 - ☒ 4. agility

Question ID : 6549788671

Status : Answered

Chosen Option : 1

Comprehension:

In the following passage, some words have been deleted. Fill in the blanks with the help of the alternatives given. Select the most appropriate option for each blank.

An open-minded person can very easily accept as well as respect the (1)_____ person's viewpoint or ideas. Such a person willingly and cordially (2)_____ to others' views, accepts their different ideas, and even goes ahead to implement them (3)_____. With an open mindset, positive and vibrant energy (4)_____ that not only helps such people (5)_____ also keeps other people around them happy.

SubQuestion No : 21

Q.21 Select the most appropriate option for blank No. 1.

- Ans
- ☒ 1. each
 - ☒ 2. every
 - ☒ 3. either
 - ☒ 4. other

Question ID : 6549788651

Status : Answered

Chosen Option : 4

Comprehension:

In the following passage, some words have been deleted. Fill in the blanks with the help of the alternatives given. Select the most appropriate option for each blank.

An open-minded person can very easily accept as well as respect the (1)_____ person's viewpoint or ideas. Such a person willingly and cordially (2)_____ to others' views, accepts their different ideas, and even goes ahead to implement them (3)_____. With an open mindset, positive and vibrant energy (4)_____ that not only helps such people (5)_____ also keeps other people around them happy.

SubQuestion No : 22

Q.22 Select the most appropriate option for blank No. 2.

- Ans
- ☒ 1. listening
 - ☒ 2. listen
 - ☒ 3. listens
 - ☒ 4. listened

Question ID : 6549788652

Status : Answered

Chosen Option : 3

Comprehension:

In the following passage, some words have been deleted. Fill in the blanks with the help of the alternatives given. Select the most appropriate option for each blank.

An open-minded person can very easily accept as well as respect the (1)_____ person's viewpoint or ideas. Such a person willingly and cordially (2)_____ to others' views, accepts their different ideas, and even goes ahead to implement them (3)_____. With an open mindset, positive and vibrant energy (4)_____ that not only helps such people (5)_____ also keeps other people around them happy.

SubQuestion No : 23

Q.23 Select the most appropriate option for blank No. 3.

- Ans
- ☒ 1. eventfully
 - ☒ 2. habitually
 - ☒ 3. successfully
 - ☒ 4. clearly

Question ID : 6549788653

Status : Answered

Chosen Option : 3

Comprehension:

In the following passage, some words have been deleted. Fill in the blanks with the help of the alternatives given. Select the most appropriate option for each blank.

An open-minded person can very easily accept as well as respect the (1)_____ person's viewpoint or ideas. Such a person willingly and cordially (2)_____ to others' views, accepts their different ideas, and even goes ahead to implement them (3)_____. With an open mindset, positive and vibrant energy (4)_____ that not only helps such people (5)_____ also keeps other people around them happy.

SubQuestion No : 24

Q.24 Select the most appropriate option for blank No. 4.

- Ans
- ☐ 1. was being created
 - ☐ 2. had been created
 - ☐ 3. was created
 - ☒ 4. is created

Question ID : 6549788654

Status : Answered

Chosen Option : 4

Comprehension:

In the following passage, some words have been deleted. Fill in the blanks with the help of the alternatives given. Select the most appropriate option for each blank.

An open-minded person can very easily accept as well as respect the (1)_____ person's viewpoint or ideas. Such a person willingly and cordially (2)_____ to others' views, accepts their different ideas, and even goes ahead to implement them (3)_____. With an open mindset, positive and vibrant energy (4)_____ that not only helps such people (5)_____ also keeps other people around them happy.

SubQuestion No : 25

Q.25 Select the most appropriate option for blank No. 5.

- Ans
- ☐ 1. and
 - ☐ 2. when
 - ☐ 3. even
 - ☒ 4. but

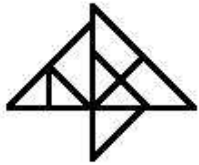
Question ID : 6549788655

Status : Answered

Chosen Option : 4

Section : General Intelligence

Q.1 How many triangles are there in the given figure?



- Ans
- ☒ 1. 12
 - ☒ 2. 14
 - ☒ 3. 13
 - ☒ 4. 15

Question ID : 6549787278

Status : Not Attempted and Marked For Review

Chosen Option : --

Q.2 In a family, Divya and Monika are sisters. Monika is the mother of Anamika. Kishore is the son of Anamika. Lillu is the son of Divya. How is Anamika related to Lillu?

- Ans
- ☒ 1. Sister-in-law
 - ☒ 2. Niece
 - ☒ 3. Cousin
 - ☒ 4. Mother

Question ID : 6549787877

Status : Answered

Chosen Option : 2

Q.3 Four letter-clusters have been given, out of which three are alike in some manner and one is different. Select the letter-cluster that is different.

- Ans
- ☒ 1. TWZCF
 - ☒ 2. BEGLN
 - ☒ 3. DGJMP
 - ☒ 4. HKNQT

Question ID : 6549787273

Status : Answered

Chosen Option : 2

Q.4 Select the number that can replace the question mark (?) in the following series.

1, 2, 10, 37, ?, 226

- Ans
- ☒ 1. 101
 - ☒ 2. 89
 - ☒ 3. 98
 - ☒ 4. 73

Question ID : 6549788677

Status : Answered

Chosen Option : 1

Q.5 Select the correct option that indicates the arrangement of the given words in the order in which they appear in an English dictionary.

1. Fragile
2. Freedom
3. Fresher
4. Fraudster
5. Frame

- Ans
- ☒ 1. 1, 5, 2, 4, 3
 - ☒ 2. 1, 4, 5, 2, 3
 - ☒ 3. 1, 5, 4, 2, 3
 - ☒ 4. 2, 5, 4, 3, 1

Question ID : 6549787265

Status : Answered

Chosen Option : 3

Q.6 Select the option that is related to the third letter-cluster in the same way as the second letter-cluster is related to the first letter-cluster.

BIOLOGY : COUMUHZ :: CHEMISTRY : ?

- Ans
- ☒ 1. DAKNOTUSZ
 - ☒ 2. DIINOTUSZ
 - ☒ 3. DJINUTUSZ
 - ☒ 4. DIONUTASZ

Question ID : 6549788682

Status : Answered

Chosen Option : 2

Q.7 Which of the following equations will be correct when the signs + and ×, and the numbers 3 and 6 are interchanged?

- Ans
- ☒ 1. $11 \times 6 + 3 = 69$
 - ☒ 2. $7 + 3 \times 6 = 48$
 - ☒ 3. $9 \times 3 + 6 = 33$
 - ☒ 4. $12 \times 3 + 6 = 30$

Question ID : 6549788673

Status : Answered

Chosen Option : 4

Q.8 Three of the following four number triads are alike in a certain way and one is different. Select the one that is different.

- Ans
- ☒ 1. (111, 222, 333)
 - ☒ 2. (108, 300, 501)
 - ☒ 3. (201, 402, 603)
 - ☒ 4. (202, 404, 909)

Question ID : 6549788675

Status : Answered

Chosen Option : 2

Q.9 Two statements are given, followed by two conclusions numbered I and II. Assuming the statements to be true, even if they seem to be at variance with commonly known facts, decide which of the conclusions logically follow(s) from the statements.

Statements:

Some managers are bosses.

Some doctors are managers.

Conclusions:

I. Some managers are executives.

II. Some doctors are bosses.

- Ans**
- ☒ 1. Neither conclusion I nor II follows .
 - ☐ 2. Both conclusions I and II follow .
 - ☐ 3. Only conclusion II follows .
 - ☐ 4. Only conclusion I follows .

Question ID : **6549788689**

Status : **Answered**

Chosen Option : **1**

Q.10 Select the combination of letters that when sequentially placed in the blanks of the given letter series will complete the series.

T _ R _ _ S _ D T _ R D _ S _ D

- Ans**
- ☐ 1. S T S R R T R
 - ☐ 2. S D T D S T T
 - ☐ 3. D S T R T T R
 - ☒ 4. S D T R S T R

Question ID : **6549786462**

Status : **Answered**

Chosen Option : **4**

Q.11 Three of the following four words are alike in a certain way and one is different. Select the odd one.

- Ans**
- ☐ 1. Engineer
 - ☐ 2. Designer
 - ☐ 3. Architect
 - ☒ 4. Doctor

Question ID : **6549788688**

Status : **Answered**

Chosen Option : **4**

Q.12 In a certain code language, DORM is coded as 4303626 and FIRST is coded as 69363840.
How will CANCER be coded in that language?

- Ans
-  1. 61283638
 -  2. 612661036
 -  3. 31283536
 -  4. 322831036

Question ID : 6549787267
Status : Answered
Chosen Option : 3

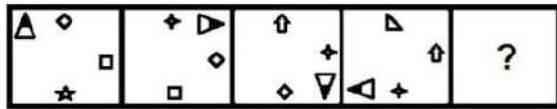
Q.13 Select the option in which the words share the same relationship as that shared by the given pair of words.

Warrior : Battlefield

- Ans
-  1. Umpire : Cricket
 -  2. Actor : Stage
 -  3. Sports : Ground
 -  4. Soldier : Army

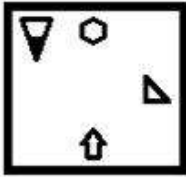
Question ID : 6549787272
Status : Answered
Chosen Option : 2

Q.14 Select the figure from among the given options that can replace the question mark (?) in the following series.

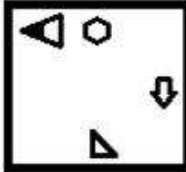


Ans

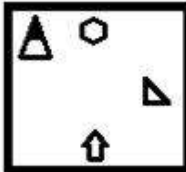
✗ 1.



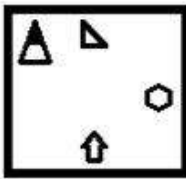
✗ 2.



✓ 3.



✗ 4.




Question ID : 6549787277

Status : Answered

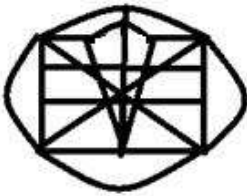
Chosen Option : 3

Q.15 Select the option in which the given figure is embedded.

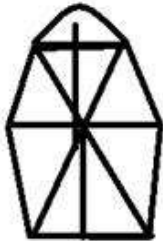


Ans

✗ 1.



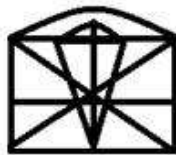
✗ 2.



✗ 3.



✓ 4.



Question ID : 6549788693

Status : Answered

Chosen Option : 4

Q.16 Select the option in which the numbers are related in the same way as are the numbers of the following set.

(5, 14, 350)

Ans

✗ 1. (8, 16, 340)

✗ 2. (3, 20, 380)

✗ 3. (6, 12, 232)

✓ 4. (7, 9, 441)

Question ID : 6549787262

Status : Answered

Chosen Option : 4

Q.17 Select the option that is related to the fourth number in the same way as the first number is related to the second number and the fifth number is related to the sixth number.

68 : 4 :: ? : 7 :: 220 : 6

- Ans
- ☒ 1. 220
 - ☒ 2. 112
 - ☒ 3. 347
 - ☒ 4. 301

Question ID : 6549787260

Status : Answered

Chosen Option : 3

Q.18 Select the correct mirror image of the given figure when the mirror is placed to the right side of the figure.



Ans

- ☒ 1.
- ☒ 2.
- ☒ 3.
- ☒ 4.

Question ID : 6549788695

Status : Answered

Chosen Option : 1

Q.19 The sum of the salaries of three persons, A, B and C, is ₹66,500. B's salary is half the salary of C. B's salary is 125% of A's salary. What is the salary of C?

- Ans
- ☒ 1. ₹30,000
 - ☒ 2. ₹28,000
 - ☒ 3. ₹34,000
 - ☒ 4. ₹35,000

Question ID : 6549787258


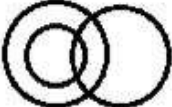


Status : Answered

Chosen Option : 4

Q.20 Select the Venn diagram that best represents the relationship between the following classes.

Mammals, Animals, Giraffe

Ans

- ✗ 1. 
- ✗ 2. 
- ✓ 3. 
- ✗ 4. 

Question ID : 6549787282

Status : Answered

Chosen Option : 4

Q.21 If in a code language, GOD is coded as 15 and DEVIL is coded as 43, then how will you code HUMEN?

- Ans ✓ 1. 42
- ✗ 2. 72
- ✗ 3. 81
- ✗ 4. 56

Question ID : 6549788680

Status : Not Answered

Chosen Option : --

Q.22 'Eye' is related to 'Glasses' in the same way as '_____' is related to 'Dialyser'.

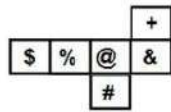
- Ans ✗ 1. Heart
- ✗ 2. Ear
- ✓ 3. Kidney
- ✗ 4. Spine

Question ID : 6549788683

Status : Answered

Chosen Option : 3

Q.23 A cube is made by folding the given sheet. In the cube so formed, what would be the symbol on the opposite side of '@'?



Ans

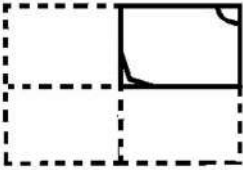
- ☒ 1. #
- ☒ 2. %
- ☒ 3. \$
- ☒ 4. &

Question ID : 6549787276

Status : Answered

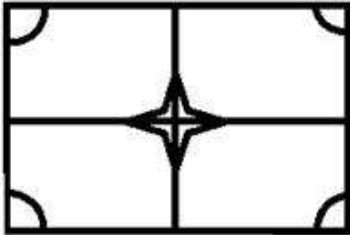
Chosen Option : 3

Q.24 A paper is folded and cut as shown in the following figure. How will it appear when unfolded?

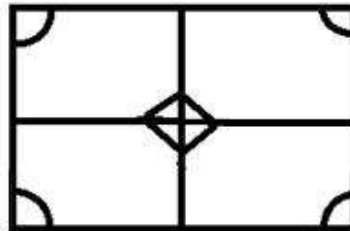


Ans

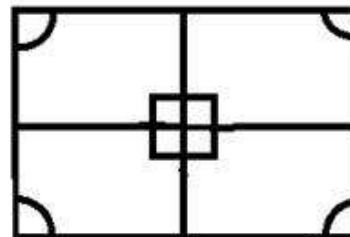
✓ 1.



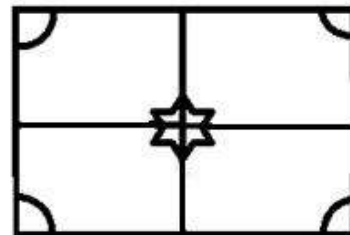
✗ 2.



✗ 3.



✗ 4.



Question ID : 6549788694

Status : Answered

Chosen Option : 1

Q.25 Four number-pairs have been given, out of which three are alike in some manner and one is different. Select the number-pair that is different.

Ans

✗ 1. 17 : 204

✓ 2. 9 : 99

✗ 3. 7 : 84

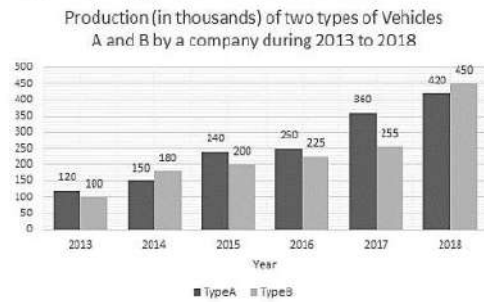
✗ 4. 11 : 132

Question ID : 6549787264

Status : Answered

Chosen Option : 2

Q.1 Study the given graph and answer the question that follows.



$31\frac{1}{4}\%$ of the total number of vehicles of type A produced in 2013, 2015 and 2017 is equal to the number of vehicles of type B produced in the year:

- Ans
- ☒ 1. 2017
 - ☒ 2. 2018
 - ☒ 3. 2015
 - ☒ 4. 2016

Question ID : 6549786700

Status : Answered

Chosen Option : 4

Q.2 If S is a point on side QR of a triangle PQR such that $QS = 10$ cm, $QR = 18$ cm and $\angle PSR = \angle QPR$, then the length of PR will be:

- Ans
- ☒ 1. 16 cm
 - ☒ 2. 12 cm
 - ☒ 3. 15 cm
 - ☒ 4. 14 cm

Question ID : 6549787294

Status : Answered

Chosen Option : 3

Q.3 The marked price of a juicer mixer is ₹5,500, and three successive discounts of 40%, 30% and 20% are given on this marked price. The selling price of the juicer mixer is:

- Ans
- ☒ 1. ₹1,835
 - ☒ 2. ₹1,868
 - ☒ 3. ₹1,848
 - ☒ 4. ₹1,858

Question ID : 6549788701

Status : Answered

Chosen Option : 3

Q.4 In any triangle, if the angles are in the ratio 1 : 2 : 3, then what will be the ratio of the sides opposite to them?

- Ans
- ☐ 1. $1 : \sqrt{3} : 1$
 - ☒ 2. $1 : \sqrt{3} : 2$
 - ☐ 3. $2 : 2 : \sqrt{3}$
 - ☐ 4. $2 : \sqrt{3} : 1$

Question ID : 6549788709

Status : Answered

Chosen Option : 1

Q.5 If $\sin^2 x - 3\cos^2 x = 0$, then the value of x ($0 < x < 90^\circ$) is:

- Ans
- ☐ 1. 45°
 - ☐ 2. 30°
 - ☒ 3. 60°
 - ☐ 4. 15°

Question ID : 6549788717

Status : Answered

Chosen Option : 3

Q.6 The value of $\sqrt{\cos 60^\circ \cos 30^\circ - \sin 60^\circ \sin 30^\circ}$ is:

- Ans
- ☐ 1. $\frac{\sqrt{3}}{2}$
 - ☐ 2. $\frac{1}{\sqrt{2}}$
 - ☒ 3. 0
 - ☐ 4. 1

Question ID : 6549788715

Status : Answered

Chosen Option : 3

Q.7 In a workshop with 80 students and 10 resource persons, sweets were distributed at the end of the workshop. The amount spent for distributing sweets to each student was 30% of the total number of students and amount spent towards each resource person was 40% of the total number of students. The total amount spent for sweets distribution in the workshop was:

- Ans
- ☐ 1. ₹2,400
 - ☐ 2. ₹2,440
 - ☐ 3. ₹2,420
 - ☒ 4. ₹2,240

Question ID : 6549787288

Status : Answered

Chosen Option : 4

Q.8 In a circle with center O , PA and PB are tangents to the circle at A and B , respectively, from an external point P . If, $\angle AOB = 116^\circ$ then what is the measure of $\angle OPB$?

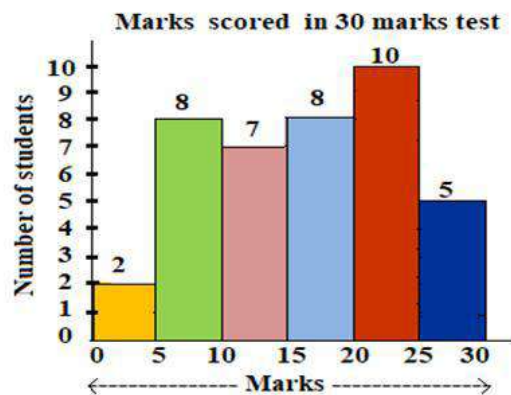
- Ans ☒ 1. 32°
☒ 2. 90°
☒ 3. 58°
☒ 4. 30°

Question ID : 6549788707

Status : Answered

Chosen Option : 1

Q.9 The histogram shows the marks scored by 40 students in a test with maximum 30 marks.



What is the percentage of the students who scored less than 20 marks?

- Ans ☒ 1. 50
☒ 2. 25
☒ 3. 87.5
☒ 4. 62.5

Question ID : 6549789225

Status : Answered

Chosen Option : 4

Q.10 If $x + \frac{1}{3x} = 5$, then the value of $27x^3 + \frac{1}{x^3}$ will be:

- Ans ☒ 1. 3240
☒ 2. 3024
☒ 3. 3042
☒ 4. 3420

Question ID : 6549787296

Status : Answered

Chosen Option : 1

Q.11 Find the compound interest (in ₹) on a sum of ₹7,500 for 4 years if the rate of interest is 20% per annum for the first two years and 10% per annum for the next two years. (The interest is compounded annually.)

- Ans**
- ☒ 1. 5,658
 - ☒ 2. 5,586
 - ☒ 3. 6,558
 - ☒ 4. 5,568

Question ID : 6549787291

Status : Answered

Chosen Option : 4

Q.12 Study the given pie charts and answer the question that follows.

The pie charts show the distribution of students of graduate and postgraduate levels in five different institutes P, Q, R, S and T in a town.

(i) Total number of students of graduate level in five different institutes = 12400

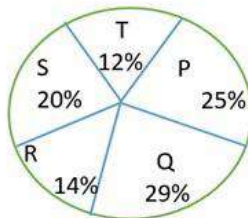


Fig.(i)

(ii) Total number of students of postgraduate level in five different institutes = 8000

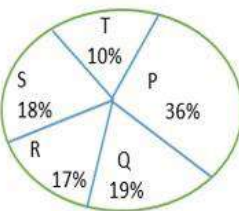


Fig.(ii)

The difference between the average number of students of graduate level in institutes P, R and T to the average number of students of postgraduate level in institutes P, R and T is:

- Ans**
- ☒ 1. 425
 - ☒ 2. 426
 - ☒ 3. 328
 - ☒ 4. 428

Question ID : 6549787307

Status : Answered

Chosen Option : 4

Q.13 15 persons working 6 hours per day earn ₹900. How much money will 20 persons earn, working 10 hours per day?

- Ans
- ☒ 1. ₹1,800
 - ☒ 2. ₹1,500
 - ☒ 3. ₹2,000
 - ☒ 4. ₹2,100

Question ID : 6549788697

Status : Answered

Chosen Option : 3

Q.14 x, y and z are three positive numbers such that y is $\frac{4}{5}$ times of x and z is $\frac{5}{8}$ times of y . If the average of reciprocals of the numbers x, y and z is $\frac{17}{240}$, then the average of 3 times of x and 5 times of y will be:

- Ans
- ☒ 1. 70
 - ☒ 2. 60
 - ☒ 3. 40
 - ☒ 4. 45

Question ID : 6549787286

Status : Not Answered

Chosen Option : --

Q.15 If $2x + 3y + 4z = 11$, $8x^3 + 27y^3 + 64z^3 = 105$ and $xyz = 1$, then the value $4x^2 + 9y^2 + 16z^2 - 6xy - 12yz - 8xz$ is:

- Ans
- ☒ 1. 3
 - ☒ 2. 4
 - ☒ 3. 5
 - ☒ 4. 6

Question ID : 6549788712

Status : Not Answered

Chosen Option : --

Q.16 If $1 + 4x^2 + 16x^4 = 512$, and $1 - 2x + 4x^2 = 64$, then the value of $1 + 2x + 4x^2$ is:

- Ans
- ☒ 1. 6
 - ☒ 2. 8
 - ☒ 3. 12
 - ☒ 4. 10

Question ID : 6549788711

Status : Answered

Chosen Option : 2

Q.17 With a speed of 48 km/h, Raghu is able to complete his journey in 2 hours 28 minutes. If he wants to cover the same distance in 1 hour 36 minutes, then what should be his new speed?

- Ans**
- ☒ 1. 72 km/h
 - ☒ 2. 64 km/h
 - ☒ 3. 66 km/h
 - ☒ 4. 74 km/h

Question ID : 6549787284
Status : Answered
Chosen Option : 4

Q.18 The sum of the squares of the sides of a rhombus is 1600 cm^2 . What is the side of the rhombus?

- Ans**
- ☒ 1. 15 cm
 - ☒ 2. 20 cm
 - ☒ 3. 25 cm
 - ☒ 4. 10 cm

Question ID : 6549788699
Status : Answered
Chosen Option : 2

Q.19 If the length of a chord of a circle, that makes an angle of 60° with the tangent drawn at one end point of the chord, is $8\sqrt{3}$ cm, then the radius of the circle will be:

- Ans**
- ☒ 1. 8 cm
 - ☒ 2. 5 cm
 - ☒ 3. 6 cm
 - ☒ 4. 7 cm

Question ID : 6549787292
Status : Answered
Chosen Option : 1

Q.20 The sides of a triangle are in the ratio $\frac{1}{3} : \frac{1}{5} : \frac{1}{4}$ and its perimeter is 141 cm. The difference between the greatest side and the smallest side is:

- Ans**
- ☒ 1. 18 cm
 - ☒ 2. 15 cm
 - ☒ 3. 12 cm
 - ☒ 4. 24 cm

Question ID : 6549787290
Status : Answered
Chosen Option : 2

Q.21 If $\frac{5 \cot \theta + \sqrt{3} \operatorname{cosec} \theta}{2\sqrt{3} \operatorname{cosec} \theta + 3 \cot \theta} = 1$, $0^\circ < \theta < 90^\circ$, then the value of $\frac{\frac{7}{2} \cot^2 \theta - \frac{3}{4} \operatorname{cosec}^2 \theta}{4 \sin^2 \theta + \frac{3}{2} \tan^2 \theta}$ will be:

- Ans
- ☒ 1. 7
 - ☒ 2. 2
 - ☒ 3. 3
 - ☒ 4. 5

Question ID : 6549787302

Status : Not Answered

Chosen Option : --

Q.22 Gaurav bought some articles at 5 for ₹6 and sold them at 10 for ₹11. His loss percentage is:

- Ans
- ☒ 1. $8\frac{1}{3}\%$
 - ☒ 2. $7\frac{1}{3}\%$
 - ☒ 3. $7\frac{2}{3}\%$
 - ☒ 4. $8\frac{2}{3}\%$

Question ID : 6549788703

Status : Answered

Chosen Option : 1

Q.23 If the number 4A306768B2 is divisible by both 8 and 11, then the smallest possible values of A and B will be:

- Ans
- ☒ 1. A = 5, B = 3
 - ☒ 2. A = 3, B = 5
 - ☒ 3. A = 5, B = 2
 - ☒ 4. A = 5, B = 4

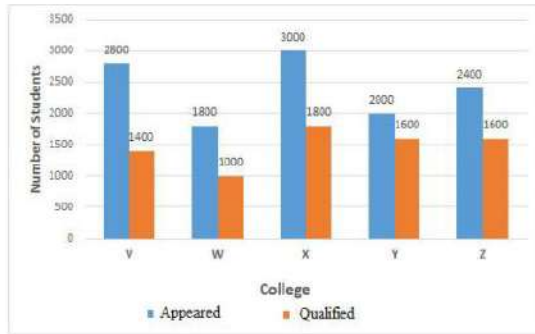
Question ID : 6549787299

Status : Answered

Chosen Option : 1

Q.24 Study the following graph and answer the question that follows.

Number of students that appeared and qualified, from various colleges, at a scholarship examination.



What is the ratio of the number of students that appeared to the number of students that qualified at the scholarship examination from College X?

- Ans
- ☒ 1. 5 : 4
 - ☒ 2. 5 : 2
 - ☒ 3. 4 : 3
 - ☒ 4. 5 : 3

Question ID : 6549788718

Status : Answered

Chosen Option : 4

Q.25 The value of $\frac{284}{5} \div \left[\left(\frac{4}{5} \right) \times (15 + 35) - 11\frac{3}{5} \right]$ is:

- Ans
- ☒ 1. 2
 - ☒ 2. 1
 - ☒ 3. 0
 - ☒ 4. 3

Question ID : 6549788714

Status : Answered

Chosen Option : 1

Section : General Awareness

Q.1 Who among the following was NOT one of the recipients of the US military decoration 'the Legion of Merit' in December 2020?

- Ans
- ☒ 1. Shinzo Abe
 - ☒ 2. Narendra Modi
 - ☒ 3. Scott Morrison
 - ☒ 4. Boris Johnson

Question ID : 6549788740

Status : Answered

Chosen Option : 4

Q.2 Which of the following national waterways has been INCORRECTLY matched with its associated river?

- Ans
- ☒ 1. National Waterway 2 - Brahmaputra
 - ☒ 2. National Waterway 6 - Sutlej
 - ☒ 3. National Waterway 1 - Ganga
 - ☒ 4. National Waterway 4 - Krishna

Question ID : 6549787323

Status : Not Answered

Chosen Option : --

Q.3 Who founded the famous Vikramashila University in the ninth century?

- Ans
- ☒ 1. Ballala Sena
 - ☒ 2. Gopala
 - ☒ 3. Samanta Sena
 - ☒ 4. Dharmapala

Question ID : 6549788738

Status : Answered

Chosen Option : 4

Q.4 Which country was the host of the 15th G20 Leaders' Summit 2020?

- Ans
- ☒ 1. Saudi Arabia
 - ☒ 2. The US
 - ☒ 3. China
 - ☒ 4. India

Question ID : 6549787313

Status : Answered

Chosen Option : 1

Q.5 The legal provisions governing the management of foreign exchange reserves are laid down in the Reserve Bank of India Act, _____.

- Ans
- ☒ 1. 1947
 - ☒ 2. 1971
 - ☒ 3. 1923
 - ☒ 4. 1934

Question ID : 6549788730

Status : Answered

Chosen Option : 4

Q.6 Who among the following won the 'Golden Boot' at FIFA World Cup 2018?

- Ans ☒ 1. Harry Kane
☒ 2. Kylian Mbappe
☒ 3. Luka Modric
☒ 4. Paul Pogba

Question ID : **6549788745**
Status : **Answered**
Chosen Option : **4**

Q.7 The nucleus of a cell is surrounded by a jelly-like substance called:

- Ans ☒ 1. cytoplasm
☒ 2. deltoid
☒ 3. stomata
☒ 4. cell membrane

Question ID : **6549788733**
Status : **Answered**
Chosen Option : **1**

Q.8 Which of the following Union Ministries of India launched a pilot 'Pey Jal Survekshan' on 16 February 2021?

- Ans ☒ 1. Ministry of Environment, Forest and Climate Change
☒ 2. Ministry of Housing and Urban Affairs
☒ 3. Ministry of Jal Shakti
☒ 4. Ministry of Earth Sciences

Question ID : **6549788728**
Status : **Answered**
Chosen Option : **3**

Q.9 Who was the Governor-General of Bengal when the Permanent Settlement was introduced there in 1793?

- Ans ☒ 1. Warren Hastings
☒ 2. Sir John Shore
☒ 3. Sir John Macpherson
☒ 4. Lord Cornwallis

Question ID : **6549787325**
Status : **Answered**
Chosen Option : **4**

Q.10 Which of the following is the largest bituminous coalfield in India?

- Ans
- ☐ 1. Yellandu
 - ☐ 2. Talcher
 - ☐ 3. Rampur
 - ☒ 4. Jharia

Question ID : 6549788734
Status : Answered
Chosen Option : 4

Q.11 In which of the following states is the Ajanta caves situated?

- Ans
- ☐ 1. Uttar Pradesh
 - ☒ 2. Maharashtra
 - ☐ 3. Kerala
 - ☐ 4. Madhya Pradesh

Question ID : 6549787310
Status : Answered
Chosen Option : 2

Q.12 The total number of fundamental duties provided by the Constitution of India is:

- Ans
- ☐ 1. 29
 - ☒ 2. 11
 - ☐ 3. 32
 - ☐ 4. 19

Question ID : 6549788743
Status : Answered
Chosen Option : 2

Q.13 On a computer keyboard, the Shift and Alt keys are examples of:

- Ans
- ☐ 1. numeric keys
 - ☒ 2. modifier keys
 - ☐ 3. function keys
 - ☐ 4. cursor movement keys

Question ID : 6549787308
Status : Answered
Chosen Option : 4

Q.14 With which of the following sports is the FedEx Cup associated?

- Ans ☒ 1. Golf
☐ 2. Tennis
☐ 3. Football
☐ 4. Badminton

Question ID : 6549787330
Status : Answered
Chosen Option : 2

Q.15 Where was 'Dev Deepawali Mahotsav' celebrated in the presence of the PM Narendra Modi in November 2020?

- Ans ☐ 1. Agra
☒ 2. Varanasi
☐ 3. Mathura
☐ 4. Prayagraj

Question ID : 6549787312
Status : Answered
Chosen Option : 2

Q.16 What is the meaning of the term 'collateral' in the context of the banking system?

- Ans ☐ 1. Collateral is an asset of the government that is used for the protection of consumers.
☒ 2. Collateral is an asset that a borrower owns and uses this as a guarantee to a lender until the loan is repaid.
☐ 3. Collateral is an asset that a borrower took as a loan.
☐ 4. Collateral is an asset that the government provides to farmers.

Question ID : 6549787315
Status : Answered
Chosen Option : 2

Q.17 Which of the following is the slowest type of internet connection?

- Ans ☒ 1. Dial-up
☐ 2. Satellite
☐ 3. Cable
☐ 4. Digital subscriber line (DSL)

Question ID : 6549788723
Status : Answered
Chosen Option : 4

Q.18 World Thyroid Day is observed on _____.

- Ans
- ☐ 1. 30th April
 - ☐ 2. 17th June
 - ☒ 3. 25th May
 - ☐ 4. 23rd March

Question ID : 6549787318
Status : Not Answered
Chosen Option : --

Q.19 A mango tree is an example of a/an:

- Ans
- ☐ 1. pseudotroph
 - ☐ 2. ambitroph
 - ☐ 3. heterotroph
 - ☒ 4. autotroph

Question ID : 6549788731
Status : Not Answered
Chosen Option : --

Q.20 In October 2019, who became the youngest cricketer in the world to score a double century in List A cricket?

- Ans
- ☐ 1. Dhruv Jurel
 - ☐ 2. Atharva Ankolekar
 - ☐ 3. Ravi Bishnoi
 - ☒ 4. Yashasvi Jaiswal

Question ID : 6549787332
Status : Answered
Chosen Option : 4

Q.21 Which of the following nations is the smallest neighbour of India in terms of area?

- Ans
- ☐ 1. Nepal
 - ☐ 2. Bangladesh
 - ☐ 3. Afghanistan
 - ☒ 4. Maldives

Question ID : 6549788735
Status : Answered
Chosen Option : 1

Q.22 Who among the following singers was called 'Mallika-e-Ghazal' or the queen of Ghazal?

- Ans
- ☒ 1. Iqbal Bano
 - ☒ 2. Begum Akhtar
 - ☒ 3. Suraiya
 - ☒ 4. Roshan Ara Begum

Question ID : 6549788725
Status : Answered
Chosen Option : 1

Q.23 Who is the author of the novel 'Burnt Sugar'?

- Ans
- ☒ 1. Avni Doshi
 - ☒ 2. Salman Rushdie
 - ☒ 3. Kiran Desai
 - ☒ 4. Vikas Bahl

Question ID : 6549787327
Status : Answered
Chosen Option : 2

Q.24 Which of the following Articles of the Constitution of India makes provision for protection in respect of conviction for offences?

- Ans
- ☒ 1. Article 21
 - ☒ 2. Article 19
 - ☒ 3. Article 20
 - ☒ 4. Article 18

Question ID : 6549787328
Status : Answered
Chosen Option : 3

Q.25 Which of the following hills is situated in Andhra Pradesh?

- Ans
- ☒ 1. Kaimur Hills
 - ☒ 2. Pachmarhi Hills
 - ☒ 3. Nagari Hills
 - ☒ 4. Girnar Hills

Question ID : 6549787322
Status : Answered
Chosen Option : 2

Combined Higher Secondary Level Examination 2020 (Tier-I)

Roll Number	Join Telegram: HaryanaJobs.in
Candidate Name	
Venue Name	
Exam Date	10/08/2021
Exam Time	3:00 PM - 4:00 PM
Subject	Combined Higher Secondary Level Exam 2020

Section : English Language

Q.1 Select the most appropriate meaning of the given idiom.

Break the ice

- Ans ☒ 1. Make a beginning or start something
- ☐ 2. Cool the room for everyone
- ☐ 3. Arrange for a skating show
- ☐ 4. Make things available for a party

Question ID : 6549786036

Status : Answered

Chosen Option : 1

Q.2 Select the most appropriate option to substitute the underlined segment in the given sentence. If there is no need to substitute it, select 'No substitution required'.

Regard of whether the students were ready or not the teacher announced the dates of the test.

- Ans ☐ 1. Regarding whether
- ☐ 2. Regardless of whatsoever
- ☐ 3. No substitution required
- ☒ 4. Regardless of whether

Question ID : 6549786033

Status : Answered

Chosen Option : 1

Q.3 Select the most appropriate synonym of the given word.

Silt

- Ans ☐ 1. Cut
- ☐ 2. Opening
- ☒ 3. Residue
- ☐ 4. Incision

Question ID : 6549786042

Status : Answered

Chosen Option : 4





Q.4 Select the INCORRECTLY spelt word.

- Ans  1. Succeed
 2. Inherit
 3. Implant
 4. Accede

Question ID : 6549787048
Status : Answered
Chosen Option : 1

Q.5 Select the option that can be used as a one-word substitute for the given group of words.

The arrangement of events or dates in the order of their occurrence.

- Ans  1. Calendar
 2. Chronology
 3. Chronic
 4. Routine

Question ID : 6549787050
Status : Answered
Chosen Option : 2

Q.6 Select the most appropriate synonym of the given word.





Vacillate

- Ans  1. Augment
 2. Waver
 3. Strengthen
 4. Fortify

Question ID : 6549787053
Status : Answered
Chosen Option : 3

Q.7 Sentences of a paragraph are given below in jumbled order. Arrange the sentences in the right order to form a meaningful and coherent paragraph.

- A. The country gained admission to the United Nations in 1955.
B. In 2008, however, after a decade long period of violence and turbulent negotiation with a strong Maoist insurgency, the monarchy was dissolved, and Nepal was declared a democratic republic.
C. In 1991 the kingdom established a multiparty parliamentary system.
D. Nepal, long under the rule of hereditary prime ministers favouring a policy of isolation, remained closed to the outside world until a palace revolt in 1950 restored the crown's authority in 1951.

- Ans  1. BCDA
 2. DACB
 3. DBAC
 4. CABD

Question ID : 6549787041
Status : Answered
Chosen Option : 2

Q.8 The following sentence has been divided into parts. One of them may contain an error. Select the part that contains the error from the given options. If you don't find any error, mark 'No error' as your answer.

Vidya put on her mask, / sanitise her hands / and walked into the shop.

- Ans
- ☒ 1. and walked into the shop
 - ☒ 2. No error
 - ☒ 3. Vidya put on her mask
 - ☒ 4. sanitise her hands

Question ID : 6549786022

Status : Answered

Chosen Option : 1

Q.9 Select the most appropriate ANTONYM of the given word.

Rigid

- Ans
- ☒ 1. Definite
 - ☒ 2. Flexible
 - ☒ 3. Adamant
 - ☒ 4. Firm

Question ID : 6549786034

Status : Answered

Chosen Option : 2

Q.10 Select the option that expresses the given sentence in passive voice.

Ravi drove the car towards the highway for a trial run.

- Ans
- ☒ 1. The car was driving towards the highway for a trial run by Ravi.
 - ☒ 2. The car had driven towards the highway for a trial run by Ravi.
 - ☒ 3. The car had been driven for a trial run by Ravi towards the highway.
 - ☒ 4. The car was driven towards the highway for a trial run by Ravi.

Question ID : 6549787030

Status : Answered

Chosen Option : 4


Q.11 Sentences of a paragraph are given below in jumbled order. Arrange the sentences in the right order to form a meaningful and coherent paragraph.

- A. First, a new article comes into our offices.
- B. Every article in the Encyclopedia goes through a rigorous editorial process to make sure it's clear, accurate, objective and fair.
- C. The article is first reviewed by a fact checker, who uses a variety of sources to make sure the article is accurate and the facts are correct.
- D. The author may be an editor at the Encyclopedia who knows that subject or a prominent scholar with specialised expertise in that field.

Ans  1. BADC

 2. BCAD

 3. CDAB

 4. CADB

Question ID : 6549786030

Status : Answered


Chosen Option : 1

Q.12 Select the most appropriate word to fill in the blank.

As the Principal was busy, she _____ a senior teacher to attend the conference on her behalf.

Ans  1. Reserved

 2. Declared

 3. Deputed

 4. Committed

Question ID : 6549787055

Status : Answered

Chosen Option : 3

Q.13 Select the most appropriate option to substitute the underlined segment in the given sentence. If there is no need to substitute it, select 'No substitution required'.

If a person tests positive for Covid-19, he have to isolate himself immediately so that he does not infect others.

Ans  1. he must have to isolate

 2. he isolated himself

 3. he has to isolate himself

 4. No substitution required





Question ID : 6549787042

Status : Answered

Chosen Option : 1




Q.14 Select the option that expresses the given sentence in direct speech.

The customer asked the bank manager if they were working on the following Saturday.

- Ans  1. The customer asked the bank manager, "Are they working on the previous Saturday?"
-  2. The customer said to the bank manager, "Are you working next Saturday?"
-  3. The customer asks the bank manager, "If you were working on the following Saturday?"
-  4. The customer said to the bank manager, "Were they working on the previous Saturday?"

Question ID : 6549786021
Status : Answered
Chosen Option : 3





Q.15 Select the INCORRECTLY spelt word.

- Ans  1. Preshious
-  2. Plenary
-  3. Presentable
-  4. Peaceful

Question ID : 6549786039
Status : Answered
Chosen Option : 1

Q.16 The following sentence has been divided into parts. One of them may contain an error. Select the part that contains the error from the given options. If you don't find any error, mark 'No error' as your answer.



Your advices were timely / and guided me / to take the right decisions.

- Ans  1. to take the right decisions
-  2. No error
-  3. and guided me
-  4. Your advices were timely

Question ID : 6549787033
Status : Answered
Chosen Option : 4

Q.17 Select the most appropriate ANTONYM of the given word.

Inept

- Ans  1. Partial
-  2. Lacking
-  3. Competent
-  4. Useless

Question ID : 6549787045
Status : Answered
Chosen Option : 3

Q.18 Select the most appropriate meaning of the given idiom.

A lean patch

- Ans
- ☒ 1. Cloth that is beginning to tear
 - ☒ 2. A part of hair that is thin
 - ☒ 3. Friendship that has ended
 - ☒ 4. A period of poor performance

Question ID : 6549787047

Status : Answered

Chosen Option : 4

Q.19 Select the option that can be used as a one-word substitute for the given group of words.

A place of ideal perfection especially in laws, government, and social conditions

- Ans
- ☒ 1. Paradise
 - ☒ 2. Heaven
 - ☒ 3. Utopia
 - ☒ 4. Aden

Question ID : 6549786041

Status : Not Answered

Chosen Option : --

Q.20 Select the most appropriate word to fill in the blank.

Carbohydrates are so called because they ____ carbon, oxygen and hydrogen.

- Ans
- ☒ 1. contain
 - ☒ 2. cover
 - ☒ 3. consist
 - ☒ 4. codify

Question ID : 6549786044

Status : Answered

Chosen Option : 3

Comprehension:

In the following passage, some words have been deleted. Select the most appropriate option to fill in each blank.

Seychelles, one of the world's smallest countries, is (1)_____ of two main island groups: the Mahé group of (2)_____ than 40 central, mountainous granitic islands and a (3)_____ group of more than 70 outer, flat, coralline islands. The islands of the Mahé group are rocky and (4)_____ have a narrow coastal strip and a central range of hills. The (5)_____ feature of those islands, with their lush tropical vegetation, is that of high hanging gardens overlooking silver-white beaches and clear lagoons.

SubQuestion No : 21

Q.21 Select the most appropriate option to fill in blank no. 1.

- Ans  1. Covered
-  2. Composed
-  3. Contained
-  4. Combined

Question ID : 6549787035

Status : Answered

Chosen Option : 2

Comprehension:

In the following passage, some words have been deleted. Select the most appropriate option to fill in each blank.

Seychelles, one of the world's smallest countries, is (1)_____ of two main island groups: the Mahé group of (2)_____ than 40 central, mountainous granitic islands and a (3)_____ group of more than 70 outer, flat, coralline islands. The islands of the Mahé group are rocky and (4)_____ have a narrow coastal strip and a central range of hills. The (5)_____ feature of those islands, with their lush tropical vegetation, is that of high hanging gardens overlooking silver-white beaches and clear lagoons.

SubQuestion No : 22

Q.22 Select the most appropriate option to fill in blank no. 2.

- Ans  1. Further
-  2. Beyond
-  3. Extra
-  4. More

Question ID : 6549787036

Status : Answered

Chosen Option : 4

Comprehension:

In the following passage, some words have been deleted. Select the most appropriate option to fill in each blank.

Seychelles, one of the world's smallest countries, is (1)_____ of two main island groups: the Mahé group of (2)_____ than 40 central, mountainous granitic islands and a (3)_____ group of more than 70 outer, flat, coralline islands. The islands of the Mahé group are rocky and (4)_____ have a narrow coastal strip and a central range of hills. The (5)_____ feature of those islands, with their lush tropical vegetation, is that of high hanging gardens overlooking silver-white beaches and clear lagoons.

SubQuestion No : 23

Q.23 Select the most appropriate option to fill in blank no. 3.

- Ans
- ☒ 1. Succeeding
 - ☒ 2. Next
 - ☒ 3. Second
 - ☒ 4. Subsequent

Question ID : 6549787037

Status : Answered

Chosen Option : 4

Comprehension:

In the following passage, some words have been deleted. Select the most appropriate option to fill in each blank.

Seychelles, one of the world's smallest countries, is (1)_____ of two main island groups: the Mahé group of (2)_____ than 40 central, mountainous granitic islands and a (3)_____ group of more than 70 outer, flat, coralline islands. The islands of the Mahé group are rocky and (4)_____ have a narrow coastal strip and a central range of hills. The (5)_____ feature of those islands, with their lush tropical vegetation, is that of high hanging gardens overlooking silver-white beaches and clear lagoons.

SubQuestion No : 24

Q.24 Select the most appropriate option to fill in blank no. 4.

- Ans
- ☒ 1. Typically
 - ☒ 2. Routinely
 - ☒ 3. Regularly
 - ☒ 4. Habitually

Question ID : 6549787038

Status : Answered

Chosen Option : 1

Comprehension:

In the following passage, some words have been deleted. Select the most appropriate option to fill in each blank.

Seychelles, one of the world's smallest countries, is (1)_____ of two main island groups: the Mahé group of (2)_____ than 40 central, mountainous granitic islands and a (3)_____ group of more than 70 outer, flat, coralline islands. The islands of the Mahé group are rocky and (4)_____ have a narrow coastal strip and a central range of hills. The (5)_____ feature of those islands, with their lush tropical vegetation, is that of high hanging gardens overlooking silver-white beaches and clear lagoons.

SubQuestion No : 25

Q.25 Select the most appropriate option to fill in blank no. 5.

- Ans  1. Collective
 2. Wide
 3. Predominant
 4. Global

Question ID : **6549787039**
 Status : **Answered**
 Chosen Option : **2**

Section : **General Intelligence**

Q.1 Select the number from among the given options that can replace the question mark (?) in the following series.





8, 11, 17, 26, 38, ?

- Ans  1. 53
 2. 56
 3. 50
 4. 58

Question ID : **6549787061**
 Status : **Answered**
 Chosen Option : **1**

Q.2 Select the option in which the numbers share the same relationship as that shared by the given pair of numbers.

56 : 67

- Ans  1. 49 : 58
 2. 85 : 98
 3. 76 : 88
 4. 63 : 75

Question ID : **6549786048**
 Status : **Answered**
 Chosen Option : **2**

Q.3 Train A, which runs at a speed of 90 km/h, starts from Station Y at 8 a.m. Train B, which runs at a speed of 120 km/h, starts from Station Y on the same route at 8.10 a.m.. If Train B catches up with Train A at 8.40 a.m. at Station Z, then what is the distance between Stations Y and Z?

- Ans**
- ☒ 1. 54 km
 - ☒ 2. 62 km
 - ☒ 3. 60 km
 - ☒ 4. 50 km

Question ID : 6549786046

Status : **Marked For Review**

Chosen Option : 1

Q.4 Sunaina introduced Ritik as the son of the brother of her mother. How is Ritik related to Sunaina?

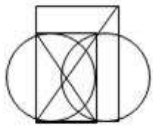
- Ans**
- ☒ 1. Son
 - ☒ 2. Cousin
 - ☒ 3. Uncle
 - ☒ 4. Nephew

Question ID : 6549786160

Status : **Answered**

Chosen Option : 2

Q.5 Select the option that is embedded in the given figure (rotation is NOT allowed).



Ans

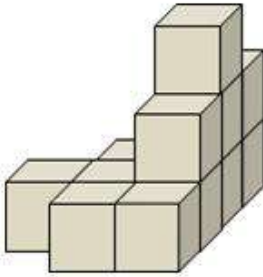
- ☒ 1.
- ☒ 2.
- ☒ 3.
- ☒ 4.

Question ID : 6549787077

Status : **Answered**

Chosen Option : 3

Q.6 How many cubes are there in the given figure?



- Ans
- ☒ 1. 13
 - ☒ 2. 11
 - ☒ 3. 12
 - ☒ 4. 14

Question ID : 6549786066

Status : Answered

Chosen Option : 1

Q.7 In a certain code language, TOGETHER is coded as 119 and MASTER is coded as 87. How will REVERSE be coded in that language?

- Ans
- ☒ 1. 92
 - ☒ 2. 98
 - ☒ 3. 94
 - ☒ 4. 96

Question ID : 6549786055

Status : Not Answered

Chosen Option : --

Q.8 Four letter-clusters have been given in the options, out of which three letter-clusters are alike in some manner and one is different. Select the letter-cluster that is different.

- Ans
- ☒ 1. GDBY
 - ☒ 2. UROL
 - ☒ 3. QNKH
 - ☒ 4. JGDA

Question ID : 6549786061

Status : Answered

Chosen Option : 1

Q.9 In a certain code language, TRAILER is written as QPXGICO. How will ALMIRAH be written in that language?

- Ans
- ☒ 1. XIJFOX E
 - ☒ 2. YJKG P Y F
 - ☒ 3. YIKFP X F
 - ☒ 4. XJJGO Y E

Question ID : 6549787064

Status : Answered

Chosen Option : 1

Q.10 Select the option in which the numbers are related in the same way as are the numbers of the following set.

32 : 63 : 123

- Ans
- ☒ 1. 26 : 48 : 92
 - ☒ 2. 26 : 51 : 100
 - ☒ 3. 35 : 72 : 149
 - ☒ 4. 33 : 66 : 130

Question ID : 6549786050

Status : Not Answered

Chosen Option : --

Q.11 Select the option that is related to the third word in the same way as the second word is related to the first word.

Hollow : Worthless : : Solid : ?

- Ans
- ☒ 1. Sound
 - ☒ 2. Sincere
 - ☒ 3. Acceptance
 - ☒ 4. Clear

Question ID : 6549787067


Status : Answered

Chosen Option : 3

Q.12 Select the Venn diagram that best represents the relationship between the following classes.

Carnivorous, Frog, Amphibian

Ans



Question ID : 6549786070

Status : Answered

Chosen Option : 1

Q.13 Four words have been given, out of which three are alike in some manner and one is different. Select the word that is different.

Ans

☒ 1. Confident

☒ 2. Intelligent

☒ 3. Coward

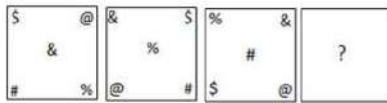
☒ 4. Honest

Question ID : 6549787072

Status : Answered

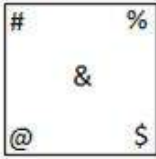
Chosen Option : 3

Q.14 Select the figure from among the given options that can replace the question mark (?) in the following series.

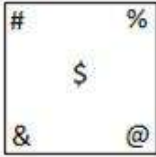


Ans

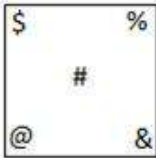
☒ 1.



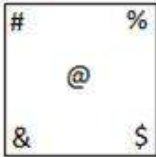
☒ 2.



☒ 3.



☒ 4.



Question ID : 6549786065

Status : Answered

Chosen Option : 3

Q.15 Three different positions of the same dice are shown. Select the number that will be on the face opposite to the face having the number 4.



Ans

☒ 1. 6

☒ 2. 1

☒ 3. 3

☒ 4. 2

Question ID : 6549786064

Status : Answered

Chosen Option : 2

Q.16 Read the given statements and conclusions carefully. Assuming that the information given in the statements is true, even if it appears to be at variance with commonly known facts, decide which of the given conclusions logically follow(s) from the statements.

Statements:

All bats are sticks.

All sticks are woods.

Conclusions:

I. Some woods are not bats.

II. All bats are woods.

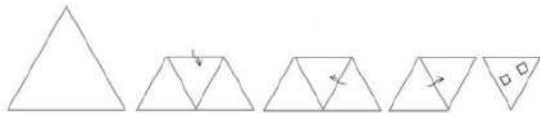
- Ans**
- ☒ 1. Both conclusions I and II follow.
 - ☒ 2. Neither conclusion I nor II follows.
 - ☒ 3. Only conclusion II follows.
 - ☒ 4. Only conclusion I follows.

Question ID : 6549787073

Status : Answered

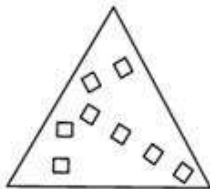
Chosen Option : 1

Q.17 The sequence of folding a piece of paper and the manner in which the folded paper has been cut is shown in the following figures. How would this paper look when unfolded?

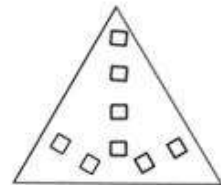


Ans

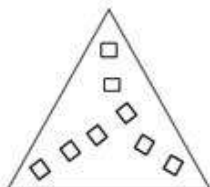
☒ 1.



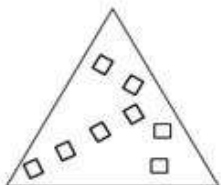
☒ 2.



☒ 3.



☒ 4.



Question ID : 6549787078

Status : Answered

Chosen Option : 2

Q.18 Select the correct mirror image of the given figure when the mirror is placed at the right side.



Ans



1.



2.



3.



4.



Question ID : 6549787079

Status : Answered

Chosen Option : 2

Q.19 Select the option that is related to the third word in the same way as the second word is related to the first word.

Sacred : Profane :: Barren : ?

Ans



1. Fertile



2. Desert



3. Empty



4. Sterile

Question ID : 6549786060

Status : Answered

Chosen Option : 1

Q.20 Select the correct option that indicates the arrangement of the given words in a logical and meaningful order.

1. Beam
2. Canopy
3. Foundation
4. Roof
5. Column

Ans



1. 3-2-1-5-4



2. 3-5-1-4-2



3. 1-2-5-3-4



4. 5-3-1-2-4

Question ID : 6549786053

Status : Answered

Chosen Option : 1

Q.21 Which two digits and two signs need to be interchanged so as to balance the given equation?

$$98 \div 4 - 126 + 96 \times 5 = 266$$

- Ans
- ☒ 1. 8 and 2; - and +
 - ☒ 2. 5 and 8; \times and \div
 - ☒ 3. 5 and 9; + and \div
 - ☒ 4. 6 and 4; \times and \div

Question ID : 6549787057

Status : Not Answered

Chosen Option : --

Q.22 Select the option that is related to the third term in the same way as the second term is related to the first term.

COMPETE : OCETPME :: EXTREME : ?

- Ans
- ☒ 1. EMXEERT
 - ☒ 2. RTXEEME
 - ☒ 3. XEEMRTE
 - ☒ 4. XERTMEE

Question ID : 6549787066

Status : Answered

Chosen Option : 3

Q.23 Select the option in which the numbers are related in the same way as are the numbers of the following set.

(92, 85, 82)

- Ans
- ☒ 1. (28, 23, 21)
 - ☒ 2. (71, 65, 62)
 - ☒ 3. (83, 78, 77)
 - ☒ 4. (69, 66, 62)

Question ID : 6549787059

Status : Answered

Chosen Option : 1

Q.24 Four numbers have been given, out of which three are alike in some manner and one is different. Select the number that is different.

- Ans
- ☒ 1. 199
 - ☒ 2. 139
 - ☒ 3. 183
 - ☒ 4. 163

Question ID : 6549786052

Status : Not Answered

Chosen Option : --

Q.25 Select the combination of letters that when sequentially placed in the blanks of the given series will complete the series.

t _ f e t c _ _ _ c f e

- Ans
- ☐ 1. t c f e
 - ☐ 2. f e t c
 - ☐ 3. e c f t
 - ☒ 4. c f e t

Question ID : 6549789763

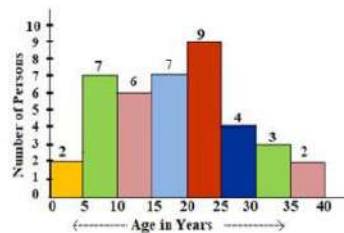
Status : Answered

Chosen Option : 4

Section : Quantitative Aptitude

Q.1 Some families went on an outstation tour. The given histogram shows their ages.

What is the ratio of the number of persons of age less than 15 years to that of persons of age less than 30 years?



- Ans
- ☐ 1. 15 : 38
 - ☐ 2. 15 : 31
 - ☒ 3. 3 : 7
 - ☐ 4. 11 : 19

Question ID : 6549788417

Status : Answered

Chosen Option : 3

Q.2 When the price of an item was reduced by 20%, its sales increased by $x\%$. If there is an increase of 25% in the receipt of the revenue, then the value of x is :

- Ans
- ☐ 1. 53.84%
 - ☐ 2. 55.75%
 - ☒ 3. 56.25%
 - ☐ 4. 61.5%

Question ID : 6549786076

Status : Not Answered

Chosen Option : --

Q.3 In a trapezium $ABCD$, $DC \parallel AB$, $AB = 16 \text{ cm}$ and $DC = 11.2 \text{ cm}$. What is the length (in cm) of the line segment joining the mid points of its diagonals?

- Ans**
- ☒ 1. 2.4
 - ☐ 2. 1.8
 - ☐ 3. 1.2
 - ☐ 4. 2.8

Question ID : **6549787093**

Status : **Answered**

Chosen Option : **1**

Q.4 In a class of 80 students (boys and girls) there are 60 % girls . The average weight of the boys is 58 kg and that of the girls is 52 kg. What is the average weight (in kg) of the whole class?

- Ans**
- ☐ 1. 56.2
 - ☒ 2. 54.4
 - ☐ 3. 53.6
 - ☐ 4. 55

Question ID : **6549786074**

Status : **Answered**

Chosen Option : **2**

Q.5 $\frac{775 \times 775 \times 775 + 225 \times 225 \times 225}{77.5 \times 77.5 + 22.5 \times 22.5 - 77.5 \times 22.5}$ is equal to:

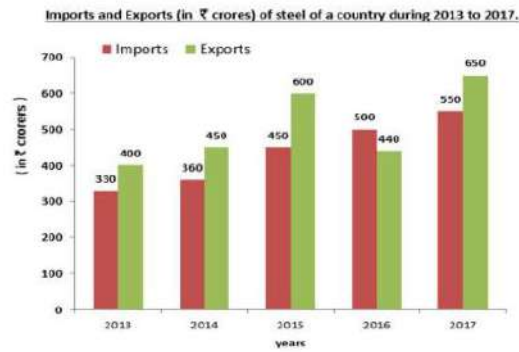
- Ans**
- ☐ 1. 100
 - ☐ 2. 10000
 - ☒ 3. 100000
 - ☐ 4. 0.1

Question ID : **6549787098**

Status : **Answered**

Chosen Option : **1**

Q.6 Study the bar graph which shows the imports and exports (in ₹) of steel of a country during 2013 to 2017 and answer the question that follows.



For how many year(s) were the imports less than 80% of the average exports (per year) of the country during the five years?

- Ans
- ☒ 1. 4
 - ☒ 2. 1
 - ☒ 3. 3
 - ☒ 4. 2

Question ID : 6549787102

Status : Answered

Chosen Option : 2

Q.7 If $a + b + c = 5$, $a^2 + b^2 + c^2 = 27$, and $a^3 + b^3 + c^3 = 125$, then the value of $\frac{abc}{5}$ is:

- Ans
- ☒ 1. -1
 - ☒ 2. 5
 - ☒ 3. -5
 - ☒ 4. 1

Question ID : 6549787095

Status : Not Answered

Chosen Option : --

Q.8 A sum lent at simple interest amounts to ₹6,240.80 in one year and to ₹7,563.20 in 4 years. The sum (in ₹) and the rate of interest per annum, respectively, are:

- Ans
- ☒ 1. 6,200, 8.5%
 - ☒ 2. 5,800, 8.5%
 - ☒ 3. 5,800, 7.6%
 - ☒ 4. 6,200, 7.6%

Question ID : 6549786079

Status : Answered

Chosen Option : 2

Q.9 If the 11-digit number $4y6884805x6$ is divisible by 72, and $x \neq y$, then the value of \sqrt{xy} is:

- Ans**
- ☒ 1. $\sqrt{12}$
 - ☒ 2. $\sqrt{6}$
 - ☒ 3. $\sqrt{5}$
 - ☒ 4. $\sqrt{8}$

Question ID : **6549786087**

Status : **Answered**

Chosen Option : **3**

Q.10 In ΔPQR , $QT \perp PR$ and S is a point on QR such that $\angle PSQ = p^\circ$. If $\angle TQR = 44^\circ$ and $\angle SPR = 32^\circ$, then the value of p is:

- Ans**
- ☒ 1. 72°
 - ☒ 2. 82°
 - ☒ 3. 76°
 - ☒ 4. 78°

Question ID : **6549786082**

Status : **Not Answered**

Chosen Option : **--**

Q.11 Two circles of radii 18 cm and 12 cm intersect each other and the length of their common chord is 16 cm. What is the distance (in cm) between their centres?

- Ans**
- ☒ 1. $2\sqrt{5}(2 + \sqrt{13})$
 - ☒ 2. $2\sqrt{5}(4 - \sqrt{13})$
 - ☒ 3. $2\sqrt{5}(4 + \sqrt{13})$
 - ☒ 4. $2\sqrt{5}(-2 + \sqrt{13})$

Question ID : **6549786080**

Status : **Not Answered**

Chosen Option : **--**

Q.12 The value of $\cot^2 46^\circ - \sec^2 44^\circ + (\sin^2 1^\circ + \sin^2 3^\circ + \sin^2 5^\circ + \dots + \sin^2 89^\circ)$ is:

- Ans**
- ☒ 1. 23.5
 - ☒ 2. 20.5
 - ☒ 3. 22.5
 - ☒ 4. 21.5

Question ID : **6549787099**

Status : **Answered**

Chosen Option : **4**

Q.13 If $(1 + \cot^2 \theta) + (1 + (\cot^2 \theta)^{-1})$ is equal to k , then $\sqrt{k} = ?$

- Ans
- ☒ 1. $\sin \theta \sec \theta$
 - ☒ 2. $\operatorname{cosec} \theta \cos \theta$
 - ☒ 3. $\operatorname{cosec} \theta \sec \theta$
 - ☒ 4. $\sin \theta \cos \theta$

Question ID : 6549787101
Status : Not Answered
Chosen Option : --

Q.14 The sides AB , BC and AC of $\triangle ABC$ are 12 cm, 8 cm and 10 cm, respectively. A circle is inscribed in the triangle touching AB , BC and AC at D , E and F , respectively. The ratio of the lengths of AD to CE is:

- Ans
- ☒ 1. 5 : 7
 - ☒ 2. 3 : 5
 - ☒ 3. 10 : 7
 - ☒ 4. 7 : 3

Question ID : 6549787091
Status : Answered
Chosen Option : 4

Q.15 By selling a car for ₹6,32,500, a showroom owner makes a profit of 15%. If he sold the car at ₹8,10,000, then what would be the profit percentage (correct to one decimal place)?

- Ans
- ☒ 1. 47.3%
 - ☒ 2. 44.8%
 - ☒ 3. 41.5%
 - ☒ 4. 51.4%

Question ID : 6549787087
Status : Answered
Chosen Option : 1

Q.16 If $(x - 1.5)^3 + (x - 4)^3 + (x - 3.5)^3 = 3(x - 1.5)(x - 4)(x - 3.5)$, then what is the value of x ?

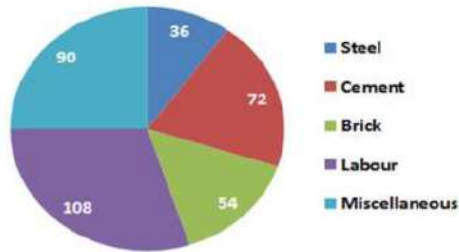
- Ans
- ☒ 1. 1
 - ☒ 2. 3
 - ☒ 3. 6
 - ☒ 4. 9

Question ID : 6549786084
Status : Answered
Chosen Option : 2

Q.17 Study the pie chart and answer the question that follows.

The given pie chart shows the degree of cost incurred in different expenditure on the construction of a house. The total expenditure is ₹31,50,000.

Degree of cost incurred in different expenditure



What is the percentage of expenditure on cement?

- Ans
- ☒ 1. 30%
 - ☒ 2. 25%
 - ☒ 3. 15%
 - ☒ 4. 20%

Question ID : 6549786093

Status : Answered

Chosen Option : 4

Q.18 A marks her goods 25% above the cost price. She sells 25% of the goods at the marked price, 60% at 25% discount and the remaining at 10% discount. What is her overall gain or loss per cent?

- Ans
- ☒ 1. Gain 15.124%
 - ☒ 2. Loss 18.175%
 - ☒ 3. Loss 3.125%
 - ☒ 4. Gain 4.375%

Question ID : 6549787085

Status : Not Answered

Chosen Option : --

Q.19 Working together A, B and C can complete a piece of work in 3 days. A completes the same work in 24 days and B completes it in 6 days. How many days will C alone take to complete the same work?

- Ans
- ☒ 1. 18
 - ☒ 2. 8
 - ☒ 3. 12
 - ☒ 4. 6

Question ID : 6549787081

Status : Answered

Chosen Option : 2

Q.20 A man covers $\frac{5}{12}$ of a total journey by train, $\frac{7}{18}$ of the journey by bus and the remaining 7 km on foot. His total journey (in km) is:

- Ans**
- ☒ 1. 36 km
 - ☐ 2. 35 km
 - ☐ 3. 32 km
 - ☐ 4. 40 km

Question ID : 6549786072

Status : Answered

Chosen Option : 1

Q.21 If $3\cos\theta = 2\sin^2\theta$, $0^\circ < \theta < 90^\circ$, then what is the value of $(\tan^2\theta + \sec^2\theta - \operatorname{cosec}^2\theta)$?

- Ans**
- ☒ 1. $\frac{17}{3}$
 - ☐ 2. $-\frac{7}{3}$
 - ☐ 3. $-\frac{17}{3}$
 - ☐ 4. $\frac{7}{3}$

Question ID : 6549786090

Status : Answered

Chosen Option : 4

Q.22 Study the graph which shows the target and actual production of ACs, (in thousands) of a factory over five months and answer the question that follows.

Target and Actual Production of AC's (in Thousands) of a factory over five months



The total target production of ACs in February, March, April and May is what percent less than the total actual production of ACs over five months? (correct to one decimal place)

- Ans**
- ☐ 1. 27.9%
 - ☐ 2. 26.8%
 - ☐ 3. 29.7%
 - ☒ 4. 28.6%

Question ID : 6549786095

Status : Not Answered

Chosen Option : --

Q.23 The volume of a right circular cone is 462 cm^3 . If its height is 12 cm, then the area of its base (in cm^2) is:

- Ans
- ☒ 1. 124.5
 - ☒ 2. 103.5
 - ☒ 3. 115.5
 - ☒ 4. 98.5

Question ID : 6549787083

Status : Answered

Chosen Option : 3

Q.24 What is the ratio of the mean proportional between 1.2 and 10.8 to the third proportional to 0.2 and 1.2?

- Ans
- ☒ 1. 1 : 3
 - ☒ 2. 1 : 2
 - ☒ 3. 2 : 1
 - ☒ 4. 3 : 1

Question ID : 6549786078

Status : Not Answered

Chosen Option : --

Q.25 If $a + b + c = 11$ and $ab + bc + ca = 15$, then what is the value of $a^3 + b^3 + c^3 - 3abc$?

- Ans
- ☒ 1. 368
 - ☒ 2. 836
 - ☒ 3. 386
 - ☒ 4. 638

Question ID : 6549787096

Status : Answered

Chosen Option : 2

Section : General Awareness

Q.1 Who among the following rulers belonged to the Tuluva dynasty?

- Ans
- ☒ 1. Pushyamitra Sunga
 - ☒ 2. Vishnuvardhana
 - ☒ 3. Simha Vishnu
 - ☒ 4. Krishnadeva Raya

Question ID : 6549787122

Status : Answered

Chosen Option : 4

Q.2 Where was the first hot air balloon wildlife safari launched in India in December 2020?

- Ans
- ☒ 1. Palamu Tiger Reserve
 - ☒ 2. Ranthambore Tiger Reserve
 - ☒ 3. Bandhavgarh Tiger Reserve
 - ☒ 4. Pilibhit Tiger Reserve

Question ID : **6549786100**
Status : **Answered**
Chosen Option : **3**

Q.3 Which of the following quantities is measured using a torsion balance?

- Ans
- ☒ 1. Magnetism
 - ☒ 2. Charge
 - ☒ 3. Pressure
 - ☒ 4. Force

Question ID : **6549787115**
Status : **Not Answered**
Chosen Option : --

Q.4 Who among the following cricketers won the Sir Garfield Sobers Award for 'ICC Male Cricketer of the Decade' in December 2020?

- Ans
- ☒ 1. Steve Smith
 - ☒ 2. Mahendra Singh Dhoni
 - ☒ 3. Virat Kohli
 - ☒ 4. Rashid Khan

Question ID : **6549786120**
Status : **Answered**
Chosen Option : **3**

Q.5 Who among the following were awarded the Nobel Prize in Chemistry 2020 for their exemplary work in genome editing?

- Ans
- ☒ 1. Jennifer A Doudna and Emmanuelle Charpentier
 - ☒ 2. George P Smith and Sir Gregory P Winter
 - ☒ 3. Gerard Mourou and Donna Strickland
 - ☒ 4. James P Allison and Tasuku Honjo

Question ID : **6549786115**
Status : **Answered**
Chosen Option : **1**

Q.6 Which of the following crops is grown throughout the year in the southern states of India?

- Ans
- ☐ 1. Sorghum
 - ☐ 2. Maize
 - ☐ 3. Finger millet
 - ☒ 4. Rice

Question ID : **6549786110**
Status : **Answered**
Chosen Option : **1**

Q.7 Who among the following travellers came to India from Uzbekistan in the 11th century?

- Ans
- ☐ 1. Abdur Razzaq Samarquandi
 - ☐ 2. Francois Bernier
 - ☐ 3. Ibn Battuta
 - ☒ 4. Al-Biruni

Question ID : **6549786113**
Status : **Answered**
Chosen Option : **1**

Q.8 Which of the following states was NOT formed in the year 2000?

- Ans
- ☐ 1. Jharkhand
 - ☒ 2. Telangana
 - ☐ 3. Uttarakhand
 - ☐ 4. Chhattisgarh

Question ID : **6549787127**
Status : **Answered**
Chosen Option : **2**

Q.9 Which of the following songs do the peasants of Rajasthan sing while working in fields?

- Ans
- ☒ 1. Pankhida
 - ☐ 2. Pandavani
 - ☐ 3. Chhakri
 - ☐ 4. Barhamasa

Question ID : **6549787109**
Status : **Not Answered**
Chosen Option : **--**

Q.10 The total population per net cultivated area of a country refers to its _____.

- Ans ☒ 1. physiological density
☒ 2. population density
☒ 3. agricultural density
☒ 4. livestock density

Question ID : 6549786111
Status : Answered
Chosen Option : 2

Q.11 Who among the following won a bronze medal at the World Athletics Championship in Paris in 2003?

- Ans ☒ 1. Krishna Poonia
☒ 2. Seema Punia
☒ 3. PT Usha
☒ 4. Anju Bobby George

Question ID : 6549786118
Status : Not Answered
Chosen Option : --

Q.12 Which of the following soils is found in areas of heavy rainfall and high humidity?

- Ans ☒ 1. Saline soil
☒ 2. Peaty soil
☒ 3. Red soil
☒ 4. Yellow soil

Question ID : 6549787118
Status : Not Answered
Chosen Option : --

Q.13 An ambassador of which of the following countries was elected as the President of the United Nations Human Rights Council in January 2021?

- Ans ☒ 1. Cuba
☒ 2. Libya
☒ 3. Fiji
☒ 4. Ghana

Question ID : 6549787112
Status : Not Answered
Chosen Option : --

Q.14 In which of the following states is the Shatrunjaya Hills located?

- Ans ☒ 1. Gujarat
☐ 2. Andhra Pradesh
☐ 3. Madhya Pradesh
☐ 4. Karnataka

Question ID : 6549787119
Status : Not Answered
Chosen Option : --

Q.15 In which of the following years did the Reserve Bank of India liberalise the licensing policy for Urban Co-operative Banks?

- Ans ☒ 1. 1993
☐ 2. 1998
☐ 3. 1995
☐ 4. 2001

Question ID : 6549786103
Status : Not Answered
Chosen Option : --

Q.16 The _____ is a three or four letter abbreviation that signifies the file type.

- Ans ☒ 1. extension
☐ 2. search
☐ 3. virus
☐ 4. name

Question ID : 6549786096
Status : Answered
Chosen Option : 1

Q.17 Which of the following books did the famous cricketer Sunil Gavaskar author?

- Ans ☐ 1. Democracy's XI: The Great Indian Cricket Story
☒ 2. Runs 'n Ruins
☐ 3. Playing It My Way
☐ 4. Captain Cool

Question ID : 6549787124
Status : Answered
Chosen Option : 2

Q.18 As per Union Budget 2020, the Government of India intends to double the country's milk processing capacity by the year _____.

- Ans
- ☐ 1. 2028
 - ☐ 2. 2023
 - ☐ 3. 2030
 - ☒ 4. 2025

Question ID : 6549787114

Status : Answered

Chosen Option : 2

Q.19 Which of the following ports is used to connect a computer to a wired network?

- Ans
- ☐ 1. Universal serial bus port
 - ☒ 2. Ethernet port
 - ☐ 3. Parallel port
 - ☐ 4. Super-video port

Question ID : 6549787107

Status : Answered

Chosen Option : 2

Q.20 Which of the following is a vector-borne disease?

- Ans
- ☐ 1. Pneumonia
 - ☒ 2. Malaria
 - ☐ 3. Mumps
 - ☐ 4. Cholera

Question ID : 6549786106

Status : Not Answered

Chosen Option : --

Q.21 Which of the following states launched India's and South-Asia's first blockchain-enabled rooftop solar trading platform in December 2020?

- Ans
- ☒ 1. Uttar Pradesh
 - ☐ 2. Gujarat
 - ☐ 3. Rajasthan
 - ☐ 4. Madhya Pradesh

Question ID : 6549786101

Status : Answered

Chosen Option : 4

Q.22 Who is the Governor of the state of Chhattisgarh as of May 2020?

- Ans
- ☒ 1. Bhupesh Baghel
 - ☒ 2. Anusuiya Uikey
 - ☒ 3. Phagu Chauhan
 - ☒ 4. Ramesh Bais

Question ID : 6549786116
Status : Answered
Chosen Option : 2

Q.23 Which of the following cells is NOT used in watches?

- Ans
- ☒ 1. Silver oxide cell
 - ☒ 2. Mercury cell
 - ☒ 3. Zinc air cell
 - ☒ 4. Lead acid cell

Question ID : 6549787117
Status : Answered
Chosen Option : 4

Q.24 Where is the Rumi Darwaza located?

- Ans
- ☒ 1. Lucknow
 - ☒ 2. Gwalior
 - ☒ 3. Agra
 - ☒ 4. Bhopal

Question ID : 6549786098
Status : Not Answered
Chosen Option : --

Q.25 In December 2020, the Chief Minister of _____ announced that India's biggest hockey stadium is being set up in the state.

- Ans
- ☒ 1. Telangana
 - ☒ 2. Odisha
 - ☒ 3. West Bengal
 - ☒ 4. Andhra Pradesh

Question ID : 6549787129
Status : Answered
Chosen Option : 2

Combined Higher Secondary Level Examination 2020 (Tier-I)

Roll Number	Join Telegram: HaryanaJobs.in
Candidate Name	
Venue Name	
Exam Date	11/08/2021
Exam Time	9:00 AM - 10:00 AM
Subject	Combined Higher Secondary Level Exam 2020

Section : English Language

Q.1 Given below are four jumbled sentences. Out of the given options, select the one that gives their correct order.

- A. He told his friends that his difficulties were a sign of God's confidence in him.
- B. A businessman remained cheerful even though he suffered one catastrophe after another.
- C. Therefore, when he was serving in the armed forces too, his senior officer had chosen him for dangerous missions because he knew he could be trusted.
- D. First, his son had a serious accident and then he had huge losses in his business, but he was not perturbed.

- Ans
- ☒ 1. BACD
 - ☒ 2. BCDA
 - ☒ 3. BDAC
 - ☒ 4. BCAD

Question ID : 6549788252

Status : Answered

Chosen Option : 4

Q.2 Select the INCORRECTLY spelt word.

- Ans
- ☒ 1. allowance
 - ☒ 2. existence
 - ☒ 3. acceptance
 - ☒ 4. forbearance

Question ID : 6549788261

Status : Answered

Chosen Option : 3

Q.3 Select the most appropriate synonym of the given word.

Travail

- Ans
- ☒ 1. Journey
 - ☒ 2. Excursion
 - ☒ 3. Agony
 - ☒ 4. Adventure

Question ID : 6549786043

Status : Answered

Chosen Option : 2

Q.4 Select the most appropriate word to fill in the blank.

Doctors and nurses who are treating COVID-19 patients are finding it difficult _____ long working hours.

- Ans
- ☒ 1. for manage with
 - ☒ 2. to cope with
 - ☒ 3. to service for
 - ☒ 4. to carry on

Question ID : 6549788266

Status : Answered

Chosen Option : 3

Q.5 Select the correct indirect form of the given sentence.

Sarita said to me, "I'm glad I did not leave my village."

- Ans
- ☒ 1. Sarita told me she was glad she was not leaving her village.
 - ☒ 2. Sarita told me she is glad she had not left her village.
 - ☒ 3. Sarita told me I am glad she had not left her village.
 - ☒ 4. Sarita told me she was glad she had not left her village.

Question ID : 6549788243

Status : Answered

Chosen Option : 4

Q.6 Sentences of a paragraph are given below in jumbled order. Arrange the sentences in the right order to form a meaningful and coherent paragraph.

- A. In other words, chess and basketball are contests.
- B. As games, chess and basketball are obviously different from leapfrog and playing house.
- C. One can win a game of basketball, but it makes no sense to ask who has won a game of leapfrog.
- D. The first two games are competitive, the second two are not.

- Ans
- ☒ 1. BCAD
 - ☒ 2. DCBA
 - ☒ 3. BDCA
 - ☒ 4. ACDB

Question ID : 6549786031

Status : Answered

Chosen Option : 1

Q.7 Select the most appropriate synonym of the given word.

CORDIAL

- Ans
- ☒ 1. friendly
 - ☒ 2. capable
 - ☒ 3. unwilling
 - ☒ 4. hostile

Question ID : 6549788264

Status : Answered

Chosen Option : 1

Q.8 Select the most appropriate word to fill in the blank.

Everything in the village was grown organically as the majority of the population indulged in farming for ____.

- Ans ☒ 1. sustenance
☐ 2. maintenance
☐ 3. nourishment
☐ 4. nutrition

Question ID : **6549786045**
Status : **Answered**
Chosen Option : **1**

Q.9 Select the most appropriate meaning of the given idiom.

Off and on

- Ans ☐ 1. again and again
☐ 2. every day
☒ 3. sometimes but not regularly
☐ 4. not soon

Question ID : **6549788258**
Status : **Answered**
Chosen Option : **3**

Q.10 Select the most appropriate meaning of the given idiom.

Hang on every word

- Ans ☐ 1. Speak very slowly
☒ 2. Listen very carefully
☐ 3. Stop after hearing one word
☐ 4. Stammer while speaking

Question ID : **6549786037**
Status : **Answered**
Chosen Option : **4**

Q.11 Select the most appropriate ANTONYM of the given word.

ABUNDANCE

- Ans ☐ 1. gaiety
☒ 2. scarcity
☐ 3. bounty
☐ 4. generosity

Question ID : **6549788256**
Status : **Answered**
Chosen Option : **2**

Q.12 The following sentence has been divided into parts. One of them may contain an error. Select the part that contains the error from the given options. If you don't find any error, mark 'No error' as your answer.

There is constant friction / between the executive members / of the Association.

- Ans
- ☒ 1. There is constant friction
 - ☒ 2. No error
 - ☒ 3. between the executive members
 - ☒ 4. of the Association

Question ID : 6549786023
Status : Answered
Chosen Option : 1

Q.13 Select the most appropriate ANTONYM of the given word.

Exclusive

- Ans
- ☒ 1. Expansive
 - ☒ 2. Inclusive
 - ☒ 3. Incisive
 - ☒ 4. Extensive

Question ID : 6549786035
Status : Answered
Chosen Option : 2

Q.14 In the given sentence, identify the segment which contains a grammatical error.

Each players must play according to his full potential and not think only about winning.

- Ans
- ☒ 1. only about winning
 - ☒ 2. according to
 - ☒ 3. must play
 - ☒ 4. Each players

Question ID : 6549788244
Status : Answered
Chosen Option : 4

Q.15 Select the most appropriate option to substitute the underlined segment in the given sentence. If there is no need to substitute it, select 'No substitution'.

If you tries to dictate your terms, I don't think we can work together.

- Ans
- ☒ 1. have try
 - ☒ 2. No substitution
 - ☒ 3. try
 - ☒ 4. were tried

Question ID : 6549788255
Status : Answered
Chosen Option : 3

Q.16 Select the INCORRECTLY spelt word.

- Ans
- ☒ 1. Subtle
 - ☒ 2. Doubtful
 - ☒ 3. Desscent
 - ☒ 4. Knead

Question ID : 6549786038
Status : Answered
Chosen Option : 3

Q.17 Select the option that expresses the given sentence in passive voice.

Arvind delivered the packet at the address given by Asha.

- Ans
- ☒ 1. The packet had been delivered at the address given by Arvind.
 - ☒ 2. The packet was being delivered by Arvind at the address given by Asha.
 - ☒ 3. The packet was delivered by Arvind at the address given by Asha.
 - ☒ 4. Asha delivered the packet at the address given by Arvind.

Question ID : 6549786020
Status : Answered
Chosen Option : 3

Q.18 Select the option that can be used as a one-word substitute for the given group of words.

Certain to happen

- Ans
- ☒ 1. Ineffective
 - ☒ 2. Inevitable
 - ☒ 3. Unexpected
 - ☒ 4. Avoidable

Question ID : 6549786040
Status : Answered
Chosen Option : 2

Q.19 Select the most appropriate option to substitute the underlined segment in the given sentence. If there is no need to substitute it, select 'No substitution required'.

Most of us hesitate to accept our mistakes.

- Ans
- ☒ 1. No substitution required
 - ☒ 2. More of us
 - ☒ 3. Much of us
 - ☒ 4. Lots many of us

Question ID : 6549786032
Status : Answered
Chosen Option : 1

Q.20 Select the word which means the same as the group of words given.

people existing or living at the same time

- Ans
- ☒ 1. community
 - ☒ 2. population
 - ☒ 3. contemporaries
 - ☒ 4. inhabitants

Question ID : 6549788263

Status : Answered

Chosen Option : 3

Comprehension:

In the following passage, some words have been deleted. Select the most appropriate option to fill in each blank.

The short story in literature is usually concerned with a single effect conveyed in only one or (1) ____ few significant episodes or scenes. (2) The ____ encourages economy of setting, (3) ____ narrative, and the omission of a (4) ____ plot; character is disclosed in action and a (5) ____ encounter but is seldom fully developed. Despite its relatively limited scope, though, a short story is often judged by its ability to provide a 'complete' or satisfying treatment of its characters and subject.

SubQuestion No : 21

Q.21 Select the most appropriate option to fill in blank no.1.

- Ans
- ☒ 1. the
 - ☒ 2. little
 - ☒ 3. a
 - ☒ 4. limited

Question ID : 6549786025

Status : Answered

Chosen Option : 3

Comprehension:

In the following passage, some words have been deleted. Select the most appropriate option to fill in each blank.

The short story in literature is usually concerned with a single effect conveyed in only one or (1) ____ few significant episodes or scenes. (2) The ____ encourages economy of setting, (3) ____ narrative, and the omission of a (4) ____ plot; character is disclosed in action and a (5) ____ encounter but is seldom fully developed. Despite its relatively limited scope, though, a short story is often judged by its ability to provide a 'complete' or satisfying treatment of its characters and subject.

SubQuestion No : 22

Q.22 Select the most appropriate option to fill in blank no.2.

- Ans
- ☒ 1. procedure
 - ☒ 2. practice
 - ☒ 3. shape
 - ☒ 4. form

Question ID : 6549786026

Status : Answered

Chosen Option : 1

Comprehension:

In the following passage, some words have been deleted. Select the most appropriate option to fill in each blank.

The short story in literature is usually concerned with a single effect conveyed in only one or (1) ____ few significant episodes or scenes. (2) The ____ encourages economy of setting, (3) ____ narrative, and the omission of a (4) ____ plot; character is disclosed in action and a (5) ____ encounter but is seldom fully developed. Despite its relatively limited scope, though, a short story is often judged by its ability to provide a 'complete' or satisfying treatment of its characters and subject.

SubQuestion No : 23

Q.23 Select the most appropriate option to fill in blank no.3.

Ans



1. curt



2. concise



3. long



4. lengthy

Question ID : 6549786027

Status : Answered

Chosen Option : 2

Comprehension:

In the following passage, some words have been deleted. Select the most appropriate option to fill in each blank.

The short story in literature is usually concerned with a single effect conveyed in only one or (1) ____ few significant episodes or scenes. (2) The ____ encourages economy of setting, (3) ____ narrative, and the omission of a (4) ____ plot; character is disclosed in action and a (5) ____ encounter but is seldom fully developed. Despite its relatively limited scope, though, a short story is often judged by its ability to provide a 'complete' or satisfying treatment of its characters and subject.

SubQuestion No : 24

Q.24 Select the most appropriate option to fill in blank no.4.

Ans



1. slight



2. fused



3. complex



4. compound

Question ID : 6549786028

Status : Answered

Chosen Option : 3

Comprehension:

In the following passage, some words have been deleted. Select the most appropriate option to fill in each blank.

The short story in literature is usually concerned with a single effect conveyed in only one or (1) ____ few significant episodes or scenes. (2) The ____ encourages economy of setting, (3) ____ narrative, and the omission of a (4) ____ plot; character is disclosed in action and a (5) ____ encounter but is seldom fully developed. Despite its relatively limited scope, though, a short story is often judged by its ability to provide a 'complete' or satisfying treatment of its characters and subject.

SubQuestion No : 25

Q.25 Select the most appropriate option to fill in blank no.5.

- Ans  1. balanced
 2. melodious
 3. harmonious
 4. dramatic

Question ID : 6549786029

Status : Answered

Chosen Option : 4

Section : General Intelligence

Q.1 Select the option that is related to the third term in the same way as the second term is related to the first term.

PAINTER : AEINPRT :: GLAMOUR : ?

- Ans  1. MALGRUO
 2. ALGOMRU
 3. AGLMORU
 4. RUOMALG

Question ID : 6549786056

Status : Answered

Chosen Option : 3

Q.2 Select the option that is related to the third word in the same way as the second word is related to the first word.

Outright : Complete :: Rampant : ?

- Ans  1. Growth
 2. Imperfect
 3. Unchecked
 4. Usual

Question ID : 6549786057

Status : Answered

Chosen Option : 4

Q.3 Select the option that is related to the third number in the same way as the second number is related to the first number.

9 : 99 :: 15 : ?

- Ans
- ☒ 1. 252
 - ☒ 2. 552
 - ☒ 3. 255
 - ☒ 4. 525

Question ID : 6549788270

Status : Answered

Chosen Option : 3

Q.4 A kid's mother's father-in-law's daughter is Rashmi, whose daughter is Pihoo. How is Pihoo related to the kid?

- Ans
- ☒ 1. Niece
 - ☒ 2. Sister
 - ☒ 3. Aunt
 - ☒ 4. Cousin

Question ID : 6549789760

Status : Answered

Chosen Option : 4

Q.5 Select the word-pair in which the two words are related in the same way as are the two words in the given word-pair.

Resistance : Ohm

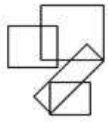
- Ans
- ☒ 1. Ampere : Current
 - ☒ 2. Angle : Radians
 - ☒ 3. Pressure : Watt
 - ☒ 4. Volume : Joule

Question ID : 6549788282


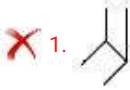
Status : Answered

Chosen Option : 2

Q.6 Select the option that is embedded in the given figure (rotation is NOT allowed).



Ans



Question ID : 6549786067

Status : Answered

Chosen Option : 3

Q.7 Which two digits and signs need to be interchanged so as to balance the given equation?

$$26 \div 6 - 54 + 24 \times 8 = 174$$

Ans

☒ 1. 8 and 6; \times and \div

☒ 2. 4 and 2; $+$ and \div

☒ 3. 6 and 4; $-$ and \times

☒ 4. 5 and 8; \times and $+$

Question ID : 6549786047

Status : Answered

Chosen Option : 1

Q.8 Four words have been given, out of which three are alike in some manner and one is different. Select the word that is different.

Ans

☒ 1. Growl

☒ 2. Waddle

☒ 3. Grunt

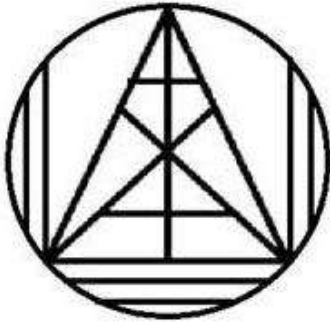
☒ 4. Bleat

Question ID : 6549786062

Status : Answered

Chosen Option : 4

Q.9 Find the number of triangles in the following figure.



- Ans
- ☒ 1. 21
 - ☒ 2. 22
 - ☒ 3. 20
 - ☒ 4. 23

Question ID : 6549788288
Status : Answered
Chosen Option : 3

Q.10 In an entrance test, Tiwari scored 25% marks and failed by 64 marks. If he had scored 40% marks, then he would have secured 32 marks more than the pass marks. Find the pass marks.

- Ans
- ☒ 1. 295
 - ☒ 2. 224
 - ☒ 3. 150
 - ☒ 4. 250

Question ID : 6549788268
Status : Answered
Chosen Option : 2

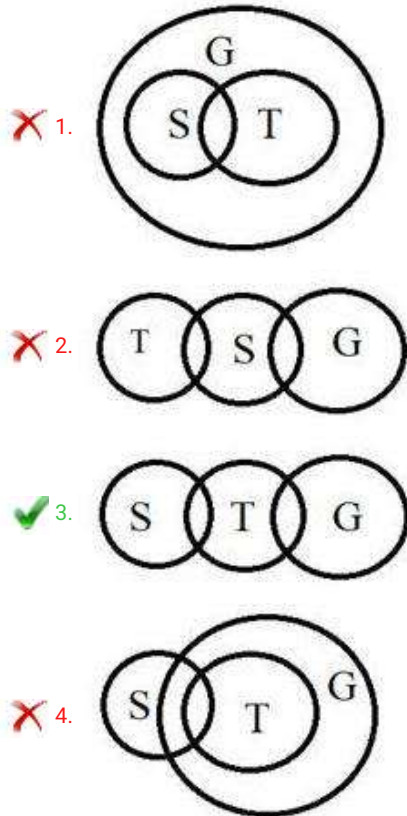
Q.11 Read the below statements disregarding commonly known facts and then from the given four options, identify the Venn diagram that correctly represents the statements.

Statements:

Some Shirts are Towels.

Some Towels are Gloves.

Ans



Question ID : 6549788292

Status : Answered

Chosen Option : 3

Q.12 Select the number from among the given options that can replace the question mark (?) in the following series.

89, 79, 71, ?, 53, 43

Ans 1. 61

2. 67

3. 69

4. 63

Question ID : 6549786051

Status : Answered

Chosen Option : 1

Q.13 Read the given statements and conclusions carefully. Assuming that the information given in the statements is true, even if it appears to be at variance with commonly known facts, decide which of the given conclusions logically follow(s) from the statements.

Statements:

All racks are books.

All racks are pens.

Conclusions:

I. All pens are books.

II. Some books are pens.

- Ans**
- ☒ 1. Neither conclusion I nor II follows.
 - ☒ 2. Only conclusion I follows.
 - ☒ 3. Only conclusion II follows.
 - ☒ 4. Both conclusions I and II follow.

Question ID : 6549786063

Status : Answered

Chosen Option : 3

Q.14 Which option represents the correct order of the given words as they would appear in an English dictionary?

1. Pamphlet

2. Paleface

3. Painless

4. Partiality

5. Pabulum

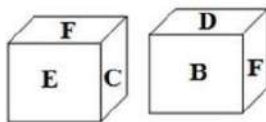
- Ans**
- ☒ 1. 5, 3, 1, 2, 4
 - ☒ 2. 5, 3, 2, 1, 4
 - ☒ 3. 5, 2, 1, 3, 4
 - ☒ 4. 5, 2, 3, 1, 4

Question ID : 6549788275

Status : Answered

Chosen Option : 2

Q.15 Two different positions of the same dice are shown. Select the letter that will be on the face opposite to the face showing 'C'.



- Ans**
- ☒ 1. A
 - ☒ 2. D
 - ☒ 3. F
 - ☒ 4. B

Question ID : 6549788286

Status : Answered

Chosen Option : 4

Q.16 Three of the following number-pairs are alike in a certain way and one is different. Select the odd one.

- Ans ☒ 1. 271 : 15
☒ 2. 398 : 18
☒ 3. 181 : 12
☒ 4. 305 : 16

Question ID : 6549788274

Status : Not Answered

Chosen Option : --

Q.17 Select the set in which the numbers are related in the same way as are the numbers of the following set.

(697, 13, 866)

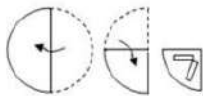
- Ans ☒ 1. (832, 8, 887)
☒ 2. (747, 25, 1423)
☒ 3. (651, 16, 940)
☒ 4. (541, 14, 737)

Question ID : 6549788272

Status : Answered

Chosen Option : 4

Q.18 The sequence of folding a piece of paper and the manner in which the folded paper has been cut are shown in the following figures. How would this paper look when unfolded?



Ans

- ☒ 1.
- ☒ 2.
- ☒ 3.
- ☒ 4.

Question ID : 6549786068

Status : Answered

Chosen Option : 1

Q.19 In a certain code language, PROMISE is written as WXTQLUF. How will MELTING be written in that language?

- Ans
- ☐ 1. TLSAPUN
 - ☐ 2. SJPWKOG
 - ☐ 3. SKRZOTM
 - ☒ 4. TKQXLPH

Question ID : 6549786054

Status : Answered

Chosen Option : 4

Q.20 If CALENDAR is coded as 91452313 and FACEMASK is coded as 210142316, then how will SECURITY be coded as?

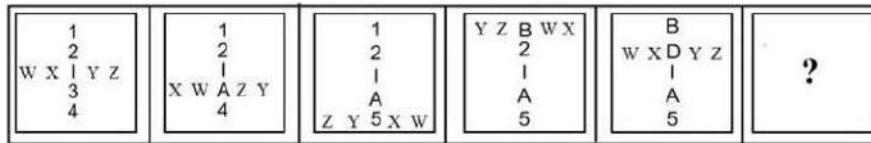
- Ans
- ☐ 1. 723593120
 - ☐ 2. 729952310
 - ☐ 3. 723933210
 - ☒ 4. 723953210

Question ID : 6549788277

Status : Not Answered


Chosen Option : --

Q.21 Select the figure that can replace the question mark (?) in the following figure series.

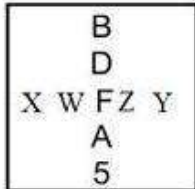


Ans

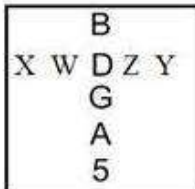
✗ 1.




✓ 2.



✗ 3.



✗ 4.



Question ID : 6549788287

Status : Not Answered

Chosen Option : --

Q.22 Select the combination of letters that when sequentially placed in the blanks of the given series will complete the series.

K _ T Z _ Y _ M _ Z O _ K _ T _ O Y

Ans

✗ 1.

M O T T Y N Z

✗ 2.

M N K T Y K Z

✗ 3.

M O T Y K M Z

✓ 4.

M O K T Y M Z

Question ID : 6549787472

Status : Answered

Chosen Option : 4

Q.23 Select the correct mirror image of the given figure when the mirror is placed at the right side.

AFCαEβ

Ans

☒ 1. βEαCFA

☒ 2. βEαCFA

☒ 3. βEαCFA

☒ 4. AβCαEβ

Question ID : 6549786069

Status : Answered

Chosen Option : 2

Q.24 Select the option in which the numbers are related in the same way as are the numbers of the following set.

25 : 75 : 150

Ans

☒ 1. 29 : 36 : 72

☒ 2. 13 : 26 : 104

☒ 3. 36 : 108 : 324

☒ 4. 18 : 126 : 253

Question ID : 6549786049

Status : Not Answered

Chosen Option : --

Q.25 Three of the following four letter-clusters are alike in a certain way and one is different. Select the odd one.

Ans

☒ 1. IDWHU

☒ 2. UPITG

☒ 3. EZSFV

☒ 4. CXQBO

Question ID : 6549788283

Status : Not Answered

Chosen Option : --

Section : Quantitative Aptitude

Q.1 If $x^4 + x^{-4} = 47$, $x > 0$, then the value of $(2x - 3)^2$ is:

Ans

☒ 1. 9

☒ 2. 3

☒ 3. 5

☒ 4. 7

Question ID : 6549786085

Status : Answered

Chosen Option : 3

Q.2

The value of $\frac{\sec\theta \operatorname{cosec}\theta}{2+\tan^2\theta+\cot^2\theta}$ is equal to:

Ans

- ☒ 1. $\sec\theta \operatorname{cosec}\theta$
- ☒ 2. $\sec\theta \sin\theta$
- ☒ 3. $\sin\theta \cos\theta$
- ☒ 4. $\cos\theta \operatorname{cosec}\theta$

Question ID : 6549786089

Status : Answered

Chosen Option : 3

Q.3

A 9-cm-long perpendicular is drawn from the centre of circle to a chord of length 24 cm. The radius of the circle is:

Ans

- ☒ 1. 20 cm
- ☒ 2. 15 cm
- ☒ 3. 12 cm
- ☒ 4. 18 cm

Question ID : 6549788302

Status : Answered

Chosen Option : 2

Q.4

If O is the centroid and RP is the median with length 24 cm of ΔRST , where P is a point on ST, then the value of RO is:

Ans

- ☒ 1. 18 cm
- ☒ 2. 14 cm
- ☒ 3. 20 cm
- ☒ 4. 16 cm

Question ID : 6549788304

Status : Answered

Chosen Option : 4

Q.5

When an article is sold for ₹438, there is a loss of 27%. To gain 23%, it should be sold for ₹x. What is the value of x?

Ans

- ☒ 1. ₹600
- ☒ 2. ₹837
- ☒ 3. ₹678
- ☒ 4. ₹738

Question ID : 6549786077

Status : Answered

Chosen Option : 4

Q.6 How many bricks each measuring $64 \text{ cm} \times 11.25 \text{ cm} \times 6 \text{ cm}$, will be needed to build a wall measuring $8 \text{ m} \times 3 \text{ m} \times 22.5 \text{ m}$?

- Ans**
- ☒ 1. 200000
 - ☒ 2. 250000
 - ☒ 3. 67500
 - ☒ 4. 125000

Question ID : **6549786073**

Status : **Answered**

Chosen Option : **4**

Q.7 Study the table and answer the question that follows:

In the given table, production of five different types of machines (A, B, C, D, E) in the years from 2016 to 2020 (in thousands) is given.

Machines	Years				
	2016	2017	2018	2019	2020
A	46	53	56	58	67
B	50	65	67	66	72
C	43	54	55	47	51
D	47	52	61	65	74
E	48	58	63	64	67

What is the ratio of the total production of type A machines in 2018 and type E machines in 2019 to the total production of type C and type D machines in 2016?

- Ans**
- ☒ 1. 2 : 5
 - ☒ 2. 5 : 2
 - ☒ 3. 4 : 3
 - ☒ 4. 3 : 4

Question ID : **6549786092**

Status : **Answered**

Chosen Option : **3**

Q.8 Study the given bar graph and answer the question that follows.

The bar graph indicates the production of sugar (in lakh tonnes) by three different sugar companies P, Q and R over the years 2015 to 2019.



By what percentage is the total production of sugar by company P from the year 2015 to 2019 more than the total production of sugar by company R from the year 2015 to 2019?

- Ans
- ☒ 1. 18%
 - ☒ 2. 18.5%
 - ☒ 3. 20%
 - ☒ 4. 15%

Question ID : 6549787205

Status : Answered

Chosen Option : 3

Q.9 If $a^2 + b^2 + c^2 + 48 = 8(a + b + c)$, then what is the value of $\sqrt[3]{a^3 - b^3 + c^3}$?

- Ans
- ☒ 1. 6
 - ☒ 2. 4
 - ☒ 3. 3
 - ☒ 4. 2

Question ID : 6549786086

Status : Answered

Chosen Option : 2

Q.10 The difference between the simple interest on a fixed amount for 7 years and on the same amount for 12 years is ₹2,500. If the rate of interest is 10% p.a., then the amount is:

- Ans
- ☒ 1. ₹6,000
 - ☒ 2. ₹5,000
 - ☒ 3. ₹4,500
 - ☒ 4. ₹5,500

Question ID : 6549788301

Status : Answered

Chosen Option : 2

Q.11 If $3\sin^2 A + 4\cos^2 A - 3 = 0$, then the value of $\cot A$ (where $0 \leq A \leq 90^\circ$) is:

- Ans
- ☒ 1. ∞
 - ☒ 2. 0
 - ☒ 3. 1
 - ☒ 4. not defined

Question ID : 6549788312
Status : Answered
Chosen Option : 4

Q.12 A bus covered 360 km in 6 hours. If it travels at one-fourth of its usual speed, then how much more time will it take to cover the same distance?

- Ans
- ☒ 1. 18 hours
 - ☒ 2. 14 hours
 - ☒ 3. 12 hours
 - ☒ 4. 16 hours

Question ID : 6549788294
Status : Answered
Chosen Option : 1

Q.13 Mohan's income is 40% more than Shyam's income. Shyam's income is what percentage less than Mohan's income?

- Ans
- ☒ 1. $28\frac{2}{7}\%$
 - ☒ 2. $28\frac{5}{7}\%$
 - ☒ 3. $28\frac{3}{7}\%$
 - ☒ 4. $28\frac{4}{7}\%$

Question ID : 6549788298
Status : Answered
Chosen Option : 4

Q.14 From a point P, which is at a distance of 13 cm from the centre O of a circle, a pair of tangents PQ and PR of length 12 cm are drawn to the circle. The area of the quadrilateral PQOR (in cm^2) is:

- Ans
- ☒ 1. 50
 - ☒ 2. 76
 - ☒ 3. 80
 - ☒ 4. 60

Question ID : 6549786081
Status : Answered
Chosen Option : 4

Q.15 X can complete half of the work in 20 days and Y can do one-fifth of the same work in 10 days. X started the work and left after 8 days. Then Y took over to complete the remaining work. The total number of days taken by them to complete the work is:

- Ans**
- ☒ 1. 60 days
 - ☒ 2. 40 days
 - ☒ 3. 50 days
 - ☒ 4. 48 days

Question ID : 6549786071
Status : Answered
Chosen Option : 4

Q.16 If $3x + 5y = 14$ and $xy = 6$, then what is the value of $9x^2 + 25y^2$?

- Ans**
- ☒ 1. 16
 - ☒ 2. 14
 - ☒ 3. 20
 - ☒ 4. 182

Question ID : 6549788306
Status : Answered
Chosen Option : 1

Q.17 A batsman in his 13th inning makes a score of 97 runs, thereby increasing his average score by 5. What is his average score after the 13th inning?

- Ans**
- ☒ 1. 37
 - ☒ 2. 77
 - ☒ 3. 67
 - ☒ 4. 57

Question ID : 6549788296
Status : Answered
Chosen Option : 1

Q.18 Two numbers are in the ratio of 7 : 4. If each number is increased by 12, then the ratio becomes 3 : 2. The sum of the numbers is:

- Ans**
- ☒ 1. 60
 - ☒ 2. 66
 - ☒ 3. 68
 - ☒ 4. 56

Question ID : 6549788300
Status : Answered
Chosen Option : 2

Q.19 The marked price of an article is ₹660. A shopkeeper allows a discount of 20% and still gets a profit of 10%. If he sells it for ₹470, his profit or loss per cent, correct to two decimal places will be:

- Ans
- ☐ 1. Profit 3.06%
 - ☐ 2. Loss 5.43%
 - ☐ 3. Profit 7.59%
 - ☒ 4. Loss 2.08%

Question ID : 6549786075

Status : Answered

Chosen Option : 4

Q.20 If $\Delta ABC \sim \Delta PQR$, $\frac{ar(\Delta ABC)}{ar(\Delta PQR)} = \frac{4}{9}$, $AC = 12\text{ cm}$, $AB = 18\text{ cm}$ and $BC = 10\text{ cm}$, then PR (in cm) is equal to:

- Ans
- ☐ 1. 8
 - ☐ 2. 10
 - ☒ 3. 15
 - ☐ 4. 18

Question ID : 6549786083

Status : Answered

Chosen Option : 3

Q.21 The value of $\left[\frac{\sin^2 27^\circ + \sin^2 63^\circ}{\cos^2 24^\circ + \cos^2 66^\circ} - \sin^2 69^\circ - \cos 69^\circ \sin 21^\circ \right]$ is:

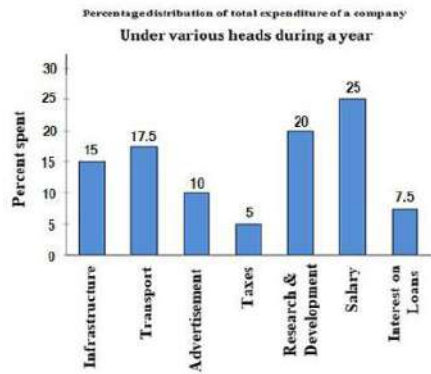
- Ans
- ☐ 1. 3
 - ☐ 2. 2
 - ☒ 3. 0
 - ☐ 4. 1

Question ID : 6549786091

Status : Answered

Chosen Option : 3

Q.22 Study the given graph and answer the question that follows.



If the Interest on Loans amounted to ₹4.50 crores, then the total expenditure on Advertisement, Taxes, Research & Development and Salary is:

- Ans
- ☒ 1. ₹34 crores
 - ☒ 2. ₹30 crores
 - ☒ 3. ₹32 crores
 - ☒ 4. ₹36 crores

Question ID : 6549788317

Status : Answered

Chosen Option : 4

Q.23 The value of $4 \times 3 \div 2$ of $3 \times 2 \div (4 + 5 \times 4 \div 4$ of $5 - 4 \div 4 \times 4)$ is:

- Ans
- ☒ 1. 4
 - ☒ 2. 3
 - ☒ 3. 6
 - ☒ 4. 2

Question ID : 6549786088

Status : Answered

Chosen Option : 1

Q.24 When a number is divided by 3, the remainder is 2. Again, when the quotient is divided by 7, the remainder is 5. What will be the remainder when the original number is divided by 21?

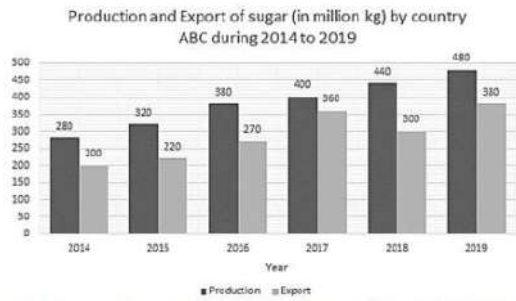
- Ans
- ☒ 1. 14
 - ☒ 2. 13
 - ☒ 3. 17
 - ☒ 4. 16

Question ID : 6549788309

Status : Not Answered

Chosen Option : --

Q.25 Study the given graph and answer the question that follows.



By what percentage is the average export of sugar in 2016, 2017 and 2018 less than the production in 2017?

- Ans
- ☒ 1. 25.8%
 - ☒ 2. 29%
 - ☒ 3. 22.5%
 - ☒ 4. 20%

Question ID : 6549788012

Status : Answered

Chosen Option : 3

Section : General Awareness

Q.1 With which of the following literary magazines was poet and writer Amrita Pritam associated?

- Ans
- ☒ 1. Shabad
 - ☒ 2. Nagmani
 - ☒ 3. Awaaz
 - ☒ 4. Preetlari

Question ID : 6549786114

Status : Not Answered

Chosen Option : --

Q.2 'Eravalla, Kadar, Mudugar' are languages spoken by the tribes primarily in the state of _____.

- Ans
- ☒ 1. Tamil Nadu
 - ☒ 2. Kerala
 - ☒ 3. Karnataka
 - ☒ 4. Maharashtra

Question ID : 6549788320

Status : Answered

Chosen Option : 1

Q.3 Who among the following was the founder of the Kirana Gharana of classical music?

- Ans ☒ 1. Abdul Karim Khan
☐ 2. Pran Nath
☐ 3. Imdad Khan
☐ 4. Bade Ghulam Ali Khan

Question ID : 6549786099
Status : Not Answered
Chosen Option : --

Q.4 Where in a computer would you use a 'joystick' for computer games and assistive technology?

- Ans ☐ 1. Mail merge
☒ 2. Cursor control
☐ 3. Increase memory
☐ 4. Storage space

Question ID : 6549788318
Status : Not Answered
Chosen Option : --

Q.5 Which one of the following became the first Indian club to qualify for AFC Champions league in 2020?

- Ans ☐ 1. Bengaluru FC
☐ 2. Kerala Blasters FC
☒ 3. FC Goa
☐ 4. East Bengal FC

Question ID : 6549788340
Status : Not Answered
Chosen Option : --

Q.6 Which player from Pakistan is credited with 10 British Open titles and six World Championship crowns in professional squash?

- Ans ☒ 1. Jahangir Khan
☐ 2. Azam Khan
☐ 3. Hashim Khan
☐ 4. Farhan Zaman

Question ID : 6549788342
Status : Not Answered
Chosen Option : --

Q.7 Which modern-day Indian state was created on 1 April 1937 as the United Provinces by the Britishers?

- Ans
- ☐ 1. Andhra Pradesh
 - ☐ 2. Arunachal Pradesh
 - ☒ 3. Uttar Pradesh
 - ☐ 4. Madhya Pradesh

Question ID : 6549788335

Status : Answered

Chosen Option : 3

Q.8 In the state of _____, the general direction of the Himalayas is from southwest to northeast.

- Ans
- ☐ 1. Manipur
 - ☐ 2. Nagaland
 - ☐ 3. Mizoram
 - ☒ 4. Arunachal Pradesh

Question ID : 6549786109

Status : Answered

Chosen Option : 4

Q.9 What is India's rank according to the 'Human Development report 2020' released by the United Nations Development Programme?

- Ans
- ☐ 1. 145
 - ☐ 2. 154
 - ☐ 3. 85
 - ☒ 4. 131

Question ID : 6549786102

Status : Answered

Chosen Option : 4

Q.10 In which of the following years did the Government of India set up the Monetary Policy Committee?

- Ans
- ☐ 1. 2008
 - ☐ 2. 2019
 - ☐ 3. 2010
 - ☒ 4. 2016

Question ID : 6549786104

Status : Answered

Chosen Option : 1

Q.11 What is the total charge of an electric dipole?

- Ans
- ☒ 1. -10
 - ☒ 2. +1
 - ☒ 3. 0
 - ☒ 4. 10

Question ID : 6549786107
Status : Answered
Chosen Option : 4

Q.12 Which state in India has the highest number of Districts?

- Ans
- ☒ 1. Uttar Pradesh
 - ☒ 2. Tamil Nadu
 - ☒ 3. Madhya Pradesh
 - ☒ 4. Rajasthan

Question ID : 6549788338
Status : Answered
Chosen Option : 1

Q.13 Which river has the tributaries by the name of Mayurakshi, Damodar, Kangsabati and Rupnarayan?

- Ans
- ☒ 1. Godavari
 - ☒ 2. Yamuna
 - ☒ 3. Hooghly
 - ☒ 4. Brahmaputra

Question ID : 6549788332
Status : Answered
Chosen Option : 3

Q.14 Who was the Nawab of Bhopal that ruled from 1868 to 1901?

- Ans
- ☒ 1. Shah Jahan Begum
 - ☒ 2. Begum Sajida Sultan
 - ☒ 3. Sikander Jahan Begum
 - ☒ 4. Sultan Kaikhusrau Jahan Begum

Question ID : 6549786112
Status : Not Answered
Chosen Option : --

Q.15 Who is the author of the book 'Poskem'?

- Ans
- ☐ 1. Rohit Bal
 - ☐ 2. Manish Malhotra
 - ☐ 3. Sabyasachi Mukherjee
 - ☒ 4. Wendell Rodricks

Question ID : 6549788337
Status : Not Answered
Chosen Option : --

Q.16 Which bank got the 'Best Bank in Innovation' award at Business Today -Money Today Financial Awards 2020?

- Ans
- ☐ 1. Bank of Baroda
 - ☐ 2. State Bank of India
 - ☒ 3. ICICI Bank
 - ☐ 4. HDFC Bank

Question ID : 6549788325
Status : Answered
Chosen Option : 4

Q.17 Which of the following does the Special Marriage Act 1954 NOT support?

- Ans
- ☐ 1. Inter-caste marriage
 - ☒ 2. Strict endogamy
 - ☐ 3. Inter-faith marriage
 - ☐ 4. Communal harmony

Question ID : 6549786117
Status : Answered
Chosen Option : 2

Q.18 Which one of the following is NOT a viral disease?

- Ans
- ☒ 1. Leprosy
 - ☐ 2. Rabies
 - ☐ 3. Smallpox
 - ☐ 4. Measles

Question ID : 6549788328
Status : Answered
Chosen Option : 1

Q.19 Which of the following schools in Shillong is the first Khelo India Sports school in North-East India?

- Ans
- ☒ 1. Mawroh Government LP School
 - ☒ 2. Assam Rifles Public School
 - ☒ 3. Army Public School
 - ☒ 4. Government Boys Higher Secondary School

Question ID : 6549786119
Status : Not Answered
Chosen Option : --

Q.20 What does LED stand for?

- Ans
- ☒ 1. Light Emitting Diode
 - ☒ 2. Light Energy Device
 - ☒ 3. Light Efficient Device
 - ☒ 4. Light Emitting Decorder

Question ID : 6549786105
Status : Answered
Chosen Option : 1

Q.21 Where in India can we find the Jarawa and the Onge tribes?

- Ans
- ☒ 1. Daman and Diu
 - ☒ 2. Andaman and Nicobar Islands
 - ☒ 3. Chhattisgarh
 - ☒ 4. Arunachal Pradesh

Question ID : 6549788333
Status : Answered
Chosen Option : 3

Q.22 Which Indian chess player won the Cairns Cup chess tournament 2020?

- Ans
- ☒ 1. Padmini Rout
 - ☒ 2. Dronavalli Harika
 - ☒ 3. Koneru Humpy
 - ☒ 4. Tania Sachdeva

Question ID : 6549788323
Status : Not Answered
Chosen Option : --

Q.23 Which of the following islands is/are located in the Bay of Bengal?

Ans



1. Meeru



2. Minicoy



3. Diu



4. Andaman and Nicobar

Question ID : 6549786108

Status : Answered

Chosen Option : 4

Q.24 According to 'World Language Database Ethnologue-2019', brought out in February 2020, which Indian language is the third most spoken language of the world in 2019?

Ans



1. Hindi



2. Punjabi



3. Tamil



4. Telegu

Question ID : 6549788322

Status : Answered

Chosen Option : 1

Q.25 Which of the following is a part of the central processing unit of a computer?

Ans



1. Mouse



2. Scanner



3. Memory registers



4. Joystick

Question ID : 6549786097

Status : Not Answered

Chosen Option : --

Combined Higher Secondary Level Examination 2020 (Tier-I)

Roll Number	Join Telegram: HaryanaJobs.in
Candidate Name	
Venue Name	
Exam Date	11/08/2021
Exam Time	12:00 PM - 1:00 PM
Subject	Combined Higher Secondary Level Exam 2020

Section : English Language

Q.1 Select the **INCORRECTLY** spelt word.

- Ans
- ☒ 1. Recurrent
 - ☒ 2. Dilemma
 - ☒ 3. Unpretentious
 - ☒ 4. Excellence

Question ID : 6549787554

Status : Answered

Chosen Option : 3

Q.2 Sentences of a paragraph are given below in jumbled order. Arrange the sentences in the right order to form a meaningful and coherent paragraph.

- A. This cooled off into darkness after a few million years.
- B. The first time was when the universe began its existence as a glowing fireball.
- C. In the modern scientific story, light was created not once but twice.
- D. The second time was when the cold material condensed into dense nuggets and ignited to become the first stars.

- Ans
- ☒ 1. DBAC
 - ☒ 2. CBAD
 - ☒ 3. ABCD
 - ☒ 4. BADC

Question ID : 6549787545

Status : Answered

Chosen Option : 2

Q.3 Select the option that expresses the given sentence in reported speech.

The new employee asked the manager, "When do I have to report for work?"

- Ans
- ☒ 1. The new employee told the manager that when he had to report for work.
 - ☒ 2. The new employee asked the manager when he had to report for work.
 - ☒ 3. The manager told the new employee when to report for work.
 - ☒ 4. The new manager asked the employee when he would report for work.

Question ID : 6549787536

Status : Answered

Chosen Option : 1

Q.4 Select the most appropriate synonym of the given word.

Appalling

- Ans
- ☒ 1. Awesome
 - ☒ 2. Tremendous
 - ☒ 3. Fantastic
 - ☒ 4. Shocking

Question ID : 6549787659

Status : Answered

Chosen Option : 4

Q.5 Select the most appropriate option to substitute the underlined segment in the given sentence. If there is no need to substitute it, select 'No substitution required'.

We have finished our work for the day, so let we go home early today.

- Ans
- ☒ 1. No substitution required
 - ☒ 2. let us go
 - ☒ 3. let ours go
 - ☒ 4. let our go

Question ID : 6549787648

Status : Answered

Chosen Option : 2

Q.6 Select the most appropriate word to fill in the blank.

When you speak, there are gestures and body language that _____ your words.

- Ans
- ☒ 1. achieve
 - ☒ 2. accomplish
 - ☒ 3. accompany
 - ☒ 4. construct

Question ID : 6549787559

Status : Answered

Chosen Option : 3

Q.7 Select the INCORRECTLY spelt word.

- Ans
- ☒ 1. Provoke
 - ☒ 2. Canfidents
 - ☒ 3. Ambush
 - ☒ 4. Disastrous





Question ID : 6549787654

Status : Answered

Chosen Option : 2

Q.8 Select the option that expresses the given sentence in the active or passive voice.

Fifteen children were rescued from an unregistered home by the police.

- Ans  1. The police rescued fifteen children from an unregistered home.
-  2. Fifteen children rescued the police from an unregistered home.
-  3. The police were rescued fifteen children from an unregistered home.
-  4. The police have rescued fifteen children from an unregistered home.





Question ID : **6549787636**

Status : **Answered**

Chosen Option : **3**

Q.9 Select the most appropriate meaning of the given idiom.

To fish in troubled waters

- Ans  1. To take advantage of a difficult situation
-  2. To try to find a big catch in the deep sea
-  3. To try to do something that is very difficult
-  4. To catch fish in stormy weather in the sea

Question ID : **6549787653**

Status : **Answered**

Chosen Option : **1**


Q.10 Sentences of a paragraph are given below in jumbled order. Arrange the sentences in the right order to form a meaningful and coherent paragraph.

A. This means that decisions should not be taken under any kind of pressure to benefit individuals or only a small section of society.

B. First, there should be transparency in making decisions; secrecy breeds corruption.

C. There are certain values that civil servants need to imbibe in themselves for better administration.

D. Then, all decisions must be taken only in public interest, to benefit the community at large.

- Ans  1. CADB
-  2. CBDA
-  3. DABC
-  4. BADC

Question ID : **6549787647**

Status : **Answered**

Chosen Option : **2**

Q.11 Select the most appropriate ANTONYM of the given word.

Gloomy

- Ans
- ☒ 1. Dull
 - ☒ 2. Bright
 - ☒ 3. Catchy
 - ☒ 4. Dismal

Question ID : 6549787549
Status : Answered
Chosen Option : 2

Q.12 Select the most appropriate synonym of the given word.

Trail

- Ans
- ☒ 1. Rehearsal
 - ☒ 2. Glory
 - ☒ 3. Path
 - ☒ 4. Win

Question ID : 6549787557
Status : Answered
Chosen Option : 1

Q.13 The following sentence has been split into four segments. Identify the segment that contains a grammatical error.

Although we had / very good batsmen, / we couldn't be able to / score high.

- Ans
- ☒ 1. score high
 - ☒ 2. Although we had
 - ☒ 3. we couldn't be able to
 - ☒ 4. very good batsmen

Question ID : 6549787639
Status : Marked For Review
Chosen Option : 2

Q.14 Select the option that can be used as a one-word substitute for the given group of words.

A quick, sudden movement

- Ans
- ☒ 1. Flick
 - ☒ 2. Fleck
 - ☒ 3. Dust
 - ☒ 4. Speck

Question ID : 6549787656
Status : Not Answered
Chosen Option : --

Q.15 The following sentence has been split into four segments. Identify the segment that contains a grammatical error.

Only five minutes / are allowed / for each speaker / during the function.

- Ans
- ☒ 1. for each speaker
 - ☒ 2. Only five minutes
 - ☒ 3. are allowed
 - ☒ 4. during the function

Question ID : 6549787537

Status : Answered

Chosen Option : 3

Q.16 Select the most appropriate ANTONYM of the given word.

Curt

- Ans
- ☒ 1. Impolite
 - ☒ 2. Polite
 - ☒ 3. Dismal
 - ☒ 4. Rude

Question ID : 6549787651

Status : Answered

Chosen Option : 2

Q.17 Select the most appropriate option to substitute the underlined segment in the given sentence. If there is no need to substitute it, select 'No substitution required'.

You must return back the book you borrowed last month.

- Ans
- ☒ 1. must be returned
 - ☒ 2. must return
 - ☒ 3. No substitution required
 - ☒ 4. must be returned back

Question ID : 6549787548

Status : Answered

Chosen Option : 2

Q.18 Select the option that can be used as a one-word substitute for the given group of words.

A busy, main road for public use

- Ans
- ☒ 1. Thoroughfare
 - ☒ 2. Promenade
 - ☒ 3. Avenue
 - ☒ 4. Highway

Question ID : 6549787556

Status : Not Answered

Chosen Option : --

Q.19 Select the most appropriate word to fill in the blank.

Schools will restart physical classes partially and states have _____ their own conditions and procedures to ensure the safety of students.

- Ans
- ☒ 1. accepted
 - ☒ 2. devised
 - ☒ 3. insisted
 - ☒ 4. adopted

Question ID : 6549787661

Status : Answered

Chosen Option : 2

Q.20 Select the most appropriate meaning of the idiomatic expression given.

At a stone's throw

- Ans
- ☒ 1. Beat someone with a stone
 - ☒ 2. Throw a stone at someone
 - ☒ 3. At a very short distance
 - ☒ 4. Like throwing a stone

Question ID : 6549787551

Status : Answered

Chosen Option : 3

Comprehension:

In the following passage, some words have been deleted. Select the most appropriate option to fill in each blank.

What are the future possibilities for space travel in the long term? (1) _____ will humans go after they have explored our solar system? It is said that 'Star Trek' could hold the (2) _____ to these questions. It is predicted that travel to other galaxies will only be (3) _____ in huge 'starships'. These will wander through space for hundreds or even thousands of years. Each of them will carry a large human (4) _____. Some of those people will take over a suitable new planet and settle down there. This search for new planets to settle in will continue until life on planet Earth could be just a (5) _____ memory.

SubQuestion No : 21

Q.21 Select the most appropriate option to fill in blank number 1.

- Ans
- ☒ 1. Where
 - ☒ 2. Why
 - ☒ 3. How
 - ☒ 4. When

Question ID : 6549787641

Status : Answered

Chosen Option : 1





Comprehension:

In the following passage, some words have been deleted. Select the most appropriate option to fill in each blank.

What are the future possibilities for space travel in the long term? (1) _____ will humans go after they have explored our solar system? It is said that 'Star Trek' could hold the (2) _____ to these questions. It is predicted that travel to other galaxies will only be (3) _____ in huge 'starships'. These will wander through space for hundreds or even thousands of years. Each of them will carry a large human (4) _____. Some of those people will take over a suitable new planet and settle down there. This search for new planets to settle in will continue until life on planet Earth could be just a (5) _____ memory.

SubQuestion No : 22

Q.22 Select the most appropriate option to fill in blank number 2.

- Ans  1. query
 2. answer
 3. door
 4. solution

Question ID : **6549787642**

Status : **Answered**

Chosen Option : **1**





Comprehension:

In the following passage, some words have been deleted. Select the most appropriate option to fill in each blank.

What are the future possibilities for space travel in the long term? (1) _____ will humans go after they have explored our solar system? It is said that 'Star Trek' could hold the (2) _____ to these questions. It is predicted that travel to other galaxies will only be (3) _____ in huge 'starships'. These will wander through space for hundreds or even thousands of years. Each of them will carry a large human (4) _____. Some of those people will take over a suitable new planet and settle down there. This search for new planets to settle in will continue until life on planet Earth could be just a (5) _____ memory.

SubQuestion No : 23

Q.23 Select the most appropriate option to fill in blank number 3.

- Ans  1. imagined
 2. possible
 3. implemented
 4. achieved

Question ID : **6549787643**

Status : **Answered**

Chosen Option : **2**

Comprehension:

In the following passage, some words have been deleted. Select the most appropriate option to fill in each blank.

What are the future possibilities for space travel in the long term? (1) _____ will humans go after they have explored our solar system? It is said that 'Star Trek' could hold the (2) _____ to these questions. It is predicted that travel to other galaxies will only be (3) _____ in huge 'starships'. These will wander through space for hundreds or even thousands of years. Each of them will carry a large human (4) _____. Some of those people will take over a suitable new planet and settle down there. This search for new planets to settle in will continue until life on planet Earth could be just a (5) _____ memory.

SubQuestion No : 24

Q.24 Select the most appropriate option to fill in blank number 4.

- Ans
- ☒ 1. instinct
 - ☒ 2. colony
 - ☒ 3. proportion
 - ☒ 4. population

Question ID : 6549787644

Status : **Answered**

Chosen Option : 2

Comprehension:

In the following passage, some words have been deleted. Select the most appropriate option to fill in each blank.

What are the future possibilities for space travel in the long term? (1) _____ will humans go after they have explored our solar system? It is said that 'Star Trek' could hold the (2) _____ to these questions. It is predicted that travel to other galaxies will only be (3) _____ in huge 'starships'. These will wander through space for hundreds or even thousands of years. Each of them will carry a large human (4) _____. Some of those people will take over a suitable new planet and settle down there. This search for new planets to settle in will continue until life on planet Earth could be just a (5) _____ memory.

SubQuestion No : 25

Q.25 Select the most appropriate option to fill in blank number 5.

- Ans
- ☒ 1. distant
 - ☒ 2. imaginary
 - ☒ 3. nearest
 - ☒ 4. factual

Question ID : 6549787645

Status : **Not Answered**

Chosen Option : --

Q.1 In a certain code language, 'UMBRELLA' is written as 'VNCSDKKZ' and 'FASTENED' is written as 'GBTUDMDC'. How will 'MONUMENT' be written in that language?

- Ans
- ✓ 1. NPOVLDMS
 - ✗ 2. NPOVPFOU
 - ✗ 3. LNMTLGMS
 - ✗ 4. NPOWLEOS

Question ID : 6549787670



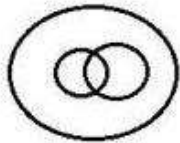
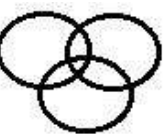
Status : Answered

Chosen Option : 4

Q.2 Select the Venn diagram that best represents the relationship between the following classes.

Brother, Family, Sister

Ans

- ✓ 1. 
- ✗ 2. 
- ✗ 3. 
- ✗ 4. 

Question ID : 6549787585

Status : Answered

Chosen Option : 1

Q.3 Select the correct mirror image of the given combination when the mirror is placed at MN as shown.

Q r S g y 4

M
|
N

Ans

- ☒ 1. 4 y p 2 i 0
- ☒ 2. 4 ɹ p S i 0
- ☒ 3. 4 y p 2 i 0
- ☒ 4. 4 y 6 2 i 0

Question ID : 6549787685

Status : Answered

Chosen Option : 3

Q.4 Select the option in which the numbers are related in the same way as are the numbers of the following set.

(25, 17, 170)

Ans

- ☒ 1. (23, 18, 421)
- ☒ 2. (49, 20, 140)
- ☒ 3. (24, 60, 240)
- ☒ 4. (36, 12, 144)

Question ID : 6549787565

Status : Not Answered

Chosen Option : --

Q.5 Select the number from among the given options that can replace the question mark (?) in the following series.

59, 59, 61, 183, 187, ?

Ans

- ☒ 1. 935
- ☒ 2. 632
- ☒ 3. 876
- ☒ 4. 705

Question ID : 6549787667

Status : Not Answered

Chosen Option : --

Q.6 Four words have been given, out of which three are alike in some manner and one is different. Select the word that is different.

- Ans
- ☒ 1. Flute
 - ☒ 2. Saxophone
 - ☒ 3. Mandolin
 - ☒ 4. Clarinet

Question ID : 6549787678
Status : Answered
Chosen Option : 2

Q.7 Select the option that is related to the third term in the same way as the second term is related to the first term.

SHOVEL : MFWPIT :: NOVICE : ?

- Ans
- ☒ 1. OPWJDF
 - ☒ 2. WPOHBD
 - ☒ 3. FDJWPO
 - ☒ 4. MNUHBD

Question ID : 6549787672
Status : Answered
Chosen Option : 2

Q.8 What was the day of the week on 31 January 2009?

- Ans
- ☒ 1. Saturday
 - ☒ 2. Sunday
 - ☒ 3. Monday
 - ☒ 4. Friday

Question ID : 6549787561
Status : Not Answered
Chosen Option : --

Q.9 Four number-pairs have been given, out of which three are alike in some manner and one is different. Select the number-pair that is different.

- Ans
- ☒ 1. 30 : 225
 - ☒ 2. 24 : 130
 - ☒ 3. 20 : 100
 - ☒ 4. 14 : 49

Question ID : 6549787567
Status : Not Answered
Chosen Option : --

Q.10 Select the correct option that indicates the arrangement of the given words in the order in which they appear in an English dictionary.

1. Ruthless
2. Ruler
3. Routine
4. Rusticate
5. Rugby

- Ans
- ☒ 1. 3, 5, 2, 1, 4
 - ☒ 2. 3, 2, 5, 4, 1
 - ☒ 3. 3, 5, 2, 4, 1
 - ☒ 4. 5, 3, 2, 4, 1

Question ID : 6549787568

Status : Answered

Chosen Option : 3

Q.11 Which two signs should be interchanged to make the given equation correct?

$$45 - 49 + 26 \times 70 \div 35 = 42$$

- Ans
- ☒ 1. \div and \times
 - ☒ 2. \times and $-$
 - ☒ 3. $+$ and \times
 - ☒ 4. $+$ and $-$

Question ID : 6549787663

Status : Answered

Chosen Option : 4

Q.12 Four letter-clusters have been given, out of which three are alike in some manner and one is different. Select the letter-cluster that is different.

- Ans
- ☒ 1. EBCD
 - ☒ 2. NKLM
 - ☒ 3. IFGH
 - ☒ 4. WXYZ

Question ID : 6549787576

Status : Answered

Chosen Option : 4

Q.13 Select the option in which the numbers are related in the same way as are the numbers of the following set.

(16, 60, 240)

- Ans
- ☒ 1. (16, 38, 260)
 - ☒ 2. (14, 42, 196)
 - ☒ 3. (18, 56, 252)
 - ☒ 4. (20, 12, 121)

Question ID : 6549787665

Status : Not Answered

Chosen Option : --

Q.14 Select the combination of letters that when sequentially placed in the blanks of the given series will complete the series.

p _ t b c p r _ b c _ r t b _ p _ t _ c

- Ans
- ☒ 1. r, c, p, b, t, r
 - ☒ 2. r, p, c, t, b, r
 - ☒ 3. r, t, p, c, r, b
 - ☒ 4. r, p, t, r, b, c

Question ID : 6549786765

Status : Answered

Chosen Option : 3

Q.15 Select the option that is embedded in the given figure (rotation is NOT allowed).



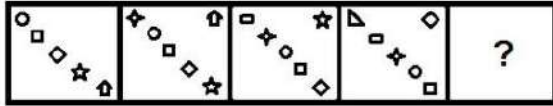
- Ans
- ☒ 1.
 - ☒ 2.
 - ☒ 3.
 - ☒ 4.

Question ID : 6549787683

Status : Answered

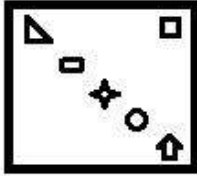
Chosen Option : 1

Q.16 Select the figure from among the given options that can replace the question mark (?) in the following series.




Ans

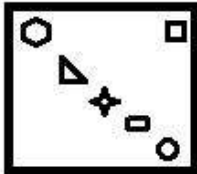
✗ 1.



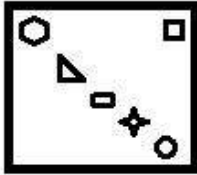
✗ 2.



✗ 3.



✓ 4.

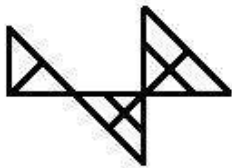


Question ID : 6549787580

Status : Answered

Chosen Option : 4

Q.17 How many triangles are there in the given figure?



Ans

✓ 1. 15

✗ 2. 14

✗ 3. 17

✗ 4. 16

Question ID : 6549787581

Status : Answered

Chosen Option : 1

Q.18 Select the option that is related to the fourth number in the same way as the first number is related to the second number and the fifth number is related to the sixth number.

24 : 144 :: ? : 174 :: 35 : 210

- Ans ☒ 1. 29
☐ 2. 38
☐ 3. 33
☐ 4. 27

Question ID : 6549787563

Status : Answered

Chosen Option : 1

Q.19 उस विकल्प का चयन करें, जो तीसरे शब्द से ठीक उसी प्रकार संबंधित है, जिस प्रकार दूसरा शब्द पहले शब्द से संबंधित है।

एंटीमोलॉजी : कीट :: पैलेन्टोलॉजी : ?

- Ans ☐ 1. भूकंप
☒ 2. जीवाश्म
☐ 3. ऑटोमोबाइल
☐ 4. खनिज पदार्थ

Question ID : 6549787673

Status : Answered

Chosen Option : 2

Q.20 If Aniket is the brother of the son of Priyanka's son, then how is Aniket related to Priyanka?

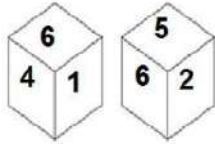
- Ans ☒ 1. Grandson
☐ 2. Son
☐ 3. Cousin
☐ 4. Brother

Question ID : 6549786867

Status : Answered

Chosen Option : 1

Q.21 Two different positions of the same dice are shown, the six faces of which are numbered from 1 to 6. Select the number that will be on the face opposite to the face having '3'.



Ans

☒ 1. 5

☒ 2. 2

☒ 3. 6

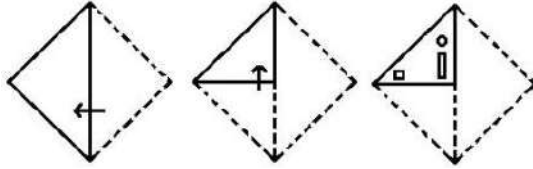
☒ 4. 4

Question ID : 6549787579

Status : Answered

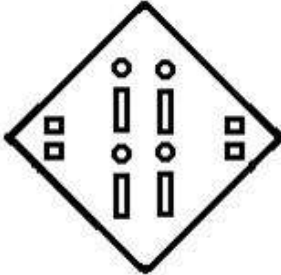
Chosen Option : 3

Q.22 The sequence of folding a piece of paper and the manner in which the folded paper has been cut is shown in the following figures. How would this paper look when unfolded?

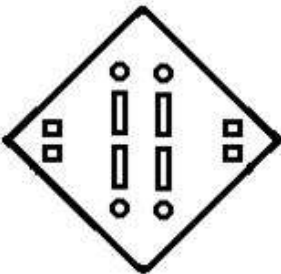


Ans

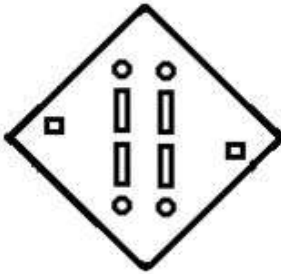
☒ 1.



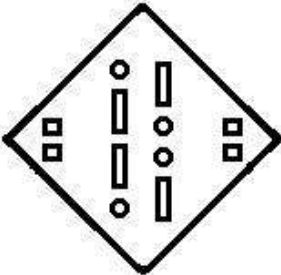
☒ 2.



☒ 3.



☒ 4.



Question ID : 6549787684

Status : Answered

Chosen Option : 2

Q.23 Read the given statements and conclusions carefully. Assuming that the information given in the statements is true, even if it appears to be at variance with commonly known facts, decide which of the given conclusions logically follow(s) from the statements.

Statements:

Some balls are spoons.

All stones are balls.

No ball is a pebble.

Conclusions:

I. Some balls are stones.

II. No spoon is a stone.

III. No stone is a pebble.

- Ans**
- ☒ 1. Only conclusion III follows.
 - ☒ 2. Both conclusions I and III follow.
 - ☒ 3. Both conclusions I and II follow.
 - ☒ 4. Both conclusions II and III follow.

Question ID : 6549787679

Status : Answered

Chosen Option : 2

Q.24 In a certain code language, 'TOPPER' is coded as '66' and 'MARK' is coded as '61'. How will 'INDUCE' be coded in that language?

- Ans**
- ☒ 1. 86
 - ☒ 2. 106
 - ☒ 3. 100
 - ☒ 4. 96

Question ID : 6549787570

Status : Marked For Review

Chosen Option : 2

Q.25 Select the option in which the words share the same relationship as that shared by the given pair of words.

Libya : Tripoli

- Ans**
- ☒ 1. Kampala : Uganda
 - ☒ 2. Harare : Zimbabwe
 - ☒ 3. Zambia : Lusaka
 - ☒ 4. Afghanistan : Jakarta

Question ID : 6549787575

Status : Answered

Chosen Option : 2

Q.1 Vijay bought a fridge and a washing machine together for ₹38,200. He sold the fridge at a profit of 15% and washing machine at a loss of 24% and both are sold at the same price. The cost price of the washing machine is:

- Ans**
- ☒ 1. ₹26,000
 - ☒ 2. ₹24,000
 - ☒ 3. ₹23,000
 - ☒ 4. ₹22,000

Question ID : 6549787693

Status : Answered

Chosen Option : 3

Q.2 Solve for θ : $3\operatorname{cosec}\theta + 4\sin\theta - 4\sqrt{3} = 0$, where θ is an acute angle.

- Ans**
- ☒ 1. 45°
 - ☒ 2. 30°
 - ☒ 3. 60°
 - ☒ 4. 15°

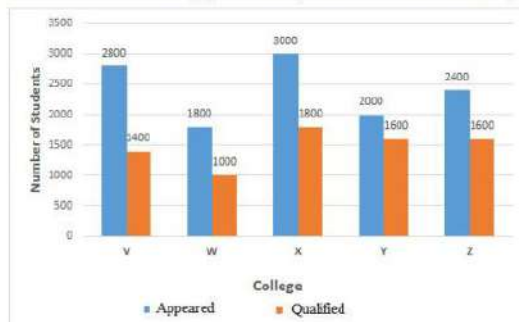
Question ID : 6549787707

Status : Answered

Chosen Option : 3

Q.3 Study the following graph and answer the question that follows.

Number of students that appeared and qualified, from various colleges, at a scholarship examination.



The number of students that appeared for the scholarship exam from College X is what percentage of the total number of students that appeared for the exam from all the colleges together?

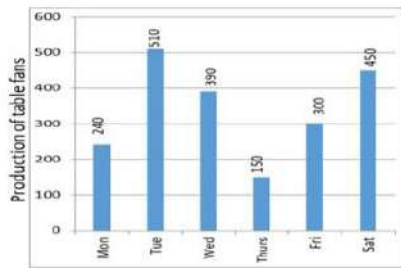
- Ans**
- ☒ 1. 20
 - ☒ 2. 30
 - ☒ 3. 25
 - ☒ 4. 35

Question ID : 6549788720

Status : Answered

Chosen Option : 3

Q.4 The given bar graph shows the production of table fans in a factory during one week. Study the bar graph and answer the question that follows.



The average production of table fans from Monday to Wednesday is approximately what percentage more than the average production of table fans from Thursday to Saturday?

(correct to one decimal place)

- Ans**
- ☒ 1. 25%
 - ☒ 2. 28%
 - ☒ 3. 27.5%
 - ☒ 4. 26.7%

Question ID : 6549787610

Status : Answered

Chosen Option : 4

Q.5 If the volume of a sphere is $697\frac{4}{21} \text{ cm}^3$, then its radius is:

(Take $\pi = \frac{22}{7}$)

- Ans**
- ☒ 1. 6 cm
 - ☒ 2. 5 cm
 - ☒ 3. 4.5 cm
 - ☒ 4. 5.5 cm

Question ID : 6549787689

Status : Not Answered

Chosen Option : --

Q.6 x, y are two positive numbers such that $x > y$. If $x^4 + y^4 = 706$ and $xy = 15$, then the value of $2x + 3y$ is:

- Ans**
- ☒ 1. 19
 - ☒ 2. 20
 - ☒ 3. 18
 - ☒ 4. 15

Question ID : 6549787702

Status : Not Answered

Chosen Option : --

Q.7 The marked price of an article is ₹1,360. If a shopkeeper sold the article at 15% loss after giving 25% discount, then the cost price of the article is:

- Ans**
- ☒ 1. ₹1,200
 - ☐ 2. ₹1,600
 - ☐ 3. ₹1,400
 - ☐ 4. ₹1,500

Question ID : **6549787691**
Status : **Not Answered**
Chosen Option : --

Q.8 A completes 20% of a work in 5 days and B completes one-third of the work in 5 days. They began the work together but B leaves after 3 days. The total number of days needed for completion of the work is:

- Ans**
- ☐ 1. 18
 - ☐ 2. 24
 - ☒ 3. 20
 - ☐ 4. 30

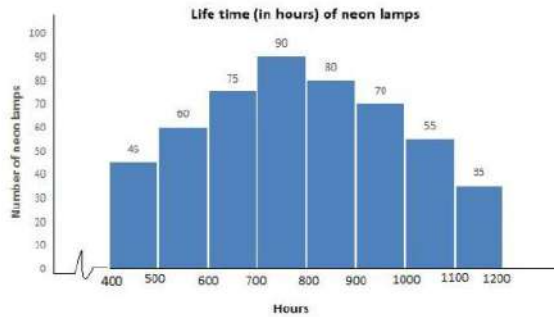
Question ID : **6549787687**
Status : **Answered**
Chosen Option : **3**

Q.9 If the radius of a circle is equal to a diagonal of a square whose area is 12 cm^2 , then the area of the circle is:

- Ans**
- ☐ 1. $28\pi \text{ cm}^2$
 - ☐ 2. $32\pi \text{ cm}^2$
 - ☒ 3. $24\pi \text{ cm}^2$
 - ☐ 4. $36\pi \text{ cm}^2$

Question ID : **6549787595**
Status : **Answered**
Chosen Option : **4**

Q.10 Study the given bar graph which shows the life time (in hours) of neon lamps and the number of neon lamps and answer the question that follows.



The number of neon lamps having life 500 hours or more but less than 700 hours is what percent of the total number of neon lamps having life 800 hours or more?

- Ans
- ☒ 1. 57.75%
 - ☒ 2. 61.55%
 - ☒ 3. 56.25%
 - ☒ 4. 51.85%

Question ID : **6549786901**
Status : **Answered**
Chosen Option : **3**

Q.11 A, B and C are three positive numbers such that A is 70% of B, and B is 40% of C. If the sum of all three numbers is 336, then 15% of the sum of B and C is:

- Ans
- ☒ 1. 42
 - ☒ 2. 44
 - ☒ 3. 48
 - ☒ 4. 32

Question ID : **6549787591**
Status : **Answered**
Chosen Option : **1**

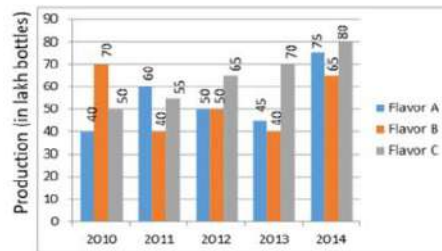
Q.12 The smallest six-digit number that is exactly divisible by 53 is:

- Ans
- ☒ 1. 100011
 - ☒ 2. 100042
 - ☒ 3. 100008
 - ☒ 4. 100064

Question ID : **6549787602**
Status : **Not Answered**
Chosen Option : **--**

- Q.13** A soft drink company prepares drinks of three different flavours — A, B and C. The production of the three flavours over a period of five years from 2010 to 2014 has been expressed in the given bar graph. Study the graph and answer the question that follows.

Production of three different flavours A, B and C (in lakh bottles) by a company over five years.



What was the approximate percentage decline in the production of flavour A in 2013 as compared to the production of flavour A in 2011?

- Ans
- ☒ 1. 30%
 - ☒ 2. 24%
 - ☒ 3. 20%
 - ☒ 4. 25%

Question ID : 6549787708

Status : Answered

Chosen Option : 4

- Q.14** A, B and C are three positive numbers such that the average of three-fifth of A and 30% of B is 13.5, and the average of

$\frac{3}{8}$ times of B and 25% of C is 15. If A is equal to $\frac{5}{12}$ times of C, then the sum of all three numbers A, B and C is:

- Ans
- ☒ 1. 125
 - ☒ 2. 135
 - ☒ 3. 145
 - ☒ 4. 120

Question ID : 6549787589

Status : Not Answered

Chosen Option : --

- Q.15** In a triangle ABC, the length of side AC is 4 cm less than five times the length of side AB. The length of side BC exceeds four times the length of side AB by 4 cm. If the perimeter of $\triangle ABC$ is 90 cm, then its area is:

- Ans
- ☒ 1. 160 cm^2
 - ☒ 2. 164 cm^2
 - ☒ 3. 180 cm^2
 - ☒ 4. 148 cm^2

Question ID : 6549787699

Status : Not Answered

Chosen Option : --

Q.16 If $a - \frac{24}{a} = 5$, where $a > 0$, then the value of $a^2 + \frac{64}{a^2}$ is:

- Ans
- ☐ 1. 45
 - ☐ 2. 56
 - ☐ 3. 60
 - ☒ 4. 65

Question ID : 6549787599

Status : Not Answered

Chosen Option : --

Q.17 If $a - b = 7$ and $a^2 + b^2 + 169$ where $a, b > 0$, then the value of $3a + b$ is:

- Ans
- ☐ 1. 44
 - ☒ 2. 41
 - ☐ 3. 38
 - ☐ 4. 46

Question ID : 6549787701

Status : Answered

Chosen Option : 2

Q.18 If $\cot A + \operatorname{cosec} A = 2$ and A is an acute angle, then the value of $\frac{9 \tan A + 16 \operatorname{cosec} A}{5 \sin A + 3 \tan A}$ is:

- Ans
- ☐ 1. 3
 - ☐ 2. 6
 - ☒ 3. 4
 - ☐ 4. 8

Question ID : 6549787605

Status : Not Answered

Chosen Option : --

Q.19 A sum of money is distributed among A, B, C and D in the ratio 5 : 7 : 11 : 15, respectively. If C gets ₹2,480 more than B, then the difference between the shares of B and D is:

- Ans
- ☐ 1. ₹6,490
 - ☐ 2. ₹4,950
 - ☐ 3. ₹4,690
 - ☒ 4. ₹4,960

Question ID : 6549787593

Status : Answered

Chosen Option : 4

Q.20 A certain sum of money amounts to ₹9,766 in 3 years at simple interest at R% per annum and to ₹10,849 in $4\frac{1}{2}$ years at the same rate of simple interest. The value of R is:

- Ans
- ☒ 1. 8
 - ☒ 2. 9
 - ☒ 3. 9.5
 - ☒ 4. 8.5

Question ID : 6549787594

Status : Answered

Chosen Option : 3

Q.21 Ajit Singh left from place P at 9.30 a.m. for place Q, and David Raj left place Q at 1.30 p.m. for place P. The distance between them is 416 km. If Ajit Singh's speed is 44 km/h and David Raj's speed is 52 km/h, then at what time will they meet each other?

- Ans
- ☒ 1. 4.30 p.m.
 - ☒ 2. 5 p.m.
 - ☒ 3. 6 p.m.
 - ☒ 4. 4 p.m.

Question ID : 6549787587

Status : Not Answered

Chosen Option : --

Q.22 The sum of three sides of an isosceles triangle is 20 cm, and the ratio of an equal side to the base is 3 : 4. The altitude of the triangle is:

- Ans
- ☒ 1. $3\sqrt{3}cm$
 - ☒ 2. $3\sqrt{5}cm$
 - ☒ 3. $4\sqrt{5}cm$
 - ☒ 4. $2\sqrt{5}cm$

Question ID : 6549787597

Status : Answered

Chosen Option : 4

Q.23 The value of $441 \div \left[270 \div \frac{3}{7} \text{ of } 35 + \left(17 \div \frac{1}{3} \right) - \left(8\frac{1}{2} - \frac{5}{2} \right) \right]$ is:

- Ans
- ☒ 1. 7
 - ☒ 2. 21
 - ☒ 3. 11
 - ☒ 4. 14

Question ID : 6549787704

Status : Not Answered

Chosen Option : --

Q.24 If $\cot^2 \theta + \cot^4 \theta = 2$, then the value of $2 \sin^4 \theta + \sin^2 \theta$ is:

- Ans
- ☐ 1. 3
 - ☐ 2. 5
 - ☒ 3. 1
 - ☐ 4. 2

Question ID : 6549787705
Status : Answered
Chosen Option : 4

Q.25 A, B and C are three points on a circle whose centre is O. If angle BOC is equal to 124° , then what is the value (in degrees) of angle BAC?

- Ans
- ☐ 1. 72
 - ☒ 2. 62
 - ☐ 3. 66
 - ☐ 4. 34

Question ID : 6549787697
Status : Not Answered
Chosen Option : --

Section : General Awareness

Q.1 Which of the following mountain passes is situated in the state of Uttarakhand?

- Ans
- ☐ 1. Nathu La Pass
 - ☐ 2. Baralacha La Pass
 - ☐ 3. Bomdi La Pass
 - ☒ 4. Mangsha Dhura Pass

Question ID : 6549787724
Status : Answered
Chosen Option : 1

Q.2 Who was appointed as UNICEF's celebrity advocate for a children's rights campaign in September 2020?

- Ans
- ☐ 1. Aamir Khan
 - ☐ 2. Nawazuddin Siddiqui
 - ☒ 3. Ayushmann Khurrana
 - ☐ 4. Akshay Kumar

Question ID : 6549787730
Status : Answered
Chosen Option : 3

Q.3 'PVC' is a high strength thermoplastic material widely used in applications, such as pipes, medical devices, wire and cable insulation. What is the full form of PVC?

- Ans
- ☒ 1. Polyvinyl Carbazole
 - ☒ 2. Polyvinyl Chloride
 - ☒ 3. Polyvinyl Calcium
 - ☒ 4. Polyvinyl Carbonate

Question ID : 6549787621

Status : Answered

Chosen Option : 2

Q.4 After over 21 years stay in South Africa, Gandhiji returned to India in ____.

- Ans
- ☒ 1. 1915
 - ☒ 2. 1916
 - ☒ 3. 1917
 - ☒ 4. 1919

Question ID : 6549787728

Status : Answered

Chosen Option : 1

Q.5 What was India's rank in the World Press Freedom Index 2020?

- Ans
- ☒ 1. 92
 - ☒ 2. 139
 - ☒ 3. 142
 - ☒ 4. 97

Question ID : 6549787616

Status : Answered

Chosen Option : 3

Q.6 The nephron is the microscopic structural and functional unit of the:

- Ans
- ☒ 1. kidney
 - ☒ 2. heart
 - ☒ 3. lung
 - ☒ 4. liver

Question ID : 6549787721

Status : Answered

Chosen Option : 1

Q.7 National Highway No. 7 connects:

- Ans** ☒ 1. Fazilka to Mana
☐ 2. Kashmir to Kanyakumari
☐ 3. Varanasi to Kanyakumari
☐ 4. Kanpur to Silchar

Question ID : **6549787626**
Status : **Marked For Review**
Chosen Option : **2**

Q.8 To which country does the French Open 2020 women's singles winner, Iga Swiatek belong?

- Ans** ☐ 1. China
☐ 2. France
☒ 3. Poland
☐ 4. Japan

Question ID : **6549787633**
Status : **Answered**
Chosen Option : **3**

Q.9 Which of the following diseases damages the eye's optic nerve and results in vision loss and blindness and occurs when the normal fluid pressure inside the eyes slowly rises?

- Ans** ☐ 1. Vitiligo
☐ 2. Psoriasis
☐ 3. Gonorrhoea
☒ 4. Glaucoma

Question ID : **6549787723**
Status : **Answered**
Chosen Option : **4**

Q.10 India's first lithium refinery, which will process lithium ore to produce battery-grade material, will be set up in:

- Ans** ☐ 1. Uttar Pradesh
☐ 2. Rajasthan
☐ 3. Madhya Pradesh
☒ 4. Gujarat

Question ID : **6549787615**
Status : **Answered**
Chosen Option : **4**

Q.11 The 'Hornbill Festival' is a celebration held every year from 1 to 10 December in _____.

- Ans
- ☒ 1. Haryana
 - ☒ 2. Kerala
 - ☒ 3. Nagaland
 - ☒ 4. Uttarakhand

Question ID : 6549787715
Status : Answered
Chosen Option : 3

Q.12 In which of the following states is Neora Valley National Park situated?

- Ans
- ☒ 1. Maharashtra
 - ☒ 2. Kerala
 - ☒ 3. Himachal Pradesh
 - ☒ 4. West Bengal

Question ID : 6549787625
Status : Not Answered
Chosen Option : --

Q.13 Which of the following organisations was awarded with the Nobel Peace Prize 2020?

- Ans
- ☒ 1. World Health Organization
 - ☒ 2. World Trade Organization
 - ☒ 3. World Food Programme
 - ☒ 4. International Labour Organization

Question ID : 6549787630
Status : Answered
Chosen Option : 3

Q.14 Who is the Chief Justice of Bangladesh as of May 2020?

- Ans
- ☒ 1. Abdul Hamid
 - ☒ 2. Syed Mahmud Hossain
 - ☒ 3. Narender Batra
 - ☒ 4. Sheikh Hasina

Question ID : 6549787733
Status : Answered
Chosen Option : 1

Q.15 Which of the following writs is a challenge to the legality of a prisoner's detention?

- Ans
- ☒ 1. Mandamus
 - ☒ 2. Quo Warranto
 - ☒ 3. Habeas corpus
 - ☒ 4. Prohibition

Question ID : 6549787631
Status : Marked For Review
Chosen Option : 2

Q.16 Which of the following Hindu festivals is celebrated in the last month of the Hindu calendar?

- Ans
- ☒ 1. Holi
 - ☒ 2. Diwali
 - ☒ 3. Raksha Bandhan
 - ☒ 4. Makara Sankranti

Question ID : 6549787613
Status : Marked For Review
Chosen Option : 4

Q.17 The Battle of Bedara was fought between the British Army and the Dutch Army in:

- Ans
- ☒ 1. 1760
 - ☒ 2. 1759
 - ☒ 3. 1772
 - ☒ 4. 1764

Question ID : 6549787628
Status : Answered
Chosen Option : 3

Q.18 Who among the following won the 'Tenzing Norgay National Adventure Award' in August 2020 in the 'Water Adventure' category?

- Ans
- ☒ 1. Satyendra Singh
 - ☒ 2. Narendra Singh
 - ☒ 3. Sarfaraz Singh
 - ☒ 4. Anita Devi

Question ID : 6549787735
Status : Not Answered
Chosen Option : --

Q.19 Which of the following is an open source operating system?

- Ans
- ☐ 1. Windows 10
 - ☐ 2. Windows Vista
 - ☒ 3. Android
 - ☐ 4. iOS

Question ID : 6549787611
Status : Not Answered
Chosen Option : --

Q.20 Which of the following is the correct definition of bank rate?

- Ans
- ☒ 1. It is the rate of interest payable by commercial banks to RBI.
 - ☐ 2. It is the rate of interest payable by a scheduled bank at which RBI lends overnight.
 - ☐ 3. It is the rate of interest payable by a consumer to commercial banks.
 - ☐ 4. It is the rate of interest payable by RBI to commercial banks.

Question ID : 6549787618
Status : Answered
Chosen Option : 1

Q.21 Which of the following is an input device used to verify the legitimacy or originality of paper documents, especially cheques?

- Ans
- ☐ 1. Non-impact printer
 - ☐ 2. Optical mark reader
 - ☐ 3. Electronic card reader
 - ☒ 4. Magnetic ink character recognition

Question ID : 6549787713
Status : Answered
Chosen Option : 2

Q.22 Chulia waterfall is situated on Chambal River in _____.

- Ans
- ☐ 1. Uttar Pradesh
 - ☐ 2. Gujarat
 - ☒ 3. Rajasthan
 - ☐ 4. Madhya Pradesh

Question ID : 6549787725
Status : Answered
Chosen Option : 4

Q.23 In which of the following states was the Monpa handmade paper making unit inaugurated in December 2020?

- Ans
- ☒ 1. Tripura
 - ☒ 2. Assam
 - ☒ 3. Arunachal Pradesh
 - ☒ 4. Manipur

Question ID : 6549787718

Status : Marked For Review

Chosen Option : 4

Q.24 Who among the following was the first female hockey player to have won the Rajiv Gandhi Khel Ratna Award?

- Ans
- ☒ 1. Gurjit Kaur
 - ☒ 2. Reena Khokhar
 - ☒ 3. Rani Rampal
 - ☒ 4. Lilima Minz

Question ID : 6549787635

Status : Answered

Chosen Option : 3

Q.25 In the Union Budget 2020-21, the Government of India proposed to spend ₹30,42,230 crore in 2020-21, which is _____ higher than the revised estimate of 2019-20.

- Ans
- ☒ 1. 12.7%
 - ☒ 2. 18.9%
 - ☒ 3. 18.7%
 - ☒ 4. 17.6%

Question ID : 6549787720

Status : Marked For Review

Chosen Option : 1

Combined Higher Secondary Level Examination 2020 (Tier-I)

Roll Number	Join Telegram: HaryanaJobs.in
Candidate Name	
Venue Name	
Exam Date	11/08/2021
Exam Time	3:00 PM - 4:00 PM
Subject	Combined Higher Secondary Level Exam 2020

Section : English Language

Q.1 Select the incorrectly spelt word.

- Ans
- ☒ 1. irresistible
 - ☒ 2. illegitimate
 - ☒ 3. illegible
 - ☒ 4. irrepairable

Question ID : 6549788160

Status : Answered

Chosen Option : 4

Q.2 In the given sentence, identify the segment which contains a grammatical error.

My tailor is made some very stylish dresses for me as well as for my daughter.

- Ans
- ☒ 1. for my daughter
 - ☒ 2. is made
 - ☒ 3. very stylish dresses
 - ☒ 4. for me as well as

Question ID : 6549788245

Status : Answered

Chosen Option : 2

Q.3 Select the most appropriate meaning of the given idiom.

A dime a dozen

- Ans
- ☒ 1. common and so of little value
 - ☒ 2. in great demand as not easily available
 - ☒ 3. available only in bulk
 - ☒ 4. not available everywhere

Question ID : 6549788259

Status : Answered

Chosen Option : 3

Q.4 Select the word which means the same as the group of words given.

someone who runs away from justice

- Ans
- ☒ 1. stowaway
 - ☒ 2. cheat
 - ☒ 3. fugitive
 - ☒ 4. thief

Question ID : 6549788262

Status : Answered

Chosen Option : 1

Q.5 Select the most appropriate word to fill in the blank.

The government has opened many new centres of excellence to train teachers in conducting online classes _____.

- Ans
- ☒ 1. effectively
 - ☒ 2. hopefully
 - ☒ 3. certainly
 - ☒ 4. automatically

Question ID : 6549788267

Status : Answered

Chosen Option : 1

Q.6 Given below are four jumbled sentences. Out of the given options, select the one that gives their correct order.

- A. It is only after sunset that he satisfies his hunger and quenches his thirst.
- B. In this way, by practicing self-restraint for one month in a year, he is able to lead a life of self-discipline in all matters for the rest of the year.
- C. During the month of Ramzan, the believer abstains from food and drink in the daytime of his own free will.
- D. Fasting is an exercise in self-discipline and is good for everyone.

- Ans
- ☒ 1. DBCA
 - ☒ 2. CDAB
 - ☒ 3. CBDA
 - ☒ 4. DCAB

Question ID : 6549788253

Status : Answered

Chosen Option : 4

Q.7 Select the most appropriate ANTONYM of the given word.

PRECIOUS

- Ans ☒ 1. worthless
☒ 2. plentiful
☒ 3. ugly
☒ 4. costly

Question ID : 6549788155
Status : Answered
Chosen Option : 1

Q.8 Select the most appropriate synonym of the given word.

HAZARDOUS

- Ans ☒ 1. uncaring
☒ 2. dangerous
☒ 3. smooth
☒ 4. predictable

Question ID : 6549788265
Status : Answered
Chosen Option : 2

Q.9 Select the most appropriate meaning of the given idiom.

A red letter day

- Ans ☒ 1. a day of fun and enjoyment
☒ 2. a day of horror
☒ 3. the worst day
☒ 4. a memorable day

Question ID : 6549788157
Status : Answered
Chosen Option : 4

Q.10 Select the most appropriate option to substitute the underlined segment in the given sentence. If there is no need to substitute it, select 'No substitution'.

It was the biggest jump in earnings for me and I was delighted.

- Ans ☒ 1. was the bigger
☒ 2. is the big
☒ 3. has been the biggest
☒ 4. No substitution

Question ID : 6549788254
Status : Answered
Chosen Option : 3

Q.11 Select the most appropriate option to substitute the underlined segment in the given sentence. If there is no need to substitute it, select 'No substitution'.

These days, wherever district courts are functioning, hearings is limit to urgent matters.

- Ans ☒ 1. hearings are limited
☒ 2. hearing is limit
☒ 3. No substitution
☒ 4. hearings were limited

Question ID : 6549788154

Status : Answered

Chosen Option : 1

Q.12 Given below are four jumbled sentences. Out of the given options, select the one that gives their correct order.

- A. According to sources, one of the degrees will have to be in the regular mode and the other either in open and distance learning or online mode.
B. In a move to improve students' career prospects, the University Grants Commission has approved the proposal to allow them to pursue two degree programmes at the same time.
C. A committee formed under the UGC vice chairperson worked on the proposal based on feedback from the public.
D. Once the guidelines are notified, a student studying in a university will be able to pursue another degree programme simultaneously.

- Ans ☒ 1. DBAC
☒ 2. BCDA
☒ 3. ABDC
☒ 4. CBAD

Question ID : 6549788151

Status : Answered

Chosen Option : 4

Q.13 Select the INCORRECTLY spelt word.

- Ans ☒ 1. allert
☒ 2. allegation
☒ 3. alliteration
☒ 4. almighty

Question ID : 6549788260

Status : Answered

Chosen Option : 1

Q.14 Select the most appropriate synonym of the given word.

POLLUTE

- Ans
- ☐ 1. ridicule
 - ☒ 2. contaminate
 - ☐ 3. destroy
 - ☐ 4. condemn

Question ID : 6549788163
Status : Answered
Chosen Option : 2

Q.15 Select the correct passive form of the given sentence.

The counsellor gave very good advice to the students.

- Ans
- ☐ 1. Very good advice to the students has been given by the counsellor.
 - ☐ 2. Very good advice to the students had been given by the counsellor.
 - ☐ 3. Very good advice is given to the students by the counsellor.
 - ☒ 4. Very good advice was given to the students by the counsellor.

Question ID : 6549788242
Status : Answered
Chosen Option : 4

Q.16 Select the correct indirect form of the given sentence.

Mother said to me, "Enjoy your vacation with your friends."

- Ans
- ☒ 1. Mother told me to enjoy my vacation with my friends.
 - ☐ 2. Mother asked me to enjoyed my vacation with my friends.
 - ☐ 3. Mother told me that you should enjoy your vacation with your friends.
 - ☐ 4. Mother told me that I will enjoy my vacation with my friends.

Question ID : 6549788142
Status : Answered
Chosen Option : 1

Q.17 In the given sentence, identify the segment which contains a grammatical error.

The manager said that Rahul does not wants to go to Mumbai for the new project.

- Ans
- ☒ 1. does not wants
 - ☐ 2. for the new project
 - ☐ 3. said that
 - ☐ 4. to go to

Question ID : 6549788143
Status : Answered
Chosen Option : 1

Q.18 Select the most appropriate word to fill in the blank.

The jail _____ have started yoga and meditation classes for the inmates.

- Ans
- ☒ 1. residents
 - ☒ 2. people
 - ☒ 3. workers
 - ☒ 4. authorities

Question ID : 6549788165
Status : Answered
Chosen Option : 4

Q.19 Select the most appropriate ANTONYM of the given word.

Infallible

- Ans
- ☒ 1. Faulty
 - ☒ 2. Unfailing
 - ☒ 3. Dependable
 - ☒ 4. Reliable

Question ID : 6549788257
Status : Answered
Chosen Option : 1

Q.20 Select the word which means the same as the group of words given.

A place where a dead person's body is burnt.

- Ans
- ☒ 1. crematorium
 - ☒ 2. graveyard
 - ☒ 3. basement
 - ☒ 4. dungeon

Question ID : 6549788162
Status : Answered
Chosen Option : 1

Comprehension:

In the following passage, some words have been deleted. Fill in the blanks with the help of the alternatives given. Select the most appropriate option for each blank.

As the full impact of cyclone Amphan's fury emerged on Thursday morning and the count of uprooted trees (1) _____ the 5000 mark, environmentalists, horticulturists, and nature lovers mourned the huge (2) _____. But they also felt that Kolkata could emerge stronger from the (3) _____ if it used the opportunity to move from arbitrary plantation drives to ones that (4) _____ more scientific and rational. The loss of trees is bound to have a great impact on the climate in (5) _____ parts of West Bengal as oxygen levels will go down.

SubQuestion No : 21

Q.21 Select the most appropriate option for blank No. 1.

- Ans  1. crossed
-  2. crosses
-  3. is crossing
-  4. was crossed

Question ID : 6549788247

Status : Answered

Chosen Option : 2





Comprehension:

In the following passage, some words have been deleted. Fill in the blanks with the help of the alternatives given. Select the most appropriate option for each blank.

As the full impact of cyclone Amphan's fury emerged on Thursday morning and the count of uprooted trees (1) _____ the 5000 mark, environmentalists, horticulturists, and nature lovers mourned the huge (2) _____. But they also felt that Kolkata could emerge stronger from the (3) _____ if it used the opportunity to move from arbitrary plantation drives to ones that (4) _____ more scientific and rational. The loss of trees is bound to have a great impact on the climate in (5) _____ parts of West Bengal as oxygen levels will go down.

SubQuestion No : 22

Q.22 Select the most appropriate option for blank No. 2.

- Ans  1. failure
-  2. loss
-  3. death
-  4. passing

Question ID : 6549788248

Status : Answered

Chosen Option : 2

Comprehension:

In the following passage, some words have been deleted. Fill in the blanks with the help of the alternatives given. Select the most appropriate option for each blank.

As the full impact of cyclone Amphan's fury emerged on Thursday morning and the count of uprooted trees (1) _____ the 5000 mark, environmentalists, horticulturists, and nature lovers mourned the huge (2) _____. But they also felt that Kolkata could emerge stronger from the (3) _____ if it used the opportunity to move from arbitrary plantation drives to ones that (4) _____ more scientific and rational. The loss of trees is bound to have a great impact on the climate in (5) _____ parts of West Bengal as oxygen levels will go down.

SubQuestion No : 23

Q.23 Select the most appropriate option for blank No. 3.

- Ans  1. construction
 2. destruction
 3. extinction
 4. creation

Question ID : 6549788249

Status : Answered

Chosen Option : 2

Comprehension:

In the following passage, some words have been deleted. Fill in the blanks with the help of the alternatives given. Select the most appropriate option for each blank.

As the full impact of cyclone Amphan's fury emerged on Thursday morning and the count of uprooted trees (1) _____ the 5000 mark, environmentalists, horticulturists, and nature lovers mourned the huge (2) _____. But they also felt that Kolkata could emerge stronger from the (3) _____ if it used the opportunity to move from arbitrary plantation drives to ones that (4) _____ more scientific and rational. The loss of trees is bound to have a great impact on the climate in (5) _____ parts of West Bengal as oxygen levels will go down.

SubQuestion No : 24

Q.24 Select the most appropriate option for blank No. 4.

- Ans  1. have
 2. are
 3. was
 4. is

Question ID : 6549788250

Status : Answered

Chosen Option : 2

Comprehension:

In the following passage, some words have been deleted. Fill in the blanks with the help of the alternatives given. Select the most appropriate option for each blank.

As the full impact of cyclone Amphan's fury emerged on Thursday morning and the count of uprooted trees (1) _____ the 5000 mark, environmentalists, horticulturists, and nature lovers mourned the huge (2) _____. But they also felt that Kolkata could emerge stronger from the (3) _____ if it used the opportunity to move from arbitrary plantation drives to ones that (4) _____ more scientific and rational. The loss of trees is bound to have a great impact on the climate in (5) _____ parts of West Bengal as oxygen levels will go down.

SubQuestion No : 25

Q.25 Select the most appropriate option for blank No. 5.

- Ans
- ☒ 1. abundant
 - ☒ 2. much
 - ☒ 3. several
 - ☒ 4. differing

Question ID : 6549788251

Status : Answered

Chosen Option : 3

Section : General Intelligence

Q.1 Select the combination of letters that when sequentially placed in the blanks of the given letter series will complete the series.

M T _ R M _ Q R _ V Q _ M W _ R M _ Q R

- Ans
- ☒ 1. R U M R Q Y
 - ☒ 2. Q U M Q R X
 - ☒ 3. Q U M R Q X
 - ☒ 4. Q U S R Q R

Question ID : 6549787371

Status : Answered

Chosen Option : 2

Q.2 Three of the following four letter-clusters are alike in a certain way and one is different. Select the odd one.

- Ans
- ☒ 1. PLSK
 - ☒ 2. DZHW
 - ☒ 3. GCKT
 - ☒ 4. HDLS

Question ID : 6549788182

Status : Not Answered

Chosen Option : --

Q.3 In a code language, ORANGE is written as LKZGTX and MIRACLE is written as NBITXEV. How will LOCKDOWN be written in that language?

- Ans
- ☒ 1. OHXHWDDG
 - ☒ 2. OHDXHWDG
 - ☒ 3. OHXHWDDG
 - ☒ 4. OHXDWHDG

Question ID : 6549788276
Status : Answered
Chosen Option : 3

Q.4 Select the number that can replace the question mark (?) in the following series.

4, 11, 31, 65, 193, ?

- Ans
- ☒ 1. 396
 - ☒ 2. 369
 - ☒ 3. 389
 - ☒ 4. 398

Question ID : 6549788273
Status : Not Answered
Chosen Option : --

Q.5 Pointing towards Kapil, Aditya said, "His father is the husband of my father's father's daughter". How is Aditya's father related to Kapil's mother?

- Ans
- ☒ 1. Father
 - ☒ 2. Husband
 - ☒ 3. Son
 - ☒ 4. Brother

Question ID : 6549787473
Status : Answered
Chosen Option : 4


Q.6 Select the correct combination of mathematical signs to sequentially replace the * signs to balance the given equation.

$1496 * 8 * 13 * 40 * 5 = 0$

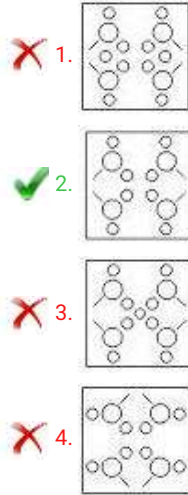
- Ans
- ☒ 1. ÷, +, -, ×
 - ☒ 2. +, ÷, -, ×
 - ☒ 3. -, +, ÷, ×
 - ☒ 4. +, ÷, ×, -

Question ID : 6549788269
Status : Answered
Chosen Option : 1

Q.7 A paper is folded and cut as shown below. How will it appear when unfolded?



Ans



Question ID : 6549788290

Status : Answered

Chosen Option : 2

Q.8 Three statements are given, followed by four conclusions numbered I, II, III and IV. Assuming the statements to be true, even if they seem to be at variance with commonly known facts, decide which of the conclusions logically follow(s) from the statements.

Statements:

1. All carpets are beds.
2. Some tables are carpets.
3. All pillows are tables.

Conclusions:

- I. All pillows are beds.
- II. Some pillows are beds.
- III. Some beds are tables.
- IV. All tables are beds.

- Ans
1. Both conclusions II and III follow .
 2. Only conclusion I follows .
 3. Both conclusions I and II follow .
 4. Only conclusion III follows .

Question ID : 6549788285

Status : Answered

Chosen Option : 4

Q.9 Which option represents the correct order of the given words as they would appear in English dictionary?

1. Rumoured
2. Rudiment
3. Rumanian
4. Royalties
5. Rigorous

- Ans
- ☒ 1. 4, 5, 2, 3, 1
 - ☒ 2. 4, 5, 2, 1, 3
 - ☒ 3. 5, 4, 2, 1, 3
 - ☒ 4. 5, 4, 2, 3, 1

Question ID : 6549788174

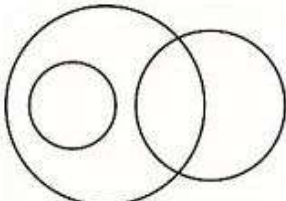
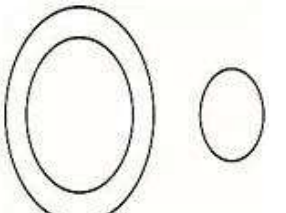

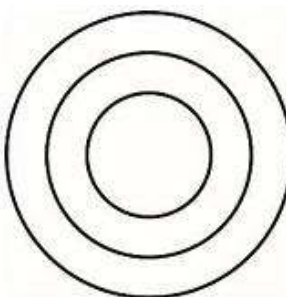
Status : Answered

Chosen Option : 4

Q.10 Select the Venn diagram that best illustrates the relationship between the following classes.

Rats, Cats, Mammals

Ans

- ☒ 1. 
- ☒ 2. 
- ☒ 3. 
- ☒ 4. 

Question ID : 6549788191

Status : Answered

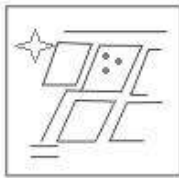
Chosen Option : 3

Q.11 Select the option in which the given figure is embedded (rotation is NOT allowed).



Ans

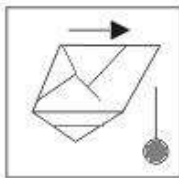
☒ 1.



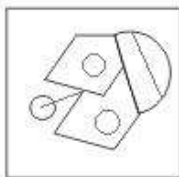
☒ 2.



☒ 3.



☒ 4.



Question ID : 6549788289

Status : Answered

Chosen Option : 2

Q.12 Two numbers, A and B, are such that the sum of 3% of A and 6% of B is four-fifth of the sum of 4% of A and 6% of B. Find the ratio of A + B and A - B?

Ans

☒ 1. 4 : 5

☒ 2. 6 : 5

☒ 3. 7 : 5

☒ 4. 5 : 6

Question ID : 6549788167

Status : Answered

Chosen Option : 3

Q.13 Select the set in which the numbers are related in the same way as are the numbers of the following set.

(13, 37, 77)

- Ans
- ☒ 1. (15, 43, 83)
 - ☒ 2. (12, 38, 79)
 - ☒ 3. (14, 40, 83)
 - ☒ 4. (17, 53, 109)

Question ID : 6549788271

Status : Answered

Chosen Option : 3

Q.14 Three of the following four words are alike in a certain way and one is different. Select the odd one.

- Ans
- ☒ 1. Contention
 - ☒ 2. Turmoil
 - ☒ 3. Conflict
 - ☒ 4. Tranquility

Question ID : 6549788284

Status : Answered

Chosen Option : 4

Q.15 Select the set in which the numbers are related in the same way as are the numbers of the following set.

(4, 140, 6)

- Ans
- ☒ 1. (9, 396, 4)
 - ☒ 2. (2, 121, 6)
 - ☒ 3. (5, 234, 7)
 - ☒ 4. (3, 269, 8)

Question ID : 6549788171

Status : Answered

Chosen Option : 3

Q.16 Select the word-pair that best represents a similar relationship to the one expressed in the given word-pair.

Spanner : Grip

- Ans
- ☒ 1. Axe : Dig
 - ☒ 2. Tongs : Guard
 - ☒ 3. Auger : Bore
 - ☒ 4. Carve : Chisel

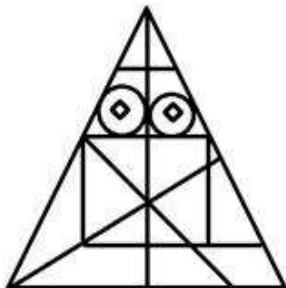
Question ID : 6549788181

Status : Answered

Chosen Option : 2

Question ID : 6549788176
Status : Answered
Chosen Option : 4

Q.20 Find the number of triangles in the following figure.



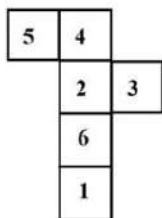
- Ans
- ☒ 1. 32
 - ☒ 2. 33
 - ☒ 3. 30
 - ☒ 4. 31

Question ID : 6549788187

Status : Answered

Chosen Option : 1

Q.21 If the given figure is folded to form a cube, which number will be on the face opposite to the one having '1'?



- Ans
- ☒ 1. 4
 - ☒ 2. 2
 - ☒ 3. 3
 - ☒ 4. 5

Question ID : 6549788185

Status : Answered

Chosen Option : 2

Q.22 Select the option that is related to the third letter-cluster in the same way as the second letter-cluster is related to the first letter-cluster.

PRINT : TWRIP :: CLOSE : ?

- Ans
- ☒ 1. EQLNC
 - ☒ 2. EOKHC
 - ☒ 3. EQKNC
 - ☒ 4. EPLMC

Question ID : 6549788278





Status : Answered

Chosen Option : 1

Q.23 Select the correct mirror image of the given combination when the mirror is placed to the right side of it.

DIViNeMaGIC

Ans

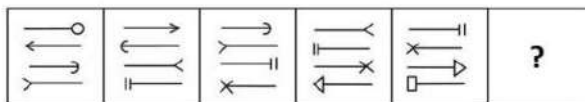
- ✓ 1. 
- ✗ 2. 
- ✗ 3. 
- ✗ 4. 

Question ID : 6549788291

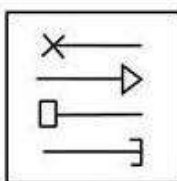
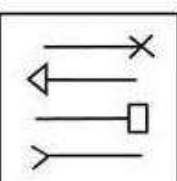
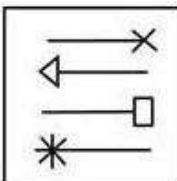
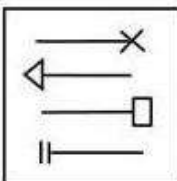
Status : Answered

Chosen Option : 1

Q.24 Select the figure that will come in place of the question mark (?) in the following figure series.



Ans

- ✗ 1. 
- ✗ 2. 
- ✓ 3. 
- ✗ 4. 

Question ID : 6549788186

Status : Answered

Chosen Option : 3

Q.25 In the following question, the second number is related to the first number in some way, choose the alternative which is similarly related to the third number

13 : 196 :: 15 : ?

- Ans
- ☒ 1. 221
 - ☒ 2. 247
 - ☒ 3. 298
 - ☒ 4. 256

Question ID : 6549788169

Status : Answered

Chosen Option : 4

Section : Quantitative Aptitude

Q.1 In $\triangle ABC$, P and Q are the mid-points of the sides AB and AC, respectively. R is a point on the segment PQ such that PR : RQ = 1 : 3. If PR = 4 cm, then BC is equal to:

- Ans
- ☒ 1. 36 cm
 - ☒ 2. 28 cm
 - ☒ 3. 24 cm
 - ☒ 4. 32 cm

Question ID : 6549788203

Status : Answered

Chosen Option : 4

Q.2 The value of $\frac{\cos^2 89^\circ + \cos^2 1^\circ}{\cos 30^\circ \sin 90^\circ - \sin 30^\circ \cos 90^\circ}$ is:

- Ans
- ☒ 1. $\frac{2}{\sqrt{3}}$
 - ☒ 2. $2\sqrt{3}$
 - ☒ 3. $\frac{1}{\sqrt{3}}$
 - ☒ 4. $\frac{1}{1-\sqrt{3}}$

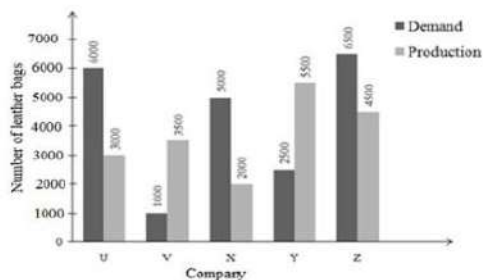
Question ID : 6549788311

Status : Answered

Chosen Option : 1

Q.3 Study the given graph and answer the question that follows.

The chart represents the demand and production of leather bags by five companies U, V, X, Y and Z.



The difference between the average demand and average production of the five companies taken together is:

- Ans
- ☒ 1. 525
 - ☒ 2. 450
 - ☒ 3. 475
 - ☒ 4. 500

Question ID : 6549788216

Status : Answered

Chosen Option : 4

Q.4 The largest six-digit number exactly divisible by 243 is:

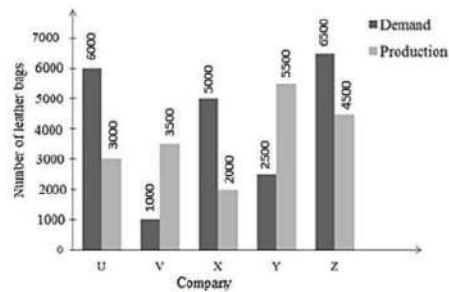
- Ans
- ☒ 1. 999943
 - ☒ 2. 999945
 - ☒ 3. 999947
 - ☒ 4. 999949

Question ID : 6549788208

Status : Answered

Chosen Option : 2

Q.5 Study the given graph and answer the question that follows.
The chart represents the demand and production of leather bags by five companies U, V, X, Y and Z.



If $h\%$ of the demand of leather bags for company X equals the demand of the leather bags for company V, then h equals:

- Ans**
- ☒ 1. 22
 - ☒ 2. 20
 - ☒ 3. 18
 - ☒ 4. 24

Question ID : 6549788314

Status : **Answered**

Chosen Option : 2

Q.6 A sum of ₹9,400 is divided between A, B and C such that the ratio of the shares of A and B is 4 : 3 and that of B and C is 5 : 4. What is the share of C?

- Ans**
- ☒ 1. ₹2,600
 - ☒ 2. ₹2,200
 - ☒ 3. ₹2,000
 - ☒ 4. ₹2,400

Question ID : 6549788199

Status : **Answered**

Chosen Option : 4

Q.7 If $x = 555$, $y = 556$ and $z = 557$, then find the value of $x^3 + y^3 + z^3 - 3xyz$.

- Ans**
- ☒ 1. 5006
 - ☒ 2. 5002
 - ☒ 3. 5008
 - ☒ 4. 5004

Question ID : 6549788308

Status : **Not Answered**

Chosen Option : --

Q.8 The average age of 35 persons is 40 years. 5 new persons with an average age of 35 years joined them. The average age of all the persons is:

Ans

✓ 1. $39\frac{3}{8}$ years

✗ 2. $39\frac{1}{8}$ years

✗ 3. $39\frac{7}{8}$ years

✗ 4. $39\frac{5}{8}$ years

Question ID : 6549788195

Status : Answered

Chosen Option : 1

Q.9 The area of the largest triangle that can be inscribed in a semi-circle of radius 6 cm is:

Ans

✓ 1. $36cm^2$

✗ 2. $34cm^2$

✗ 3. $35cm^2$

✗ 4. $38cm^2$

Question ID : 6549788305

Status : Answered

Chosen Option : 1

Q.10 If $6\tan^2\alpha - 2 = 0$, ($0 < \alpha < 90^\circ$), then the value of α is:

Ans

✓ 1. 30°

✗ 2. 45°

✗ 3. 15°

✗ 4. 75°

Question ID : 6549788313

Status : Answered

Chosen Option : 1

Q.11 If $a + 5b = 25$ and $ab = 20$, then one of the values of $(a - 5b)$ is:

Ans

✓ 1. 15

✗ 2. 14

✗ 3. 16

✗ 4. 13

Question ID : 6549788307

Status : Answered

Chosen Option : 1

Q.12 Varun and Gaurav can dig a pond in 10 days and 18 days, respectively. After finishing that work together, they receive an amount of ₹7,280. What is the share of Gaurav in that amount?

- Ans ☒ 1. ₹2,600
☒ 2. ₹2,500
☒ 3. ₹2,700
☒ 4. ₹2,800

Question ID : 6549788293

Status : Not Answered

Chosen Option : --

Q.13 Ram sold a plot for ₹6,55,000 at 20% loss. For what price should he sell the plot to gain 15% profit?

- Ans ☒ 1. ₹7,41,562.50
☒ 2. ₹6,41,562.50
☒ 3. ₹8,41,562.50
☒ 4. ₹9,41,562.50

Question ID : 6549788299

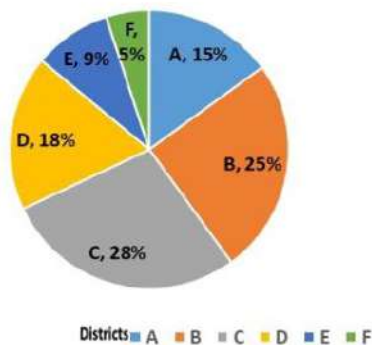
Status : Answered

Chosen Option : 4

Q.14 Study the given pie-chart and answer the question that follows.

The pie-chart represents the percentage distribution of candidates qualified in a bank examination from six different districts of a State in 2016. The total number of qualified candidates from the State is 68000.

The percentage distribution of candidates qualified for a bank examination from six districts A, B, C, D, E, and F of a State



What is the difference (to the nearest whole number) between the average number of qualified students from the Districts A, C and F and the average number of qualified students from the Districts B, D and E?

- Ans ☒ 1. 906
☒ 2. 910
☒ 3. 900
☒ 4. 907

Question ID : 6549789023

Status : Answered

Chosen Option : 1

Q.15 Pawan travels from X to Y at the speed of 10 km/h, from Y to Z at 15 km/h and from Z to W at 20 km/h. If $XY = YZ = ZW$ (in km), then the average speed of Pawan for the whole journey is:

Ans

☐ 1. $13\frac{10}{13}$ km/h

☒ 2. $13\frac{11}{13}$ km/h

☐ 3. $13\frac{8}{13}$ km/h

☐ 4. $13\frac{9}{13}$ km/h

Question ID : 6549788193

Status : Not Answered

Chosen Option : --

Q.16 Line AC is a tangent to a circle at point B on it, and PQ is a chord of the circle such that $BP = BQ$. If $\angle ABP = 64^\circ$, then find the measure of $\angle PBQ$.

Ans

☐ 1. 58°

☐ 2. 64°

☒ 3. 52°

☐ 4. 32°

Question ID : 6549788201

Status : Answered

Chosen Option : 3

Q.17 The value of $364 - [142 - \{75 + (38 - \frac{5}{4} + \frac{14}{8})\}]$ is:

Ans

☒ 1. 332

☐ 2. 330

☐ 3. 331

☐ 4. 334

Question ID : 6549788310

Status : Answered

Chosen Option : 1

Q.18 A shopkeeper marks his goods 25% above the cost price. Then, he allows a 40% discount on it. What is the percentage loss?

Ans

☒ 1. 25%

☐ 2. 15%

☐ 3. 20%

☐ 4. 30%

Question ID : 6549788297

Status : Answered

Chosen Option : 1

Q.19 If $\sin \alpha + \csc \alpha = \tan \frac{\pi}{3}$, then the value of $(\sin^3 \alpha + \csc^3 \alpha)$ is equal to:

- Ans
- ☒ 1. $\frac{1}{2}$
 - ☒ 2. 1
 - ☒ 3. 0
 - ☒ 4. $\frac{3}{2}$

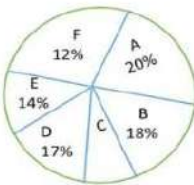
Question ID : 6549788211

Status : Answered

Chosen Option : 3

Q.20 Study the given pie chart and table and answer the question that follows.

The pie chart represents the percentagewise distribution of 300 students of class X in a school in six different sections A, B, C, D, E and F.



The table shows the number of boys of class X in six different sections A, B, C, D, E and F.

Section	A	B	C	D	E	F
No. of boys	36	26	34	28	—	20

If the total number of students in section C is 57, then the total number of girls in section C and D together will be:

- Ans
- ☒ 1. 36
 - ☒ 2. 46
 - ☒ 3. 48
 - ☒ 4. 40

Question ID : 6549787204

Status : Not Answered

Chosen Option : --

Q.21 If $3a - b = 1$ and $ab = 4$, then the value of $(9a^2 - b^2)$ is:

- Ans
- ☒ 1. 7
 - ☒ 2. 8
 - ☒ 3. 5
 - ☒ 4. 6

Question ID : 6549788205

Status : Answered

Chosen Option : 3

Q.22 In how much time will a sum of ₹5,000 invested at the rate of 15% simple interest per annum amount to ₹6,500?

- Ans
- ☐ 1. 2.5 years
 - ☐ 2. 1 year
 - ☐ 3. 1.5 years
 - ☒ 4. 2 years

Question ID : 6549788200

Status : Answered

Chosen Option : 4

Q.23 The cost price of a chair is ₹1,800. Later, its cost price becomes ₹2,100. What is the percentage increase in the cost price of the chair?

- Ans
- ☐ 1. $16\frac{5}{6}\%$
 - ☒ 2. $16\frac{2}{3}\%$
 - ☐ 3. $16\frac{1}{2}\%$
 - ☐ 4. $16\frac{1}{3}\%$

Question ID : 6549788197

Status : Answered

Chosen Option : 2

Q.24 Two parallel chords are drawn in a circle of diameter 50 cm on the opposite sides of its centre. The length of one chord is 40 cm and the distance between the two chords is 22 cm. The length of the other chord is:

- Ans
- ☐ 1. 46 cm
 - ☐ 2. 50 cm
 - ☐ 3. 44 cm
 - ☒ 4. 48 cm

Question ID : 6549788303

Status : Answered

Chosen Option : 4

Q.25 The perimeter of a rectangle is 86 cm. The numbers representing its area and breadth are in the ratio of 9 : 1, respectively. The breadth of the rectangle is:

- Ans
- ☐ 1. 32 cm
 - ☒ 2. 34 cm
 - ☐ 3. 36 cm
 - ☐ 4. 30 cm

Question ID : 6549788295

Status : Answered

Chosen Option : 2

Q.1 Which of the following is a replica of the famous Taj Mahal built in 1679?

- Ans
- ☐ 1. Zeenat-ul-Masjid
 - ☐ 2. Pari Mahal
 - ☒ 3. Bibi ka Maqbara
 - ☐ 4. Allahabad Mahal

Question ID : 6549788234
Status : Answered
Chosen Option : 3

Q.2 In which year was Jharkhand made a separate state of India?

- Ans
- ☐ 1. 1997
 - ☐ 2. 1999
 - ☐ 3. 2004
 - ☒ 4. 2000

Question ID : 6549788334
Status : Answered
Chosen Option : 3

Q.3 As on 2019, which is the largest multinational bank company in the world as measured by total assets?

- Ans
- ☐ 1. State Bank of India
 - ☐ 2. National Savings Bank
 - ☒ 3. Industrial and Commercial Bank of China
 - ☐ 4. Agricultural Bank of China

Question ID : 6549788326
Status : Answered
Chosen Option : 1

Q.4 Which Indian state is surrounded by Bangladesh on its north, west and south?

- Ans
- ☒ 1. Tripura
 - ☐ 2. Assam
 - ☐ 3. Mizoram
 - ☐ 4. West Bengal

Question ID : 6549788331
Status : Answered
Chosen Option : 4

Q.5 Which Indian journalist was awarded the Windham-Campbell Prize 2019 for the book 'Farthest Field: An Indian Story of the Second World War'?

- Ans
- ☐ 1. Ashok Malik
 - ☒ 2. Raghu Karnad
 - ☐ 3. Dionne Bunsha
 - ☐ 4. Mrinal Pande

Question ID : 6549788236
Status : Not Answered
Chosen Option : --

Q.6 What was the theme for 11 February 2020, celebration of the United Nations International Day of Women and Girls in Science?

- Ans
- ☐ 1. Science for women empowerment
 - ☒ 2. Investment in Women and Girls in Science for Inclusive Green Growth
 - ☐ 3. Welcome the women and girl achievers in science
 - ☐ 4. Inclusive growth of women and girls in science

Question ID : 6549788324
Status : Marked For Review
Chosen Option : 3

Q.7 'Bauhche' is a traditional bridegroom's sword worn during a tribal wedding ceremony in:

- Ans
- ☐ 1. Andhra Pradesh
 - ☐ 2. Uttar Pradesh
 - ☐ 3. Madhya Pradesh
 - ☒ 4. Arunachal Pradesh

Question ID : 6549788219
Status : Answered
Chosen Option : 4

Q.8 _____ was the first athlete to win an Olympic medal for Sri Lanka.

- Ans
- ☐ 1. Parami Wasanthi Maristela
 - ☒ 2. Duncan White
 - ☐ 3. Greshan Dananjaya
 - ☐ 4. Susanthika Jayasinghe

Question ID : 6549788341
Status : Not Answered
Chosen Option : --

Q.9 In which year did Nepal adopt its first democratic constitution?

- Ans
- ☐ 1. 2010
 - ☒ 2. 2015
 - ☐ 3. 2013
 - ☐ 4. 2017

Question ID : 6549788339
Status : Answered
Chosen Option : 2

Q.10 Mario de Miranda was a _____ from the state of Goa.

- Ans
- ☐ 1. designer
 - ☐ 2. vocalist
 - ☒ 3. cartoonist
 - ☐ 4. poet

Question ID : 6549788336
Status : Not Answered
Chosen Option : --

Q.11 Which Indian sportsperson won a gold medal at the Para-badminton World Championship 2019?

- Ans
- ☐ 1. Deepa Malik
 - ☐ 2. Devendra Jhajharia
 - ☐ 3. Suhas Lalinakere Yathiraj
 - ☒ 4. Manasi Joshi

Question ID : 6549788239
Status : Not Answered
Chosen Option : --

Q.12 Which one of the following is a rare disease caused by the deficiency of Vitamin D that causes the bones to become soft and to bend?

- Ans
- ☐ 1. Pernicious anemia
 - ☐ 2. Atrophic gastritis
 - ☐ 3. Lupus
 - ☒ 4. Rickets

Question ID : 6549788329
Status : Answered
Chosen Option : 4

Q.13 What is the other name for 'transistor computer'?

- Ans
- ☒ 1. First Generation Computer
 - ☒ 2. Third Generation Computer
 - ☒ 3. Second Generation Computer
 - ☒ 4. Fourth Generation Computer

Question ID : 6549788319
Status : Answered
Chosen Option : 2

Q.14 'Maimata' is a popular dance of the Kaloi community from the state of ____.

- Ans
- ☒ 1. Chattisgarh
 - ☒ 2. Odisha
 - ☒ 3. Tripura
 - ☒ 4. Assam

Question ID : 6549788321
Status : Not Answered
Chosen Option : --

Q.15 Annu Rani is the first Indian woman to cross a distance of 60 m in ____ throw.

- Ans
- ☒ 1. javelin
 - ☒ 2. discus
 - ☒ 3. Shot put
 - ☒ 4. hammer

Question ID : 6549788241
Status : Answered
Chosen Option : 4

Q.16 The rivers Damodar, Brahmani and Kharkai originate from the state of ____ in India.

- Ans
- ☒ 1. Jharkhand
 - ☒ 2. Madhya Pradesh
 - ☒ 3. Chhattisgarh
 - ☒ 4. Haryana

Question ID : 6549788231
Status : Not Answered
Chosen Option : --

Q.17 _____ glands release tears from our eyes.

- Ans
- ☒ 1. Thyroid
 - ☒ 2. Adrenal
 - ☒ 3. Pituitary
 - ☒ 4. Lacrimal

Question ID : 6549788327
Status : Answered
Chosen Option : 4

Q.18 In which year was the Bombay Stock Exchange established?

- Ans
- ☒ 1. 1864
 - ☒ 2. 1893
 - ☒ 3. 1875
 - ☒ 4. 1882

Question ID : 6549788224
Status : Answered
Chosen Option : 3

Q.19 In January 2020, _____ has secured a top position among the 115 aspirational districts that received grading on a system devised by the NITI Aayog.

- Ans
- ☒ 1. Sukma
 - ☒ 2. Jagdalpur
 - ☒ 3. Jashpur
 - ☒ 4. Gariaband

Question ID : 6549788222
Status : Not Answered
Chosen Option : --

Q.20 Who created FORTRAN – the first high-level computer programming language?

- Ans
- ☒ 1. Dan Bricklin
 - ☒ 2. Marc Andreessen
 - ☒ 3. Larry Ellison
 - ☒ 4. John Backus

Question ID : 6549788217
Status : Not Answered
Chosen Option : --

Q.21 In which year did the state of Himachal Pradesh come into existence?

- Ans ☒ 1. 1971
☐ 2. 1947
☐ 3. 1956
☐ 4. 1965

Question ID : 6549788237
Status : Not Answered
Chosen Option : --

Q.22 'Sandalwood' is the state tree of ____.

- Ans ☐ 1. Madhya Pradesh
☒ 2. Karnataka
☐ 3. Punjab
☐ 4. Rajasthan

Question ID : 6549788232
Status : Answered
Chosen Option : 1

Q.23 Which river is adored by some as 'the Ganga of the South'?

- Ans ☐ 1. Narmada
☐ 2. Godavari
☒ 3. Kaveri
☐ 4. Krishna

Question ID : 6549788330
Status : Answered
Chosen Option : 2

Q.24 Which Indian sportsperson won the 'World Games Athlete of the Year' award in January 2020?

- Ans ☒ 1. Rani Rampal
☐ 2. Mary Kom
☐ 3. PV Sindhu
☐ 4. Koneru Humpy

Question ID : 6549788221
Status : Answered
Chosen Option : 2

Q.25 Which of the following is the largest dental tissue?

Ans



1. Dentin



2. Pulp



3. Enamel



4. Root

Question ID : 6549788227

Status : Answered

Chosen Option : 3




Combined Higher Secondary Level Examination 2020 (Tier-I)

Roll Number	Join Telegram: HaryanaJobs.in
Candidate Name	
Venue Name	
Exam Date	12/08/2021
Exam Time	9:00 AM - 10:00 AM
Subject	Combined Higher Secondary Level Exam 2020

Section : English Language

Q.1 Select the most appropriate option to substitute the underlined segment in the given sentence. If there is no need to substitute it, select 'No improvement'.





Did you do what I telling you to do yesterday?

- Ans  1. what I told you
-  2. that I am telling you
-  3. No improvement
-  4. what I have told you

Question ID : 6549787851
Status : Answered
Chosen Option : 1

Q.2 Select the most appropriate word to fill in the blank in the given sentence.

Unable to check her _____, Alice ran after the rabbit down the rabbit hole.

- Ans  1. nervousness
-  2. pleasure
-  3. wisdom
-  4. curiosity

Question ID : 6549787862
Status : Answered
Chosen Option : 4

Q.3 Fill in the blank with most appropriate word.

Thunder and lightning was _____ with heavy rain.

- Ans  1. accrued
-  2. accorded
-  3. accompanied
-  4. accustomed

Question ID : 6549789479
Status : Answered
Chosen Option : 3

Q.4 Select the most appropriate antonym of the given word.


MORBID

- Ans  1. horrid
 2. cheerful
 3. gloomy
 4. cruel

Question ID : 6549789469
Status : Answered
Chosen Option : 2

Q.5 Select the correct passive form of the given sentence.





Mary Kom has won numerous boxing championships.

- Ans  1. Numerous boxing championships are being won by Mary Kom.
 2. Numerous boxing championships have been won by Mary Kom.
 3. Numerous boxing championships were won by Mary Kom.
 4. Numerous boxing championships had been won by Mary Kom.

Question ID : 6549789454
Status : Answered
Chosen Option : 2

Q.6 Select the correct indirect form of the given sentence.

My brother said to me, "Have you read the newspaper today?"

- Ans  1. My brother asked me if you have read the newspaper today.
 2. My brother asked me if I had read the newspaper today.
 3. My brother asked me if I had read the newspaper that day.
 4. My brother asked me have you read the newspaper today.

Question ID : 6549787839
Status : Answered
Chosen Option : 3

Q.7 Select the most appropriate ANTONYM of the given word.

AVOID

- Ans  1. Meet
 2. Avert
 3. Bypass
 4. Dodge

Question ID : 6549787852
Status : Answered
Chosen Option : 1

Q.8 Select the most appropriate option to substitute the underlined segment in the given sentence. If there is no need to substitute it, select 'No substitution'.

The interview will be conducted by 9 a.m. till 11 a.m.

- Ans
- ☒ 1. No substitution
 - ☒ 2. during 9 a.m. till 11 a.m.
 - ☒ 3. from 9 a.m. to 11 a.m.
 - ☒ 4. from 9 a.m. until 11 a.m.

Question ID : 6549789466

Status : Answered

Chosen Option : 3

Q.9 Select the most appropriate synonym of the given word.

ANTICIPATE

- Ans
- ☒ 1. Prefer
 - ☒ 2. Accept
 - ☒ 3. Expect
 - ☒ 4. Doubt

Question ID : 6549787860

Status : Answered

Chosen Option : 3

Q.10 Select the misspelt word.

- Ans
- ☒ 1. struggle
 - ☒ 2. propel
 - ☒ 3. fulfil
 - ☒ 4. several

Question ID : 6549789472

Status : Answered

Chosen Option : 3

Q.11 Given below are four jumbled sentences. Out of the given options pick the one that gives their correct order.

- A. The town of Lustenau in Austria claims to have built a world record-breaking bonfire.
- B. The structure took three months to build but collapsed in less than half an hour last Saturday evening.
- C. Embers from the big fire fell onto nearby market traders, but local fire crews were on hand to make sure that everyone was safe.
- D. According to the organizers, the pyre reached as high as 60 meters.

- Ans
- ☒ 1. ABCD
 - ☒ 2. ADBC
 - ☒ 3. ACBD
 - ☒ 4. ABDC

Question ID : 6549787848

Status : Answered

Chosen Option : 1

Q.12 In the given sentence, identify the segment which contains a grammatical error.

Please refrain to going out without a face mask.

- Ans
- ☒ 1. without a
 - ☒ 2. going out
 - ☒ 3. Please refrain to
 - ☒ 4. face mask

Question ID : 6549789457
Status : Answered
Chosen Option : 3

Q.13 Select the word which means the same as the group of words given.

An institution for the care of people who are mentally ill

- Ans
- ☒ 1. Asylum
 - ☒ 2. Sanatorium
 - ☒ 3. Dormitory
 - ☒ 4. Infirmary

Question ID : 6549787859
Status : Answered
Chosen Option : 2

Q.14 Select the most appropriate one-word substitution for the given words.

one who investigates and solves crimes

- Ans
- ☒ 1. lawyer
 - ☒ 2. criminal
 - ☒ 3. detective
 - ☒ 4. journalist

Question ID : 6549789474
Status : Answered
Chosen Option : 3

Q.15 In the given sentence identify the segment which contains the grammatical error.

Vincent Jonson, a musician, are going to lead an 80-man naval band in the Republic Day Parade this year.

- Ans
- ☒ 1. are going to lead
 - ☒ 2. an 80-man naval band
 - ☒ 3. Vincent Jonson, a musician
 - ☒ 4. in the Republic Day Parade this year

Question ID : 6549787840
Status : Answered
Chosen Option : 1

Q.16 Given below are four sentences in jumbled order. Select the option that gives their correct order.

- A. He seemed to remain that high for nearly two years.
- B. Kari, the elephant was five months old when he was given to me to take care of.
- C. We grew together, that is probably why I never found out just how tall he was.
- D. I was nine years old and I could reach his back if I stood on tiptoe.

Ans  1. BDAC

 2. BCAD

 3. ADCB

 4. DBCA

Question ID : 6549789465

Status : Answered

Chosen Option : 1

Q.17 Select the INCORRECTLY spelt word.

Ans  1. Location

 2. Education

 3. Meditation

 4. Aversion

Question ID : 6549787857

Status : Answered

Chosen Option : 4


Q.18 Select the most appropriate meaning of the given idiom.

Full of beans

Ans  1. Happy and energetic

 2. Sad and dull

 3. Being foolish

 4. Have crazy ideas

Question ID : 6549787854

Status : Answered

Chosen Option : 4

Q.19 Select the most appropriate synonym of the given word.

JEOPARDY

Ans  1. peril

 2. destiny

 3. safety

 4. fortune

Question ID : 6549789477

Status : Answered

Chosen Option : 1

Q.20 Select the most appropriate meaning of the underlined idiom in the given sentence.

Their marriage wasn't working but they kept up appearances.

- Ans**
- ☒ 1. maintained an expression of well being
 - ☐ 2. maintained peace and harmony
 - ☐ 3. kept throwing parties
 - ☐ 4. revealed the truth

Question ID : **6549789471**

Status : **Answered**

Chosen Option : **1**

Comprehension:

In the following passage, some words have been deleted. Fill in the blanks with the help of the alternatives given. Select the most appropriate option for each number.

Seventy-year-old Bapak Gilang sat in his favourite rocking chair in his (1) _____ villa. He was staring at the evening sky (2) _____ the open window. It was already (3) _____ and it was very windy. He (4) _____ the dark clouds and felt a little (5) _____ today. He reflected that like the dusk sky, his days were also wrapped in clouds of loneliness.

SubQuestion No : 21

Q.21 Select the most appropriate option to fill in the blank no. 1.

- Ans**
- ☐ 1. specific
 - ☐ 2. spreading
 - ☐ 3. spiral
 - ☒ 4. spacious

Question ID : **6549789459**

Status : **Answered**

Chosen Option : **4**

Comprehension:

In the following passage, some words have been deleted. Fill in the blanks with the help of the alternatives given. Select the most appropriate option for each number.

Seventy-year-old Bapak Gilang sat in his favourite rocking chair in his (1) _____ villa. He was staring at the evening sky (2) _____ the open window. It was already (3) _____ and it was very windy. He (4) _____ the dark clouds and felt a little (5) _____ today. He reflected that like the dusk sky, his days were also wrapped in clouds of loneliness.

SubQuestion No : 22

Q.22 Select the most appropriate option to fill in the blank no. 2.

- Ans**
- ☐ 1. with
 - ☐ 2. among
 - ☐ 3. between
 - ☒ 4. through

Question ID : **6549789460**

Status : **Answered**

Chosen Option : **4**

Comprehension:

In the following passage, some words have been deleted. Fill in the blanks with the help of the alternatives given. Select the most appropriate option for each number.

Seventy-year-old Bapak Gilang sat in his favourite rocking chair in his (1) _____ villa. He was staring at the evening sky (2) _____ the open window. It was already (3) _____ and it was very windy. He (4) _____ the dark clouds and felt a little (5) _____ today. He reflected that like the dusk sky, his days were also wrapped in clouds of loneliness.

SubQuestion No : 23

Q.23 Select the most appropriate option to fill in the blank no. 3.

Ans



1. dusk



2. noon



3. morning



4. dawn

Question ID : **6549789461**

Status : **Answered**

Chosen Option : **1**

Comprehension:

In the following passage, some words have been deleted. Fill in the blanks with the help of the alternatives given. Select the most appropriate option for each number.

Seventy-year-old Bapak Gilang sat in his favourite rocking chair in his (1) _____ villa. He was staring at the evening sky (2) _____ the open window. It was already (3) _____ and it was very windy. He (4) _____ the dark clouds and felt a little (5) _____ today. He reflected that like the dusk sky, his days were also wrapped in clouds of loneliness.

SubQuestion No : 24

Q.24 Select the most appropriate option to fill in the blank no. 4.

Ans



1. glanced



2. peered



3. stared



4. observed

Question ID : **6549789462**

Status : **Answered**

Chosen Option : **4**

Comprehension:

In the following passage, some words have been deleted. Fill in the blanks with the help of the alternatives given. Select the most appropriate option for each number.

Seventy-year-old Bapak Gilang sat in his favourite rocking chair in his (1) _____ villa. He was staring at the evening sky (2) _____ the open window. It was already (3) _____ and it was very windy. He (4) _____ the dark clouds and felt a little (5) _____ today. He reflected that like the dusk sky, his days were also wrapped in clouds of loneliness.

SubQuestion No : 25

Q.25 Select the most appropriate option to fill in the blank no. 5.

- Ans ☒ 1. pensive
☒ 2. innocent
☒ 3. attentive
☒ 4. delighted

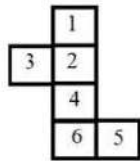
Question ID : 6549789463

Status : Answered

Chosen Option : 1

Section : General Intelligence

Q.1 A cube is made by folding the given sheet. In the cube so formed, which of the following pairs of numbers will be on opposite sides?



- Ans ☒ 1. 2 and 3
☒ 2. 1 and 6
☒ 3. 3 and 5
☒ 4. 1 and 2

Question ID : 6549787882

Status : Answered

Chosen Option : 3

Q.2 Select the option that is related to the third term in the same way as the second term is related to the first term.

Healthy Diet : Tiredness :: Carefulness : ?

- Ans ☒ 1. Activeness
☒ 2. Satisfied
☒ 3. Accident
☒ 4. Successful

Question ID : 6549789491

Status : Answered

Chosen Option : 3

Q.3 Select the correct option that indicates the arrangement of the given words in the order in which they appear in an English dictionary.

1. Indiscipline
2. Indetermination
3. Indelicate
4. Indictable
5. Independent

Ans  1. 3, 5, 2, 4, 1

 2. 2, 3, 5, 1, 4

 3. 2, 3, 5, 4, 1

 4. 3, 2, 5, 1, 4

Question ID : 6549787871

Status : Answered

Chosen Option : 1

Q.4 In a code language, LANCER is written as NALREC. How will NORWAY be written in that language?

Ans  1. RONYAW

 2. YAWRON

 3. YAWNOR

 4. RNOYAW

Question ID : 6549789488

Status : Answered

Chosen Option : 1

Q.5 Select the number that can replace the question mark (?) in the following series.

46, 47, 94, 97, 388, ?

Ans  1. 398

 2. 393

 3. 419

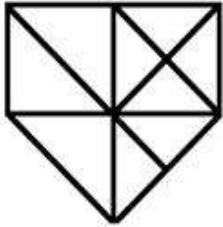
 4. 411

Question ID : 6549789485

Status : Answered

Chosen Option : 2

Q.6 Find the number of triangles in the given figure.



- Ans
- ☒ 1. 17
 - ☐ 2. 19
 - ☐ 3. 15
 - ☐ 4. 13

Question ID : 6549787884

Status : Answered

Chosen Option : 1

Q.7 Select the combination of letters that when sequentially placed in the blanks of the given series will complete the series.

_ k l _ l j _ j k j _ l _ l j

- Ans
- ☐ 1. j l k l k
 - ☐ 2. k j l l k
 - ☐ 3. l k l j k
 - ☒ 4. j k l k k

Question ID : 6549787068

Status : Answered

Chosen Option : 4

Q.8 Select the option in which the words share the same relationship as that shared by the given pair of words.

Sheep : Lamb

- Ans
- ☐ 1. Leopard : Larva
 - ☒ 2. Cow : Calf
 - ☐ 3. Crow : Cub
 - ☐ 4. Panda : Infant

Question ID : 6549787878

Status : Answered

Chosen Option : 2

Q.9 Select the option figure which is embedded in figure X as its part (rotation is NOT allowed).



Figure X

Ans

✗ 1.



✗ 2.



✗ 3.



✓ 4.



Question ID : 6549789501

Status : Answered

Chosen Option : 4

Q.10 Which two numbers should be interchanged to make the given equation correct?

$$64 + 36 \div 3 \times 9 - 32 = 44$$

Ans

✓ 1. 3 and 9

✗ 2. 32 and 36

✗ 3. 64 and 36

✗ 4. 9 and 64

Question ID : 6549789481

Status : Answered

Chosen Option : 1

Q.11 Four letter-clusters have been given, out of which three are alike in some manner and one is different. Select the letter-cluster that is different.

Ans

✗ 1. WBYT

✗ 2. YDWR

✓ 3. MRGB

✗ 4. CHSN

Question ID : 6549787879

Status : Answered

Chosen Option : 3

Q.12 In a certain code language, GATHER is coded as 107 and HONOUR is coded as 74. How will HEAVEN be coded in that language?

- Ans
- ☒ 1. 131
 - ☒ 2. 101
 - ☒ 3. 110
 - ☒ 4. 113

Question ID : 6549787873
Status : Answered
Chosen Option : 3

Q.13 Select the option that is related to the third number in the same way as the second number is related to the first number.

364 : 183 :: 462 : ?

- Ans
- ☒ 1. 297
 - ☒ 2. 279
 - ☒ 3. 232
 - ☒ 4. 223

Question ID : 6549787866
Status : Answered
Chosen Option : 3

Q.14 Four numbers have been given, out of which three are alike in some manner and one is different. Select the number that is different.

- Ans
- ☒ 1. 1587
 - ☒ 2. 3462
 - ☒ 3. 1273
 - ☒ 4. 5789

Question ID : 6549787870
Status : Answered
Chosen Option : 2

Q.15 Three of the following four words are alike in a certain way and one is different. Select the odd one.

- Ans
- ☒ 1. Newspaper
 - ☒ 2. Magazine
 - ☒ 3. Publisher
 - ☒ 4. Book

Question ID : 6549789496
Status : Answered
Chosen Option : 3

Q.16 Ranjan in his ODI Cricket career, scored 15 runs on an average in 10 matches. If he scored 14 runs on an average in the first 4 matches and 12 runs on an average in the last 4 matches, then find the average of the runs scored by him in the remaining 2 matches.

- Ans
- ☒ 1. 24
 - ☒ 2. 23
 - ☒ 3. 25
 - ☒ 4. 22

Question ID : 6549787864
Status : Answered
Chosen Option : 2

Q.17 Select the correct water image of the given letter-cluster.

EDZMKA

- Ans
- ☒ 1. EDZMKV
 - ☒ 2. EDZMKV
 - ☒ 3. EDZMKV
 - ☒ 4. EDZMKV

Question ID : 6549789503
Status : Answered
Chosen Option : 2

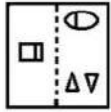
Q.18 Select the Venn diagram that best represents the relationship between the following classes.

Ridge Gourd, Vegetables, Turnip

- Ans
- ☒ 1.
 - ☒ 2.
 - ☒ 3.
 - ☒ 4.

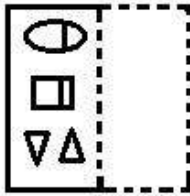
Question ID : 6549787888
Status : Answered
Chosen Option : 3

Q.19 A transparent sheet with a pattern is depicted in the given figure. Study the figure carefully and select the option that shows how the pattern would appear when the transparent sheet is folded at the dotted line.

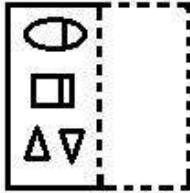


Ans

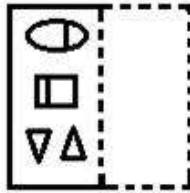
✓ 1.



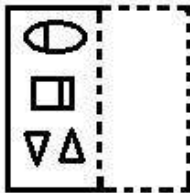
✗ 2.



✗ 3.



✗ 4.



Question ID : 6549789502

Status : Answered

Chosen Option : 1

Q.20 एक लड़के का परिचय देते हुए, लीला ने एना से कहा, "वह मेरे दादा-दादी के इकलौते बच्चे का इकलौता पुत्र है"। लड़का लीला से किस प्रकार संबंधित है?

Ans

✗ 1. पिता

✗ 2. चाचा

✗ 3. चचेरा भाई

✓ 4. भाई

Question ID : 6549788685

Status : Answered

Chosen Option : 4

Q.21 Select the option that is related to the third letter-cluster in the same way as the second letter-cluster is related to the first letter-cluster.

PLMO : PNMQ :: UDMS : ?

- Ans
- ☐ 1. RNEJ
 - ☐ 2. TQFV
 - ☐ 3. TNCA
 - ☒ 4. TNEV

Question ID : 6549789490

Status : Not Answered

Chosen Option : --

Q.22 Select the option in which the numbers share the same relationship as that shared by the numbers of the given set.

(277, 14, 9)

- Ans
- ☐ 1. (364, 11, 12)
 - ☐ 2. (123, 17, 8)
 - ☒ 3. (313, 12, 13)
 - ☐ 4. (198, 15, 8)

Question ID : 6549789483

Status : Answered

Chosen Option : 3

Q.23 Study the given pattern carefully and select the number that can replace the question mark (?) in it.

12 15 11
14 5 17
16 ? 19

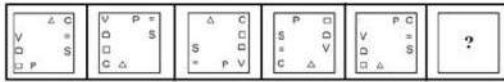
- Ans
- ☐ 1. 9
 - ☒ 2. 7
 - ☐ 3. 5
 - ☐ 4. 3

Question ID : 6549787868

Status : Not Answered

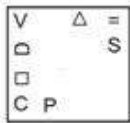
Chosen Option : --

Q.24 Select the figure from among the given options that can replace the question mark (?) in the following series.

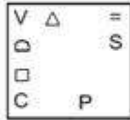


Ans

✓ 1.



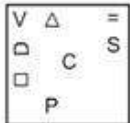
✗ 2.



✗ 3.



✗ 4.



Question ID : 6549787883

Status : Answered

Chosen Option : 1

Q.25 Two statements are given, followed by three conclusions numbered I, II and III. Assuming the statements to be true, even if they seem to be at variance with commonly known facts, decide which of the conclusions logically follow(s) from the statements.

Statements:

All roads are cycles.

No cycle is a car.

Conclusions:

I. Some cycles are roads.

II. No road is a car.

III. No car is a cycle.

Ans

✓ 1.

All the conclusions follow

✗ 2.

Only conclusions I and III follow

✗ 3.

Only conclusions II and III follow

✗ 4.

Only conclusions I and II follow

Question ID : 6549789497

Status : Answered

Chosen Option : 1

Q.1 A sum of ₹ x is divided among A, B and C such that the ratio of the shares of A and C is 8 : 7 and that of B and C is 3 : 2. If the difference between the shares of A and B is ₹240, then what is the value of x ?

- Ans**
- ☒ 1. 2544
 - ☒ 2. 2580
 - ☒ 3. 2490
 - ☒ 4. 2448

Question ID : 6549787896
Status : Answered
Chosen Option : 4

Q.2 If a pair of shoes marked at ₹350 is offered at ₹308, then what will be the discount percentage?

- Ans**
- ☒ 1. 42%
 - ☒ 2. 13.6%
 - ☒ 3. 12%
 - ☒ 4. 14%

Question ID : 6549789509
Status : Answered
Chosen Option : 3

Q.3 In $\triangle ABC$, AD is the bisector of $\angle A$ meeting BC at D . If $AB = 15$ cm, $BC = 10$ cm and the length of BD is 2 cm less than that of DC , then the length of AC is:


- Ans**
- ☒ 1. 18.5 cm
 - ☒ 2. 18 cm
 - ☒ 3. 16 cm
 - ☒ 4. 22.5 cm


Question ID : 6549787900
Status : Answered
Chosen Option : 4


Q.4 Simplify the following expression.


$$\frac{13\frac{7}{9} \div \frac{2}{3} \text{ of } \frac{1}{3} + \frac{2}{3} \times 3}{\frac{7}{5} \text{ of } 325 - 20 + 7}$$

Ans

 1. $\frac{40}{1989}$

 2. $\frac{31}{2210}$

 3. $\frac{32}{221}$

 4. $\frac{33}{217}$

Question ID : 6549789522

Status : Answered

Chosen Option : 3

Q.5 The value of $\operatorname{cosec}(58^\circ + \theta) - \sec(32^\circ - \theta) + \sin 15^\circ \sin 35^\circ \sec 55^\circ \sin 30^\circ \sec 75^\circ$ is:

Ans

 1. 1

 2. 2

 3. $\frac{1}{2}$

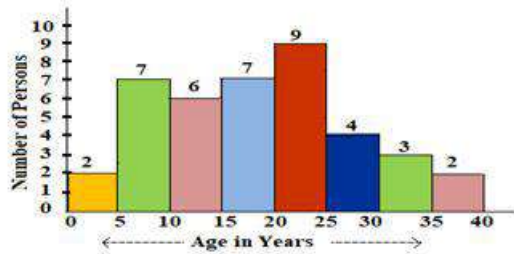
 4. 0

Question ID : 6549787908

Status : Answered

Chosen Option : 3

Q.6 Some persons went on an outstation tour. The histogram shows their ages.



How many persons are less than 20 years of age?

- Ans
- ☒ 1. 22
 - ☐ 2. 31
 - ☐ 3. 25
 - ☐ 4. 18

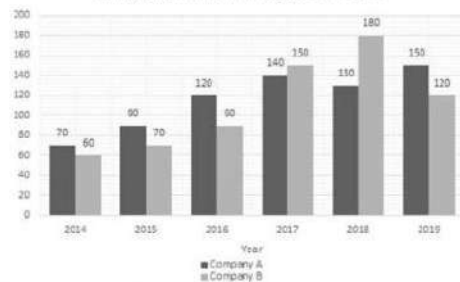
Question ID : 6549789526

Status : Answered

Chosen Option : 1

Q.7 Study the given graph and answer the question that follows.

Production (in lakh tonnes) of paper by two companies A and B during 2014 to 2019



The total production of paper by company B in 2015 and 2017 to 2019 was what percentage less than 90% of the total production of paper by company A in 2014 to 2019 (correct to one decimal place)?

- Ans
- ☐ 1. 22.4%
 - ☐ 2. 19.6%
 - ☐ 3. 21.2%
 - ☒ 4. 17.5%

Question ID : 6549787913

Status : Answered

Chosen Option : 4

Q.8 In $\triangle ABC$, D and E are points on AB and BC, respectively, such that DE is parallel to AC. If DE = 3 cm, AC = 5 cm and the area of trapezium ACED = 32 cm^2 , then what will be the area of $\triangle BDE$?

- Ans
- ☒ 1. $\frac{144}{17} \text{ cm}^2$
 - ☒ 2. $\frac{48}{5} \text{ cm}^2$
 - ☒ 3. 16 cm^2
 - ☒ 4. 18 cm^2

Question ID : 6549789517


Status : Answered

Chosen Option : 4

Q.9 Study the given pie chart and answer the question that follows.

Total number of students admitted in a college = 700.

Distribution of the percentage of students in various courses.



Percentage-wise distribution of the number of boys.

Course	Number of boys
B.Sc. Maths	40%
B.Sc. Physics	68%
B.Sc. Chemistry	58%
B.Sc. Computer Science	80%
B.Com.	75%
BBA	65%

The ratio of the total number of girls admitted in B.Sc. Maths to the total number of students admitted in B.Sc. Maths is:

- Ans
- ☒ 1. 3 : 7
 - ☒ 2. 4 : 7
 - ☒ 3. 3 : 5
 - ☒ 4. 2 : 5

Question ID : 6549789629

Status : Answered

Chosen Option : 2

Q.10 In a circle with centre O and radius 6.5 cm, a chord AB is at a distance 2.5 cm from the centre. If tangents at A and B intersect at P, then find the distance of P from the centre.

- Ans ☒ 1. 16.9 cm
☒ 2. 18 cm
☒ 3. 15 cm
☒ 4. 17 cm

Question ID : 6549789515

Status : Answered

Chosen Option : 1

Q.11 What is the compound interest (in ₹) on a sum of ₹46,000 for $2\frac{2}{5}$ years at 15% per annum, interest being compounded annually (nearest to a ₹)?

- Ans ☒ 1. 18,458
☒ 2. 18,485
☒ 3. 19,485
☒ 4. 19,458

Question ID : 6549787897

Status : Answered

Chosen Option : 3

Q.12 If $\sqrt{x} + \frac{1}{\sqrt{x}} = 2\sqrt{3}$, then what will be the value of $x^4 + \frac{1}{x^4}$?

- Ans ☒ 1. 10402
☒ 2. 9606
☒ 3. 9602
☒ 4. 10406

Question ID : 6549789519

Status : Answered

Chosen Option : 3

Q.13 If $3x - 2y + 3 = 0$, then what will be the value of $27x^3 + 54xy + 30 - 8y^3$?

- Ans ☒ 1. -27
☒ 2. 57
☒ 3. -57
☒ 4. 3

Question ID : 6549789520

Status : Answered

Chosen Option : 4

Q.14 Chords AB and CD of a circle meet at point P (outside the circle), when produced. If $AB = 9$ cm, $PB = \frac{1}{3}AB$ and $CD = 5$ cm, then the length of PD (in cm) is:

- Ans
- ☐ 1. 7
 - ☐ 2. 6
 - ☐ 3. 5
 - ☒ 4. 4

Question ID : 6549787898

Status : Answered

Chosen Option : 4

Q.15 By selling an article for ₹3,150, a shopkeeper earns 5% profit. For how much money should he sell the article in order to gain 8%?

- Ans
- ☒ 1. ₹3,240
 - ☐ 2. ₹3,180
 - ☐ 3. ₹3,200
 - ☐ 4. ₹3,250

Question ID : 6549789511

Status : Answered

Chosen Option : 1

Q.16 Given that $3\sqrt{3}x^3 - 8y^3 = (\sqrt{3}x + Ay)(3x^2 + By^2 + Cxy)$, the value of $(A^2 + B^2 - C^2)$ is:

- Ans
- ☐ 1. 4
 - ☒ 2. 8
 - ☐ 3. 12
 - ☐ 4. 0

Question ID : 6549787902

Status : Answered

Chosen Option : 2

Q.17 A solid metallic sphere of radius 12 cm is melted and recast in the form of small spheres of radius 2 cm. How many small spheres are formed?

- Ans
- ☐ 1. 24
 - ☐ 2. 96
 - ☐ 3. 864
 - ☒ 4. 216

Question ID : 6549789507

Status : Answered

Chosen Option : 4

Q.18 A tap can fill a tank in 4 hours. Another tap can fill the same tank in 6 hours. If both the taps are opened at the same time, then in how much time will the empty tank be filled completely?

- Ans
- ☒ 1. 2 h 30 min
 - ☒ 2. 2 h 24 min
 - ☐ 3. 3 h
 - ☐ 4. 2 h

Question ID : 6549789505

Status : Answered

Chosen Option : 2

Q.19 If $\tan 3\theta = \sin 45^\circ \cdot \cos 45^\circ + \cos 60^\circ$ and 3θ is an acute angle, then what will be the value of $\sin 4\theta$?

- Ans
- ☒ 1. $\frac{\sqrt{3}}{2}$
 - ☐ 2. $\frac{1}{\sqrt{2}}$
 - ☐ 3. $\frac{1}{2}$
 - ☐ 4. 1

Question ID : 6549789523

Status : Answered

Chosen Option : 1

Q.20 A boat can go 15 km downstream and 8 km upstream in 2 h. It can go 20 km downstream and 12 km upstream in 2 h 50 min. What is the speed (in km/h) of the boat while going downstream?

- Ans
- ☐ 1. 16
 - ☒ 2. 15
 - ☐ 3. 20
 - ☐ 4. 18

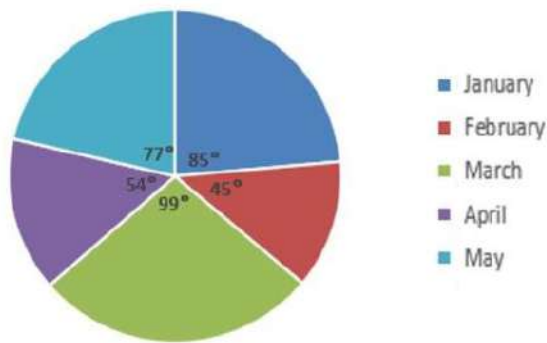
Question ID : 6549787890

Status : Answered

Chosen Option : 2

- Q.21** Study the given pie chart and answer the question that follows.
The pie chart shows the distribution (degree wise) of the number of computers sold by a shopkeeper during five months.

Total Number of Computers Sold = 5400



If the difference between the number of computers sold in May and the number of computers sold in February is x , then the value of x will be:

- Ans**
- ☒ 1. 450
 - ☒ 2. 480
 - ☒ 3. 540
 - ☒ 4. 420

Question ID : 6549787003

Status : **Answered**

Chosen Option : 1

- Q.22** The average of 40 numbers is 48.2. The average of the first 15 numbers is 45 and that of the next 22 numbers is 50.5.
The 38th number is 1 more than the 39th number, and the 39th number is 3 less than the 40th number. What is the average of the 39th and 40th numbers?

- Ans**
- ☒ 1. 48
 - ☒ 2. 49
 - ☒ 3. 47.5
 - ☒ 4. 48.5

Question ID : 6549787892

Status : **Answered**

Chosen Option : 4

- Q.23** If the five-digit number $457ab$ is divisible by 3, 7 and 11, then what is the value of $a^2 + b^2 - ab$?

- Ans**
- ☒ 1. 49
 - ☒ 2. 36
 - ☒ 3. 24
 - ☒ 4. 33

Question ID : 6549787905

Status : **Not Answered**

Chosen Option : --

Q.24 Renu spends 68% of her income. When her income increases by 40%, she increases her expenditure by 30%. Her savings are increased by:

- Ans
- ☒ 1. 62.5%
 - ☒ 2. 37.98%
 - ☒ 3. 61.25%
 - ☒ 4. 51.6%

Question ID : **6549787894**
Status : **Answered**
Chosen Option : **1**

Q.25 If $\tan \theta + \cot \theta = 3$, then what will be the value of $\tan^2 \theta + \cot^2 \theta$?

- Ans
- ☒ 1. 1
 - ☒ 2. 7
 - ☒ 3. 11
 - ☒ 4. -1

Question ID : **6549789525**
Status : **Answered**
Chosen Option : **2**

Section : **General Awareness**

Q.1 Coringa is a beautiful _____ forest where the Godavari joins the backwaters of Bay of Bengal.

- Ans
- ☒ 1. evergreen
 - ☒ 2. coniferous
 - ☒ 3. mangrove
 - ☒ 4. deciduous

Question ID : **6549787929**
Status : **Answered**
Chosen Option : **1**

Q.2 Arthunkal Feast and Vettukad Festival are church festivals from the state of _____.

- Ans
- ☒ 1. Nagaland
 - ☒ 2. Goa
 - ☒ 3. Sikkim
 - ☒ 4. Kerala

Question ID : **6549789533**
Status : **Answered**
Chosen Option : **1**

Q.3 Who among the following has received the Female Sportsperson of the Year Award at the FICCI India Sports Award in December 2020?

- Ans**
- ☐ 1. Saina Nehwal
 - ☐ 2. Manu Bhakhar
 - ☐ 3. Deepika Kumari
 - ☒ 4. Elavenil Valarivan

Question ID : **6549787938**
Status : **Answered**
Chosen Option : **2**

Q.4 Which Indian state is divided into Majha, Doaba and Malwa regions?

- Ans**
- ☐ 1. Assam
 - ☐ 2. Karnataka
 - ☒ 3. Punjab
 - ☐ 4. Madhya Pradesh

Question ID : **6549789543**
Status : **Answered**
Chosen Option : **4**

Q.5 Who is the second Indian footballer to play 100 international games?

- Ans**
- ☐ 1. Bhaichung Bhutia
 - ☒ 2. Sunil Chhetri
 - ☐ 3. Gurpreet Singh Sandhu
 - ☐ 4. Udanta Singh

Question ID : **6549789553**
Status : **Answered**
Chosen Option : **2**

Q.6 Rain is liquid ____.

- Ans**
- ☒ 1. precipitation
 - ☐ 2. condensation
 - ☐ 3. decantation
 - ☐ 4. sedimentation

Question ID : **6549789541**
Status : **Answered**
Chosen Option : **1**

Q.7 In which of the following years did the Indian National Congress make the demand for a Constituent Assembly?

- Ans
- ☒ 1. 1939
 - ☒ 2. 1919
 - ☒ 3. 1928
 - ☒ 4. 1934

Question ID : 6549787934

Status : Answered

Chosen Option : 4

Q.8 For the residents of which of the following union territories PM Narendra Modi has launched Ayushman Bharat - Pradhan Mantri Jan Arogya Yojna (AB - PMJAY) 'Sehat Scheme' in December 2020?

- Ans
- ☒ 1. Jammu and Kashmir
 - ☒ 2. Ladakh
 - ☒ 3. Chandigarh
 - ☒ 4. Puducherry

Question ID : 6549787918

Status : Answered

Chosen Option : 1

Q.9 The Indian Mutiny of 1857 effectively ended in the city of ____.

- Ans
- ☒ 1. Gwalior
 - ☒ 2. Amritsar
 - ☒ 3. Lucknow
 - ☒ 4. Vadodara

Question ID : 6549789546

Status : Answered

Chosen Option : 3

Q.10 In which of the following years PM-KISAN (Pradhan Mantri Kisan Samman Nidhi) was formally launched?

- Ans
- ☒ 1. 2019
 - ☒ 2. 2014
 - ☒ 3. 2015
 - ☒ 4. 2017

Question ID : 6549787921

Status : Answered

Chosen Option : 3

Q.11 What is the pH value of acidic substances?

- Ans
- ☐ 1. Below 1.0
 - ☐ 2. Below 4.0
 - ☐ 3. Below 2.0
 - ☒ 4. Below 7.0

Question ID : 6549789539

Status : Answered

Chosen Option : 4

Q.12 Who among the following cricketers is the brand ambassador of a fantasy sports gaming platform, Paytm First Games?

- Ans
- ☒ 1. Sachin Tendulkar
 - ☐ 2. Rohit Sharma
 - ☐ 3. Yuvraj Singh
 - ☐ 4. Virat Kohli

Question ID : 6549787936

Status : Answered

Chosen Option : 3

Q.13 Which amendment of the Constitution of India incorporated Goa, Daman and Diu as the eighth union territory of India, by amending the First Schedule to the Constitution?

- Ans
- ☐ 1. 13th
 - ☐ 2. 10th
 - ☒ 3. 12th
 - ☐ 4. 18th

Question ID : 6549789551

Status : Not Answered

Chosen Option : --

Q.14 Chambal is a tributary of which of the following rivers?

- Ans
- ☐ 1. Narmada
 - ☒ 2. Yamuna
 - ☐ 3. Ganga
 - ☐ 4. Brahmaputra

Question ID : 6549787928

Status : Answered

Chosen Option : 2

Q.15 Who among the following became the first Indian-Kiwi woman to become a minister in New Zealand in 2020?

- Ans ☒ 1. Priyanka Radhakrishnan
☐ 2. Manisha Singh
☐ 3. Seema Verma
☐ 4. Anita Anand

Question ID : 6549789536
Status : Answered
Chosen Option : 1

Q.16 Who among the following was the first Indian to win the Miss World beauty pageant?

- Ans ☒ 1. Reita Faria
☐ 2. Aishwarya Rai
☐ 3. Diana Hayden
☐ 4. Priyanka Chopra

Question ID : 6549789548
Status : Answered
Chosen Option : 4

Q.17 Which of the following is a method of describing computer algorithms using a combination of natural language and programming language?

- Ans ☐ 1. Node
☒ 2. Pseudocode
☐ 3. Flowchart
☐ 4. Array

Question ID : 6549787914
Status : Answered
Chosen Option : 2

Q.18 _____ is a process of forming a thick oxide layer of aluminium.

- Ans ☐ 1. Galvanisation
☐ 2. Ductility
☐ 3. Corrosion
☒ 4. Anodising

Question ID : 6549787924
Status : Answered
Chosen Option : 3

Q.19 When is the National Consumer Rights Day observed in India every year?

- Ans
- ☐ 1. 13 March
 - ☐ 2. 2 October
 - ☒ 3. 24 December
 - ☐ 4. 24 November

Question ID : 6549787919
Status : Answered
Chosen Option : 3

Q.20 In which state will you find Mayurbhanj district, the last among the princely states, that merged with the state?

- Ans
- ☐ 1. Kerala
 - ☐ 2. Jharkhand
 - ☒ 3. Odisha
 - ☐ 4. Chhattisgarh

Question ID : 6549789542
Status : Answered
Chosen Option : 4

Q.21 _____ is an interpreted, high-level and general-purpose programming language.

- Ans
- ☒ 1. Python
 - ☐ 2. Spider
 - ☐ 3. Penguin
 - ☐ 4. Cookie

Question ID : 6549789531
Status : Answered
Chosen Option : 1

Q.22 Who among the following had authored 'Buddha Gaya: The Hermitage of Sakya Muni' in 1878?

- Ans
- ☐ 1. Alexander Cunningham
 - ☒ 2. Rajendralala Mitra
 - ☐ 3. HH Cole
 - ☐ 4. John Marshall

Question ID : 6549787931
Status : Answered
Chosen Option : 1

Q.23 NTPC and _____ have signed an MoU to set up a joint venture for 'renewable energy business'.

- Ans
- ☐ 1. Reliance Petroleum
 - ☐ 2. Coal India
 - ☐ 3. NHPC Limited
 - ☒ 4. ONGC

Question ID : 6549789538

Status : Answered

Chosen Option : 4

Q.24 Colonel (ret'd) Narendra Kumar, an Indian soldier and _____, passed away in December 2020.

- Ans
- ☒ 1. mountaineer
 - ☐ 2. singer
 - ☐ 3. boxer
 - ☐ 4. wrestler

Question ID : 6549787933

Status : Answered

Chosen Option : 3

Q.25 Kalbelia folk songs and dance forms are an expression of the Kalbelia community's traditional way of life. It is associated with which of the following states?

- Ans
- ☐ 1. Maharashtra
 - ☐ 2. Haryana
 - ☒ 3. Rajasthan
 - ☐ 4. Punjab

Question ID : 6549787916

Status : Answered

Chosen Option : 3

Combined Higher Secondary Level Examination 2020 (Tier-I)

Roll Number	Join Telegram: HaryanaJobs.in
Candidate Name	
Venue Name	
Exam Date	12/08/2021
Exam Time	12:00 PM - 1:00 PM
Subject	Combined Higher Secondary Level Exam 2020

Section : English Language

Q.1 In the given sentence, identify the segment which contains the grammatical error.

Despite warnings the driver continued to speed and have been caught by the traffic police.

- Ans
- ☒ 1. Despite warnings
 - ☒ 2. and have been caught
 - ☒ 3. the driver continued to speed
 - ☒ 4. by the traffic police

Question ID : 6549788952

Status : Answered

Chosen Option : 1

Q.2 Select the most appropriate option to fill in the blank.

It has been announced that after a gap of almost two months, domestic flight services will _____ from next week.

- Ans
- ☒ 1. retake
 - ☒ 2. advance
 - ☒ 3. proceed
 - ☒ 4. resume

Question ID : 6549786751

Status : Answered

Chosen Option : 4

Q.3 Select the most appropriate meaning of the given idiom.

Method to one's madness





- Ans
- ☒ 1. Being very neat and particular about details
 - ☒ 2. Seeming disorderly yet having a structure
 - ☒ 3. Always behaving like a mad person
 - ☒ 4. Not following rules and conventions

Question ID : 6549788966

Status : Answered

Chosen Option : 4





Q.4 Select the INCORRECTLY spelt word.

- Ans  1. problem
 2. proccesion
 3. proclaim
 4. procurement

Question ID : 6549786746
Status : Answered
Chosen Option : 2

Q.5 Given below are four jumbled sentences. Out of the given options, pick the one that gives their correct order.





- A. One day the tailor and his wife discovered that their son was not in the house.
B. The father went to the roadside and shouted, "John!"
C. No one answered.
D. They looked in the garden, and did not find him there.

- Ans  1. ADBC
 2. BACD
 3. ABDC
 4. BDAC

Question ID : 6549786737
Status : Answered
Chosen Option : 1

Q.6 In the given sentence, identify the segment which contains the grammatical error.





All the ladies of the colony assemble in the temple and prays together on Sunday evenings.

- Ans  1. assemble in the temple
 2. and prays together
 3. All the ladies of the colony
 4. on Sunday evenings

Question ID : 6549786729
Status : Answered
Chosen Option : 1

Q.7 Select the most appropriate ANTONYM of the given word.


MOROSE

- Ans  1. mournful
 2. gloomy
 3. cheerful
 4. sullen

Question ID : 6549786741
Status : Answered
Chosen Option : 1

Q.8 Examine the four jumbled sentences. Out of the given options, pick the one that gives their correct order.

- A. Wasserkopf returns to his school and asks for a refund of his tuition fee.
B. 'Refund' by Karinthy is a hilarious play about a student named Wasserkopf.
C. However, the situation changes when the Mathematics teacher asks him to calculate the total amount.
D. He further declares that he had learnt nothing at school in all the years.

- Ans  1. ADCB
 2. BCAD
 3. CBAD
 4. BADC

Question ID : 6549788960
Status : Answered
Chosen Option : 1

Q.9 Select the INCORRECTLY spelt word.

- Ans  1. healthiest
 2. angriest
 3. straightest
 4. disinterest

Question ID : 6549788967
Status : Answered
Chosen Option : 2

Q.10 Select the most appropriate synonym of the given word.





SAGA

- Ans  1. narrative
 2. abuse
 3. film
 4. sport

Question ID : 6549788972
Status : Answered
Chosen Option : 1

Q.11 Select the most appropriate meaning of the given idiom.

Get out of hand

- Ans  1. To get irritated
 2. To become difficult to control
 3. To be able to complete a task
 4. To be anxious

Question ID : 6549786743
Status : Answered
Chosen Option : 2

Q.12 Select the option which means the same as the group of words given.

A person who helps others in need

- Ans
- ☒ 1. donor
 - ☒ 2. patron
 - ☒ 3. samaritan
 - ☒ 4. contributor

Question ID : 6549786748
Status : Answered
Chosen Option : 4

Q.13 Select the most appropriate synonym of the given word.

WREAK

- Ans
- ☒ 1. fail
 - ☒ 2. cause
 - ☒ 3. forget
 - ☒ 4. neglect

Question ID : 6549786749
Status : Answered
Chosen Option : 2

Q.14 Select the correct passive form of the given sentence.

How many languages do you learn at school?

- Ans
- ☒ 1. How many languages will you learn at school?
 - ☒ 2. Languages are learnt by how many at school?
 - ☒ 3. How many languages are being learnt by you at school?
 - ☒ 4. How many languages have you being learnt by you learning at school?

Question ID : 6549788949
Status : Answered
Chosen Option : 3

Q.15 Select the option which means the same as the group of words given.





One who eats human flesh

- Ans
- ☒ 1. ethnic
 - ☒ 2. tribal
 - ☒ 3. humane
 - ☒ 4. cannibal

Question ID : 6549788969
Status : Answered
Chosen Option : 4

Q.16 Select the correct indirect form of the given sentence.

The chemist said to me, "I cannot take these medicines back as they are special medicines."

- Ans  1. The chemist told me that he cannot take these medicines back as they are special medicines.
-  2. The chemist told me that he could not take those medicines back as they were special medicines.
-  3. The chemist told me that I cannot take these medicines back as they are special medicines.
-  4. The chemist told me that he could not take these medicines back as they are special medicines.





Question ID : 6549786728

Status : Answered

Chosen Option : 2

Q.17 Select the most appropriate option to substitute the underlined segment in the given sentence. If there is no need to substitute it, select 'No substitution'.

I would have told you if I receive the medicines.

- Ans  1. No substitution
-  2. had received
-  3. would receive
-  4. am receiving

Question ID : 6549786740

Status : Answered

Chosen Option : 2

Q.18 Select the most appropriate ANTONYM of the given word.

SURREPTITIOUS

- Ans  1. lazy
-  2. open
-  3. secret
-  4. slow

Question ID : 6549788964

Status : Answered

Chosen Option : 2

Q.19 Select the most appropriate option to fill in the blank.

Delhi University's new institution called School of Public Health will offer a _____ of programs.

- Ans  1. scale
-  2. plethora
-  3. few
-  4. branch

Question ID : 6549788974

Status : Answered

Chosen Option : 1

Q.20 Select the option that will improve the underlined segment in the given sentence. In case no improvement is needed, select 'No improvement'

Despite living in the same neighbourhood, we only did not greet each other.

- Ans
- ☒ 1. still
 - ☐ 2. mainly
 - ☐ 3. even
 - ☐ 4. No improvement

Question ID : 6549788961

Status : Answered

Chosen Option : 1

Comprehension:

In the following passage some words have been deleted. Fill in the blanks with the help of the alternatives given. Select the most appropriate option for each blank.

Nehru was a great patriot. He said, "I have received so (1) _____ love and affection from the Indian people (2) _____ nothing that I can do can repay (3) _____ a small fraction of it, and indeed there (4) _____ be no repayment of the great affection my fellow countrymen have showered on (5) _____.

SubQuestion No : 21

Q.21 Select the most appropriate option for blank no. 1.

- Ans
- ☐ 1. many
 - ☐ 2. more
 - ☐ 3. little
 - ☒ 4. much

Question ID : 6549788954

Status : Answered

Chosen Option : 4

Comprehension:

In the following passage some words have been deleted. Fill in the blanks with the help of the alternatives given. Select the most appropriate option for each blank.

Nehru was a great patriot. He said, "I have received so (1) _____ love and affection from the Indian people (2) _____ nothing that I can do can repay (3) _____ a small fraction of it, and indeed there (4) _____ be no repayment of the great affection my fellow countrymen have showered on (5) _____.

SubQuestion No : 22

Q.22 Select the most appropriate option for blank no. 2.

- Ans
- ☐ 1. this
 - ☒ 2. that
 - ☐ 3. either
 - ☐ 4. these

Question ID : 6549788955

Status : Answered

Chosen Option : 3

Comprehension:

In the following passage some words have been deleted. Fill in the blanks with the help of the alternatives given. Select the most appropriate option for each blank.

Nehru was a great patriot. He said, "I have received so (1) _____ love and affection from the Indian people (2) _____ nothing that I can do can repay (3) _____ a small fraction of it, and indeed there (4) _____ be no repayment of the great affection my fellow countrymen have showered on (5) _____.

SubQuestion No : 23

Q.23 Select the most appropriate option for blank no. 3.

- Ans
- ☒ 1. either
 - ☒ 2. only
 - ☒ 3. even
 - ☒ 4. mainly

Question ID : **6549788956**

Status : **Answered**

Chosen Option : **3**

Comprehension:

In the following passage some words have been deleted. Fill in the blanks with the help of the alternatives given. Select the most appropriate option for each blank.

Nehru was a great patriot. He said, "I have received so (1) _____ love and affection from the Indian people (2) _____ nothing that I can do can repay (3) _____ a small fraction of it, and indeed there (4) _____ be no repayment of the great affection my fellow countrymen have showered on (5) _____.

SubQuestion No : 24

Q.24 Select the most appropriate option for blank no. 4.

- Ans
- ☒ 1. should
 - ☒ 2. ought
 - ☒ 3. can
 - ☒ 4. may

Question ID : **6549788957**

Status : **Answered**

Chosen Option : **1**

Comprehension:

In the following passage some words have been deleted. Fill in the blanks with the help of the alternatives given. Select the most appropriate option for each blank.

Nehru was a great patriot. He said, "I have received so (1) _____ love and affection from the Indian people (2) _____ nothing that I can do can repay (3) _____ a small fraction of it, and indeed there (4) _____ be no repayment of the great affection my fellow countrymen have showered on (5) _____.

SubQuestion No : 25

Q.25 Select the most appropriate option for blank no. 5.

- Ans
- ☒ 1. I
 - ☒ 2. mine
 - ☒ 3. me
 - ☒ 4. myself

Question ID : **6549788958**

Status : **Answered**

Chosen Option : **3**

Section : **General Intelligence**

Q.1 Select the option that is related to the third letter-cluster in the same way as the second letter-cluster is related to the first letter-cluster.

RUNZ : IGLC :: WZSE : ?

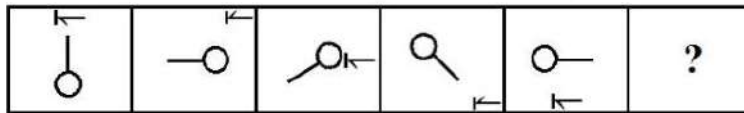
- Ans
- ☒ 1. CAFZ
 - ☒ 2. LJOG
 - ☒ 3. DBGX
 - ☒ 4. DFAJ

Question ID : **6549788985**

Status : **Marked For Review**

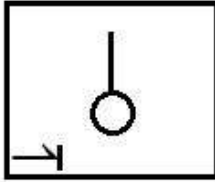
Chosen Option : **3**

Q.2 Select the figure from among the given options that can replace the question mark (?) in the following series.

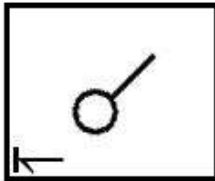


Ans

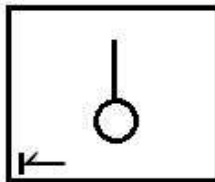
✗ 1.



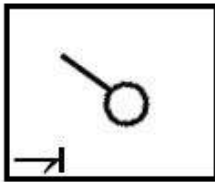
✗ 2.



✓ 3.



✗ 4.



Question ID : 6549786772

Status : Answered

Chosen Option : 3

Q.3 Select the correct option that indicates the arrangement of the given words in the order in which they appear in an English dictionary.

1. Presentation
2. Preventive
3. Preparation
4. Pretension
5. Prescription

Ans ✓ 1. 3, 5, 1, 4, 2

✗ 2. 3, 1, 5, 4, 2

✗ 3. 3, 5, 1, 2, 4

✗ 4. 3, 4, 2, 1, 5

Question ID : 6549786760

Status : Answered

Chosen Option : 1

Q.4 Select the option in which the numbers are related in the same way as are the numbers of the following set.

{12, 20, 32}

- Ans
- ☒ 1. {27, 49, 63}
 - ☒ 2. {6, 10, 16}
 - ☒ 3. {18, 30, 48}
 - ☒ 4. {21, 28, 56}

Question ID : 6549788978

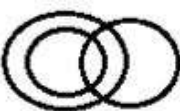
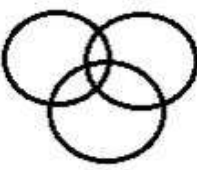
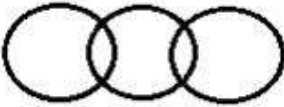
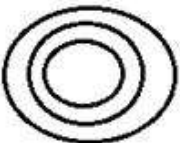
Status : Answered

Chosen Option : 3

Q.5 उस वेन आरेख का चयन करें, जो निम्न वर्गों के बीच के संबंध को सर्वोत्तम ढंग से निरूपित करता है।

पुरुष, चाचा, शिक्षित

Ans

- ☒ 1. 
- ☒ 2. 
- ☒ 3. 
- ☒ 4. 

Question ID : 6549786777

Status : Answered

Chosen Option : 2

Q.6 Study the given pattern carefully and select the number that can replace the question mark (?) in it.

16 35 9
18 33 8
34 ? 5

- Ans
- ☒ 1. 32
 - ☒ 2. 34
 - ☒ 3. 35
 - ☒ 4. 33

Question ID : 6549786757

Status : Not Answered

Chosen Option : --

Q.7 निम्नलिखित जानकारी को ध्यान से पढ़ें और नीचे दिए गए प्रश्न का उत्तर दें।

'K \$ D' का अर्थ है 'D का पिता K है'।

'K < D' का अर्थ है 'D की पत्नी K है'।

'K > D' का अर्थ है 'D की बेटी K है'।

'K @ D' का अर्थ है 'D का पुत्र K है'।

व्यंजक 'H > R \$ S @ T > N' में, H, N से किस प्रकार संबंधित है?

Ans  1. पोती (Grand-daughter)

 2. बेटी (Daughter)

 3. भांजी (Niece)

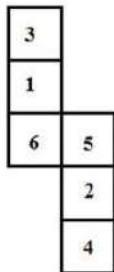
 4. बहू (Daughter-in law)

Question ID : 6549788180

Status : Answered

Chosen Option : 1

Q.8 A cube is made by folding the given sheet. In the cube so formed, what would be the number on the opposite side of '1'?



Ans  1. 4

 2. 2

 3. 6

 4. 5

Question ID : 6549786771

Status : Answered

Chosen Option : 2

Q.9 The average marks of eight students in the Mathematics exam are 75. If the highest and lowest marks are removed, then the average marks become 80. If the ratio of the highest marks to the lowest marks is 3 : 1, then the highest marks are what percentage of the sum of the all the marks obtained by the eight students in the Mathematics exam?

Ans  1. 15%

 2. 18%

 3. 20%

 4. 12%

Question ID : 6549786753

Status : Answered

Chosen Option : 1

Q.10 Select the number from among the given options that can replace the question mark (?) in the following series.

7, 10, 18, 29, ?, 78

- Ans
- ☒ 1. 54
 - ☒ 2. 45
 - ☒ 3. 48
 - ☒ 4. 51

Question ID : 6549788980

Status : Answered

Chosen Option : 3

Q.11 In a certain code language, BIRTH is coded as 25129719 and DEVIL is coded as 23851215. How will GLORY be coded in that language?

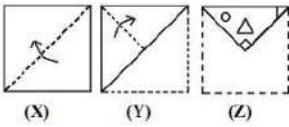
- Ans
- ☒ 1. 21082519
 - ☒ 2. 20151892
 - ☒ 3. 20181529
 - ☒ 4. 25110928

Question ID : 6549786762

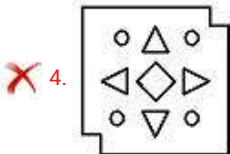
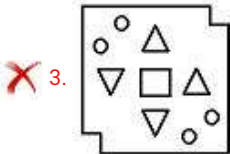
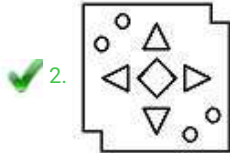
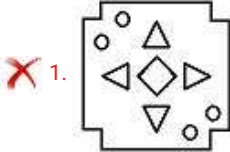
Status : Not Answered

Chosen Option : --

Q.12 The sequence of folding a piece of paper and the manner in which the folded paper has been cut is shown in the following figures. How would this paper look when unfolded?



Ans



Question ID : 6549788997

Status : Answered

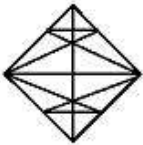
Chosen Option : 2

Q.13 Select the option in which the given figure is embedded (rotation is NOT allowed).

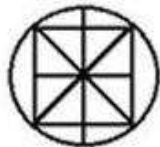


Ans

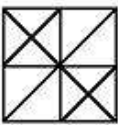
☒ 1.



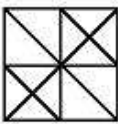
☒ 2.



☒ 3.



☒ 4.



Question ID : 6549788996

Status : Answered

Chosen Option : 3

Q.14 Four words have been given, out of which three are alike in some manner and one is different. Select the word that is different

Ans

☒ 1. Violet

☒ 2. Yellow

☒ 3. Orange

☒ 4. Black

Question ID : 6549788991

Status : Answered

Chosen Option : 4

Q.15 'Risk' is related to 'Hazard' in the same way as 'Absurd' is related to '_____'. .

Ans

☒ 1. Paranormal

☒ 2. Hypothetical

☒ 3. Immoral

☒ 4. Ridiculous

Question ID : 6549788986

Status : Answered

Chosen Option : 4

Q.16 Select the combination of letters that when sequentially placed in the blanks of the given series will complete the series.

c _ t e m c p _ e m _ p t _ _

- Ans
- ☒ 1. p t c e m
 - ☐ 2. p e c t m
 - ☐ 3. c t m e p
 - ☐ 4. m p e t c

Question ID : 6549789805

Status : Answered

Chosen Option : 1

Q.17 उस विकल्प का चयन करें, जिसमें शब्द एक दूसरे से उसी प्रकार संबंधित हैं, जिस प्रकार वे दिए गए शब्द युग्म में एक दूसरे से संबंधित हैं।

जाम्बिया : लुसाका

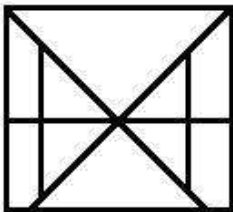
- Ans
- ☐ 1. कुवैत : सियोल
 - ☒ 2. बहरीन : मनामा
 - ☐ 3. इज़राइल : तेहरान
 - ☐ 4. भूटान : ढाका

Question ID : 6549786767

Status : Answered

Chosen Option : 1

Q.18 Find the number of triangles in the given figure.



- Ans
- ☐ 1. 14
 - ☐ 2. 10
 - ☐ 3. 8
 - ☒ 4. 12

Question ID : 6549786773

Status : Marked For Review

Chosen Option : 2

Q.19 Four numbers have been given, out of which three are alike in some manner and one is different. Select the number that is different.

- Ans
- ☐ 1. 146
 - ☐ 2. 198
 - ☐ 3. 326
 - ☒ 4. 378

Question ID : 6549786759

Status : Answered

Chosen Option : 4

Q.20 Read the given statements and conclusions carefully. Assuming that the information given in the statements is true, even if it appears to be at variance with commonly known facts, decide which of the given conclusions logically follow(s) from the statements.

Statements:

Some dogs are carnivores.
All carnivores are animals.
Some animals are tigers.

Conclusions:

- I. Some tigers are dogs.
- II. Some carnivores are tigers.
- III. All dogs are animals.

- Ans
- ☐ 1. Only conclusion II follows.
 - ☐ 2. Only conclusions I and III follow.
 - ☐ 3. Only conclusion I follows.
 - ☒ 4. None of the conclusions follow.

Question ID : 6549788992

Status : Answered

Chosen Option : 4

Q.21 Four letter-clusters have been given, out of which three are alike in some manner and one is different. Select the letter-cluster that is different.

- Ans
- ☐ 1. PTZW
 - ☐ 2. MQWT
 - ☐ 3. FJPM
 - ☒ 4. TXDB

Question ID : 6549786768

Status : Answered

Chosen Option : 4

Q.22 Which two signs should be interchanged to make the following equation correct?

$$6 + 12 \times 8 \div 16 - 12 = 8$$

- Ans
-  1. \times and \div
 -  2. \div and $+$
 -  3. $-$ and $+$
 -  4. $+$ and \times

Question ID : 6549788976

Status : Not Attempted and
Marked For Review

Chosen Option : --

Q.23 In a certain code language, RATIONALE is written as NOIELATAR. How will STATEMENT be written in that language?

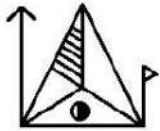
- Ans
-  1. METTNEATS
 -  2. ETATNEMTS
 -  3. METTAENST
 -  4. EMTTNETAS

Question ID : 6549788983

Status : Answered

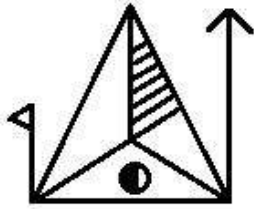
Chosen Option : 1

Q.24 Select the correct mirror image of the given figure when the mirror is placed at the right side of the figure.

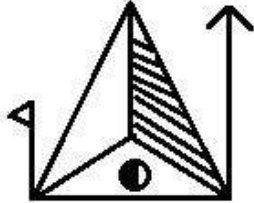


Ans

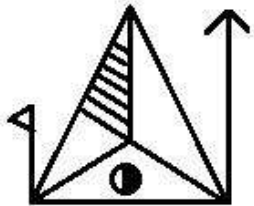
✓ 1.



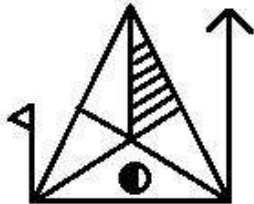
✗ 2.



✗ 3.



✗ 4.



Question ID : 6549788998

Status : Answered

Chosen Option : 1

Q.25 Select the option that is related to the third number in the same way as the second number is related to the first number.

8 : 36 :: 12 : ?

Ans

✗ 1. 80

✗ 2. 82

✓ 3. 78

✗ 4. 79

Question ID : 6549786755

Status : Not Answered

Chosen Option : --

Q.1 If the nine-digit number 259876p05 is completely divisible by 11, then what is the value of $(p^2 + 5)$?

- Ans
- ☒ 1. 48
 - ☒ 2. 45
 - ☒ 3. 54
 - ☒ 4. 50

Question ID : 6549786794

Status : Answered

Chosen Option : 3

Q.2 If $5 \tan A = 12$, then what is the value of $\frac{13 \sin A + 20 \tan A}{15 \tan A - 13 \cos A}$, where A is an acute angle?

- Ans
- ☒ 1. $\frac{31}{41}$
 - ☒ 2. $\frac{41}{50}$
 - ☒ 3. $1\frac{19}{41}$
 - ☒ 4. $1\frac{29}{31}$

Question ID : 6549786797

Status : Answered

Chosen Option : 4

Q.3 The side QR of a triangle PQR is extended to a point S. If $\angle PRS = 104^\circ$ and $\angle RQP = \frac{3}{5} \angle QPR$, then the value of $\angle QPR$ is:

- Ans
- ☒ 1. 65°
 - ☒ 2. 55°
 - ☒ 3. 45°
 - ☒ 4. 58°

Question ID : 6549786789

Status : Answered

Chosen Option : 1

Q.4 The value of $56 \div [12 + 9 \div 3 - \{8 + (18 \text{ of } 2 \div 9) - (40 \div 5 \text{ of } 2)\}] + \frac{27 + \frac{2}{9} \text{ of } 75}{5 + \frac{2}{8} \times (58 - 37)}$ is:

- Ans
- ☒ 1. 8
 - ☒ 2. 11
 - ☒ 3. -11
 - ☒ 4. -8

Question ID : 6549789017

Status : Answered

Chosen Option : 2

Q.5 O is the centre of a circle of radius 9 cm. M is a point outside the circle and MN is a tangent to the circle. What is the length (in cm) of OM if the length MN is 12 cm?

- Ans**
- ☒ 1. 17
 - ☒ 2. 12
 - ☒ 3. 15
 - ☒ 4. 21

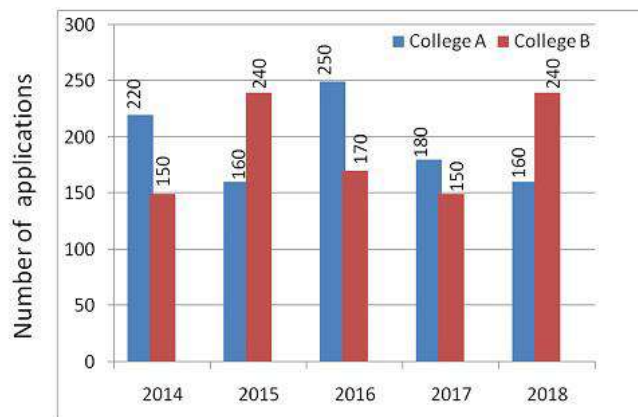
Question ID : 6549786787

Status : Answered

Chosen Option : 3

Q.6 Study the following bar graph and answer the question given below.

The bar graph represents the total number of applications received for B.Sc. Mathematics by two different colleges A and B in 5 different years.



In 2015, out of the total number of applications received by colleges A and B together, only 60% were accepted. What were the total number of applications accepted by colleges A and B together in 2015?

- Ans**
- ☒ 1. 250
 - ☒ 2. 260
 - ☒ 3. 240
 - ☒ 4. 180

Question ID : 6549789021

Status : Answered

Chosen Option : 3

Q.7 Study the given bar graphs and answer the question that follows.

The bar graphs represent the amount invested in raw materials (in ₹ crore) and the sale of the products, by a textile company in the years 2007– 2012. The X-axis represents the years. The Y-axis represents the amount invested in raw materials (in ₹ crore) in figure 1 and sale of products in figure 2, respectively.



Figure 1



Figure 2

In 2011, the sale of products had increased by certain percentage with respect to the previous year. In 2012, by what percent should the sale of products increase from its present value so that it shows the same percent increase as had been shown in 2011?

- Ans
- ☒ 1. 94
 - ☒ 2. 98
 - ☒ 3. 96
 - ☒ 4. 95

Question ID : 6549786802

Status : Not Answered

Chosen Option : --

Q.8 If $\sin^2 x = 3 \cos^2 x$ and $0^\circ \leq x \leq 90^\circ$, then what is the value of $\frac{x}{2}$?

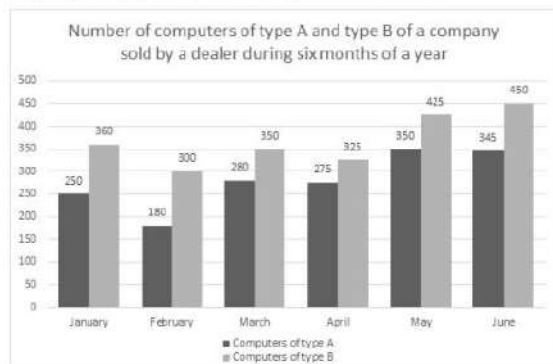
- Ans
- ☐ 1. 22.5°
 - ☐ 2. 45°
 - ☐ 3. 15°
 - ☒ 4. 30°

Question ID : 6549789020

Status : Answered

Chosen Option : 4

Q.9 Study the given graph and answer the question that follows.



The average number of computers of type B sold in January, February and June exceeds by 20 the number of computers of type A sold in:

- Ans
- ☐ 1. March
 - ☐ 2. April
 - ☐ 3. June
 - ☒ 4. May

Question ID : 6549786497

Status : Answered

Chosen Option : 4

Q.10 A man invested ₹2,400 at 5% and ₹5,400 at 9% simple interest. What amount (in ₹) will he get from his investments after 6 years?

- Ans
- ☐ 1. 45,600
 - ☐ 2. 31,200
 - ☐ 3. 83,136
 - ☒ 4. 11,436

Question ID : 6549786786

Status : Answered

Chosen Option : 4

Q.11 If $a = \frac{\sqrt{5}+2}{\sqrt{5}-2}$ and $b = \frac{\sqrt{5}-2}{\sqrt{5}+2}$, then the value of $2a^2 + 2b^2 - 5ab$ is equal to:

- Ans
- ☐ 1. 693
 - ☐ 2. 649
 - ☐ 3. 635
 - ☒ 4. 639

Question ID : 6549789015
Status : Answered
Chosen Option : 4

Q.12 The value of $a^3 + b^3 + c^3 - 3abc$, when $a=125$, $b=127$ and $c=129$, is:

- Ans
- ☐ 1. 4725
 - ☒ 2. 4572
 - ☐ 3. 4752
 - ☐ 4. 3752

Question ID : 6549789014
Status : Answered
Chosen Option : 2

Q.13 The marked price of a table is ₹3,000, which is 25% above the cost price. It is sold at a discount of 20% on the marked price. What is the profit or loss per cent?

- Ans
- ☐ 1. Loss, 5%
 - ☐ 2. Profit, 10%
 - ☐ 3. Profit, 15%
 - ☒ 4. No profit, no loss

Question ID : 6549789004
Status : Answered
Chosen Option : 4

Q.14 $\triangle ABC$ is drawn in a circle such that $AC = BC$ and $\angle BAC = 65^\circ$. From points B and C two tangents are drawn which intersect at point P. What is the measure of $\angle BPC$?

- Ans
- ☐ 1. 52.5°
 - ☒ 2. 50°
 - ☐ 3. 55°
 - ☐ 4. 32.5°

Question ID : 6549789010
Status : Answered
Chosen Option : 2

Q.15 If $\operatorname{cosec} A = 10$, then what is the value of $20 \sin A + 9\sqrt{11} \sec A$?

Given that A is an acute angle.

- Ans
- ☒ 1. 23
 - ☒ 2. 34
 - ☒ 3. 32
 - ☒ 4. 30

Question ID : 6549789018
Status : Answered
Chosen Option : 3

Q.16 The daily wages of P, Q and R are in the proportion 5 : 7 : 8. If Q earns ₹560 per day, then what are the daily wages (in ₹) of R and P, respectively?

- Ans
- ☒ 1. 400 and 640
 - ☒ 2. 350 and 590
 - ☒ 3. 640 and 400
 - ☒ 4. 590 and 350

Question ID : 6549786785
Status : Answered
Chosen Option : 1

Q.17 The area of an equilateral triangle is $10.24\sqrt{3} \text{ m}^2$. Its perimeter (in m) is:

- Ans
- ☒ 1. 3.2
 - ☒ 2. 9.6
 - ☒ 3. 6.4
 - ☒ 4. 19.2

Question ID : 6549789012
Status : Answered
Chosen Option : 4

Q.18 The square of the diagonal of a cube is 2175 cm^2 . What is the total surface area (in cm^2) of the cube?

- Ans
- ☒ 1. 4305
 - ☒ 2. 4272
 - ☒ 3. 4530
 - ☒ 4. 4350

Question ID : 6549789002
Status : Answered
Chosen Option : 4

Q.19 A shopkeeper bought 95 dozen oranges at ₹4.50 each. 7 dozen oranges were rotten and so were discarded. He sold the remaining oranges at ₹78 per dozen. What is his profit or loss per cent (to the nearest integer)?

- Ans**
- ☒ 1. Profit, 45%
 - ☒ 2. Profit, 34%
 - ☒ 3. Loss, 34%
 - ☒ 4. Loss, 45%

Question ID : 6549789006

Status : **Marked For Review**

Chosen Option : 1

Q.20 The average age of 7 members of a family is 35 years. If the youngest members are twins and they are 15 years old, then what was the average age (in years) of the family members at the time of the birth of the twins?

- Ans**
- ☒ 1. 28
 - ☒ 2. 27
 - ☒ 3. 30
 - ☒ 4. 25

Question ID : 6549786781

Status : **Answered**

Chosen Option : 1

Q.21 If $(7x - 10y) = 8$ and $xy = 5$, then what is the value of $49x^2 + 100y^2$?

- Ans**
- ☒ 1. 764
 - ☒ 2. 632
 - ☒ 3. 623
 - ☒ 4. 746

Question ID : 6549786791

Status : **Answered**

Chosen Option : 1

Q.22 A and B can complete a piece of work in 27 days and 54 days, respectively. They completed the work in 9 days with the help of C. How many days will C take to complete eight-ninths of the work alone?

- Ans**
- ☒ 1. 16
 - ☒ 2. 24
 - ☒ 3. 30
 - ☒ 4. 45

Question ID : 6549789000

Status : **Answered**

Chosen Option : 1

Q.23 A's salary is 15% less than B's salary. B's salary is 30% less than C's salary. By how much percent approximately, is C's salary more than A's salary?

- Ans ☒ 1. 68
☒ 2. 45
☒ 3. 75
☒ 4. 40

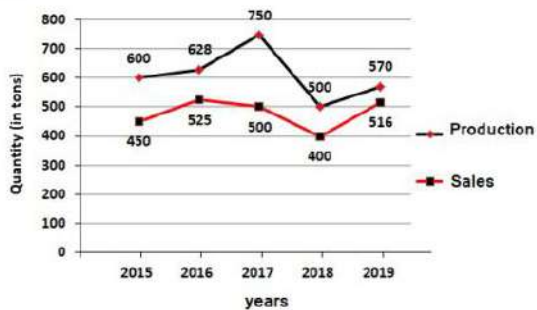
Question ID : 6549786783

Status : Answered

Chosen Option : 1

Q.24 The line graph shows the production (in tonnes) and the sales (in tonnes) of a company.

What is the ratio of the production of the company in 2015 and 2016 taken together to the sales in 2017 and 2019 taken together?



- Ans ☒ 1. 195 : 214
☒ 2. 307 : 330
☒ 3. 307 : 229
☒ 4. 307 : 254

Question ID : 6549789426

Status : Answered

Chosen Option : 4

Q.25 A train, 500 m long, passes a railway platform 400 m long, in one minute with uniform speed. What is the time (in seconds) taken by the train to pass a man riding a motorbike, travelling opposite to the direction of the train, at a speed of 18 km/h?

- Ans ☒ 1. 30
☒ 2. 48
☒ 3. 54
☒ 4. 25

Question ID : 6549786779

Status : Answered

Chosen Option : 4

Q.1 _____ contains and manages all the programs and applications that a computer or other device is able to run.

- Ans
- ☐ 1. Data Science
 - ☒ 2. Operating system
 - ☐ 3. Computer hardware
 - ☐ 4. Computer software

Question ID : 6549786803
Status : Answered
Chosen Option : 3

Q.2 'उगादी' निम्नलिखित में से किस राज्य का प्रसिद्ध त्योहार है?

- Ans
- ☐ 1. पंजाब
 - ☒ 2. आंध्र प्रदेश
 - ☐ 3. उत्तर प्रदेश
 - ☐ 4. गोवा

Question ID : 6549786805
Status : Answered
Chosen Option : 2

Q.3 As on 9 December 2020, how many states of India have implemented 'one nation one ration card system'?

- Ans
- ☐ 1. 12
 - ☒ 2. 9
 - ☐ 3. 5
 - ☐ 4. 7

Question ID : 6549789031
Status : Answered
Chosen Option : 4

Q.4 In which of the following countries is the headquarters of International Table Tennis Federation situated?

- Ans
- ☐ 1. Japan
 - ☐ 2. Thailand
 - ☐ 3. England
 - ☒ 4. Switzerland

Question ID : 6549786825
Status : Answered
Chosen Option : 2

Q.5 रेयान कपड़ा बनाने के लिए निम्न में से किस फाइबर का उपयोग किया जाता है?

- Ans
- ☐ 1. गम (Gum)
 - ☒ 2. सेलूलोज (Cellulose)
 - ☐ 3. पेक्टिन (Pectin)
 - ☐ 4. म्यूसिलेज (Mucilage)

Question ID : 6549789034
Status : Answered
Chosen Option : 3

Q.6 A _____ is a hydraulic structure of impervious material built across a river to create a reservoir on its upstream side for impounding water for various purposes.

- Ans
- ☐ 1. block
 - ☒ 2. dam
 - ☐ 3. fold
 - ☐ 4. drainage

Question ID : 6549786817
Status : Answered
Chosen Option : 2

Q.7 What was the contribution of the manufacturing sector in India's GDP in Q2 of 2020-21?

- Ans
- ☐ 1. Positive growth of 3.4%
 - ☒ 2. Positive growth of 0.6%
 - ☐ 3. Negative growth of 7.5%
 - ☐ 4. Negative growth of 8.6%

Question ID : 6549789033
Status : Answered
Chosen Option : 3

Q.8 निम्न में से महाकाव्य कहानी 'मनुचरित्र' के लेखक कौन है?

- Ans
- ☐ 1. बाणभट्ट
 - ☐ 2. पोद्ना
 - ☐ 3. चंदबरदाई
 - ☒ 4. अल्लासानी पेहना

Question ID : 6549789041
Status : Answered
Chosen Option : 2

Q.9 वर्ष 2020 में, _____ ग्रामीण परिवारों में 100% पाइप युक्त नल जल उपलब्ध कराने वाला पहला राज्य बन गया।

- Ans
- ☐ 1. मिजोरम
 - ☐ 2. केरल
 - ☐ 3. सिक्किम
 - ☒ 4. गोवा

Question ID : 6549789038

Status : Answered

Chosen Option : 2

Q.10 What is the keyboard shortcut to add a new row above a given row in Microsoft Excel?

- Ans
- ☒ 1. Alt + I + R
 - ☐ 2. Alt + C + I
 - ☐ 3. Shift + Spacebar
 - ☐ 4. Shift + I + R

Question ID : 6549789026

Status : Answered

Chosen Option : 4

Q.11 निम्नलिखित में से किसने 1990 में धोलावीरा में खुदाई शुरू की थी?

- Ans
- ☐ 1. एस.आर. राव
 - ☒ 2. आर.एस. बिष्ट
 - ☐ 3. आर.डी. बनर्जी
 - ☐ 4. एम.एस. वत्स

Question ID : 6549786820

Status : Answered

Chosen Option : 1

Q.12 The minimum paid up equity capital to set up a small finance bank should be of _____, as proposed by RBI as of May 2020.

- Ans
- ☐ 1. 100 crores
 - ☐ 2. 300 crores
 - ☒ 3. 200 crores
 - ☐ 4. 75 crores

Question ID : 6549786807

Status : Answered

Chosen Option : 2

Q.13 Who among the following was elected as the President of the All India Chess Federation in January 2021?

- Ans
- ☐ 1. Ajay Kumar
 - ☐ 2. Bhagat Singh Chauhan
 - ☐ 3. Sunil Arora
 - ☒ 4. Sanjay Kapoor

Question ID : 6549786827

Status : Answered

Chosen Option : 4

Q.14 Which of the following institutes bagged the UNESCO Asia-Pacific Award for cultural heritage conservation in December, 2020?

- Ans
- ☐ 1. IIT Roorkee
 - ☐ 2. IIT Delhi
 - ☒ 3. Amar Singh College Srinagar
 - ☐ 4. BBK DAV. College Amritsar

Question ID : 6549786808

Status : Answered

Chosen Option : 1

Q.15 _____, नियमों और सिद्धांतों का एक समुच्चय पेश करने में मदद करता है, जिस पर देश के सभी लोग उस तरीके के आधार के रूप में सहमत हो सकते हैं जिसमें वे चाहते हैं कि देश को शासित किया जाए।

- Ans
- ☒ 1. संविधान
 - ☐ 2. प्रस्तावना
 - ☐ 3. डाक्यूमेंट
 - ☐ 4. मसौदा

Question ID : 6549786823

Status : Answered

Chosen Option : 4

Q.16 Who among the following was conferred the title of 'Global Visionary of Sustainable Business and Peace' in 2020 by the Federation of Israel Chambers of Commerce for epitomising 'unity, peace and sustainability'?

- Ans
- ☐ 1. Lakshmi Mittal
 - ☐ 2. Mukesh Ambani
 - ☒ 3. Ratan Tata
 - ☐ 4. Azim Premji

Question ID : 6549786822

Status : Answered

Chosen Option : 3

Q.17 Sur Sarovar, also known as Keetham Lake, is a man-made reservoir. In which of the following years was it added in the list of Ramsar Sites?

- Ans
- ☐ 1. 1992
 - ☒ 2. 2020
 - ☐ 3. 2015
 - ☐ 4. 1998

Question ID : 6549786818
Status : Answered
Chosen Option : 2

Q.18 लोकनाट्य 'भांडपाथेर (Bhand Pather)' निम्न में से किस राज्य की नृत्य शैली है?

- Ans
- ☐ 1. गोवा
 - ☒ 2. कश्मीर
 - ☐ 3. हरियाणा
 - ☐ 4. सिक्किम

Question ID : 6549789028
Status : Answered
Chosen Option : 2

Q.19 CSIR as an autonomous body is the largest research and development organisation in India. What does CSIR stands for?

- Ans
- ☒ 1. Council of Scientific and Industrial Research
 - ☐ 2. Council of Space and Industrial Research
 - ☐ 3. Centre of Space and Industrial Research
 - ☐ 4. Chamber of States and Industrial Research

Question ID : 6549786813
Status : Answered
Chosen Option : 1

Q.20 Which doctor of Indian origin was honoured with 'Great Immigrants-2020' in the US?

- Ans
- ☐ 1. Ashok Rajgopal
 - ☐ 2. Mayur Lakhani
 - ☒ 3. Siddhartha Mukherjee
 - ☐ 4. Kiran C Patel

Question ID : 6549789043
Status : Answered
Chosen Option : 3

Q.21 भारत के किस राज्य में फसली भूमि (crop land) का सर्वाधिक प्रतिशत सिंचाई के अधीन है?

- Ans
- ☐ 1. तमिलनाडु
 - ☐ 2. गुजरात
 - ☒ 3. पंजाब
 - ☐ 4. कर्नाटक

Question ID : 6549789037

Status : Answered

Chosen Option : 3

Q.22 भारतीय संविधान के किस अनुच्छेद के अनुसार, कोई व्यक्ति संसद की किसी सीट को भरने के लिए चुने जाने के लिए तब तक अर्हित नहीं होगा, जब तक कि वह भारत का नागरिक न हो?

- Ans
- ☐ 1. अनुच्छेद 76
 - ☒ 2. अनुच्छेद 84
 - ☐ 3. अनुच्छेद 61
 - ☐ 4. अनुच्छेद 52

Question ID : 6549789046

Status : Answered

Chosen Option : 2

Q.23 Which of the following banks was declared as the 'Safest Bank in Asia' for the 12th consecutive year by New York-based trade publication 'Global Finance' in 2020?

- Ans
- ☒ 1. DBS
 - ☐ 2. ICBC
 - ☐ 3. ICICI
 - ☐ 4. HSBC

Question ID : 6549786810

Status : Answered

Chosen Option : 3

Q.24 To which group of organic molecules does 'Monosaccharides' belong?

- Ans
- ☐ 1. Lipids
 - ☐ 2. Nucleic acids
 - ☒ 3. Carbohydrates
 - ☐ 4. Proteins

Question ID : 6549789036

Status : Answered

Chosen Option : 3

Q.25 Who among the following won the 2002 International Shooting Sport Federation (ISSF) Champion of Champions combined-air-rifle event to become the first Indian to win that competition?

Ans



1. Anjali Bhagwat



2. Manu Bhaker



3. Rahi Sarnobat



4. Anisa Sayyed

Question ID : 6549789048

Status : Answered

Chosen Option : 1

Combined Higher Secondary Level Examination 2020 (Tier-I)

Roll Number	Join Telegram: HaryanaJobs.in
Candidate Name	
Venue Name	
Exam Date	12/08/2021
Exam Time	3:00 PM - 4:00 PM
Subject	Combined Higher Secondary Level Exam 2020

Section : English Language

Q.1 Select the most appropriate **ANTONYM** of the given word.

Traditional

- Ans
- ☒ 1. Earthly
 - ☒ 2. Customary
 - ☒ 3. Modern
 - ☒ 4. Conventional

Question ID : 6549787448

Status : Answered

Chosen Option : 3

Q.2 Select the option which means the same as the group of words given.

A hunting weapon which comes back, used by Australian Aborigines

- Ans
- ☒ 1. harpoon
 - ☒ 2. cutlass
 - ☒ 3. slingshot
 - ☒ 4. boomerang

Question ID : 6549788464

Status : Not Answered

Chosen Option : --

Q.3 The following sentence has been split into four segments. Identify the segment that contains a grammatical error.

It would be / more better if / she sang / with an orchestra.

- Ans
- ☒ 1. more better if
 - ☒ 2. she sang
 - ☒ 3. with an orchestra
 - ☒ 4. It would be

Question ID : 6549787436

Status : Answered

Chosen Option : 1

Q.4 Select the option that expresses the given sentence in reported speech.

"Our teacher returned from Mumbai last month", she said.

Ans

- ☒ 1. She said that her teacher had returned from Mumbai the earlier month.
- ☒ 2. Her teacher returned from Mumbai last month, she said.
- ☒ 3. She said that their teacher had returned from Mumbai the previous month.
- ☒ 4. She said that her teacher had returned from Mumbai the previous month.

Question ID : 6549787435

Status : Answered

Chosen Option : 4

Q.5 Select the correct passive form of the given sentence.

In the evening we water the plants.

Ans

- ☒ 1. The plants will be watered in the evening.
- ☒ 2. The plants are watered in the evening.
- ☒ 3. The plants have been watered in the evening.
- ☒ 4. The plants were watered in the evening.

Question ID : 6549788444

Status : Answered

Chosen Option : 2

Q.6 Select the option that can be used as a one-word substitute for the given group of words.

Causing a strong dislike

Ans

- ☒ 1. Redundant
- ☒ 2. Repulsive
- ☒ 3. Hateful
- ☒ 4. Revealing

Question ID : 6549787455

Status : Answered

Chosen Option : 2

Q.7 Select the most appropriate option to substitute the underlined segment in the given sentence. If there is no need to substitute it, select 'No substitution'.

Mr. Sharma is kind as his father.

Ans

- ☒ 1. as kind as
- ☒ 2. No substitution
- ☒ 3. the kindest as
- ☒ 4. kinder as

Question ID : 6549788456

Status : Answered

Chosen Option : 1

Q.8 Select the most appropriate meaning of the given idiom.

Not one's cup of tea

Ans



1. Not absolutely true



2. Not according to one's interest



3. Beyond one's comprehension



4. Of no concern for someone

Question ID : 6549788461

Status : Answered

Chosen Option : 3

Q.9 Given below are four jumbled sentences. Out of the given options, pick the one that gives their correct order.

A. The man who had caught me was a dreadful sight.

B. Suddenly I was picked up, whirled through the air, and made to sit on a tombstone.

C. He was about forty years old, hard-faced and fierce.

D. I was only a child, and small for my age.

Ans



1. CBAD



2. BACD



3. DBAC



4. DCBA

Question ID : 6549788455

Status : Answered

Chosen Option : 2

Q.10 Sentences of a paragraph are given below in jumbled order. Arrange the sentences in the right order to form a meaningful and coherent paragraph.

A. The whole area has been designed like a garden from Alice in Wonderland.

B. It's about having fun and learning, too; all the activities help to explain the modern world of technology to the young visitors.

C. But 'The World of Children' isn't just about playing games and having joy rides.

D. There are several different attractions in this vast area and there is a lot to see and do.

Ans



1. DACB



2. BCDA



3. CBDA



4. ADBC

Question ID : 6549787444

Status : Answered

Chosen Option : 4

Q.11 Select the INCORRECTLY spelt word.

- Ans
- ☒ 1. rogue
 - ☒ 2. rocket
 - ☒ 3. rockiry
 - ☒ 4. roaster

Question ID : 6549788462
Status : Answered
Chosen Option : 3

Q.12 Select the most appropriate option to fill in the blank.

Scientists all over the world are engaged in _____ how to find a vaccine for COVID-19.

- Ans
- ☒ 1. researching
 - ☒ 2. scrutinizing
 - ☒ 3. investigating
 - ☒ 4. inspecting

Question ID : 6549788469
Status : Answered
Chosen Option : 1

Q.13 Select the most appropriate synonym of the given word.

REPULSIVE

- Ans
- ☒ 1. respectable
 - ☒ 2. disgusting
 - ☒ 3. attractive
 - ☒ 4. agreeable

Question ID : 6549788467
Status : Answered
Chosen Option : 2

Q.14 Select the most appropriate option to substitute the underlined segment in the given sentence. If there is no need to substitute it, select 'No substitution required'.

He won't come to the party unless you will invite him personally.

- Ans
- ☒ 1. would invite
 - ☒ 2. invite
 - ☒ 3. No substitution required
 - ☒ 4. invited

Question ID : 6549787447
Status : Answered
Chosen Option : 2

Q.15 Select the most appropriate meaning of the idiomatic expression given.

To cross one's mind

- Ans
- ☒ 1. To forget something
 - ☒ 2. To put a thought away from one's mind
 - ☒ 3. To move from one idea to another
 - ☒ 4. To think of something

Question ID : 6549787450

Status : Answered

Chosen Option : 4

Q.16 Select the most appropriate word to fill in the blank.

The marking of answer papers is _____ out by the course teacher.

- Ans
- ☒ 1. done
 - ☒ 2. carried
 - ☒ 3. checked
 - ☒ 4. crossed

Question ID : 6549787458

Status : Answered

Chosen Option : 3

Q.17 Select the most appropriate ANTONYM of the given word.

BUOYANT

- Ans
- ☒ 1. enthusiastic
 - ☒ 2. lively
 - ☒ 3. weighted
 - ☒ 4. bouncy

Question ID : 6549788459

Status : Answered

Chosen Option : 3

Q.18 Select the INCORRECTLY spelt word.

- Ans
- ☒ 1. Terrible
 - ☒ 2. Uprooted
 - ☒ 3. Haunted
 - ☒ 4. Tendansy





Question ID : 6549787453

Status : Answered

Chosen Option : 4

Q.19 In the given sentence, identify the segment which contains the grammatical error.

Cyclone Amphan roared into West Bengal on Wednesday leave behind a trail of devastation across a large area of the State.

- Ans  1. leave behind
 2. a trail of devastation
 3. roared into West Bengal
 4. across a large area

Question ID : 6549788447
 Status : Answered
 Chosen Option : 1

Q.20 Select the most appropriate synonym of the given word.

Ban

- Ans  1. Ascertain
 2. Prohibit
 3. Abandon
 4. Band

Question ID : 6549787456
 Status : Answered
 Chosen Option : 2





Comprehension:

In the following passage some words have been deleted. Fill in the blanks with the help of the alternatives given. Select the most appropriate option for each blank.

Every Monday, on his way back from work, Bepin Chaudhury would drop in at KaliCharan's in New Market (1)_____ books. Crime stories, ghost stories, and thrillers. (2)_____ had to buy at least five at a time to last him (3)_____ the week. He lived alone, was not a good mixer, had few (4)_____, and didn't like spending time in idle chat. Today, at KaliCharan's, Bepin Babu had a (5)_____ that somebody was observing him from close quarters.

SubQuestion No : 21

Q.21 Select the most appropriate option for blank no. 1.

- Ans  1. buying
 2. bought
 3. to buy
 4. buy

Question ID : 6549788449
 Status : Answered
 Chosen Option : 3

Comprehension:

In the following passage some words have been deleted. Fill in the blanks with the help of the alternatives given. Select the most appropriate option for each blank.

Every Monday, on his way back from work, Bepin Chaudhury would drop in at KaliCharan's in New Market (1)_____ books. Crime stories, ghost stories, and thrillers. (2)_____ had to buy at least five at a time to last him (3)_____ the week. He lived alone, was not a good mixer, had few (4)_____, and didn't like spending time in idle chat. Today, at KaliCharan's, Bepin Babu had a (5)_____ that somebody was observing him from close quarters.


SubQuestion No : 22

Q.22 Select the most appropriate option for blank no. 2.

Ans  1. They

 2. He

 3. Him

 4. She

Question ID : 6549788450

Status : **Answered**

Chosen Option : 2

Comprehension:

In the following passage some words have been deleted. Fill in the blanks with the help of the alternatives given. Select the most appropriate option for each blank.


Every Monday, on his way back from work, Bepin Chaudhury would drop in at KaliCharan's in New Market (1)_____ books. Crime stories, ghost stories, and thrillers. (2)_____ had to buy at least five at a time to last him (3)_____ the week. He lived alone, was not a good mixer, had few (4)_____, and didn't like spending time in idle chat. Today, at KaliCharan's, Bepin Babu had a (5)_____ that somebody was observing him from close quarters.

SubQuestion No : 23

Q.23 Select the most appropriate option for blank no. 3.

Ans  1. within

 2. through

 3. across

 4. by

Question ID : 6549788451

Status : **Answered**

Chosen Option : 1

Comprehension:

In the following passage some words have been deleted. Fill in the blanks with the help of the alternatives given. Select the most appropriate option for each blank.

Every Monday, on his way back from work, Bepin Chaudhury would drop in at KaliCharan's in New Market (1)_____ books. Crime stories, ghost stories, and thrillers. (2)_____ had to buy at least five at a time to last him (3)_____ the week. He lived alone, was not a good mixer, had few (4)_____, and didn't like spending time in idle chat. Today, at KaliCharan's, Bepin Babu had a (5)_____ that somebody was observing him from close quarters.

SubQuestion No : 24

Q.24 Select the most appropriate option for blank no. 4.

Ans



1. friends



2. students



3. servants



4. followers

Question ID : 6549788452

Status : Answered

Chosen Option : 1

Comprehension:

In the following passage some words have been deleted. Fill in the blanks with the help of the alternatives given. Select the most appropriate option for each blank.

Every Monday, on his way back from work, Bepin Chaudhury would drop in at KaliCharan's in New Market (1)_____ books. Crime stories, ghost stories, and thrillers. (2)_____ had to buy at least five at a time to last him (3)_____ the week. He lived alone, was not a good mixer, had few (4)_____, and didn't like spending time in idle chat. Today, at KaliCharan's, Bepin Babu had a (5)_____ that somebody was observing him from close quarters.

SubQuestion No : 25

Q.25 Select the most appropriate option for blank no. 5.

Ans



1. intuition



2. connotation



3. feeling



4. perception


Question ID : 6549788453

Status : Answered

Chosen Option : 1

Section : General Intelligence

Q.1 Select the set of classes the relationship among which is best illustrated by the following Venn diagram.



- Ans
- ☒ 1. Owls, Mammals, Reptiles
 - ☒ 2. Stationery, Pens, Pencils
 - ☒ 3. Doctors, Fathers, Brothers
 - ☒ 4. Mothers, Engineers, Women

Question ID : 6549787484

Status : Answered

Chosen Option : 3

Q.2 Select the option in which the numbers are related in the same way as are the numbers of the following set.

(2, 3, 62)

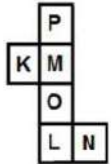
- Ans
- ☒ 1. (8, 5, 225)
 - ☒ 2. (7, 4, 226)
 - ☒ 3. (5, 9, 288)
 - ☒ 4. (6, 4, 122)

Question ID : 6549787464

Status : Not Answered

Chosen Option : --

Q.3 A cube is made by folding the given sheet. In the cube so formed, what would be the letter on the opposite side of 'K'?



- Ans
- ☒ 1. L
 - ☒ 2. P
 - ☒ 3. N
 - ☒ 4. O

Question ID : 6549787478

Status : Answered

Chosen Option : 3

Q.4 Select the option in which the numbers in the set share the same relationship as that shared by the numbers of the given set.

(14, 18, 42)

- Ans ☒ 1. (16, 21, 56)
☒ 2. (22, 18, 74)
☒ 3. (20, 15, 100)
☒ 4. (40, 23, 94)

Question ID : 6549788473

Status : Answered

Chosen Option : 1

Q.5 Select the correct combination of mathematical signs to sequentially replace the * signs to balance the following equation.

$40 * 15 * 3 * 72 * 9 = 77$

- Ans ☒ 1. $\times, \div, +, -, =$
☒ 2. $+, \div, -, \times, =$
☒ 3. $+, \times, -, \div, =$
☒ 4. $+, \times, \div, -, =$

Question ID : 6549788471

Status : Answered

Chosen Option : 3

Q.6 Three of the following four words are alike in a certain way and one is different. Select the odd one.

- Ans ☒ 1. Heart
☒ 2. Lungs
☒ 3. Nose
☒ 4. Liver

Question ID : 6549788486

Status : Answered

Chosen Option : 3

Q.7 Select the correct option that indicates the arrangement of the given words in the order in which they appear in an English dictionary.

1. Industry
2. Indent
3. Indoor
4. Indolent
5. Index

- Ans ☒ 1. 2, 1, 3, 5, 4
☒ 2. 2, 5, 4, 3, 1
☒ 3. 2, 4, 5, 3, 1
☒ 4. 1, 2, 3, 5, 4

Question ID : 6549787467

Status : Answered

Chosen Option : 2

Q.8 Select the combination of letters that when sequentially placed in the blanks of the given series will complete the series.

c k _ g k c _ t _ k _ k t g _ c k _ g k

Ans ☒ 1. t, k, g, c, k, t

☐ 2. t, k, g, c, c, t

☐ 3. t, g, k, c, k, t

☐ 4. t, k, c, g, k, t

Question ID : 6549786664

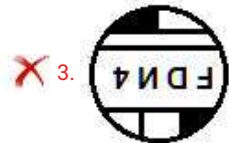
Status : Answered

Chosen Option : 1

Q.9 Select the correct mirror image of the given figure when a mirror is placed on the right side of the figure.



Ans



Question ID : 6549788493

Status : Answered

Chosen Option : 4

Q.10 Select the option that is related to the fourth number in the same way as the first number is related to the second number and the fifth number is related to the sixth number.

127 : 11 :: ? : 16 :: 367 : 19

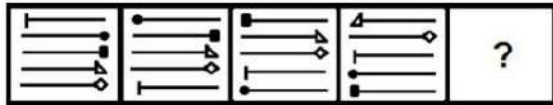
- Ans
- ☒ 1. 280
 - ☒ 2. 216
 - ☒ 3. 262
 - ☒ 4. 248

Question ID : 6549787462

Status : Answered

Chosen Option : 3

Q.11 Select the figure from among the given options that can replace the question mark (?) in the following series.



Ans

- ☒ 1.
- ☒ 2.
- ☒ 3.
- ☒ 4.

Question ID : 6549787479

Status : Answered

Chosen Option : 1

Q.12 Select the number that can replace the question mark (?) in the following series.

25, 26, 53, 160, 641, ?

- Ans
- ☒ 1. 3403
 - ☒ 2. 3202
 - ☒ 3. 2908
 - ☒ 4. 3206

Question ID : 6549788475

Status : Answered

Chosen Option : 4

Q.13 Four letter-clusters have been given, out of which three are alike in some manner and one is different. Select the letter-cluster that is different.

- Ans
- ☒ 1. HNTZ
 - ☒ 2. AGMS
 - ☒ 3. IPVA
 - ☒ 4. VBHN

Question ID : 6549787475

Status : Answered

Chosen Option : 3

Q.14 Select the option that is related to the third letter-cluster in the same way as the second letter-cluster is related to the first letter-cluster.

AZW : GFC :: LSM : ?


- Ans
- ☒ 1. RXY
 - ☒ 2. QOS
 - ☒ 3. RYS
 - ☒ 4. DMT

Question ID : 6549788480

Status : Answered

Chosen Option : 3

Q.15 How many triangles are there in the given figure?



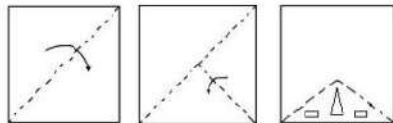
- Ans
- ☒ 1. 15
 - ☒ 2. 17
 - ☒ 3. 16
 - ☒ 4. 14

Question ID : 6549787480

Status : Answered

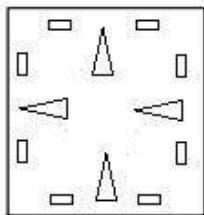
Chosen Option : 1

Q.16 A piece of paper is folded and cut as shown below in the question figures. Select from the option figures, how it will appear when unfolded.

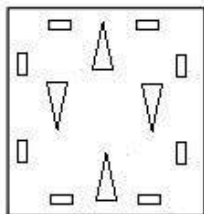


Ans

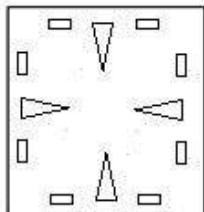
☒ 1.



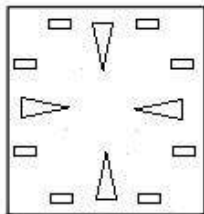
☒ 2.



☒ 3.



☒ 4.



Question ID : 6549788492

Status : Answered

Chosen Option : 3

Q.17 In a certain code language, 'FROZEN' is coded as '504' and 'TONSILS' is coded as '756'. How will 'MARINE' be coded in that language?

Ans ☒ 1. 360

☒ 2. 652

☒ 3. 520

☒ 4. 456

Question ID : 6549787469

Status : Answered

Chosen Option : 1

Q.18 In a code language, TOUCH is written as UTOHC. How will PLANT be written in that language?

- Ans
- ☐ 1. QMBOU
 - ☐ 2. TPANM
 - ☐ 3. ALRPT
 - ☒ 4. TPNLA

Question ID : 6549788478

Status : Answered

Chosen Option : 4

Q.19 Two statements are given, followed by three conclusions numbered I, II and III. Assuming the statements to be true, even if they seem to be at variance with commonly known facts, decide which of the conclusions logically follow(s) from the statements.

Statements:

No field is a house.

All fields are parks.

Conclusions:

I. No house is a field.

II. Some parks are fields.

III. Some houses are fields.

- Ans
- ☐ 1. Only conclusion II follows
 - ☐ 2. All the conclusions follow
 - ☐ 3. Only conclusions II and III follow
 - ☒ 4. Only conclusions I and II follow

Question ID : 6549788487

Status : Answered

Chosen Option : 4

Q.20 Four number-pairs have been given, out of which three are alike in some manner and one is different. Select the number-pair that is different.

- Ans
- ☐ 1. 7 : 63
 - ☐ 2. 5 : 35
 - ☐ 3. 13 : 195
 - ☒ 4. 19 : 324

Question ID : 6549787466

Status : Answered

Chosen Option : 4

Q.21 In a class of 68 students, 34 students participated only in Debate and 8 students participated in both Quiz and Debate. If every student of the class has participated in at least one of these two competitions, how many students participated in Quiz?

- Ans
- ☒ 1. 26
 - ☐ 2. 34
 - ☐ 3. 30
 - ☐ 4. 22

Question ID : 6549787460
Status : Answered
Chosen Option : 2

Q.22 If 'A & B' means 'A is the father of B' and 'A @ B' means 'A is the sister of B', then which of the following expressions means 'H is the father of M'?

- Ans
- ☐ 1. K & H @ P @ M
 - ☐ 2. M & K @ P @ H
 - ☒ 3. H & K @ P @ M
 - ☐ 4. H @ K @ P & M

Question ID : 6549787675
Status : Not Answered
Chosen Option : --

Q.23 Select the option in which the words share the same relationship as that shared by the given pair of words.

Astronomy : Stars

- Ans
- ☐ 1. Seismology : Theatre
 - ☐ 2. Psychology : Cells
 - ☒ 3. Numismatics : Coins
 - ☐ 4. Philology : Texture

Question ID : 6549787474
Status : Answered
Chosen Option : 3

Q.24 'East' is related to 'Direction' in the same way as 'Summer' is related to '_____'. .

- Ans
- ☒ 1. Season
 - ☐ 2. Room Cooler
 - ☐ 3. Heat
 - ☐ 4. Temperature

Question ID : 6549788481
Status : Answered
Chosen Option : 1

Q.25 Select the option figure which contains figure X embedded in it as its part (rotation is NOT allowed).

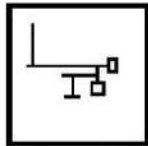
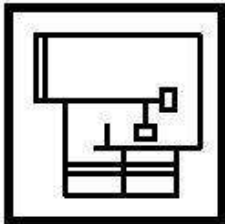


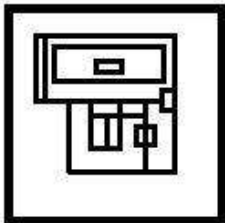
Figure X

Ans

✗ 1.



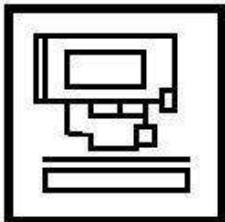
✓ 2.



✗ 3.



✗ 4.



Question ID : 6549788491

Status : Not Answered

Chosen Option : --

Q.1 24% of Reena's salary is equal to 38% of Sunita's salary. Veena's salary is two-third of the total salary of Reena and Sunita. If Veena's salary is ₹62,000, then Sunita's salary is:

Ans

-  1. ₹35,000
-  2. ₹32,000
-  3. ₹38,000
-  4. ₹36,000

Question ID : **6549787490**

Status : **Answered**

Chosen Option : **4**

Q.2 Study the given bar graphs and answer the question that follows.

The bar graphs represent the amount invested in raw materials (in ₹ crore) and the sale of the products, by a textile company in the years 2007– 2012. The X-axis represents the years. The Y-axis represents the amount invested in raw materials (in ₹ crore) in figure 1 and sale of products in figure 2, respectively.



Figure 1

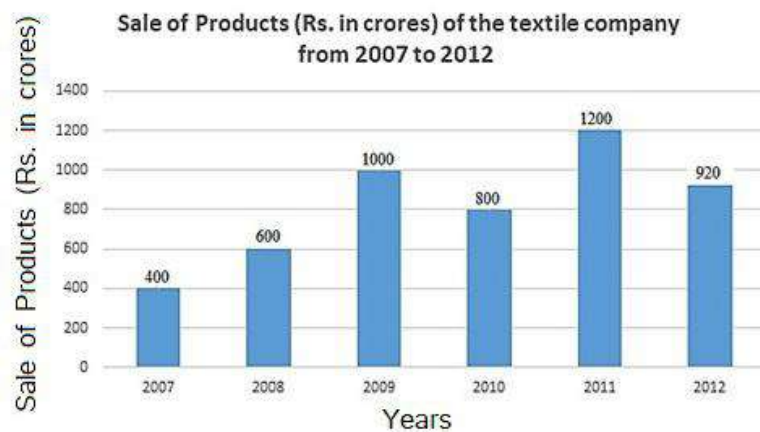


Figure 2

In which year was there a maximum percentage increase in the sales of products as compared to the previous year?

- Ans
- ☒ 1. 2008
 - ☒ 2. 2010
 - ☒ 3. 2009
 - ☒ 4. 2011

Question ID : 6549786801
Status : Answered
Chosen Option : 3

Q.3 A man invests an amount of ₹1,05,750 at simple interest in the name of his son, daughter and his wife in such a way that they get the same interest after 3, 4 and 5 years, respectively. If the rate of interest is 5% per annum, then the amount invested for the wife is:

- Ans**
- ☒ 1. ₹27,000
 - ☐ 2. ₹28,000
 - ☐ 3. ₹25,000
 - ☐ 4. ₹30,000

Question ID : 6549787493

Status : **Not Answered**

Chosen Option : --

Q.4 If a triangle ABC is right-angled at A, then what is the value of $\sin \frac{B+C}{2} \cos \frac{B+C}{2}$?

- Ans**
- ☐ 1. $\frac{\sqrt{3}}{4}$
 - ☐ 2. $\sqrt{2}$
 - ☐ 3. $\frac{1}{4}$
 - ☒ 4. $\frac{1}{2}$

Question ID : 6549788513

Status : **Answered**

Chosen Option : 4

Q.5 The sum of all the three sides of an equilateral triangle is $15\sqrt{3} \text{ cm}$. The height of the triangle is:

- Ans**
- ☐ 1. 7 cm
 - ☐ 2. 8 cm
 - ☒ 3. 7.5 cm
 - ☐ 4. 9 cm

Question ID : 6549787496

Status : **Answered**

Chosen Option : 3

Q.6 Anu can complete a piece of work in 22 days. Shama is 60% more efficient than Anu. How many days does Shama alone take to complete the same piece of work?

Ans

- ☒ 1. $36\frac{2}{3}$
- ☒ 2. $35\frac{1}{3}$
- ☒ 3. $13\frac{1}{5}$
- ☒ 4. $13\frac{3}{4}$

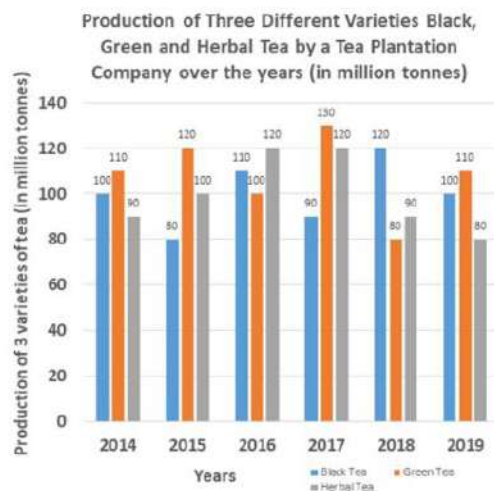
Question ID : 6549788495

Status : Answered

Chosen Option : 4

Q.7 Study the given bar graph and answer the question that follows.

A tea plantation company produces three varieties of tea—black tea, green tea and herbal tea. The production of three varieties (in million tonnes) over a period of six years from 2014 to 2019, has been shown in the bar graph here. The X-axis represents the years and the Y-axis displays the production of the three varieties in million tonnes.



The average production of black tea in 2014, 2015 and 2018 is how much more or less (in million tonnes) than the average production of green tea in 2016, 2017 and 2019?

Ans

- ☒ 1. More, 12.33
- ☒ 2. Less, 12.33
- ☒ 3. Less, 13.33
- ☒ 4. More, 13.33

Question ID : 6549789124

Status : Answered

Chosen Option : 2

Q.8 Two numbers A and B are in the ratio 13 : 17. If A is increased by 15% and B is increased by 30%, then the new ratio of A to B will be:





- Ans  1. 21 : 29
 2. 21 : 31
 3. 23 : 34
 4. 23 : 33

Question ID : 6549787492

Status : Answered

Chosen Option : 3

Q.9 In $\triangle ABC$, $AC = BC$, and the length of the base AB is 10 cm. If $CG = 8$ cm, where G is the centroid, then what is the length of AC?

- Ans  1. 13 cm
 2. 15 cm
 3. $\sqrt{91}$ cm
 4. 12 cm

Question ID : 6549788507

Status : Not Answered

Chosen Option : --

Q.10 A, B, C and D are four positive numbers such that A is $\frac{3}{4}$ times of B, B is $\frac{4}{5}$ times of C, and C is $\frac{3}{8}$ times of D. If the average of 4 times of A and 7 times of D is 316, then the average of all the four numbers A, B, C and D is:



- Ans  1. 36
 2. 38
 3. 28
 4. 34

Question ID : 6549787488

Status : Answered

Chosen Option : 2

Q.11 A car takes 50 minutes to cover a certain distance at a speed of 54 km/h. If the speed is increased by 25%, then how long will it take to cover three-fourth of the same distance?

- Ans  1. 35 minutes
 2. 40 minutes
 3. 30 minutes
 4. 25 minutes

Question ID : 6549787486

Status : Answered

Chosen Option : 3

Q.12

The given pie charts represent the distribution of candidates who enrolled for a bank clerical examination and the candidates (out of those enrolled) who passed the examination, from five different institutes P, Q, R, S and T. Study the pie charts and answer the question that follows.

(i) Total number of candidates who enrolled for the examination from five institutes = 5500

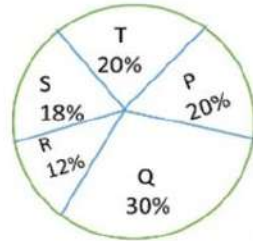


Fig. (i)

(ii) Total number of candidates who passed the examination from five institutes = 3300

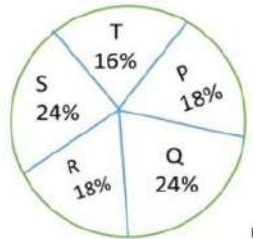


Fig. (ii)

Which institute(s) has/have the highest percentage of candidates passed to the candidates enrolled?

Ans

- ☒ 1. P
- ☒ 2. S
- ☒ 3. Q and T
- ☒ 4. R

Question ID : 6549787509

Status : Not Answered

Chosen Option : --

Q.13

A rectangle with perimeter 50 cm has its sides in the ratio 1 : 4. What is the perimeter of a square whose area is the same as that of the rectangle?

Ans

- ☒ 1. 36 cm
- ☒ 2. 50 cm
- ☒ 3. 40 cm
- ☒ 4. 45 cm

Question ID : 6549788497

Status : Answered

Chosen Option : 3

Q.14 If $x^2 + \frac{1}{x^2} = 83$, $x > 0$, then the value of $x^3 - \frac{1}{x^3}$ is:

- Ans ☒ 1. 756
☒ 2. 675
☒ 3. 576
☒ 4. 746

Question ID : 6549787498

Status : Answered

Chosen Option : 1

Q.15 Two equal circles of radius 8 cm intersect each other such that each passes through the centre of the other. The length of the common chord is:

- Ans ☒ 1. 8 cm
☒ 2. $4\sqrt{3}$ cm
☒ 3. $8\sqrt{3}$ cm
☒ 4. $8\sqrt{2}$ cm

Question ID : 6549787494

Status : Answered

Chosen Option : 3

Q.16 If $\tan A + \sec A = \frac{3}{2}$ and A is an acute angle, then the value of $\frac{10 \cot A + 13 \cos A}{12 \tan A + 5 \operatorname{cosec} A}$ is:

- Ans ☒ 1. 5
☒ 2. 1
☒ 3. 4
☒ 4. 2

Question ID : 6549787504

Status : Answered

Chosen Option : 4

Q.17 Two circles with centres O and P and radii 17 cm and 10 cm, respectively, intersect each other at A and B. The length of the common chord AB is 16 cm. What is the perimeter of the triangle OAP (in cm)?

- Ans ☒ 1. 33
☒ 2. 25
☒ 3. 48
☒ 4. 40

Question ID : 6549788505

Status : Answered

Chosen Option : 3

Q.18 If $x + \frac{1}{x} = \sqrt{13}$, then one of the values of $x^3 - \frac{1}{x^3}$ is :

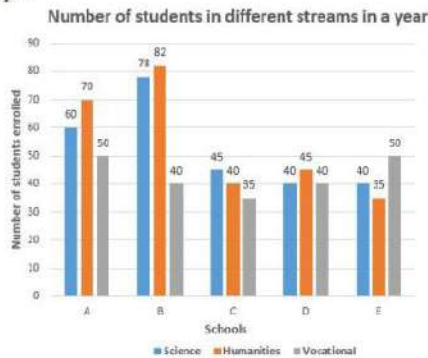
- Ans
- ☒ 1. $4\sqrt{11}$
 - ☒ 2. 32
 - ☒ 3. $4\sqrt{13}$
 - ☒ 4. 36

Question ID : 6549788510

Status : Not Answered

Chosen Option : --

Q.19 The number of students enrolled in different streams at Senior Secondary level in five schools is shown in the given bar graph.



What is the total number of students enrolled in the Science stream in all the schools?

- Ans
- ☒ 1. 267
 - ☒ 2. 268
 - ☒ 3. 263
 - ☒ 4. 257

Question ID : 6549788516

Status : Answered

Chosen Option : 3

Q.20 If the nine-digit number '8475639AB' is divisible by 99, then what is the value of A and B?

- Ans
- ☒ 1. A = 4, B = 6
 - ☒ 2. A = 5, B = 3
 - ☒ 3. A = 3, B = 9
 - ☒ 4. A = 4, B = 8

Question ID : 6549787501

Status : Answered

Chosen Option : 4

Q.21 If $\sec\theta - \operatorname{cosec}\theta = 0$ and θ is an acute angle, then what is the value of $\sec^2\theta + \operatorname{cosec}^2\theta$?

- Ans ☒ 1. 4
☒ 2. 1
☒ 3. 2
☒ 4. 0

Question ID : 6549788515

Status : Answered

Chosen Option : 1

Q.22 What will be the selling price of an article if two successive discounts of 15% and 12% are offered on its marked price of ₹25,500?

- Ans ☒ 1. ₹19,074
☒ 2. ₹25,041
☒ 3. ₹21,165
☒ 4. ₹18,615

Question ID : 6549788499

Status : Answered

Chosen Option : 1

Q.23 A shopkeeper sold an article for ₹3,750. If he had charged 24% less, even then he would have earned a profit of 14%. What is the original cost of the article?

- Ans ☒ 1. ₹2,850
☒ 2. ₹2,717
☒ 3. ₹3,289
☒ 4. ₹2,500

Question ID : 6549788501

Status : Answered

Chosen Option : 4

Q.24 If $x^2 + (4 - \sqrt{3})x - 1 = 0$, then what is the value of $x^2 + \frac{1}{x^2}$?

- Ans ☒ 1. $9 - 8\sqrt{3}$
☒ 2. $21 - 12\sqrt{3}$
☒ 3. $21 - 8\sqrt{3}$
☒ 4. $17 - 8\sqrt{3}$

Question ID : 6549788509

Status : Answered

Chosen Option : 3

Q.25 Simplify the following expression.

$$5\frac{1}{3} \div \left[7 - 3 \div \left(1 - \frac{1}{4} \right) \times \frac{2}{3} + 1 \right] - 3 \div 1 + 2$$

Ans

☐ 1. $\frac{7}{41}$

☒ 2. 0

☐ 3. 15

☐ 4. -4

Question ID : 6549788512

Status : Answered

Chosen Option : 2

Section : General Awareness

Q.1 National Rifle Association of India was founded in:

Ans

☐ 1. 1956

☐ 2. 1964

☒ 3. 1951

☐ 4. 1948

Question ID : 6549787532

Status : Answered

Chosen Option : 1

Q.2 Which of the following factors is NOT responsible for soil formation?

Ans

☐ 1. Topography

☒ 2. Cattle grazing

☐ 3. Parent material

☐ 4. Biotic agents

Question ID : 6549787524

Status : Answered

Chosen Option : 2

Q.3 Who among the following was NOT included in the ICC Hall of Fame in August 2020?

Ans

☒ 1. Graeme Smith

☐ 2. Jacques Kallis

☐ 3. Zaheer Abbas

☐ 4. Lisa Sthalekar

Question ID : 6549787534

Status : Answered

Chosen Option : 4

Q.4 Which of the following Articles of the Constitution of India is related to the oath or affirmation by the President?

- Ans
- ☒ 1. Article 57
 - ☒ 2. Article 60
 - ☒ 3. Article 66
 - ☒ 4. Article 54

Question ID : 6549787530

Status : Answered

Chosen Option : 4

Q.5 Rickets and night-blindness are caused by the deficiency of _____ and _____, respectively.

- Ans
- ☒ 1. Vitamin D, Vitamin A
 - ☒ 2. Vitamin D, Vitamin C
 - ☒ 3. Vitamin B1, Vitamin C
 - ☒ 4. Vitamin E, Vitamin A

Question ID : 6549787520

Status : Answered

Chosen Option : 1

Q.6 Who among the following foreign travellers is NOT correctly matched with their respective country they hail from?

- Ans
- ☒ 1. Marco Polo – Italy
 - ☒ 2. Peter Mundy – China
 - ☒ 3. Ibn Battuta – Morocco
 - ☒ 4. Al-Biruni – Uzbekistan

Question ID : 6549787527

Status : Answered

Chosen Option : 2

Q.7 With which of the following states is the 'Mand' or 'Maand' style of singing associated?

- Ans
- ☒ 1. Rajasthan
 - ☒ 2. Gujarat
 - ☒ 3. Madhya Pradesh
 - ☒ 4. Uttar Pradesh

Question ID : 6549787512

Status : Answered

Chosen Option : 1

Q.8 With which country did India hold its 14th Defence Policy Dialogue via video conferencing in August 2020?

- Ans
- ☐ 1. The US
 - ☐ 2. Japan
 - ☒ 3. Singapore
 - ☐ 4. China

Question ID : **6549787515**
Status : **Answered**
Chosen Option : **2**

Q.9 Which of the following statements is NOT correct about alluvial soil?

- Ans
- ☐ 1. Deltas of Mahanadi, the Godavari and the Krishna are made from alluvial soil.
 - ☐ 2. Old alluvial is called 'bangar' and new alluvial is called 'khadar'.
 - ☒ 3. In the Himalayan region we find alluvial soil.
 - ☐ 4. Northern plains are made of alluvial soil.

Question ID : **6549787525**
Status : **Answered**
Chosen Option : **1**

Q.10 As of January 2021, GMR Group was associated with which of the following franchises in the Indian Premier League (IPL) cricket tournament?

- Ans
- ☒ 1. Delhi Capitals
 - ☐ 2. Mumbai Indians
 - ☐ 3. Chennai Super Kings
 - ☐ 4. Rajasthan Royals

Question ID : **6549788543**
Status : **Not Answered**
Chosen Option : **--**

Q.11 According to the fundamental rights provided by the Constitution of India, the state is bound to provide free and compulsory education to all children from the age of:

- Ans
- ☐ 1. 4 to 15 years
 - ☒ 2. 6 to 14 years
 - ☐ 3. 4 to 18 years
 - ☐ 4. 3 to 18 years

Question ID : **6549788541**
Status : **Answered**
Chosen Option : **2**

Q.12 Swollen bluish veins resulting from the valves that do not close properly are called _____.

- Ans
- ☐ 1. systemic veins
 - ☒ 2. varicose veins
 - ☐ 3. deep veins
 - ☐ 4. superficial veins

Question ID : 6549788531
Status : Answered
Chosen Option : 2

Q.13 Dogri language is mainly spoken in which of the following states/union territories?

- Ans
- ☐ 1. Uttarakhand
 - ☒ 2. Jammu and Kashmir
 - ☐ 3. Lakshadweep
 - ☐ 4. Assam

Question ID : 6549788523
Status : Answered
Chosen Option : 2

Q.14 Which of the following states was popularly known as the 'Land of Gods'? It got a separate identity as a state on 9 November 2000.

- Ans
- ☐ 1. Telangana
 - ☐ 2. Goa
 - ☐ 3. Karnataka
 - ☒ 4. Uttarakhand

Question ID : 6549788533
Status : Answered
Chosen Option : 4

Q.15 'Pradhan Mantri Awas Yojana (Urban)-PMAY (U)'s mission is to achieve the goal of Housing for All in urban areas by:

- Ans
- ☐ 1. 2020
 - ☐ 2. 2023
 - ☒ 3. 2022
 - ☐ 4. 2021

Question ID : 6549788526
Status : Answered
Chosen Option : 2

Q.16 Which of the following is NOT an example of an optical disk?

- Ans
- ☒ 1. Blue Ray Disk
 - ☐ 2. PROM
 - ☒ 3. CD ROM
 - ☒ 4. DVD

Question ID : 6549787510
Status : Answered
Chosen Option : 2

Q.17 A device or program that enables a computer to transmit data over telephone or cable lines is called:

- Ans
- ☒ 1. motherboard
 - ☐ 2. modem
 - ☒ 3. monitor
 - ☒ 4. mouse

Question ID : 6549788521
Status : Answered
Chosen Option : 2

Q.18 Where was the Patrika Gate inaugurated by Prime Minister Narendra Modi in September 2020?

- Ans
- ☒ 1. Jaipur
 - ☒ 2. Ranchi
 - ☒ 3. Raipur
 - ☒ 4. Bhopal

Question ID : 6549787514
Status : Answered
Chosen Option : 4

Q.19 Who among the following was honoured with the long-overdue record title for 'fastest human computation' by Guinness World Records on 30 July 2020?

- Ans
- ☒ 1. Shakuntala Devi
 - ☒ 2. Vashishtha Narayan Singh
 - ☒ 3. Vijay Kumar Patodi
 - ☒ 4. Shreeram Shankar Abhyankar

Question ID : 6549788538
Status : Answered
Chosen Option : 4

Q.20 The mutual funds industry in India is regulated by which of the following organisations?

- Ans
- ☒ 1. IRDA and IFCI
 - ☒ 2. SEBI and RBI
 - ☒ 3. NITI Aayog and IIFCL
 - ☒ 4. Ministry of Commerce and SIDBI

Question ID : **6549788528**
Status : **Answered**
Chosen Option : **2**

Q.21 Who among the following was responsible for the partition of Bengal in 1905?

- Ans
- ☒ 1. Lord Mayo
 - ☒ 2. Lord Canning
 - ☒ 3. Lord Ripon
 - ☒ 4. Lord Curzon

Question ID : **6549788536**
Status : **Answered**
Chosen Option : **4**

Q.22 Where is the Sariska Tiger Reserve located?

- Ans
- ☒ 1. Rajasthan
 - ☒ 2. Haryana
 - ☒ 3. Gujarat
 - ☒ 4. Karnataka

Question ID : **6549788532**
Status : **Answered**
Chosen Option : **1**

Q.23 In September 2020, who was appointed as Executive Director of Asian Development Bank, Manila?

- Ans
- ☒ 1. Warotai Kosolpisitkul
 - ☒ 2. Jason Chung
 - ☒ 3. Sameer Khare
 - ☒ 4. Rajesh Khullar

Question ID : **6549787529**
Status : **Answered**
Chosen Option : **4**

Q.24 Which of the following gases is released in the process of photosynthesis?

Ans



1. Nitrous dioxide



2. Carbon dioxide



3. Oxygen



4. Nitrogen

Question ID : **6549788529**

Status : **Answered**

Chosen Option : **3**

Q.25 The total liability of the monetary authority of the country, Reserve Bank of India, is called:

Ans



1. Hot money



2. Grey money



3. Cold cash



4. High powered money

Question ID : **6549787517**

Status : **Answered**

Chosen Option : **1**

